

## Multi Tasking Non Technical Staff and Havaladar CBIC and CBN Examination 2022

Roll Number	
Candidate Name	
Venue Name	iON Dizital Zone Faridabad
Exam Date	10/05/2023
Exam Time	3:30 PM - 5:00 PM
Subject	MTS Non Tech Havaladar CBIC and CBN Examination 2022

### Section : Numerical and Mathematical Ability

**Q.1** A, B and C are assigned to complete a work. If the ratio of time taken by A, B and C is 4:3:6. Find the ratio of their efficiency.

- Ans** ☒ 1. 3:4:2  
☒ 2. 4:3:6  
☒ 3. 3:4:6  
☒ 4. 4:6:8

Question Type : **MCQ**

Question ID : **264330138383**

Option 1 ID : **264330542140**

Option 2 ID : **264330542139**

Option 3 ID : **264330542141**

Option 4 ID : **264330542142**

Status : **Answered**

Chosen Option : **1**

**Q.2** If 20 percent of  $(x + y) = 30$  percent of  $(x - y)$ , then x is what percentage of y?

- Ans** ☒ 1. 0.5 percent  
☒ 2. 5 percent  
☒ 3. 500 percent  
☒ 4. 50 percent

Question Type : **MCQ**

Question ID : **264330137158**

Option 1 ID : **264330537278**

Option 2 ID : **264330537277**

Option 3 ID : **264330537275**

Option 4 ID : **264330537276**

Status : **Answered**

Chosen Option : **3**

# Test Prime

**ALL EXAMS,  
ONE SUBSCRIPTION**



**70,000+**  
Mock Tests



**Personalised  
Report Card**



**Unlimited  
Re-Attempt**



**600+**  
Exam Covered



**Previous Year  
Papers**



**500%  
Refund**



**ATTEMPT FREE MOCK NOW**

**Q.3** The average of 5 numbers is 48. The average of the two numbers is 40 while the average of the other two is 58. Find the value of the remaining number.

- Ans** ☒ 1. 44  
☒ 2. 34  
☒ 3. 40  
☒ 4. 30

Question Type : **MCQ**

Question ID : **264330138371**

Option 1 ID : **264330542094**

Option 2 ID : **264330542092**

Option 3 ID : **264330542093**

Option 4 ID : **264330542091**

Status : **Answered**

Chosen Option : **1**

**Q.4** Find the area of the triangle whose height is 56 cm and the corresponding base is  $\frac{1}{4}$ th of the height.

- Ans** ☒ 1.  $544 \text{ cm}^2$   
☒ 2.  $440 \text{ cm}^2$   
☒ 3.  $392 \text{ cm}^2$   
☒ 4.  $480 \text{ cm}^2$

Question Type : **MCQ**

Question ID : **264330138387**

Option 1 ID : **264330542156**

Option 2 ID : **264330542157**

Option 3 ID : **264330542155**

Option 4 ID : **264330542158**

Status : **Answered**

Chosen Option : **3**

**Q.5** The ratio of sand to stone in a mixture is 5:8 while that between stone and cement is 32:35. What is the ratio of sand to cement in the mixture?

- Ans** ☒ 1. 4:3  
☒ 2. 1:7  
☒ 3. 2:3  
☒ 4. 4:7

Question Type : **MCQ**

Question ID : **264330138378**

Option 1 ID : **264330542120**

Option 2 ID : **264330542122**

Option 3 ID : **264330542121**

Option 4 ID : **264330542119**

Status : **Answered**

Chosen Option : **4**

Q.6 Find the third proportion to 14 and 56.

- Ans
- ☒ 1. 220
  - ☒ 2. 218
  - ☒ 3. 212
  - ☒ 4. 224

Question Type : MCQ

Question ID : 264330138379

Option 1 ID : 264330542124

Option 2 ID : 264330542125

Option 3 ID : 264330542126

Option 4 ID : 264330542123

Status : Answered

Chosen Option : 4

Q.7 The table given below shows the number of male and female in different states.

States	Male	Female
A	50	100
B	200	150
C	300	25
D	25	50
E	125	75
F	150	250

$J_1$  = The value of average number of males in A and B.

$J_2$  = The value of average number of females in E and F.

What is the value of  $(J_2 - J_1)$ ?

- Ans
- ☒ 1. 56.5
  - ☒ 2. 25.5
  - ☒ 3. 42.5
  - ☒ 4. 37.5

Question Type : MCQ

Question ID : 264330137621

Option 1 ID : 264330539093

Option 2 ID : 264330539091

Option 3 ID : 264330539092

Option 4 ID : 264330539094

Status : Answered

Chosen Option : 4

**Q.8** A vendor bought 12 oranges for Rs. 50 and sold them at 12 for Rs. 30. Find the loss percentage.

- Ans
- ☒ 1. 30%
  - ☒ 2. 25%
  - ☒ 3. 40%
  - ☒ 4. 45%

Question Type : **MCQ**

Question ID : **264330138376**

Option 1 ID : **264330542111**

Option 2 ID : **264330542112**

Option 3 ID : **264330542113**

Option 4 ID : **264330542114**

Status : **Answered**

Chosen Option : **3**

**Q.9**

What is the value of  $\frac{\left(\frac{28}{9} \times \frac{42}{35}\right) \div \left(\frac{3}{25} \times \frac{5}{7} \div \frac{1}{21}\right)}{\left(\frac{14}{15} \div \frac{2}{75} \text{ of } \frac{7}{5}\right) \times \frac{1}{75} \div \frac{4}{3}}?$

- Ans
- ☒ 1. 222/27
  - ☒ 2. 212/27
  - ☒ 3. 244/27
  - ☒ 4. 224/27

Question Type : **MCQ**

Question ID : **264330137620**

Option 1 ID : **264330539087**

Option 2 ID : **264330539090**

Option 3 ID : **264330539088**

Option 4 ID : **264330539089**

Status : **Answered**

Chosen Option : **2**

**Q.10** A shopkeeper allows a discount of 20% on the marked price and still gains 12% on the whole. Find at what percent above the cost price did he mark his goods?

- Ans
- ☒ 1. 30%
  - ☒ 2. 10%
  - ☒ 3. 40%
  - ☒ 4. 20%

Question Type : **MCQ**

Question ID : **264330140998**

Option 1 ID : **264330552341**

Option 2 ID : **264330552340**

Option 3 ID : **264330552342**

Option 4 ID : **264330552339**

Status : **Answered**

Chosen Option : **3**

**Q.11** A car covers the first 140 km of a journey in 10 hours and the next 260 km in 15 hours. What is the average speed of the Car for the whole journey?

- Ans**
- ✓ 1. 16 km/hr
  - ✗ 2. 14 km/hr
  - ✗ 3. 10 km/hr
  - ✗ 4. 15 km/hr

Question Type : **MCQ**

Question ID : **264330138395**

Option 1 ID : **264330542189**

Option 2 ID : **264330542188**

Option 3 ID : **264330542190**

Option 4 ID : **264330542187**

Status : **Answered**

Chosen Option : **1**

**Q.12** What is the value of  $15 \div 5$  of  $3 - 3 \times 4 + 13$ ?

- Ans**
- ✗ 1. 3
  - ✓ 2. 2
  - ✗ 3. 10
  - ✗ 4. 0

Question Type : **MCQ**

Question ID : **264330137148**

Option 1 ID : **264330537238**

Option 2 ID : **264330537237**

Option 3 ID : **264330537236**

Option 4 ID : **264330537235**

Status : **Answered**

Chosen Option : **2**

**Q.13** A shopkeeper sold a book at a marked price of Rs. 1400 at a discount of 28%. Find the selling price of the book.

- Ans**
- ✗ 1. Rs. 2000
  - ✓ 2. Rs. 1008
  - ✗ 3. Rs. 2500
  - ✗ 4. Rs. 1500

Question Type : **MCQ**

Question ID : **264330138377**

Option 1 ID : **264330542118**

Option 2 ID : **264330542115**

Option 3 ID : **264330542116**

Option 4 ID : **264330542117**

Status : **Answered**

Chosen Option : **2**

**Q.14** In how many least number of complete years will a sum of money become more than four times of itself at the rate of 14 percent per annum on simple interest?

- Ans
- ☒ 1. 20 years
  - ☒ 2. 25 years
  - ☒ 3. 29 years
  - ☒ 4. 22 years

Question Type : MCQ

Question ID : 264330137333

Option 1 ID : 264330537960

Option 2 ID : 264330537961

Option 3 ID : 264330537962

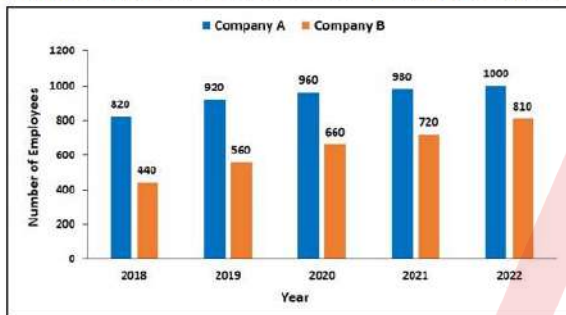
Option 4 ID : 264330537959

Status : Answered

Chosen Option : 4

**Q.15** The following bar graph shows the number of employees in company A and company B in 5 years.

Find the total number of employees in company A and company B in 2018 and 2019.



- Ans
- ☒ 1. 2860
  - ☒ 2. 2740
  - ☒ 3. 2820
  - ☒ 4. 3210

Question Type : MCQ

Question ID : 264330138386

Option 1 ID : 264330542151

Option 2 ID : 264330542153

Option 3 ID : 264330542154

Option 4 ID : 264330542152

Status : Answered

Chosen Option : 2

**Q.16** Ramesh is 60 percent less efficient than Rahul. If Rahul can make a computer in 12 days, then Ramesh can make the same computer in how many days?

- Ans** ☒ 1. 30 days  
☒ 2. 40 days  
☒ 3. 50 days  
☒ 4. 60 days

Question Type : **MCQ**  
 Question ID : **264330135043**  
 Option 1 ID : **264330529110**  
 Option 2 ID : **264330529109**  
 Option 3 ID : **264330529108**  
 Option 4 ID : **264330529107**  
 Status : **Answered**  
 Chosen Option : 1

**Q.17** Find the value of  $5(12 + 20 \div 10 \times 3 - 5)$ .

- Ans** ☒ 1. 50  
☒ 2. 35  
☒ 3. 65  
☒ 4. 40

Question Type : **MCQ**  
 Question ID : **264330138368**  
 Option 1 ID : **264330542079**  
 Option 2 ID : **264330542080**  
 Option 3 ID : **264330542081**  
 Option 4 ID : **264330542082**  
 Status : **Answered**  
 Chosen Option : 3

**Q.18** Two stations A and B are 230 km apart on a straight line. One train starts from A at 4 a.m. and travels towards B at 40 km/hr. Another train starts from B at 5 a.m. and travels towards A at a speed of 55 km/hr. At what time will they meet?

- Ans** ☒ 1. 10 a.m.  
☒ 2. 7 a.m.  
☒ 3. 6 a.m.  
☒ 4. 8 a.m.

Question Type : **MCQ**  
 Question ID : **264330138382**  
 Option 1 ID : **264330542136**  
 Option 2 ID : **264330542135**  
 Option 3 ID : **264330542137**  
 Option 4 ID : **264330542138**  
 Status : **Answered**  
 Chosen Option : 2

**Q.19** A sum of Rs. 500 becomes Rs. 580 at simple interest in 2 years. In how many years will the sum of Rs. 650 amounts to Rs. 858 at the same rate of simple interest?

- Ans**
- ✓ 1. 4 years
  - ✗ 2. 8 years
  - ✗ 3. 5 years
  - ✗ 4. 6 years

Question Type : **MCQ**

Question ID : **264330137163**

Option 1 ID : **264330537295**

Option 2 ID : **264330537297**

Option 3 ID : **264330537296**

Option 4 ID : **264330537298**

Status : **Answered**

Chosen Option : 1

**Q.20** There is a rectangular garden of 150 metres × 25 metres. A path of width 10 metres is built around the garden. What is the area of the path?

- Ans**
- ✗ 1. 3700 metre<sup>2</sup>
  - ✗ 2. 3550 metre<sup>2</sup>
  - ✓ 3. 3900 metre<sup>2</sup>
  - ✗ 4. 3220 metre<sup>2</sup>

Question Type : **MCQ**

Question ID : **264330135058**

Option 1 ID : **264330529168**

Option 2 ID : **264330529169**

Option 3 ID : **264330529167**

Option 4 ID : **264330529170**

Status : **Answered**

Chosen Option : 2

Section : Reasoning Ability and Problem Solving

**Q.1** In a certain code language, 'She is my niece' is coded as 'Co Pv Zs Mn', 'That is my bike' is coded as 'Zs Pt Pv Ga', 'She is your daughter' is coded as 'Co Pv Ex Yz'. What is the code for 'niece' in this code language?

- Ans**
- ✗ 1. Pv
  - ✓ 2. Mn
  - ✗ 3. Zs
  - ✗ 4. Co

Question Type : **MCQ**

Question ID : **264330133566**

Option 1 ID : **264330523289**

Option 2 ID : **264330523290**

Option 3 ID : **264330523287**

Option 4 ID : **264330523288**

Status : **Answered**

Chosen Option : 3

Q.2 Select the option figure in which the given figure is embedded. (rotation is NOT allowed)



Ans

✓ 1.



✗ 2.



✗ 3.



✗ 4.



Question Type : MCQ

Question ID : 264330137534

Option 1 ID : 264330538743

Option 2 ID : 264330538744

Option 3 ID : 264330538745

Option 4 ID : 264330538746

Status : Answered

Chosen Option : 1

Q.3 In a certain code language, 'EXPORT' is coded as 'ORTEXP'. What is the code for 'GENTLE' in that code language?

Ans ✗ 1. TLENEG

✗ 2. TELNEG

✓ 3. TLEGEN

✗ 4. TLENGE

Question Type : MCQ

Question ID : 264330138460

Option 1 ID : 264330542448

Option 2 ID : 264330542447

Option 3 ID : 264330542449

Option 4 ID : 264330542450

Status : Answered


Chosen Option : 3

**Q.4** Seven boys Laxman, Mohan, Bittu, Sohil, Rahul, Ram and Ramesh are sitting around a circular table facing towards the centre (not necessarily in the same order). Sohil is third to the left of Bittu. Mohan is second to the right of Bittu. Ram is third to the right of Ramesh. Ramesh is not the immediate neighbour of Mohan. Laxman is third to the left of Rahul. Who is to the immediate left of Ram?

- Ans**
- ✓ 1. Bittu
  - ✗ 2. Ramesh
  - ✗ 3. Mohan
  - ✗ 4. Laxman

Question Type : **MCQ**  
 Question ID : **264330138484**  
 Option 1 ID : **264330542543**  
 Option 2 ID : **264330542546**  
 Option 3 ID : **264330542544**  
 Option 4 ID : **264330542545**  
 Status : **Answered**  
 Chosen Option : 1

**Q.5** Which answer figure will complete the pattern in the question figure?



- Ans**
- ✓ 1.
  - ✗ 2.
  - ✗ 3.
  - ✗ 4.

Question Type : **MCQ**  
 Question ID : **264330138497**  
 Option 1 ID : **264330542595**  
 Option 2 ID : **264330542596**  
 Option 3 ID : **264330542598**  
 Option 4 ID : **264330542597**  
 Status : **Answered**  
 Chosen Option : 1

Q.6 In the following question, select the missing number of the given series.

111, 128, 145, 162, 179, ?

- Ans
- ☒ 1. 194
  - ☒ 2. 195
  - ☒ 3. 196
  - ☒ 4. 190

Question Type : MCQ

Question ID : 264330137121

Option 1 ID : 264330537128

Option 2 ID : 264330537129

Option 3 ID : 264330537130

Option 4 ID : 264330537127

Status : Answered

Chosen Option : 3

Q.7 By Interchanging which two signs the equation will be correct?

$6 - 10 \times 8 \div 5 + 7 = 15$

- Ans
- ☒ 1. + and -
  - ☒ 2. ÷ and -
  - ☒ 3. + and ÷
  - ☒ 4. × and ÷

Question Type : MCQ

Question ID : 264330138493

Option 1 ID : 264330542579

Option 2 ID : 264330542582

Option 3 ID : 264330542581

Option 4 ID : 264330542580

Status : Answered

Chosen Option : 1

**Q.8** In the following question below are given some statements followed by some conclusions based on those statements. Taking the given statements to be true even if they seem to be at variance from commonly known facts. Read all the conclusions and then decide which of the given conclusion logically follows the given statements.

Statements:

I. All K are M.

II. Some K are Z.

Conclusion:

I. All M are Z.

II. All M are K.

III. Some M are K.

- Ans**
- ☒ 1. All conclusion follows
  - ☒ 2. Neither conclusion follows
  - ☒ 3. Only conclusion III follows
  - ☒ 4. Both conclusions I and III follows

Question Type : MCQ

Question ID : 264330138488

Option 1 ID : 264330542560

Option 2 ID : 264330542562

Option 3 ID : 264330542561

Option 4 ID : 264330542559

Status : Answered

Chosen Option : 3

**Q.9** Select the option that is related to the fifth number in the same way as the second number is related to the first number and fourth number is related to third number.

9 : 730 :: 10 : 1001 :: 8 : ?

- Ans**
- ☒ 1. 517
  - ☒ 2. 513
  - ☒ 3. 514
  - ☒ 4. 516

Question Type : MCQ

Question ID : 264330137123

Option 1 ID : 264330537138

Option 2 ID : 264330537135

Option 3 ID : 264330537136

Option 4 ID : 264330537137

Status : Answered

Chosen Option : 2

**Q.10** Average of five batsmen Rohit, Rahul, Virat, Surya and Hardik is compared. Average of Surya is more than only one batsman. Average of Virat is more than Rohit and average of Rohit is more than Hardik. If Average of Rohit = 120, then what can be the average of Surya?

- Ans**
- ☒ 1. 130
  - ☒ 2. 125
  - ☒ 3. 118
  - ☒ 4. 128

Question Type : MCQ

Question ID : 264330138486

Option 1 ID : 264330542554

Option 2 ID : 264330542552

Option 3 ID : 264330542551

Option 4 ID : 264330542553

Status : Answered

Chosen Option : 3

**Q.11** In the following question below are given some statements followed by some conclusions based on those statements. Taking the given statements to be true even if they seem to be at variance from commonly known facts. Read all the conclusions and then decide which of the given conclusion logically follows the given statements.

Statements:

- I. Some V are P.  
II. Some F are V.

Conclusion:

- I. Some F are P.  
II. Some V are F.

- Ans** ☒ 1. Both conclusions I and II follows  
☒ 2. Only conclusion I follows  
☒ 3. Only conclusion II follows  
☒ 4. Neither conclusion follows

Question Type : MCQ

Question ID : 264330138487

Option 1 ID : 264330542557

Option 2 ID : 264330542555

Option 3 ID : 264330542556

Option 4 ID : 264330542558

Status : Answered

Chosen Option : 3

**Q.12** Seven girls Mansi, Shweta, Monika, Payal, Aarti, Kajal and Laxmi are sitting around a circular table facing opposite to the centre (not necessarily in the same order). Aarti is second to the left of Kajal. Monika is third to the right of Kajal. Mansi is not the immediate neighbour of Kajal. Laxmi is second to the left of Mansi. Payal is not the immediate neighbour of Laxmi. Who is second to the left of Laxmi?

- Ans** ☒ 1. Mansi  
☒ 2. Kajal  
☒ 3. Payal  
☒ 4. Aarti

Question Type : MCQ

Question ID : 264330138485

Option 1 ID : 264330542550

Option 2 ID : 264330542548

Option 3 ID : 264330542549

Option 4 ID : 264330542547

Status : Answered

Chosen Option : 1

**Q.13** Words given on the left side of (::) are related with each other by some Logic/Rule/Relation. Select the missing word/word pair on the right side of (::) from the given alternatives based on the same Logic/Rule/Relation.

Time : Seconds :: ?

- Ans**
- ☒ 1. Pressure : Litre
  - ☒ 2. Newton : Force
  - ☒ 3. Joule : Work
  - ☒ 4. Power : Watt

Question Type : MCQ  
Question ID : 264330138480  
Option 1 ID : 264330542527  
Option 2 ID : 264330542528  
Option 3 ID : 264330542529  
Option 4 ID : 264330542530  
Status : Answered  
Chosen Option : 4

**Q.14** In the following question, select the missing number of the given series.

2, 5, 14, 41, 122, ?

- Ans**
- ☒ 1. 370
  - ☒ 2. 365
  - ☒ 3. 380
  - ☒ 4. 368

Question Type : MCQ  
Question ID : 264330138490  
Option 1 ID : 264330542568  
Option 2 ID : 264330542567  
Option 3 ID : 264330542570  
Option 4 ID : 264330542569  
Status : Answered  
Chosen Option : 2

**Q.15** In a certain code language, 'JPMNO' is coded as '73562', 'AMNBD' is coded as '28954', 'JNACQ' is coded as '12430'. What is the code for 'B' in that code language?

- Ans**
- ☒ 1. 5
  - ☒ 2. 8
  - ☒ 3. 2
  - ☒ 4. 4

Question Type : MCQ  
Question ID : 264330135566  
Option 1 ID : 264330531165  
Option 2 ID : 264330531164  
Option 3 ID : 264330531163  
Option 4 ID : 264330531166  
Status : Answered  
Chosen Option : 2

**Q.16** If a mirror is placed on the line AB, then out of the option figures which figure will be the right image of the question figure?



Ans

- ✗ 1.
- ✗ 2.
- ✗ 3.
- ✓ 4.

Question Type : MCQ

Question ID : 264330137535

Option 1 ID : 264330538748

Option 2 ID : 264330538750

Option 3 ID : 264330538749

Option 4 ID : 264330538747

Status : Answered

Chosen Option : 4

**Q.17** Words given on the left side of (::) are related with each other by some Logic/Rule/Relation. Select the missing word/word pair on the right side of (::) from the given alternatives based on the same Logic/Rule/Relation.

Tadpole : Frog :: Kitten : ?

- Ans ✗ 1. Deer
- ✗ 2. Insect
- ✓ 3. Cat
- ✗ 4. Dog

Question Type : MCQ

Question ID : 264330138479

Option 1 ID : 264330542525

Option 2 ID : 264330542523

Option 3 ID : 264330542524

Option 4 ID : 264330542526

Status : Answered

Chosen Option : 3

**Q.18** Select the option in which the numbers shares the same relationship in set as that shared by the numbers in the given set.  
(NOTE: Operations should be performed on the whole numbers, without breaking down the numbers into its constituent digits. E.g. 13 – Operations on 13 such as adding /subtracting /multiplying etc. to 13 can be performed. Breaking down 13 into 1 and 3 and then performing mathematical operations on 1 and 3 is not allowed)  
(10, 20, 100)  
(50, 5, 125)

- Ans**
- ☒ 1. (20, 5, 60)
  - ☒ 2. (40, 4, 150)
  - ☒ 3. (14, 10, 35)
  - ☒ 4. (12, 10, 60)

Question Type : **MCQ**  
Question ID : **264330138492**  
Option 1 ID : **264330542577**  
Option 2 ID : **264330542578**  
Option 3 ID : **264330542576**  
Option 4 ID : **264330542575**  
Status : **Answered**  
Chosen Option : **4**

**Q.19** A series is given with one term missing. Select the correct alternative from the given ones that will complete the series.  
ASBQ, XOYM, UKVI, RGSE, ?

- Ans**
- ☒ 1. OCPA
  - ☒ 2. NCPA
  - ☒ 3. OCPB
  - ☒ 4. OBQA

Question Type : **MCQ**  
Question ID : **264330138477**  
Option 1 ID : **264330542515**  
Option 2 ID : **264330542518**  
Option 3 ID : **264330542517**  
Option 4 ID : **264330542516**  
Status : **Answered**  
Chosen Option : **1**

**Q.20** After interchanging the given two numbers what will be the values of equation (I) and (II) respectively?  
8 and 2

I.  $3 + 6 - 8 \times 4 + 2$

II.  $4 + 6 \times 9 + 2 - 8$

- Ans**
- ☒ 1. 12 and 8
  - ☒ 2. 9 and 15
  - ☒ 3. 9 and 81
  - ☒ 4. 8 and 12

Question Type : **MCQ**  
Question ID : **264330137383**  
Option 1 ID : **264330538161**  
Option 2 ID : **264330538159**  
Option 3 ID : **264330538162**  
Option 4 ID : **264330538160**  
Status : **Answered**  
Chosen Option : **4**

Section : General Awareness

Q.1 Saroja Vaidyanathan received Kalidas Samman for classical dance in \_\_\_\_\_ .

- Ans ☒ 1. 2009-10  
☒ 2. 2020-21  
☒ 3. 2001-02  
☒ 4. 2002-03

Question Type : MCQ

Question ID : 264330134050

Option 1 ID : 264330525226

Option 2 ID : 264330525225

Option 3 ID : 264330525224

Option 4 ID : 264330525223

Status : Not Answered

Chosen Option : --

Q.2 Where is the headquarters of the Spices Board of India located?

- Ans ☒ 1. Bengaluru (Karnataka)  
☒ 2. Kochi (Kerala)  
☒ 3. Pune (Maharashtra)  
☒ 4. Guntur (Andhra Pradesh)

Question Type : MCQ

Question ID : 264330134040

Option 1 ID : 264330525183

Option 2 ID : 264330525185

Option 3 ID : 264330525186

Option 4 ID : 264330525184

Status : Answered

Chosen Option : 1

Q.3 Which among the following alloys is a combination of gold and silver?

- Ans ☒ 1. Bronze  
☒ 2. Constantan  
☒ 3. Solder  
☒ 4. Electrum

Question Type : MCQ

Question ID : 264330137041

Option 1 ID : 264330536808

Option 2 ID : 264330536810

Option 3 ID : 264330536809

Option 4 ID : 264330536807

Status : Not Answered

Chosen Option : --

Q.4 Who among the following Mughal emperors assumed the title Alamgir, World Conqueror?

- Ans
- ☐ 1. Akbar
  - ☒ 2. Aurangzeb
  - ☐ 3. Babur
  - ☐ 4. Shah Jahan

Question Type : MCQ

Question ID : 264330137050

Option 1 ID : 264330536845

Option 2 ID : 264330536843

Option 3 ID : 264330536846

Option 4 ID : 264330536844

Status : Answered

Chosen Option : 2

Q.5 Which among the following National Parks is not located in Maharashtra?

- Ans
- ☐ 1. Gugamal National Park
  - ☐ 2. Tadoba National Park
  - ☐ 3. Navegaon National Park
  - ☒ 4. Bandhavgarh National Park

Question Type : MCQ

Question ID : 264330137043

Option 1 ID : 264330536817

Option 2 ID : 264330536815

Option 3 ID : 264330536818

Option 4 ID : 264330536816

Status : Answered

Chosen Option : 4

Q.6 Who has written "The History of British India" in 1817?

- Ans
- ☒ 1. James Mill
  - ☐ 2. Romesh Chander Dutt
  - ☐ 3. Dadabhai Naoroji
  - ☐ 4. William Bentick

Question Type : MCQ

Question ID : 264330137410

Option 1 ID : 264330538267

Option 2 ID : 264330538268

Option 3 ID : 264330538270

Option 4 ID : 264330538269

Status : Answered

Chosen Option : 4

Q.7 Identify the famous Indian music personality.

In 2011, the Guinness Book of World Records officially acknowledged her as the most recorded artist in music history.

- Ans ☒ 1. Asha Bhosle  
☒ 2. Shreya Ghoshal  
☒ 3. Usha Uthup  
☒ 4. Alka Yagnik

Question Type : MCQ

Question ID : 264330138252

Option 1 ID : 264330541617

Option 2 ID : 264330541616

Option 3 ID : 264330541615

Option 4 ID : 264330541618

Status : Answered

Chosen Option : 1

Q.8 The Northernmost range of Himalayas is known as \_\_\_\_\_.

- Ans ☒ 1. The Inner Himalayas  
☒ 2. Aravalli Range  
☒ 3. Purvanchal  
☒ 4. Shiwalik Range

Question Type : MCQ

Question ID : 264330138264

Option 1 ID : 264330541663

Option 2 ID : 264330541665

Option 3 ID : 264330541666

Option 4 ID : 264330541664

Status : Answered

Chosen Option : 1

Q.9 What is the fiscal year period in India?

- Ans ☒ 1. 1st April of a year to 31st March of the next upcoming year  
☒ 2. 1st April to 31st December of the same year  
☒ 3. 1st January to 31st December of the same year  
☒ 4. 1st January of a year to 31st December of the next upcoming year

Question Type : MCQ

Question ID : 264330134055

Option 1 ID : 264330525243

Option 2 ID : 264330525244

Option 3 ID : 264330525246

Option 4 ID : 264330525245

Status : Answered

Chosen Option : 1

Q.10 Who founded the Ramakrishna Mission in 1897?

- Ans
- ☒ 1. Ramakrishna Paramahansa
  - ☒ 2. Swami Vivekanand
  - ☒ 3. Keshav Chandra Sen
  - ☒ 4. Debendranath Tagore

Question Type : MCQ  
 Question ID : 264330137702  
 Option 1 ID : 264330539418  
 Option 2 ID : 264330539416  
 Option 3 ID : 264330539417  
 Option 4 ID : 264330539415  
 Status : Answered  
 Chosen Option : 2

Q.11 Article 25 to 28 of the Indian constitution provide for \_\_\_\_\_.

- Ans
- ☒ 1. Culture and Educational Rights
  - ☒ 2. Right to Equality
  - ☒ 3. Right against Exploitation
  - ☒ 4. Right to Freedom of Religion

Question Type : MCQ  
 Question ID : 264330138258  
 Option 1 ID : 264330541642  
 Option 2 ID : 264330541639  
 Option 3 ID : 264330541640  
 Option 4 ID : 264330541641  
 Status : Answered  
 Chosen Option : 1

Q.12 Jagoi and cholom are the two main divisions in \_\_\_\_\_ dance.

- Ans
- ☒ 1. Kathakali
  - ☒ 2. Manipuri
  - ☒ 3. Bharatanatyam
  - ☒ 4. Kathak

Question Type : MCQ  
 Question ID : 264330138246  
 Option 1 ID : 264330541594  
 Option 2 ID : 264330541593  
 Option 3 ID : 264330541591  
 Option 4 ID : 264330541592  
 Status : Not Answered  
 Chosen Option : --

Q.13 Beriberi is caused by deficiency of which of the following?

- Ans
- ☐ 1. Vitamin D
  - ☐ 2. Vitamin C
  - ☒ 3. Vitamin B1
  - ☐ 4. Iodine

Question Type : MCQ

Question ID : 264330138259

Option 1 ID : 264330541645

Option 2 ID : 264330541644

Option 3 ID : 264330541643

Option 4 ID : 264330541646

Status : Answered

Chosen Option : 3

Q.14 Pradhan Mantri Awas Yojana- Urban was launched by which Union Ministry?

- Ans
- ☐ 1. Ministry of Finance
  - ☒ 2. Ministry of Housing and Urban Affairs
  - ☐ 3. Ministry of Human Resource Development
  - ☐ 4. Ministry of Rural Development

Question Type : MCQ

Question ID : 264330138255

Option 1 ID : 264330541630

Option 2 ID : 264330541628

Option 3 ID : 264330541627

Option 4 ID : 264330541629

Status : Answered

Chosen Option : 2

Q.15 Who among the following is the author of the book "An Autobiography: Toward Freedom"?

- Ans
- ☐ 1. Lala Lajpat Rai
  - ☒ 2. Jawaharlal Nehru
  - ☐ 3. Indira Gandhi
  - ☐ 4. Mahatma Gandhi

Question Type : MCQ

Question ID : 264330134048

Option 1 ID : 264330525217

Option 2 ID : 264330525215

Option 3 ID : 264330525218

Option 4 ID : 264330525216

Status : Answered

Chosen Option : 2

Q.16 Which of the following unemployment is the result of depression in an economy?

- Ans ☒ 1. Cyclical unemployment  
☐ 2. Frictional unemployment  
☐ 3. Seasonal unemployment  
☐ 4. Structural unemployment

Question Type : MCQ

Question ID : 264330137699

Option 1 ID : 264330539403

Option 2 ID : 264330539405

Option 3 ID : 264330539406

Option 4 ID : 264330539404

Status : Answered

Chosen Option : 1

Q.17 Which among the following planets is also known as "morning star"?

- Ans ☐ 1. Jupiter  
☐ 2. Neptune  
☒ 3. Venus  
☐ 4. Earth

Question Type : MCQ

Question ID : 264330137044

Option 1 ID : 264330536822

Option 2 ID : 264330536821

Option 3 ID : 264330536819

Option 4 ID : 264330536820

Status : Answered

Chosen Option : 3

Q.18 Sreejesh P.R who was awarded "Major Dyan Chand Khel Ratna Award 2021" is associated with which sports?

- Ans ☐ 1. Football  
☐ 2. Boxing  
☐ 3. Wrestling  
☒ 4. Hockey

Question Type : MCQ

Question ID : 264330138249

Option 1 ID : 264330541606

Option 2 ID : 264330541603

Option 3 ID : 264330541604

Option 4 ID : 264330541605

Status : Not Answered

Chosen Option : --

Q.19 As per the standard census definition, main worker is a person who works for at least \_\_\_\_\_ in a year.

- Ans
- ☐ 1. 190 days
  - ☐ 2. 150 days
  - ☐ 3. 223 days
  - ☒ 4. 183 days

Question Type : MCQ  
Question ID : 264330138668  
Option 1 ID : 264330543281  
Option 2 ID : 264330543279  
Option 3 ID : 264330543282  
Option 4 ID : 264330543280  
Status : Answered  
Chosen Option : 4

Q.20 Who among the following won Formula 1 United States Grand Prix 2022?

- Ans
- ☐ 1. Charles Leclerc
  - ☐ 2. Lando Norris
  - ☐ 3. Carlos Sainz Jr.
  - ☒ 4. Max Verstappen

Question Type : MCQ  
Question ID : 264330137059  
Option 1 ID : 264330536882  
Option 2 ID : 264330536879  
Option 3 ID : 264330536880  
Option 4 ID : 264330536881  
Status : Not Answered  
Chosen Option : --

Q.21 Dussehra festival is also known as \_\_\_\_\_.

- Ans
- ☐ 1. Sankranti
  - ☐ 2. Vaikunthashtami
  - ☒ 3. Vijayadashami
  - ☐ 4. Janmasthami

Question Type : MCQ  
Question ID : 264330137689  
Option 1 ID : 264330539364  
Option 2 ID : 264330539363  
Option 3 ID : 264330539365  
Option 4 ID : 264330539366  
Status : Answered  
Chosen Option : 3

Q.22 In September 2022, who has been appointed as the new Attorney General of India?

- Ans
- ✓ 1. R. Venkataramani
  - ✗ 2. Ram Jethmalani
  - ✗ 3. Kailash Vasdev
  - ✗ 4. Jagdeep Dhankhar

Question Type : MCQ  
 Question ID : 264330138254  
 Option 1 ID : 264330541624  
 Option 2 ID : 264330541623  
 Option 3 ID : 264330541626  
 Option 4 ID : 264330541625  
 Status : Answered  
 Chosen Option : 1

Q.23 The Head of an Indian state is \_\_\_\_\_.

- Ans
- ✗ 1. Chief Justice of High Court
  - ✓ 2. Governor
  - ✗ 3. State Election Commissioner
  - ✗ 4. Chief minister

Question Type : MCQ  
 Question ID : 264330137398  
 Option 1 ID : 264330538220  
 Option 2 ID : 264330538221  
 Option 3 ID : 264330538222  
 Option 4 ID : 264330538219  
 Status : Answered  
 Chosen Option : 2

Q.24 The Parliament of India is also known as \_\_\_\_\_.

- Ans
- ✗ 1. Lok Sabha
  - ✓ 2. Sansad
  - ✗ 3. Vidhan Sabha
  - ✗ 4. Senate

Question Type : MCQ  
 Question ID : 264330134630  
 Option 1 ID : 264330527476  
 Option 2 ID : 264330527477  
 Option 3 ID : 264330527475  
 Option 4 ID : 264330527478  
 Status : Answered  
 Chosen Option : 2

Q.25 The ancient city of Dholavira, is located in which state?

- Ans
- ☐ 1. Madhya Pradesh
  - ☐ 2. Rajasthan
  - ☐ 3. Karnataka
  - ☒ 4. Gujarat

Question Type : MCQ  
Question ID : 264330137389  
Option 1 ID : 264330538183  
Option 2 ID : 264330538184  
Option 3 ID : 264330538186  
Option 4 ID : 264330538185  
Status : Answered  
Chosen Option : 4

Section : English Language and Comprehension

Q.1 The statement below has been given with bracketed text. Select the option with correct Idiom for the bracketed text.

Susie (has such strong resemblance to) Kate Winslet that sometimes people would ask her for her autograph.

- Ans
- ☒ 1. dead ringer
  - ☐ 2. gone bananas
  - ☐ 3. jack of all trades
  - ☐ 4. pound the pavement

Question Type : MCQ  
Question ID : 264330136634  
Option 1 ID : 264330535262  
Option 2 ID : 264330535259  
Option 3 ID : 264330535261  
Option 4 ID : 264330535260  
Status : Not Answered  
Chosen Option : --

Q.2 Select the most appropriate synonym to substitute the bracketed word in the given sentence.

No need to read (voluminous) campaign literature, or pore through printed recommendations.

- Ans
- ☒ 1. Commodious
  - ☐ 2. Micro
  - ☐ 3. Sparkling
  - ☐ 4. Reverberate

Question Type : MCQ  
Question ID : 264330136074  
Option 1 ID : 264330533110  
Option 2 ID : 264330533108  
Option 3 ID : 264330533109  
Option 4 ID : 264330533107  
Status : Answered  
Chosen Option : 3

**Q.3** Find the part of the given sentence that has an error in it. If there is no error, choose 'No error'.  
I hope that we will arrive at the ideal trade-off soon.

- Ans**
- ☒ 1. the ideal trade-off soon.
  - ☒ 2. we will arrive at
  - ☒ 3. No error
  - ☒ 4. I hope that

Question Type : **MCQ**  
Question ID : **264330136769**  
Option 1 ID : **264330535781**  
Option 2 ID : **264330535780**  
Option 3 ID : **264330535782**  
Option 4 ID : **264330535779**  
Status : **Answered**  
Chosen Option : **3**

**Q.4** Select the word from the options which is exactly opposite in meaning to the bracketed word given in the sentence below.

The company has responded (sluggishly) to these changes in technology.

- Ans**
- ☒ 1. Lethargically
  - ☒ 2. Similarly
  - ☒ 3. Apathetically
  - ☒ 4. Promptly

Question Type : **MCQ**  
Question ID : **264330136632**  
Option 1 ID : **264330535253**  
Option 2 ID : **264330535254**  
Option 3 ID : **264330535252**  
Option 4 ID : **264330535251**  
Status : **Answered**  
Chosen Option : **4**

**Q.5** Find the part of the given sentence that has an error in it. If there is no error, choose 'No error'.  
He had to rebel against his father to became a musician.

- Ans**
- ☒ 1. against his father to
  - ☒ 2. became a musician.
  - ☒ 3. He had to rebel
  - ☒ 4. No error

Question Type : **MCQ**  
Question ID : **264330134720**  
Option 1 ID : **264330527836**  
Option 2 ID : **264330527837**  
Option 3 ID : **264330527835**  
Option 4 ID : **264330527838**  
Status : **Answered**  
Chosen Option : **2**

Q.6 Fill in the blank with the most appropriate option.

Societies need to develop highly \_\_\_\_\_ behavioural rules for survival.

- Ans
- ☐ 1. readjusted
  - ☐ 2. adopted
  - ☒ 3. adaptive
  - ☐ 4. matched

Question Type : MCQ  
 Question ID : 264330136638  
 Option 1 ID : 264330535275  
 Option 2 ID : 264330535277  
 Option 3 ID : 264330535276  
 Option 4 ID : 264330535278  
 Status : Answered  
 Chosen Option : 3

Q.7 Identify the segment that contains a grammatical error. If there is no error, select 'No error'.

Before Jerry could stop him, Daniel / bounding off the bed, seized Jerry's / desk lamp, and started beating himself.

- Ans
- ☐ 1. desk lamp, and started beating himself.
  - ☐ 2. No error
  - ☐ 3. Before Jerry could stop him, Daniel
  - ☒ 4. bounding off the bed, seized Jerry's

Question Type : MCQ  
 Question ID : 264330136615  
 Option 1 ID : 264330535189  
 Option 2 ID : 264330535190  
 Option 3 ID : 264330535187  
 Option 4 ID : 264330535188  
 Status : Answered  
 Chosen Option : 1

Q.8 In the following question, out of the given four alternatives, select the alternative which best expresses the meaning of the Idiom/Phrase.

In the long run

- Ans
- ☐ 1. Lack of energy
  - ☐ 2. Long walk
  - ☐ 3. In tough times
  - ☒ 4. In the end

Question Type : MCQ  
 Question ID : 264330135328  
 Option 1 ID : 264330530220  
 Option 2 ID : 264330530222  
 Option 3 ID : 264330530221  
 Option 4 ID : 264330530219  
 Status : Answered  
 Chosen Option : 4

**Q.9** Improve the underlined part of the sentence. Choose 'No improvement' as an answer if the sentence is grammatically correct.

He held the railing as he walked downed the stairs.

- Ans**
- ☒ 1. No improvement
  - ☒ 2. walk down
  - ☒ 3. walked downs
  - ☒ 4. walked down

Question Type : MCQ  
 Question ID : 264330136772  
 Option 1 ID : 264330535794  
 Option 2 ID : 264330535792  
 Option 3 ID : 264330535793  
 Option 4 ID : 264330535791  
 Status : Answered  
 Chosen Option : 4

**Q.10** Four words are given, out of which three words are spelt correctly. Choose the incorrectly spelt word.

- Ans**
- ☒ 1. LICENSE
  - ☒ 2. NECCESSARY
  - ☒ 3. INDISPENSABLE
  - ☒ 4. OCCASION

Question Type : MCQ  
 Question ID : 264330136635  
 Option 1 ID : 264330535264  
 Option 2 ID : 264330535265  
 Option 3 ID : 264330535263  
 Option 4 ID : 264330535266  
 Status : Answered  
 Chosen Option : 1

**Q.11** Select the most appropriate option to fill in the blank.

The man who is supposed to be protecting them is somehow their fiercest and most \_\_\_\_\_ enemy.

- Ans**
- ☒ 1. implacable
  - ☒ 2. pedestrian
  - ☒ 3. ostentatious
  - ☒ 4. quotidian

Question Type : MCQ  
 Question ID : 264330136055  
 Option 1 ID : 264330533038  
 Option 2 ID : 264330533036  
 Option 3 ID : 264330533035  
 Option 4 ID : 264330533037  
 Status : Answered  
 Chosen Option : 1

Q.12 Select the wrongly spelt word.

- Ans
- ☒ 1. Sully
  - ☒ 2. Depravity
  - ☒ 3. Morelity
  - ☒ 4. Arsenal

Question Type : MCQ  
 Question ID : 264330136054  
 Option 1 ID : 264330533034  
 Option 2 ID : 264330533032  
 Option 3 ID : 264330533031  
 Option 4 ID : 264330533033  
 Status : Answered  
 Chosen Option : 3

Q.13 Choose the word that can substitute the given group of words.

A portable case for holding papers, drawing etc.

- Ans
- ☒ 1. Archives
  - ☒ 2. Creche
  - ☒ 3. Portfolio
  - ☒ 4. Cache

Question Type : MCQ  
 Question ID : 264330135322  
 Option 1 ID : 264330530197  
 Option 2 ID : 264330530196  
 Option 3 ID : 264330530198  
 Option 4 ID : 264330530195  
 Status : Answered  
 Chosen Option : 3

Q.14 Select the most appropriate word for the given group of words.

A person who is both open and shy

- Ans
- ☒ 1. Extrovert
  - ☒ 2. Ambivert
  - ☒ 3. Introvert
  - ☒ 4. Controvert

Question Type : MCQ  
 Question ID : 264330136628  
 Option 1 ID : 264330535235  
 Option 2 ID : 264330535237  
 Option 3 ID : 264330535236  
 Option 4 ID : 264330535238  
 Status : Answered  
 Chosen Option : 2

Q.15 Select the most appropriate option to fill in the blank.

Before about 1830, \_\_\_\_\_ sermons, tracts and addresses routinely broached female intemperance.

- Ans
- ☒ 1. confluence
  - ☒ 2. temperance
  - ☒ 3. congruence
  - ☒ 4. affluence

Question Type : MCQ

Question ID : 264330136064

Option 1 ID : 264330533071

Option 2 ID : 264330533072

Option 3 ID : 264330533074

Option 4 ID : 264330533073

Status : Answered

Chosen Option : 1

Q.16 Select the most appropriate synonym of the given word.

Fetish

- Ans
- ☒ 1. Awkward
  - ☒ 2. Requirement
  - ☒ 3. Desire
  - ☒ 4. Learning

Question Type : MCQ

Question ID : 264330136629

Option 1 ID : 264330535242

Option 2 ID : 264330535241

Option 3 ID : 264330535240

Option 4 ID : 264330535239

Status : Answered

Chosen Option : 3

Q.17 Select the most appropriate antonym of the given word.

Rigid

- Ans
- ☒ 1. Superior
  - ☒ 2. Distaste
  - ☒ 3. Satiation
  - ☒ 4. Flexible

Question Type : MCQ

Question ID : 264330135811

Option 1 ID : 264330532117

Option 2 ID : 264330532116

Option 3 ID : 264330532115

Option 4 ID : 264330532118

Status : Answered

Chosen Option : 4

Q.18 Fill in the blank with the most appropriate option.

At first, it looked as \_\_\_\_\_ Uncle Vernon would manage to gloss the whole thing over.

- Ans
- ☐ 1. thought
  - ☐ 2. throughout
  - ☒ 3. though
  - ☐ 4. through

Question Type : MCQ

Question ID : 264330136619

Option 1 ID : 264330535206

Option 2 ID : 264330535204

Option 3 ID : 264330535205

Option 4 ID : 264330535203

Status : Answered

Chosen Option : 1

Q.19 Improve the underlined part of the sentence. Choose 'No improvement' as an answer if the sentence is grammatically correct.

He enlisting in the army and went to war when he was only eighteen.

- Ans
- ☐ 1. enlist in army
  - ☒ 2. enlisted in the army
  - ☐ 3. No improvement
  - ☐ 4. enlisted at the army

Question Type : MCQ

Question ID : 264330135182

Option 1 ID : 264330529660

Option 2 ID : 264330529661

Option 3 ID : 264330529662

Option 4 ID : 264330529659

Status : Answered

Chosen Option : 2

Q.20 Select the word segment that substitutes (replaces) the bracketed word segment correctly and completes the sentence meaningfully. Select the option 'no correction required' if the sentence is correct as given.

One of the main climbing routes, approaches the summit from the southeast (in the Nepal).

- Ans
- ☐ 1. at the Nepal
  - ☒ 2. in Nepal
  - ☐ 3. No correction required
  - ☐ 4. from the Nepal

Question Type : MCQ

Question ID : 264330136644

Option 1 ID : 264330535299

Option 2 ID : 264330535301

Option 3 ID : 264330535302

Option 4 ID : 264330535300

Status : Answered

Chosen Option : 2

### Comprehension:

In the following passage some words have been deleted. Fill in the blanks with the help of the alternatives given. Select the most appropriate option for each number.

If you enjoy (1) \_\_\_\_\_ crime shows on TV, you know that fingerprints play a large role in (2) \_\_\_\_\_ people. But, you might be (3) \_\_\_\_\_ to find out that using fingerprints for identification is not a new science. In fact, it is very old (4) \_\_\_\_\_ back at least as far as 1885-1913 B.C.E. In Babylon, when people agreed to a business contract, they pressed their fingerprints into the clay in which the contract was written. (5) \_\_\_\_\_ have also been found on clay seals from ancient China.

### SubQuestion No : 21

Q.21 Select the most appropriate option to fill in the blank No. 1.

- Ans
- ☒ 1. marking
  - ☒ 2. watching
  - ☒ 3. calling out
  - ☒ 4. writing

Question Type : MCQ

Question ID : 264330135802

Option 1 ID : 264330532082

Option 2 ID : 264330532081

Option 3 ID : 264330532079

Option 4 ID : 264330532080

Status : Answered

Chosen Option : 2

### Comprehension:

In the following passage some words have been deleted. Fill in the blanks with the help of the alternatives given. Select the most appropriate option for each number.

If you enjoy (1) \_\_\_\_\_ crime shows on TV, you know that fingerprints play a large role in (2) \_\_\_\_\_ people. But, you might be (3) \_\_\_\_\_ to find out that using fingerprints for identification is not a new science. In fact, it is very old (4) \_\_\_\_\_ back at least as far as 1885-1913 B.C.E. In Babylon, when people agreed to a business contract, they pressed their fingerprints into the clay in which the contract was written. (5) \_\_\_\_\_ have also been found on clay seals from ancient China.

### SubQuestion No : 22

Q.22 Select the most appropriate option to fill in the blank No. 2.

- Ans
- ☒ 1. identifying
  - ☒ 2. pertaining
  - ☒ 3. chortling
  - ☒ 4. masking

Question Type : MCQ

Question ID : 264330135803

Option 1 ID : 264330532083

Option 2 ID : 264330532086

Option 3 ID : 264330532085

Option 4 ID : 264330532084

Status : Answered

Chosen Option : 1

### Comprehension:

In the following passage some words have been deleted. Fill in the blanks with the help of the alternatives given. Select the most appropriate option for each number.

If you enjoy (1) \_\_\_\_\_ crime shows on TV, you know that fingerprints play a large role in (2) \_\_\_\_\_ people. But, you might be (3) \_\_\_\_\_ to find out that using fingerprints for identification is not a new science. In fact, it is very old (4) \_\_\_\_\_ back at least as far as 1885-1913 B.C.E. In Babylon, when people agreed to a business contract, they pressed their fingerprints into the clay in which the contract was written. (5) \_\_\_\_\_ have also been found on clay seals from ancient China.

### SubQuestion No : 23

Q.23 Select the most appropriate option to fill in the blank No. 3.

- Ans
- ☒ 1. certain
  - ☒ 2. calculable
  - ☒ 3. blocked
  - ☒ 4. surprised

Question Type : MCQ

Question ID : 264330135804

Option 1 ID : 264330532088

Option 2 ID : 264330532087

Option 3 ID : 264330532089

Option 4 ID : 264330532090

Status : Answered

Chosen Option : 4

### Comprehension:

In the following passage some words have been deleted. Fill in the blanks with the help of the alternatives given. Select the most appropriate option for each number.

If you enjoy (1) \_\_\_\_\_ crime shows on TV, you know that fingerprints play a large role in (2) \_\_\_\_\_ people. But, you might be (3) \_\_\_\_\_ to find out that using fingerprints for identification is not a new science. In fact, it is very old (4) \_\_\_\_\_ back at least as far as 1885-1913 B.C.E. In Babylon, when people agreed to a business contract, they pressed their fingerprints into the clay in which the contract was written. (5) \_\_\_\_\_ have also been found on clay seals from ancient China.

### SubQuestion No : 24

Q.24 Select the most appropriate option to fill in the blank No. 4.

- Ans
- ☒ 1. portraying
  - ☒ 2. dating
  - ☒ 3. stating
  - ☒ 4. going

Question Type : MCQ

Question ID : 264330135805

Option 1 ID : 264330532094

Option 2 ID : 264330532092

Option 3 ID : 264330532093

Option 4 ID : 264330532091

Status : Answered

Chosen Option : 2


### Comprehension:


In the following passage some words have been deleted. Fill in the blanks with the help of the alternatives given. Select the most appropriate option for each number.


If you enjoy (1) \_\_\_\_\_ crime shows on TV, you know that fingerprints play a large role in (2) \_\_\_\_\_ people. But, you might be (3) \_\_\_\_\_ to find out that using fingerprints for identification is not a new science. In fact, it is very old (4) \_\_\_\_\_ back at least as far as 1885-1913 B.C.E. In Babylon, when people agreed to a business contract, they pressed their fingerprints into the clay in which the contract was written. (5) \_\_\_\_\_ have also been found on clay seals from ancient China.


SubQuestion No : 25

Q.25 Select the most appropriate option to fill in the blank No. 5.

Ans  1. Thumbprints

 2. Sculptures

 3. Footprints

 4. Paintings

Question Type : MCQ

Question ID : 264330135806

Option 1 ID : 264330532095

Option 2 ID : 264330532097

Option 3 ID : 264330532096

Option 4 ID : 264330532098

Status : Answered

Chosen Option : 3

