

Multi Tasking Non Technical Staff and Havaladar CBIC and CBN Examination 2022

Roll Number	
Candidate Name	
Venue Name	U.P. PUBLIC SCHOOL
Exam Date	11/05/2023
Exam Time	9:00 AM - 10:30 AM
Subject	MTS Non Tech Havaladar CBIC and CBN Examination 2022

Section : Numerical and Mathematical Ability

Q.1 What is the value of $42 \div [18 - \{6 + (3 \text{ of } 4 - 4 - 2 \text{ of } 5)\}]$?

- Ans**
- ☒ 1. 5
 - ☒ 2. 6
 - ☒ 3. 2
 - ☒ 4. 3

Question Type : **MCQ**

Question ID : **264330138090**

Option 1 ID : **264330540970**

Option 2 ID : **264330540968**

Option 3 ID : **264330540969**

Option 4 ID : **264330540967**

Status : **Answered**

Chosen Option : **4**

Q.2 A man sells his bike for Rs. 132000 earning a profit of 10%. If he had sold it for Rs. 126000, then what is his profit or loss percent?

- Ans**
- ☒ 1. 10% profit
 - ☒ 2. 5% loss
 - ☒ 3. 10% loss
 - ☒ 4. 5% profit

Question Type : **MCQ**

Question ID : **264330141033**

Option 1 ID : **264330552480**

Option 2 ID : **264330552481**

Option 3 ID : **264330552479**

Option 4 ID : **264330552482**

Status : **Answered**

Chosen Option : **4**

Test Prime

**ALL EXAMS,
ONE SUBSCRIPTION**



70,000+
Mock Tests



**Personalised
Report Card**



**Unlimited
Re-Attempt**



600+
Exam Covered



**Previous Year
Papers**



**500%
Refund**



ATTEMPT FREE MOCK NOW

Q.3 The marked price of an article is 20 percent more than its cost price. If 10 percent discount is given on the marked price, then what will be the profit percentage?

- Ans**
- ✓ 1. 8 percent
 - ✗ 2. 15 percent
 - ✗ 3. 12 percent
 - ✗ 4. 10 percent

Question Type : **MCQ**
 Question ID : **264330139008**
 Option 1 ID : **264330544639**
 Option 2 ID : **264330544642**
 Option 3 ID : **264330544641**
 Option 4 ID : **264330544640**
 Status : **Answered**
 Chosen Option : 1

Q.4 The difference in simple interest on a certain sum at 6% per annum for 5 years and 5% per annum for 4 years is Rs. 422. Find the sum

- Ans**
- ✗ 1. Rs. 2570
 - ✓ 2. Rs. 4220
 - ✗ 3. Rs. 6500
 - ✗ 4. Rs. 1990

Question Type : **MCQ**
 Question ID : **264330135380**
 Option 1 ID : **264330530427**
 Option 2 ID : **264330530429**
 Option 3 ID : **264330530430**
 Option 4 ID : **264330530428**
 Status : **Answered**
 Chosen Option : 2

Q.5 What is the average of first 57 natural numbers?

- Ans**
- ✗ 1. 35
 - ✓ 2. 29
 - ✗ 3. 42
 - ✗ 4. 40.5

Question Type : **MCQ**
 Question ID : **264330138999**
 Option 1 ID : **264330544606**
 Option 2 ID : **264330544605**
 Option 3 ID : **264330544604**
 Option 4 ID : **264330544603**
 Status : **Answered**
 Chosen Option : 2

Q.6 The outer radius of a spherical shell is 13 cm and the thickness of the shell is 3 cm. What is the volume of the metal used for the shell? ($\pi = \frac{22}{7}$)

- Ans**
- ☒ 1. 1197 cm³
 - ☒ 2. 2197 cm³
 - ☒ 3. 3024 cm³
 - ☒ 4. 5016 cm³

Question Type : **MCQ**

Question ID : **264330133835**

Option 1 ID : **264330524366**

Option 2 ID : **264330524363**

Option 3 ID : **264330524365**

Option 4 ID : **264330524364**

Status : **Answered**

Chosen Option : **4**

Q.7 If price is decreased by 25 percent, then by how much percentage consumption should be increased, so that the expenditure remains the same?

- Ans**
- ☒ 1. 20 percent
 - ☒ 2. 40 percent
 - ☒ 3. 37.5 percent
 - ☒ 4. 33.33 percent

Question Type : **MCQ**

Question ID : **264330139061**

Option 1 ID : **264330544852**

Option 2 ID : **264330544851**

Option 3 ID : **264330544853**

Option 4 ID : **264330544854**

Status : **Answered**

Chosen Option : **4**

Q.8 Seema alone can do a piece of work in 8 days and her sister Reema alone can do the same work in 24 days. If they worked together, then in how many days they will complete the work?

- Ans**
- ☒ 1. 8 days
 - ☒ 2. 6 days
 - ☒ 3. 10 days
 - ☒ 4. 4 days

Question Type : **MCQ**

Question ID : **264330138050**

Option 1 ID : **264330540808**

Option 2 ID : **264330540809**

Option 3 ID : **264330540810**

Option 4 ID : **264330540807**

Status : **Answered**

Chosen Option : **2**

Q.9 There are three measuring Tapes which measure 56 cm, 64 cm and 80 cm in length. Find the least length that could be measured by using any of the three tapes. (Only one type of tape should be used at a time and only complete tape should be used to measure.)

- Ans** ☒ 1. 2240 cm
☒ 2. 1982 cm
☒ 3. 1706 cm
☒ 4. 1876 cm

Question Type : **MCQ**
 Question ID : **264330139011**
 Option 1 ID : **264330544652**
 Option 2 ID : **264330544654**
 Option 3 ID : **264330544653**
 Option 4 ID : **264330544651**
 Status : **Answered**
 Chosen Option : **1**

Q.10 A and B together finish a work in 6 days. If A alone can finish the work in 10 days, then in how many days B alone can complete the work?

- Ans** ☒ 1. 15 days
☒ 2. 10 days
☒ 3. 12 days
☒ 4. 14 days

Question Type : **MCQ**
 Question ID : **264330133830**
 Option 1 ID : **264330524344**
 Option 2 ID : **264330524343**
 Option 3 ID : **264330524345**
 Option 4 ID : **264330524346**
 Status : **Answered**
 Chosen Option : **1**

Q.11 A sum becomes Rs. 27720 in 7 years at the rate of 14 percent per annum on simple interest. What is the sum?

- Ans** ☒ 1. Rs. 13000
☒ 2. Rs. 14700
☒ 3. Rs. 15000
☒ 4. Rs. 14000

Question Type : **MCQ**
 Question ID : **264330139066**
 Option 1 ID : **264330544871**
 Option 2 ID : **264330544873**
 Option 3 ID : **264330544874**
 Option 4 ID : **264330544872**
 Status : **Answered**
 Chosen Option : **4**

Q.12 Ram walks at the speed of 12 km/hr and reaches his school 12 minutes late. If he walks at 16 km/hr, then he reaches 8 minutes before the scheduled time. What is the distance of his school from his house?

- Ans**
- ✓ 1. 16 km
 - ✗ 2. 30 km
 - ✗ 3. 20 km
 - ✗ 4. 24 km

Question Type : **MCQ**
 Question ID : **264330138998**
 Option 1 ID : **264330544600**
 Option 2 ID : **264330544602**
 Option 3 ID : **264330544599**
 Option 4 ID : **264330544601**
 Status : **Answered**
 Chosen Option : 1

Q.13 What is the area of a square whose diagonal is $5\sqrt{2}$ cm?

- Ans**
- ✗ 1. 64 cm²
 - ✓ 2. 25 cm²
 - ✗ 3. 100 cm²
 - ✗ 4. 36 cm²

Question Type : **MCQ**
 Question ID : **264330138054**
 Option 1 ID : **264330540826**
 Option 2 ID : **264330540823**
 Option 3 ID : **264330540824**
 Option 4 ID : **264330540825**
 Status : **Answered**
 Chosen Option : 2

Q.14 If $2P = 3Q$ and $5Q = 4R$, then what is the value of $P : Q : R$?

- Ans**
- ✗ 1. 8 : 5 : 4
 - ✗ 2. 2 : 3 : 5
 - ✓ 3. 6 : 4 : 5
 - ✗ 4. 7 : 5 : 6

Question Type : **MCQ**
 Question ID : **264330139004**
 Option 1 ID : **264330544623**
 Option 2 ID : **264330544626**
 Option 3 ID : **264330544625**
 Option 4 ID : **264330544624**
 Status : **Answered**
 Chosen Option : 3

- Q.15** The following table shows the unemployed people in 5 states of India from 2019 to 2022.
What is the average number of unemployed people in Karnataka, Maharashtra and Punjab in 2021?

State/Year	Number of unemployed people (in thousand)			
	2019	2020	2021	2022
Bihar	25	40	50	42
UP	84	70	60	58
Karnataka	12	10	9	10
Maharashtra	40	48	30	32
Punjab	20	25	18	15

- Ans**
- ☒ 1. 9 thousand
 - ☒ 2. 18 thousand
 - ☒ 3. 30 thousand
 - ☒ 4. 19 thousand

Question Type : **MCQ**
Question ID : **264330138105**
Option 1 ID : **264330541029**
Option 2 ID : **264330541028**
Option 3 ID : **264330541030**
Option 4 ID : **264330541027**
Status : **Answered**
Chosen Option : **4**

- Q.16** In three positive numbers, the ratio of first and second is 3 : 4 and the ratio of second and third is 3 : 5. The product of first and third is 4500. What is the sum of the three numbers?

- Ans**
- ☒ 1. 282
 - ☒ 2. 235
 - ☒ 3. 198
 - ☒ 4. 205

Question Type : **MCQ**
Question ID : **264330139005**
Option 1 ID : **264330544630**
Option 2 ID : **264330544628**
Option 3 ID : **264330544629**
Option 4 ID : **264330544627**
Status : **Answered**
Chosen Option : **4**

- Q.17** Average weight of 25 members of a group is 39 kg. Average weight of 27 members of another group is 21 kg. What will be the total weight of the members of both the groups?

- Ans**
- ☒ 1. 1426 kg
 - ☒ 2. 1542 kg
 - ☒ 3. 1507 kg
 - ☒ 4. 1714 kg

Question Type : **MCQ**
Question ID : **264330139060**
Option 1 ID : **264330544850**
Option 2 ID : **264330544849**
Option 3 ID : **264330544847**
Option 4 ID : **264330544848**
Status : **Answered**
Chosen Option : **2**

Q.18 While selling an article for Rs. 8442, a person suffered a loss of 30 percent. At what price he should have sold the article to earn a profit of 20 percent?

- Ans
- ☒ 1. Rs. 15686
 - ☒ 2. Rs. 14472
 - ☒ 3. Rs. 12806
 - ☒ 4. Rs. 13885

Question Type : MCQ

Question ID : 264330139003

Option 1 ID : 264330544620

Option 2 ID : 264330544619

Option 3 ID : 264330544621

Option 4 ID : 264330544622

Status : Answered

Chosen Option : 2

Q.19 Which is the greatest number of four digit divisible by 12, 25 and 45?

- Ans
- ☒ 1. 9890
 - ☒ 2. 9999
 - ☒ 3. 9800
 - ☒ 4. 9900

Question Type : MCQ

Question ID : 264330141006

Option 1 ID : 264330552373

Option 2 ID : 264330552371

Option 3 ID : 264330552372

Option 4 ID : 264330552374

Status : Answered

Chosen Option : 4

Q.20 The pie chart given below shows the number of students studying in six schools. Total number of students studying in all these six schools are 8000. Number of students studying in a particular school is shown as a percentage of total number of students studying in all these six schools.



Total number of students studying in school S2 and S4 are what percent of the total number of students studying in school S3 and S6?

- Ans
- ☒ 1. 226.31 percent
 - ☒ 2. 190.46 percent
 - ☒ 3. 171.22 percent
 - ☒ 4. 265.22 percent

Question Type : MCQ

Question ID : 264330139015

Option 1 ID : 264330544670

Option 2 ID : 264330544668

Option 3 ID : 264330544669

Option 4 ID : 264330544667

Status : Answered

Chosen Option : 1

Section : Reasoning Ability and Problem Solving

Q.1 Which of the following numbers will replace the question mark (?) in the given series?

27, 30, 35, 38, 43, 46, 51, ?

Ans ☒ 1. 30

☒ 2. 54

☒ 3. 56

☒ 4. 48

Question Type : MCQ

Question ID : 264330138821

Option 1 ID : 264330543892

Option 2 ID : 264330543893

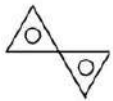
Option 3 ID : 264330543894

Option 4 ID : 264330543891

Status : Answered

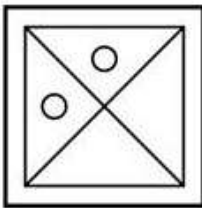
Chosen Option : 2

Q.2 Select the option figure in which the given figure is embedded as its part (rotation is NOT allowed).

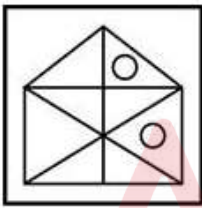


Ans

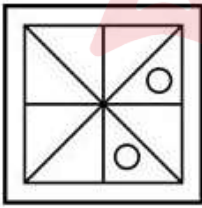
☒ 1.



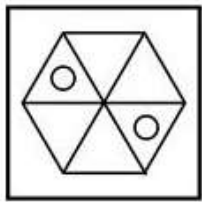
☒ 2.



☒ 3.



☒ 4.



Question Type : MCQ

Question ID : 264330137871

Option 1 ID : 264330540091

Option 2 ID : 264330540093

Option 3 ID : 264330540092

Option 4 ID : 264330540094

Status : Answered

Chosen Option : 4

Q.3 Six students Subham, Sneha, Surbhi, Muskan, Harsh and Vishal are standing in an assembly line facing north (one behind the other). Only one person stands behind Harsh in the line. Sneha stands exactly between Vishal and Muskan. Surbhi stands between Muskan and Harsh. Who stands immediately behind Surbhi?

- Ans**
- ☒ 1. Vishal
 - ☒ 2. Harsh
 - ☒ 3. Subham
 - ☒ 4. Sneha

Question Type : **MCQ**
 Question ID : **264330138815**
 Option 1 ID : **264330543868**
 Option 2 ID : **264330543870**
 Option 3 ID : **264330543867**
 Option 4 ID : **264330543869**
 Status : **Answered**
 Chosen Option : **2**

Q.4 Rashmi is shorter than Monika who is shorter than Prerna. Sana is shorter than Rashmi. Harshita is taller than Prerna. Uma is shorter than Nikita and taller than Harshita. Who among them is the shortest?

- Ans**
- ☒ 1. Uma
 - ☒ 2. Sana
 - ☒ 3. Rashmi
 - ☒ 4. Prerna

Question Type : **MCQ**
 Question ID : **264330138817**
 Option 1 ID : **264330543876**
 Option 2 ID : **264330543877**
 Option 3 ID : **264330543878**
 Option 4 ID : **264330543875**
 Status : **Answered**
 Chosen Option : **2**

Q.5 Select the option that is related to the third letter cluster in the same way as the second letter cluster is related to the first letter cluster.
 SOC : TND :: UDN : ?

- Ans**
- ☒ 1. VCP
 - ☒ 2. UCO
 - ☒ 3. VCO
 - ☒ 4. OCV

Question Type : **MCQ**
 Question ID : **264330138811**
 Option 1 ID : **264330543854**
 Option 2 ID : **264330543853**
 Option 3 ID : **264330543851**
 Option 4 ID : **264330543852**
 Status : **Answered**
 Chosen Option : **3**

Q.6 Study the given pattern carefully and select the number that can replace the question mark (?) in it.

First row- 18, 36, 6

Second row- 24, 48, 8

Third row- 33, 66, ?

Ans ☒ 1. 13

☒ 2. 11

☒ 3. 14

☒ 4. 12

Question Type : **MCQ**

Question ID : **264330138823**

Option 1 ID : **264330543902**

Option 2 ID : **264330543899**

Option 3 ID : **264330543901**

Option 4 ID : **264330543900**

Status : **Answered**

Chosen Option : **2**

Q.7 Select the option that is related to the fifth number in the same way as the second number is related to the first number and fourth number is related to third number:

10 : 512 :: 12 : 1000 :: 8 : ?

Ans ☒ 1. 315

☒ 2. 216

☒ 3. 512

☒ 4. 256

Question Type : **MCQ**

Question ID : **264330138843**

Option 1 ID : **264330543980**

Option 2 ID : **264330543982**

Option 3 ID : **264330543981**

Option 4 ID : **264330543979**

Status : **Answered**

Chosen Option : **2**

Q.8 In a certain code language, 'PARK' is coded as 'FMVK'. What is the code for 'RICE' in that code language?

Ans ☒ 1. ZXEM

☒ 2. ZXDN

☒ 3. ZXDM

☒ 4. ZXDL

Question Type : **MCQ**

Question ID : **264330138525**

Option 1 ID : **264330542709**

Option 2 ID : **264330542708**

Option 3 ID : **264330542710**

Option 4 ID : **264330542707**

Status : **Answered**

Chosen Option : **3**

Q.9 P, Q, R, and S are sitting on a bench facing south. A, B, C, and D are sitting on a parallel bench facing north. S and B are sitting opposite to each other. A sits exactly in between D and C. P sits opposite to C. Q sits immediately to the left of S. Which of the following is correct about the position of R?

- Ans**
- ✓ 1. R sits opposite to A
 - ✗ 2. R sits opposite to D
 - ✗ 3. R sits to the immediate right of Q
 - ✗ 4. R sits to immediate left of P

Question Type : MCQ
 Question ID : 264330138816
 Option 1 ID : 264330543874
 Option 2 ID : 264330543871
 Option 3 ID : 264330543873
 Option 4 ID : 264330543872
 Status : Answered
 Chosen Option : 1

Q.10 Three statements are given followed by two conclusions numbered I and II. Assuming the statements to be true, even if they seem to be at variance with commonly known facts, decide which of the conclusions logically follow(s) from the statements.

Statements:

Some rabbits are white.

Some rabbits are brown.

All white are yellow.

Conclusions:

I. Some brown are yellow.

II. Some rabbits are yellow.

- Ans**
- ✗ 1. Neither conclusion I nor II follows
 - ✗ 2. Only conclusion I follows
 - ✓ 3. Only conclusion II follows
 - ✗ 4. Both conclusions I and II follow

Question Type : MCQ
 Question ID : 264330138819
 Option 1 ID : 264330543886
 Option 2 ID : 264330543883
 Option 3 ID : 264330543884
 Option 4 ID : 264330543885
 Status : Answered
 Chosen Option : 3

Q.11 In the following question, select the missing number of the given series.

500, 477, 454, 431, 408, ?

- Ans**
- ✗ 1. 390
 - ✓ 2. 385
 - ✗ 3. 384
 - ✗ 4. 391

Question Type : MCQ
 Question ID : 264330138841
 Option 1 ID : 264330543973
 Option 2 ID : 264330543971
 Option 3 ID : 264330543972
 Option 4 ID : 264330543974
 Status : Answered
 Chosen Option : 2

Q.12 Which of the following letter will replace the question mark (?) in the given series?

Y, T, O, J, E, ?

- Ans
- ☒ 1. C
 - ☒ 2. D
 - ☒ 3. B
 - ☒ 4. Z

Question Type : MCQ

Question ID : 264330138808

Option 1 ID : 264330543839

Option 2 ID : 264330543841

Option 3 ID : 264330543840

Option 4 ID : 264330543842

Status : Answered

Chosen Option : 4

Q.13 Select the option that is related to the third word in the same way as the second word is related to the first word.

Soldier : Gun :: Surgeon : ?

- Ans
- ☒ 1. Pen
 - ☒ 2. Axe
 - ☒ 3. Scalpel
 - ☒ 4. Sword

Question Type : MCQ

Question ID : 264330138810

Option 1 ID : 264330543847

Option 2 ID : 264330543850

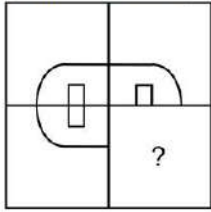
Option 3 ID : 264330543849

Option 4 ID : 264330543848

Status : Answered

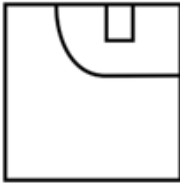
Chosen Option : 3

Q.14 Select the option figure that will replace the question mark (?) in the figure given below to complete the pattern.
(rotation is not allowed)

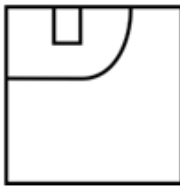


Ans

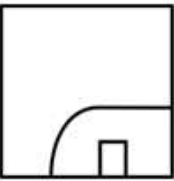
✗ 1.



✓ 2.



✗ 3.



✗ 4.



Question Type : MCQ

Question ID : 264330138828

Option 1 ID : 264330543921

Option 2 ID : 264330543920

Option 3 ID : 264330543922

Option 4 ID : 264330543919

Status : Answered

Chosen Option : 2

Q.15 In a certain code language, 'PROVED' is coded as 'VEDPRO'. What is the code for 'ROBUST' in that code language?

Ans ✓ 1. USTROB

✗ 2. USTROC

✗ 3. VSTRBO

✗ 4. VSTROB

Question Type : MCQ

Question ID : 264330138854

Option 1 ID : 264330544024

Option 2 ID : 264330544026

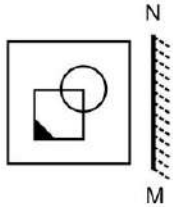
Option 3 ID : 264330544023

Option 4 ID : 264330544025

Status : Answered

Chosen Option : 1

Q.16 Select the correct mirror image of the given figure when the mirror MN is placed to the right side of the figure.

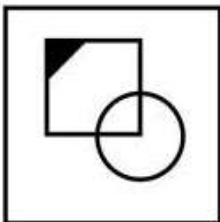


Ans

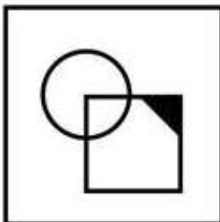
✗ 1.



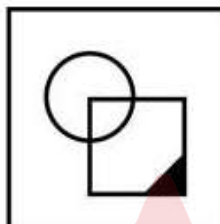
✗ 2.



✗ 3.



✓ 4.



Question Type : MCQ

Question ID : 264330137872

Option 1 ID : 264330540096

Option 2 ID : 264330540098

Option 3 ID : 264330540095

Option 4 ID : 264330540097

Status : Answered

Chosen Option : 4

Q.17 Two statements are given followed by two conclusions numbered I and II. Assuming the statements to be true, even if they seem to be at variance with commonly known facts, decide which of the conclusions logically follow(s) from the statements.

Statements:

All chairs are desks.

All desks are table.

Conclusions:

I. Some table are chairs.

II. All tables are desk.

- Ans**
- ☒ 1. Only conclusion I follows
 - ☐ 2. Neither conclusion I nor II follows
 - ☐ 3. Both conclusions I and II follow
 - ☐ 4. Only conclusion II follows

Question Type : MCQ

Question ID : 264330138818

Option 1 ID : 264330543879

Option 2 ID : 264330543882

Option 3 ID : 264330543881

Option 4 ID : 264330543880

Status : Answered

Chosen Option : 1

Q.18 In a certain code language, 'KOVID' is coded as 'DIVOK'. What is the code for 'DAVID' in that code language?

- Ans**
- ☐ 1. DIWAD
 - ☐ 2. DIVDA
 - ☒ 3. DIVAD
 - ☐ 4. DIVBD

Question Type : MCQ

Question ID : 264330137112

Option 1 ID : 264330537091

Option 2 ID : 264330537093

Option 3 ID : 264330537092

Option 4 ID : 264330537094

Status : Answered

Chosen Option : 3

Q.19 Which two numbers should be interchanged to make the given equation correct?

$$4 \times 2 - 3 + 5 = 7$$

- Ans**
- ☒ 1. 3 and 4
 - ☐ 2. 4 and 5
 - ☐ 3. 7 and 5
 - ☐ 4. 2 and 7

Question Type : MCQ

Question ID : 264330138824

Option 1 ID : 264330543903

Option 2 ID : 264330543905

Option 3 ID : 264330543904

Option 4 ID : 264330543906

Status : Answered

Chosen Option : 1

Q.20 By interchanging the given two signs which of the following equation will NOT be correct?

× and –

I. $4 \div 2 + 1 \times 6 - 3 = 13$

II. $5 + 7 - 8 \times 2 \div 1 = 58$

- Ans
- ☒ 1. Only II
 - ☒ 2. Only I
 - ☒ 3. Neither I nor II
 - ☒ 4. Both I and II

Question Type : MCQ

Question ID : 264330135579

Option 1 ID : 264330531216

Option 2 ID : 264330531215

Option 3 ID : 264330531218

Option 4 ID : 264330531217

Status : Answered

Chosen Option : 4

Section : General Awareness

Q.1 GDP calculated at some constant set of prices is called _____.

- Ans
- ☒ 1. real GDP
 - ☒ 2. domestic GDP
 - ☒ 3. current GDP
 - ☒ 4. nominal GDP

Question Type : MCQ

Question ID : 264330138306

Option 1 ID : 264330541834

Option 2 ID : 264330541831

Option 3 ID : 264330541833

Option 4 ID : 264330541832

Status : Not Attempted and
Marked For Review

Chosen Option : --

Q.2 Who was the last Governor General of British India?

- Ans
- ☒ 1. Lord Hastings
 - ☒ 2. Lord Auckland
 - ☒ 3. Lord Wellesley
 - ☒ 4. Lord Mountbatten

Question Type : MCQ

Question ID : 264330135449

Option 1 ID : 264330530704

Option 2 ID : 264330530706

Option 3 ID : 264330530703

Option 4 ID : 264330530705

Status : Answered

Chosen Option : 4

Q.3 Which of the following crop is also known as “Golden fibre”?

- Ans ☒ 1. Jute
☐ 2. Sugarcane
☐ 3. Wheat
☐ 4. Rice

Question Type : MCQ

Question ID : 264330138313

Option 1 ID : 264330541860

Option 2 ID : 264330541862

Option 3 ID : 264330541861

Option 4 ID : 264330541859

Status : Answered

Chosen Option : 1

Q.4 Jama Masjid in Delhi was built by _____.

- Ans ☒ 1. Shah Jahan
☐ 2. Alauddin Khilji
☐ 3. Akbar
☐ 4. Sikandar Lodi

Question Type : MCQ

Question ID : 264330135438

Option 1 ID : 264330530662

Option 2 ID : 264330530661

Option 3 ID : 264330530660

Option 4 ID : 264330530659

Status : Answered

Chosen Option : 3

Q.5 In June 2022, Google Doodle honoured Satyendra Nath Bose, he was an/a _____.

- Ans ☐ 1. Indian Classical dancer
☒ 2. Indian Physicist
☐ 3. Indian Singer
☐ 4. Supreme Court Judge

Question Type : MCQ

Question ID : 264330138879

Option 1 ID : 264330544124

Option 2 ID : 264330544125

Option 3 ID : 264330544126

Option 4 ID : 264330544123

Status : Answered

Chosen Option : 2

Q.6 Which of the following article of Indian constitution is related with "Separation of Judiciary from Executive"?

- Ans ☒ 1. Article 50
☐ 2. Article 40
☐ 3. Article 44
☐ 4. Article 46

Question Type : MCQ
Question ID : 264330138883
Option 1 ID : 264330544142
Option 2 ID : 264330544139
Option 3 ID : 264330544140
Option 4 ID : 264330544141
Status : Answered
Chosen Option : 1

Q.7 Lata Mangeshkar recorded her first playback song for a _____ film.

- Ans ☐ 1. Bengali
☐ 2. Punjabi
☒ 3. Marathi
☐ 4. Tamil

Question Type : MCQ
Question ID : 264330138877
Option 1 ID : 264330544115
Option 2 ID : 264330544117
Option 3 ID : 264330544118
Option 4 ID : 264330544116
Status : Not Attempted and
Marked For Review
Chosen Option : --

Q.8 Jhijhiya is a famous folk dance of which of the following states?

- Ans ☐ 1. Haryana
☒ 2. Bihar
☐ 3. Rajasthan
☐ 4. Uttar Pradesh

Question Type : MCQ
Question ID : 264330138871
Option 1 ID : 264330544092
Option 2 ID : 264330544094
Option 3 ID : 264330544091
Option 4 ID : 264330544093
Status : Not Answered
Chosen Option : --

Q.9 "Thomas Cup" is related to which of the following sports?

- Ans
- ☒ 1. Football
 - ☒ 2. Cricket
 - ☒ 3. Tennis
 - ☒ 4. Badminton

Question Type : MCQ
 Question ID : 264330138900
 Option 1 ID : 264330544207
 Option 2 ID : 264330544210
 Option 3 ID : 264330544209
 Option 4 ID : 264330544208
 Status : Answered
 Chosen Option : 2

Q.10 The lowest temperature at which a substance catches fire is called its _____.

- Ans
- ☒ 1. melting point
 - ☒ 2. explosion point
 - ☒ 3. ignition temperature
 - ☒ 4. combustion temperature

Question Type : MCQ
 Question ID : 264330138912
 Option 1 ID : 264330544255
 Option 2 ID : 264330544258
 Option 3 ID : 264330544256
 Option 4 ID : 264330544257
 Status : Answered
 Chosen Option : 4

Q.11 The reproduction process in which only a single parent is involved is called _____.

- Ans
- ☒ 1. In vitro fertilization
 - ☒ 2. external fertilization
 - ☒ 3. sexual reproduction
 - ☒ 4. asexual reproduction

Question Type : MCQ
 Question ID : 264330138910
 Option 1 ID : 264330544249
 Option 2 ID : 264330544250
 Option 3 ID : 264330544247
 Option 4 ID : 264330544248
 Status : Answered
 Chosen Option : 4

Q.12 'The Inheritance of Loss' book is written by _____.

- Ans ☒ 1. Kiran Desai
☐ 2. VS Naipaul
☐ 3. Ruskin Bond
☐ 4. Salman Rushdie

Question Type : MCQ

Question ID : 264330138301

Option 1 ID : 264330541812

Option 2 ID : 264330541814

Option 3 ID : 264330541813

Option 4 ID : 264330541811

Status : Answered

Chosen Option : 1

Q.13 Which of the following is the ultimate source of energy for all living organisms?

- Ans ☐ 1. Soil
☒ 2. Sun
☐ 3. Water
☐ 4. Air

Question Type : MCQ

Question ID : 264330138884

Option 1 ID : 264330544143

Option 2 ID : 264330544144

Option 3 ID : 264330544145

Option 4 ID : 264330544146

Status : Answered

Chosen Option : 2

Q.14 Which bill led to people staging a widespread protest in Delhi, Haryana, and Punjab in September 2020?

- Ans ☒ 1. Farmers Bill
☐ 2. Central University Bill
☐ 3. Energy Conservation Bill
☐ 4. Transgender Bill

Question Type : MCQ

Question ID : 264330135435

Option 1 ID : 264330530649

Option 2 ID : 264330530647

Option 3 ID : 264330530648

Option 4 ID : 264330530650

Status : Answered

Chosen Option : 1

Q.15 The Ahmadiyya forms a sect of Islam which originated from India. It was founded by _____ in 1889.

- Ans
- ☒ 1. Mir Nisar Ali
 - ☒ 2. Haji Shariatullah
 - ☒ 3. Shah Waliullah
 - ☒ 4. Mirza Ghulam Ahmad

Question Type : MCQ

Question ID : 264330137985

Option 1 ID : 264330540549

Option 2 ID : 264330540548

Option 3 ID : 264330540550

Option 4 ID : 264330540547

Status : Not Answered

Chosen Option : --

Q.16 Kalamandalam Kalyanikutty Amma was honoured with Kalidasa Samman in 1997-1998. She was famous for which Indian classical dance form?

- Ans
- ☒ 1. Mohiniyattam
 - ☒ 2. Kuchipudi
 - ☒ 3. Odissi
 - ☒ 4. Kathak

Question Type : MCQ

Question ID : 264330138303

Option 1 ID : 264330541822

Option 2 ID : 264330541821

Option 3 ID : 264330541820

Option 4 ID : 264330541819

Status : Answered

Chosen Option : 2

Q.17 Who among the following Gupta rulers launched the Nalanda University?

- Ans
- ☒ 1. Kumaragupta
 - ☒ 2. Chandragupta II
 - ☒ 3. Skandagupta
 - ☒ 4. Vishnugupta

Question Type : MCQ

Question ID : 264330137982

Option 1 ID : 264330540537

Option 2 ID : 264330540538

Option 3 ID : 264330540536

Option 4 ID : 264330540535

Status : Answered

Chosen Option : 1

Q.18 How many silver medals were won by India in London Olympics 2012?

- Ans ☒ 1. Two
☒ 2. One
☒ 3. Three
☒ 4. Four

Question Type : MCQ
 Question ID : 264330138874
 Option 1 ID : 264330544104
 Option 2 ID : 264330544103
 Option 3 ID : 264330544105
 Option 4 ID : 264330544106
 Status : Not Answered
 Chosen Option : --

Q.19 Who was the first ruler of the Sayyid Dynasty?

- Ans ☒ 1. Khizr Khan
☒ 2. Alauddin Alam Shah
☒ 3. Muhammad Shah
☒ 4. Mubarak Khan

Question Type : MCQ
 Question ID : 264330134706
 Option 1 ID : 264330527780
 Option 2 ID : 264330527779
 Option 3 ID : 264330527782
 Option 4 ID : 264330527781
 Status : Answered
 Chosen Option : 1

Q.20 The Mughals were descendants of _____ from their father's side.

- Ans ☒ 1. Muhammad Ghori
☒ 2. Timur
☒ 3. Genghis khan
☒ 4. Mahmud of Ghazni

Question Type : MCQ
 Question ID : 264330138918
 Option 1 ID : 264330544282
 Option 2 ID : 264330544281
 Option 3 ID : 264330544279
 Option 4 ID : 264330544280
 Status : Answered
 Chosen Option : 2

Q.21 The streams of water flowing constantly on the ocean surface in definite directions are called _____.

- Ans
- ☐ 1. waves
 - ☐ 2. cyclones
 - ☐ 3. tides
 - ☒ 4. ocean currents

Question Type : MCQ

Question ID : 264330138911

Option 1 ID : 264330544251

Option 2 ID : 264330544252

Option 3 ID : 264330544253

Option 4 ID : 264330544254

Status : Answered

Chosen Option : 4

Q.22 The Yaoshang festival of Manipur is celebrated for _____ days.

- Ans
- ☐ 1. two
 - ☒ 2. five
 - ☐ 3. seven
 - ☐ 4. nine

Question Type : MCQ

Question ID : 264330137972

Option 1 ID : 264330540498

Option 2 ID : 264330540495

Option 3 ID : 264330540496

Option 4 ID : 264330540497

Status : Not Answered

Chosen Option : --

Q.23 Thorny trees and bushes are found in which part of India?

- Ans
- ☐ 1. Eastern
 - ☐ 2. Southern
 - ☒ 3. North – western
 - ☐ 4. North – Eastern

Question Type : MCQ

Question ID : 264330138889

Option 1 ID : 264330544164

Option 2 ID : 264330544165

Option 3 ID : 264330544163

Option 4 ID : 264330544166

Status : Not Answered

Chosen Option : --

Q.24 In November 2022, Indian Coast Guard Advanced Light Helicopter Mk-III squadron, 840 Sqn (CG), commissioned in _____.

- Ans ☒ 1. Chennai
☒ 2. Kanpur
☒ 3. Puri
☒ 4. Mysore

Question Type : MCQ
 Question ID : 264330138880
 Option 1 ID : 264330544128
 Option 2 ID : 264330544127
 Option 3 ID : 264330544130
 Option 4 ID : 264330544129
 Status : Answered
 Chosen Option : 4

Q.25 In countries like Japan, _____ birth rates make the population pyramid _____ at the base.

- Ans ☒ 1. Low, Broad
☒ 2. High, Broad
☒ 3. Low, Narrow
☒ 4. High, Narrow

Question Type : MCQ
 Question ID : 264330138916
 Option 1 ID : 264330544274
 Option 2 ID : 264330544272
 Option 3 ID : 264330544273
 Option 4 ID : 264330544271
 Status : Not Answered
 Chosen Option : --

Section : English Language and Comprehension

Q.1 Select the appropriate synonym for the underlined word.

Go back to your image description.

- Ans ☒ 1. Definition
☒ 2. Deception
☒ 3. Plan
☒ 4. Function

Question Type : MCQ
 Question ID : 264330136837
 Option 1 ID : 264330536040
 Option 2 ID : 264330536041
 Option 3 ID : 264330536039
 Option 4 ID : 264330536042
 Status : Answered
 Chosen Option : 1

Q.2 Choose the word that can substitute the given group of words.
Disease that spreads over a whole country or the whole world

- Ans ☒ 1. Pandemic
☐ 2. Rustic
☐ 3. Panacea
☐ 4. Epidermis

Question Type : MCQ
Question ID : 264330136861
Option 1 ID : 264330536133
Option 2 ID : 264330536131
Option 3 ID : 264330536134
Option 4 ID : 264330536132
Status : Answered
Chosen Option : 1

Q.3 Find the part of the given sentence that has an error in it. If there is no error, choose 'No error'.
The radio data shows neither evidence for ongoing jet activity.

- Ans ☐ 1. The radio data shows
☒ 2. neither evidence for
☐ 3. No error
☐ 4. ongoing jet activity.

Question Type : MCQ
Question ID : 264330136848
Option 1 ID : 264330536083
Option 2 ID : 264330536084
Option 3 ID : 264330536086
Option 4 ID : 264330536085
Status : Answered
Chosen Option : 2

Q.4 Find the part of the given sentence that has an error in it. If there is no error, choose 'No error'.
If I was a clown, I would have made everyone smile.

- Ans ☐ 1. everyone smile.
☐ 2. I would have made
☒ 3. If I was a clown,
☐ 4. No error

Question Type : MCQ
Question ID : 264330136823
Option 1 ID : 264330535989
Option 2 ID : 264330535988
Option 3 ID : 264330535987
Option 4 ID : 264330535990
Status : Answered
Chosen Option : 2

Q.5 Select the most appropriate option to fill in the blank.

According to the politician, using vulgar language to _____ votes is not something he will endorse.

- Ans
- ☒ 1. segregate
 - ☒ 2. divulge
 - ☒ 3. lump
 - ☒ 4. garner

Question Type : MCQ

Question ID : 264330136846

Option 1 ID : 264330536078

Option 2 ID : 264330536075

Option 3 ID : 264330536077

Option 4 ID : 264330536076

Status : Not Answered

Chosen Option : --

Q.6 Improve the underlined part of the sentence. Choose 'No improvement' as an answer if the sentence is grammatically correct.

The teacher had reading the instructions aloud to the students.

- Ans
- ☒ 1. had been read the
 - ☒ 2. reading the
 - ☒ 3. No improvement
 - ☒ 4. had read the

Question Type : MCQ

Question ID : 264330136851

Option 1 ID : 264330536097

Option 2 ID : 264330536095

Option 3 ID : 264330536098

Option 4 ID : 264330536096

Status : Answered

Chosen Option : 4

Q.7 Find the part of the given sentence that has an error in it. If there is no error, choose 'No error'.

Peoples might confess just to get out of the interrogation room.

- Ans
- ☒ 1. No error
 - ☒ 2. Peoples might confess
 - ☒ 3. just to get out of
 - ☒ 4. the interrogation room.

Question Type : MCQ

Question ID : 264330134477

Option 1 ID : 264330526878

Option 2 ID : 264330526875

Option 3 ID : 264330526876

Option 4 ID : 264330526877

Status : Answered

Chosen Option : 2

Q.8 Select the appropriate antonym for the underlined word.

The new government's domestic policies could easily undermine the main foreign policy.

- Ans
- ☒ 1. Cripple
 - ☒ 2. Weaken
 - ☒ 3. Spoil
 - ☒ 4. Enhance

Question Type : MCQ

Question ID : 264330136840

Option 1 ID : 264330536052

Option 2 ID : 264330536051

Option 3 ID : 264330536053

Option 4 ID : 264330536054

Status : Answered

Chosen Option : 4

Q.9 Select the most appropriate option to fill in the blank.

I was really hoping to _____ a decent movie this time, and I came up with an undisputed classic.

- Ans
- ☒ 1. tirade
 - ☒ 2. subside
 - ☒ 3. unearth
 - ☒ 4. strut

Question Type : MCQ

Question ID : 264330136533

Option 1 ID : 264330534874

Option 2 ID : 264330534873

Option 3 ID : 264330534872

Option 4 ID : 264330534871

Status : Not Answered

Chosen Option : --

Q.10 Choose the incorrectly spelt word.

- Ans
- ☒ 1. Wider
 - ☒ 2. Glovve
 - ☒ 3. Hide
 - ☒ 4. Fold

Question Type : MCQ

Question ID : 264330136843

Option 1 ID : 264330536065

Option 2 ID : 264330536063

Option 3 ID : 264330536064

Option 4 ID : 264330536066

Status : Answered

Chosen Option : 2

Q.11 In the following question, out of the given four alternatives, select the alternative which best expresses the meaning of the Idiom/Phrase.
The black sheep

- Ans**
- ☒ 1. A day of importance
 - ☒ 2. A stupid or foolish person
 - ☒ 3. A friend who betrays
 - ☒ 4. The least reputable member of a group

Question Type : **MCQ**
Question ID : **264330136842**
Option 1 ID : **264330536061**
Option 2 ID : **264330536059**
Option 3 ID : **264330536062**
Option 4 ID : **264330536060**
Status : **Answered**
Chosen Option : **2**

Q.12 Improve the underlined part of the sentence. Choose 'No improvement' as an answer if the sentence is grammatically correct.

The comedian's jokes are so bad that audiences usually groaning instead of laugh.

- Ans**
- ☒ 1. usually groan instead of
 - ☒ 2. usual groan instead off
 - ☒ 3. usual groaned despite of
 - ☒ 4. No improvement

Question Type : **MCQ**
Question ID : **264330136852**
Option 1 ID : **264330536099**
Option 2 ID : **264330536100**
Option 3 ID : **264330536101**
Option 4 ID : **264330536102**
Status : **Answered**
Chosen Option : **1**

Q.13 Select the wrongly spelt word.

- Ans**
- ☒ 1. pernicious
 - ☒ 2. prefunctory
 - ☒ 3. pariah
 - ☒ 4. peripheral

Question Type : **MCQ**
Question ID : **264330136532**
Option 1 ID : **264330534870**
Option 2 ID : **264330534868**
Option 3 ID : **264330534867**
Option 4 ID : **264330534869**
Status : **Answered**
Chosen Option : **2**

Q.14 Fill in the blank with the most appropriate option.

The pudding fell _____ floor with a heart-stopping crash.

- Ans
- ☐ 1. upon the
 - ☐ 2. up to the
 - ☐ 3. in to the
 - ☒ 4. to the

Question Type : MCQ
 Question ID : 264330136620
 Option 1 ID : 264330535207
 Option 2 ID : 264330535209
 Option 3 ID : 264330535208
 Option 4 ID : 264330535210
 Status : Answered
 Chosen Option : 1

Q.15 A sentence has been given with a blank to be filled with an appropriate option. Choose the correct alternative.
 Apple's success attracted the _____ of the computer giant IBM.

- Ans
- ☐ 1. attending
 - ☐ 2. attend
 - ☒ 3. attention
 - ☐ 4. attentive

Question Type : MCQ
 Question ID : 264330136827
 Option 1 ID : 264330536005
 Option 2 ID : 264330536004
 Option 3 ID : 264330536003
 Option 4 ID : 264330536006
 Status : Answered
 Chosen Option : 3

Q.16 Choose the word that can substitute the given group of words.

A place of refugee

- Ans
- ☐ 1. Home
 - ☒ 2. Asylum
 - ☐ 3. Shelter
 - ☐ 4. Hospice

Question Type : MCQ
 Question ID : 264330136836
 Option 1 ID : 264330536036
 Option 2 ID : 264330536037
 Option 3 ID : 264330536035
 Option 4 ID : 264330536038
 Status : Answered
 Chosen Option : 2

Q.17 Select the word from the options which is similar in meaning to the bracketed word given in the sentence below.

I had a (toddler) at home and two other children at school.

- Ans**
- ☒ 1. ancient
 - ☒ 2. adult
 - ☒ 3. newborn
 - ☒ 4. senior

Question Type : **MCQ**
 Question ID : **264330136604**
 Option 1 ID : **264330535146**
 Option 2 ID : **264330535144**
 Option 3 ID : **264330535143**
 Option 4 ID : **264330535145**
 Status : **Answered**
 Chosen Option : **3**

Q.18 Improve the underlined part of the sentence. Choose 'No improvement' as an answer if the sentence is grammatically correct.

In the logo, the blue contrast wells with its complementary colour, yellow.

- Ans**
- ☒ 1. No improvement
 - ☒ 2. contrast well
 - ☒ 3. contrast we'll
 - ☒ 4. contrasts well

Question Type : **MCQ**
 Question ID : **264330135311**
 Option 1 ID : **264330530158**
 Option 2 ID : **264330530156**
 Option 3 ID : **264330530157**
 Option 4 ID : **264330530155**
 Status : **Answered**
 Chosen Option : **4**

Q.19 In the following question, out of the given four alternatives, select the alternative which best expresses the meaning of the Idiom/Phrase.
 Draw a blank

- Ans**
- ☒ 1. Give lame excuses
 - ☒ 2. A very complex question
 - ☒ 3. Ragging of a fresher
 - ☒ 4. To fail to get an answer or result

Question Type : **MCQ**
 Question ID : **264330136867**
 Option 1 ID : **264330536156**
 Option 2 ID : **264330536158**
 Option 3 ID : **264330536155**
 Option 4 ID : **264330536157**
 Status : **Answered**
 Chosen Option : **4**

Q.20 Choose the word that is opposite in meaning to the given word.

Impossible

- Ans
- ☒ 1. Shaky
 - ☒ 2. Applicable
 - ☒ 3. Unsure
 - ☒ 4. Unlikely

Question Type : MCQ

Question ID : 264330135196

Option 1 ID : 264330529713

Option 2 ID : 264330529714

Option 3 ID : 264330529711

Option 4 ID : 264330529712

Status : Answered

Chosen Option : 2

Comprehension:

In the following passage some of the words have been deleted. Read the passage carefully and select the correct answer for the given blank out of the four alternatives.

These people remind me of a harmony that exists with the natural world. They know their environment in a (1) _____ that can only be acquired (2) _____ living on equal footing with the natural world, not in (3) _____ through a recognition that humans are dependent (4) _____ our surroundings, something those of us who live in towns and cities too (5) _____ forget.

SubQuestion No : 21

Q.21 Select the most appropriate option to fill in blank number 1.

- Ans
- ☒ 1. line
 - ☒ 2. way
 - ☒ 3. time
 - ☒ 4. style

Question Type : MCQ

Question ID : 264330135187

Option 1 ID : 264330529677

Option 2 ID : 264330529675

Option 3 ID : 264330529676

Option 4 ID : 264330529678

Status : Answered

Chosen Option : 2

Comprehension:

In the following passage some of the words have been deleted. Read the passage carefully and select the correct answer for the given blank out of the four alternatives.

These people remind me of a harmony that exists with the natural world. They know their environment in a (1) _____ that can only be acquired (2) _____ living on equal footing with the natural world, not in (3) _____ through a recognition that humans are dependent (4) _____ our surroundings, something those of us who live in towns and cities too (5) _____ forget.

SubQuestion No : 22

Q.22 Select the most appropriate option to fill in blank number 2.

- Ans
- ☒ 1. for
 - ☒ 2. through
 - ☐ 3. to
 - ☐ 4. with

Question Type : MCQ
 Question ID : 264330135188
 Option 1 ID : 264330529680
 Option 2 ID : 264330529682
 Option 3 ID : 264330529681
 Option 4 ID : 264330529679
 Status : Answered
 Chosen Option : 3

Comprehension:

In the following passage some of the words have been deleted. Read the passage carefully and select the correct answer for the given blank out of the four alternatives.

These people remind me of a harmony that exists with the natural world. They know their environment in a (1) _____ that can only be acquired (2) _____ living on equal footing with the natural world, not in (3) _____ through a recognition that humans are dependent (4) _____ our surroundings, something those of us who live in towns and cities too (5) _____ forget.

SubQuestion No : 23

Q.23 Select the most appropriate option to fill in blank number 3.

- Ans
- ☒ 1. domination
 - ☐ 2. opposition
 - ☐ 3. corporation
 - ☐ 4. collection

Question Type : MCQ
 Question ID : 264330135189
 Option 1 ID : 264330529684
 Option 2 ID : 264330529685
 Option 3 ID : 264330529686
 Option 4 ID : 264330529683
 Status : Not Answered
 Chosen Option : --

Comprehension:

In the following passage some of the words have been deleted. Read the passage carefully and select the correct answer for the given blank out of the four alternatives.

These people remind me of a harmony that exists with the natural world. They know their environment in a (1) _____ that can only be acquired (2) _____ living on equal footing with the natural world, not in (3) _____ through a recognition that humans are dependent (4) _____ our surroundings, something those of us who live in towns and cities too (5) _____ forget.

SubQuestion No : 24

Q.24 Select the most appropriate option to fill in blank number 4.

- Ans ☒ 1. on
☒ 2. to
☒ 3. in
☒ 4. of

Question Type : MCQ

Question ID : 264330135190

Option 1 ID : 264330529688

Option 2 ID : 264330529690

Option 3 ID : 264330529689

Option 4 ID : 264330529687

Status : Answered

Chosen Option : 1

Comprehension:

In the following passage some of the words have been deleted. Read the passage carefully and select the correct answer for the given blank out of the four alternatives.

These people remind me of a harmony that exists with the natural world. They know their environment in a (1) _____ that can only be acquired (2) _____ living on equal footing with the natural world, not in (3) _____ through a recognition that humans are dependent (4) _____ our surroundings, something those of us who live in towns and cities too (5) _____ forget.

SubQuestion No : 25

Q.25 Select the most appropriate option to fill in blank number 5.

- Ans ☒ 1. highly
☒ 2. marginally
☒ 3. easily
☒ 4. equally

Question Type : MCQ

Question ID : 264330135191

Option 1 ID : 264330529692

Option 2 ID : 264330529693

Option 3 ID : 264330529694

Option 4 ID : 264330529691

Status : Answered

Chosen Option : 3