

Multi Tasking Non Technical Staff and Havaladar CBIC and CBN Examination 2022

| | |
|----------------|--|
| Roll Number | |
| Candidate Name | |
| Venue Name | TCS Gito Bitan |
| Exam Date | 11/05/2023 |
| Exam Time | 12:00 PM - 2:00 PM |
| Subject | MTS Non Tech Havaladar CBIC and CBN Examination 2022 |

Section : Numerical and Mathematical Ability

Q.1 A car travels from A to B at 44 km/hr and returns from B to A at 66 km/hr. Find its average speed during the whole journey.

- Ans**
- ☒ 1. 63.3 km/hr
 - ☒ 2. 52.8 km/hr
 - ☒ 3. 68.2 km/hr
 - ☒ 4. 55.4 km/hr

Question Type : MCQ

Question ID : 264330135395

Option 1 ID : 264330530487

Option 2 ID : 264330530489

Option 3 ID : 264330530490

Option 4 ID : 264330530488

Status : Answered

Chosen Option : 2

Q.2 The value of $0.005 \times [(0.08 \div 0.002) - (0.012 \div 0.04)] \div 0.01$ is:

- Ans**
- ☒ 1. 0.985
 - ☒ 2. 0.01985
 - ☒ 3. 0.1985
 - ☒ 4. 19.85

Question Type : MCQ

Question ID : 264330133797

Option 1 ID : 264330524214

Option 2 ID : 264330524212

Option 3 ID : 264330524213

Option 4 ID : 264330524211

Status : Answered

Chosen Option : 4

Test Prime

**ALL EXAMS,
ONE SUBSCRIPTION**



70,000+
Mock Tests



**Personalised
Report Card**



**Unlimited
Re-Attempt**



600+
Exam Covered



**Previous Year
Papers**



**500%
Refund**



ATTEMPT FREE MOCK NOW

Q.3 A man alone can do a piece of work in 16 days, but with the help of his friend, he can do it in 8 days. In what time can his friend do it alone?

- Ans**
- ☒ 1. 12 days
 - ☒ 2. 14 days
 - ☒ 3. 16 days
 - ☒ 4. 10 days

Question Type : **MCQ**
 Question ID : **264330138361**
 Option 1 ID : **264330542052**
 Option 2 ID : **264330542053**
 Option 3 ID : **264330542054**
 Option 4 ID : **264330542051**
 Status : **Answered**
 Chosen Option : **3**

Q.4 In a rectangle, diagonal is 4 times of its breadth. The ratio of length to breadth is:

- Ans**
- ☒ 1. $\sqrt{15} : 1$
 - ☒ 2. $1 : \sqrt{5}$
 - ☒ 3. $1 : 5$
 - ☒ 4. $\sqrt{5} : 1$

Question Type : **MCQ**
 Question ID : **264330138365**
 Option 1 ID : **264330542069**
 Option 2 ID : **264330542067**
 Option 3 ID : **264330542068**
 Option 4 ID : **264330542070**
 Status : **Not Answered**
 Chosen Option : **--**

Q.5 The following table shows the present share of 5 partners of a company. If the company has issued its 100000 shares between its five partners and Raju sell 15200 of his shares to Ramesh, then how many shares will Ramesh have?

| Partners | Present Share (in %) |
|----------|----------------------|
| Bala | 5 |
| Shankar | 15 |
| Raju | 45 |
| Ramesh | 25 |
| Pradeep | 10 |

- Ans**
- ☒ 1. 29800
 - ☒ 2. 45000
 - ☒ 3. 25000
 - ☒ 4. 40200

Question Type : **MCQ**
 Question ID : **264330133811**
 Option 1 ID : **264330524268**
 Option 2 ID : **264330524269**
 Option 3 ID : **264330524267**
 Option 4 ID : **264330524270**
 Status : **Answered**
 Chosen Option : **4**

Q.6 A man covers half part of a certain distance at 60 km/hr. He covers 40 percent of remaining distance at the speed of 12 km/hr and covers rest of the distance at the speed of 18 km/hr. What is his average speed for the entire journey?

- Ans**
- ✓ 1. 24 km/hr
 - ✗ 2. 58/3 km/hr
 - ✗ 3. 36 km/hr
 - ✗ 4. 40 km/hr

Question Type : **MCQ**

Question ID : **264330135044**

Option 1 ID : **264330529111**

Option 2 ID : **264330529114**

Option 3 ID : **264330529112**

Option 4 ID : **264330529113**

Status : **Answered**

Chosen Option : **1**

Q.7 The marked price of a chair is 10 percent more than its cost price. If the chair is sold for Rs.300 after a discount of Rs.140, then what will be the loss percentage?

- Ans**
- ✗ 1. 20 percent
 - ✗ 2. 12.5 percent
 - ✓ 3. 25 percent
 - ✗ 4. 17 percent

Question Type : **MCQ**

Question ID : **264330135055**

Option 1 ID : **264330529155**

Option 2 ID : **264330529157**

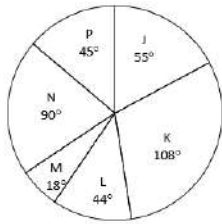
Option 3 ID : **264330529156**

Option 4 ID : **264330529158**

Status : **Answered**

Chosen Option : **3**

- Q.8** The pie chart given below shows the number of trucks manufactured by six companies in a year. Total trucks manufactured by all these six companies are 1440. Number of trucks manufactured by a particular company is shown in terms of degree with respect to the total number of trucks manufactured by all these six companies.



What is difference between the average number of trucks manufactured by K and P and the average number of trucks manufactured by J and M?

- Ans** ☒ 1. 160
☒ 2. 176
☒ 3. 190
☒ 4. 162

Question Type : **MCQ**
 Question ID : **264330135063**
 Option 1 ID : **264330529188**
 Option 2 ID : **264330529190**
 Option 3 ID : **264330529189**
 Option 4 ID : **264330529187**
 Status : **Answered**
 Chosen Option : 1

- Q.9** What will be the volume of sphere with radius 65 cm ? (approximately)

- Ans** ☒ 1. $4.5 \times 10^6 \text{ cm}^3$
☒ 2. $6 \times 10^6 \text{ cm}^3$
☒ 3. $1.15 \times 10^6 \text{ cm}^3$
☒ 4. $2 \times 10^6 \text{ cm}^3$

Question Type : **MCQ**
 Question ID : **264330135106**
 Option 1 ID : **264330529360**
 Option 2 ID : **264330529362**
 Option 3 ID : **264330529359**
 Option 4 ID : **264330529361**
 Status : **Answered**
 Chosen Option : 1

Q.10 Rimmi and Simmi can together finish a work in 40 days. They worked together for 30 days and then Simmi left. After another 30 days, Rimmi finished the remaining work alone. In how many days Rimmi alone can finish the work?

- Ans** ☒ 1. 120 days
☒ 2. 30 days
☒ 3. 80 days
☒ 4. 40 days

Question Type : **MCQ**
 Question ID : **264330134095**
 Option 1 ID : **264330525406**
 Option 2 ID : **264330525403**
 Option 3 ID : **264330525405**
 Option 4 ID : **264330525404**
 Status : **Answered**
 Chosen Option : 1

Q.11 If A is 6 times more than B, then B is what percentage less than A?

- Ans** ☒ 1. 33.33 percent
☒ 2. 28.56 percent
☒ 3. 14.28 percent
☒ 4. 85.71 percent

Question Type : **MCQ**
 Question ID : **264330137136**
 Option 1 ID : **264330537187**
 Option 2 ID : **264330537189**
 Option 3 ID : **264330537190**
 Option 4 ID : **264330537188**
 Status : **Not Answered**
 Chosen Option : --

Q.12 If $(3x + y) : (3x - y) = 4 : 3$, then what is the value of $x : y$?

- Ans** ☒ 1. 5 : 3
☒ 2. 7 : 3
☒ 3. 5 : 2
☒ 4. 7 : 4

Question Type : **MCQ**
 Question ID : **264330135051**
 Option 1 ID : **264330529140**
 Option 2 ID : **264330529139**
 Option 3 ID : **264330529142**
 Option 4 ID : **264330529141**
 Status : **Answered**
 Chosen Option : 2

Q.13 What is the volume of a cone whose base diameter is 12 cm and the height is 21.7 cm?

- Ans**
- ☒ 1. 626.3 cm^3
 - ☒ 2. 548.6 cm^3
 - ☒ 3. 818.4 cm^3
 - ☒ 4. 334.5 cm^3

Question Type : **MCQ**

Question ID : **264330134100**

Option 1 ID : **264330525423**

Option 2 ID : **264330525424**

Option 3 ID : **264330525426**

Option 4 ID : **264330525425**

Status : **Answered**

Chosen Option : **3**

Q.14 There is a circular path around a sports field. Rahul takes 15 minutes to drive one round of the field, while Anil takes 18 minutes for the same. Suppose they both start from the same point and at the same time, and go in the same direction. After how many minutes will they meet again at the starting point?

- Ans**
- ☒ 1. 120
 - ☒ 2. 100
 - ☒ 3. 80
 - ☒ 4. 90

Question Type : **MCQ**

Question ID : **264330135059**

Option 1 ID : **264330529172**

Option 2 ID : **264330529173**

Option 3 ID : **264330529171**

Option 4 ID : **264330529174**

Status : **Answered**

Chosen Option : **4**

Q.15 A and B started a business with Rs.15000 and Rs.30000 respectively. If A and B share profit in the ratio of 1 : 5 respectively, then what is the ratio of the time period of investment for A and B respectively?

- Ans**
- ☒ 1. 1 : 2
 - ☒ 2. 2 : 5
 - ☒ 3. 2 : 3
 - ☒ 4. 2 : 7

Question Type : **MCQ**

Question ID : **264330135052**

Option 1 ID : **264330529145**

Option 2 ID : **264330529144**

Option 3 ID : **264330529143**

Option 4 ID : **264330529146**

Status : **Not Answered**

Chosen Option : **--**

Q.16 A person lent certain sum of money at the rate of 6 percent per annum on simple interest and the interest received in 13 years is Rs. 220 less than the sum lent. What is the sum lent?

- Ans**
- ✓ 1. Rs. 1000
 - ✗ 2. Rs. 600
 - ✗ 3. Rs. 800
 - ✗ 4. Rs. 1200

Question Type : **MCQ**

Question ID : **264330137141**

Option 1 ID : **264330537208**

Option 2 ID : **264330537207**

Option 3 ID : **264330537210**

Option 4 ID : **264330537209**

Status : **Answered**

Chosen Option : **1**

Q.17 A mixture contains milk and water in a ratio of 9:5. When 6 litres of water is added to this mixture, the ratio of milk and water becomes 9:7. Find the quantity of milk in the mixture

- Ans**
- ✗ 1. 30 litres
 - ✗ 2. 18 litres
 - ✓ 3. 27 litres
 - ✗ 4. 15 litres

Question Type : **MCQ**

Question ID : **264330135394**

Option 1 ID : **264330530483**

Option 2 ID : **264330530485**

Option 3 ID : **264330530486**

Option 4 ID : **264330530484**

Status : **Not Answered**

Chosen Option : **--**

Q.18 What is the value of $\frac{196}{7} \div \frac{35}{12}$ of $\frac{132}{55} \times \frac{45}{20}$?

- Ans**
- ✗ 1. 45
 - ✗ 2. 36
 - ✗ 3. 4
 - ✓ 4. 9

Question Type : **MCQ**

Question ID : **264330137681**

Option 1 ID : **264330539334**

Option 2 ID : **264330539333**

Option 3 ID : **264330539331**

Option 4 ID : **264330539332**

Status : **Answered**

Chosen Option : **4**

Q.19 On a sum, simple interest at the annual rate of 12 percent for 6 years is Rs. 28800. What will be the compound interest on the same sum at the annual rate of 20 percent (compounding annually) for 2 years?

- Ans** ☒ 1. Rs. 17600
☒ 2. Rs. 19200
☒ 3. Rs. 12000
☒ 4. Rs. 14400

Question Type : **MCQ**
 Question ID : **264330137164**
 Option 1 ID : **264330537299**
 Option 2 ID : **264330537300**
 Option 3 ID : **264330537302**
 Option 4 ID : **264330537301**
 Status : **Answered**
 Chosen Option : **1**

Q.20 Cost price of a cooler is Rs. 4800. If the profit percentage is 26 percent, then what is the selling price of the cooler?

- Ans** ☒ 1. Rs.6248
☒ 2. Rs.6048
☒ 3. Rs.6640
☒ 4. Rs.5628

Question Type : **MCQ**
 Question ID : **264330137181**
 Option 1 ID : **264330537369**
 Option 2 ID : **264330537368**
 Option 3 ID : **264330537370**
 Option 4 ID : **264330537367**
 Status : **Answered**
 Chosen Option : **2**

Section : Reasoning Ability and Problem Solving

Q.1 Study the given pattern carefully and select the number that can replace the question mark (?) in it.

First row- 80, 40, 20
 Second row- 112, 56, 28
 Third row- 244, 122, ?

- Ans** ☒ 1. 61
☒ 2. 51
☒ 3. 78
☒ 4. 64

Question Type : **MCQ**
 Question ID : **264330134948**
 Option 1 ID : **264330528730**
 Option 2 ID : **264330528727**
 Option 3 ID : **264330528729**
 Option 4 ID : **264330528728**
 Status : **Answered**
 Chosen Option : **1**

Q.2 Seven people A, B, C, D, E, F, and G have different heights. A is taller than four other people. E is shorter than only one person. The height of how many people is between the height of A and E?

- Ans**
- ☒ 1. 2
 - ☒ 2. 3
 - ☒ 3. 0
 - ☒ 4. 1

Question Type : **MCQ**
 Question ID : **264330134942**
 Option 1 ID : **264330528704**
 Option 2 ID : **264330528705**
 Option 3 ID : **264330528706**
 Option 4 ID : **264330528703**
 Status : **Answered**
 Chosen Option : **1**

Q.3 Which of the following letters will replace the question mark (?) in the given series?
 H, J, L, N, P, R, T, ?

- Ans**
- ☒ 1. M
 - ☒ 2. T
 - ☒ 3. V
 - ☒ 4. R

Question Type : **MCQ**
 Question ID : **264330134932**
 Option 1 ID : **264330528665**
 Option 2 ID : **264330528664**
 Option 3 ID : **264330528663**
 Option 4 ID : **264330528666**
 Status : **Answered**
 Chosen Option : **3**

Q.4 In a certain code language, 'HANDLE' is coded as 'FLENBH'. What is the code for 'LOVELY' in that code language?

- Ans**
- ☒ 1. ZLFVLP
 - ☒ 2. XLFVPL
 - ☒ 3. ZLVFPL
 - ☒ 4. ZLFVPL

Question Type : **MCQ**
 Question ID : **264330135567**
 Option 1 ID : **264330531167**
 Option 2 ID : **264330531169**
 Option 3 ID : **264330531170**
 Option 4 ID : **264330531168**
 Status : **Answered**
 Chosen Option : **4**

Q.5 A, B, C, D, and E are standing in a row facing north. A is standing at one of the corners. B and C are standing adjacent to each other. D is standing second from the left corner. E stands third to the left of C. Who stands adjacent to A?

- Ans** ☒ 1. C
☒ 2. B
☒ 3. E
☒ 4. D

Question Type : **MCQ**
 Question ID : **264330134940**
 Option 1 ID : **264330528698**
 Option 2 ID : **264330528697**
 Option 3 ID : **264330528695**
 Option 4 ID : **264330528696**
 Status : **Not Answered**
 Chosen Option : --

Q.6 Which of the following numbers will replace the question mark (?) in the given series?
 15, 23, 19, 20, 23, 17, 27, 14, 31, 11, ?

- Ans** ☒ 1. 35
☒ 2. 15
☒ 3. 19
☒ 4. 32

Question Type : **MCQ**
 Question ID : **264330134946**
 Option 1 ID : **264330528722**
 Option 2 ID : **264330528719**
 Option 3 ID : **264330528721**
 Option 4 ID : **264330528720**
 Status : **Answered**
 Chosen Option : 1

Q.7 Five friends M, N, O, P and Q sit around a circular table facing away from the centre. O is sitting to the immediate left of P who sits third to the right of Q. M does not sit adjacent to P. Who sits to the immediate right of P?

- Ans** ☒ 1. N
☒ 2. Q
☒ 3. O
☒ 4. M

Question Type : **MCQ**
 Question ID : **264330134941**
 Option 1 ID : **264330528699**
 Option 2 ID : **264330528701**
 Option 3 ID : **264330528702**
 Option 4 ID : **264330528700**
 Status : **Not Answered**
 Chosen Option : --

Q.8 In a certain code language, 'BEAR' is written as '2519' and 'TURN' is written as '2395'. How will 'SING' be written in that language?

- Ans**
- ☒ 1. 1498
 - ☒ 2. 1579
 - ☒ 3. 1957
 - ☒ 4. 1597

Question Type : **MCQ**

Question ID : **264330137857**

Option 1 ID : **264330540038**

Option 2 ID : **264330540035**

Option 3 ID : **264330540037**

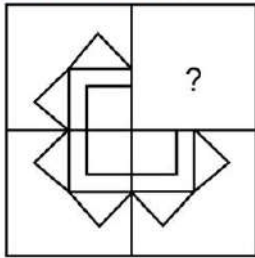
Option 4 ID : **264330540036**

Status : **Answered**

Chosen Option : **3**



Q.9 Select the option figure that will replace the question mark (?) in the figure given below to complete the pattern.
(Rotation is not allowed)

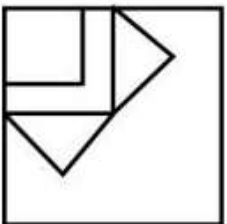


Ans

✓ 1.



✗ 2.



✗ 3.



✗ 4.



Question Type : **MCQ**

Question ID : **264330134953**

Option 1 ID : **264330528750**

Option 2 ID : **264330528747**

Option 3 ID : **264330528748**

Option 4 ID : **264330528749**

Status : **Answered**

Chosen Option : **1**

Q.10 Which two numbers should be interchanged to make the given equation correct?

$$8 \times 4 - 3 + 57 \div 9 = 42$$

- Ans
- ☒ 1. 8 and 4
 - ☒ 2. 3 and 9
 - ☒ 3. 57 and 9
 - ☒ 4. 42 and 57

Question Type : MCQ

Question ID : 264330134949

Option 1 ID : 264330528731

Option 2 ID : 264330528732

Option 3 ID : 264330528733

Option 4 ID : 264330528734

Status : Answered

Chosen Option : 2

Q.11 After interchanging the given two numbers what will be the values of equation (I) and (II) respectively?

7 and 8

I. $5 \times 7 + 6 \div 2 - 8$

II. $8 + 3 \times 7 - 5 \div 1$

- Ans
- ☒ 1. 36 and 26
 - ☒ 2. 20 and 18
 - ☒ 3. 36 and 16
 - ☒ 4. 20 and 19

Question Type : MCQ

Question ID : 264330137126

Option 1 ID : 264330537148

Option 2 ID : 264330537150

Option 3 ID : 264330537149

Option 4 ID : 264330537147

Status : Answered

Chosen Option : 1

Q.12 Select the option that is related to the sixth number in the same way as the first number is related to the second number and third number is related to fourth number.

$$12 : 132 :: 8 : 56 :: 7 : 20$$

- Ans
- ☒ 1. 5
 - ☒ 2. 6
 - ☒ 3. 7
 - ☒ 4. 4

Question Type : MCQ

Question ID : 264330137101

Option 1 ID : 264330537047

Option 2 ID : 264330537049

Option 3 ID : 264330537050

Option 4 ID : 264330537048

Status : Answered

Chosen Option : 1

Q.13 Two statements are given followed by two conclusions numbered I and II. Assuming the statements to be true, even if they seem to be at variance with commonly known facts, decide which of the conclusions logically follow(s) from the statements.

Statements:

All rats are roads.

All roads are bags.

Conclusions:

I. All bags are rats.

II. Some bags are rats.

- Ans**
- ☒ 1. Only conclusion I follows
 - ☒ 2. Only conclusion II follows
 - ☒ 3. Both conclusions I and II follow
 - ☒ 4. Neither conclusion I nor II follows

Question Type : MCQ

Question ID : 264330134943

Option 1 ID : 264330528707

Option 2 ID : 264330528708

Option 3 ID : 264330528709

Option 4 ID : 264330528710

Status : Answered

Chosen Option : 2

Q.14 Select the correct mirror image of the given figure when the mirror is placed at MN as shown below.

TECHNICAL

M
N

- Ans**
- ☒ 1. L I C A I H C E T
 - ☒ 2. T E C H N I C A L
 - ☒ 3. L A C I N I H C E T
 - ☒ 4. T E C H N I C I L

Question Type : MCQ

Question ID : 264330133524

Option 1 ID : 264330523128

Option 2 ID : 264330523130

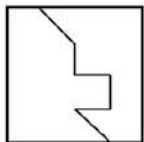
Option 3 ID : 264330523127

Option 4 ID : 264330523129

Status : Answered

Chosen Option : 3

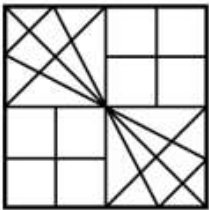
Q.15 Select the option figure in which the given figure (X) is embedded as its part (rotation is NOT allowed).



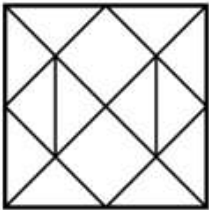
(X)

Ans

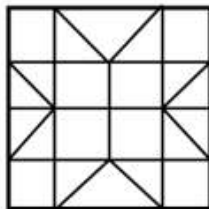
✗ 1.



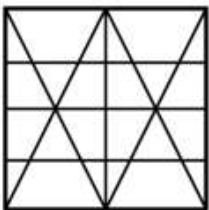
✗ 2.



✓ 3.



✗ 4.



Question Type : MCQ
Question ID : 264330133523
Option 1 ID : 264330523125
Option 2 ID : 264330523123
Option 3 ID : 264330523126
Option 4 ID : 264330523124
Status : Answered
Chosen Option : 3

Q.16 Select the option that is related to the fifth term in the same way as the second term is related to the first term and fourth term is related to third term.

RK46 : TJ51 :: PJ129 : RI134 :: SR53 : ?

- Ans**
- ☒ 1. VS58
 - ☒ 2. VR58
 - ☒ 3. VQ58
 - ☒ 4. UQ58

Question Type : MCQ

Question ID : 264330138830

Option 1 ID : 264330543928

Option 2 ID : 264330543930

Option 3 ID : 264330543927

Option 4 ID : 264330543929

Status : Answered

Chosen Option : 4

Q.17 Three statements are given followed by two conclusions numbered I and II. Assuming the statements to be true, even if they seem to be at variance with commonly known facts, decide which of the conclusions logically follow(s) from the statements.

Statements:

Some fruits are rabbits.

No rabbit is fox.

All foxes are cows.

Conclusions:

I. Some cows are fruits.

II. Some fruits are foxes.

- Ans**
- ☒ 1. Only conclusion I follows
 - ☒ 2. Both conclusions I and II follow
 - ☒ 3. Neither conclusion I nor II follows
 - ☒ 4. Only conclusion II follows

Question Type : MCQ

Question ID : 264330134944

Option 1 ID : 264330528711

Option 2 ID : 264330528713

Option 3 ID : 264330528714

Option 4 ID : 264330528712

Status : Answered

Chosen Option : 3

Q.18 Select the option that is related to the third letter cluster in the same way as the second letter cluster is related to the first letter cluster.

DG : KN :: JM : ?

- Ans**
- ☒ 1. RM
 - ☒ 2. QT
 - ☒ 3. ST
 - ☒ 4. QS

Question Type : MCQ

Question ID : 264330134934

Option 1 ID : 264330528672

Option 2 ID : 264330528673

Option 3 ID : 264330528674

Option 4 ID : 264330528671

Status : Answered

Chosen Option : 2

Q.19 In the following question, select the missing number of the given series.

208, 104, 52, 26, ?, 6.5

- Ans
- ☒ 1. 20
 - ☒ 2. 13
 - ☒ 3. 18
 - ☒ 4. 24

Question Type : MCQ
Question ID : 264330137099
Option 1 ID : 264330537041
Option 2 ID : 264330537040
Option 3 ID : 264330537039
Option 4 ID : 264330537042
Status : Answered
Chosen Option : 2

Q.20 In a certain code language, 'SHORT' is written as '1' and 'THEME' is written as '2'. How will 'TRAIN' be written in that language?

- Ans
- ☒ 1. 4
 - ☒ 2. 1
 - ☒ 3. 2
 - ☒ 4. 3

Question Type : MCQ
Question ID : 264330133489
Option 1 ID : 264330522990
Option 2 ID : 264330522989
Option 3 ID : 264330522987
Option 4 ID : 264330522988
Status : Answered
Chosen Option : 3

Section : General Awareness

Q.1 Tusu is a harvest festival celebrated in Jharkhand during the winter in the last day of _____ month.

- Ans
- ☒ 1. Phalguna
 - ☒ 2. Chaitra
 - ☒ 3. Magha
 - ☒ 4. Poush

Question Type : MCQ
Question ID : 264330133984
Option 1 ID : 264330524961
Option 2 ID : 264330524962
Option 3 ID : 264330524960
Option 4 ID : 264330524959
Status : Answered
Chosen Option : 2

Q.2 What is the meaning of reverse repo rate?

- Ans
- ☒ 1. Rate at which RBI borrows money from foreign banks
 - ☒ 2. Rate at which RBI borrows money from commercial banks
 - ☒ 3. Rate at which commercial banks borrows money from RBI
 - ☒ 4. Rate at which commercial banks borrows money from foreign banks

Question Type : MCQ
Question ID : 264330135458
Option 1 ID : 264330530742
Option 2 ID : 264330530740
Option 3 ID : 264330530739
Option 4 ID : 264330530741
Status : Answered
Chosen Option : 2

Q.3 Jyotiba Phule founded the Satyashodhak Samaj (Truth Seekers' Society) in _____.

- Ans
- ☒ 1. 1852
 - ☒ 2. 1873
 - ☒ 3. 1898
 - ☒ 4. 1865

Question Type : MCQ
Question ID : 264330133997
Option 1 ID : 264330525013
Option 2 ID : 264330525014
Option 3 ID : 264330525012
Option 4 ID : 264330525011
Status : Answered
Chosen Option : 2

Q.4 The General Insurance (Amendment) Act, 2021 removes the provision which required the Central Government to have atleast _____ ownership in four subsidiaries of General Insurance Company, namely, National Insurance, New India Assurance, Oriental Insurance, United India Insurance.

- Ans
- ☒ 1. 75%
 - ☒ 2. 49%
 - ☒ 3. 51%
 - ☒ 4. 80%

Question Type : MCQ
Question ID : 264330137037
Option 1 ID : 264330536794
Option 2 ID : 264330536792
Option 3 ID : 264330536793
Option 4 ID : 264330536791
Status : Answered
Chosen Option : 3

Q.5 Which device is used for measuring temperature?

- Ans
- ☐ 1. Manometer
 - ☐ 2. Ammeter
 - ☒ 3. Thermometer
 - ☐ 4. Barometer

Question Type : MCQ

Question ID : 264330137027

Option 1 ID : 264330536754

Option 2 ID : 264330536753

Option 3 ID : 264330536751

Option 4 ID : 264330536752

Status : Answered

Chosen Option : 3

Q.6 Who among the following Gupta kings founded the Nalanda University?

- Ans
- ☐ 1. Chandragupta II
 - ☐ 2. Chandragupta I
 - ☒ 3. Kumaragupta I
 - ☐ 4. Skandagupta

Question Type : MCQ

Question ID : 264330133994

Option 1 ID : 264330525001

Option 2 ID : 264330524999

Option 3 ID : 264330525002

Option 4 ID : 264330525000

Status : Answered

Chosen Option : 3

Q.7 Which is the first garden – tomb in the Indian subcontinent?

- Ans
- ☐ 1. Taj Mahal
 - ☐ 2. Qutb Shahi Tombs
 - ☒ 3. Humayun's Tomb
 - ☐ 4. Aurangzeb's Tomb

Question Type : MCQ

Question ID : 264330134596

Option 1 ID : 264330527341

Option 2 ID : 264330527340

Option 3 ID : 264330527339

Option 4 ID : 264330527342

Status : Answered

Chosen Option : 3

Q.8 Most of the Himalayan rivers are of which type?

- Ans
- ☐ 1. Exotic
 - ☒ 2. Perennial
 - ☐ 3. Seasonal
 - ☐ 4. Episodic

Question Type : MCQ

Question ID : 264330134612

Option 1 ID : 264330527406

Option 2 ID : 264330527404

Option 3 ID : 264330527403

Option 4 ID : 264330527405

Status : Answered

Chosen Option : 2

Q.9 The Charter Act of 1813 extended the East India Company's rule in India to another _____ years.

- Ans
- ☐ 1. 15
 - ☐ 2. 5
 - ☒ 3. 20
 - ☐ 4. 10

Question Type : MCQ

Question ID : 264330137051

Option 1 ID : 264330536849

Option 2 ID : 264330536848

Option 3 ID : 264330536850

Option 4 ID : 264330536847

Status : Answered

Chosen Option : 3

Q.10 The third battle of Panipat fought in _____.

- Ans
- ☐ 1. 1556
 - ☐ 2. 1651
 - ☐ 3. 1526
 - ☒ 4. 1761

Question Type : MCQ

Question ID : 264330134616

Option 1 ID : 264330527419

Option 2 ID : 264330527422

Option 3 ID : 264330527421

Option 4 ID : 264330527420

Status : Answered

Chosen Option : 4

Q.11 Who is hailed in India as the Mozart of the Madras?

- Ans
- ☐ 1. Udit Narayan
 - ☐ 2. S. P. Balasubrahmanyam
 - ☐ 3. Arijit Singh
 - ☒ 4. A.R. Rahman

Question Type : MCQ

Question ID : 264330134600

Option 1 ID : 264330527357

Option 2 ID : 264330527358

Option 3 ID : 264330527356

Option 4 ID : 264330527355

Status : Answered

Chosen Option : 2

Q.12 Baji Rao I or Baji Rao Ballal was the son of _____.

- Ans
- ☒ 1. Peshwa Balaji Vishwanath
 - ☐ 2. Raghunath Rao
 - ☐ 3. Shivaji
 - ☐ 4. Madhav Rao

Question Type : MCQ

Question ID : 264330137033

Option 1 ID : 264330536777

Option 2 ID : 264330536778

Option 3 ID : 264330536775

Option 4 ID : 264330536776

Status : Answered

Chosen Option : 1

Q.13 Bagh Caves, which has 9 Buddhist caves, was developed around the 6th Century AD situated on the Bagh river in _____.

- Ans
- ☐ 1. Uttar Pradesh
 - ☒ 2. Madhya Pradesh
 - ☐ 3. Maharashtra
 - ☐ 4. Gujarat

Question Type : MCQ

Question ID : 264330137040

Option 1 ID : 264330536804

Option 2 ID : 264330536803

Option 3 ID : 264330536805

Option 4 ID : 264330536806

Status : Answered

Chosen Option : 2

Q.14 Rajagriha was the first capital of which Mahajanapada?

- Ans
- ☐ 1. Kuru
 - ☒ 2. Magadha
 - ☐ 3. Kosala
 - ☐ 4. Avanti

Question Type : MCQ

Question ID : 264330134615

Option 1 ID : 264330527416

Option 2 ID : 264330527418

Option 3 ID : 264330527415

Option 4 ID : 264330527417

Status : Answered

Chosen Option : 2

Q.15 If we sum the gross value added of all the firms of the economy in a year, we get a measure of the value of aggregate amount of goods and services produced by the economy in a year. Such an estimate is called _____.

- Ans
- ☐ 1. Net national product
 - ☐ 2. National income at factor price
 - ☐ 3. Net value added
 - ☒ 4. Gross domestic product

Question Type : MCQ

Question ID : 264330134604

Option 1 ID : 264330527373

Option 2 ID : 264330527371

Option 3 ID : 264330527374

Option 4 ID : 264330527372

Status : Answered

Chosen Option : 2

Q.16 The oceanic crust mainly consists of _____ and _____.

- Ans
- ☐ 1. silica, alumina
 - ☒ 2. silica, magnesium
 - ☐ 3. magnesium, alumina
 - ☐ 4. iron, alumina

Question Type : MCQ

Question ID : 264330137026

Option 1 ID : 264330536747

Option 2 ID : 264330536749

Option 3 ID : 264330536748

Option 4 ID : 264330536750

Status : Answered

Chosen Option : 2

Q.17 As per census 2011, which among the following Union Territories of India has least population density per square kilometre?

- Ans
- ☒ 1. Jammu and Kashmir
 - ☒ 2. Andaman and Nicobar Islands
 - ☒ 3. Chandigarh
 - ☒ 4. Delhi

Question Type : MCQ
Question ID : 264330133917
Option 1 ID : 264330524694
Option 2 ID : 264330524693
Option 3 ID : 264330524692
Option 4 ID : 264330524691
Status : Answered
Chosen Option : 2

Q.18 Which of the following programme was launched in 1999?

- Ans
- ☒ 1. Rural Employment Generation Programme
 - ☒ 2. Mahatma Gandhi National Rural Employment Guarantee scheme
 - ☒ 3. Swarnajayanti Gram Swarozgar Yojana
 - ☒ 4. Pradhan Mantri Gramodaya Yojana

Question Type : MCQ
Question ID : 264330134614
Option 1 ID : 264330527412
Option 2 ID : 264330527411
Option 3 ID : 264330527413
Option 4 ID : 264330527414
Status : Answered
Chosen Option : 3

Q.19 Pandit Birju Maharaj was honoured with Padma Vibhushan award for which form of classical dance?

- Ans
- ☒ 1. Manipuri
 - ☒ 2. Kathak
 - ☒ 3. Jhumar
 - ☒ 4. Mohiniattam

Question Type : MCQ
Question ID : 264330135453
Option 1 ID : 264330530720
Option 2 ID : 264330530722
Option 3 ID : 264330530721
Option 4 ID : 264330530719
Status : Answered
Chosen Option : 2

Q.20 Which of the following book is the autobiography of Milkha Singh?

- Ans
- ☐ 1. Touch Play
 - ☐ 2. Two Lives
 - ☐ 3. Romancing My Life
 - ☒ 4. The Race of My Life

Question Type : MCQ
Question ID : 264330135451
Option 1 ID : 264330530713
Option 2 ID : 264330530714
Option 3 ID : 264330530711
Option 4 ID : 264330530712
Status : Answered
Chosen Option : 4

Q.21 Kathakali took shape in Southern India in the seventeenth century under the patronage of the _____.

- Ans
- ☐ 1. Prince of Tamil Nadu
 - ☐ 2. Prince of Bengal
 - ☒ 3. Prince of Karnataka
 - ☐ 4. Prince of Punjab

Question Type : MCQ
Question ID : 264330134594
Option 1 ID : 264330527332
Option 2 ID : 264330527334
Option 3 ID : 264330527331
Option 4 ID : 264330527333
Status : Answered
Chosen Option : 1

Q.22 Under which type of unemployment a person contributes less than their capability?

- Ans
- ☐ 1. Frictional unemployment
 - ☒ 2. Disguised unemployment
 - ☐ 3. Compulsory unemployment
 - ☐ 4. Cyclical unemployment

Question Type : MCQ
Question ID : 264330137773
Option 1 ID : 264330539701
Option 2 ID : 264330539700
Option 3 ID : 264330539702
Option 4 ID : 264330539699
Status : Answered
Chosen Option : 2

Q.23 The First Field Handball World Championships were played in Germany in _____.

- Ans
- ☐ 1. 1958
 - ☐ 2. 1928
 - ☒ 3. 1938
 - ☐ 4. 1948

Question Type : MCQ
Question ID : 264330137015
Option 1 ID : 264330536706
Option 2 ID : 264330536703
Option 3 ID : 264330536704
Option 4 ID : 264330536705
Status : Not Answered
Chosen Option : --

Q.24 The cells having nuclear material without nuclear membrane are termed as _____.

- Ans
- ☐ 1. Cheek cells
 - ☒ 2. Prokaryotic cells
 - ☐ 3. Eukaryotic cells
 - ☐ 4. Onion cells

Question Type : MCQ
Question ID : 264330137025
Option 1 ID : 264330536746
Option 2 ID : 264330536743
Option 3 ID : 264330536744
Option 4 ID : 264330536745
Status : Answered
Chosen Option : 2

Q.25 Which country is the biggest producer of rice?

- Ans
- ☐ 1. Russia
 - ☒ 2. China
 - ☐ 3. Brazil
 - ☐ 4. Bangladesh

Question Type : MCQ
Question ID : 264330135443
Option 1 ID : 264330530681
Option 2 ID : 264330530679
Option 3 ID : 264330530680
Option 4 ID : 264330530682
Status : Answered
Chosen Option : 2

Q.1 Identify the segment that contains a grammatical error. If there is no error, select 'No error'

She's considered one/ of a best young/ directors in Hollywood.

- Ans ☒ 1. of a best young
☒ 2. No error
☒ 3. She's considered one
☒ 4. directors in Hollywood.

Question Type : MCQ
 Question ID : 264330136214
 Option 1 ID : 264330533648
 Option 2 ID : 264330533650
 Option 3 ID : 264330533647
 Option 4 ID : 264330533649
 Status : Answered
 Chosen Option : 3

Q.2 Select the appropriate synonym for the underlined word.

Paul Bunyan is considered a legend.

- Ans ☒ 1. spinster
☒ 2. stoic
☒ 3. volunteer
☒ 4. tradition

Question Type : MCQ
 Question ID : 264330134735
 Option 1 ID : 264330527892
 Option 2 ID : 264330527891
 Option 3 ID : 264330527893
 Option 4 ID : 264330527894
 Status : Answered
 Chosen Option : 4

Q.3 Select the most appropriate option to fill in the blank.
 I am going to take you for a _____ up there.

- Ans ☒ 1. rite
☒ 2. write
☒ 3. ride
☒ 4. right

Question Type : MCQ
 Question ID : 264330134474
 Option 1 ID : 264330526865
 Option 2 ID : 264330526863
 Option 3 ID : 264330526864
 Option 4 ID : 264330526866
 Status : Answered
 Chosen Option : 3

Q.4 Choose the word that can substitute the given group of words.

A residence for monks or priests

- Ans
- ☐ 1. Nursery
 - ☐ 2. Convent
 - ☒ 3. Monastery
 - ☐ 4. Tomb

Question Type : MCQ
Question ID : 264330135296
Option 1 ID : 264330530095
Option 2 ID : 264330530097
Option 3 ID : 264330530096
Option 4 ID : 264330530098
Status : Answered
Chosen Option : 3

Q.5 Improve the underlined part of the sentence. Choose 'No improvement' as an answer if the sentence is grammatically correct.

The accountant of the sugar mill have been deprived of his briefcase.

- Ans
- ☐ 1. was being deprived
 - ☒ 2. has been deprived
 - ☐ 3. No improvement
 - ☐ 4. is deprive

Question Type : MCQ
Question ID : 264330134750
Option 1 ID : 264330527953
Option 2 ID : 264330527951
Option 3 ID : 264330527954
Option 4 ID : 264330527952
Status : Answered
Chosen Option : 2

Q.6 Choose the word that is opposite in meaning to the given word.

Awful

- Ans
- ☐ 1. Pitiful
 - ☐ 2. Dreadful
 - ☐ 3. Grim
 - ☒ 4. Wonderful

Question Type : MCQ
Question ID : 264330135326
Option 1 ID : 264330530214
Option 2 ID : 264330530211
Option 3 ID : 264330530213
Option 4 ID : 264330530212
Status : Answered
Chosen Option : 4

Q.7 Find the part of the given sentence that has an error in it. If there is no error, choose 'No error'.

Many female mammals, including rabbits and cats, ovulate only when they mate.

Ans ☒ 1. No error

☒ 2. Many female mammals,

☒ 3. only when they mate.

☒ 4. including rabbits and cats, ovulate

Question Type : MCQ

Question ID : 264330134721

Option 1 ID : 264330527842

Option 2 ID : 264330527839

Option 3 ID : 264330527841

Option 4 ID : 264330527840

Status : Answered

Chosen Option : 3

Q.8 Choose the sentence with no spelling error.

Ans ☒ 1. Your emergency contacts couldn't be reached.

☒ 2. Your emergency contatcs couldn't be reached.

☒ 3. Your emergency contacts couldn't be reached.

☒ 4. Your emergency contacts coldn't be reaced.

Question Type : MCQ

Question ID : 264330134473

Option 1 ID : 264330526860

Option 2 ID : 264330526862

Option 3 ID : 264330526859

Option 4 ID : 264330526861

Status : Answered

Chosen Option : 1

Q.9 Improve the underlined part of the sentence. Choose 'No improvement' as an answer if the sentence is grammatically correct.

My history assignment is due on Wednesday.

Ans ☒ 1. are due at

☒ 2. No improvement

☒ 3. were due on

☒ 4. is dues in

Question Type : MCQ

Question ID : 264330134427

Option 1 ID : 264330526683

Option 2 ID : 264330526686

Option 3 ID : 264330526684

Option 4 ID : 264330526685

Status : Answered

Chosen Option : 2

Q.10 In the following question, out of the given four alternatives, select the alternative which best expresses the meaning of the Idiom/Phrase.

To see the light

- Ans**
- ☒ 1. To gain conscious
 - ☒ 2. To misunderstand the situation
 - ☒ 3. To be optimistic
 - ☒ 4. Suddenly realize or understand something

Question Type : **MCQ**
 Question ID : **264330134740**
 Option 1 ID : **264330527914**
 Option 2 ID : **264330527912**
 Option 3 ID : **264330527911**
 Option 4 ID : **264330527913**
 Status : **Answered**
 Chosen Option : **3**

Q.11 Select the most appropriate option to fill in the blank.

The sedative effect of the drugs impairs people's ability to pay attention and _____.

- Ans**
- ☒ 1. concentrate
 - ☒ 2. segregate
 - ☒ 3. reverberate
 - ☒ 4. dilate

Question Type : **MCQ**
 Question ID : **264330134744**
 Option 1 ID : **264330527929**
 Option 2 ID : **264330527927**
 Option 3 ID : **264330527930**
 Option 4 ID : **264330527928**
 Status : **Answered**
 Chosen Option : **1**

Q.12 Find the part of the given sentence that has an error in it. If there is no error, choose 'No error'.

One-to-one interaction with parents is know to be important.

- Ans**
- ☒ 1. with parents is know
 - ☒ 2. to be important.
 - ☒ 3. No error
 - ☒ 4. One-to-one interaction

Question Type : **MCQ**
 Question ID : **264330134529**
 Option 1 ID : **264330527076**
 Option 2 ID : **264330527077**
 Option 3 ID : **264330527078**
 Option 4 ID : **264330527075**
 Status : **Answered**
 Chosen Option : **1**

Q.13 Select the most appropriate option to substitute the bracketed segment in the given sentence. If there is no need to substitute it, select 'no substitution required'.

(Hardly did the ink dried on my weekly column, when) one of my readers called me.

- Ans**
- ☒ 1. Hardly had the ink dry on last week's column, when
 - ☒ 2. No substitution required
 - ☒ 3. Hardly did the ink dried on last week's column, when
 - ☒ 4. Hardly had the ink dried on last week's column, when

Question Type : **MCQ**
 Question ID : **264330136217**
 Option 1 ID : **264330533660**
 Option 2 ID : **264330533662**
 Option 3 ID : **264330533659**
 Option 4 ID : **264330533661**
 Status : **Answered**
 Chosen Option : **2**

Q.14 Choose the word that means the same as the given word.
Inquisitive

- Ans**
- ☒ 1. Agile
 - ☒ 2. Aloof
 - ☒ 3. Callous
 - ☒ 4. Curious

Question Type : **MCQ**
 Question ID : **264330134493**
 Option 1 ID : **264330526935**
 Option 2 ID : **264330526936**
 Option 3 ID : **264330526938**
 Option 4 ID : **264330526937**
 Status : **Answered**
 Chosen Option : **4**

Q.15 A sentence has been given with a blank to be filled with an appropriate option. Choose the correct alternative.
 _____ months later, Steve returned to New York to look for a job.

- Ans**
- ☒ 1. Few
 - ☒ 2. A few
 - ☒ 3. The few
 - ☒ 4. A little

Question Type : **MCQ**
 Question ID : **264330134483**
 Option 1 ID : **264330526899**
 Option 2 ID : **264330526900**
 Option 3 ID : **264330526901**
 Option 4 ID : **264330526902**
 Status : **Answered**
 Chosen Option : **1**

Q.16 A sentence has been given with a blank to be filled with an appropriate option. Choose the correct alternative.

She kept pictures of her parents all _____ the house.

- Ans
- ☒ 1. about
 - ☒ 2. over
 - ☒ 3. through
 - ☒ 4. out

Question Type : MCQ

Question ID : 264330134725

Option 1 ID : 264330527855

Option 2 ID : 264330527858

Option 3 ID : 264330527857

Option 4 ID : 264330527856

Status : Answered

Chosen Option : 2

Q.17 Choose the word that can substitute the given group of words.

One hard to please (very selective in his habits)

- Ans
- ☒ 1. Dexterous
 - ☒ 2. Incurigible
 - ☒ 3. Sadist
 - ☒ 4. Fastidious

Question Type : MCQ

Question ID : 264330134734

Option 1 ID : 264330527888

Option 2 ID : 264330527887

Option 3 ID : 264330527889

Option 4 ID : 264330527890

Status : Answered

Chosen Option : 4

Q.18 Choose the incorrectly spelt word.

- Ans
- ☒ 1. Plus
 - ☒ 2. Dearest
 - ☒ 3. Worry
 - ☒ 4. Moking

Question Type : MCQ

Question ID : 264330134741

Option 1 ID : 264330527915

Option 2 ID : 264330527918

Option 3 ID : 264330527917

Option 4 ID : 264330527916

Status : Answered

Chosen Option : 4

Q.19 Select the appropriate antonym for the underlined word.

The tension is going to be crucial in determining the fate of your company.

- Ans
- ☒ 1. surgical
 - ☒ 2. decisive
 - ☒ 3. trivial
 - ☒ 4. pivotal

Question Type : MCQ
 Question ID : 264330134738
 Option 1 ID : 264330527906
 Option 2 ID : 264330527904
 Option 3 ID : 264330527905
 Option 4 ID : 264330527903
 Status : Answered
 Chosen Option : 3

Q.20 In the following question, out of the given four alternatives, select the alternative which best expresses the meaning of the Idiom/Phrase.

From rags to riches

- Ans
- ☒ 1. From everywhere
 - ☒ 2. Reasonable pricing
 - ☒ 3. To toil very hard to gain something
 - ☒ 4. From extreme poverty to wealth

Question Type : MCQ
 Question ID : 264330135302
 Option 1 ID : 264330530119
 Option 2 ID : 264330530121
 Option 3 ID : 264330530122
 Option 4 ID : 264330530120
 Status : Answered
 Chosen Option : 4

Comprehension:

In the following passage some of the words have been deleted. Read the passage carefully and select the correct answer for the given blank out of the four alternatives.

Red kites were considered vermin across Britain and Ireland (1) _____ the 16th century and their numbers were rigorously (2) _____. While public perceptions have changed, gamekeepers and farmers still (3) _____ shoot, poison and trap red kites for the (4) _____ harm they cause to livestock and game. In 2020 alone, 20 red kites were confirmed to have been (5) _____ this way in the UK.

SubQuestion No : 21

Q.21 Select the most appropriate option to fill in blank number 1.

- Ans
- ☒ 1. during
 - ☐ 2. along
 - ☐ 3. while
 - ☐ 4. across

Question Type : MCQ

Question ID : 264330135317

Option 1 ID : 264330530176

Option 2 ID : 264330530175

Option 3 ID : 264330530178

Option 4 ID : 264330530177

Status : Answered

Chosen Option : 1

Comprehension:

In the following passage some of the words have been deleted. Read the passage carefully and select the correct answer for the given blank out of the four alternatives.

Red kites were considered vermin across Britain and Ireland (1) _____ the 16th century and their numbers were rigorously (2) _____. While public perceptions have changed, gamekeepers and farmers still (3) _____ shoot, poison and trap red kites for the (4) _____ harm they cause to livestock and game. In 2020 alone, 20 red kites were confirmed to have been (5) _____ this way in the UK.

SubQuestion No : 22

Q.22 Select the most appropriate option to fill in blank number 2.

- Ans
- ☐ 1. changed
 - ☐ 2. choked
 - ☒ 3. controlled
 - ☐ 4. loosened

Question Type : MCQ

Question ID : 264330135318

Option 1 ID : 264330530180

Option 2 ID : 264330530181

Option 3 ID : 264330530179

Option 4 ID : 264330530182

Status : Answered

Chosen Option : 3

Comprehension:

In the following passage some of the words have been deleted. Read the passage carefully and select the correct answer for the given blank out of the four alternatives.

Red kites were considered vermin across Britain and Ireland (1) _____ the 16th century and their numbers were rigorously (2) _____. While public perceptions have changed, gamekeepers and farmers still (3) _____ shoot, poison and trap red kites for the (4) _____ harm they cause to livestock and game. In 2020 alone, 20 red kites were confirmed to have been (5) _____ this way in the UK.

SubQuestion No : 23

Q.23 Select the most appropriate option to fill in blank number 3.

- Ans
- ☒ 1. illegally
 - ☐ 2. randomly
 - ☐ 3. fairly
 - ☐ 4. unknowingly

Question Type : MCQ
 Question ID : 264330135319
 Option 1 ID : 264330530185
 Option 2 ID : 264330530186
 Option 3 ID : 264330530183
 Option 4 ID : 264330530184
 Status : Answered
 Chosen Option : 1

Comprehension:

In the following passage some of the words have been deleted. Read the passage carefully and select the correct answer for the given blank out of the four alternatives.

Red kites were considered vermin across Britain and Ireland (1) _____ the 16th century and their numbers were rigorously (2) _____. While public perceptions have changed, gamekeepers and farmers still (3) _____ shoot, poison and trap red kites for the (4) _____ harm they cause to livestock and game. In 2020 alone, 20 red kites were confirmed to have been (5) _____ this way in the UK.

SubQuestion No : 24

Q.24 Select the most appropriate option to fill in blank number 4.

- Ans
- ☐ 1. kicked
 - ☐ 2. dirty
 - ☒ 3. perceived
 - ☐ 4. shipped

Question Type : MCQ
 Question ID : 264330135320
 Option 1 ID : 264330530189
 Option 2 ID : 264330530187
 Option 3 ID : 264330530188
 Option 4 ID : 264330530190
 Status : Answered
 Chosen Option : 3

Comprehension:

In the following passage some of the words have been deleted. Read the passage carefully and select the correct answer for the given blank out of the four alternatives.

Red kites were considered vermin across Britain and Ireland (1) _____ the 16th century and their numbers were rigorously (2) _____. While public perceptions have changed, gamekeepers and farmers still (3) _____ shoot, poison and trap red kites for the (4) _____ harm they cause to livestock and game. In 2020 alone, 20 red kites were confirmed to have been (5) _____ this way in the UK.

SubQuestion No : 25

Q.25 Select the most appropriate option to fill in blank number 5.

- Ans
- ☒ 1. awakened
 - ☒ 2. killed
 - ☒ 3. subjected
 - ☒ 4. rooted

Question Type : MCQ

Question ID : 264330135321

Option 1 ID : 264330530193

Option 2 ID : 264330530194

Option 3 ID : 264330530192

Option 4 ID : 264330530191

Status : Answered

Chosen Option : 2

