

## Multi Tasking Non Technical Staff and Havaldar CBIC and CBN Examination 2022

Roll Number	
Candidate Name	
Venue Name	Vibrant Assessment Centre
Exam Date	11/05/2023
Exam Time	3:30 PM - 5:00 PM
Subject	MTS Non Tech Havaldar CBIC and CBN Examination 2022

### Section : Numerical and Mathematical Ability

Q.1 The value of  $\frac{3}{8} + \left[ \left( \frac{4}{8} \div \frac{2}{3} \right) \times \frac{8}{5} + \frac{3}{10} \right]$  is:

- Ans
- ✓ 1.  $\frac{15}{8}$
  - ✗ 2.  $\frac{3}{8}$
  - ✗ 3.  $\frac{3}{2}$
  - ✗ 4.  $\frac{15}{2}$

Question Type : MCQ

Question ID : 264330133817

Option 1 ID : 264330524291

Option 2 ID : 264330524292

Option 3 ID : 264330524293

Option 4 ID : 264330524294

Status : Answered

Chosen Option : 1

Q.2 A picture is 40 cm wide and 1.6 m long. The ratio of its width to its perimeter is:

- Ans
- ✗ 1. 4:1
  - ✗ 2. 10:1
  - ✓ 3. 1:10
  - ✗ 4. 1:4

Question Type : MCQ

Question ID : 264330138444

Option 1 ID : 264330542384

Option 2 ID : 264330542385

Option 3 ID : 264330542386

Option 4 ID : 264330542383

Status : Answered

Chosen Option : 3

# Test Prime

**ALL EXAMS,  
ONE SUBSCRIPTION**



**70,000+**  
Mock Tests



**Personalised  
Report Card**



**Unlimited  
Re-Attempt**



**600+**  
Exam Covered



**Previous Year  
Papers**



**500%  
Refund**



**ATTEMPT FREE MOCK NOW**

**Q.3** A man can row 12 km/hr in still water. It takes him 4 times as long as to row up as to row down the river. The speed of the stream is:

- Ans**
- ✓ 1. 7.2 km/hr
  - ✗ 2. 3.6 km/hr
  - ✗ 3. 9.8 km/hr
  - ✗ 4. 4.9 km/hr

Question Type : **MCQ**  
 Question ID : **264330138448**  
 Option 1 ID : **264330542400**  
 Option 2 ID : **264330542399**  
 Option 3 ID : **264330542401**  
 Option 4 ID : **264330542402**  
 Status : **Answered**  
 Chosen Option : **1**

**Q.4** A fruit dealer gets the cost price of 60 bananas by selling 40 bananas. What is the profit percent?

- Ans**
- ✗ 1. 45%
  - ✓ 2. 50%
  - ✗ 3. 55%
  - ✗ 4. 30%

Question Type : **MCQ**  
 Question ID : **264330141013**  
 Option 1 ID : **264330552399**  
 Option 2 ID : **264330552400**  
 Option 3 ID : **264330552401**  
 Option 4 ID : **264330552402**  
 Status : **Answered**  
 Chosen Option : **2**

**Q.5** If the selling price of 9 boxes is equal to cost price of 15 boxes. The gain percent is (Selling price of all boxes is same. Cost price of all boxes is same):

- Ans**
- ✗ 1.  $(50/3)\%$
  - ✓ 2.  $(200/3)\%$
  - ✗ 3.  $(100/3)\%$
  - ✗ 4.  $(140/3)\%$

Question Type : **MCQ**  
 Question ID : **264330138442**  
 Option 1 ID : **264330542377**  
 Option 2 ID : **264330542375**  
 Option 3 ID : **264330542376**  
 Option 4 ID : **264330542378**  
 Status : **Answered**  
 Chosen Option : **2**

**Q.6** The lateral area is thrice as big as the base area of a cone. If the diameter of the cone is 1 cm, then what is the total surface area of cone?

- Ans**
- ✓ 1.  $\pi \text{ cm}^2$
  - ✗ 2.  $3\pi \text{ cm}^2$
  - ✗ 3.  $2\pi \text{ cm}^2$
  - ✗ 4.  $4\pi \text{ cm}^2$

Question Type : **MCQ**  
 Question ID : **264330133855**  
 Option 1 ID : **264330524443**  
 Option 2 ID : **264330524446**  
 Option 3 ID : **264330524445**  
 Option 4 ID : **264330524444**  
 Status : **Answered**  
 Chosen Option : 1

**Q.7** Find the LCM of reciprocals of 22 and 16.

- Ans**
- ✓ 1.  $1/2$
  - ✗ 2.  $1/3$
  - ✗ 3.  $1/6$
  - ✗ 4.  $1/4$

Question Type : **MCQ**  
 Question ID : **264330135392**  
 Option 1 ID : **264330530476**  
 Option 2 ID : **264330530477**  
 Option 3 ID : **264330530478**  
 Option 4 ID : **264330530475**  
 Status : **Answered**  
 Chosen Option : 1

**Q.8** Sameer walks a certain distance and rides back taking a total time of 40 minutes. He could walk both ways in 70 minutes. How long would it take for him to ride both ways?

- Ans**
- ✗ 1. 7 minutes
  - ✗ 2. 5 minutes
  - ✓ 3. 10 minutes
  - ✗ 4. 15 minutes

Question Type : **MCQ**  
 Question ID : **264330135417**  
 Option 1 ID : **264330530578**  
 Option 2 ID : **264330530575**  
 Option 3 ID : **264330530576**  
 Option 4 ID : **264330530577**  
 Status : **Answered**  
 Chosen Option : 3

**Q.9** X and Y together can do a piece of work in 45 days. If Y alone can complete it in 180 days, then in how many days X alone can complete the work?

- Ans**
- ☒ 1. 90 days
  - ☒ 2. 40 days
  - ☒ 3. 60 days
  - ☒ 4. 80 days

Question Type : **MCQ**

Question ID : **264330138103**

Option 1 ID : **264330541022**

Option 2 ID : **264330541021**

Option 3 ID : **264330541020**

Option 4 ID : **264330541019**

Status : **Answered**

Chosen Option : **3**

**Q.10** The following table shows the total number of account holder in 5 different Banks.  
How many women account holders are there in Bank R?

Bank Name	Total number of account holder	Percentage of		
		Men	Women	Children
P	35690	45	50	5
Q	40800	38	46	16
R	47600	52	42	6
S	54280	64	22	14
T	38920	20	60	20

- Ans**
- ☒ 1. 19992
  - ☒ 2. 20480
  - ☒ 3. 30500
  - ☒ 4. 47600

Question Type : **MCQ**

Question ID : **264330133831**

Option 1 ID : **264330524350**

Option 2 ID : **264330524349**

Option 3 ID : **264330524348**

Option 4 ID : **264330524347**

Status : **Answered**

Chosen Option : **1**

**Q.11** P and Q can do a piece of work in 24 days, while R and S can do the same work in 8 days. In how many days P, Q, R and S do it together?

- Ans**
- ☒ 1. 10 days
  - ☒ 2. 6 days
  - ☒ 3. 7 days
  - ☒ 4. 5 days

Question Type : **MCQ**  
 Question ID : **264330133850**  
 Option 1 ID : **264330524425**  
 Option 2 ID : **264330524424**  
 Option 3 ID : **264330524426**  
 Option 4 ID : **264330524423**  
 Status : **Answered**  
 Chosen Option : **2**

**Q.12** Allowing 10% and 13% successive discounts, the selling price of an article becomes Rs. 14094. The marked price is:

- Ans**
- ☒ 1. Rs. 19000
  - ☒ 2. Rs. 20090
  - ☒ 3. Rs. 18000
  - ☒ 4. Rs. 16200

Question Type : **MCQ**  
 Question ID : **264330138443**  
 Option 1 ID : **264330542382**  
 Option 2 ID : **264330542381**  
 Option 3 ID : **264330542380**  
 Option 4 ID : **264330542379**  
 Status : **Answered**  
 Chosen Option : **3**

**Q.13** The average salary of all the employees in an organization is Rs. 10000. The average salary of 10 technicians is Rs. 8000 and the average salary of the rest is Rs. 14000. The total number of employees in the organization is:

- Ans**
- ☒ 1. 21
  - ☒ 2. 18
  - ☒ 3. 15
  - ☒ 4. 12

Question Type : **MCQ**  
 Question ID : **264330138437**  
 Option 1 ID : **264330542356**  
 Option 2 ID : **264330542358**  
 Option 3 ID : **264330542357**  
 Option 4 ID : **264330542355**  
 Status : **Answered**  
 Chosen Option : **3**

Q.14 Determine the correct answer for  $(1/8) + (9/4) - 3$ .

- Ans
- ☒ 1.  $2/5$
  - ☒ 2.  $7/8$
  - ☒ 3.  $-5/8$
  - ☒ 4.  $-3/8$

Question Type : MCQ

Question ID : 264330138434

Option 1 ID : 264330542346

Option 2 ID : 264330542344

Option 3 ID : 264330542345

Option 4 ID : 264330542343

Status : Answered

Chosen Option : 3

Q.15 The circumference of a circle is 220 cm. What is the area of that circle?

- Ans
- ☒ 1.  $3850 \text{ cm}^2$
  - ☒ 2.  $4550 \text{ cm}^2$
  - ☒ 3.  $2850 \text{ cm}^2$
  - ☒ 4.  $4650 \text{ cm}^2$

Question Type : MCQ

Question ID : 264330138107

Option 1 ID : 264330541035

Option 2 ID : 264330541036

Option 3 ID : 264330541037

Option 4 ID : 264330541038

Status : Answered

Chosen Option : 1

Q.16 If the cost of 3 dozens of bananas is Rs. 180, then what is the cost of 7 dozens of Bananas?

- Ans
- ☒ 1. Rs. 490
  - ☒ 2. Rs. 210
  - ☒ 3. Rs. 420
  - ☒ 4. Rs. 350

Question Type : MCQ

Question ID : 264330138445

Option 1 ID : 264330542388

Option 2 ID : 264330542390

Option 3 ID : 264330542389

Option 4 ID : 264330542387

Status : Answered

Chosen Option : 3

Q.17 What is the maturity value of Rs.7416 at the end of 3 years at 8.33% simple interest?

- Ans ☒ 1. Rs.10400  
☒ 2. Rs.9270  
☒ 3. Rs.9990  
☒ 4. Rs.8840

Question Type : MCQ

Question ID : 264330135424

Option 1 ID : 264330530605

Option 2 ID : 264330530603

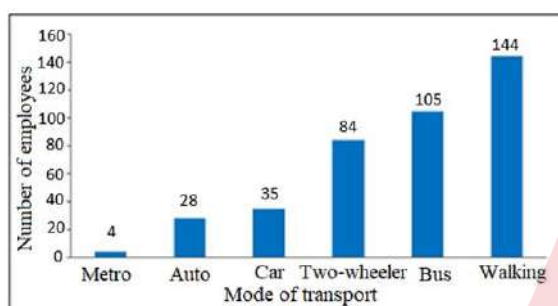
Option 3 ID : 264330530606

Option 4 ID : 264330530604

Status : Answered

Chosen Option : 2

Q.18 The following bar graph shows the mode of transport used by the employees of a company. How much percent of total employees use two-wheelers as a mode of transport?



- Ans ☒ 1. 25%  
☒ 2. 21%  
☒ 3. 12%  
☒ 4. 42%

Question Type : MCQ

Question ID : 264330138452

Option 1 ID : 264330542418

Option 2 ID : 264330542417

Option 3 ID : 264330542416

Option 4 ID : 264330542415

Status : Answered

Chosen Option : 2

Q.19 The simple interest received on a sum is  $\frac{4}{9}$  of the sum. The number of years is equal to the annual rate of interest. What is the annual rate of interest?

- Ans ☒ 1. 7.5 percent  
☒ 2. 6.66 percent  
☒ 3. 6 percent  
☒ 4. 5.25 percent

Question Type : MCQ

Question ID : 264330137613

Option 1 ID : 264330539060

Option 2 ID : 264330539059

Option 3 ID : 264330539061

Option 4 ID : 264330539062

Status : Answered

Chosen Option : 2



**Q.20** If 30 percent of 600 is 60 percent more than A, then what is the value of A?

- Ans**
- ☒ 1. 133.33
  - ☒ 2. 125
  - ☒ 3. 112.5
  - ☒ 4. 118.25

Question Type : **MCQ**  
 Question ID : **264330137608**  
 Option 1 ID : **264330539042**  
 Option 2 ID : **264330539040**  
 Option 3 ID : **264330539041**  
 Option 4 ID : **264330539039**  
 Status : **Answered**  
 Chosen Option : **3**

Section : Reasoning Ability and Problem Solving

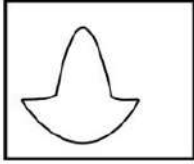
**Q.1** A series is given with one term missing. Select the correct alternative from the given ones that will complete the series.

FGN, JJR, NMV, ?, VSD

- Ans**
- ☒ 1. SPZ
  - ☒ 2. RPZ
  - ☒ 3. RQZ
  - ☒ 4. RPA

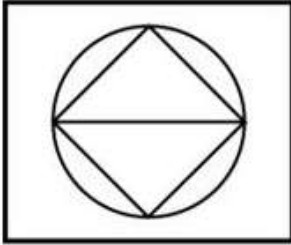
Question Type : **MCQ**  
 Question ID : **264330138540**  
 Option 1 ID : **264330542769**  
 Option 2 ID : **264330542767**  
 Option 3 ID : **264330542768**  
 Option 4 ID : **264330542770**  
 Status : **Answered**  
 Chosen Option : **2**

Q.2 Select the option figure in which the given figure is embedded as its part (rotation is NOT allowed).

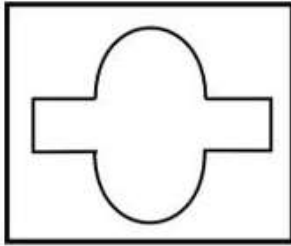


Ans

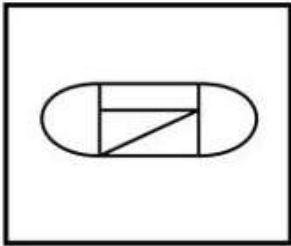
✗ 1.



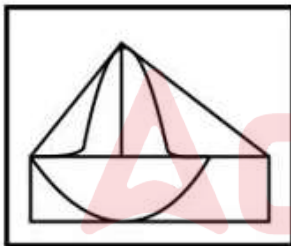
✗ 2.



✗ 3.



✓ 4.



Question Type : MCQ

Question ID : 264330133543

Option 1 ID : 264330523203

Option 2 ID : 264330523205

Option 3 ID : 264330523206

Option 4 ID : 264330523204

Status : Answered

Chosen Option : 4

**Q.3** In a certain code language, 'SURE' is coded as '20, 22, 19, 6', 'THEM' is coded as '21, 9, 6, 14'. What is the code for 'SELF' in that code language?

- Ans**
- ✓ 1. 20, 6, 13, 7
  - ✗ 2. 20, 6, 12, 7
  - ✗ 3. 20, 5, 13, 7
  - ✗ 4. 19, 6, 13, 7

Question Type : **MCQ**

Question ID : **264330138482**

Option 1 ID : **264330542537**

Option 2 ID : **264330542538**

Option 3 ID : **264330542536**

Option 4 ID : **264330542535**

Status : **Answered**

Chosen Option : **1**

**Q.4** Select the option that is related to the sixth term in the same way as the first term is related to the second term and third term is related to fourth term.

FOL : RUL :: KAR : XGQ :: ? : TON

- Ans**
- ✓ 1. HIN
  - ✗ 2. HIM
  - ✗ 3. HJM
  - ✗ 4. HJN

Question Type : **MCQ**

Question ID : **264330138543**

Option 1 ID : **264330542780**

Option 2 ID : **264330542779**

Option 3 ID : **264330542782**

Option 4 ID : **264330542781**

Status : **Answered**

Chosen Option : **1**

**Q.5** आठ लड़के विराट, रोहित, कमल, लक्ष्मण, राहुल, राम, रमेश और सोहन एक वृत्ताकार मेज के चारों ओर केंद्र की ओर मुख करके बैठे हैं (परंतु जरूरी नहीं कि वे इसी क्रम में बैठें हों)। राहुल, कमल के बाईं ओर से दूसरे स्थान पर है। कमल, विराट के बाईं ओर से तीसरे स्थान पर है। लक्ष्मण, राम के दाईं ओर से दूसरे स्थान पर है। रोहित, कमल के दाईं ओर से दूसरे स्थान पर है। रमेश, कमल का निकटतम पड़ोसी नहीं है। विराट, राम के बाईं ओर से दूसरे स्थान पर है। सोहन के दाईं ओर से दूसरे स्थान पर कौन है?

- Ans**
- ✗ 1. लक्ष्मण
  - ✗ 2. राम
  - ✗ 3. रमेश
  - ✓ 4. विराट

Question Type : **MCQ**

Question ID : **264330138548**

Option 1 ID : **264330542802**

Option 2 ID : **264330542801**

Option 3 ID : **264330542800**

Option 4 ID : **264330542799**

Status : **Answered**

Chosen Option : **4**

Q.6 In the following question, select the missing number of the given series.

1, 3, 7, 15, 31, ?

Ans ☒ 1. 63

☐ 2. 60

☐ 3. 66

☐ 4. 65

Question Type : MCQ

Question ID : 264330138553

Option 1 ID : 264330542820

Option 2 ID : 264330542819

Option 3 ID : 264330542822

Option 4 ID : 264330542821

Status : Answered

Chosen Option : 1

Q.7 After interchanging which two signs and two numbers, the value of the given equation will be '44'?

$6 \times 7 \div 9 + 3 - 8$

Ans ☒ 1. + and  $\div$ , 7 and 8

☐ 2. + and -, 6 and 8

☐ 3.  $\times$  and +, 8 and 6

☐ 4.  $\times$  and  $\div$ , 9 and 6

Question Type : MCQ

Question ID : 264330135633

Option 1 ID : 264330531431

Option 2 ID : 264330531432

Option 3 ID : 264330531434

Option 4 ID : 264330531433

Status : Answered

Chosen Option : 1

Q.8 Select the option that is related to the fifth number in the same way as the second number is related to the first number and fourth number is related to third number.

20 : 105 :: 30 : 155 :: 50 : ?

Ans ☒ 1. 255

☐ 2. 235

☐ 3. 245

☐ 4. 265

Question Type : MCQ

Question ID : 264330137530

Option 1 ID : 264330538729

Option 2 ID : 264330538727

Option 3 ID : 264330538728

Option 4 ID : 264330538730

Status : Answered

Chosen Option : 1

Q.9 In the following question, select the missing number of the given series.

49, 68, 87, ?, 125

- Ans ☒ 1. 107  
☒ 2. 106  
☒ 3. 104  
☒ 4. 108

Question Type : MCQ

Question ID : 264330137528

Option 1 ID : 264330538722

Option 2 ID : 264330538721

Option 3 ID : 264330538719

Option 4 ID : 264330538720

Status : Answered

Chosen Option : 2

Q.10 In a certain code language, 'WINDOW' is coded as 'WODNIW'. What is the code for 'DOORS' in that code language?

- Ans ☒ 1. SRROD  
☒ 2. SSLLD  
☒ 3. SROOD  
☒ 4. SROOE

Question Type : MCQ

Question ID : 264330135619

Option 1 ID : 264330531378

Option 2 ID : 264330531376

Option 3 ID : 264330531375

Option 4 ID : 264330531377

Status : Answered

Chosen Option : 3

Q.11 Select the option that is related to the fifth term in the same way as the second term is related to the first term and fourth term is related to third term.

GBQ : NYD :: ABR : OYX :: KND : ?

- Ans ☒ 1. AKI  
☒ 2. AKH  
☒ 3. BLH  
☒ 4. BKI

Question Type : MCQ

Question ID : 264330138542

Option 1 ID : 264330542777

Option 2 ID : 264330542776

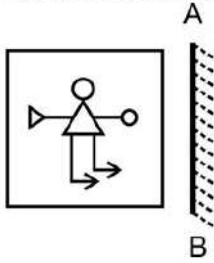
Option 3 ID : 264330542775

Option 4 ID : 264330542778

Status : Answered

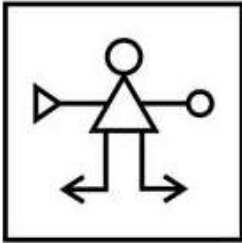
Chosen Option : 2

Q.12 Select the correct mirror image of the given figure when the mirror is placed at AB as shown below.

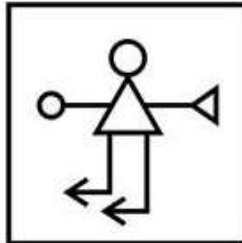


Ans

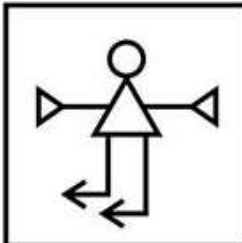
✗ 1.



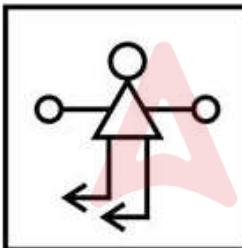
✓ 2.



✗ 3.



✗ 4.



Question Type : MCQ

Question ID : 264330133544

Option 1 ID : 264330523207

Option 2 ID : 264330523208

Option 3 ID : 264330523210

Option 4 ID : 264330523209

Status : Answered

Chosen Option : 2

**Q.13** Maximum marks of five exams E1, E2, E3, E4 and E5 are compared. Maximum marks of each exam are different. Maximum marks of E5 are more than E3 and maximum marks of E3 are more than E1. Maximum marks of E1 are more than E4 and E2. Maximum marks of E2 are not the least among them. If the maximum marks of E2 are 180, then what can be the maximum marks of E4?

- Ans**
- ☒ 1. 185
  - ☒ 2. 188
  - ☒ 3. 178
  - ☒ 4. 190

Question Type : **MCQ**

Question ID : **264330138549**

Option 1 ID : **264330542803**

Option 2 ID : **264330542805**

Option 3 ID : **264330542806**

Option 4 ID : **264330542804**

Status : **Answered**

Chosen Option : **3**

**Q.14** In the following question below are given some statements followed by some conclusions based on those statements. Taking the given statements to be true even if they seem to be at variance from commonly known facts. Read all the conclusions and then decide which of the given conclusion logically follows the given statements.

Statements:

I. All W are T.

II. All M are W.

Conclusion:

I. All M are T.

II. Some T are W.

- Ans**
- ☒ 1. Neither conclusion follows
  - ☒ 2. Both conclusions I and II follows
  - ☒ 3. Only conclusion II follows
  - ☒ 4. Only conclusion I follows

Question Type : **MCQ**

Question ID : **264330138550**

Option 1 ID : **264330542810**

Option 2 ID : **264330542809**

Option 3 ID : **264330542808**

Option 4 ID : **264330542807**

Status : **Answered**

Chosen Option : **2**

**Q.15** Select the option in which the numbers shares the same relationship in set as that shared by the numbers in the given set.  
(NOTE: Operations should be performed on the whole numbers, without breaking down the numbers into its constituent digits. E.g. 13 – Operations on 13 such as adding /subtracting /multiplying etc. to 13 can be performed. Breaking down 13 into 1 and 3 and then performing mathematical operations on 1 and 3 is not allowed)

(144, 8, 4)

(256, 12, 4)

- Ans**
- ☒ 1. (324, 16, 3)
  - ☒ 2. (400, 16, 4)
  - ☒ 3. (225, 7, 6)
  - ☒ 4. (121, 7, 5)

Question Type : **MCQ**

Question ID : **264330138555**

Option 1 ID : **264330542828**

Option 2 ID : **264330542829**

Option 3 ID : **264330542827**

Option 4 ID : **264330542830**

Status : **Answered**

Chosen Option : **2**

**Q.16** In the following question below are given some statements followed by some conclusions based on those statements. Taking the given statements to be true even if they seem to be at variance from commonly known facts. Read all the conclusions and then decide which of the given conclusion logically follows the given statements.

Statements:

I. Some U are M.

II. All M are J.

Conclusion:

I. All J are U.

II. Some U are J.

III. Some M are U.

- Ans**
- ☒ 1. Only conclusion III follows
  - ☒ 2. Both conclusions I and III follows
  - ☒ 3. Only conclusion II follows
  - ☒ 4. Both conclusions II and III follows

Question Type : **MCQ**

Question ID : **264330138551**

Option 1 ID : **264330542813**

Option 2 ID : **264330542811**

Option 3 ID : **264330542812**

Option 4 ID : **264330542814**

Status : **Answered**

Chosen Option : **3**



Q.17 सात खिलाड़ी विराट, राहुल, रोहित, सूर्या, हार्दिक, ऋषभ और दीपक एक वृत्ताकार मेज के चारों ओर केंद्र की ओर मुख करके बैठे हैं (परंतु जरूरी नहीं कि वे इसी क्रम में बैठें हों)। रोहित, विराट के बाईं ओर से दूसरे स्थान पर है। विराट, दीपक के दाईं ओर से चौथे स्थान पर है। हार्दिक, दीपक के ठीक बाईं ओर है। सूर्या, रोहित का निकटतम पड़ोसी नहीं है। ऋषभ, हार्दिक के दाईं ओर से दूसरे स्थान पर है। हार्दिक और ऋषभ का निकटतम पड़ोसी कौन है?

- Ans
- ☒ 1. राहुल
  - ☒ 2. सूर्या
  - ☒ 3. दीपक
  - ☒ 4. विराट

Question Type : MCQ

Question ID : 264330138547

Option 1 ID : 264330542796

Option 2 ID : 264330542797

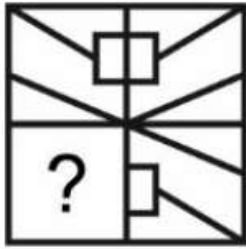
Option 3 ID : 264330542798

Option 4 ID : 264330542795

Status : Answered

Chosen Option : 3

Q.18 Which answer figure will complete the pattern in the question figure?



Ans

- ☒ 1.
- ☒ 2.
- ☒ 3.
- ☒ 4.

Question Type : MCQ

Question ID : 264330138560

Option 1 ID : 264330542849

Option 2 ID : 264330542847

Option 3 ID : 264330542850

Option 4 ID : 264330542848

Status : Answered

Chosen Option : 4

Q.19 By interchanging which two numbers the equation will be correct?

$$3 \times 9 - 4 \div 2 + 6 = 28$$

- Ans
- ☒ 1. 9 and 2
  - ☒ 2. 6 and 4
  - ☒ 3. 3 and 6
  - ☒ 4. 9 and 6

Question Type : MCQ

Question ID : 264330138556

Option 1 ID : 264330542832

Option 2 ID : 264330542833

Option 3 ID : 264330542831

Option 4 ID : 264330542834

Status : Answered

Chosen Option : 2

Q.20 In a certain code language, 'Neha play Volleyball' means 'no la ta', 'Neha like playing' means 'la to zu', 'Volleyball is best game' means 'xu no ba cu', then what is the code for 'Volleyball'?

- Ans
- ☒ 1. ta
  - ☒ 2. ba
  - ☒ 3. no
  - ☒ 4. la

Question Type : MCQ

Question ID : 264330133511

Option 1 ID : 264330523076

Option 2 ID : 264330523078

Option 3 ID : 264330523077

Option 4 ID : 264330523075

Status : Answered

Chosen Option : 3

Section : General Awareness

Q.1 Plasma is often called the \_\_\_\_\_ state of matter.

- Ans
- ☒ 1. fourth
  - ☒ 2. ninth
  - ☒ 3. eighth
  - ☒ 4. sixth

Question Type : MCQ

Question ID : 264330137691

Option 1 ID : 264330539371

Option 2 ID : 264330539374

Option 3 ID : 264330539373

Option 4 ID : 264330539372

Status : Answered

Chosen Option : 1

Q.2 निम्नलिखित में से अंतिम पल्लव राजा कौन थे?

- Ans
- ☒ 1. महेंद्रवर्मन (Mahendravarman) प्रथम
  - ☒ 2. अपराजितवर्मन (Aparajitavarman)
  - ☒ 3. नरसिंहवर्मन (Narasimhavarman) प्रथम
  - ☒ 4. सिंहविष्णु (Simhavishnu)

Question Type : MCQ  
Question ID : 264330134019  
Option 1 ID : 264330525099  
Option 2 ID : 264330525101  
Option 3 ID : 264330525100  
Option 4 ID : 264330525102  
Status : Answered  
Chosen Option : 4

Q.3 In October 2022, ISRO chairman announced expected launch year of Chandrayaan 3 in \_\_\_\_\_.

- Ans
- ☒ 1. 2030
  - ☒ 2. 2027
  - ☒ 3. 2025
  - ☒ 4. 2023

Question Type : MCQ  
Question ID : 264330135485  
Option 1 ID : 264330530850  
Option 2 ID : 264330530849  
Option 3 ID : 264330530848  
Option 4 ID : 264330530847  
Status : Answered  
Chosen Option : 2

Q.4 Which among the following festivals is thanksgiving festival, mainly celebrated in Goa?

- Ans
- ☒ 1. Hornbill
  - ☒ 2. Myoko
  - ☒ 3. Bihula
  - ☒ 4. Ladainha

Question Type : MCQ  
Question ID : 264330134009  
Option 1 ID : 264330525059  
Option 2 ID : 264330525062  
Option 3 ID : 264330525061  
Option 4 ID : 264330525060  
Status : Answered  
Chosen Option : 4

Q.5 Which city hosted the 2022 commonwealth games?

- Ans
- ☒ 1. Greenwich
  - ☒ 2. Birmingham
  - ☒ 3. London
  - ☒ 4. Durban

Question Type : MCQ  
 Question ID : 264330137709  
 Option 1 ID : 264330539444  
 Option 2 ID : 264330539443  
 Option 3 ID : 264330539445  
 Option 4 ID : 264330539446  
 Status : Answered  
 Chosen Option : 2

Q.6 Which among the following books released in 2021 was written by Amartya Sen?

- Ans
- ☒ 1. Will
  - ☒ 2. It's a Wonderful Life
  - ☒ 3. Home in the World
  - ☒ 4. Skill It, Kill It

Question Type : MCQ  
 Question ID : 264330133998  
 Option 1 ID : 264330525018  
 Option 2 ID : 264330525017  
 Option 3 ID : 264330525016  
 Option 4 ID : 264330525015  
 Status : Answered  
 Chosen Option : 2

Q.7 What is the study of interactions between a living organism and its environment?

- Ans
- ☒ 1. Ecology
  - ☒ 2. Biome
  - ☒ 3. Bio-reserve
  - ☒ 4. Ecosystem

Question Type : MCQ  
 Question ID : 264330137693  
 Option 1 ID : 264330539380  
 Option 2 ID : 264330539382  
 Option 3 ID : 264330539381  
 Option 4 ID : 264330539379  
 Status : Answered  
 Chosen Option : 1

Q.8 संगफाओ (Sangphao) आदिवासी नृत्य निम्नलिखित में से किस राज्य में किया जाता है?

- Ans
- ☒ 1. गुजरात
  - ☒ 2. राजस्थान
  - ☒ 3. पश्चिम बंगाल
  - ☒ 4. नागालैंड

Question Type : MCQ

Question ID : 264330138321

Option 1 ID : 264330541892

Option 2 ID : 264330541891

Option 3 ID : 264330541893

Option 4 ID : 264330541894

Status : Answered

Chosen Option : 4

Q.9 Which continent of the world is referred to as a "Continent, Dedicated to Science"?

- Ans
- ☒ 1. Africa
  - ☒ 2. Antarctica
  - ☒ 3. North America
  - ☒ 4. Asia

Question Type : MCQ

Question ID : 264330137694

Option 1 ID : 264330539386

Option 2 ID : 264330539384

Option 3 ID : 264330539383

Option 4 ID : 264330539385

Status : Answered

Chosen Option : 2

Q.10 In which of the following parts of the Indian constitution, Fundamental Rights are contained?

- Ans
- ☒ 1. Part III
  - ☒ 2. Part IV
  - ☒ 3. Part V
  - ☒ 4. Part II

Question Type : MCQ

Question ID : 264330138333

Option 1 ID : 264330541940

Option 2 ID : 264330541941

Option 3 ID : 264330541942

Option 4 ID : 264330541939

Status : Answered

Chosen Option : 1

Q.11 Who was the Governor-General of India when Doctrine of Lapse was introduced in India?

- Ans
- ☐ 1. Lord Mountbatten
  - ☒ 2. Lord Dalhousie
  - ☐ 3. Lord Cornwallis
  - ☐ 4. Lord Canning

Question Type : MCQ

Question ID : 264330135499

Option 1 ID : 264330530903

Option 2 ID : 264330530904

Option 3 ID : 264330530906

Option 4 ID : 264330530905

Status : Answered

Chosen Option : 2

Q.12 Presence of which phenomenon leads to weakening of trade winds in a region?

- Ans
- ☐ 1. Coriolis force
  - ☐ 2. Mango Shower
  - ☒ 3. El Nino
  - ☐ 4. La Nina

Question Type : MCQ

Question ID : 264330138339

Option 1 ID : 264330541963

Option 2 ID : 264330541966

Option 3 ID : 264330541965

Option 4 ID : 264330541964

Status : Answered

Chosen Option : 3

Q.13 The mode of nutrition in which organisms make food themselves from simple substances is called

- Ans
- ☐ 1. heterotrophic nutrition
  - ☒ 2. autotrophic nutrition
  - ☐ 3. saprotrophic nutrition
  - ☐ 4. phototrophic nutrition

Question Type : MCQ

Question ID : 264330138334

Option 1 ID : 264330541943

Option 2 ID : 264330541944

Option 3 ID : 264330541946

Option 4 ID : 264330541945

Status : Answered

Chosen Option : 2

Q.14 निम्नलिखित में से किस मृदा में स्वतः-जुताई की विशेषता के कारण सबसे कम जुताई की आवश्यकता होती है?

- Ans
- ✗ 1. लाल मृदा (Red soil)
  - ✗ 2. लैटेराइट मृदा (Laterite soil)
  - ✗ 3. पीट युक्त मृदा (Peaty soil)
  - ✓ 4. काली मृदा (Black soil)

Question Type : MCQ

Question ID : 264330133990

Option 1 ID : 264330524983

Option 2 ID : 264330524986

Option 3 ID : 264330524985

Option 4 ID : 264330524984

Status : Answered

Chosen Option : 2

Q.15 निम्नलिखित में से किसने विधवा पुनर्विवाह संघ (Widow Re-Marriage Association) की स्थापना की थी?

- Ans
- ✗ 1. राजा राममोहन रॉय
  - ✓ 2. पंडित विष्णु शास्त्री
  - ✗ 3. स्वामी विवेकानंद
  - ✗ 4. केशव चंद्र सेन (Keshab Chandra Sen)

Question Type : MCQ

Question ID : 264330134022

Option 1 ID : 264330525114

Option 2 ID : 264330525113

Option 3 ID : 264330525111

Option 4 ID : 264330525112

Status : Answered

Chosen Option : 4

Q.16 \_\_\_\_\_ is a Hindustani classical musician who plays the bowed instrument, the sarangi.

- Ans
- ✗ 1. Sandeep Das
  - ✗ 2. Zakir Hussain
  - ✗ 3. Shiv Kumar Sharma
  - ✓ 4. Pandit Ram Narayan

Question Type : MCQ

Question ID : 264330138327

Option 1 ID : 264330541918

Option 2 ID : 264330541917

Option 3 ID : 264330541916

Option 4 ID : 264330541915

Status : Answered

Chosen Option : 4

Q.17 Which among the following is the oldest joint stock bank in India?

- Ans ☒ 1. Allahabad Bank  
☒ 2. Bank of Baroda  
☒ 3. Yes Bank  
☒ 4. Punjab National Bank

Question Type : MCQ  
 Question ID : 264330134005  
 Option 1 ID : 264330525043  
 Option 2 ID : 264330525045  
 Option 3 ID : 264330525046  
 Option 4 ID : 264330525044  
 Status : Answered  
 Chosen Option : 4

Q.18 Chandragupta, was the first ruler of the Gupta dynasty to adopt the grand title of \_\_\_\_\_.

- Ans ☒ 1. dharamraja  
☒ 2. maharaj-adhiraja  
☒ 3. maharaja  
☒ 4. devanampriya

Question Type : MCQ  
 Question ID : 264330133918  
 Option 1 ID : 264330524697  
 Option 2 ID : 264330524698  
 Option 3 ID : 264330524696  
 Option 4 ID : 264330524695  
 Status : Answered  
 Chosen Option : 2

Q.19 Which Indian monument was the most visited monument by domestic tourists in financial year 2022?

- Ans ☒ 1. Humayun's Tomb  
☒ 2. Taj Mahal  
☒ 3. Red Fort of Delhi  
☒ 4. Qutub Minar

Question Type : MCQ  
 Question ID : 264330138330  
 Option 1 ID : 264330541927  
 Option 2 ID : 264330541929  
 Option 3 ID : 264330541928  
 Option 4 ID : 264330541930  
 Status : Answered  
 Chosen Option : 2



Q.20 भारत की किस स्थापत्य शैली को लटकती बालकनियों और मेहराब के आकार की कँगनी (cornices) के उपयोग के कारण अलग पहचान मिली?

Ans ☒ 1. राजपूत

☐ 2. सिख

☐ 3. नागर

☐ 4. मुगल

Question Type : MCQ

Question ID : 264330135488

Option 1 ID : 264330530861

Option 2 ID : 264330530859

Option 3 ID : 264330530862

Option 4 ID : 264330530860

Status : Answered

Chosen Option : 4

Q.21 Who was the only female Muslim ruler to ever rule India?

Ans ☐ 1. Rabia-ud-durani

☐ 2. Haazi Begum

☒ 3. Razia Sultan

☐ 4. Arzumand Bano

Question Type : MCQ

Question ID : 264330137700

Option 1 ID : 264330539409

Option 2 ID : 264330539408

Option 3 ID : 264330539407

Option 4 ID : 264330539410

Status : Answered

Chosen Option : 3

Q.22 Who has been appointed as the new Chief Executive Officer of NITI Aayog in June 2022?

Ans ☐ 1. Dr. P.K. Mishra

☐ 2. Ramesh Chand

☒ 3. Parameswaran Iyer

☐ 4. Narendra Kumar Kashyap

Question Type : MCQ

Question ID : 264330138329

Option 1 ID : 264330541924

Option 2 ID : 264330541923

Option 3 ID : 264330541925

Option 4 ID : 264330541926

Status : Answered

Chosen Option : 3

Q.23 Who among the following revived Kuchipudi, started his own 'Kuchipudi Dance Academy' in Chennai and received 'Padma Bhushan' in the year 1998?

- Ans
- ☒ 1. Kelucharan Mohapatra
  - ☒ 2. Uday Shankar
  - ☒ 3. Guru Vempati Chinna Satyam
  - ☒ 4. Guru Bipin Singh

Question Type : MCQ  
Question ID : 264330134000  
Option 1 ID : 264330525024  
Option 2 ID : 264330525023  
Option 3 ID : 264330525025  
Option 4 ID : 264330525026  
Status : Answered  
Chosen Option : 3

Q.24 In hockey, yellow card refers to temporary suspension of player for a minimum of \_\_\_\_\_ minutes of playing time.

- Ans
- ☒ 1. five
  - ☒ 2. three
  - ☒ 3. seven
  - ☒ 4. nine

Question Type : MCQ  
Question ID : 264330138324  
Option 1 ID : 264330541904  
Option 2 ID : 264330541903  
Option 3 ID : 264330541905  
Option 4 ID : 264330541906  
Status : Answered  
Chosen Option : 1

Q.25 जब व्यक्ति नए देश में जाता है, तो उसे \_\_\_\_\_ कहते हैं।

- Ans
- ☒ 1. आप्रवास (Immigration)
  - ☒ 2. उत्प्रवास (Emigration)
  - ☒ 3. बाह्य-प्रवास (Out-Migration)
  - ☒ 4. अन्तःप्रवास (Intra-Migration)

Question Type : MCQ  
Question ID : 264330138694  
Option 1 ID : 264330543384  
Option 2 ID : 264330543383  
Option 3 ID : 264330543386  
Option 4 ID : 264330543385  
Status : Answered  
Chosen Option : 2

Q.1 Fill in the blank with the most appropriate option.

At gurukul they spend many years together, growing into the best of friends, and \_\_\_\_\_ was time for each to return to his home, they wept.

- Ans
- ☒ 1. instantly it
  - ☒ 2. soon it
  - ☒ 3. when it
  - ☒ 4. after it

Question Type : MCQ

Question ID : 264330136697

Option 1 ID : 264330535504

Option 2 ID : 264330535503

Option 3 ID : 264330535506

Option 4 ID : 264330535505

Status : Answered

Chosen Option : 3

Q.2 Fill in the blank with the most appropriate option.

The television is big, has an excellent picture, and last but not \_\_\_\_\_, it's cheap.

- Ans
- ☒ 1. close
  - ☒ 2. final
  - ☒ 3. end
  - ☒ 4. least

Question Type : MCQ

Question ID : 264330136716

Option 1 ID : 264330535578

Option 2 ID : 264330535577

Option 3 ID : 264330535576

Option 4 ID : 264330535575

Status : Answered

Chosen Option : 4

Q.3 Select the most appropriate meaning of the given idiom.

Go down like a lead balloon

- Ans
- ☒ 1. To be received badly by an audience

☒ 2.

Put yourself in a tough position in order to support someone / something

☒ 3. Surrender peacefully

☒ 4. To gamble everything you have

Question Type : MCQ

Question ID : 264330136051

Option 1 ID : 264330533019

Option 2 ID : 264330533021

Option 3 ID : 264330533022

Option 4 ID : 264330533020

Status : Answered

Chosen Option : 2

Q.4 Select the most appropriate word for the given group of words.

One appointed to act in place of another

- Ans ☒ 1. Deputy  
☒ 2. Minister  
☒ 3. Officer  
☒ 4. Delegate

Question Type : MCQ  
 Question ID : 264330136706  
 Option 1 ID : 264330535536  
 Option 2 ID : 264330535535  
 Option 3 ID : 264330535537  
 Option 4 ID : 264330535538  
 Status : Answered  
 Chosen Option : 1

Q.5 Select the word from the options which is exactly opposite in meaning to the bracketed word given in the sentence below.

It automatically (adjusts) resistance to match the road grade.

- Ans ☒ 1. rectify  
☒ 2. order  
☒ 3. suit  
☒ 4. disorganise

Question Type : MCQ  
 Question ID : 264330136710  
 Option 1 ID : 264330535554  
 Option 2 ID : 264330535553  
 Option 3 ID : 264330535552  
 Option 4 ID : 264330535551  
 Status : Answered  
 Chosen Option : 4

Q.6 Improve the underlined part of the sentence. Choose "No improvement" as an answer if the sentence is grammatically correct.

After recess, the students returns to their desks.

- Ans ☒ 1. returned to there  
☒ 2. returns to there  
☒ 3. returned to their  
☒ 4. No improvement

Question Type : MCQ  
 Question ID : 264330135259  
 Option 1 ID : 264330529956  
 Option 2 ID : 264330529955  
 Option 3 ID : 264330529957  
 Option 4 ID : 264330529958  
 Status : Answered  
 Chosen Option : 3

Q.7 Find the part of the given sentence that has an error in it. If there is no error, choose 'No error'.  
Allergies can indirect cause you to feel tired by robbing you of sleep.

- Ans ☒ 1. No error  
☒ 2. robbing you of sleep.  
☒ 3. Allergies can indirect  
☒ 4. cause you to feel tired by

Question Type : MCQ  
Question ID : 264330134503  
Option 1 ID : 264330526978  
Option 2 ID : 264330526977  
Option 3 ID : 264330526975  
Option 4 ID : 264330526976  
Status : Answered  
Chosen Option : 3

Q.8 Select the most appropriate option to substitute the bracketed segment in the given sentence. If there is no need to substitute it, select 'no substitution required'.  
Bonaparte, unlike Hoche, was not (eagerly to embark in) a serious Irish expedition.

- Ans ☒ 1. eager to embark on  
☒ 2. No substitution required  
☒ 3. eagerest to embarked on  
☒ 4. eager into embark in

Question Type : MCQ  
Question ID : 264330136722  
Option 1 ID : 264330535601  
Option 2 ID : 264330535602  
Option 3 ID : 264330535599  
Option 4 ID : 264330535600  
Status : Answered  
Chosen Option : 1

Q.9 Select the most appropriate option to fill in the blank.  
You will \_\_\_\_\_ the price for this crime.

- Ans ☒ 1. make  
☒ 2. pay  
☒ 3. pale  
☒ 4. call

Question Type : MCQ  
Question ID : 264330134500  
Option 1 ID : 264330526966  
Option 2 ID : 264330526964  
Option 3 ID : 264330526965  
Option 4 ID : 264330526963  
Status : Answered  
Chosen Option : 2

**Q.10** A sentence has been given with a blank to be filled with an appropriate option. Choose the correct alternative.  
The frequency of large wildfires \_\_\_\_\_ dramatically in recent decades.

- Ans**
- ☒ 1. did increase
  - ☒ 2. has increased
  - ☒ 3. increase
  - ☒ 4. have increased

Question Type : **MCQ**  
Question ID : **264330134509**  
Option 1 ID : **264330527002**  
Option 2 ID : **264330527001**  
Option 3 ID : **264330527000**  
Option 4 ID : **264330526999**  
Status : **Answered**  
Chosen Option : **2**

**Q.11** Select the most appropriate synonym of the given word.

Victorious

- Ans**
- ☒ 1. Champion
  - ☒ 2. Unsuccessful
  - ☒ 3. Failing
  - ☒ 4. Losing

Question Type : **MCQ**  
Question ID : **264330136707**  
Option 1 ID : **264330535541**  
Option 2 ID : **264330535542**  
Option 3 ID : **264330535539**  
Option 4 ID : **264330535540**  
Status : **Answered**  
Chosen Option : **1**

**Q.12** The statement below has been given with bracketed text. Select the option with correct idiom for the bracketed text.  
I'm sorry I snapped at you earlier, I think I (am just in a bad mood today).

- Ans**
- ☒ 1. two wrongs don't make right
  - ☒ 2. clam up
  - ☒ 3. dressed to the nines
  - ☒ 4. got up on the wrong side of the bed

Question Type : **MCQ**  
Question ID : **264330136712**  
Option 1 ID : **264330535562**  
Option 2 ID : **264330535561**  
Option 3 ID : **264330535559**  
Option 4 ID : **264330535560**  
Status : **Answered**  
Chosen Option : **4**

**Q.13** Four words are given, out of which only one word is spelt correctly. Choose the correctly spelt word.

- Ans** ☒ 1. KNOWLEDGE  
☒ 2. LIHGTNING  
☒ 3. OCCASSION  
☒ 4. MILLENIUM

Question Type : MCQ

Question ID : 264330136713

Option 1 ID : 264330535566

Option 2 ID : 264330535564

Option 3 ID : 264330535563

Option 4 ID : 264330535565

Status : Answered

Chosen Option : 1

**Q.14** Improve the underlined part of the sentence. Choose 'No improvement' as an answer if the sentence is grammatically correct.

I'll see you in the meets next week.

- Ans** ☒ 1. at the meeting  
☒ 2. No improvement  
☒ 3. of the meeting  
☒ 4. on the meeting

Question Type : MCQ

Question ID : 264330136799

Option 1 ID : 264330535896

Option 2 ID : 264330535898

Option 3 ID : 264330535895

Option 4 ID : 264330535897

Status : Answered

Chosen Option : 1

**Q.15** Select the most appropriate word for the given group of words.

Able to do many different things

- Ans** ☒ 1. Versatile  
☒ 2. Monastery  
☒ 3. Omnipotent  
☒ 4. Niche

Question Type : MCQ

Question ID : 264330136045

Option 1 ID : 264330532998

Option 2 ID : 264330532995

Option 3 ID : 264330532997

Option 4 ID : 264330532996

Status : Answered

Chosen Option : 1

Q.16 Choose the word that is opposite in meaning to the given word.

Anomaly

- Ans
- ☒ 1. Omen
  - ☒ 2. Tangible
  - ☒ 3. Regularity
  - ☒ 4. Tangent

Question Type : MCQ

Question ID : 264330135274

Option 1 ID : 264330530013

Option 2 ID : 264330530012

Option 3 ID : 264330530014

Option 4 ID : 264330530011

Status : Answered

Chosen Option : 3

Q.17 Find the part of the given sentence that has an error in it. If there is no error, choose 'No error'.

Both men and women consider a variety of concerns when selecting there outfits.

- Ans
- ☒ 1. consider a variety of concerns
  - ☒ 2. Both men and women
  - ☒ 3. No error
  - ☒ 4. when selecting there outfits.

Question Type : MCQ

Question ID : 264330136796

Option 1 ID : 264330535884

Option 2 ID : 264330535883

Option 3 ID : 264330535886

Option 4 ID : 264330535885

Status : Answered

Chosen Option : 4

Q.18 Choose the sentence with no spelling error.

- Ans
- ☒ 1. You will be here for seventy-two hours.
  - ☒ 2. You will be heare for seventy-two hours.
  - ☒ 3. You will be here for sventy-two hours.
  - ☒ 4. You will be here for seventy-two huors.

Question Type : MCQ

Question ID : 264330134499

Option 1 ID : 264330526961

Option 2 ID : 264330526959

Option 3 ID : 264330526960

Option 4 ID : 264330526962

Status : Answered

Chosen Option : 1



**Q.19** Identify the segment that contains a grammatical error. If there is no error, select 'No error'.  
It'd be really cool if you got / on the team, I've never seen you / played badminton, are you good?

- Ans** ☒ 1. No error  
☒ 2. on the team, I've never seen you  
☒ 3. played badminton, are you good?  
☒ 4. It'd be really cool if you got

Question Type : **MCQ**  
Question ID : **264330136693**  
Option 1 ID : **264330535490**  
Option 2 ID : **264330535488**  
Option 3 ID : **264330535489**  
Option 4 ID : **264330535487**  
Status : **Answered**  
Chosen Option : **3**

**Q.20** Choose the word that means the same as the given word.  
**Feat**

- Ans** ☒ 1. Hallowed  
☒ 2. Handsy  
☒ 3. Accomplishment  
☒ 4. Obligation

Question Type : **MCQ**  
Question ID : **264330134519**  
Option 1 ID : **264330527036**  
Option 2 ID : **264330527035**  
Option 3 ID : **264330527037**  
Option 4 ID : **264330527038**  
Status : **Answered**  
Chosen Option : **2**

### Comprehension:

In the following passage some of the words have been deleted. Read the passage carefully and select the correct answer for the given blank out of the four alternatives.

Planking is free and (1) \_\_\_\_\_ only a couple of minutes — no gym membership or special equipment (2) \_\_\_\_\_. Squatting, dead-lifting and pressing overhead without injury is hard to do without a strong (3) \_\_\_\_\_. "We need to keep our spine straight to do these (4) \_\_\_\_\_. Planking provides you with better core strength to be able to brace during these (5) \_\_\_\_\_," Lawton says.

**SubQuestion No : 21**

**Q.21** Select the most appropriate option to fill in blank number 1.

- Ans** ☒ 1. taken  
☒ 2. has taken  
☒ 3. takes  
☒ 4. took

Question Type : **MCQ**  
Question ID : **264330135265**  
Option 1 ID : **264330529977**  
Option 2 ID : **264330529978**  
Option 3 ID : **264330529975**  
Option 4 ID : **264330529976**  
Status : **Answered**  
Chosen Option : **3**

### Comprehension:

In the following passage some of the words have been deleted. Read the passage carefully and select the correct answer for the given blank out of the four alternatives.

Planking is free and (1) \_\_\_\_\_ only a couple of minutes — no gym membership or special equipment (2) \_\_\_\_\_. Squatting, dead-lifting and pressing overhead without injury is hard to do without a strong (3) \_\_\_\_\_. “We need to keep our spine straight to do these (4) \_\_\_\_\_. Planking provides you with better core strength to be able to brace during these (5) \_\_\_\_\_,” Lawton says.

### SubQuestion No : 22

Q.22 Select the most appropriate option to fill in blank number 2.

- Ans ☒ 1. required  
☒ 2. registered  
☒ 3. catered  
☒ 4. placed

Question Type : MCQ  
 Question ID : 264330135266  
 Option 1 ID : 264330529980  
 Option 2 ID : 264330529981  
 Option 3 ID : 264330529979  
 Option 4 ID : 264330529982  
 Status : Answered  
 Chosen Option : 1

### Comprehension:

In the following passage some of the words have been deleted. Read the passage carefully and select the correct answer for the given blank out of the four alternatives.

Planking is free and (1) \_\_\_\_\_ only a couple of minutes — no gym membership or special equipment (2) \_\_\_\_\_. Squatting, dead-lifting and pressing overhead without injury is hard to do without a strong (3) \_\_\_\_\_. “We need to keep our spine straight to do these (4) \_\_\_\_\_. Planking provides you with better core strength to be able to brace during these (5) \_\_\_\_\_,” Lawton says.

### SubQuestion No : 23

Q.23 Select the most appropriate option to fill in blank number 3.

- Ans ☒ 1. core  
☒ 2. spot  
☒ 3. space  
☒ 4. matter

Question Type : MCQ  
 Question ID : 264330135267  
 Option 1 ID : 264330529985  
 Option 2 ID : 264330529984  
 Option 3 ID : 264330529986  
 Option 4 ID : 264330529983  
 Status : Answered  
 Chosen Option : 1

### Comprehension:

In the following passage some of the words have been deleted. Read the passage carefully and select the correct answer for the given blank out of the four alternatives.

Planking is free and (1) \_\_\_\_\_ only a couple of minutes — no gym membership or special equipment (2) \_\_\_\_\_. Squatting, dead-lifting and pressing overhead without injury is hard to do without a strong (3) \_\_\_\_\_. “We need to keep our spine straight to do these (4) \_\_\_\_\_. Planking provides you with better core strength to be able to brace during these (5) \_\_\_\_\_,” Lawton says.

### SubQuestion No : 24

Q.24 Select the most appropriate option to fill in blank number 4.

- Ans
- ☒ 1. exercises
  - ☐ 2. therapies
  - ☐ 3. surgeries
  - ☐ 4. mechanics

Question Type : MCQ

Question ID : 264330135268

Option 1 ID : 264330529988

Option 2 ID : 264330529990

Option 3 ID : 264330529987

Option 4 ID : 264330529989

Status : Answered

Chosen Option : 1

### Comprehension:

In the following passage some of the words have been deleted. Read the passage carefully and select the correct answer for the given blank out of the four alternatives.

Planking is free and (1) \_\_\_\_\_ only a couple of minutes — no gym membership or special equipment (2) \_\_\_\_\_. Squatting, dead-lifting and pressing overhead without injury is hard to do without a strong (3) \_\_\_\_\_. “We need to keep our spine straight to do these (4) \_\_\_\_\_. Planking provides you with better core strength to be able to brace during these (5) \_\_\_\_\_,” Lawton says.

### SubQuestion No : 25

Q.25 Select the most appropriate option to fill in blank number 5.

- Ans
- ☐ 1. drives
  - ☐ 2. competitions
  - ☒ 3. movements
  - ☐ 4. games

Question Type : MCQ

Question ID : 264330135269

Option 1 ID : 264330529994

Option 2 ID : 264330529993

Option 3 ID : 264330529991

Option 4 ID : 264330529992

Status : Answered

Chosen Option : 3