

Multi Tasking Non Technical Staff and Havaladar CBIC and CBN Examination 2022

Roll Number	
Candidate Name	
Venue Name	Soni Computer Center
Exam Date	12/05/2023
Exam Time	3:30 PM - 5:00 PM
Subject	MTS Non Tech Havaladar CBIC and CBN Examination 2022

Section : Numerical and Mathematical Ability

Q.1 Evaluate: $5 \times 4 + (3 + 4)^2 \div 7 \times 4$

Ans ☒ 1. 47

☒ 2. 46

☒ 3. 48

☒ 4. 49

Question Type : MCQ

Question ID : 264330138089

Option 1 ID : 264330540965

Option 2 ID : 264330540966

Option 3 ID : 264330540963

Option 4 ID : 264330540964

Status : Answered

Chosen Option : 3

Q.2 Selling price of an article is Rs. 616. If loss percentage is 30 percent, then what is the cost price of article?

Ans ☒ 1. Rs. 850

☒ 2. Rs. 800

☒ 3. Rs. 880

☒ 4. Rs. 900

Question Type : MCQ

Question ID : 264330139062

Option 1 ID : 264330544856

Option 2 ID : 264330544855

Option 3 ID : 264330544857

Option 4 ID : 264330544858

Status : Answered

Chosen Option : 3

Test Prime

**ALL EXAMS,
ONE SUBSCRIPTION**



70,000+
Mock Tests



**Personalised
Report Card**



**Unlimited
Re-Attempt**



600+
Exam Covered



**Previous Year
Papers**



**500%
Refund**



ATTEMPT FREE MOCK NOW

Q.3 The average of 5 consecutive natural numbers is 43. The largest of these numbers is:

- Ans
- ☒ 1. 41
 - ☒ 2. 43
 - ☒ 3. 45
 - ☒ 4. 46

Question Type : MCQ
 Question ID : 264330138092
 Option 1 ID : 264330540975
 Option 2 ID : 264330540976
 Option 3 ID : 264330540977
 Option 4 ID : 264330540978
 Status : Answered
 Chosen Option : 3

Q.4 X boys can do a work in 80 days. In how much time, 2X boys will do half of the same work?

- Ans
- ☒ 1. 16 days
 - ☒ 2. 30 days
 - ☒ 3. 12 days
 - ☒ 4. 20 days

Question Type : MCQ
 Question ID : 264330137623
 Option 1 ID : 264330539102
 Option 2 ID : 264330539100
 Option 3 ID : 264330539101
 Option 4 ID : 264330539099
 Status : Answered
 Chosen Option : 4

Q.5 Find the value of $144 \div 12 + 4^2 - 44 + 54 \div 3 \times 2$.

- Ans
- ☒ 1. 5
 - ☒ 2. 15
 - ☒ 3. 20
 - ☒ 4. 30

Question Type : MCQ
 Question ID : 264330138413
 Option 1 ID : 264330542262
 Option 2 ID : 264330542260
 Option 3 ID : 264330542261
 Option 4 ID : 264330542259
 Status : Answered
 Chosen Option : 3

Q.6 The population of a village decreases at the rate of 40% per annum. If its population 2 years ago was 15,000, then find the present population?

- Ans** ☒ 1. 5400
☒ 2. 3500
☒ 3. 4450
☒ 4. 4400

Question Type : **MCQ**
 Question ID : **264330133786**
 Option 1 ID : **264330524168**
 Option 2 ID : **264330524169**
 Option 3 ID : **264330524167**
 Option 4 ID : **264330524170**
 Status : **Answered**
 Chosen Option : **1**

Q.7 If the ratio of the volumes of two cylinders is 6 : 5 and the ratio of their heights is 5 : 24, then what is the ratio of their radii?

- Ans** ☒ 1. 12 : 7
☒ 2. 5 : 6
☒ 3. 1 : 2
☒ 4. 12 : 5

Question Type : **MCQ**
 Question ID : **264330137638**
 Option 1 ID : **264330539159**
 Option 2 ID : **264330539161**
 Option 3 ID : **264330539162**
 Option 4 ID : **264330539160**
 Status : **Answered**
 Chosen Option : **4**

Q.8 The following table shows the sales of comic and fiction books in different shops. Find the ratio of total books sold from shop C to that of shop A.

Shops	Comic Books	Fiction Books
A	200	150
B	250	200
C	350	300
D	400	200
E	450	500

- Ans** ☒ 1. 13:5
☒ 2. 13:7
☒ 3. 11:7
☒ 4. 11:13

Question Type : **MCQ**
 Question ID : **264330138429**
 Option 1 ID : **264330542324**
 Option 2 ID : **264330542325**
 Option 3 ID : **264330542326**
 Option 4 ID : **264330542323**
 Status : **Answered**
 Chosen Option : **2**

Q.9 A bus travels first 100 km at a speed of 100 km/hr. It covers next 150 km at a speed of 90 km/hr. What is the average speed?

- Ans**
- ☒ 1. 120.50 km/hr
 - ☒ 2. 93.75 km/hr
 - ☒ 3. 100.25 km/hr
 - ☒ 4. 156.25 km/hr

Question Type : **MCQ**
 Question ID : **264330141007**
 Option 1 ID : **264330552378**
 Option 2 ID : **264330552377**
 Option 3 ID : **264330552375**
 Option 4 ID : **264330552376**
 Status : **Answered**
 Chosen Option : **2**

Q.10 What is the area of the lateral surface of a right circular cylinder, If the circumference of the base is 22 cm and its height is four times of its radius?

- Ans**
- ☒ 1. 388 cm²
 - ☒ 2. 308 cm²
 - ☒ 3. 408 cm²
 - ☒ 4. 288 cm²

Question Type : **MCQ**
 Question ID : **264330133692**
 Option 1 ID : **264330523794**
 Option 2 ID : **264330523791**
 Option 3 ID : **264330523792**
 Option 4 ID : **264330523793**
 Status : **Answered**
 Chosen Option : **2**

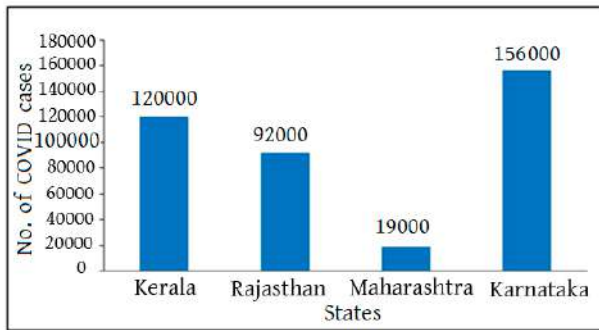
Q.11 The greatest number which when divides 456 and 553 leaves the remainder as 6 and 3 respectively is:

- Ans**
- ☒ 1. 5
 - ☒ 2. 50
 - ☒ 3. 10
 - ☒ 4. 30

Question Type : **MCQ**
 Question ID : **264330141031**
 Option 1 ID : **264330552472**
 Option 2 ID : **264330552473**
 Option 3 ID : **264330552471**
 Option 4 ID : **264330552474**
 Status : **Answered**
 Chosen Option : **2**

Q.12 The following bar graph presents the number of cases of COVID in four states of India in the year 2022.

How much percent cases are more in Karnataka than Kerala?



- Ans**
- ☒ 1. 20%
 - ☒ 2. 40%
 - ☒ 3. 30%
 - ☒ 4. 50%

Question Type : **MCQ**
 Question ID : **264330138106**
 Option 1 ID : **264330541031**
 Option 2 ID : **264330541032**
 Option 3 ID : **264330541033**
 Option 4 ID : **264330541034**
 Status : **Answered**
 Chosen Option : **3**

Q.13 Harshita went to a clothing store. A dress with a tag price Rs.2999 is sold at a discount of 20%. How much will Harshita pay for the dress, if she will buy it?

- Ans**
- ☒ 1. Rs.2899.40
 - ☒ 2. Rs.2699.50
 - ☒ 3. Rs.2199.80
 - ☒ 4. Rs.2399.20

Question Type : **MCQ**
 Question ID : **264330138097**
 Option 1 ID : **264330540996**
 Option 2 ID : **264330540995**
 Option 3 ID : **264330540998**
 Option 4 ID : **264330540997**
 Status : **Answered**
 Chosen Option : **4**

Q.14 Find compound interest on Rs. 60000 at 10% per annum for 5 years, compounded annually.

- Ans**
- ☒ 1. Rs.3456.87
 - ☒ 2. Rs.34563.12
 - ☒ 3. Rs.36630.60
 - ☒ 4. Rs.3254.98

Question Type : **MCQ**
 Question ID : **264330133747**
 Option 1 ID : **264330524014**
 Option 2 ID : **264330524012**
 Option 3 ID : **264330524011**
 Option 4 ID : **264330524013**
 Status : **Answered**
 Chosen Option : **3**

Q.15 The price of bike is Rs. 7000 last year. The price increased by 10% this year. What is the price of bike this year?

- Ans**
- ☒ 1. Rs. 7400
 - ☒ 2. Rs. 7700
 - ☒ 3. Rs. 7600
 - ☒ 4. Rs. 7500

Question Type : **MCQ**
 Question ID : **264330133740**
 Option 1 ID : **264330523983**
 Option 2 ID : **264330523985**
 Option 3 ID : **264330523986**
 Option 4 ID : **264330523984**
 Status : **Answered**
 Chosen Option : **2**

Q.16 X can do a piece of work alone in 15 days while Y alone can do it in 10 days. They worked together for 3 days and remaining work is finished by Z in 1 day. If they get paid Rs.4000 for the entire work, then what is the share of Z?

- Ans**
- ☒ 1. Rs.2000
 - ☒ 2. Rs.1000
 - ☒ 3. Rs.1200
 - ☒ 4. Rs.800

Question Type : **MCQ**
 Question ID : **264330133687**
 Option 1 ID : **264330523772**
 Option 2 ID : **264330523771**
 Option 3 ID : **264330523773**
 Option 4 ID : **264330523774**
 Status : **Answered**
 Chosen Option : **1**

Q.17 Rs.1200 are divided among X, Y and Z such that Y's share is Rs.200 more than X's share. Y's share is also Rs.200 less than Z's share. The share of Y is:

- Ans**
- ☒ 1. Rs.200
 - ☒ 2. Rs.600
 - ☒ 3. Rs.800
 - ☒ 4. Rs.400

Question Type : **MCQ**
 Question ID : **264330138099**
 Option 1 ID : **264330541005**
 Option 2 ID : **264330541003**
 Option 3 ID : **264330541006**
 Option 4 ID : **264330541004**
 Status : **Answered**
 Chosen Option : **4**

Q.18 A shopkeeper sells a box and earn a profit of 5%. For the next box he decides to charge double the selling price. What is the profit percent on second box?

- Ans**
- ☒ 1. 100%
 - ☒ 2. 110%
 - ☒ 3. 200%
 - ☒ 4. 80%

Question Type : **MCQ**
 Question ID : **264330138096**
 Option 1 ID : **264330540993**
 Option 2 ID : **264330540991**
 Option 3 ID : **264330540992**
 Option 4 ID : **264330540994**
 Status : **Answered**
 Chosen Option : **2**

Q.19 In a room, there are 36 women and 20 men. What is the ratio of men to the total number of people in that room?

- Ans**
- ☒ 1. 14:11
 - ☒ 2. 5:14
 - ☒ 3. 5:11
 - ☒ 4. 5:13

Question Type : **MCQ**
 Question ID : **264330138098**
 Option 1 ID : **264330541000**
 Option 2 ID : **264330541002**
 Option 3 ID : **264330540999**
 Option 4 ID : **264330541001**
 Status : **Answered**
 Chosen Option : **2**

Q.20 A boy can row upstream at 12 km/hr and downstream at 23 km/hr. What is the speed of the stream?

- Ans**
- ☒ 1. 3.5 km/hr
 - ☒ 2. 4.5 km/hr
 - ☒ 3. 6.5 km/hr
 - ☒ 4. 5.5 km/hr

Question Type : **MCQ**
 Question ID : **264330138102**
 Option 1 ID : **264330541018**
 Option 2 ID : **264330541015**
 Option 3 ID : **264330541017**
 Option 4 ID : **264330541016**
 Status : **Answered**
 Chosen Option : **4**

Q.1 Seven brothers Subham, Sourav, Sehwag, Sachin, Sam, Shoaib, and Surya's have different ages. Subham is the eldest brother. Surya is older than only two brothers. Sourav is elder than Sam but younger than Shoaib. Sehwag is older than Sachin only. How many brothers are younger than Sourav?

- Ans**
- ☒ 1. 2
 - ☒ 2. 3
 - ☒ 3. 5
 - ☒ 4. 4

Question Type : **MCQ**
 Question ID : **264330137862**
 Option 1 ID : **264330540058**
 Option 2 ID : **264330540055**
 Option 3 ID : **264330540057**
 Option 4 ID : **264330540056**
 Status : **Answered**
 Chosen Option : **1**

Q.2 In a certain code language, 'NOTIFY' is coded as 'TONYFI'. What is the code for 'PATENT' in that code language?

- Ans**
- ☒ 1. TAPTEN
 - ☒ 2. TAPENT
 - ☒ 3. PATTNE
 - ☒ 4. TAPTNE

Question Type : **MCQ**
 Question ID : **264330137519**
 Option 1 ID : **264330538686**
 Option 2 ID : **264330538683**
 Option 3 ID : **264330538684**
 Option 4 ID : **264330538685**
 Status : **Answered**
 Chosen Option : **4**

Q.3 Three statements are given followed by two conclusions numbered I and II. Assuming the statements to be true, even if they seem to be at variance with commonly known facts, decide which of the conclusions logically follow(s) from the statements.

Statements:

All cats are tigers.

All tigers are lions.

Some tigers are dogs.

Conclusions:

I. All cats are lions.

II. Some dogs are lions.

- Ans**
- ☒ 1. Neither conclusion I nor II follows
 - ☒ 2. Both conclusions I and II follow
 - ☒ 3. Only conclusion I follows
 - ☒ 4. Only conclusion II follows

Question Type : **MCQ**
 Question ID : **264330137864**
 Option 1 ID : **264330540066**
 Option 2 ID : **264330540065**
 Option 3 ID : **264330540063**
 Option 4 ID : **264330540064**
 Status : **Answered**
 Chosen Option : **2**

Q.4 Select the option that is related to the third number in the same way as the second number is related to the first number.

7 : 343 :: 4 : ?

- Ans**
- ☒ 1. 58
 - ☒ 2. 72
 - ☒ 3. 84
 - ☒ 4. 64

Question Type : **MCQ**

Question ID : **264330133459**

Option 1 ID : **264330522867**

Option 2 ID : **264330522870**

Option 3 ID : **264330522869**

Option 4 ID : **264330522868**

Status : **Answered**

Chosen Option : **4**

Q.5 Select the option that is related to the third word in the same way as the second word is related to the first word.

Rabbit : Leap :: Parrot : ?

- Ans**
- ☒ 1. Prowls
 - ☒ 2. Fly
 - ☒ 3. Bird
 - ☒ 4. Crawl

Question Type : **MCQ**

Question ID : **264330137854**

Option 1 ID : **264330540025**

Option 2 ID : **264330540023**

Option 3 ID : **264330540024**

Option 4 ID : **264330540026**

Status : **Answered**

Chosen Option : **2**

Q.6 In a certain code language, 'DISPUTE' is written as 'SID16ETU'. How will 'FEATURE' be written in that language?

- Ans**
- ☒ 1. AEF20ERU
 - ☒ 2. AEF20UER
 - ☒ 3. AEF02ERU
 - ☒ 4. AEF20REU

Question Type : **MCQ**

Question ID : **264330135025**

Option 1 ID : **264330529035**

Option 2 ID : **264330529038**

Option 3 ID : **264330529037**

Option 4 ID : **264330529036**

Status : **Answered**

Chosen Option : **1**

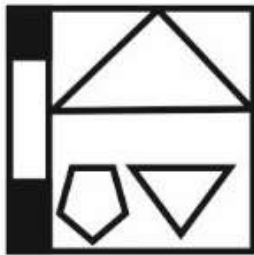
Q.7 If a mirror is placed on the line AB, then out of the option figures which figure will be the right image of the question figure?



A B

Ans

✓ 1.



✗ 2.



✗ 3.



✗ 4.



Question Type : MCQ

Question ID : 264330138538

Option 1 ID : 264330542759

Option 2 ID : 264330542760

Option 3 ID : 264330542762

Option 4 ID : 264330542761

Status : Answered

Chosen Option : 1

Q.8 Study the given pattern carefully and select the number that can replace the question mark (?) in it.

First row- 80, 64, 48

Second row- 112, 96, 80

Third row- 232, 216, ?

Ans ☒ 1. 230

☒ 2. 225

☒ 3. 219

☒ 4. 200

Question Type : **MCQ**

Question ID : **264330137868**

Option 1 ID : **264330540081**

Option 2 ID : **264330540080**

Option 3 ID : **264330540082**

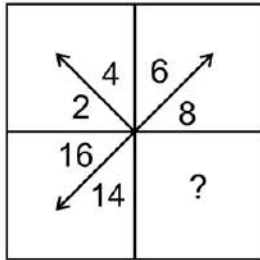
Option 4 ID : **264330540079**

Status : **Answered**

Chosen Option : **4**

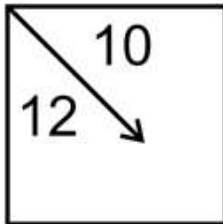


Q.9 Select the option figure that will replace the question mark (?) in the figure given below to complete the pattern.
(rotation is not allowed)

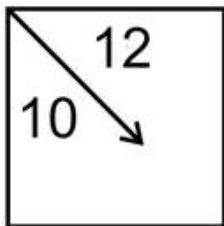


Ans

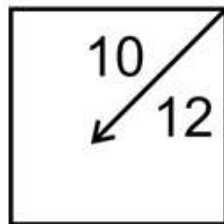
✓ 1.



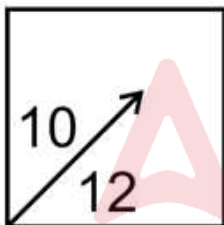
✗ 2.



✗ 3.



✗ 4.



Question Type : MCQ

Question ID : 264330137873

Option 1 ID : 264330540099

Option 2 ID : 264330540101

Option 3 ID : 264330540102

Option 4 ID : 264330540100

Status : Answered

Chosen Option : 1

Q.10 Which of the following letter cluster will replace the question mark (?) in the given series?

KS, MU, OW, QY, SA, UC,?

- Ans
- ☒ 1. WD
 - ☒ 2. EW
 - ☒ 3. WE
 - ☒ 4. WS

Question Type : MCQ

Question ID : 264330137852

Option 1 ID : 264330540018

Option 2 ID : 264330540015

Option 3 ID : 264330540017

Option 4 ID : 264330540016

Status : Answered

Chosen Option : 3

Q.11 Six colleagues X, Y, Z, A, B, and C sit around a circular table facing away from the centre. B sits to the immediate left of Y. A sits to the immediate right of Z. X sits adjacent to B. C does not sit adjacent to Y. Who sits to the immediate right of A?

- Ans
- ☒ 1. Y
 - ☒ 2. X
 - ☒ 3. C
 - ☒ 4. B

Question Type : MCQ

Question ID : 264330137861

Option 1 ID : 264330540053

Option 2 ID : 264330540051

Option 3 ID : 264330540054

Option 4 ID : 264330540052

Status : Answered

Chosen Option : 3

Q.12 Which two signs should be interchanged to make the given equation correct?

$$8 \div 2 \times 7 - 5 + 2 = 1$$

- Ans
- ☒ 1. \times and $+$
 - ☒ 2. $+$ and $-$
 - ☒ 3. \times and $-$
 - ☒ 4. $+$ and $=$

Question Type : MCQ

Question ID : 264330137869

Option 1 ID : 264330540085

Option 2 ID : 264330540084

Option 3 ID : 264330540083

Option 4 ID : 264330540086

Status : Answered

Chosen Option : 1

Q.13 In a certain code language, 'COAT' is written as 'XLZG'. How will 'PLAY' be written in that language?

- Ans**
- ☒ 1. KZOB
 - ☒ 2. KOZB
 - ☒ 3. JOZB
 - ☒ 4. KPZB

Question Type : **MCQ**
 Question ID : **264330138814**
 Option 1 ID : **264330543863**
 Option 2 ID : **264330543866**
 Option 3 ID : **264330543865**
 Option 4 ID : **264330543864**
 Status : **Answered**
 Chosen Option : **2**

Q.14 Select the option that is related to the third letter cluster in the same way as the second letter cluster is related to the first letter cluster:
 RS : TU :: TM : ?

- Ans**
- ☒ 1. UP
 - ☒ 2. OV
 - ☒ 3. VP
 - ☒ 4. VO

Question Type : **MCQ**
 Question ID : **264330137855**
 Option 1 ID : **264330540030**
 Option 2 ID : **264330540027**
 Option 3 ID : **264330540028**
 Option 4 ID : **264330540029**
 Status : **Answered**
 Chosen Option : **4**

Q.15 Six friends S, T, U, V, W, and X sit in a row facing south. U sits exactly in between S and V. X sits exactly in between W and T. Five friends sit to the left of S. Who sits second to the left of V?

- Ans**
- ☒ 1. W
 - ☒ 2. T
 - ☒ 3. X
 - ☒ 4. U

Question Type : **MCQ**
 Question ID : **264330137860**
 Option 1 ID : **264330540047**
 Option 2 ID : **264330540048**
 Option 3 ID : **264330540049**
 Option 4 ID : **264330540050**
 Status : **Answered**
 Chosen Option : **3**

Q.16 Which of the following numbers will replace the question mark (?) in the given series?

43, 45, 48, 53, 60, 71, ?

Ans  1. 83

 2. 81

 3. 82

 4. 84

Question Type : MCQ

Question ID : 264330133457

Option 1 ID : 264330522862

Option 2 ID : 264330522859

Option 3 ID : 264330522860

Option 4 ID : 264330522861

Status : Answered

Chosen Option : 4

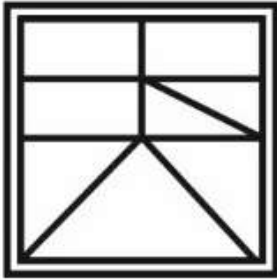


Q.17 Select the option figure in which the given figure is embedded. (rotation is NOT allowed)

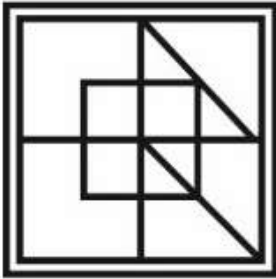


Ans

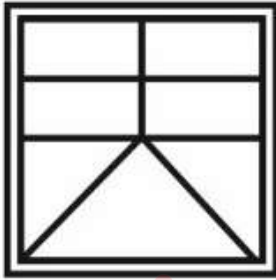
✓ 1.



✗ 2.



✗ 3.



✗ 4.



Question Type : MCQ

Question ID : 264330138537

Option 1 ID : 264330542756

Option 2 ID : 264330542755

Option 3 ID : 264330542757

Option 4 ID : 264330542758

Status : Answered

Chosen Option : 1

Q.18 Which of the following numbers will replace the question mark (?) in the given series?

55, 61, 67, 73, 79, ?

Ans ☒ 1. 82

☒ 2. 85

☒ 3. 93

☒ 4. 94

Question Type : MCQ

Question ID : 264330137866

Option 1 ID : 264330540073

Option 2 ID : 264330540071

Option 3 ID : 264330540072

Option 4 ID : 264330540074

Status : Answered

Chosen Option : 2

Q.19 Two Statements are given followed by two conclusions numbered I and II. Assuming the statements to be true, even if they seem to be at variance with commonly known facts, decide which of the conclusions logically follow(s) from the statements.

Statements:

Some apples are fruits.

All fruits are mangoes.

Conclusions:

I. Some apples are mangoes.

II. All mangoes are fruits.

Ans ☒ 1. Neither conclusion I nor II follows

☒ 2. Only conclusion II follows

☒ 3. Only conclusion I follows

☒ 4. Both conclusions I and II follow

Question Type : MCQ

Question ID : 264330137863

Option 1 ID : 264330540062

Option 2 ID : 264330540060

Option 3 ID : 264330540059

Option 4 ID : 264330540061

Status : Answered

Chosen Option : 3

Q.20 Which two numbers should be interchanged to make the given equation correct?

$$16 + 24 \times 12 - 25 \div 6 = 312$$

Ans ☒ 1. 25 and 24

☒ 2. 25 and 12

☒ 3. 25 and 16

☒ 4. 24 and 16

Question Type : MCQ

Question ID : 264330133502

Option 1 ID : 264330523041

Option 2 ID : 264330523040

Option 3 ID : 264330523042

Option 4 ID : 264330523039

Status : Answered

Chosen Option : 1

Section : General Awareness

Q.1 The Competition (Amendment) Bill, 2022 belongs to _____ Ministry of India.

- Ans
- ☒ 1. Tribal Affairs
 - ☒ 2. Corporate Affairs
 - ☒ 3. Finance
 - ☒ 4. Law and Justice

Question Type : MCQ
Question ID : 264330133957
Option 1 ID : 264330524854
Option 2 ID : 264330524852
Option 3 ID : 264330524851
Option 4 ID : 264330524853
Status : Answered
Chosen Option : 2

Q.2 The rules made for the Buddhist "Sangha" were written down in a book called _____.

- Ans
- ☒ 1. Abhidhammapitaka
 - ☒ 2. Sutta pitaka
 - ☒ 3. Vinaya pitaka
 - ☒ 4. Milinda Panha

Question Type : MCQ
Question ID : 264330138317
Option 1 ID : 264330541878
Option 2 ID : 264330541875
Option 3 ID : 264330541877
Option 4 ID : 264330541876
Status : Answered
Chosen Option : 4

Q.3 Which among the following is NOT a bacterial disease?

- Ans
- ☒ 1. Cholera
 - ☒ 2. Typhoid
 - ☒ 3. Rabies
 - ☒ 4. Plague

Question Type : MCQ
Question ID : 264330137975
Option 1 ID : 264330540507
Option 2 ID : 264330540510
Option 3 ID : 264330540508
Option 4 ID : 264330540509
Status : Answered
Chosen Option : 3

Q.4 The bank rate in the Indian economy is determined by the _____ .

- Ans
- ☒ 1. State bank of India
 - ☒ 2. Reserve Bank of India
 - ☒ 3. Finance ministry of India
 - ☒ 4. Securities and Exchange Board of India

Question Type : MCQ
Question ID : 264330138881
Option 1 ID : 264330544133
Option 2 ID : 264330544132
Option 3 ID : 264330544134
Option 4 ID : 264330544131
Status : Answered
Chosen Option : 2

Q.5 Preet writes about an ocean that separates North America from Europe. Which ocean is it?

- Ans
- ☒ 1. Atlantic Ocean
 - ☒ 2. Indian Ocean
 - ☒ 3. Arctic Ocean
 - ☒ 4. Pacific Ocean

Question Type : MCQ
Question ID : 264330133914
Option 1 ID : 264330524682
Option 2 ID : 264330524680
Option 3 ID : 264330524679
Option 4 ID : 264330524681
Status : Answered
Chosen Option : 1

Q.6 Which among the following is the highest peak of West Bengal?

- Ans
- ☒ 1. Sandakphu
 - ☒ 2. Saramati
 - ☒ 3. Doddabetta
 - ☒ 4. Deomali

Question Type : MCQ
Question ID : 264330137979
Option 1 ID : 264330540526
Option 2 ID : 264330540523
Option 3 ID : 264330540525
Option 4 ID : 264330540524
Status : Answered
Chosen Option : 3

Q.7 All Indian Muslim league was formed at Dacca in _____.

- Ans
- ☐ 1. 1904
 - ☒ 2. 1906
 - ☐ 3. 1902
 - ☐ 4. 1908

Question Type : MCQ

Question ID : 264330138320

Option 1 ID : 264330541888

Option 2 ID : 264330541889

Option 3 ID : 264330541887

Option 4 ID : 264330541890

Status : Answered

Chosen Option : 2

Q.8 Dilwara Temples at Mount Abu, Rajasthan is an example of _____ temple architecture.

- Ans
- ☐ 1. Buddhist
 - ☒ 2. Jain
 - ☐ 3. Mughal
 - ☐ 4. Dravida

Question Type : MCQ

Question ID : 264330133960

Option 1 ID : 264330524866

Option 2 ID : 264330524865

Option 3 ID : 264330524864

Option 4 ID : 264330524863

Status : Answered

Chosen Option : 2

Q.9 Who among the following won the French Open 2022 Badminton Tournament Men's Doubles Title in Paris?

- Ans
- ☒ 1. Chirag Shetty and Satwiksairaj Ranki Reddy
 - ☐ 2. Lu Ching Yao and Yang Po Han
 - ☐ 3. Takuro Hoki and Yugo Kobayashi
 - ☐ 4. Ko Sung Hyun and Shin Baek Cheol

Question Type : MCQ

Question ID : 264330137991

Option 1 ID : 264330540571

Option 2 ID : 264330540573

Option 3 ID : 264330540572

Option 4 ID : 264330540574

Status : Answered

Chosen Option : 1

Q.10 Which among the following Articles of the Indian Constitution deals with the "Fundamental Duties"?

- Ans**
- ☒ 1. 55-A
 - ☒ 2. 51-A
 - ☒ 3. 61-A
 - ☒ 4. 54-A

Question Type : **MCQ**
 Question ID : **264330137989**
 Option 1 ID : **264330540563**
 Option 2 ID : **264330540566**
 Option 3 ID : **264330540564**
 Option 4 ID : **264330540565**
 Status : **Answered**
 Chosen Option : **2**

Q.11 "Losar" is celebrated as New year festival in Sikkim. It is celebrated on the first day of the first month of the _____ lunar calendar.

- Ans**
- ☒ 1. Tibetan
 - ☒ 2. Islamic
 - ☒ 3. Gregorian
 - ☒ 4. Persian

Question Type : **MCQ**
 Question ID : **264330138297**
 Option 1 ID : **264330541795**
 Option 2 ID : **264330541797**
 Option 3 ID : **264330541796**
 Option 4 ID : **264330541798**
 Status : **Answered**
 Chosen Option : **1**

Q.12 In 2022, the Union Ministry of Electronics and IT approved the greenfield Electronic Manufacturing Cluster (EMC) in _____.

- Ans**
- ☒ 1. Rajasthan
 - ☒ 2. Maharashtra
 - ☒ 3. West Bengal
 - ☒ 4. Kerala

Question Type : **MCQ**
 Question ID : **264330137969**
 Option 1 ID : **264330540484**
 Option 2 ID : **264330540486**
 Option 3 ID : **264330540485**
 Option 4 ID : **264330540483**
 Status : **Answered**
 Chosen Option : **3**

Q.13 Dribbling is associated with _____ sport.

- Ans ☒ 1. Basketball
☐ 2. Cricket
☐ 3. Badminton
☐ 4. Swimming

Question Type : MCQ
Question ID : 264330133929
Option 1 ID : 264330524739
Option 2 ID : 264330524740
Option 3 ID : 264330524741
Option 4 ID : 264330524742
Status : Answered
Chosen Option : 4

Q.14 Bhopal gas disaster occurred in which of the following factory?

- Ans ☐ 1. Meghnagar Pharmachem Pvt Ltd
☐ 2. Standard Surfactants Limited
☒ 3. Union Carbide Pesticide plant
☐ 4. Bhopal Incinerator Ltd.

Question Type : MCQ
Question ID : 264330138888
Option 1 ID : 264330544159
Option 2 ID : 264330544161
Option 3 ID : 264330544160
Option 4 ID : 264330544162
Status : Answered
Chosen Option : 3

Q.15 Which among the following is not associated with Tabla?

- Ans ☒ 1. Shakoor Khan
☐ 2. Jnan Prakash Ghosh
☐ 3. Sabir Khan
☐ 4. Sandeep Das

Question Type : MCQ
Question ID : 264330137987
Option 1 ID : 264330540558
Option 2 ID : 264330540556
Option 3 ID : 264330540557
Option 4 ID : 264330540555
Status : Not Answered
Chosen Option : --

Q.16 Yakshagana is a famous folk dance associated with which of the following states?

- Ans ☒ 1. Karnataka
☐ 2. Odisha
☐ 3. Kerala
☐ 4. Tamil Nadu

Question Type : MCQ

Question ID : 264330137971

Option 1 ID : 264330540492

Option 2 ID : 264330540494

Option 3 ID : 264330540491

Option 4 ID : 264330540493

Status : Answered

Chosen Option : 1

Q.17 Who occupied Badaun (A.D. 1197-98) and appointed Iltutmish as its first Muslim Governor?

- Ans ☐ 1. Prithviraj Chauhan
☐ 2. Maharana Pratap
☐ 3. Muhammad Ghori
☒ 4. Qutbuddin Aibak

Question Type : MCQ

Question ID : 264330133920

Option 1 ID : 264330524703

Option 2 ID : 264330524704

Option 3 ID : 264330524706

Option 4 ID : 264330524705

Status : Answered

Chosen Option : 4

Q.18 What is another name for frozen carbon dioxide?

- Ans ☐ 1. Refrigerant
☐ 2. Coal
☒ 3. Dry Ice
☐ 4. Coke

Question Type : MCQ

Question ID : 264330133913

Option 1 ID : 264330524678

Option 2 ID : 264330524677

Option 3 ID : 264330524675

Option 4 ID : 264330524676

Status : Answered

Chosen Option : 3

Q.19 What is the official language of Bangladesh, a neighbouring country of India?

- Ans ☒ 1. Bengali
☐ 2. Urdu
☐ 3. Dzongkha
☐ 4. Hindi

Question Type : MCQ
Question ID : 264330135471
Option 1 ID : 264330530793
Option 2 ID : 264330530792
Option 3 ID : 264330530794
Option 4 ID : 264330530791
Status : Answered
Chosen Option : 1

Q.20 Which among the following Articles of the Indian Constitution provides for the Attorney General of India?

- Ans ☐ 1. 79
☒ 2. 76
☐ 3. 72
☐ 4. 81

Question Type : MCQ
Question ID : 264330137990
Option 1 ID : 264330540569
Option 2 ID : 264330540568
Option 3 ID : 264330540567
Option 4 ID : 264330540570
Status : Answered
Chosen Option : 2

Q.21 Which of the following reforms led to the enactment of the Government of India Act of 1919?

- Ans ☒ 1. Montagu- Chelmsford reforms
☐ 2. Antislavery reforms
☐ 3. Morley-Minto reforms
☐ 4. Young Bengal movement

Question Type : MCQ
Question ID : 264330133971
Option 1 ID : 264330524910
Option 2 ID : 264330524907
Option 3 ID : 264330524909
Option 4 ID : 264330524908
Status : Answered
Chosen Option : 1

Q.22 Which is the second largest family in modern Indian languages?

- Ans
- ☒ 1. Sino – Tibetan (Kirata)
 - ☒ 2. Indo – European (Aryan)
 - ☒ 3. Austric (Nishada)
 - ☒ 4. Dravidian (Dravida)

Question Type : MCQ

Question ID : 264330138643

Option 1 ID : 264330543180

Option 2 ID : 264330543181

Option 3 ID : 264330543182

Option 4 ID : 264330543179

Status : Answered

Chosen Option : 2

Q.23 Lacchu Maharaj was a noted Indian classical dancer and choreographer of _____ .

- Ans
- ☒ 1. Kathak
 - ☒ 2. Odissi
 - ☒ 3. Chhau
 - ☒ 4. Kuchipudi

Question Type : MCQ

Question ID : 264330138878

Option 1 ID : 264330544120

Option 2 ID : 264330544122

Option 3 ID : 264330544119

Option 4 ID : 264330544121

Status : Answered

Chosen Option : 1

Q.24 What chemical element does "H" stand for in the periodic table of science?

- Ans
- ☒ 1. Helium
 - ☒ 2. Mercury
 - ☒ 3. Holmium
 - ☒ 4. Hydrogen

Question Type : MCQ

Question ID : 264330133911

Option 1 ID : 264330524667

Option 2 ID : 264330524669

Option 3 ID : 264330524670

Option 4 ID : 264330524668

Status : Answered

Chosen Option : 4

Q.25 'I Too Had a Love Story' novel is written by _____ .

- Ans
- ☐ 1. Aravind Adiga
 - ☐ 2. Ruskin Bond
 - ☐ 3. Durjoy Dutta
 - ☒ 4. Ravinder Singh

Question Type : MCQ
 Question ID : 264330138876
 Option 1 ID : 264330544112
 Option 2 ID : 264330544111
 Option 3 ID : 264330544114
 Option 4 ID : 264330544113
 Status : Answered
 Chosen Option : 4

Section : English Language and Comprehension

Q.1 Select the most appropriate word for the given group of words.

Open to more than one interpretation, not having one obvious meaning

- Ans
- ☐ 1. Alchemy
 - ☐ 2. Amateur
 - ☒ 3. Ambiguous
 - ☐ 4. Altercation

Question Type : MCQ
 Question ID : 264330136524
 Option 1 ID : 264330534838
 Option 2 ID : 264330534837
 Option 3 ID : 264330534835
 Option 4 ID : 264330534836
 Status : Answered
 Chosen Option : 3

Q.2 Choose the word that is opposite in meaning to the given word.
Doze

- Ans
- ☐ 1. Cold
 - ☐ 2. Neglect
 - ☐ 3. Snooze
 - ☒ 4. Wake

Question Type : MCQ
 Question ID : 264330134442
 Option 1 ID : 264330526741
 Option 2 ID : 264330526742
 Option 3 ID : 264330526739
 Option 4 ID : 264330526740
 Status : Answered
 Chosen Option : 4

Q.3 Select the most appropriate antonym to substitute the bracketed word in the given sentence.

They are virtually unimpeachable in the (unbiased), invariably correct reading of a race.

- Ans**
- ☒ 1. captivity
 - ☒ 2. stranger
 - ☒ 3. prejudiced
 - ☒ 4. ceasing

Question Type : **MCQ**
 Question ID : **264330136528**
 Option 1 ID : **264330534851**
 Option 2 ID : **264330534854**
 Option 3 ID : **264330534853**
 Option 4 ID : **264330534852**
 Status : **Answered**
 Chosen Option : **3**

Q.4 Select the correctly spelt word.

- Ans**
- ☒ 1. recind
 - ☒ 2. rescind
 - ☒ 3. recsind
 - ☒ 4. resind

Question Type : **MCQ**
 Question ID : **264330136531**
 Option 1 ID : **264330534865**
 Option 2 ID : **264330534863**
 Option 3 ID : **264330534866**
 Option 4 ID : **264330534864**
 Status : **Answered**
 Chosen Option : **2**

Q.5 Select the word from the options which is similar in meaning to the bracketed word given in the sentence below.
 Well, you want an (argument)," he added, "come on then."

- Ans**
- ☒ 1. agreement
 - ☒ 2. enhancement
 - ☒ 3. capability
 - ☒ 4. explanation

Question Type : **MCQ**
 Question ID : **264330136708**
 Option 1 ID : **264330535543**
 Option 2 ID : **264330535546**
 Option 3 ID : **264330535545**
 Option 4 ID : **264330535544**
 Status : **Answered**
 Chosen Option : **4**

Q.6 Identify the segment that contains a grammatical error. If there is no error, select 'No error'.

The Federalists wished to/ make the central government/ as strong possible.

Ans ✓ 1. as strong possible.

✗ 2. The Federalists wished to

✗ 3. No error

✗ 4. make the central government

Question Type : **MCQ**

Question ID : **264330136511**

Option 1 ID : **264330534789**

Option 2 ID : **264330534787**

Option 3 ID : **264330534790**

Option 4 ID : **264330534788**

Status : **Answered**

Chosen Option : **1**

Q.7 Select the most appropriate option to substitute the bracketed segment in the given sentence. If there is no need to substitute it, select 'no substitution required'.

The query isn't (whether he will admit it, but when).

Ans ✓ 1. No substitution required

✗ 2. whether he will be admitting it or not, but when?

✗ 3. whether or nor he will admit it, but when?

✗ 4. whether he will admit it or not, but when?

Question Type : **MCQ**

Question ID : **264330136720**

Option 1 ID : **264330535594**

Option 2 ID : **264330535591**

Option 3 ID : **264330535593**

Option 4 ID : **264330535592**

Status : **Answered**

Chosen Option : **4**

Q.8 Choose the word that can substitute the given group of words.
A person who believes in the equality of all people

Ans ✗ 1. Philologist

✓ 2. Egalitarian

✗ 3. Philodendron

✗ 4. Philander

Question Type : **MCQ**

Question ID : **264330134386**

Option 1 ID : **264330526523**

Option 2 ID : **264330526525**

Option 3 ID : **264330526524**

Option 4 ID : **264330526526**

Status : **Answered**

Chosen Option : **2**

Q.9 Select the most appropriate option to fill in the blank.

This initiative has been sharply criticised as grossly inefficient and _____.

- Ans
- ☒ 1. Capricious
 - ☒ 2. Counterproductive
 - ☒ 3. Calumny
 - ☒ 4. Canonical

Question Type : MCQ
 Question ID : 264330136515
 Option 1 ID : 264330534803
 Option 2 ID : 264330534806
 Option 3 ID : 264330534805
 Option 4 ID : 264330534804
 Status : Answered
 Chosen Option : 2

Q.10 Select the wrongly spelt word.

- Ans
- ☒ 1. Unsavoury
 - ☒ 2. Ethical
 - ☒ 3. Unconventional
 - ☒ 4. Alturisc

Question Type : MCQ
 Question ID : 264330136688
 Option 1 ID : 264330535468
 Option 2 ID : 264330535467
 Option 3 ID : 264330535469
 Option 4 ID : 264330535470
 Status : Answered
 Chosen Option : 4

Q.11 Select the most appropriate synonym of the given word.

Debased

- Ans
- ☒ 1. Amenable
 - ☒ 2. Unamenable
 - ☒ 3. Corrupted
 - ☒ 4. Aggrandize

Question Type : MCQ
 Question ID : 264330136525
 Option 1 ID : 264330534842
 Option 2 ID : 264330534841
 Option 3 ID : 264330534840
 Option 4 ID : 264330534839
 Status : Answered
 Chosen Option : 2

Q.12 Select the most appropriate option to fill in the blank.

We cannot _____ a religion or a political party that ignores the rights of half the human race.

- Ans
- ☒ 1. disseminate
 - ☒ 2. desiccate
 - ☒ 3. condemn
 - ☒ 4. forgive

Question Type : MCQ
Question ID : 264330136689
Option 1 ID : 264330535473
Option 2 ID : 264330535474
Option 3 ID : 264330535471
Option 4 ID : 264330535472
Status : Answered
Chosen Option : 4

Q.13 Select the most appropriate option to fill in the blank.

They probably subsisted on insects and other small _____ invertebrates and perhaps even on aquatic vertebrates.

- Ans
- ☒ 1. skittish
 - ☒ 2. recluse
 - ☒ 3. reverent
 - ☒ 4. terrestrial

Question Type : MCQ
Question ID : 264330136534
Option 1 ID : 264330534877
Option 2 ID : 264330534875
Option 3 ID : 264330534876
Option 4 ID : 264330534878
Status : Answered
Chosen Option : 4

Q.14 Select the word segment that substitutes (replaces) the bracketed word segment correctly and completes the sentence meaningfully. Select the option 'no correction required' if the sentence is correct as given.

The (roof collapsing) in a roar of rock and rubble.

- Ans
- ☒ 1. roof have collapsed
 - ☒ 2. No correction required
 - ☒ 3. roof was collapse
 - ☒ 4. roof collapsed

Question Type : MCQ
Question ID : 264330136592
Option 1 ID : 264330535100
Option 2 ID : 264330535102
Option 3 ID : 264330535099
Option 4 ID : 264330535101
Status : Answered
Chosen Option : 4

Q.15 Find the part of the given sentence that has an error in it. If there is no error, choose 'No error'.
Can you please help me to this project?

- Ans
- ☒ 1. this project?
 - ☒ 2. Can you please
 - ☒ 3. No error
 - ☒ 4. help me to

Question Type : MCQ
Question ID : 264330134347
Option 1 ID : 264330526377
Option 2 ID : 264330526375
Option 3 ID : 264330526378
Option 4 ID : 264330526376
Status : Answered
Chosen Option : 4

Q.16 In the following question, out of the given four alternatives, select the alternative which best expresses the meaning of the Idiom/Phrase.
To kill two birds with one stone

- Ans
- ☒ 1. A work which needs tremendous efforts
 - ☒ 2. To achieve two things with a single effort
 - ☒ 3. The weak point in a person
 - ☒ 4. To accidentally hurt someone's feelings

Question Type : MCQ
Question ID : 264330134392
Option 1 ID : 264330526549
Option 2 ID : 264330526547
Option 3 ID : 264330526548
Option 4 ID : 264330526550
Status : Answered
Chosen Option : 2

Q.17 Select the most appropriate option to fill in the blank.
The duke had capacity, but his life was so _____ that what influence he had upon the king was for evil.

- Ans
- ☒ 1. seditious
 - ☒ 2. scrumptious
 - ☒ 3. lewd
 - ☒ 4. ambitious

Question Type : MCQ
Question ID : 264330136724
Option 1 ID : 264330535608
Option 2 ID : 264330535607
Option 3 ID : 264330535609
Option 4 ID : 264330535610
Status : Answered
Chosen Option : 1

Q.18 Identify the segment that contains a grammatical error. If there is no error, select 'No error'.

He belted two huge sixers, but / eleven to get of the last two / deliveries was a big ask.

- Ans**
- ✓ 1. eleven to get of the last two
 - ✗ 2. deliveries was a big ask.
 - ✗ 3. No error
 - ✗ 4. He belted two huge sixers, but

Question Type : **MCQ**
 Question ID : **264330136717**
 Option 1 ID : **264330535580**
 Option 2 ID : **264330535581**
 Option 3 ID : **264330535582**
 Option 4 ID : **264330535579**
 Status : **Answered**
 Chosen Option : **4**

Q.19 Select the most appropriate meaning of the bracketed idiom in the given sentence.

Sure, fixing a flubbed decision isn't always (a piece of cake), but it's rarely impossible.

- Ans**
- ✗ 1. The family bond is closer than anything else
 - ✓ 2. A task that can be accomplished very easily
 - ✗ 3. A rare event or occurrence
 - ✗ 4. Having no stand, shows favour at one time and unfavour at another

Question Type : **MCQ**
 Question ID : **264330136530**
 Option 1 ID : **264330534861**
 Option 2 ID : **264330534860**
 Option 3 ID : **264330534859**
 Option 4 ID : **264330534862**
 Status : **Answered**
 Chosen Option : **2**

Q.20 Improve the underlined part of the sentence. Choose 'No improvement' as an answer if the sentence is grammatically correct.

The dessert was many sweet for my tastes.

- Ans**
- ✗ 1. too sweetly
 - ✗ 2. more sweeter
 - ✓ 3. too sweet
 - ✗ 4. No improvement

Question Type : **MCQ**
 Question ID : **264330134827**
 Option 1 ID : **264330528249**
 Option 2 ID : **264330528247**
 Option 3 ID : **264330528248**
 Option 4 ID : **264330528250**
 Status : **Answered**
 Chosen Option : **3**

Comprehension:

In the following passage some of the words have been deleted. Read the passage carefully and select the correct answer for the given blank out of the four alternatives.
Network security (1) _____ securing a network and protecting the user's information about (2) _____ is connected through that network. Over the network (3) _____ steal, the packets of data through sniffing and spoofing (4) _____, man in the middle attack, war driving, etc, and misuse the data for their (5) _____.

SubQuestion No : 21

Q.21 Select the most appropriate option to fill in blank number 1.

- Ans ☒ 1. calls
☒ 2. names
☒ 3. means
☒ 4. declares

Question Type : MCQ
Question ID : 264330134433
Option 1 ID : 264330526706
Option 2 ID : 264330526704
Option 3 ID : 264330526705
Option 4 ID : 264330526703
Status : Answered
Chosen Option : 3

Comprehension:

In the following passage some of the words have been deleted. Read the passage carefully and select the correct answer for the given blank out of the four alternatives.
Network security (1) _____ securing a network and protecting the user's information about (2) _____ is connected through that network. Over the network (3) _____ steal, the packets of data through sniffing and spoofing (4) _____, man in the middle attack, war driving, etc, and misuse the data for their (5) _____.

SubQuestion No : 22

Q.22 Select the most appropriate option to fill in blank number 2.

- Ans ☒ 1. which
☒ 2. who
☒ 3. whose
☒ 4. that

Question Type : MCQ
Question ID : 264330134434
Option 1 ID : 264330526709
Option 2 ID : 264330526710
Option 3 ID : 264330526708
Option 4 ID : 264330526707
Status : Answered
Chosen Option : 2

Comprehension:

In the following passage some of the words have been deleted. Read the passage carefully and select the correct answer for the given blank out of the four alternatives.
 Network security (1) _____ securing a network and protecting the user's information about (2) _____ is connected through that network. Over the network (3) _____ steal, the packets of data through sniffing and spoofing (4) _____, man in the middle attack, war driving, etc, and misuse the data for their (5) _____.

SubQuestion No : 23

Q.23 Select the most appropriate option to fill in blank number 3.

- Ans

✓ 1. hackers

✗ 2. labourers

✗ 3. engineers

✗ 4. smugglers

Question Type : MCQ
 Question ID : 264330134435
 Option 1 ID : 264330526713
 Option 2 ID : 264330526714
 Option 3 ID : 264330526711
 Option 4 ID : 264330526712
 Status : Answered
 Chosen Option : 1

Comprehension:

In the following passage some of the words have been deleted. Read the passage carefully and select the correct answer for the given blank out of the four alternatives.
 Network security (1) _____ securing a network and protecting the user's information about (2) _____ is connected through that network. Over the network (3) _____ steal, the packets of data through sniffing and spoofing (4) _____, man in the middle attack, war driving, etc, and misuse the data for their (5) _____.

SubQuestion No : 24

Q.24 Select the most appropriate option to fill in blank number 4.

- Ans

✗ 1. raids

✓ 2. attacks

✗ 3. charges

✗ 4. guards

Question Type : MCQ
 Question ID : 264330134436
 Option 1 ID : 264330526717
 Option 2 ID : 264330526718
 Option 3 ID : 264330526716
 Option 4 ID : 264330526715
 Status : Answered
 Chosen Option : 3

Comprehension:


In the following passage some of the words have been deleted. Read the passage carefully and select the correct answer for the given blank out of the four alternatives.


Network security (1) _____ securing a network and protecting the user's information about (2) _____ is connected through that network. Over the network (3) _____ steal, the packets of data through sniffing and spoofing (4) _____, man in the middle attack, war driving, etc, and misuse the data for their (5) _____.

SubQuestion No : 25

Q.25 Select the most appropriate option to fill in blank number 5.

Ans  1. benefits

 2. banes

 3. pleasure

 4. hindrances

Question Type : **MCQ**

Question ID : **264330134437**

Option 1 ID : **264330526721**

Option 2 ID : **264330526719**

Option 3 ID : **264330526722**

Option 4 ID : **264330526720**

Status : **Answered**

Chosen Option : **1**

