

Multi Tasking Non Technical Staff and Havaladar CBIC and CBN Examination 2022

Roll Number	
Candidate Name	
Venue Name	Maa Santoshi Computers Pvt. Ltd.
Exam Date	13/06/2023
Exam Time	9:00 AM - 10:30 AM
Subject	MTS Non Tech Havaladar CBIC and CBN Examination 2022

Section : Numerical and Mathematical Ability

Q.1 Rohit and Mohit can do a piece of work in 4 days, while Ram and Shyam can do the same work in 12 days. In how many days will Rohit, Mohit, Ram and Shyam do it together?

- Ans**
- ☒ 1. 5 days
 - ☒ 2. 3 days
 - ☒ 3. 4 days
 - ☒ 4. 2 days

Question Type : **MCQ**
 Question ID : **264330140814**
 Option 1 ID : **264330551606**
 Option 2 ID : **264330551604**
 Option 3 ID : **264330551605**
 Option 4 ID : **264330551603**
 Status : **Answered**
 Chosen Option : **2**

Q.2 If $X : Y = 2 : 3$ and $Y : Z = 6 : 7$, then what is the value of $(X + Z) : Y$?

- Ans**
- ☒ 1. 17 : 14
 - ☒ 2. 17 : 15
 - ☒ 3. 11 : 6
 - ☒ 4. 11 : 8

Question Type : **MCQ**
 Question ID : **264330139596**
 Option 1 ID : **264330546799**
 Option 2 ID : **264330546802**
 Option 3 ID : **264330546801**
 Option 4 ID : **264330546800**
 Status : **Answered**
 Chosen Option : **3**

Test Prime

**ALL EXAMS,
ONE SUBSCRIPTION**



70,000+
Mock Tests



**Personalised
Report Card**



**Unlimited
Re-Attempt**



600+
Exam Covered



**Previous Year
Papers**

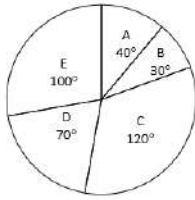


**500%
Refund**



ATTEMPT FREE MOCK NOW

- Q.3** The pie chart given below shows the number of teachers in five universities. The total teachers in all these five universities are 720. The number of teachers in a particular university is shown in terms of degree with respect to the total number of teachers in all these five universities.



J_1 = The value of average number of teachers in B and C.

J_2 = The value of average number of teachers in A and E.

What is the value of $(J_2 + J_1)$?

- Ans**
- ☒ 1. 210
 - ☒ 2. 290
 - ☒ 3. 250
 - ☒ 4. 240

Question Type : MCQ
 Question ID : 264330139930
 Option 1 ID : 264330548102
 Option 2 ID : 264330548100
 Option 3 ID : 264330548099
 Option 4 ID : 264330548101
 Status : Answered
 Chosen Option : 2

- Q.4** A boat can travel with a speed of 15 km/hr in still water. If the speed of the stream is 5 km/hr, find the time taken by the boat to go 80 km downstream .

- Ans**
- ☒ 1. 3 hr
 - ☒ 2. 4 hr
 - ☒ 3. 6 hr
 - ☒ 4. 5 hr

Question Type : MCQ
 Question ID : 264330140812
 Option 1 ID : 264330551595
 Option 2 ID : 264330551596
 Option 3 ID : 264330551598
 Option 4 ID : 264330551597
 Status : Answered
 Chosen Option : 2

Q.5 A work was finished by L, P and Q together. L and P together finished 50 percent part of the work and P and Q together finished 60 percent part of the work. Who among the three is most efficient?

Ans ☒ 1. All are equally efficient

☒ 2. L

☒ 3. Q

☒ 4. P

Question Type : **MCQ**

Question ID : **264330139017**

Option 1 ID : **264330544678**

Option 2 ID : **264330544675**

Option 3 ID : **264330544677**

Option 4 ID : **264330544676**

Status : **Answered**

Chosen Option : **3**

Q.6 A shopkeeper sells a book at a loss of 60 percent. Had he sold the book for Rs. 150 more, then he would have suffered a loss of 30 percent. To earn a profit of 20 percent, what should be the selling price of the book?

Ans ☒ 1. Rs. 650

☒ 2. Rs. 600

☒ 3. Rs. 700

☒ 4. Rs. 550

Question Type : **MCQ**

Question ID : **264330140638**

Option 1 ID : **264330550899**

Option 2 ID : **264330550900**

Option 3 ID : **264330550901**

Option 4 ID : **264330550902**

Status : **Answered**

Chosen Option : **2**

Q.7 The diameter of a sphere is 14.7 meter. What will be the volume of the sphere?

Ans ☒ 1. $1663.893 m^3$

☒ 2. $1873.487 m^3$

☒ 3. $1693.563 m^3$

☒ 4. $1783.723 m^3$

Question Type : **MCQ**

Question ID : **264330138454**

Option 1 ID : **264330542426**

Option 2 ID : **264330542425**

Option 3 ID : **264330542424**

Option 4 ID : **264330542423**

Status : **Answered**

Chosen Option : **1**

Q.8 135 kg of an alloy A is mixed with 72 kg of alloy B to get a new alloy. If alloy A has zinc and copper in the ratio 4 : 5 and alloy B has zinc and copper in ratio 7 : 5, then what is the weight of zinc in the new alloy?

- Ans**
- ✓ 1. 102 kg
 - ✗ 2. 115 kg
 - ✗ 3. 85 kg
 - ✗ 4. 92 kg

Question Type : **MCQ**
 Question ID : **264330140640**
 Option 1 ID : **264330550910**
 Option 2 ID : **264330550909**
 Option 3 ID : **264330550908**
 Option 4 ID : **264330550907**
 Status : **Answered**
 Chosen Option : **1**

Q.9 Cost price of a watch is Rs. 750. If the loss percentage is 40 percent, then what is the value of loss?

- Ans**
- ✓ 1. Rs. 300
 - ✗ 2. Rs. 280
 - ✗ 3. Rs. 420
 - ✗ 4. Rs. 220

Question Type : **MCQ**
 Question ID : **264330139897**
 Option 1 ID : **264330547969**
 Option 2 ID : **264330547970**
 Option 3 ID : **264330547968**
 Option 4 ID : **264330547967**
 Status : **Answered**
 Chosen Option : **1**

Q.10 Simple Interest received by a person in 15 years on a principal of Rs. 6000 is 150 percent of the principal. What is the annual rate of interest?

- Ans**
- ✗ 1. 20 percent
 - ✗ 2. 30 percent
 - ✓ 3. 10 percent
 - ✗ 4. 25 percent

Question Type : **MCQ**
 Question ID : **264330140621**
 Option 1 ID : **264330550833**
 Option 2 ID : **264330550832**
 Option 3 ID : **264330550834**
 Option 4 ID : **264330550831**
 Status : **Answered**
 Chosen Option : **3**

Q.11 The table given below shows the number of boys and girls in a school in 6 years.

Years	Boys	Girls
Y1	90	80
Y2	70	60
Y3	130	110
Y4	110	150
Y5	170	50
Y6	100	90

Which of the following statement is NOT correct?

- I. The number of girls in year Y6 is 9 percent of the number of boys in year Y6.
- II. The average number of boys in year Y1 and Y2 are 80.

Ans

- ✓ 1. Only I
- ✗ 2. Both I and II
- ✗ 3. Only II
- ✗ 4. Neither I nor II

Question Type : MCQ

Question ID : 264330139646

Option 1 ID : 264330546999

Option 2 ID : 264330547001

Option 3 ID : 264330547000

Option 4 ID : 264330547002

Status : Answered

Chosen Option : 1

Q.12 In what ratio must water be mixed with milk worth Rs. 50 per litre so as to produce a mixture worth Rs. 35 per litre?
(water is available free of cost)

Ans

- ✓ 1. 3:7
- ✗ 2. 7:5
- ✗ 3. 3:5
- ✗ 4. 2:7

Question Type : MCQ

Question ID : 264330133839

Option 1 ID : 264330524381

Option 2 ID : 264330524380

Option 3 ID : 264330524379

Option 4 ID : 264330524382

Status : Answered

Chosen Option : 1

Q.13 Which is the smallest three-digit number which when increased by 5 becomes divisible by both 2 and 3?

- Ans
- ☒ 1. 102
 - ☒ 2. 105
 - ☒ 3. 103
 - ☒ 4. 108

Question Type : MCQ
Question ID : 264330140598
Option 1 ID : 264330550746
Option 2 ID : 264330550744
Option 3 ID : 264330550743
Option 4 ID : 264330550745
Status : Answered
Chosen Option : 3

Q.14 What is the value of $\frac{12 \times 4 \div 3 \text{ of } 16 + 24 - 5}{46 \div 23 \times 2}$?

- Ans
- ☒ 1. 5
 - ☒ 2. 3
 - ☒ 3. 4
 - ☒ 4. 6

Question Type : MCQ
Question ID : 264330139947
Option 1 ID : 264330548170
Option 2 ID : 264330548168
Option 3 ID : 264330548167
Option 4 ID : 264330548169
Status : Answered
Chosen Option : 1

Q.15 A farmer's land is in the shape of a trapezium which has its parallel sides measuring 7.58 yards and 6.42 yards and the distance between the parallel sides is 6.50 yards. The cost of ploughing the land is Rs. 2000 per square yard. What amount have to be spent in order to plough the entire land?

- Ans
- ☒ 1. Rs. 85000
 - ☒ 2. Rs. 91000
 - ☒ 3. Rs. 72000
 - ☒ 4. Rs. 102000

Question Type : MCQ
Question ID : 264330140227
Option 1 ID : 264330549290
Option 2 ID : 264330549289
Option 3 ID : 264330549288
Option 4 ID : 264330549287
Status : Answered
Chosen Option : 2

Q.16 The marked price of a pen is Rs. 5000. The shopkeeper gives two successive discounts of 15 percent and b percent to the customer. If the customer pays Rs. 4080 for the pen, then what is the value of b?

- Ans**
- ☒ 1. 3 percent
 - ☒ 2. 5 percent
 - ☒ 3. 7.5 percent
 - ☒ 4. 4 percent

Question Type : **MCQ**

Question ID : **264330140251**

Option 1 ID : **264330549383**

Option 2 ID : **264330549385**

Option 3 ID : **264330549386**

Option 4 ID : **264330549384**

Status : **Answered**

Chosen Option : **4**

Q.17 A number is increased by 30% and then the increased number is decreased by 30%. The net increase or decrease is:

- Ans**
- ☒ 1. 12% increase
 - ☒ 2. 9% decrease
 - ☒ 3. 15% decrease
 - ☒ 4. 30% increase

Question Type : **MCQ**

Question ID : **264330140826**

Option 1 ID : **264330551654**

Option 2 ID : **264330551653**

Option 3 ID : **264330551652**

Option 4 ID : **264330551651**

Status : **Answered**

Chosen Option : **2**

Q.18 Average of 24 observations is 41. Average of first 9 observations is 42. Average of last 16 observations is 39. What is the value of 9th observation?

- Ans**
- ☒ 1. 14
 - ☒ 2. 24
 - ☒ 3. 18
 - ☒ 4. 20

Question Type : **MCQ**

Question ID : **264330140587**

Option 1 ID : **264330550700**

Option 2 ID : **264330550701**

Option 3 ID : **264330550702**

Option 4 ID : **264330550699**

Status : **Answered**

Chosen Option : **3**

Q.19 What is the value of $\sqrt{0.52 \times 0.52 + 0.31 \times 0.31 + 0.62 \times 0.52}$?

- Ans
- ☒ 1. 0.63
 - ☒ 2. 0.73
 - ☒ 3. 0.83
 - ☒ 4. 0.93

Question Type : MCQ

Question ID : 264330140550

Option 1 ID : 264330550558

Option 2 ID : 264330550555

Option 3 ID : 264330550557

Option 4 ID : 264330550556

Status : Answered

Chosen Option : 3

Q.20 A sum becomes Rs. 33800 in 2 years and Rs. 43,940 in 3 years, when lent in a scheme of compound interest (compounding annually). If double the sum is invested in the same scheme for 2 years, then what will be the amount obtained at end of 2 years?

- Ans
- ☒ 1. Rs. 62480
 - ☒ 2. Rs. 67600
 - ☒ 3. Rs. 71240
 - ☒ 4. Rs. 60,420

Question Type : MCQ

Question ID : 264330140574

Option 1 ID : 264330550648

Option 2 ID : 264330550650

Option 3 ID : 264330550649

Option 4 ID : 264330550647

Status : Answered

Chosen Option : 3

Section : Reasoning Ability and Problem Solving

Q.1 Select the correct mirror image of the given figure when the mirror is placed at MN as shown below.

REPLACE

M
N

- Ans
- ☒ 1. R E P L A C E
 - ☒ 2. E C A P L E R
 - ☒ 3. R E P L A C E
 - ☒ 4. E C A P L E R

Question Type : MCQ

Question ID : 264330140470

Option 1 ID : 264330550259

Option 2 ID : 264330550260

Option 3 ID : 264330550262

Option 4 ID : 264330550261

Status : Answered

Chosen Option : 4

- Q.2** Two Statements are given followed by two conclusions numbered I and II. Assuming the statements to be true, even if they seem to be at variance with commonly known facts, decide which of the conclusions logically follow(s) from the statements.
- Statements:
Some Ants are Bats.
Some Bats are Cats.
- Conclusions:
I. Some Ants are Cats.
II. All Bats can never be Cats.

Ans ☒ 1. Neither conclusion I nor II follow.
☐ 2. Only conclusion I follows.
☐ 3. Only conclusion II follows.
☐ 4. Both conclusions I and II follow.

Question Type : **MCQ**
Question ID : **264330140103**
Option 1 ID : **264330548794**
Option 2 ID : **264330548791**
Option 3 ID : **264330548792**
Option 4 ID : **264330548793**
Status : **Answered**
Chosen Option : **1**

- Q.3** Select the set in which the numbers are related in the same way as are the numbers of the following sets.(NOTE : Operations should be performed on the whole numbers, without breaking down the numbers into its constituent digits. E.g 13 – Operations on 13 such as adding / subtracting /multiplying etc. to 13 can be performed. Breaking down 13 into 1 and 3 and then performing mathematical operations on 1 and 3 is not allowed)
- (4, 6, 72)
(5, 7, 105)

Ans ☒ 1. (6, 8, 144)
☐ 2. (2, 5, 40)
☐ 3. (3, 6, 36)
☐ 4. (6, 9, 108)

Question Type : **MCQ**
Question ID : **264330140486**
Option 1 ID : **264330550325**
Option 2 ID : **264330550324**
Option 3 ID : **264330550323**
Option 4 ID : **264330550326**
Status : **Answered**
Chosen Option : **1**

- Q.4** In a certain code language, 'MANAGE' is coded as '629023', 'NARAT' is coded as '52342', 'TENM' is coded as '3695'. What is the code for 'R' in that code language?

Ans ☐ 1. 2
☐ 2. 3
☒ 3. 4
☐ 4. 5

Question Type : **MCQ**
Question ID : **264330140980**
Option 1 ID : **264330552268**
Option 2 ID : **264330552270**
Option 3 ID : **264330552269**
Option 4 ID : **264330552267**
Status : **Answered**
Chosen Option : **3**

Q.5 In a certain code language, 'BECOME' is coded as 'HPRFHE'. What is the code for 'ACTIVE' in that code language?

- Ans**
- ☒ 1. HYLVD
 - ☒ 2. HYLWDD
 - ☒ 3. HYLWFD
 - ☒ 4. HYLWFC

Question Type : **MCQ**

Question ID : **264330139553**

Option 1 ID : **264330546629**

Option 2 ID : **264330546628**

Option 3 ID : **264330546627**

Option 4 ID : **264330546630**

Status : **Answered**

Chosen Option : **3**

Q.6 Select the option that is related to the fifth term in the same way as the second term is related to the first term and fourth term is related to third term.

TRA : FNW :: MNG : LJP :: FOK : ?

- Ans**
- ☒ 1. PLJ
 - ☒ 2. PKJ
 - ☒ 3. PLI
 - ☒ 4. PKI

Question Type : **MCQ**

Question ID : **264330140978**

Option 1 ID : **264330552259**

Option 2 ID : **264330552260**

Option 3 ID : **264330552262**

Option 4 ID : **264330552261**

Status : **Answered**

Chosen Option : **4**

Q.7 Which two numbers should be interchanged to make the given equation correct?

$$192 \div 12 \times 6 + 16 - 18 = 66$$

- Ans**
- ☒ 1. 16 and 18
 - ☒ 2. 16 and 6
 - ☒ 3. 6 and 18
 - ☒ 4. 16 and 12

Question Type : **MCQ**

Question ID : **264330140448**

Option 1 ID : **264330550172**

Option 2 ID : **264330550171**

Option 3 ID : **264330550174**

Option 4 ID : **264330550173**

Status : **Answered**

Chosen Option : **4**

Q.8 Which of the following numbers will replace the question mark (?) in the given series?

48, 50, 53, 58, 65, 76, 89, ?

- Ans
- ☒ 1. 203
 - ☒ 2. 150
 - ☒ 3. 195
 - ☒ 4. 106

Question Type : MCQ

Question ID : 264330140145

Option 1 ID : 264330548960

Option 2 ID : 264330548961

Option 3 ID : 264330548962

Option 4 ID : 264330548959

Status : Answered

Chosen Option : 4

Q.9 If A denotes 'addition', B denotes 'multiplication', C denotes 'subtraction', and D denotes 'division', then what will be the value of the following equation?

7 B 5 A 31 C (48 D 6) = ?

- Ans
- ☒ 1. 62
 - ☒ 2. 38
 - ☒ 3. 58
 - ☒ 4. 46

Question Type : MCQ

Question ID : 264330140006

Option 1 ID : 264330548406

Option 2 ID : 264330548405

Option 3 ID : 264330548404

Option 4 ID : 264330548403

Status : Answered

Chosen Option : 3

Q.10 Two Statements are given followed by two conclusions numbered I and II. Assuming the statements to be true, even if they seem to be at variance with commonly known facts, decide which of the conclusions logically follow(s) from the statements.

Statements:

Some Tea are Coffee.

All Coffee are Sweet.

Conclusions:

I. All sweet are coffee.

II. Some sweet are tea.

- Ans
- ☒ 1. Only conclusion II follows.
 - ☒ 2. Neither conclusion I nor II follow.
 - ☒ 3. Both conclusions I and II follow.
 - ☒ 4. Only conclusion I follows.

Question Type : MCQ

Question ID : 264330140461

Option 1 ID : 264330550224

Option 2 ID : 264330550226

Option 3 ID : 264330550225

Option 4 ID : 264330550223

Status : Answered

Chosen Option : 1

Q.11 Select the option that is related to the third number in the same way as the second number is related to the first number.
529 : 577 :: 841 : ?

- Ans**
- ☒ 1. 902
 - ☒ 2. 899
 - ☒ 3. 911
 - ☒ 4. 901

Question Type : **MCQ**
Question ID : **264330140465**
Option 1 ID : **264330550242**
Option 2 ID : **264330550239**
Option 3 ID : **264330550241**
Option 4 ID : **264330550240**
Status : **Answered**
Chosen Option : **4**

Q.12 Five girls Babita, Lita, Mita, Rita and Tina are playing a game. They are sitting in a row facing towards the north. Mita is sitting at the west end and Tina is sitting at the east end. Lita and Rita are sitting together next to each other. Babita is sitting to the immediate left of Lita and to the right of Mita. Who is sitting second from the east end?

- Ans**
- ☒ 1. Rita
 - ☒ 2. Lita
 - ☒ 3. Babita
 - ☒ 4. Tina

Question Type : **MCQ**
Question ID : **264330140099**
Option 1 ID : **264330548776**
Option 2 ID : **264330548775**
Option 3 ID : **264330548778**
Option 4 ID : **264330548777**
Status : **Answered**
Chosen Option : **1**

Q.13 Select the option that is related to the third letter cluster in the same way as the second letter cluster is related to the first letter cluster.
BAG : ACZBFH :: DOG : ?

- Ans**
- ☒ 1. CENPHF
 - ☒ 2. CNEPFH
 - ☒ 3. CENPFH
 - ☒ 4. CNEFHH

Question Type : **MCQ**
Question ID : **264330140074**
Option 1 ID : **264330548676**
Option 2 ID : **264330548678**
Option 3 ID : **264330548677**
Option 4 ID : **264330548675**
Status : **Answered**
Chosen Option : **3**

Q.14 A series is given with one term missing. Select the correct alternative from the given ones that will complete the series.

GRAM, JUDP, MXGS, ?, SDMY

- Ans**
- ☒ 1. PAJV
 - ☐ 2. PAKV
 - ☐ 3. PAJU
 - ☐ 4. PBKV

Question Type : MCQ

Question ID : 264330139548

Option 1 ID : 264330546609

Option 2 ID : 264330546610

Option 3 ID : 264330546608

Option 4 ID : 264330546607

Status : Answered

Chosen Option : 1

Q.15 Height of Rahul, Hardik, Surya, Mohan and Kamal are compared. Height of Rahul is less than only three persons. Height of Surya is neither more nor less than the height of Rahul. Height of Kamal is more than Mohan but less than Hardik. Height of how many persons is more than Surya but less than Hardik?

- Ans**
- ☐ 1. 0
 - ☒ 2. 2
 - ☐ 3. 3
 - ☐ 4. 1

Question Type : MCQ

Question ID : 264330139556

Option 1 ID : 264330546641

Option 2 ID : 264330546642

Option 3 ID : 264330546639

Option 4 ID : 264330546640

Status : Answered

Chosen Option : 2

Q.16 Select the option figure that will replace the question mark (?) in the figure given below to complete the pattern.
(rotation is not allowed)



Ans

✗ 1.



✗ 2.



✗ 3.



✓ 4.



Question Type : MCQ

Question ID : 264330140471

Option 1 ID : 264330550263

Option 2 ID : 264330550265

Option 3 ID : 264330550266

Option 4 ID : 264330550264

Status : Answered

Chosen Option : 4

Q.17 Eight boys Ram, Sumit, Sunil, Rahul, Raj, Aman, Amit and Anil are sitting around a circular table facing opposite to the centre (not necessarily in the same order). Sunil is to the immediate left of Ram. Ram is fourth to the left of Rahul. Amit is fourth to the right of raj. Raj is second to the right of Ram. Anil is second to the left of Sumit. Aman is second to the right of Sumit. Who is second to the right of Sunil?

- Ans**
- ☒ 1. Aman
 - ☒ 2. Raj
 - ☒ 3. Rahul
 - ☒ 4. Anil

Question Type : MCQ

Question ID : 264330140060

Option 1 ID : 264330548620

Option 2 ID : 264330548622

Option 3 ID : 264330548621

Option 4 ID : 264330548619

Status : Answered

Chosen Option : 4

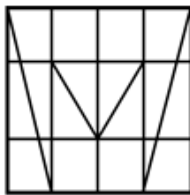
Q.18 Select the option figure in which the given figure (X) is embedded as its part (rotation is NOT allowed).



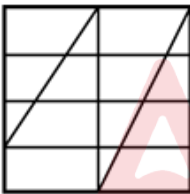
(X)

Ans

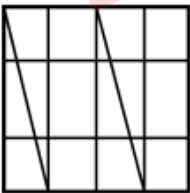
☒ 1.



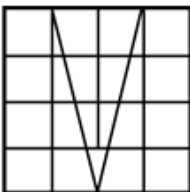
☒ 2.



☒ 3.



☒ 4.



Question Type : MCQ

Question ID : 264330140110

Option 1 ID : 264330548820

Option 2 ID : 264330548821

Option 3 ID : 264330548819

Option 4 ID : 264330548822

Status : Answered

Chosen Option : 1

Q.19 In the following question, select the missing number of the given series.

10, -18, -46, -74, -102, ?

- Ans
- ☒ 1. -140
 - ☒ 2. -133
 - ☒ 3. -130
 - ☒ 4. -150

Question Type : MCQ
Question ID : 264330140967
Option 1 ID : 264330552216
Option 2 ID : 264330552217
Option 3 ID : 264330552215
Option 4 ID : 264330552218
Status : Answered
Chosen Option : 3

Q.20 In a certain code language, 'XIWG' is written as 'HXJY'. How will 'MSOE' be written in that language?

- Ans
- ☒ 1. FTPN
 - ☒ 2. FPTT
 - ☒ 3. FPTN
 - ☒ 4. FNTP

Question Type : MCQ
Question ID : 264330140136
Option 1 ID : 264330548923
Option 2 ID : 264330548926
Option 3 ID : 264330548925
Option 4 ID : 264330548924
Status : Answered
Chosen Option : 3

Section : General Awareness

Q.1 Which is the largest planet of the solar system?

- Ans
- ☒ 1. Neptune
 - ☒ 2. Earth
 - ☒ 3. Uranus
 - ☒ 4. Jupiter

Question Type : MCQ
Question ID : 264330139738
Option 1 ID : 264330547370
Option 2 ID : 264330547367
Option 3 ID : 264330547369
Option 4 ID : 264330547368
Status : Answered
Chosen Option : 4

Q.2 Who is the author of the book titled 'Fearless Governance'?

Ans ☒ 1. Amitav Ghosh

☒ 2. Anuj Dhar

☒ 3. Anirudh Suri

☒ 4. Kiran Bedi

Question Type : MCQ

Question ID : 264330138976

Option 1 ID : 264330544511

Option 2 ID : 264330544512

Option 3 ID : 264330544514

Option 4 ID : 264330544513

Status : Answered

Chosen Option : 4

Q.3 There are regions where farmers specialise in vegetables only. This type of farming is known as _____.

Ans ☒ 1. Mixed farming

☒ 2. Pastoral farming

☒ 3. Dairy farming

☒ 4. Truck farming

Question Type : MCQ

Question ID : 264330139743

Option 1 ID : 264330547388

Option 2 ID : 264330547387

Option 3 ID : 264330547390

Option 4 ID : 264330547389

Status : Answered

Chosen Option : 4

Q.4 Tensile or compressive stress can also be termed as _____.

Ans ☒ 1. longitudinal stress

☒ 2. tangential stress

☒ 3. hydraulic stress

☒ 4. shearing stress

Question Type : MCQ

Question ID : 264330140322

Option 1 ID : 264330549668

Option 2 ID : 264330549669

Option 3 ID : 264330549670

Option 4 ID : 264330549667

Status : Answered

Chosen Option : 1

Q.5 Panthi dance form is associated with _____ state of India.

- Ans
- ☐ 1. Kerala
 - ☐ 2. Maharashtra
 - ☐ 3. Punjab
 - ☒ 4. Chhattisgarh

Question Type : MCQ
Question ID : 264330140728
Option 1 ID : 264330551260
Option 2 ID : 264330551262
Option 3 ID : 264330551259
Option 4 ID : 264330551261
Status : Answered
Chosen Option : 4

Q.6 Which of the following referred to as 'paper taxes'?

- I. Wealth tax
- II. Gift tax

- Ans
- ☐ 1. Only II
 - ☐ 2. Only I
 - ☒ 3. Both I and II
 - ☐ 4. Neither I nor II

Question Type : MCQ
Question ID : 264330139876
Option 1 ID : 264330547884
Option 2 ID : 264330547883
Option 3 ID : 264330547885
Option 4 ID : 264330547886
Status : Not Answered
Chosen Option : --

Q.7 The Buddha belonged to a small gana known as _____.

- Ans
- ☒ 1. Sakya gana
 - ☐ 2. Avanti Gana
 - ☐ 3. Kuru gana
 - ☐ 4. Panchal gana

Question Type : MCQ
Question ID : 264330140902
Option 1 ID : 264330551956
Option 2 ID : 264330551957
Option 3 ID : 264330551955
Option 4 ID : 264330551958
Status : Not Answered
Chosen Option : --

Q.8 Jayanthi Kumaresh is one of the foremost exponents of _____.

- Ans
- ☐ 1. santoor
 - ☐ 2. tabla
 - ☐ 3. sitar
 - ☒ 4. veena

Question Type : MCQ
Question ID : 264330140273
Option 1 ID : 264330549474
Option 2 ID : 264330549471
Option 3 ID : 264330549472
Option 4 ID : 264330549473
Status : Not Answered
Chosen Option : --

Q.9 The Chhath Puja festival is dedicated to the _____ God.

- Ans
- ☐ 1. Vishnu
 - ☒ 2. Sun
 - ☐ 3. Indra
 - ☐ 4. Brahma

Question Type : MCQ
Question ID : 264330140345
Option 1 ID : 264330549760
Option 2 ID : 264330549762
Option 3 ID : 264330549761
Option 4 ID : 264330549759
Status : Answered
Chosen Option : 2

Q.10 Barakar is the tributary of which of the following rivers?

- Ans
- ☐ 1. Kaveri
 - ☐ 2. Krishna
 - ☐ 3. Ravi
 - ☒ 4. Damodar

Question Type : MCQ
Question ID : 264330140352
Option 1 ID : 264330549790
Option 2 ID : 264330549789
Option 3 ID : 264330549788
Option 4 ID : 264330549787
Status : Answered
Chosen Option : 2

Q.11 The famous Sheesh Mahal in Punjab was built by which of the following rulers?

- Ans
- ☒ 1. Maharaja Sawai Pratap Singh
 - ☒ 2. Rana Kumbha
 - ☒ 3. Maharaja Narinder Singh
 - ☒ 4. Raja Man Singh - I

Question Type : MCQ
Question ID : 264330140935
Option 1 ID : 264330552087
Option 2 ID : 264330552090
Option 3 ID : 264330552088
Option 4 ID : 264330552089
Status : Not Answered
Chosen Option : --

Q.12 Article _____ of the Indian constitution provides for superintendence, direction and control of elections vested in an Election commission.

- Ans
- ☒ 1. 336
 - ☒ 2. 338
 - ☒ 3. 330
 - ☒ 4. 324

Question Type : MCQ
Question ID : 264330140278
Option 1 ID : 264330549493
Option 2 ID : 264330549494
Option 3 ID : 264330549492
Option 4 ID : 264330549491
Status : Answered
Chosen Option : 4

Q.13 Which class of algae is commonly known as brown algae?

- Ans
- ☒ 1. Rhodophyceae
 - ☒ 2. Phaeophyceae
 - ☒ 3. Chlorophyceae
 - ☒ 4. Chrysophyceae

Question Type : MCQ
Question ID : 264330140732
Option 1 ID : 264330551278
Option 2 ID : 264330551276
Option 3 ID : 264330551275
Option 4 ID : 264330551277
Status : Answered
Chosen Option : 3

Q.14 The Constitution (Scheduled Castes and Scheduled Tribes) Orders Bills 2022 was introduced in _____ state of India.

- Ans
- ☒ 1. Kerala
 - ☒ 2. Punjab
 - ☒ 3. Rajasthan
 - ☒ 4. Jharkhand

Question Type : MCQ
 Question ID : 264330140726
 Option 1 ID : 264330551252
 Option 2 ID : 264330551251
 Option 3 ID : 264330551253
 Option 4 ID : 264330551254
 Status : Not Answered
 Chosen Option : --

Q.15 Which among the following Indian Olympians is associated with wrestling sport?

- Ans
- ☒ 1. Neeraj Chopra
 - ☒ 2. Abhinav Bindra
 - ☒ 3. Aditi Ashok
 - ☒ 4. Sakshi Malik

Question Type : MCQ
 Question ID : 264330140929
 Option 1 ID : 264330552064
 Option 2 ID : 264330552063
 Option 3 ID : 264330552065
 Option 4 ID : 264330552066
 Status : Answered
 Chosen Option : 4

Q.16 Who wrote the novel "Life of Pi"?

- Ans
- ☒ 1. Jonathan Safran Foer
 - ☒ 2. Khaled Hosseini
 - ☒ 3. Yann Martel
 - ☒ 4. Carol Birch

Question Type : MCQ
 Question ID : 264330140668
 Option 1 ID : 264330551021
 Option 2 ID : 264330551022
 Option 3 ID : 264330551019
 Option 4 ID : 264330551020
 Status : Answered
 Chosen Option : 1

Q.17 The colour of the alluvial soils varies from _____.

- Ans
- ☒ 1. pale white to warm white
 - ☒ 2. light orange to dark orange
 - ☒ 3. orange to red
 - ☒ 4. light grey to ash grey

Question Type : MCQ

Question ID : 264330140351

Option 1 ID : 264330549786

Option 2 ID : 264330549785

Option 3 ID : 264330549783

Option 4 ID : 264330549784

Status : Answered

Chosen Option : 4

Q.18 When was the Dev Samaj founded in Lahore by Shiv Narayan Agnihotri?

- Ans
- ☒ 1. 1892
 - ☒ 2. 1887
 - ☒ 3. 1876
 - ☒ 4. 1863

Question Type : MCQ

Question ID : 264330140358

Option 1 ID : 264330549814

Option 2 ID : 264330549813

Option 3 ID : 264330549812

Option 4 ID : 264330549811

Status : Answered

Chosen Option : 3

Q.19 Sangam poems mention a tamil word 'Muvendar' which means _____.

- Ans
- ☒ 1. Three taxes
 - ☒ 2. Three ports
 - ☒ 3. Three chiefs
 - ☒ 4. Three horses

Question Type : MCQ

Question ID : 264330140288

Option 1 ID : 264330549534

Option 2 ID : 264330549531

Option 3 ID : 264330549532

Option 4 ID : 264330549533

Status : Answered

Chosen Option : 4

Q.20 According to the 2011 census, what is the male literacy rate?

- Ans
- ☐ 1. 65.14%
 - ☐ 2. 71.14%
 - ☐ 3. 75.14%
 - ☒ 4. 82.14%

Question Type : MCQ
Question ID : 264330140303
Option 1 ID : 264330549594
Option 2 ID : 264330549593
Option 3 ID : 264330549592
Option 4 ID : 264330549591
Status : Answered
Chosen Option : 4

Q.21 In January 2022, S Somanath has been appointed as the tenth chairman of _____ .

- Ans
- ☐ 1. RBI
 - ☐ 2. DRDO
 - ☒ 3. ISRO
 - ☐ 4. SEBI

Question Type : MCQ
Question ID : 264330139681
Option 1 ID : 264330547139
Option 2 ID : 264330547140
Option 3 ID : 264330547141
Option 4 ID : 264330547142
Status : Answered
Chosen Option : 3

Q.22 The equipment 'Shuttlecock' is required in which sports?

- Ans
- ☐ 1. Basketball
 - ☐ 2. Billiards
 - ☐ 3. Baseball
 - ☒ 4. Badminton

Question Type : MCQ
Question ID : 264330140364
Option 1 ID : 264330549836
Option 2 ID : 264330549838
Option 3 ID : 264330549837
Option 4 ID : 264330549835
Status : Answered
Chosen Option : 4

Q.23 What was the objective of “Arya Samaj” founded by “Swami Dayanand Saraswati”?

- Ans
- ☒ 1. To establish autocratic rule
 - ☒ 2. To rise against Britishers
 - ☒ 3. To encourage the practice of barter trade
 - ☒ 4. To reform Hinduism

Question Type : MCQ
 Question ID : 264330138969
 Option 1 ID : 264330544484
 Option 2 ID : 264330544486
 Option 3 ID : 264330544483
 Option 4 ID : 264330544485
 Status : Answered
 Chosen Option : 4

Q.24 The process by which two immiscible liquids, get mixed while one disperses as small droplets within the other is known as _____.

- Ans
- ☒ 1. Separation
 - ☒ 2. Emulsification
 - ☒ 3. Caramelisation
 - ☒ 4. Filtration

Question Type : MCQ
 Question ID : 264330140733
 Option 1 ID : 264330551282
 Option 2 ID : 264330551279
 Option 3 ID : 264330551281
 Option 4 ID : 264330551280
 Status : Answered
 Chosen Option : 2

Q.25 History of Akbar’s reign, titled “Akbar Nama” is written by _____.

- Ans
- ☒ 1. Abul Fazl
 - ☒ 2. Abd al – Qadir Badauni
 - ☒ 3. Abbas Khan Sherwani
 - ☒ 4. Mohammad Khan

Question Type : MCQ
 Question ID : 264330139745
 Option 1 ID : 264330547395
 Option 2 ID : 264330547396
 Option 3 ID : 264330547397
 Option 4 ID : 264330547398
 Status : Answered
 Chosen Option : 1

Q.1 Select the appropriate synonym for the underlined word.

Don't sound so excited

- Ans
- ☒ 1. casual
 - ☒ 2. composed
 - ☒ 3. eager
 - ☒ 4. tired

Question Type : MCQ
 Question ID : 264330135525
 Option 1 ID : 264330531005
 Option 2 ID : 264330531006
 Option 3 ID : 264330531004
 Option 4 ID : 264330531003
 Status : Answered
 Chosen Option : 3

Q.2 Four sentences are given, out of which three have spelling errors. Choose the sentence with all correctly spelt words.

- Ans
- ☒ 1. What was the begining of the dispute?
 - ☒ 2. There is no comparision between the two books.
 - ☒ 3. She handlled the situation cooly.
 - ☒ 4. I got selected in D category.

Question Type : MCQ
 Question ID : 264330136433
 Option 1 ID : 264330534494
 Option 2 ID : 264330534493
 Option 3 ID : 264330534491
 Option 4 ID : 264330534492
 Status : Answered
 Chosen Option : 4

Q.3 Select the appropriate synonym for the underlined word.

You look around and you see green, happy plants.

- Ans
- ☒ 1. mourning
 - ☒ 2. nascent
 - ☒ 3. blissful
 - ☒ 4. gloomy

Question Type : MCQ
 Question ID : 264330141196
 Option 1 ID : 264330553121
 Option 2 ID : 264330553119
 Option 3 ID : 264330553122
 Option 4 ID : 264330553120
 Status : Answered
 Chosen Option : 3

Q.4 Identify the segment that contains a grammatical error. If there is no error, select 'No error'.
Fred and George had / bewitched there trunks to fly downstairs to / save the bother of carrying them.

- Ans**
- ☒ 1. bewitched there trunks to fly downstairs to
 - ☐ 2. save the bother of carrying them.
 - ☐ 3. Fred and George had
 - ☐ 4. No error

Question Type : **MCQ**
Question ID : **264330136135**
Option 1 ID : **264330533344**
Option 2 ID : **264330533345**
Option 3 ID : **264330533343**
Option 4 ID : **264330533346**
Status : **Answered**
Chosen Option : **2**

Q.5 Select the most appropriate word for the given group of words.
Information, especially of a biased or misleading nature, used to promote a political cause or point of view

- Ans**
- ☐ 1. Welter
 - ☒ 2. Propaganda
 - ☐ 3. Potable
 - ☐ 4. Orchard

Question Type : **MCQ**
Question ID : **264330136758**
Option 1 ID : **264330535736**
Option 2 ID : **264330535735**
Option 3 ID : **264330535737**
Option 4 ID : **264330535738**
Status : **Answered**
Chosen Option : **2**

Q.6 Identify the segment that contains a grammatical error. If there is no error, select 'No error'.
Although people had been on watch and / the watchkeepers were very, very tired, / everyone were up and buzzing.

- Ans**
- ☒ 1. everyone were up and buzzing.
 - ☐ 2. No Error
 - ☐ 3. Although people had been on watch and
 - ☐ 4. the watchkeepers were very, very tired,

Question Type : **MCQ**
Question ID : **264330135821**
Option 1 ID : **264330532157**
Option 2 ID : **264330532158**
Option 3 ID : **264330532155**
Option 4 ID : **264330532156**
Status : **Answered**
Chosen Option : **4**

Q.7 Identify the segment that contains a grammatical error. If there is no error, select 'No error'

Your body will respond by/ getting more muscular and/ strong before you know it.

- Ans ☒ 1. strong before you know it.
☐ 2. No error
☐ 3. Your body will respond by
☐ 4. getting more muscular and

Question Type : MCQ
Question ID : 264330135664
Option 1 ID : 264330531553
Option 2 ID : 264330531554
Option 3 ID : 264330531551
Option 4 ID : 264330531552
Status : Answered
Chosen Option : 2

Q.8 Select the most appropriate antonym of the given word.

Crude

- Ans ☐ 1. Beastly
☒ 2. Ripe
☐ 3. Stubble
☐ 4. Intense

Question Type : MCQ
Question ID : 264330136205
Option 1 ID : 264330533614
Option 2 ID : 264330533613
Option 3 ID : 264330533612
Option 4 ID : 264330533611
Status : Answered
Chosen Option : 3

Q.9 Fill in the blank with the most appropriate option.

'Well, that was _____ good,' said Harper.

- Ans ☐ 1. pleasing
☐ 2. gorgeous
☐ 3. beautiful
☒ 4. pretty

Question Type : MCQ
Question ID : 264330136133
Option 1 ID : 264330533337
Option 2 ID : 264330533338
Option 3 ID : 264330533335
Option 4 ID : 264330533336
Status : Answered
Chosen Option : 4

Q.10 Select the most appropriate option to fill in the blank.

She has a large, _____ sympathy and absolute fairness of temper.

- Ans
- ☒ 1. mean
 - ☒ 2. sparing
 - ☒ 3. generous
 - ☒ 4. thrifty

Question Type : MCQ
Question ID : 264330135560
Option 1 ID : 264330531139
Option 2 ID : 264330531142
Option 3 ID : 264330531140
Option 4 ID : 264330531141
Status : Answered
Chosen Option : 3

Q.11 Select the word segment that substitutes (replaces) the bracketed word segment correctly and completes the sentence meaningfully. Select the option 'no correction required' if the sentence is correct as given.

He lost his temper (by a driver) flashed her headlights as he overtook.

- Ans
- ☒ 1. afterwards a driver
 - ☒ 2. No correction required
 - ☒ 3. considering a driver
 - ☒ 4. after a driver

Question Type : MCQ
Question ID : 264330136564
Option 1 ID : 264330534991
Option 2 ID : 264330534994
Option 3 ID : 264330534993
Option 4 ID : 264330534992
Status : Answered
Chosen Option : 4

Q.12 Fill in the blank with the most appropriate option.

Sulochana, whose _____ I had so admired during the festival, seemed a different person.

- Ans
- ☒ 1. polish
 - ☒ 2. crudeness
 - ☒ 3. grace
 - ☒ 4. shadow

Question Type : MCQ
Question ID : 264330136568
Option 1 ID : 264330535007
Option 2 ID : 264330535008
Option 3 ID : 264330535009
Option 4 ID : 264330535010
Status : Answered
Chosen Option : 3

Q.13 In the following question, out of the given four alternatives, select the alternative which best expresses the meaning of the Idiom/Phrase.
Fairly and squarely

- Ans**
- ☒ 1. Suddenly
 - ☒ 2. Rigorously
 - ☒ 3. Wholly
 - ☒ 4. Honestly

Question Type : **MCQ**
Question ID : **264330135555**
Option 1 ID : **264330531121**
Option 2 ID : **264330531122**
Option 3 ID : **264330531120**
Option 4 ID : **264330531119**
Status : **Answered**
Chosen Option : **4**

Q.14 A sentence has been given with a blank to be filled with an appropriate option. Choose the correct alternative.
Your presence _____ both my brother and sister.

- Ans**
- ☒ 1. affecting
 - ☒ 2. effect
 - ☒ 3. effects
 - ☒ 4. affects

Question Type : **MCQ**
Question ID : **264330135158**
Option 1 ID : **264330529569**
Option 2 ID : **264330529570**
Option 3 ID : **264330529567**
Option 4 ID : **264330529568**
Status : **Answered**
Chosen Option : **1**

Q.15 Choose the word that can substitute the given group of words.

A container for housing honeybees

- Ans**
- ☒ 1. Colonies
 - ☒ 2. Hive
 - ☒ 3. Pack
 - ☒ 4. Shoal

Question Type : **MCQ**
Question ID : **264330141186**
Option 1 ID : **264330553085**
Option 2 ID : **264330553086**
Option 3 ID : **264330553083**
Option 4 ID : **264330553084**
Status : **Answered**
Chosen Option : **2**

Q.16 Select the most appropriate option to substitute the bracketed segment in the given sentence. If there is no need to substitute it, select 'no substitution required'.
(There's many a good tunes) played on an old violin.

- Ans**
- ☒ 1. No substitution required
 - ☒ 2. There are many a good tunes
 - ☒ 3. There's many good tune
 - ☒ 4. There are many good tunes

Question Type : MCQ
Question ID : 264330135824
Option 1 ID : 264330532170
Option 2 ID : 264330532169
Option 3 ID : 264330532167
Option 4 ID : 264330532168
Status : Answered
Chosen Option : 4

Q.17 Choose the incorrectly spelt word.

- Ans**
- ☒ 1. Grave
 - ☒ 2. Staringg
 - ☒ 3. Leaf
 - ☒ 4. Blame

Question Type : MCQ
Question ID : 264330141188
Option 1 ID : 264330553094
Option 2 ID : 264330553093
Option 3 ID : 264330553091
Option 4 ID : 264330553092
Status : Answered
Chosen Option : 2

Q.18 Improve the underlined part of the sentence. Choose 'No improvement' as an answer if the sentence is grammatically correct.

Even in time of natural disasters, the farmers had to pay their share of taxes.

- Ans**
- ☒ 1. times of natural
 - ☒ 2. timer of natural
 - ☒ 3. times of naturally
 - ☒ 4. No improvement

Question Type : MCQ
Question ID : 264330141182
Option 1 ID : 264330553067
Option 2 ID : 264330553068
Option 3 ID : 264330553069
Option 4 ID : 264330553070
Status : Answered
Chosen Option : 4

Q.19 Select the most appropriate antonym to substitute the bracketed word in the given sentence.

Similarly Sirius, the most (luminous) star in all the heavens, actually has a faint companion.

- Ans**
- ☒ 1. excited
 - ☒ 2. miserable
 - ☒ 3. serious
 - ☒ 4. gloomy

Question Type : MCQ
Question ID : 264330136554
Option 1 ID : 264330534951
Option 2 ID : 264330534952
Option 3 ID : 264330534953
Option 4 ID : 264330534954
Status : Answered
Chosen Option : 4

Q.20 The statement below has been given with bracketed text. Select the option with correct Idiom for the bracketed text.

He (made an irreversible change, that will greatly impact his life) when he got that huge tattoo on his back!

- Ans**
- ☒ 1. beat the dead horse
 - ☒ 2. became the devil's advocate
 - ☒ 3. crossed the Rubicon
 - ☒ 4. put a rose on his nose

Question Type : MCQ
Question ID : 264330135762
Option 1 ID : 264330531927
Option 2 ID : 264330531929
Option 3 ID : 264330531928
Option 4 ID : 264330531930
Status : Answered
Chosen Option : 2

Comprehension:

In the following passage some words have been deleted. Fill in the blanks with the help of the alternatives given. Select the most appropriate option for each number.

He (1) _____ his eyes. Moonlight was shining (2) _____ the bars on the window. And (3) _____ was goggling through the (4) _____ at him: a freckle-faced, red-haired, long-nosed someone. Ron Weasley was outside Harry's (5) _____.

SubQuestion No : 21

Q.21 Select the most appropriate option to fill in the blank No. 1.

- Ans**
- ☒ 1. expanded
 - ☒ 2. open
 - ☒ 3. close
 - ☒ 4. opened

Question Type : MCQ
Question ID : 264330135698
Option 1 ID : 264330531682
Option 2 ID : 264330531680
Option 3 ID : 264330531681
Option 4 ID : 264330531679
Status : Answered
Chosen Option : 2

Comprehension:

In the following passage some words have been deleted. Fill in the blanks with the help of the alternatives given. Select the most appropriate option for each number.

He (1) _____ his eyes. Moonlight was shining (2) _____ the bars on the window. And (3) _____ was goggling through the (4) _____ at him: a freckle-faced, red-haired, long-nosed someone. Ron Weasley was outside Harry's (5) _____.

SubQuestion No : 22

Q.22 Select the most appropriate option to fill in the blank No. 2.

- Ans
- ☒ 1. complete
 - ☒ 2. though
 - ☒ 3. through
 - ☒ 4. in

Question Type : MCQ

Question ID : 264330135699

Option 1 ID : 264330531685

Option 2 ID : 264330531683

Option 3 ID : 264330531684

Option 4 ID : 264330531686

Status : Answered

Chosen Option : 3

Comprehension:

In the following passage some words have been deleted. Fill in the blanks with the help of the alternatives given. Select the most appropriate option for each number.

He (1) _____ his eyes. Moonlight was shining (2) _____ the bars on the window. And (3) _____ was goggling through the (4) _____ at him: a freckle-faced, red-haired, long-nosed someone. Ron Weasley was outside Harry's (5) _____.

SubQuestion No : 23

Q.23 Select the most appropriate option to fill in the blank No. 3.

- Ans
- ☒ 1. sometimes
 - ☒ 2. somewhere
 - ☒ 3. someone
 - ☒ 4. somewhat

Question Type : MCQ

Question ID : 264330135700

Option 1 ID : 264330531690

Option 2 ID : 264330531689

Option 3 ID : 264330531687

Option 4 ID : 264330531688

Status : Answered

Chosen Option : 3

Comprehension:

In the following passage some words have been deleted. Fill in the blanks with the help of the alternatives given. Select the most appropriate option for each number.

He (1) _____ his eyes. Moonlight was shining (2) _____ the bars on the window. And (3) _____ was goggling through the (4) _____ at him: a freckle-faced, red-haired, long-nosed someone. Ron Weasley was outside Harry's (5) _____.

SubQuestion No : 24

Q.24 Select the most appropriate option to fill in the blank No. 4.

- Ans
- ☒ 1. bars
 - ☐ 2. verticals
 - ☐ 3. grills
 - ☐ 4. horizontals

Question Type : MCQ

Question ID : 264330135701

Option 1 ID : 264330531692

Option 2 ID : 264330531693

Option 3 ID : 264330531691

Option 4 ID : 264330531694

Status : Answered

Chosen Option : 3

Comprehension:

In the following passage some words have been deleted. Fill in the blanks with the help of the alternatives given. Select the most appropriate option for each number.

He (1) _____ his eyes. Moonlight was shining (2) _____ the bars on the window. And (3) _____ was goggling through the (4) _____ at him: a freckle-faced, red-haired, long-nosed someone. Ron Weasley was outside Harry's (5) _____.

SubQuestion No : 25

Q.25 Select the most appropriate option to fill in the blank No. 5.

- Ans
- ☐ 1. suitcase
 - ☐ 2. toilet
 - ☒ 3. window
 - ☐ 4. cupboard

Question Type : MCQ

Question ID : 264330135702

Option 1 ID : 264330531696

Option 2 ID : 264330531698

Option 3 ID : 264330531695

Option 4 ID : 264330531697

Status : Answered

Chosen Option : 3