

Multi Tasking Non Technical Staff and Havaladar CBIC and CBN Examination 2022

Roll Number	
Candidate Name	
Venue Name	Confiance
Exam Date	14/06/2023
Exam Time	12:00 PM - 2:00 PM
Subject	MTS Non Tech Havaladar CBIC and CBN Examination 2022

Section : Numerical and Mathematical Ability

Q.1 In an exam, out of total number of appeared student's 87 percent students passed, and 3250 students failed. What is the total number of students appeared in the exam?

- Ans**
- ☒ 1. 22500
 - ☒ 2. 25000
 - ☒ 3. 28000
 - ☒ 4. 26800

Question Type : **MCQ**

Question ID : **264330137327**

Option 1 ID : **264330537936**

Option 2 ID : **264330537938**

Option 3 ID : **264330537937**

Option 4 ID : **264330537935**

Status : **Answered**

Chosen Option : **2**

Q.2 Rahul can complete his work in 7 days and Raj can complete the work in 4 days. How many total days will they take to complete the work together?

- Ans**
- ☒ 1. $\frac{14}{11}$ days
 - ☒ 2. $\frac{15}{11}$ days
 - ☒ 3. $\frac{28}{13}$ days
 - ☒ 4. $\frac{28}{11}$ days

Question Type : **MCQ**

Question ID : **264330135101**

Option 1 ID : **264330529341**

Option 2 ID : **264330529342**

Option 3 ID : **264330529340**

Option 4 ID : **264330529339**

Status : **Answered**

Chosen Option : **4**

Test Prime

**ALL EXAMS,
ONE SUBSCRIPTION**



70,000+
Mock Tests



**Personalised
Report Card**



**Unlimited
Re-Attempt**



600+
Exam Covered



**Previous Year
Papers**



**500%
Refund**



ATTEMPT FREE MOCK NOW

Q.3 What is the value of A if $2 + 4 \div (A + 6) \times 2 = 16/7$

- Ans ☒ 1. 22
☒ 2. 20
☒ 3. 23
☒ 4. 21

Question Type : MCQ
 Question ID : 264330133736
 Option 1 ID : 264330523968
 Option 2 ID : 264330523970
 Option 3 ID : 264330523967
 Option 4 ID : 264330523969
 Status : Answered
 Chosen Option : 1

Q.4 Rs. 30000 is lent at compound interest (compounded annually) for 3 years. If the rate of interest is 10 percent for the first year, 20 percent for the second year and 30 percent for the third year, then what will be the total compound interest?

- Ans ☒ 1. Rs. 21480
☒ 2. Rs. 19270
☒ 3. Rs. 20560
☒ 4. Rs. 22580

Question Type : MCQ
 Question ID : 264330137656
 Option 1 ID : 264330539232
 Option 2 ID : 264330539231
 Option 3 ID : 264330539233
 Option 4 ID : 264330539234
 Status : Answered
 Chosen Option : 1

Q.5 Find the third proportional of two numbers 6 and 24.

- Ans ☒ 1. 94
☒ 2. 84
☒ 3. 96
☒ 4. 86

Question Type : MCQ
 Question ID : 264330133745
 Option 1 ID : 264330524006
 Option 2 ID : 264330524005
 Option 3 ID : 264330524004
 Option 4 ID : 264330524003
 Status : Answered
 Chosen Option : 3

Q.6 Find the average speed of a boy if he walks $\frac{1}{6}$ th distance with a speed of 5 km/hr and rides a bike to cover the remaining distance at a speed of 25 km/hr. The total distance is 60 km.

- Ans**
- ✓ 1. 15 km/hr
 - ✗ 2. 20 km/hr
 - ✗ 3. 12 km/hr
 - ✗ 4. 13 km/hr

Question Type : **MCQ**
Question ID : **264330138373**
Option 1 ID : **264330542099**
Option 2 ID : **264330542100**
Option 3 ID : **264330542102**
Option 4 ID : **264330542101**
Status : **Answered**
Chosen Option : **1**

Q.7 In a company of 6400 employees the ratio of male and female employees is 5:3. What will be the number of male employees in the company?

- Ans**
- ✓ 1. 4000
 - ✗ 2. 4500
 - ✗ 3. 3000
 - ✗ 4. 3500

Question Type : **MCQ**
Question ID : **264330133744**
Option 1 ID : **264330523999**
Option 2 ID : **264330524000**
Option 3 ID : **264330524001**
Option 4 ID : **264330524002**
Status : **Answered**
Chosen Option : **1**

Q.8 Calculate the total surface area of the cube of side 45 m.

- Ans**
- ✓ 1. 12150 m^2
 - ✗ 2. 1213 m^2
 - ✗ 3. 1342 m^2
 - ✗ 4. 2341 m^2

Question Type : **MCQ**
Question ID : **264330135105**
Option 1 ID : **264330529355**
Option 2 ID : **264330529358**
Option 3 ID : **264330529356**
Option 4 ID : **264330529357**
Status : **Answered**
Chosen Option : **1**

Q.9 By selling 50 items, a shopkeeper gains the selling price of 10 items. What is his gain percent?

- Ans**
- ☒ 1. 10%
 - ☒ 2. 15%
 - ☒ 3. 25%
 - ☒ 4. 40%

Question Type : **MCQ**

Question ID : **264330135115**

Option 1 ID : **264330529396**

Option 2 ID : **264330529398**

Option 3 ID : **264330529395**

Option 4 ID : **264330529397**

Status : **Answered**

Chosen Option : **3**

Q.10 The table given below shows the production of bike by two companies in 6 years.

Years	A	B
P	300	550
Q	150	400
R	250	300
S	500	100
T	350	50
U	200	150

J1 = The value of average production of bike by A in year P, Q, R and S.

J2 = The value of average production of bike by B in year T and U.

What is the value of (J1/J2)?

- Ans**
- ☒ 1. 3
 - ☒ 2. 4
 - ☒ 3. 1
 - ☒ 4. 2

Question Type : **MCQ**

Question ID : **264330137341**

Option 1 ID : **264330537994**

Option 2 ID : **264330537993**

Option 3 ID : **264330537992**

Option 4 ID : **264330537991**

Status : **Answered**

Chosen Option : **1**

Q.11 The sum of 11 numbers is 660. Find their average.

- Ans
- ☒ 1. 66
 - ☒ 2. 60
 - ☒ 3. 10
 - ☒ 4. 80

Question Type : MCQ

Question ID : 264330133738

Option 1 ID : 264330523976

Option 2 ID : 264330523975

Option 3 ID : 264330523978

Option 4 ID : 264330523977

Status : Answered

Chosen Option : 2

Q.12 The radius of a right circular cylinder is 7 cm. Its height is thrice its radius. What is the curved surface area of the cylinder?

- Ans
- ☒ 1. 724 cm²
 - ☒ 2. 666 cm²
 - ☒ 3. 924 cm²
 - ☒ 4. 264 cm²

Question Type : MCQ

Question ID : 264330138411

Option 1 ID : 264330542254

Option 2 ID : 264330542253

Option 3 ID : 264330542252

Option 4 ID : 264330542251

Status : Answered

Chosen Option : 3

Q.13 What is the value of $\frac{(55 + 88) \div [(3 \times 5 + 4) - 64 \div 8]}{28 \times 7 \div 56 \times 4 \text{ of } (91 - 78)}$?

- Ans
- ☒ 1. 1/12
 - ☒ 2. 1/11
 - ☒ 3. 1/13
 - ☒ 4. 1/14

Question Type : MCQ

Question ID : 264330137340

Option 1 ID : 264330537989

Option 2 ID : 264330537990

Option 3 ID : 264330537988

Option 4 ID : 264330537987

Status : Answered

Chosen Option : 4

Q.14 If at compound interest a certain sum becomes 2 times of itself in 5 years, then in how many years it will become 8 times of itself?

- Ans**
- ☒ 1. 18 years
 - ☒ 2. 12 years
 - ☒ 3. 20 years
 - ☒ 4. 15 years

Question Type : **MCQ**

Question ID : **264330137332**

Option 1 ID : **264330537956**

Option 2 ID : **264330537955**

Option 3 ID : **264330537957**

Option 4 ID : **264330537958**

Status : **Answered**

Chosen Option : **4**

Q.15 The time in which a train 1800 m long, travelling at the speed of 30 kmph, will pass a signal pole is:

- Ans**
- ☒ 1. 200 seconds
 - ☒ 2. 250 seconds
 - ☒ 3. 220 seconds
 - ☒ 4. 216 seconds

Question Type : **MCQ**

Question ID : **264330133748**

Option 1 ID : **264330524018**

Option 2 ID : **264330524017**

Option 3 ID : **264330524016**

Option 4 ID : **264330524015**

Status : **Answered**

Chosen Option : **4**

Q.16 What will be the LCM of 54 and 48?

- Ans**
- ☒ 1. 412
 - ☒ 2. 456
 - ☒ 3. 423
 - ☒ 4. 432

Question Type : **MCQ**

Question ID : **264330138762**

Option 1 ID : **264330543655**

Option 2 ID : **264330543658**

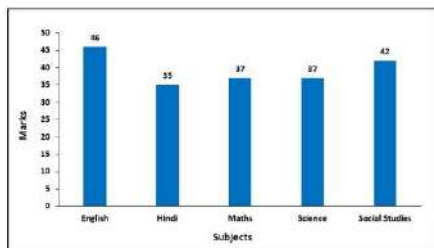
Option 3 ID : **264330543656**

Option 4 ID : **264330543657**

Status : **Answered**

Chosen Option : **4**

Q.17 Marks scored by Reena are plotted on the graph. Calculate how much more marks she scored in science, than hindi?



- Ans
- ☒ 1. 5
 - ☒ 2. 2
 - ☒ 3. 3
 - ☒ 4. 4

Question Type : MCQ
 Question ID : 264330133752
 Option 1 ID : 264330524034
 Option 2 ID : 264330524031
 Option 3 ID : 264330524032
 Option 4 ID : 264330524033
 Status : Answered
 Chosen Option : 2

Q.18 If Ashish can complete $\frac{2}{3}$ rd the work in 22 days. In how many days will he complete the whole work?

- Ans
- ☒ 1. 15 days
 - ☒ 2. 30 days
 - ☒ 3. 22 days
 - ☒ 4. 33 days

Question Type : MCQ
 Question ID : 264330138406
 Option 1 ID : 264330542233
 Option 2 ID : 264330542234
 Option 3 ID : 264330542232
 Option 4 ID : 264330542231
 Status : Answered
 Chosen Option : 4

Q.19 An article is bought for Rs. 1600 and sold for Rs. 3200. Find the gain percent.

- Ans
- ☒ 1. 100%
 - ☒ 2. 90%
 - ☒ 3. 50%
 - ☒ 4. 75%

Question Type : MCQ
 Question ID : 264330133742
 Option 1 ID : 264330523994
 Option 2 ID : 264330523991
 Option 3 ID : 264330523993
 Option 4 ID : 264330523992
 Status : Answered
 Chosen Option : 1

Q.20 Shopkeeper gave 30% discount on the article having marked price Rs.3500. What will be the selling price of the article?

- Ans**
- ☒ 1. Rs.1500
 - ☒ 2. Rs.2450
 - ☒ 3. Rs.3000
 - ☒ 4. Rs.2400

Question Type : **MCQ**
 Question ID : **264330133743**
 Option 1 ID : **264330523998**
 Option 2 ID : **264330523996**
 Option 3 ID : **264330523997**
 Option 4 ID : **264330523995**
 Status : **Answered**
 Chosen Option : **2**

Section : Reasoning Ability and Problem Solving

Q.1 In a certain code language, 'DMQPD' is written as 'ENQQE '. How will 'XAGIV' be written in that language?

- Ans**
- ☒ 1. YBGJW
 - ☒ 2. YJBGW
 - ☒ 3. YBWJG
 - ☒ 4. YBGIW

Question Type : **MCQ**
 Question ID : **264330133370**
 Option 1 ID : **264330522513**
 Option 2 ID : **264330522511**
 Option 3 ID : **264330522514**
 Option 4 ID : **264330522512**
 Status : **Answered**
 Chosen Option : **1**

Q.2 Seven people P, R, S, T, U, V, and W are standing in a straight row facing North. R is standing second to the left of T. T is standing third to the left of W. R and S are not standing at either of the corners. U is the immediate neighbour of V. V is standing in the second position from the right corner. Who is standing to the immediate left of R?

- Ans**
- ☒ 1. U
 - ☒ 2. P
 - ☒ 3. S
 - ☒ 4. V

Question Type : **MCQ**
 Question ID : **264330133453**
 Option 1 ID : **264330522844**
 Option 2 ID : **264330522845**
 Option 3 ID : **264330522843**
 Option 4 ID : **264330522846**
 Status : **Answered**
 Chosen Option : **2**

Q.3 Select the option that is related to the sixth number in the same way as the first number is related to the second number and third number is related to fourth number.

4 : 63 :: 7 : 342 :: 2 : 728

- Ans**
- ☒ 1. 9
 - ☐ 2. 11
 - ☐ 3. 8
 - ☐ 4. 13

Question Type : **MCQ**

Question ID : **264330137380**

Option 1 ID : **264330538148**

Option 2 ID : **264330538149**

Option 3 ID : **264330538147**

Option 4 ID : **264330538150**

Status : **Answered**

Chosen Option : **1**

Q.4 Two Statements are given followed by two conclusions numbered I and II. Assuming the statements to be true, even if they seem to be at variance with commonly known facts, decide which of the conclusions logically follow(s) from the statements.

Statements:

- Some shows are good.
- Some movies are good.

Conclusions:

- I. Some good are movies.
- II. Some good are shows.

- Ans**
- ☐ 1. Only conclusion II follows
 - ☐ 2. Neither conclusion I nor II follows
 - ☐ 3. Only conclusion I follows
 - ☒ 4. Both conclusions I and II follow

Question Type : **MCQ**

Question ID : **264330133455**

Option 1 ID : **264330522852**

Option 2 ID : **264330522854**

Option 3 ID : **264330522851**

Option 4 ID : **264330522853**

Status : **Answered**

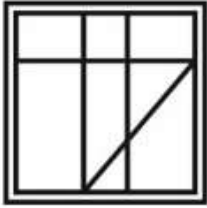
Chosen Option : **4**

Q.5 Select the option figure in which the given figure is embedded. (rotation is NOT allowed)




Ans


✗ 1.




✓ 2.



✗ 3.



✗ 4.



Question Type : MCQ

Question ID : 264330137384

Option 1 ID : 264330538165

Option 2 ID : 264330538164


Option 3 ID : 264330538166

Option 4 ID : 264330538163

Status : Answered

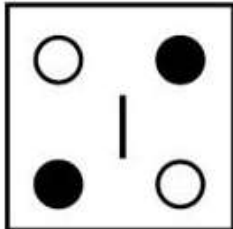
Chosen Option : 2

Q.6 Select the option figure that will replace the question mark (?) in the figure given below to complete the pattern.
(rotation is not allowed)

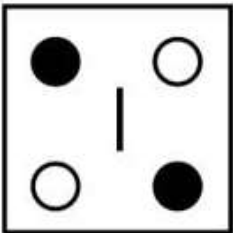


Ans

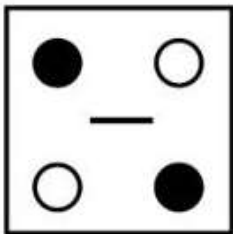
✓ 1.



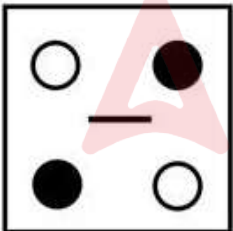
✗ 2.



✗ 3.



✗ 4.



Question Type : **MCQ**

Question ID : **264330133465**

Option 1 ID : **264330522893**

Option 2 ID : **264330522894**

Option 3 ID : **264330522891**

Option 4 ID : **264330522892**

Status : **Answered**

Chosen Option : **1**

Q.7 Which two numbers should be interchanged to make the given equation correct?

$$8 \times 3 - 12 + 6 + 18 = 33$$

- Ans
- ☒ 1. 18 and 33
 - ☒ 2. 12 and 33
 - ☒ 3. 8 and 3
 - ☒ 4. 12 and 18

Question Type : MCQ

Question ID : 264330133461

Option 1 ID : 264330522876

Option 2 ID : 264330522878

Option 3 ID : 264330522877

Option 4 ID : 264330522875

Status : Answered

Chosen Option : 4

Q.8 Two Statements are given followed by two conclusions numbered I and II. Assuming the statements to be true, even if they seem to be at variance with commonly known facts, decide which of the conclusions logically follow(s) from the statements.

Statements:

Most red are yellow.
Some yellow are green.

Conclusions:

I. Some green are yellow.
II. Some green are red.

- Ans
- ☒ 1. Neither conclusion I nor II follows
 - ☒ 2. Only conclusion II follows
 - ☒ 3. Both conclusions I and II follow
 - ☒ 4. Only conclusion I follows

Question Type : MCQ

Question ID : 264330133456

Option 1 ID : 264330522858

Option 2 ID : 264330522856

Option 3 ID : 264330522857

Option 4 ID : 264330522855

Status : Answered

Chosen Option : 4

Q.9 Study the given pattern carefully and select the number that can replace the question mark (?) in it.

First row- 74, 85, 96

Second row- 67, 78, 89

Third row- 84, 95, ?

Ans ✓ 1. 106

✗ 2. 246

✗ 3. 124

✗ 4. 112

Question Type : **MCQ**

Question ID : **264330133460**

Option 1 ID : **264330522872**

Option 2 ID : **264330522873**

Option 3 ID : **264330522871**

Option 4 ID : **264330522874**

Status : **Answered**

Chosen Option : **1**

Q.10 In a certain code language, 'RUE' is written as 'IFV'. How will 'WRY' be written in that language?

Ans ✗ 1. BID

✓ 2. DIB

✗ 3. DJB

✗ 4. DIC

Question Type : **MCQ**

Question ID : **264330137814**

Option 1 ID : **264330539863**

Option 2 ID : **264330539864**

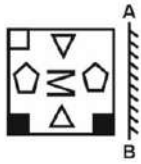
Option 3 ID : **264330539866**

Option 4 ID : **264330539865**

Status : **Answered**

Chosen Option : **2**

Q.11 If a mirror is placed on the line AB, then out of the option figures which figure will be the right image of the question figure?

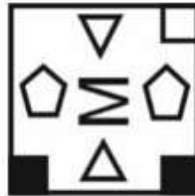


Ans

✗ 1.



✓ 2.



✗ 3.



✗ 4.



Question Type : MCQ

Question ID : 264330137385

Option 1 ID : 264330538167

Option 2 ID : 264330538170

Option 3 ID : 264330538169

Option 4 ID : 264330538168

Status : Answered

Chosen Option : 2

Q.12 If A denotes 'addition', B denotes 'multiplication', C denotes 'subtraction', and D denotes 'division', then what will be the value of the following equation?

(16 D 4) A 7 C 5 = ?

Ans ✗ 1. 5

✗ 2. 3

✗ 3. 8

✓ 4. 6

Question Type : MCQ

Question ID : 264330137577

Option 1 ID : 264330538915

Option 2 ID : 264330538916

Option 3 ID : 264330538918

Option 4 ID : 264330538917

Status : Answered

Chosen Option : 4

Q.13 In the following question, select the missing number of the given series.

2, 20, 38, 56, 74, ?

- Ans ☒ 1. 91
☒ 2. 90
☒ 3. 92
☒ 4. 88

Question Type : MCQ
 Question ID : 264330137378
 Option 1 ID : 264330538142
 Option 2 ID : 264330538140
 Option 3 ID : 264330538139
 Option 4 ID : 264330538141
 Status : Answered
 Chosen Option : 3

Q.14 Which of the following numbers will replace the question mark (?) in the given series?

85, 84, 82, 79, 75, 70, 64, ?

- Ans ☒ 1. 59
☒ 2. 57
☒ 3. 82
☒ 4. 76

Question Type : MCQ
 Question ID : 264330133458
 Option 1 ID : 264330522863
 Option 2 ID : 264330522864
 Option 3 ID : 264330522866
 Option 4 ID : 264330522865
 Status : Answered
 Chosen Option : 2

Q.15 In a certain code language, 'SPEEDS' is coded as 'URGGFU'. What is the code for 'SPOKEN' in that code language?

- Ans ☒ 1. URQNGP
☒ 2. URPNGP
☒ 3. URQNGQ
☒ 4. URQMGP

Question Type : MCQ
 Question ID : 264330138481
 Option 1 ID : 264330542534
 Option 2 ID : 264330542533
 Option 3 ID : 264330542532
 Option 4 ID : 264330542531
 Status : Answered
 Chosen Option : 4

Q.16 Seven friends Pradeep, Ashu, Rishi, Sam, Tina, Uma and Vicky's score in an exam are given. No two students get the same marks. Pradeep scored less than Vicky but more than Ashu. Rishi and Tina scored the highest and least marks but not necessarily in the same order. Uma's score was less than only Rishi's score. Sam's score was higher than only one person. Whose marks were in between the marks of Ashu and Tina?

- Ans**
- ☒ 1. Pradeep
 - ☒ 2. Vicky
 - ☒ 3. Sam
 - ☒ 4. Uma

Question Type : MCQ
Question ID : 264330133454
Option 1 ID : 264330522848
Option 2 ID : 264330522850
Option 3 ID : 264330522849
Option 4 ID : 264330522847
Status : Answered
Chosen Option : 3

Q.17 Six people are sitting around a circular table facing the centre. Only D is between P and S. Only X is between M and L. S is sitting to the immediate right of M. Who is sitting immediate right to P?

- Ans**
- ☒ 1. S
 - ☒ 2. M
 - ☒ 3. L
 - ☒ 4. D

Question Type : MCQ
Question ID : 264330133452
Option 1 ID : 264330522842
Option 2 ID : 264330522840
Option 3 ID : 264330522841
Option 4 ID : 264330522839
Status : Answered
Chosen Option : 3

Q.18 Select the option that is related to the third letter cluster in the same way as the second letter cluster is related to the first letter cluster.
HSEF : KPIJ :: QDRC : ?

- Ans**
- ☒ 1. TUAZ
 - ☒ 2. TAZU
 - ☒ 3. TZAU
 - ☒ 4. TAUZ

Question Type : MCQ
Question ID : 264330133447
Option 1 ID : 264330522819
Option 2 ID : 264330522822
Option 3 ID : 264330522820
Option 4 ID : 264330522821
Status : Answered
Chosen Option : 4

Q.19 Select the option that is related to the sixth term in the same way as the first term is related to the second term and third term is related to fourth term.

FGH : GJM :: AKC : BNH :: ? : UVV

- Ans**
- ✓ 1. TRQ
 - ✗ 2. TTQ
 - ✗ 3. TSQ
 - ✗ 4. TRR

Question Type : MCQ

Question ID : 264330137516

Option 1 ID : 264330538671

Option 2 ID : 264330538674

Option 3 ID : 264330538672

Option 4 ID : 264330538673

Status : Answered

Chosen Option : 1

Q.20 Which of the following letters will replace the question mark (?) in the given series?
F, G, I, L, P, U, A, ?

- Ans**
- ✗ 1. J
 - ✓ 2. H
 - ✗ 3. G
 - ✗ 4. I

Question Type : MCQ

Question ID : 264330133446

Option 1 ID : 264330522817

Option 2 ID : 264330522816

Option 3 ID : 264330522818

Option 4 ID : 264330522815

Status : Answered

Chosen Option : 2

Section : General Awareness

Q.1 Krishna River flows through _____ state of India.

- Ans**
- ✗ 1. Tamil Nadu
 - ✗ 2. Odisha
 - ✓ 3. Karnataka
 - ✗ 4. Kerala

Question Type : MCQ

Question ID : 264330133916

Option 1 ID : 264330524689

Option 2 ID : 264330524690

Option 3 ID : 264330524688

Option 4 ID : 264330524687

Status : Answered

Chosen Option : 1

Q.2 Who among the following sang the famous Bollywood song "Ae Dil Hai Mushkil"?

- Ans
- ✓ 1. Arijit Singh
 - ✗ 2. Neeti Mohan
 - ✗ 3. Shreya Ghoshal
 - ✗ 4. Sukhbir

Question Type : MCQ
Question ID : 264330133924
Option 1 ID : 264330524720
Option 2 ID : 264330524722
Option 3 ID : 264330524721
Option 4 ID : 264330524719
Status : Answered
Chosen Option : 1

Q.3 निम्नलिखित में से किस अनुच्छेद में "गिरफ्तारी और निरोध से संरक्षण" का उल्लेख है?

- Ans
- ✗ 1. अनुच्छेद 24
 - ✓ 2. अनुच्छेद 22
 - ✗ 3. अनुच्छेद 20
 - ✗ 4. अनुच्छेद 18

Question Type : MCQ
Question ID : 264330134606
Option 1 ID : 264330527382
Option 2 ID : 264330527380
Option 3 ID : 264330527381
Option 4 ID : 264330527379
Status : Answered
Chosen Option : 2

Q.4 The Airavatesvara Temple in Tamil Nadu was built by _____.

- Ans
- ✓ 1. Rajaraja Chola II
 - ✗ 2. Rajaraja Chola I
 - ✗ 3. Maharaja Sawai Jai Singh II
 - ✗ 4. Maharaja Pratap Singh

Question Type : MCQ
Question ID : 264330137740
Option 1 ID : 264330539567
Option 2 ID : 264330539568
Option 3 ID : 264330539569
Option 4 ID : 264330539570
Status : Answered
Chosen Option : 2

Q.5 इस्लामी चंद्र कैलेंडर (Islamic lunar calendar) में पहला महीना कौन-सा है?

- Ans
- ☐ 1. शव्वाल
 - ☐ 2. सफ़र
 - ☐ 3. रमज़ान
 - ☒ 4. मुहर्रम

Question Type : MCQ

Question ID : 264330137388

Option 1 ID : 264330538182

Option 2 ID : 264330538180

Option 3 ID : 264330538181

Option 4 ID : 264330538179

Status : Answered

Chosen Option : 4

Q.6 The materials, through which things cannot be seen, are called _____.

- Ans
- ☐ 1. translucent materials
 - ☐ 2. transparent materials
 - ☒ 3. opaque materials
 - ☐ 4. pale materials

Question Type : MCQ

Question ID : 264330137403

Option 1 ID : 264330538240

Option 2 ID : 264330538239

Option 3 ID : 264330538241

Option 4 ID : 264330538242

Status : Answered

Chosen Option : 3

Q.7 There were several cities in the Maurya empire. Which of the following cities was located on the southernmost side?

- Ans
- ☐ 1. Girnar
 - ☐ 2. Topra
 - ☒ 3. Brahmagiri
 - ☐ 4. Rupnath

Question Type : MCQ

Question ID : 264330137408

Option 1 ID : 264330538261

Option 2 ID : 264330538259

Option 3 ID : 264330538262

Option 4 ID : 264330538260

Status : Answered

Chosen Option : 1

Q.8 Kitab ul-Hind, an Arabic text was written by _____.

- Ans
- ☐ 1. Ibn Battuta
 - ☐ 2. Ziauddin Barani
 - ☐ 3. Sultan Mahmud
 - ☒ 4. Al- Biruni

Question Type : MCQ

Question ID : 264330137409

Option 1 ID : 264330538265

Option 2 ID : 264330538266

Option 3 ID : 264330538263

Option 4 ID : 264330538264

Status : Answered

Chosen Option : 4

Q.9 सामूहिक विनाश के हथियार और उनकी वितरण प्रणाली (गैरकानूनी गतिविधियों पर पाबंदी) संशोधन विधेयक-2022 भारत सरकार के _____ से संबंधित है।

- Ans
- ☐ 1. रक्षा मंत्रालय
 - ☒ 2. विदेश मंत्रालय
 - ☐ 3. नागरिक उड्डयन मंत्रालय
 - ☐ 4. वित्त मंत्रालय

Question Type : MCQ

Question ID : 264330133906

Option 1 ID : 264330524648

Option 2 ID : 264330524650

Option 3 ID : 264330524649

Option 4 ID : 264330524647

Status : Answered

Chosen Option : 1

Q.10 Gulabo Sapera is associated with which of the following dance forms?

- Ans
- ☒ 1. Kalbelia
 - ☐ 2. Bharatnatyam
 - ☐ 3. Odissi
 - ☐ 4. Kathakali

Question Type : MCQ

Question ID : 264330137938

Option 1 ID : 264330540359

Option 2 ID : 264330540361

Option 3 ID : 264330540360

Option 4 ID : 264330540362

Status : Answered

Chosen Option : 1

Q.11 निम्नलिखित में से कौन-सा अम्ल सिरके के pH को अम्लीय बनाता है?

- Ans
- ☐ 1. टार्टरिक अम्ल
 - ☐ 2. साइट्रिक अम्ल
 - ☐ 3. लिनोलिक (Linoleic) अम्ल
 - ☒ 4. ऐसीटिक अम्ल

Question Type : MCQ

Question ID : 264330133912

Option 1 ID : 264330524672

Option 2 ID : 264330524671

Option 3 ID : 264330524674

Option 4 ID : 264330524673

Status : Answered

Chosen Option : 2

Q.12 टोक्यो ओलंपिक 2020 (वर्ष 2021 में खेले गए) में भारत ने कितने कांस्य पदक जीते?

- Ans
- ☐ 1. छः
 - ☐ 2. पाँच
 - ☐ 3. तीन
 - ☒ 4. चार

Question Type : MCQ

Question ID : 264330137391

Option 1 ID : 264330538194

Option 2 ID : 264330538193

Option 3 ID : 264330538191

Option 4 ID : 264330538192

Status : Answered

Chosen Option : 4

Q.13 Savings deposits with Post Office savings banks are included in which measure of money supply?

- Ans
- ☐ 1. M3
 - ☒ 2. M2
 - ☐ 3. M4
 - ☐ 4. M1

Question Type : MCQ

Question ID : 264330137943

Option 1 ID : 264330540381

Option 2 ID : 264330540380

Option 3 ID : 264330540382

Option 4 ID : 264330540379

Status : Answered

Chosen Option : 1

Q.14 According to the 2011 census, what is the approximate female literacy rate?

- Ans
- ☐ 1. 95%
 - ☐ 2. 85%
 - ☐ 3. 55%
 - ☒ 4. 65%

Question Type : MCQ

Question ID : 264330137697

Option 1 ID : 264330539395

Option 2 ID : 264330539396

Option 3 ID : 264330539397

Option 4 ID : 264330539398

Status : Answered

Chosen Option : 4

Q.15 Which of the following statement is NOT correct regarding fertilizers?

- Ans
- ☐ 1. They are prepared in factories
 - ☐ 2. They are very rich in plant nutrients
 - ☒ 3. They provide humus to the soil
 - ☐ 4. They are man-made inorganic salt

Question Type : MCQ

Question ID : 264330137401

Option 1 ID : 264330538232

Option 2 ID : 264330538234

Option 3 ID : 264330538233

Option 4 ID : 264330538231

Status : Answered

Chosen Option : 3

Q.16 What is the term of State legislative assembly in India as per Indian constitution?

- Ans
- ☐ 1. 3 years
 - ☒ 2. 5 years
 - ☐ 3. 4 years
 - ☐ 4. 7 years

Question Type : MCQ

Question ID : 264330133927

Option 1 ID : 264330524731

Option 2 ID : 264330524733

Option 3 ID : 264330524732

Option 4 ID : 264330524734

Status : Answered

Chosen Option : 2

Q.17 When was the Gandhi-Irwin pact signed?

- Ans
- ☐ 1. 1928
 - ☐ 2. 1935
 - ☐ 3. 1929
 - ☒ 4. 1931

Question Type : MCQ

Question ID : 264330137751

Option 1 ID : 264330539614

Option 2 ID : 264330539612

Option 3 ID : 264330539611

Option 4 ID : 264330539613

Status : Answered

Chosen Option : 4

Q.18 एक लंबी अवधि तक, जैसे 25 वर्ष में, किसी स्थान के मौसम के एकत्रित आंकड़ों के आधार पर बना मौसम का पैटर्न, उस स्थान की/का _____ कहलाता है।

- Ans
- ☐ 1. परिस्थितिकी
 - ☒ 2. जलवायु
 - ☐ 3. भू-आकृतियाँ
 - ☐ 4. पर्यावरण

Question Type : MCQ

Question ID : 264330137402

Option 1 ID : 264330538237

Option 2 ID : 264330538238

Option 3 ID : 264330538235

Option 4 ID : 264330538236

Status : Answered

Chosen Option : 2

Q.19 निम्नलिखित में से कौन-सी पुस्तक अरविंद अडिगा द्वारा नहीं लिखी गई थी?

- Ans
- ☐ 1. एमनेस्टी (Amnesty)
 - ☒ 2. द कॉस्ट ऑफ लिविंग (The Cost of Living)
 - ☐ 3. द व्हाइट टाइगर (The White Tiger)
 - ☐ 4. लास्ट मैन इन टॉवर (Last Man in Tower)

Question Type : MCQ

Question ID : 264330137936

Option 1 ID : 264330540353

Option 2 ID : 264330540354

Option 3 ID : 264330540351

Option 4 ID : 264330540352

Status : Answered

Chosen Option : 2

Q.20 The British Parliament passed the Regulating Act in _____.

- Ans
- ☐ 1. 1775
 - ☐ 2. 1876
 - ☒ 3. 1773
 - ☐ 4. 1877

Question Type : MCQ

Question ID : 264330137411

Option 1 ID : 264330538271

Option 2 ID : 264330538272

Option 3 ID : 264330538274

Option 4 ID : 264330538273

Status : Answered

Chosen Option : 3

Q.21 8 सितंबर 2022 को, नीति आयोग (NITI Aayog) ने, _____ के सहयोग से देश के पहले राष्ट्रीय इलेक्ट्रिक फ्रेट प्लेटफॉर्म (national electric freight platform) - सतत परिवहन के लिए इलेक्ट्रिक फ्रेट एक्सेलेरेटर (Electric Freight Accelerator for Sustainable Transport) - भारत (ई-फास्ट इंडिया(e-FAST India)) का शुभारंभ किया।

- Ans
- ☐ 1. अंतरराष्ट्रीय मुद्रा कोष (International Monetary Fund)
 - ☒ 2. विश्व संसाधन संस्थान (World Resources Institute)
 - ☐ 3. विश्व बैंक (World Bank)
 - ☐ 4. विश्व स्वास्थ्य संगठन (World Health Organisation)

Question Type : MCQ

Question ID : 264330137928

Option 1 ID : 264330540321

Option 2 ID : 264330540319

Option 3 ID : 264330540320

Option 4 ID : 264330540322

Status : Answered

Chosen Option : 1

Q.22 नई दिल्ली अंतराष्ट्रीय मध्यस्थता केंद्र (संशोधन) विधेयक (New Delhi International Arbitration Centre (Amendment) Bill), 2022 द्वारा, नई दिल्ली अंतराष्ट्रीय मध्यस्थता केंद्र अधिनियम, 2019 को लागू करने में आने वाली किसी भी कठिनाई को दूर करने के लिए केंद्र सरकार को दी गई समयावधि को इस अधिनियम के प्रारंभ होने की तारीख से _____ वर्ष तक बढ़ा दिया गया है।

- Ans
- ☐ 1. 4
 - ☐ 2. 6
 - ☐ 3. 3
 - ☒ 4. 5

Question Type : MCQ

Question ID : 264330137737

Option 1 ID : 264330539556

Option 2 ID : 264330539558

Option 3 ID : 264330539555

Option 4 ID : 264330539557

Status : Not Answered

Chosen Option : --

Q.23 कजरी (Kajari) भारत की एक लोक गीत और नृत्य शैली है। इसकी उत्पत्ति _____ में हुई है।

- Ans
- ☒ 1. पंजाब
 - ☒ 2. पश्चिम बंगाल
 - ☒ 3. केरल
 - ☒ 4. उत्तर प्रदेश

Question Type : MCQ
Question ID : 264330133908
Option 1 ID : 264330524657
Option 2 ID : 264330524655
Option 3 ID : 264330524658
Option 4 ID : 264330524656
Status : Answered
Chosen Option : 4

Q.24 क्रिकेट में, गेंद को हवा में ऐसे मरना की गेंद बाउंड्री के पार हो जाए, यह _____ रन के बराबर होता है।

- Ans
- ☒ 1. 6
 - ☒ 2. 2
 - ☒ 3. 3
 - ☒ 4. 4

Question Type : MCQ
Question ID : 264330133928
Option 1 ID : 264330524738
Option 2 ID : 264330524735
Option 3 ID : 264330524736
Option 4 ID : 264330524737
Status : Answered
Chosen Option : 1

Q.25 भारतीय संविधान की प्रस्तावना के अनुसार, भारत एक _____ देश है।

- Ans
- ☒ 1. धार्मिक (Religious)
 - ☒ 2. उदारवादी (Liberal)
 - ☒ 3. कुलीनतंत्रीय (Aristocratic)
 - ☒ 4. गणराज्य (Republic)

Question Type : MCQ
Question ID : 264330133926
Option 1 ID : 264330524727
Option 2 ID : 264330524730
Option 3 ID : 264330524728
Option 4 ID : 264330524729
Status : Answered
Chosen Option : 4

Q.1 Identify the segment that contains a grammatical error. If there is no error, select 'No error'.

I have never seen a man / get off his horse quick as / did that stranger Englishman.

Ans ☒ 1. did that stranger Englishman.

☒ 2. I have never seen a man

☒ 3. No error

☒ 4. get off his horse quick as

Question Type : MCQ

Question ID : 264330136031

Option 1 ID : 264330532945

Option 2 ID : 264330532943

Option 3 ID : 264330532946

Option 4 ID : 264330532944

Status : Answered

Chosen Option : 4

Q.2 Select the most appropriate option to substitute the bracketed segment in the given sentence. If there is no need to substitute it, select 'no substitution required'.

(This bridge neither crossed the Thames, and neither gave) access to a now-lost island in the river.

Ans ☒ 1. This bridge either crossed the Thames, and or gave

☒ 2. This bridge neither crossed the Thames, nor gave

☒ 3. This bridge either crossed the Thames, nor gave

☒ 4. No substitution required

Question Type : MCQ

Question ID : 264330136034

Option 1 ID : 264330532957

Option 2 ID : 264330532956

Option 3 ID : 264330532955

Option 4 ID : 264330532958

Status : Answered

Chosen Option : 2

Q.3 Select the most appropriate word for the given group of words.

A thing that is kept as a reminder of a person, place, or event

Ans ☒ 1. Sinecure

☒ 2. Panacea

☒ 3. Souvenir

☒ 4. Regalia

Question Type : MCQ

Question ID : 264330135807

Option 1 ID : 264330532100

Option 2 ID : 264330532102

Option 3 ID : 264330532099

Option 4 ID : 264330532101

Status : Answered

Chosen Option : 3

Q.4 Select the most appropriate option to fill in the blank.

Those unfamiliar with the saga are bound to be mystified by the more _____ plot twists.

- Ans ☒ 1. arcane
☒ 2. arbitrary
☒ 3. aesthetic
☒ 4. anoint

Question Type : MCQ

Question ID : 264330136038

Option 1 ID : 264330532972

Option 2 ID : 264330532971

Option 3 ID : 264330532974

Option 4 ID : 264330532973

Status : Answered

Chosen Option : 1

Q.5 Select the wrongly spelt word.

- Ans ☒ 1. emanant
☒ 2. supersede
☒ 3. develop
☒ 4. quarantine

Question Type : MCQ

Question ID : 264330135816

Option 1 ID : 264330532138

Option 2 ID : 264330532135

Option 3 ID : 264330532137

Option 4 ID : 264330532136

Status : Answered

Chosen Option : 1

Q.6 Select the most appropriate meaning of the given idiom.

Fixed in one's ways

- Ans ☒ 1.
 Something that shows potential or looks promising in the beginning but fails to deliver anything in the end
☒ 2. To establish one's rule
☒ 3.
 Not willing or wanting to change from your normal way of doing something
☒ 4. An aggressive attack on someone by a group

Question Type : MCQ

Question ID : 264330135813

Option 1 ID : 264330532126

Option 2 ID : 264330532124

Option 3 ID : 264330532125

Option 4 ID : 264330532123

Status : Answered

Chosen Option : 3

Q.7 Select the most appropriate synonym to substitute the bracketed word in the given sentence.

In the midst of the tumult of charges against him, a (welter) of conflicting poll numbers are being bandied about.

- Ans ☒ 1. Turmoil
☒ 2. Dynamic
☒ 3. Static
☒ 4. Peace

Question Type : MCQ

Question ID : 264330136048

Option 1 ID : 264330533008

Option 2 ID : 264330533007

Option 3 ID : 264330533010

Option 4 ID : 264330533009

Status : Answered

Chosen Option : 1

Q.8 Find the part of the given sentence that has an error in it. If there is no error, choose 'No error'.

His absence from my party is too much painful for me.

- Ans ☒ 1. party is too much
☒ 2. painful for me.
☒ 3. His absence from my
☒ 4. No error

Question Type : MCQ

Question ID : 264330134374

Option 1 ID : 264330526480

Option 2 ID : 264330526481

Option 3 ID : 264330526479

Option 4 ID : 264330526482

Status : Answered

Chosen Option : 1

Q.9 Select the most appropriate option to fill in the blank.

Our breathing rate can change almost instantaneously in response to stress or _____.

- Ans ☒ 1. arousal
☒ 2. fund
☒ 3. difference
☒ 4. attention

Question Type : MCQ

Question ID : 264330134397

Option 1 ID : 264330526568

Option 2 ID : 264330526567

Option 3 ID : 264330526570

Option 4 ID : 264330526569

Status : Answered

Chosen Option : 1

Q.10 Fill in the blank with the most appropriate choice.

The issue of fairness, which remained, was for consideration at the hearing to _____ the scheme.

- Ans ☒ 1. acclamation
☒ 2. sanction
☒ 3. altercation
☒ 4. stratification

Question Type : MCQ

Question ID : 264330135817

Option 1 ID : 264330532140

Option 2 ID : 264330532141

Option 3 ID : 264330532139

Option 4 ID : 264330532142

Status : Answered

Chosen Option : 2

Q.11 Improve the underlined part of the sentence. Choose 'No improvement' as an answer if the sentence is grammatically correct.

The final cost depends on whether you chooses the small or the large size.

- Ans ☒ 1. choose the smaller
☒ 2. chose the small
☒ 3. No improvement
☒ 4. choose the small

Question Type : MCQ

Question ID : 264330134324

Option 1 ID : 264330526289

Option 2 ID : 264330526287

Option 3 ID : 264330526290

Option 4 ID : 264330526288

Status : Answered

Chosen Option : 4

Q.12 Select the appropriate synonym for the underlined word.

She goes to her room and locks herself in.

- Ans ☒ 1. taunts
☒ 2. hurts
☒ 3. sinks
☒ 4. Shuts

Question Type : MCQ

Question ID : 264330134388

Option 1 ID : 264330526534

Option 2 ID : 264330526532

Option 3 ID : 264330526533

Option 4 ID : 264330526531

Status : Answered

Chosen Option : 4

Q.13 In the following question, out of the given four alternatives, select the alternative which best expresses the meaning of the Idiom/Phrase.
Cold fish

- Ans ☒ 1. A person lacking in sympathy
☐ 2. To make a lot of money
☐ 3. A dead body
☐ 4. To retract one's statements

Question Type : MCQ
Question ID : 264330134393
Option 1 ID : 264330526551
Option 2 ID : 264330526554
Option 3 ID : 264330526552
Option 4 ID : 264330526553
Status : Marked For Review
Chosen Option : 1

Q.14 A sentence has been given with a blank to be filled with an appropriate option. Choose the correct alternative.
Neither she _____ I have expected Reema's arrival.

- Ans ☐ 1. or
☐ 2. and
☒ 3. nor
☐ 4. along

Question Type : MCQ
Question ID : 264330134378
Option 1 ID : 264330526497
Option 2 ID : 264330526498
Option 3 ID : 264330526496
Option 4 ID : 264330526495
Status : Answered
Chosen Option : 3

Q.15 Choose the word that can substitute the given group of words.
Famous or well-known for a negative reason

- Ans ☐ 1. Unpopular
☐ 2. Reputable
☐ 3. Formidable
☒ 4. Notorious

Question Type : MCQ
Question ID : 264330134387
Option 1 ID : 264330526530
Option 2 ID : 264330526527
Option 3 ID : 264330526528
Option 4 ID : 264330526529
Status : Answered
Chosen Option : 3

Q.16 Select the appropriate antonym for the underlined word.
Sunny turned to find his daughter's sweet, bright eyes close to his.

- Ans ☒ 1. gleaming
☒ 2. dusky
☒ 3. merry
☒ 4. anxious

Question Type : MCQ
Question ID : 264330134391
Option 1 ID : 264330526544
Option 2 ID : 264330526545
Option 3 ID : 264330526546
Option 4 ID : 264330526543
Status : Answered
Chosen Option : 2

Q.17 Choose the incorrectly spelt word.

- Ans ☒ 1. Grease
☒ 2. Mimic
☒ 3. Potantial
☒ 4. Surge

Question Type : MCQ
Question ID : 264330134394
Option 1 ID : 264330526558
Option 2 ID : 264330526556
Option 3 ID : 264330526555
Option 4 ID : 264330526557
Status : Answered
Chosen Option : 3

Q.18 Find the part of the given sentence that has an error in it. If there is no error, choose 'No error'.

Why are you making excuses too avoid this work?

- Ans ☒ 1. avoid this work?
☒ 2. Why are you
☒ 3. No error
☒ 4. making excuses too

Question Type : MCQ
Question ID : 264330134771
Option 1 ID : 264330528033
Option 2 ID : 264330528031
Option 3 ID : 264330528034
Option 4 ID : 264330528032
Status : Answered
Chosen Option : 4

Q.19 Improve the underlined part of the sentence. Choose 'No improvement' as an answer if the sentence is grammatically correct.
The camel uses fat as a source of energy during its longer journey in the desert.

- Ans
- ☒ 1. No improvement
 - ☒ 2. it's longer journey
 - ☒ 3. its longest journeyed
 - ☒ 4. its long journey

Question Type : MCQ
Question ID : 264330134377
Option 1 ID : 264330526494
Option 2 ID : 264330526491
Option 3 ID : 264330526493
Option 4 ID : 264330526492
Status : Answered
Chosen Option : 4

Q.20 Select the most appropriate antonym of the given word.

Mound

- Ans
- ☒ 1. Victory
 - ☒ 2. Valley
 - ☒ 3. Bell
 - ☒ 4. Prominence

Question Type : MCQ
Question ID : 264330136101
Option 1 ID : 264330533214
Option 2 ID : 264330533211
Option 3 ID : 264330533213
Option 4 ID : 264330533212
Status : Answered
Chosen Option : 2

Comprehension:

In the following passage some words have been deleted. Fill in the blanks with the help of the alternatives given. Select the most appropriate option for each number.

Archaeologists believe that counting large quantities (1) _____ about 10,000 years ago. Early farmers had to (2) _____ for communally stored crops. Early counting systems involved small tokens which represented farmers' stores. In the area which is now southern Iraq, little figures shaped like discs, balls, and pyramids (3) _____ used in about 7500 B.C. to represent various holdings. Later, marks which represented the figures were (4) _____ on clay tablets by use of a blunt reed to cut into the wet clay. Still, the symbols were (5) _____ connected with specific merchandise.

SubQuestion No : 21

Q.21 Select the most appropriate option to fill in the blank No. 1.

- Ans
- ☒ 1. blessed
 - ☒ 2. allured
 - ☒ 3. ended
 - ☒ 4. began

Question Type : MCQ

Question ID : 264330136092

Option 1 ID : 264330533178

Option 2 ID : 264330533175

Option 3 ID : 264330533176

Option 4 ID : 264330533177

Status : Answered

Chosen Option : 4

Comprehension:

In the following passage some words have been deleted. Fill in the blanks with the help of the alternatives given. Select the most appropriate option for each number.

Archaeologists believe that counting large quantities (1) _____ about 10,000 years ago. Early farmers had to (2) _____ for communally stored crops. Early counting systems involved small tokens which represented farmers' stores. In the area which is now southern Iraq, little figures shaped like discs, balls, and pyramids (3) _____ used in about 7500 B.C. to represent various holdings. Later, marks which represented the figures were (4) _____ on clay tablets by use of a blunt reed to cut into the wet clay. Still, the symbols were (5) _____ connected with specific merchandise.

SubQuestion No : 22

Q.22 Select the most appropriate option to fill in the blank No. 2.

- Ans
- ☒ 1. discount
 - ☒ 2. count
 - ☒ 3. account
 - ☒ 4. undercount

Question Type : MCQ

Question ID : 264330136093

Option 1 ID : 264330533181

Option 2 ID : 264330533180

Option 3 ID : 264330533179

Option 4 ID : 264330533182

Status : Answered

Chosen Option : 2

Comprehension:

In the following passage some words have been deleted. Fill in the blanks with the help of the alternatives given. Select the most appropriate option for each number.

Archaeologists believe that counting large quantities (1) _____ about 10,000 years ago. Early farmers had to (2) _____ for communally stored crops. Early counting systems involved small tokens which represented farmers' stores. In the area which is now southern Iraq, little figures shaped like discs, balls, and pyramids (3) _____ used in about 7500 B.C. to represent various holdings. Later, marks which represented the figures were (4) _____ on clay tablets by use of a blunt reed to cut into the wet clay. Still, the symbols were (5) _____ connected with specific merchandise.

SubQuestion No : 23

Q.23 Select the most appropriate option to fill in the blank No. 3.

- Ans
- ☒ 1. are
 - ☒ 2. will be
 - ☒ 3. was
 - ☒ 4. were

Question Type : MCQ

Question ID : 264330136094

Option 1 ID : 264330533186

Option 2 ID : 264330533184

Option 3 ID : 264330533183

Option 4 ID : 264330533185

Status : Answered

Chosen Option : 4

Comprehension:

In the following passage some words have been deleted. Fill in the blanks with the help of the alternatives given. Select the most appropriate option for each number.

Archaeologists believe that counting large quantities (1) _____ about 10,000 years ago. Early farmers had to (2) _____ for communally stored crops. Early counting systems involved small tokens which represented farmers' stores. In the area which is now southern Iraq, little figures shaped like discs, balls, and pyramids (3) _____ used in about 7500 B.C. to represent various holdings. Later, marks which represented the figures were (4) _____ on clay tablets by use of a blunt reed to cut into the wet clay. Still, the symbols were (5) _____ connected with specific merchandise.

SubQuestion No : 24

Q.24 Select the most appropriate option to fill in the blank No. 4.

- Ans
- ☒ 1. inscribed
 - ☒ 2. transcribed
 - ☒ 3. prescribed
 - ☒ 4. subscribed

Question Type : MCQ

Question ID : 264330136095

Option 1 ID : 264330533187

Option 2 ID : 264330533188

Option 3 ID : 264330533189

Option 4 ID : 264330533190

Status : Answered

Chosen Option : 1

Comprehension:

In the following passage some words have been deleted. Fill in the blanks with the help of the alternatives given. Select the most appropriate option for each number.

Archaeologists believe that counting large quantities (1) _____ about 10,000 years ago. Early farmers had to (2) _____ for communally stored crops. Early counting systems involved small tokens which represented farmers' stores. In the area which is now southern Iraq, little figures shaped like discs, balls, and pyramids (3) _____ used in about 7500 B.C. to represent various holdings. Later, marks which represented the figures were (4) _____ on clay tablets by use of a blunt reed to cut into the wet clay. Still, the symbols were (5) _____ connected with specific merchandise.

SubQuestion No : 25

Q.25 Select the most appropriate option to fill in the blank No. 5.

- Ans
- ☒ 1. like
 - ☒ 2. always
 - ☒ 3. some
 - ☒ 4. just

Question Type : MCQ

Question ID : 264330136096

Option 1 ID : 264330533192

Option 2 ID : 264330533194

Option 3 ID : 264330533191

Option 4 ID : 264330533193

Status : Answered

Chosen Option : 2

