

Multi Tasking Non Technical Staff and Havaladar CBIC and CBN Examination 2022

Roll Number	
Candidate Name	
Venue Name	iON Digital Zone iDZ Hebbal
Exam Date	14/06/2023
Exam Time	3:30 PM - 5:00 PM
Subject	MTS Non Tech Havaladar CBIC and CBN Examination 2022

Section : Numerical and Mathematical Ability

Q.1 The table given below shows the production of five companies in two years.

Company	Years	
	L	M
P	150	200
Q	190	220
R	130	180
S	180	150
T	120	140

Which of the following statement is NOT correct?

- I. The average production of P, Q, R and S in year L are 172.5.
- II. The ratio of production of T in year L to the production of T in year M are 6 : 7.

Ans

- ✓ 1. Only I
- ✗ 2. Both I and II
- ✗ 3. Neither I nor II
- ✗ 4. Only II

Question Type : MCQ

Question ID : 264330139626

Option 1 ID : 264330546919

Option 2 ID : 264330546921

Option 3 ID : 264330546922

Option 4 ID : 264330546920

Status : Answered

Chosen Option : 2

Test Prime

**ALL EXAMS,
ONE SUBSCRIPTION**



70,000+
Mock Tests



**Personalised
Report Card**



**Unlimited
Re-Attempt**



600+
Exam Covered



**Previous Year
Papers**



**500%
Refund**



ATTEMPT FREE MOCK NOW

Q.2 The ratio of the sides of a triangle is 3 : 3 : 4. If the area of triangle is $32\sqrt{5} \text{ cm}^2$, then what is the length of the equal sides?

- Ans**
- ☒ 1. 12 cm
 - ☐ 2. 16 cm
 - ☐ 3. 10 cm
 - ☐ 4. 15 cm

Question Type : **MCQ**

Question ID : **264330140625**

Option 1 ID : **264330550848**

Option 2 ID : **264330550849**

Option 3 ID : **264330550850**

Option 4 ID : **264330550847**

Status : **Answered**

Chosen Option : **2**

Q.3 The average height of P, Q and R is 160 cm. If the average height of P and Q is 140 cm and that of Q and R is 129 cm, then what is the height of Q?

- Ans**
- ☐ 1. 72 cm
 - ☐ 2. 62 cm
 - ☒ 3. 58 cm
 - ☐ 4. 78 cm

Question Type : **MCQ**

Question ID : **264330140196**

Option 1 ID : **264330549165**

Option 2 ID : **264330549163**

Option 3 ID : **264330549164**

Option 4 ID : **264330549166**

Status : **Answered**

Chosen Option : **2**

Q.4 If selling price and cost price of a shirt is Rs. 945 and Rs. 750 respectively, then what is the profit percentage?

- Ans**
- ☐ 1. 25 percent
 - ☐ 2. 22 percent
 - ☒ 3. 26 percent
 - ☐ 4. 28 percent

Question Type : **MCQ**

Question ID : **264330140179**

Option 1 ID : **264330549095**

Option 2 ID : **264330549096**

Option 3 ID : **264330549098**

Option 4 ID : **264330549097**

Status : **Answered**

Chosen Option : **2**

Q.5 A sum of Rs.2600 is invested in a scheme of simple interest. It becomes Rs.3320 in 3 years How much this sum will become in 5 years?

- Ans**
- ☒ 1. Rs.3800
 - ☐ 2. Rs.4200
 - ☐ 3. Rs.3600
 - ☐ 4. Rs.4500

Question Type : **MCQ**

Question ID : **264330139921**

Option 1 ID : **264330548065**

Option 2 ID : **264330548064**

Option 3 ID : **264330548066**

Option 4 ID : **264330548063**

Status : **Answered**

Chosen Option : **3**

Q.6 What is the value of $\frac{72}{22} \times \frac{11}{3} \div \frac{21}{9}$ of $\frac{18}{7}$?

- Ans**
- ☐ 1. 6
 - ☐ 2. 36
 - ☐ 3. 8
 - ☒ 4. 2

Question Type : **MCQ**

Question ID : **264330140599**

Option 1 ID : **264330550747**

Option 2 ID : **264330550748**

Option 3 ID : **264330550750**

Option 4 ID : **264330550749**

Status : **Answered**

Chosen Option : **3**

Q.7 If 80 percent of total articles are sold at a profit of 25 percent and remaining articles are sold at a loss of 20 percent, then what will be the overall profit percentage?

- Ans**
- ☐ 1. 15 percent
 - ☐ 2. 12.5 percent
 - ☒ 3. 16 percent
 - ☐ 4. 20 percent

Question Type : **MCQ**

Question ID : **264330139898**

Option 1 ID : **264330547973**

Option 2 ID : **264330547972**

Option 3 ID : **264330547974**

Option 4 ID : **264330547971**

Status : **Answered**

Chosen Option : **3**

Q.8 The salaries of X, Y and Z are in the ratio 8 : 5 : 12. If their salaries are increased by 10 percent, 20 percent and 30 percent respectively, then what will be the ratio of their increased salaries?

- Ans**
- ✓ 1. 22 : 15 : 39
 - ✗ 2. 25 : 48 : 59
 - ✗ 3. 24 : 47 : 58
 - ✗ 4. 11 : 25 : 36

Question Type : **MCQ**

Question ID : **264330139960**

Option 1 ID : **264330548221**

Option 2 ID : **264330548222**

Option 3 ID : **264330548220**

Option 4 ID : **264330548219**

Status : **Answered**

Chosen Option : **3**

Q.9 P is thrice as good as workman as Q and therefore is able to finish a work in 40 days less than Q. In how many days can they together complete the same work?

- Ans**
- ✗ 1. 20 days
 - ✓ 2. 15 days
 - ✗ 3. 22.5 days
 - ✗ 4. 18 days

Question Type : **MCQ**

Question ID : **264330139629**

Option 1 ID : **264330546931**

Option 2 ID : **264330546933**

Option 3 ID : **264330546934**

Option 4 ID : **264330546932**

Status : **Answered**

Chosen Option : **4**

Q.10 The amount received on a certain sum after 3 years and 5 years on compound interest (compounding annually) is Rs. 20,736 and Rs. 29,859.84 respectively. What is that sum?

- Ans**
- ✗ 1. Rs. 9000
 - ✗ 2. Rs. 14000
 - ✗ 3. Rs. 15000
 - ✓ 4. Rs. 12000

Question Type : **MCQ**

Question ID : **264330140544**

Option 1 ID : **264330550532**

Option 2 ID : **264330550534**

Option 3 ID : **264330550531**

Option 4 ID : **264330550533**

Status : **Answered**

Chosen Option : **4**

Q.11 What is the value of X ?

$$X = \frac{7}{5} + \left\{ \frac{1}{5} - \frac{1}{3} \right\} \times \frac{5}{2}.$$

- Ans ☒ 1. 16/15
☒ 2. 17/15
☒ 3. 15/16
☒ 4. 19/15

Question Type : MCQ
 Question ID : 264330139036
 Option 1 ID : 264330544752
 Option 2 ID : 264330544751
 Option 3 ID : 264330544753
 Option 4 ID : 264330544754
 Status : Answered
 Chosen Option : 4

Q.12 A person covers first 35 km in 60 minutes and next 40 km in 30 minutes. What is his average speed for the whole journey?

- Ans ☒ 1. 49 km/hr
☒ 2. 42 km/hr
☒ 3. 50 km/hr
☒ 4. 63 km/hr

Question Type : MCQ
 Question ID : 264330140177
 Option 1 ID : 264330549089
 Option 2 ID : 264330549088
 Option 3 ID : 264330549090
 Option 4 ID : 264330549087
 Status : Answered
 Chosen Option : 4

Q.13 A boat can row 24 km in 6 hours in still water. It can row 56 km downstream and 30 km upstream in 38 hours. What is the speed of the stream?

- Ans ☒ 1. 3 km/hr
☒ 2. 5 km/hr
☒ 3. 3.5 km/hr
☒ 4. 4 km/hr

Question Type : MCQ
 Question ID : 264330140585
 Option 1 ID : 264330550691
 Option 2 ID : 264330550694
 Option 3 ID : 264330550693
 Option 4 ID : 264330550692
 Status : Answered
 Chosen Option : 1

Q.14 P is 20 percent more than Q. Q is how much percentage less than P?

- Ans
- ☒ 1. 14.28 percent
 - ☒ 2. 33.33 percent
 - ☒ 3. 16.66 percent
 - ☒ 4. 8.33 percent

Question Type : MCQ

Question ID : 264330140568

Option 1 ID : 264330550623

Option 2 ID : 264330550625

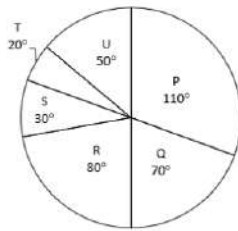
Option 3 ID : 264330550624

Option 4 ID : 264330550626

Status : Answered

Chosen Option : 1

Q.15 The pie chart given below shows the production of wheat by six states. The total production of wheat by all these six states is 3600. The production of wheat of a particular state is shown in terms of degree with respect to the total production of wheat by all these six states.



What is the difference between average production of wheat by P and Q and the average production of wheat by R and T?

- Ans
- ☒ 1. 500
 - ☒ 2. 200
 - ☒ 3. 400
 - ☒ 4. 300

Question Type : MCQ

Question ID : 264330139647

Option 1 ID : 264330547006

Option 2 ID : 264330547005

Option 3 ID : 264330547003

Option 4 ID : 264330547004

Status : Answered

Chosen Option : 1

Q.16 Avi alone can do a piece of work in 60 days while Prakash alone can do it in 80 days. In how many days will they finish it together?

- Ans**
- ☒ 1. 250/6 days
 - ☒ 2. 270/6 days
 - ☒ 3. 240/7 days
 - ☒ 4. 140/6 days

Question Type : **MCQ**

Question ID : **264330140791**

Option 1 ID : **264330551513**

Option 2 ID : **264330551514**

Option 3 ID : **264330551511**

Option 4 ID : **264330551512**

Status : **Answered**

Chosen Option : **1**

Q.17 Marked price of an article is Rs. 1200. A discount of 40 percent is given. If there is a loss of 20 percent, then what is the cost price of the article?

- Ans**
- ☒ 1. Rs. 780
 - ☒ 2. Rs. 850
 - ☒ 3. Rs. 1020
 - ☒ 4. Rs. 900

Question Type : **MCQ**

Question ID : **264330140205**

Option 1 ID : **264330549202**

Option 2 ID : **264330549201**

Option 3 ID : **264330549199**

Option 4 ID : **264330549200**

Status : **Answered**

Chosen Option : **2**

Q.18 A square park has sides of length 18 cm. A 1 cm wide path along the edges is inside it. What is the area of the path?

- Ans**
- ☒ 1. 92 cm^2
 - ☒ 2. 68 cm^2
 - ☒ 3. 180 cm^2
 - ☒ 4. 76 cm^2

Question Type : **MCQ**

Question ID : **264330140597**

Option 1 ID : **264330550742**

Option 2 ID : **264330550740**

Option 3 ID : **264330550741**

Option 4 ID : **264330550739**

Status : **Answered**

Chosen Option : **2**

Q.19 The value of $44 + 67 - 32 \div 4 + (9 + 5 + 5 + 4) - 4 \times 12 \div 6 - 30 \div 5$ is :

- Ans
- ☒ 1. 121
 - ☒ 2. 120
 - ☒ 3. 112
 - ☒ 4. 123

Question Type : MCQ
 Question ID : 264330140797
 Option 1 ID : 264330551537
 Option 2 ID : 264330551538
 Option 3 ID : 264330551536
 Option 4 ID : 264330551535
 Status : Answered
 Chosen Option : 2

Q.20 If $A : B : C = 2 : 3 : 4$, then what will be the value of $(A/B) : (B/C) : (C/A)$?

- Ans
- ☒ 1. 9 : 5 : 36
 - ☒ 2. 8 : 7 : 25
 - ☒ 3. 8 : 9 : 24
 - ☒ 4. 12 : 10 : 13

Question Type : MCQ
 Question ID : 264330140639
 Option 1 ID : 264330550906
 Option 2 ID : 264330550903
 Option 3 ID : 264330550905
 Option 4 ID : 264330550904
 Status : Answered
 Chosen Option : 2

Section : Reasoning Ability and Problem Solving

Q.1 Which of the following letter will replace the question mark (?) in the given series?
 K, H, E, B, Y, V, S, P, ?

- Ans
- ☒ 1. I
 - ☒ 2. M
 - ☒ 3. Q
 - ☒ 4. F

Question Type : MCQ
 Question ID : 264330140073
 Option 1 ID : 264330548673
 Option 2 ID : 264330548671
 Option 3 ID : 264330548674
 Option 4 ID : 264330548672
 Status : Answered
 Chosen Option : 2

Q.2 Two Statements are given followed by two conclusions numbered I and II. Assuming the statements to be true, even if they seem to be at variance with commonly known facts, decide which of the conclusions logically follow(s) from the statements.

Statements:

All diaries are books.

Some bags are diaries.

Conclusions:

I. All bags are books.

II. Some books are bags.

- Ans**
- ☒ 1. Only conclusion II follows.
 - ☐ 2. Neither conclusion I nor II follow.
 - ☐ 3. Both conclusions I and II follow.
 - ☐ 4. Only conclusion I follows.

Question Type : **MCQ**

Question ID : **264330140102**

Option 1 ID : **264330548788**

Option 2 ID : **264330548790**

Option 3 ID : **264330548789**

Option 4 ID : **264330548787**

Status : **Answered**

Chosen Option : **3**

Q.3 Which two signs should be interchanged to make the given equation correct?

$$6 = 9 \div 3 - 2 + 7$$

- Ans**
- ☐ 1. = and -
 - ☐ 2. + and ÷
 - ☐ 3. - and +
 - ☒ 4. + and =

Question Type : **MCQ**

Question ID : **264330140027**

Option 1 ID : **264330548487**

Option 2 ID : **264330548490**

Option 3 ID : **264330548489**

Option 4 ID : **264330548488**

Status : **Answered**

Chosen Option : **4**

Q.4 Study the given pattern carefully and select the number that can replace the question mark (?) in it.

First row- 30, 120, 124

Second row- 40, 160, 164

Third row- 22, 88, ?

- Ans**
- ☐ 1. 90
 - ☒ 2. 92
 - ☐ 3. 89
 - ☐ 4. 98

Question Type : **MCQ**

Question ID : **264330135362**

Option 1 ID : **264330530356**

Option 2 ID : **264330530358**

Option 3 ID : **264330530357**

Option 4 ID : **264330530355**

Status : **Answered**

Chosen Option : **2**

Q.5 Select the option that is related to the third letter cluster in the same way as the second letter cluster is related to the first letter cluster.

SUN : QSL :: ROP : ?

- Ans**
- ☒ 1. PMM
 - ☒ 2. PMO
 - ☒ 3. PMN
 - ☒ 4. PNN

Question Type : **MCQ**

Question ID : **264330141203**

Option 1 ID : **264330553149**

Option 2 ID : **264330553150**

Option 3 ID : **264330553147**

Option 4 ID : **264330553148**

Status : **Answered**

Chosen Option : **3**

Q.6 Which of the following numbers will replace the question mark (?) in the given series?

36, 33, 39, 36, 42, 39, 45, ?

- Ans**
- ☒ 1. 42
 - ☒ 2. 48
 - ☒ 3. 38
 - ☒ 4. 29

Question Type : **MCQ**

Question ID : **264330140403**

Option 1 ID : **264330549992**

Option 2 ID : **264330549994**

Option 3 ID : **264330549991**

Option 4 ID : **264330549993**

Status : **Answered**

Chosen Option : **1**

Q.7 In a certain code language, 'CODE' is written as 'SSH3'. How will 'WIRE' be written in that language?

- Ans**
- ☒ 1. 25NV3
 - ☒ 2. 20MV3
 - ☒ 3. 25MV3
 - ☒ 4. 25MV6

Question Type : **MCQ**

Question ID : **264330139994**

Option 1 ID : **264330548355**

Option 2 ID : **264330548357**

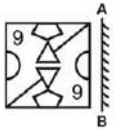
Option 3 ID : **264330548358**

Option 4 ID : **264330548356**

Status : **Answered**

Chosen Option : **3**

Q.8 If a mirror is placed on the line AB, then out of the option figures which figure will be the right image of the question figure?



Ans


✗ 1.



✗ 2.



✗ 3.



✓ 4.



Question Type : MCQ

Question ID : 264330139586

Option 1 ID : 264330546759

Option 2 ID : 264330546760

Option 3 ID : 264330546762

Option 4 ID : 264330546761

Status : Answered

Chosen Option : 4

Q.9 Select the option that is related to the fifth number in the same way as the second number is related to the first number and fourth number is related to third number.

15 : 256 :: 16 : 289 :: 18 : ?

Ans

✗ 1. 336

✗ 2. 441

✗ 3. 342

✓ 4. 361

Question Type : MCQ

Question ID : 264330140969

Option 1 ID : 264330552224

Option 2 ID : 264330552226

Option 3 ID : 264330552225

Option 4 ID : 264330552223

Status : Answered

Chosen Option : 4

Q.10 In a certain code language, 'COUNTY' is written as 'UOCYTN'. How will 'HOLDER' be written in that language?

- Ans** ☒ 1. LOHRED
☒ 2. LHORED
☒ 3. LOHDER
☒ 4. LOHERD

Question Type : **MCQ**

Question ID : **264330138793**

Option 1 ID : **264330543780**

Option 2 ID : **264330543779**

Option 3 ID : **264330543782**

Option 4 ID : **264330543781**

Status : **Answered**

Chosen Option : **1**

Q.11 In a certain code language, 'PESO' is written as '55' and 'THEN' is written as '47'. How will 'NIKE' be written in that language?

- Ans** ☒ 1. 37
☒ 2. 38
☒ 3. 40
☒ 4. 39

Question Type : **MCQ**

Question ID : **264330140435**

Option 1 ID : **264330550121**

Option 2 ID : **264330550120**

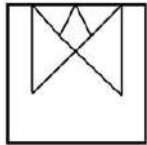
Option 3 ID : **264330550122**

Option 4 ID : **264330550119**

Status : **Answered**

Chosen Option : **4**

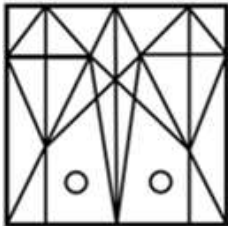
Q.12 Select the option figure in which the given figure (X) is embedded as its part (rotation is NOT allowed).



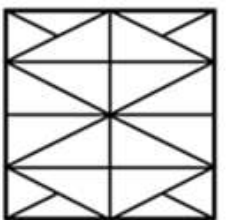
(X)

Ans

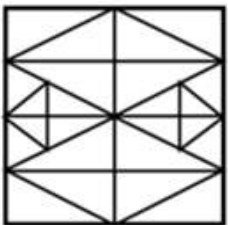
✓ 1.



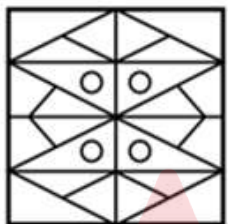
✗ 2.



✗ 3.



✗ 4.



Question Type : MCQ

Question ID : 264330140469

Option 1 ID : 264330550257

Option 2 ID : 264330550256

Option 3 ID : 264330550258

Option 4 ID : 264330550255

Status : Answered

Chosen Option : 1

Q.13 Five girls A, B, C, D, and E are standing in a straight line facing south. A stand to the immediate right of C. D stands in between C and E. E is not standing in the end. Who is standing to the left of E?

- Ans
- ☒ 1. C
 - ☒ 2. D
 - ☒ 3. A
 - ☒ 4. B

Question Type : MCQ
Question ID : 264330140019
Option 1 ID : 264330548457
Option 2 ID : 264330548458
Option 3 ID : 264330548456
Option 4 ID : 264330548455
Status : Answered
Chosen Option : 4

Q.14 Eight boys Ram, Sumit, Sunil, Rahul, Raj, Aman, Amit and Anil are sitting around a circular table facing towards the centre (not necessarily in the same order). Anil is not the immediate neighbour of Raj or Rahul. Anil is to the immediate left of Ram. Amit is the immediate neighbour of Raj. Aman is to the immediate right of Sumit. Sunil is sitting between Raj and Aman. Who is the immediate neighbour of both Raj and Anil?

- Ans
- ☒ 1. Rahul
 - ☒ 2. Amit
 - ☒ 3. Sunil
 - ☒ 4. Aman

Question Type : MCQ
Question ID : 264330140962
Option 1 ID : 264330552197
Option 2 ID : 264330552195
Option 3 ID : 264330552198
Option 4 ID : 264330552196
Status : Answered
Chosen Option : 2

Q.15 After interchanging which two signs and two numbers, the value of the given equation will be '6'?

$$7 - 2 \times 1 + 3 + 5$$

- Ans
- ☒ 1. \times and \div , 7 and 5
 - ☒ 2. \times and \div , 2 and 7
 - ☒ 3. $+$ and $-$, 7 and 5
 - ☒ 4. \times and $-$, 5 and 3

Question Type : MCQ
Question ID : 264330139544
Option 1 ID : 264330546592
Option 2 ID : 264330546593
Option 3 ID : 264330546591
Option 4 ID : 264330546594
Status : Answered
Chosen Option : 4

Q.16 Three statements are given followed by two conclusions numbered I and II. Assuming the statements to be true, even if they seem to be at variance with commonly known facts, decide which of the conclusions logically follow(s) from the statements.

Statements:

All pins are needles.

Some needles are tables.

No needle is a bin.

Conclusions:

I. No table is a bin.

II. Some pins are tables.

Ans ☒ 1. Only conclusion II follows

☒ 2. Neither conclusion I nor II follows

☒ 3. Both conclusions I and II follow

☒ 4. Only conclusion I follows

Question Type : **MCQ**

Question ID : **264330138798**

Option 1 ID : **264330543800**

Option 2 ID : **264330543802**

Option 3 ID : **264330543801**

Option 4 ID : **264330543799**

Status : **Answered**

Chosen Option : **2**

Q.17 In the following question, select the missing number of the given series.

1, 5, 21, 85, 341, ?

Ans ☒ 1. 1380

☒ 2. 1365

☒ 3. 1360

☒ 4. 1370

Question Type : **MCQ**

Question ID : **264330140988**

Option 1 ID : **264330552302**

Option 2 ID : **264330552300**

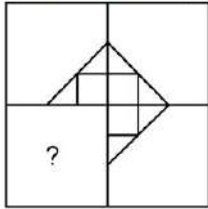
Option 3 ID : **264330552299**

Option 4 ID : **264330552301**

Status : **Answered**

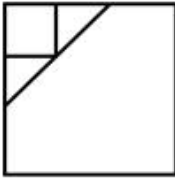
Chosen Option : **2**

Q.18 Select the option figure that will replace the question mark (?) in the figure given below to complete the pattern.
(rotation is not allowed)

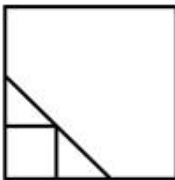


Ans

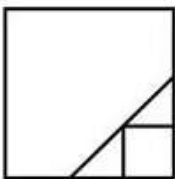
✗ 1.



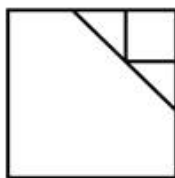
✗ 2.



✗ 3.



✓ 4.



Question Type : MCQ

Question ID : 264330138807

Option 1 ID : 264330543836

Option 2 ID : 264330543838

Option 3 ID : 264330543837

Option 4 ID : 264330543835

Status : Answered

Chosen Option : 4

Q.19 Number of pens in five shops M1, M2, M3, M4 and M5 are compared. Number of pens in M3 are more than only M1.
No two shops have same number of pens. Number of pens in M5 are less than M2 but more than M4. Number of pens in M5 are more than how many shops?

Ans ✗ 1. 2

✓ 2. 3

✗ 3. 4

✗ 4. 1

Question Type : MCQ

Question ID : 264330139576

Option 1 ID : 264330546719

Option 2 ID : 264330546722

Option 3 ID : 264330546721

Option 4 ID : 264330546720

Status : Answered

Chosen Option : 2

Q.20 Select the option that is related to the fifth term in the same way as the second term is related to the first term and fourth term is related to third term.

PAN : IFK :: TEA : VJO :: FOR : ?

- Ans**
- ☒ 1. NTA
 - ☒ 2. MUB
 - ☒ 3. MTB
 - ☒ 4. MTA

Question Type : MCQ
Question ID : 264330140055
Option 1 ID : 264330548601
Option 2 ID : 264330548599
Option 3 ID : 264330548600
Option 4 ID : 264330548602
Status : Answered
Chosen Option : 4

Section : General Awareness

Q.1 Which article of the Indian constitution provides freedom to manage its own affairs in matters of religion?

- Ans**
- ☒ 1. Article 21
 - ☒ 2. Article 26
 - ☒ 3. Article 37
 - ☒ 4. Article 15

Question Type : MCQ
Question ID : 264330140771
Option 1 ID : 264330551434
Option 2 ID : 264330551432
Option 3 ID : 264330551433
Option 4 ID : 264330551431
Status : Answered
Chosen Option : 2

Q.2 If Birth rate of a country is more than death rate then the population will _____.

- Ans**
- ☒ 1. decrease by 50%
 - ☒ 2. decrease gradually
 - ☒ 3. increase
 - ☒ 4. remain constant

Question Type : MCQ
Question ID : 264330139718
Option 1 ID : 264330547288
Option 2 ID : 264330547287
Option 3 ID : 264330547289
Option 4 ID : 264330547290
Status : Answered
Chosen Option : 3

Q.3 Tribal leader Birsa was associated with which tribe?

Ans ☒ 1. Munda

☐ 2. Bhil

☐ 3. Gond

☐ 4. Bhutia

Question Type : MCQ

Question ID : 264330138995

Option 1 ID : 264330544589

Option 2 ID : 264330544588

Option 3 ID : 264330544587

Option 4 ID : 264330544590

Status : Answered

Chosen Option : 1

Q.4 Which among the following novels was written by famous Indian author Mulk Raj Anand?

Ans ☒ 1. Untouchable

☐ 2. The Room on the Roof

☐ 3. Train to Pakistan

☐ 4. Godan

Question Type : MCQ

Question ID : 264330140743

Option 1 ID : 264330551322

Option 2 ID : 264330551320

Option 3 ID : 264330551321

Option 4 ID : 264330551319

Status : Answered

Chosen Option : 3

Q.5 Rural Backyard Piggery Scheme was launched by which state government?

Ans ☒ 1. Meghalaya

☐ 2. Jharkhand

☐ 3. Punjab

☐ 4. Assam

Question Type : MCQ

Question ID : 264330140367

Option 1 ID : 264330549849

Option 2 ID : 264330549850

Option 3 ID : 264330549848

Option 4 ID : 264330549847

Status : Answered

Chosen Option : 1

Q.6 Which sea separates Africa from the Arabian peninsula?

- Ans ☒ 1. Red Sea
☐ 2. Black Sea
☐ 3. White Sea
☐ 4. Caspian Sea

Question Type : MCQ
Question ID : 264330140659
Option 1 ID : 264330550984
Option 2 ID : 264330550983
Option 3 ID : 264330550985
Option 4 ID : 264330550986
Status : Answered
Chosen Option : 1

Q.7 Which among the following terms means growing of fruits?

- Ans ☐ 1. Apiculture
☐ 2. Arboriculture
☒ 3. Pomiculture
☐ 4. Sericulture

Question Type : MCQ
Question ID : 264330140940
Option 1 ID : 264330552108
Option 2 ID : 264330552107
Option 3 ID : 264330552109
Option 4 ID : 264330552110
Status : Answered
Chosen Option : 2

Q.8 "Chhath Puja" is celebrated with great grandeur all over the world mainly by which community?

- Ans ☐ 1. Punjabi community
☒ 2. Bihari community
☐ 3. Gujarati community
☐ 4. Marathi community

Question Type : MCQ
Question ID : 264330139749
Option 1 ID : 264330547412
Option 2 ID : 264330547413
Option 3 ID : 264330547411
Option 4 ID : 264330547414
Status : Answered
Chosen Option : 2

Q.9 Shri Bhagwant Mann became the Chief Minister of which state in March 2022?

- Ans
- ✓ 1. Punjab
 - ✗ 2. Himachal Pradesh
 - ✗ 3. Delhi
 - ✗ 4. Haryana

Question Type : MCQ
 Question ID : 264330140907
 Option 1 ID : 264330551975
 Option 2 ID : 264330551978
 Option 3 ID : 264330551977
 Option 4 ID : 264330551976
 Status : Answered
 Chosen Option : 1

Q.10 England lift the ICC Men's T20 World Cup 2022 trophy after beating _____.

- Ans
- ✗ 1. New Zealand
 - ✓ 2. Pakistan
 - ✗ 3. Australia
 - ✗ 4. India

Question Type : MCQ
 Question ID : 264330140954
 Option 1 ID : 264330552163
 Option 2 ID : 264330552164
 Option 3 ID : 264330552165
 Option 4 ID : 264330552166
 Status : Answered
 Chosen Option : 3

Q.11 Which two head rivers merge to form the river Ganga?

- Ans
- ✗ 1. Mandakini and Dhauliganga
 - ✗ 2. Alaknanda and Mandakini
 - ✗ 3. Bhagirathi and Mandakini
 - ✓ 4. Alaknanda and Bhagirathi

Question Type : MCQ
 Question ID : 264330140661
 Option 1 ID : 264330550992
 Option 2 ID : 264330550993
 Option 3 ID : 264330550994
 Option 4 ID : 264330550991
 Status : Answered
 Chosen Option : 4

Q.12 Which among the following acids is found in Mustard oil?

- Ans
- ☒ 1. Malic Acid
 - ☒ 2. Tartaric Acid
 - ☒ 3. Lauric Acid
 - ☒ 4. Erucic Acid

Question Type : MCQ
 Question ID : 264330140938
 Option 1 ID : 264330552102
 Option 2 ID : 264330552100
 Option 3 ID : 264330552101
 Option 4 ID : 264330552099
 Status : Answered
 Chosen Option : 3

Q.13 What is the atomic number of Nitrogen in the science periodic table?

- Ans
- ☒ 1. 21
 - ☒ 2. 7
 - ☒ 3. 18
 - ☒ 4. 11

Question Type : MCQ
 Question ID : 264330140756
 Option 1 ID : 264330551374
 Option 2 ID : 264330551371
 Option 3 ID : 264330551373
 Option 4 ID : 264330551372
 Status : Answered
 Chosen Option : 3

Q.14 Kuchipudi dance is accompanied by which type of music?

- Ans
- ☒ 1. Fusion
 - ☒ 2. Carnatic
 - ☒ 3. Jazz
 - ☒ 4. Hindustani

Question Type : MCQ
 Question ID : 264330139673
 Option 1 ID : 264330547107
 Option 2 ID : 264330547109
 Option 3 ID : 264330547110
 Option 4 ID : 264330547108
 Status : Answered
 Chosen Option : 2

Q.15 In which country was the first Olympic Games held in the year 1896?

- Ans
- ☒ 1. Egypt
 - ☒ 2. Japan
 - ☒ 3. Greece
 - ☒ 4. Italy

Question Type : MCQ
 Question ID : 264330140339
 Option 1 ID : 264330549737
 Option 2 ID : 264330549736
 Option 3 ID : 264330549735
 Option 4 ID : 264330549738
 Status : Answered
 Chosen Option : 1

Q.16 Who is the playback singer and composer of the famous song "Qismat Ki Hawa" which featured in the movie Ludo in 2020?

- Ans
- ☒ 1. Arijit Singh
 - ☒ 2. C. Ramchandra
 - ☒ 3. A. R. Rahman
 - ☒ 4. R.D. Burman

Question Type : MCQ
 Question ID : 264330140335
 Option 1 ID : 264330549720
 Option 2 ID : 264330549722
 Option 3 ID : 264330549721
 Option 4 ID : 264330549719
 Status : Answered
 Chosen Option : 3

Q.17 Guru Vempati Chinna Satyam is associated with which of the following dance forms?

- Ans
- ☒ 1. Kuchipudi
 - ☒ 2. Kathak
 - ☒ 3. Bharatnatyam
 - ☒ 4. Manipuri

Question Type : MCQ
 Question ID : 264330140361
 Option 1 ID : 264330549825
 Option 2 ID : 264330549824
 Option 3 ID : 264330549826
 Option 4 ID : 264330549823
 Status : Answered
 Chosen Option : 1

Q.18 Rural Employment Generation Programme (REGP) was launched in _____ .

- Ans
- ☒ 1. 1997
 - ☒ 2. 1991
 - ☒ 3. 1993
 - ☒ 4. 1995

Question Type : MCQ
Question ID : 264330139693
Option 1 ID : 264330547190
Option 2 ID : 264330547187
Option 3 ID : 264330547188
Option 4 ID : 264330547189
Status : Answered
Chosen Option : 2

Q.19 Jyotiba Phule founded which of the following organizations?

- Ans
- ☒ 1. Arya Samaj
 - ☒ 2. Satyashodhak Samaj
 - ☒ 3. Satnami Samaj
 - ☒ 4. Brahmo Samaj

Question Type : MCQ
Question ID : 264330138994
Option 1 ID : 264330544586
Option 2 ID : 264330544585
Option 3 ID : 264330544584
Option 4 ID : 264330544583
Status : Answered
Chosen Option : 2

Q.20 Jeev Milkha Singh is associated with which sport?

- Ans
- ☒ 1. Golf
 - ☒ 2. Hockey
 - ☒ 3. Cricket
 - ☒ 4. Athletics

Question Type : MCQ
Question ID : 264330140885
Option 1 ID : 264330551888
Option 2 ID : 264330551889
Option 3 ID : 264330551887
Option 4 ID : 264330551890
Status : Marked For Review
Chosen Option : 3

Q.21 Cotton was probably grown at Mehrgarh from about _____.

- Ans ☒ 1. 7000 years ago
☒ 2. 8000 years ago
☒ 3. 6000 years ago
☒ 4. 5000 years ago

Question Type : MCQ
 Question ID : 264330139769
 Option 1 ID : 264330547493
 Option 2 ID : 264330547494
 Option 3 ID : 264330547492
 Option 4 ID : 264330547491
 Status : Answered
 Chosen Option : 1

Q.22 Which among the following are called the amphibians of the plant kingdom?

- Ans ☒ 1. Gymnosperm
☒ 2. Bryophyte
☒ 3. Thallophyte
☒ 4. Angiosperm

Question Type : MCQ
 Question ID : 264330141052
 Option 1 ID : 264330552558
 Option 2 ID : 264330552557
 Option 3 ID : 264330552556
 Option 4 ID : 264330552555
 Status : Answered
 Chosen Option : 3

Q.23 The term "Vetti" in Chola empire is related to _____.

- Ans ☒ 1. part payments
☒ 2. army
☒ 3. forced labour
☒ 4. gold coins

Question Type : MCQ
 Question ID : 264330139670
 Option 1 ID : 264330547096
 Option 2 ID : 264330547098
 Option 3 ID : 264330547097
 Option 4 ID : 264330547095
 Status : Answered
 Chosen Option : 1

Q.24 Who chairs the Monetary Policy Committee in India?

- Ans
- ☒ 1. Union Finance minister
 - ☒ 2. Deputy Governor, Reserve Bank of India
 - ☒ 3. Comptroller and Auditor General of India
 - ☒ 4. Governor, Reserve Bank of India

Question Type : MCQ
 Question ID : 264330140700
 Option 1 ID : 264330551147
 Option 2 ID : 264330551149
 Option 3 ID : 264330551148
 Option 4 ID : 264330551150
 Status : Answered
 Chosen Option : 4

Q.25 The Lok Sabha (House of the People) was duly constituted for the first time on _____.

- Ans
- ☒ 1. 26 April 1950
 - ☒ 2. 17 April 1952
 - ☒ 3. 18 January 1950
 - ☒ 4. 20 April 1951

Question Type : MCQ
 Question ID : 264330140338
 Option 1 ID : 264330549734
 Option 2 ID : 264330549732
 Option 3 ID : 264330549733
 Option 4 ID : 264330549731
 Status : Answered
 Chosen Option : 2

Section : English Language and Comprehension

Q.1 Select the word segment that substitutes (replaces) the bracketed word segment correctly and completes the sentence meaningfully. Select the option 'no correction required' if the sentence is correct as given.

(They have been) dejected when he arrived, but now they sparkle with enthusiasm.

- Ans
- ☒ 1. They were been
 - ☒ 2. They had been
 - ☒ 3. They was
 - ☒ 4. No correction required

Question Type : MCQ
 Question ID : 264330136565
 Option 1 ID : 264330534996
 Option 2 ID : 264330534995
 Option 3 ID : 264330534997
 Option 4 ID : 264330534998
 Status : Answered
 Chosen Option : 2

Q.2 Fill in the blank with the most appropriate option.

Ancient Indians were never this _____ minded.

- Ans
- ☒ 1. cramp
 - ☒ 2. slim
 - ☒ 3. narrow
 - ☒ 4. tiny

Question Type : MCQ
Question ID : 264330136585
Option 1 ID : 264330535074
Option 2 ID : 264330535071
Option 3 ID : 264330535072
Option 4 ID : 264330535073
Status : Answered
Chosen Option : 1

Q.3 Identify the segment that contains a grammatical error. If there is no error, select 'No error'.

Susan had recently run on to / Catherine at the supermarket, they / were seeing each other after many years.

- Ans
- ☒ 1. were seeing each other after many years.
 - ☒ 2. Catherine at the supermarket, they
 - ☒ 3. No error
 - ☒ 4. Susan had recently run on to

Question Type : MCQ
Question ID : 264330136743
Option 1 ID : 264330535681
Option 2 ID : 264330535680
Option 3 ID : 264330535682
Option 4 ID : 264330535679
Status : Answered
Chosen Option : 4

Q.4 Select the most appropriate word for the given group of words.

A person who likes humankind and human society

- Ans
- ☒ 1. Lunatic
 - ☒ 2. Narcissist
 - ☒ 3. Mercenary
 - ☒ 4. Philanthropist

Question Type : MCQ
Question ID : 264330135833
Option 1 ID : 264330532202
Option 2 ID : 264330532201
Option 3 ID : 264330532200
Option 4 ID : 264330532199
Status : Answered
Chosen Option : 4

Q.5 Select the word from the options which is similar in meaning to the bracketed word given in the sentence below.
He hesitated, studying her face with a (confused) expression.

- Ans**
- ☒ 1. calm
 - ☒ 2. assisted
 - ☒ 3. explicated
 - ☒ 4. puzzled

Question Type : **MCQ**
Question ID : **264330136152**
Option 1 ID : **264330533410**
Option 2 ID : **264330533408**
Option 3 ID : **264330533407**
Option 4 ID : **264330533409**
Status : **Answered**
Chosen Option : **4**

Q.6 Select the most appropriate meaning of the given idiom.

Go bananas

- Ans**
- ☒ 1. To become excited or angry
 - ☒ 2. To win a match
 - ☒ 3. To finish household chores
 - ☒ 4. To feel low

Question Type : **MCQ**
Question ID : **264330136285**
Option 1 ID : **264330533920**
Option 2 ID : **264330533919**
Option 3 ID : **264330533921**
Option 4 ID : **264330533922**
Status : **Not Attempted and Marked For Review**
Chosen Option : **--**

Q.7 Select the most appropriate antonym of the given word.

Evidence

- Ans**
- ☒ 1. Signature
 - ☒ 2. Concealment
 - ☒ 3. Information
 - ☒ 4. Duplicity

Question Type : **MCQ**
Question ID : **264330136428**
Option 1 ID : **264330534471**
Option 2 ID : **264330534472**
Option 3 ID : **264330534473**
Option 4 ID : **264330534474**
Status : **Answered**
Chosen Option : **2**

Q.8 Select the most appropriate antonym to substitute the (bracketed) word in the given sentence.

Given (sufficient) effort, all known infectious agents can be specifically identified.

- Ans**
- ☒ 1. unrefined
 - ☒ 2. optimal
 - ☒ 3. trivial
 - ☒ 4. captivity

Question Type : **MCQ**

Question ID : **264330135838**

Option 1 ID : **264330532220**

Option 2 ID : **264330532222**

Option 3 ID : **264330532219**

Option 4 ID : **264330532221**

Status : **Answered**

Chosen Option : **2**

Q.9 Select the most appropriate option to fill in the blank.

And to think after all these years you still have the _____ to say such things to me!

- Ans**
- ☒ 1. tangential
 - ☒ 2. brightness
 - ☒ 3. arrogance
 - ☒ 4. fitness

Question Type : **MCQ**

Question ID : **264330135825**

Option 1 ID : **264330532171**

Option 2 ID : **264330532174**

Option 3 ID : **264330532172**

Option 4 ID : **264330532173**

Status : **Answered**

Chosen Option : **1**

Q.10 Select the most appropriate option to fill in the blank.

The show played to full houses for a five-night run and ended to _____ applause on Saturday night.

- Ans**
- ☒ 1. semantic
 - ☒ 2. redress
 - ☒ 3. tumultuous
 - ☒ 4. barren

Question Type : **MCQ**

Question ID : **264330136560**

Option 1 ID : **264330534978**

Option 2 ID : **264330534976**

Option 3 ID : **264330534975**

Option 4 ID : **264330534977**

Status : **Answered**

Chosen Option : **3**

Q.11 Select the most appropriate option to substitute the bracketed segment in the given sentence. If there is no need to substitute it, select 'no substitution required'.

He lights his pipe, (and on many an evenings he helps me with) dishes.

- Ans**
- ☒ 1. and on many evenings he helped me with the
 - ☒ 2. and on many evenings he helps me with the
 - ☒ 3. and many an evenings he helps me with the
 - ☒ 4. No substitution required

Question Type : **MCQ**
 Question ID : **264330136538**
 Option 1 ID : **264330534893**
 Option 2 ID : **264330534891**
 Option 3 ID : **264330534892**
 Option 4 ID : **264330534894**
 Status : **Answered**
 Chosen Option : **4**

Q.12 Identify the segment that contains a grammatical error. If there is no error, select 'No error'

Nothing great in the world/ have been accomplished/ without passion.

- Ans**
- ☒ 1. Nothing great in the world
 - ☒ 2. No error
 - ☒ 3. without passion.
 - ☒ 4. have been accomplished

Question Type : **MCQ**
 Question ID : **264330136187**
 Option 1 ID : **264330533543**
 Option 2 ID : **264330533546**
 Option 3 ID : **264330533545**
 Option 4 ID : **264330533544**
 Status : **Answered**
 Chosen Option : **4**

Q.13 Select the most appropriate option to substitute the bracketed segment in the given sentence. If there is no need to substitute it, select 'no substitution required'.

That is not a solution available (to most people for who email has become necessity.)

- Ans**
- ☒ 1. to most people for who email has become a necessity.
 - ☒ 2. to most people for whom email has become a necessity.
 - ☒ 3. for most people to whom email has became necessity.
 - ☒ 4. No substitution required

Question Type : **MCQ**
 Question ID : **264330136540**
 Option 1 ID : **264330534900**
 Option 2 ID : **264330534899**
 Option 3 ID : **264330534901**
 Option 4 ID : **264330534902**
 Status : **Answered**
 Chosen Option : **3**

Q.14 Select the most appropriate synonym of the given word.

Glorify

- Ans
- ☒ 1. Mock
 - ☒ 2. Lower
 - ☒ 3. Wonder
 - ☒ 4. Celebrate

Question Type : MCQ
Question ID : 264330136281
Option 1 ID : 264330533905
Option 2 ID : 264330533906
Option 3 ID : 264330533904
Option 4 ID : 264330533903
Status : Answered
Chosen Option : 3

Q.15 Four words are given, out of which three words are spelt correctly. Choose the incorrectly spelt word.

- Ans
- ☒ 1. RESISTANCE
 - ☒ 2. ACQUIANT
 - ☒ 3. PERSISTENT
 - ☒ 4. PRIVILEGE

Question Type : MCQ
Question ID : 264330136183
Option 1 ID : 264330533530
Option 2 ID : 264330533529
Option 3 ID : 264330533527
Option 4 ID : 264330533528
Status : Answered
Chosen Option : 2

Q.16 Find the part of the given sentence that has an error in it. If there is no error, choose 'No error'.

There are already many examples of great technology that had born in the United States.

- Ans
- ☒ 1. of great technology that had
 - ☒ 2. No error
 - ☒ 3. There are already many examples
 - ☒ 4. born in the United States.

Question Type : MCQ
Question ID : 264330135537
Option 1 ID : 264330531052
Option 2 ID : 264330531054
Option 3 ID : 264330531051
Option 4 ID : 264330531053
Status : Answered
Chosen Option : 1

Q.17 Four sentences are given, out of which three have spelling errors. Choose the sentence with all correctly spelt words.

Ans ☒ 1.

They were meant, she says, to be “a public display of your allegiance.”

☒ 2. They fly around like nobody 's buisness.

☒ 3.

They also show problem behaviours, like physical aggression and cheating.

☒ 4. This guide offers sugestions of capital interest to travelers.

Question Type : **MCQ**

Question ID : **264330135738**

Option 1 ID : **264330531837**

Option 2 ID : **264330531838**

Option 3 ID : **264330531836**

Option 4 ID : **264330531835**

Status : **Answered**

Chosen Option : **3**

Q.18 In the following question, out of the given four alternatives, select the alternative which best expresses the meaning of the Idiom/Phrase.

A storm in a tea cup

Ans ☒ 1. Great outrage or excitement about a trivial matter

☒ 2. Constant source of annoyance to someone

☒ 3. To deal with a person who is more than one's match

☒ 4. Back to original position

Question Type : **MCQ**

Question ID : **264330135556**

Option 1 ID : **264330531126**

Option 2 ID : **264330531124**

Option 3 ID : **264330531125**

Option 4 ID : **264330531123**

Status : **Answered**

Chosen Option : **1**

Q.19 A sentence has been given with a blank to be filled with an appropriate option. Choose the correct alternative.

Most of the oil and gas that the UK _____ does not come from Russia.

Ans ☒ 1. imports

☒ 2. import

☒ 3. importing

☒ 4. imported

Question Type : **MCQ**

Question ID : **264330135237**

Option 1 ID : **264330529871**

Option 2 ID : **264330529874**

Option 3 ID : **264330529872**

Option 4 ID : **264330529873**

Status : **Answered**

Chosen Option : **1**

Q.20 Select the most appropriate word for the given group of words.

Opposing or taking arms against a government or ruler.

- Ans
- ☒ 1. Volunteer
 - ☒ 2. Rebel
 - ☒ 3. Rubel
 - ☒ 4. Participant

Question Type : MCQ
Question ID : 264330136124
Option 1 ID : 264330533300
Option 2 ID : 264330533302
Option 3 ID : 264330533299
Option 4 ID : 264330533301
Status : Answered
Chosen Option : 2

Comprehension:

In the following passage some words have been deleted. Fill in the blanks with the help of the alternatives given. Select the most appropriate option for each number.

Equality and freedom have both been identified as important (1) _____ of democracy since ancient times. These principles are reflected in all citizens being (2) _____ before the law and having equal access to (3) _____ processes. For example, in a representative democracy, (4) _____ vote has equal weight, no unreasonable restrictions can apply to anyone seeking to become a (5) _____, and the freedom of its citizens is secured by legitimized rights and liberties which are generally protected by a constitution.

SubQuestion No : 21

Q.21 Select the most appropriate option to fill in blank number 1.

- Ans
- ☒ 1. statistics
 - ☒ 2. characteristics
 - ☒ 3. analytics
 - ☒ 4. linguistics

Question Type : MCQ
Question ID : 264330136492
Option 1 ID : 264330534713
Option 2 ID : 264330534712
Option 3 ID : 264330534711
Option 4 ID : 264330534714
Status : Answered
Chosen Option : 2

Comprehension:

In the following passage some words have been deleted. Fill in the blanks with the help of the alternatives given. Select the most appropriate option for each number.

Equality and freedom have both been identified as important (1) _____ of democracy since ancient times. These principles are reflected in all citizens being (2) _____ before the law and having equal access to (3) _____ processes. For example, in a representative democracy, (4) _____ vote has equal weight, no unreasonable restrictions can apply to anyone seeking to become a (5) _____, and the freedom of its citizens is secured by legitimized rights and liberties which are generally protected by a constitution.

SubQuestion No : 22

Q.22 Select the most appropriate option to fill in blank number 2.

- Ans
- ☒ 1. irregular
 - ☒ 2. equal
 - ☒ 3. unfair
 - ☒ 4. unequal

Question Type : MCQ

Question ID : 264330136493

Option 1 ID : 264330534717

Option 2 ID : 264330534718

Option 3 ID : 264330534715

Option 4 ID : 264330534716

Status : Answered

Chosen Option : 2

Comprehension:

In the following passage some words have been deleted. Fill in the blanks with the help of the alternatives given. Select the most appropriate option for each number.

Equality and freedom have both been identified as important (1) _____ of democracy since ancient times. These principles are reflected in all citizens being (2) _____ before the law and having equal access to (3) _____ processes. For example, in a representative democracy, (4) _____ vote has equal weight, no unreasonable restrictions can apply to anyone seeking to become a (5) _____, and the freedom of its citizens is secured by legitimized rights and liberties which are generally protected by a constitution.

SubQuestion No : 23

Q.23 Select the most appropriate option to fill in blank number 3.

- Ans
- ☒ 1. copulative
 - ☒ 2. relative
 - ☒ 3. legislative
 - ☒ 4. perennial

Question Type : MCQ

Question ID : 264330136494

Option 1 ID : 264330534721

Option 2 ID : 264330534720

Option 3 ID : 264330534719

Option 4 ID : 264330534722

Status : Answered

Chosen Option : 3

Comprehension:

In the following passage some words have been deleted. Fill in the blanks with the help of the alternatives given. Select the most appropriate option for each number.

Equality and freedom have both been identified as important (1) _____ of democracy since ancient times. These principles are reflected in all citizens being (2) _____ before the law and having equal access to (3) _____ processes. For example, in a representative democracy, (4) _____ vote has equal weight, no unreasonable restrictions can apply to anyone seeking to become a (5) _____, and the freedom of its citizens is secured by legitimized rights and liberties which are generally protected by a constitution.

SubQuestion No : 24

Q.24 Select the most appropriate option to fill in blank number 4.

- Ans
- ☒ 1. few
 - ☒ 2. every
 - ☒ 3. much
 - ☒ 4. all

Question Type : MCQ

Question ID : 264330136495

Option 1 ID : 264330534724

Option 2 ID : 264330534726

Option 3 ID : 264330534723

Option 4 ID : 264330534725

Status : Answered

Chosen Option : 4

Comprehension:

In the following passage some words have been deleted. Fill in the blanks with the help of the alternatives given. Select the most appropriate option for each number.

Equality and freedom have both been identified as important (1) _____ of democracy since ancient times. These principles are reflected in all citizens being (2) _____ before the law and having equal access to (3) _____ processes. For example, in a representative democracy, (4) _____ vote has equal weight, no unreasonable restrictions can apply to anyone seeking to become a (5) _____, and the freedom of its citizens is secured by legitimized rights and liberties which are generally protected by a constitution.

SubQuestion No : 25

Q.25 Select the most appropriate option to fill in blank number 5.

- Ans
- ☒ 1. representative
 - ☒ 2. peasants
 - ☒ 3. rulers
 - ☒ 4. dictators

Question Type : MCQ

Question ID : 264330136496

Option 1 ID : 264330534728

Option 2 ID : 264330534730

Option 3 ID : 264330534729

Option 4 ID : 264330534727

Status : Answered

Chosen Option : 3