

## Multi Tasking Non Technical Staff and Havaladar CBIC and CBN Examination 2022

Roll Number	
Candidate Name	
Venue Name	iON Digital Zone IDZ Powai
Exam Date	15/05/2023
Exam Time	9:00 AM - 10:30 AM
Subject	MTS Non Tech Havaladar CBIC and CBN Examination 2022

### Section : Numerical and Mathematical Ability

**Q.1** A dining-set listed at Rs. 5000 is sold to a man at successive discounts of 20% and 10% by the shopkeeper. What is the selling price of the dining set?

- Ans**
- ✓ 1. Rs. 3600
  - ✗ 2. Rs. 4800
  - ✗ 3. Rs. 1000
  - ✗ 4. Rs. 4000

Question Type : MCQ

Question ID : 264330133843

Option 1 ID : 264330524396

Option 2 ID : 264330524398

Option 3 ID : 264330524397

Option 4 ID : 264330524395

Status : Answered

Chosen Option : 1

**Q.2** 40 percent of the cost price of an article is equal to the 25 percent of its selling price. What is the profit percentage?

- Ans**
- ✗ 1. 150 percent
  - ✗ 2. 120 percent
  - ✗ 3. 50 percent
  - ✓ 4. 60 percent

Question Type : MCQ

Question ID : 264330137137

Option 1 ID : 264330537194

Option 2 ID : 264330537192

Option 3 ID : 264330537191

Option 4 ID : 264330537193

Status : Answered

Chosen Option : 2

# Test Prime

**ALL EXAMS,  
ONE SUBSCRIPTION**



**70,000+**  
Mock Tests



**Personalised  
Report Card**



**Unlimited  
Re-Attempt**



**600+**  
Exam Covered



**Previous Year  
Papers**



**500%**  
Refund



**ATTEMPT FREE MOCK NOW**

**Q.3** Ram travels at the speed of 15 km/hr, 10 km/hr and 12 km/hr for three equal distances. What is his average speed if the total distance travelled by him is 180 km?

- Ans**
- ☒ 1. 15 km/hr
  - ☒ 2. 18 km/hr
  - ☒ 3. 20 km/hr
  - ☒ 4. 12 km/hr

Question Type : **MCQ**

Question ID : **264330135135**

Option 1 ID : **264330529475**

Option 2 ID : **264330529477**

Option 3 ID : **264330529478**

Option 4 ID : **264330529476**

Status : **Answered**

Chosen Option : **1**

**Q.4** When a sum of money was equally distributed among 50 children, each child received Rs. 80. If the same amount is equally distributed among another group of children such that each child get Rs. 50, then what is the number of children in the second group?

- Ans**
- ☒ 1. 50
  - ☒ 2. 80
  - ☒ 3. 60
  - ☒ 4. 40

Question Type : **MCQ**

Question ID : **264330133845**

Option 1 ID : **264330524404**

Option 2 ID : **264330524406**

Option 3 ID : **264330524405**

Option 4 ID : **264330524403**

Status : **Answered**

Chosen Option : **2**

**Q.5** Mahesh and Suresh can complete a work alone in 20 days and 30 days respectively. They received Rs. 3300 for completing the work together. What is the share of Mahesh?

- Ans**
- ☒ 1. Rs. 1720
  - ☒ 2. Rs. 2080
  - ☒ 3. Rs. 1800
  - ☒ 4. Rs. 1980

Question Type : **MCQ**

Question ID : **264330137603**

Option 1 ID : **264330539019**

Option 2 ID : **264330539022**

Option 3 ID : **264330539020**

Option 4 ID : **264330539021**

Status : **Answered**

Chosen Option : **3**

Q.6 The sum of 10 numbers is 686. What is their average?

- Ans
- ☐ 1. 67.5
  - ☐ 2. 65.5
  - ☒ 3. 68.6
  - ☐ 4. 66.6

Question Type : MCQ

Question ID : 264330133838

Option 1 ID : 264330524375

Option 2 ID : 264330524376

Option 3 ID : 264330524377

Option 4 ID : 264330524378

Status : Answered

Chosen Option : 3

Q.7 The compound interest on Rs. 60000 at 4% per annum is Rs. 4896. What is the time period in years?

- Ans
- ☐ 1. 3 years
  - ☐ 2. 1 year
  - ☐ 3. 4 years
  - ☒ 4. 2 years

Question Type : MCQ

Question ID : 264330133847

Option 1 ID : 264330524413

Option 2 ID : 264330524411

Option 3 ID : 264330524414

Option 4 ID : 264330524412

Status : Answered

Chosen Option : 4

Q.8 Pinki and Rinki together can do a piece of work in 20 days. Rinki and Minki together can do it in 12 days while Pinki and Minki together can do it in 15 days. In how long can Rinki alone do it?

- Ans
- ☐ 1. 20 days
  - ☐ 2. 25 days
  - ☒ 3. 30 days
  - ☐ 4. 10 days

Question Type : MCQ

Question ID : 264330133641

Option 1 ID : 264330523588

Option 2 ID : 264330523590

Option 3 ID : 264330523589

Option 4 ID : 264330523587

Status : Answered

Chosen Option : 1

**Q.9** The following table shows the export of products by a company (in hundreds) in different countries for two years. Find the total export of products in Russia and India for both the years together.

Countries	Export in 2018	Export in 2019
China	440	400
India	320	280
Japan	340	330
Australia	480	460
Korea	210	260
Russia	180	190

- Ans ☒ 1. 97,000  
☒ 2. 99,000  
☒ 3. 88,000  
☒ 4. 96,000

Question Type : MCQ  
 Question ID : 264330133771  
 Option 1 ID : 264330524109  
 Option 2 ID : 264330524108  
 Option 3 ID : 264330524107  
 Option 4 ID : 264330524110  
 Status : Answered  
 Chosen Option : 1

**Q.10** A sphere of radius 18 cm is melted and then a solid cylinder of base radius 4 cm is made from it. What is the height of the solid cylinder?

- Ans ☒ 1. 196 cm  
☒ 2. 486 cm  
☒ 3. 224 cm  
☒ 4. 384 cm

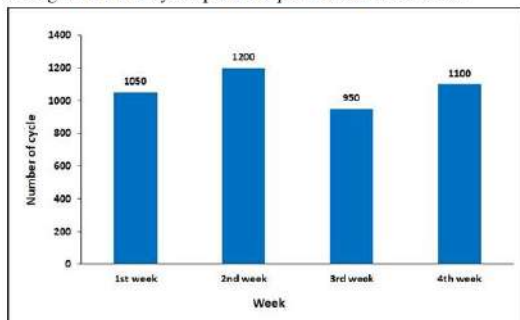
Question Type : MCQ  
 Question ID : 264330133646  
 Option 1 ID : 264330523608  
 Option 2 ID : 264330523609  
 Option 3 ID : 264330523610  
 Option 4 ID : 264330523607  
 Status : Answered  
 Chosen Option : 1

**Q.11** The difference between cost price and selling price is Rs. 143. If profit percentage is 26 percent, then what is the selling price?

- Ans ☒ 1. Rs. 603  
☒ 2. Rs. 676  
☒ 3. Rs. 693  
☒ 4. Rs. 713

Question Type : MCQ  
 Question ID : 264330133842  
 Option 1 ID : 264330524392  
 Option 2 ID : 264330524394  
 Option 3 ID : 264330524393  
 Option 4 ID : 264330524391  
 Status : Marked For Review  
 Chosen Option : 3

**Q.12** The following bar graph shows the number of cycles produced in a factory during 4 consecutive weeks. What is the average number of cycles produced per week in these weeks?



- Ans**
- ☒ 1. 1120
  - ☒ 2. 1015
  - ☒ 3. 1075
  - ☒ 4. 1085

Question Type : MCQ

Question ID : 264330133852

Option 1 ID : 264330524433

Option 2 ID : 264330524434

Option 3 ID : 264330524431

Option 4 ID : 264330524432

Status : Answered

Chosen Option : 3

**Q.13** A metallic solid sphere has radius 28 cm. If it is melted to form small spheres of radius 3.5 cm, then how many small spheres will be obtained?

- Ans**
- ☒ 1. 512
  - ☒ 2. 624
  - ☒ 3. 496
  - ☒ 4. 424

Question Type : MCQ

Question ID : 264330137616

Option 1 ID : 264330539071

Option 2 ID : 264330539072

Option 3 ID : 264330539073

Option 4 ID : 264330539074

Status : Answered

Chosen Option : 1

**Q.14** The population of a city decreased from 156940 to 141246 due to breakout of pandemic. What is the percentage decrease in population?

- Ans**
- ☒ 1. 8%
  - ☒ 2. 10%
  - ☒ 3. 12%
  - ☒ 4. 15%

Question Type : MCQ

Question ID : 264330133840

Option 1 ID : 264330524383

Option 2 ID : 264330524384

Option 3 ID : 264330524385

Option 4 ID : 264330524386

Status : Answered

Chosen Option : 2

**Q.15** The total number of color blocks is 1260. If the ratio of red block to blue block is 2:5 and the ratio of blue block to yellow block is 15:7, then how many yellow blocks are there?

- Ans** ☒ 1. 315  
☒ 2. 675  
☒ 3. 270  
☒ 4. 745

Question Type : **MCQ**

Question ID : **264330133844**

Option 1 ID : **264330524399**

Option 2 ID : **264330524401**

Option 3 ID : **264330524400**

Option 4 ID : **264330524402**

Status : **Answered**

Chosen Option : **1**

**Q.16** Krish takes as much time in running 24 meters as a bus takes in covering 72 meters. What will be the distance covered by Krish during the time the bus covers 4.8 km?

- Ans** ☒ 1. 2.4 km  
☒ 2. 3.6 km  
☒ 3. 2.1 km  
☒ 4. 1.6 km

Question Type : **MCQ**

Question ID : **264330133848**

Option 1 ID : **264330524416**

Option 2 ID : **264330524417**

Option 3 ID : **264330524418**

Option 4 ID : **264330524415**

Status : **Answered**

Chosen Option : **4**

**Q.17** LCM of  $\frac{5}{33}$ ,  $\frac{25}{11}$ ,  $\frac{20}{55}$  and  $\frac{15}{77}$  is:

- Ans** ☒ 1.  $\frac{300}{11}$   
☒ 2.  $\frac{300}{77}$   
☒ 3.  $\frac{25}{33}$   
☒ 4.  $\frac{500}{11}$

Question Type : **MCQ**

Question ID : **264330135110**

Option 1 ID : **264330529375**

Option 2 ID : **264330529378**

Option 3 ID : **264330529376**

Option 4 ID : **264330529377**

Status : **Answered**

Chosen Option : **3**



Q.18 Find the value of  $\{20 \text{ of } 4 + (40 - 14 + 30) - 84\}$ .

- Ans
- ☒ 1. 55
  - ☒ 2. 50
  - ☒ 3. 52
  - ☒ 4. 44

Question Type : MCQ

Question ID : 264330133757

Option 1 ID : 264330524051

Option 2 ID : 264330524052

Option 3 ID : 264330524054

Option 4 ID : 264330524053

Status : Answered

Chosen Option : 2

Q.19 The value of  $[-11 + 2 - 12 \div 4] \times 5$  is:

- Ans
- ☒ 1. 84
  - ☒ 2. 17
  - ☒ 3. -12
  - ☒ 4. -60

Question Type : MCQ

Question ID : 264330133836

Option 1 ID : 264330524370

Option 2 ID : 264330524368

Option 3 ID : 264330524367

Option 4 ID : 264330524369

Status : Answered

Chosen Option : 1

Q.20 A sum of money at simple interest amounts to Rs. 800 in 3 years and to Rs. 900 in 4 years. The sum is:

- Ans
- ☒ 1. Rs.800
  - ☒ 2. Rs.600
  - ☒ 3. Rs.500
  - ☒ 4. Rs.700

Question Type : MCQ

Question ID : 264330133746

Option 1 ID : 264330524010

Option 2 ID : 264330524008

Option 3 ID : 264330524007

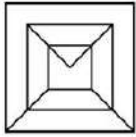
Option 4 ID : 264330524009

Status : Not Answered

Chosen Option : --

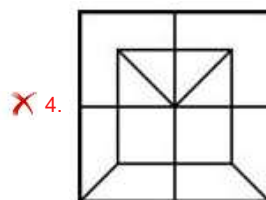
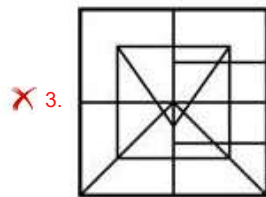
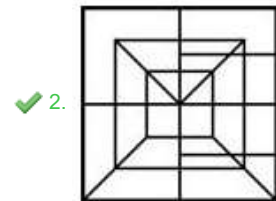
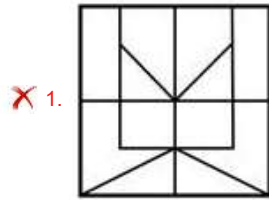


Q.1 Select the option figure in which the given figure (X) is embedded as its part (rotation is NOT allowed).



(X)

Ans



Question Type : MCQ

Question ID : 264330133483

Option 1 ID : 264330522964

Option 2 ID : 264330522966

Option 3 ID : 264330522965

Option 4 ID : 264330522963

Status : Answered

Chosen Option : 2

Q.2 Which of the mathematical signs should be interchanged in the below equation to make it mathematically correct?

$$6 \div 48 + 12 \times 9 - 7 = 35$$

Ans ✓ 1.  $\div$  and  $+$

✗ 2.  $\div$  and  $\times$

✗ 3.  $\times$  and  $-$

✗ 4.  $\times$  and  $+$

Question Type : MCQ

Question ID : 264330133576

Option 1 ID : 264330523328

Option 2 ID : 264330523327

Option 3 ID : 264330523330

Option 4 ID : 264330523329

Status : Answered

Chosen Option : 2

**Q.3** Five girls Anjali, Beena, Chintu, Diksha and Shruti, are of different ages. Anjali is younger than only Diksha and Shruti. Shruti is younger to Diksha. Chintu is youngest. Who is the fourth oldest?

- Ans**
- ☒ 1. Beena
  - ☐ 2. Chintu
  - ☐ 3. Diksha
  - ☐ 4. Shruti

Question Type : **MCQ**  
 Question ID : **264330133569**  
 Option 1 ID : **264330523299**  
 Option 2 ID : **264330523301**  
 Option 3 ID : **264330523302**  
 Option 4 ID : **264330523300**  
 Status : **Answered**  
 Chosen Option : **3**

**Q.4** Which two signs should be interchanged to make the given equation correct?

$$7 \times 2 + 4 - 6 \div 3 = 12$$

- Ans**
- ☐ 1.  $\times$  and  $-$
  - ☐ 2.  $=$  and  $\times$
  - ☒ 3.  $-$  and  $+$
  - ☐ 4.  $-$  and  $=$

Question Type : **MCQ**  
 Question ID : **264330133462**  
 Option 1 ID : **264330522880**  
 Option 2 ID : **264330522879**  
 Option 3 ID : **264330522882**  
 Option 4 ID : **264330522881**  
 Status : **Answered**  
 Chosen Option : **2**

**Q.5** Select the set in which the numbers are related in the same way as are the numbers of the following sets.(NOTE : Operations should be performed on the whole numbers, without breaking down the numbers into its constituent digits. E.g 13 – Operations on 13 such as adding /subtracting /multiplying etc. to 13 can be performed. Breaking down 13 into 1 and 3 and then performing mathematical operations on 1 and 3 is not allowed)  
 (17, 35, 72)  
 (13, 27, 56)

- Ans**
- ☐ 1. (11, 24, 50)
  - ☒ 2. (15, 31, 64)
  - ☐ 3. (18, 36, 110)
  - ☐ 4. (12, 25, 50)

Question Type : **MCQ**  
 Question ID : **264330133575**  
 Option 1 ID : **264330523325**  
 Option 2 ID : **264330523323**  
 Option 3 ID : **264330523324**  
 Option 4 ID : **264330523326**  
 Status : **Answered**  
 Chosen Option : **1**

**Q.6** In a certain code language, 'MARS' is written as '51' and 'COLD' is written as '34'. How will 'ACID' be written in that language?

- Ans**
- ☐ 1. 18
  - ☐ 2. 16
  - ☐ 3. 19
  - ☒ 4. 17

Question Type : MCQ

Question ID : 264330133469

Option 1 ID : 264330522907

Option 2 ID : 264330522908

Option 3 ID : 264330522910

Option 4 ID : 264330522909

Status : Answered

Chosen Option : 4

**Q.7** Five friends A, B, G, R and T are arranged in a row facing north but not necessarily in the same order. B sits at left end of the row. Only two people are sitting between A and G. A sits immediate next to the B and R sits second to the right of B. Who sits between R and G?

- Ans**
- ☐ 1. No one
  - ☐ 2. B
  - ☒ 3. T
  - ☐ 4. A

Question Type : MCQ

Question ID : 264330133567

Option 1 ID : 264330523292

Option 2 ID : 264330523291

Option 3 ID : 264330523293

Option 4 ID : 264330523294

Status : Answered

Chosen Option : 3

**Q.8** In an examination hall seven students Ayaan, Chandan, Jatin, Kanika, Naina, Pinky, and Sweety are sitting in a row facing North but not necessarily in the same order. Chandan sits third to the right of Sweety, Ayaan and Pinky are immediate neighbours of Chandan. More than two persons sit between Pinky and Sweety. Jatin is the only neighbour of Naina. Jatin sits to the right of Ayaan. What is the position of Naina with respect to Kanika?

- Ans**
- ☐ 1. Fifth to the left
  - ☐ 2. Third to the right
  - ☒ 3. Fifth to the right
  - ☐ 4. Third to the left

Question Type : MCQ

Question ID : 264330133568

Option 1 ID : 264330523298

Option 2 ID : 264330523295

Option 3 ID : 264330523296

Option 4 ID : 264330523297

Status : Answered

Chosen Option : 4

Q.9 Select the correct mirror image of the given figure when the mirror is placed at MN as shown below.

9 2 3 t K U

M  
N

Ans

- ✗ 1.
- ✗ 2.
- ✗ 3.
- ✓ 4.

Question Type : MCQ

Question ID : 264330133484

Option 1 ID : 264330522969

Option 2 ID : 264330522967

Option 3 ID : 264330522968

Option 4 ID : 264330522970

Status : Answered

Chosen Option : 4

Q.10 Select the option that is related to the third word in the same way as the second word is related to the first word.

Latin : Language :: Fencing : ?

Ans

- ✗ 1. Vehicle
- ✗ 2. Place
- ✓ 3. Sport
- ✗ 4. Disease

Question Type : MCQ

Question ID : 264330133563

Option 1 ID : 264330523276

Option 2 ID : 264330523278

Option 3 ID : 264330523275

Option 4 ID : 264330523277

Status : Answered

Chosen Option : 2

Q.11 Which of the following numbers will replace the question mark (?) in the given series?

53, 54, 50, 59, 43, ?

Ans

- ✓ 1. 68
- ✗ 2. 61
- ✗ 3. 18
- ✗ 4. 58

Question Type : MCQ

Question ID : 264330133573

Option 1 ID : 264330523316

Option 2 ID : 264330523317

Option 3 ID : 264330523318

Option 4 ID : 264330523315

Status : Answered

Chosen Option : 4

Q.12 Which of the following numbers will replace the question mark (?) in the given series?

47, 37, 29, 23, 19, ?

- Ans
- ☒ 1. 15
  - ☒ 2. 16
  - ☒ 3. 14
  - ☒ 4. 17

Question Type : MCQ

Question ID : 264330133572

Option 1 ID : 264330523314

Option 2 ID : 264330523312

Option 3 ID : 264330523313

Option 4 ID : 264330523311

Status : Answered

Chosen Option : 4

Q.13 Which of the following letter clusters will replace the question mark (?) in the given series?

OD, LA, IX, FU, ?

- Ans
- ☒ 1. BR
  - ☒ 2. CS
  - ☒ 3. CR
  - ☒ 4. CT

Question Type : MCQ

Question ID : 264330133561

Option 1 ID : 264330523269

Option 2 ID : 264330523267

Option 3 ID : 264330523268

Option 4 ID : 264330523270

Status : Answered

Chosen Option : 2

Q.14 Select the option that is related to the third number in the same way as the second number is related to the first number.

12 : 1730 :: 9 : ?

- Ans
- ☒ 1. 730
  - ☒ 2. 731
  - ☒ 3. 733
  - ☒ 4. 741

Question Type : MCQ

Question ID : 264330133574

Option 1 ID : 264330523319

Option 2 ID : 264330523320

Option 3 ID : 264330523321

Option 4 ID : 264330523322

Status : Answered

Chosen Option : 2

**Q.15** Two Statements are given followed by two conclusions numbered I and II. Assuming the statements to be true, even if they seem to be at variance with commonly known facts, decide which of the conclusions logically follow(s) from the statements.  
Statements:  
No astronomer is tall.  
Some tall are handsome.  
Conclusions:  
I. Some astronomers are handsome.  
II. No tall is an astronomer.

- Ans** ☒ 1. Only conclusion II follows.  
☒ 2. Neither conclusion I nor II follow.  
☒ 3. Only conclusion I follows.  
☒ 4. Both conclusions I and II follow.

Question Type : **MCQ**  
Question ID : **264330133570**  
Option 1 ID : **264330523304**  
Option 2 ID : **264330523306**  
Option 3 ID : **264330523303**  
Option 4 ID : **264330523305**  
Status : **Answered**  
Chosen Option : **1**

**Q.16** In a certain code language, 'CROWNED' is written as 'OWRCEND'. How will 'SERGENT' be written in that language?

- Ans** ☒ 1. REGSNET  
☒ 2. RGESNET  
☒ 3. RGESENT  
☒ 4. REGSENT

Question Type : **MCQ**  
Question ID : **264330137564**  
Option 1 ID : **264330538865**  
Option 2 ID : **264330538863**  
Option 3 ID : **264330538866**  
Option 4 ID : **264330538864**  
Status : **Answered**  
Chosen Option : **2**

**Q.17** In a certain code language, 'SLEEP' is written as 'TLEEQ'. How will 'DROWSY' be written in that language?

- Ans** ☒ 1. ERWOSZ  
☒ 2. EROWSZ  
☒ 3. ERWOZS  
☒ 4. ROWSZQ

Question Type : **MCQ**  
Question ID : **264330133451**  
Option 1 ID : **264330522836**  
Option 2 ID : **264330522837**  
Option 3 ID : **264330522838**  
Option 4 ID : **264330522835**  
Status : **Answered**  
Chosen Option : **1**

**Q.18** Two Statements are given followed by two conclusions numbered I and II. Assuming the statements to be true, even if they seem to be at variance with commonly known facts, decide which of the conclusions logically follow(s) from the statements.

Statements:

All crows are birds.

Some parrots are birds.

Conclusions:

I. No crow is a parrot.

II. Some crows are parrots.

- Ans**
- ☒ 1. Only conclusion I follows.
  - ☒ 2. Either conclusion I or II follows.
  - ☒ 3. Both conclusions I and II follow.
  - ☒ 4. Only conclusion II follows.

Question Type : MCQ

Question ID : 264330133571

Option 1 ID : 264330523307

Option 2 ID : 264330523310

Option 3 ID : 264330523309

Option 4 ID : 264330523308

Status : Answered

Chosen Option : 4

**Q.19** Select the option that is related to the third word in the same way as the second word is related to the first word.

Cat : Meow :: Birds : ?

- Ans**
- ☒ 1. Hiss
  - ☒ 2. Chirp
  - ☒ 3. Neigh
  - ☒ 4. Growl

Question Type : MCQ

Question ID : 264330133562

Option 1 ID : 264330523271

Option 2 ID : 264330523272

Option 3 ID : 264330523274


Option 4 ID : 264330523273

Status : Answered

Chosen Option : 2

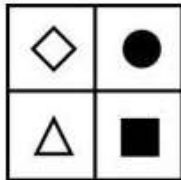


Q.20 Select the option figure that will replace the question mark (?) in the figure given below to complete the pattern.

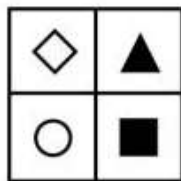


Ans

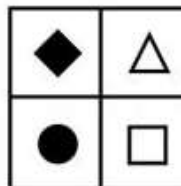
✗ 1.



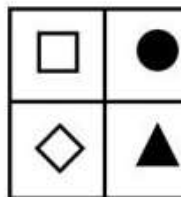
✓ 2.



✗ 3.



✗ 4.



Question Type : MCQ

Question ID : 264330133580

Option 1 ID : 264330523344

Option 2 ID : 264330523343

Option 3 ID : 264330523345

Option 4 ID : 264330523346

Status : Answered

Chosen Option : 2

Section : General Awareness

Q.1 For how many years does the Indian Vice-President hold office?

- Ans ☒ 1. Five  
☐ 2. Six  
☐ 3. Three  
☐ 4. Four

Question Type : MCQ  
Question ID : 264330134052  
Option 1 ID : 264330525234  
Option 2 ID : 264330525233  
Option 3 ID : 264330525231  
Option 4 ID : 264330525232  
Status : Answered  
Chosen Option : 4

Q.2 Which among the following was the son of the Mughal emperor Shahjahan?

- Ans ☐ 1. Humayun  
☐ 2. Jahangir  
☒ 3. Aurangzeb  
☐ 4. Sikander Lodhi

Question Type : MCQ  
Question ID : 264330134045  
Option 1 ID : 264330525203  
Option 2 ID : 264330525206  
Option 3 ID : 264330525204  
Option 4 ID : 264330525205  
Status : Answered  
Chosen Option : 1

Q.3 Who popularised the 'Pandanallur Style' in Bharatanatyam and received Padma Bhushan in 2004?

- Ans ☐ 1. Kumari Kamala  
☐ 2. Madhuri Dixit  
☐ 3. Mallika Sarabhai  
☒ 4. Alarmel Valli

Question Type : MCQ  
Question ID : 264330133925  
Option 1 ID : 264330524723  
Option 2 ID : 264330524724  
Option 3 ID : 264330524725  
Option 4 ID : 264330524726  
Status : Not Answered  
Chosen Option : --

Q.4 Which type of friction is considered as a self-adjusting force?

- Ans
- ☐ 1. Kinetic Friction
  - ☐ 2. Centripetal Friction
  - ☐ 3. Rolling Friction
  - ☒ 4. Static Friction

Question Type : MCQ  
 Question ID : 264330134036  
 Option 1 ID : 264330525168  
 Option 2 ID : 264330525169  
 Option 3 ID : 264330525167  
 Option 4 ID : 264330525170  
 Status : Answered  
 Chosen Option : 1

Q.5 Alluri Sitaram Raju was a tribal freedom fighter from state \_\_\_\_\_ of India.

- Ans
- ☐ 1. Maharashtra
  - ☐ 2. Gujarat
  - ☒ 3. Andhra Pradesh
  - ☐ 4. Bihar

Question Type : MCQ  
 Question ID : 264330133947  
 Option 1 ID : 264330524812  
 Option 2 ID : 264330524814  
 Option 3 ID : 264330524811  
 Option 4 ID : 264330524813  
 Status : Answered  
 Chosen Option : 3

Q.6 SAI is the apex national sports body of India. What is the full form of SAI?

- Ans
- ☐ 1. Sports Association of India
  - ☐ 2. Sports Agency of India
  - ☒ 3. Sports Authority of India
  - ☐ 4. Sports Academy of India

Question Type : MCQ  
 Question ID : 264330134053  
 Option 1 ID : 264330525238  
 Option 2 ID : 264330525235  
 Option 3 ID : 264330525237  
 Option 4 ID : 264330525236  
 Status : Answered  
 Chosen Option : 1

Q.7 Who among the following was a Shaka ruler in India (AD 130-150)?

- Ans
- ☐ 1. Bindusara
  - ☐ 2. Panduka
  - ☒ 3. Rudradaman
  - ☐ 4. Chashtana

Question Type : MCQ

Question ID : 264330133944

Option 1 ID : 264330524799

Option 2 ID : 264330524800

Option 3 ID : 264330524801

Option 4 ID : 264330524802

Status : Not Answered

Chosen Option : --

Q.8 Sam has an income of 9 lakh rupees yearly. Which tax slab (new regime) of India is applicable for him as per the new regime Income Tax Slab Rates FY 2021-22?

- Ans
- ☒ 1. 15%
  - ☐ 2. 20%
  - ☐ 3. 5%
  - ☐ 4. 10%

Question Type : MCQ

Question ID : 264330133930

Option 1 ID : 264330524745

Option 2 ID : 264330524744

Option 3 ID : 264330524746

Option 4 ID : 264330524743

Status : Answered

Chosen Option : 1

Q.9 Which article of the Indian constitution talks about a uniform civil code?

- Ans
- ☐ 1. Article 352
  - ☒ 2. Article 44
  - ☐ 3. Article 14
  - ☐ 4. Article 370

Question Type : MCQ

Question ID : 264330134051

Option 1 ID : 264330525230

Option 2 ID : 264330525228

Option 3 ID : 264330525227

Option 4 ID : 264330525229

Status : Answered

Chosen Option : 1

Q.10 Ustad Bismillah Khan was one of the greatest exponents of the \_\_\_\_\_ .

- Ans
- ☐ 1. Flute
  - ☐ 2. Tabla
  - ☐ 3. Sitar
  - ☒ 4. Shehnai

Question Type : MCQ

Question ID : 264330134049

Option 1 ID : 264330525219

Option 2 ID : 264330525220

Option 3 ID : 264330525222

Option 4 ID : 264330525221

Status : Answered

Chosen Option : 4

Q.11 According to census 2011, percentage of Urban population in India is \_\_\_\_\_ .

- Ans
- ☐ 1. 25.6
  - ☐ 2. 21.6
  - ☒ 3. 31.16
  - ☐ 4. 35.6

Question Type : MCQ

Question ID : 264330133900

Option 1 ID : 264330524624

Option 2 ID : 264330524623

Option 3 ID : 264330524625

Option 4 ID : 264330524626

Status : Not Answered

Chosen Option : --

Q.12 The Bhagirathi river originates from Gaumukh Glacier. It meets the Alaknanda at Devprayag to form river \_\_\_\_\_ .

- Ans
- ☒ 1. Ganga
  - ☐ 2. Ravi
  - ☐ 3. Saraswati
  - ☐ 4. Yamuna

Question Type : MCQ

Question ID : 264330134041

Option 1 ID : 264330525190

Option 2 ID : 264330525188

Option 3 ID : 264330525189

Option 4 ID : 264330525187

Status : Answered

Chosen Option : 1

**Q.13** Name the brand under which all the fertilizers will be sold under the "One Nation One Fertilizer" scheme launched by the Prime Minister Narendra Modi in October 2022?

- Ans**
- ☒ 1. Bharti
  - ☒ 2. Bhartiya
  - ☒ 3. Bharatwasi
  - ☒ 4. Bharat

Question Type : **MCQ**  
 Question ID : **264330134031**  
 Option 1 ID : **264330525150**  
 Option 2 ID : **264330525148**  
 Option 3 ID : **264330525149**  
 Option 4 ID : **264330525147**  
 Status : **Not Answered**  
 Chosen Option : --

**Q.14** Gangaur is an Indian festival majorly celebrated in \_\_\_\_\_.

- Ans**
- ☒ 1. Himachal Pradesh
  - ☒ 2. Rajasthan
  - ☒ 3. Arunachal Pradesh
  - ☒ 4. Tripura

Question Type : **MCQ**  
 Question ID : **264330133934**  
 Option 1 ID : **264330524761**  
 Option 2 ID : **264330524760**  
 Option 3 ID : **264330524762**  
 Option 4 ID : **264330524759**  
 Status : **Answered**  
 Chosen Option : **2**

**Q.15** \_\_\_\_\_ is the division of the cytoplasm of one eukaryotic cell into two daughter cells.

- Ans**
- ☒ 1. Cytokinesis
  - ☒ 2. Sepsis
  - ☒ 3. Karyokinesis
  - ☒ 4. Genesis

Question Type : **MCQ**  
 Question ID : **264330134037**  
 Option 1 ID : **264330525172**  
 Option 2 ID : **264330525174**  
 Option 3 ID : **264330525171**  
 Option 4 ID : **264330525173**  
 Status : **Answered**  
 Chosen Option : **1**

Q.16 The Indian Antarctic Bill, 2022 belongs to \_\_\_\_\_ Ministry of India.

- Ans ☒ 1. Earth Sciences  
☐ 2. Law and Justice  
☐ 3. External Affairs  
☐ 4. Tribal Affairs

Question Type : MCQ  
Question ID : 264330133907  
Option 1 ID : 264330524653  
Option 2 ID : 264330524654  
Option 3 ID : 264330524651  
Option 4 ID : 264330524652  
Status : Answered  
Chosen Option : 1

Q.17 Which city hosted the 2022 Winter Olympics?

- Ans ☐ 1. Milan  
☐ 2. Tokyo  
☒ 3. Beijing  
☐ 4. Melbourne

Question Type : MCQ  
Question ID : 264330134054  
Option 1 ID : 264330525239  
Option 2 ID : 264330525242  
Option 3 ID : 264330525241  
Option 4 ID : 264330525240  
Status : Answered  
Chosen Option : 2

Q.18 Which Indian state is home to the Buddhist cave temples known as Barabar Caves?

- Ans ☒ 1. Bihar  
☐ 2. West Bengal  
☐ 3. Sikkim  
☐ 4. Uttar Pradesh

Question Type : MCQ  
Question ID : 264330133910  
Option 1 ID : 264330524663  
Option 2 ID : 264330524665  
Option 3 ID : 264330524666  
Option 4 ID : 264330524664  
Status : Not Answered  
Chosen Option : --



Q.19 Which state is the leading producer of sugar in India, as of May 2022?

- Ans
- ✓ 1. Maharashtra
  - ✗ 2. Uttar Pradesh
  - ✗ 3. Telangana
  - ✗ 4. Tamil Nadu

Question Type : MCQ

Question ID : 264330133915

Option 1 ID : 264330524684

Option 2 ID : 264330524683

Option 3 ID : 264330524686

Option 4 ID : 264330524685

Status : Not Answered

Chosen Option : --

Q.20 Which freedom fighter of India led the famous revolt of 1857 (sepoy mutiny) at Lucknow?

- Ans
- ✗ 1. Kasturba Gandhi
  - ✗ 2. Alluri Sitarama Raju
  - ✓ 3. Begum Hazrat Mahal
  - ✗ 4. Rani Lakshmi Bai

Question Type : MCQ

Question ID : 264330133921

Option 1 ID : 264330524710

Option 2 ID : 264330524708

Option 3 ID : 264330524709

Option 4 ID : 264330524707

Status : Answered

Chosen Option : 4

Q.21 Pandit Lachhu Maharaj was primarily associated to which of the following dances?

- Ans
- ✗ 1. Odissi
  - ✗ 2. Manipuri
  - ✗ 3. Bharatnatyam
  - ✓ 4. Kathak

Question Type : MCQ

Question ID : 264330134033

Option 1 ID : 264330525156

Option 2 ID : 264330525158

Option 3 ID : 264330525157

Option 4 ID : 264330525155

Status : Not Answered

Chosen Option : --

Q.22 The Windvane instrument measures the \_\_\_\_\_ .

- Ans
- ☒ 1. relative humidity
  - ☒ 2. temperature
  - ☒ 3. wind velocity
  - ☒ 4. wind-direction

Question Type : MCQ

Question ID : 264330134039

Option 1 ID : 264330525181

Option 2 ID : 264330525182

Option 3 ID : 264330525180

Option 4 ID : 264330525179

Status : Answered

Chosen Option : 4

Q.23 National Family Benefit Scheme was started in August \_\_\_\_\_ by Government of India.

- Ans
- ☒ 1. 1995
  - ☒ 2. 2000
  - ☒ 3. 2002
  - ☒ 4. 2005

Question Type : MCQ

Question ID : 264330137748

Option 1 ID : 264330539601

Option 2 ID : 264330539602

Option 3 ID : 264330539599

Option 4 ID : 264330539600

Status : Not Answered

Chosen Option : --

Q.24 Vertical distribution of different species occupying different levels in an ecosystem is called \_\_\_\_\_ .

- Ans
- ☒ 1. stratification
  - ☒ 2. biomagnification
  - ☒ 3. coevolution
  - ☒ 4. decomposition

Question Type : MCQ

Question ID : 264330134038

Option 1 ID : 264330525175

Option 2 ID : 264330525176

Option 3 ID : 264330525178

Option 4 ID : 264330525177

Status : Answered

Chosen Option : 2

Q.25 Which famous Indian author of 21st century wrote the novel 'The Immortals of Meluha (Shiva Trilogy)'?

- Ans
- ☒ 1. Durjoy Datta
  - ☒ 2. Ravinder Singh
  - ☒ 3. Amish Tripathi
  - ☒ 4. Shashi Tharoor

Question Type : MCQ  
Question ID : 264330133923  
Option 1 ID : 264330524717  
Option 2 ID : 264330524715  
Option 3 ID : 264330524718  
Option 4 ID : 264330524716  
Status : Not Answered  
Chosen Option : --

Section : English Language and Comprehension

Q.1 Identify the segment that contains a grammatical error. If there is no error, select 'No error'.  
Her evaluation will give / me a best indication of / where I stand in the class.

- Ans
- ☒ 1. where I stand in the class.
  - ☒ 2. Her evaluation will give
  - ☒ 3. No error
  - ☒ 4. me a best indication of

Question Type : MCQ  
Question ID : 264330136084  
Option 1 ID : 264330533149  
Option 2 ID : 264330533147  
Option 3 ID : 264330533150  
Option 4 ID : 264330533148  
Status : Answered  
Chosen Option : 4

Q.2 In the following question, out of the given four alternatives, select the alternative which best expresses the meaning of the Idiom/Phrase.  
Know the ropes

- Ans
- ☒ 1. To break the rules
  - ☒ 2. To reveal a secret
  - ☒ 3. To understand the details
  - ☒ 4. To fight without any reason

Question Type : MCQ  
Question ID : 264330134523  
Option 1 ID : 264330527052  
Option 2 ID : 264330527054  
Option 3 ID : 264330527051  
Option 4 ID : 264330527053  
Status : Answered  
Chosen Option : 3

Q.3 Select the appropriate synonym for the underlined word.  
The story shows the importance of self-esteem.

- Ans ☒ 1. pride  
☐ 2. humility  
☐ 3. disgrace  
☐ 4. shyness

Question Type : MCQ  
Question ID : 264330134518  
Option 1 ID : 264330527031  
Option 2 ID : 264330527034  
Option 3 ID : 264330527033  
Option 4 ID : 264330527032  
Status : Answered  
Chosen Option : 1

Q.4 Select the appropriate antonym for the underlined word.  
I stare out into the really amazingly dark night.

- Ans ☐ 1. shockingly  
☐ 2. unusually  
☐ 3. astonishingly  
☒ 4. obviously

Question Type : MCQ  
Question ID : 264330134521  
Option 1 ID : 264330527045  
Option 2 ID : 264330527046  
Option 3 ID : 264330527043  
Option 4 ID : 264330527044  
Status : Answered  
Chosen Option : 4

Q.5 Choose the word that can substitute the given group of words.  
Someone who knows a lot about the arts, food, drink, or some other subject

- Ans ☐ 1. Pacifist  
☐ 2. Gourmand  
☐ 3. Cynic  
☒ 4. Connoisseur

Question Type : MCQ  
Question ID : 264330134517  
Option 1 ID : 264330527030  
Option 2 ID : 264330527029  
Option 3 ID : 264330527028  
Option 4 ID : 264330527027  
Status : Not Answered  
Chosen Option : --

Q.6 Choose the word that is opposite in meaning to the given word.  
Surrender

- Ans
- ☒ 1. Waive
  - ☒ 2. Stay
  - ☒ 3. Calm
  - ☒ 4. Withstand

Question Type : MCQ  
Question ID : 264330134390  
Option 1 ID : 264330526542  
Option 2 ID : 264330526539  
Option 3 ID : 264330526540  
Option 4 ID : 264330526541  
Status : Answered  
Chosen Option : 2

Q.7 Choose the sentence with no spelling error.

- Ans
- ☒ 1. You are going to figure out everything.
  - ☒ 2. You are going to figre out everything.
  - ☒ 3. You are going to figrue out everything.
  - ☒ 4. You are going to figure out everrything.

Question Type : MCQ  
Question ID : 264330134421  
Option 1 ID : 264330526660  
Option 2 ID : 264330526659  
Option 3 ID : 264330526662  
Option 4 ID : 264330526661  
Status : Answered  
Chosen Option : 1

Q.8 Choose the word that means the same as the given word.  
Consecutive

- Ans
- ☒ 1. Successive
  - ☒ 2. Organized
  - ☒ 3. Important
  - ☒ 4. Executive

Question Type : MCQ  
Question ID : 264330134441  
Option 1 ID : 264330526737  
Option 2 ID : 264330526738  
Option 3 ID : 264330526736  
Option 4 ID : 264330526735  
Status : Answered  
Chosen Option : 1

Q.9 Choose the incorrectly spelt word.

- Ans ☒ 1. Molest  
☒ 2. Reflect  
☒ 3. Called  
☒ 4. Temparory

Question Type : MCQ  
 Question ID : 264330134524  
 Option 1 ID : 264330527058  
 Option 2 ID : 264330527056  
 Option 3 ID : 264330527057  
 Option 4 ID : 264330527055  
 Status : Answered  
 Chosen Option : 4

Q.10 Find the part of the given sentence that has an error in it. If there is no error, choose 'No error'.

Can you please pass me that glittery pen black?

- Ans ☒ 1. pass me that  
☒ 2. glittery pen black?  
☒ 3. Can you please  
☒ 4. No error

Question Type : MCQ  
 Question ID : 264330134321  
 Option 1 ID : 264330526276  
 Option 2 ID : 264330526277  
 Option 3 ID : 264330526275  
 Option 4 ID : 264330526278  
 Status : Not Answered  
 Chosen Option : --

Q.11 A sentence has been given with a blank to be filled with an appropriate option. Choose the correct alternative.

Meteorologists are still \_\_\_\_\_ to understand sting jets.

- Ans ☒ 1. on work  
☒ 2. working  
☒ 3. worked  
☒ 4. works

Question Type : MCQ  
 Question ID : 264330134431  
 Option 1 ID : 264330526701  
 Option 2 ID : 264330526700  
 Option 3 ID : 264330526702  
 Option 4 ID : 264330526699  
 Status : Answered  
 Chosen Option : 2

**Q.12** In the following question, out of the given four alternatives, select the alternative which best expresses the meaning of the Idiom/Phrase.  
To scratch one's head

- Ans** ☒ 1. To think hard in a puzzled way  
☒ 2. To think about good days  
☒ 3. To come up with an idea  
☒ 4. To lose all the wealth

Question Type : **MCQ**  
 Question ID : **264330134522**  
 Option 1 ID : **264330527047**  
 Option 2 ID : **264330527049**  
 Option 3 ID : **264330527050**  
 Option 4 ID : **264330527048**  
 Status : **Answered**  
 Chosen Option : **1**

**Q.13** Improve the underlined part of the sentence. Choose 'No improvement' as an answer if the sentence is grammatically correct.  
The teacher let the students choose there essay topics.

- Ans** ☒ 1. No improvement  
☒ 2. has choose their  
☒ 3. chosen there  
☒ 4. choose their

Question Type : **MCQ**  
 Question ID : **264330134401**  
 Option 1 ID : **264330526586**  
 Option 2 ID : **264330526584**  
 Option 3 ID : **264330526585**  
 Option 4 ID : **264330526583**  
 Status : **Answered**  
 Chosen Option : **4**

**Q.14** Select the most appropriate option to fill in the blank.  
Disturbing emotions begin to build into fear, and then \_\_\_\_\_.

- Ans** ☒ 1. boldness  
☒ 2. terror  
☒ 3. server  
☒ 4. assurance

Question Type : **MCQ**  
 Question ID : **264330134422**  
 Option 1 ID : **264330526665**  
 Option 2 ID : **264330526664**  
 Option 3 ID : **264330526666**  
 Option 4 ID : **264330526663**  
 Status : **Answered**  
 Chosen Option : **2**



Q.15 Improve the underlined part of the sentence. Choose 'No improvement' as an answer if the sentence is grammatically correct.  
The Tagore House is rehearsing a skit for the school's Annual Day Function.

- Ans
- ☒ 1. has been rehearsing a skits
  - ☒ 2. was rehearse a skit
  - ☒ 3. is rehearsed an skit
  - ☒ 4. No improvement

Question Type : MCQ  
Question ID : 264330134507  
Option 1 ID : 264330526993  
Option 2 ID : 264330526992  
Option 3 ID : 264330526991  
Option 4 ID : 264330526994  
Status : Answered  
Chosen Option : 4

Q.16 A sentence has been given with a blank to be filled with an appropriate option. Choose the correct alternative.  
I bowed to him, but he \_\_\_\_\_ not to see me.

- Ans
- ☒ 1. seems
  - ☒ 2. seeming
  - ☒ 3. seemingly
  - ☒ 4. seemed

Question Type : MCQ  
Question ID : 264330134508  
Option 1 ID : 264330526996  
Option 2 ID : 264330526998  
Option 3 ID : 264330526997  
Option 4 ID : 264330526995  
Status : Answered  
Chosen Option : 4

Q.17 Choose the word that can substitute the given group of words.  
A person who does not believe in God

- Ans
- ☒ 1. Atheist
  - ☒ 2. Iconoclast
  - ☒ 3. Lecher
  - ☒ 4. Highbrow

Question Type : MCQ  
Question ID : 264330134516  
Option 1 ID : 264330527023  
Option 2 ID : 264330527024  
Option 3 ID : 264330527025  
Option 4 ID : 264330527026  
Status : Answered  
Chosen Option : 1

Q.18 Find the part of the given sentence that has an error in it. If there is no error, choose 'No error'.

Their should be Lokpal to check corruption by the bureaucrats and politicians.

Ans ☒ 1. Their should be Lokpal to

☐ 2. No error

☐ 3. the bureaucrats and politicians.

☐ 4. check corruption by

Question Type : MCQ

Question ID : 264330134504

Option 1 ID : 264330526979

Option 2 ID : 264330526982

Option 3 ID : 264330526981

Option 4 ID : 264330526980

Status : Answered

Chosen Option : 1

Q.19 Select the most appropriate option to substitute the bracketed segment in the given sentence. If there is no need to substitute it, select 'no substitution required'.

The Yoruba was (one of the west African city-state culture).

Ans ☐ 1. No substitution required

☒ 2. one of the west African city-state cultures

☐ 3. one of a west African city-state cultures

☐ 4. one of the west's African city-state culture

Question Type : MCQ

Question ID : 264330136087

Option 1 ID : 264330533162

Option 2 ID : 264330533159

Option 3 ID : 264330533160

Option 4 ID : 264330533161

Status : Answered

Chosen Option : 1

Q.20 Select the most appropriate option to fill in the blank.

The researcher team took air \_\_\_\_\_ from the room every five minutes to rule out the possibility of a virus.

Ans ☐ 1. instances

☐ 2. slices

☒ 3. samples

☐ 4. droops

Question Type : MCQ

Question ID : 264330134527

Option 1 ID : 264330527068

Option 2 ID : 264330527069

Option 3 ID : 264330527067

Option 4 ID : 264330527070

Status : Answered

Chosen Option : 4

**Comprehension:**

In the following passage some of the words have been deleted. Read the passage carefully and select the correct answer for the given blank out of the four alternatives.  
With Halloween only (1) \_\_\_\_\_ days away, I thought this was a perfect time to talk (2) \_\_\_\_\_ Zombies. For years, zombies have dominated science (3) \_\_\_\_\_. These creatures, the walking dead, don't (4) \_\_\_\_\_ exist, right? Wrong! There are in fact several very real life diseases that could and can make you (5) \_\_\_\_\_ like a zombie.

**SubQuestion No : 21**

**Q.21** Select the most appropriate option to fill in blank number 1.

- Ans ☒ 1. a little  
☒ 2. a few  
☒ 3. much  
☒ 4. little

Question Type : **MCQ**

Question ID : **264330134381**

Option 1 ID : **264330526506**

Option 2 ID : **264330526503**

Option 3 ID : **264330526505**

Option 4 ID : **264330526504**

Status : **Answered**

Chosen Option : **2**

**Comprehension:**

In the following passage some of the words have been deleted. Read the passage carefully and select the correct answer for the given blank out of the four alternatives.  
With Halloween only (1) \_\_\_\_\_ days away, I thought this was a perfect time to talk (2) \_\_\_\_\_ Zombies. For years, zombies have dominated science (3) \_\_\_\_\_. These creatures, the walking dead, don't (4) \_\_\_\_\_ exist, right? Wrong! There are in fact several very real life diseases that could and can make you (5) \_\_\_\_\_ like a zombie.

**SubQuestion No : 22**

**Q.22** Select the most appropriate option to fill in blank number 2.

- Ans ☒ 1. about  
☒ 2. of  
☒ 3. for  
☒ 4. by

Question Type : **MCQ**

Question ID : **264330134382**

Option 1 ID : **264330526509**

Option 2 ID : **264330526510**

Option 3 ID : **264330526508**

Option 4 ID : **264330526507**

Status : **Answered**

Chosen Option : **1**

**Comprehension:**

In the following passage some of the words have been deleted. Read the passage carefully and select the correct answer for the given blank out of the four alternatives.  
With Halloween only (1) \_\_\_\_\_ days away, I thought this was a perfect time to talk (2) \_\_\_\_\_ Zombies. For years, zombies have dominated science (3) \_\_\_\_\_. These creatures, the walking dead, don't (4) \_\_\_\_\_ exist, right? Wrong! There are in fact several very real life diseases that could and can make you (5) \_\_\_\_\_ like a zombie.

**SubQuestion No : 23**

**Q.23** Select the most appropriate option to fill in blank number 3.

- Ans ☒ 1. friction  
☒ 2. freelance  
☒ 3. fictions  
☒ 4. fickle

Question Type : MCQ  
Question ID : 264330134383  
Option 1 ID : 264330526514  
Option 2 ID : 264330526511  
Option 3 ID : 264330526513  
Option 4 ID : 264330526512  
Status : Answered  
Chosen Option : 3

**Comprehension:**

In the following passage some of the words have been deleted. Read the passage carefully and select the correct answer for the given blank out of the four alternatives.  
With Halloween only (1) \_\_\_\_\_ days away, I thought this was a perfect time to talk (2) \_\_\_\_\_ Zombies. For years, zombies have dominated science (3) \_\_\_\_\_. These creatures, the walking dead, don't (4) \_\_\_\_\_ exist, right? Wrong! There are in fact several very real life diseases that could and can make you (5) \_\_\_\_\_ like a zombie.

**SubQuestion No : 24**

**Q.24** Select the most appropriate option to fill in blank number 4.

- Ans ☒ 1. manually  
☒ 2. gladly  
☒ 3. actually  
☒ 4. suddenly

Question Type : MCQ  
Question ID : 264330134384  
Option 1 ID : 264330526517  
Option 2 ID : 264330526518  
Option 3 ID : 264330526516  
Option 4 ID : 264330526515  
Status : Answered  
Chosen Option : 3

### Comprehension:

In the following passage some of the words have been deleted. Read the passage carefully and select the correct answer for the given blank out of the four alternatives.

With Halloween only (1) \_\_\_\_\_ days away, I thought this was a perfect time to talk (2) \_\_\_\_\_ Zombies. For years, zombies have dominated science (3) \_\_\_\_\_. These creatures, the walking dead, don't (4) \_\_\_\_\_ exist, right? Wrong! There are in fact several very real life diseases that could and can make you (5) \_\_\_\_\_ like a zombie.

### SubQuestion No : 25

**Q.25** Select the most appropriate option to fill in blank number 5.

- Ans
- ☒ 1. state
  - ☒ 2. slake
  - ☒ 3. run
  - ☒ 4. act

Question Type : **MCQ**

Question ID : **264330134385**

Option 1 ID : **264330526522**

Option 2 ID : **264330526519**

Option 3 ID : **264330526521**

Option 4 ID : **264330526520**

Status : **Answered**

Chosen Option : **4**

