

Multi Tasking Non Technical Staff and Havaladar CBIC and CBN Examination 2022

Roll Number	
Candidate Name	
Venue Name	iON Digital Zone iDZ Selaqui
Exam Date	15/05/2023
Exam Time	12:00 PM - 2:00 PM
Subject	MTS Non Tech Havaladar CBIC and CBN Examination 2022

Section : Numerical and Mathematical Ability

Q.1 A sum of money doubles itself in 12 years. Find the rate percent per annum of simple interest.

- Ans**
- ✓ 1. 8.33%
 - ✗ 2. 6.25%
 - ✗ 3. 9.09%
 - ✗ 4. 11.11%

Question Type : **MCQ**

Question ID : **264330135076**

Option 1 ID : **264330529239**

Option 2 ID : **264330529240**

Option 3 ID : **264330529242**

Option 4 ID : **264330529241**

Status : **Answered**

Chosen Option : **1**

Q.2 The radius of a hemisphere is 5 cm. Find the volume.

- Ans**
- ✗ 1. 330.4 cm³
 - ✗ 2. 117.9 cm³
 - ✗ 3. 150.6 cm³
 - ✓ 4. 261.9 cm³

Question Type : **MCQ**

Question ID : **264330135432**

Option 1 ID : **264330530637**

Option 2 ID : **264330530636**

Option 3 ID : **264330530638**

Option 4 ID : **264330530635**

Status : **Answered**

Chosen Option : **4**

Test Prime

**ALL EXAMS,
ONE SUBSCRIPTION**



70,000+
Mock Tests



**Personalised
Report Card**



**Unlimited
Re-Attempt**



600+
Exam Covered



**Previous Year
Papers**



**500%
Refund**



ATTEMPT FREE MOCK NOW

Q.3 Among four students sitting in a row, average age of last three students is 48 years and the average age of first three students is 50 years. If the age of first student is 56 years, then what is the age of the last student?

- Ans**
- ☒ 1. 30 years
 - ☒ 2. 40 years
 - ☒ 3. 50 years
 - ☒ 4. 60 years

Question Type : **MCQ**

Question ID : **264330137325**

Option 1 ID : **264330537927**

Option 2 ID : **264330537929**

Option 3 ID : **264330537930**

Option 4 ID : **264330537928**

Status : **Answered**

Chosen Option : **3**

Q.4 12 men can complete a work in 6 days working 4 hours per days. If 4 men work 8 hours per day, then in how many days the same work will be completed?

- Ans**
- ☒ 1. 8 days
 - ☒ 2. 6 days
 - ☒ 3. 9 days
 - ☒ 4. 10 days

Question Type : **MCQ**

Question ID : **264330137874**

Option 1 ID : **264330540106**

Option 2 ID : **264330540105**

Option 3 ID : **264330540103**

Option 4 ID : **264330540104**

Status : **Answered**

Chosen Option : **3**

Q.5 Solve: $[(144/12) + (43 \times 3)] + 45 - 20 \times 3$

- Ans**
- ☒ 1. 127
 - ☒ 2. 111
 - ☒ 3. 126
 - ☒ 4. 156

Question Type : **MCQ**

Question ID : **264330135086**

Option 1 ID : **264330529280**

Option 2 ID : **264330529279**

Option 3 ID : **264330529281**

Option 4 ID : **264330529282**

Status : **Answered**

Chosen Option : **3**

Q.6 A can do a work alone in 60 days and B can do the same work alone in 33.33% less time taken by A. Find the time taken by B to complete the work alone.

- Ans**
- ☒ 1. 30 days
 - ☒ 2. 17 days
 - ☒ 3. 22 days
 - ☒ 4. 40 days

Question Type : **MCQ**
 Question ID : **264330133790**
 Option 1 ID : **264330524183**
 Option 2 ID : **264330524186**
 Option 3 ID : **264330524185**
 Option 4 ID : **264330524184**
 Status : **Answered**
 Chosen Option : **4**

Q.7 A sum of money at simple interest amounts to Rs. 610 in 3 years and to Rs. 650 in 4 years. The sum is:

- Ans**
- ☒ 1. Rs. 610
 - ☒ 2. Rs. 570
 - ☒ 3. Rs. 550
 - ☒ 4. Rs. 490

Question Type : **MCQ**
 Question ID : **264330135097**
 Option 1 ID : **264330529325**
 Option 2 ID : **264330529323**
 Option 3 ID : **264330529324**
 Option 4 ID : **264330529326**
 Status : **Answered**
 Chosen Option : **4**

Q.8 If the heights of two cylinders are in the ratio of 7 : 9 and their diameters are in the ratio of 6 : 7, then what is the ratio of the volumes of the cylinders?

- Ans**
- ☒ 1. 6 : 7
 - ☒ 2. 7 : 9
 - ☒ 3. 5 : 9
 - ☒ 4. 4 : 7

Question Type : **MCQ**
 Question ID : **264330137887**
 Option 1 ID : **264330540157**
 Option 2 ID : **264330540155**
 Option 3 ID : **264330540158**
 Option 4 ID : **264330540156**
 Status : **Answered**
 Chosen Option : **4**

Q.9 A person covers first 15 km in 60 minutes and next 24 km in 30 minutes. What is his average speed for the whole journey?

- Ans**
- ☒ 1. 33 km/hr
 - ☒ 2. 26 km/hr
 - ☒ 3. 29 km/hr
 - ☒ 4. 23 km/hr

Question Type : **MCQ**

Question ID : **264330137179**

Option 1 ID : **264330537359**

Option 2 ID : **264330537362**

Option 3 ID : **264330537361**

Option 4 ID : **264330537360**

Status : **Answered**

Chosen Option : **2**

Q.10 A sum becomes Rs.5400 in 4 years at the rate of 20 percent per annum on simple interest. What is the sum?

- Ans**
- ☒ 1. Rs.3000
 - ☒ 2. Rs.2500
 - ☒ 3. Rs.4000
 - ☒ 4. Rs.2000

Question Type : **MCQ**

Question ID : **264330135053**

Option 1 ID : **264330529148**

Option 2 ID : **264330529150**

Option 3 ID : **264330529147**

Option 4 ID : **264330529149**

Status : **Answered**

Chosen Option : **1**

Q.11 A man goes from A to B at a speed of 200 kmph and comes back to A at a speed of 300 kmph. Find his average speed for the entire journey?

- Ans**
- ☒ 1. 264 kmph
 - ☒ 2. 345 kmph
 - ☒ 3. 340 kmph
 - ☒ 4. 240 kmph

Question Type : **MCQ**

Question ID : **264330135100**

Option 1 ID : **264330529338**

Option 2 ID : **264330529337**

Option 3 ID : **264330529335**

Option 4 ID : **264330529336**

Status : **Answered**

Chosen Option : **4**

Q.12 If A is 20 percent less than B, then B is how much percentage more than A?

- Ans
- ☒ 1. 33.33 percent
 - ☒ 2. 50 percent
 - ☒ 3. 20 percent
 - ☒ 4. 25 percent

Question Type : MCQ
 Question ID : 264330135048
 Option 1 ID : 264330529128
 Option 2 ID : 264330529127
 Option 3 ID : 264330529130
 Option 4 ID : 264330529129
 Status : Answered
 Chosen Option : 4

Q.13 What is the value of $9 \times 121 + 11 \times 84 \div 4$?

- Ans
- ☒ 1. 1240
 - ☒ 2. 1320
 - ☒ 3. 1230
 - ☒ 4. 1340

Question Type : MCQ
 Question ID : 264330139012
 Option 1 ID : 264330544657
 Option 2 ID : 264330544656
 Option 3 ID : 264330544655
 Option 4 ID : 264330544658
 Status : Answered
 Chosen Option : 2

Q.14 Marked price of a toy is 100 rupees and the selling price is 80 rupees. Calculate the discount percentage.

- Ans
- ☒ 1. 20%
 - ☒ 2. 40%
 - ☒ 3. 10%
 - ☒ 4. 30%

Question Type : MCQ
 Question ID : 264330135095
 Option 1 ID : 264330529316
 Option 2 ID : 264330529318
 Option 3 ID : 264330529315
 Option 4 ID : 264330529317
 Status : Answered
 Chosen Option : 1

Q.15 The table given below shows the number of students of five classes playing different games.

Class	Games		
	A	B	C
6th	30	50	70
7th	60	20	35
8th	40	10	90
9th	38	26	50
10th	25	32	20

Which of the following statement is correct?

- I. The average number of students playing A and B in 9th class are 32.
 II. The average number of students playing A and C in 8th class are 75.
 III. The total number of students playing all the three games in 10th class are 77.

- Ans ☒ 1. II and III
☒ 2. I, II and III
☒ 3. I and III
☒ 4. I and II

Question Type : MCQ

Question ID : 264330135062

Option 1 ID : 264330529184

Option 2 ID : 264330529186

Option 3 ID : 264330529185

Option 4 ID : 264330529183

Status : Answered

Chosen Option : 3

Q.16 What is the average of first 10 natural numbers?

- Ans ☒ 1. 5.5
☒ 2. 10
☒ 3. 5
☒ 4. 10.5

Question Type : MCQ

Question ID : 264330135089

Option 1 ID : 264330529293

Option 2 ID : 264330529291

Option 3 ID : 264330529292

Option 4 ID : 264330529294

Status : Answered

Chosen Option : 1

Q.17 In a bucket there are 40 red balls and 120 blue balls. The ratio of red to blue is :

- Ans ☒ 1. 1:3
☒ 2. 3:4
☒ 3. 1:4
☒ 4. 2:3

Question Type : MCQ

Question ID : 264330135096

Option 1 ID : 264330529320

Option 2 ID : 264330529322

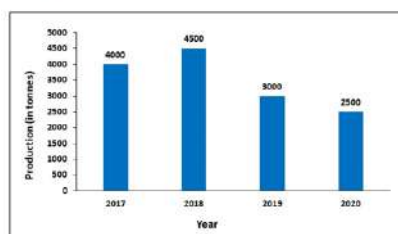
Option 3 ID : 264330529319

Option 4 ID : 264330529321

Status : Answered

Chosen Option : 1

Q.18 In the following graph the production of Raggi in 4 consecutive years are plotted. In which year the production of Raggi is maximum?



- Ans ☒ 1. 2020
☒ 2. 2017
☒ 3. 2019
☒ 4. 2018

Question Type : MCQ

Question ID : 264330135104

Option 1 ID : 264330529354

Option 2 ID : 264330529351

Option 3 ID : 264330529353

Option 4 ID : 264330529352

Status : Answered

Chosen Option : 4

Q.19 Find the profit if a shopkeeper sells the item for Rs 4673 whose cost price was Rs 3456.

- Ans ☒ 1. Rs 1345
☒ 2. Rs 1456
☒ 3. Rs 1237
☒ 4. Rs 1217

Question Type : MCQ

Question ID : 264330135094

Option 1 ID : 264330529313

Option 2 ID : 264330529314

Option 3 ID : 264330529312

Option 4 ID : 264330529311

Status : Answered

Chosen Option : 4

Q.20 Pankaj sells an article and earns a profit of 55 percent. What will be the ratio of cost price and selling price?

- Ans**
- ☒ 1. 20 : 37
 - ☒ 2. 17 : 25
 - ☒ 3. 18 : 25
 - ☒ 4. 20 : 31

Question Type : **MCQ**
 Question ID : **264330137609**
 Option 1 ID : **264330539045**
 Option 2 ID : **264330539043**
 Option 3 ID : **264330539046**
 Option 4 ID : **264330539044**
 Status : **Answered**
 Chosen Option : **4**

Section : Reasoning Ability and Problem Solving

Q.1 Study the given pattern carefully and select the number that can replace the question mark (?) in it.

First row- 7, 343, 49
 Second row- 6, 216, 36
 Third row- 5, 125, ?

- Ans**
- ☒ 1. 30
 - ☒ 2. 45
 - ☒ 3. 25
 - ☒ 4. 85

Question Type : **MCQ**
 Question ID : **264330134992**
 Option 1 ID : **264330528903**
 Option 2 ID : **264330528904**
 Option 3 ID : **264330528905**
 Option 4 ID : **264330528906**
 Status : **Answered**
 Chosen Option : **3**

Q.2 Select the option that is related to the third letter in the same way as the second number is related to the first letter.

R : 324 :: I : ?

- Ans**
- ☒ 1. 100
 - ☒ 2. 81
 - ☒ 3. 99
 - ☒ 4. 64

Question Type : **MCQ**
 Question ID : **264330134978**
 Option 1 ID : **264330528850**
 Option 2 ID : **264330528847**
 Option 3 ID : **264330528848**
 Option 4 ID : **264330528849**
 Status : **Answered**
 Chosen Option : **2**

Q.3 Six ladies Anu, Preeti, Arti, Kirti, Poonam and Suman are seated at a circular table facing the centre. Preeti is sitting opposite to Poonam. Poonam is sitting exactly between Kirti and Anu. Arti sits to the immediate right of Anu. Who sits to the immediate right of Preeti?

- Ans** ☒ 1. Suman
☒ 2. Kirti
☒ 3. Arti
☒ 4. Anu

Question Type : MCQ
 Question ID : 264330134984
 Option 1 ID : 264330528874
 Option 2 ID : 264330528873
 Option 3 ID : 264330528872
 Option 4 ID : 264330528871
 Status : Answered
 Chosen Option : 1

Q.4 In a certain code language, 'VOTED' is coded as '76218', 'WIDER' is coded as '08759', 'ADORE' is coded as '79382'. What is the code for 'ART' in that code language?

- Ans** ☒ 1. 395
☒ 2. 397
☒ 3. 387
☒ 4. 396

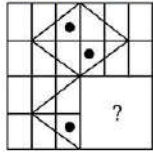
Question Type : MCQ
 Question ID : 264330137372
 Option 1 ID : 264330538116
 Option 2 ID : 264330538118
 Option 3 ID : 264330538115
 Option 4 ID : 264330538117
 Status : Answered
 Chosen Option : 4

Q.5 Select the option that is related to the third word in the same way as the second word is related to the first word.
 Fruit : Pomegranate :: Mammal : ?

- Ans** ☒ 1. Dog
☒ 2. Pigeon
☒ 3. Lizard
☒ 4. Snake

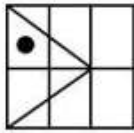
Question Type : MCQ
 Question ID : 264330134979
 Option 1 ID : 264330528851
 Option 2 ID : 264330528854
 Option 3 ID : 264330528853
 Option 4 ID : 264330528852
 Status : Answered
 Chosen Option : 1

Q.6 Select the option figure that will replace the question mark (?) in the figure given below to complete the pattern.
(rotation is not allowed)

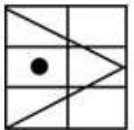


Ans

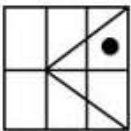
✓ 1.



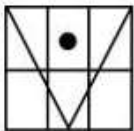
✗ 2.



✗ 3.



✗ 4.



Question Type : MCQ

Question ID : 264330134997

Option 1 ID : 264330528926

Option 2 ID : 264330528925

Option 3 ID : 264330528924

Option 4 ID : 264330528923

Status : Answered

Chosen Option : 1

Q.7 Which of the following numbers will replace the question mark (?) in the given series?

88, 92, 97, 103, 110, 118, ?

Ans ✗ 1. 117

✓ 2. 127

✗ 3. 219

✗ 4. 217

Question Type : MCQ

Question ID : 264330134945

Option 1 ID : 264330528716

Option 2 ID : 264330528717

Option 3 ID : 264330528718

Option 4 ID : 264330528715

Status : Answered

Chosen Option : 2

Q.8 In a certain code language, 'DARK' is written as 'ECSM' and 'TREE' is written as 'UTFG'. How will 'GAME' be written in that language?

- Ans**
- ✓ 1. HCNG
 - ✗ 2. HCMG
 - ✗ 3. HCNH
 - ✗ 4. HCNF

Question Type : **MCQ**

Question ID : **264330133509**

Option 1 ID : **264330523069**

Option 2 ID : **264330523068**

Option 3 ID : **264330523070**

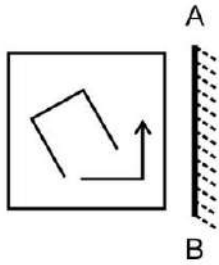
Option 4 ID : **264330523067**

Status : **Answered**

Chosen Option : **1**

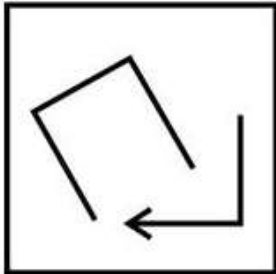


Q.9 Select the correct mirror image of the given figure when the mirror AB is placed to the right side of the figure.

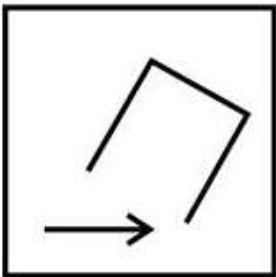


Ans

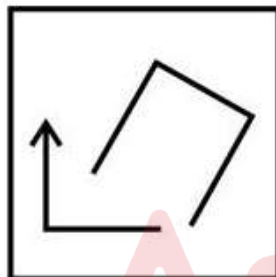
✗ 1.



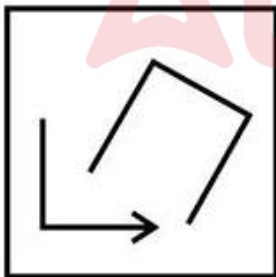
✗ 2.



✓ 3.



✗ 4.



Question Type : MCQ

Question ID : 264330134952

Option 1 ID : 264330528744

Option 2 ID : 264330528743

Option 3 ID : 264330528745

Option 4 ID : 264330528746

Status : Answered

Chosen Option : 3

Q.10 In a certain code language, 'WIFE' is written as '172' and 'CAT' is written as '72'. How will 'SON' be written in that language?

- Ans**
- ☒ 1. 244
 - ☒ 2. 144
 - ☒ 3. 241
 - ☒ 4. 141

Question Type : MCQ

Question ID : 264330137586

Option 1 ID : 264330538953

Option 2 ID : 264330538951

Option 3 ID : 264330538954

Option 4 ID : 264330538952

Status : Answered

Chosen Option : 2

Q.11 Five friends Tam, Tan, Tap, Tab and Tat are standing in a column facing north. Tam stands behind Tan. Tap stands immediately behind Tat. Only one person stands in between Tat and Tam. Tab stands immediately behind Tam. Tab stands at the end of the column. Who stands at the front of the column?

- Ans**
- ☒ 1. Tam
 - ☒ 2. Tan
 - ☒ 3. Tap
 - ☒ 4. Tat

Question Type : MCQ

Question ID : 264330134985

Option 1 ID : 264330528876

Option 2 ID : 264330528878

Option 3 ID : 264330528877

Option 4 ID : 264330528875

Status : Answered

Chosen Option : 2

Q.12 Three statements are given followed by two conclusions numbered I and II. Assuming the statements to be true, even if they seem to be at variance with commonly known facts, decide which of the conclusions logically follow(s) from the statements.

Statements:

No sticks are buses.

All schools are buses.

All buses are brave.

Conclusions:

I. No stick is brave.

II. All schools are brave.

- Ans**
- ☒ 1. Only conclusion I follows
 - ☒ 2. Only conclusion II follows
 - ☒ 3. Neither conclusion I nor II follows
 - ☒ 4. Both conclusions I and II follow

Question Type : MCQ

Question ID : 264330134988

Option 1 ID : 264330528887

Option 2 ID : 264330528888

Option 3 ID : 264330528890

Option 4 ID : 264330528889

Status : Answered

Chosen Option : 2

Q.13 सात लड़कों I, II, III, IV, V, VI और VII में प्रत्येक की उम्र अलग-अलग है। V केवल II से बड़ा है। I, केवल VI से छोटा है। III चार अन्य लड़कों से बड़ा है। VII, IV से छोटा है। लड़कों में चौथा सबसे बड़ा कौन है?

Ans ✓ 1. IV

✗ 2. I

✗ 3. III

✗ 4. II

Question Type : MCQ

Question ID : 264330134986

Option 1 ID : 264330528881

Option 2 ID : 264330528882

Option 3 ID : 264330528880

Option 4 ID : 264330528879

Status : Answered

Chosen Option : 1

Q.14 Which of the following letter cluster will replace the question mark (?) in the given series?
CX, EV, GT, IR, KP, ?

Ans ✗ 1. QR

✗ 2. MK

✗ 3. LN

✓ 4. MN

Question Type : MCQ

Question ID : 264330134976

Option 1 ID : 264330528839

Option 2 ID : 264330528841

Option 3 ID : 264330528842

Option 4 ID : 264330528840

Status : Answered

Chosen Option : 4

Q.15 Which two signs should be interchanged to make the given equation correct?

$$13 - 25 = 5 + 4 \div 12$$

Ans ✗ 1. + and =

✗ 2. - and =

✗ 3. + and -

✓ 4. \div and =

Question Type : MCQ

Question ID : 264330134993

Option 1 ID : 264330528907

Option 2 ID : 264330528908

Option 3 ID : 264330528910

Option 4 ID : 264330528909

Status : Answered

Chosen Option : 4

Q.16 In a certain code language, 'JOCKEY' is written as 'KCJYOE'. How will 'EXCISE' be written in that language?

- Ans
- ☒ 1. ICEXES
 - ☒ 2. ICEEES
 - ☒ 3. CLEXDE
 - ☒ 4. EEICXS

Question Type : MCQ

Question ID : 264330137836

Option 1 ID : 264330539954

Option 2 ID : 264330539953

Option 3 ID : 264330539951

Option 4 ID : 264330539952

Status : Answered

Chosen Option : 2

Q.17 Which two signs should be interchanged to make the given equation correct?

$$9 \times 4 + 6 \div 3 - 5 = 39$$

- Ans
- ☒ 1. \div and $-$
 - ☒ 2. \times and $+$
 - ☒ 3. $-$ and $+$
 - ☒ 4. $-$ and $=$

Question Type : MCQ

Question ID : 264330134972

Option 1 ID : 264330528825

Option 2 ID : 264330528826

Option 3 ID : 264330528823

Option 4 ID : 264330528824

Status : Answered

Chosen Option : 3

Q.18 Which of the following numbers will replace the question mark (?) in the given series?

27, 32, 42, 57, 77, 102, 132, ?

- Ans
- ☒ 1. 172
 - ☒ 2. 167
 - ☒ 3. 149
 - ☒ 4. 158

Question Type : MCQ

Question ID : 264330134990

Option 1 ID : 264330528897

Option 2 ID : 264330528895

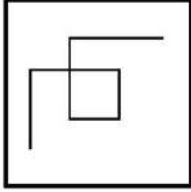
Option 3 ID : 264330528898

Option 4 ID : 264330528896

Status : Answered

Chosen Option : 2

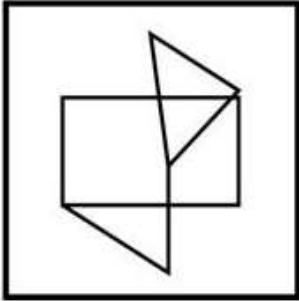
Q.19 Select the option figure in which the given figure (X) is embedded as its part (rotation is NOT allowed).



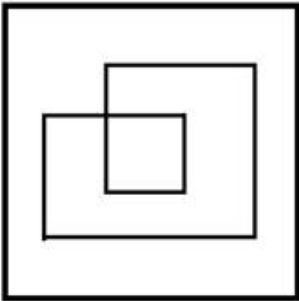
(X)

Ans

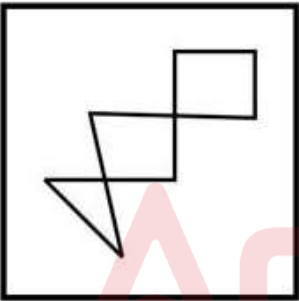
✗ 1.



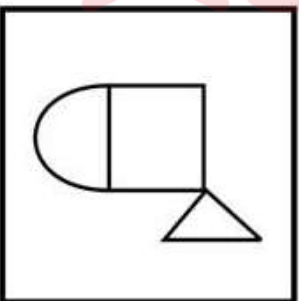
✓ 2.



✗ 3.



✗ 4.



Question Type : MCQ

Question ID : 264330134951

Option 1 ID : 264330528739

Option 2 ID : 264330528741

Option 3 ID : 264330528742

Option 4 ID : 264330528740

Status : Answered

Chosen Option : 2

Q.20 Two statements are given followed by two conclusions numbered I and II. Assuming the statements to be true, even if they seem to be at variance with commonly known facts, decide which of the conclusions logically follow(s) from the statements.

Statements:

No pen is a paper.

All papers are pencils.

Conclusions:

I. Some pens are pencils.

II. All pencils are pen.

Ans ✓ 1. Neither conclusion I nor II follows

✗ 2. Both conclusions I and II follow

✗ 3. Only conclusion I follows

✗ 4. Only conclusion II follows

Question Type : MCQ

Question ID : 264330134987

Option 1 ID : 264330528886

Option 2 ID : 264330528885

Option 3 ID : 264330528883

Option 4 ID : 264330528884

Status : Answered

Chosen Option : 1

Section : General Awareness

Q.1 Who is the author of the novel 'The God of Small Things'?

Ans ✗ 1. Khushwant Singh

✓ 2. Arundhati Roy

✗ 3. Aravind Adiga

✗ 4. Kiran Desai

Question Type : MCQ

Question ID : 264330134599

Option 1 ID : 264330527352

Option 2 ID : 264330527354

Option 3 ID : 264330527353

Option 4 ID : 264330527351

Status : Answered

Chosen Option : 2

Q.2 The Governor of a State shall, after every _____ years, constitute a finance commission under Article 243-I of the Indian Constitution.

Ans ✗ 1. ten

✗ 2. three

✓ 3. five

✗ 4. six

Question Type : MCQ

Question ID : 264330134665

Option 1 ID : 264330527618

Option 2 ID : 264330527616

Option 3 ID : 264330527615

Option 4 ID : 264330527617

Status : Answered

Chosen Option : 3

Q.3 Festival of "Hola Mohalla" is celebrated by which community?

- Ans
- ☐ 1. Jains
 - ☐ 2. Parsi
 - ☒ 3. Sikh
 - ☐ 4. Buddhist

Question Type : MCQ

Question ID : 264330134620

Option 1 ID : 264330527435

Option 2 ID : 264330527438

Option 3 ID : 264330527437

Option 4 ID : 264330527436

Status : Not Answered

Chosen Option : --

Q.4 As of 2022, India is the _____ largest producer of wheat in the world.

- Ans
- ☐ 1. third
 - ☒ 2. second
 - ☐ 3. fourth
 - ☐ 4. fifth

Question Type : MCQ

Question ID : 264330137953

Option 1 ID : 264330540420

Option 2 ID : 264330540419

Option 3 ID : 264330540421

Option 4 ID : 264330540422

Status : Answered

Chosen Option : 2

Q.5 Who among the following won a gold medal in weightlifting in commonwealth Games 2022?

- Ans
- ☐ 1. Sanket Sagar
 - ☐ 2. Bindyarani Devi
 - ☐ 3. Vikas Thakur
 - ☒ 4. Saikhom Mirabai Chanu

Question Type : MCQ

Question ID : 264330134623

Option 1 ID : 264330527448

Option 2 ID : 264330527449

Option 3 ID : 264330527450

Option 4 ID : 264330527447

Status : Answered

Chosen Option : 4

Q.6 Which is the second highest mountain in the Garhwal region of Uttarakhand?

- Ans
- ☐ 1. Nanda Devi
 - ☒ 2. Kamet
 - ☐ 3. Nilkantha
 - ☐ 4. Meru

Question Type : MCQ
Question ID : 264330134654
Option 1 ID : 264330527572
Option 2 ID : 264330527571
Option 3 ID : 264330527574
Option 4 ID : 264330527573
Status : Answered
Chosen Option : 1

Q.7 The British parliament transferred the powers of east India company to the British crown in _____.

- Ans
- ☒ 1. 1858
 - ☐ 2. 1909
 - ☐ 3. 1919
 - ☐ 4. 1773

Question Type : MCQ
Question ID : 264330134617
Option 1 ID : 264330527424
Option 2 ID : 264330527425
Option 3 ID : 264330527426
Option 4 ID : 264330527423
Status : Answered
Chosen Option : 4

Q.8 Which among the following features of the Indian Constitution was borrowed from the Constitution of Britain?

- Ans
- ☐ 1. Directive Principles of State Policy
 - ☒ 2. Cabinet System
 - ☐ 3. Fundamental Duties
 - ☐ 4. Concurrent list

Question Type : MCQ
Question ID : 264330134664
Option 1 ID : 264330527612
Option 2 ID : 264330527611
Option 3 ID : 264330527614
Option 4 ID : 264330527613
Status : Answered
Chosen Option : 2

Q.9 Who among the following won the Mexican Formula 1 Grand Prix 2022?

- Ans
- ☐ 1. Carlos Sainz Jr.
 - ☐ 2. Lando Norris
 - ☒ 3. Max Verstappen
 - ☐ 4. Charles Leclerc

Question Type : MCQ

Question ID : 264330134666

Option 1 ID : 264330527620

Option 2 ID : 264330527622

Option 3 ID : 264330527619

Option 4 ID : 264330527621

Status : Answered

Chosen Option : 3

Q.10 Plants require nutrients for their growth which can be supplied through _____.

- Ans
- ☐ 1. Soil and air only
 - ☒ 2. Soil, water and air
 - ☐ 3. Soil and water only
 - ☐ 4. soil only

Question Type : MCQ

Question ID : 264330134607

Option 1 ID : 264330527385

Option 2 ID : 264330527386

Option 3 ID : 264330527384

Option 4 ID : 264330527383

Status : Answered

Chosen Option : 2

Q.11 Which of the following is 'NOT' an example of communicable diseases?

- Ans
- ☐ 1. Chicken Pox
 - ☐ 2. Common cold
 - ☒ 3. Diabetes
 - ☐ 4. Tuberculosis

Question Type : MCQ

Question ID : 264330134608

Option 1 ID : 264330527387

Option 2 ID : 264330527389

Option 3 ID : 264330527390

Option 4 ID : 264330527388

Status : Answered

Chosen Option : 3

Q.12 Which famous Indian Odissi dancer received the Padma Vibhushan, India's second highest civilian award, in 2000?

- Ans
- ☐ 1. Darshana Jhaveri
 - ☐ 2. Sunanda Nair
 - ☐ 3. Rukmini Devi Arundale
 - ☒ 4. Kelucharan Mohapatra

Question Type : MCQ

Question ID : 264330137963

Option 1 ID : 264330540459

Option 2 ID : 264330540461

Option 3 ID : 264330540460

Option 4 ID : 264330540462

Status : Answered

Chosen Option : 4

Q.13 Which among the following statements is incorrect?

- Ans
- ☒ 1. Cell wall is present in animals.
 - ☐ 2. Cell membrane is also called the plasma membrane.
 - ☐ 3. Chromosomes are composed of DNA and Protein.
 - ☐ 4. Mitochondria are known as the powerhouse of the cell.

Question Type : MCQ

Question ID : 264330134650

Option 1 ID : 264330527555

Option 2 ID : 264330527556

Option 3 ID : 264330527558

Option 4 ID : 264330527557

Status : Answered

Chosen Option : 2

Q.14 Which among the following is the sole note issuing authority in India?

- Ans
- ☐ 1. Industrial Finance Corporation of India
 - ☐ 2. National Payments Corporation of India
 - ☒ 3. Reserve Bank of India
 - ☐ 4. State Bank of India

Question Type : MCQ

Question ID : 264330137968

Option 1 ID : 264330540482

Option 2 ID : 264330540481

Option 3 ID : 264330540479

Option 4 ID : 264330540480

Status : Answered

Chosen Option : 3

Q.15 Charkula is a famous dance form associated with which of the following states?

- Ans
- ☒ 1. Tamil Nadu
 - ☒ 2. Tripura
 - ☒ 3. Uttar Pradesh
 - ☒ 4. Andhra Pradesh

Question Type : MCQ
 Question ID : 264330134646
 Option 1 ID : 264330527541
 Option 2 ID : 264330527540
 Option 3 ID : 264330527542
 Option 4 ID : 264330527539
 Status : Not Answered
 Chosen Option : --

Q.16 Guru Vempati Chinna Satyam received which of the following awards in the year 1998?

- Ans
- ☒ 1. Padma Shri
 - ☒ 2. Bharat Ratna
 - ☒ 3. Padma Vibhushan
 - ☒ 4. Padma Bhushan

Question Type : MCQ
 Question ID : 264330134601
 Option 1 ID : 264330527361
 Option 2 ID : 264330527360
 Option 3 ID : 264330527362
 Option 4 ID : 264330527359
 Status : Answered
 Chosen Option : 4

Q.17 Cricket World Cup, 1983 was held in which of the following places?

- Ans
- ☒ 1. England
 - ☒ 2. Australia
 - ☒ 3. West Indies
 - ☒ 4. India

Question Type : MCQ
 Question ID : 264330134597
 Option 1 ID : 264330527344
 Option 2 ID : 264330527343
 Option 3 ID : 264330527345
 Option 4 ID : 264330527346
 Status : Answered
 Chosen Option : 1

Q.18 With which neighbouring country does India share the Sunderbans forest?

- Ans
- ☒ 1. China
 - ☒ 2. Pakistan
 - ☒ 3. Bangladesh
 - ☒ 4. Nepal

Question Type : MCQ

Question ID : 264330137906

Option 1 ID : 264330540233

Option 2 ID : 264330540231

Option 3 ID : 264330540234

Option 4 ID : 264330540232

Status : Answered

Chosen Option : 3

Q.19 As per census 2011, what is the Total Fertility Rate in India? (provide an approximate range)

- Ans
- ☒ 1. 3.1-3.9
 - ☒ 2. 2.1-2.9
 - ☒ 3. 4.1-4.9
 - ☒ 4. 5.1-5.9

Question Type : MCQ

Question ID : 264330133967

Option 1 ID : 264330524892

Option 2 ID : 264330524891

Option 3 ID : 264330524893

Option 4 ID : 264330524894

Status : Answered

Chosen Option : 4

Q.20 "The blue umbrella" is a novel written by famous Indian author _____.

- Ans
- ☒ 1. Khushwant Singh
 - ☒ 2. Sarat Chandra Chattopadhyay
 - ☒ 3. Ruskin Bond
 - ☒ 4. Arundhati Roy

Question Type : MCQ

Question ID : 264330137961

Option 1 ID : 264330540451

Option 2 ID : 264330540453

Option 3 ID : 264330540454

Option 4 ID : 264330540452

Status : Answered

Chosen Option : 1

Q.21 _____ are formed when an opaque objects comes in the path of light.

- Ans
- ☒ 1. Mirror reflections
 - ☒ 2. Shadows
 - ☒ 3. Translucent rays
 - ☒ 4. Transparent rays

Question Type : MCQ

Question ID : 264330134610

Option 1 ID : 264330527396

Option 2 ID : 264330527395

Option 3 ID : 264330527398

Option 4 ID : 264330527397

Status : Answered

Chosen Option : 2

Q.22 Which ministry organised a month-long programme called the 'Kashi Tamil Sangamam' in 2022?

- Ans
- ☒ 1. Ministry of Tribal Affairs
 - ☒ 2. Ministry of Culture
 - ☒ 3. Ministry of External Affairs
 - ☒ 4. Ministry of Education

Question Type : MCQ

Question ID : 264330134644

Option 1 ID : 264330527532

Option 2 ID : 264330527534

Option 3 ID : 264330527533

Option 4 ID : 264330527531

Status : Answered

Chosen Option : 2

Q.23 Who received the Nobel Prize in Literature 2022?

- Ans
- ☒ 1. Peter Handke
 - ☒ 2. Olga Tokarczuk
 - ☒ 3. Abdulrazak Gurnah
 - ☒ 4. Annie Ernaux

Question Type : MCQ

Question ID : 264330134602

Option 1 ID : 264330527366

Option 2 ID : 264330527363

Option 3 ID : 264330527365

Option 4 ID : 264330527364

Status : Answered

Chosen Option : 4

Q.24 Who among the following is famous for playing the musical instrument 'Sitar'?

- Ans ☒ 1. Vilayat Khan
☒ 2. Zakir Hussian
☒ 3. Surojeet Chatterji
☒ 4. Ali Akbar Khan

Question Type : MCQ
 Question ID : 264330134662
 Option 1 ID : 264330527603
 Option 2 ID : 264330527606
 Option 3 ID : 264330527605
 Option 4 ID : 264330527604
 Status : Answered
 Chosen Option : 1

Q.25 International year of freshwater was observed in which year?

- Ans ☒ 1. 2000
☒ 2. 2002
☒ 3. 2003
☒ 4. 2001

Question Type : MCQ
 Question ID : 264330134634
 Option 1 ID : 264330527491
 Option 2 ID : 264330527493
 Option 3 ID : 264330527494
 Option 4 ID : 264330527492
 Status : Not Answered
 Chosen Option : --

Section : English Language and Comprehension

Q.1 A sentence has been given with a blank to be filled with an appropriate option. Choose the correct alternative.

The storm passed _____, but the night remained warm.

- Ans ☒ 1. quickest
☒ 2. quicker
☒ 3. quickly
☒ 4. quick

Question Type : MCQ
 Question ID : 264330134777
 Option 1 ID : 264330528055
 Option 2 ID : 264330528056
 Option 3 ID : 264330528058
 Option 4 ID : 264330528057
 Status : Answered
 Chosen Option : 4

Q.2 Select the word segment that substitutes (replaces) the bracketed word segment correctly and completes the sentence meaningfully. Select the option 'no correction required' if the sentence is correct as given.

The tourists (rendered to the) museum on time.

- Ans**
- ☒ 1. appeared at the
 - ☒ 2. occurred to the
 - ☒ 3. No correction required
 - ☒ 4. arrived at the

Question Type : MCQ
 Question ID : 264330136243
 Option 1 ID : 264330533759
 Option 2 ID : 264330533760
 Option 3 ID : 264330533762
 Option 4 ID : 264330533761
 Status : Answered
 Chosen Option : 4

Q.3 Improve the underlined part of the sentence. Choose 'No improvement' as an answer if the sentence is grammatically correct.

The number of homes with running watered has been rising sharply since 1985.

- Ans**
- ☒ 1. with run water
 - ☒ 2. with running water
 - ☒ 3. of ran watered
 - ☒ 4. No improvement

Question Type : MCQ
 Question ID : 264330134802
 Option 1 ID : 264330528151
 Option 2 ID : 264330528152
 Option 3 ID : 264330528153
 Option 4 ID : 264330528154
 Status : Answered
 Chosen Option : 2

Q.4 Select the most appropriate option to fill in the blank.

Unless you complete your school education, you cannot get yourself _____ into a college.

- Ans**
- ☒ 1. advanced
 - ☒ 2. enrolled
 - ☒ 3. mopped
 - ☒ 4. accommodated

Question Type : MCQ
 Question ID : 264330134796
 Option 1 ID : 264330528129
 Option 2 ID : 264330528127
 Option 3 ID : 264330528130
 Option 4 ID : 264330528128
 Status : Answered
 Chosen Option : 2

Q.5 Find the part of the given sentence that has an error in it. If there is no error, choose 'No error'.

No matter how mountains are formed, they eventually becomes too heavy and succumb to gravity.

- Ans** ☒ 1. formed, they eventually becomes
- ☐ 2. No matter how mountains are
- ☐ 3. too heavy and succumb to gravity.
- ☐ 4. No error

Question Type : **MCQ**

Question ID : **264330134773**

Option 1 ID : **264330528040**

Option 2 ID : **264330528039**

Option 3 ID : **264330528041**

Option 4 ID : **264330528042**

Status : **Answered**

Chosen Option : **1**

Q.6 In the following question, out of the given four alternatives, select the alternative which best expresses the meaning of the Idiom/Phrase.

Dead men's shoes

- Ans** ☐ 1. Making oneself available for all the tasks being assigned
- ☐ 2. A career where a lot of cheques are signed
- ☒ 3. Job that one takes over from somebody who has left unexpectedly or died
- ☐ 4. Acquiring the wealth of a dead man through malpractices

Question Type : **MCQ**

Question ID : **264330134792**

Option 1 ID : **264330528111**

Option 2 ID : **264330528112**

Option 3 ID : **264330528113**

Option 4 ID : **264330528114**

Status : **Answered**

Chosen Option : **4**

Q.7 Choose the word that means the same as the given word.

Arrogance

- Ans** ☐ 1. Inhibition
- ☐ 2. Bashful
- ☒ 3. Dominance
- ☐ 4. Diffidence

Question Type : **MCQ**

Question ID : **264330134762**

Option 1 ID : **264330527997**

Option 2 ID : **264330527998**

Option 3 ID : **264330527995**

Option 4 ID : **264330527996**

Status : **Answered**

Chosen Option : **2**

Q.8 Improve the underlined part of the sentence. Choose 'No improvement' as an answer if the sentence is grammatically correct.
Richard Dawkins written the foreword to the second edition of the book.

- Ans ☒ 1. wrote the foreword
☒ 2. will wrote the foreword
☒ 3. write the foreword
☒ 4. No improvement

Question Type : MCQ
 Question ID : 264330134453
 Option 1 ID : 264330526784
 Option 2 ID : 264330526785
 Option 3 ID : 264330526783
 Option 4 ID : 264330526786
 Status : Answered
 Chosen Option : 2

Q.9 Identify the segment that contains a grammatical error. If there is no error, select 'No error'.
Before he could devote many more / thought to the matter, Pranav / had stepped up to him.

- Ans ☒ 1. Before he could devote many more
☒ 2. thought to the matter, Pranav
☒ 3. had stepped up to him.
☒ 4. No error

Question Type : MCQ
 Question ID : 264330136240
 Option 1 ID : 264330533747
 Option 2 ID : 264330533748
 Option 3 ID : 264330533749
 Option 4 ID : 264330533750
 Status : Answered
 Chosen Option : 3

Q.10 Select the appropriate synonym for the underlined word.
There is no need to attack our guest.

- Ans ☒ 1. generate
☒ 2. assault
☒ 3. mark
☒ 4. adore

Question Type : MCQ
 Question ID : 264330134787
 Option 1 ID : 264330528094
 Option 2 ID : 264330528093
 Option 3 ID : 264330528091
 Option 4 ID : 264330528092
 Status : Answered
 Chosen Option : 2

Q.11 A sentence has been given with a blank to be filled with an appropriate option. Choose the correct alternative.

Oak trees do not use leaves to make food _____ the winter.

- Ans
- ☒ 1. while
 - ☒ 2. within
 - ☒ 3. during
 - ☒ 4. by

Question Type : MCQ

Question ID : 264330134752

Option 1 ID : 264330527961

Option 2 ID : 264330527962

Option 3 ID : 264330527960

Option 4 ID : 264330527959

Status : Answered

Chosen Option : 3

Q.12 Choose the incorrectly spelt word.

- Ans
- ☒ 1. Maintaen
 - ☒ 2. Boring
 - ☒ 3. Stupid
 - ☒ 4. Gang

Question Type : MCQ

Question ID : 264330134793

Option 1 ID : 264330528118

Option 2 ID : 264330528115

Option 3 ID : 264330528117

Option 4 ID : 264330528116

Status : Answered

Chosen Option : 1

Q.13 Choose the sentence with no spelling error.

- Ans
- ☒ 1. He stuod outside the bathroom door.
 - ☒ 2. He stood outside the bathroom door.
 - ☒ 3. He stood outside the bathroom door.
 - ☒ 4. He stood outside the bathrum door.

Question Type : MCQ

Question ID : 264330134742

Option 1 ID : 264330527919

Option 2 ID : 264330527921

Option 3 ID : 264330527922

Option 4 ID : 264330527920

Status : Answered

Chosen Option : 3

Q.14 Choose the word that can substitute the given group of words.

One who hates war, loves peace

- Ans ☒ 1. Pacifist
☒ 2. Desecrater
☒ 3. Fatalist
☒ 4. Conformist

Question Type : MCQ
 Question ID : 264330134733
 Option 1 ID : 264330527886
 Option 2 ID : 264330527883
 Option 3 ID : 264330527884
 Option 4 ID : 264330527885
 Status : Answered
 Chosen Option : 1

Q.15 Choose the word that is opposite in meaning to the given word.

Lordly

- Ans ☒ 1. Despair
☒ 2. Arrogant
☒ 3. Ignoble
☒ 4. Saucy

Question Type : MCQ
 Question ID : 264330134763
 Option 1 ID : 264330528002
 Option 2 ID : 264330527999
 Option 3 ID : 264330528000
 Option 4 ID : 264330528001
 Status : Answered
 Chosen Option : 4

Q.16 In the following question, out of the given four alternatives, select the alternative which best expresses the meaning of the Idiom/Phrase.

The lion's share

- Ans ☒ 1. Life with no regrets
☒ 2. To lose a big amount of money
☒ 3. Big success
☒ 4. The largest portion

Question Type : MCQ
 Question ID : 264330134739
 Option 1 ID : 264330527908
 Option 2 ID : 264330527910
 Option 3 ID : 264330527909
 Option 4 ID : 264330527907
 Status : Answered
 Chosen Option : 4

Q.17 Find the part of the given sentence that has an error in it. If there is no error, choose 'No error'.
Black holes can has powerful effects on their surroundings.

- Ans ☒ 1. has powerful effects
☒ 2. No error
☒ 3. on their surroundings.
☒ 4. Black holes can

Question Type : MCQ
Question ID : 264330134425
Option 1 ID : 264330526676
Option 2 ID : 264330526678
Option 3 ID : 264330526677
Option 4 ID : 264330526675
Status : Answered
Chosen Option : 1

Q.18 Select the most appropriate option to fill in the blank.

The priest puts some _____ water on the child's head.

- Ans ☒ 1. hairy
☒ 2. holy
☒ 3. haughty
☒ 4. wholly

Question Type : MCQ
Question ID : 264330134743
Option 1 ID : 264330527923
Option 2 ID : 264330527924
Option 3 ID : 264330527926
Option 4 ID : 264330527925
Status : Answered
Chosen Option : 2

Q.19 Select the appropriate antonym for the underlined word.

The freedom to browse a secure and accountable online space will be compromised.

- Ans ☒ 1. indebted
☒ 2. amicable
☒ 3. irresponsible
☒ 4. liable

Question Type : MCQ
Question ID : 264330134790
Option 1 ID : 264330528104
Option 2 ID : 264330528106
Option 3 ID : 264330528105
Option 4 ID : 264330528103
Status : Answered
Chosen Option : 3

Q.20 Choose the word that can substitute the given group of words.

An exact copy of handwriting, printing

- Ans
- ☒ 1. Platitude
 - ☒ 2. Maiden
 - ☒ 3. Potable
 - ☒ 4. Facsimile

Question Type : MCQ
Question ID : 264330134786
Option 1 ID : 264330528087
Option 2 ID : 264330528090
Option 3 ID : 264330528088
Option 4 ID : 264330528089
Status : Answered
Chosen Option : 4

Comprehension:

In the following passage some of the words have been deleted. Read the passage carefully and select the correct answer for the given blank out of the four alternatives.

In a gallery at the Metropolitan Museum of Art (1) _____ New York, paintings of a father and daughter (2) _____ face to face. Larger than life, the monumental portraits (3) _____ competing conceptions of royal power. The father, Henry VIII, (4) _____ directly at the viewer, conveying aggression through his wide stance, bulging leg muscles and (5) _____ padded clothing.

SubQuestion No : 21

Q.21 Select the most appropriate option to fill in blank number 1.

- Ans
- ☒ 1. to
 - ☒ 2. in
 - ☒ 3. on
 - ☒ 4. at

Question Type : MCQ
Question ID : 264330134754
Option 1 ID : 264330527963
Option 2 ID : 264330527965
Option 3 ID : 264330527964
Option 4 ID : 264330527966
Status : Answered
Chosen Option : 2

Comprehension:

In the following passage some of the words have been deleted. Read the passage carefully and select the correct answer for the given blank out of the four alternatives.

In a gallery at the Metropolitan Museum of Art (1) _____ New York, paintings of a father and daughter (2) _____ face to face. Larger than life, the monumental portraits (3) _____ competing conceptions of royal power. The father, Henry VIII, (4) _____ directly at the viewer, conveying aggression through his wide stance, bulging leg muscles and (5) _____ padded clothing.

SubQuestion No : 22

Q.22 Select the most appropriate option to fill in blank number 2.

- Ans
- ☒ 1. rest
 - ☒ 2. hang
 - ☒ 3. poised
 - ☒ 4. hanged

Question Type : MCQ

Question ID : 264330134755

Option 1 ID : 264330527967

Option 2 ID : 264330527968

Option 3 ID : 264330527970

Option 4 ID : 264330527969

Status : Answered

Chosen Option : 4

Comprehension:

In the following passage some of the words have been deleted. Read the passage carefully and select the correct answer for the given blank out of the four alternatives.

In a gallery at the Metropolitan Museum of Art (1) _____ New York, paintings of a father and daughter (2) _____ face to face. Larger than life, the monumental portraits (3) _____ competing conceptions of royal power. The father, Henry VIII, (4) _____ directly at the viewer, conveying aggression through his wide stance, bulging leg muscles and (5) _____ padded clothing.

SubQuestion No : 23

Q.23 Select the most appropriate option to fill in blank number 3.

- Ans
- ☒ 1. believe
 - ☒ 2. sell
 - ☒ 3. present
 - ☒ 4. settle

Question Type : MCQ

Question ID : 264330134756

Option 1 ID : 264330527974

Option 2 ID : 264330527972

Option 3 ID : 264330527973

Option 4 ID : 264330527971

Status : Answered

Chosen Option : 3

Comprehension:

In the following passage some of the words have been deleted. Read the passage carefully and select the correct answer for the given blank out of the four alternatives.

In a gallery at the Metropolitan Museum of Art (1) _____ New York, paintings of a father and daughter (2) _____ face to face. Larger than life, the monumental portraits (3) _____ competing conceptions of royal power. The father, Henry VIII, (4) _____ directly at the viewer, conveying aggression through his wide stance, bulging leg muscles and (5) _____ padded clothing.

SubQuestion No : 24

Q.24 Select the most appropriate option to fill in blank number 4.

- Ans
- ☒ 1. books
 - ☒ 2. shocks
 - ☒ 3. looks
 - ☒ 4. hooks

Question Type : MCQ
Question ID : 264330134757
Option 1 ID : 264330527976
Option 2 ID : 264330527975
Option 3 ID : 264330527977
Option 4 ID : 264330527978
Status : Answered
Chosen Option : 3

Comprehension:

In the following passage some of the words have been deleted. Read the passage carefully and select the correct answer for the given blank out of the four alternatives.

In a gallery at the Metropolitan Museum of Art (1) _____ New York, paintings of a father and daughter (2) _____ face to face. Larger than life, the monumental portraits (3) _____ competing conceptions of royal power. The father, Henry VIII, (4) _____ directly at the viewer, conveying aggression through his wide stance, bulging leg muscles and (5) _____ padded clothing.

SubQuestion No : 25

Q.25 Select the most appropriate option to fill in blank number 5.

- Ans
- ☒ 1. totally
 - ☒ 2. excessively
 - ☒ 3. commonly
 - ☒ 4. acutely

Question Type : MCQ
Question ID : 264330134758
Option 1 ID : 264330527979
Option 2 ID : 264330527982
Option 3 ID : 264330527980
Option 4 ID : 264330527981
Status : Answered
Chosen Option : 2