

Multi Tasking Non Technical Staff and Havaladar CBIC and CBN Examination 2022

Roll Number	
Candidate Name	
Venue Name	iON Digital Zone iDZ 1 Sector 62
Exam Date	15/05/2023
Exam Time	3:30 PM - 5:00 PM
Subject	MTS Non Tech Havaladar CBIC and CBN Examination 2022

Section : Numerical and Mathematical Ability

Q.1 In a match, average of runs scored by 7 players is 63. If the runs scored by 6 players are 130, 42, 24, 53, 45 and 54, then how many runs did the 7th player scored?

Ans ✓ 1. 93

✗ 2. 90

✗ 3. 85

✗ 4. 87

Question Type : MCQ

Question ID : 264330137157

Option 1 ID : 264330537274

Option 2 ID : 264330537272

Option 3 ID : 264330537271

Option 4 ID : 264330537273

Status : Answered

Chosen Option : 1

Q.2 A dealer purchased a washing machine for Rs. 6400. After allowing a discount of 20% on its marked price, he still gains 30%. Find the marked price of the washing machine.

Ans ✗ 1. Rs. 12,000

✓ 2. Rs. 10,400

✗ 3. Rs. 11,000

✗ 4. Rs. 13,000

Question Type : MCQ

Question ID : 264330135072

Option 1 ID : 264330529224

Option 2 ID : 264330529225

Option 3 ID : 264330529223

Option 4 ID : 264330529226

Status : Answered

Chosen Option : 2

Test Prime

**ALL EXAMS,
ONE SUBSCRIPTION**



70,000+
Mock Tests



**Personalised
Report Card**



**Unlimited
Re-Attempt**



600+
Exam Covered



**Previous Year
Papers**



**500%
Refund**



ATTEMPT FREE MOCK NOW

Q.3 Two boats go downstream in a river at a speed of 35 km/hr and 25 km/hr. The speed of the stream is 4 km/hr. The distance between both boats initially is 60 km. In how much time will they meet if the boats are going downstream?

- Ans**
- ☒ 1. 10 hours
 - ☒ 2. 13 hours
 - ☒ 3. 6 hours
 - ☒ 4. 8 hours

Question Type : **MCQ**
 Question ID : **264330135078**
 Option 1 ID : **264330529247**
 Option 2 ID : **264330529250**
 Option 3 ID : **264330529248**
 Option 4 ID : **264330529249**
 Status : **Answered**
 Chosen Option : **3**

Q.4 A train is moving at a uniform speed of 360 km/h. How far it will travel in 18 minutes?

- Ans**
- ☒ 1. 108 km
 - ☒ 2. 160 km
 - ☒ 3. 180 km
 - ☒ 4. 200 km

Question Type : **MCQ**
 Question ID : **264330135075**
 Option 1 ID : **264330529238**
 Option 2 ID : **264330529235**
 Option 3 ID : **264330529236**
 Option 4 ID : **264330529237**
 Status : **Answered**
 Chosen Option : **1**

Q.5 A sum was lent for one year at the rate of 16 percent per annum on compound interest (compounding annually). If the compounding had been done half yearly, then the interest would have increased by Rs. 64. What was the sum lent?

- Ans**
- ☒ 1. Rs. 10000
 - ☒ 2. Rs. 6000
 - ☒ 3. Rs. 14000
 - ☒ 4. Rs. 20000

Question Type : **MCQ**
 Question ID : **264330137614**
 Option 1 ID : **264330539065**
 Option 2 ID : **264330539064**
 Option 3 ID : **264330539066**
 Option 4 ID : **264330539063**
 Status : **Answered**
 Chosen Option : **1**

Q.6 What is the value of $\frac{126}{39} \times \left(\frac{78}{14} \div \frac{13}{91} \right) - \frac{45}{9}$?

- Ans ☒ 1. 121
☒ 2. 123
☒ 3. 143
☒ 4. 141

Question Type : MCQ
 Question ID : 264330139092
 Option 1 ID : 264330544975
 Option 2 ID : 264330544976
 Option 3 ID : 264330544978
 Option 4 ID : 264330544977
 Status : Answered
 Chosen Option : 1

Q.7 The average of 4 consecutive numbers is 35.5. Find the highest number among these numbers.

- Ans ☒ 1. 37
☒ 2. 36
☒ 3. 40
☒ 4. 39

Question Type : MCQ
 Question ID : 264330135067
 Option 1 ID : 264330529203
 Option 2 ID : 264330529205
 Option 3 ID : 264330529206
 Option 4 ID : 264330529204
 Status : Answered
 Chosen Option : 1

Q.8 A sum of Rs. 600 becomes Rs. 840 at simple interest in 4 years. In how many years will the sum of Rs. 1500 amounts to Rs. 2100 at the same rate of simple interest?

- Ans ☒ 1. 5 years
☒ 2. 4 years
☒ 3. 2 years
☒ 4. 3 years

Question Type : MCQ
 Question ID : 264330137634
 Option 1 ID : 264330539145
 Option 2 ID : 264330539146
 Option 3 ID : 264330539143
 Option 4 ID : 264330539144
 Status : Answered
 Chosen Option : 2

Q.9 Successive discounts of 15% and 30% are equivalent to how much percent of a single discount?

- Ans
- ☒ 1. 52.8%
 - ☒ 2. 20.5%
 - ☒ 3. 33.33%
 - ☒ 4. 40.5%

Question Type : MCQ
 Question ID : 264330135073
 Option 1 ID : 264330529228
 Option 2 ID : 264330529227
 Option 3 ID : 264330529229
 Option 4 ID : 264330529230
 Status : Answered
 Chosen Option : 4

Q.10 25 employees can finish work in 20 days. After how many days should 10 employees leave the job so that the work is finished in 30 days?

- Ans
- ☒ 1. 7 days
 - ☒ 2. 6 days
 - ☒ 3. 3 days
 - ☒ 4. 5 days

Question Type : MCQ
 Question ID : 264330135079
 Option 1 ID : 264330529253
 Option 2 ID : 264330529252
 Option 3 ID : 264330529251
 Option 4 ID : 264330529254
 Status : Answered
 Chosen Option : 4

Q.11 What is the value of 25 percent of 40 percent of $(\frac{2}{7})$ of 2100?

- Ans
- ☒ 1. 40
 - ☒ 2. 60
 - ☒ 3. 50
 - ☒ 4. 45

Question Type : MCQ
 Question ID : 264330137629
 Option 1 ID : 264330539124
 Option 2 ID : 264330539126
 Option 3 ID : 264330539125
 Option 4 ID : 264330539123
 Status : Answered
 Chosen Option : 2

Q.12 If the curved surface area of a solid cylinder is two-fifth of its total surface area, then what is the ratio of its diameter to its height?

- Ans
- ☐ 1. 2:5
 - ☐ 2. 1:2
 - ☐ 3. 2:3
 - ☒ 4. 3:1

Question Type : MCQ

Question ID : 264330138389

Option 1 ID : 264330542164

Option 2 ID : 264330542166

Option 3 ID : 264330542165

Option 4 ID : 264330542163

Status : Answered

Chosen Option : 4

Q.13 The value of $\frac{1}{8} \times \left[\frac{1}{5} \text{ of } \frac{11}{2} \div \left\{ \left(\frac{15}{3} - \frac{18}{6} \right) \right\} \right]$ is:

- Ans
- ☒ 1. $\frac{11}{160}$
 - ☐ 2. $\frac{11}{20}$
 - ☐ 3. $\frac{8}{11}$
 - ☐ 4. $\frac{11}{8}$

Question Type : MCQ

Question ID : 264330134082

Option 1 ID : 264330525354

Option 2 ID : 264330525351

Option 3 ID : 264330525352

Option 4 ID : 264330525353

Status : Answered

Chosen Option : 1

Q.14 The value of $12 \div (1/2) + \{(35 \div 7) \text{ of } 40\} + 20 - 15 \text{ of } 10$ is :

- Ans
- ☐ 1. 88
 - ☒ 2. 94
 - ☐ 3. 99
 - ☐ 4. 80

Question Type : MCQ

Question ID : 264330135064

Option 1 ID : 264330529193

Option 2 ID : 264330529192

Option 3 ID : 264330529191

Option 4 ID : 264330529194

Status : Answered

Chosen Option : 2

Q.15 If the cost price of an article is 80 percent of its selling price, then what is the profit percentage?

- Ans
- ☒ 1. 50 percent
 - ☒ 2. 33.33 percent
 - ☒ 3. 25 percent
 - ☒ 4. 30 percent

Question Type : MCQ

Question ID : 264330137328

Option 1 ID : 264330537940

Option 2 ID : 264330537939

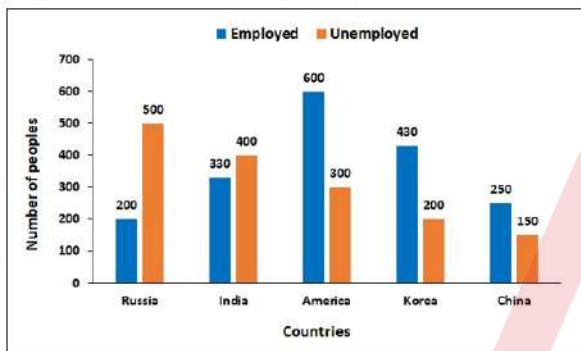
Option 3 ID : 264330537942

Option 4 ID : 264330537941

Status : Answered

Chosen Option : 3

Q.16 The bar graph shows the number of employed and unemployed people in 5 different countries. Find the ratio of unemployed people in India to employed people in Russia.



- Ans
- ☒ 1. 2 : 3
 - ☒ 2. 3 : 4
 - ☒ 3. 1 : 4
 - ☒ 4. 2 : 1

Question Type : MCQ

Question ID : 264330135082

Option 1 ID : 264330529264

Option 2 ID : 264330529265

Option 3 ID : 264330529266

Option 4 ID : 264330529263

Status : Answered

Chosen Option : 4

Q.17 The following table shows the number of students from 4 different schools playing different games. What is the ratio of the total students who played Basketball in School A and C together to the total students who played Football in school B and D together?

Schools	Games				
	Basketball	Football	Tennis	Cricket	Hockey
A	125	75	28	100	22
B	90	50	12	50	13
C	145	80	45	70	40
D	100	40	20	45	55

- Ans
- ☐ 1. 4:5
- ☐ 2. 2:5
- ☒ 3. 3:1
- ☐ 4. 2:3

Question Type : MCQ

Question ID : 264330134096

Option 1 ID : 264330525408

Option 2 ID : 264330525407

Option 3 ID : 264330525409

Option 4 ID : 264330525410

Status : Answered

Chosen Option : 3

Q.18 A alone can paint a house in 35 days and B alone can do it in 70 days. Along with C, they did the job in 10 days only. In how many days C alone can do the job?

- Ans
- ☐ 1. 40 days
- ☐ 2. 70/3 days
- ☒ 3. 70/4 days
- ☐ 4. 20 days

Question Type : MCQ

Question ID : 264330138384

Option 1 ID : 264330542146

Option 2 ID : 264330542143

Option 3 ID : 264330542145

Option 4 ID : 264330542144

Status : Answered

Chosen Option : 3

Q.19 If the circumference of a circle is 13.2 cm, then what is its radius?

- Ans
- ☐ 1. 1.7 cm
- ☐ 2. 6 cm
- ☐ 3. 21 cm
- ☒ 4. 2.1 cm

Question Type : MCQ

Question ID : 264330135083

Option 1 ID : 264330529268

Option 2 ID : 264330529267

Option 3 ID : 264330529269

Option 4 ID : 264330529270

Status : Answered

Chosen Option : 4

Q.20 A earns in march twice as much as in each of the other months. What is the ratio of his earnings in march to the annual earnings?

Ans ✓ 1. 2 : 13

✗ 2. 3 : 8

✗ 3. 4 : 9

✗ 4. 2 : 7

Question Type : MCQ

Question ID : 264330135074

Option 1 ID : 264330529231

Option 2 ID : 264330529233

Option 3 ID : 264330529234

Option 4 ID : 264330529232

Status : Answered

Chosen Option : 1

Section : Reasoning Ability and Problem Solving

Q.1 Select the option that is related to the third word in the same way as the second word is related to the first word.

Refute : Approve :: Admire : ?

Ans ✗ 1. Applaud

✗ 2. Proud

✗ 3. Appreciate

✓ 4. Criticize

Question Type : MCQ

Question ID : 264330134957

Option 1 ID : 264330528764

Option 2 ID : 264330528766

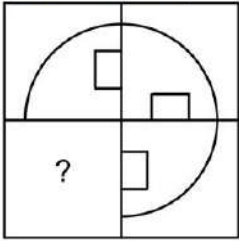
Option 3 ID : 264330528763

Option 4 ID : 264330528765

Status : Answered

Chosen Option : 4

Q.2 Select the option figure that will replace the question mark (?) in the figure given below to complete the pattern.
(rotation is not allowed)



Ans

- ☒ 1.
- ☒ 2.
- ☒ 3.
- ☒ 4.

Question Type : MCQ
Question ID : 264330134975
Option 1 ID : 264330528835
Option 2 ID : 264330528836
Option 3 ID : 264330528837
Option 4 ID : 264330528838
Status : Answered
Chosen Option : 2

Q.3 Three statements are given followed by two conclusions numbered I and II. Assuming the statements to be true, even if they seem to be at variance with commonly known facts, decide which of the conclusions logically follow(s) from the statements.

Statements:

Some words are short.

Some shorts are long.

All long are tree.

Conclusions:

I. Some tree are short.

II. Some tree are words.

- Ans**
- ☒ 1. Neither conclusion I nor II follows
 - ☒ 2. Both conclusions I and II follow
 - ☒ 3. Only conclusion II follows
 - ☒ 4. Only conclusion I follows

Question Type : MCQ

Question ID : 264330134966

Option 1 ID : 264330528802

Option 2 ID : 264330528801

Option 3 ID : 264330528800

Option 4 ID : 264330528799

Status : Answered

Chosen Option : 4

Q.4 In a certain code language, 'JUMP' is written as 'TILO' and 'GIRL' is written as 'FHQK'. How will 'LOVE' be written in that language?

- Ans**
- ☒ 1. KNWF
 - ☒ 2. KNWD
 - ☒ 3. KPUD
 - ☒ 4. KNUD

Question Type : MCQ

Question ID : 264330133490

Option 1 ID : 264330522994

Option 2 ID : 264330522993

Option 3 ID : 264330522991

Option 4 ID : 264330522992

Status : Answered

Chosen Option : 4

Q.5 Which of the following letter cluster will replace the question mark (?) in the given series?
CAM, DYL, EWK, FUJ, GSI, HQH, ?

- Ans**
- ☒ 1. FOG
 - ☒ 2. IOF
 - ☒ 3. IJG
 - ☒ 4. IOG

Question Type : MCQ

Question ID : 264330134954

Option 1 ID : 264330528752

Option 2 ID : 264330528751

Option 3 ID : 264330528753

Option 4 ID : 264330528754

Status : Answered

Chosen Option : 4

Q.6 Study the given pattern carefully and select the number that can replace the question mark (?) in it.

First row- 8, 96, 104

Second row- 11, 132, 143

Third row- 7, 84, ?

Ans ☒ 1. 88

☒ 2. 95

☒ 3. 91

☒ 4. 92

Question Type : **MCQ**

Question ID : **264330134970**

Option 1 ID : **264330528817**

Option 2 ID : **264330528818**

Option 3 ID : **264330528815**

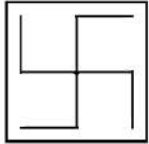
Option 4 ID : **264330528816**

Status : **Answered**

Chosen Option : **3**



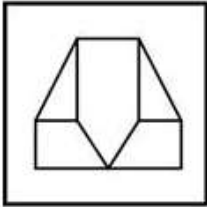
Q.7 Select the option figure in which the given figure (X) is embedded as its part (rotation is NOT allowed).



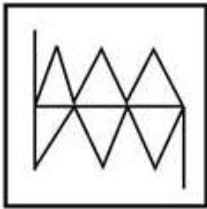
(X)

Ans

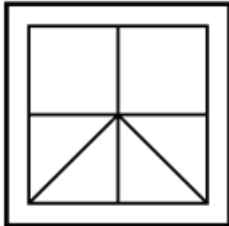
✗ 1.



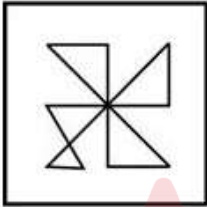
✗ 2.



✓ 3.



✗ 4.



Question Type : MCQ

Question ID : 264330133713

Option 1 ID : 264330523876

Option 2 ID : 264330523878

Option 3 ID : 264330523875

Option 4 ID : 264330523877

Status : Answered

Chosen Option : 3

Q.8 Select the option that is related to the third letter cluster in the same way as the second number is related to the first letter cluster.

CL : 36 :: FP : ?

Ans ✓ 1. 96

✗ 2. 88

✗ 3. 92

✗ 4. 49

Question Type : **MCQ**

Question ID : **264330134956**

Option 1 ID : **264330528762**

Option 2 ID : **264330528760**

Option 3 ID : **264330528761**

Option 4 ID : **264330528759**

Status : **Answered**

Chosen Option : **1**

Q.9 In a certain code language, 'FULLY' is coded as 'CPFYJ'. What is the code for 'GIVEN' in that code language?

Ans ✓ 1. RIZMK

✗ 2. RIZOK

✗ 3. RIZML

✗ 4. RIYMK

Question Type : **MCQ**

Question ID : **264330138462**

Option 1 ID : **264330542458**

Option 2 ID : **264330542457**

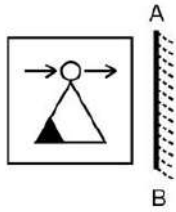
Option 3 ID : **264330542456**

Option 4 ID : **264330542455**

Status : **Answered**

Chosen Option : **1**

Q.10 Select the correct mirror image of the given figure when the mirror is placed at AB as shown below.



Ans

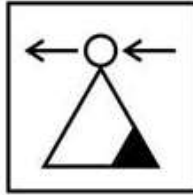
✗ 1.




✗ 2.



✓ 3.



✗ 4.



Question Type : MCQ

Question ID : 264330133714

Option 1 ID : 264330523880

Option 2 ID : 264330523882

Option 3 ID : 264330523881

Option 4 ID : 264330523879

Status : Answered

Chosen Option : 3

Q.11 Seven students H, I, J, K, L, M and N have all scored unique number of marks. H scored only more than N. Marks of three students were between the marks of J and I. I did not score the highest marks. How many students scored less than J?

Ans ✓ 1. 6

✗ 2. 3

✗ 3. 5

✗ 4. 4

Question Type : MCQ

Question ID : 264330134964

Option 1 ID : 264330528793

Option 2 ID : 264330528794

Option 3 ID : 264330528792

Option 4 ID : 264330528791

Status : Answered

Chosen Option : 1

Q.12 In a certain code language, 'ABOVE' is coded as 'DERYH'. What is the code for 'BELOW' in that code language?

- Ans**
- ☒ 1. EHORZ
 - ☐ 2. FHOSY
 - ☐ 3. EHPRY
 - ☐ 4. EHORY

Question Type : **MCQ**
 Question ID : **264330138502**
 Option 1 ID : **264330542618**
 Option 2 ID : **264330542616**
 Option 3 ID : **264330542615**
 Option 4 ID : **264330542617**
 Status : **Answered**
 Chosen Option : **1**

Q.13 Which two numbers should be interchanged to make the given equation correct?

$$12 \times 4 - 8 + 9 \div 3 = 32$$

- Ans**
- ☐ 1. 4 and 9
 - ☐ 2. 12 and 3
 - ☒ 3. 12 and 9
 - ☐ 4. 32 and 12

Question Type : **MCQ**
 Question ID : **264330134971**
 Option 1 ID : **264330528820**
 Option 2 ID : **264330528822**
 Option 3 ID : **264330528821**
 Option 4 ID : **264330528819**
 Status : **Answered**
 Chosen Option : **3**

Q.14 Two statements are given followed by two conclusions numbered I and II. Assuming the statements to be true, even if they seem to be at variance with commonly known facts, decide which of the conclusions logically follow(s) from the statements.

Statements:

Some horses are not trucks.

All horses are white.

Conclusions:

I. Some white are trucks.

II. Some horses being truck is a possibility.

- Ans**
- ☐ 1. Only conclusion I follows
 - ☐ 2. Neither conclusion I nor II follows
 - ☒ 3. Only conclusion II follows
 - ☐ 4. Both conclusions I and II follow

Question Type : **MCQ**
 Question ID : **264330134965**
 Option 1 ID : **264330528795**
 Option 2 ID : **264330528798**
 Option 3 ID : **264330528796**
 Option 4 ID : **264330528797**
 Status : **Answered**
 Chosen Option : **3**

Q.15 Select the option that is related to the third number in the same way as the second number is related to the first number.

483 : 331 :: 715 : ?

- Ans
- ☒ 1. 653
 - ☒ 2. 570
 - ☒ 3. 563
 - ☒ 4. 356

Question Type : MCQ

Question ID : 264330137552

Option 1 ID : 264330538815

Option 2 ID : 264330538817

Option 3 ID : 264330538818

Option 4 ID : 264330538816

Status : Answered

Chosen Option : 3

Q.16 Five girls namely B, H, O, M and S are seating in a circle facing the centre. S is sitting to the immediate left of O and the immediate right of B. M sits second to the left of S. Who sits to the immediate right of H?

- Ans
- ☒ 1. S
 - ☒ 2. M
 - ☒ 3. B
 - ☒ 4. O

Question Type : MCQ

Question ID : 264330134962

Option 1 ID : 264330528786

Option 2 ID : 264330528783

Option 3 ID : 264330528784

Option 4 ID : 264330528785

Status : Answered

Chosen Option : 2

Q.17 After interchanging the given two numbers what will be the values of equation (I) and (II) respectively?

8 and 4

I. $8 - 4 \times 6 + 3 + 7$

II. $8 \times 3 - 6 + 2 + 4$

- Ans
- ☒ 1. -5 and 20
 - ☒ 2. -4 and 18
 - ☒ 3. -5 and 17
 - ☒ 4. 20 and 18

Question Type : MCQ

Question ID : 264330137533

Option 1 ID : 264330538742

Option 2 ID : 264330538740

Option 3 ID : 264330538741

Option 4 ID : 264330538739

Status : Answered

Chosen Option : 3

Q.18 Which of the following numbers will replace the question mark (?) in the given series?

47, 49, 53, 55, 59, 61, 65, ?

- Ans
- ☒ 1. 56
 - ☒ 2. 76
 - ☒ 3. 67
 - ☒ 4. 69

Question Type : MCQ

Question ID : 264330134968

Option 1 ID : 264330528810

Option 2 ID : 264330528809

Option 3 ID : 264330528808

Option 4 ID : 264330528807

Status : Answered

Chosen Option : 3

Q.19 Six brothers K, L, M, N, O and S are standing in a column facing north. K is standing just behind N. O stands exactly between M and S. Only three brothers stand behind L. Who is standing just behind K?

- Ans
- ☒ 1. L
 - ☒ 2. S
 - ☒ 3. M
 - ☒ 4. N

Question Type : MCQ

Question ID : 264330134963

Option 1 ID : 264330528787

Option 2 ID : 264330528790

Option 3 ID : 264330528789

Option 4 ID : 264330528788

Status : Answered

Chosen Option : 1

Q.20 Which of the following numbers will replace the question mark (?) in the given series?

81, 243, 40.5, 121.5, 20.25, 60.75, ?

- Ans
- ☒ 1. 10.120
 - ☒ 2. 10.115
 - ☒ 3. 10.125
 - ☒ 4. 10.215

Question Type : MCQ

Question ID : 264330137550

Option 1 ID : 264330538809

Option 2 ID : 264330538808

Option 3 ID : 264330538810

Option 4 ID : 264330538807

Status : Answered

Chosen Option : 3

Q.1 Which of the following personality is associated with Aligarh movement?

- Ans ☒ 1. Syed Ahmed Khan
☒ 2. Muhammad Ali Jinnah
☒ 3. Abul Kalam Azad
☒ 4. Syed Amir Ali

Question Type : MCQ
 Question ID : 264330134072
 Option 1 ID : 264330525314
 Option 2 ID : 264330525313
 Option 3 ID : 264330525311
 Option 4 ID : 264330525312
 Status : Answered
 Chosen Option : 1

Q.2 Pradhan Mantri Kaushal Vikas Yojana (PMKVY) was started in which year?

- Ans ☒ 1. 2017
☒ 2. 2015
☒ 3. 2014
☒ 4. 2016

Question Type : MCQ
 Question ID : 264330134639
 Option 1 ID : 264330527514
 Option 2 ID : 264330527512
 Option 3 ID : 264330527511
 Option 4 ID : 264330527513
 Status : Answered
 Chosen Option : 1

Q.3 Gautama Buddha attained enlightenment under a peepal tree at _____.

- Ans ☒ 1. Varanasi
☒ 2. Bodh gaya
☒ 3. Ujjain
☒ 4. Patliputra

Question Type : MCQ
 Question ID : 264330134640
 Option 1 ID : 264330527518
 Option 2 ID : 264330527515
 Option 3 ID : 264330527517
 Option 4 ID : 264330527516
 Status : Answered
 Chosen Option : 2

Q.4 The Kandariya Mahadeva Temple was constructed in 999 A.D. by the king Dhangadeva of _____ dynasty.

- Ans ☒ 1. Chandela
☐ 2. Pala
☐ 3. Pallava
☐ 4. Chola

Question Type : MCQ

Question ID : 264330134641

Option 1 ID : 264330527521

Option 2 ID : 264330527519

Option 3 ID : 264330527522

Option 4 ID : 264330527520

Status : Answered

Chosen Option : 1

Q.5 As on 1st March 2023, which of the following is NOT a member country of ASEAN?

- Ans ☐ 1. Thailand
☐ 2. Indonesia
☒ 3. Sri Lanka
☐ 4. Malaysia

Question Type : MCQ

Question ID : 264330133943

Option 1 ID : 264330524795

Option 2 ID : 264330524798

Option 3 ID : 264330524796

Option 4 ID : 264330524797

Status : Marked For Review

Chosen Option : 3

Q.6 The Chhatrapati Shivaji Maharaj Terminus, was formerly known as _____.

- Ans ☐ 1. Elizabeth Terminus Station
☐ 2. James Terminus Station
☐ 3. George Terminus Station
☒ 4. Victoria Terminus Station

Question Type : MCQ

Question ID : 264330134621

Option 1 ID : 264330527441

Option 2 ID : 264330527439

Option 3 ID : 264330527442

Option 4 ID : 264330527440

Status : Answered

Chosen Option : 4

Q.7 Chhau dance is a blend of martial traditions, temple rituals etc. It is performed in which region of India?

- Ans**
- ✓ 1. Eastern
 - ✗ 2. Northern
 - ✗ 3. Western
 - ✗ 4. Southern

Question Type : **MCQ**
 Question ID : **264330134619**
 Option 1 ID : **264330527434**
 Option 2 ID : **264330527433**
 Option 3 ID : **264330527431**
 Option 4 ID : **264330527432**
 Status : **Answered**
 Chosen Option : **1**

Q.8 The Indian Census 2011 can be referred to as the _____ census operation after Indian independence.

- Ans**
- ✗ 1. eleventh
 - ✓ 2. seventh
 - ✗ 3. tenth
 - ✗ 4. ninth

Question Type : **MCQ**
 Question ID : **264330137905**
 Option 1 ID : **264330540227**
 Option 2 ID : **264330540230**
 Option 3 ID : **264330540229**
 Option 4 ID : **264330540228**
 Status : **Answered**
 Chosen Option : **2**

Q.9 Which was the first ancient Indian civilization that had systematic town planning and underground drainage systems?

- Ans**
- ✗ 1. Early Nubian civilization
 - ✗ 2. Later Vedic civilization
 - ✗ 3. Aegean civilization
 - ✓ 4. Indus valley civilization

Question Type : **MCQ**
 Question ID : **264330137690**
 Option 1 ID : **264330539368**
 Option 2 ID : **264330539369**
 Option 3 ID : **264330539370**
 Option 4 ID : **264330539367**
 Status : **Answered**
 Chosen Option : **4**

Q.10 What does Section 377 of the Indian Penal Code signifies?

- Ans
- ☐ 1. Triple talaq
 - ☐ 2. Surrogacy
 - ☒ 3. Criminalize unnatural offences
 - ☐ 4. Women temple entry

Question Type : MCQ

Question ID : 264330137687

Option 1 ID : 264330539358

Option 2 ID : 264330539356

Option 3 ID : 264330539355

Option 4 ID : 264330539357

Status : Marked For Review

Chosen Option : 1

Q.11 वायुमंडल की निम्नलिखित परतों में से किसका अर्थ "मिश्रण का क्षेत्र (region of mixing)" है?

- Ans
- ☐ 1. समताप मंडल (Stratosphere)
 - ☒ 2. क्षोभमंडल (Troposphere)
 - ☐ 3. बाह्य वायुमंडल (Thermosphere)
 - ☐ 4. मध्यमंडल (Mesosphere)

Question Type : MCQ

Question ID : 264330137719

Option 1 ID : 264330539486

Option 2 ID : 264330539485

Option 3 ID : 264330539483

Option 4 ID : 264330539484

Status : Answered

Chosen Option : 2

Q.12 Shovana Narayan is a renowned _____ dancer.

- Ans
- ☐ 1. Manipuri
 - ☐ 2. Kuchipudi
 - ☐ 3. Odissi
 - ☒ 4. Kathak

Question Type : MCQ

Question ID : 264330138240

Option 1 ID : 264330541569

Option 2 ID : 264330541568

Option 3 ID : 264330541567

Option 4 ID : 264330541570

Status : Marked For Review

Chosen Option : 3

Q.13 The Mahanadi river rises in the highlands of _____.

- Ans
- ☐ 1. Odisha
 - ☐ 2. Andhra Pradesh
 - ☒ 3. Chhattisgarh
 - ☐ 4. Bihar

Question Type : MCQ

Question ID : 264330134637

Option 1 ID : 264330527503

Option 2 ID : 264330527504

Option 3 ID : 264330527505

Option 4 ID : 264330527506

Status : Answered

Chosen Option : 1

Q.14 When was the Battle of Tukaroi fought where Akbar defeated Sultanate of Bengal and Bihar?

- Ans
- ☐ 1. 1564
 - ☐ 2. 1582
 - ☒ 3. 1575
 - ☐ 4. 1591

Question Type : MCQ

Question ID : 264330137725

Option 1 ID : 264330539508

Option 2 ID : 264330539510

Option 3 ID : 264330539509

Option 4 ID : 264330539507

Status : Answered

Chosen Option : 4

Q.15 Who were the prime accused in the Assembly bomb case that took place in 1929, Delhi?

- Ans
- ☐ 1. Udham Singh and Mangal Pandey
 - ☐ 2. Surya Sen and Ram Prasad
 - ☒ 3. Bhagat Singh and Batukeshwar Dutt
 - ☐ 4. Ram Prasad and Ashafaqulla

Question Type : MCQ

Question ID : 264330137701

Option 1 ID : 264330539412

Option 2 ID : 264330539411

Option 3 ID : 264330539413

Option 4 ID : 264330539414

Status : Answered

Chosen Option : 3

Q.16 _____ is the deepest landlocked and well-protected port.

- Ans
- ☒ 1. Kandla
 - ☒ 2. Mumbai
 - ☒ 3. Vishakhapatnam
 - ☒ 4. Paradwip

Question Type : MCQ
Question ID : 264330138230
Option 1 ID : 264330541528
Option 2 ID : 264330541529
Option 3 ID : 264330541527
Option 4 ID : 264330541530
Status : Answered
Chosen Option : 1

Q.17 The famous Nelapattu Bird Sanctuary is located in which of the following states?

- Ans
- ☒ 1. Tamil Nadu
 - ☒ 2. Andhra Pradesh
 - ☒ 3. Karnataka
 - ☒ 4. Madhya Pradesh

Question Type : MCQ
Question ID : 264330137718
Option 1 ID : 264330539480
Option 2 ID : 264330539481
Option 3 ID : 264330539479
Option 4 ID : 264330539482
Status : Answered
Chosen Option : 1

Q.18 Who among the following is a celebrated sarod maestro?

- Ans
- ☒ 1. Niladri Kumar
 - ☒ 2. Vilayat Khan
 - ☒ 3. N. Ramani
 - ☒ 4. Zarin Sharma

Question Type : MCQ
Question ID : 264330134625
Option 1 ID : 264330527456
Option 2 ID : 264330527457
Option 3 ID : 264330527455
Option 4 ID : 264330527458
Status : Answered
Chosen Option : 4

Q.19 The GDP estimation method measuring the aggregate value of factor payments is called _____.

- Ans
- ☒ 1. product method
 - ☒ 2. value added method
 - ☒ 3. expenditure method
 - ☒ 4. income method

Question Type : MCQ
 Question ID : 264330134629
 Option 1 ID : 264330527471
 Option 2 ID : 264330527474
 Option 3 ID : 264330527472
 Option 4 ID : 264330527473
 Status : Answered
 Chosen Option : 2

Q.20 In India, the practice of erecting megaliths began about _____ ago.

- Ans
- ☒ 1. 3000 years
 - ☒ 2. 2000 years
 - ☒ 3. 500 years
 - ☒ 4. 1000 years

Question Type : MCQ
 Question ID : 264330134069
 Option 1 ID : 264330525301
 Option 2 ID : 264330525299
 Option 3 ID : 264330525302
 Option 4 ID : 264330525300
 Status : Not Answered
 Chosen Option : --

Q.21 Which among the following elements does not belongs to the Halogens group?

- Ans
- ☒ 1. Astatine
 - ☒ 2. Helium
 - ☒ 3. Bromine
 - ☒ 4. Chlorine

Question Type : MCQ
 Question ID : 264330137716
 Option 1 ID : 264330539474
 Option 2 ID : 264330539473
 Option 3 ID : 264330539472
 Option 4 ID : 264330539471
 Status : Marked For Review
 Chosen Option : 1

Q.22 As announced in the Budget 2022, _____ Anganwadis will be upgraded for improving child health.

- Ans
- ☒ 1. 4 lakh
 - ☒ 2. 1 lakh
 - ☒ 3. 2 lakh
 - ☒ 4. 3 lakh

Question Type : MCQ
 Question ID : 264330138245
 Option 1 ID : 264330541590
 Option 2 ID : 264330541587
 Option 3 ID : 264330541588
 Option 4 ID : 264330541589
 Status : Answered
 Chosen Option : 3

Q.23 Which among the following team won the International Cricket Council (ICC) Men's T20 World Cup 2021?

- Ans
- ☒ 1. Australia
 - ☒ 2. England
 - ☒ 3. West Indies
 - ☒ 4. India

Question Type : MCQ
 Question ID : 264330137734
 Option 1 ID : 264330539546
 Option 2 ID : 264330539543
 Option 3 ID : 264330539545
 Option 4 ID : 264330539544
 Status : Answered
 Chosen Option : 1

Q.24 "Wide Angle" is an autobiography of which of the following sportsperson?

- Ans
- ☒ 1. Wasim Akram
 - ☒ 2. Yuvraj Singh
 - ☒ 3. Imran Khan
 - ☒ 4. Anil Kumble

Question Type : MCQ
 Question ID : 264330138238
 Option 1 ID : 264330541562
 Option 2 ID : 264330541560
 Option 3 ID : 264330541561
 Option 4 ID : 264330541559
 Status : Answered
 Chosen Option : 1

Q.25 Which religious group of people celebrates the Nowruz festival in India?

- Ans
- ☐ 1. Jews
 - ☐ 2. Buddhists
 - ☒ 3. Parsis
 - ☐ 4. Jains

Question Type : MCQ
Question ID : 264330134059
Option 1 ID : 264330525261
Option 2 ID : 264330525260
Option 3 ID : 264330525262
Option 4 ID : 264330525259
Status : Answered
Chosen Option : 3

Section : English Language and Comprehension

Q.1 Select the most appropriate word for the given group of words.

The sound of elephants

- Ans
- ☒ 1. Trumpet
 - ☐ 2. Quack
 - ☐ 3. Laurel
 - ☐ 4. Screech

Question Type : MCQ
Question ID : 264330136071
Option 1 ID : 264330533097
Option 2 ID : 264330533098
Option 3 ID : 264330533095
Option 4 ID : 264330533096
Status : Answered
Chosen Option : 1

Q.2 Choose the incorrectly spelt word.

- Ans
- ☐ 1. Shout
 - ☐ 2. Salute
 - ☒ 3. Belieif
 - ☐ 4. Crops

Question Type : MCQ
Question ID : 264330134767
Option 1 ID : 264330528018
Option 2 ID : 264330528015
Option 3 ID : 264330528017
Option 4 ID : 264330528016
Status : Answered
Chosen Option : 3

Q.3 Improve the underlined part of the sentence. Choose 'No improvement' as an answer if the sentence is grammatically correct.
She was fined of driving over the speed limit.

- Ans
- ☒ 1. fine of driving
 - ☒ 2. fined for drive
 - ☒ 3. fined for driving
 - ☒ 4. No improvement

Question Type : MCQ
Question ID : 264330134428
Option 1 ID : 264330526687
Option 2 ID : 264330526688
Option 3 ID : 264330526689
Option 4 ID : 264330526690
Status : Answered
Chosen Option : 3

Q.4 Choose the word that means the same as the given word.

Aptitude

- Ans
- ☒ 1. Attitude
 - ☒ 2. Talent
 - ☒ 3. Stress
 - ☒ 4. Faith

Question Type : MCQ
Question ID : 264330134736
Option 1 ID : 264330527895
Option 2 ID : 264330527897
Option 3 ID : 264330527898
Option 4 ID : 264330527896
Status : Answered
Chosen Option : 2

Q.5 Select the word segment that substitutes (replaces) the bracketed word segment correctly and completes the sentence meaningfully. Select the option 'no correction required' if the sentence is correct as given.

Apple has also introduced a (rule that seemed tie) to its recent dispute with Basecamp.

- Ans
- ☒ 1. rule that seems tied
 - ☒ 2. rule that seemingly tied
 - ☒ 3. No correction required
 - ☒ 4. rule which seemed tie

Question Type : MCQ
Question ID : 264330136242
Option 1 ID : 264330533757
Option 2 ID : 264330533756
Option 3 ID : 264330533758
Option 4 ID : 264330533755
Status : Answered
Chosen Option : 2

Q.6 Choose the sentence with no spelling error.

- Ans ☒ 1. The two are in most cases mutually exclusive.
☒ 2. The two are in most cases mutualyy exclusive.
☒ 3. The two are in most cases mutually exclusive.
☒ 4. The two are in most casies mutually exclusive.

Question Type : **MCQ**

Question ID : **264330134551**

Option 1 ID : **264330527162**

Option 2 ID : **264330527160**

Option 3 ID : **264330527159**

Option 4 ID : **264330527161**

Status : **Answered**

Chosen Option : **3**

Q.7 Find the part of the given sentence that has an error in it. If there is no error, choose 'No error'.

In humans, consumption of alcohol, stimulate brain cells to release mood-altering dopamine.

- Ans ☒ 1. release mood-altering dopamine.
☒ 2. In humans, consumption of alcohol,
☒ 3. stimulate brain cells to
☒ 4. No error

Question Type : **MCQ**

Question ID : **264330134747**

Option 1 ID : **264330527941**

Option 2 ID : **264330527939**

Option 3 ID : **264330527940**

Option 4 ID : **264330527942**

Status : **Answered**

Chosen Option : **3**

Q.8 In the following question, out of the given four alternatives, select the alternative which best expresses the meaning of the Idiom/Phrase.

To stretch one's legs

- Ans ☒ 1. To leave a place without permission
☒ 2. To go for a party
☒ 3. To go for a walk after you have been sitting for a long time
☒ 4. To measure one's worth

Question Type : **MCQ**

Question ID : **264330134766**

Option 1 ID : **264330528013**

Option 2 ID : **264330528014**

Option 3 ID : **264330528012**

Option 4 ID : **264330528011**

Status : **Answered**

Chosen Option : **3**

Q.9 A sentence has been given with a blank to be filled with an appropriate option. Choose the correct alternative.

I am looking forward to _____ you at our favourite restaurant.

- Ans**
- ☒ 1. meets
 - ☒ 2. meet
 - ☒ 3. met
 - ☒ 4. meeting

Question Type : **MCQ**
 Question ID : **264330134726**
 Option 1 ID : **264330527859**
 Option 2 ID : **264330527862**
 Option 3 ID : **264330527860**
 Option 4 ID : **264330527861**
 Status : **Answered**
 Chosen Option : **4**

Q.10 Identify the segment that contains a grammatical error. If there is no error, select 'No error'.

What evil magic does / it possess to draw the human / heart so powerful to it?

- Ans**
- ☒ 1. heart so powerful to it?
 - ☒ 2. What evil magic does
 - ☒ 3. No error
 - ☒ 4. it possess to draw the human

Question Type : **MCQ**
 Question ID : **264330136239**
 Option 1 ID : **264330533745**
 Option 2 ID : **264330533743**
 Option 3 ID : **264330533746**
 Option 4 ID : **264330533744**
 Status : **Answered**
 Chosen Option : **4**

Q.11 Select the most appropriate meaning of the given idiom.

Drastic times call for drastic measures

- Ans**
- ☒ 1. When you are extremely desperate you need to take extremely desperate actions
 - ☒ 2. Don't rely on it until you sure of it
 - ☒ 3. Something that ends at the last minute or last few seconds
 - ☒ 4. Do not pull all your resources in one possibility

Question Type : **MCQ**
 Question ID : **264330136077**
 Option 1 ID : **264330533121**
 Option 2 ID : **264330533120**
 Option 3 ID : **264330533122**
 Option 4 ID : **264330533119**
 Status : **Answered**
 Chosen Option : **1**

Q.12 A sentence has been given with a blank to be filled with an appropriate option. Choose the correct alternative.

There is definitely _____ he is not telling me.

- Ans
- ☒ 1. everything
 - ☒ 2. something
 - ☐ 3. somebody
 - ☐ 4. anything

Question Type : MCQ
Question ID : 264330134751
Option 1 ID : 264330527958
Option 2 ID : 264330527955
Option 3 ID : 264330527956
Option 4 ID : 264330527957
Status : Answered
Chosen Option : 2

Q.13 Select the appropriate antonym for the underlined word.

Megan, my precious darling, where is the kettle?

- Ans
- ☒ 1. detested
 - ☐ 2. expensive
 - ☐ 3. beloved
 - ☐ 4. steep

Question Type : MCQ
Question ID : 264330134764
Option 1 ID : 264330528006
Option 2 ID : 264330528004
Option 3 ID : 264330528003
Option 4 ID : 264330528005
Status : Answered
Chosen Option : 1

Q.14 Select the appropriate synonym for the underlined word.

Immediate relocation is your best course of action.

- Ans
- ☐ 1. emergence
 - ☐ 2. ending
 - ☐ 3. expiration
 - ☒ 4. migration

Question Type : MCQ
Question ID : 264330134761
Option 1 ID : 264330527993
Option 2 ID : 264330527994
Option 3 ID : 264330527992
Option 4 ID : 264330527991
Status : Answered
Chosen Option : 4

Q.15 Select the most appropriate antonym of the given word.

Wicked

- Ans ☒ 1. Admirable
☒ 2. Sarcastic
☒ 3. Infernal
☒ 4. Dissent

Question Type : MCQ
 Question ID : 264330136049
 Option 1 ID : 264330533012
 Option 2 ID : 264330533011
 Option 3 ID : 264330533014
 Option 4 ID : 264330533013
 Status : Answered
 Chosen Option : 1

Q.16 Select the most appropriate option to fill in the blank.
 All the companies make an _____ to be seen and heard within communities.

- Ans ☒ 1. establishment
☒ 2. effort
☒ 3. excuse
☒ 4. aisle

Question Type : MCQ
 Question ID : 264330134552
 Option 1 ID : 264330527164
 Option 2 ID : 264330527165
 Option 3 ID : 264330527166
 Option 4 ID : 264330527163
 Status : Answered
 Chosen Option : 2

Q.17 Improve the underlined part of the sentence. Choose 'No improvement' as an answer if the sentence is grammatically correct.

Since 1950 the number of children in secondary schools has been increasing noticeably.

- Ans ☒ 1. No improvement
☒ 2. have increasingly noticeably
☒ 3. has been increasing noticeably
☒ 4. increasingly noticeable

Question Type : MCQ
 Question ID : 264330134776
 Option 1 ID : 264330528054
 Option 2 ID : 264330528052
 Option 3 ID : 264330528051
 Option 4 ID : 264330528053
 Status : Answered
 Chosen Option : 3

Q.18 Select the most appropriate option to fill in the blank.

Jacqueline represents retirement as the final result of a long course of dissatisfaction with _____ life.

- Ans
- ☒ 1. joyful
 - ☒ 2. mundane
 - ☒ 3. barbaric
 - ☒ 4. divine

Question Type : MCQ
Question ID : 264330134770
Option 1 ID : 264330528027
Option 2 ID : 264330528028
Option 3 ID : 264330528030
Option 4 ID : 264330528029
Status : Answered
Chosen Option : 2

Q.19 Find the part of the given sentence that has an error in it. If there is no error, choose 'No error'.

I spend a lot of my time at work helping my customers find an best outfit.

- Ans
- ☒ 1. No error
 - ☒ 2. I spend a lot of
 - ☒ 3. my time at work helping my
 - ☒ 4. customers find an best outfit.

Question Type : MCQ
Question ID : 264330134745
Option 1 ID : 264330527934
Option 2 ID : 264330527931
Option 3 ID : 264330527932
Option 4 ID : 264330527933
Status : Answered
Chosen Option : 4

Q.20 Choose the word that can substitute the given group of words.

Departure from common rule

- Ans
- ☒ 1. Anomaly
 - ☒ 2. Quixotic
 - ☒ 3. Pragmatic
 - ☒ 4. Stupor

Question Type : MCQ
Question ID : 264330134760
Option 1 ID : 264330527990
Option 2 ID : 264330527988
Option 3 ID : 264330527987
Option 4 ID : 264330527989
Status : Answered
Chosen Option : 1

Comprehension:

In the following passage some words have been deleted. Fill in the blanks with the help of the alternatives given. Select the most appropriate option for each number.

In the early 1920's, settlers came to Alaska looking for (1) _____. They travelled by boat to the coastal towns of Seward and Knik, and from there by land into the gold fields. The trail they used to (2) _____ inland is known today as the Iditarod Trail, one of the National Historic Trails designated (3) _____ the Congress of the United States. The Iditarod Trail quickly became a major thoroughfare in Alaska, as the mail and supplies were (4) _____ across this trail. People also used it to get from place to place, including the priests, ministers, and judges who had to travel between villages. In the winter, the settlers' only means of travel down this trail was via dog (5) _____.

SubQuestion No : 21

Q.21 Select the most appropriate option to fill in the blank No. 1.

- Ans ☒ 1. copper
☒ 2. gold
☒ 3. iron
☒ 4. silver

Question Type : MCQ

Question ID : 264330136040

Option 1 ID : 264330532975

Option 2 ID : 264330532978

Option 3 ID : 264330532976

Option 4 ID : 264330532977

Status : Answered

Chosen Option : 2

Comprehension:

In the following passage some words have been deleted. Fill in the blanks with the help of the alternatives given. Select the most appropriate option for each number.

In the early 1920's, settlers came to Alaska looking for (1) _____. They travelled by boat to the coastal towns of Seward and Knik, and from there by land into the gold fields. The trail they used to (2) _____ inland is known today as the Iditarod Trail, one of the National Historic Trails designated (3) _____ the Congress of the United States. The Iditarod Trail quickly became a major thoroughfare in Alaska, as the mail and supplies were (4) _____ across this trail. People also used it to get from place to place, including the priests, ministers, and judges who had to travel between villages. In the winter, the settlers' only means of travel down this trail was via dog (5) _____.

SubQuestion No : 22

Q.22 Select the most appropriate option to fill in the blank No. 2.

- Ans ☒ 1. submerge
☒ 2. travel
☒ 3. locate
☒ 4. navigate

Question Type : MCQ

Question ID : 264330136041

Option 1 ID : 264330532981

Option 2 ID : 264330532979

Option 3 ID : 264330532982

Option 4 ID : 264330532980

Status : Answered

Chosen Option : 2

Comprehension:

In the following passage some words have been deleted. Fill in the blanks with the help of the alternatives given. Select the most appropriate option for each number.

In the early 1920's, settlers came to Alaska looking for (1) _____. They travelled by boat to the coastal towns of Seward and Knik, and from there by land into the gold fields. The trail they used to (2) _____ inland is known today as the Iditarod Trail, one of the National Historic Trails designated (3) _____ the Congress of the United States. The Iditarod Trail quickly became a major thoroughfare in Alaska, as the mail and supplies were (4) _____ across this trail. People also used it to get from place to place, including the priests, ministers, and judges who had to travel between villages. In the winter, the settlers' only means of travel down this trail was via dog (5) _____.

SubQuestion No : 23

Q.23 Select the most appropriate option to fill in the blank No. 3.

Ans ☒ 1. by

☐ 2. in

☐ 3. of

☐ 4. at

Question Type : MCQ

Question ID : 264330136042

Option 1 ID : 264330532986

Option 2 ID : 264330532984

Option 3 ID : 264330532985

Option 4 ID : 264330532983

Status : Answered

Chosen Option : 4

Comprehension:

In the following passage some words have been deleted. Fill in the blanks with the help of the alternatives given. Select the most appropriate option for each number.

In the early 1920's, settlers came to Alaska looking for (1) _____. They travelled by boat to the coastal towns of Seward and Knik, and from there by land into the gold fields. The trail they used to (2) _____ inland is known today as the Iditarod Trail, one of the National Historic Trails designated (3) _____ the Congress of the United States. The Iditarod Trail quickly became a major thoroughfare in Alaska, as the mail and supplies were (4) _____ across this trail. People also used it to get from place to place, including the priests, ministers, and judges who had to travel between villages. In the winter, the settlers' only means of travel down this trail was via dog (5) _____.

SubQuestion No : 24

Q.24 Select the most appropriate option to fill in the blank No. 4.

Ans ☒ 1. carried

☐ 2. deported

☐ 3. imported

☐ 4. transported

Question Type : MCQ

Question ID : 264330136043

Option 1 ID : 264330532987

Option 2 ID : 264330532989

Option 3 ID : 264330532988

Option 4 ID : 264330532990

Status : Answered

Chosen Option : 4

Comprehension:

In the following passage some words have been deleted. Fill in the blanks with the help of the alternatives given. Select the most appropriate option for each number.

In the early 1920's, settlers came to Alaska looking for (1) _____. They travelled by boat to the coastal towns of Seward and Knik, and from there by land into the gold fields. The trail they used to (2) _____ inland is known today as the Iditarod Trail, one of the National Historic Trails designated (3) _____ the Congress of the United States. The Iditarod Trail quickly became a major thoroughfare in Alaska, as the mail and supplies were (4) _____ across this trail. People also used it to get from place to place, including the priests, ministers, and judges who had to travel between villages. In the winter, the settlers' only means of travel down this trail was via dog (5) _____.

SubQuestion No : 25

Q.25 Select the most appropriate option to fill in the blank No. 5.

- Ans
- ☒ 1. smell
 - ☒ 2. sled
 - ☒ 3. bark
 - ☒ 4. boat

Question Type : MCQ

Question ID : 264330136044

Option 1 ID : 264330532994

Option 2 ID : 264330532991

Option 3 ID : 264330532993

Option 4 ID : 264330532992

Status : Answered

Chosen Option : 1

