

Multi Tasking Non Technical Staff and Havaladar CBIC and CBN Examination 2022

Roll Number	
Candidate Name	
Venue Name	R K Digital Computer Centre 1
Exam Date	15/06/2023
Exam Time	12:00 PM - 2:00 PM
Subject	MTS Non Tech Havaladar CBIC and CBN Examination 2022

Section : Numerical and Mathematical Ability

Q.1 The ratio of selling price to the cost price is 8 : 11. What is the loss percentage?

- Ans**
- ☒ 1. 33.33 percent
 - ☒ 2. 27.27 percent
 - ☒ 3. 26.66 percent
 - ☒ 4. 28.56 percent

Question Type : **MCQ**

Question ID : **264330139917**

Option 1 ID : **264330548048**

Option 2 ID : **264330548047**

Option 3 ID : **264330548049**

Option 4 ID : **264330548050**

Status : **Answered**

Chosen Option : **2**

Q.2 P, Q and R alone can do a piece of work in 5, 6 and 4 days respectively. All three of them began the work together but Q left 1 days before completion of the work. In how many days was the work completed?

- Ans**
- ☒ 1. 70/37 days
 - ☒ 2. 100/27 days
 - ☒ 3. 3 days
 - ☒ 4. 80/23 days

Question Type : **MCQ**

Question ID : **264330140154**

Option 1 ID : **264330548997**

Option 2 ID : **264330548996**

Option 3 ID : **264330548998**

Option 4 ID : **264330548995**

Status : **Answered**

Chosen Option : **1**

Test Prime

**ALL EXAMS,
ONE SUBSCRIPTION**



70,000+
Mock Tests



**Personalised
Report Card**



**Unlimited
Re-Attempt**



600+
Exam Covered



**Previous Year
Papers**



**500%
Refund**



ATTEMPT FREE MOCK NOW

Q.3 Two cubes each of edge 14 cm are joined to form a single cuboid. What is the volume of the cuboid formed?

- Ans**
- ☒ 1. 5022 cm³
 - ☒ 2. 5244 cm³
 - ☒ 3. 5666 cm³
 - ☒ 4. 5488 cm³

Question Type : **MCQ**

Question ID : **264330139964**

Option 1 ID : **264330548238**

Option 2 ID : **264330548237**

Option 3 ID : **264330548235**

Option 4 ID : **264330548236**

Status : **Answered**

Chosen Option : **4**

Q.4 Two successive discounts of 10 percent and 15 percent are given by Rajat on a shirt. If the marked price of the shirt is Rs. 800, then what is the value of discount?

- Ans**
- ☒ 1. Rs. 216
 - ☒ 2. Rs. 176
 - ☒ 3. Rs. 195
 - ☒ 4. Rs. 188

Question Type : **MCQ**

Question ID : **264330140225**

Option 1 ID : **264330549280**

Option 2 ID : **264330549282**

Option 3 ID : **264330549281**

Option 4 ID : **264330549279**

Status : **Answered**

Chosen Option : **4**

Q.5 In a box, the ratio of number of green stones to black stones is 5:8. If there are 24 black stones, then how many total stones are in the box?

- Ans**
- ☒ 1. 13
 - ☒ 2. 39
 - ☒ 3. 26
 - ☒ 4. 24

Question Type : **MCQ**

Question ID : **264330140830**

Option 1 ID : **264330551669**

Option 2 ID : **264330551668**

Option 3 ID : **264330551670**

Option 4 ID : **264330551667**

Status : **Answered**

Chosen Option : **2**

Q.6 If $P = 400$ and $Q = 600$, then P is how much percentage less than Q ?

- Ans
- ☐ 1. 22.2 percent
 - ☐ 2. 42.5 percent
 - ☒ 3. 33.33 percent
 - ☐ 4. 50 percent

Question Type : MCQ
 Question ID : 264330139593
 Option 1 ID : 264330546787
 Option 2 ID : 264330546789
 Option 3 ID : 264330546790
 Option 4 ID : 264330546788
 Status : Answered
 Chosen Option : 3

Q.7 The compound interest on Rs. 1,00,000 at 25% per annum for 2 years compounded annually is:

- Ans
- ☐ 1. Rs. 57650
 - ☐ 2. Rs. 50250
 - ☒ 3. Rs. 56250
 - ☐ 4. Rs. 52255

Question Type : MCQ
 Question ID : 264330139048
 Option 1 ID : 264330544802
 Option 2 ID : 264330544799
 Option 3 ID : 264330544801
 Option 4 ID : 264330544800
 Status : Answered
 Chosen Option : 4

Q.8 What is the value of $\sqrt{1.6 \times 1.6 + 0.9 \times 0.9 + 3.2 \times 0.9}$?

- Ans
- ☐ 1. 6.5
 - ☒ 2. 2.5
 - ☐ 3. 6.25
 - ☐ 4. 5.5

Question Type : MCQ
 Question ID : 264330140580
 Option 1 ID : 264330550671
 Option 2 ID : 264330550673
 Option 3 ID : 264330550672
 Option 4 ID : 264330550674
 Status : Answered
 Chosen Option : 2

Q.9 Two trains are moving in the same direction at the speed of 44 km/hr and 70 km/hr. The time taken by faster train to cross a man sitting in the slower train is 72 seconds. What will be the length of the faster train?

- Ans**
- ✓ 1. 520 metres
 - ✗ 2. 620 metres
 - ✗ 3. 450 metres
 - ✗ 4. 500 metres

Question Type : MCQ

Question ID : 264330140175

Option 1 ID : 264330549080

Option 2 ID : 264330549079

Option 3 ID : 264330549081

Option 4 ID : 264330549082

Status : Answered

Chosen Option : 1

Q.10 A sum of Rs. 3000 becomes Rs. 4320 in 2 years at a certain rate of compound interest (compounding annually). How much this sum will become after 4 years?

- Ans**
- ✗ 1. Rs. 7568.5
 - ✓ 2. Rs. 6220.8
 - ✗ 3. Rs. 6516.8
 - ✗ 4. Rs. 5128.5

Question Type : MCQ

Question ID : 264330140184

Option 1 ID : 264330549118

Option 2 ID : 264330549117

Option 3 ID : 264330549115

Option 4 ID : 264330549116

Status : Answered

Chosen Option : 2

Q.11 The length of a cuboid is 4 cm. If the breadth of the cuboid is four times of its length and height of the cuboid is twice of its length, then what is the lateral surface area of the cuboid?

- Ans**
- ✗ 1. 380 cm^2
 - ✗ 2. 440 cm^2
 - ✗ 3. 260 cm^2
 - ✓ 4. 320 cm^2

Question Type : MCQ

Question ID : 264330139621

Option 1 ID : 264330546902

Option 2 ID : 264330546900

Option 3 ID : 264330546899

Option 4 ID : 264330546901

Status : Answered

Chosen Option : 4

Q.12 The average weight of a group of 20 persons is 40 kg. The average weight of another group of 40 persons is K kg. If the average weight of all the 60 persons is 60 kg, then what is the value of K?

- Ans**
- ☒ 1. 80
 - ☒ 2. 60
 - ☒ 3. 40
 - ☒ 4. 70

Question Type : **MCQ**
 Question ID : **264330140243**
 Option 1 ID : **264330549353**
 Option 2 ID : **264330549352**
 Option 3 ID : **264330549351**
 Option 4 ID : **264330549354**
 Status : **Answered**
 Chosen Option : **4**

Q.13 What is the value of $\frac{180 \div 15 - 12 + 13}{4 \text{ of } 3 + 1}$?

- Ans**
- ☒ 1. 4
 - ☒ 2. 11
 - ☒ 3. 0
 - ☒ 4. 1

Question Type : **MCQ**
 Question ID : **264330139927**
 Option 1 ID : **264330548090**
 Option 2 ID : **264330548088**
 Option 3 ID : **264330548089**
 Option 4 ID : **264330548087**
 Status : **Answered**
 Chosen Option : **4**

Q.14 What is the HCF of 2.7 and 20.25?

- Ans**
- ☒ 1. 1.45
 - ☒ 2. 1.35
 - ☒ 3. 16.5
 - ☒ 4. 15.5

Question Type : **MCQ**
 Question ID : **264330140208**
 Option 1 ID : **264330549212**
 Option 2 ID : **264330549211**
 Option 3 ID : **264330549214**
 Option 4 ID : **264330549213**
 Status : **Answered**
 Chosen Option : **2**

Q.15 A alone can do a work in 25 days and B alone can do the same work in 40 days. They worked together and were paid a total of Rs. 5200. What is the difference between their shares?

- Ans**
- ☒ 1. Rs. 1000
 - ☒ 2. Rs. 800
 - ☒ 3. Rs. 1200
 - ☒ 4. Rs. 600

Question Type : **MCQ**

Question ID : **264330140213**

Option 1 ID : **264330549231**

Option 2 ID : **264330549232**

Option 3 ID : **264330549234**

Option 4 ID : **264330549233**

Status : **Answered**

Chosen Option : **3**

Q.16 Vyom purchased 40 dozen pens at the rate Rs. 56 per dozen. He sold 15 dozen at 20 percent profit and the remaining 25 dozen at 10 percent profit. What is his profit percentage?

- Ans**
- ☒ 1. 12.5 percent
 - ☒ 2. 16.66 percent
 - ☒ 3. 11.25 percent
 - ☒ 4. 13.75 percent

Question Type : **MCQ**

Question ID : **264330140590**

Option 1 ID : **264330550713**

Option 2 ID : **264330550711**

Option 3 ID : **264330550712**

Option 4 ID : **264330550714**

Status : **Answered**

Chosen Option : **4**

Q.17 The table given below shows the production of tea by two companies A and B in 6 years.

Companies	A	B
Y1	60	75
Y2	80	90
Y3	70	50
Y4	50	40
Y5	45	35
Y6	55	45

What is the sum of average production of tea by B in year Y1 and Y2 and the average production of tea by A in year Y3 and Y4?

- Ans**
- ☒ 1. 136.5
 - ☒ 2. 132.5
 - ☒ 3. 142.5
 - ☒ 4. 149.5

Question Type : **MCQ**

Question ID : **264330139909**

Option 1 ID : **264330548018**

Option 2 ID : **264330548015**

Option 3 ID : **264330548016**

Option 4 ID : **264330548017**

Status : **Answered**

Chosen Option : **3**

Q.18 A child has 50 paise coins and 1 rupee coins. The ratio of number of 50 paise and 1 rupee coins is 4 : 3. If he has an amount of Rs. 10, then how many 50 paise coins does he have?

- Ans**
- ☒ 1. 12
 - ☒ 2. 10
 - ☒ 3. 8
 - ☒ 4. 16

Question Type : **MCQ**

Question ID : **264330140202**

Option 1 ID : **264330549188**

Option 2 ID : **264330549187**

Option 3 ID : **264330549190**

Option 4 ID : **264330549189**

Status : **Answered**

Chosen Option : **3**

Q.19 If $26a + 26b = 234$, then what is the average of a and b?

- Ans**
- ☒ 1. 9
 - ☒ 2. 4.5
 - ☒ 3. 5.5
 - ☒ 4. 5

Question Type : **MCQ**

Question ID : **264330139934**

Option 1 ID : **264330548115**

Option 2 ID : **264330548118**

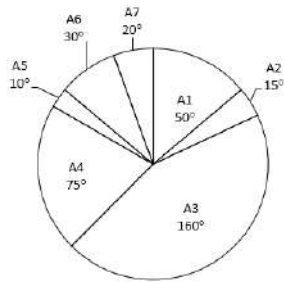
Option 3 ID : **264330548117**

Option 4 ID : **264330548116**

Status : **Answered**

Chosen Option : **2**

Q.20 The pie chart given below shows the expenditure incurred by a person on 7 articles. The total expenditure of all these 7 articles is 720. Expenditure incurred on a particular article is shown in terms of degree with respect to the total expenditure incurred in all these 7 articles.



What is the ratio of expenditure incurred on article A2 to expenditure incurred on article A7?

- Ans**
- ☒ 1. 2 : 3
 - ☒ 2. 3 : 4
 - ☐ 3. 4 : 3
 - ☐ 4. 5 : 3

Question Type : **MCQ**

Question ID : **264330140258**

Option 1 ID : **264330549412**

Option 2 ID : **264330549414**

Option 3 ID : **264330549411**

Option 4 ID : **264330549413**

Status : **Answered**

Chosen Option : **2**

Section : **Reasoning Ability and Problem Solving**

Q.1 There are seven students - Aaron, Bobby, Chaman, Daman, Shiva, Yogesh and Zaid -sitting in their classroom, facing in the southern direction in such a way that Aaron and Daman do not sit together. Zaid sits second to the left of Shiva. Bobby does not sit with Zaid. Shiva is fourth to the right of Chaman. Aaron and Bobby are not sitting together. Chaman sits in between Daman and Yogesh. Yogesh sits second to the left of the one who sits second to the left of Bobby. Who will sit at the extreme ends?

- Ans**
- ☒ 1. Bobby and Daman
 - ☐ 2. Chaman and Yogesh
 - ☐ 3. Zaid and Shiva
 - ☐ 4. Aaron and Bobby

Question Type : **MCQ**

Question ID : **264330140459**

Option 1 ID : **264330550217**

Option 2 ID : **264330550218**

Option 3 ID : **264330550215**

Option 4 ID : **264330550216**

Status : **Answered**

Chosen Option : **1**

Q.2 Two Statements are given followed by two conclusions numbered I and II. Assuming the statements to be true, even if they seem to be at variance with commonly known facts, decide which of the conclusions logically follow(s) from the statements.

Statements:

All sparrows are birds.

Some owls are birds.

Conclusions:

I. No sparrow is an owl.

II. Some sparrows are owls.

- Ans**
- ☒ 1. Only conclusion II follows.
 - ☒ 2. Both conclusions I and II follow.
 - ☒ 3. Only conclusion I follows.
 - ☒ 4. Either conclusion I or II follows.

Question Type : MCQ

Question ID : 264330140043

Option 1 ID : 264330548552

Option 2 ID : 264330548553

Option 3 ID : 264330548551

Option 4 ID : 264330548554

Status : Answered

Chosen Option : 1

Q.3 Which of the following numbers will replace the question mark (?) in the given series?

67, 57, 49, 43, 39, ?

- Ans**
- ☒ 1. 37
 - ☒ 2. 35
 - ☒ 3. 36
 - ☒ 4. 33

Question Type : MCQ

Question ID : 264330140044

Option 1 ID : 264330548557

Option 2 ID : 264330548556

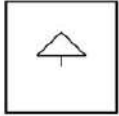
Option 3 ID : 264330548558

Option 4 ID : 264330548555

Status : Answered

Chosen Option : 1

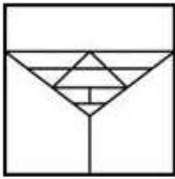
Q.4 Select the option figure in which the given figure (X) is embedded as its part (rotation is NOT allowed).



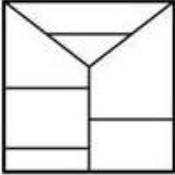
X

Ans

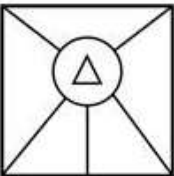
✓ 1.



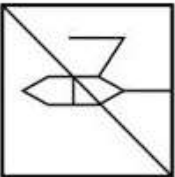
✗ 2.



✗ 3.



✗ 4.



Question Type : MCQ

Question ID : 264330140489

Option 1 ID : 264330550336

Option 2 ID : 264330550338

Option 3 ID : 264330550337

Option 4 ID : 264330550335

Status : Answered

Chosen Option : 1

Q.5 Study the given pattern carefully and select the number that can replace the question mark (?) in it.

First row- 47, 52, 57

Second row- 69, 74, 79

Third row- 86, 91, ?

Ans ✓ 1. 96

✗ 2. 94

✗ 3. 76

✗ 4. 232

Question Type : MCQ

Question ID : 264330140005

Option 1 ID : 264330548401

Option 2 ID : 264330548402

Option 3 ID : 264330548400

Option 4 ID : 264330548399

Status : Answered

Chosen Option : 1

Q.6 Select the option that is related to the sixth number in the same way as the first number is related to the second number and third number is related to fourth number.

5 : 124 :: 6 : 215 :: 2 : 511

- Ans**
- ☒ 1. 15
 - ☒ 2. 7
 - ☒ 3. 8
 - ☒ 4. 9

Question Type : **MCQ**

Question ID : **264330139581**

Option 1 ID : **264330546742**

Option 2 ID : **264330546739**

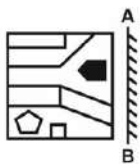
Option 3 ID : **264330546741**

Option 4 ID : **264330546740**

Status : **Answered**

Chosen Option : **3**

Q.7 If a mirror is placed on the line AB, then out of the option figures which figure will be the right image of the question figure?



Ans

☒ 1.



☒ 2.



☒ 3.



☒ 4.



Question Type : **MCQ**

Question ID : **264330139989**

Option 1 ID : **264330548338**

Option 2 ID : **264330548337**

Option 3 ID : **264330548336**

Option 4 ID : **264330548335**

Status : **Answered**

Chosen Option : **1**

Q.8 Which two numbers should be interchanged to make the given equation correct?

$$3 \times 7 - 5 + 2 = 10$$

- Ans
- ☒ 1. 10 and 7
 - ☒ 2. 7 and 5
 - ☒ 3. 3 and 5
 - ☒ 4. 3 and 2

Question Type : MCQ

Question ID : 264330138803

Option 1 ID : 264330543820

Option 2 ID : 264330543821

Option 3 ID : 264330543819

Option 4 ID : 264330543822

Status : Answered

Chosen Option : 2

Q.9 In the following question below are given some statements followed by some conclusions based on those statements.

Taking the given statements to be true even if they seem to be at variance from commonly known facts. Read all the conclusions and then decide which of the given conclusion logically follows the given statements.

Statements:

I. All M are N.

II. Some X are M.

Conclusions:

I. Some X are not N.

II. Some N are not M.

- Ans
- ☒ 1. Neither conclusion follows
 - ☒ 2. Only conclusion I follows
 - ☒ 3. Both conclusions I and II follows
 - ☒ 4. Only conclusion II follows

Question Type : MCQ

Question ID : 264330139557

Option 1 ID : 264330546646

Option 2 ID : 264330546643

Option 3 ID : 264330546645

Option 4 ID : 264330546644

Status : Answered

Chosen Option : 1

Q.10 Select the option that is related to the third letter cluster in the same way as the second letter cluster is related to the first letter cluster.

PEST : LAOP :: POOL : ?

- Ans
- ☒ 1. LJJH
 - ☒ 2. LKKG
 - ☒ 3. LKKH
 - ☒ 4. LKKI

Question Type : MCQ

Question ID : 264330141204

Option 1 ID : 264330553151

Option 2 ID : 264330553154

Option 3 ID : 264330553152

Option 4 ID : 264330553153

Status : Answered

Chosen Option : 3

Q.11 Select the option that is related to the third word in the same way as the second word is related to the first word.

Renowned : Famous :: Terrible : ?

- Ans**
- ☒ 1. Terrific
 - ☒ 2. Fabulous
 - ☒ 3. Awful
 - ☒ 4. Good

Question Type : **MCQ**

Question ID : **264330140414**

Option 1 ID : **264330550037**

Option 2 ID : **264330550038**

Option 3 ID : **264330550036**

Option 4 ID : **264330550035**

Status : **Answered**

Chosen Option : **3**

Q.12 In a certain code language, 'ROHINT' is written as '3' and 'BIHAR' is written as '3'. How will 'PRASHANT' be written in that language?

- Ans**
- ☒ 1. 5
 - ☒ 2. 2
 - ☒ 3. 6
 - ☒ 4. 4

Question Type : **MCQ**

Question ID : **264330140036**

Option 1 ID : **264330548524**

Option 2 ID : **264330548525**

Option 3 ID : **264330548526**

Option 4 ID : **264330548523**

Status : **Answered**

Chosen Option : **3**

Q.13 Which two numbers should be interchanged to make the given equation correct?

$$144 \div 24 \times 6 + 12 - 18 = 78$$

- Ans**
- ☒ 1. 6 and 18
 - ☒ 2. 24 and 12
 - ☒ 3. 24 and 6
 - ☒ 4. 24 and 18

Question Type : **MCQ**

Question ID : **264330140109**

Option 1 ID : **264330548818**

Option 2 ID : **264330548817**

Option 3 ID : **264330548815**

Option 4 ID : **264330548816**

Status : **Answered**

Chosen Option : **2**

Q.14 Five students Puneet, Karan, Chaman, Dinesh and Ronit having different ages study in same college. Ronit is elder than only Puneet and Karan. Dinesh is younger than only Chaman. Puneet is not the youngest. How many students are elder than Puneet?

- Ans**
- ☒ 1. 1
 - ☒ 2. 3
 - ☒ 3. 2
 - ☒ 4. 4

Question Type : **MCQ**

Question ID : **264330140480**

Option 1 ID : **264330550299**

Option 2 ID : **264330550301**

Option 3 ID : **264330550300**

Option 4 ID : **264330550302**

Status : **Answered**

Chosen Option : **2**

Q.15 A series is given with one term missing. Select the correct alternative from the given ones that will complete the series.

TABQ, VCET, XEHW, ZGKZ, ?

- Ans**
- ☒ 1. BJMC
 - ☒ 2. BIND
 - ☒ 3. BJNC
 - ☒ 4. BINC

Question Type : **MCQ**

Question ID : **264330139971**

Option 1 ID : **264330548264**

Option 2 ID : **264330548263**

Option 3 ID : **264330548266**

Option 4 ID : **264330548265**

Status : **Answered**

Chosen Option : **4**

Q.16 In a certain code language, 'SOUND' is written as '25' and 'ANIMAL' is written as '36'. How will 'COUNTRY' be written in that language?

- Ans**
- ☒ 1. 49
 - ☒ 2. 39
 - ☒ 3. 51
 - ☒ 4. 64

Question Type : **MCQ**

Question ID : **264330140475**

Option 1 ID : **264330550280**

Option 2 ID : **264330550279**

Option 3 ID : **264330550282**

Option 4 ID : **264330550281**

Status : **Answered**

Chosen Option : **1**

Q.17 In a certain code language, 'LOBSTER' is written as '121521920518'. How will 'CLIMATE' be written in that language?

- Ans**
- ☒ 1. 3139131305
 - ☒ 2. 3129131205
 - ☒ 3. 3129141206
 - ☒ 4. 3129141205

Question Type : **MCQ**

Question ID : **264330137793**

Option 1 ID : **264330539782**

Option 2 ID : **264330539781**

Option 3 ID : **264330539780**

Option 4 ID : **264330539779**

Status : **Answered**

Chosen Option : **2**

Q.18 In the following question, select the missing number of the given series.

35, 22, 43, 14, 51, ?

- Ans**
- ☒ 1. 6
 - ☒ 2. 18
 - ☒ 3. 20
 - ☒ 4. 12

Question Type : **MCQ**

Question ID : **264330139540**

Option 1 ID : **264330546578**

Option 2 ID : **264330546576**

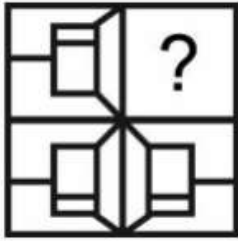
Option 3 ID : **264330546575**

Option 4 ID : **264330546577**

Status : **Answered**

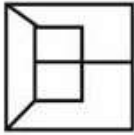
Chosen Option : **1**

Q.19 Which answer figure will complete the pattern in the question figure?

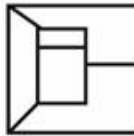


Ans

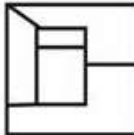
✗ 1.



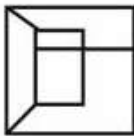
✓ 2.



✗ 3.



✗ 4.



Question Type : MCQ

Question ID : 264330140112

Option 1 ID : 264330548827

Option 2 ID : 264330548829

Option 3 ID : 264330548830

Option 4 ID : 264330548828

Status : Answered

Chosen Option : 2

Q.20 Pradeep, Nikku, Rinku, Sohail and Tannu are sitting on a bench facing north. Pradeep is immediate neighbour of Nikku. Sohail is immediate neighbour of Tannu. Pradeep is not sitting with Rinku who sits on the right end of the bench. Pradeep sits to the right of Sohail and Tannu. Sohail sits to the right of Tannu. In which position Pradeep is sitting?

Ans

✗ 1. Second from right

✗ 2. Fourth from left

✓ 3. Third from left

✗ 4. Second from left

Question Type : MCQ

Question ID : 264330140478

Option 1 ID : 264330550293

Option 2 ID : 264330550294

Option 3 ID : 264330550292

Option 4 ID : 264330550291

Status : Answered

Chosen Option : 3

Q.1 Shri Pramod Sawant took the oath as the Chief Minister of which state in March 2022?

- Ans ☒ 1. Goa
☐ 2. Maharashtra
☐ 3. Gujarat
☐ 4. Karnataka

Question Type : MCQ
Question ID : 264330140752
Option 1 ID : 264330551358
Option 2 ID : 264330551357
Option 3 ID : 264330551356
Option 4 ID : 264330551355
Status : Answered
Chosen Option : 1

Q.2 Which Bill was passed in the Parliament in 2022 to authorise payment certain sums from and out of the Consolidated Fund of India for the services of the financial year 2022-23?

- Ans ☐ 1. The Finance Bill
☐ 2. The Electricity (Amendment) Bill
☒ 3. The Appropriation Bill
☐ 4. The Wild Life (Protection) Amendment Bill

Question Type : MCQ
Question ID : 264330140751
Option 1 ID : 264330551351
Option 2 ID : 264330551354
Option 3 ID : 264330551352
Option 4 ID : 264330551353
Status : Answered
Chosen Option : 2

Q.3 Which article of the Indian constitution provides for proclamation of Emergency?

- Ans ☐ 1. Article 364
☒ 2. Article 352
☐ 3. Article 350
☐ 4. Article 362

Question Type : MCQ
Question ID : 264330140892
Option 1 ID : 264330551918
Option 2 ID : 264330551916
Option 3 ID : 264330551915
Option 4 ID : 264330551917
Status : Answered
Chosen Option : 2

Q.4 Which activity symbolizes the celebration of Uttarayan festival in Gujarat?

- Ans
- ☐ 1. Lighting of Diyas
 - ☒ 2. Kite Flying
 - ☐ 3. Bursting Crackers
 - ☐ 4. Gold Shopping

Question Type : MCQ

Question ID : 264330140295

Option 1 ID : 264330549560

Option 2 ID : 264330549561

Option 3 ID : 264330549559

Option 4 ID : 264330549562

Status : Answered

Chosen Option : 2

Q.5 Which Indian reformer is regarded as the "Father of Bengali Prose"?

- Ans
- ☐ 1. Keshab Chandra Sen
 - ☒ 2. Ishwar Chandra Vidyasagar
 - ☐ 3. Bankim Chandra Chatterjee
 - ☐ 4. Swami Dayanand Saraswati

Question Type : MCQ

Question ID : 264330140767

Option 1 ID : 264330551417

Option 2 ID : 264330551415

Option 3 ID : 264330551418

Option 4 ID : 264330551416

Status : Answered

Chosen Option : 2

Q.6 As per census 2011, which among the following is the most spoken language of India?

- Ans
- ☐ 1. Marathi
 - ☐ 2. Telugu
 - ☒ 3. Hindi
 - ☐ 4. English

Question Type : MCQ

Question ID : 264330140918

Option 1 ID : 264330552021

Option 2 ID : 264330552022

Option 3 ID : 264330552019

Option 4 ID : 264330552020

Status : Answered

Chosen Option : 3

Q.7 Swami Vivekananda gave his famous speech at the Parliament of World Religions in Chicago in _____.

Ans ☒ 1. 1893

☐ 2. 1891

☐ 3. 1892

☐ 4. 1894

Question Type : MCQ

Question ID : 264330140290

Option 1 ID : 264330549541

Option 2 ID : 264330549539

Option 3 ID : 264330549540

Option 4 ID : 264330549542

Status : Answered

Chosen Option : 1

Q.8 Which of the following planets has the shortest rotation period?

Ans ☐ 1. Mercury

☒ 2. Jupiter

☐ 3. Mars

☐ 4. Venus

Question Type : MCQ

Question ID : 264330139881

Option 1 ID : 264330547903

Option 2 ID : 264330547905

Option 3 ID : 264330547906

Option 4 ID : 264330547904

Status : Answered

Chosen Option : 1

Q.9 Which among the following is NOT a way to acquire Citizenship of India?

Ans ☒ 1. By Renunciation

☐ 2. By Birth

☐ 3. By Registration

☐ 4. By Naturalisation

Question Type : MCQ

Question ID : 264330140721

Option 1 ID : 264330551234

Option 2 ID : 264330551231

Option 3 ID : 264330551233

Option 4 ID : 264330551232

Status : Answered

Chosen Option : 1

Q.10 Who among the following was daughter of Iltutmish, a ruler of Slave/Mamluk dynasty?

- Ans
- ☐ 1. Kubra Noorzai
 - ☐ 2. Harkha
 - ☒ 3. Razia Sultan
 - ☐ 4. Shafiqa Ziajee

Question Type : MCQ

Question ID : 264330140765

Option 1 ID : 264330551407

Option 2 ID : 264330551410

Option 3 ID : 264330551408

Option 4 ID : 264330551409

Status : Answered

Chosen Option : 3

Q.11 Pandit Birju Maharaj choreographed the song 'Kahe Chhed Mohe' from the movie Devdas. He was mainly associated with which dance form?

- Ans
- ☒ 1. Kathak
 - ☐ 2. Bharatanatyam
 - ☐ 3. Kathakali
 - ☐ 4. Odissi

Question Type : MCQ

Question ID : 264330139655

Option 1 ID : 264330547036

Option 2 ID : 264330547037

Option 3 ID : 264330547038

Option 4 ID : 264330547035

Status : Answered

Chosen Option : 1

Q.12 ब्रिता नृत्य (Brita Dance) किस राज्य का पारंपरिक लोकनृत्य है?

- Ans
- ☒ 1. पश्चिम बंगाल
 - ☐ 2. उड़ीसा
 - ☐ 3. राजस्थान
 - ☐ 4. उत्तरप्रदेश

Question Type : MCQ

Question ID : 264330138946

Option 1 ID : 264330544394

Option 2 ID : 264330544393

Option 3 ID : 264330544391

Option 4 ID : 264330544392

Status : Answered

Chosen Option : 2

Q.13 Which famous Indian dancer was given the title of Asthana Nartaki ("Resident Dancer") by the Tirumala Tirupathi Devasthanam temple, India?

- Ans**
- ☒ 1. Manjamma Jogati
 - ☒ 2. Yamini Krishnamurthy
 - ☒ 3. Rukmini Devi Arundale
 - ☒ 4. Laxmi Narayan Tripathi

Question Type : **MCQ**
 Question ID : **264330140720**
 Option 1 ID : **264330551229**
 Option 2 ID : **264330551227**
 Option 3 ID : **264330551228**
 Option 4 ID : **264330551230**
 Status : **Answered**
 Chosen Option : **3**

Q.14 The microorganisms which convert the dead plants and animals to humus are known as _____.

- Ans**
- ☒ 1. producers
 - ☒ 2. decomposers
 - ☒ 3. autotrophs
 - ☒ 4. herbivores

Question Type : **MCQ**
 Question ID : **264330139662**
 Option 1 ID : **264330547064**
 Option 2 ID : **264330547065**
 Option 3 ID : **264330547066**
 Option 4 ID : **264330547063**
 Status : **Answered**
 Chosen Option : **2**

Q.15 Mosquito belongs to _____ phylum of the animal kingdom.

- Ans**
- ☒ 1. Ctenophora
 - ☒ 2. Chordata
 - ☒ 3. Arthropoda
 - ☒ 4. Mollusca

Question Type : **MCQ**
 Question ID : **264330140912**
 Option 1 ID : **264330551996**
 Option 2 ID : **264330551998**
 Option 3 ID : **264330551997**
 Option 4 ID : **264330551995**
 Status : **Answered**
 Chosen Option : **4**

Q.16 निम्नलिखित में से किस स्थान पर अशोक के प्रमुख शिलालेख नहीं हैं?

- Ans
- ☐ 1. गिरनार (Girnar)
 - ☐ 2. कंदहार (Kandahar)
 - ☒ 3. साँची (Sanchi)
 - ☐ 4. कलसी (Kalsi)

Question Type : MCQ
Question ID : 264330139744
Option 1 ID : 264330547392
Option 2 ID : 264330547393
Option 3 ID : 264330547394
Option 4 ID : 264330547391
Status : Answered
Chosen Option : 1

Q.17 _____ was considered as the most important part of some of the earliest Hindu temples.

- Ans
- ☐ 1. Shikharas
 - ☒ 2. Garbhagriha
 - ☐ 3. Gatas
 - ☐ 4. Mandapa

Question Type : MCQ
Question ID : 264330139650
Option 1 ID : 264330547018
Option 2 ID : 264330547017
Option 3 ID : 264330547015
Option 4 ID : 264330547016
Status : Answered
Chosen Option : 2

Q.18 Who is the first Indian woman to have won a Grammy Award?

- Ans
- ☐ 1. Anuradha Paudwal
 - ☐ 2. Asha Bhosle
 - ☐ 3. Alka Yagnik
 - ☒ 4. Tanvi Shah

Question Type : MCQ
Question ID : 264330139872
Option 1 ID : 264330547870
Option 2 ID : 264330547867
Option 3 ID : 264330547868
Option 4 ID : 264330547869
Status : Answered
Chosen Option : 2

Q.19 What is the national sport of Bhutan?

- Ans
- ☐ 1. Ice Hockey
 - ☐ 2. Cricket
 - ☒ 3. Archery
 - ☐ 4. Volleyball

Question Type : MCQ

Question ID : 264330140673

Option 1 ID : 264330551039

Option 2 ID : 264330551040

Option 3 ID : 264330551041

Option 4 ID : 264330551042

Status : Answered

Chosen Option : 4

Q.20 Which state became the first to implement "New Education Policy" at pre-primary level?

- Ans
- ☐ 1. Tamil Nadu
 - ☐ 2. Haryana
 - ☐ 3. Kerala
 - ☒ 4. Uttarakhand

Question Type : MCQ

Question ID : 264330139875

Option 1 ID : 264330547880

Option 2 ID : 264330547882

Option 3 ID : 264330547879

Option 4 ID : 264330547881

Status : Answered

Chosen Option : 4

Q.21 What is the relative charge of a proton and neutron?

- Ans
- ☐ 1. -1 and +1 respectively
 - ☐ 2. +1 and -1 respectively
 - ☒ 3. +1 and 0 respectively
 - ☐ 4. -1 and 0 respectively

Question Type : MCQ

Question ID : 264330140656

Option 1 ID : 264330550971

Option 2 ID : 264330550972

Option 3 ID : 264330550973

Option 4 ID : 264330550974

Status : Answered

Chosen Option : 3

Q.22 Public goods possess which of the following features in the economy?

- I. They are non-rivalrous.
- II. They are non-excludable.

Ans ☒ 1. Only II
☒ 2. Only I
☒ 3. Neither I nor II
☒ 4. Both I and II

Question Type : MCQ

Question ID : 264330139733

Option 1 ID : 264330547348

Option 2 ID : 264330547347

Option 3 ID : 264330547350

Option 4 ID : 264330547349

Status : Answered

Chosen Option : 4

Q.23 The months of _____ form a period of transition from hot rainy season to dry winter conditions.

Ans ☒ 1. October-November
☒ 2. September-October
☒ 3. December-January
☒ 4. November- December

Question Type : MCQ

Question ID : 264330140285

Option 1 ID : 264330549519

Option 2 ID : 264330549520

Option 3 ID : 264330549522

Option 4 ID : 264330549521

Status : Answered

Chosen Option : 2

Q.24 Which among the following is an international level professional auto racing sport?

Ans ☒ 1. Formula One
☒ 2. Super Bowl
☒ 3. Tour de France
☒ 4. Wimbledon

Question Type : MCQ

Question ID : 264330140340

Option 1 ID : 264330549740

Option 2 ID : 264330549739

Option 3 ID : 264330549742

Option 4 ID : 264330549741

Status : Answered

Chosen Option : 3

Q.25 Jhum cultivation or shifting cultivation is also known by the name of _____ .

- Ans
- ☐ 1. Plantation
 - ☐ 2. Mixed farming
 - ☐ 3. Extensive farming
 - ☒ 4. Slash and burn agriculture

Question Type : MCQ
 Question ID : 264330140376
 Option 1 ID : 264330549885
 Option 2 ID : 264330549886
 Option 3 ID : 264330549884
 Option 4 ID : 264330549883
 Status : Answered
 Chosen Option : 4

Section : English Language and Comprehension

Q.1 Improve the underlined part of the sentence. Choose 'No improvement' as an answer if the sentence is grammatically correct.

I am wrote a weekly column for the local newspaper.

- Ans
- ☒ 1. write a weekly
 - ☐ 2. write a week
 - ☐ 3. No improvement
 - ☐ 4. writes a weekly

Question Type : MCQ
 Question ID : 264330141185
 Option 1 ID : 264330553081
 Option 2 ID : 264330553080
 Option 3 ID : 264330553082
 Option 4 ID : 264330553079
 Status : Answered
 Chosen Option : 1

Q.2 Select the word segment that substitutes (replaces) the bracketed word segment correctly and completes the sentence meaningfully. Select the option 'no correction required' if the sentence is correct as given.
 His temperament (disposed him to) argue readily with people.

- Ans
- ☐ 1. disposed him of to
 - ☐ 2. dispose him to
 - ☐ 3. disposed him off to
 - ☒ 4. No correction required

Question Type : MCQ
 Question ID : 264330135746
 Option 1 ID : 264330531868
 Option 2 ID : 264330531869
 Option 3 ID : 264330531867
 Option 4 ID : 264330531870
 Status : Answered
 Chosen Option : 2

Q.3 Fill in the blank with the most appropriate option.

If it _____ been for him, nobody would even have known Monster was back!

- Ans
- ☒ 1. wasn't
 - ☒ 2. hadn't
 - ☐ 3. couldn't
 - ☐ 4. hasn't

Question Type : MCQ
Question ID : 264330136271
Option 1 ID : 264330533868
Option 2 ID : 264330533869
Option 3 ID : 264330533870
Option 4 ID : 264330533867
Status : Answered
Chosen Option : 2

Q.4 The statement below has been given with bracketed text. Select the option with correct Idiom for the bracketed text.

Mom said these instructions are (not understood by her) and that we should show them to Dad.

- Ans
- ☒ 1. Greek to her
 - ☐ 2. smart cookie to her
 - ☐ 3. pound the investment to her
 - ☐ 4. full of beans to her

Question Type : MCQ
Question ID : 264330136582
Option 1 ID : 264330535059
Option 2 ID : 264330535062
Option 3 ID : 264330535060
Option 4 ID : 264330535061
Status : Answered
Chosen Option : 1

Q.5 Identify the segment that contains a grammatical error. If there is no error, select 'No error'.

Ben Essenburg is widely known / as one of the world's best portrayer / of the Everglades.

- Ans
- ☒ 1. as one of the world's best portrayer
 - ☐ 2. No Error
 - ☐ 3. of the Everglades.
 - ☐ 4. Ben Essenburg is widely known

Question Type : MCQ
Question ID : 264330135820
Option 1 ID : 264330532152
Option 2 ID : 264330532154
Option 3 ID : 264330532153
Option 4 ID : 264330532151
Status : Answered
Chosen Option : 1

Q.6 Select the most appropriate synonym of the given word.

Deceive

- Ans ☒ 1. Betray
☒ 2. Assist
☒ 3. Aid
☒ 4. Release

Question Type : MCQ
 Question ID : 264330135705
 Option 1 ID : 264330531707
 Option 2 ID : 264330531710
 Option 3 ID : 264330531709
 Option 4 ID : 264330531708
 Status : Answered
 Chosen Option : 1

Q.7 Select the word from the options which is similar in meaning to the bracketed word given in the sentence below.

Having begun my life in a children's home I have great (empathy) with the little ones.

- Ans ☒ 1. Apathy
☒ 2. Passion
☒ 3. Affinity
☒ 4. Hostility

Question Type : MCQ
 Question ID : 264330136578
 Option 1 ID : 264330535045
 Option 2 ID : 264330535043
 Option 3 ID : 264330535046
 Option 4 ID : 264330535044
 Status : Answered
 Chosen Option : 3

Q.8 Choose the sentence with no spelling error.

- Ans ☒ 1. Take the offence of "lokcing on".
☒ 2. Take the offence of "locking on".
☒ 3. Take the ofence of "locking on".
☒ 4. Take the ofense of "locking on".

Question Type : MCQ
 Question ID : 264330135253
 Option 1 ID : 264330529932
 Option 2 ID : 264330529933
 Option 3 ID : 264330529931
 Option 4 ID : 264330529934
 Status : Answered
 Chosen Option : 2

Q.9 Four words are given, out of which three words are spelt correctly. Choose the incorrectly spelt word.

- Ans
- ☒ 1. INOCULATE
 - ☒ 2. MEMENTO
 - ☒ 3. EQUIPMENT
 - ☒ 4. CEMETERY

Question Type : MCQ
Question ID : 264330136583
Option 1 ID : 264330535064
Option 2 ID : 264330535063
Option 3 ID : 264330535065
Option 4 ID : 264330535066
Status : Answered
Chosen Option : 1

Q.10 Select the most appropriate meaning of the given idiom.

Give and take

- Ans
- ☒ 1. An aggressive and bold confrontation
 - ☒ 2. Compromise, cooperation between people
 - ☒ 3. A competition where the outcome is difficult to judge or predict
 - ☒ 4. It seems likely, reasonable, or typical

Question Type : MCQ
Question ID : 264330136364
Option 1 ID : 264330534223
Option 2 ID : 264330534226
Option 3 ID : 264330534225
Option 4 ID : 264330534224
Status : Answered
Chosen Option : 2

Q.11 Find the part of the given sentence that has an error in it. If there is no error, choose 'No error'.

In order to survive, humans need to eat ascorbic acid, also known as vitamin C.

- Ans
- ☒ 1. In order to survive, humans
 - ☒ 2. need to eat ascorbic acid, also
 - ☒ 3. known as vitamin C.
 - ☒ 4. No error

Question Type : MCQ
Question ID : 264330135154
Option 1 ID : 264330529551
Option 2 ID : 264330529552
Option 3 ID : 264330529553
Option 4 ID : 264330529554
Status : Answered
Chosen Option : 4

Q.12 Choose the word that can substitute the given group of words.

The sleeping rooms in a college or public institution

- Ans ☒ 1. Dormitory
☒ 2. Convent
☒ 3. Monastery
☒ 4. Arsenal

Question Type : MCQ
 Question ID : 264330135244
 Option 1 ID : 264330529895
 Option 2 ID : 264330529897
 Option 3 ID : 264330529898
 Option 4 ID : 264330529896
 Status : Answered
 Chosen Option : 1

Q.13 A sentence has been given with a blank to be filled with an appropriate option. Choose the correct alternative.

I told you not to give my number to _____.

- Ans ☒ 1. other
☒ 2. anyone
☒ 3. someone
☒ 4. each one

Question Type : MCQ
 Question ID : 264330135516
 Option 1 ID : 264330530972
 Option 2 ID : 264330530973
 Option 3 ID : 264330530971
 Option 4 ID : 264330530974
 Status : Answered
 Chosen Option : 2

Q.14 Select the most appropriate antonym to substitute the bracketed word in the given sentence.

Their humble attire did little to detract from the air of (imperious) authority they exuded, however.

- Ans ☒ 1. Unofficial
☒ 2. Meek
☒ 3. Peremptory
☒ 4. Lordly

Question Type : MCQ
 Question ID : 264330136206
 Option 1 ID : 264330533615
 Option 2 ID : 264330533617
 Option 3 ID : 264330533616
 Option 4 ID : 264330533618
 Status : Answered
 Chosen Option : 2

Q.15 Find the part of the given sentence that has an error in it. If there is no error, choose 'No error'.

Neither Ram nor his sisters are ready to play the game.

- Ans
- ☒ 1. to play the game.
 - ☒ 2. No error
 - ☒ 3. his sisters are ready
 - ☒ 4. Neither Ram nor

Question Type : MCQ
Question ID : 264330141189
Option 1 ID : 264330553097
Option 2 ID : 264330553098
Option 3 ID : 264330553096
Option 4 ID : 264330553095
Status : Answered
Chosen Option : 2

Q.16 Select the most appropriate option to fill in the blank.

The greatest source of income in India is _____ from agriculture and related industries.

- Ans
- ☒ 1. derived
 - ☒ 2. expressed
 - ☒ 3. assumed
 - ☒ 4. voiced

Question Type : MCQ
Question ID : 264330141217
Option 1 ID : 264330553204
Option 2 ID : 264330553206
Option 3 ID : 264330553205
Option 4 ID : 264330553203
Status : Answered
Chosen Option : 1

Q.17 Select the most appropriate word for the given group of words.

A sacred place

- Ans
- ☒ 1. Relic
 - ☒ 2. Museum
 - ☒ 3. Sanctum
 - ☒ 4. Retreat

Question Type : MCQ
Question ID : 264330136176
Option 1 ID : 264330533501
Option 2 ID : 264330533500
Option 3 ID : 264330533499
Option 4 ID : 264330533502
Status : Answered
Chosen Option : 3

Q.18 Fill in the blank with the most appropriate option.

It's a challenge, as you yourself said, and men find it hard to turn _____ challenges.

- Ans
- ☐ 1. up
 - ☐ 2. below
 - ☒ 3. down
 - ☐ 4. aside

Question Type : MCQ
Question ID : 264330136289
Option 1 ID : 264330533935
Option 2 ID : 264330533937
Option 3 ID : 264330533936
Option 4 ID : 264330533938
Status : Answered
Chosen Option : 3

Q.19 Select the most appropriate antonym of the given word.

Obsession

- Ans
- ☒ 1. Dislike
 - ☐ 2. Delusion
 - ☐ 3. Compulsion
 - ☐ 4. Relaxation

Question Type : MCQ
Question ID : 264330135707
Option 1 ID : 264330531718
Option 2 ID : 264330531716
Option 3 ID : 264330531715
Option 4 ID : 264330531717
Status : Answered
Chosen Option : 1

Q.20 Select the word segment that substitutes (replaces) the bracketed word segment correctly and completes the sentence meaningfully. Select the option 'no correction required' if the sentence is correct as given.

(The shocked entrance) of so many witnesses seemed to have brought them to their senses.

- Ans
- ☐ 1. The shocking entrances
 - ☒ 2. The unexpected entrance
 - ☐ 3. The unexpecting entrances
 - ☐ 4. No correction required

Question Type : MCQ
Question ID : 264330136413
Option 1 ID : 264330534417
Option 2 ID : 264330534416
Option 3 ID : 264330534415
Option 4 ID : 264330534418
Status : Answered
Chosen Option : 1

Comprehension:

In the following passage some words have been deleted. Fill in the blanks with the help of the alternatives given. Select the most appropriate option for each number.

A submerged memory half rose in the king's (1) _____, and sank again. Around him he could hear murmurs, courtiers (2) _____ who the stranger was. He (3) _____ a councillor to lead the (4) _____ to the treasury, where each day gifts (5) _____ to the needy, but the brahmin shook off the man's hand.

SubQuestion No : 21

Q.21 Select the most appropriate option to fill in blank number 1.

- Ans
- ☒ 1. presence
 - ☒ 2. brain
 - ☒ 3. mind
 - ☒ 4. memory

Question Type : MCQ

Question ID : 264330136419

Option 1 ID : 264330534436

Option 2 ID : 264330534435

Option 3 ID : 264330534438

Option 4 ID : 264330534437

Status : Answered

Chosen Option : 3

Comprehension:

In the following passage some words have been deleted. Fill in the blanks with the help of the alternatives given. Select the most appropriate option for each number.

A submerged memory half rose in the king's (1) _____, and sank again. Around him he could hear murmurs, courtiers (2) _____ who the stranger was. He (3) _____ a councillor to lead the (4) _____ to the treasury, where each day gifts (5) _____ to the needy, but the brahmin shook off the man's hand.

SubQuestion No : 22

Q.22 Select the most appropriate option to fill in blank number 2.

- Ans
- ☒ 1. were wonderful
 - ☒ 2. wonder
 - ☒ 3. were wonder
 - ☒ 4. wondering

Question Type : MCQ

Question ID : 264330136420

Option 1 ID : 264330534442

Option 2 ID : 264330534440

Option 3 ID : 264330534441

Option 4 ID : 264330534439

Status : Answered

Chosen Option : 3

Comprehension:

In the following passage some words have been deleted. Fill in the blanks with the help of the alternatives given. Select the most appropriate option for each number.

A submerged memory half rose in the king's (1) _____, and sank again. Around him he could hear murmurs, courtiers (2) _____ who the stranger was. He (3) _____ a councillor to lead the (4) _____ to the treasury, where each day gifts (5) _____ to the needy, but the brahmin shook off the man's hand.

SubQuestion No : 23

Q.23 Select the most appropriate option to fill in blank number 3.

- Ans
- ☒ 1. controlled
 - ☒ 2. orders
 - ☒ 3. controls
 - ☒ 4. ordered

Question Type : MCQ

Question ID : 264330136421

Option 1 ID : 264330534443

Option 2 ID : 264330534444

Option 3 ID : 264330534445

Option 4 ID : 264330534446

Status : Answered

Chosen Option : 4

Comprehension:

In the following passage some words have been deleted. Fill in the blanks with the help of the alternatives given. Select the most appropriate option for each number.

A submerged memory half rose in the king's (1) _____, and sank again. Around him he could hear murmurs, courtiers (2) _____ who the stranger was. He (3) _____ a councillor to lead the (4) _____ to the treasury, where each day gifts (5) _____ to the needy, but the brahmin shook off the man's hand.

SubQuestion No : 24

Q.24 Select the most appropriate option to fill in blank number 4.

- Ans
- ☒ 1. friend
 - ☒ 2. sage
 - ☒ 3. businessman
 - ☒ 4. stranger

Question Type : MCQ

Question ID : 264330136422

Option 1 ID : 264330534450

Option 2 ID : 264330534447

Option 3 ID : 264330534448

Option 4 ID : 264330534449

Status : Answered

Chosen Option : 4

Comprehension:

In the following passage some words have been deleted. Fill in the blanks with the help of the alternatives given. Select the most appropriate option for each number.

A submerged memory half rose in the king's (1) _____, and sank again. Around him he could hear murmurs, courtiers (2) _____ who the stranger was. He (3) _____ a councillor to lead the (4) _____ to the treasury, where each day gifts (5) _____ to the needy, but the brahmin shook off the man's hand.

SubQuestion No : 25

Q.25 Select the most appropriate option to fill in blank number 5.

- Ans
- ☒ 1. have been given
 - ☒ 2. have to given
 - ☒ 3. were given
 - ☒ 4. was given

Question Type : MCQ

Question ID : 264330136423

Option 1 ID : 264330534454

Option 2 ID : 264330534453

Option 3 ID : 264330534451

Option 4 ID : 264330534452

Status : Answered

Chosen Option : 3

