

Multi Tasking Non Technical Staff and Havaladar CBIC and CBN Examination 2022

Roll Number	
Candidate Name	
Venue Name	iON Digital Zone Phulwarisharif
Exam Date	15/06/2023
Exam Time	3:30 PM - 5:00 PM
Subject	MTS Non Tech Havaladar CBIC and CBN Examination 2022

Section : Numerical and Mathematical Ability

Q.1 Marked price of a car is Rs. 600000. Rahul buys that car at two successive discounts of 30 percent and 20 percent. If after using the car, he sells the car for Rs. 478000, then what is the profit percentage?

- Ans**
- ☒ 1. 39.87 percent
 - ☒ 2. 36.85 percent
 - ☒ 3. 33.33 percent
 - ☒ 4. 42.26 percent

Question Type : MCQ

Question ID : 264330140595

Option 1 ID : 264330550731

Option 2 ID : 264330550732

Option 3 ID : 264330550733

Option 4 ID : 264330550734

Status : Not Answered

Chosen Option : --

Q.2 Population of a town increases at the rate of 20 percent per annum. If the population of town will be 69,120 after 2 years, then what is the present population of the town?

- Ans**
- ☒ 1. 48000
 - ☒ 2. 42000
 - ☒ 3. 40000
 - ☒ 4. 36000

Question Type : MCQ

Question ID : 264330139639

Option 1 ID : 264330546973

Option 2 ID : 264330546974

Option 3 ID : 264330546972

Option 4 ID : 264330546971

Status : Answered

Chosen Option : 1

Test Prime

**ALL EXAMS,
ONE SUBSCRIPTION**



70,000+
Mock Tests



**Personalised
Report Card**



**Unlimited
Re-Attempt**



600+
Exam Covered



**Previous Year
Papers**



**500%
Refund**



ATTEMPT FREE MOCK NOW

Q.3 Average of 40 results is 15. If 5 is subtracted from each result, then what will be the new average of the results?

- Ans**
- ☒ 1. 12
 - ☒ 2. 15
 - ☒ 3. 11
 - ☒ 4. 10

Question Type : **MCQ**

Question ID : **264330139914**

Option 1 ID : **264330548037**

Option 2 ID : **264330548036**

Option 3 ID : **264330548035**

Option 4 ID : **264330548038**

Status : **Answered**

Chosen Option : **4**

Q.4 What will be the HCF of 0.25 and 1.25?

- Ans**
- ☒ 1. 0.25
 - ☒ 2. 1.25
 - ☒ 3. 2.5
 - ☒ 4. 0.5

Question Type : **MCQ**

Question ID : **264330140798**

Option 1 ID : **264330551541**

Option 2 ID : **264330551539**

Option 3 ID : **264330551542**

Option 4 ID : **264330551540**

Status : **Answered**

Chosen Option : **1**

Q.5 40 percent of selling price of a fan is equal to $\frac{4}{5}$ of the cost price of the fan. What is the profit percent?

- Ans**
- ☒ 1. 150 percent
 - ☒ 2. 125 percent
 - ☒ 3. 100 percent
 - ☒ 4. 120 percent

Question Type : **MCQ**

Question ID : **264330140539**

Option 1 ID : **264330550513**

Option 2 ID : **264330550512**

Option 3 ID : **264330550514**

Option 4 ID : **264330550511**

Status : **Answered**

Chosen Option : **3**

Q.6 A runner starts running from a point at 5 : 00 am at the speed of 10 km/hr. Second runner starts from the same point at 8 : 00 am in the same direction with a speed of 15 km/hr. At what time of the day will the second runner will overtake the first runner?

- Ans ☒ 1. 2 : 00 pm
☐ 2. 12 : 30 pm
☐ 3. 12 : 00 pm
☐ 4. 1 : 00 pm

Question Type : MCQ
 Question ID : 264330140155
 Option 1 ID : 264330549000
 Option 2 ID : 264330549001
 Option 3 ID : 264330548999
 Option 4 ID : 264330549002
 Status : Answered
 Chosen Option : 1

Q.7 One of the diagonals of a rhombus is 70 percent of the other diagonal. What is the ratio of the area of rhombus to the square of the length of the larger diagonal?

- Ans ☐ 1. 5 : 17
☒ 2. 7 : 20
☐ 3. 6 : 19
☐ 4. 20 : 7

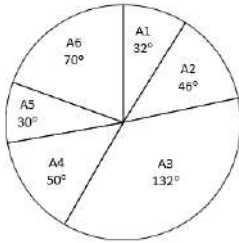
Question Type : MCQ
 Question ID : 264330140577
 Option 1 ID : 264330550661
 Option 2 ID : 264330550662
 Option 3 ID : 264330550660
 Option 4 ID : 264330550659
 Status : Answered
 Chosen Option : 2

Q.8 If the radius of a cylinder is decreased by 16 percent, then by how much percent its height must be increased, so that the volume of the cylinder remains same?

- Ans ☐ 1. 32.96 percent
☒ 2. 41.72 percent
☐ 3. 45.28 percent
☐ 4. 36.43 percent

Question Type : MCQ
 Question ID : 264330140576
 Option 1 ID : 264330550655
 Option 2 ID : 264330550658
 Option 3 ID : 264330550656
 Option 4 ID : 264330550657
 Status : Answered
 Chosen Option : 2

Q.9 The pie chart given below shows the price of 6 different articles. The total price of all these 6 articles is 5040. The price of a particular article is shown in terms of degree with respect to the total price of all these 6 articles.



Which of the following statement is NOT correct?

I. The total price of A1, A2, A4 and A6 is 2772.

II. The difference between the total price of A3 and A5 together and the total price of A4 and A6 together is 488.

- Ans**
- ☒ 1. Only I
 - ☒ 2. Both I and II
 - ☒ 3. Only II
 - ☒ 4. Neither I nor II

Question Type : MCQ

Question ID : 264330140552

Option 1 ID : 264330550563

Option 2 ID : 264330550565

Option 3 ID : 264330550564

Option 4 ID : 264330550566

Status : Answered

Chosen Option : 3

Q.10 A shopkeeper sells an article at 20 percent profit. If he had bought it at 10 percent less price and sold it for Rs. 48 less, then he would have earned a profit of 20 percent. What is the cost price of the article?

- Ans**
- ☒ 1. Rs. 460
 - ☒ 2. Rs. 520
 - ☒ 3. Rs. 340
 - ☒ 4. Rs. 400

Question Type : MCQ

Question ID : 264330140220

Option 1 ID : 264330549259

Option 2 ID : 264330549262

Option 3 ID : 264330549261

Option 4 ID : 264330549260

Status : Answered

Chosen Option : 4

Q.11 If a sum is invested at simple interest, then it becomes $\frac{3}{2}$ of itself in 4 years. What is the annual rate of interest?

- Ans
- ☒ 1. 6.5 percent
 - ☒ 2. 12.5 percent
 - ☒ 3. 17.5 percent
 - ☒ 4. 10 percent

Question Type : MCQ

Question ID : 264330140203

Option 1 ID : 264330549191

Option 2 ID : 264330549193

Option 3 ID : 264330549194

Option 4 ID : 264330549192

Status : Answered

Chosen Option : 2

Q.12 A certain amount of money is divided among A, B and C is in the ratio of 3 : 2 : 5. How much money will C get out of Rs 126?

- Ans
- ☒ 1. Rs.62
 - ☒ 2. Rs.43
 - ☒ 3. Rs.66
 - ☒ 4. Rs.63

Question Type : MCQ

Question ID : 264330140808

Option 1 ID : 264330551582

Option 2 ID : 264330551580

Option 3 ID : 264330551581

Option 4 ID : 264330551579

Status : Answered

Chosen Option : 4

Q.13 What is that least perfect square, which is exactly divisible by each of 12, 84 and 24?

- Ans
- ☒ 1. 2304
 - ☒ 2. 7056
 - ☒ 3. 11664
 - ☒ 4. 1764

Question Type : MCQ

Question ID : 264330140548

Option 1 ID : 264330550548

Option 2 ID : 264330550549

Option 3 ID : 264330550547

Option 4 ID : 264330550550

Status : Answered

Chosen Option : 2

Q.14 The given table shows the data regarding the number of medals won by four different countries in Asian games in the year 2016. The ratio of number of silver medals won by China to the number of gold medals won by India is:

Country	Gold Medals	Silver Medals	Bronze Medals
China	31	36	36
India	18	22	28
Russia	26	16	25
Japan	10	18	15

- Ans**
- ✓ 1. 2:1
- ✗ 2. 3:2
- ✗ 3. 4:9
- ✗ 4. 5:9

Question Type : **MCQ**
 Question ID : **264330139052**
 Option 1 ID : **264330544816**
 Option 2 ID : **264330544815**
 Option 3 ID : **264330544817**
 Option 4 ID : **264330544818**
 Status : **Answered**
 Chosen Option : 1

Q.15 A number is increased by 20% and then the increased number is decreased by 20%. The net increase or decrease is :

- Ans**
- ✗ 1. Decrease 2%
- ✗ 2. increase 4%
- ✗ 3. Increase 2%
- ✓ 4. Decrease 4%

Question Type : **MCQ**
 Question ID : **264330140802**
 Option 1 ID : **264330551558**
 Option 2 ID : **264330551555**
 Option 3 ID : **264330551557**
 Option 4 ID : **264330551556**
 Status : **Answered**
 Chosen Option : 4

Q.16 B and C can complete a work alone in 10 days and 30 days respectively. They began the work together but B left the work after some days and C completed the remaining work in 10 days. After how many days from the beginning B left the work?

- Ans**
- ✗ 1. 4 days
- ✗ 2. 6 days
- ✗ 3. 8 days
- ✓ 4. 5 days

Question Type : **MCQ**
 Question ID : **264330140194**
 Option 1 ID : **264330549156**
 Option 2 ID : **264330549157**
 Option 3 ID : **264330549158**
 Option 4 ID : **264330549155**
 Status : **Answered**
 Chosen Option : 4

Q.17 After working for 20 days, Shikha finds that only 20 percent of the work is done. She employs Tina who is 100 percent more efficient than Shikha. In how many days Tina alone can complete the whole work?

- Ans**
- ☒ 1. 40 days
 - ☒ 2. 30 days
 - ☒ 3. 50 days
 - ☒ 4. 60 days

Question Type : **MCQ**

Question ID : **264330139952**

Option 1 ID : **264330548188**

Option 2 ID : **264330548190**

Option 3 ID : **264330548187**

Option 4 ID : **264330548189**

Status : **Answered**

Chosen Option : **3**

Q.18 A bus travels 60 km in first hour, 40 km in second hour and 50 km in third hour. What is the average speed of the bus?

- Ans**
- ☒ 1. 60 km/hr
 - ☒ 2. 45 km/hr
 - ☒ 3. 50 km/hr
 - ☒ 4. 55 km/hr

Question Type : **MCQ**

Question ID : **264330140825**

Option 1 ID : **264330551650**

Option 2 ID : **264330551647**

Option 3 ID : **264330551648**

Option 4 ID : **264330551649**

Status : **Answered**

Chosen Option : **3**

Q.19 In what ratio sugar of Rs. 30 per kg should be mixed with sugar of Rs. 40 per kg so that the mixture is worth Rs. 37 per kg?

- Ans**
- ☒ 1. 8 : 9
 - ☒ 2. 3 : 7
 - ☒ 3. 4 : 3
 - ☒ 4. 9 : 5

Question Type : **MCQ**

Question ID : **264330140541**

Option 1 ID : **264330550521**

Option 2 ID : **264330550522**

Option 3 ID : **264330550519**

Option 4 ID : **264330550520**

Status : **Answered**

Chosen Option : **2**

Q.20 What is the value of $\frac{91 + 13 \text{ of } (45 \div 21 \times 14 \div 5) - 22 \times 4}{(42 \times 21 \div 168 \times 2) - (66 \text{ of } 15 \div 90)}$?

- Ans
- ☒ 1. -172
 - ☒ 2. -81
 - ☒ 3. -162
 - ☒ 4. -144

Question Type : MCQ
Question ID : 264330140190
Option 1 ID : 264330549139
Option 2 ID : 264330549140
Option 3 ID : 264330549141
Option 4 ID : 264330549142
Status : Answered
Chosen Option : 3

Section : Reasoning Ability and Problem Solving

Q.1 पाँच लड़कियाँ अंजू, बिट्टू, चारुल, दृष्टि और सारा में सभी की उम्र अलग-अलग है। अंजू केवल दृष्टि और सारा से छोटी है। सारा दृष्टि से छोटी है और बिट्टू से बड़ी है। चारुल सबसे छोटी है। लड़कियों में चौथी सबसे बड़ी कौन है?

- Ans
- ☒ 1. बिट्टू
 - ☒ 2. सारा
 - ☒ 3. चारुल
 - ☒ 4. दृष्टि

Question Type : MCQ
Question ID : 264330140041
Option 1 ID : 264330548543
Option 2 ID : 264330548544
Option 3 ID : 264330548545
Option 4 ID : 264330548546
Status : Answered
Chosen Option : 1

Q.2 Which of the following numbers will replace the question mark (?) in the given series?
71, 73, 76, 81, 88, 99, 112, ?

- Ans
- ☒ 1. 130
 - ☒ 2. 139
 - ☒ 3. 140
 - ☒ 4. 129

Question Type : MCQ
Question ID : 264330140023
Option 1 ID : 264330548473
Option 2 ID : 264330548471
Option 3 ID : 264330548474
Option 4 ID : 264330548472
Status : Answered
Chosen Option : 4

Q.3 In a certain code language, 'CASHEW' is written as 'WEHSAC'. How will 'FLORAL' be written in that language?

- Ans**
- ☒ 1. LAORLF
 - ☒ 2. LAROLF
 - ☒ 3. LAROFL
 - ☒ 4. ALROLF

Question Type : MCQ

Question ID : 264330138792

Option 1 ID : 264330543775

Option 2 ID : 264330543778

Option 3 ID : 264330543777

Option 4 ID : 264330543776

Status : Answered

Chosen Option : 2

Q.4 Three statements are given followed by two conclusions numbered I and II. Assuming the statements to be true, even if they seem to be at variance with commonly known facts, decide which of the conclusions logically follow(s) from the statements.

Statements:

Some books are pens.

Some books are copies.

All copies are pencils.

Conclusions:

I. Some pencils are pens.

II. Some pencils are books.

- Ans**
- ☒ 1. Both conclusions I and II follow
 - ☒ 2. Only conclusion I follows
 - ☒ 3. Only conclusion II follows
 - ☒ 4. Neither conclusion I nor II follows

Question Type : MCQ

Question ID : 264330135358

Option 1 ID : 264330530341

Option 2 ID : 264330530339

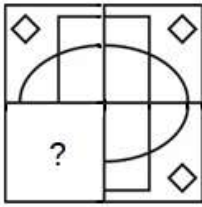
Option 3 ID : 264330530340

Option 4 ID : 264330530342

Status : Not Answered

Chosen Option : --

Q.5 Which answer figure will complete the pattern in the question figure?

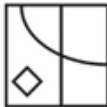


Ans

✗ 1.



✗ 2.



✗ 3.



✓ 4.



Question Type : MCQ

Question ID : 264330139587

Option 1 ID : 264330546764

Option 2 ID : 264330546763

Option 3 ID : 264330546766

Option 4 ID : 264330546765

Status : Answered

Chosen Option : 4

Q.6 Select the option in which the numbers shares the same relationship in set as that shared by the numbers in the given set.
(NOTE: Operations should be performed on the whole numbers, without breaking down the numbers into its constituent digits. E.g. 13 – Operations on 13 such as adding /subtracting /multiplying etc. to 13 can be performed. Breaking down 13 into 1 and 3 and then performing mathematical operations on 1 and 3 is not allowed)

(20, 70, 120)

(120, 170, 220)

Ans

✓ 1. (420, 470, 520)

✗ 2. (320, 380, 420)

✗ 3. (420, 470, 530)

✗ 4. (220, 270, 330)

Question Type : MCQ

Question ID : 264330140970

Option 1 ID : 264330552230

Option 2 ID : 264330552229

Option 3 ID : 264330552228

Option 4 ID : 264330552227

Status : Answered

Chosen Option : 1

Q.7 Which of the following numbers will replace the question mark (?) in the given series?

43, 51, 78, 142, 267, ?

Ans ☒ 1. 483

☐ 2. 473

☐ 3. 463

☐ 4. 493

Question Type : MCQ

Question ID : 264330140484

Option 1 ID : 264330550317

Option 2 ID : 264330550316

Option 3 ID : 264330550315

Option 4 ID : 264330550318

Status : Answered


Chosen Option : 1

Q.8 Select the option figure in which the given figure is embedded. (rotation is NOT allowed)

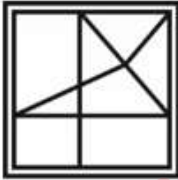


Ans

☐ 1.



☐ 2.



☒ 3.



☐ 4.



Question Type : MCQ

Question ID : 264330139988

Option 1 ID : 264330548334

Option 2 ID : 264330548332

Option 3 ID : 264330548331

Option 4 ID : 264330548333

Status : Answered

Chosen Option : 3

Q.9 Which of the mathematical signs should be interchanged in the below equation to make it mathematically correct?

$$45 - 5 + 96 \div 8 \times 24 = 9$$

- Ans
- ☒ 1. + and -
 - ☒ 2. \times and -
 - ☒ 3. \div and -
 - ☒ 4. + and \times

Question Type : MCQ

Question ID : 264330140108

Option 1 ID : 264330548814

Option 2 ID : 264330548813

Option 3 ID : 264330548812

Option 4 ID : 264330548811

Status : Not Answered

Chosen Option : --

Q.10 आठ खिलाड़ी अनिल, कमल, राम, संजय, आकाश, विवेक, राहुल और रामू एक वृत्ताकार मेज के चारों ओर केंद्र की ओर मुख करके बैठे हैं (परंतु जरूरी नहीं कि वे इसी क्रम में बैठे हों)। संजय, अनिल के बाईं ओर से दूसरे स्थान पर है। राहुल, अनिल के दाईं ओर से चौथे स्थान पर है। राम, राहुल या संजय का निकटतम पड़ोसी नहीं है। आकाश, राम के दाईं ओर से दूसरे स्थान पर है। कमल, विवेक के दाईं ओर से दूसरे स्थान पर है। रामू के दाईं ओर से दूसरे स्थान पर कौन है?

- Ans
- ☒ 1. कमल
 - ☒ 2. संजय
 - ☒ 3. राहुल
 - ☒ 4. विवेक

Question Type : MCQ

Question ID : 264330140982

Option 1 ID : 264330552275

Option 2 ID : 264330552277

Option 3 ID : 264330552278

Option 4 ID : 264330552276

Status : Not Answered

Chosen Option : --

Q.11 In a certain code language, 'SPEAKER' is coded as '2613517', 'TACKLE' is coded as '934501'. What is the code for 'PEACE' in that code language?

- Ans
- ☒ 1. 61341
 - ☒ 2. 61241
 - ☒ 3. 62342
 - ☒ 4. 51341

Question Type : MCQ

Question ID : 264330139532

Option 1 ID : 264330546544

Option 2 ID : 264330546543

Option 3 ID : 264330546545

Option 4 ID : 264330546546

Status : Answered

Chosen Option : 1

Q.12 If A denotes 'addition', B denotes 'multiplication', C denotes 'subtraction', and D denotes 'division', then what will be the value of the following equation?
 $8 \text{ B } 4 \text{ A } 7 \text{ C } 21 = ?$

- Ans**
- ☒ 1. 18
 - ☐ 2. 26
 - ☐ 3. 21
 - ☐ 4. 16

Question Type : **MCQ**

Question ID : **264330135364**

Option 1 ID : **264330530366**

Option 2 ID : **264330530365**

Option 3 ID : **264330530363**

Option 4 ID : **264330530364**

Status : **Answered**

Chosen Option : **1**

Q.13 Which of the following letter cluster will replace the question mark (?) in the given series?
 VY, ZC, DG, HK, ?

- Ans**
- ☒ 1. LO
 - ☐ 2. LN
 - ☐ 3. MO
 - ☐ 4. LM

Question Type : **MCQ**

Question ID : **264330140432**

Option 1 ID : **264330550107**

Option 2 ID : **264330550109**

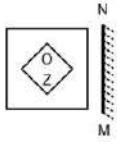
Option 3 ID : **264330550110**

Option 4 ID : **264330550108**

Status : **Answered**

Chosen Option : **1**

Q.14 Select the correct mirror image of the given figure when the mirror MN is placed to the right side of the figure.



Ans

✗ 1.



✓ 2.



✗ 3.



✗ 4.



Question Type : MCQ

Question ID : 264330140030

Option 1 ID : 264330548502

Option 2 ID : 264330548499

Option 3 ID : 264330548500

Option 4 ID : 264330548501

Status : Answered

Chosen Option : 2

Q.15 Select the option that is related to the third word in the same way as the second word is related to the first word.

Taj Mahal : Agra :: Qutub Minar : ?

Ans

✓ 1. Delhi

✗ 2. Ranchi

✗ 3. Chennai

✗ 4. Mumbai

Question Type : MCQ

Question ID : 264330140135

Option 1 ID : 264330548920

Option 2 ID : 264330548921

Option 3 ID : 264330548919

Option 4 ID : 264330548922

Status : Answered

Chosen Option : 1

Q.16 बाँब, ब्रान, बॉट, बटिस्टा और ब्राइन नाम के पाँच पुरुष एक परिधि में केंद्र की ओर मुख करके बैठे हैं। ब्राइन, बॉट के ठीक बाईं ओर और बाँब के ठीक दाईं ओर बैठा है। बटिस्टा, ब्राइन के बाईं ओर दूसरे स्थान पर बैठा है। ब्रान के ठीक दाईं ओर कौन बैठा है?

- Ans
- ☒ 1. बॉट
 - ☒ 2. बाँब
 - ☒ 3. बटिस्टा
 - ☒ 4. ब्राइन

Question Type : MCQ
Question ID : 264330139998
Option 1 ID : 264330548373
Option 2 ID : 264330548372
Option 3 ID : 264330548371
Option 4 ID : 264330548374
Status : Answered
Chosen Option : 3

Q.17 Select the option that is related to the third word in the same way as the second word is related to the first word.
Jaundice : Liver :: Tuberculosis : ?

- Ans
- ☒ 1. Stomach
 - ☒ 2. Lungs
 - ☒ 3. Leg
 - ☒ 4. Heart

Question Type : MCQ
Question ID : 264330140034
Option 1 ID : 264330548518
Option 2 ID : 264330548517
Option 3 ID : 264330548516
Option 4 ID : 264330548515
Status : Answered
Chosen Option : 2

Q.18 In a certain code language, 'ARMY' is written as 'CPOW'. How will 'HALE' be written in that language?

- Ans
- ☒ 1. JYMD
 - ☒ 2. JYND
 - ☒ 3. JDYN
 - ☒ 4. JNYD

Question Type : MCQ
Question ID : 264330140017
Option 1 ID : 264330548448
Option 2 ID : 264330548449
Option 3 ID : 264330548450
Option 4 ID : 264330548447
Status : Answered
Chosen Option : 2

Q.19 दो कथन दिए गए हैं और दो निष्कर्ष I और II दिए गए हैं। कथनों को सत्य मानते हुए, चाहे वे सामान्यतः ज्ञात तथ्यों से अलग प्रतीत होते हों, निश्चय कीजिए कि कौन-सा निष्कर्ष तार्किक रूप से कथनों के अनुसार है।
कथन:
कोई बत्तख, गुड़िया नहीं है।
सभी अंडे, गुड़िया हैं।
निष्कर्ष:
I. कोई बत्तख, अंडा नहीं है।
II. कुछ गुड़िया, अंडे हैं।

Ans

- ✗ 1. सिर्फ निष्कर्ष II कथनों के अनुसार है
- ✗ 2. निष्कर्ष I और II में से कोई भी कथनों के अनुसार नहीं है
- ✓ 3. दोनों निष्कर्ष I और II कथनों के अनुसार हैं
- ✗ 4. सिर्फ निष्कर्ष I कथनों के अनुसार है

Question Type : MCQ

Question ID : 264330135357

Option 1 ID : 264330530336

Option 2 ID : 264330530338

Option 3 ID : 264330530337

Option 4 ID : 264330530335

Status : Answered

Chosen Option : 3

Q.20 Select the option that is related to the third number in the same way as the second number is related to the first number.
289 : 306 :: 196 : ?

Ans

- ✓ 1. 210
- ✗ 2. 320
- ✗ 3. 225
- ✗ 4. 512

Question Type : MCQ

Question ID : 264330140004

Option 1 ID : 264330548395

Option 2 ID : 264330548396

Option 3 ID : 264330548397

Option 4 ID : 264330548398

Status : Answered

Chosen Option : 1

Section : General Awareness

Q.1 What did the medieval term “Raqs” mean?

- Ans
- ✓ 1. Dancing
 - ✗ 2. Singing
 - ✗ 3. Chanting
 - ✗ 4. Ritual

Question Type : MCQ

Question ID : 264330139888

Option 1 ID : 264330547933

Option 2 ID : 264330547932

Option 3 ID : 264330547931

Option 4 ID : 264330547934

Status : Answered

Chosen Option : 2

Q.2 बौद्ध स्थापत्यकला के स्मारकों में प्रार्थना कक्षों को _____ कहा जाता था।

- Ans
- ✗ 1. पिश्रक
 - ✗ 2. विहार
 - ✗ 3. स्तूप
 - ✓ 4. चैत्य गृह

Question Type : MCQ

Question ID : 264330140321

Option 1 ID : 264330549666

Option 2 ID : 264330549665

Option 3 ID : 264330549664

Option 4 ID : 264330549663

Status : Not Answered

Chosen Option : --

Q.3 Pankaj Advani is associated with which sports?

- Ans
- ✗ 1. Table Tennis
 - ✗ 2. Chess
 - ✗ 3. Golf
 - ✓ 4. Billiards

Question Type : MCQ

Question ID : 264330139677

Option 1 ID : 264330547124

Option 2 ID : 264330547123

Option 3 ID : 264330547126

Option 4 ID : 264330547125

Status : Answered

Chosen Option : 4

Q.4 Which among the following books is an autobiography of Mithali Raj?

- Ans
- ☒ 1. All Round View
 - ☒ 2. Unguarded
 - ☒ 3. No Holding Back
 - ☒ 4. One More Over

Question Type : MCQ

Question ID : 264330140359

Option 1 ID : 264330549816

Option 2 ID : 264330549817

Option 3 ID : 264330549818

Option 4 ID : 264330549815

Status : Not Answered

Chosen Option : --

Q.5 What is the tenure of a Rajya Sabha member?

- Ans
- ☒ 1. Five years
 - ☒ 2. Three years
 - ☒ 3. Six years
 - ☒ 4. Two years

Question Type : MCQ

Question ID : 264330140672

Option 1 ID : 264330551036

Option 2 ID : 264330551037

Option 3 ID : 264330551038

Option 4 ID : 264330551035

Status : Answered

Chosen Option : 3

Q.6 Who established the Ramakrishna Mission?

- Ans
- ☒ 1. Tarun Sagar
 - ☒ 2. Jambuvijaya
 - ☒ 3. Gaur Gopal Das
 - ☒ 4. Swami Vivekananda

Question Type : MCQ

Question ID : 264330140742

Option 1 ID : 264330551315

Option 2 ID : 264330551318

Option 3 ID : 264330551316

Option 4 ID : 264330551317

Status : Answered

Chosen Option : 4

Q.7 Which among the following is a famous festival of Maharashtra, India?

- Ans ☒ 1. Gudi Padva
☒ 2. Ugadi
☒ 3. Chhath Puja
☒ 4. Onam

Question Type : MCQ
 Question ID : 264330140320
 Option 1 ID : 264330549661
 Option 2 ID : 264330549659
 Option 3 ID : 264330549660
 Option 4 ID : 264330549662
 Status : Answered
 Chosen Option : 1

Q.8 Fishes have _____ chambers of the heart.

- Ans ☒ 1. three
☒ 2. one
☒ 3. two
☒ 4. four

Question Type : MCQ
 Question ID : 264330140281
 Option 1 ID : 264330549505
 Option 2 ID : 264330549503
 Option 3 ID : 264330549504
 Option 4 ID : 264330549506
 Status : Answered
 Chosen Option : 3

Q.9 The summer months experience _____ in the northern part of India.

- Ans ☒ 1. rising air pressure
☒ 2. falling air pressure
☒ 3. decreasing temperature
☒ 4. heavy rain

Question Type : MCQ
 Question ID : 264330140684
 Option 1 ID : 264330551083
 Option 2 ID : 264330551085
 Option 3 ID : 264330551084
 Option 4 ID : 264330551086
 Status : Answered
 Chosen Option : 1

Q.10 The kingdoms of Chola, Chera and Pandyas belong to which period in the ancient India?

- Ans
- ☐ 1. Gupta Period
 - ☒ 2. Sangam Period
 - ☐ 3. Mauryan Period
 - ☐ 4. Mahajanapada period

Question Type : MCQ

Question ID : 264330140689

Option 1 ID : 264330551106

Option 2 ID : 264330551105

Option 3 ID : 264330551103

Option 4 ID : 264330551104

Status : Answered

Chosen Option : 2

Q.11 Which among the following was set up in 1956 by Indian government by nationalising all the existing private sector life insurance companies?

- Ans
- ☐ 1. United India Insurance Company Limited
 - ☐ 2. General Insurance Corporation of India
 - ☐ 3. New India Assurance Company Limited
 - ☒ 4. Life Insurance Corporation of India

Question Type : MCQ

Question ID : 264330140725

Option 1 ID : 264330551248

Option 2 ID : 264330551247

Option 3 ID : 264330551250

Option 4 ID : 264330551249

Status : Answered

Chosen Option : 4

Q.12 The 'Golden quadrilateral' does not connect which of the following cities?

- Ans
- ☐ 1. Delhi
 - ☐ 2. Mumbai
 - ☐ 3. Chennai
 - ☒ 4. Bhopal

Question Type : MCQ

Question ID : 264330139765

Option 1 ID : 264330547475

Option 2 ID : 264330547476

Option 3 ID : 264330547478

Option 4 ID : 264330547477

Status : Answered

Chosen Option : 4

Q.13 Azhar (2016), a sports-related movie, is based on which of the following sports?

Ans ☒ 1. Cricket

☐ 2. Mixed Martial arts

☐ 3. Boxing

☐ 4. Hockey

Question Type : MCQ

Question ID : 264330138949

Option 1 ID : 264330544405

Option 2 ID : 264330544406

Option 3 ID : 264330544403

Option 4 ID : 264330544404

Status : Answered

Chosen Option : 1

Q.14 Who among the following is a sitar maestro of global acclaim?

Ans ☐ 1. Bismillah Khan

☐ 2. Girija Devi

☒ 3. Shahid Parvez Khan

☐ 4. Vishwa Mohan Bhatt

Question Type : MCQ

Question ID : 264330138977

Option 1 ID : 264330544517

Option 2 ID : 264330544518

Option 3 ID : 264330544515

Option 4 ID : 264330544516

Status : Answered

Chosen Option : 3

Q.15 In which Indian movement, were the issues faced by indigo planters, first brought to light in 1917?

Ans ☒ 1. Champaran Satyagraha

☐ 2. Kheda Satyagraha

☐ 3. Ahmedabad Mill Strike

☐ 4. Non-Cooperation Movement

Question Type : MCQ

Question ID : 264330140741

Option 1 ID : 264330551311

Option 2 ID : 264330551313

Option 3 ID : 264330551312

Option 4 ID : 264330551314

Status : Answered

Chosen Option : 1

Q.16 _____ are the vessels which carry carbon dioxide-rich blood back to the heart.

- Ans ☒ 1. veins
☒ 2. neurons
☒ 3. capillaries
☒ 4. arteries

Question Type : MCQ
 Question ID : 264330140280
 Option 1 ID : 264330549501
 Option 2 ID : 264330549500
 Option 3 ID : 264330549502
 Option 4 ID : 264330549499
 Status : Answered
 Chosen Option : 1

Q.17 The Narmada river rises in the Amarkantak hills situated in which state?

- Ans ☒ 1. Rajasthan
☒ 2. Maharashtra
☒ 3. Madhya Pradesh
☒ 4. Gujarat

Question Type : MCQ
 Question ID : 264330139691
 Option 1 ID : 264330547181
 Option 2 ID : 264330547180
 Option 3 ID : 264330547182
 Option 4 ID : 264330547179
 Status : Answered
 Chosen Option : 3

Q.18 The first urban settlement to reach a population of one million was _____.

- Ans ☒ 1. New York
☒ 2. London
☒ 3. Berlin
☒ 4. Tokyo

Question Type : MCQ
 Question ID : 264330138991
 Option 1 ID : 264330544572
 Option 2 ID : 264330544571
 Option 3 ID : 264330544573
 Option 4 ID : 264330544574
 Status : Answered
 Chosen Option : 2

Q.19 Which of the following Indian state is biggest in terms of area?

- Ans ☒ 1. Rajasthan
☐ 2. Uttar Pradesh
☐ 3. Madhya Pradesh
☐ 4. Maharashtra

Question Type : MCQ

Question ID : 264330139717

Option 1 ID : 264330547285

Option 2 ID : 264330547284

Option 3 ID : 264330547286

Option 4 ID : 264330547283

Status : Answered

Chosen Option : 1

Q.20 Kathakali dance form originated from which of the following states?

- Ans ☐ 1. Tamil Nadu
☐ 2. Odisha
☒ 3. Kerala
☐ 4. Karnataka

Question Type : MCQ

Question ID : 264330140344

Option 1 ID : 264330549756

Option 2 ID : 264330549758

Option 3 ID : 264330549757

Option 4 ID : 264330549755

Status : Answered

Chosen Option : 3

Q.21 The objects which repeats its motion after some time is called _____.

- Ans ☒ 1. periodic motion
☐ 2. semi – circular motion
☐ 3. Rectilinear motion
☐ 4. Circular motion

Question Type : MCQ

Question ID : 264330139689

Option 1 ID : 264330547171

Option 2 ID : 264330547174

Option 3 ID : 264330547173

Option 4 ID : 264330547172

Status : Answered

Chosen Option : 1

Q.22 Who among the following is not associated with Kuchipudi dance form?

Ans ☒ 1. Ghanakanta Bora Borbayan

☐ 2. Vyjayanti Kashi

☐ 3. Vempati Chinna Satyam

☐ 4. Radha Reddy

Question Type : MCQ

Question ID : 264330141065

Option 1 ID : 264330552610

Option 2 ID : 264330552609

Option 3 ID : 264330552608

Option 4 ID : 264330552607

Status : Answered

Chosen Option : 2

Q.23 भारतीय संविधान के 42वें संशोधन की प्रस्तावना में निम्नलिखित में से कौन-से शब्द जोड़े गए थे?

Ans ☒ 1. समाजवादी

☐ 2. लोकतांत्रिक

☐ 3. सार्वभौम

☐ 4. गणतंत्र

Question Type : MCQ

Question ID : 264330140337

Option 1 ID : 264330549728

Option 2 ID : 264330549729

Option 3 ID : 264330549727

Option 4 ID : 264330549730

Status : Answered

Chosen Option : 1

Q.24 Which among the following bills passed in Parliament in 2022 replaced the Identification of Prisoners Act, 1920?

Ans ☐ 1. The Election Laws (Amendment) Bill

☐ 2. The Farm Laws Repeal Bill

☒ 3. The Criminal Procedure (Identification) Bill

☐ 4. The Central Vigilance Commission (Amendment) Bill

Question Type : MCQ

Question ID : 264330140701

Option 1 ID : 264330551152

Option 2 ID : 264330551154

Option 3 ID : 264330551151

Option 4 ID : 264330551153

Status : Answered

Chosen Option : 3

Q.25 किस भारतीय मंत्रालय ने जम्मू और कश्मीर पुनर्गठन विधेयक, 2019 पेश किया था?

- Ans
- ☒ 1. रक्षा मंत्रालय
 - ☒ 2. संसदीय कार्य मंत्रालय
 - ☒ 3. गृह मंत्रालय
 - ☒ 4. विदेश मंत्रालय

Question Type : MCQ
Question ID : 264330140368
Option 1 ID : 264330549851
Option 2 ID : 264330549854
Option 3 ID : 264330549852
Option 4 ID : 264330549853
Status : Answered
Chosen Option : 3

Section : English Language and Comprehension

Q.1 Identify the segment that contains a grammatical error. If there is no error, select 'No error'.

Do you have the faint / idea of what would happen / if Maa sees this?

- Ans
- ☒ 1. No error
 - ☒ 2. Do you have the faint
 - ☒ 3. if Maa sees this?
 - ☒ 4. idea of what would happen

Question Type : MCQ
Question ID : 264330136562
Option 1 ID : 264330534986
Option 2 ID : 264330534983
Option 3 ID : 264330534985
Option 4 ID : 264330534984
Status : Answered
Chosen Option : 4

Q.2 Identify the segment that contains a grammatical error. If there is no error, select 'No error'.

Leaders are self-direct, / but learning and understanding / are the keys to self-direction.

- Ans
- ☒ 1. No error
 - ☒ 2. but learning and understanding
 - ☒ 3. Leaders are self-direct,
 - ☒ 4. are the keys to self-direction.

Question Type : MCQ
Question ID : 264330135847
Option 1 ID : 264330532258
Option 2 ID : 264330532256
Option 3 ID : 264330532255
Option 4 ID : 264330532257
Status : Answered
Chosen Option : 3

Q.3 A sentence has been given with a blank to be filled with an appropriate option. Choose the correct alternative.

I smiled at my son and _____ thankful.

- Ans**
- ☒ 1. feeling
 - ☒ 2. felt
 - ☒ 3. fallen
 - ☒ 4. feel

Question Type : **MCQ**
 Question ID : **264330135643**
 Option 1 ID : **264330531474**
 Option 2 ID : **264330531471**
 Option 3 ID : **264330531473**
 Option 4 ID : **264330531472**
 Status : **Answered**
 Chosen Option : **2**

Q.4 Select the most appropriate antonym of the given word.

Reservation

- Ans**
- ☒ 1. Catch
 - ☒ 2. Conserve
 - ☒ 3. Openness
 - ☒ 4. Doubt

Question Type : **MCQ**
 Question ID : **264330136179**
 Option 1 ID : **264330533511**
 Option 2 ID : **264330533514**
 Option 3 ID : **264330533513**
 Option 4 ID : **264330533512**
 Status : **Answered**
 Chosen Option : **3**

Q.5 Select the most appropriate synonym to substitute the bracketed word in the given sentence.

I do not object to this (accolade) on the grounds that Edinburgh has little literary tradition.

- Ans**
- ☒ 1. Stubborn
 - ☒ 2. Criticism
 - ☒ 3. Praise
 - ☒ 4. Indictment

Question Type : **MCQ**
 Question ID : **264330136760**
 Option 1 ID : **264330535745**
 Option 2 ID : **264330535746**
 Option 3 ID : **264330535744**
 Option 4 ID : **264330535743**
 Status : **Answered**
 Chosen Option : **3**

Q.6 Choose the sentence with no spelling error.

- Ans
- ☒ 1. Such blooms typicly don't lead to deaths.
 - ☒ 2. Such blooms typically don't leade to deaths.
 - ☒ 3. Such blooms typically don't lead to deaths.
 - ☒ 4. Such bloms typically don't lead to deaths.

Question Type : MCQ
 Question ID : 264330135532
 Option 1 ID : 264330531032
 Option 2 ID : 264330531034
 Option 3 ID : 264330531031
 Option 4 ID : 264330531033
 Status : Answered
 Chosen Option : 3

Q.7 Select the most appropriate synonym of the given word.

Converge

- Ans
- ☒ 1. Homicide
 - ☒ 2. Coincide
 - ☒ 3. Verbicide
 - ☒ 4. Fratricide

Question Type : MCQ
 Question ID : 264330135835
 Option 1 ID : 264330532210
 Option 2 ID : 264330532208
 Option 3 ID : 264330532207
 Option 4 ID : 264330532209
 Status : Answered
 Chosen Option : 2

Q.8 Select the word segment that substitutes (replaces) the bracketed word segment correctly and completes the sentence meaningfully. Select the option 'no correction required' if the sentence is correct as given.

(Most time) they didn't have enough to eat and went to bed hungry

- Ans
- ☒ 1. No correction required
 - ☒ 2. Many a times
 - ☒ 3. More times
 - ☒ 4. Many a time

Question Type : MCQ
 Question ID : 264330135692
 Option 1 ID : 264330531662
 Option 2 ID : 264330531660
 Option 3 ID : 264330531659
 Option 4 ID : 264330531661
 Status : Answered
 Chosen Option : 4

Q.9 Choose the incorrectly spelt word.

- Ans
- ☒ 1. Station
 - ☒ 2. Magic
 - ☒ 3. Contaxte
 - ☒ 4. Charity

Question Type : MCQ
Question ID : 264330135252
Option 1 ID : 264330529928
Option 2 ID : 264330529927
Option 3 ID : 264330529930
Option 4 ID : 264330529929
Status : Answered
Chosen Option : 3

Q.10 Select the appropriate antonym for the underlined word.

What youthful philosophers and experimentalists we are!

- Ans
- ☒ 1. unformed
 - ☒ 2. ripened
 - ☒ 3. childlike
 - ☒ 4. raw

Question Type : MCQ
Question ID : 264330135171
Option 1 ID : 264330529617
Option 2 ID : 264330529616
Option 3 ID : 264330529615
Option 4 ID : 264330529618
Status : Answered
Chosen Option : 3

Q.11 Find the part of the given sentence that has an error in it. If there is no error, choose 'No error'.

Diseases passed from animals to humans are called zoonoses.

- Ans
- ☒ 1. Diseases passed from
 - ☒ 2. are called zoonoses.
 - ☒ 3. animals to humans
 - ☒ 4. No error

Question Type : MCQ
Question ID : 264330135153
Option 1 ID : 264330529547
Option 2 ID : 264330529549
Option 3 ID : 264330529548
Option 4 ID : 264330529550
Status : Answered
Chosen Option : 1

Q.12 Fill in the blank with the most appropriate option.

I think she's right to warn you not to _____ your temper.

- Ans
- ☐ 1. drop
 - ☐ 2. last
 - ☒ 3. lose
 - ☐ 4. forget

Question Type : MCQ
Question ID : 264330136160
Option 1 ID : 264330533442
Option 2 ID : 264330533439
Option 3 ID : 264330533441
Option 4 ID : 264330533440
Status : Answered
Chosen Option : 3

Q.13 Improve the underlined part of the sentence. Choose 'No improvement' as an answer if the sentence is grammatically correct.

He had thrown the wrapper into the garbage.

- Ans
- ☐ 1. throw the
 - ☐ 2. thrown the
 - ☒ 3. No improvement
 - ☐ 4. has throwing the

Question Type : MCQ
Question ID : 264330135156
Option 1 ID : 264330529559
Option 2 ID : 264330529560
Option 3 ID : 264330529562
Option 4 ID : 264330529561
Status : Answered
Chosen Option : 3

Q.14 Choose the word that can substitute the given group of words.

A place for housing aeroplanes

- Ans
- ☐ 1. Hutch
 - ☒ 2. Hangar
 - ☐ 3. Brewery
 - ☐ 4. Burrow

Question Type : MCQ
Question ID : 264330135245
Option 1 ID : 264330529901
Option 2 ID : 264330529900
Option 3 ID : 264330529902
Option 4 ID : 264330529899
Status : Answered
Chosen Option : 2

Q.15 Fill in the blank with the most appropriate option.

As he walked past the chambers, Samir asked everyone to quiet _____.

- Ans
- ☒ 1. please
 - ☒ 2. rise
 - ☒ 3. up
 - ☒ 4. down

Question Type : MCQ
 Question ID : 264330136185
 Option 1 ID : 264330533536
 Option 2 ID : 264330533538
 Option 3 ID : 264330533535
 Option 4 ID : 264330533537
 Status : Answered
 Chosen Option : 1

Q.16 Select the word segment that substitutes (replaces) the bracketed word segment correctly and completes the sentence meaningfully. Select the option 'no correction required' if the sentence is correct as given.

(Many man) have tried to find the caves but none have succeeded.

- Ans
- ☒ 1. Much man
 - ☒ 2. No correction required
 - ☒ 3. Many a man
 - ☒ 4. Many a men

Question Type : MCQ
 Question ID : 264330136270
 Option 1 ID : 264330533864
 Option 2 ID : 264330533866
 Option 3 ID : 264330533865
 Option 4 ID : 264330533863
 Status : Marked For Review
 Chosen Option : 4

Q.17 Select the most appropriate option to fill in the blank.

The life of the church seems, indeed, to have been in a more stagnant and _____ condition in this age than at any other period of English history.

- Ans
- ☒ 1. tangential
 - ☒ 2. torpid
 - ☒ 3. expedite
 - ☒ 4. truculent

Question Type : MCQ
 Question ID : 264330136194
 Option 1 ID : 264330533571
 Option 2 ID : 264330533572
 Option 3 ID : 264330533573
 Option 4 ID : 264330533574
 Status : Answered
 Chosen Option : 2

Q.18 In the following question, out of the given four alternatives, select the alternative which best expresses the meaning of the Idiom/Phrase.

To strain every nerve

- Ans**
- ☒ 1. To go for physiotherapy
 - ☒ 2. To manipulate someone in the best way
 - ☒ 3. To claim something
 - ☒ 4. To make a great effort

Question Type : **MCQ**
 Question ID : **264330135173**
 Option 1 ID : **264330529626**
 Option 2 ID : **264330529625**
 Option 3 ID : **264330529623**
 Option 4 ID : **264330529624**
 Status : **Answered**
 Chosen Option : **4**

Q.19 Select the most appropriate word for the given group of words.

To reveal a secret

- Ans**
- ☒ 1. Vilify
 - ☒ 2. Divulge
 - ☒ 3. Conceal
 - ☒ 4. Discern

Question Type : **MCQ**
 Question ID : **264330136201**
 Option 1 ID : **264330533597**
 Option 2 ID : **264330533596**
 Option 3 ID : **264330533598**
 Option 4 ID : **264330533595**
 Status : **Answered**
 Chosen Option : **4**

Q.20 Select the most appropriate meaning of the given idiom.

Be at a crossroads

- Ans**
- ☒ 1. To have taken the wrong road
 - ☒ 2. To be confused
 - ☒ 3. To make a very important decision
 - ☒ 4. To have forgotten the way

Question Type : **MCQ**
 Question ID : **264330135761**
 Option 1 ID : **264330531926**
 Option 2 ID : **264330531925**
 Option 3 ID : **264330531924**
 Option 4 ID : **264330531923**
 Status : **Answered**
 Chosen Option : **2**

Comprehension:

In the following passage some words have been deleted. Fill in the blanks with the help of the alternatives given. Select the most appropriate option for each number.

Professor Sprout was standing (1) _____ a trestle bench in the centre of the greenhouse. (2) _____ twenty (3) _____ of different-coloured ear muffs (4) _____ lying on the bench. Harry (5) _____ his place between Ron and Hermione.

SubQuestion No : 21

Q.21 Select the most appropriate option to fill in blank number 1.

- Ans
- ☒ 1. back off
 - ☒ 2. after back
 - ☒ 3. behind
 - ☒ 4. afterwards

Question Type : MCQ

Question ID : 264330136570

Option 1 ID : 264330535011

Option 2 ID : 264330535012

Option 3 ID : 264330535013

Option 4 ID : 264330535014

Status : Answered

Chosen Option : 3

Comprehension:

In the following passage some words have been deleted. Fill in the blanks with the help of the alternatives given. Select the most appropriate option for each number.

Professor Sprout was standing (1) _____ a trestle bench in the centre of the greenhouse. (2) _____ twenty (3) _____ of different-coloured ear muffs (4) _____ lying on the bench. Harry (5) _____ his place between Ron and Hermione.

SubQuestion No : 22

Q.22 Select the most appropriate option to fill in blank number 2.

- Ans
- ☒ 1. Near by
 - ☒ 2. Utmost
 - ☒ 3. About
 - ☒ 4. Round

Question Type : MCQ

Question ID : 264330136571

Option 1 ID : 264330535018

Option 2 ID : 264330535015

Option 3 ID : 264330535017

Option 4 ID : 264330535016

Status : Answered

Chosen Option : 3

Comprehension:

In the following passage some words have been deleted. Fill in the blanks with the help of the alternatives given. Select the most appropriate option for each number.

Professor Sprout was standing (1) _____ a trestle bench in the centre of the greenhouse. (2) _____ twenty (3) _____ of different-coloured ear muffs (4) _____ lying on the bench. Harry (5) _____ his place between Ron and Hermione.

SubQuestion No : 23

Q.23 Select the most appropriate option to fill in blank number 3.

- Ans
- ☒ 1. couples
 - ☒ 2. pairs
 - ☒ 3. teams
 - ☒ 4. duality

Question Type : MCQ
Question ID : 264330136572
Option 1 ID : 264330535019
Option 2 ID : 264330535022
Option 3 ID : 264330535020
Option 4 ID : 264330535021
Status : Answered
Chosen Option : 2

Comprehension:

In the following passage some words have been deleted. Fill in the blanks with the help of the alternatives given. Select the most appropriate option for each number.

Professor Sprout was standing (1) _____ a trestle bench in the centre of the greenhouse. (2) _____ twenty (3) _____ of different-coloured ear muffs (4) _____ lying on the bench. Harry (5) _____ his place between Ron and Hermione.

SubQuestion No : 24

Q.24 Select the most appropriate option to fill in blank number 4.

- Ans
- ☒ 1. lay
 - ☒ 2. was
 - ☒ 3. were
 - ☒ 4. continue

Question Type : MCQ
Question ID : 264330136573
Option 1 ID : 264330535026
Option 2 ID : 264330535024
Option 3 ID : 264330535023
Option 4 ID : 264330535025
Status : Answered
Chosen Option : 3

Comprehension:

In the following passage some words have been deleted. Fill in the blanks with the help of the alternatives given. Select the most appropriate option for each number.

Professor Sprout was standing (1) _____ a trestle bench in the centre of the greenhouse. (2) _____ twenty (3) _____ of different-coloured ear muffs (4) _____ lying on the bench. Harry (5) _____ his place between Ron and Hermione.

SubQuestion No : 25

Q.25 Select the most appropriate option to fill in blank number 5.

- Ans
- ☒ 1. have to take
 - ☒ 2. had taken
 - ☒ 3. has took
 - ☒ 4. have taken

Question Type : MCQ

Question ID : 264330136574

Option 1 ID : 264330535027

Option 2 ID : 264330535028

Option 3 ID : 264330535030

Option 4 ID : 264330535029

Status : Answered

Chosen Option : 2

