

## Multi Tasking Non Technical Staff and Havaladar CBIC and CBN Examination 2022

Roll Number	
Candidate Name	
Venue Name	TCS Gito Bitan
Exam Date	16/05/2023
Exam Time	9:00 AM - 10:30 AM
Subject	MTS Non Tech Havaladar CBIC and CBN Examination 2022

### Section : Numerical and Mathematical Ability

**Q.1** What is the compound interest on Rs. 8400 for 2 years at 10% per annum compounded annually?

- Ans**
- ☒ 1. Rs. 10164
  - ☒ 2. Rs. 840
  - ☒ 3. Rs. 5064
  - ☒ 4. Rs. 1764

Question Type : **MCQ**

Question ID : **264330138048**

Option 1 ID : **264330540799**

Option 2 ID : **264330540800**

Option 3 ID : **264330540801**

Option 4 ID : **264330540802**

Status : **Answered**

Chosen Option : **4**

**Q.2** 14 workers working 16 hours per day can demolish a building in 81 days. In how many days 18 workers working 24 hours per day can demolish the same building?

- Ans**
- ☒ 1. 54 days
  - ☒ 2. 42 days
  - ☒ 3. 70 days
  - ☒ 4. 30 days

Question Type : **MCQ**

Question ID : **264330135146**

Option 1 ID : **264330529519**

Option 2 ID : **264330529522**

Option 3 ID : **264330529520**

Option 4 ID : **264330529521**

Status : **Answered**

Chosen Option : **2**

# Test Prime

**ALL EXAMS,  
ONE SUBSCRIPTION**



**70,000+**  
Mock Tests



**Personalised  
Report Card**



**Unlimited  
Re-Attempt**



**600+**  
Exam Covered



**Previous Year  
Papers**



**500%  
Refund**



**ATTEMPT FREE MOCK NOW**

**Q.3** Rs. 15000 is divided among E, F and G. E's share and F's share are in the ratio of 3 : 2. F's share and G's share are in the ratio of 6 : 5. How much amount will F receive?

- Ans**
- ☐ 1. Rs. 3750
  - ☐ 2. Rs. 6750
  - ☒ 3. Rs. 4500
  - ☐ 4. Rs. 6000

Question Type : MCQ

Question ID : 264330137162

Option 1 ID : 264330537294

Option 2 ID : 264330537293

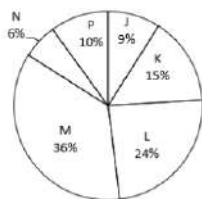
Option 3 ID : 264330537292

Option 4 ID : 264330537291

Status : Answered

Chosen Option : 3

**Q.4** The pie chart given below shows the number of students studying in six schools. Total number of students studying in all these six schools are 7000. Number of students studying in a particular school is shown as a percentage of total number of students studying in all these six schools.



What is the difference between the average number of students studying in school K and L and average number of students studying in school M and N?

- Ans**
- ☐ 1. 85
  - ☐ 2. 90
  - ☒ 3. 105
  - ☐ 4. 115

Question Type : MCQ

Question ID : 264330137173

Option 1 ID : 264330537338

Option 2 ID : 264330537336

Option 3 ID : 264330537337

Option 4 ID : 264330537335

Status : Answered

Chosen Option : 3

**Q.5** A car left 4 hours later than the scheduled time but in order to reach its destination 480 km away in time, it had to increase its usual speed by 10 km/hr. What is the usual speed of the car?

- Ans**
- ☐ 1. 40 km/hr
  - ☐ 2. 60 km/hr
  - ☒ 3. 30 km/hr
  - ☐ 4. 50 km/hr

Question Type : MCQ

Question ID : 264330137154

Option 1 ID : 264330537262

Option 2 ID : 264330537260

Option 3 ID : 264330537261

Option 4 ID : 264330537259

Status : Answered

Chosen Option : 3

**Q.6** By selling an article at Rs.425, a shopkeeper had a loss of 15%. At what price should he sell the article so as to make a profit of 20%?

- Ans**
- ☒ 1. Rs.800
  - ☒ 2. Rs.1000
  - ☒ 3. Rs.400
  - ☒ 4. Rs.600

Question Type : **MCQ**

Question ID : **264330138095**

Option 1 ID : **264330540989**

Option 2 ID : **264330540990**

Option 3 ID : **264330540987**

Option 4 ID : **264330540988**

Status : **Answered**

Chosen Option : **4**

**Q.7** A sum of money at simple interest amounts to Rs.5704 in 3 years and to Rs.6072 in 4 years. The sum is:

- Ans**
- ☒ 1. Rs.5020
  - ☒ 2. Rs.4800
  - ☒ 3. Rs.4600
  - ☒ 4. Rs.4980

Question Type : **MCQ**

Question ID : **264330138100**

Option 1 ID : **264330541008**

Option 2 ID : **264330541009**

Option 3 ID : **264330541007**

Option 4 ID : **264330541010**

Status : **Answered**

Chosen Option : **3**

**Q.8** Reshma alone can do a work in 14 days. Bhavana is 40% more efficient than Reshma. The number of days, Bhavana alone will take to do the same piece of work is:

- Ans**
- ☒ 1. 10 days
  - ☒ 2. 40 days
  - ☒ 3. 28 days
  - ☒ 4. 14 days

Question Type : **MCQ**

Question ID : **264330138714**

Option 1 ID : **264330543463**

Option 2 ID : **264330543466**

Option 3 ID : **264330543465**

Option 4 ID : **264330543464**

Status : **Answered**

Chosen Option : **1**

Q.9 The least number which when divided by 14, 18 and 36 and leaves 1 as remainder in each case is:

- Ans
- ☐ 1. 250
  - ☐ 2. 252
  - ☒ 3. 253
  - ☐ 4. 251

Question Type : MCQ  
 Question ID : 264330138037  
 Option 1 ID : 264330540757  
 Option 2 ID : 264330540755  
 Option 3 ID : 264330540756  
 Option 4 ID : 264330540758  
 Status : Answered  
 Chosen Option : 3

Q.10 A trader allowed a discount of 25 percent on a trolley bag having list price of Rs. 1488 and earns a profit of 20 percent. What is the cost price of the trolley bag?

- Ans
- ☐ 1. Rs. 908
  - ☐ 2. Rs. 880
  - ☒ 3. Rs. 930
  - ☐ 4. Rs. 960

Question Type : MCQ  
 Question ID : 264330137165  
 Option 1 ID : 264330537304  
 Option 2 ID : 264330537306  
 Option 3 ID : 264330537303  
 Option 4 ID : 264330537305  
 Status : Answered  
 Chosen Option : 3

Q.11 Average of 9 numbers is 47. If a number is removed, then the average becomes 48. Which number was removed?

- Ans
- ☒ 1. 39
  - ☐ 2. 42
  - ☐ 3. 45
  - ☐ 4. 40

Question Type : MCQ  
 Question ID : 264330137155  
 Option 1 ID : 264330537263  
 Option 2 ID : 264330537264  
 Option 3 ID : 264330537266  
 Option 4 ID : 264330537265  
 Status : Answered  
 Chosen Option : 1

Q.12 What is the Highest Common Factor of 25, 15 and 75?

- Ans
- ☐ 1. 7
  - ☐ 2. 15
  - ☐ 3. 25
  - ☒ 4. 5

Question Type : MCQ

Question ID : 264330137169

Option 1 ID : 264330537319

Option 2 ID : 264330537322

Option 3 ID : 264330537320

Option 4 ID : 264330537321

Status : Answered

Chosen Option : 4

Q.13 The given data shows the number of mobiles (in thousands) manufactured by companies C1, C2, C3 and C4 in 2018, 2019 and 2020. Which company manufactured the least number of mobiles in total across all the years?

Company	2018	2019	2020
C1	44	33	70
C2	32	54	50
C3	72	63	82
C4	84	71	49

- Ans
- ☐ 1. C3
  - ☒ 2. C2
  - ☐ 3. C4
  - ☐ 4. C1

Question Type : MCQ

Question ID : 264330135429

Option 1 ID : 264330530625

Option 2 ID : 264330530626

Option 3 ID : 264330530623

Option 4 ID : 264330530624

Status : Answered

Chosen Option : 2

Q.14 A number is increased by 20% and then decreased by 20%. What is the net percent change in the number?

- Ans
- ☐ 1. 4% increase
  - ☒ 2. 4% decrease
  - ☐ 3. 5% increase
  - ☐ 4. 5% decrease

Question Type : MCQ

Question ID : 264330138041

Option 1 ID : 264330540773

Option 2 ID : 264330540771

Option 3 ID : 264330540774

Option 4 ID : 264330540772

Status : Answered

Chosen Option : 2

Q.15 Find the value of  $\sqrt{[(7^2 + 6^3 + 9^2) \div 2 + 52]}$

- Ans
- ☐ 1. 14
  - ☒ 2. 15
  - ☐ 3. 16
  - ☐ 4. 13

Question Type : MCQ  
 Question ID : 264330135413  
 Option 1 ID : 264330530559  
 Option 2 ID : 264330530561  
 Option 3 ID : 264330530562  
 Option 4 ID : 264330530560  
 Status : Answered  
 Chosen Option : 2

Q.16 If  $X : Y = 3 : 2$ , then what is the value of  $(X - Y) : (X + Y)$ ?

- Ans
- ☐ 1. 4 : 5
  - ☒ 2. 1 : 5
  - ☐ 3. 8 : 9
  - ☐ 4. 3 : 7

Question Type : MCQ  
 Question ID : 264330137161  
 Option 1 ID : 264330537288  
 Option 2 ID : 264330537287  
 Option 3 ID : 264330537289  
 Option 4 ID : 264330537290  
 Status : Answered  
 Chosen Option : 2

Q.17 Difference between the circumferences of two circles is 4.4 cm and radius of smaller circle is 1.4 cm. The radius of the larger circle is:

- Ans
- ☐ 1. 4.1 cm
  - ☐ 2. 0.7 cm
  - ☒ 3. 2.1 cm
  - ☐ 4. 3.5 cm

Question Type : MCQ  
 Question ID : 264330138718  
 Option 1 ID : 264330543482  
 Option 2 ID : 264330543479  
 Option 3 ID : 264330543481  
 Option 4 ID : 264330543480  
 Status : Answered  
 Chosen Option : 3

**Q.18** Average of 8 numbers is 44. The average of first three numbers is 50 and the average of next two numbers is 52. If the sixth number is 6 and 8 less than seventh and eighth number respectively, then what is the value of eighth number?

- Ans**
- ☒ 1. 36
  - ☐ 2. 32
  - ☐ 3. 40
  - ☐ 4. 56

Question Type : **MCQ**  
 Question ID : **264330138019**  
 Option 1 ID : **264330540683**  
 Option 2 ID : **264330540685**  
 Option 3 ID : **264330540684**  
 Option 4 ID : **264330540686**  
 Status : **Answered**  
 Chosen Option : **1**

**Q.19** The height of a right circular cone is 24 cm. If the diameter of its base is 36 cm, then what will be the curved surface area of the cone?

- Ans**
- ☐ 1. 1444.6 cm<sup>2</sup>
  - ☐ 2. 2400.9 cm<sup>2</sup>
  - ☒ 3. 1697.14 cm<sup>2</sup>
  - ☐ 4. 2144.2 cm<sup>2</sup>

Question Type : **MCQ**  
 Question ID : **264330135151**  
 Option 1 ID : **264330529542**  
 Option 2 ID : **264330529540**  
 Option 3 ID : **264330529539**  
 Option 4 ID : **264330529541**  
 Status : **Answered**  
 Chosen Option : **3**

**Q.20** The cost price of 50 articles is same as the selling price of x articles. If there is a profit of 25 percent, then what is the value of x? (Selling price of all articles is same. Cost price of all articles is same)

- Ans**
- ☐ 1. 20
  - ☒ 2. 40
  - ☐ 3. 30
  - ☐ 4. 25

Question Type : **MCQ**  
 Question ID : **264330137160**  
 Option 1 ID : **264330537286**  
 Option 2 ID : **264330537283**  
 Option 3 ID : **264330537284**  
 Option 4 ID : **264330537285**  
 Status : **Answered**  
 Chosen Option : **2**

Q.1 Select the option figure in which the given figure is embedded. (rotation is NOT allowed)

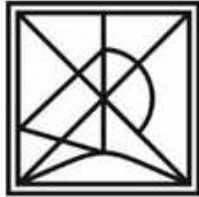


Ans

✗ 1.



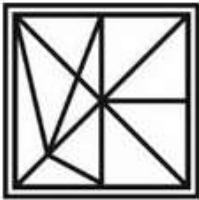
✓ 2.



✗ 3.



✗ 4.



Question Type : MCQ

Question ID : 264330135634

Option 1 ID : 264330531437

Option 2 ID : 264330531435

Option 3 ID : 264330531436

Option 4 ID : 264330531438

Status : Answered

Chosen Option : 2

**Q.2** In the following question below are given some statements followed by some conclusions based on those statements. Taking the given statements to be true even if they seem to be at variance from commonly known facts. Read all the conclusions and then decide which of the given conclusion logically follows the given statements.

Statements:

I. Some S are P.

II. No P is L.

Conclusion:

I. All S are P.

II. All L are S.

- Ans**
- ☒ 1. Both conclusions I and II follows
  - ☒ 2. Neither conclusion follows
  - ☒ 3. Only conclusion I follows
  - ☒ 4. Only conclusion II follows

Question Type : MCQ

Question ID : 264330137119

Option 1 ID : 264330537121

Option 2 ID : 264330537122

Option 3 ID : 264330537119

Option 4 ID : 264330537120

Status : Answered

Chosen Option : 2

**Q.3** Select the option that is related to the third number in the same way as the second number is related to the first number.  
64 : 15 :: 88 : ?

- Ans**
- ☒ 1. 21
  - ☒ 2. 7
  - ☒ 3. 12
  - ☒ 4. 31

Question Type : MCQ

Question ID : 264330137845

Option 1 ID : 264330539988

Option 2 ID : 264330539990

Option 3 ID : 264330539989

Option 4 ID : 264330539987

Status : Answered

Chosen Option : 1

**Q.4** In a certain code language, 'CENTRE' is coded as '982748', 'DEVICE' is coded as '583098'. What is the code for 'DIRECT' in that code language?

- Ans**
- ☒ 1. 506897
  - ☒ 2. 694879
  - ☒ 3. 504897
  - ☒ 4. 564897

Question Type : MCQ

Question ID : 264330138545

Option 1 ID : 264330542787

Option 2 ID : 264330542789


Option 3 ID : 264330542788

Option 4 ID : 264330542790

Status : Answered

Chosen Option : 3

Q.5 Which answer figure will complete the pattern in the question figure (rotation is not allowed)?

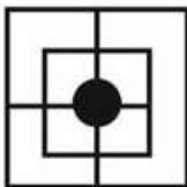


Ans

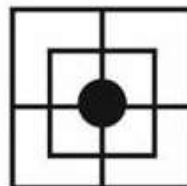
✗ 1.



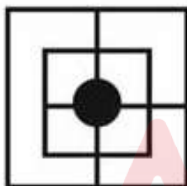
✗ 2.



✓ 3.



✗ 4.



Question Type : MCQ

Question ID : 264330137129

Option 1 ID : 264330537162

Option 2 ID : 264330537160

Option 3 ID : 264330537161

Option 4 ID : 264330537159

Status : Answered

Chosen Option : 3

Q.6 After interchanging the given two signs, what will be the value of the given equation?

$\times$  and  $\div$ ;  $25 + 5 \times 35 \div 7 - 26$

Ans ☒ 1. 0

☐ 2. 10

☐ 3. 50

☐ 4. 51

Question Type : MCQ

Question ID : 264330137125

Option 1 ID : 264330537144

Option 2 ID : 264330537146

Option 3 ID : 264330537143

Option 4 ID : 264330537145

Status : Answered

Chosen Option : 1

Q.7 Eight friends Anil, Kamal, Ram, Sanjay, Aakash, Vivek, Rahul and Ramu are sitting around a circular table facing towards the centre (not necessarily in the same order). Ram is to the immediate right of Anil. Anil is fourth to the right of Sanjay. Rahul is fourth to the left of Aakash. Aakash is second to the left of Anil. Ramu is second to the left of Kamal. Vivek is second to the right of Kamal. Who is second to the right of Vivek?

Ans ☐ 1. Aakash

☒ 2. Ram

☐ 3. Ramu

☐ 4. Vivek

Question Type : MCQ

Question ID : 264330137117

Option 1 ID : 264330537113

Option 2 ID : 264330537112

Option 3 ID : 264330537111

Option 4 ID : 264330537114

Status : Answered

Chosen Option : 2

Q.8 Number of letters in six words B1, B2, B3, B4, B5 and B6 are compared. Number of letters in B1 are least. Number of letters in B4 are more than B1 but less than B2. Number of letters in B6 are more than B3 and B5. Number of letters in B3 are more than B2. If number of letters in B5 are more than B3, then the number of letters in B4 are less than the number of letters of how many words?

Ans ☒ 1. 4

☐ 2. 2

☐ 3. 1

☐ 4. 3

Question Type : MCQ

Question ID : 264330137118

Option 1 ID : 264330537118

Option 2 ID : 264330537116

Option 3 ID : 264330537115

Option 4 ID : 264330537117

Status : Answered

Chosen Option : 1

**Q.9** In a certain code language, 'HAND' is written as 'SZMW'. How will 'BODY' be written in that language?

- Ans**
- ☒ 1. YWLB
  - ☒ 2. YLWB
  - ☒ 3. BLWY
  - ☒ 4. YLWE

Question Type : **MCQ**  
 Question ID : **264330133700**  
 Option 1 ID : **264330523824**  
 Option 2 ID : **264330523823**  
 Option 3 ID : **264330523825**  
 Option 4 ID : **264330523826**  
 Status : **Answered**  
 Chosen Option : **2**

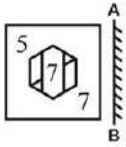
**Q.10** A series is given with one term missing. Select the correct alternative from the given ones that will complete the series.

RAIR, UBLS, XCOT, ADRU, ?

- Ans**
- ☒ 1. DEVV
  - ☒ 2. DEUV
  - ☒ 3. DFUV
  - ☒ 4. DFFV

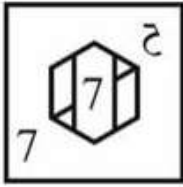
Question Type : **MCQ**  
 Question ID : **264330137108**  
 Option 1 ID : **264330537078**  
 Option 2 ID : **264330537077**  
 Option 3 ID : **264330537076**  
 Option 4 ID : **264330537075**  
 Status : **Answered**  
 Chosen Option : **2**

Q.11 If a mirror is placed on the line AB, then out of the option figures which figure will be the right image of the question figure?



Ans

✗ 1.



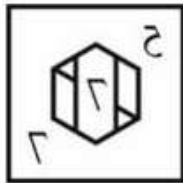
✗ 2.



✗ 3.



✓ 4.



Question Type : MCQ

Question ID : 264330135635

Option 1 ID : 264330531440

Option 2 ID : 264330531441

Option 3 ID : 264330531442

Option 4 ID : 264330531439

Status : Answered

Chosen Option : 4

**Q.12** Select the option in which the numbers shares the same relationship in set as that shared by the numbers in the given set.  
(NOTE: Operations should be performed on the whole numbers, without breaking down the numbers into its constituent digits. E.g. 13 – Operations on 13 such as adding /subtracting /multiplying etc. to 13 can be performed. Breaking down 13 into 1 and 3 and then performing mathematical operations on 1 and 3 is not allowed)

(10, 30, 90)

(20, 60, 180)

- Ans**
- ☒ 1. (30, 45, 60)
  - ☒ 2. (30, 90, 270)
  - ☐ 3. (30, 60, 90)
  - ☐ 4. (30, 90, 310)

Question Type : **MCQ**

Question ID : **264330137124**

Option 1 ID : **264330537141**

Option 2 ID : **264330537140**

Option 3 ID : **264330537139**

Option 4 ID : **264330537142**

Status : **Answered**

Chosen Option : **2**

**Q.13** In the following question below are given some statements followed by some conclusions based on those statements. Taking the given statements to be true even if they seem to be at variance from commonly known facts. Read all the conclusions and then decide which of the given conclusion logically follows the given statements.

Statements:

I. Some B are T.

II. No K is B.

Conclusion:

I. No B is K.

II. Some T are B.

III. Some T are K.

- Ans**
- ☒ 1. Both conclusions I and II follows
  - ☐ 2. All conclusion follows
  - ☐ 3. Both conclusions I and III follows
  - ☐ 4. Neither conclusion follows

Question Type : **MCQ**

Question ID : **264330137120**

Option 1 ID : **264330537123**

Option 2 ID : **264330537125**

Option 3 ID : **264330537124**

Option 4 ID : **264330537126**

Status : **Answered**

Chosen Option : **1**

**Q.14** In a certain code language, 'SLDDER' is coded as 'PEBDJS'. What is the code for 'TALLER' in that code language?

- Ans**
- ☒ 1. PDJLYT
  - ☒ 2. PEJLYT
  - ☒ 3. PEJLTY
  - ☒ 4. PEJMYT

Question Type : **MCQ**

Question ID : **264330137092**

Option 1 ID : **264330537013**

Option 2 ID : **264330537011**

Option 3 ID : **264330537012**

Option 4 ID : **264330537014**

Status : **Answered**

Chosen Option : **2**

**Q.15** Which of the following numbers will replace the question mark (?) in the given series?

16, 21, 31, 46, 66, 91, ?

- Ans**
- ☒ 1. 243
  - ☒ 2. 121
  - ☒ 3. 211
  - ☒ 4. 112

Question Type : **MCQ**

Question ID : **264330137843**

Option 1 ID : **264330539980**

Option 2 ID : **264330539979**

Option 3 ID : **264330539982**

Option 4 ID : **264330539981**

Status : **Answered**

Chosen Option : **2**

**Q.16** Select the option that is related to the fifth term in the same way as the second term is related to the first term and fourth term is related to third term.

T3G : V16L :: R29A : T42F :: M43P : ?

- Ans**
- ☒ 1. O56V
  - ☒ 2. P56V
  - ☒ 3. P56U
  - ☒ 4. O56U

Question Type : **MCQ**

Question ID : **264330137110**

Option 1 ID : **264330537085**

Option 2 ID : **264330537086**

Option 3 ID : **264330537084**

Option 4 ID : **264330537083**

Status : **Answered**

Chosen Option : **4**

**Q.17** If A denotes 'addition', B denotes 'multiplication', C denotes 'subtraction', and D denotes 'division', then what will be the value of the following equation?  
 $7A(18D3)C5=?$

- Ans**
- ☒ 1. 5
  - ☒ 2. 13
  - ☒ 3. 18
  - ☒ 4. 8

Question Type : **MCQ**  
 Question ID : **264330137870**  
 Option 1 ID : **264330540087**  
 Option 2 ID : **264330540088**  
 Option 3 ID : **264330540089**  
 Option 4 ID : **264330540090**  
 Status : **Answered**  
 Chosen Option : **4**

**Q.18** Words given on the left side of (::) are related with each other by some Logic/Rule/Relation. Select the missing word/word pair on the right side of (::) from the given alternatives based on the same Logic/Rule/Relation.

Cow : Herbivorous :: ?

- Ans**
- ☒ 1. Elephant : Herbivorous
  - ☒ 2. Goat : Carnivorous
  - ☒ 3. Sheep : Carnivorous
  - ☒ 4. Carnivorous : Lion

Question Type : **MCQ**  
 Question ID : **264330137111**  
 Option 1 ID : **264330537089**  
 Option 2 ID : **264330537088**  
 Option 3 ID : **264330537087**  
 Option 4 ID : **264330537090**  
 Status : **Answered**  
 Chosen Option : **1**

**Q.19** Eight friends Rahul, Ram, Ramesh, Sohan, Sahil, Anil, Sonu and Monu are sitting around a circular table facing towards the centre (not necessarily in the same order). Sahil is third to the left of Sonu. Sonu is to the immediate right of Ram. Ram is third to the left of Rahul. Monu is second to the right of Anil. Anil is not the immediate neighbour of Sahil. Sohan is not the immediate neighbour of Ram.

Who is third to the left of Ram?

- Ans**
- ☒ 1. Sohan
  - ☒ 2. Sahil
  - ☒ 3. Rahul
  - ☒ 4. Sonu

Question Type : **MCQ**  
 Question ID : **264330137116**  
 Option 1 ID : **264330537107**  
 Option 2 ID : **264330537109**  
 Option 3 ID : **264330537110**  
 Option 4 ID : **264330537108**  
 Status : **Answered**  
 Chosen Option : **1**

Q.20 In the following question, select the missing number of the given series.

3, 9, 54, 648, 15552, ?

Ans ✓ 1. 746496

✗ 2. 124583

✗ 3. 746946

✗ 4. 78342

Question Type : MCQ

Question ID : 264330137122

Option 1 ID : 264330537134

Option 2 ID : 264330537132

Option 3 ID : 264330537133

Option 4 ID : 264330537131

Status : Answered

Chosen Option : 1

Section : General Awareness

Q.1 The feature of single citizenship in the Indian Constitution was borrowed from the Constitution of \_\_\_\_\_.

Ans ✓ 1. Britain

✗ 2. Canada

✗ 3. United States of America

✗ 4. Australia

Question Type : MCQ

Question ID : 264330137056

Option 1 ID : 264330536867

Option 2 ID : 264330536869

Option 3 ID : 264330536868

Option 4 ID : 264330536870

Status : Answered

Chosen Option : 3

Q.2 Which among the following is Phanerogams, flowering and seed-bearing plants?

Ans ✓ 1. Gymnosperms

✗ 2. Pteridophyta

✗ 3. Bryophyta

✗ 4. Thallophyta

Question Type : MCQ

Question ID : 264330137951

Option 1 ID : 264330540413

Option 2 ID : 264330540414

Option 3 ID : 264330540412

Option 4 ID : 264330540411

Status : Answered

Chosen Option : 3

Q.3 Cosmic snowballs of frozen gases, rock and dust that orbit the Sun are known as \_\_\_\_\_.

- Ans
- ☒ 1. Meteors
  - ☒ 2. Star
  - ☒ 3. Meteorites
  - ☒ 4. Comets

Question Type : MCQ  
Question ID : 264330137952  
Option 1 ID : 264330540417  
Option 2 ID : 264330540416  
Option 3 ID : 264330540415  
Option 4 ID : 264330540418  
Status : Answered  
Chosen Option : 4

Q.4 By October 2022, Prime Minister Narendra Modi has inaugurated \_\_\_\_\_ Pradhan Mantri Kisan Samruddhi Kendras.

- Ans
- ☒ 1. 600
  - ☒ 2. 300
  - ☒ 3. 400
  - ☒ 4. 500

Question Type : MCQ  
Question ID : 264330137036  
Option 1 ID : 264330536787  
Option 2 ID : 264330536790  
Option 3 ID : 264330536789  
Option 4 ID : 264330536788  
Status : Answered  
Chosen Option : 1

Q.5 Which among the following is a ritual of cleaning the earth as well as worshipping the fourteen gods in Tripura, India?

- Ans
- ☒ 1. Kharchi Puja
  - ☒ 2. Tusu
  - ☒ 3. Durga Puja
  - ☒ 4. Bani

Question Type : MCQ  
Question ID : 264330135487  
Option 1 ID : 264330530858  
Option 2 ID : 264330530857  
Option 3 ID : 264330530855  
Option 4 ID : 264330530856  
Status : Answered  
Chosen Option : 4

Q.6 Who is the author of the book titled 'The White Tiger'?

- Ans ☒ 1. Aravind Adiga  
☒ 2. Mulk Raj Anand  
☒ 3. Ravinder Singh  
☒ 4. Khushwant Singh

Question Type : MCQ  
 Question ID : 264330137016  
 Option 1 ID : 264330536708  
 Option 2 ID : 264330536710  
 Option 3 ID : 264330536707  
 Option 4 ID : 264330536709  
 Status : Answered  
 Chosen Option : 1

Q.7 Which Mughal ruler was overthrown by British and sent to exile in Burma, after the revolt of 1857?

- Ans ☒ 1. Bahadur Shah I  
☒ 2. Shah Jahan  
☒ 3. Alamgir II  
☒ 4. Bahadur Shah II

Question Type : MCQ  
 Question ID : 264330137958  
 Option 1 ID : 264330540440  
 Option 2 ID : 264330540439  
 Option 3 ID : 264330540441  
 Option 4 ID : 264330540442  
 Status : Answered  
 Chosen Option : 3

Q.8 Who among the following continues to be hailed as the empress of Bharatanatyam across the world?

- Ans ☒ 1. Shovana Narayan  
☒ 2. Mallika Sarabhai  
☒ 3. Tanjore Balasaraswati  
☒ 4. Kalamandalam Kalyanikutty Amma

Question Type : MCQ  
 Question ID : 264330137018  
 Option 1 ID : 264330536715  
 Option 2 ID : 264330536718  
 Option 3 ID : 264330536716  
 Option 4 ID : 264330536717  
 Status : Answered  
 Chosen Option : 2

Q.9 With which country does India share the longest border?

Ans ☒ 1. Bangladesh

☐ 2. China

☐ 3. Nepal

☐ 4. Pakistan

Question Type : MCQ

Question ID : 264330134043

Option 1 ID : 264330525197

Option 2 ID : 264330525198

Option 3 ID : 264330525196

Option 4 ID : 264330525195

Status : Answered

Chosen Option : 4

Q.10 Which among the following is a dance performed by the devotees during the ceremonial worship of Murugan the Hindu God of war?

Ans ☐ 1. Mayilattom

☐ 2. Yaksha

☒ 3. Kavadi attam

☐ 4. Kummi

Question Type : MCQ

Question ID : 264330137038

Option 1 ID : 264330536796

Option 2 ID : 264330536798

Option 3 ID : 264330536795

Option 4 ID : 264330536797

Status : Answered

Chosen Option : 2

Q.11 Cultivation of cotton requires how many frost-free days?

Ans ☐ 1. 140

☐ 2. 160

☒ 3. 210

☐ 4. 250

Question Type : MCQ

Question ID : 264330137028

Option 1 ID : 264330536755

Option 2 ID : 264330536758

Option 3 ID : 264330536756

Option 4 ID : 264330536757

Status : Not Answered

Chosen Option : --

Q.12 Which country hosted the World Championships in Athletics (18th) in 2022?

- Ans
- ☒ 1. Japan
  - ☒ 2. Qatar
  - ☒ 3. United States of America
  - ☒ 4. Colombia

Question Type : MCQ  
 Question ID : 264330137967  
 Option 1 ID : 264330540476  
 Option 2 ID : 264330540475  
 Option 3 ID : 264330540477  
 Option 4 ID : 264330540478  
 Status : Answered  
 Chosen Option : 1

Q.13 Which among the following Vitamins plays an essential role in vision?

- Ans
- ☒ 1. C
  - ☒ 2. B1
  - ☒ 3. D
  - ☒ 4. A

Question Type : MCQ  
 Question ID : 264330137042  
 Option 1 ID : 264330536813  
 Option 2 ID : 264330536812  
 Option 3 ID : 264330536814  
 Option 4 ID : 264330536811  
 Status : Answered  
 Chosen Option : 4

Q.14 Pandit Ravi Shankar was awarded India's highest civilian honour, the Bharat Ratna, in 1999. He played which of the following instruments?

- Ans
- ☒ 1. Bansuri
  - ☒ 2. Tabla
  - ☒ 3. Sitar
  - ☒ 4. Shehnai

Question Type : MCQ  
 Question ID : 264330137054  
 Option 1 ID : 264330536862  
 Option 2 ID : 264330536860  
 Option 3 ID : 264330536859  
 Option 4 ID : 264330536861  
 Status : Answered  
 Chosen Option : 4

Q.15 National income received by the households is called \_\_\_\_\_.

- Ans
- ☐ 1. domestic income
  - ☐ 2. professional income
  - ☒ 3. personal income
  - ☐ 4. disposable income

Question Type : MCQ

Question ID : 264330137021

Option 1 ID : 264330536730

Option 2 ID : 264330536729

Option 3 ID : 264330536728

Option 4 ID : 264330536727

Status : Answered

Chosen Option : 1

Q.16 Which among the following rivers does not flow into the Bay of Bengal?

- Ans
- ☐ 1. Krishna
  - ☐ 2. Yamuna
  - ☒ 3. Tapti
  - ☐ 4. Mahanadi

Question Type : MCQ

Question ID : 264330137046

Option 1 ID : 264330536827

Option 2 ID : 264330536829

Option 3 ID : 264330536830

Option 4 ID : 264330536828

Status : Answered

Chosen Option : 2

Q.17 As per the contents mentioned in Asokan inscriptions, how many major political centres were there in the Mauryan empire?

- Ans
- ☒ 1. five
  - ☐ 2. six
  - ☐ 3. four
  - ☐ 4. three

Question Type : MCQ

Question ID : 264330135497

Option 1 ID : 264330530896

Option 2 ID : 264330530897

Option 3 ID : 264330530895

Option 4 ID : 264330530898

Status : Answered

Chosen Option : 1

Q.18 Who among the following freedom fighters gave the famous quote "Give me blood, and I shall give you freedom!"?

- Ans
- ☐ 1. Sardar Vallabh Bhai Patel
  - ☐ 2. Bal Gangadhar Tilak
  - ☒ 3. Subhash Chandra Bose
  - ☐ 4. Lala Lajpat Rai

Question Type : MCQ

Question ID : 264330135500

Option 1 ID : 264330530908

Option 2 ID : 264330530909

Option 3 ID : 264330530907

Option 4 ID : 264330530910

Status : Answered

Chosen Option : 3

Q.19 The Fifth Khelo India Youth Games 2022 was organised in \_\_\_\_\_ in 2023.

- Ans
- ☐ 1. Uttar Pradesh
  - ☒ 2. Madhya Pradesh
  - ☐ 3. West Bengal
  - ☐ 4. Kerala

Question Type : MCQ

Question ID : 264330137058

Option 1 ID : 264330536876

Option 2 ID : 264330536875

Option 3 ID : 264330536877

Option 4 ID : 264330536878

Status : Answered

Chosen Option : 1

Q.20 Which among the following famous temples is located in Assam?

- Ans
- ☐ 1. Somnath Temple
  - ☐ 2. Shore Temple
  - ☐ 3. Mundeshwari Temple
  - ☒ 4. Kamakhya Temple

Question Type : MCQ

Question ID : 264330137973

Option 1 ID : 264330540501

Option 2 ID : 264330540499

Option 3 ID : 264330540500

Option 4 ID : 264330540502

Status : Answered

Chosen Option : 4

Q.21 When did the Chauri Chaura incident take place?

- Ans
- ☐ 1. 1901
  - ☐ 2. 1915
  - ☒ 3. 1922
  - ☐ 4. 1908

Question Type : MCQ

Question ID : 264330137984

Option 1 ID : 264330540546

Option 2 ID : 264330540544

Option 3 ID : 264330540543

Option 4 ID : 264330540545

Status : Answered

Chosen Option : 3

Q.22 Polyatomic positive ions often have common names ending with the suffix \_\_\_\_\_.

- Ans
- ☐ 1. -ic
  - ☐ 2. -ide
  - ☒ 3. -onium
  - ☐ 4. -ous

Question Type : MCQ

Question ID : 264330137949

Option 1 ID : 264330540406

Option 2 ID : 264330540405

Option 3 ID : 264330540403

Option 4 ID : 264330540404

Status : Not Answered

Chosen Option : --

Q.23 In India, census is conducted under the provisions of the Census Act \_\_\_\_\_.

- Ans
- ☐ 1. 1950
  - ☐ 2. 1952
  - ☐ 3. 1955
  - ☒ 4. 1948

Question Type : MCQ

Question ID : 264330138232

Option 1 ID : 264330541535

Option 2 ID : 264330541537

Option 3 ID : 264330541538

Option 4 ID : 264330541536

Status : Answered

Chosen Option : 3

**Q.24** A maximum of \_\_\_\_\_ members can be nominated by the President of India to become the member of the Rajya Sabha.

- Ans** ☒ 1. 12  
☒ 2. 25  
☒ 3. 18  
☒ 4. 10

Question Type : **MCQ**

Question ID : **264330137057**

Option 1 ID : **264330536872**

Option 2 ID : **264330536874**

Option 3 ID : **264330536873**

Option 4 ID : **264330536871**

Status : **Answered**

Chosen Option : 1

**Q.25** The Juvenile Justice (Care and Protection of Children) Amendment Bill, 2021 seeks to amend Juvenile Justice (Care and Protection of Children) Act, \_\_\_\_\_.

- Ans** ☒ 1. 2016  
☒ 2. 2013  
☒ 3. 2014  
☒ 4. 2015

Question Type : **MCQ**

Question ID : **264330137970**

Option 1 ID : **264330540490**

Option 2 ID : **264330540487**

Option 3 ID : **264330540488**

Option 4 ID : **264330540489**

Status : **Answered**

Chosen Option : 2

Section : English Language and Comprehension

**Q.1** Choose the sentence with no spelling error.

- Ans** ☒ 1. Near death expereinces are stil near death.  
☒ 2. Near death expriences are still near death.  
☒ 3. Near death experiences are stil near deaath.  
☒ 4. Near death experiences are still near death.

Question Type : **MCQ**

Question ID : **264330135279**

Option 1 ID : **264330530031**

Option 2 ID : **264330530033**

Option 3 ID : **264330530034**

Option 4 ID : **264330530032**

Status : **Answered**

Chosen Option : 4

Q.2 Find the part of the given sentence that has an error in it. If there is no error, choose 'No error'.

Producing a different component was as simple such launching a new computer program.

- Ans
- ☒ 1. No error
  - ☒ 2. Producing a different component was
  - ☒ 3. as simple such launching
  - ☒ 4. a new computer program.

Question Type : MCQ  
Question ID : 264330135310  
Option 1 ID : 264330530154  
Option 2 ID : 264330530151  
Option 3 ID : 264330530152  
Option 4 ID : 264330530153  
Status : Answered  
Chosen Option : 3

Q.3 Select the appropriate antonym for the underlined word.

The beauty of our landscape is important.

- Ans
- ☒ 1. glamour
  - ☒ 2. aesthetics
  - ☒ 3. nobility
  - ☒ 4. blemish

Question Type : MCQ  
Question ID : 264330135327  
Option 1 ID : 264330530216  
Option 2 ID : 264330530215  
Option 3 ID : 264330530217  
Option 4 ID : 264330530218  
Status : Answered  
Chosen Option : 4

Q.4 Select the most appropriate option to substitute the bracketed segment in the given sentence. If there is no need to substitute it, select 'no substitution required'.

This commodity in clay-coloured material (can't be used neither as a table mat nor as a table napkin).

- Ans
- ☒ 1. can't be used either as a table mat or as a table napkin
  - ☒ 2. No substitution required
  - ☒ 3. can't be used neither as a table mat but as a table napkin
  - ☒ 4. can't be used neither as a table mat or as a table napkin

Question Type : MCQ  
Question ID : 264330135772  
Option 1 ID : 264330531969  
Option 2 ID : 264330531970  
Option 3 ID : 264330531967  
Option 4 ID : 264330531968  
Status : Answered  
Chosen Option : 1

Q.5 Find the part of the given sentence that has an error in it. If there is no error, choose 'No error'.

People need to made changes in agriculture and land use.

- Ans
- ☒ 1. People need to
  - ☒ 2. agriculture and land use.
  - ☒ 3. No error
  - ☒ 4. made changes in

Question Type : MCQ  
 Question ID : 264330134824  
 Option 1 ID : 264330528235  
 Option 2 ID : 264330528237  
 Option 3 ID : 264330528238  
 Option 4 ID : 264330528236  
 Status : Answered  
 Chosen Option : 4

Q.6 Choose the word that means the same as the given word.

Easiness

- Ans
- ☒ 1. Gullibility
  - ☒ 2. Immunity
  - ☒ 3. Fraternity
  - ☒ 4. Indomitability

Question Type : MCQ  
 Question ID : 264330135299  
 Option 1 ID : 264330530110  
 Option 2 ID : 264330530109  
 Option 3 ID : 264330530108  
 Option 4 ID : 264330530107  
 Status : Answered  
 Chosen Option : 1

Q.7 Choose the incorrectly spelt word.

- Ans
- ☒ 1. Busy
  - ☒ 2. Plane
  - ☒ 3. Sponge
  - ☒ 4. Condision

Question Type : MCQ  
 Question ID : 264330135330  
 Option 1 ID : 264330530228  
 Option 2 ID : 264330530229  
 Option 3 ID : 264330530227  
 Option 4 ID : 264330530230  
 Status : Answered  
 Chosen Option : 4

Q.8 Select the most appropriate word for the given group of words.

Government by two rulers or authorities

- Ans
- ☒ 1. Monarchy
  - ☒ 2. Bureaucracy
  - ☒ 3. Diarchy
  - ☒ 4. Anarchy

Question Type : MCQ  
Question ID : 264330136398  
Option 1 ID : 264330534356  
Option 2 ID : 264330534358  
Option 3 ID : 264330534357  
Option 4 ID : 264330534355  
Status : Answered  
Chosen Option : 3

Q.9 Choose the word that can substitute the given group of words.

A case in which the blade of a sword is kept

- Ans
- ☒ 1. Sheath
  - ☒ 2. Pantry
  - ☒ 3. Dyke
  - ☒ 4. Infirmary

Question Type : MCQ  
Question ID : 264330135323  
Option 1 ID : 264330530200  
Option 2 ID : 264330530202  
Option 3 ID : 264330530201  
Option 4 ID : 264330530199  
Status : Answered  
Chosen Option : 1

Q.10 Identify the segment that contains a grammatical error. If there is no error, select 'No error'.

In another words, most of us / are made by our elders or by our / peers, but leaders are self-directed.

- Ans
- ☒ 1. peers, but leaders are self-directed.
  - ☒ 2. In another words, most of us
  - ☒ 3. are made by our elders or by our
  - ☒ 4. No error

Question Type : MCQ  
Question ID : 264330136587  
Option 1 ID : 264330535081  
Option 2 ID : 264330535079  
Option 3 ID : 264330535080  
Option 4 ID : 264330535082  
Status : Answered  
Chosen Option : 4

Q.11 Improve the underlined part of the sentence. Choose 'No improvement' as an answer if the sentence is grammatically correct.  
At age 25, she taken her vows and became a nun.

- Ans
- ☒ 1. take her vows
  - ☒ 2. No improvement
  - ☒ 3. took her vows
  - ☒ 4. take her vowed

Question Type : MCQ  
Question ID : 264330134532  
Option 1 ID : 264330527088  
Option 2 ID : 264330527090  
Option 3 ID : 264330527087  
Option 4 ID : 264330527089  
Status : Answered  
Chosen Option : 3

Q.12 Select the word segment that substitutes (replaces) the bracketed word segment correctly and completes the sentence meaningfully. Select the option 'no correction required' if the sentence is correct as given.

They said that they (were understandings) his theory very well.

- Ans
- ☒ 1. understanding
  - ☒ 2. No correction required
  - ☒ 3. have understand
  - ☒ 4. understood

Question Type : MCQ  
Question ID : 264330136590  
Option 1 ID : 264330535092  
Option 2 ID : 264330535094  
Option 3 ID : 264330535093  
Option 4 ID : 264330535091  
Status : Answered  
Chosen Option : 4

Q.13 Select the most appropriate meaning of the given idiom.

To sing a different tune

- Ans
- ☒ 1. To change the way one talks about something
  - ☒ 2. To brag about something
  - ☒ 3. To be able to handle a jolt
  - ☒ 4. To buy or sell something

Question Type : MCQ  
Question ID : 264330136404  
Option 1 ID : 264330534379  
Option 2 ID : 264330534381  
Option 3 ID : 264330534382  
Option 4 ID : 264330534380  
Status : Answered  
Chosen Option : 1

**Q.14** A sentence has been given with a blank to be filled with an appropriate option. Choose the correct alternative.

He was \_\_\_\_\_ in a pool of blood near a neighbour's house.

- Ans**
- ☒ 1. lain
  - ☒ 2. laying
  - ☒ 3. lying
  - ☒ 4. lied

Question Type : **MCQ**

Question ID : **264330135289**

Option 1 ID : **264330530072**

Option 2 ID : **264330530074**

Option 3 ID : **264330530073**

Option 4 ID : **264330530071**

Status : **Answered**

Chosen Option : **2**

**Q.15** A sentence has been given with a blank to be filled with an appropriate option. Choose the correct alternative.

You have the power \_\_\_\_\_ the perspective of this nation.

- Ans**
- ☒ 1. changing
  - ☒ 2. to change
  - ☒ 3. change
  - ☒ 4. changed

Question Type : **MCQ**

Question ID : **264330135314**

Option 1 ID : **264330530169**

Option 2 ID : **264330530170**

Option 3 ID : **264330530168**

Option 4 ID : **264330530167**

Status : **Answered**

Chosen Option : **2**

**Q.16** Select the most appropriate option to fill in the blank.

Strength training is useful as it avoids large increases in breathing rate and \_\_\_\_\_ muscle strength.

- Ans**
- ☒ 1. regresses
  - ☒ 2. distributes
  - ☒ 3. improves
  - ☒ 4. degrades

Question Type : **MCQ**

Question ID : **264330135333**

Option 1 ID : **264330530242**

Option 2 ID : **264330530241**

Option 3 ID : **264330530239**

Option 4 ID : **264330530240**

Status : **Answered**

Chosen Option : **3**

Q.17 Select the appropriate synonym for the underlined word.

A sudden gust of wind hits the window.

- Ans
- ✓ 1. blow
  - ✗ 2. cramp
  - ✗ 3. feel
  - ✗ 4. pump

Question Type : MCQ  
 Question ID : 264330135324  
 Option 1 ID : 264330530203  
 Option 2 ID : 264330530206  
 Option 3 ID : 264330530204  
 Option 4 ID : 264330530205  
 Status : Answered  
 Chosen Option : 1

Q.18 In the following question, out of the given four alternatives, select the alternative which best expresses the meaning of the Idiom/Phrase.

With a pinch of salt

- Ans
- ✗ 1. With due respect
  - ✗ 2. Nefariously
  - ✗ 3. Taken forcefully
  - ✓ 4. Doubt the truth or value of something

Question Type : MCQ  
 Question ID : 264330135329  
 Option 1 ID : 264330530224  
 Option 2 ID : 264330530225  
 Option 3 ID : 264330530226  
 Option 4 ID : 264330530223  
 Status : Answered  
 Chosen Option : 4

Q.19 Select the most appropriate option to fill in the blank.

He gave the horse enough room to \_\_\_\_\_ away from the wagon.

- Ans
- ✗ 1. woke
  - ✗ 2. stalk
  - ✓ 3. walk
  - ✗ 4. watch

Question Type : MCQ  
 Question ID : 264330135280  
 Option 1 ID : 264330530036  
 Option 2 ID : 264330530037  
 Option 3 ID : 264330530038  
 Option 4 ID : 264330530035  
 Status : Answered  
 Chosen Option : 3

Q.20 Select the most appropriate antonym of the given word.

Lethargy

- Ans
- ☒ 1. Refusal
  - ☐ 2. Attention
  - ☒ 3. Shield
  - ☒ 4. Existence

Question Type : MCQ  
 Question ID : 264330136527  
 Option 1 ID : 264330534849  
 Option 2 ID : 264330534848  
 Option 3 ID : 264330534850  
 Option 4 ID : 264330534847  
 Status : Answered  
 Chosen Option : 2

#### Comprehension:

In the following passage some words have been deleted. Fill in the blanks with the help of the alternatives given. Select the most appropriate option for each number.

By contrast, depression is a (1) \_\_\_\_\_, long-term downturn in economic activity in one or more (2) \_\_\_\_\_. A depression is a more (3) \_\_\_\_\_ downturn than a recession, which is seen by some economists as part of the modern business cycle. The latter refers to (4) \_\_\_\_\_ that occur around a long-term growth trend, and typically involve shifts over time between (5) \_\_\_\_\_ of relatively rapid economic growth (an expansion or boom), and periods of relative stagnation or decline (a contraction or recession).

SubQuestion No : 21

Q.21 Select the most appropriate option to fill in blank number 1.

- Ans
- ☒ 1. curtained
  - ☒ 2. abstained
  - ☒ 3. stained
  - ☐ 4. sustained

Question Type : MCQ  
 Question ID : 264330136518  
 Option 1 ID : 264330534813  
 Option 2 ID : 264330534812  
 Option 3 ID : 264330534811  
 Option 4 ID : 264330534814  
 Status : Answered  
 Chosen Option : 3

### Comprehension:

In the following passage some words have been deleted. Fill in the blanks with the help of the alternatives given. Select the most appropriate option for each number.

By contrast, depression is a (1) \_\_\_\_\_, long-term downturn in economic activity in one or more (2) \_\_\_\_\_. A depression is a more (3) \_\_\_\_\_ downturn than a recession, which is seen by some economists as part of the modern business cycle. The latter refers to (4) \_\_\_\_\_ that occur around a long-term growth trend, and typically involve shifts over time between (5) \_\_\_\_\_ of relatively rapid economic growth (an expansion or boom), and periods of relative stagnation or decline (a contraction or recession).

### SubQuestion No : 22

Q.22 Select the most appropriate option to fill in blank number 2.

- Ans
- ☒ 1. services
  - ☒ 2. autonomies
  - ☒ 3. economies
  - ☒ 4. astronomies

Question Type : MCQ

Question ID : 264330136519

Option 1 ID : 264330534815

Option 2 ID : 264330534818

Option 3 ID : 264330534816

Option 4 ID : 264330534817

Status : Answered

Chosen Option : 3

### Comprehension:

In the following passage some words have been deleted. Fill in the blanks with the help of the alternatives given. Select the most appropriate option for each number.

By contrast, depression is a (1) \_\_\_\_\_, long-term downturn in economic activity in one or more (2) \_\_\_\_\_. A depression is a more (3) \_\_\_\_\_ downturn than a recession, which is seen by some economists as part of the modern business cycle. The latter refers to (4) \_\_\_\_\_ that occur around a long-term growth trend, and typically involve shifts over time between (5) \_\_\_\_\_ of relatively rapid economic growth (an expansion or boom), and periods of relative stagnation or decline (a contraction or recession).

### SubQuestion No : 23

Q.23 Select the most appropriate option to fill in blank number 3.

- Ans
- ☒ 1. severe
  - ☒ 2. tamed
  - ☒ 3. feral
  - ☒ 4. simple

Question Type : MCQ

Question ID : 264330136520

Option 1 ID : 264330534822

Option 2 ID : 264330534819

Option 3 ID : 264330534820

Option 4 ID : 264330534821

Status : Answered

Chosen Option : 1

### Comprehension:

In the following passage some words have been deleted. Fill in the blanks with the help of the alternatives given. Select the most appropriate option for each number.

By contrast, depression is a (1) \_\_\_\_\_, long-term downturn in economic activity in one or more (2) \_\_\_\_\_. A depression is a more (3) \_\_\_\_\_ downturn than a recession, which is seen by some economists as part of the modern business cycle. The latter refers to (4) \_\_\_\_\_ that occur around a long-term growth trend, and typically involve shifts over time between (5) \_\_\_\_\_ of relatively rapid economic growth (an expansion or boom), and periods of relative stagnation or decline (a contraction or recession).

### SubQuestion No : 24

Q.24 Select the most appropriate option to fill in blank number 4.

- Ans
- ☒ 1. firmness
  - ☒ 2. stability
  - ☒ 3. fluctuations
  - ☒ 4. sustainability

Question Type : MCQ

Question ID : 264330136521

Option 1 ID : 264330534823

Option 2 ID : 264330534825

Option 3 ID : 264330534826

Option 4 ID : 264330534824

Status : Not Answered

Chosen Option : --

### Comprehension:

In the following passage some words have been deleted. Fill in the blanks with the help of the alternatives given. Select the most appropriate option for each number.

By contrast, depression is a (1) \_\_\_\_\_, long-term downturn in economic activity in one or more (2) \_\_\_\_\_. A depression is a more (3) \_\_\_\_\_ downturn than a recession, which is seen by some economists as part of the modern business cycle. The latter refers to (4) \_\_\_\_\_ that occur around a long-term growth trend, and typically involve shifts over time between (5) \_\_\_\_\_ of relatively rapid economic growth (an expansion or boom), and periods of relative stagnation or decline (a contraction or recession).

### SubQuestion No : 25

Q.25 Select the most appropriate option to fill in blank number 5.

- Ans
- ☒ 1. perpetually
  - ☒ 2. periods
  - ☒ 3. perpetuity
  - ☒ 4. prods

Question Type : MCQ

Question ID : 264330136522

Option 1 ID : 264330534829

Option 2 ID : 264330534827

Option 3 ID : 264330534828

Option 4 ID : 264330534830

Status : Answered

Chosen Option : 2