

## Multi Tasking Non Technical Staff and Havaladar CBIC and CBN Examination 2022

Roll Number	
Candidate Name	
Venue Name	Vibrant Assessment Centre
Exam Date	16/05/2023
Exam Time	12:00 PM - 2:00 PM
Subject	MTS Non Tech Havaladar CBIC and CBN Examination 2022

Section : Numerical and Mathematical Ability

Q.1 Find the fourth proportion to 55, 60 and 33.

Ans ☒ 1. 36

☐ 2. 24

☐ 3. 28

☐ 4. 30

Question Type : MCQ

Question ID : 264330133765

Option 1 ID : 264330524083

Option 2 ID : 264330524084

Option 3 ID : 264330524085

Option 4 ID : 264330524086

Status : Answered

Chosen Option : 1

Q.2 The annual salary of Aniket increased from Rs.1000000 to Rs.1400000. What is the percent increase?

Ans ☐ 1. 14%

☒ 2. 40%

☐ 3. 20%

☐ 4. 4%

Question Type : MCQ

Question ID : 264330133585

Option 1 ID : 264330523366

Option 2 ID : 264330523364

Option 3 ID : 264330523365

Option 4 ID : 264330523363

Status : Answered

Chosen Option : 2

# Test Prime

**ALL EXAMS,  
ONE SUBSCRIPTION**



**70,000+**  
Mock Tests



**Personalised  
Report Card**



**Unlimited  
Re-Attempt**



**600+**  
Exam Covered



**Previous Year  
Papers**



**500%  
Refund**



**ATTEMPT FREE MOCK NOW**

Q.3 If both length and breadth of a cuboid is increased by 12 percent, then by how much percent its height should be reduced so that the volume of the cuboid remains same?

- Ans
- ☐ 1. 14.56 percent
  - ☐ 2. 24.72 percent
  - ☒ 3. 20.28 percent
  - ☐ 4. 28.44 percent

Question Type : MCQ

Question ID : 264330137145

Option 1 ID : 264330537225

Option 2 ID : 264330537224

Option 3 ID : 264330537226

Option 4 ID : 264330537223

Status : Not Answered

Chosen Option : --

Q.4 Find the mean proportion of 64 and 144.

- Ans
- ☐ 1. 8
  - ☐ 2. 108
  - ☐ 3. 12
  - ☒ 4. 96

Question Type : MCQ

Question ID : 264330133764

Option 1 ID : 264330524080

Option 2 ID : 264330524082

Option 3 ID : 264330524079

Option 4 ID : 264330524081

Status : Answered

Chosen Option : 4

Q.5 Successive discounts of 33% and 30% are equivalent to what single discount?

- Ans
- ☐ 1. 60.4%
  - ☐ 2. 50.5%
  - ☐ 3. 45.9%
  - ☒ 4. 53.1%

Question Type : MCQ

Question ID : 264330133763

Option 1 ID : 264330524078

Option 2 ID : 264330524075

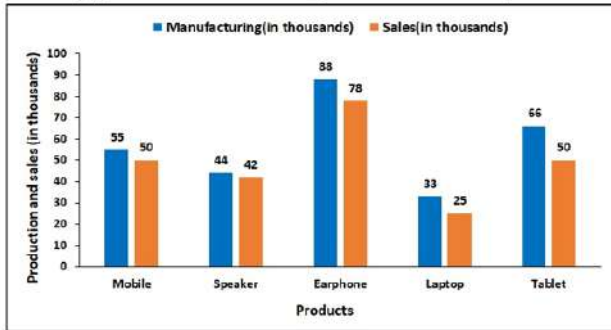
Option 3 ID : 264330524076

Option 4 ID : 264330524077

Status : Answered

Chosen Option : 3

Q.6 The bar graph shows the manufacturing and sales of different products. Find the number of unsold laptops.



- Ans
- ☒ 1. 9000
  - ☒ 2. 4000
  - ☒ 3. 8000
  - ☒ 4. 5000

Question Type : MCQ

Question ID : 264330133772

Option 1 ID : 264330524114

Option 2 ID : 264330524113

Option 3 ID : 264330524111

Option 4 ID : 264330524112

Status : Answered

Chosen Option : 3

Q.7 The table given below shows the marked price and discount percentage of five different articles.

Article	Marked price	Discount percent
P	300	20 percent
Q	600	25 percent
R	400	16 percent
S	700	22 percent
T	800	30 percent

$$\text{Selling Price} = \text{Marked Price} - \left( \frac{\text{Marked Price} \times \text{Discount}}{100} \right)$$

J1 = Total selling price of article P and R.

J2 = Total selling price of Q and T.

What is the value of (J2 - J1)?

- Ans
- ☒ 1. 530
  - ☒ 2. 434
  - ☒ 3. 448
  - ☒ 4. 532

Question Type : MCQ

Question ID : 264330137150

Option 1 ID : 264330537243

Option 2 ID : 264330537245

Option 3 ID : 264330537244

Option 4 ID : 264330537246

Status : Answered

Chosen Option : 2

**Q.8** Nine times the area of a circle is same as the three times the area of a square. What is the ratio of the diameter of the circle and diagonal of the square?

Ans

✓ 1.  $\sqrt{2}:\sqrt{3\pi}$

✗ 2.  $2:\sqrt{3\pi}$

✗ 3.  $2:3\pi$

✗ 4.  $\sqrt{5}:\sqrt{7\pi}$

Question Type : MCQ

Question ID : 264330139010

Option 1 ID : 264330544647

Option 2 ID : 264330544650

Option 3 ID : 264330544648

Option 4 ID : 264330544649

Status : Answered

Chosen Option : 2

**Q.9** A man drives his car at a speed of 50 km/hr for 2 hours and then decides to slow down to 40 km/hr till the end of the journey. If his average speed for the journey was 44 km/hr, then for how much time he drives his car at speed 40 km/hr?

Ans

✗ 1. 2 hours

✗ 2. 1 hour

✓ 3. 3 hours

✗ 4. 4 hours

Question Type : MCQ

Question ID : 264330138040

Option 1 ID : 264330540768

Option 2 ID : 264330540767

Option 3 ID : 264330540769

Option 4 ID : 264330540770

Status : Not Answered

Chosen Option : --

**Q.10** The average of 21 numbers is 60. If each number is increased by 20, then find the number by which the average is increased.

Ans

✗ 1. 12

✗ 2. 18

✗ 3. 15

✓ 4. 20

Question Type : MCQ

Question ID : 264330133758

Option 1 ID : 264330524056

Option 2 ID : 264330524057

Option 3 ID : 264330524055

Option 4 ID : 264330524058

Status : Answered

Chosen Option : 4

Q.11 By Selling 35 articles, a shopkeeper gains the selling price of 15 articles. Find his gain percentage.

- Ans
- ☐ 1. 88%
  - ☐ 2. 40%
  - ☒ 3. 75%
  - ☐ 4. 60%

Question Type : MCQ  
 Question ID : 264330135137  
 Option 1 ID : 264330529485  
 Option 2 ID : 264330529486  
 Option 3 ID : 264330529483  
 Option 4 ID : 264330529484  
 Status : Answered  
 Chosen Option : 3

Q.12 A sum of Rs. 21850 amounts to Rs. 28623.50 in 5 years at the rate of simple interest. The rate percent is:

- Ans
- ☐ 1. 7.2% p.a.
  - ☐ 2. 4.8% p.a.
  - ☒ 3. 6.2% p.a.
  - ☐ 4. 6.8% p.a.

Question Type : MCQ  
 Question ID : 264330138736  
 Option 1 ID : 264330543554  
 Option 2 ID : 264330543551  
 Option 3 ID : 264330543553  
 Option 4 ID : 264330543552  
 Status : Answered  
 Chosen Option : 3

Q.13 Find the value of  $6^2 + 4^2 - 20$  of  $2 + 40$ .

- Ans
- ☐ 1. 50
  - ☐ 2. 54
  - ☐ 3. 56
  - ☒ 4. 52

Question Type : MCQ  
 Question ID : 264330133756  
 Option 1 ID : 264330524049  
 Option 2 ID : 264330524048  
 Option 3 ID : 264330524050  
 Option 4 ID : 264330524047  
 Status : Answered  
 Chosen Option : 4

**Q.14** A, B and C together can complete a work in 5 days. A and B together can complete the same work in 6 days. C alone can finish the same work in how many days?

- Ans**
- ☒ 1. 60 days
  - ☒ 2. 30 days
  - ☒ 3. 15 days
  - ☒ 4. 20 days

Question Type : **MCQ**  
 Question ID : **264330137130**  
 Option 1 ID : **264330537166**  
 Option 2 ID : **264330537165**  
 Option 3 ID : **264330537164**  
 Option 4 ID : **264330537163**  
 Status : **Answered**  
 Chosen Option : **2**

**Q.15** The ratio of time taken by A and B to cover a certain distance is 17:19. Find the ratio of their respective speed.

- Ans**
- ☒ 1. 11:15
  - ☒ 2. 15:19
  - ☒ 3. 17:15
  - ☒ 4. 19:17

Question Type : **MCQ**  
 Question ID : **264330133768**  
 Option 1 ID : **264330524098**  
 Option 2 ID : **264330524096**  
 Option 3 ID : **264330524095**  
 Option 4 ID : **264330524097**  
 Status : **Answered**  
 Chosen Option : **4**

**Q.16** How many litre of water can a hemispherical bowl of diameter 21 m hold? ( $1\text{m}^3 = 1000$  litre)

- Ans**
- ☒ 1. 2100000 litre
  - ☒ 2. 2425500 litre
  - ☒ 3. 2322500 litre
  - ☒ 4. 2250500 litre

Question Type : **MCQ**  
 Question ID : **264330135128**  
 Option 1 ID : **264330529447**  
 Option 2 ID : **264330529449**  
 Option 3 ID : **264330529450**  
 Option 4 ID : **264330529448**  
 Status : **Not Answered**  
 Chosen Option : **--**

Q.17 In what ratio must tea at Rs. 58 per kg be mixed with tea at Rs. 64 per kg so that the mixture must be worth Rs. 60 per kg?

- Ans
- ☒ 1. 2:3
  - ☒ 2. 2:1
  - ☒ 3. 1:2
  - ☒ 4. 3:2

Question Type : MCQ

Question ID : 264330138039

Option 1 ID : 264330540766

Option 2 ID : 264330540763

Option 3 ID : 264330540765

Option 4 ID : 264330540764

Status : Answered

Chosen Option : 2

Q.18 What is the value of  $49 \times 64 \div 56 + 45 \div 5 + 25 \times 5 + 75 \div 3 + 8 \times 3$ ?

- Ans
- ☒ 1. 225
  - ☒ 2. 214
  - ☒ 3. 239
  - ☒ 4. 250

Question Type : MCQ

Question ID : 264330137149

Option 1 ID : 264330537240

Option 2 ID : 264330537239

Option 3 ID : 264330537241

Option 4 ID : 264330537242

Status : Answered

Chosen Option : 3

Q.19 What is the value of  $\frac{39}{25} \div \frac{13}{5} + \frac{33}{5} \times \frac{4}{11}$ ?

- Ans
- ☒ 1. 3
  - ☒ 2. 12
  - ☒ 3. 5
  - ☒ 4. 15

Question Type : MCQ

Question ID : 264330137641

Option 1 ID : 264330539171

Option 2 ID : 264330539174

Option 3 ID : 264330539172

Option 4 ID : 264330539173

Status : Answered

Chosen Option : 1



**Q.20** After selling 4% of a quantity of sugar, 6 kg of sugar remains. Find the total quantity of sugar.

- Ans**
- ☒ 1. 7 kg
  - ☒ 2. 6.25 kg
  - ☒ 3. 11.11 kg
  - ☒ 4. 5.25 kg

Question Type : **MCQ**  
 Question ID : **264330133762**  
 Option 1 ID : **264330524074**  
 Option 2 ID : **264330524072**  
 Option 3 ID : **264330524073**  
 Option 4 ID : **264330524071**  
 Status : **Answered**  
 Chosen Option : **2**

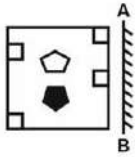
Section : Reasoning Ability and Problem Solving

**Q.1** Which of the following letter cluster will replace the question mark (?) in the given series?  
 UX, YB, CF, GJ, ?

- Ans**
- ☒ 1. KN
  - ☒ 2. LN
  - ☒ 3. LO
  - ☒ 4. KM

Question Type : **MCQ**  
 Question ID : **264330133466**  
 Option 1 ID : **264330522895**  
 Option 2 ID : **264330522897**  
 Option 3 ID : **264330522898**  
 Option 4 ID : **264330522896**  
 Status : **Answered**  
 Chosen Option : **1**

Q.2 If a mirror is placed on the line AB, then out of the option figures which figure will be the right image of the question figure?



Ans

✗ 1.



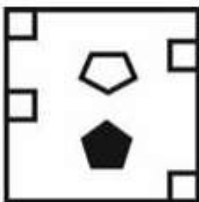
✓ 2.



✗ 3.



✗ 4.



Question Type : MCQ

Question ID : 264330137106

Option 1 ID : 264330537068

Option 2 ID : 264330537069

Option 3 ID : 264330537067

Option 4 ID : 264330537070

Status : Answered

Chosen Option : 2

Q.3 In a certain code language, 'CAUGHT' is written as 'EYWEJR' and 'ENGINE' is written as 'GLIGPC'. How will 'WORKER' be written in that language?

Ans ✓ 1. YMTIGP

✗ 2. YMTJIP

✗ 3. YMTKGP

✗ 4. YMTIHP

Question Type : MCQ

Question ID : 264330137348

Option 1 ID : 264330538020

Option 2 ID : 264330538022

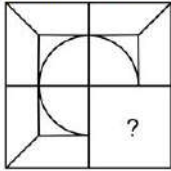
Option 3 ID : 264330538019

Option 4 ID : 264330538021

Status : Answered

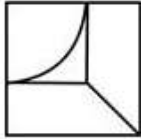
Chosen Option : 1

**Q.4** Select the option figure that will replace the question mark (?) in the figure given below to complete the pattern.  
(rotation is not allowed)



**Ans**

✓ 1.



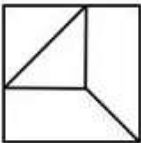
✗ 2.



✗ 3.



✗ 4.



Question Type : MCQ

Question ID : 264330133485

Option 1 ID : 264330522973

Option 2 ID : 264330522972

Option 3 ID : 264330522971

Option 4 ID : 264330522974

Status : Answered

Chosen Option : 1

**Q.5** Select the set in which the numbers are related in the same way as are the numbers of the following sets.(NOTE : Operations should be performed on the whole numbers, without breaking down the numbers into its constituent digits.  
E.g 13 – Operations on 13 such as adding /subtracting /multiplying etc. to 13 can be performed. Breaking down 13 into 1 and 3 and then performing mathematical operations on 1 and 3 is not allowed)  
(7, 49, 343)  
(8, 64, 512)

**Ans**

✗ 1. (6, 36, 206)

✗ 2. (5, 25, 225)

✗ 3. (11, 121, 1221)

✓ 4. (9, 81, 729)

Question Type : MCQ

Question ID : 264330133480

Option 1 ID : 264330522951

Option 2 ID : 264330522952

Option 3 ID : 264330522954

Option 4 ID : 264330522953

Status : Answered

Chosen Option : 4

**Q.6** Select the option that is related to the third number in the same way as the second number is related to the first number.

346 : 175 :: 250 : ?

- Ans**
- ☒ 1. 213
  - ☒ 2. 127
  - ☒ 3. 174
  - ☒ 4. 271

Question Type : **MCQ**

Question ID : **264330133333**

Option 1 ID : **264330522370**

Option 2 ID : **264330522368**

Option 3 ID : **264330522369**

Option 4 ID : **264330522367**

Status : **Not Answered**

Chosen Option : --

**Q.7** Two Statements are given followed by two conclusions numbered I and II. Assuming the statements to be true, even if they seem to be at variance with commonly known facts, decide which of the conclusions logically follow(s) from the statements.

Statements:

All trolleys are baskets.

Some briefcase are trolleys.

Conclusions:

I. All briefcase are baskets.

II. Some basket are briefcases.

- Ans**
- ☒ 1. Only conclusion I follows.
  - ☒ 2. Only conclusion II follows.
  - ☒ 3. Neither conclusion I nor II follow.
  - ☒ 4. Both conclusions I and II follow.

Question Type : **MCQ**

Question ID : **264330133475**

Option 1 ID : **264330522931**

Option 2 ID : **264330522932**

Option 3 ID : **264330522934**

Option 4 ID : **264330522933**

Status : **Answered**

Chosen Option : **2**

Q.8 By Interchanging the given two numbers which of the following equation will be correct?

7 and 4

I.  $7 \times 8 + 4 - 9 + 3 = 30$

II.  $9 + 4 \times 8 + 2 - 7 = 33$

Ans ☒ 1. Neither I nor II

☒ 2. Only II

☒ 3. Both I and II

☒ 4. Only I

Question Type : MCQ

Question ID : 264330138599

Option 1 ID : 264330543006

Option 2 ID : 264330543004

Option 3 ID : 264330543005

Option 4 ID : 264330543003

Status : Answered

Chosen Option : 2

Q.9 Which of the following numbers will replace the question mark (?) in the given series?

5, 7, 11, 13, 17, 19, 23, 25, ?

Ans ☒ 1. 39

☒ 2. 56

☒ 3. 42

☒ 4. 29

Question Type : MCQ

Question ID : 264330133331

Option 1 ID : 264330522360

Option 2 ID : 264330522361

Option 3 ID : 264330522359

Option 4 ID : 264330522362

Status : Answered

Chosen Option : 4

Q.10 Five students A, M, C, Y and G are sitting around a circular table facing outside the center not necessarily in the same order. M sits to the immediate left of A and to the immediate right of G. Y is not an immediate neighbour of A. Who sits second left of G?

Ans ☒ 1. Y

☒ 2. M

☒ 3. A

☒ 4. C

Question Type : MCQ

Question ID : 264330133472

Option 1 ID : 264330522922

Option 2 ID : 264330522921

Option 3 ID : 264330522919

Option 4 ID : 264330522920

Status : Answered

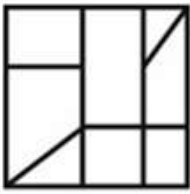
Chosen Option : 4

Q.11 Select the option figure in which the given figure is embedded. (rotation is NOT allowed)

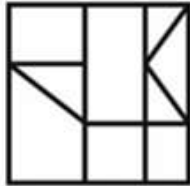


Ans

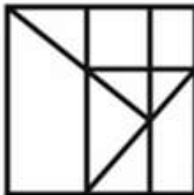
✗ 1.



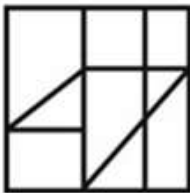
✓ 2.



✗ 3.



✗ 4.



Question Type : MCQ

Question ID : 264330137105

Option 1 ID : 264330537064

Option 2 ID : 264330537063

Option 3 ID : 264330537066

Option 4 ID : 264330537065

Status : Answered

Chosen Option : 2

Q.12 In a certain code language, 'JACK' is written as 'LCET'. How will 'FURO' be written in that language?

Ans ✗ 1. HMTW

✓ 2. HWTM

✗ 3. HTWM

✗ 4. HTMW

Question Type : MCQ

Question ID : 264330135004

Option 1 ID : 264330528953

Option 2 ID : 264330528951

Option 3 ID : 264330528952

Option 4 ID : 264330528954

Status : Answered

Chosen Option : 2

Q.13 उस विकल्प को चुनिए जो तीसरे शब्द से ठीक उसी तरह संबंधित है जिस तरह दूसरा शब्द पहले शब्द से संबंधित है।  
कसाई : माँस :: विमान-चालक : ?

- Ans
- ☒ 1. रूपरेखा
  - ☒ 2. विमान
  - ☒ 3. बेचना
  - ☒ 4. उपचार

Question Type : MCQ  
Question ID : 264330133468  
Option 1 ID : 264330522904  
Option 2 ID : 264330522903  
Option 3 ID : 264330522906  
Option 4 ID : 264330522905  
Status : Answered  
Chosen Option : 2

Q.14 Five friends Piyush, Nikhil, Rahul, Saksham and Tarun have different heights. Tarun is taller than only three other friends. Rahul is tallest among all friends. Nikhil is taller than only one person. Only two persons are taller than Piyush. Who is the shortest among all the friends?

- Ans
- ☒ 1. Saksham
  - ☒ 2. Nikhil
  - ☒ 3. Piyush
  - ☒ 4. Tarun

Question Type : MCQ  
Question ID : 264330133474  
Option 1 ID : 264330522930  
Option 2 ID : 264330522928  
Option 3 ID : 264330522927  
Option 4 ID : 264330522929  
Status : Answered  
Chosen Option : 1

Q.15 Two Statements are given followed by two conclusions numbered I and II. Assuming the statements to be true, even if they seem to be at variance with commonly known facts, decide which of the conclusions logically follow(s) from the statements.

Statements:

Only a few Adults are Plumbers.

Only a few Plumbers are Taxi drivers.

Conclusions:

I. Some Adults are Taxi drivers.

II. All Plumbers can never be Taxi drivers.

- Ans
- ☒ 1. Neither conclusion I nor II follow.
  - ☒ 2. Only conclusion I follows.
  - ☒ 3. Only conclusion II follows.
  - ☒ 4. Both conclusions I and II follow.

Question Type : MCQ  
Question ID : 264330133476  
Option 1 ID : 264330522938  
Option 2 ID : 264330522935  
Option 3 ID : 264330522936  
Option 4 ID : 264330522937  
Status : Answered  
Chosen Option : 3

Q.16 Which of the following numbers will replace the question mark (?) in the given series?

58, 62, 71, 87, 112, ?

- Ans
- ☒ 1. 158
  - ☒ 2. 148
  - ☒ 3. 138
  - ☒ 4. 140

Question Type : MCQ

Question ID : 264330133478

Option 1 ID : 264330522945

Option 2 ID : 264330522944

Option 3 ID : 264330522943

Option 4 ID : 264330522946

Status : Answered

Chosen Option : 2

Q.17 Which of the mathematical signs should be interchanged in the below equation to make it mathematically correct?

$$45 - 6 + 108 \div 12 \times 14 = 5$$

- Ans
- ☒ 1.  $\div$  and  $-$
  - ☒ 2.  $\times$  and  $-$
  - ☒ 3.  $+$  and  $\times$
  - ☒ 4.  $+$  and  $-$

Question Type : MCQ

Question ID : 264330133481

Option 1 ID : 264330522956

Option 2 ID : 264330522957

Option 3 ID : 264330522955

Option 4 ID : 264330522958

Status : Answered

Chosen Option : 3

Q.18 In a certain code language, '3152' is written as 'FBJD' and '5476' is written as 'JHNL'. How will '2231' be written in that language?

- Ans
- ☒ 1. BDDF
  - ☒ 2. EFDB
  - ☒ 3. DDFB
  - ☒ 4. FBED

Question Type : MCQ

Question ID : 264330133389

Option 1 ID : 264330522589

Option 2 ID : 264330522587

Option 3 ID : 264330522588

Option 4 ID : 264330522590

Status : Answered

Chosen Option : 3



**Q.19** In a certain code language, 'CAGE' is written as '92' and 'BURN' is written as '53'. How will 'TORCH' be written in that language?

- Ans**
- ☒ 1. 98
  - ☒ 2. 65
  - ☒ 3. 82
  - ☒ 4. 71

Question Type : MCQ

Question ID : 264330137544

Option 1 ID : 264330538783

Option 2 ID : 264330538786

Option 3 ID : 264330538784

Option 4 ID : 264330538785

Status : Not Answered

Chosen Option : --

**Q.20** Select the option that is related to the third word in the same way as the second word is related to the first word.  
Cataract : Eyes :: Psoriasis : ?

- Ans**
- ☒ 1. Leg
  - ☒ 2. Hair
  - ☒ 3. Ear
  - ☒ 4. Skin

Question Type : MCQ

Question ID : 264330133467

Option 1 ID : 264330522900

Option 2 ID : 264330522901

Option 3 ID : 264330522899

Option 4 ID : 264330522902

Status : Answered

Chosen Option : 3

Section : General Awareness

**Q.1** In the mid-eighth century, Dantidurga, a Rashtrakuta chief, overthrew his Chalukya overlord and performed a ritual literally called a \_\_\_\_\_.

- Ans**
- ☒ 1. Prayer meet
  - ☒ 2. Golden womb
  - ☒ 3. Horse ride
  - ☒ 4. Subsidiary alliance

Question Type : MCQ

Question ID : 264330137698

Option 1 ID : 264330539402

Option 2 ID : 264330539400

Option 3 ID : 264330539401

Option 4 ID : 264330539399

Status : Answered

Chosen Option : 2

Q.2 Who was the first Indian actress to receive the Padma Shri Award?

- Ans
- ✓ 1. Nargis Dutt
  - ✗ 2. Asha Parekh
  - ✗ 3. Madhubala
  - ✗ 4. Devika Rani

Question Type : MCQ  
Question ID : 264330133949  
Option 1 ID : 264330524821  
Option 2 ID : 264330524820  
Option 3 ID : 264330524822  
Option 4 ID : 264330524819  
Status : Not Answered  
Chosen Option : --

Q.3 The percentage of eligible voters who cast their votes in an election is termed as \_\_\_\_\_.

- Ans
- ✗ 1. Quorum
  - ✓ 2. Turnout
  - ✗ 3. Veto
  - ✗ 4. Constituency

Question Type : MCQ  
Question ID : 264330138660  
Option 1 ID : 264330543250  
Option 2 ID : 264330543247  
Option 3 ID : 264330543248  
Option 4 ID : 264330543249  
Status : Answered  
Chosen Option : 2

Q.4 Who was the last tirthankara of the Jainas?

- Ans
- ✓ 1. Vardhamana Mahavira
  - ✗ 2. Chandraprabha
  - ✗ 3. Rishabhanatha
  - ✗ 4. Padmaprabha

Question Type : MCQ  
Question ID : 264330137032  
Option 1 ID : 264330536772  
Option 2 ID : 264330536773  
Option 3 ID : 264330536771  
Option 4 ID : 264330536774  
Status : Answered  
Chosen Option : 1

Q.5 As of 11 August 2022, who is the Chairman of Rajya Sabha?

- Ans
- ☒ 1. Adhir Ranjan Chowdhury
  - ☒ 2. Jagdeep Dhankhar
  - ☒ 3. Narendra Modi
  - ☒ 4. Amit Shah

Question Type : MCQ  
 Question ID : 264330133952  
 Option 1 ID : 264330524833  
 Option 2 ID : 264330524832  
 Option 3 ID : 264330524834  
 Option 4 ID : 264330524831  
 Status : Answered  
 Chosen Option : 2

Q.6 Which among the following is an example of Phylum Mammalia of Animal Kingdom?

- Ans
- ☒ 1. Crocodile
  - ☒ 2. Hen
  - ☒ 3. Rat
  - ☒ 4. Pigeon

Question Type : MCQ  
 Question ID : 264330133937  
 Option 1 ID : 264330524773  
 Option 2 ID : 264330524772  
 Option 3 ID : 264330524771  
 Option 4 ID : 264330524774  
 Status : Answered  
 Chosen Option : 3

Q.7 Which Department of Government of India launched 'One Health' pilot project in April 2022?

- Ans
- ☒ 1. Department of Animal Husbandry and Dairying
  - ☒ 2. Department of Consumer Affairs
  - ☒ 3. Department of Information Technology
  - ☒ 4. Department of Commerce

Question Type : MCQ  
 Question ID : 264330133931  
 Option 1 ID : 264330524748  
 Option 2 ID : 264330524747  
 Option 3 ID : 264330524749  
 Option 4 ID : 264330524750  
 Status : Answered  
 Chosen Option : 2

Q.8 Indian constitution borrowed cabinet form of governance from \_\_\_\_\_.

- Ans ☒ 1. United Kingdom
- ☐ 2. France
- ☐ 3. South Africa
- ☐ 4. Australia

Question Type : MCQ  
Question ID : 264330133951  
Option 1 ID : 264330524828  
Option 2 ID : 264330524827  
Option 3 ID : 264330524830  
Option 4 ID : 264330524829  
Status : Answered  
Chosen Option : 1

Q.9 Which of the following is not an environment function?

- Ans ☒ 1. Accumulates waste
- ☐ 2. Sustains life
- ☐ 3. Provides the supply of resources
- ☐ 4. Enhances the quality of life

Question Type : MCQ  
Question ID : 264330133655  
Option 1 ID : 264330523645  
Option 2 ID : 264330523644  
Option 3 ID : 264330523643  
Option 4 ID : 264330523646  
Status : Answered  
Chosen Option : 1

Q.10 Which of the following crop is known as "Golden Fibre" of Bengal?

- Ans ☐ 1. Soyabean
- ☐ 2. Corn
- ☒ 3. Jute
- ☐ 4. Rice

Question Type : MCQ  
Question ID : 264330134678  
Option 1 ID : 264330527668  
Option 2 ID : 264330527669  
Option 3 ID : 264330527670  
Option 4 ID : 264330527667  
Status : Answered  
Chosen Option : 3

Q.11 Meena talks about an example of sedimentary rock. Which one of the following can it be?

- Ans
- ☒ 1. Granite
  - ☒ 2. Marble
  - ☒ 3. Sandstone
  - ☒ 4. Basalt

Question Type : MCQ  
 Question ID : 264330133656  
 Option 1 ID : 264330523650  
 Option 2 ID : 264330523649  
 Option 3 ID : 264330523648  
 Option 4 ID : 264330523647  
 Status : Answered  
 Chosen Option : 3

Q.12 Pongal, the four day Harvest festival is generally celebrated in \_\_\_\_\_.

- Ans
- ☒ 1. North – East India
  - ☒ 2. North India
  - ☒ 3. Eastern India
  - ☒ 4. South India

Question Type : MCQ  
 Question ID : 264330137012  
 Option 1 ID : 264330536693  
 Option 2 ID : 264330536691  
 Option 3 ID : 264330536694  
 Option 4 ID : 264330536692  
 Status : Answered  
 Chosen Option : 4

Q.13 Who wrote the Panchatantra, a collection of fables?

- Ans
- ☒ 1. Rumi
  - ☒ 2. Amar Singh
  - ☒ 3. Jaya Dev
  - ☒ 4. Vishnu Sharma

Question Type : MCQ  
 Question ID : 264330134686  
 Option 1 ID : 264330527699  
 Option 2 ID : 264330527701  
 Option 3 ID : 264330527700  
 Option 4 ID : 264330527702  
 Status : Not Answered  
 Chosen Option : --

Q.14 Who defeated Prithviraj Chauhan in the second battle of Tarain in 1192 AD?

- Ans
- ☒ 1. Iltutmish
  - ☒ 2. Babur
  - ☒ 3. Alauddin Khilji
  - ☒ 4. Muhammad Ghori

Question Type : MCQ  
 Question ID : 264330133662  
 Option 1 ID : 264330523673  
 Option 2 ID : 264330523671  
 Option 3 ID : 264330523674  
 Option 4 ID : 264330523672  
 Status : Answered  
 Chosen Option : 4

Q.15 Tata Iron and steel company (TISCO) began producing steel in \_\_\_\_\_.

- Ans
- ☒ 1. 1912
  - ☒ 2. 1914
  - ☒ 3. 1916
  - ☒ 4. 1910

Question Type : MCQ  
 Question ID : 264330138672  
 Option 1 ID : 264330543296  
 Option 2 ID : 264330543297  
 Option 3 ID : 264330543298  
 Option 4 ID : 264330543295  
 Status : Not Answered  
 Chosen Option : --

Q.16 Which among the following is a folk dance of Jammu and Kashmir, India?

- Ans
- ☒ 1. Kathak
  - ☒ 2. Bihu
  - ☒ 3. Bhangra
  - ☒ 4. Rouf

Question Type : MCQ  
 Question ID : 264330133933  
 Option 1 ID : 264330524755  
 Option 2 ID : 264330524758  
 Option 3 ID : 264330524757  
 Option 4 ID : 264330524756  
 Status : Answered  
 Chosen Option : 4

Q.17 Which sport is played between two teams each made up of eleven players?

- Ans
- ☐ 1. Swimming
  - ☐ 2. Basketball
  - ☒ 3. Cricket
  - ☐ 4. Table tennis

Question Type : MCQ

Question ID : 264330133671

Option 1 ID : 264330523707

Option 2 ID : 264330523709

Option 3 ID : 264330523708

Option 4 ID : 264330523710

Status : Answered

Chosen Option : 3

Q.18 The Indian classical dancer Sonal Mansingh was honoured with which of the following awards?

- Ans
- ☐ 1. Padma Bhushan and Padma Shri
  - ☐ 2. Padma Bhushan and Bharat Ratna
  - ☒ 3. Padma Bhushan and Padma Vibhushan
  - ☐ 4. Padma Vibhushan and Padma Shri

Question Type : MCQ

Question ID : 264330134688

Option 1 ID : 264330527707

Option 2 ID : 264330527710

Option 3 ID : 264330527708

Option 4 ID : 264330527709

Status : Answered

Chosen Option : 1

Q.19 Which river of India drains into Bay of Bengal?

- Ans
- ☐ 1. Tapi
  - ☒ 2. Godavari
  - ☐ 3. Narmada
  - ☐ 4. Mahi

Question Type : MCQ

Question ID : 264330133941

Option 1 ID : 264330524787

Option 2 ID : 264330524790

Option 3 ID : 264330524789

Option 4 ID : 264330524788

Status : Not Answered

Chosen Option : --

Q.20 GDP is an indicator of a country's economy. What does 'D' in GDP stand for?

- Ans
- ☒ 1. Development
  - ☒ 2. Domestic
  - ☒ 3. Dividend
  - ☒ 4. Deficit

Question Type : MCQ  
 Question ID : 264330134693  
 Option 1 ID : 264330527727  
 Option 2 ID : 264330527730  
 Option 3 ID : 264330527728  
 Option 4 ID : 264330527729  
 Status : Answered  
 Chosen Option : 2

Q.21 In cricket, hitting the ball to the boundary along the ground is \_\_\_\_\_ runs.

- Ans
- ☒ 1. 2
  - ☒ 2. 1
  - ☒ 3. 4
  - ☒ 4. 6

Question Type : MCQ  
 Question ID : 264330133953  
 Option 1 ID : 264330524836  
 Option 2 ID : 264330524835  
 Option 3 ID : 264330524837  
 Option 4 ID : 264330524838  
 Status : Answered  
 Chosen Option : 3

Q.22 The census of India is conducted at an interval of \_\_\_\_\_ .

- Ans
- ☒ 1. 2 years
  - ☒ 2. 7 years
  - ☒ 3. 10 years
  - ☒ 4. 5 years

Question Type : MCQ  
 Question ID : 264330134067  
 Option 1 ID : 264330525294  
 Option 2 ID : 264330525292  
 Option 3 ID : 264330525291  
 Option 4 ID : 264330525293  
 Status : Answered  
 Chosen Option : 3



Q.23 The rock – cave temple of \_\_\_\_\_ is the largest monolithic structure in the world.

- Ans
- ☒ 1. Udaygiri
  - ☒ 2. Ajanta
  - ☒ 3. Ellora
  - ☒ 4. Badami

Question Type : MCQ  
 Question ID : 264330138651  
 Option 1 ID : 264330543213  
 Option 2 ID : 264330543214  
 Option 3 ID : 264330543211  
 Option 4 ID : 264330543212  
 Status : Answered  
 Chosen Option : 3

Q.24 Lala Lajpat Rai was an active member of which organisation?

- Ans
- ☒ 1. Arya Samaj
  - ☒ 2. Brahmo Samaj
  - ☒ 3. Brahmo Sabha
  - ☒ 4. Prathana Sabha

Question Type : MCQ  
 Question ID : 264330137035  
 Option 1 ID : 264330536785  
 Option 2 ID : 264330536783  
 Option 3 ID : 264330536786  
 Option 4 ID : 264330536784  
 Status : Not Answered  
 Chosen Option : --

Q.25 What is the chemical name for ionic compound  $MgCl_2$ ?

- Ans
- ☒ 1. Sodium iodide
  - ☒ 2. Manganese chloride
  - ☒ 3. Cesium fluoride
  - ☒ 4. Magnesium chloride

Question Type : MCQ  
 Question ID : 264330133653  
 Option 1 ID : 264330523637  
 Option 2 ID : 264330523635  
 Option 3 ID : 264330523636  
 Option 4 ID : 264330523638  
 Status : Answered  
 Chosen Option : 4

**Q.1** A sentence has been given with a blank to be filled with an appropriate option. Choose the correct alternative.  
The school was \_\_\_\_\_ than a mile from their home.

- Ans**
- ☒ 1. most
  - ☒ 2. much
  - ☒ 3. more
  - ☒ 4. many

Question Type : **MCQ**  
Question ID : **264330134404**  
Option 1 ID : **264330526597**  
Option 2 ID : **264330526596**  
Option 3 ID : **264330526595**  
Option 4 ID : **264330526598**  
Status : **Answered**  
Chosen Option : **3**

**Q.2** A sentence has been given with a blank to be filled with an appropriate option. Choose the correct alternative.  
\_\_\_\_\_ from humans, lions are the key natural predators of elephants.

- Ans**
- ☒ 1. Rather
  - ☒ 2. Along
  - ☒ 3. Aside
  - ☒ 4. Beside

Question Type : **MCQ**  
Question ID : **264330135315**  
Option 1 ID : **264330530174**  
Option 2 ID : **264330530171**  
Option 3 ID : **264330530172**  
Option 4 ID : **264330530173**  
Status : **Answered**  
Chosen Option : **4**

**Q.3** Find the part of the given sentence that has an error in it. If there is no error, choose 'No error'.  
India's claim to be a world leader in pharmaceuticals are heavily compromised.

- Ans**
- ☒ 1. are heavily compromised.
  - ☒ 2. India's claim to be a
  - ☒ 3. No error
  - ☒ 4. world leader in pharmaceuticals

Question Type : **MCQ**  
Question ID : **264330134400**  
Option 1 ID : **264330526581**  
Option 2 ID : **264330526579**  
Option 3 ID : **264330526582**  
Option 4 ID : **264330526580**  
Status : **Answered**  
Chosen Option : **1**

Q.4 Select the appropriate antonym for the underlined word.  
He says we are poor now.

- Ans
- ☒ 1. indigent
  - ☒ 2. ruined
  - ☒ 3. barren
  - ☒ 4. opulent

Question Type : MCQ  
Question ID : 264330134417  
Option 1 ID : 264330526643  
Option 2 ID : 264330526644  
Option 3 ID : 264330526646  
Option 4 ID : 264330526645  
Status : Answered  
Chosen Option : 1

Q.5 Choose the word that means the same as the given word.

Fabulously

- Ans
- ☒ 1. Scarcely
  - ☒ 2. Scantly
  - ☒ 3. Fantastically
  - ☒ 4. Nominally

Question Type : MCQ  
Question ID : 264330135325  
Option 1 ID : 264330530208  
Option 2 ID : 264330530207  
Option 3 ID : 264330530209  
Option 4 ID : 264330530210  
Status : Answered  
Chosen Option : 3

Q.6 In the following question, out of the given four alternatives, select the alternative which best expresses the meaning of the Idiom/Phrase.  
To work against the clocks

- Ans
- ☒ 1. To fill one with terror
  - ☒ 2. To work fast
  - ☒ 3. To die while still working
  - ☒ 4. To move anti-clockwise

Question Type : MCQ  
Question ID : 264330134419  
Option 1 ID : 264330526652  
Option 2 ID : 264330526653  
Option 3 ID : 264330526654  
Option 4 ID : 264330526651  
Status : Answered  
Chosen Option : 2

Q.7 In the following question, out of the given four alternatives, select the alternative which best expresses the meaning of the Idiom/Phrase.  
On account of

- Ans ☒ 1. To settle dues  
☒ 2. To make excuses  
☒ 3. Because of  
☒ 4. To mark one's territory

Question Type : MCQ  
Question ID : 264330134314  
Option 1 ID : 264330526248  
Option 2 ID : 264330526250  
Option 3 ID : 264330526247  
Option 4 ID : 264330526249  
Status : Answered  
Chosen Option : 3

Q.8 Choose the word that is opposite in meaning to the given word.

Abort

- Ans ☒ 1. Commode  
☒ 2. Commence  
☒ 3. Command  
☒ 4. Collision

Question Type : MCQ  
Question ID : 264330136787  
Option 1 ID : 264330535847  
Option 2 ID : 264330535849  
Option 3 ID : 264330535848  
Option 4 ID : 264330535850  
Status : Answered  
Chosen Option : 2

Q.9 Select the most appropriate option to fill in the blank.

If she hadn't \_\_\_\_\_ her cell phone on the bed, she could have called him.

- Ans ☒ 1. through  
☒ 2. throne  
☒ 3. throng  
☒ 4. thrown

Question Type : MCQ  
Question ID : 264330135306  
Option 1 ID : 264330530135  
Option 2 ID : 264330530138  
Option 3 ID : 264330530136  
Option 4 ID : 264330530137  
Status : Answered  
Chosen Option : 4

Q.10 Select the most appropriate option to fill in the blank.  
Sometimes we wish for things, but we do not think about their \_\_\_\_\_.

- Ans ☒ 1. consequences  
☐ 2. fractions  
☐ 3. copiousness  
☐ 4. hazards

Question Type : MCQ  
Question ID : 264330134423  
Option 1 ID : 264330526670  
Option 2 ID : 264330526669  
Option 3 ID : 264330526667  
Option 4 ID : 264330526668  
Status : Answered  
Chosen Option : 1

Q.11 Improve the underlined part of the sentence. Choose 'No improvement' as an answer if the sentence is grammatically correct.  
Though a foreigner, Mother Teresa settle in Calcutta and made it her home.

- Ans ☐ 1. settle over Calcutta as  
☐ 2. settling in Calcutta or  
☐ 3. No improvement  
☒ 4. settled in Calcutta and

Question Type : MCQ  
Question ID : 264330134403  
Option 1 ID : 264330526593  
Option 2 ID : 264330526592  
Option 3 ID : 264330526594  
Option 4 ID : 264330526591  
Status : Answered  
Chosen Option : 4

Q.12 Identify the segment that contains a grammatical error. If there is no error, select 'No error'.  
When he buckled down to his / work he became the slyer / and cleverest of diplomats.

- Ans ☐ 1. When he buckled down to his  
☒ 2. work he became the slyer  
☐ 3. and cleverest of diplomats.  
☐ 4. No error

Question Type : MCQ  
Question ID : 264330136032  
Option 1 ID : 264330532947  
Option 2 ID : 264330532948  
Option 3 ID : 264330532949  
Option 4 ID : 264330532950  
Status : Answered  
Chosen Option : 3

Q.13 Choose the word that can substitute the given group of words.  
A government run by a single person

- Ans
- ☒ 1. Anocracy
  - ☒ 2. Bureaucracy
  - ☒ 3. Gerontocracy
  - ☒ 4. Autocracy

Question Type : MCQ  
Question ID : 264330134413  
Option 1 ID : 264330526628  
Option 2 ID : 264330526630  
Option 3 ID : 264330526627  
Option 4 ID : 264330526629  
Status : Answered  
Chosen Option : 4

Q.14 Choose the incorrectly spelt word.

- Ans
- ☒ 1. Recently
  - ☒ 2. Brush
  - ☒ 3. Structrure
  - ☒ 4. Havoc

Question Type : MCQ  
Question ID : 264330134420  
Option 1 ID : 264330526655  
Option 2 ID : 264330526658  
Option 3 ID : 264330526657  
Option 4 ID : 264330526656  
Status : Answered  
Chosen Option : 3

Q.15 Choose the sentence with no spelling error.

- Ans
- ☒ 1. Alice turned away, and shrugged her shoulders.
  - ☒ 2. Alice turned away, and shruged her sholders.
  - ☒ 3. Alice turned away, and shugged her shulders.
  - ☒ 4. Alice truned away, and shrugged her shoulders.

Question Type : MCQ  
Question ID : 264330135305  
Option 1 ID : 264330530132  
Option 2 ID : 264330530133  
Option 3 ID : 264330530134  
Option 4 ID : 264330530131  
Status : Answered  
Chosen Option : 1

**Q.16** Select the most appropriate option to substitute the bracketed segment in the given sentence. If there is no need to substitute it, select 'no substitution required'.  
He has 33 years of professional experience (on the field of) Public Administration.

- Ans**
- ☒ 1. over field of
  - ☒ 2. in the field of
  - ☒ 3. No substitution required
  - ☒ 4. in the field off

Question Type : **MCQ**  
Question ID : **264330136035**  
Option 1 ID : **264330532959**  
Option 2 ID : **264330532960**  
Option 3 ID : **264330532962**  
Option 4 ID : **264330532961**  
Status : **Answered**  
Chosen Option : **2**

**Q.17** Choose the word that can substitute the given group of words.  
A living organism that steals nourishment from other living beings

- Ans**
- ☒ 1. Vector
  - ☒ 2. Parasite
  - ☒ 3. Insect
  - ☒ 4. Co – Dependent

Question Type : **MCQ**  
Question ID : **264330134308**  
Option 1 ID : **264330526223**  
Option 2 ID : **264330526226**  
Option 3 ID : **264330526225**  
Option 4 ID : **264330526224**  
Status : **Answered**  
Chosen Option : **2**

**Q.18** Improve the underlined part of the sentence. Choose 'No improvement' as an answer if the sentence is grammatically correct.  
She works for eight hours every weekday.

- Ans**
- ☒ 1. for eight hourly
  - ☒ 2. for eighth hours
  - ☒ 3. of eighth hour
  - ☒ 4. No improvement

Question Type : **MCQ**  
Question ID : **264330134349**  
Option 1 ID : **264330526384**  
Option 2 ID : **264330526383**  
Option 3 ID : **264330526385**  
Option 4 ID : **264330526386**  
Status : **Answered**  
Chosen Option : **4**

Q.19 Select the appropriate synonym for the underlined word.  
"Little Red Riding Hood" is a fairy tale.

- Ans ☒ 1. document  
☒ 2. fact  
☒ 3. tail  
☒ 4. story

Question Type : MCQ  
Question ID : 264330134414  
Option 1 ID : 264330526632  
Option 2 ID : 264330526634  
Option 3 ID : 264330526631  
Option 4 ID : 264330526633  
Status : Answered  
Chosen Option : 4

Q.20 Find the part of the given sentence that has an error in it. If there is no error, choose 'No error'.

Neither teachers or the principal revolted against the new education policy.

- Ans ☒ 1. the new education policy.  
☒ 2. the principal revolted against  
☒ 3. No error  
☒ 4. Neither teachers or

Question Type : MCQ  
Question ID : 264330135282  
Option 1 ID : 264330530045  
Option 2 ID : 264330530044  
Option 3 ID : 264330530046  
Option 4 ID : 264330530043  
Status : Answered  
Chosen Option : 4

### Comprehension:

In the following passage some of the words have been deleted. Read the passage carefully and select the correct answer for the given blank out of the four alternatives.

After a rejection, we tend to beat ourselves up over the things that might have (1) \_\_\_\_\_ us to be rejected — and might even end up dwelling on these negative (2) \_\_\_\_\_, a process called rumination. This habit, however, inevitably causes us to (3) \_\_\_\_\_ worse. "The first thing a lot of people do when they get rejected is to be unkind to (4) \_\_\_\_\_, and they start coming up with all kinds of ideas about what's (5) \_\_\_\_\_ with them," Gottlieb notes.

SubQuestion No : 21

Q.21 Select the most appropriate option to fill in the blank No. 1.

- Ans ☒ 1. lead  
☒ 2. led  
☒ 3. leading  
☒ 4. let

Question Type : MCQ  
Question ID : 264330136778  
Option 1 ID : 264330535812  
Option 2 ID : 264330535811  
Option 3 ID : 264330535813  
Option 4 ID : 264330535814  
Status : Answered  
Chosen Option : 2



### Comprehension:

In the following passage some of the words have been deleted. Read the passage carefully and select the correct answer for the given blank out of the four alternatives.

After a rejection, we tend to beat ourselves up over the things that might have (1) \_\_\_\_\_ us to be rejected — and might even end up dwelling on these negative (2) \_\_\_\_\_, a process called rumination. This habit, however, inevitably causes us to (3) \_\_\_\_\_ worse. "The first thing a lot of people do when they get rejected is to be unkind to (4) \_\_\_\_\_, and they start coming up with all kinds of ideas about what's (5) \_\_\_\_\_ with them," Gottlieb notes.

### SubQuestion No : 22

Q.22 Select the most appropriate option to fill in the blank No. 2.

- Ans
- ☒ 1. endurance
  - ☒ 2. formalities
  - ☒ 3. emotions
  - ☒ 4. stoppages

Question Type : MCQ  
Question ID : 264330136779  
Option 1 ID : 264330535815  
Option 2 ID : 264330535818  
Option 3 ID : 264330535816  
Option 4 ID : 264330535817  
Status : Answered  
Chosen Option : 3

### Comprehension:

In the following passage some of the words have been deleted. Read the passage carefully and select the correct answer for the given blank out of the four alternatives.

After a rejection, we tend to beat ourselves up over the things that might have (1) \_\_\_\_\_ us to be rejected — and might even end up dwelling on these negative (2) \_\_\_\_\_, a process called rumination. This habit, however, inevitably causes us to (3) \_\_\_\_\_ worse. "The first thing a lot of people do when they get rejected is to be unkind to (4) \_\_\_\_\_, and they start coming up with all kinds of ideas about what's (5) \_\_\_\_\_ with them," Gottlieb notes.

### SubQuestion No : 23

Q.23 Select the most appropriate option to fill in the blank No. 3.

- Ans
- ☒ 1. feel
  - ☒ 2. swirl
  - ☒ 3. share
  - ☒ 4. recognize

Question Type : MCQ  
Question ID : 264330136780  
Option 1 ID : 264330535822  
Option 2 ID : 264330535821  
Option 3 ID : 264330535819  
Option 4 ID : 264330535820  
Status : Answered  
Chosen Option : 1

### Comprehension:

In the following passage some of the words have been deleted. Read the passage carefully and select the correct answer for the given blank out of the four alternatives.

After a rejection, we tend to beat ourselves up over the things that might have (1) \_\_\_\_\_ us to be rejected — and might even end up dwelling on these negative (2) \_\_\_\_\_, a process called rumination. This habit, however, inevitably causes us to (3) \_\_\_\_\_ worse. "The first thing a lot of people do when they get rejected is to be unkind to (4) \_\_\_\_\_, and they start coming up with all kinds of ideas about what's (5) \_\_\_\_\_ with them," Gottlieb notes.

### SubQuestion No : 24

Q.24 Select the most appropriate option to fill in the blank No. 4.

- Ans
- ☐ 1. himself
  - ☐ 2. yourself
  - ☒ 3. themselves
  - ☐ 4. itself

Question Type : MCQ  
Question ID : 264330136781  
Option 1 ID : 264330535826  
Option 2 ID : 264330535823  
Option 3 ID : 264330535824  
Option 4 ID : 264330535825  
Status : Answered  
Chosen Option : 3

### Comprehension:

In the following passage some of the words have been deleted. Read the passage carefully and select the correct answer for the given blank out of the four alternatives.

After a rejection, we tend to beat ourselves up over the things that might have (1) \_\_\_\_\_ us to be rejected — and might even end up dwelling on these negative (2) \_\_\_\_\_, a process called rumination. This habit, however, inevitably causes us to (3) \_\_\_\_\_ worse. "The first thing a lot of people do when they get rejected is to be unkind to (4) \_\_\_\_\_, and they start coming up with all kinds of ideas about what's (5) \_\_\_\_\_ with them," Gottlieb notes.

### SubQuestion No : 25

Q.25 Select the most appropriate option to fill in the blank No. 5.

- Ans
- ☐ 1. strong
  - ☐ 2. taming
  - ☐ 3. syncing
  - ☒ 4. wrong

Question Type : MCQ  
Question ID : 264330136782  
Option 1 ID : 264330535828  
Option 2 ID : 264330535830  
Option 3 ID : 264330535829  
Option 4 ID : 264330535827  
Status : Answered  
Chosen Option : 4