

Multi Tasking Non Technical Staff and Havaladar CBIC and CBN Examination 2022

Roll Number	
Candidate Name	
Venue Name	ION DIGITAL ZONE IDZ TUPUDANA
Exam Date	16/06/2023
Exam Time	9:00 AM - 10:30 AM
Subject	MTS Non Tech Havaladar CBIC and CBN Examination 2022

Section : Numerical and Mathematical Ability

Q.1 A man rows to a place situated 100 km away and comes back in 10 hours. He can row 12 km downstream or 8 km upstream in same time. What is the speed of the stream?

- Ans**
- ☒ 1. (20/9) km/hr
 - ☒ 2. (23/8) km/hr
 - ☒ 3. (29/5) km/hr
 - ☒ 4. (25/6) km/hr

Question Type : MCQ

Question ID : 264330140241

Option 1 ID : 264330549344

Option 2 ID : 264330549345

Option 3 ID : 264330549346

Option 4 ID : 264330549343

Status : Answered

Chosen Option : 4

Q.2 An article is sold at 5 percent loss. If its cost price is decreased by Rs. 20 and selling price is increased by Rs. 13, then profit of 10 percent is earned on it. What is the original selling price of the article?

- Ans**
- ☒ 1. Rs. 266.66
 - ☒ 2. Rs. 221.66
 - ☒ 3. Rs. 283.33
 - ☒ 4. Rs. 250

Question Type : MCQ

Question ID : 264330140160

Option 1 ID : 264330549021

Option 2 ID : 264330549020

Option 3 ID : 264330549022

Option 4 ID : 264330549019

Status : Answered

Chosen Option : 2

Test Prime

**ALL EXAMS,
ONE SUBSCRIPTION**



70,000+
Mock Tests



**Personalised
Report Card**



**Unlimited
Re-Attempt**



600+
Exam Covered



**Previous Year
Papers**



**500%
Refund**



ATTEMPT FREE MOCK NOW

Q.3 What is the value of $\left(\frac{21}{46} \div \frac{1}{6}\right)$ of $\frac{23}{42} + \frac{96}{576} \times \frac{24}{3} - \left(\frac{88}{56} \times \frac{7}{9} \div \frac{5}{36}\right)$?

- Ans
- ☒ 1. $-163/28$
 - ☒ 2. $-179/30$
 - ☒ 3. $11/2$
 - ☒ 4. $5/2$

Question Type : MCQ

Question ID : 264330139948

Option 1 ID : 264330548173

Option 2 ID : 264330548172

Option 3 ID : 264330548171

Option 4 ID : 264330548174

Status : Answered

Chosen Option : 2

Q.4 The value of $11 \times 2 + (45 \div 9) + (72 \div 8) - 5 + 4$ is :

- Ans
- ☒ 1. 40
 - ☒ 2. 41
 - ☒ 3. 32
 - ☒ 4. 35

Question Type : MCQ

Question ID : 264330140796

Option 1 ID : 264330551534

Option 2 ID : 264330551533

Option 3 ID : 264330551532

Option 4 ID : 264330551531

Status : Answered

Chosen Option : 4

Q.5 The ratio of the volume of two cylinders is 27 : 25 and the ratio of their heights is 3 : 4. If the area of the base of the second cylinder is 3850 cm^2 , then what will be the radius of the first cylinder?

- Ans
- ☒ 1. 42 cm
 - ☒ 2. 56 cm
 - ☒ 3. 63 cm
 - ☒ 4. 34 cm

Question Type : MCQ

Question ID : 264330140596

Option 1 ID : 264330550737

Option 2 ID : 264330550735

Option 3 ID : 264330550736

Option 4 ID : 264330550738

Status : Answered

Chosen Option : 1

Q.6 A can do a work in 48 days. What part of the total work can be done by A in 18 days?

- Ans
- ☒ 1. $\frac{5}{6}$
 - ☒ 2. $\frac{3}{5}$
 - ☒ 3. $\frac{3}{8}$
 - ☒ 4. $\frac{4}{9}$

Question Type : MCQ
 Question ID : 264330139588
 Option 1 ID : 264330546770
 Option 2 ID : 264330546768
 Option 3 ID : 264330546767
 Option 4 ID : 264330546769
 Status : Answered
 Chosen Option : 3

Q.7 The average of 7 consecutive odd numbers is A. If next 3 and previous 2 odd numbers to these 7 odd numbers are also included, then what is the new average of these 12 consecutive odd numbers?

- Ans
- ☒ 1. $A + 1$
 - ☒ 2. $A - 2$
 - ☒ 3. $A + 2$
 - ☒ 4. $A + 3$

Question Type : MCQ
 Question ID : 264330139895
 Option 1 ID : 264330547961
 Option 2 ID : 264330547959
 Option 3 ID : 264330547960
 Option 4 ID : 264330547962
 Status : Answered
 Chosen Option : 1

Q.8 What is the value of $\frac{11 \times 11 - 24 \times 6 \div 2 + 12 \times 12}{4 \times 5 + 6 \times 2 \div 4}$?

- Ans
- ☒ 1. 1
 - ☒ 2. -1
 - ☒ 3. 2
 - ☒ 4. -2

Question Type : MCQ
 Question ID : 264330140229
 Option 1 ID : 264330549297
 Option 2 ID : 264330549296
 Option 3 ID : 264330549298
 Option 4 ID : 264330549295
 Status : Answered
 Chosen Option : 2

Q.9 Find the compound interest on Rs. 8000 at 15% per annum for 2 years (compounded annually.)

- Ans ☒ 1. Rs. 2580
☒ 2. Rs. 2450
☒ 3. Rs. 2400
☒ 4. Rs. 2550

Question Type : MCQ

Question ID : 264330140810

Option 1 ID : 264330551587

Option 2 ID : 264330551589

Option 3 ID : 264330551588

Option 4 ID : 264330551590

Status : Answered

Chosen Option : 1

Q.10 In what ratio must a grocer mix two varieties of sweets costing Rs. 30 and Rs. 20 per kg respectively so as to get a mixture worth Rs. 25 per kg?

- Ans ☒ 1. 2:3
☒ 2. 1:1
☒ 3. 5:4
☒ 4. 4:5

Question Type : MCQ

Question ID : 264330133739

Option 1 ID : 264330523980

Option 2 ID : 264330523979

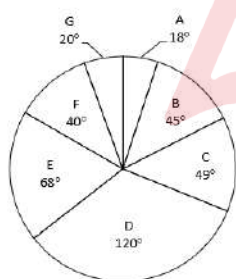
Option 3 ID : 264330523982

Option 4 ID : 264330523981

Status : Answered

Chosen Option : 2

Q.11 The pie chart given below shows the sales of 7 different companies. The total sales of all these 7 companies are 1440. The sale of a particular company is shown in terms of degree with respect to the total sales of all these 7 companies.



What is the ratio of average sale of A and B to the average sale of D and E?

- Ans ☒ 1. 59 : 177
☒ 2. 63 : 188
☒ 3. 51 : 186
☒ 4. 169 : 49

Question Type : MCQ

Question ID : 264330140192

Option 1 ID : 264330549147

Option 2 ID : 264330549149

Option 3 ID : 264330549150

Option 4 ID : 264330549148

Status : Answered

Chosen Option : 2

Q.12 If x percent of x is 256, then what is the value of x?

- Ans
- ☐ 1. 180
 - ☐ 2. 200
 - ☐ 3. 150
 - ☒ 4. 160

Question Type : MCQ

Question ID : 264330139633

Option 1 ID : 264330546950

Option 2 ID : 264330546948

Option 3 ID : 264330546947

Option 4 ID : 264330546949

Status : Answered

Chosen Option : 4

Q.13 The alcohol and water in a mixture are in the ratio of 4 : 5 respectively. 20 litre water is added to it. If the ratio of alcohol and water in the new mixture is 1 : 3 respectively, then what is the total quantity of the alcohol in the new mixture?

- Ans
- ☒ 1. 80/7 litres
 - ☐ 2. 15 litres
 - ☐ 3. 60/7 litres
 - ☐ 4. 90/11 litres

Question Type : MCQ

Question ID : 264330140542

Option 1 ID : 264330550526

Option 2 ID : 264330550525

Option 3 ID : 264330550523

Option 4 ID : 264330550524

Status : Answered

Chosen Option : 1

Q.14 A person bought some pens at the rate of 25 for a rupee and sold them at the rate of 20 for a rupee. What is the profit percentage?

- Ans
- ☐ 1. 30 percent
 - ☐ 2. 10 percent
 - ☒ 3. 25 percent
 - ☐ 4. 15 percent

Question Type : MCQ

Question ID : 264330140589

Option 1 ID : 264330550709

Option 2 ID : 264330550710

Option 3 ID : 264330550707

Option 4 ID : 264330550708

Status : Answered

Chosen Option : 3

Q.15 Study the following table and answer: In which year did the company spent maximum on fuel and transport?

Year	Item of Expenditure				
	Salary	Fuel and Transport	Bonus	Interest on Loans	Taxes
2001	288	198	3	23.4	83
2002	342	112	2.52	32.5	108
2003	324	91	3.84	41.6	74
2004	336	98	3.08	36.4	88
2005	420	142	3.96	49.4	98

- Ans
- ☒ 1. 2002
 - ☐ 2. 2001
 - ☐ 3. 2003
 - ☐ 4. 2004

Question Type : MCQ
 Question ID : 264330140815
 Option 1 ID : 264330551609
 Option 2 ID : 264330551608
 Option 3 ID : 264330551610
 Option 4 ID : 264330551607
 Status : Answered
 Chosen Option : 2

Q.16 The marked price of a calculator is Rs.1600. It is sold at a discount of 28 percent. If the cost price of the calculator is Rs.700, then what is the value of profit?

- Ans
- ☒ 1. Rs.438
 - ☐ 2. Rs.452
 - ☐ 3. Rs.498
 - ☐ 4. Rs.405

Question Type : MCQ
 Question ID : 264330139963
 Option 1 ID : 264330548233
 Option 2 ID : 264330548234
 Option 3 ID : 264330548231
 Option 4 ID : 264330548232
 Status : Answered
 Chosen Option : 2

Q.17 The difference between simple interest and compound interest (compounding of interest is done annually) on a certain sum of money for 3 years at the rate of 20 percent per annum is Rs. 192. What is the sum?

- Ans
- ☒ 1. Rs. 1500
 - ☐ 2. Rs. 1400
 - ☐ 3. Rs. 1000
 - ☐ 4. Rs. 1200

Question Type : MCQ
 Question ID : 264330140224
 Option 1 ID : 264330549277
 Option 2 ID : 264330549276
 Option 3 ID : 264330549275
 Option 4 ID : 264330549278
 Status : Answered
 Chosen Option : 1

Q.18 If $x : y : z = 2 : 3 : 4$, then what is the value of $7x : 3y : 2z$?

- Ans ☒ 1. $14 : 9 : 8$
☒ 2. $18 : 7 : 12$
☒ 3. $12 : 6 : 11$
☒ 4. $16 : 9 : 8$

Question Type : MCQ

Question ID : 264330140221

Option 1 ID : 264330549266

Option 2 ID : 264330549263

Option 3 ID : 264330549265

Option 4 ID : 264330549264

Status : Answered

Chosen Option : 1

Q.19 Two taps P and Q can fill a tank alone in 10 hours and 12 hours respectively. If the two taps are opened at 9 a.m., then at what time should the tap P be closed to completely fill the tank at exactly 3 p.m.?

- Ans ☒ 1. 2 p.m.
☒ 2. 1 p.m.
☒ 3. 3 p.m.
☒ 4. 12 p.m.

Question Type : MCQ

Question ID : 264330140534

Option 1 ID : 264330550491

Option 2 ID : 264330550492

Option 3 ID : 264330550494

Option 4 ID : 264330550493

Status : Answered

Chosen Option : 1

Q.20 The perimeter of the top of a rectangular table is 42 metre and its area is 108 metre^2 . What is the length of its diagonal?

- Ans ☒ 1. 12 metre
☒ 2. 15 metre
☒ 3. 11 metre
☒ 4. 9 metre

Question Type : MCQ

Question ID : 264330139925

Option 1 ID : 264330548080

Option 2 ID : 264330548079

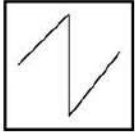
Option 3 ID : 264330548081

Option 4 ID : 264330548082

Status : Answered

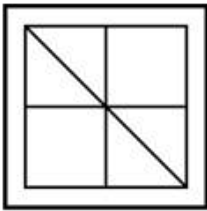
Chosen Option : 2

Q.1 Select the option figure in which the given figure is embedded as its part (rotation is NOT allowed).

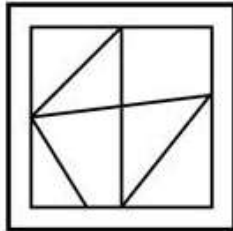


Ans

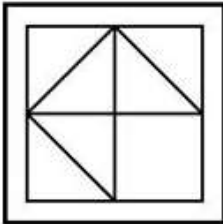
✗ 1.



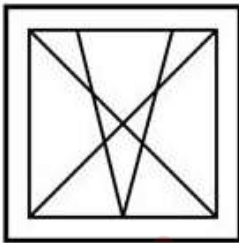
✓ 2.



✗ 3.



✗ 4.



Question Type : MCQ

Question ID : 264330138805

Option 1 ID : 264330543827

Option 2 ID : 264330543829

Option 3 ID : 264330543828

Option 4 ID : 264330543830

Status : Answered

Chosen Option : 2

Q.2 In a certain code language, 'LABOR' is written as 'RALOB'. How will 'EARLY' be written in that language?

Ans ✗ 1. ZAELR

✓ 2. YAE LR

✗ 3. YAERL

✗ 4. YALER

Question Type : MCQ

Question ID : 264330138771

Option 1 ID : 264330543694

Option 2 ID : 264330543692

Option 3 ID : 264330543693

Option 4 ID : 264330543691

Status : Answered

Chosen Option : 2

Q.3 In a certain code language, 'SETTLE' is coded as 'DLSTDS'. What is the code for 'STRUCK' in that code language?

- Ans**
- ☒ 1. JCTRST
 - ☒ 2. JCTRSS
 - ☒ 3. JCTSRs
 - ☒ 4. JTCRSS

Question Type : **MCQ**

Question ID : **264330139976**

Option 1 ID : **264330548286**

Option 2 ID : **264330548285**

Option 3 ID : **264330548284**

Option 4 ID : **264330548283**

Status : **Answered**

Chosen Option : **2**

Q.4 After interchanging which two numbers, the value of the given equation will be '30'?

$$8 \times 1 - 9 \div 3 + 4$$

- Ans**
- ☒ 1. 4 and 3
 - ☒ 2. 1 and 4
 - ☒ 3. 3 and 9
 - ☒ 4. 8 and 4

Question Type : **MCQ**

Question ID : **264330140971**

Option 1 ID : **264330552232**

Option 2 ID : **264330552233**

Option 3 ID : **264330552231**

Option 4 ID : **264330552234**

Status : **Answered**

Chosen Option : **2**

Q.5 Select the option that is related to the third word in the same way as the second word is related to the first word.

Mizoram : Aizawl :: Telangana : ?

- Ans**
- ☒ 1. Bangalore
 - ☒ 2. Chennai
 - ☒ 3. Hyderabad
 - ☒ 4. Jaipur

Question Type : **MCQ**

Question ID : **264330137582**

Option 1 ID : **264330538938**

Option 2 ID : **264330538936**

Option 3 ID : **264330538935**

Option 4 ID : **264330538937**

Status : **Answered**

Chosen Option : **3**

Q.6 G, H, I, J and K are sitting around a circular table facing the centre. G is sitting to the immediate right of H. J is sitting between K and H. Who is sitting to the immediate left of K?

- Ans**
- ☐ 1. H
 - ☐ 2. G
 - ☐ 3. J
 - ☒ 4. I

Question Type : MCQ
Question ID : 264330140139
Option 1 ID : 264330548936
Option 2 ID : 264330548935
Option 3 ID : 264330548938
Option 4 ID : 264330548937
Status : Answered
Chosen Option : 4

Q.7 In the following question, select the missing number of the given series.

40, 43, 52, 79, 160, ?

- Ans**
- ☐ 1. 415
 - ☐ 2. 410
 - ☒ 3. 403
 - ☐ 4. 413

Question Type : MCQ
Question ID : 264330140065
Option 1 ID : 264330548641
Option 2 ID : 264330548640
Option 3 ID : 264330548639
Option 4 ID : 264330548642
Status : Answered
Chosen Option : 3

Q.8 Which of the following letter cluster will replace the question mark (?) in the given series?
FT, IR, LP, ON, RL, UJ, ?

- Ans**
- ☐ 1. HW
 - ☐ 2. FN
 - ☒ 3. XH
 - ☐ 4. MK

Question Type : MCQ
Question ID : 264330140133
Option 1 ID : 264330548912
Option 2 ID : 264330548911
Option 3 ID : 264330548914
Option 4 ID : 264330548913
Status : Answered
Chosen Option : 3

Q.9 Marks of five students Virat, Kamal, Anil, Sanjay and Rahul are compared. Marks of no two students are same. Marks of Anil are less than only two students. Marks of Kamal are not less than anyone. Marks of Sanjay are more than Anil and less than Kamal. If marks of Rahul are more than the marks of Virat, then marks of how many students are less than the marks of Virat?

- Ans**
- ☒ 1. 2
 - ☒ 2. 1
 - ☒ 3. 3
 - ☒ 4. 0

Question Type : **MCQ**
 Question ID : **264330139536**
 Option 1 ID : **264330546560**
 Option 2 ID : **264330546559**
 Option 3 ID : **264330546561**
 Option 4 ID : **264330546562**
 Status : **Answered**
 Chosen Option : **4**

Q.10 D, N, U, L and O are standing in a straight line facing north. N is standing to the immediate right of D, who is at the end. O is standing to the immediate left of L, who is not at the end. Who is standing to the immediate left of O?

- Ans**
- ☒ 1. D
 - ☒ 2. U
 - ☒ 3. N
 - ☒ 4. L

Question Type : **MCQ**
 Question ID : **264330135355**
 Option 1 ID : **264330530327**
 Option 2 ID : **264330530330**
 Option 3 ID : **264330530328**
 Option 4 ID : **264330530329**
 Status : **Answered**
 Chosen Option : **2**

Q.11 By interchanging the given two signs which of the following equation will be correct?

+ and ÷

I. $4 \div 2 + 1 - 8 \times 3 = -10$

II. $18 \div 2 - 8 + 4 \times 3 = 14$

- Ans**
- ☒ 1. Only II
 - ☒ 2. Only I
 - ☒ 3. Neither I nor II
 - ☒ 4. Both I and II

Question Type : **MCQ**
 Question ID : **264330139584**
 Option 1 ID : **264330546752**
 Option 2 ID : **264330546751**
 Option 3 ID : **264330546754**
 Option 4 ID : **264330546753**
 Status : **Answered**
 Chosen Option : **1**

Q.12 Two statements are given followed by two conclusions numbered I and II. Assuming the statements to be true, even if they seem to be at variance with commonly known facts, decide which of the conclusions logically follow(s) from the statements.

Statements:

Some watch are corn.

All corn are wood.

Conclusions:

I. Some watch are wood.

II. Some wood are corn.

- Ans**
- ☒ 1. Only conclusion I follows
 - ☒ 2. Only conclusion II follows
 - ☒ 3. Neither conclusion I nor II follows
 - ☒ 4. Both conclusions I and II follow

Question Type : MCQ

Question ID : 264330140142

Option 1 ID : 264330548947

Option 2 ID : 264330548948

Option 3 ID : 264330548950

Option 4 ID : 264330548949

Status : Answered

Chosen Option : 4

Q.13 In the following question below are given some statements followed by some conclusions based on those statements. Taking the given statements to be true even if they seem to be at variance from commonly known facts. Read all the conclusions and then decide which of the given conclusion logically follows the given statements.

Statements:

I. All A are Y.

II. No Z is A.

Conclusion:

I. All Y are A.

II. Some Y are A.

III. Some A are Z.

- Ans**
- ☒ 1. Neither conclusion follows
 - ☒ 2. All conclusion follows
 - ☒ 3. Only conclusion II follows
 - ☒ 4. Both conclusions I and III follows

Question Type : MCQ

Question ID : 264330140986

Option 1 ID : 264330552294

Option 2 ID : 264330552293

Option 3 ID : 264330552291

Option 4 ID : 264330552292

Status : Answered

Chosen Option : 3

Q.14 In a certain code language, 'MAPS' is written as '49' and 'SOLD' is written as '50'. How will 'KIDS' be written in that language?

- Ans**
- ☒ 1. 45
 - ☒ 2. 44
 - ☒ 3. 42
 - ☒ 4. 43

Question Type : **MCQ**

Question ID : **264330140096**

Option 1 ID : **264330548766**

Option 2 ID : **264330548764**

Option 3 ID : **264330548763**

Option 4 ID : **264330548765**

Status : **Answered**

Chosen Option : **4**



Q.15 Which answer figure will complete the pattern in the question figure?



Ans

✗ 1.



✗ 2.



✗ 3.



✓ 4.



Question Type : MCQ

Question ID : 264330139547

Option 1 ID : 264330546604

Option 2 ID : 264330546606

Option 3 ID : 264330546603

Option 4 ID : 264330546605

Status : Answered

Chosen Option : 4

Q.16 Select the option that is related to the third word in the same way as the second word is related to the first word.

Paradise : Heaven :: Faith : ?

- Ans
- ☒ 1. Treasure
 - ☒ 2. Belief
 - ☒ 3. Betrayal
 - ☒ 4. Disbelief

Question Type : MCQ

Question ID : 264330138790

Option 1 ID : 264330543770

Option 2 ID : 264330543769

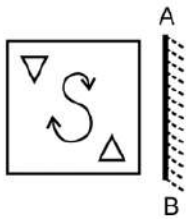
Option 3 ID : 264330543768

Option 4 ID : 264330543767

Status : Answered

Chosen Option : 2

Q.17 Select the correct mirror image of the given figure when the mirror is placed at AB as shown below.



Ans

- ☒ 1.
- ☒ 2.
- ☒ 3.
- ☒ 4.

Question Type : MCQ

Question ID : 264330140091

Option 1 ID : 264330548744

Option 2 ID : 264330548746

Option 3 ID : 264330548743

Option 4 ID : 264330548745

Status : Answered

Chosen Option : 2

Q.18 Which of the following numbers will replace the question mark (?) in the given series?

61, 65, 73, 85, 101, ?

- Ans**
- ☒ 1. 123
 - ☒ 2. 120
 - ☒ 3. 121
 - ☒ 4. 119

Question Type : **MCQ**

Question ID : **264330140104**

Option 1 ID : **264330548797**

Option 2 ID : **264330548798**

Option 3 ID : **264330548796**

Option 4 ID : **264330548795**

Status : **Answered**

Chosen Option : **3**

Q.19 Study the given pattern carefully and select the number that can replace the question mark (?) in it.

First row- 12, 19, 26

Second row- 28, 35, 42

Third row- 39, 46, ?

- Ans**
- ☒ 1. 49
 - ☒ 2. 63
 - ☒ 3. 53
 - ☒ 4. 75

Question Type : **MCQ**

Question ID : **264330140026**

Option 1 ID : **264330548486**

Option 2 ID : **264330548484**

Option 3 ID : **264330548483**

Option 4 ID : **264330548485**

Status : **Answered**

Chosen Option : **3**

Q.20 Select the option that is related to the third number in the same way as the second number is related to the first number.

441 : 485 :: 676 : ?

- Ans**
- ☒ 1. 729
 - ☒ 2. 740
 - ☒ 3. 730
 - ☒ 4. 1030

Question Type : **MCQ**

Question ID : **264330140126**

Option 1 ID : **264330548885**

Option 2 ID : **264330548886**

Option 3 ID : **264330548884**

Option 4 ID : **264330548883**

Status : **Answered**

Chosen Option : **3**

Q.1 Dr. B.R Ambedkar was associated with which of the following communities?

- Ans ☒ 1. Mahar
☒ 2. Berar
☒ 3. Santal
☒ 4. Sangoi

Question Type : MCQ
Question ID : 264330139771
Option 1 ID : 264330547499
Option 2 ID : 264330547500
Option 3 ID : 264330547501
Option 4 ID : 264330547502
Status : Answered
Chosen Option : 3

Q.2 _____ is the interest rate at which the Reserve Bank of India (RBI) lends money to commercial banks of the country.

- Ans ☒ 1. Reverse Repo Rate
☒ 2. Base Rate
☒ 3. Marginal Rate
☒ 4. Repo Rate

Question Type : MCQ
Question ID : 264330140955
Option 1 ID : 264330552169
Option 2 ID : 264330552170
Option 3 ID : 264330552167
Option 4 ID : 264330552168
Status : Answered
Chosen Option : 4

Q.3 Which state was ranked first in the Pradhan Mantri Awas Yojana-Urban (PMAY-U) Awards 2021?

- Ans ☒ 1. Uttar Pradesh
☒ 2. Haryana
☒ 3. Kerala
☒ 4. Tamil Nadu

Question Type : MCQ
Question ID : 264330139657
Option 1 ID : 264330547045
Option 2 ID : 264330547046
Option 3 ID : 264330547043
Option 4 ID : 264330547044
Status : Answered
Chosen Option : 1

Q.4 Bhagat Singh was executed on March 23, 1931 along with _____.

- Ans
- ☒ 1. B.K. Dutt and Rajguru
 - ☒ 2. Sukhdev and Chandra Shekhar Azad
 - ☒ 3. Sukhdev and B.K. Dutt
 - ☒ 4. Sukhdev and Rajguru

Question Type : MCQ
 Question ID : 264330138970
 Option 1 ID : 264330544488
 Option 2 ID : 264330544490
 Option 3 ID : 264330544487
 Option 4 ID : 264330544489
 Status : Answered
 Chosen Option : 4

Q.5 The blood platelets are also known as _____.

- Ans
- ☒ 1. thrombin
 - ☒ 2. thrombocytes
 - ☒ 3. erythrocytes
 - ☒ 4. leucocytes

Question Type : MCQ
 Question ID : 264330140682
 Option 1 ID : 264330551077
 Option 2 ID : 264330551076
 Option 3 ID : 264330551078
 Option 4 ID : 264330551075
 Status : Answered
 Chosen Option : 2

Q.6 As of November 2022, what is the capital of India's neighbouring country Bhutan?

- Ans
- ☒ 1. Beijing
 - ☒ 2. Dhaka
 - ☒ 3. Paro
 - ☒ 4. Thimphu

Question Type : MCQ
 Question ID : 264330140739
 Option 1 ID : 264330551303
 Option 2 ID : 264330551305
 Option 3 ID : 264330551306
 Option 4 ID : 264330551304
 Status : Answered
 Chosen Option : 4

Q.7 Which festival is celebrated when the annual harvest takes place in Assam?

- Ans
- ☐ 1. Pongal
 - ☐ 2. Makaravilakku
 - ☒ 3. Magh Bihu
 - ☐ 4. Lohri

Question Type : MCQ

Question ID : 264330140754

Option 1 ID : 264330551364

Option 2 ID : 264330551365

Option 3 ID : 264330551366

Option 4 ID : 264330551363

Status : Answered

Chosen Option : 3

Q.8 Highest population density in India according to census 2011 is in _____ .

- Ans
- ☐ 1. Bihar
 - ☐ 2. Union Territory of Chandigarh
 - ☒ 3. National Capital Territory of Delhi
 - ☐ 4. Madhya Pradesh

Question Type : MCQ

Question ID : 264330139692

Option 1 ID : 264330547184

Option 2 ID : 264330547185

Option 3 ID : 264330547186

Option 4 ID : 264330547183

Status : Answered

Chosen Option : 3

Q.9 Which of the following mountain range is the oldest in India?

- Ans
- ☒ 1. Aravalli Range
 - ☐ 2. Satpura and Vindhya Range
 - ☐ 3. Western Ghats
 - ☐ 4. Purvanchal Range

Question Type : MCQ

Question ID : 264330140377

Option 1 ID : 264330549888

Option 2 ID : 264330549887

Option 3 ID : 264330549889

Option 4 ID : 264330549890

Status : Answered

Chosen Option : 1

Q.10 Which of the following factors can affect distribution of population?

I. Geographical factors

II. Social factors

III. Cultural factors

IV. Economic factors

- Ans
- ☒ 1. I, II, III only
 - ☒ 2. I and II only
 - ☒ 3. I, II, III and IV
 - ☒ 4. II and III only

Question Type : MCQ

Question ID : 264330140901

Option 1 ID : 264330551952

Option 2 ID : 264330551951

Option 3 ID : 264330551954

Option 4 ID : 264330551953

Status : Answered

Chosen Option : 3

Q.11 The rock shelters of Bhimbetka are in the foothills of which mountains?

- Ans
- ☒ 1. Zaskar
 - ☒ 2. Pir Panjal
 - ☒ 3. Satpura
 - ☒ 4. Vindhyan

Question Type : MCQ

Question ID : 264330139675

Option 1 ID : 264330547118

Option 2 ID : 264330547117

Option 3 ID : 264330547116

Option 4 ID : 264330547115

Status : Answered

Chosen Option : 4

Q.12 In 1900, India participated in Olympics games which was held in _____.

- Ans
- ☒ 1. Paris
 - ☒ 2. Athens
 - ☒ 3. Berlin
 - ☒ 4. Tokyo

Question Type : MCQ

Question ID : 264330139869

Option 1 ID : 264330547855

Option 2 ID : 264330547858

Option 3 ID : 264330547857

Option 4 ID : 264330547856

Status : Answered

Chosen Option : 1

Q.13 Which famous Indian musician played shehnai and received Bharat Ratna in the year 2001?

- Ans ☒ 1. Ustad Bismillah Khan
☐ 2. Ustad Zakir Hussain
☐ 3. Pandit Ravi Shankar
☐ 4. Pandit Shrivkumar Sharma

Question Type : MCQ

Question ID : 264330140719

Option 1 ID : 264330551223

Option 2 ID : 264330551226

Option 3 ID : 264330551224

Option 4 ID : 264330551225

Status : Answered

Chosen Option : 1

Q.14 Wightman Cup is associated with which of the following sports?

- Ans ☐ 1. Cricket
☐ 2. Golf
☒ 3. Tennis
☐ 4. Hockey

Question Type : MCQ

Question ID : 264330140365

Option 1 ID : 264330549841

Option 2 ID : 264330549842

Option 3 ID : 264330549840

Option 4 ID : 264330549839

Status : Answered

Chosen Option : 2

Q.15 Which of the following articles of the Indian Constitution mentions the fundamental duty "sovereignty, unity and integrity of India" is mentioned?

- Ans ☐ 1. Article 51A (b)
☐ 2. Article 51A (e)
☒ 3. Article 51A (c)
☐ 4. Article 51A (d)

Question Type : MCQ

Question ID : 264330139735

Option 1 ID : 264330547355

Option 2 ID : 264330547358

Option 3 ID : 264330547356

Option 4 ID : 264330547357

Status : Answered

Chosen Option : 1

Q.16 Which among the following gases is used in the artificial ripening of fruits?

- Ans
- ☐ 1. Argon
 - ☐ 2. Freon
 - ☐ 3. Helium
 - ☒ 4. Acetylene

Question Type : MCQ
Question ID : 264330141051
Option 1 ID : 264330552554
Option 2 ID : 264330552552
Option 3 ID : 264330552551
Option 4 ID : 264330552553
Status : Answered
Chosen Option : 4

Q.17 The outer-most range of the Himalayas is called the _____.

- Ans
- ☐ 1. Himavan
 - ☐ 2. Konkan
 - ☐ 3. Himadri
 - ☒ 4. Shiwaliks

Question Type : MCQ
Question ID : 264330140914
Option 1 ID : 264330552003
Option 2 ID : 264330552006
Option 3 ID : 264330552004
Option 4 ID : 264330552005
Status : Answered
Chosen Option : 3

Q.18 Who among the following classical dancers was the first person from Odisha to be conferred the Padma Vibhushan?

- Ans
- ☐ 1. Pankaj Charan Das
 - ☐ 2. Raghunath Dutta
 - ☐ 3. Deba Prasad Das
 - ☒ 4. Kelucharan Mohapatra

Question Type : MCQ
Question ID : 264330139730
Option 1 ID : 264330547338
Option 2 ID : 264330547336
Option 3 ID : 264330547337
Option 4 ID : 264330547335
Status : Answered
Chosen Option : 4

Q.19 The music of Bharatanatyam belongs to _____ of southern India.

- Ans
- ☒ 1. Hindustani system
 - ☒ 2. Carnatic system
 - ☒ 3. Folk system
 - ☒ 4. Fusion system

Question Type : MCQ

Question ID : 264330139648

Option 1 ID : 264330547008

Option 2 ID : 264330547007

Option 3 ID : 264330547010

Option 4 ID : 264330547009

Status : Answered

Chosen Option : 2

Q.20 Which disease is caused by the deficiency of protein in the diet?

- Ans
- ☒ 1. Kwashiorkor
 - ☒ 2. Rickets
 - ☒ 3. Scurvy
 - ☒ 4. Jaundice

Question Type : MCQ

Question ID : 264330140374

Option 1 ID : 264330549875

Option 2 ID : 264330549878

Option 3 ID : 264330549876

Option 4 ID : 264330549877

Status : Answered

Chosen Option : 1

Q.21 Power of High Courts to issue certain writs is included under which article of the Indian constitution?

- Ans
- ☒ 1. Article 220
 - ☒ 2. Article 226
 - ☒ 3. Article 224
 - ☒ 4. Article 222

Question Type : MCQ

Question ID : 264330138982

Option 1 ID : 264330544535

Option 2 ID : 264330544538

Option 3 ID : 264330544537

Option 4 ID : 264330544536

Status : Answered

Chosen Option : 2

Q.22 Sri-Lanka is separated from India by _____.

- Ans
- ☐ 1. Strait of Gibraltar
 - ☐ 2. Malacca strait
 - ☐ 3. Bering strait
 - ☒ 4. Palk strait

Question Type : MCQ

Question ID : 264330139742

Option 1 ID : 264330547385

Option 2 ID : 264330547384

Option 3 ID : 264330547383

Option 4 ID : 264330547386

Status : Answered

Chosen Option : 4

Q.23 Who among the following is the author of 'River of Smoke' novel?

- Ans
- ☐ 1. B.B. Lal
 - ☐ 2. Jeet Thayil
 - ☐ 3. Manohar Malgonkar
 - ☒ 4. Amitav Ghosh

Question Type : MCQ

Question ID : 264330138951

Option 1 ID : 264330544412

Option 2 ID : 264330544413

Option 3 ID : 264330544411

Option 4 ID : 264330544414

Status : Not Answered

Chosen Option : --

Q.24 Which Lodi ruler's (1489 AD -1517 AD) real name was Nizam Khan?

- Ans
- ☐ 1. Bahlul Lodi
 - ☒ 2. Sikandar Lodi
 - ☐ 3. Ibrahim Lodi
 - ☐ 4. Qutbuddin Mubarak Shah

Question Type : MCQ

Question ID : 264330140920

Option 1 ID : 264330552029

Option 2 ID : 264330552030

Option 3 ID : 264330552027

Option 4 ID : 264330552028

Status : Answered

Chosen Option : 1

Q.25 How many Indian states celebrate their formation on November 1st?

- Ans
- ☐ 1. Eight
 - ☒ 2. Seven
 - ☐ 3. Five
 - ☐ 4. Six

Question Type : MCQ
Question ID : 264330140890
Option 1 ID : 264330551910
Option 2 ID : 264330551909
Option 3 ID : 264330551907
Option 4 ID : 264330551908
Status : Answered
Chosen Option : 3

Section : English Language and Comprehension

Q.1 Select the word segment that substitutes (replaces) the bracketed word segment correctly and completes the sentence meaningfully. Select the option 'no correction required' if the sentence is correct as given.
We saw him (the more) during Hogsmeade weekend.

- Ans
- ☐ 1. the many
 - ☒ 2. the most
 - ☐ 3. the bigger
 - ☐ 4. No correction required

Question Type : MCQ
Question ID : 264330136165
Option 1 ID : 264330533459
Option 2 ID : 264330533460
Option 3 ID : 264330533461
Option 4 ID : 264330533462
Status : Answered
Chosen Option : 2

Q.2 Improve the underlined part of the sentence. Choose 'No improvement' as an answer if the sentence is grammatically correct.

He teaches me algebraic and geometry twice a week.

- Ans
- ☐ 1. taught I algebra
 - ☒ 2. taught me algebra
 - ☐ 3. teach me algebraic
 - ☐ 4. No improvement

Question Type : MCQ
Question ID : 264330135514
Option 1 ID : 264330530965
Option 2 ID : 264330530963
Option 3 ID : 264330530964
Option 4 ID : 264330530966
Status : Answered
Chosen Option : 4

Q.3 Select the appropriate synonym for the underlined word.

I mean that is a remarkable finding.

- Ans
- ☐ 1. Dim
 - ☐ 2. standard
 - ☐ 3. subtle
 - ☒ 4. noticeable

Question Type : MCQ
Question ID : 264330135551
Option 1 ID : 264330531106
Option 2 ID : 264330531103
Option 3 ID : 264330531104
Option 4 ID : 264330531105
Status : Answered
Chosen Option : 4

Q.4 Select the most appropriate word for the given group of words.

A person who likes or admires women

- Ans
- ☐ 1. Polyglot
 - ☐ 2. Misogynist
 - ☐ 3. Conversationalist
 - ☒ 4. Philogynist

Question Type : MCQ
Question ID : 264330135834
Option 1 ID : 264330532204
Option 2 ID : 264330532206
Option 3 ID : 264330532203
Option 4 ID : 264330532205
Status : Answered
Chosen Option : 4

Q.5 In the following question, out of the given four alternatives, select the alternative which best expresses the meaning of the Idiom/Phrase.

To pick holes in someone's coat

- Ans
- ☐ 1. To discharge one's duty well
 - ☐ 2. To deceive someone for personal gain
 - ☐ 3. To aspire for something difficult
 - ☒ 4. To find fault with someone

Question Type : MCQ
Question ID : 264330135251
Option 1 ID : 264330529923
Option 2 ID : 264330529926
Option 3 ID : 264330529924
Option 4 ID : 264330529925
Status : Answered
Chosen Option : 4

Q.6 Identify the segment that contains a grammatical error. If there is no error, select 'No error'.

For example, the parent mountain/ of Mont Blanc, the/ high peak in the Alps, is the Mount Everest.

- Ans**
- ☒ 1. No error
 - ☒ 2. high peak in the Alps, is the Mount Everest.
 - ☒ 3. of Mont Blanc, the
 - ☒ 4. For example, the parent mountain

Question Type : **MCQ**
 Question ID : **264330136484**
 Option 1 ID : **264330534686**
 Option 2 ID : **264330534685**
 Option 3 ID : **264330534684**
 Option 4 ID : **264330534683**
 Status : **Answered**
 Chosen Option : **2**

Q.7 Select the most appropriate antonym to substitute the bracketed word in the given sentence.

For high-moisture areas, like kitchens and baths or where (frequent) cleaning is required, use only oil-based.

- Ans**
- ☒ 1. confirmed
 - ☒ 2. seldom
 - ☒ 3. dawdle
 - ☒ 4. constant

Question Type : **MCQ**
 Question ID : **264330135682**
 Option 1 ID : **264330531619**
 Option 2 ID : **264330531621**
 Option 3 ID : **264330531622**
 Option 4 ID : **264330531620**
 Status : **Answered**
 Chosen Option : **4**

Q.8 Select the most appropriate antonym of the given word.

Glamour

- Ans**
- ☒ 1. Charm
 - ☒ 2. Magnanimous
 - ☒ 3. Appeal
 - ☒ 4. Dullness

Question Type : **MCQ**
 Question ID : **264330136579**
 Option 1 ID : **264330535049**
 Option 2 ID : **264330535050**
 Option 3 ID : **264330535048**
 Option 4 ID : **264330535047**
 Status : **Answered**
 Chosen Option : **4**

Q.9 Choose the incorrectly spelt word.

- Ans ☒ 1. Graetar
☒ 2. Rocking
☒ 3. Frame
☒ 4. Decrease

Question Type : MCQ
 Question ID : 264330135659
 Option 1 ID : 264330531534
 Option 2 ID : 264330531533
 Option 3 ID : 264330531532
 Option 4 ID : 264330531531
 Status : Answered
 Chosen Option : 1

Q.10 Select the most appropriate meaning of the given idiom.

Add fuel to the fire

- Ans ☒ 1. When an attempt fails and it's time to start all over
☒ 2. Having to start all over again
☒ 3. To make an argument or bad situation worse
☒ 4. A mistake made in something you are trying to achieve

Question Type : MCQ
 Question ID : 264330136503
 Option 1 ID : 264330534757
 Option 2 ID : 264330534756
 Option 3 ID : 264330534755
 Option 4 ID : 264330534758
 Status : Answered
 Chosen Option : 3

Q.11 Identify the segment that contains a grammatical error. If there is no error, select 'No error'.
 Do you think I'd rather / be stuck in a room with that old / toad or be played Quidditch?

- Ans ☒ 1. Do you think I'd rather
☒ 2. toad or be played Quidditch?
☒ 3. be stuck in a room with that old
☒ 4. No error

Question Type : MCQ
 Question ID : 264330136137
 Option 1 ID : 264330533351
 Option 2 ID : 264330533353
 Option 3 ID : 264330533352
 Option 4 ID : 264330533354
 Status : Answered
 Chosen Option : 1

Q.12 Select the most appropriate option to fill in the blank.

Nickel or brass can cause an allergic reaction when in _____ with human skin .

- Ans**
- ✓ 1. contact
 - ✗ 2. surface
 - ✗ 3. accordance
 - ✗ 4. parallel

Question Type : **MCQ**
 Question ID : **264330136750**
 Option 1 ID : **264330535708**
 Option 2 ID : **264330535709**
 Option 3 ID : **264330535707**
 Option 4 ID : **264330535710**
 Status : **Answered**
 Chosen Option : **1**

Q.13 Find the part of the given sentence that has an error in it. If there is no error, choose 'No error'.

Land management choices also affect the amount of carbon stored on trees.

- Ans**
- ✗ 1. also affect the amount of
 - ✗ 2. No error
 - ✓ 3. carbon stored on trees.
 - ✗ 4. Land management choices

Question Type : **MCQ**
 Question ID : **264330135152**
 Option 1 ID : **264330529544**
 Option 2 ID : **264330529546**
 Option 3 ID : **264330529545**
 Option 4 ID : **264330529543**
 Status : **Answered**
 Chosen Option : **3**

Q.14 Select the word segment that substitutes (replaces) the bracketed word segment correctly and completes the sentence meaningfully. Select the option 'no correction required' if the sentence is correct as given.
 (Then got of on) a station in the very heart of London.

- Ans**
- ✗ 1. No correction required
 - ✓ 2. They got off at
 - ✗ 3. They got of by
 - ✗ 4. They got off on

Question Type : **MCQ**
 Question ID : **264330136113**
 Option 1 ID : **264330533262**
 Option 2 ID : **264330533259**
 Option 3 ID : **264330533260**
 Option 4 ID : **264330533261**
 Status : **Answered**
 Chosen Option : **4**

Q.15 Select the most appropriate option to fill in the blank.

My friends, being incredibly nerdy linguists, _____ to make fun of the syntax.

- Ans ☒ 1. braided
☒ 2. decided
☒ 3. stalked
☒ 4. traded

Question Type : MCQ
Question ID : 264330136559
Option 1 ID : 264330534971
Option 2 ID : 264330534974
Option 3 ID : 264330534972
Option 4 ID : 264330534973
Status : Answered
Chosen Option : 2

Q.16 Four sentences are given, out of which three have spelling errors. Choose the sentence with all correctly spelt words.

Ans ☒ 1.

The extended phenotype is noticeable when we look at parasites.

☒ 2.

The Secretary requested to be informed only as necessary to perform his job.

☒ 3. They predicted a similarly miniscule drop for September.

☒ 4.

Moving between floors, their journey seems both improbable and inevitable.

Question Type : MCQ
Question ID : 264330136184
Option 1 ID : 264330533531
Option 2 ID : 264330533532
Option 3 ID : 264330533534
Option 4 ID : 264330533533
Status : Answered
Chosen Option : 1

Q.17 Fill in the blank with the most appropriate option.

They bought _____ tickets instead from a sleepy-looking guard.

- Ans ☒ 1. there
☒ 2. dare
☒ 3. their
☒ 4. dire

Question Type : MCQ
Question ID : 264330136186
Option 1 ID : 264330533540
Option 2 ID : 264330533541
Option 3 ID : 264330533539
Option 4 ID : 264330533542
Status : Answered
Chosen Option : 3

Q.18 Select the most appropriate option to fill in the blank.

Indonesian police fired warning shots, tear gas and water cannon to try and _____ the crowd.

- Ans
- ☐ 1. Discrete
 - ☐ 2. Delimit
 - ☐ 3. Deleterious
 - ☒ 4. Disperse

Question Type : MCQ
Question ID : 264330136541
Option 1 ID : 264330534906
Option 2 ID : 264330534905
Option 3 ID : 264330534903
Option 4 ID : 264330534904
Status : Answered
Chosen Option : 4

Q.19 Choose the word that can substitute the given group of words.

Fit to drink

- Ans
- ☐ 1. Ostensible
 - ☐ 2. Deplorable
 - ☐ 3. Liable
 - ☒ 4. Potable

Question Type : MCQ
Question ID : 264330135166
Option 1 ID : 264330529598
Option 2 ID : 264330529595
Option 3 ID : 264330529596
Option 4 ID : 264330529597
Status : Answered
Chosen Option : 4

Q.20 Select the most appropriate synonym to substitute the bracketed word in the given sentence.

Spreading from the ports, Formosan termites began a (subterranean) colonization of the country.

- Ans
- ☐ 1. Terrestrial
 - ☒ 2. Underground
 - ☐ 3. Overt
 - ☐ 4. Subcutaneous

Question Type : MCQ
Question ID : 264330136361
Option 1 ID : 264330534213
Option 2 ID : 264330534212
Option 3 ID : 264330534211
Option 4 ID : 264330534214
Status : Answered
Chosen Option : 1

Comprehension:

In the following passage some words have been deleted. Fill in the blanks with the help of the alternatives given. Select the most appropriate option for each number.

A loud, echoing crack broke the sleepy (1) _____ like a gunshot; a cat streaked out (2) _____ a parked car and flew out of sight; a shriek, a bellowed oath and the (3) _____ of breaking (4) _____ came from the Paula's living room, and as (5) _____ this was the signal Mansi had been waiting for.

SubQuestion No : 21

Q.21 Select the most appropriate option to fill in the blank No. 1.

- Ans
- ☒ 1. lull
 - ☒ 2. blast
 - ☒ 3. silence
 - ☒ 4. blackout

Question Type : MCQ
 Question ID : 264330136118
 Option 1 ID : 264330533277
 Option 2 ID : 264330533278
 Option 3 ID : 264330533276
 Option 4 ID : 264330533275
 Status : Answered
 Chosen Option : 3

Comprehension:

In the following passage some words have been deleted. Fill in the blanks with the help of the alternatives given. Select the most appropriate option for each number.

A loud, echoing crack broke the sleepy (1) _____ like a gunshot; a cat streaked out (2) _____ a parked car and flew out of sight; a shriek, a bellowed oath and the (3) _____ of breaking (4) _____ came from the Paula's living room, and as (5) _____ this was the signal Mansi had been waiting for.

SubQuestion No : 22

Q.22 Select the most appropriate option to fill in the blank No. 2.

- Ans
- ☒ 1. from under
 - ☒ 2. side under
 - ☒ 3. by under
 - ☒ 4. from over

Question Type : MCQ
 Question ID : 264330136119
 Option 1 ID : 264330533281
 Option 2 ID : 264330533282
 Option 3 ID : 264330533280
 Option 4 ID : 264330533279
 Status : Answered
 Chosen Option : 1

Comprehension:

In the following passage some words have been deleted. Fill in the blanks with the help of the alternatives given. Select the most appropriate option for each number.

A loud, echoing crack broke the sleepy (1) _____ like a gunshot; a cat streaked out (2) _____ a parked car and flew out of sight; a shriek, a bellowed oath and the (3) _____ of breaking (4) _____ came from the Paula's living room, and as (5) _____ this was the signal Mansi had been waiting for.

SubQuestion No : 23

Q.23 Select the most appropriate option to fill in the blank No. 3.

- Ans
- ☒ 1. intact
 - ☒ 2. sound
 - ☒ 3. flawless
 - ☒ 4. vibrant

Question Type : MCQ
 Question ID : 264330136120
 Option 1 ID : 264330533284
 Option 2 ID : 264330533286
 Option 3 ID : 264330533283
 Option 4 ID : 264330533285
 Status : Answered
 Chosen Option : 2

Comprehension:

In the following passage some words have been deleted. Fill in the blanks with the help of the alternatives given. Select the most appropriate option for each number.

A loud, echoing crack broke the sleepy (1) _____ like a gunshot; a cat streaked out (2) _____ a parked car and flew out of sight; a shriek, a bellowed oath and the (3) _____ of breaking (4) _____ came from the Paula's living room, and as (5) _____ this was the signal Mansi had been waiting for.

SubQuestion No : 24

Q.24 Select the most appropriate option to fill in the blank No. 4.

- Ans
- ☒ 1. heart
 - ☒ 2. china
 - ☒ 3. atrocity
 - ☒ 4. tyre

Question Type : MCQ
 Question ID : 264330136121
 Option 1 ID : 264330533289
 Option 2 ID : 264330533288
 Option 3 ID : 264330533290
 Option 4 ID : 264330533287
 Status : Answered
 Chosen Option : 1

Comprehension:

In the following passage some words have been deleted. Fill in the blanks with the help of the alternatives given. Select the most appropriate option for each number.

A loud, echoing crack broke the sleepy (1) _____ like a gunshot; a cat streaked out (2) _____ a parked car and flew out of sight; a shriek, a bellowed oath and the (3) _____ of breaking (4) _____ came from the Paula's living room, and as (5) _____ this was the signal Mansi had been waiting for.

SubQuestion No : 25

Q.25 Select the most appropriate option to fill in the blank No. 5.

- Ans
- ☒ 1. like
 - ☒ 2. throughout
 - ☒ 3. though
 - ☒ 4. through

Question Type : MCQ

Question ID : 264330136122

Option 1 ID : 264330533292

Option 2 ID : 264330533294

Option 3 ID : 264330533291

Option 4 ID : 264330533293

Status : Answered

Chosen Option : 3

