

## Multi Tasking Non Technical Staff and Havaladar CBIC and CBN Examination 2022

Roll Number	
Candidate Name	
Venue Name	iON Digital Zone iDZ Kuberpur
Exam Date	16/06/2023
Exam Time	12:00 PM - 2:00 PM
Subject	MTS Non Tech Havaladar CBIC and CBN Examination 2022

### Section : Numerical and Mathematical Ability

Q.1 The ratio of selling price to the cost price is 9 : 8. What is the profit percentage?

- Ans
- ☒ 1. 15 percent
  - ☒ 2. 12.5 percent
  - ☒ 3. 20 percent
  - ☒ 4. 10.5 percent

Question Type : MCQ

Question ID : 264330139957

Option 1 ID : 264330548207

Option 2 ID : 264330548208

Option 3 ID : 264330548209

Option 4 ID : 264330548210

Status : Answered

Chosen Option : 2

Q.2 What is the value of  $\frac{132}{11} \times \frac{13}{12} \div \frac{169}{14} - \frac{1}{13}$  ?

- Ans
- ☒ 1. 5
  - ☒ 2. 6
  - ☒ 3. 3
  - ☒ 4. 1

Question Type : MCQ

Question ID : 264330140579

Option 1 ID : 264330550669

Option 2 ID : 264330550670

Option 3 ID : 264330550668

Option 4 ID : 264330550667

Status : Answered

Chosen Option : 4

# Test Prime

**ALL EXAMS,  
ONE SUBSCRIPTION**



**70,000+**  
Mock Tests



**Personalised  
Report Card**



**Unlimited  
Re-Attempt**



**600+**  
Exam Covered



**Previous Year  
Papers**



**500%  
Refund**



**ATTEMPT FREE MOCK NOW**

**Q.3** The sum of the two numbers is 45. Their HCF And LCM are 5 and 70 respectively. Find the sum of the reciprocal of the two numbers.

- Ans** ☒ 1.  $\frac{9}{70}$   
☒ 2.  $\frac{3}{140}$   
☒ 3.  $\frac{4}{35}$   
☒ 4.  $\frac{3}{16}$

Question Type : **MCQ**

Question ID : **264330139623**

Option 1 ID : **264330546908**

Option 2 ID : **264330546907**

Option 3 ID : **264330546909**

Option 4 ID : **264330546910**

Status : **Answered**

Chosen Option : **1**

**Q.4** Price of 1 kg of rice is increased by 50 percent and the old price of the rice is Rs. 60. What is the new price of the rice per kg?

- Ans** ☒ 1. Rs. 90  
☒ 2. Rs. 80  
☒ 3. Rs. 60  
☒ 4. Rs. 72

Question Type : **MCQ**

Question ID : **264330140244**

Option 1 ID : **264330549358**

Option 2 ID : **264330549356**

Option 3 ID : **264330549355**

Option 4 ID : **264330549357**

Status : **Answered**

Chosen Option : **1**

**Q.5** The sum of the length and breadth of a cuboid is 16 cm. If the height of the cuboid is  $\frac{1}{4}$  of the sum of its length and breadth, then what is the lateral surface area of the cuboid?

- Ans** ☒ 1.  $128 \text{ cm}^2$   
☒ 2.  $196 \text{ cm}^2$   
☒ 3.  $96 \text{ cm}^2$   
☒ 4.  $156 \text{ cm}^2$

Question Type : **MCQ**

Question ID : **264330139924**

Option 1 ID : **264330548076**

Option 2 ID : **264330548075**

Option 3 ID : **264330548078**

Option 4 ID : **264330548077**

Status : **Answered**

Chosen Option : **1**

**Q.6** Simple interest on a sum for eight months at the rate of 8 percent per annum is Rs. 240. What is the value of sum?

- Ans**
- ☒ 1. Rs. 7500
  - ☒ 2. Rs. 6000
  - ☒ 3. Rs. 7200
  - ☒ 4. Rs. 4500

Question Type : **MCQ**

Question ID : **264330139618**

Option 1 ID : **264330546887**

Option 2 ID : **264330546888**

Option 3 ID : **264330546889**

Option 4 ID : **264330546890**

Status : **Answered**

Chosen Option : **4**

**Q.7** P and Q start from the same point and at the same time with speeds 20 km/hr and 16 km/hr respectively. What is the distance between P and Q after 4 hours if both move in same direction?

- Ans**
- ☒ 1. 12 km
  - ☒ 2. 20 km
  - ☒ 3. 15 km
  - ☒ 4. 16 km

Question Type : **MCQ**

Question ID : **264330140834**

Option 1 ID : **264330551683**

Option 2 ID : **264330551686**

Option 3 ID : **264330551684**

Option 4 ID : **264330551685**

Status : **Answered**

Chosen Option : **2**

**Q.8** A mixture of 500 litres of alcohol and water contains 20 percent water. How much more water should be added to this so that the water will become 50 percent in the new mixture?

- Ans**
- ☒ 1. 300 litres
  - ☒ 2. 400 litres
  - ☒ 3. 350 litres
  - ☒ 4. 450 litres

Question Type : **MCQ**

Question ID : **264330140222**

Option 1 ID : **264330549270**

Option 2 ID : **264330549269**

Option 3 ID : **264330549268**

Option 4 ID : **264330549267**

Status : **Answered**

Chosen Option : **2**

**Q.9** A bottle holds 8 litres of a mixture of milk and water in a ratio of 3:1. 3 litres of water is added to the given mixture. Find the new ratio of milk and water in the mixture.

- Ans**
- ☒ 1. 3:2
  - ☒ 2. 1:3
  - ☒ 3. 2:3
  - ☒ 4. 6:5

Question Type : **MCQ**  
 Question ID : **264330133759**  
 Option 1 ID : **264330524060**  
 Option 2 ID : **264330524062**  
 Option 3 ID : **264330524061**  
 Option 4 ID : **264330524059**  
 Status : **Answered**  
 Chosen Option : **2**

**Q.10** The compound interest (compounding annually) on a certain sum for 2 years at the rate of 20 percent per annum is Rs. 2420. What will be the simple interest on the same sum for 3 years at the same rate of interest?

- Ans**
- ☒ 1. Rs. 3300
  - ☒ 2. Rs. 3000
  - ☒ 3. Rs. 3800
  - ☒ 4. Rs. 4200

Question Type : **MCQ**  
 Question ID : **264330140594**  
 Option 1 ID : **264330550727**  
 Option 2 ID : **264330550728**  
 Option 3 ID : **264330550729**  
 Option 4 ID : **264330550730**  
 Status : **Answered**  
 Chosen Option : **2**

**Q.11** The table given below shows the production of taxi by two companies in 6 years.

Years	A	B
Y1	800	1300
Y2	500	1000
Y3	700	800
Y4	1200	400
Y5	900	300
Y6	600	500

Which of the following statement is NOT correct?

- I. The production of taxi by A in year Y1 is 20 percent more than production of taxi by B in year Y2.
- II. The ratio of total production of taxi by A in year Y3 and Y4 to the total production of taxi by B in year Y5 and Y6 is 8 : 19.

- Ans**
- ☒ 1. Both I and II
  - ☒ 2. Only I
  - ☒ 3. Neither I nor II
  - ☒ 4. Only II

Question Type : **MCQ**  
 Question ID : **264330140211**  
 Option 1 ID : **264330549225**  
 Option 2 ID : **264330549223**  
 Option 3 ID : **264330549226**  
 Option 4 ID : **264330549224**  
 Status : **Answered**  
 Chosen Option : **3**

**Q.12** The profit earned by selling a jacket for Rs. 3860 is equal to the loss incurred by selling the same jacket for Rs. 1900. What should be the selling price of the jacket to earn 10 percent profit?

- Ans**
- ☒ 1. Rs. 3450
  - ☒ 2. Rs. 3168
  - ☒ 3. Rs. 3360
  - ☒ 4. Rs. 3250

Question Type : MCQ

Question ID : 264330140618

Option 1 ID : 264330550819

Option 2 ID : 264330550821

Option 3 ID : 264330550822

Option 4 ID : 264330550820

Status : Answered

Chosen Option : 2

**Q.13** The radius of two spheres is in the ratio of 1 : 5. What is the ratio of the volume of the two spheres?

- Ans**
- ☒ 1. 8 : 27
  - ☒ 2. 1 : 25
  - ☒ 3. 1 : 125
  - ☒ 4. 1 : 64

Question Type : MCQ

Question ID : 264330140546

Option 1 ID : 264330550539

Option 2 ID : 264330550541

Option 3 ID : 264330550540

Option 4 ID : 264330550542

Status : Answered

Chosen Option : 3

**Q.14** A can construct a divider alone in 60 days, while B alone can construct it in 80 days. If they construct it together and get Rs. 7000, then what is B's share?

- Ans**
- ☒ 1. Rs. 2880
  - ☒ 2. Rs. 3000
  - ☒ 3. Rs. 3500
  - ☒ 4. Rs. 3200

Question Type : MCQ

Question ID : 264330140790

Option 1 ID : 264330551507

Option 2 ID : 264330551508

Option 3 ID : 264330551509

Option 4 ID : 264330551510

Status : Answered

Chosen Option : 2

Q.15 What is the value of  $\sqrt{0.48 \times 0.48 + 0.25 \times 0.25 + 0.5 \times 0.48}$  ?

- Ans
- ☒ 1. 0.63
  - ☒ 2. 0.93
  - ☒ 3. 0.83
  - ☒ 4. 0.73

Question Type : MCQ

Question ID : 264330140256

Option 1 ID : 264330549405

Option 2 ID : 264330549406

Option 3 ID : 264330549404

Option 4 ID : 264330549403

Status : Answered

Chosen Option : 2

Q.16 If  $P : Q : R = 4 : 7 : 9$  and  $R : S = 2 : 5$ , then what is the value of  $P : S$  ?

- Ans
- ☒ 1. 8 : 45
  - ☒ 2. 1 : 5
  - ☒ 3. 9 : 57
  - ☒ 4. 10 : 43

Question Type : MCQ

Question ID : 264330140591

Option 1 ID : 264330550718

Option 2 ID : 264330550717

Option 3 ID : 264330550715

Option 4 ID : 264330550716

Status : Answered

Chosen Option : 1

Q.17 Sunil drove for 2 hours at a rate of 50 miles per hour and for 3 hours at 60 miles per hour. What was his average speed for the whole journey?

- Ans
- ☒ 1. 55 miles per hour
  - ☒ 2. 50 miles per hour
  - ☒ 3. 56 miles per hour
  - ☒ 4. 52 miles per hour

Question Type : MCQ

Question ID : 264330140801

Option 1 ID : 264330551552

Option 2 ID : 264330551554

Option 3 ID : 264330551553

Option 4 ID : 264330551551

Status : Answered

Chosen Option : 3



**Q.18** Two pipes can fill a tank alone in 20 hours and 24 hours respectively and a outlet pipe alone can empty 20 gallons of water per hour. All the three pipes working together can fill the same empty tank in 40 hours. What is the capacity of the tank?

- Ans**
- ☒ 1. 450 gallons
  - ☒ 2. 300 gallons
  - ☒ 3. 600 gallons
  - ☒ 4. 480 gallons

Question Type : MCQ

Question ID : 264330140240

Option 1 ID : 264330549340

Option 2 ID : 264330549339

Option 3 ID : 264330549341

Option 4 ID : 264330549342

Status : Answered

Chosen Option : 2

**Q.19** The marked price of an article is 160 percent of the cost price. If 30 percent discount is given, then what will be the profit percentage?

- Ans**
- ☒ 1. 10 percent
  - ☒ 2. 15 percent
  - ☒ 3. 12 percent
  - ☒ 4. 14 percent

Question Type : MCQ

Question ID : 264330139620

Option 1 ID : 264330546895

Option 2 ID : 264330546896

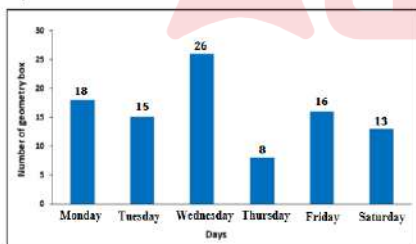
Option 3 ID : 264330546897

Option 4 ID : 264330546898

Status : Answered

Chosen Option : 3

**Q.20** The following bar graph shows the sale of geometry boxes for 6 days in a stationary shop. What is the average sale per day?



- Ans**
- ☒ 1. 16
  - ☒ 2. 20
  - ☒ 3. 18
  - ☒ 4. 15

Question Type : MCQ

Question ID : 264330140838

Option 1 ID : 264330551699

Option 2 ID : 264330551702

Option 3 ID : 264330551700

Option 4 ID : 264330551701

Status : Answered

Chosen Option : 1



## Section : Reasoning Ability and Problem Solving

**Q.1** Two Statements are given followed by two conclusions numbered I and II. Assuming the statements to be true, even if they seem to be at variance with commonly known facts, decide which of the conclusions logically follow(s) from the statements.

Statements:

Some Blankets are Bedsheets.

Some Bedsheets are Pillows.

Conclusions:

I. Some Blankets are Pillows.

II. All Bedsheets can never be Pillows.

- Ans**
- ☒ 1. Only conclusion II follows.
  - ☒ 2. Only conclusion I follows.
  - ☒ 3. Both conclusions I and II follow.
  - ☒ 4. Neither conclusion I nor II follow.

Question Type : MCQ

Question ID : 264330140442

Option 1 ID : 264330550148

Option 2 ID : 264330550147

Option 3 ID : 264330550149

Option 4 ID : 264330550150

Status : Answered

Chosen Option : 1

**Q.2** Select the option that is related to the third word in the same way as the second word is related to the first word.  
Horses : Neigh :: Frogs : ?

- Ans**
- ☒ 1. Roar
  - ☒ 2. Yelp
  - ☒ 3. Croak
  - ☒ 4. Amphibian

Question Type : MCQ

Question ID : 264330140114

Option 1 ID : 264330548838

Option 2 ID : 264330548835

Option 3 ID : 264330548836

Option 4 ID : 264330548837

Status : Answered

Chosen Option : 3

**Q.3** If A denotes 'addition', B denotes 'multiplication', C denotes 'subtraction', and D denotes 'division', then what will be the value of the following equation?  
7 B 3 C 18 A (4 D 2) = ?

- Ans**
- ☒ 1. 6
  - ☒ 2. 7
  - ☒ 3. 5
  - ☒ 4. 4

Question Type : MCQ

Question ID : 264330140149

Option 1 ID : 264330548976

Option 2 ID : 264330548975

Option 3 ID : 264330548977

Option 4 ID : 264330548978

Status : Answered

Chosen Option : 3

Q.4 Which of the following letter cluster will replace the question mark (?) in the given series?

XG, UJ, RM, OP, ?

- Ans
- ☒ 1. MR
  - ☒ 2. LS
  - ☒ 3. MS
  - ☒ 4. LR

Question Type : MCQ

Question ID : 264330140472

Option 1 ID : 264330550269

Option 2 ID : 264330550268

Option 3 ID : 264330550267

Option 4 ID : 264330550270

Status : Answered

Chosen Option : 2

Q.5 In a certain code language, 'IGNORE' is written as 'REONGI'. How will 'JUNIOR' be written in that language?

- Ans
- ☒ 1. ORIUNJ
  - ☒ 2. ORIJUN
  - ☒ 3. OIRNUJ
  - ☒ 4. ORINUJ

Question Type : MCQ

Question ID : 264330140417

Option 1 ID : 264330550049

Option 2 ID : 264330550050

Option 3 ID : 264330550048

Option 4 ID : 264330550047

Status : Answered

Chosen Option : 4

Q.6 Which of the following numbers will replace the question mark (?) in the given series?

29, 36, 44, 53, 63, ?

- Ans
- ☒ 1. 74
  - ☒ 2. 76
  - ☒ 3. 78
  - ☒ 4. 72

Question Type : MCQ

Question ID : 264330140483

Option 1 ID : 264330550311

Option 2 ID : 264330550312

Option 3 ID : 264330550313

Option 4 ID : 264330550314

Status : Answered

Chosen Option : 1

**Q.7** Select the option that is related to the fifth term in the same way as the second term is related to the first term and fourth term is related to third term.

TRA : XNO :: GBT : QXB :: NOQ : ?

- Ans**
- ✓ 1. NKI
  - ✗ 2. NKJ
  - ✗ 3. NIJ
  - ✗ 4. NII

Question Type : **MCQ**

Question ID : **264330139973**

Option 1 ID : **264330548272**

Option 2 ID : **264330548273**

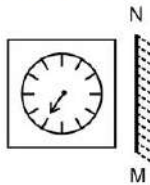
Option 3 ID : **264330548271**

Option 4 ID : **264330548274**

Status : **Answered**


Chosen Option : 1

**Q.8** Select the correct mirror image of the given figure when the mirror MN is placed to the right side of the figure.



**Ans**

✓ 1.



✗ 2.



✗ 3.



✗ 4.



Question Type : **MCQ**

Question ID : **264330138806**

Option 1 ID : **264330543833**

Option 2 ID : **264330543831**

Option 3 ID : **264330543834**

Option 4 ID : **264330543832**

Status : **Answered**

Chosen Option : 1

**Q.9** In a certain code language, 'CAMERA' is written as 'B185131D'. How will 'EXTEND' be written in that language?

- Ans**
- ☒ 1. C1452024F
  - ☒ 2. E1452024F
  - ☒ 3. E1452024D
  - ☒ 4. C1452024D

Question Type : **MCQ**

Question ID : **264330140137**

Option 1 ID : **264330548928**

Option 2 ID : **264330548927**

Option 3 ID : **264330548929**

Option 4 ID : **264330548930**

Status : **Answered**

Chosen Option : **2**

**Q.10** Seven girls Mansi, Shweta, Monika, Payal, Aarti, Kajal and Laxmi are sitting around a circular table facing opposite to the centre (not necessarily in the same order). Kajal is second to the left of Laxmi. Payal is the immediate neighbour of both Mansi and Laxmi. Monika is not the immediate neighbour of Laxmi. Aarti is second to the left of Kajal. Who is sitting second to the left of Payal?

- Ans**
- ☒ 1. Aarti
  - ☒ 2. Laxmi
  - ☒ 3. Kajal
  - ☒ 4. Shweta

Question Type : **MCQ**

Question ID : **264330140963**

Option 1 ID : **264330552200**

Option 2 ID : **264330552202**

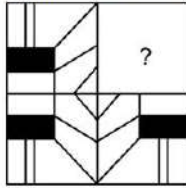
Option 3 ID : **264330552201**

Option 4 ID : **264330552199**

Status : **Answered**

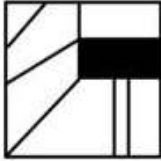
Chosen Option : **4**

Q.11 Select the option figure that will replace the question mark (?) in the figure given below to complete the pattern.  
(rotation is not allowed)

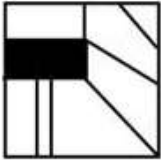


Ans

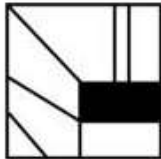
✗ 1.



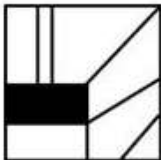
✗ 2.



✓ 3.



✗ 4.



Question Type : MCQ

Question ID : 264330140491

Option 1 ID : 264330550344

Option 2 ID : 264330550345

Option 3 ID : 264330550343

Option 4 ID : 264330550346

Status : Answered

Chosen Option : 3

Q.12 Which of the following numbers will replace the question mark (?) in the given series?

25, -75, 225, -675, 2025, ?

Ans ✗ 1. -5160

✓ 2. -6075

✗ 3. -7250

✗ 4. -8400

Question Type : MCQ

Question ID : 264330140085

Option 1 ID : 264330548721

Option 2 ID : 264330548722

Option 3 ID : 264330548719

Option 4 ID : 264330548720

Status : Answered

Chosen Option : 2

**Q.13** In the following question below are given some statements followed by some conclusions based on those statements. Taking the given statements to be true even if they seem to be at variance from commonly known facts. Read all the conclusions and then decide which of the given conclusion logically follows the given statements.

Statements:

I. All land are solid.

II. No land is boy.

Conclusion:

I. All solid are land.

II. All boy are solid.

- Ans**
- ☒ 1. Only conclusion II follows
  - ☒ 2. Both conclusions I and II follows
  - ☒ 3. Neither conclusion follows
  - ☒ 4. Only conclusion I follows

Question Type : MCQ

Question ID : 264330140985

Option 1 ID : 264330552288

Option 2 ID : 264330552289

Option 3 ID : 264330552290

Option 4 ID : 264330552287

Status : Answered

Chosen Option : 3

**Q.14** After interchanging the given two signs and two numbers, what will be the value of the given equation?

$+$  and  $\div$ , 4 and 6 ;  $8 \div 6 \times 3 + 4 - 9$

- Ans**
- ☒ 1. 6
  - ☒ 2. 1
  - ☒ 3. 0
  - ☒ 4. 2

Question Type : MCQ

Question ID : 264330139986

Option 1 ID : 264330548324

Option 2 ID : 264330548325

Option 3 ID : 264330548326

Option 4 ID : 264330548323

Status : Answered

Chosen Option : 2

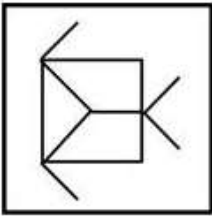
Q.15 Select the option figure in which the given figure (X) is embedded as its part (rotation is NOT allowed).



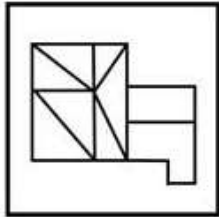
(X)

Ans

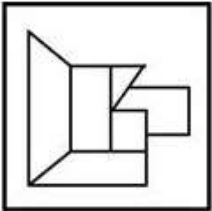
✗ 1.



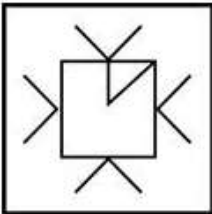
✓ 2.



✗ 3.



✗ 4.



Question Type : MCQ

Question ID : 264330140050

Option 1 ID : 264330548581

Option 2 ID : 264330548582

Option 3 ID : 264330548579

Option 4 ID : 264330548580

Status : Answered

Chosen Option : 2

Q.16 Five friends Mahi, Mili, Milan, Manas, and Monika sit on a bench facing north. Only Mahi is sitting between Mili and Monika. Manas sits to the immediate left of Mili. Manas is not at the end. Who sits to the immediate right of Milan?

Ans ✓ 1. Manas

✗ 2. Monika

✗ 3. Mahi

✗ 4. Mili

Question Type : MCQ

Question ID : 264330138794

Option 1 ID : 264330543785

Option 2 ID : 264330543786

Option 3 ID : 264330543783

Option 4 ID : 264330543784

Status : Answered

Chosen Option : 1



**Q.17** Select the set in which the numbers are related in the same way as are the numbers of the following sets.(NOTE : Operations should be performed on the whole numbers, without breaking down the numbers into its constituent digits. E.g 13 – Operations on 13 such as adding /subtracting /multiplying etc. to 13 can be performed. Breaking down 13 into 1 and 3 and then performing mathematical operations on 1 and 3 is not allowed)  
(2, 7, 81)  
(5, 6, 121)

- Ans**
- ☒ 1. (7, 5, 134)
  - ☒ 2. (5, 4, 100)
  - ☒ 3. (6, 2, 36)
  - ☒ 4. (6, 7, 169)

Question Type : MCQ  
Question ID : 264330140127  
Option 1 ID : 264330548890  
Option 2 ID : 264330548887  
Option 3 ID : 264330548889  
Option 4 ID : 264330548888  
Status : Answered  
Chosen Option : 4

**Q.18** Number of pens in five shops M1, M2, M3, M4 and M5 are compared. Number of pens in M3 are more than only M1. No two shops have same number of pens. Number of pens in M4 are less than M2 but more than M5. Number of pens in M4 are more than how many shops?

- Ans**
- ☒ 1. 4
  - ☒ 2. 2
  - ☒ 3. 3
  - ☒ 4. 1

Question Type : MCQ  
Question ID : 264330140061  
Option 1 ID : 264330548626  
Option 2 ID : 264330548625  
Option 3 ID : 264330548624  
Option 4 ID : 264330548623  
Status : Answered  
Chosen Option : 3

**Q.19** In a certain code language, 'JPTM' is written as '9421', 'MOST' is written as '3279', 'OPJB' is written as '4617'. What is 'S' written in that code language?

- Ans**
- ☒ 1. 7
  - ☒ 2. 9
  - ☒ 3. 3
  - ☒ 4. 2

Question Type : MCQ  
Question ID : 264330139552  
Option 1 ID : 264330546624  
Option 2 ID : 264330546626  
Option 3 ID : 264330546623  
Option 4 ID : 264330546625  
Status : Not Answered  
Chosen Option : --

**Q.20** Select the option that is related to the third number in the same way as the second number is related to the first number.

14 : 75 :: 11 : ?

**Ans** ☒ 1. 64

☒ 2. 78

☒ 3. 60

☒ 4. 55

Question Type : **MCQ**

Question ID : **264330138780**

Option 1 ID : **264330543729**

Option 2 ID : **264330543730**

Option 3 ID : **264330543727**

Option 4 ID : **264330543728**

Status : **Answered**

Chosen Option : **3**

Section : **General Awareness**

**Q.1** India shares longest land border with which of the following countries?

**Ans** ☒ 1. Bangladesh

☒ 2. Pakistan

☒ 3. China

☒ 4. Nepal

Question Type : **MCQ**

Question ID : **264330139767**

Option 1 ID : **264330547485**

Option 2 ID : **264330547484**

Option 3 ID : **264330547483**

Option 4 ID : **264330547486**

Status : **Not Answered**

Chosen Option : **--**

**Q.2** Pongal is another name for Makar Sankranti, which is celebrated during the same time in various cities of \_\_\_\_.

**Ans** ☒ 1. Andhra Pradesh

☒ 2. Karnataka

☒ 3. Kerala

☒ 4. Tamil Nadu

Question Type : **MCQ**

Question ID : **264330141049**

Option 1 ID : **264330552546**

Option 2 ID : **264330552545**

Option 3 ID : **264330552543**

Option 4 ID : **264330552544**

Status : **Answered**

Chosen Option : **4**

**Q.3** Which among the following is a cooking procedure in which the sugar in the food gets oxidized, turning into a brown colour?

- Ans**
- ☒ 1. Filtration
  - ☒ 2. Caramelisation
  - ☒ 3. Emulsification
  - ☒ 4. Bromination

Question Type : **MCQ**  
 Question ID : **264330140708**  
 Option 1 ID : **264330551180**  
 Option 2 ID : **264330551181**  
 Option 3 ID : **264330551179**  
 Option 4 ID : **264330551182**  
 Status : **Answered**  
 Chosen Option : **2**

**Q.4** After recovering from an infectious illness, often small pox, Brita dance is typically performed to thank the local deity. It is one of the most well-known dances of \_\_\_\_\_.

- Ans**
- ☒ 1. West Bengal
  - ☒ 2. Bihar
  - ☒ 3. Uttar Pradesh
  - ☒ 4. Jharkhand

Question Type : **MCQ**  
 Question ID : **264330141048**  
 Option 1 ID : **264330552542**  
 Option 2 ID : **264330552541**  
 Option 3 ID : **264330552539**  
 Option 4 ID : **264330552540**  
 Status : **Not Answered**  
 Chosen Option : **--**

**Q.5** Which country is the only country in the world to have both tigers and lions?

- Ans**
- ☒ 1. Kenya
  - ☒ 2. South Africa
  - ☒ 3. India
  - ☒ 4. China

Question Type : **MCQ**  
 Question ID : **264330139766**  
 Option 1 ID : **264330547480**  
 Option 2 ID : **264330547479**  
 Option 3 ID : **264330547482**  
 Option 4 ID : **264330547481**  
 Status : **Not Answered**  
 Chosen Option : **--**

Q.6 "Janjatiya Gaurav Diwas" is observed on the birth anniversary of \_\_\_\_\_ .

- Ans
- ☒ 1. Mahatma Gandhi
  - ☒ 2. Sardar Vallabhbhai Patel
  - ☒ 3. Birsa Munda
  - ☒ 4. B. R. Ambedkar

Question Type : MCQ

Question ID : 264330140889

Option 1 ID : 264330551904

Option 2 ID : 264330551903

Option 3 ID : 264330551905

Option 4 ID : 264330551906

Status : Not Answered

Chosen Option : --

Q.7 Which Odissi dancer was the first dancer of foreign origin to be conferred the Padma Shri in 2006?

- Ans
- ☒ 1. Ileana Citaristi
  - ☒ 2. Mrinalini Sarabhai
  - ☒ 3. Sofia Boutella
  - ☒ 4. Eri Nakamura

Question Type : MCQ

Question ID : 264330140925

Option 1 ID : 264330552047

Option 2 ID : 264330552048

Option 3 ID : 264330552049

Option 4 ID : 264330552050

Status : Not Answered

Chosen Option : --

Q.8 Which of the following singer is honoured with the Padma Shri 2022 by the Government of India?

- Ans
- ☒ 1. Abhijeet Bhattacharya
  - ☒ 2. Anu Malik
  - ☒ 3. Leslie Lewis
  - ☒ 4. Sonu Nigam

Question Type : MCQ

Question ID : 264330140694

Option 1 ID : 264330551124

Option 2 ID : 264330551126

Option 3 ID : 264330551123

Option 4 ID : 264330551125

Status : Answered

Chosen Option : 4

Q.9 The Mahabodhi Temple Complex has direct association with the life of the \_\_\_\_\_.

- Ans ☒ 1. Lord Buddha  
☒ 2. Jain Trithankars  
☒ 3. Mughal rulers  
☒ 4. Sikh Gurus

Question Type : MCQ  
 Question ID : 264330140730  
 Option 1 ID : 264330551270  
 Option 2 ID : 264330551269  
 Option 3 ID : 264330551267  
 Option 4 ID : 264330551268  
 Status : Answered  
 Chosen Option : 1

Q.10 If we deduct depreciation from GNP the measure of aggregate income that we obtain is called \_\_\_\_\_.

- Ans ☒ 1. Gross domestic product  
☒ 2. National income  
☒ 3. Private income  
☒ 4. Net National Product

Question Type : MCQ  
 Question ID : 264330140775  
 Option 1 ID : 264330551449  
 Option 2 ID : 264330551450  
 Option 3 ID : 264330551448  
 Option 4 ID : 264330551447  
 Status : Answered  
 Chosen Option : 1

Q.11 The Union Finance Ministry issued a notification amending the Electoral Bonds Scheme to allow the sale of electoral bonds for extra \_\_\_\_\_ days in the year of general elections to the Legislative Assembly of States and UTs with legislature.

- Ans ☒ 1. 45  
☒ 2. 35  
☒ 3. 15  
☒ 4. 25

Question Type : MCQ  
 Question ID : 264330140932  
 Option 1 ID : 264330552078  
 Option 2 ID : 264330552077  
 Option 3 ID : 264330552076  
 Option 4 ID : 264330552075  
 Status : Not Answered  
 Chosen Option : --

Q.12 Who is the author of the novel, "Oliver Twist"?

- Ans
- ☒ 1. Mark Twain
  - ☒ 2. Charles Dickens
  - ☒ 3. Oscar Wilde
  - ☒ 4. Jane Austen

Question Type : MCQ

Question ID : 264330140384

Option 1 ID : 264330549915

Option 2 ID : 264330549917

Option 3 ID : 264330549916

Option 4 ID : 264330549918

Status : Not Answered

Chosen Option : --

Q.13 Judo has its origin in ancient \_\_\_\_\_ art of Ju-jitsu.

- Ans
- ☒ 1. Malaysian
  - ☒ 2. Korean
  - ☒ 3. Chinese
  - ☒ 4. Japanese

Question Type : MCQ

Question ID : 264330139870

Option 1 ID : 264330547860

Option 2 ID : 264330547862

Option 3 ID : 264330547859

Option 4 ID : 264330547861

Status : Answered

Chosen Option : 4

Q.14 The slash and burn agriculture is called 'Bewar' or 'Dahiya' in \_\_\_\_\_.

- Ans
- ☒ 1. Madhya Pradesh
  - ☒ 2. Odisha
  - ☒ 3. Assam
  - ☒ 4. Uttar Pradesh

Question Type : MCQ

Question ID : 264330140710

Option 1 ID : 264330551187

Option 2 ID : 264330551190

Option 3 ID : 264330551189

Option 4 ID : 264330551188

Status : Not Answered

Chosen Option : --

Q.15 Who gave title of “Father of the Nation” to Mahatma Gandhi?

- Ans
- ☒ 1. Rabindranath Tagore
  - ☒ 2. Subhas Chandra Bose
  - ☒ 3. Jawaharlal Nehru
  - ☒ 4. Sardar Vallabhbhai Patel

Question Type : MCQ  
 Question ID : 264330139747  
 Option 1 ID : 264330547404  
 Option 2 ID : 264330547405  
 Option 3 ID : 264330547403  
 Option 4 ID : 264330547406  
 Status : Answered  
 Chosen Option : 2

Q.16 Oxides of \_\_\_\_\_ and \_\_\_\_\_ dissolve in rain water and form acids which is called as acid rain.

- Ans
- ☒ 1. phosphorous, sulphur
  - ☒ 2. sulphur, nitrogen
  - ☒ 3. carbon dioxide, methane
  - ☒ 4. calcium, magnesium

Question Type : MCQ  
 Question ID : 264330139739  
 Option 1 ID : 264330547373  
 Option 2 ID : 264330547372  
 Option 3 ID : 264330547371  
 Option 4 ID : 264330547374  
 Status : Answered  
 Chosen Option : 1

Q.17 Satyajit Ray was honoured with Bharat Ratna in 1992. He was a famous \_\_\_\_\_.

- Ans
- ☒ 1. Physicist
  - ☒ 2. Filmmaker
  - ☒ 3. Cricketer
  - ☒ 4. Lawyer

Question Type : MCQ  
 Question ID : 264330139706  
 Option 1 ID : 264330547242  
 Option 2 ID : 264330547241  
 Option 3 ID : 264330547239  
 Option 4 ID : 264330547240  
 Status : Answered  
 Chosen Option : 2



Q.18 PM SVANidhi Scheme aims to empower \_\_\_\_\_ .

- Ans ☒ 1. Street Vendors  
☐ 2. BPL Families  
☐ 3. Pregnant women  
☐ 4. Small Businessman

Question Type : MCQ  
Question ID : 264330139682  
Option 1 ID : 264330547144  
Option 2 ID : 264330547143  
Option 3 ID : 264330547146  
Option 4 ID : 264330547145  
Status : Answered  
Chosen Option : 1

Q.19 \_\_\_\_\_ is the female reproductive part of the flower.

- Ans ☒ 1. pistil  
☐ 2. filament  
☐ 3. anther  
☐ 4. sprouting

Question Type : MCQ  
Question ID : 264330140894  
Option 1 ID : 264330551925  
Option 2 ID : 264330551923  
Option 3 ID : 264330551924  
Option 4 ID : 264330551926  
Status : Not Answered  
Chosen Option : --

Q.20 Which of the following was an ambassador of Persian ruler and was sent to Vijayanagara?

- Ans ☐ 1. Nicolo de Conti  
☒ 2. Abdur Razzaq  
☐ 3. Duarte Barbosa  
☐ 4. Fernao Nuniz

Question Type : MCQ  
Question ID : 264330140903  
Option 1 ID : 264330551959  
Option 2 ID : 264330551962  
Option 3 ID : 264330551960  
Option 4 ID : 264330551961  
Status : Not Answered  
Chosen Option : --

Q.21 He is also known as the God of ghatam. Who is 'He' in the preceding line?

- Ans
- ☐ 1. Ustad Bundu Khan
  - ☐ 2. Pandit Ravi Shankar
  - ☒ 3. T H Vinayakram
  - ☐ 4. Ustad Bismillah Khan

Question Type : MCQ

Question ID : 264330140887

Option 1 ID : 264330551896

Option 2 ID : 264330551897

Option 3 ID : 264330551895

Option 4 ID : 264330551898

Status : Not Answered

Chosen Option : --

Q.22 Which of the following articles of the Indian Constitution mentions the fundamental duty "to safeguard public property and to abjure violence"?

- Ans
- ☒ 1. Article 51A (i)
  - ☐ 2. Article 51A (g)
  - ☐ 3. Article 51A (a)
  - ☐ 4. Article 51A (d)

Question Type : MCQ

Question ID : 264330139760

Option 1 ID : 264330547458

Option 2 ID : 264330547457

Option 3 ID : 264330547455

Option 4 ID : 264330547456

Status : Answered

Chosen Option : 1

Q.23 Which ruler defeated Humayun in the battle of Chausa and Kannauj?

- Ans
- ☐ 1. Islam Shah
  - ☐ 2. Ali Adil Shah II
  - ☐ 3. Muhammad Adil Shah
  - ☒ 4. Sher Shah

Question Type : MCQ

Question ID : 264330140690

Option 1 ID : 264330551107

Option 2 ID : 264330551110

Option 3 ID : 264330551109

Option 4 ID : 264330551108

Status : Answered

Chosen Option : 4

Q.24 When was the Champaran Agrarian Law passed by the British Government?

- Ans ☒ 1. 1918  
☒ 2. 1919  
☒ 3. 1917  
☒ 4. 1916

Question Type : MCQ  
 Question ID : 264330140946  
 Option 1 ID : 264330552131  
 Option 2 ID : 264330552134  
 Option 3 ID : 264330552133  
 Option 4 ID : 264330552132  
 Status : Not Answered  
 Chosen Option : --

Q.25 Which of the following is NOT a major tribe of South India?

- Ans ☒ 1. Dang  
☒ 2. Toda  
☒ 3. Badaga  
☒ 4. Irula

Question Type : MCQ  
 Question ID : 264330138966  
 Option 1 ID : 264330544474  
 Option 2 ID : 264330544472  
 Option 3 ID : 264330544473  
 Option 4 ID : 264330544471  
 Status : Not Answered  
 Chosen Option : --

Section : English Language and Comprehension

Q.1 Fill in the blank with the most appropriate option.  
 Aunt Petunia was \_\_\_\_\_ a box of after-dinner mints.

- Ans ☒ 1. passing round  
☒ 2. passed around  
☒ 3. passing around  
☒ 4. passed away

Question Type : MCQ  
 Question ID : 264330135852  
 Option 1 ID : 264330532278  
 Option 2 ID : 264330532275  
 Option 3 ID : 264330532276  
 Option 4 ID : 264330532277  
 Status : Not Answered  
 Chosen Option : --

**Q.2** In the following question, out of the given four alternatives, select the alternative which best expresses the meaning of the Idiom/Phrase.

As easy as pie

- Ans**
- ☒ 1. Tasteful
  - ☒ 2. Auspicious
  - ☒ 3. Very easy
  - ☒ 4. Difficult choice

Question Type : **MCQ**  
 Question ID : **264330135250**  
 Option 1 ID : **264330529921**  
 Option 2 ID : **264330529922**  
 Option 3 ID : **264330529920**  
 Option 4 ID : **264330529919**  
 Status : **Answered**  
 Chosen Option : **3**

**Q.3** Select the most appropriate word for the given group of words.

A state of agitation especially over a trivial matter

- Ans**
- ☒ 1. Storm
  - ☒ 2. Harmony
  - ☒ 3. Worry
  - ☒ 4. Fuss

Question Type : **MCQ**  
 Question ID : **264330136279**  
 Option 1 ID : **264330533897**  
 Option 2 ID : **264330533895**  
 Option 3 ID : **264330533898**  
 Option 4 ID : **264330533896**  
 Status : **Answered**  
 Chosen Option : **4**

**Q.4** The statement below has been given with bracketed text. Select the option with correct Idiom for the bracketed text.  
 That's just like Julie – always (coming to conclusions too quickly) even before she knows the facts.

- Ans**
- ☒ 1. jumping in with both feet
  - ☒ 2. raring to go
  - ☒ 3. sailing in the same boat
  - ☒ 4. biting her own tongue

Question Type : **MCQ**  
 Question ID : **264330135736**  
 Option 1 ID : **264330531830**  
 Option 2 ID : **264330531829**  
 Option 3 ID : **264330531828**  
 Option 4 ID : **264330531827**  
 Status : **Not Answered**  
 Chosen Option : **--**

Q.5 Fill in the blank with the most appropriate option.

I wanted to \_\_\_\_\_ things that girls weren't supposed to do.

- Ans
- ☐ 1. do allot of
  - ☐ 2. done a lot of
  - ☐ 3. do a lot off
  - ☒ 4. do a lot of

Question Type : MCQ

Question ID : 264330135851

Option 1 ID : 264330532274

Option 2 ID : 264330532271

Option 3 ID : 264330532272

Option 4 ID : 264330532273

Status : Answered

Chosen Option : 4

Q.6 Find the part of the given sentence that has an error in it. If there is no error, choose 'No error'.

If I was your sister, I would have never slapped you.

- Ans
- ☒ 1. If I was your
  - ☐ 2. never slapped you.
  - ☐ 3. sister, I would have
  - ☐ 4. No error

Question Type : MCQ

Question ID : 264330135639

Option 1 ID : 264330531455

Option 2 ID : 264330531457

Option 3 ID : 264330531456

Option 4 ID : 264330531458

Status : Answered

Chosen Option : 1

Q.7 Select the appropriate antonym for the underlined word.

His gray, lifeless eyes were sunken.

- Ans
- ☐ 1. extinct
  - ☐ 2. lapsed
  - ☒ 3. vibrant
  - ☐ 4. pointed

Question Type : MCQ

Question ID : 264330135554

Option 1 ID : 264330531115

Option 2 ID : 264330531117

Option 3 ID : 264330531116

Option 4 ID : 264330531118

Status : Answered

Chosen Option : 3

Q.8 Select the most appropriate option to fill in the blank.

She \_\_\_\_\_ and left the room, carefully pulling the door shut.

- Ans
- ☒ 1. site
  - ☒ 2. sighed
  - ☒ 3. side
  - ☒ 4. slide

Question Type : MCQ  
Question ID : 264330135176  
Option 1 ID : 264330529636  
Option 2 ID : 264330529637  
Option 3 ID : 264330529638  
Option 4 ID : 264330529635  
Status : Answered  
Chosen Option : 2

Q.9 Four sentences are given, out of which three have spelling errors. Choose the sentence with all correctly spelt words.

- Ans
- ☒ 1. It turns out multiple groups have measured the concensus.
  - ☒ 2. The proposed cuts have caused considerable contravrsy.
  - ☒ 3. The companies may lose a lot of their overseas exposure.
  - ☒ 4. She was in a bouyant mood and was looking forward to her new life.

Question Type : MCQ  
Question ID : 264330135764  
Option 1 ID : 264330531936  
Option 2 ID : 264330531935  
Option 3 ID : 264330531937  
Option 4 ID : 264330531938  
Status : Answered  
Chosen Option : 1

Q.10 Select the most appropriate antonym of the given word.

Impertinent

- Ans
- ☒ 1. Polite
  - ☒ 2. Irrelevant
  - ☒ 3. Insolent
  - ☒ 4. Personal

Question Type : MCQ  
Question ID : 264330136362  
Option 1 ID : 264330534217  
Option 2 ID : 264330534218  
Option 3 ID : 264330534215  
Option 4 ID : 264330534216  
Status : Answered  
Chosen Option : 2

Q.11 Select the word from the options which is similar in meaning to the bracketed part given in the sentence below.  
The women stared at me with (great interest or concern).

- Ans
- ☒ 1. intellect
  - ☒ 2. control
  - ☒ 3. curiosity
  - ☒ 4. possession

Question Type : MCQ  
Question ID : 264330136178  
Option 1 ID : 264330533508  
Option 2 ID : 264330533510  
Option 3 ID : 264330533507  
Option 4 ID : 264330533509  
Status : Answered  
Chosen Option : 3

Q.12 Select the most appropriate synonym of the given word.

Capricious

- Ans
- ☒ 1. Arbitrary
  - ☒ 2. Stable
  - ☒ 3. Steadfast
  - ☒ 4. Cautious

Question Type : MCQ  
Question ID : 264330136499  
Option 1 ID : 264330534740  
Option 2 ID : 264330534741  
Option 3 ID : 264330534742  
Option 4 ID : 264330534739  
Status : Answered  
Chosen Option : 3

Q.13 Fill in the blank with the most appropriate choice.  
In more civilized times even the most \_\_\_\_\_ enemies were treated with dignity.

- Ans
- ☒ 1. explicable
  - ☒ 2. vindicable
  - ☒ 3. implacable
  - ☒ 4. ineducable

Question Type : MCQ  
Question ID : 264330135844  
Option 1 ID : 264330532243  
Option 2 ID : 264330532244  
Option 3 ID : 264330532245  
Option 4 ID : 264330532246  
Status : Not Answered  
Chosen Option : --



**Q.14** Select the word segment that substitutes (replaces) the bracketed word segment correctly and completes the sentence meaningfully. Select the option 'no correction required' if the sentence is correct as given.  
Welcome to the Ministry of Magic, (please administer your name) and business.

- Ans**
- ☒ 1. No correction required
  - ☒ 2. please direct your name
  - ☒ 3. please state your name
  - ☒ 4. please inform your entitle

Question Type : MCQ  
Question ID : 264330136139  
Option 1 ID : 264330533362  
Option 2 ID : 264330533359  
Option 3 ID : 264330533360  
Option 4 ID : 264330533361  
Status : Answered  
Chosen Option : 1

**Q.15** Select the correctly spelt word.

- Ans**
- ☒ 1. ubiquitous
  - ☒ 2. ubquitous
  - ☒ 3. ubiquitous
  - ☒ 4. ubiqoitous

Question Type : MCQ  
Question ID : 264330136505  
Option 1 ID : 264330534763  
Option 2 ID : 264330534765  
Option 3 ID : 264330534764  
Option 4 ID : 264330534766  
Status : Answered  
Chosen Option : 3

**Q.16** Find the part of the given sentence that has an error in it. If there is no error, choose 'No error'.  
The 1918 influenza pandemic sweep the world within months.

- Ans**
- ☒ 1. No error
  - ☒ 2. world within months.
  - ☒ 3. pandemic sweep the
  - ☒ 4. The 1918 influenza

Question Type : MCQ  
Question ID : 264330135230  
Option 1 ID : 264330529846  
Option 2 ID : 264330529845  
Option 3 ID : 264330529844  
Option 4 ID : 264330529843  
Status : Answered  
Chosen Option : 3

**Q.17** Select the word segment that substitutes (replaces) the bracketed word segment correctly and completes the sentence meaningfully. Select the option 'no correction required' if the sentence is correct as given.  
The relationship between two people is (by the way in what) they feel and behave towards each other.

- Ans**
- ☒ 1. the way by which
  - ☒ 2. by which ways
  - ☒ 3. the way in which
  - ☒ 4. No correction required

Question Type : MCQ  
Question ID : 264330135694  
Option 1 ID : 264330531669  
Option 2 ID : 264330531668  
Option 3 ID : 264330531667  
Option 4 ID : 264330531670  
Status : Answered  
Chosen Option : 3

**Q.18** Identify the segment that contains a grammatical error. If there is no error, select 'No error'.  
He best understand that / because of the fight it is no / longer his decision to make.

- Ans**
- ☒ 1. He best understand that
  - ☒ 2. longer his decision to make.
  - ☒ 3. because of the fight it is no
  - ☒ 4. No error

Question Type : MCQ  
Question ID : 264330135716  
Option 1 ID : 264330531751  
Option 2 ID : 264330531753  
Option 3 ID : 264330531752  
Option 4 ID : 264330531754  
Status : Answered  
Chosen Option : 1

**Q.19** Select the most appropriate option to substitute the bracketed segment in the given sentence. If there is no need to substitute it, select 'no substitution required'.

Besides the atmospheric changes that make us sweat, (hormonal or emotional stimulus can also cause sweating).

- Ans**
- ☒ 1. hormonal and emotional stimuli also causes sweating
  - ☒ 2. hormonal or emotional stimuli can also cause sweating
  - ☒ 3. No substitution required
  - ☒ 4. hormonal or emotional stimulus also causing sweating

Question Type : MCQ  
Question ID : 264330135667  
Option 1 ID : 264330531565  
Option 2 ID : 264330531564  
Option 3 ID : 264330531566  
Option 4 ID : 264330531563  
Status : Answered  
Chosen Option : 1

Q.20 Select the most appropriate word for the given group of words.

Sets of principles concerned with the nature and appreciation of beauty

- Ans
- ☒ 1. Asylum
  - ☒ 2. Aesthetics
  - ☒ 3. Atonement
  - ☒ 4. Aspersion

Question Type : MCQ  
Question ID : 264330136498  
Option 1 ID : 264330534736  
Option 2 ID : 264330534738  
Option 3 ID : 264330534735  
Option 4 ID : 264330534737  
Status : Answered  
Chosen Option : 2

#### Comprehension:

In the following passage some words have been deleted. Fill in the blanks with the help of the alternatives given. Select the most appropriate option for each number.

Louisiana hosts one of the (1) \_\_\_\_\_ well known celebrations - Mardi Gras. Mardi Gras is French for "Fat Tuesday". This (2) \_\_\_\_\_ is sometimes called "Shrove Tuesday". (3) \_\_\_\_\_ wear masks and costumes, overturn social conventions, dance, organize competitions and parades. Related popular practices (4) \_\_\_\_\_ associated with celebrations before the fasting and religious obligations associated (5) \_\_\_\_\_ the penitential season of Lent.

SubQuestion No : 21

Q.21 Select the most appropriate option to fill in the blank No. 1.

- Ans
- ☒ 1. all
  - ☒ 2. some
  - ☒ 3. most
  - ☒ 4. more

Question Type : MCQ  
Question ID : 264330136752  
Option 1 ID : 264330535711  
Option 2 ID : 264330535714  
Option 3 ID : 264330535713  
Option 4 ID : 264330535712  
Status : Answered  
Chosen Option : 3

### Comprehension:

In the following passage some words have been deleted. Fill in the blanks with the help of the alternatives given. Select the most appropriate option for each number.

Louisiana hosts one of the (1) \_\_\_\_\_ well known celebrations - Mardi Gras. Mardi Gras is French for "Fat Tuesday". This (2) \_\_\_\_\_ is sometimes called "Shrove Tuesday". (3) \_\_\_\_\_ wear masks and costumes, overturn social conventions, dance, organize competitions and parades. Related popular practices (4) \_\_\_\_\_ associated with celebrations before the fasting and religious obligations associated (5) \_\_\_\_\_ the penitential season of Lent.

### SubQuestion No : 22

Q.22 Select the most appropriate option to fill in the blank No. 2.

- Ans
- ✓ 1. holiday
  - ✗ 2. variation
  - ✗ 3. vacation
  - ✗ 4. vocation

Question Type : MCQ

Question ID : 264330136753

Option 1 ID : 264330535715

Option 2 ID : 264330535718

Option 3 ID : 264330535716

Option 4 ID : 264330535717

Status : Answered

Chosen Option : 1

### Comprehension:

In the following passage some words have been deleted. Fill in the blanks with the help of the alternatives given. Select the most appropriate option for each number.

Louisiana hosts one of the (1) \_\_\_\_\_ well known celebrations - Mardi Gras. Mardi Gras is French for "Fat Tuesday". This (2) \_\_\_\_\_ is sometimes called "Shrove Tuesday". (3) \_\_\_\_\_ wear masks and costumes, overturn social conventions, dance, organize competitions and parades. Related popular practices (4) \_\_\_\_\_ associated with celebrations before the fasting and religious obligations associated (5) \_\_\_\_\_ the penitential season of Lent.

### SubQuestion No : 23

Q.23 Select the most appropriate option to fill in the blank No. 3.

- Ans
- ✗ 1. Plants
  - ✓ 2. People
  - ✗ 3. Animals
  - ✗ 4. Birds

Question Type : MCQ

Question ID : 264330136754

Option 1 ID : 264330535720

Option 2 ID : 264330535721

Option 3 ID : 264330535722

Option 4 ID : 264330535719

Status : Answered

Chosen Option : 2

### Comprehension:

In the following passage some words have been deleted. Fill in the blanks with the help of the alternatives given. Select the most appropriate option for each number.

Louisiana hosts one of the (1) \_\_\_\_\_ well known celebrations - Mardi Gras. Mardi Gras is French for "Fat Tuesday". This (2) \_\_\_\_\_ is sometimes called "Shrove Tuesday". (3) \_\_\_\_\_ wear masks and costumes, overturn social conventions, dance, organize competitions and parades. Related popular practices (4) \_\_\_\_\_ associated with celebrations before the fasting and religious obligations associated (5) \_\_\_\_\_ the penitential season of Lent.

### SubQuestion No : 24

Q.24 Select the most appropriate option to fill in the blank No. 4.

- Ans
- ☒ 1. will be
  - ☒ 2. have
  - ☒ 3. were
  - ☒ 4. is

Question Type : MCQ  
Question ID : 264330136755  
Option 1 ID : 264330535724  
Option 2 ID : 264330535725  
Option 3 ID : 264330535723  
Option 4 ID : 264330535726  
Status : Answered  
Chosen Option : 3

### Comprehension:

In the following passage some words have been deleted. Fill in the blanks with the help of the alternatives given. Select the most appropriate option for each number.

Louisiana hosts one of the (1) \_\_\_\_\_ well known celebrations - Mardi Gras. Mardi Gras is French for "Fat Tuesday". This (2) \_\_\_\_\_ is sometimes called "Shrove Tuesday". (3) \_\_\_\_\_ wear masks and costumes, overturn social conventions, dance, organize competitions and parades. Related popular practices (4) \_\_\_\_\_ associated with celebrations before the fasting and religious obligations associated (5) \_\_\_\_\_ the penitential season of Lent.

### SubQuestion No : 25

Q.25 Select the most appropriate option to fill in the blank No. 5.

- Ans
- ☒ 1. from
  - ☒ 2. with
  - ☒ 3. of
  - ☒ 4. off

Question Type : MCQ  
Question ID : 264330136756  
Option 1 ID : 264330535730  
Option 2 ID : 264330535729  
Option 3 ID : 264330535728  
Option 4 ID : 264330535727  
Status : Answered  
Chosen Option : 2