

Multi Tasking Non Technical Staff and Havaladar CBIC and CBN Examination 2022

Roll Number	
Candidate Name	
Venue Name	Webinfotron Technologies Pvt. Ltd.
Exam Date	17/05/2023
Exam Time	9:00 AM - 10:30 AM
Subject	MTS Non Tech Havaladar CBIC and CBN Examination 2022

Section : Numerical and Mathematical Ability

Q.1 A sum of Rs. 120 is divided among p, q and r in such a way that p gets Rs. 9 more than q and q gets Rs. 6 more than r. What is the ratio of shares of p, q and r respectively?

- Ans**
- ☒ 1. 18 : 15 : 13
 - ☒ 2. 15 : 12 : 10
 - ☒ 3. 16 : 13 : 11
 - ☒ 4. 11 : 8 : 10

Question Type : MCQ

Question ID : 264330137140

Option 1 ID : 264330537204

Option 2 ID : 264330537203

Option 3 ID : 264330537206

Option 4 ID : 264330537205

Status : Answered

Chosen Option : 3

Q.2 If $2A = 3B = 7C$, then what is the value of A : B : C?

- Ans**
- ☒ 1. 3 : 2 : 1
 - ☒ 2. 21 : 14 : 6
 - ☒ 3. 21 : 7 : 6
 - ☒ 4. 14 : 18 : 5

Question Type : MCQ

Question ID : 264330137139

Option 1 ID : 264330537199

Option 2 ID : 264330537200

Option 3 ID : 264330537201

Option 4 ID : 264330537202

Status : Answered

Chosen Option : 2

Test Prime

**ALL EXAMS,
ONE SUBSCRIPTION**



70,000+
Mock Tests



**Personalised
Report Card**



**Unlimited
Re-Attempt**



600+
Exam Covered



**Previous Year
Papers**



**500%
Refund**



ATTEMPT FREE MOCK NOW

Q.3 A solid cylinder having radius of base as 28 cm and height as 24 cm is bisected from its height to get two identical cylinders. What will be the percentage increase in the total surface area?

- Ans**
- ☒ 1. 61.72 percent
 - ☒ 2. 41.92 percent
 - ☒ 3. 53.85 percent
 - ☒ 4. 48.64 percent

Question Type : **MCQ**

Question ID : **264330137678**

Option 1 ID : **264330539321**

Option 2 ID : **264330539319**

Option 3 ID : **264330539322**

Option 4 ID : **264330539320**

Status : **Answered**

Chosen Option : **3**

Q.4 56 persons can repair a bridge in 20 days. If 14 more people join them, then how many days bridge can be repaired?

- Ans**
- ☒ 1. 18 days
 - ☒ 2. 12 days
 - ☒ 3. 16 days
 - ☒ 4. 14 days

Question Type : **MCQ**

Question ID : **264330133770**

Option 1 ID : **264330524106**

Option 2 ID : **264330524104**

Option 3 ID : **264330524105**

Option 4 ID : **264330524103**

Status : **Answered**

Chosen Option : **3**

Q.5 A shopkeeper allows 20 percent discount on the marked price of an article and he suffers a loss of 12 percent. If the article is sold at marked price, then what will be the profit percentage?

- Ans**
- ☒ 1. 10 percent
 - ☒ 2. 12.5 percent
 - ☒ 3. 9.69 percent
 - ☒ 4. 8.33 percent

Question Type : **MCQ**

Question ID : **264330137143**

Option 1 ID : **264330537216**

Option 2 ID : **264330537218**

Option 3 ID : **264330537215**

Option 4 ID : **264330537217**

Status : **Answered**

Chosen Option : **1**

Q.6 A sum of Rs. 14500 will become Rs. 16675 in 36 months at some rate of simple interest. What is the rate of interest per annum?

- Ans**
- ☒ 1. 6% per annum
 - ☒ 2. 5% per annum
 - ☒ 3. 4% per annum
 - ☒ 4. 7% per annum

Question Type : **MCQ**

Question ID : **264330134091**

Option 1 ID : **264330525389**

Option 2 ID : **264330525388**

Option 3 ID : **264330525387**

Option 4 ID : **264330525390**

Status : **Answered**

Chosen Option : **2**

Q.7 At what rate of compound interest (compounding annually) per annum will a sum of Rs.250000 becomes Rs.275625 in 2 years?

- Ans**
- ☒ 1. 8% per annum
 - ☒ 2. 3% per annum
 - ☒ 3. 10% per annum
 - ☒ 4. 5% per annum

Question Type : **MCQ**

Question ID : **264330133638**

Option 1 ID : **264330523576**

Option 2 ID : **264330523578**

Option 3 ID : **264330523575**

Option 4 ID : **264330523577**

Status : **Answered**

Chosen Option : **4**

Q.8 A man starts from a place A and reaches the place B in 50 hours. He travels $\frac{1}{4}$ distance at the speed of 5 km/hr and the remaining distance at the speed of 15 km/hr. What is the distance between A and B?

- Ans**
- ☒ 1. 525 km
 - ☒ 2. 500 km
 - ☒ 3. 375 km
 - ☒ 4. 425 km

Question Type : **MCQ**

Question ID : **264330137132**

Option 1 ID : **264330537171**

Option 2 ID : **264330537173**

Option 3 ID : **264330537174**

Option 4 ID : **264330537172**

Status : **Answered**

Chosen Option : **2**

Q.9 18 men can complete a work in 50 days. If 25 men are employed, then in how many days the work will be completed?

- Ans**
- ☒ 1. 25 days
 - ☒ 2. 48 days
 - ☒ 3. 36 days
 - ☒ 4. 32 days

Question Type : **MCQ**

Question ID : **264330137665**

Option 1 ID : **264330539268**

Option 2 ID : **264330539270**

Option 3 ID : **264330539267**

Option 4 ID : **264330539269**

Status : **Answered**

Chosen Option : **3**

Q.10 If the LCM of two numbers 260 and 390 is 780, then find the HCF.

- Ans**
- ☒ 1. 140
 - ☒ 2. 133
 - ☒ 3. 130
 - ☒ 4. 120

Question Type : **MCQ**

Question ID : **264330138414**

Option 1 ID : **264330542266**

Option 2 ID : **264330542265**

Option 3 ID : **264330542264**

Option 4 ID : **264330542263**

Status : **Answered**

Chosen Option : **3**

Q.11 The height and curved surface area of the cylinder are 15 cm and 330 cm^2 . Find the diameter of the cylinder.

- Ans**
- ☒ 1. 2 cm
 - ☒ 2. 5 cm
 - ☒ 3. 7 cm
 - ☒ 4. 6 cm

Question Type : **MCQ**

Question ID : **264330133775**

Option 1 ID : **264330524126**

Option 2 ID : **264330524124**

Option 3 ID : **264330524125**

Option 4 ID : **264330524123**

Status : **Answered**

Chosen Option : **3**

Q.12 A shopkeeper sells 105 m of cloth for Rs. 12600 at the profit of Rs. 20 per meter of cloth. What is the cost price of 20 m cloth?

- Ans**
- ☒ 1. Rs.4000
 - ☒ 2. Rs. 2000
 - ☒ 3. Rs. 1000
 - ☒ 4. Rs. 3000

Question Type : **MCQ**

Question ID : **264330138042**

Option 1 ID : **264330540775**

Option 2 ID : **264330540777**

Option 3 ID : **264330540778**

Option 4 ID : **264330540776**

Status : **Answered**

Chosen Option : **2**

Q.13 What is the value of $44 \div 11 \times 4 + 5 \times 8 \div 4 - 7 \times 36 \div 14 + 7 \times 4$?

- Ans**
- ☒ 1. 33
 - ☒ 2. 24
 - ☒ 3. 28
 - ☒ 4. 36

Question Type : **MCQ**

Question ID : **264330139013**

Option 1 ID : **264330544660**

Option 2 ID : **264330544659**

Option 3 ID : **264330544661**

Option 4 ID : **264330544662**

Status : **Answered**

Chosen Option : **4**

Q.14 The length, breadth, height of a room are 6 m 40 cm, 4 m 80 cm and 3 m 20 cm respectively. Find the longest tape which can measure the dimensions of the room exactly.

- Ans**
- ☒ 1. 1 m 80 cm
 - ☒ 2. 1 m 20 cm
 - ☒ 3. 1 m 60 cm
 - ☒ 4. 1 m 40 cm

Question Type : **MCQ**

Question ID : **264330137147**

Option 1 ID : **264330537232**

Option 2 ID : **264330537234**

Option 3 ID : **264330537231**

Option 4 ID : **264330537233**

Status : **Answered**

Chosen Option : **3**

Q.15 Average of 11 numbers is 8. If every number is tripled, then what will be the new average of the numbers?

- Ans**
- ☒ 1. 8
 - ☒ 2. 24
 - ☒ 3. 16
 - ☒ 4. 32

Question Type : **MCQ**

Question ID : **264330137133**

Option 1 ID : **264330537176**

Option 2 ID : **264330537177**

Option 3 ID : **264330537175**

Option 4 ID : **264330537178**

Status : **Answered**

Chosen Option : **2**

Q.16 Kartik takes 4 hours to travel from place X to place Y at the speed of 80 km/hr. He takes 1 hour to travel from place Y to place Z with 80% increased speed. What is the average speed from Place X to Z for the complete Journey?

- Ans**
- ☒ 1. 82.6 km/hr
 - ☒ 2. 90.8 km/hr
 - ☒ 3. 92.8 km/hr
 - ☒ 4. 88.6 km/hr

Question Type : **MCQ**

Question ID : **264330141032**

Option 1 ID : **264330552478**

Option 2 ID : **264330552475**

Option 3 ID : **264330552476**

Option 4 ID : **264330552477**

Status : **Answered**

Chosen Option : **3**

Q.17 The table given below shows the number of bikes of 5 different types sold by two companies.

Bikes	Company	
	C1	C2
A	50	80
B	30	40
C	70	90
D	80	110
E	100	140

Which of the following statement is correct?

I. Ratio of number of bike A sold by C1 to the number of bike D sold by C2 is 5 : 11.

II. The average number of bikes A, B, D and E sold by C1 are 75.

- Ans** ☒ 1. Neither I nor II
☒ 2. Only I
☒ 3. Only II
☒ 4. Both I and II

Question Type : MCQ

Question ID : 264330139014

Option 1 ID : 264330544666

Option 2 ID : 264330544663

Option 3 ID : 264330544664

Option 4 ID : 264330544665

Status : Answered

Chosen Option : 2

Q.18 A person loses 20 percent on selling 80 pens for Rs. 40. What should be the selling price of 80 pens to earn a profit of 10 percent?

- Ans** ☒ 1. Rs. 80
☒ 2. Rs. 60
☒ 3. Rs. 55
☒ 4. Rs. 65

Question Type : MCQ

Question ID : 264330137138

Option 1 ID : 264330537197

Option 2 ID : 264330537195

Option 3 ID : 264330537196

Option 4 ID : 264330537198

Status : Answered

Chosen Option : 3

Q.19 A number is increased by 5% and then the increased number is decreased by 5%. What is net increase or decrease percent?

- Ans** ☒ 1. 0.25% decrease
☒ 2. 0.75% increase
☒ 3. 1% increase
☒ 4. 0.50% decrease

Question Type : MCQ

Question ID : 264330133631

Option 1 ID : 264330523549

Option 2 ID : 264330523550

Option 3 ID : 264330523547

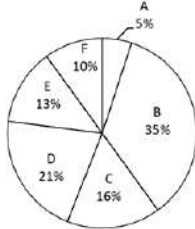
Option 4 ID : 264330523548

Status : Answered

Chosen Option : 1

Q.20 The pie chart given below shows the number of students studying in six schools. Total number of students studying in all these six schools are 9000.

Number of students studying in a particular school is shown as a percentage of total number of student studying in all these six schools.



What is the difference between the number of students studying in school A and B together and school D and F together?

- Ans** ☒ 1. 790
☒ 2. 810
☒ 3. 770
☒ 4. 840

Question Type : MCQ

Question ID : 264330137151

Option 1 ID : 264330537247

Option 2 ID : 264330537248

Option 3 ID : 264330537250

Option 4 ID : 264330537249

Status : Answered

Chosen Option : 2

Q.1 Seven persons Anil, Kamal, Ram, Sanjay, Aakash, Vivek and Rahul are sitting around a circular table facing opposite to the centre (not necessarily in the same order). Vivek is the immediate neighbour of both Kamal and Rahul. Kamal is second to the left of Aakash. Anil is the immediate neighbour of both Aakash and Sanjay. Who is second to the right of Sanjay?

- Ans**
- ☒ 1. Vivek
 - ☐ 2. Anil
 - ☐ 3. Aakash
 - ☐ 4. Kamal

Question Type : **MCQ**
 Question ID : **264330137095**
 Option 1 ID : **264330537026**
 Option 2 ID : **264330537024**
 Option 3 ID : **264330537025**
 Option 4 ID : **264330537023**
 Status : **Answered**
 Chosen Option : **1**

Q.2 In a certain code language, 'WALL' is written as '24'. How will 'FLOOR' be written in that language?

- Ans**
- ☐ 1. 43
 - ☒ 2. 33
 - ☐ 3. 66
 - ☐ 4. 23

Question Type : **MCQ**
 Question ID : **264330133699**
 Option 1 ID : **264330523819**
 Option 2 ID : **264330523821**
 Option 3 ID : **264330523822**
 Option 4 ID : **264330523820**
 Status : **Answered**
 Chosen Option : **2**

Q.3 In the following question below are given some statements followed by some conclusions based on those statements. Taking the given statements to be true even if they seem to be at variance from commonly known facts. Read all the conclusions and then decide which of the given conclusion logically follows the given statements.

Statements:

I. No N is A.

II. All A are T.

Conclusions:

I. Some T are A.

II. Some N are T.

III. No A is N.

- Ans**
- ☒ 1. Both conclusions I and II follows
 - ☒ 2. All conclusion follows
 - ☒ 3. Both conclusions I and III follows
 - ☒ 4. Both conclusions II and III follows

Question Type : **MCQ**

Question ID : **264330137098**

Option 1 ID : **264330537035**

Option 2 ID : **264330537038**

Option 3 ID : **264330537037**

Option 4 ID : **264330537036**

Status : **Answered**

Chosen Option : **3**

Q.4 In the following question below are given some statements followed by some conclusions based on those statements. Taking the given statements to be true even if they seem to be at variance from commonly known facts. Read all the conclusions and then decide which of the given conclusion logically follows the given statements.

Statements:

I. No chair is solid.

II. No table is solid.

Conclusion:

I. Some table are chair.

II. No solid is chair.

- Ans**
- ☒ 1. Only conclusion II follows
 - ☒ 2. Neither conclusion follows
 - ☒ 3. Both conclusions I and II follows
 - ☒ 4. Only conclusion I follows

Question Type : **MCQ**

Question ID : **264330137097**

Option 1 ID : **264330537032**

Option 2 ID : **264330537034**

Option 3 ID : **264330537033**

Option 4 ID : **264330537031**

Status : **Answered**

Chosen Option : **1**

Q.5 A series is given with one term missing. Select the correct alternative from the given ones that will complete the series.

APCE, DSYA, GUVW, JYQS, ?

- Ans**
- ☒ 1. BMMO
 - ☒ 2. NBMO
 - ☒ 3. MBMO
 - ☒ 4. NBNO

Question Type : **MCQ**

Question ID : **264330137086**

Option 1 ID : **264330536988**

Option 2 ID : **264330536989**

Option 3 ID : **264330536987**

Option 4 ID : **264330536990**

Status : **Answered**

Chosen Option : **3**

Q.6 After interchanging the given two signs and two numbers, what will be the value of the given equation?

+ and -, 7 and 9 ; $8 \times 7 + 9 \div 1 - 5$

- Ans**
- ☒ 1. 70
 - ☒ 2. 60
 - ☒ 3. 40
 - ☒ 4. 10

Question Type : **MCQ**

Question ID : **264330137103**

Option 1 ID : **264330537056**

Option 2 ID : **264330537058**

Option 3 ID : **264330537057**

Option 4 ID : **264330537055**

Status : **Answered**

Chosen Option : **3**

Q.7 In the following question, select the missing number of the given series.

10, 4, 3, 3.5, 6, ?

- Ans**
- ☒ 1. 9
 - ☒ 2. 14
 - ☒ 3. 10
 - ☒ 4. 12

Question Type : **MCQ**

Question ID : **264330137100**

Option 1 ID : **264330537046**

Option 2 ID : **264330537044**

Option 3 ID : **264330537043**

Option 4 ID : **264330537045**

Status : **Answered**

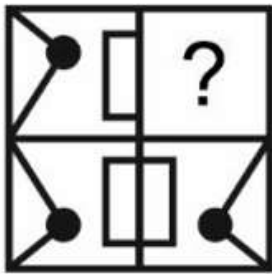
Chosen Option : **3**

Q.8 Marks of five girls Mansi, Kajal, Reetu, Tina and Riya are compared. Marks of Riya are less than Mansi but more than Tina. Marks of Reetu are less than Tina, Riya and Mansi. Marks of Kajal are less than Reetu. Marks of how many girls are less than the marks of Riya?

- Ans**
- ☒ 1. 2
 - ☒ 2. 1
 - ☒ 3. 0
 - ☒ 4. 3

Question Type : **MCQ**
 Question ID : **264330137096**
 Option 1 ID : **264330537028**
 Option 2 ID : **264330537027**
 Option 3 ID : **264330537030**
 Option 4 ID : **264330537029**
 Status : **Answered**
 Chosen Option : **4**

Q.9 Which answer figure will complete the pattern in the question figure?



Ans

- ☒ 1.
- ☒ 2.
- ☒ 3.
- ☒ 4.

Question Type : **MCQ**
 Question ID : **264330137107**
 Option 1 ID : **264330537073**
 Option 2 ID : **264330537072**
 Option 3 ID : **264330537074**
 Option 4 ID : **264330537071**
 Status : **Answered**
 Chosen Option : **3**

Q.10 Which two signs should be interchanged to make the given equation correct?

$$44 \div 11 + 7 \times 3 - 19 = 2$$

- Ans
- ☒ 1. + and ÷
 - ☒ 2. - and +
 - ☐ 3. = and ÷
 - ☐ 4. - and =

Question Type : MCQ

Question ID : 264330133712

Option 1 ID : 264330523874

Option 2 ID : 264330523872

Option 3 ID : 264330523873

Option 4 ID : 264330523871

Status : Answered

Chosen Option : 2

Q.11 Words given on the left side of (::) are related with each other by some Logic/Rule/Relation. Select the missing word/word pair on the right side of (::) from the given alternatives based on the same Logic/Rule/Relation.

Vienna : Austria :: ?

- Ans
- ☒ 1. Thimphu : Bhutan
 - ☐ 2. Kenya : Nairobi
 - ☐ 3. Pakistan : Islamabad
 - ☐ 4. Russia : Moscow

Question Type : MCQ

Question ID : 264330137089

Option 1 ID : 264330537001

Option 2 ID : 264330537002

Option 3 ID : 264330537000

Option 4 ID : 264330536999

Status : Answered

Chosen Option : 1

Q.12 In a certain code language, 'ASKING' is coded as 'SAIKGN'. What is the code for 'DECIDE' in that code language?

- Ans
- ☒ 1. EDICED
 - ☐ 2. EDICDE
 - ☐ 3. EDCIDE
 - ☐ 4. EDIBED

Question Type : MCQ

Question ID : 264330137369

Option 1 ID : 264330538105

Option 2 ID : 264330538103





Option 3 ID : 264330538104

Option 4 ID : 264330538106

Status : Answered

Chosen Option : 1

Q.13 In a certain code language, 'FOREIGN' is written as 'EFGINOR'. How will 'NUCLEAR' be written in that language?

- Ans**  1. ACELNURU
 2. ACELRUN
 3. ACELNUR
 4. AECLNRU

Question Type : **MCQ**

Question ID : **264330137543**

Option 1 ID : **264330538779**

Option 2 ID : **264330538781**

Option 3 ID : **264330538782**

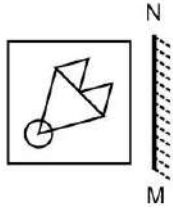
Option 4 ID : **264330538780**

Status : **Answered**

Chosen Option : 1

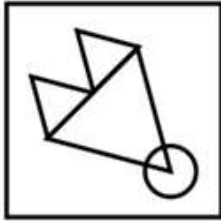


Q.14 Select the correct mirror image of the given figure when the mirror MN is placed to the right side of the figure.



Ans

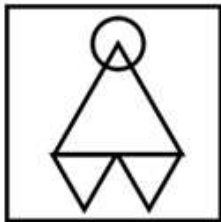
✓ 1.



✗ 2.



✗ 3.



✗ 4.



Question Type : MCQ

Question ID : 264330138827

Option 1 ID : 264330543915

Option 2 ID : 264330543916

Option 3 ID : 264330543917

Option 4 ID : 264330543918

Status : Answered

Chosen Option : 1

Q.15 Words given on the left side of (::) are related with each other by some Logic/Rule/Relation. Select the missing word/word pair on the right side of (::) from the given alternatives based on the same Logic/Rule/Relation.

Hygrometer : Humidity :: Anemometer : ?

- Ans** ☒ 1. Wind
☒ 2. Temperature
☒ 3. Length
☒ 4. Current

Question Type : **MCQ**
 Question ID : **264330137088**
 Option 1 ID : **264330536998**
 Option 2 ID : **264330536996**
 Option 3 ID : **264330536997**
 Option 4 ID : **264330536995**
 Status : **Answered**
 Chosen Option : **1**

Q.16 Select the option that is related to the third number in the same way as the second number is related to the first number.
 7 : 56 :: 12 : ?

- Ans** ☒ 1. 165
☒ 2. 156
☒ 3. 256
☒ 4. 110

Question Type : **MCQ**
 Question ID : **264330133379**
 Option 1 ID : **264330522547**
 Option 2 ID : **264330522550**
 Option 3 ID : **264330522549**
 Option 4 ID : **264330522548**
 Status : **Answered**
 Chosen Option : **2**

Q.17 Which of the following numbers will replace the question mark (?) in the given series?
 25, 36, 49, 64, 81, 100, 121, 144, 169, ?

- Ans** ☒ 1. 342
☒ 2. 204
☒ 3. 256
☒ 4. 196

Question Type : **MCQ**
 Question ID : **264330133377**
 Option 1 ID : **264330522542**
 Option 2 ID : **264330522540**
 Option 3 ID : **264330522541**
 Option 4 ID : **264330522539**
 Status : **Answered**
 Chosen Option : **4**

Q.18 Six teachers Anil, Kamal, Ram, Sanjay, Aakash and Vivek are sitting around a circular table facing towards the centre (not necessarily in the same order). Ram is third to the right of Vivek. Vivek is second to the right of Anil. Aakash is to the immediate right of Anil. Kamal is not the immediate neighbour of Vivek. Who is the immediate neighbor of Kamal and Vivek both?

- Ans**
- ☒ 1. Anil
 - ☒ 2. Ram
 - ☒ 3. Sanjay
 - ☒ 4. Aakash

Question Type : **MCQ**

Question ID : **264330137094**

Option 1 ID : **264330537020**

Option 2 ID : **264330537022**

Option 3 ID : **264330537021**

Option 4 ID : **264330537019**

Status : **Answered**

Chosen Option : **3**



Q.19 Select the option figure in which the given figure (X) is embedded as its part (rotation is NOT allowed).



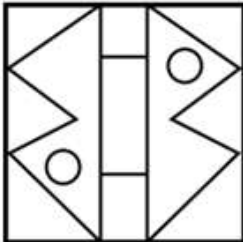
X

Ans

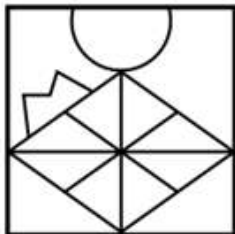
✓ 1.



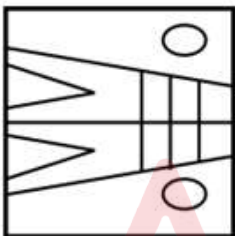
✗ 2.



✗ 3.



✗ 4.



Question Type : MCQ

Question ID : 264330138826

Option 1 ID : 264330543911

Option 2 ID : 264330543914

Option 3 ID : 264330543912

Option 4 ID : 264330543913

Status : Answered

Chosen Option : 1

Q.20 Select the option in which the numbers shares the same relationship in set as that shared by the numbers in the given set.
(NOTE: Operations should be performed on the whole numbers, without breaking down the numbers into its constituent digits. E.g. 13 – Operations on 13 such as adding /subtracting /multiplying etc. to 13 can be performed. Breaking down 13 into 1 and 3 and then performing mathematical operations on 1 and 3 is not allowed)

(5, 50, 500)

(3, 30, 300)

- Ans**
- ☒ 1. (11, 110, 2200)
 - ☒ 2. (7, 70, 700)
 - ☒ 3. (14, 140, 1500)
 - ☒ 4. (12, 220, 440)

Question Type : **MCQ**
Question ID : **264330137102**
Option 1 ID : **264330537052**
Option 2 ID : **264330537051**
Option 3 ID : **264330537054**
Option 4 ID : **264330537053**
Status : **Answered**
Chosen Option : **2**

Section : **General Awareness**

Q.1 _____ is known as the cultivation of trees and shrubs.

- Ans**
- ☒ 1. Viticulture
 - ☒ 2. Aviculture
 - ☒ 3. Arboriculture
 - ☒ 4. Apiculture

Question Type : **MCQ**
Question ID : **264330137720**
Option 1 ID : **264330539489**
Option 2 ID : **264330539487**
Option 3 ID : **264330539488**
Option 4 ID : **264330539490**
Status : **Answered**
Chosen Option : **3**

Q.2 How many total medals were won by India at Tokyo Olympics 2020 (played in 2021)?

- Ans**
- ☒ 1. Five
 - ☒ 2. Seven
 - ☒ 3. Six
 - ☒ 4. Eight

Question Type : **MCQ**
Question ID : **264330133860**
Option 1 ID : **264330524463**
Option 2 ID : **264330524465**
Option 3 ID : **264330524464**
Option 4 ID : **264330524466**
Status : **Answered**
Chosen Option : **2**

Q.3 Festival of "Ugadi" is celebrated every year on the first day of the Hindu month _____ .

- Ans ☒ 1. Chaitra
☒ 2. Asadha
☒ 3. Jyaistha
☒ 4. Kartika

Question Type : MCQ
 Question ID : 264330138872
 Option 1 ID : 264330544096
 Option 2 ID : 264330544097
 Option 3 ID : 264330544098
 Option 4 ID : 264330544095
 Status : Answered
 Chosen Option : 1

Q.4 Union Government's "PAHAL Scheme" is related to _____ .

- Ans ☒ 1. Girl Scholarship
☒ 2. Medical Subsidy
☒ 3. LPG Subsidy
☒ 4. Bathroom Construction

Question Type : MCQ
 Question ID : 264330137020
 Option 1 ID : 264330536726
 Option 2 ID : 264330536724
 Option 3 ID : 264330536725
 Option 4 ID : 264330536723
 Status : Answered
 Chosen Option : 3

Q.5 The technique of watering plants by making use of narrow tubes which deliver water directly at the base of the plant is called _____ .

- Ans ☒ 1. sprinkler irrigation
☒ 2. canal irrigation
☒ 3. drip irrigation
☒ 4. surface irrigation

Question Type : MCQ
 Question ID : 264330133870
 Option 1 ID : 264330524506
 Option 2 ID : 264330524504
 Option 3 ID : 264330524503
 Option 4 ID : 264330524505
 Status : Answered
 Chosen Option : 2

Q.6 Water comes out of the leaves in the form of vapour by a process called _____.

- Ans
- ☐ 1. creepers
 - ☐ 2. transportation
 - ☐ 3. venation
 - ☒ 4. transpiration

Question Type : MCQ
 Question ID : 264330137024
 Option 1 ID : 264330536740
 Option 2 ID : 264330536742
 Option 3 ID : 264330536739
 Option 4 ID : 264330536741
 Status : Answered
 Chosen Option : 4

Q.7 Motilal Nehru, C.R. Das gave up their legal practices during which Movement?

- Ans
- ☐ 1. Self-respect Movement
 - ☐ 2. Quit India Movement
 - ☒ 3. Non-Cooperation Movement
 - ☐ 4. Civil Disobedience Movement

Question Type : MCQ
 Question ID : 264330138895
 Option 1 ID : 264330544190
 Option 2 ID : 264330544187
 Option 3 ID : 264330544189
 Option 4 ID : 264330544188
 Status : Answered
 Chosen Option : 3

Q.8 India shares its border with Afghanistan and Pakistan to the _____.

- Ans
- ☐ 1. north-east
 - ☒ 2. north-west
 - ☐ 3. south
 - ☐ 4. south-west

Question Type : MCQ
 Question ID : 264330137981
 Option 1 ID : 264330540532
 Option 2 ID : 264330540531
 Option 3 ID : 264330540534
 Option 4 ID : 264330540533
 Status : Answered
 Chosen Option : 2

Q.9 V. Satyanarayana Sarma known as 'Satyam' is associated with which of the following dance forms?

- Ans
- ☒ 1. Bharatnatyam
 - ☒ 2. Kathakali
 - ☒ 3. Kuchipudi
 - ☒ 4. Mohiniyattam

Question Type : MCQ
Question ID : 264330137730
Option 1 ID : 264330539529
Option 2 ID : 264330539530
Option 3 ID : 264330539527
Option 4 ID : 264330539528
Status : Answered
Chosen Option : 2

Q.10 Rainfall is measured by an instrument called the _____.

- Ans
- ☒ 1. rain gauge
 - ☒ 2. rain catcher
 - ☒ 3. rain calculator
 - ☒ 4. precipitator

Question Type : MCQ
Question ID : 264330133871
Option 1 ID : 264330524508
Option 2 ID : 264330524507
Option 3 ID : 264330524509
Option 4 ID : 264330524510
Status : Answered
Chosen Option : 1

Q.11 Who was popularly known as the Melody Queen in India?

- Ans
- ☒ 1. Zarin S Sharma
 - ☒ 2. Lata Mangeshkar
 - ☒ 3. Shubha Mudgal
 - ☒ 4. Anuradha Paudwal

Question Type : MCQ
Question ID : 264330137017
Option 1 ID : 264330536714
Option 2 ID : 264330536713
Option 3 ID : 264330536712
Option 4 ID : 264330536711
Status : Answered
Chosen Option : 2

Q.12 Which force is responsible for deflecting winds towards the right and left in northern and southern Hemisphere respectively?

- Ans
- ☐ 1. Magnetic force
 - ☒ 2. Coriolis force
 - ☐ 3. Gravitational force
 - ☐ 4. Frictional force

Question Type : MCQ

Question ID : 264330137029

Option 1 ID : 264330536761

Option 2 ID : 264330536760

Option 3 ID : 264330536759

Option 4 ID : 264330536762

Status : Answered

Chosen Option : 2

Q.13 Durand Cup was founded in the year _____ in Shimla.

- Ans
- ☐ 1. 1858
 - ☒ 2. 1888
 - ☐ 3. 1878
 - ☐ 4. 1868

Question Type : MCQ

Question ID : 264330137014

Option 1 ID : 264330536699

Option 2 ID : 264330536702

Option 3 ID : 264330536701

Option 4 ID : 264330536700

Status : Answered

Chosen Option : 3

Q.14 Which act has been amended by the Supreme Court of India to provide equal rights to daughters in their ancestral property?

- Ans
- ☐ 1. The Contempt of Courts Act
 - ☒ 2. Hindu Succession Act
 - ☐ 3. Hindu Marriage Act
 - ☐ 4. Sarda Act

Question Type : MCQ

Question ID : 264330134057

Option 1 ID : 264330525252

Option 2 ID : 264330525253

Option 3 ID : 264330525254

Option 4 ID : 264330525251

Status : Answered

Chosen Option : 2

Q.15 Engineer's Day in India is celebrated in the memory of _____.

- Ans
- ☐ 1. Kalpana Chawla
 - ☒ 2. Dr. M. Visvesvaraya
 - ☐ 3. Satish Dhawan
 - ☐ 4. A.P.J Abdul Kalam

Question Type : MCQ

Question ID : 264330137019

Option 1 ID : 264330536721

Option 2 ID : 264330536722

Option 3 ID : 264330536719

Option 4 ID : 264330536720

Status : Answered

Chosen Option : 2

Q.16 According to 2011 Census, among the following states which has the highest population density?

- Ans
- ☐ 1. Maharashtra
 - ☒ 2. Bihar
 - ☐ 3. Uttar Pradesh
 - ☐ 4. Tamil Nadu

Question Type : MCQ

Question ID : 264330137047

Option 1 ID : 264330536832

Option 2 ID : 264330536831

Option 3 ID : 264330536834

Option 4 ID : 264330536833

Status : Answered

Chosen Option : 2

Q.17 Founder of the Rashtrakuta Dynasty was _____.

- Ans
- ☐ 1. Govinddurga
 - ☐ 2. Krishnadurga
 - ☒ 3. Dantidurga
 - ☐ 4. Amoghavarsha

Question Type : MCQ

Question ID : 264330133878

Option 1 ID : 264330524537

Option 2 ID : 264330524538

Option 3 ID : 264330524536

Option 4 ID : 264330524535

Status : Answered

Chosen Option : 3

Q.18 National institute of Kathak dance is located in _____.

- Ans
- ☐ 1. Meerut
 - ☐ 2. Varanasi
 - ☐ 3. Lucknow
 - ☒ 4. New Delhi

Question Type : MCQ
 Question ID : 264330137011
 Option 1 ID : 264330536689
 Option 2 ID : 264330536688
 Option 3 ID : 264330536687
 Option 4 ID : 264330536690
 Status : Answered
 Chosen Option : 3

Q.19 The Deccan Riots of 1875 took place in _____.

- Ans
- ☐ 1. Himachal Pradesh
 - ☐ 2. Bihar
 - ☐ 3. West Bengal
 - ☒ 4. Maharashtra

Question Type : MCQ
 Question ID : 264330134071
 Option 1 ID : 264330525307
 Option 2 ID : 264330525309
 Option 3 ID : 264330525310
 Option 4 ID : 264330525308
 Status : Answered
 Chosen Option : 3

Q.20 As announced in the Budget 2022, the corporate surcharge was reduced from 12% to _____.

- Ans
- ☐ 1. 10%
 - ☒ 2. 7%
 - ☐ 3. 9%
 - ☐ 4. 5%

Question Type : MCQ
 Question ID : 264330137735
 Option 1 ID : 264330539547
 Option 2 ID : 264330539549
 Option 3 ID : 264330539550
 Option 4 ID : 264330539548
 Status : Answered
 Chosen Option : 1

Q.21 "One Life is Not Enough" is written by which of the following authors?

Ans ☒ 1. K. Natwar Singh

☐ 2. Jhumpa Lahiri

☐ 3. Faraz Ahmad

☐ 4. Khushwant Singh

Question Type : MCQ

Question ID : 264330137728

Option 1 ID : 264330539519

Option 2 ID : 264330539522

Option 3 ID : 264330539521

Option 4 ID : 264330539520

Status : Answered

Chosen Option : 1

Q.22 Kalinga that was conquered by Ashoka is the ancient name of _____ .

Ans ☒ 1. Coastal Orissa

☐ 2. Coastal Karnataka

☐ 3. Coastal Bengal

☐ 4. Coastal Tamil Nadu

Question Type : MCQ

Question ID : 264330138892

Option 1 ID : 264330544176

Option 2 ID : 264330544177

Option 3 ID : 264330544175

Option 4 ID : 264330544178

Status : Answered

Chosen Option : 3

Q.23 The materials through which objects can be seen, but not clearly are known as _____ .

Ans ☐ 1. conducting materials

☒ 2. translucent materials

☐ 3. transparent materials

☐ 4. opaque materials

Question Type : MCQ

Question ID : 264330133872

Option 1 ID : 264330524514

Option 2 ID : 264330524512

Option 3 ID : 264330524511

Option 4 ID : 264330524513

Status : Answered

Chosen Option : 2

Q.24 "Gopuram" or temple entrance is a feature of which temple architecture?

- Ans ☒ 1. South Indian temple architecture
- ☐ 2. Buddhist architecture
- ☐ 3. Jain architecture
- ☐ 4. North Indian temple architecture

Question Type : MCQ

Question ID : 264330134060

Option 1 ID : 264330525264

Option 2 ID : 264330525265

Option 3 ID : 264330525266

Option 4 ID : 264330525263

Status : Answered

Chosen Option : 1

Q.25 In which of the following articles, "Culture and Educational Rights" are mentioned?

- Ans ☐ 1. Article 25 – 28
- ☐ 2. Article 23 – 24
- ☐ 3. Article 19 – 22
- ☒ 4. Article 29 – 30

Question Type : MCQ

Question ID : 264330137023

Option 1 ID : 264330536736

Option 2 ID : 264330536737

Option 3 ID : 264330536738

Option 4 ID : 264330536735

Status : Answered

Chosen Option : 4

Section : English Language and Comprehension

Q.1 Choose the word that can substitute the given group of words.
To renounce a throne

- Ans ☐ 1. Avow
- ☐ 2. Abort
- ☐ 3. Assert
- ☒ 4. Abdicate

Question Type : MCQ

Question ID : 264330134334

Option 1 ID : 264330526323

Option 2 ID : 264330526324

Option 3 ID : 264330526325

Option 4 ID : 264330526326

Status : Answered

Chosen Option : 4

Q.2 A sentence has been given with a blank to be filled with an appropriate option. Choose the correct alternative.

I have _____ to understand your problem.

- Ans**
- ☒ 1. beginning
 - ☒ 2. began
 - ☒ 3. begin
 - ☒ 4. begun

Question Type : **MCQ**
 Question ID : **264330135288**
 Option 1 ID : **264330530067**
 Option 2 ID : **264330530070**
 Option 3 ID : **264330530068**
 Option 4 ID : **264330530069**
 Status : **Answered**
 Chosen Option : **4**

Q.3 Select the most appropriate option to fill in the blank.

I am just saying that maybe you are letting emotion _____ your better judgment right now.

- Ans**
- ☒ 1. clamp
 - ☒ 2. cloud
 - ☒ 3. clog
 - ☒ 4. finger

Question Type : **MCQ**
 Question ID : **264330135307**
 Option 1 ID : **264330530142**
 Option 2 ID : **264330530140**
 Option 3 ID : **264330530141**
 Option 4 ID : **264330530139**
 Status : **Answered**
 Chosen Option : **3**

Q.4 Select the appropriate antonym for the underlined word.

Many children still do not have access to quality education that will harness their inherent abilities and talent.

- Ans**
- ☒ 1. direct
 - ☒ 2. exploit
 - ☒ 3. handle
 - ☒ 4. misapply

Question Type : **MCQ**
 Question ID : **264330135301**
 Option 1 ID : **264330530118**
 Option 2 ID : **264330530115**
 Option 3 ID : **264330530116**
 Option 4 ID : **264330530117**
 Status : **Answered**
 Chosen Option : **2**

Q.5 Choose the word that can substitute the given group of words.

A place where fruit trees are grown

- Ans ☒ 1. Orchard
☐ 2. Dyke
☐ 3. Botanical
☐ 4. Cemetery

Question Type : MCQ
Question ID : 264330135297
Option 1 ID : 264330530099
Option 2 ID : 264330530102
Option 3 ID : 264330530100
Option 4 ID : 264330530101
Status : Answered
Chosen Option : 1

Q.6 Improve the underlined part of the sentence. Choose 'No improvement' as an answer if the sentence is grammatically correct.

The rise in temperature disturbs the rain cycle.

- Ans ☐ 1. was disturbed the rain order
☐ 2. disturb the rainy cycle
☒ 3. No improvement
☐ 4. disturbing the rain cycle

Question Type : MCQ
Question ID : 264330135313
Option 1 ID : 264330530165
Option 2 ID : 264330530164
Option 3 ID : 264330530166
Option 4 ID : 264330530163
Status : Answered
Chosen Option : 3

Q.7 In the following question, out of the given four alternatives, select the alternative which best expresses the meaning of the Idiom/Phrase.

To fly into a rage

- Ans ☐ 1. To harm oneself
☒ 2. To get very angry
☐ 3. To make inappropriate gestures
☐ 4. To be very excited

Question Type : MCQ
Question ID : 264330135303
Option 1 ID : 264330530126
Option 2 ID : 264330530125
Option 3 ID : 264330530123
Option 4 ID : 264330530124
Status : Answered
Chosen Option : 2

Q.8 Select the most appropriate option to substitute the bracketed segment in the given sentence. If there is no need to substitute it, select 'no substitution required'.

Some of them were nearly (as hard as ligament, and many an inch in length).

- Ans**
- ✓ 1. as hard as ligaments, and many were an inch long
 - ✗ 2. No substitution required
 - ✗ 3. hard as ligament, and many an inch at length
 - ✗ 4. as hard as a ligament, and many an inches in length

Question Type : **MCQ**

Question ID : **264330136513**

Option 1 ID : **264330534796**

Option 2 ID : **264330534798**

Option 3 ID : **264330534797**

Option 4 ID : **264330534795**

Status : **Answered**

Chosen Option : **4**

Q.9 Select the most appropriate option to fill in the blank.

His _____ of smoking in restaurants created a lot of issues in New York.

- Ans**
- ✗ 1. hatred
 - ✗ 2. reputation
 - ✗ 3. orbit
 - ✓ 4. habit

Question Type : **MCQ**

Question ID : **264330136845**

Option 1 ID : **264330536072**

Option 2 ID : **264330536071**

Option 3 ID : **264330536074**

Option 4 ID : **264330536073**

Status : **Answered**

Chosen Option : **4**

Q.10 Select the appropriate synonym for the underlined word.

There are actually many different versions of "Cinderella."

- Ans**
- ✗ 1. Problems
 - ✗ 2. Features
 - ✓ 3. Variations
 - ✗ 4. Signals

Question Type : **MCQ**

Question ID : **264330135298**

Option 1 ID : **264330530106**

Option 2 ID : **264330530104**

Option 3 ID : **264330530103**

Option 4 ID : **264330530105**

Status : **Answered**

Chosen Option : **3**

Q.11 A sentence has been given with a blank to be filled with an appropriate option. Choose the correct alternative.
The small amount of fusion fuel _____ to be heated to huge temperatures.

- Ans
- ☒ 1. needing
 - ☒ 2. need
 - ☒ 3. needs
 - ☒ 4. needful

Question Type : MCQ
Question ID : 264330136880
Option 1 ID : 264330536210
Option 2 ID : 264330536208
Option 3 ID : 264330536207
Option 4 ID : 264330536209
Status : Answered
Chosen Option : 3

Q.12 Identify the segment that contains a grammatical error. If there is no error, select 'No error'.

His struggles were becoming/ more and more frenzier,/ a wild look creeping into his blue eyes.

- Ans
- ☒ 1. His struggles were becoming
 - ☒ 2. more and more frenzier,
 - ☒ 3. No error
 - ☒ 4. a wild look creeping into his blue eyes.

Question Type : MCQ
Question ID : 264330136510
Option 1 ID : 264330534783
Option 2 ID : 264330534784
Option 3 ID : 264330534786
Option 4 ID : 264330534785
Status : Answered
Chosen Option : 2

Q.13 Improve the underlined part of the sentence. Choose 'No improvement' as an answer if the sentence is grammatically correct.
I have to work in the morning, but I is freer in the afternoon.

- Ans
- ☒ 1. is freed
 - ☒ 2. No improvement
 - ☒ 3. am frees
 - ☒ 4. am free

Question Type : MCQ
Question ID : 264330134531
Option 1 ID : 264330527083
Option 2 ID : 264330527086
Option 3 ID : 264330527084
Option 4 ID : 264330527085
Status : Answered
Chosen Option : 4

Q.14 Choose the word that is opposite in meaning to the given word.
Suspicion

- Ans ☒ 1. Niggle
☒ 2. Tremor
☒ 3. Conviction
☒ 4. Incertitude

Question Type : MCQ
Question ID : 264330134546
Option 1 ID : 264330527141
Option 2 ID : 264330527142
Option 3 ID : 264330527140
Option 4 ID : 264330527139
Status : Answered
Chosen Option : 1

Q.15 Choose the incorrectly spelt word.

- Ans ☒ 1. Loss
☒ 2. Losare
☒ 3. Local
☒ 4. Loose

Question Type : MCQ
Question ID : 264330135304
Option 1 ID : 264330530129
Option 2 ID : 264330530127
Option 3 ID : 264330530130
Option 4 ID : 264330530128
Status : Answered
Chosen Option : 2

Q.16 In the following question, out of the given four alternatives, select the alternative which best expresses the meaning of the Idiom/Phrase.
To button one's lips

- Ans ☒ 1. To rain heavily
☒ 2. To advance in harmony
☒ 3. To keep silence
☒ 4. To kidnap somebody

Question Type : MCQ
Question ID : 264330134340
Option 1 ID : 264330526348
Option 2 ID : 264330526347
Option 3 ID : 264330526349
Option 4 ID : 264330526350
Status : Answered
Chosen Option : 3

Q.17 Choose the word that means the same as the given word.

Backstab

- Ans
- ☒ 1. Bleary
 - ☒ 2. Berate
 - ☒ 3. Betray
 - ☒ 4. Blare

Question Type : MCQ
 Question ID : 264330136864
 Option 1 ID : 264330536146
 Option 2 ID : 264330536144
 Option 3 ID : 264330536145
 Option 4 ID : 264330536143
 Status : Answered
 Chosen Option : 3

Q.18 Find the part of the given sentence that has an error in it. If there is no error, choose 'No error'.

Largest farmers usually have more money, social power and local influence.

- Ans
- ☒ 1. Largest farmers usually
 - ☒ 2. No error
 - ☒ 3. have more money, social power
 - ☒ 4. and local influence.

Question Type : MCQ
 Question ID : 264330135284
 Option 1 ID : 264330530051
 Option 2 ID : 264330530054
 Option 3 ID : 264330530052
 Option 4 ID : 264330530053
 Status : Answered
 Chosen Option : 1

Q.19 Choose the sentence with no spelling error.

- Ans
- ☒ 1. We can't blame a bad goverment budget.
 - ☒ 2. We can't blame a bad governmnet budget.
 - ☒ 3. We can't blame a bad government budget.
 - ☒ 4. We can't blamme a bad government buget.

Question Type : MCQ
 Question ID : 264330136844
 Option 1 ID : 264330536070
 Option 2 ID : 264330536067
 Option 3 ID : 264330536068
 Option 4 ID : 264330536069
 Status : Answered
 Chosen Option : 3

Q.20 Find the part of the given sentence that has an error in it. If there is no error, choose 'No error'.
I want all the culprits to be punished immediate.

- Ans ☒ 1. the culprits to
☒ 2. No error
☒ 3. I want all
☒ 4. be punished immediate.

Question Type : MCQ
Question ID : 264330134399
Option 1 ID : 264330526576
Option 2 ID : 264330526578
Option 3 ID : 264330526575
Option 4 ID : 264330526577
Status : Answered
Chosen Option : 4

Comprehension:

In the following passage some of the words have been deleted. Read the passage carefully and select the correct answer for the given blank out of the four alternatives.

An 'occupational disease' is any disease (1)_____ primarily by exposure at work (2)_____ a physical, organisational, chemical or biological risk (3)_____ or to a combination of these factors. Occupational diseases are (4)_____ those listed in national legislation as resulting from exposure to risk factors at (5)_____.

SubQuestion No : 21

Q.21 Select the most appropriate option to fill in blank number 1.

- Ans ☒ 1. abated
☒ 2. caused
☒ 3. posed
☒ 4. flawed

Question Type : MCQ
Question ID : 264330134537
Option 1 ID : 264330527103
Option 2 ID : 264330527104
Option 3 ID : 264330527106
Option 4 ID : 264330527105
Status : Answered
Chosen Option : 2

Comprehension:

In the following passage some of the words have been deleted. Read the passage carefully and select the correct answer for the given blank out of the four alternatives.

An 'occupational disease' is any disease (1)_____ primarily by exposure at work (2)_____ a physical, organisational, chemical or biological risk (3)_____ or to a combination of these factors. Occupational diseases are (4)_____ those listed in national legislation as resulting from exposure to risk factors at (5)_____.

SubQuestion No : 22

Q.22 Select the most appropriate option to fill in blank number 2.

- Ans ☒ 1. in
☒ 2. on
☒ 3. of
☒ 4. to

Question Type : MCQ

Question ID : 264330134538

Option 1 ID : 264330527107

Option 2 ID : 264330527110

Option 3 ID : 264330527108

Option 4 ID : 264330527109

Status : Answered

Chosen Option : 4

Comprehension:

In the following passage some of the words have been deleted. Read the passage carefully and select the correct answer for the given blank out of the four alternatives.

An 'occupational disease' is any disease (1)_____ primarily by exposure at work (2)_____ a physical, organisational, chemical or biological risk (3)_____ or to a combination of these factors. Occupational diseases are (4)_____ those listed in national legislation as resulting from exposure to risk factors at (5)_____.

SubQuestion No : 23

Q.23 Select the most appropriate option to fill in blank number 3.

- Ans ☒ 1. exposure
☒ 2. part
☒ 3. maker
☒ 4. factor

Question Type : MCQ

Question ID : 264330134539

Option 1 ID : 264330527112

Option 2 ID : 264330527114

Option 3 ID : 264330527111

Option 4 ID : 264330527113

Status : Answered

Chosen Option : 4

Comprehension:

In the following passage some of the words have been deleted. Read the passage carefully and select the correct answer for the given blank out of the four alternatives.

An 'occupational disease' is any disease (1)_____ primarily by exposure at work (2)_____ a physical, organisational, chemical or biological risk (3)_____ or to a combination of these factors. Occupational diseases are (4)_____ those listed in national legislation as resulting from exposure to risk factors at (5)_____.

SubQuestion No : 24

Q.24 Select the most appropriate option to fill in blank number 4.

- Ans ☒ 1. radically
☒ 2. oddly
☒ 3. mostly
☒ 4. manually

Question Type : **MCQ**

Question ID : **264330134540**

Option 1 ID : **264330527116**

Option 2 ID : **264330527117**

Option 3 ID : **264330527118**

Option 4 ID : **264330527115**

Status : **Answered**

Chosen Option : **3**

Comprehension:

In the following passage some of the words have been deleted. Read the passage carefully and select the correct answer for the given blank out of the four alternatives.

An 'occupational disease' is any disease (1)_____ primarily by exposure at work (2)_____ a physical, organisational, chemical or biological risk (3)_____ or to a combination of these factors. Occupational diseases are (4)_____ those listed in national legislation as resulting from exposure to risk factors at (5)_____.

SubQuestion No : 25

Q.25 Select the most appropriate option to fill in blank number 5.

- Ans ☒ 1. work
☒ 2. bank
☒ 3. office
☒ 4. home

Question Type : **MCQ**

Question ID : **264330134541**

Option 1 ID : **264330527121**

Option 2 ID : **264330527119**

Option 3 ID : **264330527122**

Option 4 ID : **264330527120**

Status : **Answered**

Chosen Option : **1**