

Multi Tasking Non Technical Staff and Havaladar CBIC and CBN Examination 2022

Roll Number	
Candidate Name	
Venue Name	iON Digital Zone iDZ HAZARIBAGH
Exam Date	17/05/2023
Exam Time	12:00 PM - 2:00 PM
Subject	MTS Non Tech Havaladar CBIC and CBN Examination 2022

Section : Numerical and Mathematical Ability

Q.1 14 people can do work in 28 days. In how many days, can 8 people complete double the work?

- Ans
- ☒ 1. 55 days
 - ☒ 2. 98 days
 - ☒ 3. 80 days
 - ☒ 4. 32 days

Question Type : MCQ

Question ID : 264330135383

Option 1 ID : 264330530440

Option 2 ID : 264330530439

Option 3 ID : 264330530441

Option 4 ID : 264330530442

Status : Answered

Chosen Option : 2

Q.2 A solid hemisphere of radius 8 cm is melted into N identical cone whose radius is 4 cm and height is 2 cm. Then, what is the value of N?

- Ans
- ☒ 1. 26
 - ☒ 2. 10
 - ☒ 3. 32
 - ☒ 4. 25

Question Type : MCQ

Question ID : 264330135084

Option 1 ID : 264330529272

Option 2 ID : 264330529271

Option 3 ID : 264330529274

Option 4 ID : 264330529273

Status : Answered

Chosen Option : 3

Test Prime

**ALL EXAMS,
ONE SUBSCRIPTION**



70,000+
Mock Tests



**Personalised
Report Card**



**Unlimited
Re-Attempt**



600+
Exam Covered



**Previous Year
Papers**



**500%
Refund**



ATTEMPT FREE MOCK NOW

Q.3 After allowing 15% discount, a dealer wishes to sell a motor for Rs.3570. What should be the marked price of the motor?

- Ans**
- ☒ 1. Rs.3900
 - ☒ 2. Rs.4000
 - ☒ 3. Rs.4200
 - ☒ 4. Rs.4800

Question Type : **MCQ**

Question ID : **264330133680**

Option 1 ID : **264330523746**

Option 2 ID : **264330523743**

Option 3 ID : **264330523744**

Option 4 ID : **264330523745**

Status : **Answered**

Chosen Option : **3**

Q.4 At what rate percent per annum will a sum of money triples in 20 years on simple interest?

- Ans**
- ☒ 1. 10% per annum
 - ☒ 2. 12% per annum
 - ☒ 3. 18% per annum
 - ☒ 4. 20% per annum

Question Type : **MCQ**

Question ID : **264330138358**

Option 1 ID : **264330542039**

Option 2 ID : **264330542041**

Option 3 ID : **264330542042**

Option 4 ID : **264330542040**

Status : **Answered**

Chosen Option : **1**

Q.5 Alloy X contains 70% copper and 30% zinc. Alloy Y contains 40% copper, 25% zinc and 35% aluminum. Alloy X and Y are mixed in the ratio of 1 : 3. What is the ratio of copper and zinc in the newly formed alloy?

- Ans**
- ☒ 1. 19 : 33
 - ☒ 2. 11 : 32
 - ☒ 3. 38 : 21
 - ☒ 4. 19 : 21

Question Type : **MCQ**

Question ID : **264330133682**

Option 1 ID : **264330523753**

Option 2 ID : **264330523752**

Option 3 ID : **264330523754**

Option 4 ID : **264330523751**

Status : **Answered**

Chosen Option : **3**

Q.6 Five bells commence tolling together and toll at intervals of 5, 10, 15, 20 and 25 seconds respectively. In 1 hour 20 minutes, how many times do they toll together?

- Ans**
- ☒ 1. 20 times
 - ☒ 2. 15 times
 - ☒ 3. 14 times
 - ☒ 4. 17 times

Question Type : MCQ

Question ID : 264330138436

Option 1 ID : 264330542354

Option 2 ID : 264330542353

Option 3 ID : 264330542351

Option 4 ID : 264330542352

Status : Answered

Chosen Option : 4

Q.7 The following table shows yearly production of scooters (in thousands) in different factories. In which year the total production of scooters of all factories was equal to the yearly average number of scooters produced during 2015-2019?

Factory	Year				
	2015	2016	2017	2018	2019
A	25	30	15	23	16
B	14	24	12	17	20
C	20	41	17	21	13
D	40	39	35	32	41
E	16	15	22	15	12
Total	115	149	101	108	102

- Ans**
- ☒ 1. 2015
 - ☒ 2. 2017
 - ☒ 3. 2016
 - ☒ 4. 2018

Question Type : MCQ

Question ID : 264330133688

Option 1 ID : 264330523775

Option 2 ID : 264330523777

Option 3 ID : 264330523776

Option 4 ID : 264330523778

Status : Answered

Chosen Option : 1

Q.8 Simple Interest received by a person in 12 years on a principal of Rs. 12000 is 120 percent of the principal. What is the annual rate of interest?

- Ans**
- ☒ 1. 20 percent
 - ☒ 2. 12 percent
 - ☒ 3. 10 percent
 - ☒ 4. 5 percent

Question Type : MCQ

Question ID : 264330137655

Option 1 ID : 264330539229

Option 2 ID : 264330539230

Option 3 ID : 264330539228

Option 4 ID : 264330539227

Status : Answered

Chosen Option : 3

Q.9 A alone can do a work in 16 days and B alone can do the same work in 12 days. If they worked together on it for 4 days and then A left. How long did B take to finish the remaining work?

- Ans**
- ☒ 1. 7 days
 - ☒ 2. 5 days
 - ☒ 3. 6 days
 - ☒ 4. 8 days

Question Type : **MCQ**
 Question ID : **264330138715**
 Option 1 ID : **264330543468**
 Option 2 ID : **264330543467**
 Option 3 ID : **264330543469**
 Option 4 ID : **264330543470**
 Status : **Answered**
 Chosen Option : **2**

Q.10 What is the average of first five multiples of 11?

- Ans**
- ☒ 1. 11
 - ☒ 2. 55
 - ☒ 3. 33
 - ☒ 4. 22

Question Type : **MCQ**
 Question ID : **264330133675**
 Option 1 ID : **264330523723**
 Option 2 ID : **264330523725**
 Option 3 ID : **264330523726**
 Option 4 ID : **264330523724**
 Status : **Answered**
 Chosen Option : **3**

Q.11 Walking at the speed of 5 kmph, a man covers a certain distance in 3 hours. Running at a speed of 15 kmph the man will cover the same distance in:

- Ans**
- ☒ 1. 2 hours
 - ☒ 2. 1 hour
 - ☒ 3. 30 minutes
 - ☒ 4. 1 hour 30 minutes

Question Type : **MCQ**
 Question ID : **264330133685**
 Option 1 ID : **264330523766**
 Option 2 ID : **264330523764**
 Option 3 ID : **264330523763**
 Option 4 ID : **264330523765**
 Status : **Answered**
 Chosen Option : **2**

Q.12 Rakesh incurs 4% loss by selling a TV for Rs.39216. At what price should the TV be sold to earn 4% profit?

- Ans**
- ☒ 1. Rs.48560
 - ☒ 2. Rs.42484
 - ☒ 3. Rs.45600
 - ☒ 4. Rs.49780

Question Type : **MCQ**
 Question ID : **264330133679**
 Option 1 ID : **264330523740**
 Option 2 ID : **264330523741**
 Option 3 ID : **264330523739**
 Option 4 ID : **264330523742**
 Status : **Answered**
 Chosen Option : **2**

Q.13 Find the loss percentage if : Cost price = Rs 4500 and Selling price = Rs 3900

- Ans**
- ☒ 1. 13.3%
 - ☒ 2. 14.5%
 - ☒ 3. 14%
 - ☒ 4. 13%

Question Type : **MCQ**
 Question ID : **264330135093**
 Option 1 ID : **264330529308**
 Option 2 ID : **264330529310**
 Option 3 ID : **264330529309**
 Option 4 ID : **264330529307**
 Status : **Answered**
 Chosen Option : **1**

Q.14 If a number A is 40 percent less than another number B and B is 20 percent more than 100, then what is the value of A?

- Ans**
- ☒ 1. 58
 - ☒ 2. 84
 - ☒ 3. 72
 - ☒ 4. 66

Question Type : **MCQ**
 Question ID : **264330137650**
 Option 1 ID : **264330539209**
 Option 2 ID : **264330539208**
 Option 3 ID : **264330539207**
 Option 4 ID : **264330539210**
 Status : **Answered**
 Chosen Option : **3**

Q.15 The students in three classes are in a ratio of 3:7:8. If 6 students are increased in each class, the ratio changes to 11:23:26. Find the total number of students in the three classes before the increase.

- Ans** ✓ 1. 162
✗ 2. 112
✗ 3. 90
✗ 4. 144

Question Type : MCQ

Question ID : 264330135372

Option 1 ID : 264330530395

Option 2 ID : 264330530397

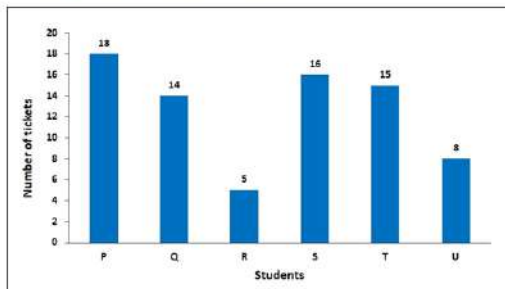
Option 3 ID : 264330530398

Option 4 ID : 264330530396

Status : Answered

Chosen Option : 1

Q.16 The following graph shows the number of tickets sold by 6 students P, Q, R, S, T and U during a fair. What percent of the total tickets were sold by Q, S and U?



- Ans** ✗ 1. 40%
✗ 2. 20%
✗ 3. 30%
✓ 4. 50%

Question Type : MCQ

Question ID : 264330133689

Option 1 ID : 264330523781

Option 2 ID : 264330523779

Option 3 ID : 264330523780

Option 4 ID : 264330523782

Status : Answered

Chosen Option : 4

Q.17 A cuboid is of dimensions 80 cm × 64 cm × 50 cm. How many small cubes with side 8 cm can be placed in the given cuboid?

- Ans** ✓ 1. 480
✗ 2. 700
✗ 3. 1000
✗ 4. 200

Question Type : MCQ

Question ID : 264330138720

Option 1 ID : 264330543490

Option 2 ID : 264330543489

Option 3 ID : 264330543487

Option 4 ID : 264330543488

Status : Answered

Chosen Option : 3

Q.18 If the diameter of a circle is 14 cm, find the area of the sector of the circle whose central angle measure 60 degree.

- Ans
- ☒ 1. 18.12 cm²
 - ☒ 2. 25.66 cm²
 - ☒ 3. 38.12 cm²
 - ☒ 4. 21.66 cm²

Question Type : MCQ

Question ID : 264330135387

Option 1 ID : 264330530455

Option 2 ID : 264330530458

Option 3 ID : 264330530456

Option 4 ID : 264330530457

Status : Answered

Chosen Option : 2

Q.19 What is the value of $0.4 \times 0.5 + 2 \times (0.10 - 0.5)$?

- Ans
- ☒ 1. 1
 - ☒ 2. 0.40
 - ☒ 3. 0
 - ☒ 4. -0.60

Question Type : MCQ

Question ID : 264330133673

Option 1 ID : 264330523717

Option 2 ID : 264330523715

Option 3 ID : 264330523718

Option 4 ID : 264330523716

Status : Answered

Chosen Option : 4

Q.20 A speeding car traveling at 40 km/hr decides to slow down to 30 km/hr after covering half the distance. What is the average speed?

- Ans
- ☒ 1. 30 km/hr
 - ☒ 2. $\frac{120}{7}$ km/hr
 - ☒ 3. $\frac{240}{7}$ km/hr
 - ☒ 4. 35 km/hr

Question Type : MCQ

Question ID : 264330135091

Option 1 ID : 264330529301

Option 2 ID : 264330529302

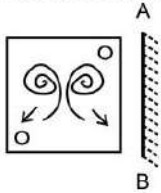
Option 3 ID : 264330529299

Option 4 ID : 264330529300

Status : Answered


Chosen Option : 3

Q.1 Select the correct mirror image of the given figure when the mirror is placed at AB as shown below.




Ans


✗ 1.




✗ 2.



✗ 3.



✓ 4.



Question Type : MCQ

Question ID : 264330133404

Option 1 ID : 264330522649

Option 2 ID : 264330522650

Option 3 ID : 264330522647

Option 4 ID : 264330522648

Status : Answered

Chosen Option : 4

Q.2 Select the option that is related to the third number in the same way as the second number is related to the first number.

5 : 125 :: 8 : ?

Ans ✓ 1. 512

✗ 2. 576

✗ 3. 343

✗ 4. 216

Question Type : MCQ

Question ID : 264330137574

Option 1 ID : 264330538904

Option 2 ID : 264330538906

Option 3 ID : 264330538903

Option 4 ID : 264330538905

Status : Answered

Chosen Option : 1

Q.3 Study the given pattern carefully and select the number that can replace the question mark (?) in it.

First row- 6, 216, 180

Second row- 8, 512, 448

Third row- 10, 1000, ?

- Ans**
- ☒ 1. 800
 - ☒ 2. 1100
 - ☒ 3. 900
 - ☒ 4. 1300

Question Type : **MCQ**

Question ID : **264330133400**

Option 1 ID : **264330522632**

Option 2 ID : **264330522631**

Option 3 ID : **264330522633**

Option 4 ID : **264330522634**

Status : **Answered**

Chosen Option : **3**

Q.4 In a certain code language, 'SPEAKER' is written as 'RQDBJFQ'. How will 'MOBILE' be written in that language?

- Ans**
- ☒ 1. LPAJKS
 - ☒ 2. LSPJKS
 - ☒ 3. LPSJAK
 - ☒ 4. LPAJKF

Question Type : **MCQ**

Question ID : **264330133369**

Option 1 ID : **264330522510**

Option 2 ID : **264330522509**

Option 3 ID : **264330522507**

Option 4 ID : **264330522508**

Status : **Answered**

Chosen Option : **4**

Q.5 Two Statements are given followed by two conclusions numbered I and II. Assuming the statements to be true, even if they seem to be at variance with commonly known facts, decide which of the conclusions logically follow(s) from the statements.

Statements:

Some kings are rich.

Some rich are proud.

Conclusions:

I. Some kings are not proud.

II. Some rich are not proud.

- Ans**
- ☒ 1. Only conclusion II follows
 - ☒ 2. Neither conclusion I nor II follows
 - ☒ 3. Both conclusions I and II follow
 - ☒ 4. Only conclusion I follows

Question Type : **MCQ**

Question ID : **264330133395**

Option 1 ID : **264330522612**

Option 2 ID : **264330522614**

Option 3 ID : **264330522613**

Option 4 ID : **264330522611**

Status : **Answered**

Chosen Option : **1**

Q.6 Six sisters Hina, Ishita, Jena, Kamla, Lalita, Meena are sitting in two rows. Three of them face north and the other three face south. Sisters sitting in the same row face the same direction. Meena is facing south and is not sitting in the corner. Lalita is facing Hina who is sitting to the right of Meena. Ishita is to the immediate right of Jena. Who sits opposite Ishita?

- Ans**
- ☒ 1. Hina
 - ☒ 2. Meena
 - ☒ 3. Lalita
 - ☒ 4. Kamla

Question Type : **MCQ**
 Question ID : **264330133393**
 Option 1 ID : **264330522603**
 Option 2 ID : **264330522605**
 Option 3 ID : **264330522606**
 Option 4 ID : **264330522604**
 Status : **Answered**
 Chosen Option : **4**

Q.7 In a certain code language, 'HERO' is coded as '7, 4, 17, 14', 'ICON' is coded as '8, 2, 14, 13'. What is the code for 'JOIN' in that code language?

- Ans**
- ☒ 1. 8, 14, 9, 13
 - ☒ 2. 9, 14, 8, 13
 - ☒ 3. 9, 14, 9, 13
 - ☒ 4. 10, 14, 8, 13

Question Type : **MCQ**
 Question ID : **264330138503**
 Option 1 ID : **264330542622**
 Option 2 ID : **264330542621**
 Option 3 ID : **264330542620**
 Option 4 ID : **264330542619**
 Status : **Answered**
 Chosen Option : **2**

Q.8 Which two numbers should be interchanged to make the given equation correct?

$$84 \div 6 + 16 - 14 \times 2 = 10$$

- Ans**
- ☒ 1. 6 and 14
 - ☒ 2. 2 and 84
 - ☒ 3. 10 and 14
 - ☒ 4. 6 and 10

Question Type : **MCQ**
 Question ID : **264330133401**
 Option 1 ID : **264330522637**
 Option 2 ID : **264330522636**
 Option 3 ID : **264330522635**
 Option 4 ID : **264330522638**
 Status : **Answered**
 Chosen Option : **1**

Q.9 Which of the following letter clusters will replace the blanks in the given series?

stss_ssstsss_tss__stssssst

Ans ☒ 1. tsss

☐ 2. sstt

☐ 3. ssst

☐ 4. ttss

Question Type : MCQ

Question ID : 264330133386

Option 1 ID : 264330522577

Option 2 ID : 264330522575

Option 3 ID : 264330522576

Option 4 ID : 264330522578

Status : Answered

Chosen Option : 1

Q.10 Which of the following numbers will replace the question mark (?) in the given series?

158, 160, 164, 170, 178, 188, 200, ?

Ans ☐ 1. 210

☐ 2. 215

☒ 3. 214

☐ 4. 230

Question Type : MCQ

Question ID : 264330133398

Option 1 ID : 264330522623

Option 2 ID : 264330522625

Option 3 ID : 264330522626

Option 4 ID : 264330522624

Status : Answered

Chosen Option : 3

Q.11 Six ladies Aditi, Pinki, Rina, Minal, Sneha and Zoya are sitting in a straight row facing North. Sneha and Zoya are in the centre. Aditi and Pinki are at the corners. Rina is sitting to the immediate left of Aditi. Who is sitting to the immediate right of Pinki?

Ans ☐ 1. Zoya

☐ 2. Sneha

☐ 3. Aditi

☒ 4. Minal

Question Type : MCQ

Question ID : 264330133392

Option 1 ID : 264330522599

Option 2 ID : 264330522601

Option 3 ID : 264330522602

Option 4 ID : 264330522600

Status : Answered

Chosen Option : 4

Q.12 Six brothers Aman, Bunty, Chandu, Deepak, Emad and Faisal, each has a different height. Bunty is taller than only three brothers. Faisal is only taller than Deepak. Chandu is shorter than Aman only. Who is the fourth tallest among the brothers?

- Ans**
- ☒ 1. Deepak
 - ☒ 2. Emad
 - ☒ 3. Chandu
 - ☒ 4. Bunty

Question Type : **MCQ**
 Question ID : **264330133394**
 Option 1 ID : **264330522608**
 Option 2 ID : **264330522609**
 Option 3 ID : **264330522610**
 Option 4 ID : **264330522607**
 Status : **Answered**
 Chosen Option : **2**

Q.13 Select the option that is related to the third letter cluster in the same way as the second letter cluster is related to the first letter cluster.
 KITCHEN : TIKCNEH :: PLUMBER : ?

- Ans**
- ☒ 1. ULPRMBE
 - ☒ 2. ULPMREB
 - ☒ 3. ULPREMB
 - ☒ 4. ULPBREM

Question Type : **MCQ**
 Question ID : **264330133387**
 Option 1 ID : **264330522581**
 Option 2 ID : **264330522580**
 Option 3 ID : **264330522579**
 Option 4 ID : **264330522582**
 Status : **Answered**
 Chosen Option : **2**

Q.14 Two Statements are given followed by two conclusions numbered I and II. Assuming the statements to be true, even if they seem to be at variance with commonly known facts, decide which of the conclusions logically follow(s) from the statements.
 Statements:
 No girl is a horse.
 Rachel is a girl.
 Conclusions:
 I. Rachel is not a horse.
 II. All girls are not Rachel.

- Ans**
- ☒ 1. Both conclusions I and II follow
 - ☒ 2. Neither conclusion I nor II follows
 - ☒ 3. Only conclusion I follows
 - ☒ 4. Only conclusion II follows

Question Type : **MCQ**
 Question ID : **264330133396**
 Option 1 ID : **264330522617**
 Option 2 ID : **264330522618**
 Option 3 ID : **264330522615**
 Option 4 ID : **264330522616**
 Status : **Answered**
 Chosen Option : **1**

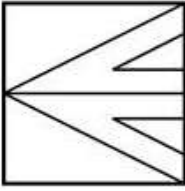
Q.15 Select the option figure in which the given figure (X) is embedded as its part (rotation is NOT allowed).



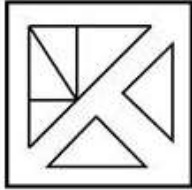
X

Ans


✗ 1.




✓ 2.



✗ 3.



✗ 4.



Question Type : MCQ

Question ID : 264330133403

Option 1 ID : 264330522643

Option 2 ID : 264330522646

Option 3 ID : 264330522645

Option 4 ID : 264330522644

Status : Answered

Chosen Option : 2

Q.16 In a certain code language, 'FALF' is written as 'HCJD'. How will 'OEMC' be written in that language?

Ans

✗ 1. QGAK

✓ 2. QGKA

✗ 3. QKAG

✗ 4. QKGA

Question Type : MCQ

Question ID : 264330137565

Option 1 ID : 264330538868

Option 2 ID : 264330538870

Option 3 ID : 264330538867

Option 4 ID : 264330538869

Status : Answered

Chosen Option : 2

Q.17 Select the option that is related to the third letter cluster in the same way as the second letter cluster is related to the first letter cluster.

TREE : USDD :: SOAP : ?

- Ans**
- ☒ 1. TZPO
 - ☒ 2. TZNQ
 - ☒ 3. TPZO
 - ☒ 4. TNQZ

Question Type : MCQ

Question ID : 264330133388

Option 1 ID : 264330522584

Option 2 ID : 264330522583

Option 3 ID : 264330522586

Option 4 ID : 264330522585

Status : Answered

Chosen Option : 3

Q.18 After interchanging the given two signs what will be the values of equation (I) and (II) respectively?

× and –

I. $18 \times 8 - 6 \div 3 + 4$

II. $7 - 8 \times 4 \div 2 + 15$

- Ans**
- ☒ 1. 89 and 6
 - ☒ 2. 6 and 69
 - ☒ 3. 18 and 10
 - ☒ 4. -8 and 10

Question Type : MCQ

Question ID : 264330138473

Option 1 ID : 264330542502

Option 2 ID : 264330542499

Option 3 ID : 264330542501

Option 4 ID : 264330542500

Status : Answered

Chosen Option : 2

Q.19 Which of the following numbers will replace the question mark (?) in the given series?

15, 16, 32, 35, 140, 145, ?

- Ans**
- ☒ 1. 910
 - ☒ 2. 870
 - ☒ 3. 840
 - ☒ 4. 790

Question Type : MCQ

Question ID : 264330137572

Option 1 ID : 264330538898

Option 2 ID : 264330538895


Option 3 ID : 264330538896

Option 4 ID : 264330538897

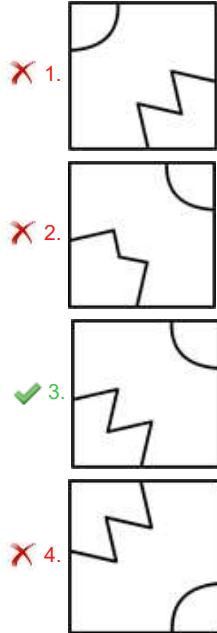
Status : Answered

Chosen Option : 2

Q.20 Select the option figure that will replace the question mark (?) in the figure given below to complete the pattern.
(rotation not allowed)



Ans



Question Type : **MCQ**

Question ID : **264330133405**

Option 1 ID : **264330522652**

Option 2 ID : **264330522653**

Option 3 ID : **264330522651**

Option 4 ID : **264330522654**

Status : **Answered**

Chosen Option : **3**

Section : **General Awareness**

Q.1 Which among the following rulers adopted the title devaputra?

- Ans**
- ☒ 1. Hoyasala
 - ☒ 2. Kushana
 - ☒ 3. Chola
 - ☒ 4. Saka

Question Type : **MCQ**

Question ID : **264330137750**

Option 1 ID : **264330539608**

Option 2 ID : **264330539610**

Option 3 ID : **264330539609**

Option 4 ID : **264330539607**

Status : **Not Answered**

Chosen Option : **--**

Q.2 What was the theme of International Yoga Day (2022)?

- Ans
- ☒ 1. Yoga for Good Body
 - ☒ 2. Yoga for Humanity
 - ☒ 3. Yoga for Good Mind
 - ☒ 4. Yoga for Life

Question Type : MCQ

Question ID : 264330133890

Option 1 ID : 264330524584

Option 2 ID : 264330524586

Option 3 ID : 264330524583

Option 4 ID : 264330524585

Status : Answered

Chosen Option : 2

Q.3 Basketball game is played between two teams of _____ players each.

- Ans
- ☒ 1. five
 - ☒ 2. six
 - ☒ 3. eight
 - ☒ 4. four

Question Type : MCQ

Question ID : 264330133884

Option 1 ID : 264330524559

Option 2 ID : 264330524560

Option 3 ID : 264330524562

Option 4 ID : 264330524561

Status : Answered

Chosen Option : 1

Q.4 According to the first National Multidimensional Poverty Index by NITI Aayog, which state has the maximum percentage of poor people?

- Ans
- ☒ 1. Madhya Pradesh
 - ☒ 2. Uttar Pradesh
 - ☒ 3. Jharkhand
 - ☒ 4. Bihar

Question Type : MCQ

Question ID : 264330137407

Option 1 ID : 264330538258

Option 2 ID : 264330538256

Option 3 ID : 264330538255

Option 4 ID : 264330538257

Status : Answered

Chosen Option : 4

Q.5 Editor of a Marathi newspaper “Kesari” was _____.

- Ans
- ☒ 1. Bipin Chandra Pal
 - ☒ 2. Aurobindo Ghosh
 - ☒ 3. Lala Lajpat Rai
 - ☒ 4. Bal Gangadhar Tilak

Question Type : MCQ
 Question ID : 264330133905
 Option 1 ID : 264330524645
 Option 2 ID : 264330524646
 Option 3 ID : 264330524643
 Option 4 ID : 264330524644
 Status : Answered
 Chosen Option : 4

Q.6 In which of the following articles, “Right of minorities to establish and administer educational institution” is mentioned?

- Ans
- ☒ 1. Article 29
 - ☒ 2. Article 31
 - ☒ 3. Article 30
 - ☒ 4. Article 28

Question Type : MCQ
 Question ID : 264330133893
 Option 1 ID : 264330524596
 Option 2 ID : 264330524598
 Option 3 ID : 264330524597
 Option 4 ID : 264330524595
 Status : Answered
 Chosen Option : 4

Q.7 The broad, green part of the leaf is called _____.

- Ans
- ☒ 1. lamina
 - ☒ 2. petiole
 - ☒ 3. veins
 - ☒ 4. midrib

Question Type : MCQ
 Question ID : 264330133894
 Option 1 ID : 264330524601
 Option 2 ID : 264330524599
 Option 3 ID : 264330524600
 Option 4 ID : 264330524602
 Status : Answered
 Chosen Option : 2

Q.8 According to _____ law, heat produced by an electric current is directly proportional to the resistance of the conductor, the square of the current, and the time for which it flows.

- Ans**
- ☒ 1. Hooke's
 - ☒ 2. Charles's
 - ☒ 3. Faraday's
 - ☒ 4. Joule's

Question Type : **MCQ**
 Question ID : **264330137741**
 Option 1 ID : **264330539572**
 Option 2 ID : **264330539574**
 Option 3 ID : **264330539573**
 Option 4 ID : **264330539571**
 Status : **Answered**
 Chosen Option : **4**

Q.9 The Ilbert Bill was passed during the term of Lord Ripon to bring Indian and European magistracy on equal footing in _____.

- Ans**
- ☒ 1. 1876
 - ☒ 2. 1883
 - ☒ 3. 1871
 - ☒ 4. 1892

Question Type : **MCQ**
 Question ID : **264330138236**
 Option 1 ID : **264330541551**
 Option 2 ID : **264330541552**
 Option 3 ID : **264330541554**
 Option 4 ID : **264330541553**
 Status : **Answered**
 Chosen Option : **2**

Q.10 The Khangchendzonga Biosphere Reserve is located in which of the following states?

- Ans**
- ☒ 1. Manipur
 - ☒ 2. Assam
 - ☒ 3. Sikkim
 - ☒ 4. Kerala

Question Type : **MCQ**
 Question ID : **264330137743**
 Option 1 ID : **264330539581**
 Option 2 ID : **264330539579**
 Option 3 ID : **264330539582**
 Option 4 ID : **264330539580**
 Status : **Answered**
 Chosen Option : **3**

Q.11 Seasonal reversal in the wind direction during a year refers to_____.

- Ans ☒ 1. Monsoon
☒ 2. Emission
☒ 3. Breeze
☒ 4. Climate

Question Type : MCQ

Question ID : 264330133899

Option 1 ID : 264330524622

Option 2 ID : 264330524621

Option 3 ID : 264330524619

Option 4 ID : 264330524620

Status : Answered

Chosen Option : 3

Q.12 Kumari Kamala was awarded with Padma Bhushan in 1970. She is a preeminent artist of the _____ tradition of the dance.

- Ans ☒ 1. Vazhuvoor
☒ 2. Kuchipudi
☒ 3. Tamzara
☒ 4. Kurdish

Question Type : MCQ

Question ID : 264330137755

Option 1 ID : 264330539629

Option 2 ID : 264330539628

Option 3 ID : 264330539627

Option 4 ID : 264330539630

Status : Not Answered

Chosen Option : --

Q.13 The Nobel Prize in Physiology or Medicine 2022 is awarded to_____.

- Ans ☒ 1. Giorgia Meloni
☒ 2. Svante Paabo
☒ 3. Ales Bialiatski
☒ 4. Valeri Polyakov

Question Type : MCQ

Question ID : 264330133889

Option 1 ID : 264330524579

Option 2 ID : 264330524580

Option 3 ID : 264330524582

Option 4 ID : 264330524581

Status : Answered

Chosen Option : 2

Q.14 The Vadhavan Port is located in _____.

- Ans
- ☒ 1. Kerala
 - ☒ 2. Tamil Nadu
 - ☒ 3. West Bengal
 - ☒ 4. Maharashtra

Question Type : MCQ
 Question ID : 264330137745
 Option 1 ID : 264330539590
 Option 2 ID : 264330539588
 Option 3 ID : 264330539587
 Option 4 ID : 264330539589
 Status : Answered
 Chosen Option : 4

Q.15 The Kuiper Belt is a ring of icy rocks & dust bodies just outside the orbit of _____.

- Ans
- ☒ 1. Saturn
 - ☒ 2. Venus
 - ☒ 3. Jupiter
 - ☒ 4. Neptune

Question Type : MCQ
 Question ID : 264330137744
 Option 1 ID : 264330539585
 Option 2 ID : 264330539586
 Option 3 ID : 264330539583
 Option 4 ID : 264330539584
 Status : Answered
 Chosen Option : 3

Q.16 The Merdeka Cup is associated with which of the following sports?

- Ans
- ☒ 1. Golf
 - ☒ 2. Hockey
 - ☒ 3. Chess
 - ☒ 4. Football

Question Type : MCQ
 Question ID : 264330137759
 Option 1 ID : 264330539644
 Option 2 ID : 264330539645
 Option 3 ID : 264330539646
 Option 4 ID : 264330539643
 Status : Answered
 Chosen Option : 1

Q.17 Which of the following is NOT part of six school of Indian Philosophy?

- Ans
- ☒ 1. Samkhya
 - ☒ 2. Yoga
 - ☒ 3. Nyaya
 - ☒ 4. Dravida

Question Type : MCQ

Question ID : 264330133902

Option 1 ID : 264330524633

Option 2 ID : 264330524632

Option 3 ID : 264330524631

Option 4 ID : 264330524634

Status : Answered

Chosen Option : 4

Q.18 Indian economy is seen growing at _____ per cent in the current fiscal, finance minister Nirmala Sitharaman said while presenting the Union Budget 2022.

- Ans
- ☒ 1. 6.5
 - ☒ 2. 7.4
 - ☒ 3. 5.3
 - ☒ 4. 9.2

Question Type : MCQ

Question ID : 264330137760

Option 1 ID : 264330539650

Option 2 ID : 264330539649

Option 3 ID : 264330539648

Option 4 ID : 264330539647

Status : Answered

Chosen Option : 4

Q.19 According to the Mediation Bill, 2021, the mediation process must be completed within 180 days, which may be extended by another _____ days by the parties.

- Ans
- ☒ 1. 220
 - ☒ 2. 120
 - ☒ 3. 200
 - ☒ 4. 180

Question Type : MCQ

Question ID : 264330138222

Option 1 ID : 264330541498

Option 2 ID : 264330541495

Option 3 ID : 264330541497

Option 4 ID : 264330541496

Status : Answered

Chosen Option : 4

Q.20 The six – day Khajuraho Dance festival is celebrated in which of the following state?

- Ans
- ☒ 1. Haryana
 - ☒ 2. Madhya Pradesh
 - ☒ 3. Assam
 - ☒ 4. Kerala

Question Type : MCQ
 Question ID : 264330133882
 Option 1 ID : 264330524551
 Option 2 ID : 264330524552
 Option 3 ID : 264330524554
 Option 4 ID : 264330524553
 Status : Answered
 Chosen Option : 2

Q.21 The first population census in India was conducted in _____ .

- Ans
- ☒ 1. 1872
 - ☒ 2. 1870
 - ☒ 3. 1862
 - ☒ 4. 1865

Question Type : MCQ
 Question ID : 264330133875
 Option 1 ID : 264330524524
 Option 2 ID : 264330524523
 Option 3 ID : 264330524526
 Option 4 ID : 264330524525
 Status : Answered
 Chosen Option : 1

Q.22 Sri Deepak Mazumdar received the Sangeet Natak Akademi Award for the year _____ .

- Ans
- ☒ 1. 2016
 - ☒ 2. 2019
 - ☒ 3. 2017
 - ☒ 4. 2018

Question Type : MCQ
 Question ID : 264330133881
 Option 1 ID : 264330524547
 Option 2 ID : 264330524550
 Option 3 ID : 264330524548
 Option 4 ID : 264330524549
 Status : Not Answered
 Chosen Option : --

Q.23 Who among the following built the Hawa Mahal in Jaipur?

- Ans
- ☒ 1. Maharaja Narinder Singh
 - ☒ 2. Krishnarajendra Wadiyar IV
 - ☒ 3. Maharaja Sawai Pratap Singh
 - ☒ 4. Raja Man Singh - I

Question Type : MCQ
 Question ID : 264330138225
 Option 1 ID : 264330541508
 Option 2 ID : 264330541507
 Option 3 ID : 264330541509
 Option 4 ID : 264330541510
 Status : Answered
 Chosen Option : 3

Q.24 Annapurna Devi was known to practice which musical instrument?

- Ans
- ☒ 1. Surbahar
 - ☒ 2. Sarod
 - ☒ 3. Violin
 - ☒ 4. Bamboo Flute

Question Type : MCQ
 Question ID : 264330133887
 Option 1 ID : 264330524572
 Option 2 ID : 264330524574
 Option 3 ID : 264330524571
 Option 4 ID : 264330524573
 Status : Not Answered
 Chosen Option : --

Q.25 "India at Risk" is written by which of the following authors?

- Ans
- ☒ 1. Jaswant Singh
 - ☒ 2. Khushwant Singh
 - ☒ 3. Natwar Singh
 - ☒ 4. Vijay Darda

Question Type : MCQ
 Question ID : 264330137753
 Option 1 ID : 264330539621
 Option 2 ID : 264330539619
 Option 3 ID : 264330539622
 Option 4 ID : 264330539620
 Status : Answered
 Chosen Option : 4

Q.1 Select the most appropriate meaning of the given idiom.

Between a rock and a hard place

Ans ☒ 1. Stuck between two very bad options

☒ 2. Willing to do anything

☒ 3. On the point of achievement

☒ 4.

Avoiding the main topic, not speaking directly about the issue

Question Type : MCQ

Question ID : 264330136103

Option 1 ID : 264330533221

Option 2 ID : 264330533219

Option 3 ID : 264330533220

Option 4 ID : 264330533222

Status : Answered

Chosen Option : 1

Q.2 Select the most appropriate option to substitute the bracketed segment in the given sentence. If there is no need to substitute it, select 'no substitution required'.

The only course of action to (fend of the loud clamour off conspiracy theories) is to keep everyone fully informed.

Ans ☒ 1. fend off the loud clamour of conspiracy theories

☒ 2. No substitution required

☒ 3. fend off the loud clamour off conspiracy theories

☒ 4. fend of the loud clamour of conspiracy theories

Question Type : MCQ

Question ID : 264330135797

Option 1 ID : 264330532065

Option 2 ID : 264330532066

Option 3 ID : 264330532063

Option 4 ID : 264330532064

Status : Answered

Chosen Option : 1

Q.3 In the following question, out of the given four alternatives, select the alternative which best expresses the meaning of the Idiom/Phrase.

To bear the brunt of

Ans ☒ 1. An inexperienced person

☒ 2. For one's sake

☒ 3. To endure the impact of something

☒ 4. To become free from

Question Type : MCQ

Question ID : 264330134367

Option 1 ID : 264330526454

Option 2 ID : 264330526451

Option 3 ID : 264330526453

Option 4 ID : 264330526452

Status : Answered

Chosen Option : 3

Q.4 Find the part of the given sentence that has an error in it. If there is no error, choose 'No error'.
You can find these books into the extreme corner of this shelf.

- Ans** ☒ 1. books into the extreme
☒ 2. corner of this shelf.
☒ 3. You can find these
☒ 4. No error

Question Type : **MCQ**
 Question ID : **264330134348**
 Option 1 ID : **264330526380**
 Option 2 ID : **264330526381**
 Option 3 ID : **264330526379**
 Option 4 ID : **264330526382**
 Status : **Answered**
 Chosen Option : **1**

Q.5 Select the most appropriate option to fill in the blank.
Enzymes can _____ starches into sugars and proteins into amino acids.

- Ans** ☒ 1. cover
☒ 2. convert
☒ 3. covert
☒ 4. conserve

Question Type : **MCQ**
 Question ID : **264330134370**
 Option 1 ID : **264330526464**
 Option 2 ID : **264330526466**
 Option 3 ID : **264330526465**
 Option 4 ID : **264330526463**
 Status : **Answered**
 Chosen Option : **2**

Q.6 Find the part of the given sentence that has an error in it. If there is no error, choose 'No error'.
Mothers can pass the HIV virus to their newborns during delivery as well, WHO says.

- Ans** ☒ 1. as well, WHO says.
☒ 2. Mothers can pass the HIV virus to
☒ 3. No error
☒ 4. their newborns during delivery

Question Type : **MCQ**
 Question ID : **264330135178**
 Option 1 ID : **264330529645**
 Option 2 ID : **264330529643**
 Option 3 ID : **264330529646**
 Option 4 ID : **264330529644**
 Status : **Answered**
 Chosen Option : **1**

Q.7 Identify the segment that contains a grammatical error. If there is no error, select 'No error'.
And how amorous you become / when your courtship with the / muses is going stronger.

- Ans**
- ☒ 1. No Error
 - ☒ 2. when your courtship with the
 - ☒ 3. muses is going stronger.
 - ☒ 4. And how amorous you become

Question Type : **MCQ**
Question ID : **264330135794**
Option 1 ID : **264330532054**
Option 2 ID : **264330532052**
Option 3 ID : **264330532053**
Option 4 ID : **264330532051**
Status : **Not Answered**
Chosen Option : --

Q.8 Choose the word that can substitute the given group of words.
One who is 100 years old or older

- Ans**
- ☒ 1. Centenarian
 - ☒ 2. Immortal
 - ☒ 3. Mortal
 - ☒ 4. Sententia

Question Type : **MCQ**
Question ID : **264330134361**
Option 1 ID : **264330526427**
Option 2 ID : **264330526428**
Option 3 ID : **264330526430**
Option 4 ID : **264330526429**
Status : **Answered**
Chosen Option : 1

Q.9 A sentence has been given with a blank to be filled with an appropriate option. Choose the correct alternative.
The royal messengers _____ out last night.

- Ans**
- ☒ 1. goes
 - ☒ 2. go
 - ☒ 3. gone
 - ☒ 4. went

Question Type : **MCQ**
Question ID : **264330134352**
Option 1 ID : **264330526395**
Option 2 ID : **264330526398**
Option 3 ID : **264330526397**
Option 4 ID : **264330526396**
Status : **Answered**
Chosen Option : 4

Q.10 Select the most appropriate option to fill in the blank.
He _____ his teeth against the curse on his tongue.

- Ans
- ☒ 1. dropped
 - ☒ 2. unclasped
 - ☒ 3. yielded
 - ☒ 4. clenched

Question Type : MCQ
Question ID : 264330134371
Option 1 ID : 264330526470
Option 2 ID : 264330526468
Option 3 ID : 264330526467
Option 4 ID : 264330526469
Status : Answered
Chosen Option : 4

Q.11 Choose the incorrectly spelt word.

- Ans
- ☒ 1. Pleasurre
 - ☒ 2. Slogan
 - ☒ 3. Heaven
 - ☒ 4. Brinjal

Question Type : MCQ
Question ID : 264330134368
Option 1 ID : 264330526457
Option 2 ID : 264330526456
Option 3 ID : 264330526455
Option 4 ID : 264330526458
Status : Answered
Chosen Option : 1

Q.12 Choose the word that means the same as the given word.
Villainous

- Ans
- ☒ 1. Wholesome
 - ☒ 2. Lucid
 - ☒ 3. Nefarious
 - ☒ 4. Famous

Question Type : MCQ
Question ID : 264330134389
Option 1 ID : 264330526538
Option 2 ID : 264330526537
Option 3 ID : 264330526535
Option 4 ID : 264330526536
Status : Answered
Chosen Option : 3

Q.13 Select the most appropriate antonym of the given word.

Culpable

- Ans
- ☒ 1. Rigorous
 - ☒ 2. Reasonable
 - ☒ 3. Innocent
 - ☒ 4. Edible

Question Type : MCQ
Question ID : 264330136605
Option 1 ID : 264330535149
Option 2 ID : 264330535148
Option 3 ID : 264330535150
Option 4 ID : 264330535147
Status : Answered
Chosen Option : 3

Q.14 Improve the underlined part of the sentence. Choose 'No improvement' as an answer if the sentence is grammatically correct.
The sea wall protected the village in the waves.

- Ans
- ☒ 1. No improvement
 - ☒ 2. village from
 - ☒ 3. village through
 - ☒ 4. village by

Question Type : MCQ
Question ID : 264330134323
Option 1 ID : 264330526286
Option 2 ID : 264330526283
Option 3 ID : 264330526284
Option 4 ID : 264330526285
Status : Answered
Chosen Option : 2

Q.15 Select the appropriate synonym for the underlined word.
John says, "I am serious."

- Ans
- ☒ 1. safe
 - ☒ 2. severe
 - ☒ 3. comical
 - ☒ 4. light

Question Type : MCQ
Question ID : 264330134362
Option 1 ID : 264330526431
Option 2 ID : 264330526432
Option 3 ID : 264330526433
Option 4 ID : 264330526434
Status : Answered
Chosen Option : 2

Q.16 Select the most appropriate word for the given group of words.

A large, tall cupboard in which clothes may be hung or stored

- Ans ☒ 1. Wardrobe
☒ 2. Hypergamy
☒ 3. Gibber
☒ 4. Honorary

Question Type : MCQ

Question ID : 264330136097

Option 1 ID : 264330533196

Option 2 ID : 264330533197

Option 3 ID : 264330533195

Option 4 ID : 264330533198

Status : Answered

Chosen Option : 1

Q.17 Choose the sentence with no spelling error.

- Ans ☒ 1. He wondered about lots of things.
☒ 2. He wondered about lotts of things.
☒ 3. He wondared about lots of things.
☒ 4. He wondered about lots of thinggs.

Question Type : MCQ

Question ID : 264330134369

Option 1 ID : 264330526462

Option 2 ID : 264330526460

Option 3 ID : 264330526461

Option 4 ID : 264330526459

Status : Answered

Chosen Option : 1

Q.18 A sentence has been given with a blank to be filled with an appropriate option. Choose the correct alternative.

I _____ only a few steps before I was forced to stop.

- Ans ☒ 1. had walked
☒ 2. have walked
☒ 3. walk
☒ 4. walked

Question Type : MCQ

Question ID : 264330134353

Option 1 ID : 264330526400

Option 2 ID : 264330526399

Option 3 ID : 264330526402

Option 4 ID : 264330526401

Status : Answered

Chosen Option : 4

Q.19 Select the appropriate antonym for the underlined word.
A mysterious glowing girl has informed him of the death.

- Ans ☒ 1. evident
☒ 2. cryptic
☒ 3. critical
☒ 4. murky

Question Type : MCQ
Question ID : 264330134365
Option 1 ID : 264330526446
Option 2 ID : 264330526444
Option 3 ID : 264330526445
Option 4 ID : 264330526443
Status : Answered
Chosen Option : 1

Q.20 Improve the underlined part of the sentence. Choose 'No improvement' as an answer if the sentence is grammatically correct.
Dr. Mark said I can came to his office on Friday or Saturday of next week.

- Ans ☒ 1. No improvement
☒ 2. coming to his office at
☒ 3. comes to his office in
☒ 4. come to his office on

Question Type : MCQ
Question ID : 264330134351
Option 1 ID : 264330526394
Option 2 ID : 264330526392
Option 3 ID : 264330526393
Option 4 ID : 264330526391
Status : Answered
Chosen Option : 4

Comprehension:

In the following passage some words have been deleted. Fill in the blanks with the help of the alternatives given. Select the most appropriate option for each number.

"Why?" said Harry in surprise. "There is a (1) _____, Harry Potter. A plot to make most terrible things (2) _____ at Hogwarts School of Witchcraft and Wizardry (3) _____," whispered Dobby, suddenly trembling all over. "Dobby has (4) _____ months, sir. Harry Potter (5) _____ in peril."

SubQuestion No : 21

Q.21 Select the most appropriate option to fill in blank number 1.

- Ans ☒ 1. paper
☒ 2. plot
☒ 3. notebook
☒ 4. diary

Question Type : MCQ
Question ID : 264330136596
Option 1 ID : 264330535111
Option 2 ID : 264330535112
Option 3 ID : 264330535113
Option 4 ID : 264330535114
Status : Answered
Chosen Option : 2

Comprehension:

In the following passage some words have been deleted. Fill in the blanks with the help of the alternatives given. Select the most appropriate option for each number.

"Why?" said Harry in surprise. "There is a (1) _____, Harry Potter. A plot to make most terrible things (2) _____ at Hogwarts School of Witchcraft and Wizardry (3) _____," whispered Dobby, suddenly trembling all over. "Dobby has (4) _____ months, sir. Harry Potter (5) _____ in peril."

SubQuestion No : 22

Q.22 Select the most appropriate option to fill in blank number 2.

- Ans ☒ 1. happen
☒ 2. happens
☒ 3. happening
☒ 4. happened

Question Type : MCQ
 Question ID : 264330136597
 Option 1 ID : 264330535117
 Option 2 ID : 264330535115
 Option 3 ID : 264330535118
 Option 4 ID : 264330535116
 Status : Answered
 Chosen Option : 1

Comprehension:

In the following passage some words have been deleted. Fill in the blanks with the help of the alternatives given. Select the most appropriate option for each number.

"Why?" said Harry in surprise. "There is a (1) _____, Harry Potter. A plot to make most terrible things (2) _____ at Hogwarts School of Witchcraft and Wizardry (3) _____," whispered Dobby, suddenly trembling all over. "Dobby has (4) _____ months, sir. Harry Potter (5) _____ in peril."

SubQuestion No : 23

Q.23 Select the most appropriate option to fill in blank number 3.

- Ans ☒ 1. those years
☒ 2. that year
☒ 3. the year
☒ 4. this year

Question Type : MCQ
 Question ID : 264330136598
 Option 1 ID : 264330535121
 Option 2 ID : 264330535120
 Option 3 ID : 264330535119
 Option 4 ID : 264330535122
 Status : Answered
 Chosen Option : 4

Comprehension:

In the following passage some words have been deleted. Fill in the blanks with the help of the alternatives given. Select the most appropriate option for each number.

"Why?" said Harry in surprise, "There is a (1) _____, Harry Potter. A plot to make most terrible things (2) _____ at Hogwarts School of Witchcraft and Wizardry (3) _____," whispered Dobby, suddenly trembling all over. "Dobby has (4) _____ months, sir. Harry Potter (5) _____ in peril."

SubQuestion No : 24

Q.24 Select the most appropriate option to fill in blank number 4.

- Ans ☒ 1. known it for
☐ 2. had knowing for
☐ 3. had acknowledging for
☐ 4. been known since

Question Type : MCQ
 Question ID : 264330136599
 Option 1 ID : 264330535123
 Option 2 ID : 264330535125
 Option 3 ID : 264330535126
 Option 4 ID : 264330535124
 Status : Answered
 Chosen Option : 1

Comprehension:

In the following passage some words have been deleted. Fill in the blanks with the help of the alternatives given. Select the most appropriate option for each number.

"Why?" said Harry in surprise, "There is a (1) _____, Harry Potter. A plot to make most terrible things (2) _____ at Hogwarts School of Witchcraft and Wizardry (3) _____," whispered Dobby, suddenly trembling all over. "Dobby has (4) _____ months, sir. Harry Potter (5) _____ in peril."

SubQuestion No : 25

Q.25 Select the most appropriate option to fill in blank number 5.

- Ans ☐ 1. must not insert himself
☐ 2. must not put his self
☐ 3. might not put oneself
☒ 4. must not put himself

Question Type : MCQ
 Question ID : 264330136600
 Option 1 ID : 264330535130
 Option 2 ID : 264330535129
 Option 3 ID : 264330535127
 Option 4 ID : 264330535128
 Status : Answered
 Chosen Option : 4