

Multi Tasking Non Technical Staff and Havaladar CBIC and CBN Examination 2022

Roll Number	
Candidate Name	
Venue Name	iON Digital Zone iDZ Naino Ka Bas
Exam Date	17/05/2023
Exam Time	3:30 PM - 5:00 PM
Subject	MTS Non Tech Havaladar CBIC and CBN Examination 2022

Section : Numerical and Mathematical Ability

Q.1 40 percent of the cost price of an article is equal to the 24 percent of its selling price. What is the profit percentage?

- Ans**
- ☒ 1. 60 percent
 - ☒ 2. 50 percent
 - ☒ 3. 66.66 percent
 - ☒ 4. 52.5 percent

Question Type : **MCQ**

Question ID : **264330137630**

Option 1 ID : **264330539127**

Option 2 ID : **264330539129**

Option 3 ID : **264330539128**

Option 4 ID : **264330539130**

Status : **Answered**

Chosen Option : **3**

Q.2 A girl wants to plant trees in her garden in rows in such a way that the number of trees in each row to be the same. There are 10 rows and the number of trees in each row is 12, what is the number of trees in each row, if there are 5 more rows?

- Ans**
- ☒ 1. 10
 - ☒ 2. 8
 - ☒ 3. 6
 - ☒ 4. 12

Question Type : **MCQ**

Question ID : **264330135119**

Option 1 ID : **264330529411**

Option 2 ID : **264330529413**

Option 3 ID : **264330529414**

Option 4 ID : **264330529412**

Status : **Answered**

Chosen Option : **2**

Test Prime

**ALL EXAMS,
ONE SUBSCRIPTION**



70,000+
Mock Tests



**Personalised
Report Card**



**Unlimited
Re-Attempt**



600+
Exam Covered



**Previous Year
Papers**



**500%
Refund**



ATTEMPT FREE MOCK NOW

Q.3 The following table shows the number of employees in 5 different companies from the year 2012 to 2018. In the year 2015, the number of employees in company C is how much percent less than company E?

Year/ Company	A	B	C	D	E
2012	242	215	223	211	177
2013	245	163	165	213	211
2014	231	191	221	241	215
2015	198	188	222	223	250
2016	197	240	175	221	254
2017	177	245	268	198	268
2018	158	230	213	215	218

- Ans
- ☒ 1. 16%
 - ☒ 2. 28%
 - ☒ 3. 11.2%
 - ☒ 4. 18.8%

Question Type : MCQ

Question ID : 264330138451

Option 1 ID : 264330542414

Option 2 ID : 264330542411

Option 3 ID : 264330542412

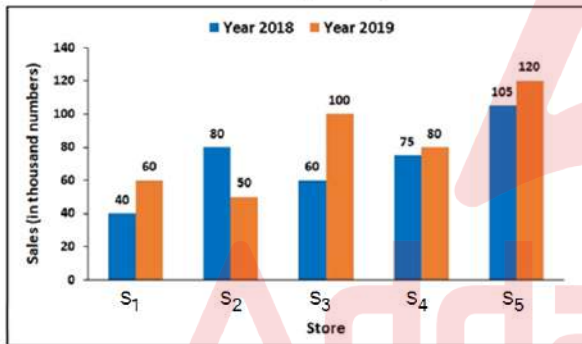
Option 4 ID : 264330542413

Status : Answered

Chosen Option : 3

Q.4 The following bar graph shows the sales of cell phones (in thousand numbers) from five stores of a company during two consecutive years 2018 and 2019.

What is the ratio of the total sale of store S_3 for both years to the total sale of store S_1 for both years?



- Ans
- ☒ 1. 8:5
 - ☒ 2. 3:7
 - ☒ 3. 7:4
 - ☒ 4. 4:5

Question Type : MCQ

Question ID : 264330135126

Option 1 ID : 264330529439

Option 2 ID : 264330529442

Option 3 ID : 264330529441

Option 4 ID : 264330529440

Status : Answered

Chosen Option : 1

Q.5 If 20% of a number is $(1/6)$ th of another number, what is the ratio of first number to the second number?

- Ans
- ☒ 1. 4:7
 - ☒ 2. 5:6
 - ☒ 3. 5:3
 - ☒ 4. 4:5

Question Type : MCQ
 Question ID : 264330135118
 Option 1 ID : 264330529410
 Option 2 ID : 264330529409
 Option 3 ID : 264330529408
 Option 4 ID : 264330529407
 Status : Answered
 Chosen Option : 2

Q.6 The value of $8 + \{12 - (8 \div 2)\} \times (1/4)$ is:

- Ans
- ☒ 1. 6
 - ☒ 2. 10
 - ☒ 3. 2
 - ☒ 4. 8

Question Type : MCQ
 Question ID : 264330135108
 Option 1 ID : 264330529370
 Option 2 ID : 264330529367
 Option 3 ID : 264330529369
 Option 4 ID : 264330529368
 Status : Answered
 Chosen Option : 2

Q.7 An object travels 20 m in 5 seconds and then another 25 m in 10 seconds. What is the average speed?

- Ans
- ☒ 1. 4 m/sec
 - ☒ 2. 2 m/sec
 - ☒ 3. 3 m/sec
 - ☒ 4. 5 m/sec

Question Type : MCQ
 Question ID : 264330141012
 Option 1 ID : 264330552395
 Option 2 ID : 264330552396
 Option 3 ID : 264330552397
 Option 4 ID : 264330552398
 Status : Answered
 Chosen Option : 3

Q.8 A wholesaler marks his goods at 35% above the cost price but allows a discount of 15% at the time of sale. His gain is:

- Ans**
- ☒ 1. 20.45%
 - ☒ 2. 24.85%
 - ☒ 3. 14.75%
 - ☒ 4. 25.50%

Question Type : **MCQ**

Question ID : **264330135117**

Option 1 ID : **264330529406**

Option 2 ID : **264330529403**

Option 3 ID : **264330529404**

Option 4 ID : **264330529405**

Status : **Answered**

Chosen Option : **3**

Q.9 In a class, if 55% of the students are boys and the number of girls is 90, then find the number of boys.

- Ans**
- ☒ 1. 135
 - ☒ 2. 120
 - ☒ 3. 198
 - ☒ 4. 110

Question Type : **MCQ**

Question ID : **264330135418**

Option 1 ID : **264330530581**

Option 2 ID : **264330530579**

Option 3 ID : **264330530582**

Option 4 ID : **264330530580**

Status : **Answered**

Chosen Option : **4**

Q.10 The radius of a cylinder is 14 cm. If the height of the cylinder is four times of its radius, then what is the curved surface area of the cylinder?

- Ans**
- ☒ 1. 5546 cm²
 - ☒ 2. 4928 cm²
 - ☒ 3. 4694 cm²
 - ☒ 4. 5214 cm²

Question Type : **MCQ**

Question ID : **264330139089**

Option 1 ID : **264330544963**

Option 2 ID : **264330544964**

Option 3 ID : **264330544966**

Option 4 ID : **264330544965**

Status : **Answered**

Chosen Option : **2**

Q.11 In covering a distance of 50 km, Soniya takes 1 hour more than Sunny. If Soniya doubles his speed, then he would take 1 hour less than Sunny. Soniya's speed is:

- Ans**
- ☒ 1. 18.4 km/hr
 - ☒ 2. 12.5 km/hr
 - ☒ 3. 14.8 km/hr
 - ☒ 4. 15.6 km/hr

Question Type : **MCQ**

Question ID : **264330135122**

Option 1 ID : **264330529423**

Option 2 ID : **264330529426**

Option 3 ID : **264330529425**

Option 4 ID : **264330529424**

Status : **Answered**

Chosen Option : **2**

Q.12 $48 \div 4 + A \times 2 - 8 = 14$, find out the value of A.

- Ans**
- ☒ 1. 10
 - ☒ 2. 5
 - ☒ 3. 14
 - ☒ 4. 8

Question Type : **MCQ**

Question ID : **264330138435**

Option 1 ID : **264330542348**

Option 2 ID : **264330542347**

Option 3 ID : **264330542349**

Option 4 ID : **264330542350**

Status : **Answered**

Chosen Option : **2**

Q.13 The ratio of the outer and the inner circumferences of a circular path is 11 : 7. If path is 20 metres wide, then what is the radius of the inner circle?

- Ans**
- ☒ 1. 20 metres
 - ☒ 2. 55 metres
 - ☒ 3. 65 metres
 - ☒ 4. 35 metres

Question Type : **MCQ**

Question ID : **264330137168**

Option 1 ID : **264330537315**

Option 2 ID : **264330537317**

Option 3 ID : **264330537316**

Option 4 ID : **264330537318**

Status : **Answered**

Chosen Option : **4**

Q.14 What is the value of $\frac{13 \times 4 - 26}{54 - 7 \times 4}$?

- Ans
- ☐ 1. -1
 - ☐ 2. 10
 - ☐ 3. 0
 - ☒ 4. 1

Question Type : MCQ

Question ID : 264330137619

Option 1 ID : 264330539083

Option 2 ID : 264330539086

Option 3 ID : 264330539085

Option 4 ID : 264330539084

Status : Answered

Chosen Option : 4

Q.15 Rs. 6000 is lent at the rate of 8 percent per annum on compound interest (compounded quarterly). What will be the compound interest of 6 months?

- Ans
- ☐ 1. Rs. 268.6
 - ☐ 2. Rs. 190.5
 - ☐ 3. Rs. 164.6
 - ☒ 4. Rs. 242.4

Question Type : MCQ

Question ID : 264330139067

Option 1 ID : 264330544877

Option 2 ID : 264330544878

Option 3 ID : 264330544876

Option 4 ID : 264330544875

Status : Answered

Chosen Option : 4

Q.16 A alone can complete a work in 25 days and B alone can complete the same work in 50 days. If both of them work together, then in 9 days what percent work of the total work will be completed?

- Ans
- ☐ 1. 49 percent
 - ☐ 2. 60 percent
 - ☐ 3. 45 percent
 - ☒ 4. 54 percent

Question Type : MCQ

Question ID : 264330139076

Option 1 ID : 264330544914

Option 2 ID : 264330544911

Option 3 ID : 264330544913

Option 4 ID : 264330544912

Status : Answered

Chosen Option : 4

Q.17 Reenal bought an AC for Rs. 28500 and paid Rs. 600 for transportation. Then she sold it for Rs. 30264. What is her gain%?

- Ans**
- ☒ 1. 8%
 - ☒ 2. 10%
 - ☒ 3. 4%
 - ☒ 4. 5%

Question Type : **MCQ**
 Question ID : **264330135116**
 Option 1 ID : **264330529401**
 Option 2 ID : **264330529399**
 Option 3 ID : **264330529402**
 Option 4 ID : **264330529400**
 Status : **Answered**
 Chosen Option : **3**

Q.18 The average of 10 numbers is 8. If each number is multiplied by 10, then the new average will be:

- Ans**
- ☒ 1. 80
 - ☒ 2. 18
 - ☒ 3. 8
 - ☒ 4. 50

Question Type : **MCQ**
 Question ID : **264330135111**
 Option 1 ID : **264330529381**
 Option 2 ID : **264330529380**
 Option 3 ID : **264330529379**
 Option 4 ID : **264330529382**
 Status : **Answered**
 Chosen Option : **1**

Q.19 A alone can do $(1/10)$ part of a work in 8 hours. B alone can do $(1/5)$ part of same work in 4 hours. If they work together, then how many hours will they take to complete $(9/16)$ part of the same work?

- Ans**
- ☒ 1. 9 hours
 - ☒ 2. 5 hours
 - ☒ 3. 8 hours
 - ☒ 4. 4 hours

Question Type : **MCQ**
 Question ID : **264330137153**
 Option 1 ID : **264330537255**
 Option 2 ID : **264330537256**
 Option 3 ID : **264330537258**
 Option 4 ID : **264330537257**
 Status : **Answered**
 Chosen Option : **1**

Q.20 Find the sum of money invested by a man in a scheme which offers Compound Interest(compounding annually) at a 6% rate of interest per annum if Compound Interest for 2 years is Rs.618.

- Ans**
- ☒ 1. Rs.7000
 - ☒ 2. Rs.9000
 - ☒ 3. Rs.5000
 - ☒ 4. Rs.4000

Question Type : **MCQ**
 Question ID : **264330135425**
 Option 1 ID : **264330530608**
 Option 2 ID : **264330530607**
 Option 3 ID : **264330530610**
 Option 4 ID : **264330530609**
 Status : **Answered**
 Chosen Option : **3**

Section : Reasoning Ability and Problem Solving

Q.1 Which two numbers should be interchanged to make the given equation correct?

$$5 \times 7 - 4 + 21 \div 6 = 29$$

- Ans**
- ☒ 1. 6 and 5
 - ☒ 2. 6 and 7
 - ☒ 3. 21 and 29
 - ☒ 4. 5 and 4

Question Type : **MCQ**
 Question ID : **264330135015**
 Option 1 ID : **264330528996**
 Option 2 ID : **264330528998**
 Option 3 ID : **264330528997**
 Option 4 ID : **264330528995**
 Status : **Answered**
 Chosen Option : **2**

Q.2 By Interchanging the given two numbers which of the following equation will be not correct?

8 and 2

I. $8 \times 4 - 6 + 3 + 2 = 14$

II. $6 - 8 \times 3 + 2 + 1 = 9$

- Ans**
- ☒ 1. Only I
 - ☒ 2. Neither I nor II
 - ☒ 3. Only II
 - ☒ 4. Both I and II

Question Type : **MCQ**
 Question ID : **264330138846**
 Option 1 ID : **264330543991**
 Option 2 ID : **264330543994**
 Option 3 ID : **264330543992**
 Option 4 ID : **264330543993**
 Status : **Answered**
 Chosen Option : **3**

Q.3 In a certain code language, 'JAPAN' is written as 'KZPZO'. How will 'GROUP' be written in that language?

- Ans**
- ✓ 1. HQOTQ
 - ✗ 2. HQTTO
 - ✗ 3. HOTOQ
 - ✗ 4. HOQTQ

Question Type : **MCQ**

Question ID : **264330134982**

Option 1 ID : **264330528864**

Option 2 ID : **264330528863**

Option 3 ID : **264330528866**

Option 4 ID : **264330528865**

Status : **Answered**

Chosen Option : **1**

Q.4 Ayaan, Prashant, Ritu, Neeta, Sneha, and Zain are sitting in a row facing south. Sneha and Zain are in the centre. Ayaan and Prashant are at the ends. Ritu is sitting to the immediate left of Ayaan. Who is to the immediate right of Prashant?

- Ans**
- ✗ 1. Sneha
 - ✗ 2. Ayaan
 - ✗ 3. Ritu
 - ✓ 4. Neeta

Question Type : **MCQ**

Question ID : **264330135006**

Option 1 ID : **264330528961**

Option 2 ID : **264330528962**

Option 3 ID : **264330528960**

Option 4 ID : **264330528959**

Status : **Answered**

Chosen Option : **4**

Q.5 Two statements are given followed by two conclusions numbered I and II. Assuming the statements to be true, even if they seem to be at variance with commonly known facts, decide which of the conclusions logically follow(s) from the statements.

Statements:

All bells are birds.
Some bells are toys.

Conclusions:

I. No bird is a toy.
II. Some toys are birds.

- Ans**
- ✗ 1. Neither conclusion I nor II follows
 - ✓ 2. Only conclusion II follows
 - ✗ 3. Only conclusion I follows
 - ✗ 4. Both conclusions I and II follow

Question Type : **MCQ**

Question ID : **264330135009**

Option 1 ID : **264330528974**

Option 2 ID : **264330528972**

Option 3 ID : **264330528971**

Option 4 ID : **264330528973**

Status : **Answered**

Chosen Option : **2**

Q.6 In a certain code language, 'FIELD' is written as 'LOKRJ' and 'GLOBE' is written as 'MRUHK'. How will 'GLASS' be written in that language?

- Ans**
- ☒ 1. MRHYY
 - ☒ 2. MRGY Y
 - ☒ 3. MSGYY
 - ☒ 4. MRGZZ

Question Type : MCQ

Question ID : 264330133510

Option 1 ID : 264330523073

Option 2 ID : 264330523071

Option 3 ID : 264330523072

Option 4 ID : 264330523074

Status : Answered

Chosen Option : 2

Q.7 Select the option that is related to the fifth number in the same way as the second number is related to the first number and fourth number is related to third number.

5 : 50 :: 17 : 170 :: 19 : ?

- Ans**
- ☒ 1. 190
 - ☒ 2. 180
 - ☒ 3. 200
 - ☒ 4. 210

Question Type : MCQ

Question ID : 264330135630

Option 1 ID : 264330531421

Option 2 ID : 264330531419

Option 3 ID : 264330531420

Option 4 ID : 264330531422

Status : Answered

Chosen Option : 1

Q.8 P, Q, R, S and T are sitting around a circular table facing the centre. R is sitting to the immediate left of T. Q is sitting to the immediate left of S and to the immediate right of T. Who is sitting to the immediate right of S?

- Ans**
- ☒ 1. P
 - ☒ 2. R
 - ☒ 3. Q
 - ☒ 4. T

Question Type : MCQ

Question ID : 264330135007

Option 1 ID : 264330528963

Option 2 ID : 264330528965

Option 3 ID : 264330528964

Option 4 ID : 264330528966

Status : Answered

Chosen Option : 1

Q.9 Study the given pattern carefully and select the number that can replace the question mark (?) in it.

First row- 68, 56, 44

Second row- 245, 233, 221

Third row- 97, 85, ?

Ans ☒ 1. 93

☒ 2. 90

☒ 3. 73

☒ 4. 89

Question Type : **MCQ**

Question ID : **264330135014**

Option 1 ID : **264330528993**

Option 2 ID : **264330528994**

Option 3 ID : **264330528991**

Option 4 ID : **264330528992**

Status : **Answered**

Chosen Option : **3**

Q.10 Select the option that is related to the third word in the same way as the second word is related to the first word.

House : Room :: World : ?

Ans ☒ 1. Face

☒ 2. Pencil

☒ 3. Bed

☒ 4. Continent

Question Type : **MCQ**

Question ID : **264330135001**

Option 1 ID : **264330528941**

Option 2 ID : **264330528940**

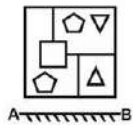
Option 3 ID : **264330528942**

Option 4 ID : **264330528939**

Status : **Answered**

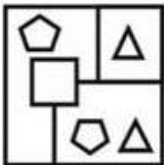
Chosen Option : **4**

Q.11 If a mirror is placed on the line AB, then out of the option figures which figure will be the right image of the question figure?

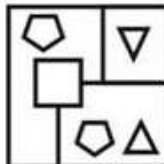


Ans

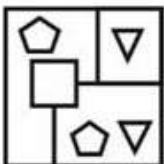
✗ 1.



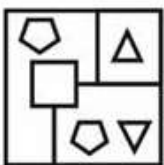
✓ 2.



✗ 3.



✗ 4.



Question Type : MCQ

Question ID : 264330138559

Option 1 ID : 264330542843

Option 2 ID : 264330542846

Option 3 ID : 264330542845

Option 4 ID : 264330542844

Status : Answered

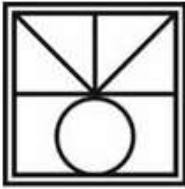
Chosen Option : 2

Q.12 Select the option figure in which the given figure is embedded. (rotation is NOT allowed)

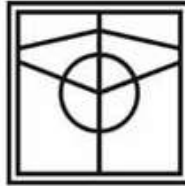


Ans

✗ 1.



✓ 2.



✗ 3.



✗ 4.



Question Type : MCQ

Question ID : 264330138558

Option 1 ID : 264330542842

Option 2 ID : 264330542841

Option 3 ID : 264330542840

Option 4 ID : 264330542839

Status : Answered

Chosen Option : 2

Q.13 Which of the following letters will replace the question mark (?) in the given series?

L, N, R, X, F, P, ?

Ans

✗ 1. S

✗ 2. F

✗ 3. M

✓ 4. B

Question Type : MCQ

Question ID : 264330134998

Option 1 ID : 264330528929

Option 2 ID : 264330528930

Option 3 ID : 264330528927

Option 4 ID : 264330528928

Status : Answered

Chosen Option : 4

Q.14 Which of the following numbers will replace the question mark (?) in the given series?

53, 60, 67, 74, 81, 88, ?

Ans ☒ 1. 95

☐ 2. 93

☐ 3. 98

☐ 4. 104

Question Type : **MCQ**

Question ID : **264330135012**

Option 1 ID : **264330528983**

Option 2 ID : **264330528984**

Option 3 ID : **264330528985**

Option 4 ID : **264330528986**

Status : **Answered**

Chosen Option : 1

Q.15 In a certain code language, 'EAR' is written as '24'. How will 'ICY' be written in that language?

Ans ☐ 1. 42

☐ 2. 34

☒ 3. 37

☐ 4. 38

Question Type : **MCQ**

Question ID : **264330137856**

Option 1 ID : **264330540031**

Option 2 ID : **264330540033**

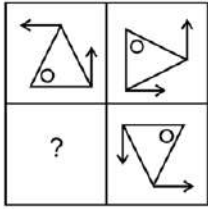
Option 3 ID : **264330540032**

Option 4 ID : **264330540034**

Status : **Answered**

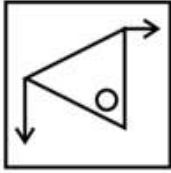
Chosen Option : 3

Q.16 Select the option figure that will replace the question mark (?) in the figure given below to complete the pattern.
(rotation is not allowed)

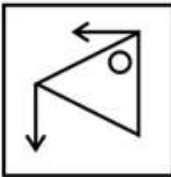


Ans

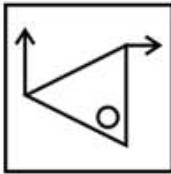
✗ 1.



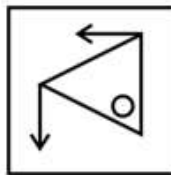
✗ 2.



✗ 3.



✓ 4.



Question Type : MCQ

Question ID : 264330135019

Option 1 ID : 264330529011

Option 2 ID : 264330529014

Option 3 ID : 264330529013

Option 4 ID : 264330529012

Status : Answered

Chosen Option : 4

Q.17 In the following question, select the missing number of the given series.

43, 42, 39, 34, 27, ?

Ans

✓ 1. 18

✗ 2. 21

✗ 3. 16

✗ 4. 20

Question Type : MCQ

Question ID : 264330135628

Option 1 ID : 264330531412

Option 2 ID : 264330531413

Option 3 ID : 264330531414

Option 4 ID : 264330531411

Status : Answered

Chosen Option : 1

Q.18 Three statements are given followed by two conclusions numbered I and II. Assuming the statements to be true, even if they seem to be at variance with commonly known facts, decide which of the conclusions logically follow(s) from the statements.

Statements:

All ocean are oil.

All oil are milk.

All milk are water.

Conclusions:

I. Some water are milk.

II. All milk are ocean.

Ans

- ✓ 1. Only conclusion I follows
- ✗ 2. Both conclusions I and II follow
- ✗ 3. Only conclusion II follows
- ✗ 4. Neither conclusion I nor II follows

Question Type : MCQ

Question ID : 264330135010

Option 1 ID : 264330528975

Option 2 ID : 264330528977

Option 3 ID : 264330528976

Option 4 ID : 264330528978

Status : Answered

Chosen Option : 1

Q.19 Select the option that is related to the third letter cluster in the same way as the second letter cluster is related to the first letter cluster.

AFN : BDQ :: DLR : ?

Ans

- ✗ 1. EUJ
- ✗ 2. UJE
- ✗ 3. JUN
- ✓ 4. EJU

Question Type : MCQ

Question ID : 264330135000

Option 1 ID : 264330528936

Option 2 ID : 264330528937

Option 3 ID : 264330528938

Option 4 ID : 264330528935

Status : Answered

Chosen Option : 4

Q.20 R is taller than M. M is taller than P. S is taller than R. H is shorter than P. U is taller than N and shorter than H. Who among these is the tallest?

Ans

- ✓ 1. S
- ✗ 2. M
- ✗ 3. U
- ✗ 4. R

Question Type : MCQ

Question ID : 264330135008

Option 1 ID : 264330528970

Option 2 ID : 264330528968

Option 3 ID : 264330528967

Option 4 ID : 264330528969

Status : Answered

Chosen Option : 1

Section : General Awareness

Q.1 'Long Walk to Freedom' is an autobiography of _____.

- Ans
- ☒ 1. Mahatma Gandhi
 - ☒ 2. Benjamin Franklin
 - ☒ 3. Nelson Mandela
 - ☒ 4. Jawaharlal Nehru

Question Type : MCQ
 Question ID : 264330134661
 Option 1 ID : 264330527599
 Option 2 ID : 264330527602
 Option 3 ID : 264330527600
 Option 4 ID : 264330527601
 Status : Answered
 Chosen Option : 3

Q.2 The Himalayan mountain range is a type of _____.

- Ans
- ☒ 1. residual mountains
 - ☒ 2. fold mountains
 - ☒ 3. accumulated mountains
 - ☒ 4. block mountains

Question Type : MCQ
 Question ID : 264330134679
 Option 1 ID : 264330527672
 Option 2 ID : 264330527671
 Option 3 ID : 264330527674
 Option 4 ID : 264330527673
 Status : Answered
 Chosen Option : 2

Q.3 Negative ions that consist of a single atom are named by adding the suffix _____ to the stem of the name of the element.

- Ans
- ☒ 1. -onium
 - ☒ 2. -ide
 - ☒ 3. -ic
 - ☒ 4. -ous

Question Type : MCQ
 Question ID : 264330135489
 Option 1 ID : 264330530863
 Option 2 ID : 264330530865
 Option 3 ID : 264330530866
 Option 4 ID : 264330530864
 Status : Answered
 Chosen Option : 2

Q.4 Major Dhyan Chand was famous for which sport?

- Ans
- ☒ 1. Volleyball
 - ☒ 2. Field hockey
 - ☒ 3. Polo
 - ☒ 4. Football

Question Type : MCQ
 Question ID : 264330134691
 Option 1 ID : 264330527720
 Option 2 ID : 264330527721
 Option 3 ID : 264330527722
 Option 4 ID : 264330527719
 Status : Answered
 Chosen Option : 2

Q.5 Which article of the Indian constitution enshrines the right against exploitation?

- Ans
- ☒ 1. Article 23 and 24
 - ☒ 2. Article 27 and 28
 - ☒ 3. Article 21
 - ☒ 4. Article 15

Question Type : MCQ
 Question ID : 264330134689
 Option 1 ID : 264330527714
 Option 2 ID : 264330527712
 Option 3 ID : 264330527713
 Option 4 ID : 264330527711
 Status : Answered
 Chosen Option : 1

Q.6 Cytology is the study of _____.

- Ans
- ☒ 1. Genes
 - ☒ 2. Cells
 - ☒ 3. Tissues
 - ☒ 4. Chloroplasts

Question Type : MCQ
 Question ID : 264330134675
 Option 1 ID : 264330527658
 Option 2 ID : 264330527656
 Option 3 ID : 264330527655
 Option 4 ID : 264330527657
 Status : Answered
 Chosen Option : 2

Q.7 The Amaravati School of art was developed under the patronage of _____.

- Ans
- ☒ 1. Cholas
 - ☒ 2. Cheras
 - ☒ 3. Satavahanas
 - ☒ 4. Palas

Question Type : MCQ
Question ID : 264330138898
Option 1 ID : 264330544199
Option 2 ID : 264330544201
Option 3 ID : 264330544200
Option 4 ID : 264330544202
Status : Answered
Chosen Option : 3

Q.8 The founder of Brahmo Sabha was _____.

- Ans
- ☒ 1. Rabindranath Tagore
 - ☒ 2. Radhakanta Deb
 - ☒ 3. Raja Ram Mohan Roy
 - ☒ 4. Keshab Chandra Sen

Question Type : MCQ
Question ID : 264330138919
Option 1 ID : 264330544284
Option 2 ID : 264330544285
Option 3 ID : 264330544283
Option 4 ID : 264330544286
Status : Answered
Chosen Option : 3

Q.9 Which among the following soils is also known as Regur soil?

- Ans
- ☒ 1. Black
 - ☒ 2. Peaty
 - ☒ 3. Alluvial
 - ☒ 4. Laterite

Question Type : MCQ
Question ID : 264330134653
Option 1 ID : 264330527567
Option 2 ID : 264330527568
Option 3 ID : 264330527570
Option 4 ID : 264330527569
Status : Answered
Chosen Option : 1

Q.10 _____ refers to a method adopted by the Central Bank to persuade or convince the commercial banks to advance credit in the economic interest of the country.

- Ans
- ☒ 1. Marginal Standing Facility
 - ☒ 2. Moral Suasion
 - ☒ 3. Credit Rationing
 - ☒ 4. Margin Requirements

Question Type : MCQ

Question ID : 264330134668

Option 1 ID : 264330527627

Option 2 ID : 264330527630

Option 3 ID : 264330527628

Option 4 ID : 264330527629

Status : Not Answered

Chosen Option : --

Q.11 In February 2022, Cabinet approved implementation of Ayushman Bharat Digital Mission. Which ministry of central government launched the Ayushman Bharat Yojana across the country?

- Ans
- ☒ 1. Ministry of Education
 - ☒ 2. Ministry of Ayush
 - ☒ 3. Ministry of Health and Family Welfare
 - ☒ 4. Ministry of Women and Child Development

Question Type : MCQ

Question ID : 264330134669

Option 1 ID : 264330527632

Option 2 ID : 264330527634

Option 3 ID : 264330527633

Option 4 ID : 264330527631

Status : Answered

Chosen Option : 2

Q.12 Who is the supreme commander of the defence forces of India?

- Ans
- ☒ 1. Chief of Army Staff
 - ☒ 2. President of India
 - ☒ 3. Chief Justice of India
 - ☒ 4. Prime minister of India

Question Type : MCQ

Question ID : 264330138907

Option 1 ID : 264330544238

Option 2 ID : 264330544236

Option 3 ID : 264330544235

Option 4 ID : 264330544237

Status : Answered

Chosen Option : 2

Q.13 The split in Indian National Congress occurred in _____.

- Ans
- ☒ 1. 1901
 - ☒ 2. 1905
 - ☒ 3. 1903
 - ☒ 4. 1907

Question Type : MCQ
 Question ID : 264330138345
 Option 1 ID : 264330541987
 Option 2 ID : 264330541989
 Option 3 ID : 264330541988
 Option 4 ID : 264330541990
 Status : Answered
 Chosen Option : 4

Q.14 Which among the following is an example of Angiosperm in Plant Kingdom?

- Ans
- ☒ 1. Pinus
 - ☒ 2. Chara
 - ☒ 3. Tomato
 - ☒ 4. Funaria

Question Type : MCQ
 Question ID : 264330135491
 Option 1 ID : 264330530871
 Option 2 ID : 264330530872
 Option 3 ID : 264330530874
 Option 4 ID : 264330530873
 Status : Not Answered
 Chosen Option : --

Q.15 When volcano erupts on Earth, the erupted material is typically a liquid rock known as _____.

- Ans
- ☒ 1. Plasma
 - ☒ 2. Lava
 - ☒ 3. Hailstone
 - ☒ 4. Mercury

Question Type : MCQ
 Question ID : 264330135492
 Option 1 ID : 264330530876
 Option 2 ID : 264330530877
 Option 3 ID : 264330530875
 Option 4 ID : 264330530878
 Status : Answered
 Chosen Option : 2

Q.16 Four ashrams were recognised by Brahmins around the time when Jainism and Buddhism were becoming popular. Which of the following was NOT a recognised ashrama?

- Ans ☒ 1. Parmarth
☒ 2. Vanaprastha
☒ 3. Brahmacharya
☒ 4. Grihastha

Question Type : MCQ

Question ID : 264330138342

Option 1 ID : 264330541977

Option 2 ID : 264330541978

Option 3 ID : 264330541975

Option 4 ID : 264330541976

Status : Answered

Chosen Option : 1

Q.17 The Centre scrapped Article 370 of the Constitution in 2019. This article granted special status to _____.

- Ans ☒ 1. Uttar Pradesh
☒ 2. Punjab
☒ 3. Himachal Pradesh
☒ 4. Jammu and Kashmir

Question Type : MCQ

Question ID : 264330134690

Option 1 ID : 264330527717

Option 2 ID : 264330527718

Option 3 ID : 264330527716

Option 4 ID : 264330527715

Status : Answered

Chosen Option : 4

Q.18 Who among the following was awarded with 'Padma Vibhushan' in the year 1986 and choreographed famous song 'Kahe Chhed Mohe' from the movie Devdas and 'Mohe Rang Do Laal' from Bajirao Mastani?

- Ans ☒ 1. Birju Maharaj
☒ 2. Uday Shankar
☒ 3. Bipin Singh
☒ 4. Kelucharan Mohapatra

Question Type : MCQ

Question ID : 264330134663

Option 1 ID : 264330527607

Option 2 ID : 264330527608

Option 3 ID : 264330527610

Option 4 ID : 264330527609

Status : Answered

Chosen Option : 1

Q.19 India has celebrated 76th Independence day in which year?

- Ans
- ☒ 1. 2021
 - ☒ 2. 2022
 - ☒ 3. 2018
 - ☒ 4. 2019

Question Type : MCQ
Question ID : 264330138322
Option 1 ID : 264330541896
Option 2 ID : 264330541895
Option 3 ID : 264330541898
Option 4 ID : 264330541897
Status : Answered
Chosen Option : 2

Q.20 Which of the following is a traditional folk dance of Rajasthan?

- Ans
- ☒ 1. Giddha
 - ☒ 2. Ghoomar
 - ☒ 3. Bhangra
 - ☒ 4. Bihu

Question Type : MCQ
Question ID : 264330134671
Option 1 ID : 264330527639
Option 2 ID : 264330527641
Option 3 ID : 264330527640
Option 4 ID : 264330527642
Status : Answered
Chosen Option : 2

Q.21 Ustad Zakir Hussain is one of the greatest exponents of _____.

- Ans
- ☒ 1. Sitar
 - ☒ 2. Tabla
 - ☒ 3. Violin
 - ☒ 4. Shehnai

Question Type : MCQ
Question ID : 264330134687
Option 1 ID : 264330527705
Option 2 ID : 264330527706
Option 3 ID : 264330527704
Option 4 ID : 264330527703
Status : Answered
Chosen Option : 2

Q.22 According to 2011 Census, what is the population density of India?

- Ans
- ☒ 1. 356 persons per square kilometre
 - ☒ 2. 382 persons per square kilometre
 - ☒ 3. 495 persons per square kilometre
 - ☒ 4. 482 persons per square kilometre

Question Type : MCQ
 Question ID : 264330137930
 Option 1 ID : 264330540329
 Option 2 ID : 264330540327
 Option 3 ID : 264330540328
 Option 4 ID : 264330540330
 Status : Answered
 Chosen Option : 2

Q.23 The Third Battle of Panipat took place in _____.

- Ans
- ☒ 1. 1754
 - ☒ 2. 1765
 - ☒ 3. 1757
 - ☒ 4. 1761

Question Type : MCQ
 Question ID : 264330135498
 Option 1 ID : 264330530902
 Option 2 ID : 264330530901
 Option 3 ID : 264330530900
 Option 4 ID : 264330530899
 Status : Answered
 Chosen Option : 4

Q.24 Olympic Winter Games Beijing 2022 took place in _____.

- Ans
- ☒ 1. February
 - ☒ 2. January
 - ☒ 3. March
 - ☒ 4. April

Question Type : MCQ
 Question ID : 264330135507
 Option 1 ID : 264330530936
 Option 2 ID : 264330530935
 Option 3 ID : 264330530937
 Option 4 ID : 264330530938
 Status : Answered
 Chosen Option : 1

Q.25 As per census 2011, what is the position of Maharashtra with respect to the total population in India?

- Ans
- ☒ 1. Third
 - ☒ 2. Fourth
 - ☒ 3. First
 - ☒ 4. Second

Question Type : MCQ
Question ID : 264330135495
Option 1 ID : 264330530889
Option 2 ID : 264330530890
Option 3 ID : 264330530887
Option 4 ID : 264330530888
Status : Answered
Chosen Option : 4

Section : English Language and Comprehension

Q.1 Select the appropriate antonym for the underlined word.

We will brush out the damp hair.

- Ans
- ☒ 1. droughty
 - ☒ 2. saturated
 - ☒ 3. sticky
 - ☒ 4. moist

Question Type : MCQ
Question ID : 264330134816
Option 1 ID : 264330528205
Option 2 ID : 264330528206
Option 3 ID : 264330528203
Option 4 ID : 264330528204
Status : Answered
Chosen Option : 1

Q.2 A sentence has been given with a blank to be filled with an appropriate option. Choose the correct alternative.

I did not _____ everyone all at once.

- Ans
- ☒ 1. losing
 - ☒ 2. lose
 - ☒ 3. loose
 - ☒ 4. lost

Question Type : MCQ
Question ID : 264330134803
Option 1 ID : 264330528158
Option 2 ID : 264330528155
Option 3 ID : 264330528157
Option 4 ID : 264330528156
Status : Answered
Chosen Option : 2

Q.3 Find the part of the given sentence that has an error in it. If there is no error, choose 'No error'.

We don't know exactly when first stars formed.

- Ans**
- ☒ 1. No error
 - ☒ 2. We don't know
 - ☒ 3. stars formed.
 - ☒ 4. exactly when first

Question Type : **MCQ**
 Question ID : **264330135309**
 Option 1 ID : **264330530150**
 Option 2 ID : **264330530147**
 Option 3 ID : **264330530149**
 Option 4 ID : **264330530148**
 Status : **Answered**
 Chosen Option : **4**

Q.4 Select the most appropriate option to substitute the bracketed segment in the given sentence. If there is no need to substitute it, select 'no substitution required'.

We were asked by (Jane's aunt where she was last night.)

- Ans**
- ☒ 1. No substitution required
 - ☒ 2. Jane aunt's where she was last night?
 - ☒ 3. Jane's aunt where was she last night.
 - ☒ 4. Jane's aunt where was she was last night?

Question Type : **MCQ**
 Question ID : **264330136294**
 Option 1 ID : **264330533958**
 Option 2 ID : **264330533956**
 Option 3 ID : **264330533955**
 Option 4 ID : **264330533957**
 Status : **Answered**
 Chosen Option : **1**

Q.5 Select the most appropriate synonym to substitute the bracketed word in the given sentence.
 So can our community leaders come up with a plan of action to help (alleviate) this problem?

- Ans**
- ☒ 1. Falter
 - ☒ 2. Diminish
 - ☒ 3. Altruistic
 - ☒ 4. Aggravate

Question Type : **MCQ**
 Question ID : **264330136734**
 Option 1 ID : **264330535644**
 Option 2 ID : **264330535645**
 Option 3 ID : **264330535643**
 Option 4 ID : **264330535646**
 Status : **Answered**
 Chosen Option : **2**

Q.6 Improve the underlined part of the sentence. Choose 'No improvement' as an answer if the sentence is grammatically correct.

This has sharp decreased the cases of water-borne diseases.

- Ans**
- ☒ 1. sharp decrease
 - ☒ 2. sharply decreased
 - ☒ 3. sharper decreases
 - ☒ 4. No improvement

Question Type : MCQ
Question ID : 264330134828
Option 1 ID : 264330528251
Option 2 ID : 264330528252
Option 3 ID : 264330528253
Option 4 ID : 264330528254
Status : Answered
Chosen Option : 2

Q.7 Four sentences are given, out of which three have spelling errors. Choose the sentence with all correctly spelt words.

- Ans**
- ☒ 1. The person who received the alert doesn't know when it happened.
 - ☒ 2. Never interrupt an earnest or apparently interesting conversation.
 - ☒ 3. Life is complicated, and there's a lot to be grateful for.
 - ☒ 4. The goal of this endeavor is to create significant ties for your city.

Question Type : MCQ
Question ID : 264330136714
Option 1 ID : 264330535568
Option 2 ID : 264330535567
Option 3 ID : 264330535570
Option 4 ID : 264330535569
Status : Answered
Chosen Option : 1

Q.8 Find the part of the given sentence that has an error in it. If there is no error, choose 'No error'.

Until few decades ago, researchers believed the moon was completely dry.

- Ans**
- ☒ 1. No error
 - ☒ 2. Until few decades ago,
 - ☒ 3. researchers believed the moon
 - ☒ 4. was completely dry.

Question Type : MCQ
Question ID : 264330134799
Option 1 ID : 264330528142
Option 2 ID : 264330528139
Option 3 ID : 264330528140
Option 4 ID : 264330528141
Status : Answered
Chosen Option : 2

Q.9 Select the most appropriate option to fill in the blank.

Some health experts optimistically argue that disinfecting indoor spaces with light could be a _____.

- Ans
- ☐ 1. roundabout
 - ☐ 2. hand over
 - ☒ 3. game-changer
 - ☐ 4. interchanger

Question Type : MCQ

Question ID : 264330134822

Option 1 ID : 264330528227

Option 2 ID : 264330528229

Option 3 ID : 264330528230

Option 4 ID : 264330528228

Status : Answered

Chosen Option : 3

Q.10 In the following question, out of the given four alternatives, select the alternative which best expresses the meaning of the Idiom/Phrase.

Hard/tough nut to crack

- Ans
- ☐ 1. To understand clearly
 - ☐ 2. Not being able to enjoy oneself
 - ☒ 3. A difficult person, problem or situation
 - ☐ 4. Good for nothing

Question Type : MCQ

Question ID : 264330134818

Option 1 ID : 264330528214

Option 2 ID : 264330528213

Option 3 ID : 264330528211

Option 4 ID : 264330528212

Status : Answered

Chosen Option : 3

Q.11 Identify the segment that contains a grammatical error. If there is no error, select 'No error'

Droughts effect water supply in Southern/ Spain, which is increasingly turning towards/ seawater desalination to meet its water needs.

- Ans
- ☐ 1. seawater desalination to meet its water needs.
 - ☐ 2. No error
 - ☐ 3. Spain, which is increasingly turning towards
 - ☒ 4. Droughts effect water supply in Southern

Question Type : MCQ

Question ID : 264330136291

Option 1 ID : 264330533945

Option 2 ID : 264330533946

Option 3 ID : 264330533944

Option 4 ID : 264330533943

Status : Answered

Chosen Option : 3

Q.12 Choose the word that can substitute the given group of words.

A ground where the last funeral rites are performed

- Ans
- ☒ 1. Tomb
 - ☒ 2. Crematorium
 - ☒ 3. Barracks
 - ☒ 4. Mortuary

Question Type : MCQ
Question ID : 264330135270
Option 1 ID : 264330529998
Option 2 ID : 264330529997
Option 3 ID : 264330529995
Option 4 ID : 264330529996
Status : Answered
Chosen Option : 2

Q.13 In the following question, out of the given four alternatives, select the alternative which best expresses the meaning of the Idiom/Phrase.

To mind one's P's and Q's

- Ans
- ☒ 1. To write English alphabets accurately
 - ☒ 2. To supervise something carefully
 - ☒ 3. To be polite and careful in one's behaviour and speech
 - ☒ 4. To make amends after a fight

Question Type : MCQ
Question ID : 264330135276
Option 1 ID : 264330530020
Option 2 ID : 264330530022
Option 3 ID : 264330530021
Option 4 ID : 264330530019
Status : Answered
Chosen Option : 2

Q.14 Select the appropriate synonym for the underlined word.

Photosynthesis can be hindered by extreme temperatures.

- Ans
- ☒ 1. revert
 - ☒ 2. discouraged
 - ☒ 3. gained
 - ☒ 4. tolerated

Question Type : MCQ
Question ID : 264330134813
Option 1 ID : 264330528193
Option 2 ID : 264330528192
Option 3 ID : 264330528191
Option 4 ID : 264330528194
Status : Answered
Chosen Option : 2

Q.15 Choose the incorrectly spelt word.

- Ans ☒ 1. Continue
☒ 2. Positon
☒ 3. Source
☒ 4. Serious

Question Type : MCQ
Question ID : 264330134819
Option 1 ID : 264330528218
Option 2 ID : 264330528216
Option 3 ID : 264330528217
Option 4 ID : 264330528215
Status : Answered
Chosen Option : 2

Q.16 Fill in the blank with the most appropriate option.

Then Bheeshma entered their lives with his _____ lion's laugh.

- Ans ☒ 1. narrow
☒ 2. large
☒ 3. moment
☒ 4. elephantine

Question Type : MCQ
Question ID : 264330136715
Option 1 ID : 264330535571
Option 2 ID : 264330535572
Option 3 ID : 264330535573
Option 4 ID : 264330535574
Status : Answered
Chosen Option : 2

Q.17 Choose the word that is opposite in meaning to the given word.

Absorb

- Ans ☒ 1. Permit
☒ 2. Reconcile
☒ 3. Dwindle
☒ 4. Dismiss

Question Type : MCQ
Question ID : 264330136865
Option 1 ID : 264330536147
Option 2 ID : 264330536148
Option 3 ID : 264330536150
Option 4 ID : 264330536149
Status : Answered
Chosen Option : 4

Q.18 A sentence has been given with a blank to be filled with an appropriate option. Choose the correct alternative.
Nigeria _____ restrictions in place since 2015 in a bid to boost local production.

- Ans**
- ☒ 1. have had
 - ☒ 2. has had
 - ☒ 3. have has
 - ☒ 4. had has

Question Type : **MCQ**
Question ID : **264330136776**
Option 1 ID : **264330535807**
Option 2 ID : **264330535809**
Option 3 ID : **264330535810**
Option 4 ID : **264330535808**
Status : **Answered**
Chosen Option : **2**

Q.19 Choose the word that can substitute the given group of words.

Liabile to catch fire easily

- Ans**
- ☒ 1. Incombustible
 - ☒ 2. Agnostic
 - ☒ 3. Venial
 - ☒ 4. Inflammable

Question Type : **MCQ**
Question ID : **264330134812**
Option 1 ID : **264330528189**
Option 2 ID : **264330528187**
Option 3 ID : **264330528190**
Option 4 ID : **264330528188**
Status : **Answered**
Chosen Option : **4**

Q.20 Improve the underlined part of the sentence. Choose 'No improvement' as an answer if the sentence is grammatically correct.
The loft is fill in hay for the winter.

- Ans**
- ☒ 1. filled with
 - ☒ 2. fill with
 - ☒ 3. No improvement
 - ☒ 4. fills with

Question Type : **MCQ**
Question ID : **264330134454**
Option 1 ID : **264330526788**
Option 2 ID : **264330526787**
Option 3 ID : **264330526790**
Option 4 ID : **264330526789**
Status : **Answered**
Chosen Option : **1**

Comprehension:

In the following passage some of the words have been deleted. Read the passage carefully and select the correct answer for the given blank out of the four alternatives.

Gardenia is one of the most (1) _____ flowers, producing one of the most beloved scents in the garden world. Fall or spring is the best time to (2) _____ this shrub in warmer climates. It also (3) _____ a fragrant houseplant, though it can be fussy about indoor humidity. Container plants can be (4) _____ outdoors during summer and returned to moderate indoor temperatures in the (5) _____.

SubQuestion No : 21

Q.21 Select the most appropriate option to fill in the blank No. 1.

- Ans
- ☒ 1. fragrant
 - ☐ 2. stenchy
 - ☐ 3. polluted
 - ☐ 4. soluble

Question Type : MCQ

Question ID : 264330136856

Option 1 ID : 264330536113

Option 2 ID : 264330536111

Option 3 ID : 264330536114

Option 4 ID : 264330536112

Status : Answered

Chosen Option : 1

Comprehension:

In the following passage some of the words have been deleted. Read the passage carefully and select the correct answer for the given blank out of the four alternatives.

Gardenia is one of the most (1) _____ flowers, producing one of the most beloved scents in the garden world. Fall or spring is the best time to (2) _____ this shrub in warmer climates. It also (3) _____ a fragrant houseplant, though it can be fussy about indoor humidity. Container plants can be (4) _____ outdoors during summer and returned to moderate indoor temperatures in the (5) _____.

SubQuestion No : 22

Q.22 Select the most appropriate option to fill in the blank No. 2.

- Ans
- ☐ 1. host
 - ☒ 2. plant
 - ☐ 3. stamp
 - ☐ 4. train

Question Type : MCQ

Question ID : 264330136857

Option 1 ID : 264330536116

Option 2 ID : 264330536118

Option 3 ID : 264330536117

Option 4 ID : 264330536115

Status : Answered

Chosen Option : 2

Comprehension:

In the following passage some of the words have been deleted. Read the passage carefully and select the correct answer for the given blank out of the four alternatives.

Gardenia is one of the most (1) _____ flowers, producing one of the most beloved scents in the garden world. Fall or spring is the best time to (2) _____ this shrub in warmer climates. It also (3) _____ a fragrant houseplant, though it can be fussy about indoor humidity. Container plants can be (4) _____ outdoors during summer and returned to moderate indoor temperatures in the (5) _____.

SubQuestion No : 23

Q.23 Select the most appropriate option to fill in the blank No. 3.

- Ans
- ☒ 1. make
 - ☒ 2. makes
 - ☒ 3. making
 - ☒ 4. made

Question Type : MCQ

Question ID : 264330136858

Option 1 ID : 264330536119

Option 2 ID : 264330536122

Option 3 ID : 264330536121

Option 4 ID : 264330536120

Status : Answered

Chosen Option : 2

Comprehension:

In the following passage some of the words have been deleted. Read the passage carefully and select the correct answer for the given blank out of the four alternatives.

Gardenia is one of the most (1) _____ flowers, producing one of the most beloved scents in the garden world. Fall or spring is the best time to (2) _____ this shrub in warmer climates. It also (3) _____ a fragrant houseplant, though it can be fussy about indoor humidity. Container plants can be (4) _____ outdoors during summer and returned to moderate indoor temperatures in the (5) _____.

SubQuestion No : 24

Q.24 Select the most appropriate option to fill in the blank No. 4.

- Ans
- ☒ 1. sailed
 - ☒ 2. sorted
 - ☒ 3. classified
 - ☒ 4. placed

Question Type : MCQ

Question ID : 264330136859

Option 1 ID : 264330536123

Option 2 ID : 264330536125

Option 3 ID : 264330536126

Option 4 ID : 264330536124

Status : Answered

Chosen Option : 4

Comprehension:

In the following passage some of the words have been deleted. Read the passage carefully and select the correct answer for the given blank out of the four alternatives.

Gardenia is one of the most (1) _____ flowers, producing one of the most beloved scents in the garden world. Fall or spring is the best time to (2) _____ this shrub in warmer climates. It also (3) _____ a fragrant houseplant, though it can be fussy about indoor humidity. Container plants can be (4) _____ outdoors during summer and returned to moderate indoor temperatures in the (5) _____.

SubQuestion No : 25

Q.25 Select the most appropriate option to fill in the blank No. 5.

- Ans
- ☒ 1. fall
 - ☐ 2. arena
 - ☐ 3. tropics
 - ☐ 4. climate

Question Type : MCQ

Question ID : 264330136860

Option 1 ID : 264330536130

Option 2 ID : 264330536129

Option 3 ID : 264330536127

Option 4 ID : 264330536128

Status : Answered

Chosen Option : 1

