

Multi Tasking Non Technical Staff and Havaldar CBIC and CBN Examination 2022

Roll Number	
Candidate Name	
Venue Name	Examit Infotech Pvt Ltd
Exam Date	18/05/2023
Exam Time	9:00 AM - 10:30 AM
Subject	MTS Non Tech Havaldar CBIC and CBN Examination 2022

Section : Numerical and Mathematical Ability

Q.1 The longest side of the obtuse triangle is 7 cm and the other two sides of the triangle are 4 cm and 5 cm. Find the area of the triangle.

- Ans**
- ☒ 1. $1\sqrt{3} \text{ cm}^2$
 - ☒ 2. $6\sqrt{3} \text{ cm}^2$
 - ☒ 3. $3\sqrt{2} \text{ cm}^2$
 - ☒ 4. $4\sqrt{6} \text{ cm}^2$

Question Type : **MCQ**
 Question ID : **264330135409**
 Option 1 ID : **264330530546**
 Option 2 ID : **264330530544**
 Option 3 ID : **264330530545**
 Option 4 ID : **264330530543**
 Status : **Answered**
 Chosen Option : **4**

Q.2 What is the value of $2[3.5 \times 3.5 + 2.5 \times 2.5]$?

- Ans**
- ☒ 1. 39
 - ☒ 2. 37
 - ☒ 3. 38
 - ☒ 4. 36

Question Type : **MCQ**
 Question ID : **264330137891**
 Option 1 ID : **264330540174**
 Option 2 ID : **264330540172**
 Option 3 ID : **264330540173**
 Option 4 ID : **264330540171**
 Status : **Answered**
 Chosen Option : **2**

Test Prime

**ALL EXAMS,
ONE SUBSCRIPTION**



70,000+
Mock Tests



**Personalised
Report Card**



**Unlimited
Re-Attempt**



600+
Exam Covered



**Previous Year
Papers**



**500%
Refund**



ATTEMPT FREE MOCK NOW

Q.3 What is the third proportion of the numbers 15 and 30?

- Ans
- ☐ 1. 45
 - ☐ 2. 50
 - ☐ 3. 40
 - ☒ 4. 60

Question Type : MCQ

Question ID : 264330133785

Option 1 ID : 264330524165

Option 2 ID : 264330524164

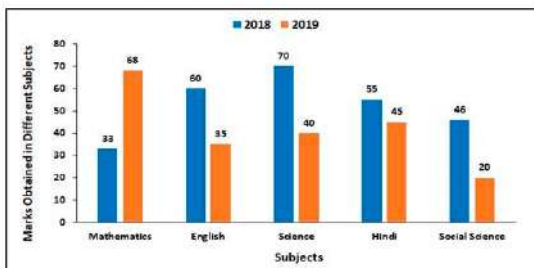
Option 3 ID : 264330524163

Option 4 ID : 264330524166

Status : Answered

Chosen Option : 4

Q.4 The following bar graph shows the marks of a student from 5 different subjects in 2018 and 2019. Find the ratio of total marks of 2018 to the total marks of 2019.



- Ans
- ☐ 1. 66 : 23
 - ☐ 2. 80 : 3
 - ☐ 3. 44 : 15
 - ☒ 4. 33 : 26

Question Type : MCQ

Question ID : 264330133792

Option 1 ID : 264330524193

Option 2 ID : 264330524194

Option 3 ID : 264330524192

Option 4 ID : 264330524191

Status : Answered

Chosen Option : 4

Q.5 X alone can finish a work in 18 days, Y alone can finish the same work in 9 days. If X, Y and Z together can finish the same work in 4 days, then in how many days Z alone can finish the work?

- Ans
- ☒ 1. 12 days
 - ☐ 2. 10 days
 - ☐ 3. 14 days
 - ☐ 4. 16 days

Question Type : MCQ

Question ID : 264330138740

Option 1 ID : 264330543568

Option 2 ID : 264330543567

Option 3 ID : 264330543569

Option 4 ID : 264330543570

Status : Answered

Chosen Option : 1

Q.6 The value of $14 + [100 \div \{60 \div (18 \div 6)\}]$ of 400 is :

- Ans ☒ 1. 2020
☒ 2. 2014
☒ 3. 2015
☒ 4. 2000

Question Type : MCQ

Question ID : 264330133776

Option 1 ID : 264330524130

Option 2 ID : 264330524128

Option 3 ID : 264330524129

Option 4 ID : 264330524127

Status : Answered

Chosen Option : 2

Q.7 A purchased two articles for Rs 400 and Rs.600 respectively and sold at gains of 10% and 20% respectively. What was his overall gain percentage?

- Ans ☒ 1. 16%
☒ 2. 20%
☒ 3. 18%
☒ 4. 15%

Question Type : MCQ

Question ID : 264330133782

Option 1 ID : 264330524152

Option 2 ID : 264330524154

Option 3 ID : 264330524153

Option 4 ID : 264330524151

Status : Answered

Chosen Option : 1

Q.8 In a field 8 workers complete a task in 22 days. If this task is to be completed in 44 days, then how many workers will be required?

- Ans ☒ 1. 3
☒ 2. 5
☒ 3. 2
☒ 4. 4

Question Type : MCQ

Question ID : 264330135405

Option 1 ID : 264330530527

Option 2 ID : 264330530529

Option 3 ID : 264330530530

Option 4 ID : 264330530528

Status : Answered

Chosen Option : 4

Q.9 The product of LCM and HCF of two numbers is 2028. If one number is 78, then what is the other number?

- Ans**
- ☒ 1. 13
 - ☒ 2. 52
 - ☒ 3. 26
 - ☒ 4. 39

Question Type : **MCQ**
 Question ID : **264330138348**
 Option 1 ID : **264330541999**
 Option 2 ID : **264330542002**
 Option 3 ID : **264330542000**
 Option 4 ID : **264330542001**
 Status : **Answered**
 Chosen Option : **3**

Q.10 A sum of Rs.7500 amounts to Rs.15000 in two years at compound interest calculated annually. How much will Rs.7500 becomes in four years?

- Ans**
- ☒ 1. Rs.60000
 - ☒ 2. Rs.30000
 - ☒ 3. Rs.50000
 - ☒ 4. Rs.45000

Question Type : **MCQ**
 Question ID : **264330133787**
 Option 1 ID : **264330524173**
 Option 2 ID : **264330524171**
 Option 3 ID : **264330524174**
 Option 4 ID : **264330524172**
 Status : **Answered**
 Chosen Option : **4**

Q.11 An article was sold at a loss of 14%. If it was sold for Rs. 756 more, then there would have been a gain of 7%. Find the cost price of the article.

- Ans**
- ☒ 1. Rs. 3600
 - ☒ 2. Rs. 2300
 - ☒ 3. Rs. 5000
 - ☒ 4. Rs. 3000

Question Type : **MCQ**
 Question ID : **264330135375**
 Option 1 ID : **264330530407**
 Option 2 ID : **264330530408**
 Option 3 ID : **264330530409**
 Option 4 ID : **264330530410**
 Status : **Answered**
 Chosen Option : **1**

Q.12 2 cubes each of volumes 125 cm^3 are joined end to end. The surface area of the resulting cuboid is:

- Ans**
- ☒ 1. 325 cm^2
 - ☒ 2. 350 cm^2
 - ☒ 3. 125 cm^2
 - ☒ 4. 250 cm^2

Question Type : **MCQ**

Question ID : **264330138745**

Option 1 ID : **264330543589**

Option 2 ID : **264330543590**

Option 3 ID : **264330543587**

Option 4 ID : **264330543588**

Status : **Answered**

Chosen Option : **4**

Q.13 An auto rickshaw travels 20 km from point P to Q then 25 km from Q to R. The total time took was 1 hour 30 minutes. What was the average speed of the auto rickshaw?

- Ans**
- ☒ 1. 15 km/hr
 - ☒ 2. 30 km/hr
 - ☒ 3. 45 km/hr
 - ☒ 4. 60 km/hr

Question Type : **MCQ**

Question ID : **264330138729**

Option 1 ID : **264330543525**

Option 2 ID : **264330543523**

Option 3 ID : **264330543524**

Option 4 ID : **264330543526**

Status : **Answered**

Chosen Option : **2**

Q.14 If the salary of A is 60% less than that of B, then by how much percent is the salary of B more than that of A?

- Ans**
- ☒ 1. 60%
 - ☒ 2. 40%
 - ☒ 3. 150%
 - ☒ 4. 120%

Question Type : **MCQ**

Question ID : **264330133780**

Option 1 ID : **264330524145**

Option 2 ID : **264330524144**

Option 3 ID : **264330524146**

Option 4 ID : **264330524143**

Status : **Answered**

Chosen Option : **3**

Q.15 A sum of Rs. 11064 gives an interest of Rs. 2766 in x years at 5% per annum simple interest. What will be the value of x?

- Ans**
- ☒ 1. 3
 - ☒ 2. 2
 - ☒ 3. 4
 - ☒ 4. 5

Question Type : **MCQ**

Question ID : **264330138402**

Option 1 ID : **264330542216**

Option 2 ID : **264330542217**

Option 3 ID : **264330542215**

Option 4 ID : **264330542218**

Status : **Answered**

Chosen Option : **4**

Q.16 If the cost price of a refrigerator is Rs. 17200 and the loss percentage is 8%, then what is the selling price (in Rs.) of the refrigerator?

- Ans**
- ☒ 1. Rs.15824
 - ☒ 2. Rs.14564
 - ☒ 3. Rs.14444
 - ☒ 4. Rs.15500

Question Type : **MCQ**

Question ID : **264330133783**

Option 1 ID : **264330524157**

Option 2 ID : **264330524158**

Option 3 ID : **264330524155**

Option 4 ID : **264330524156**

Status : **Answered**

Chosen Option : **1**

Q.17 The table given below shows the production of television and fridge by different companies.

Companies	Television	Fridge
P	80	100
Q	70	50
R	60	40
S	50	70
T	90	55

Which of the following statement is NOT correct?

I. The difference between average production of television and fridge by R and the average production of television and fridge by S are 10.

II. The production of television and fridge by P is 20 percent of the production of television by T.

- Ans**
- ☒ 1. Both I and II
 - ☒ 2. Neither I nor II
 - ☒ 3. Only I
 - ☒ 4. Only II

Question Type : **MCQ**
 Question ID : **264330137892**
 Option 1 ID : **264330540177**
 Option 2 ID : **264330540178**
 Option 3 ID : **264330540175**
 Option 4 ID : **264330540176**
 Status : **Answered**
 Chosen Option : **1**

Q.18 The speed of a bus is 108 km/hr. Find the distance covered by the bus in 2 seconds.

- Ans**
- ☒ 1. 16 m
 - ☒ 2. 30 m
 - ☒ 3. 20 m
 - ☒ 4. 60 m

Question Type : **MCQ**
 Question ID : **264330133788**
 Option 1 ID : **264330524176**
 Option 2 ID : **264330524175**
 Option 3 ID : **264330524178**
 Option 4 ID : **264330524177**
 Status : **Answered**
 Chosen Option : **4**

Q.19 Three numbers are in the ratio 4 : 5 : 7. The sum of the smallest and largest numbers is 44. What is the second smallest number?

- Ans**
- ☒ 1. 28
 - ☒ 2. 32
 - ☒ 3. 20
 - ☒ 4. 24

Question Type : **MCQ**
 Question ID : **264330133784**
 Option 1 ID : **264330524162**
 Option 2 ID : **264330524160**
 Option 3 ID : **264330524159**
 Option 4 ID : **264330524161**
 Status : **Answered**
 Chosen Option : **3**

Q.20 A student scored 77, 80, 88, 73 and 62 marks out of 100 in five subjects. What are his average marks?

- Ans**
- ☒ 1. 74
 - ☒ 2. 76
 - ☒ 3. 75
 - ☒ 4. 78

Question Type : **MCQ**
 Question ID : **264330133778**
 Option 1 ID : **264330524135**
 Option 2 ID : **264330524137**
 Option 3 ID : **264330524138**
 Option 4 ID : **264330524136**
 Status : **Answered**
 Chosen Option : **2**

Section : Reasoning Ability and Problem Solving

Q.1 Which of the following letter cluster will replace the question mark (?) in the given series?
 ND, KA, HX, EU, ?

- Ans**
- ☒ 1. AR
 - ☒ 2. BS
 - ☒ 3. BT
 - ☒ 4. BR

Question Type : **MCQ**
 Question ID : **264330133486**
 Option 1 ID : **264330522977**
 Option 2 ID : **264330522975**
 Option 3 ID : **264330522978**
 Option 4 ID : **264330522976**
 Status : **Answered**
 Chosen Option : **4**

Q.2 Five girls Anita, Babita, Chamma, Daina and Erica are of different ages, Anita is younger than only Daina and Erica. Erica is younger to Daina. Chamma is youngest. Who is the fourth oldest?

- Ans**
- ☒ 1. Daina
 - ☒ 2. Erica
 - ☒ 3. Chamma
 - ☒ 4. Babita

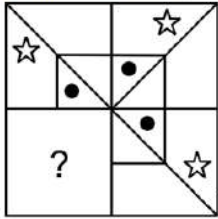
Question Type : **MCQ**
 Question ID : **264330133494**
 Option 1 ID : **264330523010**
 Option 2 ID : **264330523008**
 Option 3 ID : **264330523009**
 Option 4 ID : **264330523007**
 Status : **Answered**
 Chosen Option : **4**

Q.3 In a certain code language, 'NATURE' is written as 'MASUQE'. How will 'POTATO' be written in that language?

- Ans**
- ☒ 1. OOSASO
 - ☒ 2. OPSAOS
 - ☒ 3. OSPAOS
 - ☒ 4. OSSASO

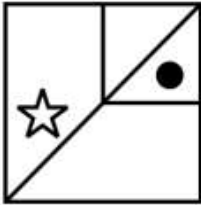
Question Type : **MCQ**
 Question ID : **264330137541**
 Option 1 ID : **264330538774**
 Option 2 ID : **264330538772**
 Option 3 ID : **264330538771**
 Option 4 ID : **264330538773**
 Status : **Answered**
 Chosen Option : **1**

Q.4 Select the option figure that will replace the question mark (?) in the figure given below to complete the pattern.
(rotation is not allowed)

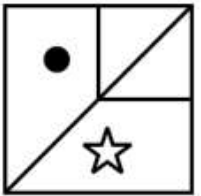


Ans

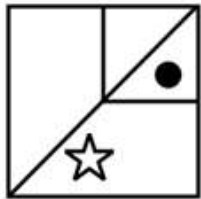
✗ 1.



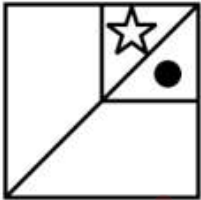
✗ 2.



✓ 3.



✗ 4.



Question Type : MCQ

Question ID : 264330133505

Option 1 ID : 264330523052

Option 2 ID : 264330523051

Option 3 ID : 264330523053

Option 4 ID : 264330523054

Status : Answered

Chosen Option : 3

Q.5 Five friends Alpha, Beta, Gamma, Rho and Theta are arranged in a row facing north but not necessarily in the same order. Beta sits at left end of the row. Only two people are sitting between Alpha and Gamma. Alpha sits immediate next to the Beta and Rho sits second to the right of Beta. Who sits between Rho and Gamma?

- Ans
- ☒ 1. Alpha
 - ☒ 2. Theta
 - ☒ 3. Beta
 - ☒ 4. No one

Question Type : MCQ

Question ID : 264330133492

Option 1 ID : 264330523002

Option 2 ID : 264330523001

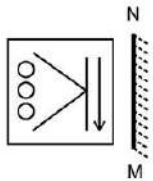
Option 3 ID : 264330522999

Option 4 ID : 264330523000

Status : Answered

Chosen Option : 2

Q.6 Select the correct mirror image of the given figure when the mirror MN is placed to the right side of the figure.



Ans

- ☒ 1.
- ☒ 2.
- ☒ 3.
- ☒ 4.

Question Type : MCQ

Question ID : 264330137806

Option 1 ID : 264330539834

Option 2 ID : 264330539833

Option 3 ID : 264330539831

Option 4 ID : 264330539832

Status : Answered

Chosen Option : 1

Q.7 By Interchanging the given two numbers which of the following equation will be not correct?

9 and 3

I. $7 \times 4 + 2 - 9 + 3 = 22$

II. $9 + 4 - 6 \times 3 + 2 = -10$

Ans

- ☒ 1. Only I
- ☒ 2. Both I and II
- ☒ 3. Only II
- ☒ 4. Neither I nor II

Question Type : **MCQ**

Question ID : **264330138515**

Option 1 ID : **264330542667**

Option 2 ID : **264330542669**

Option 3 ID : **264330542668**

Option 4 ID : **264330542670**

Status : **Answered**

Chosen Option : **2**

Q.8 Two Statements are given followed by two conclusions numbered I and II. Assuming the statements to be true, even if they seem to be at variance with commonly known facts, decide which of the conclusions logically follow(s) from the statements.

Statements:

No astronaut is tall.

Some tall are blue.

Conclusions:

I. Some astronauts are blue.

II. No tall is an astronaut.

Ans

- ☒ 1. Only conclusion I follows.
- ☒ 2. Both conclusions I and II follow.
- ☒ 3. Neither conclusion I nor II follow.
- ☒ 4. Only conclusion II follows.

Question Type : **MCQ**

Question ID : **264330133495**

Option 1 ID : **264330523011**

Option 2 ID : **264330523013**

Option 3 ID : **264330523014**

Option 4 ID : **264330523012**

Status : **Answered**

Chosen Option : **4**

Q.9 Which of the following numbers will replace the question mark (?) in the given series?

46, 36, 28, 22, 18, ?

Ans ☒ 1. 16

☒ 2. 14

☒ 3. 15

☒ 4. 13

Question Type : **MCQ**

Question ID : **264330133497**

Option 1 ID : **264330523019**

Option 2 ID : **264330523022**

Option 3 ID : **264330523020**

Option 4 ID : **264330523021**

Status : **Answered**

Chosen Option : 1

Q.10 In a certain code language, 'TYPE' is written as 'SXOD'. How will 'SING' be written in that language?

Ans ☒ 1. RMHF

☒ 2. RFHM

☒ 3. RHMF

☒ 4. MRHF

Question Type : **MCQ**

Question ID : **264330133390**

Option 1 ID : **264330522592**

Option 2 ID : **264330522593**

Option 3 ID : **264330522591**

Option 4 ID : **264330522594**

Status : **Answered**

Chosen Option : 3

Q.11 Select the set in which the numbers are related in the same way as are the numbers of the following sets.(NOTE : Operations should be performed on the whole numbers, without breaking down the numbers into its constituent digits. E.g 13 – Operations on 13 such as adding /subtracting /multiplying etc. to 13 can be performed. Breaking down 13 into 1 and 3 and then performing mathematical operations on 1 and 3 is not allowed)
(13, 28, 58)
(16, 34, 70)

Ans ☒ 1. (15, 32, 64)

☒ 2. (18, 36, 110)

☒ 3. (11, 24, 50)

☒ 4. (12, 26, 56)

Question Type : **MCQ**

Question ID : **264330133500**

Option 1 ID : **264330523031**

Option 2 ID : **264330523032**

Option 3 ID : **264330523033**

Option 4 ID : **264330523034**

Status : **Answered**

Chosen Option : 3

Q.12 Select the option that is related to the third number in the same way as the second number is related to the first number.
8 : 514 :: 6 : ?

- Ans**
- ☒ 1. 228
 - ☒ 2. 208
 - ☒ 3. 218
 - ☒ 4. 238

Question Type : **MCQ**
Question ID : **264330133499**
Option 1 ID : **264330523029**
Option 2 ID : **264330523028**
Option 3 ID : **264330523027**
Option 4 ID : **264330523030**
Status : **Answered**
Chosen Option : **3**

Q.13 In a certain code language, 'FINGER' is written as '69147518' and 'DOG' is written as '4157'. How will 'FOREST' be written in that language?

- Ans**
- ☒ 1. 6151851820
 - ☒ 2. 6151851921
 - ☒ 3. 6151751920
 - ☒ 4. 6151851920

Question Type : **MCQ**
Question ID : **264330137349**
Option 1 ID : **264330538025**
Option 2 ID : **264330538024**
Option 3 ID : **264330538026**
Option 4 ID : **264330538023**
Status : **Answered**
Chosen Option : **4**

Q.14 Two Statements are given followed by two conclusions numbered I and II. Assuming the statements to be true, even if they seem to be at variance with commonly known facts, decide which of the conclusions logically follow(s) from the statements.

Statements:

All mobiles are electronic items.

Some telephones are electronic items.

Conclusions:

I. No mobile is a telephone.

II. Some mobile are telephones.

- Ans**
- ☒ 1. Both conclusions I and II follow.
 - ☒ 2. Only conclusion I follows.
 - ☒ 3. Only conclusion II follows.
 - ☒ 4. neither conclusion I nor II follows.

Question Type : **MCQ**
Question ID : **264330133496**
Option 1 ID : **264330523017**
Option 2 ID : **264330523015**
Option 3 ID : **264330523016**
Option 4 ID : **264330523018**
Status : **Answered**
Chosen Option : **1**

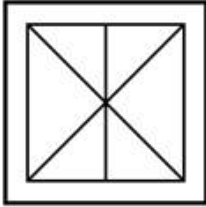
Q.15 Select the option figure in which the given figure (X) is embedded as its part (rotation is NOT allowed).



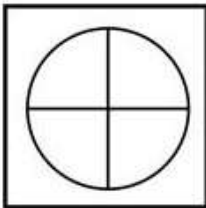
X

Ans

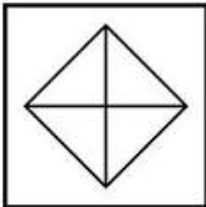
✗ 1.



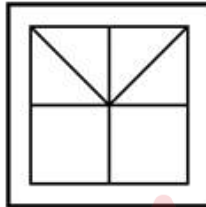
✗ 2.



✗ 3.



✓ 4.



Question Type : MCQ

Question ID : 264330137805

Option 1 ID : 264330539827

Option 2 ID : 264330539829

Option 3 ID : 264330539828

Option 4 ID : 264330539830

Status : Answered

Chosen Option : 4

Q.16 Select the option that is related to the third word in the same way as the second word is related to the first word.

Cricket : Pitch :: Golf : ?

Ans ✗ 1. Arena

✗ 2. Track

✗ 3. Court

✓ 4. Course

Question Type : MCQ

Question ID : 264330133488

Option 1 ID : 264330522984

Option 2 ID : 264330522986

Option 3 ID : 264330522985

Option 4 ID : 264330522983

Status : Answered

Chosen Option : 4

Q.17 Which of the following numbers will replace the question mark (?) in the given series?

47, 48, 44, 53, 37, ?

Ans ☒ 1. 52

☒ 2. 64

☒ 3. 62

☒ 4. 55

Question Type : MCQ

Question ID : 264330133498

Option 1 ID : 264330523023

Option 2 ID : 264330523026

Option 3 ID : 264330523024

Option 4 ID : 264330523025

Status : Answered

Chosen Option : 3

Q.18 Select the option that is related to the third word in the same way as the second word is related to the first word.

Bear : Growl :: Elephant : ?

Ans ☒ 1. Bray

☒ 2. Roar

☒ 3. Trumpet

☒ 4. Hiss

Question Type : MCQ

Question ID : 264330133487

Option 1 ID : 264330522979

Option 2 ID : 264330522981

Option 3 ID : 264330522980

Option 4 ID : 264330522982

Status : Answered

Chosen Option : 3

Q.19 Which of the mathematical signs should be interchanged in the below equation to make it mathematically correct?

$4 + 32 + 8 \times 9 - 5 = 35$

Ans ☒ 1. \times and $-$

☒ 2. \div and $+$

☒ 3. \div and \times

☒ 4. \times and $+$

Question Type : MCQ

Question ID : 264330133501

Option 1 ID : 264330523038

Option 2 ID : 264330523036

Option 3 ID : 264330523035

Option 4 ID : 264330523037

Status : Answered

Chosen Option : 2

Q.20 In an examination hall seven students Aditi, Cindy, Jeanie, Kirti, Niti, Preeti, and Sweety are sitting in a row facing North but not necessarily in the same order. Cindy sits third to the right of Sweety. Aditi and Preeti are immediate neighbours of Cindy. More than two persons sit between Preeti and Sweety. Jeanie is the only neighbour of Niti. Jeanie sits to the right of Aditi. What is the position of Niti with respect to Kirti?

- Ans**
- ☒ 1. Fifth to the left
 - ☒ 2. Fifth to the right
 - ☒ 3. Third to the right
 - ☒ 4. Third to the left

Question Type : **MCQ**
 Question ID : **264330133493**
 Option 1 ID : **264330523006**
 Option 2 ID : **264330523004**
 Option 3 ID : **264330523003**
 Option 4 ID : **264330523005**
 Status : **Answered**
 Chosen Option : **1**

Section : **General Awareness**

Q.1 Which among the following statements is incorrect?

- Ans**
- ☒ 1. An increase in bank rate will decrease the money supply.
 - ☒ 2. Lower the Cash Reserve Ratio (CRR), lower will be the liquidity in the system.
 - ☒ 3. Higher the Cash Reserve Ratio (CRR), lower will be the liquidity in the system.
 - ☒ 4. Lower the Statutory Liquidity Ratio (SLR), higher will be the liquidity in the system.

Question Type : **MCQ**
 Question ID : **264330137085**
 Option 1 ID : **264330536986**
 Option 2 ID : **264330536984**
 Option 3 ID : **264330536983**
 Option 4 ID : **264330536985**
 Status : **Answered**
 Chosen Option : **3**

Q.2 _____ is the world's largest tropical rainforest.

- Ans**
- ☒ 1. Amazon
 - ☒ 2. Prairies
 - ☒ 3. Daintree
 - ☒ 4. Congo

Question Type : **MCQ**
 Question ID : **264330133964**
 Option 1 ID : **264330524881**
 Option 2 ID : **264330524879**
 Option 3 ID : **264330524882**
 Option 4 ID : **264330524880**
 Status : **Answered**
 Chosen Option : **1**

Q.3 Which among the following are commonly known as blood thinners?

- Ans
- ☒ 1. Anticoagulants
 - ☐ 2. Antibiotics
 - ☐ 3. Anticaking agent
 - ☐ 4. Antibodies

Question Type : MCQ
Question ID : 264330133963
Option 1 ID : 264330524876
Option 2 ID : 264330524877
Option 3 ID : 264330524875
Option 4 ID : 264330524878
Status : Answered
Chosen Option : 4

Q.4 Which foreign invader surrendered his territories to Chandragupta Maurya?

- Ans
- ☐ 1. Menander
 - ☐ 2. Demosthenes
 - ☒ 3. Seleucus Nicator
 - ☐ 4. Gondophernes

Question Type : MCQ
Question ID : 264330137907
Option 1 ID : 264330540236
Option 2 ID : 264330540235
Option 3 ID : 264330540237
Option 4 ID : 264330540238
Status : Answered
Chosen Option : 4

Q.5 Soham is suffering from goitre. Which deficiency is the most common cause of it?

- Ans
- ☐ 1. Deficiency of Protein
 - ☐ 2. Deficiency of Vitamin A
 - ☒ 3. Deficiency of Iodine
 - ☐ 4. Deficiency of Iron

Question Type : MCQ
Question ID : 264330133962
Option 1 ID : 264330524873
Option 2 ID : 264330524871
Option 3 ID : 264330524872
Option 4 ID : 264330524874
Status : Answered
Chosen Option : 3

Q.6 Which among the following is a covalent compound?

- Ans ☒ 1. Hydrogen chloride
☒ 2. Magnesium hydroxide
☒ 3. Calcium carbonate
☒ 4. Sodium chloride

Question Type : MCQ
 Question ID : 264330133961
 Option 1 ID : 264330524868
 Option 2 ID : 264330524870
 Option 3 ID : 264330524869
 Option 4 ID : 264330524867
 Status : Answered
 Chosen Option : 4

Q.7 "And then One Day: A Memoir" is an autobiography of which of the following Bollywood star?

- Ans ☒ 1. Shahrukh Khan
☒ 2. Naseeruddin Shah
☒ 3. Karan Johar
☒ 4. Priyanka Chopra

Question Type : MCQ
 Question ID : 264330137078
 Option 1 ID : 264330536956
 Option 2 ID : 264330536957
 Option 3 ID : 264330536955
 Option 4 ID : 264330536958
 Status : Answered
 Chosen Option : 3

Q.8 In the sport of _____, two teams of five players each attempt to score points by putting the ball into a hoop that is 10 feet off the ground.

- Ans ☒ 1. Badminton
☒ 2. Rugby
☒ 3. Basketball
☒ 4. Lawn tennis

Question Type : MCQ
 Question ID : 264330133978
 Option 1 ID : 264330524935
 Option 2 ID : 264330524938
 Option 3 ID : 264330524936
 Option 4 ID : 264330524937
 Status : Answered
 Chosen Option : 3

Q.9 The Superintendence, control and conduct of all election to the municipalities is responsibility of the _____.

- Ans ☒ 1. State Election Commission
☐ 2. Governor of State
☐ 3. Election Commission of India
☐ 4. Home Ministry of State

Question Type : MCQ
Question ID : 264330138282
Option 1 ID : 264330541736
Option 2 ID : 264330541738
Option 3 ID : 264330541735
Option 4 ID : 264330541737
Status : Answered
Chosen Option : 3

Q.10 Which festival marks the triumph of Goddess Durga over the demon king Mahishasura?

- Ans ☐ 1. Diwali
☐ 2. Janmashtami
☐ 3. Holi
☒ 4. Navratri

Question Type : MCQ
Question ID : 264330137897
Option 1 ID : 264330540197
Option 2 ID : 264330540198
Option 3 ID : 264330540195
Option 4 ID : 264330540196
Status : Answered
Chosen Option : 4

Q.11 Who launched the SAMRIDDHI (Strengthening and Augmentation of Municipal Revenue for Infrastructure Development) scheme in October 2022 for Delhi, India?

- Ans ☐ 1. Chief Minister of Delhi
☒ 2. Lieutenant Governor of Delhi
☐ 3. President of India
☐ 4. Prime Minister of India

Question Type : MCQ
Question ID : 264330133956
Option 1 ID : 264330524850
Option 2 ID : 264330524849
Option 3 ID : 264330524848
Option 4 ID : 264330524847
Status : Answered
Chosen Option : 4

Q.12 Who was the founder of Dharma Sabha?

- Ans
- ☐ 1. Raja Ram Mohan Roy
 - ☐ 2. Dadoba Pandurang
 - ☐ 3. R.G. Bhandarkar
 - ☒ 4. Radhakanta Deb

Question Type : MCQ

Question ID : 264330137910

Option 1 ID : 264330540247

Option 2 ID : 264330540249

Option 3 ID : 264330540248

Option 4 ID : 264330540250

Status : Answered

Chosen Option : 1

Q.13 Kalamandalam Kalyanikutty Amma is known to create the formal structure and ornamentation of the _____ dance form.

- Ans
- ☐ 1. Kathakali
 - ☐ 2. Bharatnatyam
 - ☐ 3. Kuchipudi
 - ☒ 4. Mohiniyattam

Question Type : MCQ

Question ID : 264330137080

Option 1 ID : 264330536966

Option 2 ID : 264330536965

Option 3 ID : 264330536963

Option 4 ID : 264330536964

Status : Answered

Chosen Option : 3

Q.14 With respect to human geography, TFR stands for _____.

- Ans
- ☐ 1. Total Finance Rate
 - ☐ 2. Total Fall Rate
 - ☐ 3. Total Female Ratio
 - ☒ 4. Total Fertility Rate

Question Type : MCQ

Question ID : 264330134680

Option 1 ID : 264330527675

Option 2 ID : 264330527678

Option 3 ID : 264330527676

Option 4 ID : 264330527677

Status : Answered

Chosen Option : 4

Q.15 "Bombay" Jayashri Ramnath is a famous _____ singer of India.

- Ans ☒ 1. Carnatic
☐ 2. Folk
☐ 3. Jazz
☐ 4. Hip-hop

Question Type : MCQ
Question ID : 264330133974
Option 1 ID : 264330524922
Option 2 ID : 264330524919
Option 3 ID : 264330524920
Option 4 ID : 264330524921
Status : Answered
Chosen Option : 3

Q.16 Panthi dance form is associated with _____ state of India.

- Ans ☐ 1. Maharashtra
☒ 2. Chhattisgarh
☐ 3. Kerala
☐ 4. Punjab

Question Type : MCQ
Question ID : 264330133958
Option 1 ID : 264330524858
Option 2 ID : 264330524857
Option 3 ID : 264330524856
Option 4 ID : 264330524855
Status : Answered
Chosen Option : 2

Q.17 Who among the following was a famous ruler of the Pandya dynasty of South India?

- Ans ☒ 1. Nedunjeliyan II
☐ 2. Karikala
☐ 3. Ashoka
☐ 4. Nizam Shah

Question Type : MCQ
Question ID : 264330133970
Option 1 ID : 264330524906
Option 2 ID : 264330524903
Option 3 ID : 264330524905
Option 4 ID : 264330524904
Status : Answered
Chosen Option : 2

Q.18 Part XVI of the Indian constitution deals with _____.

- Ans
- ☒ 1. Elections
 - ☒ 2. Special provisions related to certain classes
 - ☒ 3. Constitutional amendments
 - ☒ 4. Special provisions related to municipal corporation

Question Type : MCQ
 Question ID : 264330133976
 Option 1 ID : 264330524930
 Option 2 ID : 264330524927
 Option 3 ID : 264330524929
 Option 4 ID : 264330524928
 Status : Answered
 Chosen Option : 1

Q.19 According to Census 2011, what is the total literacy rate in India (approximately)?

- Ans
- ☒ 1. 65%
 - ☒ 2. 74%
 - ☒ 3. 62%
 - ☒ 4. 81%

Question Type : MCQ
 Question ID : 264330137722
 Option 1 ID : 264330539498
 Option 2 ID : 264330539496
 Option 3 ID : 264330539495
 Option 4 ID : 264330539497
 Status : Answered
 Chosen Option : 3

Q.20 The Hindu College was established in Benaras in _____.

- Ans
- ☒ 1. 1785
 - ☒ 2. 1786
 - ☒ 3. 1791
 - ☒ 4. 1784

Question Type : MCQ
 Question ID : 264330138294
 Option 1 ID : 264330541783
 Option 2 ID : 264330541784
 Option 3 ID : 264330541785
 Option 4 ID : 264330541786
 Status : Answered
 Chosen Option : 4

Q.21 Which Indian cricketer is also known as 'The Wall'?

- Ans
- ☐ 1. Kapil Dev
 - ☒ 2. Rahul Dravid
 - ☐ 3. Sachin Tendulkar
 - ☐ 4. Mahendra Singh Dhoni

Question Type : MCQ
 Question ID : 264330133979
 Option 1 ID : 264330524940
 Option 2 ID : 264330524939
 Option 3 ID : 264330524941
 Option 4 ID : 264330524942
 Status : Answered
 Chosen Option : 2

Q.22 Which among the following crops is an example of Kharif crop?

- Ans
- ☐ 1. Wheat
 - ☒ 2. Rice
 - ☐ 3. Barley
 - ☐ 4. Mustard

Question Type : MCQ
 Question ID : 264330137070
 Option 1 ID : 264330536924
 Option 2 ID : 264330536923
 Option 3 ID : 264330536925
 Option 4 ID : 264330536926
 Status : Answered
 Chosen Option : 4

Q.23 As of November 2022, who is the Speaker of Lok Sabha?

- Ans
- ☐ 1. Droupadi Murmu
 - ☐ 2. Narendra Modi
 - ☒ 3. Om Birla
 - ☐ 4. Amit Shah

Question Type : MCQ
 Question ID : 264330133977
 Option 1 ID : 264330524933
 Option 2 ID : 264330524932
 Option 3 ID : 264330524934
 Option 4 ID : 264330524931
 Status : Answered
 Chosen Option : 3

Q.24 Which is a major tributary of Bhagirathi river?

- Ans ☒ 1. Bhilangna
☒ 2. Dhauliganga
☒ 3. Pindar
☒ 4. Bishenganga

Question Type : MCQ
 Question ID : 264330133966
 Option 1 ID : 264330524887
 Option 2 ID : 264330524889
 Option 3 ID : 264330524888
 Option 4 ID : 264330524890
 Status : Answered
 Chosen Option : 4

Q.25 How many UNESCO Natural World Heritage sites are there in India?

- Ans ☒ 1. Seven
☒ 2. Four
☒ 3. Six
☒ 4. Five

Question Type : MCQ
 Question ID : 264330138273
 Option 1 ID : 264330541702
 Option 2 ID : 264330541699
 Option 3 ID : 264330541701
 Option 4 ID : 264330541700
 Status : Answered
 Chosen Option : 3

Section : English Language and Comprehension

Q.1 Select the most appropriate synonym to substitute the bracketed word in the given sentence.

Confession had always rested on a clear distinction between mortal and (venial) sins.

- Ans ☒ 1. Genial
☒ 2. Pardonable
☒ 3. Major
☒ 4. Intolerable

Question Type : MCQ
 Question ID : 264330136308
 Option 1 ID : 264330534010
 Option 2 ID : 264330534009
 Option 3 ID : 264330534007
 Option 4 ID : 264330534008
 Status : Answered
 Chosen Option : 2

Q.2 Fill in the blank with the most appropriate option.

Sam knew who those people were; the figure in front was _____ his cousin.

- Ans
- ☒ 1. by mistake
 - ☒ 2. at mistake
 - ☒ 3. unmistakably
 - ☒ 4. mistaken of

Question Type : MCQ
Question ID : 264330136391
Option 1 ID : 264330534334
Option 2 ID : 264330534331
Option 3 ID : 264330534333
Option 4 ID : 264330534332
Status : Answered
Chosen Option : 1

Q.3 Choose the incorrectly spelt word.

- Ans
- ☒ 1. Insigt
 - ☒ 2. Supply
 - ☒ 3. Optical
 - ☒ 4. Cares

Question Type : MCQ
Question ID : 264330134446
Option 1 ID : 264330526758
Option 2 ID : 264330526755
Option 3 ID : 264330526756
Option 4 ID : 264330526757
Status : Answered
Chosen Option : 1

Q.4 Identify the segment that contains a grammatical error. If there is no error, select 'No error'.

Rapid climate warming in / the tundra biome have been linked / to increasing shrub dominance.

- Ans
- ☒ 1. No error
 - ☒ 2. Rapid climate warming in
 - ☒ 3. the tundra biome have been linked
 - ☒ 4. to increasing shrub dominance.

Question Type : MCQ
Question ID : 264330136057
Option 1 ID : 264330533046
Option 2 ID : 264330533043
Option 3 ID : 264330533044
Option 4 ID : 264330533045
Status : Answered
Chosen Option : 4

Q.5 A sentence has been given with a blank to be filled with an appropriate option. Choose the correct alternative.
Farms are increasingly turning to automation for _____ reasons.

- Ans ☒ 1. many
☒ 2. most
☒ 3. much
☒ 4. little

Question Type : MCQ
Question ID : 264330134430
Option 1 ID : 264330526697
Option 2 ID : 264330526696
Option 3 ID : 264330526698
Option 4 ID : 264330526695
Status : Answered
Chosen Option : 1

Q.6 Select the appropriate synonym for the underlined word.
I didn't have time to give them proof.

- Ans ☒ 1. evidence
☒ 2. guess
☒ 3. snap
☒ 4. charge

Question Type : MCQ
Question ID : 264330134440
Option 1 ID : 264330526734
Option 2 ID : 264330526731
Option 3 ID : 264330526732
Option 4 ID : 264330526733
Status : Answered
Chosen Option : 1

Q.7 Select the most appropriate option to fill in the blank.
Participate in a mock interview to prepare for _____ on your feet and formulating answers under pressure.

- Ans ☒ 1. thinking
☒ 2. blocking
☒ 3. cursing
☒ 4. building

Question Type : MCQ
Question ID : 264330134449
Option 1 ID : 264330526767
Option 2 ID : 264330526769
Option 3 ID : 264330526768
Option 4 ID : 264330526770
Status : Answered
Chosen Option : 1

Q.8 Improve the underlined part of the sentence. Choose 'No improvement' as an answer if the sentence is grammatically correct.
She blew out the candle and gone to sleepy.

- Ans
- ☒ 1. went to sleeps
 - ☒ 2. go to sleep
 - ☒ 3. went to sleep
 - ☒ 4. No improvement

Question Type : MCQ
Question ID : 264330134350
Option 1 ID : 264330526387
Option 2 ID : 264330526389
Option 3 ID : 264330526388
Option 4 ID : 264330526390
Status : Answered
Chosen Option : 3

Q.9 In the following question, out of the given four alternatives, select the alternative which best expresses the meaning of the Idiom/Phrase.
At all costs

- Ans
- ☒ 1. Not to be trifled with
 - ☒ 2. Whatever is needed to achieve something
 - ☒ 3. To be master of
 - ☒ 4. An expensive purchase

Question Type : MCQ
Question ID : 264330134445
Option 1 ID : 264330526753
Option 2 ID : 264330526752
Option 3 ID : 264330526754
Option 4 ID : 264330526751
Status : Answered
Chosen Option : 2

Q.10 Find the part of the given sentence that has an error in it. If there is no error, choose 'No error'.
Tax dispute settlement might not work out in the desired scale.

- Ans
- ☒ 1. might not work out in
 - ☒ 2. the desired scale.
 - ☒ 3. Tax dispute settlement
 - ☒ 4. No error

Question Type : MCQ
Question ID : 264330134426
Option 1 ID : 264330526680
Option 2 ID : 264330526681
Option 3 ID : 264330526679
Option 4 ID : 264330526682
Status : Answered
Chosen Option : 1

Q.11 Choose the word that can substitute the given group of words.
A unit to measure light

- Ans ☒ 1. Lumen
☒ 2. Watt
☒ 3. Horse-power
☒ 4. Ampere

Question Type : MCQ
Question ID : 264330134439
Option 1 ID : 264330526729
Option 2 ID : 264330526728
Option 3 ID : 264330526730
Option 4 ID : 264330526727
Status : Answered
Chosen Option : 4

Q.12 Improve the underlined part of the sentence. Choose 'No improvement' as an answer if the sentence is grammatically correct.
Cell phones keeps loved ones and those nearly them well connected.

- Ans ☒ 1. No improvement
☒ 2. keeping loved and nearly
☒ 3. kept love and near
☒ 4. keep loved ones and those near

Question Type : MCQ
Question ID : 264330134429
Option 1 ID : 264330526694
Option 2 ID : 264330526692
Option 3 ID : 264330526691
Option 4 ID : 264330526693
Status : Answered
Chosen Option : 4

Q.13 Select the most appropriate antonym of the given word.

Discreet

- Ans ☒ 1. Release
☒ 2. Zenith
☒ 3. Open
☒ 4. Lose

Question Type : MCQ
Question ID : 264330136657
Option 1 ID : 264330535350
Option 2 ID : 264330535349
Option 3 ID : 264330535348
Option 4 ID : 264330535347
Status : Answered
Chosen Option : 4

Q.14 Fill in the blank with the most appropriate option.

He had moved about two inches when several things happened in very _____ succession.

- Ans
- ☒ 1. brief
 - ☒ 2. desperate
 - ☒ 3. quick
 - ☒ 4. absurd

Question Type : MCQ
Question ID : 264330136263
Option 1 ID : 264330533837
Option 2 ID : 264330533835
Option 3 ID : 264330533836
Option 4 ID : 264330533838
Status : Answered
Chosen Option : 3

Q.15 In the following question, out of the given four alternatives, select the alternative which best expresses the meaning of the Idiom/Phrase.
Rolling in cash

- Ans
- ☒ 1. Have a large quantity of money
 - ☒ 2. A business magnate
 - ☒ 3. Buying things on interest
 - ☒ 4. To borrow a costly attire

Question Type : MCQ
Question ID : 264330134444
Option 1 ID : 264330526748
Option 2 ID : 264330526750
Option 3 ID : 264330526747
Option 4 ID : 264330526749
Status : Answered
Chosen Option : 3

Q.16 Choose the word that can substitute the given group of words.
Destruction of a fetus

- Ans
- ☒ 1. Fratricide
 - ☒ 2. Ellipse
 - ☒ 3. Abhor
 - ☒ 4. Feticide

Question Type : MCQ
Question ID : 264330134438
Option 1 ID : 264330526725
Option 2 ID : 264330526726
Option 3 ID : 264330526723
Option 4 ID : 264330526724
Status : Answered
Chosen Option : 4

Q.17 Find the part of the given sentence that has an error in it. If there is no error, choose 'No error'.

The benefits of rebuilding healthy, fertile soil are clear.

- Ans
- ☒ 1. healthy, fertile soil
 - ☒ 2. The benefits of rebuilding
 - ☒ 3. No error
 - ☒ 4. are clear.

Question Type : MCQ

Question ID : 264330135204

Option 1 ID : 264330529744

Option 2 ID : 264330529743

Option 3 ID : 264330529746

Option 4 ID : 264330529745

Status : Answered

Chosen Option : 4

Q.18 Select the appropriate antonym for the underlined word.

The peach-tree is most productive when the roots are kept near the surface.

- Ans
- ☒ 1. futile
 - ☒ 2. lush
 - ☒ 3. potent
 - ☒ 4. fertile

Question Type : MCQ

Question ID : 264330134443

Option 1 ID : 264330526746

Option 2 ID : 264330526744

Option 3 ID : 264330526745

Option 4 ID : 264330526743

Status : Answered

Chosen Option : 1

Q.19 Select the most appropriate option to substitute the bracketed segment in the given sentence. If there is no need to substitute it, select 'no substitution required'.

(Beside myself, the only English people) there were Keith and Doreen.

- Ans
- ☒ 1. Besides I, the only English speaking people
 - ☒ 2. No substitution required
 - ☒ 3. Besides myself, the only English people
 - ☒ 4. Beside me, the only English people

Question Type : MCQ

Question ID : 264330136060

Option 1 ID : 264330533056

Option 2 ID : 264330533058

Option 3 ID : 264330533057

Option 4 ID : 264330533055

Status : Answered

Chosen Option : 4

Q.20 Four sentences are given, out of which three have spelling errors. Choose the sentence with all correctly spelt words.

- Ans**
- ☒ 1. I don't know weather to eat it or rubb it on.
 - ☒ 2. Goodbye untill later now, foks. Have a good night.
 - ☒ 3. She always says something humerous.
 - ☒ 4.

Had I known what was coming, I could have prepared myself better.

Question Type : **MCQ**

Question ID : **264330136262**

Option 1 ID : **264330533832**

Option 2 ID : **264330533834**

Option 3 ID : **264330533831**

Option 4 ID : **264330533833**

Status : **Answered**

Chosen Option : **4**

Comprehension:

In the following passage some words have been deleted. Fill in the blanks with the help of the alternatives given. Select the most appropriate option for each number.

By the (1) _____ we reach puberty, the world has reached us and (2) _____ us to a greater extent than we realize. (3) _____ family, friends, school, and society in general (4) _____ -by word and example-how to be. But people (5) _____ leaders at that moment when they decide for themselves how to be.

SubQuestion No : 21

Q.21 Select the most appropriate option to fill in blank number 1.

- Ans**
- ☒ 1. time
 - ☒ 2. moment
 - ☒ 3. age
 - ☒ 4. era

Question Type : **MCQ**

Question ID : **264330136648**

Option 1 ID : **264330535312**

Option 2 ID : **264330535314**

Option 3 ID : **264330535313**

Option 4 ID : **264330535311**

Status : **Answered**

Chosen Option : **1**

Comprehension:

In the following passage some words have been deleted. Fill in the blanks with the help of the alternatives given. Select the most appropriate option for each number.

By the (1) _____ we reach puberty, the world has reached us and (2) _____ us to a greater extent than we realize. (3) _____ family, friends, school, and society in general (4) _____-by word and example-how to be. But people (5) _____ leaders at that moment when they decide for themselves how to be.

SubQuestion No : 22

Q.22 Select the most appropriate option to fill in blank number 2.

- Ans
- ☒ 1. shapes
 - ☒ 2. shaped
 - ☒ 3. contours
 - ☒ 4. formats

Question Type : MCQ
 Question ID : 264330136649
 Option 1 ID : 264330535315
 Option 2 ID : 264330535318
 Option 3 ID : 264330535316
 Option 4 ID : 264330535317
 Status : Answered
 Chosen Option : 2

Comprehension:

In the following passage some words have been deleted. Fill in the blanks with the help of the alternatives given. Select the most appropriate option for each number.

By the (1) _____ we reach puberty, the world has reached us and (2) _____ us to a greater extent than we realize. (3) _____ family, friends, school, and society in general (4) _____-by word and example-how to be. But people (5) _____ leaders at that moment when they decide for themselves how to be.

SubQuestion No : 23

Q.23 Select the most appropriate option to fill in blank number 3.

- Ans
- ☒ 1. Their
 - ☒ 2. Her
 - ☒ 3. There
 - ☒ 4. Our

Question Type : MCQ
 Question ID : 264330136650
 Option 1 ID : 264330535321
 Option 2 ID : 264330535320
 Option 3 ID : 264330535322
 Option 4 ID : 264330535319
 Status : Answered
 Chosen Option : 4

Comprehension:

In the following passage some words have been deleted. Fill in the blanks with the help of the alternatives given. Select the most appropriate option for each number.

By the (1) _____ we reach puberty, the world has reached us and (2) _____ us to a greater extent than we realize. (3) _____ family, friends, school, and society in general (4) _____ -by word and example-how to be. But people (5) _____ leaders at that moment when they decide for themselves how to be.

SubQuestion No : 24

Q.24 Select the most appropriate option to fill in blank number 4.

- Ans
- ☒ 1. have tell us
 - ☒ 2. have told us
 - ☒ 3. has told us
 - ☒ 4. have been told us

Question Type : MCQ
 Question ID : 264330136651
 Option 1 ID : 264330535326
 Option 2 ID : 264330535325
 Option 3 ID : 264330535323
 Option 4 ID : 264330535324
 Status : Answered
 Chosen Option : 2

Comprehension:

In the following passage some words have been deleted. Fill in the blanks with the help of the alternatives given. Select the most appropriate option for each number.

By the (1) _____ we reach puberty, the world has reached us and (2) _____ us to a greater extent than we realize. (3) _____ family, friends, school, and society in general (4) _____ -by word and example-how to be. But people (5) _____ leaders at that moment when they decide for themselves how to be.

SubQuestion No : 25

Q.25 Select the most appropriate option to fill in blank number 5.

- Ans
- ☒ 1. onset to become
 - ☒ 2. begin to become
 - ☒ 3. began to become
 - ☒ 4. start to become

Question Type : MCQ
 Question ID : 264330136652
 Option 1 ID : 264330535330
 Option 2 ID : 264330535328
 Option 3 ID : 264330535327
 Option 4 ID : 264330535329
 Status : Answered
 Chosen Option : 4