

## Multi Tasking Non Technical Staff and Havaladar CBIC and CBN Examination 2022

Roll Number	
Candidate Name	
Venue Name	iON Digital Zone iDZ Bodri Near high court
Exam Date	18/05/2023
Exam Time	12:00 PM - 2:00 PM
Subject	MTS Non Tech Havaladar CBIC and CBN Examination 2022

### Section : Numerical and Mathematical Ability

**Q.1** In a box containing 45 bulbs, 12 are found to be defective. What is the ratio of the good bulbs to the total bulbs in the box?

- Ans**
- ☒ 1. 8:13
  - ☒ 2. 5:8
  - ☒ 3. 7:11
  - ☒ 4. 11:15

Question Type : **MCQ**

Question ID : **264330138734**

Option 1 ID : **264330543545**

Option 2 ID : **264330543546**

Option 3 ID : **264330543544**

Option 4 ID : **264330543543**

Status : **Answered**

Chosen Option : **4**

**Q.2** What will be the simple interest on a principal of Rs. 980 for 4 years at the rate of 12 percent per annum?

- Ans**
- ☒ 1. Rs. 430.4
  - ☒ 2. Rs. 470.4
  - ☒ 3. Rs. 460.4
  - ☒ 4. Rs. 380.4

Question Type : **MCQ**

Question ID : **264330137675**

Option 1 ID : **264330539309**

Option 2 ID : **264330539310**

Option 3 ID : **264330539308**

Option 4 ID : **264330539307**

Status : **Answered**

Chosen Option : **2**

# Test Prime

**ALL EXAMS,  
ONE SUBSCRIPTION**



**70,000+**  
Mock Tests



**Personalised  
Report Card**



**Unlimited  
Re-Attempt**



**600+**  
Exam Covered



**Previous Year  
Papers**



**500%  
Refund**



**ATTEMPT FREE MOCK NOW**

Q.3 60 percent of 40 percent of a number is equal to 150. What is the 20 percent of that number?

- Ans
- ☐ 1. 175
  - ☐ 2. 145
  - ☐ 3. 200
  - ☒ 4. 125

Question Type : MCQ

Question ID : 264330137670

Option 1 ID : 264330539290

Option 2 ID : 264330539289

Option 3 ID : 264330539287

Option 4 ID : 264330539288

Status : Answered

Chosen Option : 4

Q.4 A can do a work in 6 days, which B alone can do in 8 days. In how many days they together can do it

- Ans
- ☒ 1.  $\frac{24}{7}$  days
  - ☐ 2.  $\frac{25}{7}$  days
  - ☐ 3.  $\frac{27}{4}$  days
  - ☐ 4.  $\frac{22}{3}$  days

Question Type : MCQ

Question ID : 264330135102

Option 1 ID : 264330529343

Option 2 ID : 264330529344

Option 3 ID : 264330529346

Option 4 ID : 264330529345

Status : Answered

Chosen Option : 1

Q.5 In a college, the ratio of the number of boys to girls is 3:8. If there are 180 boys, then how many girls are in the college?

- Ans
- ☐ 1. 380
  - ☒ 2. 480
  - ☐ 3. 660
  - ☐ 4. 420

Question Type : MCQ

Question ID : 264330138735

Option 1 ID : 264330543549

Option 2 ID : 264330543548

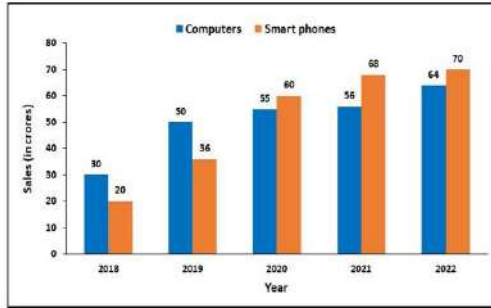
Option 3 ID : 264330543547

Option 4 ID : 264330543550

Status : Answered

Chosen Option : 2

**Q.6** The following graph shows the sales(in crores) of computers and smart phones in a country during the year 2018 to 2022. What is the difference between the average sale of computer and average sale of smart phones during these years?



- Ans**
- ☒ 1. 1 crores
  - ☒ 2. 0.5 crores
  - ☒ 3. 0.2 crores
  - ☒ 4. 0.8 crores

Question Type : **MCQ**  
 Question ID : **264330138742**  
 Option 1 ID : **264330543577**  
 Option 2 ID : **264330543576**  
 Option 3 ID : **264330543575**  
 Option 4 ID : **264330543578**  
 Status : **Answered**  
 Chosen Option : **3**

**Q.7** In a 255 L mixture of milk & water, the ratio of milk and water is 4:1. Find the quantity of water required to make the ratio of milk & water 4:3.

- Ans**
- ☒ 1. 94 litres
  - ☒ 2. 51 litres
  - ☒ 3. 102 litres
  - ☒ 4. 55 litres

Question Type : **MCQ**  
 Question ID : **264330135134**  
 Option 1 ID : **264330529472**  
 Option 2 ID : **264330529471**  
 Option 3 ID : **264330529473**  
 Option 4 ID : **264330529474**  
 Status : **Answered**  
 Chosen Option : **3**

**Q.8** The circumference of base of a cylinder is  $28\pi$  cm. If the height of cylinder is 17 cm, then what will be the curved surface area of cylinder?

- Ans**
- ☒ 1.  $372\pi \text{ cm}^2$
  - ☒ 2.  $436\pi \text{ cm}^2$
  - ☒ 3.  $524\pi \text{ cm}^2$
  - ☒ 4.  $476\pi \text{ cm}^2$

Question Type : **MCQ**

Question ID : **264330137188**

Option 1 ID : **264330537395**

Option 2 ID : **264330537396**

Option 3 ID : **264330537398**

Option 4 ID : **264330537397**

Status : **Answered**

Chosen Option : **4**

**Q.9** The table below shows the number of the AC that was sold by the showroom in the year 2013 to 2016. How much percent of AC sold by showroom B in 2014 is less than that of showroom D in 2016?

Showroom	Years			
	2013	2014	2015	2016
A	100	54	98	72
B	180	92	105	88
C	120	122	100	140
D	60	152	80	100

- Ans**
- ☒ 1. 10%
  - ☒ 2. 14%
  - ☒ 3. 8%
  - ☒ 4. 12%

Question Type : **MCQ**

Question ID : **264330133596**

Option 1 ID : **264330523408**

Option 2 ID : **264330523410**

Option 3 ID : **264330523407**

Option 4 ID : **264330523409**

Status : **Answered**

Chosen Option : **3**

**Q.10** The value of  $3 \times \left[ \{(11 - 3) \div (1/2) \text{ of } 8\} + 15 \div 3 \right]$  is:

- Ans**
- ☒ 1. 15
  - ☒ 2. 19
  - ☒ 3. 21
  - ☒ 4. 30

Question Type : **MCQ**

Question ID : **264330133582**

Option 1 ID : **264330523353**

Option 2 ID : **264330523354**

Option 3 ID : **264330523352**

Option 4 ID : **264330523351**

Status : **Answered**

Chosen Option : **3**

**Q.11** Rs. 2400 is lent at the rate of 10 percent per annum. Which of the following statement(s) is/are correct?

I. The compound interest (compounding annually) for 3 years is Rs. 794.4.

II. The difference between simple interest and compound interest (compounding annually) after 3 years is Rs. 75.8

**Ans** ☒ 1. None of the statements are correct

☒ 2. Only statement I is correct

☒ 3. Only statement II is correct

☒ 4. Both statement I and II are correct

Question Type : **MCQ**

Question ID : **264330137676**

Option 1 ID : **264330539314**

Option 2 ID : **264330539311**

Option 3 ID : **264330539312**

Option 4 ID : **264330539313**

Status : **Answered**

Chosen Option : **2**

**Q.12** A vendor expects a gain of 15% on his cost price. If in a month, his sale was of Rs. 138000, then what was his profit?

**Ans** ☒ 1. Rs. 18000

☒ 2. Rs. 15500

☒ 3. Rs. 12000

☒ 4. Rs. 13800

Question Type : **MCQ**

Question ID : **264330141023**

Option 1 ID : **264330552441**

Option 2 ID : **264330552442**

Option 3 ID : **264330552439**

Option 4 ID : **264330552440**

Status : **Answered**

Chosen Option : **1**

**Q.13**  $P = (8 + 8) \times (8 \div 8) \times (8 \times 8)$

Find out the value of P.

**Ans** ☒ 1. 512

☒ 2. 1120

☒ 3. 1024

☒ 4. 1440

Question Type : **MCQ**

Question ID : **264330138724**

Option 1 ID : **264330543503**

Option 2 ID : **264330543506**

Option 3 ID : **264330543504**

Option 4 ID : **264330543505**

Status : **Answered**

Chosen Option : **3**

**Q.14** 63 men can complete a work in 30 days. In how many days 21 men will do the same work?

- Ans**
- ☒ 1. 70 days
  - ☒ 2. 85 days
  - ☒ 3. 90 days
  - ☒ 4. 88 days

Question Type : **MCQ**

Question ID : **264330138427**

Option 1 ID : **264330542315**

Option 2 ID : **264330542317**

Option 3 ID : **264330542318**

Option 4 ID : **264330542316**

Status : **Answered**

Chosen Option : **3**

**Q.15** Find the area of the trapezium whose parallel sides measure 14 cm, and 18 cm and the distance between parallel sides is 15 cm.

- Ans**
- ☒ 1.  $310 \text{ cm}^2$
  - ☒ 2.  $300 \text{ cm}^2$
  - ☒ 3.  $220 \text{ cm}^2$
  - ☒ 4.  $240 \text{ cm}^2$

Question Type : **MCQ**

Question ID : **264330138431**

Option 1 ID : **264330542333**

Option 2 ID : **264330542334**

Option 3 ID : **264330542331**

Option 4 ID : **264330542332**

Status : **Answered**

Chosen Option : **4**

**Q.16** A distributor of an AC company allowed a 5% discount when a shopkeeper book an order of 40 AC's with marked price Rs. 24500 per AC. The total value in the invoice is:

- Ans**
- ☒ 1. Rs. 931000
  - ☒ 2. Rs. 980000
  - ☒ 3. Rs. 964000
  - ☒ 4. Rs. 890000

Question Type : **MCQ**

Question ID : **264330138733**

Option 1 ID : **264330543541**

Option 2 ID : **264330543539**

Option 3 ID : **264330543542**

Option 4 ID : **264330543540**

Status : **Answered**

Chosen Option : **1**



Q.17 A train travelling at 180 km/hr overtakes a car travelling at 108 km/hr in 5 seconds. What is the length of the train?

- Ans
- ☐ 1. 200 meters
  - ☒ 2. 100 meters
  - ☐ 3. 120 meters
  - ☐ 4. 150 meters

Question Type : MCQ

Question ID : 264330138738

Option 1 ID : 264330543560

Option 2 ID : 264330543562

Option 3 ID : 264330543559

Option 4 ID : 264330543561

Status : Answered

Chosen Option : 2

Q.18 Which is the least number divisible by 6, 18, 20 and 32?

- Ans
- ☐ 1. 108
  - ☐ 2. 640
  - ☒ 3. 1440
  - ☐ 4. 360

Question Type : MCQ

Question ID : 264330140996

Option 1 ID : 264330552331

Option 2 ID : 264330552333

Option 3 ID : 264330552334

Option 4 ID : 264330552332

Status : Answered

Chosen Option : 3

Q.19 Suman incurred a loss of 35% on selling an article for Rs. 41275. What was the cost price of the article?

- Ans
- ☐ 1. Rs. 48675
  - ☒ 2. Rs. 63500
  - ☐ 3. Rs. 54020
  - ☐ 4. Rs. 45910

Question Type : MCQ

Question ID : 264330138732

Option 1 ID : 264330543538

Option 2 ID : 264330543535

Option 3 ID : 264330543537

Option 4 ID : 264330543536

Status : Answered

Chosen Option : 2



Q.20 Find the curved surface area of cone of radius 12 cm and slant height 14 cm. (Use  $\pi = 3.14$ )

- Ans
- ☒ 1. 4325.5 cm<sup>2</sup>
  - ☒ 2. 527.52 cm<sup>2</sup>
  - ☒ 3. 5436.6 cm<sup>2</sup>
  - ☒ 4. 501.54 cm<sup>2</sup>

Question Type : MCQ

Question ID : 264330135107

Option 1 ID : 264330529365

Option 2 ID : 264330529364

Option 3 ID : 264330529366

Option 4 ID : 264330529363

Status : Answered

Chosen Option : 2

Section : Reasoning Ability and Problem Solving

Q.1 After interchanging which two signs, the value of the given equation will be '1'?

$$3 \div 1 + 6 \times 2 - 5$$

- Ans
- ☒ 1. + and -
  - ☒ 2. ÷ and +
  - ☒ 3. × and -
  - ☒ 4. ÷ and ×

Question Type : MCQ

Question ID : 264330138598

Option 1 ID : 264330542999

Option 2 ID : 264330543000

Option 3 ID : 264330543001

Option 4 ID : 264330543002

Status : Answered

Chosen Option : 4

Q.2 In the following question, select the missing number of the given series.

144, 140, 132, 116, 84, ?

- Ans
- ☒ 1. 30
  - ☒ 2. 20
  - ☒ 3. 29
  - ☒ 4. 25

Question Type : MCQ

Question ID : 264330138595

Option 1 ID : 264330542990

Option 2 ID : 264330542987

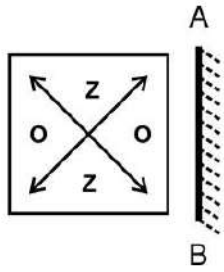
Option 3 ID : 264330542989

Option 4 ID : 264330542988

Status : Answered

Chosen Option : 2

Q.3 Select the correct mirror image of the given figure when the mirror is placed at AB as shown below.

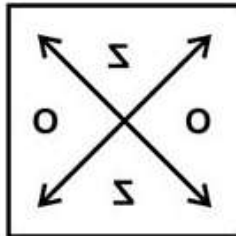


Ans

✗ 1.



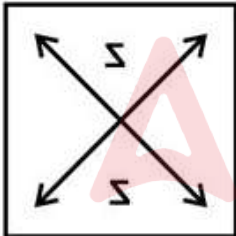
✓ 2.



✗ 3.



✗ 4.



Question Type : MCQ

Question ID : 264330133338

Option 1 ID : 264330522388

Option 2 ID : 264330522389

Option 3 ID : 264330522387

Option 4 ID : 264330522390

Status : Answered

Chosen Option : 2

**Q.4** A series is given with one term missing. Select the correct alternative from the given ones that will complete the series.

MCHQ, LYGM, KUFI, ?, IMDA

- Ans**
- ☒ 1. JQFE
  - ☒ 2. JRFF
  - ☒ 3. JQEE
  - ☒ 4. JREF

Question Type : **MCQ**

Question ID : **264330138582**

Option 1 ID : **264330542936**

Option 2 ID : **264330542938**

Option 3 ID : **264330542937**

Option 4 ID : **264330542935**

Status : **Answered**

Chosen Option : **3**

**Q.5** In the following question below are given some statements followed by some conclusions based on those statements.

Taking the given statements to be true even if they seem to be at variance from commonly known facts. Read all the conclusions and then decide which of the given conclusion logically follows the given statements.

Statements:

I. Some L are G.

II. All M are L.

Conclusion:

I. All L are M.

II. Some G are not M.

III. No M is G.

- Ans**
- ☒ 1. Both conclusions I and II follows
  - ☒ 2. Neither conclusion follows
  - ☒ 3. Both conclusions I and III follows
  - ☒ 4. Both conclusions II and III follows

Question Type : **MCQ**

Question ID : **264330138593**

Option 1 ID : **264330542982**

Option 2 ID : **264330542979**

Option 3 ID : **264330542980**

Option 4 ID : **264330542981**

Status : **Answered**

Chosen Option : **2**

**Q.6** In a certain code language, 'ROYAL' is coded as 'HWUKN'. What is the code for 'SEEMS' in that code language?

- Ans**
- ☒ 1. OJAAO
  - ☒ 2. OIBBO
  - ☒ 3. OIAAO
  - ☒ 4. OIAAP

Question Type : **MCQ**

Question ID : **264330138483**

Option 1 ID : **264330542540**

Option 2 ID : **264330542542**

Option 3 ID : **264330542541**

Option 4 ID : **264330542539**

Status : **Answered**

Chosen Option : **3**

**Q.7** In the following question below are given some statements followed by some conclusions based on those statements. Taking the given statements to be true even if they seem to be at variance from commonly known facts. Read all the conclusions and then decide which of the given conclusion logically follows the given statements.

Statements:

I. All P are M.

II. No P is R.

Conclusion:

I. Some R are not P.

II. Some M are not R.

- Ans**
- ☒ 1. Only conclusion I follows
  - ☒ 2. Only conclusion II follows
  - ☒ 3. Neither conclusion follows
  - ☒ 4. Both conclusions I and II follows

Question Type : MCQ

Question ID : 264330138592

Option 1 ID : 264330542975

Option 2 ID : 264330542976

Option 3 ID : 264330542978

Option 4 ID : 264330542977

Status : Answered

Chosen Option : 1

**Q.8** In a certain code language, 'HORN' is written as '8695' and 'LURP' is written as '3397'. How will 'BLUE' be written in that language?

- Ans**
- ☒ 1. 2365
  - ☒ 2. 2553
  - ☒ 3. 5223
  - ☒ 4. 2335

Question Type : MCQ

Question ID : 264330135027

Option 1 ID : 264330529044

Option 2 ID : 264330529043

Option 3 ID : 264330529045

Option 4 ID : 264330529046

Status : Answered

Chosen Option : 4

**Q.9** Select the option that is related to the third number in the same way as the second number is related to the first number.  
12 : 132 :: 16 : ?

- Ans**
- ☒ 1. 167
  - ☒ 2. 215
  - ☒ 3. 176
  - ☒ 4. 135

Question Type : MCQ

Question ID : 264330137596

Option 1 ID : 264330538994

Option 2 ID : 264330538993

Option 3 ID : 264330538992

Option 4 ID : 264330538991

Status : Answered

Chosen Option : 3

**Q.10** In a certain code language, 'FANS' is coded as 'JERW'. What is the code for 'HERO' in that code language?

- Ans**
- ☒ 1. LIWS
  - ☒ 2. LIVT
  - ☒ 3. LJVS
  - ☒ 4. LIVS

Question Type : **MCQ**  
 Question ID : **264330138523**  
 Option 1 ID : **264330542700**  
 Option 2 ID : **264330542701**  
 Option 3 ID : **264330542699**  
 Option 4 ID : **264330542702**  
 Status : **Answered**  
 Chosen Option : **4**

**Q.11** Which of the following numbers will replace the question mark (?) in the given series?

85, 105, 126, 148, 171, 195, ?

- Ans**
- ☒ 1. 530
  - ☒ 2. 220
  - ☒ 3. 420
  - ☒ 4. 280

Question Type : **MCQ**  
 Question ID : **264330137594**  
 Option 1 ID : **264330538986**  
 Option 2 ID : **264330538985**  
 Option 3 ID : **264330538983**  
 Option 4 ID : **264330538984**  
 Status : **Answered**  
 Chosen Option : **2**

**Q.12** Select the option that is related to the fifth term in the same way as the second term is related to the first term and fourth term is related to third term.

TBA : SZX :: KRB : JPY :: GOT : ?

- Ans**
- ☒ 1. FNQ
  - ☒ 2. FMR
  - ☒ 3. FMQ
  - ☒ 4. FNR

Question Type : **MCQ**  
 Question ID : **264330138585**  
 Option 1 ID : **264330542949**  
 Option 2 ID : **264330542950**  
 Option 3 ID : **264330542947**  
 Option 4 ID : **264330542948**  
 Status : **Answered**  
 Chosen Option : **3**

Q.13

Which answer figure will complete the pattern in the question figure?



Ans

✗ 1.



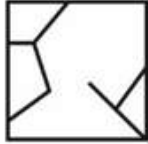
✗ 2.



✗ 3.



✓ 4.



Question Type : MCQ

Question ID : 264330138602

Option 1 ID : 264330543017

Option 2 ID : 264330543018

Option 3 ID : 264330543015

Option 4 ID : 264330543016

Status : Answered

Chosen Option : 4

Q.14

Six girls Priya, Muskan, Rani, Sirjana, Tina and Laxmi are sitting in a row facing towards south (not necessarily in the same order). Muskan is second to the right of Tina. Sirjana is second to the left of Tina. Laxmi is second to the left of Rani. Rani is to the immediate right of Muskan. Who is sitting to the immediate right of Priya?

Ans

✗ 1. Muskan

✗ 2. Sirjana

✓ 3. Tina

✗ 4. Laxmi

Question Type : MCQ

Question ID : 264330138590

Option 1 ID : 264330542967

Option 2 ID : 264330542970

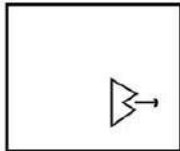
Option 3 ID : 264330542969

Option 4 ID : 264330542968

Status : Answered

Chosen Option : 3

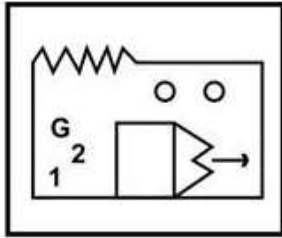
Q.15 Select the option figure in which the given figure (X) is embedded as its part (rotation is NOT allowed).



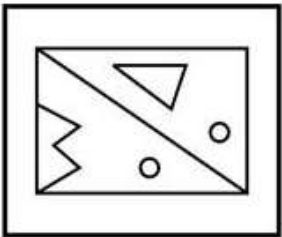
X

Ans

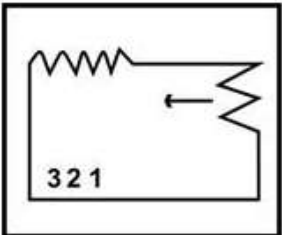
✓ 1.



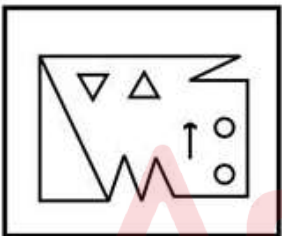
✗ 2.



✗ 3.



✗ 4.



Question Type : MCQ

Question ID : 264330133337

Option 1 ID : 264330522383

Option 2 ID : 264330522386

Option 3 ID : 264330522384

Option 4 ID : 264330522385

Status : Answered

Chosen Option : 1



**Q.16** Select the option that is related to the fifth term in the same way as the second term is related to the first term and fourth term is related to third term.

KIT : PNY :: PFC : UKH :: ANG :: ?

- Ans**
- ☒ 1. FSK
  - ☒ 2. ESK
  - ☒ 3. ESL
  - ☒ 4. FSL

Question Type : MCQ

Question ID : 264330138584

Option 1 ID : 264330542944

Option 2 ID : 264330542943

Option 3 ID : 264330542945

Option 4 ID : 264330542946

Status : Answered

Chosen Option : 4

**Q.17** If A denotes 'addition', B denotes 'multiplication', C denotes 'subtraction', and D denotes 'division', then what will be the value of the following equation?

7 C 8 A (6 D 3) = ?

- Ans**
- ☒ 1. 5
  - ☒ 2. 3
  - ☒ 3. 7
  - ☒ 4. 1

Question Type : MCQ

Question ID : 264330137599

Option 1 ID : 264330539003

Option 2 ID : 264330539006

Option 3 ID : 264330539005

Option 4 ID : 264330539004

Status : Answered

Chosen Option : 2

**Q.18** Price of five cars C1, C2, C3, C4 and C5 are compared. Price of C1 is the least. No two cars have the same price. Price of C3 is less than C5, C2 and C4. Price of neither C5 nor C2 is the highest. Price of C5 is less than C2. Price of how many cars is more than the price of C4?

- Ans**
- ☒ 1. 2
  - ☒ 2. 4
  - ☒ 3. 1
  - ☒ 4. 0

Question Type : MCQ

Question ID : 264330138591

Option 1 ID : 264330542972

Option 2 ID : 264330542974

Option 3 ID : 264330542971

Option 4 ID : 264330542973

Status : Answered

Chosen Option : 4

**Q.19** In a certain code language, 'MOTION' is coded as 'NNUHPM'. What is the code for 'NORMAL' in that code language?

- Ans**
- ☒ 1. ONSLBL
  - ☒ 2. ONSLBK
  - ☐ 3. ONSLCK
  - ☐ 4. ONTLCK

Question Type : **MCQ**  
 Question ID : **264330137090**  
 Option 1 ID : **264330537005**  
 Option 2 ID : **264330537003**  
 Option 3 ID : **264330537004**  
 Option 4 ID : **264330537006**  
 Status : **Answered**  
 Chosen Option : **2**

**Q.20** Select the option that is related to the third word in the same way as the second word is related to the first word.  
 Jurisdiction : Authority :: Quandary : ?

- Ans**
- ☐ 1. Decisive
  - ☐ 2. Certain
  - ☒ 3. Dilemma
  - ☐ 4. Surety

Question Type : **MCQ**  
 Question ID : **264330135021**  
 Option 1 ID : **264330529022**  
 Option 2 ID : **264330529021**  
 Option 3 ID : **264330529019**  
 Option 4 ID : **264330529020**  
 Status : **Answered**  
 Chosen Option : **3**

Section : General Awareness

**Q.1** Who promoted the worship of God in Punjab, India as Nirankar (Formless)?

- Ans**
- ☒ 1. Baba Dayal Das
  - ☐ 2. Guru Gobind Singh
  - ☐ 3. Baba Ram Singh
  - ☐ 4. Maharaja Ranjit Singh

Question Type : **MCQ**  
 Question ID : **264330133664**  
 Option 1 ID : **264330523679**  
 Option 2 ID : **264330523681**  
 Option 3 ID : **264330523680**  
 Option 4 ID : **264330523682**  
 Status : **Answered**  
 Chosen Option : **2**

Q.2 Who among the following is a Sarangi player?

- Ans
- ☐ 1. Pandit Krishna Maharaj
  - ☒ 2. Ustad Shakoor Khan
  - ☐ 3. Sandeep Das
  - ☐ 4. Anuradha Paudwal

Question Type : MCQ

Question ID : 264330138655

Option 1 ID : 264330543230

Option 2 ID : 264330543227

Option 3 ID : 264330543228

Option 4 ID : 264330543229

Status : Answered

Chosen Option : 2

Q.3 What does the Surrogacy (Regulation) Bill, 2016 prohibit?

- Ans
- ☐ 1. Women aged between 23 to 50 as surrogates
  - ☐ 2. Married women as surrogates
  - ☐ 3. Divorced women as surrogates
  - ☒ 4. Commercial Surrogacy

Question Type : MCQ

Question ID : 264330137762

Option 1 ID : 264330539655

Option 2 ID : 264330539657

Option 3 ID : 264330539658

Option 4 ID : 264330539656

Status : Answered

Chosen Option : 4

Q.4 A report named "Payments Vision 2025" is released by which institution?

- Ans
- ☐ 1. Ministry of Finance
  - ☐ 2. NITI Aayog
  - ☒ 3. Reserve Bank of India
  - ☐ 4. Ministry of Corporate Affairs

Question Type : MCQ

Question ID : 264330138658

Option 1 ID : 264330543239

Option 2 ID : 264330543242

Option 3 ID : 264330543241

Option 4 ID : 264330543240

Status : Not Answered

Chosen Option : --

Q.5 During October – November, the apparent movement of sun is towards the \_\_\_\_\_.

- Ans
- ☐ 1. North
  - ☐ 2. North-East
  - ☐ 3. North-West
  - ☒ 4. South

Question Type : MCQ  
Question ID : 264330138667  
Option 1 ID : 264330543275  
Option 2 ID : 264330543278  
Option 3 ID : 264330543277  
Option 4 ID : 264330543276  
Status : Not Answered  
Chosen Option : --

Q.6 The Third Battle of Panipat was fought between \_\_\_\_\_.

- Ans
- ☐ 1. Afghans and Mughals
  - ☐ 2. Afghans and Turks
  - ☒ 3. Marathas and Afghans
  - ☐ 4. Marathas and Mughals

Question Type : MCQ  
Question ID : 264330137776  
Option 1 ID : 264330539713  
Option 2 ID : 264330539714  
Option 3 ID : 264330539711  
Option 4 ID : 264330539712  
Status : Answered  
Chosen Option : 4

Q.7 'The Race of My Life: An Autobiography' is written by which famous athlete?

- Ans
- ☐ 1. Rajwinder Kaur
  - ☒ 2. Milkha Singh
  - ☐ 3. Nitender Rawat
  - ☐ 4. PV Sindhu

Question Type : MCQ  
Question ID : 264330138251  
Option 1 ID : 264330541613  
Option 2 ID : 264330541614  
Option 3 ID : 264330541612  
Option 4 ID : 264330541611  
Status : Answered  
Chosen Option : 2

Q.8 The star athlete Jwala Gutta is associated with which sport?

- Ans
- ☐ 1. Table Tennis
  - ☐ 2. Squash
  - ☐ 3. Lawn Tennis
  - ☒ 4. Badminton

Question Type : MCQ  
 Question ID : 264330137784  
 Option 1 ID : 264330539746  
 Option 2 ID : 264330539743  
 Option 3 ID : 264330539745  
 Option 4 ID : 264330539744  
 Status : Answered  
 Chosen Option : 4

Q.9 The bodies of living organism are made of tiny units called \_\_\_\_\_.

- Ans
- ☐ 1. genes
  - ☐ 2. centrioles
  - ☐ 3. buds
  - ☒ 4. cells

Question Type : MCQ  
 Question ID : 264330138662  
 Option 1 ID : 264330543256  
 Option 2 ID : 264330543257  
 Option 3 ID : 264330543255  
 Option 4 ID : 264330543258  
 Status : Answered  
 Chosen Option : 4

Q.10 Volleyball is played by two teams of \_\_\_\_\_ players each.

- Ans
- ☐ 1. eight
  - ☐ 2. five
  - ☐ 3. seven
  - ☒ 4. six

Question Type : MCQ  
 Question ID : 264330138652  
 Option 1 ID : 264330543218  
 Option 2 ID : 264330543215  
 Option 3 ID : 264330543217  
 Option 4 ID : 264330543216  
 Status : Answered  
 Chosen Option : 4

Q.11 What is the characteristic of isotopes?

- Ans
- ☒ 1. Same neutron and same proton
  - ☒ 2. Same atomic number and different mass number
  - ☒ 3. Same atomic number and same mass number
  - ☒ 4. Same neutron and different proton

Question Type : MCQ  
Question ID : 264330137766  
Option 1 ID : 264330539674  
Option 2 ID : 264330539672  
Option 3 ID : 264330539671  
Option 4 ID : 264330539673  
Status : Answered  
Chosen Option : 2

Q.12 The long term objective of National Population Policy (NPP) 2000 is to achieve a stable population by \_\_\_\_\_ with sustainable economic growth, social development and environmental protection.

- Ans
- ☒ 1. 2045
  - ☒ 2. 2035
  - ☒ 3. 2025
  - ☒ 4. 2055

Question Type : MCQ  
Question ID : 264330138891  
Option 1 ID : 264330544173  
Option 2 ID : 264330544172  
Option 3 ID : 264330544171  
Option 4 ID : 264330544174  
Status : Not Answered  
Chosen Option : --

Q.13 Hauz-i-Sultani was constructed by \_\_\_\_\_.

- Ans
- ☒ 1. Iltutmish
  - ☒ 2. Sikandar Lodi
  - ☒ 3. Babur
  - ☒ 4. Akbar

Question Type : MCQ  
Question ID : 264330137765  
Option 1 ID : 264330539668  
Option 2 ID : 264330539669  
Option 3 ID : 264330539667  
Option 4 ID : 264330539670  
Status : Answered  
Chosen Option : 2

Q.14 Which type of farming is practiced to meet the needs of the farmer's family?

- Ans
- ☐ 1. Pisciculture farming
  - ☒ 2. Subsistence farming
  - ☐ 3. Commercial farming
  - ☐ 4. Sericulture farming

Question Type : MCQ

Question ID : 264330138263

Option 1 ID : 264330541662

Option 2 ID : 264330541661

Option 3 ID : 264330541659

Option 4 ID : 264330541660

Status : Marked For Review

Chosen Option : 3

Q.15 Which of the following articles of the Indian constitution is related to "Organisation of village panchayats"?

- Ans
- ☐ 1. Article 43
  - ☒ 2. Article 40
  - ☐ 3. Article 42
  - ☐ 4. Article 41

Question Type : MCQ

Question ID : 264330138661

Option 1 ID : 264330543254

Option 2 ID : 264330543251

Option 3 ID : 264330543253

Option 4 ID : 264330543252

Status : Answered

Chosen Option : 2

Q.16 Who, with the help of Kautilya, overthrew Dhanananda, the last Nanda ruler?

- Ans
- ☐ 1. Kalashoka
  - ☒ 2. Chandragupta Maurya
  - ☐ 3. Ashoka
  - ☐ 4. Akbar

Question Type : MCQ

Question ID : 264330133661

Option 1 ID : 264330523670

Option 2 ID : 264330523669

Option 3 ID : 264330523667

Option 4 ID : 264330523668

Status : Answered

Chosen Option : 2



Q.17 Who built the Red Fort in Delhi?

- Ans
- ☐ 1. Jahangir
  - ☐ 2. Babur
  - ☒ 3. Shah Jahan
  - ☐ 4. Humayun

Question Type : MCQ  
Question ID : 264330137775  
Option 1 ID : 264330539710  
Option 2 ID : 264330539709  
Option 3 ID : 264330539708  
Option 4 ID : 264330539707  
Status : Answered  
Chosen Option : 3

Q.18 Angela Merkel who recently won UN refugee prize is \_\_\_\_\_.

- Ans
- ☐ 1. UN High Commissioner for Refugees
  - ☐ 2. Secretary-General of United Nations
  - ☐ 3. President of Ukraine
  - ☒ 4. Former German Chancellor

Question Type : MCQ  
Question ID : 264330138657  
Option 1 ID : 264330543237  
Option 2 ID : 264330543238  
Option 3 ID : 264330543236  
Option 4 ID : 264330543235  
Status : Answered  
Chosen Option : 4

Q.19 Which of the following is used as an antacid to neutralize stomach acidity?

- Ans
- ☐ 1. Iodoform
  - ☐ 2. Morphine
  - ☐ 3. Chlorine
  - ☒ 4. Magnesium Hydroxide

Question Type : MCQ  
Question ID : 264330137768  
Option 1 ID : 264330539682  
Option 2 ID : 264330539681  
Option 3 ID : 264330539680  
Option 4 ID : 264330539679  
Status : Answered  
Chosen Option : 4

Q.20 As per census 2011, which state of India has the least population?

- Ans ☒ 1. Sikkim  
☐ 2. Kerala  
☐ 3. Chhattisgarh  
☐ 4. Bihar

Question Type : MCQ  
Question ID : 264330133659  
Option 1 ID : 264330523661  
Option 2 ID : 264330523660  
Option 3 ID : 264330523659  
Option 4 ID : 264330523662  
Status : Answered  
Chosen Option : 1

Q.21 Dhangar dance comes from the Dhangar community of \_\_\_\_\_.

- Ans ☐ 1. Andhra Pradesh  
☐ 2. Gujarat  
☐ 3. Tamil Nadu  
☒ 4. Goa

Question Type : MCQ  
Question ID : 264330138649  
Option 1 ID : 264330543204  
Option 2 ID : 264330543205  
Option 3 ID : 264330543203  
Option 4 ID : 264330543206  
Status : Not Answered  
Chosen Option : --

Q.22 Change in the inventory of a firm is treated as \_\_\_\_\_.

- Ans ☐ 1. Disinvestment  
☒ 2. Investment  
☐ 3. Liability  
☐ 4. Asset

Question Type : MCQ  
Question ID : 264330138256  
Option 1 ID : 264330541634  
Option 2 ID : 264330541632  
Option 3 ID : 264330541631  
Option 4 ID : 264330541633  
Status : Not Answered  
Chosen Option : --

Q.23 Which of the following ocean is the smallest in the world?

- Ans
- ☒ 1. Pacific Ocean
  - ☒ 2. Arctic Ocean
  - ☒ 3. Indian Ocean
  - ☒ 4. Atlantic Ocean

Question Type : MCQ  
 Question ID : 264330137769  
 Option 1 ID : 264330539684  
 Option 2 ID : 264330539683  
 Option 3 ID : 264330539686  
 Option 4 ID : 264330539685  
 Status : Answered  
 Chosen Option : 2

Q.24 Bastar Dussehra is a famous festival of \_\_\_\_\_ state of India.

- Ans
- ☒ 1. Chhattisgarh
  - ☒ 2. Manipur
  - ☒ 3. Bihar
  - ☒ 4. Arunachal Pradesh

Question Type : MCQ  
 Question ID : 264330133651  
 Option 1 ID : 264330523627  
 Option 2 ID : 264330523630  
 Option 3 ID : 264330523629  
 Option 4 ID : 264330523628  
 Status : Answered  
 Chosen Option : 1

Q.25 Who among the following was awarded the prestigious title of 'Nriyacharya' conferred by the Maharaja of Manipur?

- Ans
- ☒ 1. Guru Bipin Singh
  - ☒ 2. Rukmini Devi
  - ☒ 3. Uday Shankar
  - ☒ 4. Guru Kelucharan Mohapatra

Question Type : MCQ  
 Question ID : 264330138253  
 Option 1 ID : 264330541620  
 Option 2 ID : 264330541621  
 Option 3 ID : 264330541622  
 Option 4 ID : 264330541619  
 Status : Marked For Review  
 Chosen Option : 1

**Q.1** Improve the underlined part of the sentence. Choose 'No improvement' as an answer if the sentence is grammatically correct.

It's going to rain today whether you like it or not.

- Ans**
- ☒ 1. you likened it
  - ☒ 2. you liked it
  - ☒ 3. you likes it
  - ☒ 4. No improvement

Question Type : **MCQ**  
 Question ID : **264330136825**  
 Option 1 ID : **264330535997**  
 Option 2 ID : **264330535996**  
 Option 3 ID : **264330535995**  
 Option 4 ID : **264330535998**  
 Status : **Answered**  
 Chosen Option : **4**

**Q.2** Select the most appropriate option to fill in the blank.

\_\_\_\_\_ food consumption can affect our bodies' immune systems.

- Ans**
- ☒ 1. Unhygienic
  - ☒ 2. Nutritious
  - ☒ 3. Sanitary
  - ☒ 4. Unwise

Question Type : **MCQ**  
 Question ID : **264330136794**  
 Option 1 ID : **264330535877**  
 Option 2 ID : **264330535876**  
 Option 3 ID : **264330535878**  
 Option 4 ID : **264330535875**  
 Status : **Answered**  
 Chosen Option : **1**

**Q.3** Select the most appropriate antonym of the given word.

Maladroit

- Ans**
- ☒ 1. Skilful
  - ☒ 2. Arrogant
  - ☒ 3. Inept
  - ☒ 4. Awkward

Question Type : **MCQ**  
 Question ID : **264330136231**  
 Option 1 ID : **264330533711**  
 Option 2 ID : **264330533714**  
 Option 3 ID : **264330533713**  
 Option 4 ID : **264330533712**  
 Status : **Marked For Review**  
 Chosen Option : **1**

**Q.4** Improve the underlined part of the sentence. Choose 'No improvement' as an answer if the sentence is grammatically correct.

Many restaurants serving compliment bread with the meal.

- Ans**
- ☒ 1. serve compliment
  - ☒ 2. No improvement
  - ☒ 3. serves complimentary
  - ☒ 4. serve complimentary

Question Type : MCQ  
Question ID : 264330135285  
Option 1 ID : 264330530055  
Option 2 ID : 264330530058  
Option 3 ID : 264330530057  
Option 4 ID : 264330530056  
Status : Answered  
Chosen Option : 4

**Q.5** Select the most appropriate word for the given group of words.

To forbid something, especially by law

- Ans**
- ☒ 1. Propound
  - ☒ 2. Proscribe
  - ☒ 3. Quench
  - ☒ 4. Quarantine

Question Type : MCQ  
Question ID : 264330136227  
Option 1 ID : 264330533697  
Option 2 ID : 264330533698  
Option 3 ID : 264330533696  
Option 4 ID : 264330533695  
Status : Marked For Review  
Chosen Option : 4

**Q.6** In the following question, out of the given four alternatives, select the alternative which best expresses the meaning of the Idiom/Phrase.

Bark up the wrong tree

- Ans**
- ☒ 1. To invest one's money in wrong business
  - ☒ 2. To scold someone for the mistake they have not done
  - ☒ 3. To reach at a wrong address
  - ☒ 4.

To waste one's energy or effort by pursuing the wrong thing

Question Type : MCQ  
Question ID : 264330136790  
Option 1 ID : 264330535861  
Option 2 ID : 264330535862  
Option 3 ID : 264330535860  
Option 4 ID : 264330535859  
Status : Marked For Review  
Chosen Option : 4

Q.7 Select the appropriate antonym for the underlined word.

We frequently congratulate people on their accomplishment in becoming famous, but we seldom ever talk about the price of fame.

- Ans
- ☒ 1. Execution
  - ☒ 2. Feat
  - ☒ 3. Fiasco
  - ☒ 4. Triumph

Question Type : MCQ

Question ID : 264330136788

Option 1 ID : 264330535854

Option 2 ID : 264330535851

Option 3 ID : 264330535852

Option 4 ID : 264330535853

Status : Answered

Chosen Option : 2

Q.8 Choose the sentence with no spelling error.

- Ans
- ☒ 1. Sneha caught it and frouned.
  - ☒ 2. Sneha caught it and frownned.
  - ☒ 3. Sneha cuaght it and frowned.
  - ☒ 4. Sneha caught it and frowned.

Question Type : MCQ

Question ID : 264330134317

Option 1 ID : 264330526262

Option 2 ID : 264330526259

Option 3 ID : 264330526260

Option 4 ID : 264330526261

Status : Answered

Chosen Option : 4

Q.9 Select the appropriate synonym for the underlined word.

The physics of laser-driven fusion is very complex.

- Ans
- ☒ 1. Convoluted
  - ☒ 2. Streamline
  - ☒ 3. Simplified
  - ☒ 4. Modest

Question Type : MCQ

Question ID : 264330136785

Option 1 ID : 264330535840

Option 2 ID : 264330535839

Option 3 ID : 264330535841

Option 4 ID : 264330535842

Status : Answered

Chosen Option : 1

Q.10 Choose the word that can substitute the given group of words.

Impossible to change or reverse

- Ans ☒ 1. Irrevocable  
☒ 2. Order  
☒ 3. Coerce  
☒ 4. Intimidate

Question Type : MCQ  
 Question ID : 264330136784  
 Option 1 ID : 264330535838  
 Option 2 ID : 264330535836  
 Option 3 ID : 264330535837  
 Option 4 ID : 264330535835  
 Status : Answered  
 Chosen Option : 1

Q.11 Improve the underlined part of the sentence. Choose 'No improvement' as an answer if the sentence is grammatically correct.

You can't bought anything with one cent anymore.

- Ans ☒ 1. should not bought anything  
☒ 2. No improvement  
☒ 3. could not buying anything  
☒ 4. can't buy anything

Question Type : MCQ  
 Question ID : 264330136800  
 Option 1 ID : 264330535900  
 Option 2 ID : 264330535902  
 Option 3 ID : 264330535899  
 Option 4 ID : 264330535901  
 Status : Answered  
 Chosen Option : 4

Q.12 A sentence has been given with a blank to be filled with an appropriate option. Choose the correct alternative.

I don't remember exactly when the clouds rolled in and \_\_\_\_\_ you from me.

- Ans ☒ 1. steal  
☒ 2. stole  
☒ 3. stealing  
☒ 4. stolen

Question Type : MCQ  
 Question ID : 264330134301  
 Option 1 ID : 264330526202  
 Option 2 ID : 264330526200  
 Option 3 ID : 264330526199  
 Option 4 ID : 264330526201  
 Status : Answered  
 Chosen Option : 2



Q.13 Find the part of the given sentence that has an error in it. If there is no error, choose 'No error'.

It's your carelessness that makes me went crazy all the time.

- Ans
- ☒ 1. crazy all the time.
  - ☒ 2. that makes me went
  - ☒ 3. No error
  - ☒ 4. It's your carelessness

Question Type : MCQ  
Question ID : 264330134772  
Option 1 ID : 264330528037  
Option 2 ID : 264330528036  
Option 3 ID : 264330528038  
Option 4 ID : 264330528035  
Status : Answered  
Chosen Option : 2

Q.14 Select the most appropriate meaning of the given idiom.

Queer somebody's pitch

- Ans
- ☒ 1. A secret plan
  - ☒ 2. Upset someone's plans
  - ☒ 3. To make an exaggerated statement
  - ☒ 4. To come out successfully

Question Type : MCQ  
Question ID : 264330136233  
Option 1 ID : 264330533721  
Option 2 ID : 264330533720  
Option 3 ID : 264330533722  
Option 4 ID : 264330533719  
Status : Answered  
Chosen Option : 3

Q.15 Select the most appropriate option to fill in the blank.  
"The Boarded Window" is a horror story about a man who has to \_\_\_\_\_ with his wife's death.

- Ans
- ☒ 1. deal
  - ☒ 2. dwell
  - ☒ 3. drill
  - ☒ 4. deed

Question Type : MCQ  
Question ID : 264330134318  
Option 1 ID : 264330526263  
Option 2 ID : 264330526265  
Option 3 ID : 264330526264  
Option 4 ID : 264330526266  
Status : Answered  
Chosen Option : 1

**Q.16** Find the part of the given sentence that has an error in it. If there is no error, choose 'No error'.  
The government have a rudimentary plan for an ecosystem for defence startups to fast-forward innovation.

- Ans**
- ☒ 1. to fast-forward innovation.
  - ☒ 2. an ecosystem for defence startups
  - ☒ 3. The government have a rudimentary plan for
  - ☒ 4. No error

Question Type : **MCQ**  
Question ID : **264330136771**  
Option 1 ID : **264330535789**  
Option 2 ID : **264330535788**  
Option 3 ID : **264330535787**  
Option 4 ID : **264330535790**  
Status : **Answered**  
Chosen Option : **3**

**Q.17** Choose the incorrectly spelt word.

- Ans**
- ☒ 1. Shocker
  - ☒ 2. Tram
  - ☒ 3. Booking
  - ☒ 4. Rubing

Question Type : **MCQ**  
Question ID : **264330136791**  
Option 1 ID : **264330535864**  
Option 2 ID : **264330535866**  
Option 3 ID : **264330535865**  
Option 4 ID : **264330535863**  
Status : **Answered**  
Chosen Option : **4**

**Q.18** Choose the word that means the same as the given word.  
Upsetting

- Ans**
- ☒ 1. Dreamy
  - ☒ 2. Aware
  - ☒ 3. Amusing
  - ☒ 4. Perturbing

Question Type : **MCQ**  
Question ID : **264330134337**  
Option 1 ID : **264330526338**  
Option 2 ID : **264330526337**  
Option 3 ID : **264330526336**  
Option 4 ID : **264330526335**  
Status : **Answered**  
Chosen Option : **4**

**Q.19** Find the part of the given sentence that has an error in it. If there is no error, choose 'No error'.

When you're chatting on the phone, do it in the living room instead off the kitchen.

- Ans**
- ☒ 1. No error
  - ☒ 2. When you're chatting on
  - ☒ 3. the phone, do it in the living room
  - ☒ 4. instead off the kitchen.

Question Type : **MCQ**

Question ID : **264330136822**

Option 1 ID : **264330535986**

Option 2 ID : **264330535983**

Option 3 ID : **264330535984**

Option 4 ID : **264330535985**

Status : **Answered**

Chosen Option : **4**

**Q.20** A sentence has been given with a blank to be filled with an appropriate option. Choose the correct alternative.

Sam was 24 years old when he \_\_\_\_\_ to California.

- Ans**
- ☒ 1. moving
  - ☒ 2. moves
  - ☒ 3. moved
  - ☒ 4. movement

Question Type : **MCQ**

Question ID : **264330136775**

Option 1 ID : **264330535803**

Option 2 ID : **264330535804**

Option 3 ID : **264330535805**

Option 4 ID : **264330535806**

Status : **Answered**

Chosen Option : **3**

### Comprehension:

In the following passage some words have been deleted. Fill in the blanks with the help of the alternatives given. Select the most appropriate option for each number.

One of the myths (1) \_\_\_\_\_ with the Great Wall of China is that it is the only man-made (2) \_\_\_\_\_ that can be seen from the moon with the naked eye. The (3) \_\_\_\_\_ originated in Richard Halliburton's 1938 book Second Book of Marvels. However, this myth is simply not true. Richard Halliburton's claim was contradicted (4) \_\_\_\_\_ astronauts Neil Armstrongby and Yang Liwei. A more (5) \_\_\_\_\_ assumption would be to say that the Great Wall can be visible from a low orbit of the earth which is not unique in this regard as many other artificial constructions can be seen from that height.

#### SubQuestion No : 21

Q.21 Select the most appropriate option to fill in blank number 1.

- Ans
- ☒ 1. disassociated
  - ☒ 2. organized
  - ☒ 3. depreciated
  - ☒ 4. associated

Question Type : MCQ

Question ID : 264330136222

Option 1 ID : 264330533677

Option 2 ID : 264330533676

Option 3 ID : 264330533675

Option 4 ID : 264330533678

Status : Answered

Chosen Option : 4

### Comprehension:

In the following passage some words have been deleted. Fill in the blanks with the help of the alternatives given. Select the most appropriate option for each number.

One of the myths (1) \_\_\_\_\_ with the Great Wall of China is that it is the only man-made (2) \_\_\_\_\_ that can be seen from the moon with the naked eye. The (3) \_\_\_\_\_ originated in Richard Halliburton's 1938 book Second Book of Marvels. However, this myth is simply not true. Richard Halliburton's claim was contradicted (4) \_\_\_\_\_ astronauts Neil Armstrongby and Yang Liwei. A more (5) \_\_\_\_\_ assumption would be to say that the Great Wall can be visible from a low orbit of the earth which is not unique in this regard as many other artificial constructions can be seen from that height.

#### SubQuestion No : 22

Q.22 Select the most appropriate option to fill in blank number 2.

- Ans
- ☒ 1. structure
  - ☒ 2. contracture
  - ☒ 3. conjecture
  - ☒ 4. sculpture

Question Type : MCQ

Question ID : 264330136223

Option 1 ID : 264330533679

Option 2 ID : 264330533681

Option 3 ID : 264330533682

Option 4 ID : 264330533680

Status : Answered

Chosen Option : 1

### Comprehension:

In the following passage some words have been deleted. Fill in the blanks with the help of the alternatives given. Select the most appropriate option for each number.

One of the myths (1) \_\_\_\_\_ with the Great Wall of China is that it is the only man-made (2) \_\_\_\_\_ that can be seen from the moon with the naked eye. The (3) \_\_\_\_\_ originated in Richard Halliburton's 1938 book Second Book of Marvels. However, this myth is simply not true. Richard Halliburton's claim was contradicted (4) \_\_\_\_\_ astronauts Neil Armstrongby and Yang Liwei. A more (5) \_\_\_\_\_ assumption would be to say that the Great Wall can be visible from a low orbit of the earth which is not unique in this regard as many other artificial constructions can be seen from that height.

### SubQuestion No : 23

Q.23 Select the most appropriate option to fill in blank number 3.

- Ans
- ☐ 1. legend
  - ☐ 2. verity
  - ☒ 3. legend
  - ☐ 4. candour

Question Type : MCQ

Question ID : 264330136224

Option 1 ID : 264330533684

Option 2 ID : 264330533683

Option 3 ID : 264330533685

Option 4 ID : 264330533686

Status : Answered

Chosen Option : 2

### Comprehension:

In the following passage some words have been deleted. Fill in the blanks with the help of the alternatives given. Select the most appropriate option for each number.

One of the myths (1) \_\_\_\_\_ with the Great Wall of China is that it is the only man-made (2) \_\_\_\_\_ that can be seen from the moon with the naked eye. The (3) \_\_\_\_\_ originated in Richard Halliburton's 1938 book Second Book of Marvels. However, this myth is simply not true. Richard Halliburton's claim was contradicted (4) \_\_\_\_\_ astronauts Neil Armstrongby and Yang Liwei. A more (5) \_\_\_\_\_ assumption would be to say that the Great Wall can be visible from a low orbit of the earth which is not unique in this regard as many other artificial constructions can be seen from that height.

### SubQuestion No : 24

Q.24 Select the most appropriate option to fill in blank number 4.

- Ans
- ☐ 1. from
  - ☒ 2. by
  - ☐ 3. under
  - ☐ 4. in

Question Type : MCQ

Question ID : 264330136225

Option 1 ID : 264330533689

Option 2 ID : 264330533688

Option 3 ID : 264330533690

Option 4 ID : 264330533687

Status : Answered

Chosen Option : 2

### Comprehension:

In the following passage some words have been deleted. Fill in the blanks with the help of the alternatives given. Select the most appropriate option for each number.

One of the myths (1) \_\_\_\_\_ with the Great Wall of China is that it is the only man-made (2) \_\_\_\_\_ that can be seen from the moon with the naked eye. The (3) \_\_\_\_\_ originated in Richard Halliburton's 1938 book Second Book of Marvels. However, this myth is simply not true. Richard Halliburton's claim was contradicted (4) \_\_\_\_\_ astronauts Neil Armstrongby and Yang Liwei. A more (5) \_\_\_\_\_ assumption would be to say that the Great Wall can be visible from a low orbit of the earth which is not unique in this regard as many other artificial constructions can be seen from that height.

SubQuestion No : 25

Q.25 Select the most appropriate option to fill in blank number 5.

- Ans
- ☒ 1. apprehensible
  - ☒ 2. accessible
  - ☒ 3. permissible
  - ☒ 4. plausible

Question Type : MCQ

Question ID : 264330136226

Option 1 ID : 264330533693

Option 2 ID : 264330533691

Option 3 ID : 264330533692

Option 4 ID : 264330533694

Status : Answered

Chosen Option : 4

