

Multi Tasking Non Technical Staff and Havaladar CBIC and CBN Examination 2022

Roll Number	
Candidate Name	
Venue Name	iON Digital Zone iDZ Naino Ka Bas
Exam Date	18/05/2023
Exam Time	3:30 PM - 5:00 PM
Subject	MTS Non Tech Havaladar CBIC and CBN Examination 2022

Section : Numerical and Mathematical Ability

Q.1 The value of $\left\{\frac{3}{4} \text{ of } 60 \div 9\right\} \times 0.02$ is:

- Ans ☒ 1. 0.10
☒ 2. 0.20
☒ 3. 0.05
☒ 4. 0.02

Question Type : MCQ

Question ID : 264330134081

Option 1 ID : 264330525349

Option 2 ID : 264330525350

Option 3 ID : 264330525348

Option 4 ID : 264330525347

Status : Answered

Chosen Option : 1

Q.2 The sum of three numbers is 126. If the ratio of the first to third is 3:7 and that of second to third is 4:7, then what is the second number?

- Ans ☒ 1. 36
☒ 2. 27
☒ 3. 63
☒ 4. 56

Question Type : MCQ

Question ID : 264330134089

Option 1 ID : 264330525381

Option 2 ID : 264330525379

Option 3 ID : 264330525380

Option 4 ID : 264330525382

Status : Answered

Chosen Option : 1

Test Prime

**ALL EXAMS,
ONE SUBSCRIPTION**



70,000+
Mock Tests



**Personalised
Report Card**



**Unlimited
Re-Attempt**



600+
Exam Covered



**Previous Year
Papers**



**500%
Refund**



ATTEMPT FREE MOCK NOW

Q.3 How many solid spherical balls each of 33 cm radius can be made out of a solid spherical ball of radius 66 cm?

- Ans** ☒ 1. 8
☐ 2. 4
☐ 3. 7
☐ 4. 3

Question Type : **MCQ**

Question ID : **264330135389**

Option 1 ID : **264330530464**

Option 2 ID : **264330530465**

Option 3 ID : **264330530466**

Option 4 ID : **264330530463**

Status : **Answered**

Chosen Option : 1

Q.4 The salaries of Kabir and Vicky are in the ratio 5:2. If the increments of 20% and 12% are allowed respectively in their salaries, then what will be new ratio of their salaries?

- Ans** ☐ 1. 25:73
☐ 2. 81:28
☒ 3. 75:28
☐ 4. 91:25

Question Type : **MCQ**

Question ID : **264330134090**

Option 1 ID : **264330525384**

Option 2 ID : **264330525385**

Option 3 ID : **264330525383**

Option 4 ID : **264330525386**

Status : **Answered**

Chosen Option : 3

Q.5 A truck travels 40 km in first hour and 50 km in second hour. What is the average speed of truck?

- Ans** ☒ 1. 45 km/hr
☐ 2. 40 km/hr
☐ 3. 48 km/hr
☐ 4. 50 km/hr

Question Type : **MCQ**

Question ID : **264330138439**

Option 1 ID : **264330542366**

Option 2 ID : **264330542363**

Option 3 ID : **264330542365**

Option 4 ID : **264330542364**

Status : **Answered**

Chosen Option : 1

Q.6 Meena complete a journey in 33 hours. She travels one-fourth distance of the journey at the speed of 60 km/hr and remaining distance at 40 km/hr. What is the total journey in km?

- Ans**
- ☒ 1. 1220 km
 - ☒ 2. 480 km
 - ☒ 3. 1440 km
 - ☒ 4. 680 km

Question Type : MCQ

Question ID : 264330134093

Option 1 ID : 264330525397

Option 2 ID : 264330525395

Option 3 ID : 264330525398

Option 4 ID : 264330525396

Status : Answered

Chosen Option : 3

Q.7 Two successive price increases of 15% and 40% of an article are equivalent to a single price increase of:

- Ans**
- ☒ 1. 61%
 - ☒ 2. 52%
 - ☒ 3. 55%
 - ☒ 4. 60%

Question Type : MCQ

Question ID : 264330138730

Option 1 ID : 264330543529

Option 2 ID : 264330543530

Option 3 ID : 264330543528

Option 4 ID : 264330543527

Status : Answered

Chosen Option : 1

Q.8 P, Q and R alone can complete a piece of work in 30 hours, 10 hours and 15 hours respectively. In how much time they will finish the work, if they worked together?

- Ans**
- ☒ 1. 5 hours
 - ☒ 2. 4 hours
 - ☒ 3. 8 hours
 - ☒ 4. 10 hours

Question Type : MCQ

Question ID : 264330138739

Option 1 ID : 264330543563

Option 2 ID : 264330543564

Option 3 ID : 264330543566

Option 4 ID : 264330543565

Status : Answered

Chosen Option : 1

Q.9 A sum becomes Rs. 14,400 in 3 years and Rs. 15,500 in 4 years at simple interest. Find the sum.

- Ans** ☒ 1. Rs. 11,100
☒ 2. Rs. 10,000
☒ 3. Rs. 10,080
☒ 4. Rs. 20,000

Question Type : **MCQ**

Question ID : **264330138380**

Option 1 ID : **264330542129**

Option 2 ID : **264330542128**

Option 3 ID : **264330542127**

Option 4 ID : **264330542130**

Status : **Answered**

Chosen Option : **1**

Q.10 If the diagonal of a square is 18.4 cm, then the area of that square is:

- Ans** ☒ 1. 84.64 cm²
☒ 2. 338.56 cm²
☒ 3. 324.42 cm²
☒ 4. 169.28 cm²

Question Type : **MCQ**

Question ID : **264330138743**

Option 1 ID : **264330543582**

Option 2 ID : **264330543580**

Option 3 ID : **264330543579**

Option 4 ID : **264330543581**

Status : **Answered**

Chosen Option : **4**

Q.11 The average age of P, Q and R is 19 years and that of P and Q is 20 years. R's present age is:

- Ans** ☒ 1. 17 years
☒ 2. 15 years
☒ 3. 20 years
☒ 4. 22 years

Question Type : **MCQ**

Question ID : **264330134083**

Option 1 ID : **264330525357**

Option 2 ID : **264330525358**

Option 3 ID : **264330525355**

Option 4 ID : **264330525356**

Status : **Answered**

Chosen Option : **1**

Q.12 The table given below shows the income of two companies P and Q in seven years.

Years	P	Q
Y1	200	250
Y2	350	150
Y3	500	650
Y4	650	450
Y5	600	550
Y6	450	700
Y7	400	500

Which of the following statement is NOT correct?

- I. The income of P in year Y1 is 20 percent less than the income of Q in the year Y1.
- II. The ratio of total income of P to the total income of Q in all years are 63 : 64.

- Ans ☒ 1. Only I
- ☒ 2. Only II
- ☒ 3. Both I and II
- ☒ 4. Neither I nor II

Question Type : MCQ

Question ID : 264330137663

Option 1 ID : 264330539259

Option 2 ID : 264330539260

Option 3 ID : 264330539261

Option 4 ID : 264330539262

Status : Answered

Chosen Option : 2

Q.13 Rohit buys an old bat for Rs. 1280 and spends Rs. 120 on its repairing. If he sells it for Rs. 1050, then what is the loss percentage?

- Ans ☒ 1. 40 percent
- ☒ 2. 25 percent
- ☒ 3. 20 percent
- ☒ 4. 30 percent

Question Type : MCQ

Question ID : 264330137159

Option 1 ID : 264330537279

Option 2 ID : 264330537281

Option 3 ID : 264330537282

Option 4 ID : 264330537280

Status : Answered

Chosen Option : 2

Q.14 What is the value of $2[1.5 \times 1.5 + 0.5 \times 0.5]$?

- Ans
- ☐ 1. 4.5
 - ☐ 2. 4
 - ☐ 3. 10
 - ☒ 4. 5

Question Type : MCQ

Question ID : 264330137662

Option 1 ID : 264330539256

Option 2 ID : 264330539255

Option 3 ID : 264330539258

Option 4 ID : 264330539257

Status : Answered

Chosen Option : 4

Q.15 A refrigerator and a washing machine were sold for Rs. 24000 each. If the refrigerator was sold at a gain of 20% and the washing machine at a loss of 20%. What is the overall profit or loss percent in the whole transaction?

- Ans
- ☐ 1. 4% profit
 - ☐ 2. 5% profit
 - ☒ 3. 4% loss
 - ☐ 4. 5% loss

Question Type : MCQ

Question ID : 264330134087

Option 1 ID : 264330525371

Option 2 ID : 264330525372

Option 3 ID : 264330525373

Option 4 ID : 264330525374

Status : Answered

Chosen Option : 3

Q.16 A alone can do $\frac{1}{4}$ part of the work in 12 days. B alone can do $\frac{1}{5}$ part of the work in 4 days. In how many days can A and B together can do the same work?

- Ans
- ☐ 1. 330/13 days
 - ☒ 2. 240/17 days
 - ☐ 3. 210/4 days
 - ☐ 4. 255/7 days

Question Type : MCQ

Question ID : 264330135384

Option 1 ID : 264330530445

Option 2 ID : 264330530444

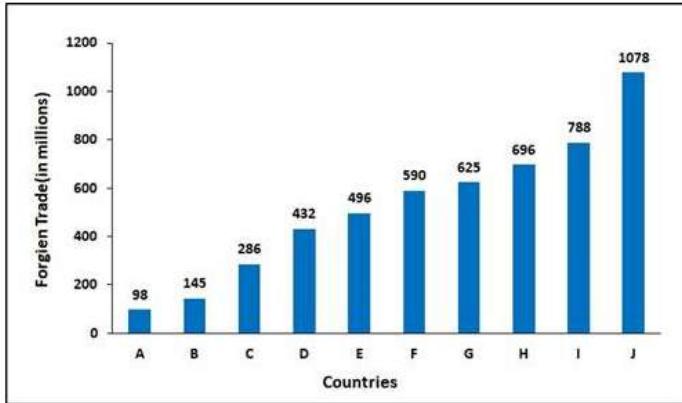
Option 3 ID : 264330530446

Option 4 ID : 264330530443

Status : Answered

Chosen Option : 2

Q.17 The below bar graph shows the Foreign trade by countries for the years 2015-2016.
What was the ratio of minimum trade and maximum trade?



- Ans
- ☒ 1. 8:5
 - ☒ 2. 1:11
 - ☒ 3. 4:11
 - ☒ 4. 3:14

Question Type : MCQ

Question ID : 264330134097

Option 1 ID : 264330525413

Option 2 ID : 264330525414

Option 3 ID : 264330525412

Option 4 ID : 264330525411

Status : Answered

Chosen Option : 2

Q.18 Applied to a bill for Rs. 10000 the difference between a discount of 20% and two successive discounts of 16% and 4% is:

- Ans
- ☒ 1. Rs. 19.36
 - ☒ 2. Rs. 64
 - ☒ 3. Rs. 72
 - ☒ 4. Rs. 22.32

Question Type : MCQ

Question ID : 264330134088

Option 1 ID : 264330525375

Option 2 ID : 264330525376

Option 3 ID : 264330525378

Option 4 ID : 264330525377

Status : Answered

Chosen Option : 2

Q.19 What is the HCF of 225 and 425?

- Ans
- ☒ 1. 5
 - ☒ 2. 17
 - ☒ 3. 25
 - ☒ 4. 9

Question Type : MCQ
 Question ID : 264330138726
 Option 1 ID : 264330543511
 Option 2 ID : 264330543513
 Option 3 ID : 264330543512
 Option 4 ID : 264330543514
 Status : Answered
 Chosen Option : 3

Q.20 What will be the compound interest on Rs. 21000 at the rate of 10% per annum for 6 months compounded half-yearly?

- Ans
- ☒ 1. Rs. 1680
 - ☒ 2. Rs. 1050
 - ☒ 3. Rs. 1850
 - ☒ 4. Rs. 1250

Question Type : MCQ
 Question ID : 264330138737
 Option 1 ID : 264330543557
 Option 2 ID : 264330543555
 Option 3 ID : 264330543556
 Option 4 ID : 264330543558
 Status : Answered
 Chosen Option : 2

Section : Reasoning Ability and Problem Solving

Q.1 In the following question, select the missing number of the given series.

200, 174, 148, 122, 96, ?

- Ans
- ☒ 1. 71
 - ☒ 2. 80
 - ☒ 3. 70
 - ☒ 4. 74

Question Type : MCQ
 Question ID : 264330138594
 Option 1 ID : 264330542986
 Option 2 ID : 264330542985
 Option 3 ID : 264330542984
 Option 4 ID : 264330542983
 Status : Answered
 Chosen Option : 3

Q.2 In a certain code language, 'COSTLY' is written as '3P19U12Z'. How will 'EXTEND' be written in that language?

- Ans ☒ 1. 5Y20F14E
☒ 2. 5Y20G14E
☒ 3. 5Y30F14E
☒ 4. 5X20F14E

Question Type : MCQ

Question ID : 264330138813

Option 1 ID : 264330543861

Option 2 ID : 264330543860

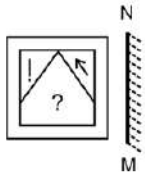
Option 3 ID : 264330543859

Option 4 ID : 264330543862

Status : Answered

Chosen Option : 1

Q.3 Select the correct mirror image of the given figure when the mirror MN is placed to the right side of the figure.



Ans

- ☒ 1.
- ☒ 2.
- ☒ 3.
- ☒ 4.

Question Type : MCQ

Question ID : 264330137579

Option 1 ID : 264330538923

Option 2 ID : 264330538925

Option 3 ID : 264330538924

Option 4 ID : 264330538926

Status : Answered

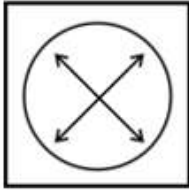
Chosen Option : 3

Q.4 Select the option figure in which the given figure (X) is embedded as its part (rotation is NOT allowed).

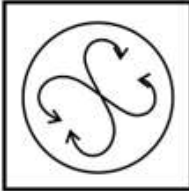


Ans

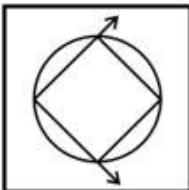
✗ 1.



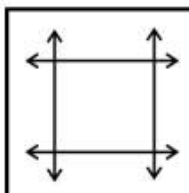
✗ 2.



✗ 3.



✓ 4.



Question Type : MCQ

Question ID : 264330137578

Option 1 ID : 264330538919

Option 2 ID : 264330538920

Option 3 ID : 264330538921

Option 4 ID : 264330538922

Status : Answered

Chosen Option : 4

Q.5 After interchanging the given two signs what will be the values of equation (I) and (II) respectively?

+ and -

I. $18 \div 3 + 6 \times 2 - 8$

II. $15 \times 3 - 45 \div 5 + 30$

- Ans**
- ☒ 1. 24 and 2
 - ☒ 2. 3 and 25
 - ☒ 3. 2 and 66
 - ☒ 4. 2 and 24

Question Type : MCQ

Question ID : 264330138494

Option 1 ID : 264330542585

Option 2 ID : 264330542586

Option 3 ID : 264330542583

Option 4 ID : 264330542584

Status : Answered

Chosen Option : 4

Q.6 Two Statements are given followed by two conclusions numbered I and II. Assuming the statements to be true, even if they seem to be at variance with commonly known facts, decide which of the conclusions logically follow (s) from the statements.

Statements:

Some pens are black.

No black is blue.

Conclusions:

I. No pen is blue.

II. Some pens are not black.

- Ans**
- ☒ 1. Only conclusion II follows
 - ☒ 2. Both conclusions I and II follow
 - ☒ 3. Only conclusion I follows
 - ☒ 4. Neither conclusion I nor II follows

Question Type : MCQ

Question ID : 264330133705

Option 1 ID : 264330523844

Option 2 ID : 264330523845

Option 3 ID : 264330523843

Option 4 ID : 264330523846

Status : Answered

Chosen Option : 1

Q.7 Three Statements are given followed by two conclusions numbered I and II. Assuming the statements to be true, even if they seem to be at variance with commonly known facts, decide which of the conclusions logically follow (s) from the statements.

Statements:

Some nachos are patties.

Some patties are pastries.

No pastry is a chocolate.

Conclusions:

I. No nacho is a chocolate.

II. Some nachos are pastries.

- Ans**
- ☒ 1. Only conclusion II follows
 - ☒ 2. Only conclusion I follows
 - ☒ 3. Neither conclusion I nor II follows
 - ☒ 4. Both conclusions I and II follow

Question Type : **MCQ**

Question ID : **264330133706**

Option 1 ID : **264330523848**

Option 2 ID : **264330523847**

Option 3 ID : **264330523850**

Option 4 ID : **264330523849**

Status : **Answered**

Chosen Option : **3**

Q.8 Select the option that is related to the fifth number in the same way as the second number is related to the first number and fourth number is related to third number.

18 : 190 :: 20 : 210 :: 22 : ?

- Ans**
- ☒ 1. 230
 - ☒ 2. 210
 - ☒ 3. 190
 - ☒ 4. 200

Question Type : **MCQ**

Question ID : **264330138596**

Option 1 ID : **264330542993**

Option 2 ID : **264330542992**

Option 3 ID : **264330542994**

Option 4 ID : **264330542991**

Status : **Answered**

Chosen Option : **1**

Q.9 M, N, O, P, Q, and R are seated at a circular table facing each other. O is to the immediate left of R and N is second to the left of O. M is second to the left of Q. Who sits immediately between R and M?

- Ans**
- ☒ 1. Q
 - ☒ 2. P
 - ☒ 3. O
 - ☒ 4. N

Question Type : **MCQ**

Question ID : **264330133703**

Option 1 ID : **264330523837**

Option 2 ID : **264330523835**

Option 3 ID : **264330523836**

Option 4 ID : **264330523838**

Status : **Answered**

Chosen Option : **2**

Q.10 Which of the following numbers will replace the question mark (?) in the given series?

46, 50, 58, 70, 86, 106, ?

Ans ☒ 1. 280

☒ 2. 130

☒ 3. 150

☒ 4. 140

Question Type : **MCQ**

Question ID : **264330133708**

Option 1 ID : **264330523856**

Option 2 ID : **264330523858**

Option 3 ID : **264330523857**

Option 4 ID : **264330523855**

Status : **Answered**

Chosen Option : **2**

Q.11 Seven students M, N, O, P, Q, R and S are standing in ascending order of their heights during morning assembly. The shortest person stands at the front of the assembly line and the tallest person stands at the back of the line. M stands immediately behind Q and immediately in front of P. Only two students are standing in between R and S. N is taller than only one student. R is not the shortest. Who is the tallest student?

Ans ☒ 1. R

☒ 2. O

☒ 3. M

☒ 4. P

Question Type : **MCQ**

Question ID : **264330133704**

Option 1 ID : **264330523840**

Option 2 ID : **264330523842**


Option 3 ID : **264330523841**

Option 4 ID : **264330523839**

Status : **Answered**

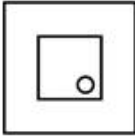
Chosen Option : **4**

Q.12 Select the option figure that will replace the question mark (?) in the figure given below to complete the pattern (rotation is not allowed).

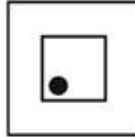


Ans

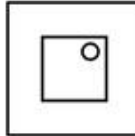
✗ 1.



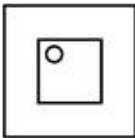
✗ 2.



✓ 3.



✗ 4.



Question Type : **MCQ**

Question ID : **264330133715**

Option 1 ID : **264330523883**

Option 2 ID : **264330523885**

Option 3 ID : **264330523886**

Option 4 ID : **264330523884**

Status : **Answered**

Chosen Option : **3**

Q.13 Which of the following letter will replace the question mark (?) in the given series?

E, J, O, T, Y, D, ?

Ans

✓ 1. **I**

✗ 2. **R**

✗ 3. **O**

✗ 4. **M**

Question Type : **MCQ**

Question ID : **264330133696**

Option 1 ID : **264330523808**

Option 2 ID : **264330523810**

Option 3 ID : **264330523809**

Option 4 ID : **264330523807**

Status : **Answered**

Chosen Option : **1**

Q.14 Select the option that is related to the third word in the same way as the second word is related to the first word.
Hyderabad : Telangana :: Gangtok : ?

- Ans**
- ☒ 1. Uttarakhand
 - ☒ 2. Sikkim
 - ☒ 3. Kerala
 - ☒ 4. Goa

Question Type : MCQ
Question ID : 264330133697
Option 1 ID : 264330523814
Option 2 ID : 264330523813
Option 3 ID : 264330523811
Option 4 ID : 264330523812
Status : Answered
Chosen Option : 2

Q.15 Study the given pattern carefully and select the number that can replace the question mark (?) in it.
First row- 11, 19, 27
Second row- 17, 25, 33
Third row- 23, 31, ?

- Ans**
- ☒ 1. 39
 - ☒ 2. 14
 - ☒ 3. 33
 - ☒ 4. 40

Question Type : MCQ
Question ID : 264330133710
Option 1 ID : 264330523864
Option 2 ID : 264330523865
Option 3 ID : 264330523866
Option 4 ID : 264330523863
Status : Answered
Chosen Option : 1

Q.16 Five men Ankit, Bishal, Chandler, Daksh and Joey are sitting at a horizontal table facing north. Ankit is to the immediate left of Daksh who is not at the corner. Joey is exactly in between Bishal and Chandler. Who is sitting at the leftmost end?

- Ans**
- ☒ 1. Bishal
 - ☒ 2. Chandler
 - ☒ 3. Ankit
 - ☒ 4. Joey

Question Type : MCQ
Question ID : 264330133702
Option 1 ID : 264330523832
Option 2 ID : 264330523834
Option 3 ID : 264330523831
Option 4 ID : 264330523833
Status : Answered
Chosen Option : 3

Q.17 In a certain code language, 'RIVER' is written as 'SJWFS' and 'BROWN' is written as 'CSPXO'. How will 'PRESS' be written in that language?

- Ans**
- ☒ 1. GSFRR
 - ☒ 2. QSFTT
 - ☒ 3. QSFUU
 - ☒ 4. QSGTT

Question Type : **MCQ**

Question ID : **264330133470**

Option 1 ID : **264330522914**

Option 2 ID : **264330522911**

Option 3 ID : **264330522913**

Option 4 ID : **264330522912**

Status : **Answered**

Chosen Option : **2**

Q.18 Select the option that is related to the third word in the same way as the second word is related to the first word.
Hydrogen : Element :: Carbon Dioxide : ?

- Ans**
- ☒ 1. Compound
 - ☒ 2. Liquid
 - ☒ 3. Organ
 - ☒ 4. Fruit

Question Type : **MCQ**

Question ID : **264330133698**

Option 1 ID : **264330523815**

Option 2 ID : **264330523818**

Option 3 ID : **264330523816**

Option 4 ID : **264330523817**

Status : **Answered**

Chosen Option : **1**

Q.19 In a certain code language, 'UKSH' is written as '8TL21'. How will 'GAIN' be written in that language?

- Ans**
- ☒ 1. 15JB7
 - ☒ 2. 14JB7
 - ☒ 3. 14JB8
 - ☒ 4. 14J7B

Question Type : **MCQ**

Question ID : **264330137792**

Option 1 ID : **264330539778**

Option 2 ID : **264330539775**

Option 3 ID : **264330539777**

Option 4 ID : **264330539776**

Status : **Answered**

Chosen Option : **2**

Q.20 Which two numbers should be interchanged to make the given equation correct?

$$12 \div 72 \times 3 - 13 = 5$$

- Ans
- ☒ 1. 13 and 5
 - ☒ 2. 13 and 3
 - ☒ 3. 12 and 3
 - ☒ 4. 12 and 72

Question Type : MCQ

Question ID : 264330133711

Option 1 ID : 264330523867

Option 2 ID : 264330523870

Option 3 ID : 264330523868

Option 4 ID : 264330523869

Status : Answered

Chosen Option : 4

Section : General Awareness

Q.1 With reference to the MGNREGA scheme, how many days of guaranteed wage employment is provided to rural unskilled labour?

- Ans
- ☒ 1. 100
 - ☒ 2. 150
 - ☒ 3. 120
 - ☒ 4. 90

Question Type : MCQ

Question ID : 264330134056

Option 1 ID : 264330525248

Option 2 ID : 264330525250

Option 3 ID : 264330525249

Option 4 ID : 264330525247

Status : Answered

Chosen Option : 1

Q.2 In 1600, the East India company acquired a charter from _____.

- Ans
- ☒ 1. Queen Elizabeth I
 - ☒ 2. King Edward VI
 - ☒ 3. King Henry IV
 - ☒ 4. Queen Victoria

Question Type : MCQ

Question ID : 264330138269

Option 1 ID : 264330541683

Option 2 ID : 264330541684

Option 3 ID : 264330541686

Option 4 ID : 264330541685

Status : Answered

Chosen Option : 1

Q.3 The Council of States shall consist of _____ members to be nominated by the President.

- Ans
- ☐ 1. six
 - ☐ 2. ten
 - ☒ 3. twelve
 - ☐ 4. five

Question Type : MCQ
Question ID : 264330134077
Option 1 ID : 264330525334
Option 2 ID : 264330525332
Option 3 ID : 264330525333
Option 4 ID : 264330525331
Status : Answered
Chosen Option : 3

Q.4 Plant cell has a big central _____ unlike a number of small _____ in animal cells.

- Ans
- ☒ 1. Vacuole, vacuoles
 - ☐ 2. Cell wall, cell walls
 - ☐ 3. Tissue, tissues
 - ☐ 4. Cell membrane, cell membranes

Question Type : MCQ
Question ID : 264330138663
Option 1 ID : 264330543260
Option 2 ID : 264330543261
Option 3 ID : 264330543259
Option 4 ID : 264330543262
Status : Answered
Chosen Option : 1

Q.5 Among the following, which of these are an example of capital receipt?

- Ans
- ☐ 1. Rent and commission received
 - ☐ 2. Sale of goods and rent
 - ☐ 3. Commission and dividend received
 - ☒ 4. Borrowings and loan recovery

Question Type : MCQ
Question ID : 264330137918
Option 1 ID : 264330540281
Option 2 ID : 264330540280
Option 3 ID : 264330540282
Option 4 ID : 264330540279
Status : Answered
Chosen Option : 1

Q.6 Which kathak dancer was awarded with Padma Shri and Sangeet Natak Akademi Award?

- Ans
- ☐ 1. Hema Malini
 - ☒ 2. Sitara Devi
 - ☐ 3. Kaushalya Reddy
 - ☐ 4. Sridevi

Question Type : MCQ
 Question ID : 264330137913
 Option 1 ID : 264330540260
 Option 2 ID : 264330540259
 Option 3 ID : 264330540262
 Option 4 ID : 264330540261
 Status : Answered
 Chosen Option : 2

Q.7 "Playing It My Way" is an autobiography of _____.

- Ans
- ☐ 1. M S Dhoni
 - ☐ 2. Rahul Dravid
 - ☒ 3. Sachin Tendulkar
 - ☐ 4. Yuvraj Singh

Question Type : MCQ
 Question ID : 264330137911
 Option 1 ID : 264330540251
 Option 2 ID : 264330540252
 Option 3 ID : 264330540254
 Option 4 ID : 264330540253
 Status : Answered
 Chosen Option : 3

Q.8 According to Census 2011, which among the following has the minimum population density?

- Ans
- ☐ 1. Chandigarh
 - ☐ 2. Andhra Pradesh
 - ☒ 3. Arunachal Pradesh
 - ☐ 4. Sikkim

Question Type : MCQ
 Question ID : 264330134655
 Option 1 ID : 264330527576
 Option 2 ID : 264330527577
 Option 3 ID : 264330527575
 Option 4 ID : 264330527578
 Status : Answered
 Chosen Option : 3

Q.9 India is set to surpass _____ to become the world's most populous country by 2023, says a report by the United Nations.

- Ans
- ☒ 1. United States of America
 - ☒ 2. Indonesia
 - ☒ 3. Pakistan
 - ☒ 4. China

Question Type : MCQ
Question ID : 264330137772
Option 1 ID : 264330539695
Option 2 ID : 264330539698
Option 3 ID : 264330539697
Option 4 ID : 264330539696
Status : Answered
Chosen Option : 4

Q.10 A temporary alliance of groups or parties is called a _____.

- Ans
- ☒ 1. Veto
 - ☒ 2. Coalition
 - ☒ 3. Constituency
 - ☒ 4. Federalism

Question Type : MCQ
Question ID : 264330138257
Option 1 ID : 264330541638
Option 2 ID : 264330541635
Option 3 ID : 264330541637
Option 4 ID : 264330541636
Status : Answered
Chosen Option : 2

Q.11 Which of the following Indian singers has won a Grammy award?

- Ans
- ☒ 1. Kumar Sanu
 - ☒ 2. Arijit Singh
 - ☒ 3. Mohammed Rafi
 - ☒ 4. A R Rahman

Question Type : MCQ
Question ID : 264330134074
Option 1 ID : 264330525321
Option 2 ID : 264330525320
Option 3 ID : 264330525322
Option 4 ID : 264330525319
Status : Answered
Chosen Option : 4

Q.12 Annie Besant laid the foundation of the Central Hindu College in _____ in 1898 where both Hindu religion and Western scientific subjects were taught.

- Ans
- ☐ 1. Pune
 - ☐ 2. Chennai
 - ☒ 3. Benaras
 - ☐ 4. Kolkata

Question Type : MCQ

Question ID : 264330137752

Option 1 ID : 264330539618

Option 2 ID : 264330539617

Option 3 ID : 264330539616

Option 4 ID : 264330539615

Status : Answered

Chosen Option : 3

Q.13 Article 356 and 360 in the Indian constitution are the articles based on _____ .

- Ans
- ☐ 1. regional languages
 - ☐ 2. amendment of the constitution
 - ☒ 3. emergency provisions
 - ☐ 4. elections

Question Type : MCQ

Question ID : 264330134076

Option 1 ID : 264330525330

Option 2 ID : 264330525329

Option 3 ID : 264330525327

Option 4 ID : 264330525328

Status : Answered

Chosen Option : 3

Q.14 Sachin Tendulkar received the "Bharat Ratna Award" in which year?

- Ans
- ☐ 1. 2012
 - ☐ 2. 2011
 - ☐ 3. 2013
 - ☒ 4. 2014

Question Type : MCQ

Question ID : 264330138653

Option 1 ID : 264330543220

Option 2 ID : 264330543219

Option 3 ID : 264330543221

Option 4 ID : 264330543222

Status : Answered

Chosen Option : 3

Q.15 Sultan Muhammad Ghori defeated Prithviraja III in _____.

- Ans
- ☐ 1. 1191
 - ☐ 2. 1211
 - ☒ 3. 1192
 - ☐ 4. 1195

Question Type : MCQ

Question ID : 264330138671

Option 1 ID : 264330543291

Option 2 ID : 264330543294

Option 3 ID : 264330543292

Option 4 ID : 264330543293

Status : Answered

Chosen Option : 3

Q.16 How many white squares are there on a chessboard?

- Ans
- ☐ 1. 64
 - ☐ 2. 204
 - ☐ 3. 22
 - ☒ 4. 32

Question Type : MCQ

Question ID : 264330134078

Option 1 ID : 264330525336

Option 2 ID : 264330525338

Option 3 ID : 264330525337

Option 4 ID : 264330525335

Status : Answered

Chosen Option : 4

Q.17 Which vitamin is soluble in water?

- Ans
- ☐ 1. Vitamin-D
 - ☐ 2. Vitamin-E
 - ☐ 3. Vitamin-A
 - ☒ 4. Vitamin-C

Question Type : MCQ

Question ID : 264330134062

Option 1 ID : 264330525273

Option 2 ID : 264330525274

Option 3 ID : 264330525272

Option 4 ID : 264330525271

Status : Answered

Chosen Option : 4

Q.18 The breaking up of the rocks on the earth's surface is called as _____.

- Ans ☒ 1. weathering
☐ 2. stacking
☐ 3. meandering
☐ 4. sorting

Question Type : MCQ

Question ID : 264330138664

Option 1 ID : 264330543264

Option 2 ID : 264330543266

Option 3 ID : 264330543263

Option 4 ID : 264330543265

Status : Answered

Chosen Option : 1

Q.19 The Elephanta Caves are located in which state?

- Ans ☐ 1. Gujarat
☐ 2. Rajasthan
☒ 3. Maharashtra
☐ 4. Karnataka

Question Type : MCQ

Question ID : 264330138248

Option 1 ID : 264330541600

Option 2 ID : 264330541599

Option 3 ID : 264330541601

Option 4 ID : 264330541602

Status : Answered

Chosen Option : 3

Q.20 Kuchipudi is a classical dance of which state?

- Ans ☐ 1. Tamil Nadu
☒ 2. Andhra Pradesh
☐ 3. Kerala
☐ 4. Bihar

Question Type : MCQ

Question ID : 264330134058

Option 1 ID : 264330525257

Option 2 ID : 264330525258

Option 3 ID : 264330525255

Option 4 ID : 264330525256

Status : Answered

Chosen Option : 2

Q.21 The Himalayan Mountain range was formed by the collision of _____ .

- Ans
- ☒ 1. African Plate and Australian Plate
 - ☒ 2. Indian Plate and African Plate
 - ☒ 3. Eurasian Plate and African Plate
 - ☒ 4. Indian Plate and Eurasian Plate

Question Type : MCQ

Question ID : 264330134066

Option 1 ID : 264330525287

Option 2 ID : 264330525289

Option 3 ID : 264330525290

Option 4 ID : 264330525288

Status : Answered

Chosen Option : 3

Q.22 The basic unit of speed of an object is _____ .

- Ans
- ☒ 1. metre per km (m/km)
 - ☒ 2. metre per hour (m/h)
 - ☒ 3. metre per second (m/s)
 - ☒ 4. metre per minute (m/m)

Question Type : MCQ

Question ID : 264330138665

Option 1 ID : 264330543270

Option 2 ID : 264330543269

Option 3 ID : 264330543267

Option 4 ID : 264330543268

Status : Answered

Chosen Option : 3

Q.23 Kicheri is a harvest festival and involves ritual bathing, celebrated majorly in _____ .

- Ans
- ☒ 1. Madhya Pradesh
 - ☒ 2. Haryana
 - ☒ 3. Uttar Pradesh
 - ☒ 4. Gujarat

Question Type : MCQ

Question ID : 264330137739

Option 1 ID : 264330539563

Option 2 ID : 264330539565

Option 3 ID : 264330539564

Option 4 ID : 264330539566

Status : Answered

Chosen Option : 1

Q.24 In which of the following methods of irrigation, the water falls drop by drop directly near the roots?

- Ans**
- ☒ 1. Manual irrigation
 - ☒ 2. Sprinkler system
 - ☒ 3. Lateral move irrigation
 - ☒ 4. Drip system

Question Type : **MCQ**
 Question ID : **264330137903**
 Option 1 ID : **264330540220**
 Option 2 ID : **264330540221**
 Option 3 ID : **264330540219**
 Option 4 ID : **264330540222**
 Status : **Answered**
 Chosen Option : **4**

Q.25 Who among the following was defeated in the Battle of Kannauj in 1540?

- Ans**
- ☒ 1. Humayun
 - ☒ 2. Akbar
 - ☒ 3. Hemu
 - ☒ 4. Sher Shah

Question Type : **MCQ**
 Question ID : **264330137749**
 Option 1 ID : **264330539604**
 Option 2 ID : **264330539605**
 Option 3 ID : **264330539603**
 Option 4 ID : **264330539606**
 Status : **Answered**
 Chosen Option : **1**

Section : English Language and Comprehension

Q.1 A sentence has been given with a blank to be filled with an appropriate option. Choose the correct alternative.
 The victim was _____ in the back of his head.

- Ans**
- ☒ 1. shot
 - ☒ 2. shooting
 - ☒ 3. shoot
 - ☒ 4. shooted

Question Type : **MCQ**
 Question ID : **264330134534**
 Option 1 ID : **264330527098**
 Option 2 ID : **264330527096**
 Option 3 ID : **264330527097**
 Option 4 ID : **264330527095**
 Status : **Answered**
 Chosen Option : **1**

Q.2 Select the most appropriate option to fill in the blank.
Although she has used the typewriter since she was eleven years old, she is rather _____ than rapid.

- Ans** ☒ 1. hasty
☒ 2. careful
☒ 3. energetic
☒ 4. heedless

Question Type : MCQ
Question ID : 264330134553
Option 1 ID : 264330527168
Option 2 ID : 264330527170
Option 3 ID : 264330527167
Option 4 ID : 264330527169
Status : Answered
Chosen Option : 1

Q.3 Select the most appropriate option to substitute the bracketed segment in the given sentence. If there is no need to substitute it, select 'no substitution required'.

(I wouldn't date him if I was you), he doesn't seem like a good person.

- Ans** ☒ 1. I wouldn't has dated him if I were you,
☒ 2. I will not date him if I were you, not
☒ 3. No substitution required
☒ 4. I wouldn't have dated him if I were you,

Question Type : MCQ
Question ID : 264330136216
Option 1 ID : 264330533656
Option 2 ID : 264330533657
Option 3 ID : 264330533658
Option 4 ID : 264330533655
Status : Answered
Chosen Option : 4

Q.4 Select the appropriate synonym for the underlined word.
They have no reason to trust you.

- Ans** ☒ 1. condemn
☒ 2. dispute
☒ 3. doubt
☒ 4. believe

Question Type : MCQ
Question ID : 264330134544
Option 1 ID : 264330527131
Option 2 ID : 264330527133
Option 3 ID : 264330527134
Option 4 ID : 264330527132
Status : Answered
Chosen Option : 4

Q.5 Improve the underlined part of the sentence. Choose 'No improvement' as an answer if the sentence is grammatically correct.

There has been a spate of some unfortunately events in Madurai.

- Ans**
- ✓ 1. unfortunate events
 - ✗ 2. unfortunately event
 - ✗ 3. No improvement
 - ✗ 4. unfortunate some events

Question Type : MCQ
 Question ID : 264330134724
 Option 1 ID : 264330527851
 Option 2 ID : 264330527852
 Option 3 ID : 264330527854
 Option 4 ID : 264330527853
 Status : Answered
 Chosen Option : 1

Q.6 In the following question, out of the given four alternatives, select the alternative which best expresses the meaning of the Idiom/Phrase.
 Get the ball rolling

- Ans**
- ✗ 1. Get everyone's vote
 - ✗ 2. Behave in a crazy manner
 - ✗ 3. Collect one's belongings
 - ✓ 4. Set an activity in motion

Question Type : MCQ
 Question ID : 264330136789
 Option 1 ID : 264330535856
 Option 2 ID : 264330535857
 Option 3 ID : 264330535858
 Option 4 ID : 264330535855
 Status : Answered
 Chosen Option : 4

Q.7 Select the wrongly spelt word.

- Ans**
- ✗ 1. Contradictory
 - ✓ 2. Disgusting
 - ✗ 3. Enclosed
 - ✗ 4. Sizeable

Question Type : MCQ
 Question ID : 264330136106
 Option 1 ID : 264330533234
 Option 2 ID : 264330533231
 Option 3 ID : 264330533233
 Option 4 ID : 264330533232
 Status : Answered
 Chosen Option : 2

Q.8 Choose the word that can substitute the given group of words.

A circular house made of blocks of hard snow

- Ans ☒ 1. Igloo
☒ 2. Nest
☒ 3. Hutch
☒ 4. Hut

Question Type : MCQ
 Question ID : 264330136783
 Option 1 ID : 264330535831
 Option 2 ID : 264330535833
 Option 3 ID : 264330535834
 Option 4 ID : 264330535832
 Status : Answered
 Chosen Option : 1

Q.9 Find the part of the given sentence that has an error in it. If there is no error, choose 'No error'.

All of the farmers I interviewed shared three things on common.

- Ans ☒ 1. All of the farmers I
☒ 2. interviewed shared three
☒ 3. No error
☒ 4. things on common.

Question Type : MCQ
 Question ID : 264330135179
 Option 1 ID : 264330529647
 Option 2 ID : 264330529648
 Option 3 ID : 264330529650
 Option 4 ID : 264330529649
 Status : Answered
 Chosen Option : 4

Q.10 Choose the incorrectly spelt word.

- Ans ☒ 1. Common
☒ 2. Friying
☒ 3. Hazard
☒ 4. Addition

Question Type : MCQ
 Question ID : 264330134550
 Option 1 ID : 264330527155
 Option 2 ID : 264330527158
 Option 3 ID : 264330527157
 Option 4 ID : 264330527156
 Status : Answered
 Chosen Option : 2

Q.11 Select the most appropriate option to fill in the blank.

Without vision, the process of conceptualisation can become _____ task for any individual.

- Ans
- ☒ 1. a gregarious
 - ☒ 2. an onerous
 - ☒ 3. a contrarious
 - ☒ 4. a lively

Question Type : MCQ

Question ID : 264330136107

Option 1 ID : 264330533235

Option 2 ID : 264330533238

Option 3 ID : 264330533237

Option 4 ID : 264330533236

Status : Answered

Chosen Option : 2

Q.12 Fill in the blank with the most appropriate option.

Earlier I'd thought that it was for my sake, but then I learnt _____ Arjun the power to resist her.

- Ans
- ☒ 1. what has gave
 - ☒ 2. what gives
 - ☒ 3. what give
 - ☒ 4. what gave

Question Type : MCQ

Question ID : 264330136246

Option 1 ID : 264330533774

Option 2 ID : 264330533772

Option 3 ID : 264330533771

Option 4 ID : 264330533773

Status : Answered

Chosen Option : 4

Q.13 Find the part of the given sentence that has an error in it. If there is no error, choose 'No error'.

You will get a discount on this products, if you buy one more outfit.

- Ans
- ☒ 1. No error
 - ☒ 2. on this products, if
 - ☒ 3. You will get a discount
 - ☒ 4. you buy one more outfit.

Question Type : MCQ

Question ID : 264330134530

Option 1 ID : 264330527082

Option 2 ID : 264330527080

Option 3 ID : 264330527079

Option 4 ID : 264330527081

Status : Answered

Chosen Option : 2

Q.14 Choose the word that can substitute the given group of words.
A man who is womanish in his habits

- Ans
- ☒ 1. Fastidious
 - ☒ 2. Henpecked
 - ☒ 3. Stoic
 - ☒ 4. Effeminate

Question Type : MCQ
Question ID : 264330134543
Option 1 ID : 264330527127
Option 2 ID : 264330527128
Option 3 ID : 264330527130
Option 4 ID : 264330527129
Status : Answered
Chosen Option : 4

Q.15 Select the most appropriate synonym to substitute the bracketed word in the given sentence.

They have also tested fully (autonomous) landings and semi-autonomous take-offs for the gas-powered rotorcraft.

- Ans
- ☒ 1. Occlude
 - ☒ 2. Obstruct
 - ☒ 3. Unanimous
 - ☒ 4. Independent

Question Type : MCQ
Question ID : 264330136230
Option 1 ID : 264330533709
Option 2 ID : 264330533707
Option 3 ID : 264330533708
Option 4 ID : 264330533710
Status : Answered
Chosen Option : 4

Q.16 Improve the underlined part of the sentence. Choose 'No improvement' as an answer if the sentence is grammatically correct.
Your parcel should arrived at three days.

- Ans
- ☒ 1. arrive in three
 - ☒ 2. arrive in third
 - ☒ 3. No improvement
 - ☒ 4. arrive in the third

Question Type : MCQ
Question ID : 264330134402
Option 1 ID : 264330526589
Option 2 ID : 264330526587
Option 3 ID : 264330526590
Option 4 ID : 264330526588
Status : Answered
Chosen Option : 1

Q.17 Select the most appropriate antonym of the given word.

Administer

- Ans
- ☒ 1. Steady
 - ☒ 2. Forego
 - ☒ 3. Entertaining
 - ☒ 4. Pictural

Question Type : MCQ
Question ID : 264330136631
Option 1 ID : 264330535247
Option 2 ID : 264330535249
Option 3 ID : 264330535248
Option 4 ID : 264330535250
Status : Answered
Chosen Option : 2

Q.18 In the following question, out of the given four alternatives, select the alternative which best expresses the meaning of the Idiom/Phrase.
To go a long way

- Ans
- ☒ 1. To become successful in life
 - ☒ 2. To join a foreign company
 - ☒ 3. To avoid short cuts
 - ☒ 4. To go on a long drive

Question Type : MCQ
Question ID : 264330134549
Option 1 ID : 264330527151
Option 2 ID : 264330527152
Option 3 ID : 264330527154
Option 4 ID : 264330527153
Status : Answered
Chosen Option : 1

Q.19 Identify the segment that contains a grammatical error. If there is no error, select 'No error'

Do not be put of by the/ mathematical equation, because/ this is really not very complicated.

- Ans
- ☒ 1. Do not be put of by the
 - ☒ 2. this is really not very complicated.
 - ☒ 3. mathematical equation, because
 - ☒ 4. No error

Question Type : MCQ
Question ID : 264330136213
Option 1 ID : 264330533643
Option 2 ID : 264330533645
Option 3 ID : 264330533644
Option 4 ID : 264330533646
Status : Answered
Chosen Option : 1

Q.20 Select the appropriate antonym for the underlined word.
Sam was looking gloomy and downcast, and Meg in tears.

- Ans ☒ 1. plain
☒ 2. sullen
☒ 3. morose
☒ 4. buoyant

Question Type : MCQ
Question ID : 264330134547
Option 1 ID : 264330527144
Option 2 ID : 264330527146
Option 3 ID : 264330527145
Option 4 ID : 264330527143
Status : Answered
Chosen Option : 4

Comprehension:

In the following passage some words have been deleted. Fill in the blanks with the help of the alternatives given. Select the most appropriate option for each number.

It was this (1) _____ that made John so particularly unusual, even for a wizard. This scar was (2) _____ hint of John's very mysterious past, of the reason (3) _____ the Samuel's doorstep eleven years (4) _____. At the age of one, John (5) _____ a curse from the greatest Dark sorcerer of all time.

SubQuestion No : 21

Q.21 Select the most appropriate option to fill in blank number 1.

- Ans ☒ 1. blister
☒ 2. scar
☒ 3. scab
☒ 4. defect

Question Type : MCQ
Question ID : 264330136622
Option 1 ID : 264330535212
Option 2 ID : 264330535213
Option 3 ID : 264330535214
Option 4 ID : 264330535211
Status : Answered
Chosen Option : 2

Comprehension:

In the following passage some words have been deleted. Fill in the blanks with the help of the alternatives given. Select the most appropriate option for each number.

It was this (1) _____ that made John so particularly unusual, even for a wizard. This scar was (2) _____ hint of John's very mysterious past, of the reason (3) _____ the Samuel's doorstep eleven years (4) _____. At the age of one, John (5) _____ a curse from the greatest Dark sorcerer of all time.

SubQuestion No : 22

Q.22 Select the most appropriate option to fill in blank number 2.

- Ans
- ✓ 1. the only
 - ✗ 2. that only
 - ✗ 3. the alone
 - ✗ 4. that individual

Question Type : MCQ
 Question ID : 264330136623
 Option 1 ID : 264330535215
 Option 2 ID : 264330535216
 Option 3 ID : 264330535218
 Option 4 ID : 264330535217
 Status : Answered
 Chosen Option : 1

Comprehension:

In the following passage some words have been deleted. Fill in the blanks with the help of the alternatives given. Select the most appropriate option for each number.

It was this (1) _____ that made John so particularly unusual, even for a wizard. This scar was (2) _____ hint of John's very mysterious past, of the reason (3) _____ the Samuel's doorstep eleven years (4) _____. At the age of one, John (5) _____ a curse from the greatest Dark sorcerer of all time.

SubQuestion No : 23

Q.23 Select the most appropriate option to fill in blank number 3.

- Ans
- ✓ 1. he had been left on
 - ✗ 2. he had been left up
 - ✗ 3. he have been left on
 - ✗ 4. he was been left in

Question Type : MCQ
 Question ID : 264330136624
 Option 1 ID : 264330535221
 Option 2 ID : 264330535219
 Option 3 ID : 264330535220
 Option 4 ID : 264330535222
 Status : Answered
 Chosen Option : 1

Comprehension:

In the following passage some words have been deleted. Fill in the blanks with the help of the alternatives given. Select the most appropriate option for each number.

It was this (1) _____ that made John so particularly unusual, even for a wizard. This scar was (2) _____ hint of John's very mysterious past, of the reason (3) _____ the Samuel's doorstep eleven years (4) _____. At the age of one, John (5) _____ a curse from the greatest Dark sorcerer of all time.

SubQuestion No : 24

Q.24 Select the most appropriate option to fill in blank number 4.

- Ans
- ✓ 1. ago
 - ✗ 2. prior
 - ✗ 3. before
 - ✗ 4. sooner

Question Type : MCQ
 Question ID : 264330136625
 Option 1 ID : 264330535226
 Option 2 ID : 264330535224
 Option 3 ID : 264330535225
 Option 4 ID : 264330535223
 Status : Answered
 Chosen Option : 1

Comprehension:

In the following passage some words have been deleted. Fill in the blanks with the help of the alternatives given. Select the most appropriate option for each number.

It was this (1) _____ that made John so particularly unusual, even for a wizard. This scar was (2) _____ hint of John's very mysterious past, of the reason (3) _____ the Samuel's doorstep eleven years (4) _____. At the age of one, John (5) _____ a curse from the greatest Dark sorcerer of all time.

SubQuestion No : 25

Q.25 Select the most appropriate option to fill in blank number 5.

- Ans
- ✗ 1. has had someway survived
 - ✗ 2. had somehow existed through
 - ✗ 3. have somehow survived
 - ✓ 4. had somehow survived

Question Type : MCQ
 Question ID : 264330136626
 Option 1 ID : 264330535230
 Option 2 ID : 264330535227
 Option 3 ID : 264330535229
 Option 4 ID : 264330535228
 Status : Answered
 Chosen Option : 4