

## Multi Tasking Non Technical Staff and Havaladar CBIC and CBN Examination 2022

Roll Number	
Candidate Name	
Venue Name	TCS Gito Bitan
Exam Date	19/05/2023
Exam Time	9:00 AM - 10:30 AM
Subject	MTS Non Tech Havaladar CBIC and CBN Examination 2022

### Section : Numerical and Mathematical Ability

**Q.1** The product of two numbers is 38025 and their Highest Common Factor is 65. What is the Least Common Multiple of these numbers?

- Ans**
- ☒ 1. 455
  - ☒ 2. 585
  - ☒ 3. 715
  - ☒ 4. 435

Question Type : **MCQ**

Question ID : **264330137338**

Option 1 ID : **264330537980**

Option 2 ID : **264330537981**

Option 3 ID : **264330537979**

Option 4 ID : **264330537982**

Status : **Answered**

Chosen Option : **2**

**Q.2** The volume of a cube is  $2.197 \text{ cm}^3$ . Find the side of the cube.

- Ans**
- ☒ 1. 1.3 cm
  - ☒ 2. 1.4 cm
  - ☒ 3. 1.1 cm
  - ☒ 4. 1.2 cm

Question Type : **MCQ**

Question ID : **264330135149**

Option 1 ID : **264330529532**

Option 2 ID : **264330529531**

Option 3 ID : **264330529533**

Option 4 ID : **264330529534**

Status : **Answered**

Chosen Option : **1**

# Test Prime

**ALL EXAMS,  
ONE SUBSCRIPTION**



**70,000+**  
Mock Tests



**Personalised  
Report Card**



**Unlimited  
Re-Attempt**



**600+**  
Exam Covered



**Previous Year  
Papers**



**500%  
Refund**



**ATTEMPT FREE MOCK NOW**

**Q.3** The ratio of Mohit's and Sunil's present age is 4 : 5. Mohit is 7 years younger than Sunil. What will be the ratio of Mohit's age to Sunil's age after 7 years?

- Ans**
- ☒ 1. 7 : 8
  - ☒ 2. 5 : 6
  - ☒ 3. 6 : 7
  - ☒ 4. 8 : 9

Question Type : **MCQ**

Question ID : **264330137330**

Option 1 ID : **264330537948**

Option 2 ID : **264330537950**

Option 3 ID : **264330537947**

Option 4 ID : **264330537949**

Status : **Answered**

Chosen Option : **2**

**Q.4** Find the difference between compound interest (compounding annually) and simple interest on a sum of Rs. 56,000 for two years at 15% per annum.

- Ans**
- ☒ 1. Rs. 1300
  - ☒ 2. Rs. 2410
  - ☒ 3. Rs. 1100
  - ☒ 4. Rs. 1260

Question Type : **MCQ**

Question ID : **264330133767**

Option 1 ID : **264330524092**

Option 2 ID : **264330524093**

Option 3 ID : **264330524094**

Option 4 ID : **264330524091**

Status : **Answered**

Chosen Option : **4**

**Q.5** Shivam purchased two watches, first for Rs. 12000 and the second for Rs. 10000. He sold both the watches, first one at the profit of 10 percent and the second at a loss of 10 percent. What is the overall profit or loss?

- Ans**
- ☒ 1. 2.25 percent profit
  - ☒ 2. 2.25 percent loss
  - ☒ 3. 0.909 percent profit
  - ☒ 4. 0.909 percent loss

Question Type : **MCQ**

Question ID : **264330137329**

Option 1 ID : **264330537944**

Option 2 ID : **264330537943**

Option 3 ID : **264330537946**

Option 4 ID : **264330537945**

Status : **Answered**

Chosen Option : **3**

**Q.6** A alone can complete a work in 16 days and B alone can complete the same work in 96 days. In how many days both A and B together can complete the same work?

- Ans**
- ☒ 1. 88/13 days
  - ☒ 2. 96/7 days
  - ☒ 3. 96/13 days
  - ☒ 4. 88/14 days

Question Type : **MCQ**

Question ID : **264330135145**

Option 1 ID : **264330529517**

Option 2 ID : **264330529515**

Option 3 ID : **264330529516**

Option 4 ID : **264330529518**

Status : **Answered**

Chosen Option : **2**

**Q.7** In an office 70% of the staff is male, 70% of the males and 30% of the females voted for Anuj. Find the percentage of the people who voted for Anuj.

- Ans**
- ☒ 1. 56%
  - ☒ 2. 58%
  - ☒ 3. 52%
  - ☒ 4. 54%

Question Type : **MCQ**

Question ID : **264330133760**

Option 1 ID : **264330524063**

Option 2 ID : **264330524065**

Option 3 ID : **264330524066**

Option 4 ID : **264330524064**

Status : **Answered**

Chosen Option : **2**

**Q.8** What is the value of x, if  $(\frac{1}{2})$  of 20 +  $(\frac{1}{4})$  of 28 -  $(\frac{1}{3})$  of x = 10?

- Ans**
- ☒ 1. 21
  - ☒ 2. 7
  - ☒ 3. 28
  - ☒ 4. 10

Question Type : **MCQ**

Question ID : **264330133628**

Option 1 ID : **264330523535**

Option 2 ID : **264330523536**

Option 3 ID : **264330523538**

Option 4 ID : **264330523537**

Status : **Answered**

Chosen Option : **1**

Q.9 Two numbers are in the ratio 9 : 7. If their HCF is 6, find their LCM.

- Ans
- ☒ 1. 189
  - ☒ 2. 126
  - ☒ 3. 378
  - ☒ 4. 252

Question Type : MCQ  
 Question ID : 264330135414  
 Option 1 ID : 264330530565  
 Option 2 ID : 264330530563  
 Option 3 ID : 264330530564  
 Option 4 ID : 264330530566  
 Status : Answered  
 Chosen Option : 3

Q.10 On selling a car, a person gives a discount of 8 percent. If he gives a discount of 4 percent, then he receives Rs. 7200 more than in the case of 8 percent discount. What is the marked price of car?

- Ans
- ☒ 1. Rs. 150000
  - ☒ 2. Rs. 160000
  - ☒ 3. Rs. 180000
  - ☒ 4. Rs. 110000

Question Type : MCQ  
 Question ID : 264330137334  
 Option 1 ID : 264330537963  
 Option 2 ID : 264330537965  
 Option 3 ID : 264330537964  
 Option 4 ID : 264330537966  
 Status : Answered  
 Chosen Option : 3

Q.11 Two stations L and M are 720 km apart from each other. A train leaves from L to M and simultaneously another train leaves from M to L. Both trains meet after 24 hours. If the speed of the first train is 10 km/hr more than the second train, then what is the speed of the slower train?

- Ans
- ☒ 1. 20 km/hr
  - ☒ 2. 16 km/hr
  - ☒ 3. 14 km/hr
  - ☒ 4. 10 km/hr

Question Type : MCQ  
 Question ID : 264330137323  
 Option 1 ID : 264330537922  
 Option 2 ID : 264330537919  
 Option 3 ID : 264330537920  
 Option 4 ID : 264330537921  
 Status : Answered  
 Chosen Option : 4

**Q.12** A bag contains Rs. 840 in the form of 2 rupee, 5 rupee and 10 rupee coins. The number of coins of 2 rupee, 5 rupee and 10 rupee are in the ratio of 5 : 7 : 6. What is the total number of coins in the bag?

- Ans**
- ☒ 1. 158
  - ☒ 2. 132
  - ☒ 3. 102
  - ☒ 4. 144

Question Type : MCQ  
Question ID : 264330137331  
Option 1 ID : 264330537952  
Option 2 ID : 264330537951  
Option 3 ID : 264330537953  
Option 4 ID : 264330537954  
Status : Answered  
Chosen Option : 4

**Q.13** A and B together can finish a work in 7.2 hours. If B alone can finish the same work in 18 hours, then A alone can do it in:

- Ans**
- ☒ 1. 18 hours
  - ☒ 2. 12 hours
  - ☒ 3. 10 hours
  - ☒ 4. 15 hours

Question Type : MCQ  
Question ID : 264330138450  
Option 1 ID : 264330542407  
Option 2 ID : 264330542409  
Option 3 ID : 264330542408  
Option 4 ID : 264330542410  
Status : Answered  
Chosen Option : 2

**Q.14** The following table shows the expenditure of a company (in lakh rupees) per annum over the given years. What is the difference between the total expenditure on transport and total expenditure on salary in the given years?

Year	Item of Expenditure			
	Fuel	Transport	Salary	Tax
2011	100	150	400	60
2012	92	140	380	64
2013	84	145	420	74
2014	102	155	450	78
2015	110	158	490	84

- Ans**
- ☒ 1. Rs.1392 lakh
  - ☒ 2. Rs.896 lakh
  - ☒ 3. Rs.2140 lakh
  - ☒ 4. Rs.748 lakh

Question Type : MCQ  
Question ID : 264330133642  
Option 1 ID : 264330523591  
Option 2 ID : 264330523592  
Option 3 ID : 264330523593  
Option 4 ID : 264330523594  
Status : Answered  
Chosen Option : 1

**Q.15** If the volume of a cylinder is  $5000 \text{ m}^3$  and its radius is 10 meter, then what is the approximate curved surface area of the cylinder? ( $\pi = 3.14$ )

- Ans
- ☒ 1.  $954 \text{ m}^2$
  - ☒ 2.  $1024 \text{ m}^2$
  - ☒ 3.  $1000 \text{ m}^2$
  - ☒ 4.  $968 \text{ m}^2$

Question Type : MCQ

Question ID : 264330138455

Option 1 ID : 264330542430

Option 2 ID : 264330542428

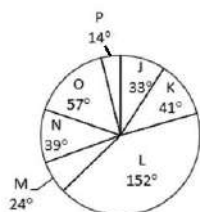
Option 3 ID : 264330542427

Option 4 ID : 264330542429

Status : Answered

Chosen Option : 3

**Q.16** The pie chart given below shows the sales of 7 different companies. The total sales of all these 7 companies are 1080. The sale of a particular company is shown in terms of degree with respect to the total sales of all these 7 companies.



What is the ratio of the total sales of J, L, M and N to the total sales of K, N, O and P?

- Ans
- ☒ 1. 151 : 248
  - ☒ 2. 129 : 252
  - ☒ 3. 248 : 151
  - ☒ 4. 231 : 149

Question Type : MCQ

Question ID : 264330137342

Option 1 ID : 264330537995

Option 2 ID : 264330537998

Option 3 ID : 264330537997

Option 4 ID : 264330537996

Status : Answered

Chosen Option : 3

**Q.17** The average weight of A, B and C is 40 kg. If the average weight of A and B is 35 kg and that of B and C is 31 kg, then what is the weight of B?

- Ans
- ☒ 1. 12 kg
  - ☒ 2. 50 kg
  - ☒ 3. 24 kg
  - ☒ 4. 36 kg

Question Type : MCQ

Question ID : 264330137324

Option 1 ID : 264330537923

Option 2 ID : 264330537924

Option 3 ID : 264330537926

Option 4 ID : 264330537925

Status : Answered

Chosen Option : 1



**Q.18** What is the simple interest on Rs. 14400 for 12 months, if the rate of the interest be 11% per annum?

- Ans**
- ☒ 1. Rs. 1440
  - ☒ 2. Rs. 1680
  - ☒ 3. Rs. 1331
  - ☒ 4. Rs. 1584

Question Type : **MCQ**  
 Question ID : **264330138047**  
 Option 1 ID : **264330540796**  
 Option 2 ID : **264330540798**  
 Option 3 ID : **264330540797**  
 Option 4 ID : **264330540795**  
 Status : **Answered**  
 Chosen Option : **4**

**Q.19** Ajay buys a scooter for Rs. 7560 and spends Rs. 540 on its repair. He sells it for Rs. 9000. What is his gain percent?

- Ans**
- ☒ 1. 8.33%
  - ☒ 2. 9.09%
  - ☒ 3. 11.11%
  - ☒ 4. 6.25%

Question Type : **MCQ**  
 Question ID : **264330138375**  
 Option 1 ID : **264330542110**  
 Option 2 ID : **264330542108**  
 Option 3 ID : **264330542107**  
 Option 4 ID : **264330542109**  
 Status : **Answered**  
 Chosen Option : **3**

**Q.20** A train runs at an average speed of 85 km/hr. Find the time taken by the train to cover a distance of 1275 km.

- Ans**
- ☒ 1. 15 hours
  - ☒ 2. 14 hours
  - ☒ 3. 17 hours
  - ☒ 4. 12 hours

Question Type : **MCQ**  
 Question ID : **264330135069**  
 Option 1 ID : **264330529214**  
 Option 2 ID : **264330529212**  
 Option 3 ID : **264330529213**  
 Option 4 ID : **264330529211**  
 Status : **Answered**  
 Chosen Option : **1**



**Q.1** Eight players Anil, Kamal, Ram, Sanjay, Aakash, Vivek, Rahul and Ramu are sitting around a circular table facing towards the centre (not necessarily in the same order). Sanjay is second to the left of Anil. Rahul is fourth to the right of Anil. Ram is not the immediate neighbour of Rahul or Sanjay. Aakash is second to the right of Ram. Kamal is second to the right of Vivek. Who is third to the right of Ramu?

- Ans**
- ✓ 1. Vivek
  - ✗ 2. Sanjay
  - ✗ 3. Rahul
  - ✗ 4. Kamal

Question Type : **MCQ**  
 Question ID : **264330137373**  
 Option 1 ID : **264330538120**  
 Option 2 ID : **264330538121**  
 Option 3 ID : **264330538122**  
 Option 4 ID : **264330538119**  
 Status : **Answered**  
 Chosen Option : 1

**Q.2** Which of the following numbers will replace the question mark (?) in the given series?  
 59, 63, 71, 83, 99, ?

- Ans**
- ✗ 1. 117
  - ✗ 2. 118
  - ✗ 3. 121
  - ✓ 4. 119

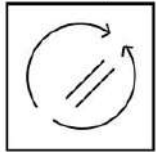
Question Type : **MCQ**  
 Question ID : **264330133477**  
 Option 1 ID : **264330522939**  
 Option 2 ID : **264330522942**  
 Option 3 ID : **264330522941**  
 Option 4 ID : **264330522940**  
 Status : **Answered**  
 Chosen Option : 4

**Q.3** Marks of five girls Mansi, Kajal, Reetu, Tina and Riya are compared. Marks of Riya are less than Mansi but more than Tina. Marks of Reetu are less than Tina, Riya and Mansi. Marks of Kajal are less than Reetu. Marks of how many girls are less than the marks of Tina?

- Ans**
- ✓ 1. 2
  - ✗ 2. 1
  - ✗ 3. 4
  - ✗ 4. 3

Question Type : **MCQ**  
 Question ID : **264330137375**  
 Option 1 ID : **264330538130**  
 Option 2 ID : **264330538129**  
 Option 3 ID : **264330538128**  
 Option 4 ID : **264330538127**  
 Status : **Answered**  
 Chosen Option : 1

Q.4 Select the option figure in which the given figure (X) is embedded as its part (rotation is NOT allowed).



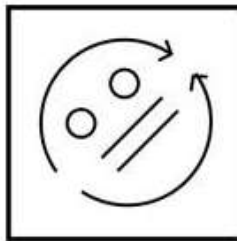
X

Ans

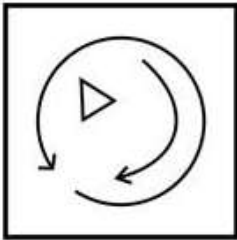
✗ 1.



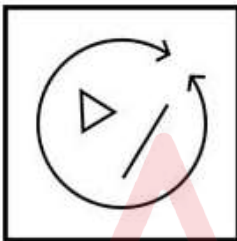
✓ 2.



✗ 3.



✗ 4.



Question Type : MCQ

Question ID : 264330133383

Option 1 ID : 264330522564

Option 2 ID : 264330522566

Option 3 ID : 264330522565

Option 4 ID : 264330522563

Status : Answered

Chosen Option : 2

**Q.5** If A denotes 'addition', B denotes 'multiplication', C denotes 'subtraction', and D denotes 'division', then what will be the value of the following equation?  
 $15 \text{ C } 9 \text{ A } 7 \text{ B } 2 = ?$

**Ans**  1. 20

 2. 15

 3. 45

 4. 36

Question Type : **MCQ**

Question ID : **264330137848**

Option 1 ID : **264330540000**

Option 2 ID : **264330540002**

Option 3 ID : **264330539999**


Option 4 ID : **264330540001**

Status : **Answered**

Chosen Option : **1**



Q.6 Which answer figure will complete the pattern in the question figure?

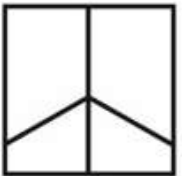


Ans

✓ 1.



✗ 2.



✗ 3.



✗ 4.



Question Type : MCQ

Question ID : 264330137386

Option 1 ID : 264330538171

Option 2 ID : 264330538173

Option 3 ID : 264330538174

Option 4 ID : 264330538172

Status : Answered

Chosen Option : 1

**Q.7** Select the option in which the numbers shares the same relationship in set as that shared by the numbers in the given set.  
(NOTE: Operations should be performed on the whole numbers, without breaking down the numbers into its constituent digits. E.g. 13 – Operations on 13 such as adding /subtracting /multiplying etc. to 13 can be performed. Breaking down 13 into 1 and 3 and then performing mathematical operations on 1 and 3 is not allowed)

(15, 25, 35)

(45, 55, 65)

- Ans** ☒ 1. (55, 65, 75)  
☒ 2. (45, 55, 70)  
☒ 3. (55, 75, 85)  
☒ 4. (55, 60, 70)

Question Type : **MCQ**

Question ID : **264330137381**

Option 1 ID : **264330538154**

Option 2 ID : **264330538153**

Option 3 ID : **264330538152**

Option 4 ID : **264330538151**

Status : **Answered**

Chosen Option : **1**

**Q.8** In the following question, select the missing number of the given series.

36, 73, 147, 295, 591, ?

- Ans** ☒ 1. 1163  
☒ 2. 1188  
☒ 3. 1183  
☒ 4. 1197

Question Type : **MCQ**

Question ID : **264330137379**

Option 1 ID : **264330538146**

Option 2 ID : **264330538144**

Option 3 ID : **264330538143**

Option 4 ID : **264330538145**

Status : **Answered**

Chosen Option : **3**

**Q.9** In the following question below are given some statements followed by some conclusions based on those statements. Taking the given statements to be true even if they seem to be at variance from commonly known facts. Read all the conclusions and then decide which of the given conclusion logically follows the given statements.

Statements:

I. Some M are N.

II. No J is N.

Conclusion:

I. No N is J.

II. Some N are M.

III. All J are M.

- Ans**
- ☒ 1. Both conclusions I and III follows
  - ☒ 2. Only conclusion II follows
  - ☒ 3. Both conclusions I and II follows
  - ☒ 4. Both conclusions II and III follows

Question Type : MCQ

Question ID : 264330137377

Option 1 ID : 264330538138

Option 2 ID : 264330538135

Option 3 ID : 264330538137

Option 4 ID : 264330538136

Status : Answered

Chosen Option : 3

**Q.10** In a certain code language, 'SOWHF' is written as 'PLTEC'. How will 'TQMGD' be written in that language?

- Ans**
- ☒ 1. QNJDE
  - ☒ 2. QNDJD
  - ☒ 3. QNJDA
  - ☒ 4. QJNDD

Question Type : MCQ

Question ID : 264330133531

Option 1 ID : 264330523155

Option 2 ID : 264330523157

Option 3 ID : 264330523156

Option 4 ID : 264330523158

Status : Answered

Chosen Option : 3

**Q.11** Select the option that is related to the fifth term in the same way as the second term is related to the first term and fourth term is related to third term.

NP3 : PS27 :: AQ4 : CT64 :: FE5 : ?

- Ans**
- ✓ 1. HH125
  - ✗ 2. HI125
  - ✗ 3. II125
  - ✗ 4. IH125

Question Type : MCQ

Question ID : 264330137367

Option 1 ID : 264330538097

Option 2 ID : 264330538098

Option 3 ID : 264330538095

Option 4 ID : 264330538096

Status : Answered

Chosen Option : 1

**Q.12** Eight boys Anil, Kamal, Ram, Sanjay, Aakash, Vivek, Rahul and Ramu are sitting around a circular table facing opposite to the centre (not necessarily in the same order). Ram is the immediate neighbour of both Ramu and Anil. Sanjay is third to the right of Ramu. Ramu is second to the right of Anil. Ram is second to the left of Kamal. Vivek is not the immediate neighbour of Anil. Aakash is second to the right of Ramu. Who is second to the right of Vivek?

- Ans**
- ✓ 1. Anil
  - ✗ 2. Rahul
  - ✗ 3. Sanjay
  - ✗ 4. Aakash

Question Type : MCQ

Question ID : 264330137374

Option 1 ID : 264330538126

Option 2 ID : 264330538124

Option 3 ID : 264330538123

Option 4 ID : 264330538125

Status : Answered

Chosen Option : 1

**Q.13** In a certain code language, 'HED' is coded as '160', 'FBG' is coded as '84'. What is the code for 'BEJ' in that code language?

- Ans**
- ✗ 1. 60
  - ✓ 2. 100
  - ✗ 3. 80
  - ✗ 4. 120

Question Type : MCQ

Question ID : 264330137520

Option 1 ID : 264330538688

Option 2 ID : 264330538690

Option 3 ID : 264330538689

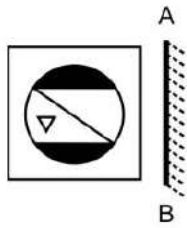
Option 4 ID : 264330538687

Status : Answered

Chosen Option : 2

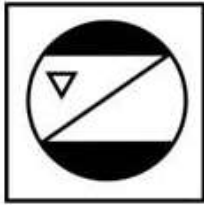


Q.14 Select the correct mirror image of the given figure when the mirror is placed at AB as shown below.

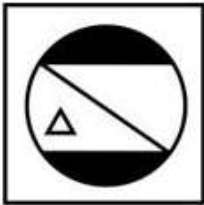


Ans

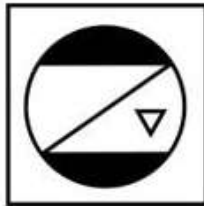
✗ 1.



✗ 2.



✓ 3.



✗ 4.



Question Type : MCQ

Question ID : 264330133384

Option 1 ID : 264330522567

Option 2 ID : 264330522570

Option 3 ID : 264330522569

Option 4 ID : 264330522568

Status : Answered

Chosen Option : 1

**Q.15** In a certain code language, 'AGEING' is written as '1H23OH'. How will 'UTOPIA' be written in that language?

- Ans**
- ☒ 1. 5U4R31
  - ☒ 2. 54UQ31
  - ☒ 3. 5U4Q31
  - ☒ 4. 5S4R31

Question Type : **MCQ**

Question ID : **264330134937**

Option 1 ID : **264330528685**

Option 2 ID : **264330528684**

Option 3 ID : **264330528683**

Option 4 ID : **264330528686**

Status : **Answered**

Chosen Option : **3**

**Q.16** In the following question below are given some statements followed by some conclusions based on those statements. Taking the given statements to be true even if they seem to be at variance from commonly known facts. Read all the conclusions and then decide which of the given conclusion logically follows the given statements.

Statements:

I. All S are F.

II. Some S are H.

Conclusion:

I. Some F are not S.

II. Some H are S.

- Ans**
- ☒ 1. Only conclusion I follows
  - ☒ 2. Neither conclusion follows
  - ☒ 3. Only conclusion II follows
  - ☒ 4. Both conclusions I and II follows

Question Type : **MCQ**

Question ID : **264330137376**

Option 1 ID : **264330538131**

Option 2 ID : **264330538134**

Option 3 ID : **264330538132**

Option 4 ID : **264330538133**

Status : **Answered**

Chosen Option : **3**

**Q.17** Select the option that is related to the fifth term in the same way as the second term is related to the first term and fourth term is related to third term.

AF14 : FO28 :: RH13 : WQ27 :: LC26 : ?

- Ans**
- ☒ 1. QL40
  - ☒ 2. QM40
  - ☒ 3. QL54
  - ☒ 4. QM54

Question Type : **MCQ**

Question ID : **264330137368**

Option 1 ID : **264330538100**

Option 2 ID : **264330538101**

Option 3 ID : **264330538102**

Option 4 ID : **264330538099**

Status : **Answered**

Chosen Option : **3**

**Q.18** After interchanging the given two signs, what will be the value of the given equation?

$$\times \text{ and } \div; 68 \times 17 + 34 \div 2 - 18$$

- Ans**
- ☒ 1. 54
  - ☐ 2. 60
  - ☐ 3. 46
  - ☐ 4. 35

Question Type : **MCQ**  
 Question ID : **264330137382**  
 Option 1 ID : **264330538155**  
 Option 2 ID : **264330538156**  
 Option 3 ID : **264330538157**  
 Option 4 ID : **264330538158**  
 Status : **Answered**  
 Chosen Option : **1**

**Q.19** A series is given with one term missing. Select the correct alternative from the given ones that will complete the series.

RAQ, TCS, VEU, ?, ZIY

- Ans**
- ☐ 1. XHW
  - ☐ 2. XHX
  - ☒ 3. XGW
  - ☐ 4. XGX

Question Type : **MCQ**  
 Question ID : **264330137365**  
 Option 1 ID : **264330538088**  
 Option 2 ID : **264330538090**  
 Option 3 ID : **264330538087**  
 Option 4 ID : **264330538089**  
 Status : **Answered**  
 Chosen Option : **4**

**Q.20** Select the option that is related to the third number in the same way as the second number is related to the first number.

434 : 33 :: 125 : ?

- Ans**
- ☐ 1. 30
  - ☐ 2. 27
  - ☐ 3. 21
  - ☒ 4. 24

Question Type : **MCQ**  
 Question ID : **264330133479**  
 Option 1 ID : **264330522950**  
 Option 2 ID : **264330522949**  
 Option 3 ID : **264330522947**  
 Option 4 ID : **264330522948**  
 Status : **Answered**  
 Chosen Option : **4**

Q.1 The festival of Makar Sankranti is devoted to which of the following gods?

- Ans ☒ 1. Surya  
☐ 2. Vishnu  
☐ 3. Indra  
☐ 4. Shiva

Question Type : MCQ  
Question ID : 264330133857  
Option 1 ID : 264330524454  
Option 2 ID : 264330524452  
Option 3 ID : 264330524453  
Option 4 ID : 264330524451  
Status : Not Answered  
Chosen Option : --

Q.2 Which of the following is a tertiary consumer?

- Ans ☐ 1. Grass  
☒ 2. Snake  
☐ 3. Frog  
☐ 4. Grasshopper

Question Type : MCQ  
Question ID : 264330133938  
Option 1 ID : 264330524775  
Option 2 ID : 264330524778  
Option 3 ID : 264330524777  
Option 4 ID : 264330524776  
Status : Answered  
Chosen Option : 2

Q.3 Who among the following is widely credited for introducing new forms of music, theatrical performance, language and the 'Sattriya' Dance?

- Ans ☐ 1. Padma Subrahmanyam  
☒ 2. Srimanta Sankardev  
☐ 3. Uday Shankar  
☐ 4. Shovana Narayan

Question Type : MCQ  
Question ID : 264330134025  
Option 1 ID : 264330525125  
Option 2 ID : 264330525123  
Option 3 ID : 264330525126  
Option 4 ID : 264330525124  
Status : Not Answered  
Chosen Option : --

Q.4 Which of the following period is referred as the period of population explosion in India?

- Ans ☒ 1. 1951 – 1981  
☒ 2. Post 1981 till present  
☒ 3. 1901 – 1921  
☒ 4. 1921 – 1951

Question Type : MCQ  
 Question ID : 264330138265  
 Option 1 ID : 264330541669  
 Option 2 ID : 264330541670  
 Option 3 ID : 264330541667  
 Option 4 ID : 264330541668  
 Status : Not Answered  
 Chosen Option : --

Q.5 Which country shares a sea-line border with India?

- Ans ☒ 1. Maldives  
☒ 2. Philippines  
☒ 3. Fiji  
☒ 4. Pakistan

Question Type : MCQ  
 Question ID : 264330133660  
 Option 1 ID : 264330523666  
 Option 2 ID : 264330523665  
 Option 3 ID : 264330523663  
 Option 4 ID : 264330523664  
 Status : Answered  
 Chosen Option : 1

Q.6 Which of the following ancient site is NOT situated in India?

- Ans ☒ 1. Hunsgi  
☒ 2. Hallur  
☒ 3. Inamgaon  
☒ 4. Mehrgarh

Question Type : MCQ  
 Question ID : 264330133877  
 Option 1 ID : 264330524534  
 Option 2 ID : 264330524532  
 Option 3 ID : 264330524531  
 Option 4 ID : 264330524533  
 Status : Answered  
 Chosen Option : 4

Q.7 The objective of Simon Commission was to \_\_\_\_\_.

- Ans ☒ 1. decide India's Political future  
☒ 2. decide India's Religious future  
☒ 3. decide India's Educational future  
☒ 4. decide India's economical future

Question Type : MCQ  
Question ID : 264330133880  
Option 1 ID : 264330524544  
Option 2 ID : 264330524546  
Option 3 ID : 264330524545  
Option 4 ID : 264330524543  
Status : Answered  
Chosen Option : 1

Q.8 Which act of British Parliament was also known as East India Company Act 1793?

- Ans ☒ 1. The Government of India Act, 1793  
☒ 2. The Charter Act, 1793  
☒ 3. The Regulating Act, 1793  
☒ 4. The Indian Councils Act, 1793

Question Type : MCQ  
Question ID : 264330137959  
Option 1 ID : 264330540445  
Option 2 ID : 264330540443  
Option 3 ID : 264330540446  
Option 4 ID : 264330540444  
Status : Answered  
Chosen Option : 3

Q.9 The largest ocean on Earth is the \_\_\_\_\_.

- Ans ☒ 1. Pacific Ocean  
☒ 2. Atlantic Ocean  
☒ 3. Arctic Ocean  
☒ 4. Indian Ocean

Question Type : MCQ  
Question ID : 264330133939  
Option 1 ID : 264330524780  
Option 2 ID : 264330524779  
Option 3 ID : 264330524781  
Option 4 ID : 264330524782  
Status : Answered  
Chosen Option : 1

**Q.10** The Financial Action Task Force (FATF) in October 2022 has excluded which country from the grey list of global watchdog on terror financing and money laundering?

- Ans**
- ☐ 1. Bangladesh
  - ☐ 2. North Korea
  - ☐ 3. China
  - ☒ 4. Pakistan

Question Type : **MCQ**  
 Question ID : **264330137396**  
 Option 1 ID : **264330538212**  
 Option 2 ID : **264330538211**  
 Option 3 ID : **264330538214**  
 Option 4 ID : **264330538213**  
 Status : **Answered**  
 Chosen Option : **4**

**Q.11** Which Bill passed in the Lok Sabha in 2022 is for unification of three Municipal Corporations in one of the States/Union Territories of India?

- Ans**
- ☐ 1. Karnataka Municipal Corporation (Amendment) Bill
  - ☐ 2. Chandigarh Municipal Corporation (Amendment) Bill
  - ☐ 3. Puducherry Municipal Corporation (Amendment) Bill
  - ☒ 4. Delhi Municipal Corporation (Amendment) Bill

Question Type : **MCQ**  
 Question ID : **264330137945**  
 Option 1 ID : **264330540389**  
 Option 2 ID : **264330540390**  
 Option 3 ID : **264330540388**  
 Option 4 ID : **264330540387**  
 Status : **Not Answered**  
 Chosen Option : **--**

**Q.12** What does it mean when an object has a positive charge?

- Ans**
- ☐ 1. It has more electrons than protons
  - ☒ 2. It has more protons than electrons
  - ☐ 3. It has more neutrons than electrons
  - ☐ 4. It has more neutrons than protons

Question Type : **MCQ**  
 Question ID : **264330133936**  
 Option 1 ID : **264330524767**  
 Option 2 ID : **264330524769**  
 Option 3 ID : **264330524770**  
 Option 4 ID : **264330524768**  
 Status : **Answered**  
 Chosen Option : **2**



Q.13 The Mormugao Port is located in which of the following states?

- Ans
- ☐ 1. Tamil Nadu
  - ☐ 2. West Bengal
  - ☐ 3. Maharashtra
  - ☒ 4. Goa

Question Type : MCQ  
Question ID : 264330134015  
Option 1 ID : 264330525083  
Option 2 ID : 264330525086  
Option 3 ID : 264330525084  
Option 4 ID : 264330525085  
Status : Answered  
Chosen Option : 4

Q.14 Which among the following is a public sector bank?

- Ans
- ☐ 1. Axis Bank
  - ☐ 2. ICICI Bank
  - ☒ 3. Bank of Baroda
  - ☐ 4. Yes Bank

Question Type : MCQ  
Question ID : 264330134030  
Option 1 ID : 264330525144  
Option 2 ID : 264330525145  
Option 3 ID : 264330525143  
Option 4 ID : 264330525146  
Status : Answered  
Chosen Option : 3

Q.15 Predominant theme of Manipuri dance is \_\_\_\_\_.

- Ans
- ☒ 1. devotion
  - ☐ 2. warfare
  - ☐ 3. patriotism
  - ☐ 4. bravery

Question Type : MCQ  
Question ID : 264330137387  
Option 1 ID : 264330538177  
Option 2 ID : 264330538176  
Option 3 ID : 264330538175  
Option 4 ID : 264330538178  
Status : Answered  
Chosen Option : 3

Q.16 Asad Ali Khan was an Indian musician who played \_\_\_\_\_.

- Ans
- ☐ 1. Flute
  - ☐ 2. Sitar
  - ☐ 3. Santoor
  - ☒ 4. Rudra Veena

Question Type : MCQ  
Question ID : 264330137393  
Option 1 ID : 264330538200  
Option 2 ID : 264330538201  
Option 3 ID : 264330538202  
Option 4 ID : 264330538199  
Status : Answered  
Chosen Option : 4

Q.17 Who among the following is the author of "Flood of Fire"?

- Ans
- ☐ 1. Arunima Sinha
  - ☐ 2. Tarun Khanna
  - ☒ 3. Amitav Ghosh
  - ☐ 4. Twinkle Khanna

Question Type : MCQ  
Question ID : 264330134023  
Option 1 ID : 264330525116  
Option 2 ID : 264330525118  
Option 3 ID : 264330525115  
Option 4 ID : 264330525117  
Status : Not Answered  
Chosen Option : --

Q.18 Insufficient exposure to sunlight causes deficiency of which vitamin?

- Ans
- ☐ 1. Vitamin E and K
  - ☐ 2. Vitamin A
  - ☒ 3. Vitamin D
  - ☐ 4. Vitamin C

Question Type : MCQ  
Question ID : 264330137400  
Option 1 ID : 264330538229  
Option 2 ID : 264330538227  
Option 3 ID : 264330538230  
Option 4 ID : 264330538228  
Status : Answered  
Chosen Option : 3

Q.19 Article 40 of the Indian constitution is related with \_\_\_\_\_.

- Ans
- ☒ 1. Protection of life
  - ☒ 2. Organisation of village panchayats
  - ☒ 3. Uniform civil code for the citizens
  - ☒ 4. Freedom to manage religious affairs

Question Type : MCQ  
 Question ID : 264330137399  
 Option 1 ID : 264330538225  
 Option 2 ID : 264330538223  
 Option 3 ID : 264330538224  
 Option 4 ID : 264330538226  
 Status : Answered  
 Chosen Option : 2

Q.20 Around 2000 years ago \_\_\_\_\_ became the second capital of the Kushanas.

- Ans
- ☒ 1. Patliputra
  - ☒ 2. Madurai
  - ☒ 3. Vaishali
  - ☒ 4. Mathura

Question Type : MCQ  
 Question ID : 264330133945  
 Option 1 ID : 264330524806  
 Option 2 ID : 264330524804  
 Option 3 ID : 264330524805  
 Option 4 ID : 264330524803  
 Status : Answered  
 Chosen Option : 1

Q.21 In terms of area, India is the \_\_\_\_\_ largest country in the world.

- Ans
- ☒ 1. seventh
  - ☒ 2. third
  - ☒ 3. ninth
  - ☒ 4. sixth

Question Type : MCQ  
 Question ID : 264330137405  
 Option 1 ID : 264330538249  
 Option 2 ID : 264330538247  
 Option 3 ID : 264330538248  
 Option 4 ID : 264330538250  
 Status : Answered  
 Chosen Option : 1

Q.22 Who is the only Cricket Player to win “Major Dhyan Chand Khel Ratna Award 2021”?

- Ans ☒ 1. Mithali Raj  
☐ 2. Virat Kohli  
☐ 3. Rohit Sharma  
☐ 4. Harmanpreet Kaur

Question Type : MCQ

Question ID : 264330137390

Option 1 ID : 264330538189

Option 2 ID : 264330538188

Option 3 ID : 264330538187

Option 4 ID : 264330538190

Status : Not Answered

Chosen Option : --

Q.23 Who among the following is/was a famous track and field sprinter of India?

- Ans ☐ 1. Major Dhyan Chand  
☐ 2. T. C. Yohannan  
☐ 3. Mahesh Bhupathi  
☒ 4. Milkha Singh

Question Type : MCQ

Question ID : 264330133954

Option 1 ID : 264330524841

Option 2 ID : 264330524842

Option 3 ID : 264330524840

Option 4 ID : 264330524839

Status : Answered

Chosen Option : 4

Q.24 \_\_\_\_\_ take oath as the 50th Chief Justice of India on November 9, 2022.

- Ans ☒ 1. Justice D.Y. Chandrachud  
☐ 2. Justice Ranjan Gogoi  
☐ 3. Justice U.U. Lalit  
☐ 4. Justice N.V. Ramana

Question Type : MCQ

Question ID : 264330137395

Option 1 ID : 264330538207

Option 2 ID : 264330538210

Option 3 ID : 264330538208

Option 4 ID : 264330538209

Status : Answered

Chosen Option : 1

Q.25 In Buddhist architecture, which among the following are meditation cells and living quarters for the monks?

- Ans ☒ 1. Viharas  
☒ 2. Chaitya Grihas  
☒ 3. Pietra dura  
☒ 4. Stupas

Question Type : MCQ  
 Question ID : 264330137948  
 Option 1 ID : 264330540401  
 Option 2 ID : 264330540399  
 Option 3 ID : 264330540402  
 Option 4 ID : 264330540400  
 Status : Answered  
 Chosen Option : 4

Section : English Language and Comprehension

Q.1 Choose the sentence with no spelling error.

- Ans ☒ 1. Take it up, and write your own storry.  
☒ 2. Take it up, and writte your on story.  
☒ 3. Take it up, and write your own story.  
☒ 4. Take it up, and wrrite your own story.

Question Type : MCQ  
 Question ID : 264330134343  
 Option 1 ID : 264330526362  
 Option 2 ID : 264330526361  
 Option 3 ID : 264330526359  
 Option 4 ID : 264330526360  
 Status : Answered  
 Chosen Option : 3

Q.2 In the following question, out of the given four alternatives, select the alternative which best expresses the meaning of the Idiom/Phrase.  
 Pros and cons

- Ans ☒ 1. Undecided on a topic  
☒ 2. Doubtful  
☒ 3. To advance in harmony  
☒ 4. Arguments for and against something

Question Type : MCQ  
 Question ID : 264330134418  
 Option 1 ID : 264330526648  
 Option 2 ID : 264330526647  
 Option 3 ID : 264330526649  
 Option 4 ID : 264330526650  
 Status : Answered  
 Chosen Option : 4

**Q.3** Select the word segment that substitutes (replaces) the bracketed word segment correctly and completes the sentence meaningfully. Select the option 'no correction required' if the sentence is correct as given.

I received word that you (were attempting) to contact me.

**Ans** ☒ 1. No correction required

☒ 2. were strike

☒ 3. has attempting

☒ 4. was attempting

Question Type : **MCQ**

Question ID : **264330136616**

Option 1 ID : **264330535194**

Option 2 ID : **264330535192**

Option 3 ID : **264330535193**

Option 4 ID : **264330535191**

Status : **Answered**

Chosen Option : **1**

**Q.4** Select the most appropriate word for the given group of words.

The action or offence of speaking sacrilegiously about God or sacred things; profane talk

**Ans** ☒ 1. Blasphemy

☒ 2. Extempore

☒ 3. Ephemeral

☒ 4. Crusade

Question Type : **MCQ**

Question ID : **264330135808**

Option 1 ID : **264330532103**

Option 2 ID : **264330532105**

Option 3 ID : **264330532106**

Option 4 ID : **264330532104**

Status : **Answered**

Chosen Option : **1**

**Q.5** Select the most appropriate option to fill in the blank.

If someone does not stop the political \_\_\_\_\_ in that country, a civil war is likely to break out soon.

**Ans** ☒ 1. rhetoric

☒ 2. anaphoric

☒ 3. aleatoric

☒ 4. historic

Question Type : **MCQ**

Question ID : **264330135799**

Option 1 ID : **264330532074**

Option 2 ID : **264330532071**

Option 3 ID : **264330532073**

Option 4 ID : **264330532072**

Status : **Answered**

Chosen Option : **1**

Q.6 Choose the word that can substitute the given group of words.  
The science of foretelling events by mapping stars

- Ans
- ☒ 1. Astrophysics
  - ☒ 2. Astronomy
  - ☒ 3. Astrology
  - ☒ 4. Astrobiology

Question Type : MCQ  
Question ID : 264330134412  
Option 1 ID : 264330526625  
Option 2 ID : 264330526623  
Option 3 ID : 264330526624  
Option 4 ID : 264330526626  
Status : Answered  
Chosen Option : 2

Q.7 Improve the underlined part of the sentence. Choose 'No improvement' as an answer if the sentence is grammatically correct.

The candidate win the voting by a narrow margin.

- Ans
- ☒ 1. wins the voted
  - ☒ 2. won the vote
  - ☒ 3. win a vote
  - ☒ 4. No improvement

Question Type : MCQ  
Question ID : 264330134723  
Option 1 ID : 264330527849  
Option 2 ID : 264330527848  
Option 3 ID : 264330527847  
Option 4 ID : 264330527850  
Status : Answered  
Chosen Option : 2

Q.8 Select the correctly spelt word.

- Ans
- ☒ 1. Minusulle
  - ☒ 2. Minsculee
  - ☒ 3. Manscule
  - ☒ 4. Minuscule

Question Type : MCQ  
Question ID : 264330135815  
Option 1 ID : 264330532134  
Option 2 ID : 264330532133  
Option 3 ID : 264330532132  
Option 4 ID : 264330532131  
Status : Not Answered  
Chosen Option : --



**Q.9** Select the most appropriate option to substitute the bracketed segment in the given sentence. If there is no need to substitute it, select 'no substitution required'.  
(Plots to dispose him came) to nothing.

- Ans**
- ☒ 1. No substitution required
  - ☒ 2. Plots to dispose off him comes
  - ☒ 3. Plots to dispose of him came
  - ☒ 4. Plots which dispose him came

Question Type : **MCQ**  
Question ID : **264330136036**  
Option 1 ID : **264330532966**  
Option 2 ID : **264330532964**  
Option 3 ID : **264330532963**  
Option 4 ID : **264330532965**  
Status : **Answered**  
Chosen Option : **3**

**Q.10** Select the most appropriate synonym of the given word.

Contrite

- Ans**
- ☒ 1. persistent
  - ☒ 2. advertent
  - ☒ 3. renitent
  - ☒ 4. remorseful

Question Type : **MCQ**  
Question ID : **264330135809**  
Option 1 ID : **264330532107**  
Option 2 ID : **264330532108**  
Option 3 ID : **264330532109**  
Option 4 ID : **264330532110**  
Status : **Not Answered**  
Chosen Option : **--**

**Q.11** A sentence has been given with a blank to be filled with an appropriate option. Choose the correct alternative.  
I was always greeted \_\_\_\_\_ wherever I went in the country.

- Ans**
- ☒ 1. warm
  - ☒ 2. warmly
  - ☒ 3. warming
  - ☒ 4. warmth

Question Type : **MCQ**  
Question ID : **264330134327**  
Option 1 ID : **264330526300**  
Option 2 ID : **264330526301**  
Option 3 ID : **264330526302**  
Option 4 ID : **264330526299**  
Status : **Answered**  
Chosen Option : **2**

Q.12 Select the most appropriate option to fill in the blank.  
The technical vocabulary and foreign words make this text a little more \_\_\_\_\_.

- Ans ☒ 1. difficult  
☒ 2. futile  
☒ 3. stagnant  
☒ 4. feasible

Question Type : MCQ  
Question ID : 264330134344  
Option 1 ID : 264330526364  
Option 2 ID : 264330526363  
Option 3 ID : 264330526365  
Option 4 ID : 264330526366  
Status : Answered  
Chosen Option : 1

Q.13 Select the most appropriate antonym of the given word.

Tangle

- Ans ☒ 1. Jam  
☒ 2. Labyrinth  
☒ 3. Simple  
☒ 4. Coil

Question Type : MCQ  
Question ID : 264330136402  
Option 1 ID : 264330534374  
Option 2 ID : 264330534371  
Option 3 ID : 264330534373  
Option 4 ID : 264330534372  
Status : Not Answered  
Chosen Option : --

Q.14 Fill in the blank with the most appropriate choice.  
Hard to believe that these people can justify and \_\_\_\_\_ such sickening behaviour!

- Ans ☒ 1. rationalize  
☒ 2. essentialize  
☒ 3. scandalize  
☒ 4. tantalize

Question Type : MCQ  
Question ID : 264330135818  
Option 1 ID : 264330532146  
Option 2 ID : 264330532145  
Option 3 ID : 264330532144  
Option 4 ID : 264330532143  
Status : Answered  
Chosen Option : 1

**Q.15** Select the most appropriate antonym to substitute the (bracketed) word in the given sentence.  
The negotiations have gotten nowhere, and I see no reason to (continue) with this pointless exercise.

- Ans**
- ✓ 1. halt
  - ✗ 2. vivacious
  - ✗ 3. coagulate
  - ✗ 4. agitate

Question Type : MCQ  
Question ID : 264330135812  
Option 1 ID : 264330532121  
Option 2 ID : 264330532122  
Option 3 ID : 264330532120  
Option 4 ID : 264330532119  
Status : Answered  
Chosen Option : 1

**Q.16** Select the most appropriate meaning of the bracketed idiom in the given sentence.  
Did you know David went to school with my brother? It's (a small world), isn't it?

- Ans**
- ✗ 1. Overwhelmed by what is happening in the moment
  - ✓ 2. Meeting someone not expected to be at a certain place
  - ✗ 3. A two-person conflict where both people are at fault
  - ✗ 4. An aggressive and bold confrontation

Question Type : MCQ  
Question ID : 264330135814  
Option 1 ID : 264330532130  
Option 2 ID : 264330532127  
Option 3 ID : 264330532128  
Option 4 ID : 264330532129  
Status : Answered  
Chosen Option : 1

**Q.17** Find the part of the given sentence that has an error in it. If there is no error, choose 'No error'.  
Fires in California is sounding alarm bells that cannot be ignored.

- Ans**
- ✗ 1. sounding alarm bells
  - ✗ 2. that cannot be ignored.
  - ✓ 3. Fires in California is
  - ✗ 4. No error

Question Type : MCQ  
Question ID : 264330134823  
Option 1 ID : 264330528232  
Option 2 ID : 264330528233  
Option 3 ID : 264330528231  
Option 4 ID : 264330528234  
Status : Answered  
Chosen Option : 3

Q.18 Choose the word that means the same as the given word.  
Appropriate

- Ans ☒ 1. Polarize  
☒ 2. Competent  
☒ 3. Informal  
☒ 4. Gentle

Question Type : MCQ  
Question ID : 264330134363  
Option 1 ID : 264330526438  
Option 2 ID : 264330526437  
Option 3 ID : 264330526436  
Option 4 ID : 264330526435  
Status : Not Answered  
Chosen Option : --

Q.19 Identify the segment that contains a grammatical error. If there is no error, select 'No error'.  
He consolidated control over all the / provinces of the Great Britain and some / of northern Gaul while Maximian dealt with other uprisings.

- Ans ☒ 1. of northern Gaul while Maximian dealt with other uprisings.  
☒ 2. No Error  
☒ 3. He consolidated control over all the  
☒ 4. provinces of the Great Britain and some

Question Type : MCQ  
Question ID : 264330135795  
Option 1 ID : 264330532057  
Option 2 ID : 264330532058  
Option 3 ID : 264330532055  
Option 4 ID : 264330532056  
Status : Answered  
Chosen Option : 1

Q.20 Identify the segment that contains a grammatical error. If there is no error, select 'No error'.  
Police could not catch / the gunman as he ran off / so very fastly into the woods.

- Ans ☒ 1. the gunman as he ran off  
☒ 2. Police could not catch  
☒ 3. No error  
☒ 4. so very fastly into the woods.

Question Type : MCQ  
Question ID : 264330136613  
Option 1 ID : 264330535180  
Option 2 ID : 264330535179  
Option 3 ID : 264330535182  
Option 4 ID : 264330535181  
Status : Answered  
Chosen Option : 4

**Comprehension:**

In the following passage some words have been deleted. Fill in the blanks with the help of the alternatives given. Select the most appropriate option for each number.

Were the stories we told each (1) \_\_\_\_\_ true? Who knows? At the best of (2) \_\_\_\_\_, a story is a slippery thing. (3) \_\_\_\_\_ no one had told us this (4) \_\_\_\_\_ one, though it was the tale we most (5) \_\_\_\_\_ to know.

**SubQuestion No : 21**

**Q.21** Select the most appropriate option to fill in blank number 1.

- Ans
- ☒ 1. of us
  - ☒ 2. one other
  - ☒ 3. another
  - ☒ 4. other

Question Type : MCQ  
Question ID : 264330136393  
Option 1 ID : 264330534335  
Option 2 ID : 264330534338  
Option 3 ID : 264330534337  
Option 4 ID : 264330534336  
Status : Answered  
Chosen Option : 4

**Comprehension:**

In the following passage some words have been deleted. Fill in the blanks with the help of the alternatives given. Select the most appropriate option for each number.

Were the stories we told each (1) \_\_\_\_\_ true? Who knows? At the best of (2) \_\_\_\_\_, a story is a slippery thing. (3) \_\_\_\_\_ no one had told us this (4) \_\_\_\_\_ one, though it was the tale we most (5) \_\_\_\_\_ to know.

**SubQuestion No : 22**

**Q.22** Select the most appropriate option to fill in blank number 2.

- Ans
- ☒ 1. time
  - ☒ 2. schedule
  - ☒ 3. clock
  - ☒ 4. times

Question Type : MCQ  
Question ID : 264330136394  
Option 1 ID : 264330534339  
Option 2 ID : 264330534340  
Option 3 ID : 264330534341  
Option 4 ID : 264330534342  
Status : Answered  
Chosen Option : 1

### Comprehension:

In the following passage some words have been deleted. Fill in the blanks with the help of the alternatives given. Select the most appropriate option for each number.

Were the stories we told each (1) \_\_\_\_\_ true? Who knows? At the best of (2) \_\_\_\_\_, a story is a slippery thing. (3) \_\_\_\_\_ no one had told us this (4) \_\_\_\_\_ one, though it was the tale we most (5) \_\_\_\_\_ to know.

### SubQuestion No : 23

Q.23 Select the most appropriate option to fill in blank number 3.

- Ans
- ☐ 1. May by
  - ☐ 2. Could be
  - ☒ 3. Certainly
  - ☐ 4. Might be

Question Type : MCQ

Question ID : 264330136395

Option 1 ID : 264330534344

Option 2 ID : 264330534345

Option 3 ID : 264330534343

Option 4 ID : 264330534346

Status : Answered

Chosen Option : 3

### Comprehension:

In the following passage some words have been deleted. Fill in the blanks with the help of the alternatives given. Select the most appropriate option for each number.

Were the stories we told each (1) \_\_\_\_\_ true? Who knows? At the best of (2) \_\_\_\_\_, a story is a slippery thing. (3) \_\_\_\_\_ no one had told us this (4) \_\_\_\_\_ one, though it was the tale we most (5) \_\_\_\_\_ to know.

### SubQuestion No : 24

Q.24 Select the most appropriate option to fill in blank number 4.

- Ans
- ☐ 1. in particular
  - ☒ 2. particular
  - ☐ 3. especial
  - ☐ 4. accurate

Question Type : MCQ

Question ID : 264330136396

Option 1 ID : 264330534347

Option 2 ID : 264330534349

Option 3 ID : 264330534350

Option 4 ID : 264330534348

Status : Answered

Chosen Option : 2

### Comprehension:

In the following passage some words have been deleted. Fill in the blanks with the help of the alternatives given. Select the most appropriate option for each number.

Were the stories we told each (1) \_\_\_\_\_ true? Who knows? At the best of (2) \_\_\_\_\_, a story is a slippery thing. (3) \_\_\_\_\_ no one had told us this (4) \_\_\_\_\_ one, though it was the tale we most (5) \_\_\_\_\_ to know.

### SubQuestion No : 25

Q.25 Select the most appropriate option to fill in blank number 5.

- Ans
- ☒ 1. concern
  - ☒ 2. needed
  - ☒ 3. had
  - ☒ 4. require

Question Type : MCQ

Question ID : 264330136397

Option 1 ID : 264330534354

Option 2 ID : 264330534353

Option 3 ID : 264330534351

Option 4 ID : 264330534352

Status : Answered

Chosen Option : 2

