

Multi Tasking Non Technical Staff and Havaladar CBIC and CBN Examination 2022

Roll Number	
Candidate Name	
Venue Name	Webinfotron Technologies Pvt. Ltd.
Exam Date	19/05/2023
Exam Time	12:00 PM - 2:00 PM
Subject	MTS Non Tech Havaladar CBIC and CBN Examination 2022

Section : Numerical and Mathematical Ability

Q.1 The difference between compound interest and simple interest on Rs. X at 7.5% per annum for 2 years is Rs. 22.50.
Find the value of X.

- Ans** ☒ 1. Rs. 4000
☒ 2. Rs. 5000
☒ 3. Rs. 2000
☒ 4. Rs. 1900

Question Type : **MCQ**

Question ID : **264330135403**

Option 1 ID : **264330530521**

Option 2 ID : **264330530522**

Option 3 ID : **264330530519**

Option 4 ID : **264330530520**

Status : **Answered**

Chosen Option : **1**

Q.2 A certain quantity of water is mixed with milk price at Rs. 48 per litre. The price of mixture is Rs. 30 per litre. The ratio of water and milk in the new mixture:(water is available free of cost)

- Ans** ☒ 1. 3:2
☒ 2. 3:5
☒ 3. 2:3
☒ 4. 2:5

Question Type : **MCQ**

Question ID : **264330135112**

Option 1 ID : **264330529383**

Option 2 ID : **264330529386**

Option 3 ID : **264330529385**

Option 4 ID : **264330529384**

Status : **Answered**

Chosen Option : **2**

Test Prime

**ALL EXAMS,
ONE SUBSCRIPTION**



70,000+
Mock Tests



**Personalised
Report Card**



**Unlimited
Re-Attempt**



600+
Exam Covered



**Previous Year
Papers**



500%
Refund



ATTEMPT FREE MOCK NOW

Q.3 The mean proportional between 35 and a certain number N is four times the mean proportional between 14 and 30. The number N is:

- Ans** ☒ 1. 192
☒ 2. 75
☒ 3. 124
☒ 4. 92

Question Type : **MCQ**

Question ID : **264330138357**

Option 1 ID : **264330542038**

Option 2 ID : **264330542035**

Option 3 ID : **264330542037**

Option 4 ID : **264330542036**

Status : **Answered**

Chosen Option : **3**

Q.4 If the price of a book first increased by 18% and then decreased by 18%. What is the net change in the price of the book?

- Ans** ☒ 1. 18% increase
☒ 2. 3.24% decrease
☒ 3. No change
☒ 4. 18% decrease

Question Type : **MCQ**

Question ID : **264330135396**

Option 1 ID : **264330530494**

Option 2 ID : **264330530493**

Option 3 ID : **264330530491**

Option 4 ID : **264330530492**

Status : **Answered**

Chosen Option : **2**

Q.5 A cone and a cylinder have same height and the radius of the cone is twice of the radius of the cylinder. What is the ratio of the volume of the cone to that of the cylinder?

- Ans** ☒ 1. 2:5
☒ 2. 4:5
☒ 3. 3:2
☒ 4. 4:3

Question Type : **MCQ**

Question ID : **264330133815**

Option 1 ID : **264330524284**

Option 2 ID : **264330524283**

Option 3 ID : **264330524286**

Option 4 ID : **264330524285**

Status : **Answered**

Chosen Option : **1**

Q.6 If the ratio of boys to girls in a class is 8:5, which of the following option could be the total number of students in that class?

- Ans**
- ☒ 1. 81
 - ☒ 2. 78
 - ☒ 3. 57
 - ☒ 4. 66

Question Type : **MCQ**

Question ID : **264330138356**

Option 1 ID : **264330542033**

Option 2 ID : **264330542031**

Option 3 ID : **264330542034**

Option 4 ID : **264330542032**

Status : **Answered**

Chosen Option : **2**

Q.7 Vihaan is twice as efficient as Mayur and can finish a piece of work in 14 days less than Mayur. In how many days Mayur can finish this work?

- Ans**
- ☒ 1. 14 days
 - ☒ 2. 21 days
 - ☒ 3. 28 days
 - ☒ 4. 7 days

Question Type : **MCQ**

Question ID : **264330133810**

Option 1 ID : **264330524263**

Option 2 ID : **264330524266**

Option 3 ID : **264330524265**

Option 4 ID : **264330524264**

Status : **Answered**

Chosen Option : **3**

Q.8 Pawan purchased a shirt whose marked price is Rs. 2200. The offer discount on shirt is 8%. How much amount Pawan need to pay?

- Ans**
- ☒ 1. Rs. 2120
 - ☒ 2. Rs. 2024
 - ☒ 3. Rs. 2099
 - ☒ 4. Rs. 1999

Question Type : **MCQ**

Question ID : **264330138355**

Option 1 ID : **264330542027**

Option 2 ID : **264330542028**

Option 3 ID : **264330542030**

Option 4 ID : **264330542029**

Status : **Answered**

Chosen Option : **2**

Q.9 The following table shows the number of engineers (in hundreds) in different countries for four years.

Find the average number of engineers in Canada in the given years.

Year	China	Canada	India
2019	210	120	240
2020	420	320	360
2021	540	180	540
2022	620	280	340

- Ans
- ☒ 1. 25000
 - ☒ 2. 22500
 - ☒ 3. 23000
 - ☒ 4. 24500

Question Type : **MCQ**
 Question ID : **264330138385**
 Option 1 ID : **264330542147**
 Option 2 ID : **264330542148**
 Option 3 ID : **264330542149**
 Option 4 ID : **264330542150**
 Status : **Answered**
 Chosen Option : 1

Q.10 Find the value of $(9^2 + 4^3 \div 8) \times 5$.

- Ans
- ☒ 1. 445
 - ☒ 2. 420
 - ☒ 3. 450
 - ☒ 4. 400

Question Type : **MCQ**
 Question ID : **264330138369**
 Option 1 ID : **264330542084**
 Option 2 ID : **264330542086**
 Option 3 ID : **264330542083**
 Option 4 ID : **264330542085**
 Status : **Answered**
 Chosen Option : 3

Q.11 If a train travels 1000 km from Bangalore to Mumbai and the journey takes 10 hours, then what is the train's average speed in km per hour?

- Ans
- ☒ 1. 100 km/hr
 - ☒ 2. 90 km/hr
 - ☒ 3. 120 km/hr
 - ☒ 4. 80 km/hr

Question Type : **MCQ**
 Question ID : **264330140997**
 Option 1 ID : **264330552336**
 Option 2 ID : **264330552338**
 Option 3 ID : **264330552335**
 Option 4 ID : **264330552337**
 Status : **Answered**
 Chosen Option : 1

Q.12 The product of two numbers 6552 and their HCF is 6. What is the LCM of those numbers?

- Ans**
- ☒ 1. 1024
 - ☒ 2. 1224
 - ☒ 3. 1084
 - ☒ 4. 1092

Question Type : **MCQ**

Question ID : **264330138701**

Option 1 ID : **264330543413**

Option 2 ID : **264330543414**

Option 3 ID : **264330543411**

Option 4 ID : **264330543412**

Status : **Answered**

Chosen Option : **4**

Q.13 The mean of 20 observations was 42. It was found later that an observation 54 was wrongly taken as 45. The corrected new mean is:

- Ans**
- ☒ 1. 45.42
 - ☒ 2. 43.5
 - ☒ 3. 44.25
 - ☒ 4. 42.45

Question Type : **MCQ**

Question ID : **264330138349**

Option 1 ID : **264330542003**

Option 2 ID : **264330542004**

Option 3 ID : **264330542006**

Option 4 ID : **264330542005**

Status : **Answered**

Chosen Option : **4**

Q.14 A sum of Rs. 900 is divided into two parts such that the interest on the first part at 4% simple interest per annum and that on the other part at 2% simple interest per annum are equal. What is the interest accumulated on each part in a year?

- Ans**
- ☒ 1. Rs. 18
 - ☒ 2. Rs. 6
 - ☒ 3. Rs. 12
 - ☒ 4. Rs. 20

Question Type : **MCQ**

Question ID : **264330135120**

Option 1 ID : **264330529418**

Option 2 ID : **264330529415**

Option 3 ID : **264330529416**

Option 4 ID : **264330529417**

Status : **Answered**

Chosen Option : **3**

Q.15 A fruit seller sells $\frac{2}{5}$ th part of fruits at a profit of 10% and remaining at a loss of 5%. If the total profit is Rs.1850, then what is the total cost price of fruits?

- Ans**
- ☒ 1. Rs.198000
 - ☒ 2. Rs.205000
 - ☒ 3. Rs.185000
 - ☒ 4. Rs.176000

Question Type : **MCQ**

Question ID : **264330138354**

Option 1 ID : **264330542025**

Option 2 ID : **264330542024**

Option 3 ID : **264330542023**

Option 4 ID : **264330542026**

Status : **Answered**

Chosen Option : **3**

Q.16 Selling price of an article is Rs. 520. If loss percentage is 20 percent, then what is the cost price of article?

- Ans**
- ☒ 1. Rs.600
 - ☒ 2. Rs.650
 - ☒ 3. Rs.700
 - ☒ 4. Rs.720

Question Type : **MCQ**

Question ID : **264330139082**

Option 1 ID : **264330544935**

Option 2 ID : **264330544936**

Option 3 ID : **264330544938**

Option 4 ID : **264330544937**

Status : **Answered**

Chosen Option : **2**

Q.17 A woman drives a car. During her journey, she travels 20 minutes at a speed of 60 km/hr, another 30 minutes at a speed of 40 km/hr and 1 hour at a speed of 50 km/hr. The average speed of the car is:

- Ans**
- ☒ 1. 540/11 kmph
 - ☒ 2. 630/11 kmph
 - ☒ 3. 100/11 kmph
 - ☒ 4. 90/11 kmph

Question Type : **MCQ**

Question ID : **264330138360**

Option 1 ID : **264330542047**

Option 2 ID : **264330542050**

Option 3 ID : **264330542049**

Option 4 ID : **264330542048**

Status : **Answered**

Chosen Option : **1**

Q.18 Evaluate: $(92 + 14) \div (2 \times 53) - 8 + 16$

- Ans
- ☒ 1. 11
 - ☒ 2. 9
 - ☒ 3. 17
 - ☒ 4. 8

Question Type : MCQ

Question ID : 264330138346

Option 1 ID : 264330541993

Option 2 ID : 264330541992

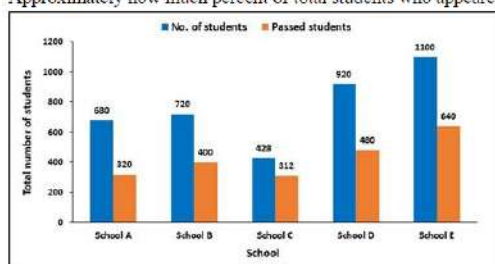
Option 3 ID : 264330541994

Option 4 ID : 264330541991

Status : Answered

Chosen Option : 2

Q.19 The following bar graph shows the total number of students who appeared in an exam from five different schools. Approximately how much percent of total students who appeared in the exam are failed?



- Ans
- ☒ 1. 57%
 - ☒ 2. 47%
 - ☒ 3. 44%
 - ☒ 4. 54%

Question Type : MCQ

Question ID : 264330138364

Option 1 ID : 264330542066

Option 2 ID : 264330542064

Option 3 ID : 264330542063

Option 4 ID : 264330542065

Status : Answered

Chosen Option : 1

Q.20 P alone can complete a work in 25 days and Q alone can complete the same work in 50 days. If both of them work together, then in 12 days what percent work of the total work will be completed?

- Ans
- ☒ 1. 80 percent
 - ☒ 2. 72 percent
 - ☒ 3. 48 percent
 - ☒ 4. 60 percent

Question Type : MCQ

Question ID : 264330138015

Option 1 ID : 264330540668

Option 2 ID : 264330540669

Option 3 ID : 264330540667

Option 4 ID : 264330540670

Status : Answered

Chosen Option : 2

Q.1 Select the option that is related to the fifth term in the same way as the second term is related to the first term and fourth term is related to third term.

HER : GCM :: TOP : SMK :: PIT : ?

- Ans**
- ☒ 1. OHO
 - ☒ 2. OGO
 - ☒ 3. OGQ
 - ☒ 4. QGP

Question Type : **MCQ**

Question ID : **264330138458**

Option 1 ID : **264330542440**

Option 2 ID : **264330542442**

Option 3 ID : **264330542441**

Option 4 ID : **264330542439**

Status : **Answered**

Chosen Option : **2**

Q.2 If A denotes 'addition', B denotes 'multiplication', C denotes 'subtraction', and D denotes 'division', then what will be the value of the following equation?

(46 D 23) A 17 C 13 = ?

- Ans**
- ☒ 1. 9
 - ☒ 2. 6
 - ☒ 3. 5
 - ☒ 4. 13

Question Type : **MCQ**

Question ID : **264330135016**

Option 1 ID : **264330529002**

Option 2 ID : **264330529000**

Option 3 ID : **264330528999**

Option 4 ID : **264330529001**

Status : **Answered**

Chosen Option : **2**

Q.3 After interchanging the given two numbers, what will be the value of the given equation?

2 and 3 ; $5 - 3 \div 1 \times 2 + 7$

- Ans**
- ☒ 1. 8
 - ☒ 2. 6
 - ☒ 3. 9
 - ☒ 4. 11

Question Type : **MCQ**

Question ID : **264330138472**

Option 1 ID : **264330542496**

Option 2 ID : **264330542495**

Option 3 ID : **264330542497**

Option 4 ID : **264330542498**

Status : **Answered**

Chosen Option : **2**

Q.4 A series is given with one term missing. Select the correct alternative from the given ones that will complete the series.

PAKC, NDIF, LGGI, JJEL, ?

- Ans**
- ☒ 1. HMCO
 - ☐ 2. HMCP
 - ☐ 3. HNCO
 - ☐ 4. IMLO

Question Type : **MCQ**

Question ID : **264330138456**

Option 1 ID : **264330542432**

Option 2 ID : **264330542434**

Option 3 ID : **264330542433**

Option 4 ID : **264330542431**

Status : **Answered**

Chosen Option : **1**

Q.5 Select the option that is related to the fifth term in the same way as the second term is related to the first term and fourth term is related to third term.

MOL : TIQ :: FIG : MCL :: HAK : ?

- Ans**
- ☐ 1. PUQ
 - ☐ 2. PVP
 - ☐ 3. OVP
 - ☒ 4. OUP

Question Type : **MCQ**

Question ID : **264330138459**

Option 1 ID : **264330542443**

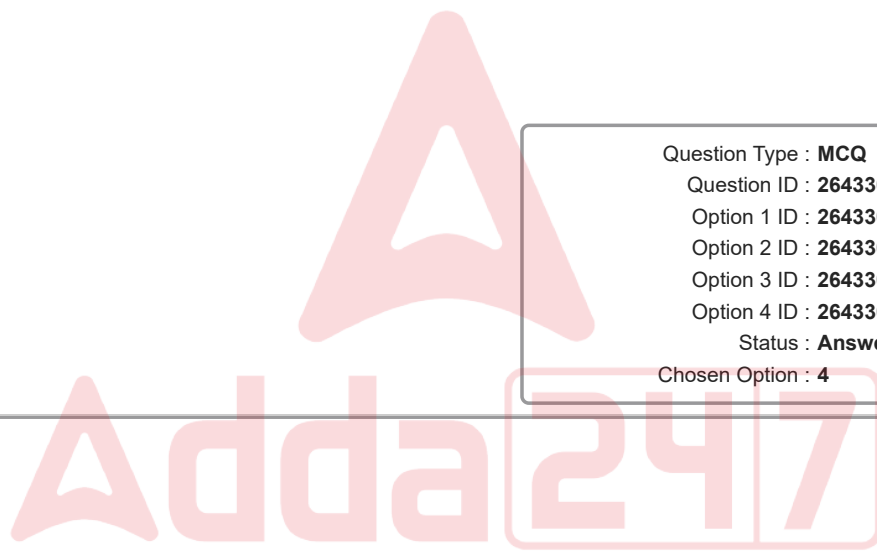
Option 2 ID : **264330542446**

Option 3 ID : **264330542444**

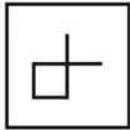
Option 4 ID : **264330542445**

Status : **Answered**

Chosen Option : **4**

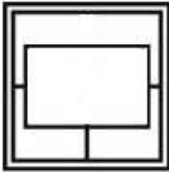


Q.6 Select the option figure in which the given figure is embedded. (rotation is NOT allowed)



Ans

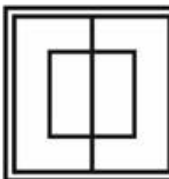
✗ 1.



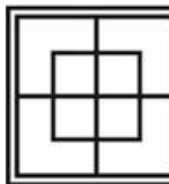
✗ 2.



✗ 3.



✓ 4.



Question Type : MCQ

Question ID : 264330138495

Option 1 ID : 264330542590

Option 2 ID : 264330542589

Option 3 ID : 264330542588

Option 4 ID : 264330542587

Status : Answered

Chosen Option : 4

Q.7 Seven teachers Anil, Kamal, Ram, Sanjay, Aakash, Vivek and Rahul are sitting around a circular table facing opposite to the centre (not necessarily in the same order). Sanjay is to the immediate right of Anil. Anil is third to the right of Rahul. Vivek is not the immediate neighbour of Aakash. Kamal is second to the right of Vivek. Who is second to the right of Anil?

Ans

✗ 1. Sanjay

✗ 2. Vivek

✓ 3. Ram

✗ 4. Kamal

Question Type : MCQ

Question ID : 264330138464

Option 1 ID : 264330542465

Option 2 ID : 264330542466

Option 3 ID : 264330542464

Option 4 ID : 264330542463

Status : Answered

Chosen Option : 1

Q.8 In the following question, select the missing number of the given series.

9, 18, 36, 72, 144, ?

- Ans
- ☒ 1. 310
 - ☒ 2. 280
 - ☒ 3. 288
 - ☒ 4. 290

Question Type : MCQ

Question ID : 264330135606

Option 1 ID : 264330531325

Option 2 ID : 264330531326

Option 3 ID : 264330531323

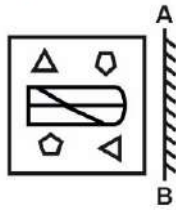
Option 4 ID : 264330531324

Status : Answered

Chosen Option : 3

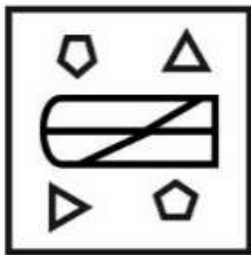


Q.9 If a mirror is placed on the line AB, then out of the option figures which figure will be the right image of the question figure?



Ans

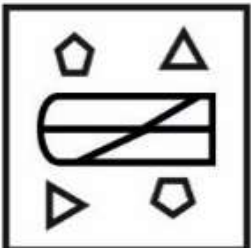
✓ 1.



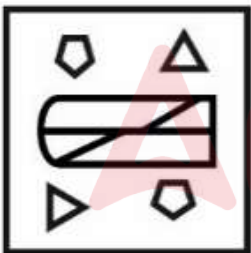
✗ 2.



✗ 3.



✗ 4.



Question Type : MCQ

Question ID : 264330138496

Option 1 ID : 264330542591

Option 2 ID : 264330542594

Option 3 ID : 264330542593

Option 4 ID : 264330542592

Status : Answered

Chosen Option : 1

Q.10 In a certain code language, 'KG' is written as 'MJ'. How will 'EI' be written in that language?

- Ans**
- ☒ 1. RJ
 - ☒ 2. JS
 - ☒ 3. GL
 - ☒ 4. RS

Question Type : **MCQ**

Question ID : **264330137587**

Option 1 ID : **264330538955**

Option 2 ID : **264330538956**

Option 3 ID : **264330538957**

Option 4 ID : **264330538958**

Status : **Answered**

Chosen Option : **3**

Q.11 In the following question below are given some statements followed by some conclusions based on those statements. Taking the given statements to be true even if they seem to be at variance from commonly known facts. Read all the conclusions and then decide which of the given conclusion logically follows the given statements.

Statements:

I. Some R are Q.

II. All Q are G.

Conclusion:

I. All G are R.

II. No Q is R.

- Ans**
- ☒ 1. Only conclusion I follows
 - ☒ 2. Neither conclusion follows
 - ☒ 3. Only conclusion II follows
 - ☒ 4. Both conclusions I and II follows

Question Type : **MCQ**

Question ID : **264330138466**

Option 1 ID : **264330542471**

Option 2 ID : **264330542474**

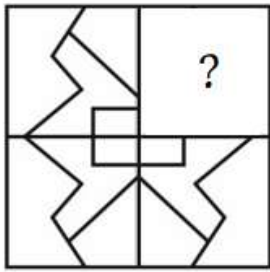
Option 3 ID : **264330542472**

Option 4 ID : **264330542473**

Status : **Answered**

Chosen Option : **2**

Q.12 Which answer figure will complete the pattern in the question figure?



Ans

✗ 1.



✗ 2.



✓ 3.



✗ 4.



Question Type : MCQ

Question ID : 264330138476

Option 1 ID : 264330542514

Option 2 ID : 264330542511

Option 3 ID : 264330542513

Option 4 ID : 264330542512

Status : Answered

Chosen Option : 4

Q.13 Eight girls Mansi, Shweta, Monika, Payal, Aarti, Kajal, Laxmi and Rani are sitting around a circular table facing towards the centre (not necessarily in the same order). Mansi is third to the right of Shweta. Shweta is second to the right of Rani. Kajal is fourth to the right of Payal. Payal is to the immediate left of Rani. Laxmi is second to the left of Rani. Monika is immediate neighbour of both Rani and Shweta. Who is third to the left of Monika?

- Ans**
- ☒ 1. Shweta
 - ☒ 2. Laxmi
 - ☒ 3. Kajal
 - ☒ 4. Aarti

Question Type : **MCQ**
 Question ID : **264330138463**
 Option 1 ID : **264330542460**
 Option 2 ID : **264330542462**
 Option 3 ID : **264330542461**
 Option 4 ID : **264330542459**
 Status : **Answered**
 Chosen Option : **1**

Q.14 Select the option that is related to the fifth number in the same way as the second number is related to the first number and fourth number is related to third number;

9 : 727 :: 8 : 510 :: 4 : ?

- Ans**
- ☒ 1. 58
 - ☒ 2. 60
 - ☒ 3. 67
 - ☒ 4. 62

Question Type : **MCQ**
 Question ID : **264330135608**
 Option 1 ID : **264330531331**
 Option 2 ID : **264330531332**
 Option 3 ID : **264330531334**
 Option 4 ID : **264330531333**
 Status : **Answered**
 Chosen Option : **4**

Q.15 In the following question, select the missing number of the given series.

5, 9, 17, 33, 65, ?

- Ans**
- ☒ 1. 140
 - ☒ 2. 130
 - ☒ 3. 129
 - ☒ 4. 128

Question Type : **MCQ**
 Question ID : **264330138469**
 Option 1 ID : **264330542486**
 Option 2 ID : **264330542483**
 Option 3 ID : **264330542485**
 Option 4 ID : **264330542484**
 Status : **Answered**
 Chosen Option : **3**

Q.16 Select the option in which the numbers shares the same relationship in set as that shared by the numbers in the given set.
(NOTE: Operations should be performed on the whole numbers, without breaking down the numbers into its constituent digits. E.g. 13 – Operations on 13 such as adding /subtracting /multiplying etc. to 13 can be performed. Breaking down 13 into 1 and 3 and then performing mathematical operations on 1 and 3 is not allowed)

(80, 5, 16)

(90, 9, 10)

- Ans**
- ✓ 1. (140, 7, 20)
 - ✗ 2. (40, 3, 10)
 - ✗ 3. (200, 20, 25)
 - ✗ 4. (50, 5, 20)

Question Type : **MCQ**
Question ID : **264330138471**
Option 1 ID : **264330542493**
Option 2 ID : **264330542491**
Option 3 ID : **264330542494**
Option 4 ID : **264330542492**
Status : **Answered**
Chosen Option : **1**

Q.17 In a certain code language, 'GLOBAL' is coded as 'EJMZYJ'. What is the code for 'HONEST' in that code language?

- Ans**
- ✗ 1. FNLCQR
 - ✓ 2. FMLCQR
 - ✗ 3. FMLCQS
 - ✗ 4. FMLDQR

Question Type : **MCQ**
Question ID : **264330135565**
Option 1 ID : **264330531159**
Option 2 ID : **264330531162**
Option 3 ID : **264330531161**
Option 4 ID : **264330531160**
Status : **Answered**
Chosen Option : **2**

Q.18 In a certain code language, 'MOVIES' is written as 'PRYFBP'. How will 'JACKSY' be written in that language?

- Ans**
- ✗ 1. MDFHVP
 - ✗ 2. MDFVPH
 - ✓ 3. MDFHPV
 - ✗ 4. MFDHPV

Question Type : **MCQ**
Question ID : **264330137835**
Option 1 ID : **264330539947**
Option 2 ID : **264330539949**
Option 3 ID : **264330539950**
Option 4 ID : **264330539948**
Status : **Answered**
Chosen Option : **3**

Q.19 Speed of six bikes T1, T2, T3, T4, T5 and T6 are compared. Speed of T6 is more than only three bikes. No two bikes have same speed. Speed of T4 is more than T2 but less than T6. Speed of T3 is not less than T5. Speed of T2 is not least. Speed of which bikes can be more than T4?

I. T3

II. T1

- Ans**
- ☒ 1. Only II
 - ☒ 2. Only I
 - ☒ 3. Neither I nor II
 - ☒ 4. Both I and II

Question Type : **MCQ**

Question ID : **264330138465**

Option 1 ID : **264330542468**

Option 2 ID : **264330542467**

Option 3 ID : **264330542470**

Option 4 ID : **264330542469**

Status : **Answered**

Chosen Option : **1**

Q.20 In the following question below are given some statements followed by some conclusions based on those statements. Taking the given statements to be true even if they seem to be at variance from commonly known facts. Read all the conclusions and then decide which of the given conclusion logically follows the given statements.

Statements:

I. All A are G.

II. Some M are G.

Conclusion:

I. Some G are A.

II. Some G are M.

III. All M are A.

- Ans**
- ☒ 1. Both conclusions I and III follows
 - ☒ 2. Both conclusions I and II follows
 - ☒ 3. Only conclusion II follows
 - ☒ 4. All conclusion follows

Question Type : **MCQ**

Question ID : **264330138467**

Option 1 ID : **264330542477**

Option 2 ID : **264330542478**

Option 3 ID : **264330542475**

Option 4 ID : **264330542476**

Status : **Answered**

Chosen Option : **1**

Section : **General Awareness**

Q.1 With which neighbouring country does India share most of the western border?

- Ans
- ☐ 1. Myanmar
 - ☐ 2. Bhutan
 - ☐ 3. China
 - ☒ 4. Pakistan

Question Type : MCQ

Question ID : 264330135446

Option 1 ID : 264330530694

Option 2 ID : 264330530692

Option 3 ID : 264330530693

Option 4 ID : 264330530691

Status : Answered

Chosen Option : 4

Q.2 Which of the following factors affect distribution of population?

- I. Climate
- II. Soil
- III. Topography
- IV. Water

- Ans
- ☐ 1. II and IV
 - ☐ 2. I, III and IV
 - ☐ 3. I and III
 - ☒ 4. I, II, III, and IV

Question Type : MCQ

Question ID : 264330138644

Option 1 ID : 264330543184

Option 2 ID : 264330543185

Option 3 ID : 264330543183

Option 4 ID : 264330543186

Status : Answered

Chosen Option : 4

Q.3 Brij Bhushan Kabra is associated with which of the following musical instruments?

- Ans
- ☐ 1. Shehnai
 - ☒ 2. Guitar
 - ☐ 3. Violin
 - ☐ 4. Flute

Question Type : MCQ

Question ID : 264330138239

Option 1 ID : 264330541565

Option 2 ID : 264330541564

Option 3 ID : 264330541563

Option 4 ID : 264330541566

Status : Not Answered

Chosen Option : --

Q.4 Sanskrit is a part of a family of languages known as _____.

- Ans
- ✓ 1. Indo-European
 - ✗ 2. Indo-Asian
 - ✗ 3. Indo-Tibetan
 - ✗ 4. Indo-Dravidian

Question Type : MCQ
Question ID : 264330138267
Option 1 ID : 264330541675
Option 2 ID : 264330541676
Option 3 ID : 264330541678
Option 4 ID : 264330541677
Status : Answered
Chosen Option : 1

Q.5 Data Protection Bill 2021 ensures which fundamental right?

- Ans
- ✗ 1. Right to Education
 - ✗ 2. Right to Information Technology
 - ✗ 3. Right to Freedom of Speech
 - ✓ 4. Right to Privacy

Question Type : MCQ
Question ID : 264330134670
Option 1 ID : 264330527635
Option 2 ID : 264330527637
Option 3 ID : 264330527638
Option 4 ID : 264330527636
Status : Answered
Chosen Option : 4

Q.6 Kelucharan Mohapatra is a famous personality associated with which of the following dance forms?

- Ans
- ✓ 1. Odissi
 - ✗ 2. Kathak
 - ✗ 3. Chhau
 - ✗ 4. Manipuri

Question Type : MCQ
Question ID : 264330138223
Option 1 ID : 264330541499
Option 2 ID : 264330541502
Option 3 ID : 264330541500
Option 4 ID : 264330541501
Status : Answered
Chosen Option : 1

Q.7 Which among the following occur when two tectonic plates are moving past each other with different speeds?

- Ans
- ☐ 1. Drought
 - ☒ 2. Earthquake
 - ☐ 3. Hurricane
 - ☐ 4. Blizzard

Question Type : MCQ

Question ID : 264330135467

Option 1 ID : 264330530777

Option 2 ID : 264330530775

Option 3 ID : 264330530776

Option 4 ID : 264330530778

Status : Answered

Chosen Option : 2

Q.8 Which of the following architecture is a memorial of Aurangzeb's wife, Dilras Banu Begum?

- Ans
- ☐ 1. Jama Masjid
 - ☒ 2. Bibi Ka Maqbara
 - ☐ 3. Shah Begum's Tomb
 - ☐ 4. Taj Mahal

Question Type : MCQ

Question ID : 264330134673

Option 1 ID : 264330527648

Option 2 ID : 264330527650

Option 3 ID : 264330527649

Option 4 ID : 264330527647

Status : Answered

Chosen Option : 2

Q.9 What is the minimum age a person should be if he/she is willing to be appointed as the Governor of a state in India?

- Ans
- ☐ 1. 28 years
 - ☐ 2. 30 years
 - ☒ 3. 35 years
 - ☐ 4. 40 years

Question Type : MCQ

Question ID : 264330138242

Option 1 ID : 264330541577

Option 2 ID : 264330541576

Option 3 ID : 264330541575

Option 4 ID : 264330541578

Status : Answered

Chosen Option : 3

Q.10 The force exerted by a charged body on another charged or uncharged body is known as _____.

- Ans
- ☒ 1. angular force
 - ☒ 2. electrostatic force
 - ☒ 3. pressure
 - ☒ 4. muscular force

Question Type : MCQ
Question ID : 264330135464
Option 1 ID : 264330530765
Option 2 ID : 264330530763
Option 3 ID : 264330530766
Option 4 ID : 264330530764
Status : Answered
Chosen Option : 2

Q.11 Article 19-22 of the Indian Constitution deals with which of the following fundamental rights?

- Ans
- ☒ 1. Right to Freedom of Religion
 - ☒ 2. Right to Freedom
 - ☒ 3. Right against Exploitation
 - ☒ 4. Right to Equality

Question Type : MCQ
Question ID : 264330138241
Option 1 ID : 264330541574
Option 2 ID : 264330541572
Option 3 ID : 264330541573
Option 4 ID : 264330541571
Status : Answered
Chosen Option : 2

Q.12 Kobe Bryant was a famous player of _____ sport.

- Ans
- ☒ 1. Basketball
 - ☒ 2. Cricket
 - ☒ 3. Rugby
 - ☒ 4. Lawn Tennis

Question Type : MCQ
Question ID : 264330135482
Option 1 ID : 264330530838
Option 2 ID : 264330530835
Option 3 ID : 264330530836
Option 4 ID : 264330530837
Status : Answered
Chosen Option : 1

Q.13 The Chief Minister of which of the following states launched the common credit portal - Simplified Application for Agricultural Loans (SAFAL) to increase farmers' access to loans?

- Ans
- ✓ 1. Odisha
 - ✗ 2. Maharashtra
 - ✗ 3. West Bengal
 - ✗ 4. Bihar

Question Type : MCQ

Question ID : 264330138221

Option 1 ID : 264330541492

Option 2 ID : 264330541491

Option 3 ID : 264330541494

Option 4 ID : 264330541493

Status : Not Answered

Chosen Option : --

Q.14 During which freedom struggle movement, Mahatma Gandhi Ji gave the call for "Do or Die"?

- Ans
- ✗ 1. Khilafat movement
 - ✗ 2. Non-cooperation movement
 - ✗ 3. Dandi March
 - ✓ 4. Quit India movement

Question Type : MCQ

Question ID : 264330134684

Option 1 ID : 264330527692

Option 2 ID : 264330527693

Option 3 ID : 264330527694

Option 4 ID : 264330527691

Status : Answered

Chosen Option : 4

Q.15 Which city in India is associated with the tea industry?

- Ans
- ✗ 1. Panipat, Haryana
 - ✗ 2. Ahmedabad, Gujarat
 - ✓ 3. Darjeeling, West Bengal
 - ✗ 4. Madurai, Tamil Nadu

Question Type : MCQ

Question ID : 264330137770

Option 1 ID : 264330539689

Option 2 ID : 264330539687

Option 3 ID : 264330539688

Option 4 ID : 264330539690

Status : Answered

Chosen Option : 3

Q.16 Every year, Halloween is celebrated on _____.

- Ans
- ☐ 1. 24th November
 - ☐ 2. 25th December
 - ☐ 3. 1st October
 - ☒ 4. 31st October

Question Type : MCQ

Question ID : 264330138247

Option 1 ID : 264330541598

Option 2 ID : 264330541596

Option 3 ID : 264330541597

Option 4 ID : 264330541595

Status : Answered

Chosen Option : 4

Q.17 Who wrote the book "A Brief History of Time"?

- Ans
- ☒ 1. Stephen Hawking
 - ☐ 2. Albert Einstein
 - ☐ 3. John Watson
 - ☐ 4. Neil Degrasse Tyson

Question Type : MCQ

Question ID : 264330137778

Option 1 ID : 264330539721

Option 2 ID : 264330539719

Option 3 ID : 264330539720

Option 4 ID : 264330539722

Status : Answered

Chosen Option : 1

Q.18 Who among the following was the first Biologist who discovered cells?

- Ans
- ☒ 1. Robert Hooke
 - ☐ 2. Rosalind Franklin
 - ☐ 3. Gregor Mendel
 - ☐ 4. Charles Darwin

Question Type : MCQ

Question ID : 264330135466

Option 1 ID : 264330530771

Option 2 ID : 264330530774

Option 3 ID : 264330530773

Option 4 ID : 264330530772

Status : Answered

Chosen Option : 1

Q.19 Which dancer won the Padma Shri in the arts category for the ancient dance form, Sathir?

- Ans
- ☐ 1. Kaushalya Reddy
 - ☐ 2. Manjamma Jogati
 - ☒ 3. R Muthukannamal
 - ☐ 4. Tripti Tiwari

Question Type : MCQ

Question ID : 264330137780

Option 1 ID : 264330539727

Option 2 ID : 264330539730

Option 3 ID : 264330539728

Option 4 ID : 264330539729

Status : Not Answered

Chosen Option : --

Q.20 The Ilbert Bill provided for _____.

- Ans
- ☐ 1. Strict punishment to Nationalist
 - ☒ 2. Equality between British and Indian Judges
 - ☐ 3. Reforms in Military system
 - ☐ 4. Reforms in education system

Question Type : MCQ

Question ID : 264330138270

Option 1 ID : 264330541687

Option 2 ID : 264330541688

Option 3 ID : 264330541690

Option 4 ID : 264330541689

Status : Answered

Chosen Option : 4

Q.21 Which among the following plant kingdoms are divided into liverworts and mosses?

- Ans
- ☐ 1. Pteridophytes
 - ☐ 2. Spermatophyta
 - ☐ 3. Sphenopsida
 - ☒ 4. Bryophytes

Question Type : MCQ

Question ID : 264330138227

Option 1 ID : 264330541516

Option 2 ID : 264330541517

Option 3 ID : 264330541518

Option 4 ID : 264330541515

Status : Answered

Chosen Option : 1

Q.22 Alivardi Khan was followed by _____ as the Nawab of Bengal.

- Ans
- ☒ 1. Sirajuddaulah
 - ☐ 2. Murshid Quli Khan
 - ☐ 3. Sarfaraz Khan
 - ☐ 4. Shuja ud-Daula

Question Type : MCQ
Question ID : 264330135473
Option 1 ID : 264330530800
Option 2 ID : 264330530799
Option 3 ID : 264330530801
Option 4 ID : 264330530802
Status : Answered
Chosen Option : 1

Q.23 Who was the first Indian, and Asian, tennis player to win an Olympic medal?

- Ans
- ☐ 1. Ankita Raina
 - ☐ 2. PV Sindhu
 - ☐ 3. Purav Raja
 - ☒ 4. Leander Paes

Question Type : MCQ
Question ID : 264330138243
Option 1 ID : 264330541582
Option 2 ID : 264330541579
Option 3 ID : 264330541581
Option 4 ID : 264330541580
Status : Answered
Chosen Option : 2

Q.24 NABARD is an apex finance institution set up by the Indian Government in 1982. What does 'R' in NABARD stand for?

- Ans
- ☒ 1. Rural
 - ☐ 2. Rank
 - ☐ 3. Regulatory
 - ☐ 4. Right

Question Type : MCQ
Question ID : 264330137785
Option 1 ID : 264330539748
Option 2 ID : 264330539747
Option 3 ID : 264330539749
Option 4 ID : 264330539750
Status : Answered
Chosen Option : 1

Q.25 The Gandhisagar dam of Madhya Pradesh is built over which of the following rivers?

- Ans** ☒ 1. Chambal
☒ 2. Benas
☒ 3. Kaveri
☒ 4. Ravi

Question Type : **MCQ**
 Question ID : **264330138231**
 Option 1 ID : **264330541532**
 Option 2 ID : **264330541534**
 Option 3 ID : **264330541533**
 Option 4 ID : **264330541531**
 Status : **Answered**
 Chosen Option : **1**

Section : English Language and Comprehension

Q.1 In the following question, out of the given four alternatives, select the alternative which best expresses the meaning of the Idiom/Phrase.

In ones and twos

- Ans** ☒ 1. In small numbers
☒ 2. By unfair means
☒ 3. Large margin
☒ 4. To count resources

Question Type : **MCQ**
 Question ID : **264330135224**
 Option 1 ID : **264330529822**
 Option 2 ID : **264330529819**
 Option 3 ID : **264330529821**
 Option 4 ID : **264330529820**
 Status : **Answered**
 Chosen Option : **1**

Q.2 Select the word from the options which is exactly opposite in meaning to the bracketed word given in the sentence below.

Having an (active) youngster around the house can be quite wearing.

- Ans** ☒ 1. Progressive
☒ 2. Streaming
☒ 3. Bustling
☒ 4. Abeyant

Question Type : **MCQ**
 Question ID : **264330136606**
 Option 1 ID : **264330535151**
 Option 2 ID : **264330535152**
 Option 3 ID : **264330535154**
 Option 4 ID : **264330535153**
 Status : **Answered**
 Chosen Option : **4**

Q.3 Choose the word that can substitute the given group of words.

A place for wrestling

- Ans
- ☒ 1. Cemetery
 - ☒ 2. Hangar
 - ☒ 3. Premise
 - ☒ 4. Arena

Question Type : MCQ
Question ID : 264330135218
Option 1 ID : 264330529795
Option 2 ID : 264330529797
Option 3 ID : 264330529798
Option 4 ID : 264330529796
Status : Answered
Chosen Option : 4

Q.4 Find the part of the given sentence that has an error in it. If there is no error, choose 'No error'.

There were a time when scientists took this myth seriously.

- Ans
- ☒ 1. No error
 - ☒ 2. There were a time
 - ☒ 3. when scientists took
 - ☒ 4. this myth seriously.

Question Type : MCQ
Question ID : 264330134451
Option 1 ID : 264330526778
Option 2 ID : 264330526775
Option 3 ID : 264330526776
Option 4 ID : 264330526777
Status : Answered
Chosen Option : 2

Q.5 The statement below has been given with bracketed text. Select the option with correct Idiom for the bracketed text.

History certainly gives you (something to think about), doesn't it?

- Ans
- ☒ 1. food for thought
 - ☒ 2. cup of Joe
 - ☒ 3. golden handshake
 - ☒ 4. forty winks

Question Type : MCQ
Question ID : 264330136608
Option 1 ID : 264330535161
Option 2 ID : 264330535162
Option 3 ID : 264330535160
Option 4 ID : 264330535159
Status : Answered
Chosen Option : 1

Q.6 Select the word segment that substitutes (replaces) the bracketed word segment correctly and completes the sentence meaningfully. Select the option 'no correction required' if the sentence is correct as given.

(Those Mount Everests) is Earth's highest mountain above sea level, located in the sub-range of the Himalayas.

- Ans**
- ☒ 1. The Mount Everest
 - ☒ 2. Mount Everest
 - ☒ 3. No correction required
 - ☒ 4. A Mount Everest

Question Type : **MCQ**
 Question ID : **264330136618**
 Option 1 ID : **264330535200**
 Option 2 ID : **264330535199**
 Option 3 ID : **264330535202**
 Option 4 ID : **264330535201**
 Status : **Answered**
 Chosen Option : **2**

Q.7 Fill in the blank with the most appropriate option.

The story _____ me to make up fancy names for myself.

- Ans**
- ☒ 1. declared
 - ☒ 2. activated
 - ☒ 3. told
 - ☒ 4. inspired

Question Type : **MCQ**
 Question ID : **264330136593**
 Option 1 ID : **264330535103**
 Option 2 ID : **264330535106**
 Option 3 ID : **264330535105**
 Option 4 ID : **264330535104**
 Status : **Answered**
 Chosen Option : **4**

Q.8 Fill in the blank with the most appropriate option.

Even the rules for spelling can cause you to _____.

- Ans**
- ☒ 1. do a mistake
 - ☒ 2. happen a mistake
 - ☒ 3. have a mistake
 - ☒ 4. make a mistake

Question Type : **MCQ**
 Question ID : **264330136637**
 Option 1 ID : **264330535271**
 Option 2 ID : **264330535272**
 Option 3 ID : **264330535274**
 Option 4 ID : **264330535273**
 Status : **Answered**
 Chosen Option : **4**

Q.9 Choose the word that is opposite in meaning to the given word.

Hyped

- Ans
- ☒ 1. Dilate
 - ☒ 2. Upped
 - ☒ 3. Reduced
 - ☒ 4. Parlayed

Question Type : MCQ
Question ID : 264330134815
Option 1 ID : 264330528202
Option 2 ID : 264330528199
Option 3 ID : 264330528200
Option 4 ID : 264330528201
Status : Answered
Chosen Option : 4

Q.10 Fill in the blank with the most appropriate option.

She is _____, always submits her assignments on time.

- Ans
- ☒ 1. late
 - ☒ 2. punctual
 - ☒ 3. scheduled
 - ☒ 4. tardy

Question Type : MCQ
Question ID : 264330136612
Option 1 ID : 264330535178
Option 2 ID : 264330535177
Option 3 ID : 264330535176
Option 4 ID : 264330535175
Status : Answered
Chosen Option : 2

Q.11 Four sentences are given, out of which three have spelling errors. Choose the sentence with all correctly spelt words.

- Ans
- ☒ 1. His performance exceeded all expectations.
 - ☒ 2. He was arrested for drunkenness on his way to the football ground.
 - ☒ 3. A dumbbell is a short bar with weights on either side.
 - ☒ 4. He was quite humorus, and I liked that about him

Question Type : MCQ
Question ID : 264330136636
Option 1 ID : 264330535268
Option 2 ID : 264330535267
Option 3 ID : 264330535269
Option 4 ID : 264330535270
Status : Answered
Chosen Option : 1

Q.12 Select the word from the options which is similar in meaning to the bracketed word given in the sentence below.

He maliciously (damaged) a car with a baseball bat.

- Ans**
- ☒ 1. Mended
 - ☒ 2. Loaded
 - ☒ 3. Corrupted
 - ☒ 4. Marred

Question Type : MCQ
Question ID : 264330136656
Option 1 ID : 264330535346
Option 2 ID : 264330535345
Option 3 ID : 264330535343
Option 4 ID : 264330535344
Status : Answered
Chosen Option : 4

Q.13 Select the most appropriate option to substitute the bracketed segment in the given sentence. If there is no need to substitute it, select 'no substitution required'.

The Bank of New York has increased (interest rates four times from last January.)

- Ans**
- ☒ 1. interest rates four times since last January.
 - ☒ 2. the interest rates four time from last January.
 - ☒ 3. No substitution required
 - ☒ 4. interest rates from last January, four times.

Question Type : MCQ
Question ID : 264330136721
Option 1 ID : 264330535596
Option 2 ID : 264330535595
Option 3 ID : 264330535598
Option 4 ID : 264330535597
Status : Answered
Chosen Option : 1

Q.14 Improve the underlined part of the sentence. Choose 'No improvement' as an answer if the sentence is grammatically correct.

The dress is too tight around the waist.

- Ans**
- ☒ 1. too tightly
 - ☒ 2. No improvement
 - ☒ 3. too tightest
 - ☒ 4. too tight

Question Type : MCQ
Question ID : 264330135181
Option 1 ID : 264330529657
Option 2 ID : 264330529658
Option 3 ID : 264330529655
Option 4 ID : 264330529656
Status : Answered
Chosen Option : 4

Q.15 Select the most appropriate synonym of the given word.

Opposite

- Ans
- ☒ 1. Noticeable
 - ☒ 2. Conspicuous
 - ☒ 3. Antagonistic
 - ☒ 4. Similar

Question Type : MCQ
Question ID : 264330136603
Option 1 ID : 264330535142
Option 2 ID : 264330535141
Option 3 ID : 264330535139
Option 4 ID : 264330535140
Status : Answered
Chosen Option : 3

Q.16 Four words are given, out of which only one word is spelt correctly. Choose the correctly spelt word.

- Ans
- ☒ 1. APPARENT
 - ☒ 2. PLEGE
 - ☒ 3. AQUIRE
 - ☒ 4. CALENDER

Question Type : MCQ
Question ID : 264330136609
Option 1 ID : 264330535164
Option 2 ID : 264330535166
Option 3 ID : 264330535163
Option 4 ID : 264330535165
Status : Answered
Chosen Option : 1

Q.17 Select the most appropriate option to fill in the blank.

I often feel I am an _____, that I would be more at home at the turn of the century than today.

- Ans
- ☒ 1. anachronism
 - ☒ 2. analogous
 - ☒ 3. apathy
 - ☒ 4. avarice

Question Type : MCQ
Question ID : 264330136672
Option 1 ID : 264330535408
Option 2 ID : 264330535407
Option 3 ID : 264330535409
Option 4 ID : 264330535410
Status : Answered
Chosen Option : 2

Q.18 Select the most appropriate word for the given group of words.

An inscription on or at a tomb or a grave

- Ans
- ☒ 1. Ode
 - ☒ 2. Imprint
 - ☒ 3. Epitaph
 - ☒ 4. Carving

Question Type : MCQ
Question ID : 264330136602
Option 1 ID : 264330535135
Option 2 ID : 264330535136
Option 3 ID : 264330535137
Option 4 ID : 264330535138
Status : Answered
Chosen Option : 3

Q.19 Identify the segment that contains a grammatical error. If there is no error, select 'No error'.

Sorry I will be late as a flight / has been delayed due / to bad weather.

- Ans
- ☒ 1. No error
 - ☒ 2. Sorry I will be late as a flight
 - ☒ 3. to bad weather.
 - ☒ 4. has been delayed due

Question Type : MCQ
Question ID : 264330136589
Option 1 ID : 264330535090
Option 2 ID : 264330535087
Option 3 ID : 264330535089
Option 4 ID : 264330535088
Status : Answered
Chosen Option : 1

Q.20 Identify the segment that contains a grammatical error. If there is no error, select 'No error'.

Here, in truth, lies / the crux of the / great problem of all.

- Ans
- ☒ 1. great problem of all.
 - ☒ 2. No error
 - ☒ 3. Here, in truth, lies
 - ☒ 4. the crux of the

Question Type : MCQ
Question ID : 264330136718
Option 1 ID : 264330535585
Option 2 ID : 264330535586
Option 3 ID : 264330535583
Option 4 ID : 264330535584
Status : Answered
Chosen Option : 1

Comprehension:

In the following passage some of the words have been deleted. Read the passage carefully and select the correct answer for the given blank out of the four alternatives.

Workers' compensation benefits in Pennsylvania should pay for your medical (1) _____ and a portion of your lost wages. However, you cannot be (2) _____ for pain and suffering or other non-financial damages that your illness or injury may (3) _____ you. A personal injury or wrongful death lawsuit, on the other hand, (4) _____ compensation for the ill worker or surviving family members. If someone (5) _____ your employer or a co-worker was to blame for your illness, you could pursue such a claim.

SubQuestion No : 21

Q.21 Select the most appropriate option to fill in blank number 1.

- Ans
- ☒ 1. states
 - ☒ 2. regulations
 - ☒ 3. bills
 - ☒ 4. rules

Question Type : MCQ
 Question ID : 264330134806
 Option 1 ID : 264330528164
 Option 2 ID : 264330528166
 Option 3 ID : 264330528163
 Option 4 ID : 264330528165
 Status : Answered
 Chosen Option : 3

Comprehension:

In the following passage some of the words have been deleted. Read the passage carefully and select the correct answer for the given blank out of the four alternatives.

Workers' compensation benefits in Pennsylvania should pay for your medical (1) _____ and a portion of your lost wages. However, you cannot be (2) _____ for pain and suffering or other non-financial damages that your illness or injury may (3) _____ you. A personal injury or wrongful death lawsuit, on the other hand, (4) _____ compensation for the ill worker or surviving family members. If someone (5) _____ your employer or a co-worker was to blame for your illness, you could pursue such a claim.

SubQuestion No : 22

Q.22 Select the most appropriate option to fill in blank number 2.

- Ans
- ☒ 1. repudiated
 - ☒ 2. paid
 - ☒ 3. stiffed
 - ☒ 4. signed

Question Type : MCQ
 Question ID : 264330134807
 Option 1 ID : 264330528170
 Option 2 ID : 264330528168
 Option 3 ID : 264330528167
 Option 4 ID : 264330528169
 Status : Answered
 Chosen Option : 1

Comprehension:

In the following passage some of the words have been deleted. Read the passage carefully and select the correct answer for the given blank out of the four alternatives.

Workers' compensation benefits in Pennsylvania should pay for your medical (1) _____ and a portion of your lost wages. However, you cannot be (2) _____ for pain and suffering or other non-financial damages that your illness or injury may (3) _____ you. A personal injury or wrongful death lawsuit, on the other hand, (4) _____ compensation for the ill worker or surviving family members. If someone (5) _____ your employer or a co-worker was to blame for your illness, you could pursue such a claim.

SubQuestion No : 23

Q.23 Select the most appropriate option to fill in blank number 3.

- Ans
- ☐ 1. cause
 - ☐ 2. has caused
 - ☒ 3. have caused
 - ☐ 4. causing

Question Type : MCQ
 Question ID : 264330134808
 Option 1 ID : 264330528171
 Option 2 ID : 264330528172
 Option 3 ID : 264330528173
 Option 4 ID : 264330528174
 Status : Answered
 Chosen Option : 3

Comprehension:

In the following passage some of the words have been deleted. Read the passage carefully and select the correct answer for the given blank out of the four alternatives.

Workers' compensation benefits in Pennsylvania should pay for your medical (1) _____ and a portion of your lost wages. However, you cannot be (2) _____ for pain and suffering or other non-financial damages that your illness or injury may (3) _____ you. A personal injury or wrongful death lawsuit, on the other hand, (4) _____ compensation for the ill worker or surviving family members. If someone (5) _____ your employer or a co-worker was to blame for your illness, you could pursue such a claim.

SubQuestion No : 24

Q.24 Select the most appropriate option to fill in blank number 4.

- Ans
- ☐ 1. hosts
 - ☒ 2. allows
 - ☐ 3. hovers
 - ☐ 4. boasts

Question Type : MCQ
 Question ID : 264330134809
 Option 1 ID : 264330528177
 Option 2 ID : 264330528178
 Option 3 ID : 264330528175
 Option 4 ID : 264330528176
 Status : Answered
 Chosen Option : 2

Comprehension:

In the following passage some of the words have been deleted. Read the passage carefully and select the correct answer for the given blank out of the four alternatives.

Workers' compensation benefits in Pennsylvania should pay for your medical (1) _____ and a portion of your lost wages. However, you cannot be (2) _____ for pain and suffering or other non-financial damages that your illness or injury may (3) _____ you. A personal injury or wrongful death lawsuit, on the other hand, (4) _____ compensation for the ill worker or surviving family members. If someone (5) _____ your employer or a co-worker was to blame for your illness, you could pursue such a claim.

SubQuestion No : 25

Q.25 Select the most appropriate option to fill in blank number 5.

- Ans
- ☒ 1. beyond
 - ☒ 2. along
 - ☒ 3. besides
 - ☒ 4. beside

Question Type : MCQ

Question ID : 264330134810

Option 1 ID : 264330528182

Option 2 ID : 264330528180

Option 3 ID : 264330528181

Option 4 ID : 264330528179

Status : Answered

Chosen Option : 1

