

Multi Tasking Non Technical Staff and Havaldar CBIC and CBN Examination 2022

Roll Number	
Candidate Name	
Venue Name	iON Digital Zone iDZ 2 Duhai
Exam Date	19/05/2023
Exam Time	3:30 PM - 5:00 PM
Subject	MTS Non Tech Havaldar CBIC and CBN Examination 2022

Section : Numerical and Mathematical Ability

Q.1 The average speed of a car is 1500 metres/minute. A sprinter covers 200 metres in 30 seconds. What is the difference in the speed of car and the speed of sprinter?

- Ans**
- ☒ 1. (54/11) m/s
 - ☒ 2. (55/3) m/s
 - ☒ 3. (65/3) m/s
 - ☒ 4. (64/3) m/s

Question Type : **MCQ**
 Question ID : **264330138417**
 Option 1 ID : **264330542276**
 Option 2 ID : **264330542275**
 Option 3 ID : **264330542278**
 Option 4 ID : **264330542277**
 Status : **Answered**
 Chosen Option : **2**

Q.2 A person earns a profit of 30 percent by selling an article for Rs. 325. How much percent should he increase his selling price to earn a profit of 40 percent?

- Ans**
- ☒ 1. 6.66 percent
 - ☒ 2. 8.25 percent
 - ☒ 3. 7.69 percent
 - ☒ 4. 5.25 percent

Question Type : **MCQ**
 Question ID : **264330137631**
 Option 1 ID : **264330539132**
 Option 2 ID : **264330539134**
 Option 3 ID : **264330539133**
 Option 4 ID : **264330539131**
 Status : **Answered**
 Chosen Option : **3**

Test Prime

**ALL EXAMS,
ONE SUBSCRIPTION**



70,000+
Mock Tests



**Personalised
Report Card**



**Unlimited
Re-Attempt**



600+
Exam Covered



**Previous Year
Papers**



500%
Refund



ATTEMPT FREE MOCK NOW

Q.3 The difference between the length and breadth of a rectangle is 40 metres. If its perimeter is 96 metres, then what will be the area of rectangle?

- Ans**
- ☒ 1. 254 metre²
 - ☒ 2. 110 metre²
 - ☒ 3. 176 metre²
 - ☒ 4. 152 metre²

Question Type : **MCQ**

Question ID : **264330137190**

Option 1 ID : **264330537406**

Option 2 ID : **264330537405**

Option 3 ID : **264330537403**

Option 4 ID : **264330537404**

Status : **Answered**

Chosen Option : **3**

Q.4 A man sold his bike for Rs. 18,600 at 55% profit. At what price would he have sold to incur a loss of 10%?

- Ans**
- ☒ 1. Rs. 10,800
 - ☒ 2. Rs. 15,000
 - ☒ 3. Rs. 11,200
 - ☒ 4. Rs. 16,600

Question Type : **MCQ**

Question ID : **264330138419**

Option 1 ID : **264330542283**

Option 2 ID : **264330542284**

Option 3 ID : **264330542285**

Option 4 ID : **264330542286**

Status : **Answered**

Chosen Option : **1**

Q.5 A trader allowed a discount of 30 percent on a trolley bag having list price of Rs. 1800 and earns a profit of 20 percent. What is the cost price of the trolley bag?

- Ans**
- ☒ 1. Rs. 1050
 - ☒ 2. Rs. 1230
 - ☒ 3. Rs. 1440
 - ☒ 4. Rs. 1160

Question Type : **MCQ**

Question ID : **264330137636**

Option 1 ID : **264330539151**

Option 2 ID : **264330539153**

Option 3 ID : **264330539154**

Option 4 ID : **264330539152**

Status : **Answered**

Chosen Option : **1**

Q.6 In a 64 litres mixture the alcohol and water are in the ratio of 1 : 3 respectively. 32 litres of mixture is taken off and replaced with 16 litres of water. What is the new ratio of alcohol and water respectively?

- Ans**
- ☒ 1. 1 : 5
 - ☐ 2. 5 : 12
 - ☐ 3. 2 : 7
 - ☐ 4. 3 : 10

Question Type : **MCQ**

Question ID : **264330137633**

Option 1 ID : **264330539142**

Option 2 ID : **264330539139**

Option 3 ID : **264330539141**

Option 4 ID : **264330539140**

Status : **Answered**

Chosen Option : 1

Q.7 What is the value of $\frac{2.5 \times 2.5 + 0.3 \times 0.3 + 5 \times 0.3}{1.6 \times 1.6 + 0.6 \times 0.6 - 1.2 \times 1.6}$?

- Ans**
- ☐ 1. 7.64
 - ☐ 2. 8.64
 - ☐ 3. 2.8
 - ☒ 4. 7.84

Question Type : **MCQ**

Question ID : **264330137642**

Option 1 ID : **264330539176**

Option 2 ID : **264330539175**

Option 3 ID : **264330539177**

Option 4 ID : **264330539178**

Status : **Answered**

Chosen Option : 4

Q.8 What will be the average of all the even numbers between 5 and 29?

- Ans**
- ☐ 1. 14
 - ☐ 2. 19
 - ☐ 3. 22
 - ☒ 4. 17

Question Type : **MCQ**

Question ID : **264330137626**

Option 1 ID : **264330539114**

Option 2 ID : **264330539112**

Option 3 ID : **264330539111**

Option 4 ID : **264330539113**

Status : **Answered**

Chosen Option : 4

Q.9 A sum becomes Rs. 12960 in 2 years at the rate of 4 percent per annum on simple interest. What is the sum?

- Ans**
- ☒ 1. Rs.10000
 - ☒ 2. Rs.12200
 - ☒ 3. Rs.12000
 - ☒ 4. Rs.11600

Question Type : **MCQ**
 Question ID : **264330139086**
 Option 1 ID : **264330544951**
 Option 2 ID : **264330544954**
 Option 3 ID : **264330544953**
 Option 4 ID : **264330544952**
 Status : **Answered**
 Chosen Option : **3**

Q.10 The area of a rectangular floor is 600 square feet. If the length of the floor is 30 feet, then what is the breadth of the floor?

- Ans**
- ☒ 1. 20 feet
 - ☒ 2. 60 feet
 - ☒ 3. 30 feet
 - ☒ 4. 10 feet

Question Type : **MCQ**
 Question ID : **264330133599**
 Option 1 ID : **264330523419**
 Option 2 ID : **264330523421**
 Option 3 ID : **264330523420**
 Option 4 ID : **264330523422**
 Status : **Answered**
 Chosen Option : **1**

Q.11 If the price of onion increases from Rs. 60/kg to Rs. 75/kg, then by what percentage a household should decrease the consumption of onion so that expenditure remains same?

- Ans**
- ☒ 1. 40 percent
 - ☒ 2. 25 percent
 - ☒ 3. 20 percent
 - ☒ 4. 30 percent

Question Type : **MCQ**
 Question ID : **264330139081**
 Option 1 ID : **264330544934**
 Option 2 ID : **264330544931**
 Option 3 ID : **264330544932**
 Option 4 ID : **264330544933**
 Status : **Answered**
 Chosen Option : **3**

Q.12 What is the smallest three-digit number which when divided by 2, 3 and 4 leaves remainder 1 in each case?

- Ans**
- ☒ 1. 111
 - ☒ 2. 105
 - ☒ 3. 101
 - ☒ 4. 109

Question Type : **MCQ**
 Question ID : **264330137640**
 Option 1 ID : **264330539167**
 Option 2 ID : **264330539170**
 Option 3 ID : **264330539168**
 Option 4 ID : **264330539169**
 Status : **Answered**
 Chosen Option : **4**

Q.13 Sumit lent Rs.5000 to Ram for 2 years and Rs.8000 to Mayur for 3 years on simple interest at the same rate of interest and received Rs.1700 in total from both of them as interest. What is the rate of interest per annum?

- Ans**
- ☒ 1. 8% per annum
 - ☒ 2. 4% per annum
 - ☒ 3. 5% per annum
 - ☒ 4. 10% per annum

Question Type : **MCQ**
 Question ID : **264330133591**
 Option 1 ID : **264330523388**
 Option 2 ID : **264330523389**
 Option 3 ID : **264330523387**
 Option 4 ID : **264330523390**
 Status : **Answered**
 Chosen Option : **3**

Q.14 Sonu and Monu can do a piece of work in 8 days and 12 days respectively. If at the end of the work they got Rs.8400. What is the share of Sonu?

- Ans**
- ☒ 1. Rs.2360
 - ☒ 2. Rs.1680
 - ☒ 3. Rs.3480
 - ☒ 4. Rs.5040

Question Type : **MCQ**
 Question ID : **264330133594**
 Option 1 ID : **264330523400**
 Option 2 ID : **264330523399**
 Option 3 ID : **264330523402**
 Option 4 ID : **264330523401**
 Status : **Answered**
 Chosen Option : **4**

Q.15 The HCF and LCM of the two numbers are 20 and 2880 respectively. If one of them is 180, then find the other number?

- Ans**
- ☒ 1. 660
 - ☒ 2. 350
 - ☒ 3. 300
 - ☒ 4. 320

Question Type : **MCQ**

Question ID : **264330141016**

Option 1 ID : **264330552412**

Option 2 ID : **264330552411**

Option 3 ID : **264330552413**

Option 4 ID : **264330552414**

Status : **Answered**

Chosen Option : **4**

Q.16 The table given below shows the demand and production of five articles.

Articles	Demand	Production
P	400	500
Q	450	650
R	250	550
S	150	850
T	850	1050

Which of the following statement is correct?

- I. The value of average demand of all articles are 420.
- II. The production of P and Q together is 52.60 percent of the production of S and T together.

- Ans**
- ☒ 1. Neither I nor II
 - ☒ 2. Only II
 - ☒ 3. Both I and II
 - ☒ 4. Only I

Question Type : **MCQ**

Question ID : **264330137643**

Option 1 ID : **264330539182**

Option 2 ID : **264330539180**

Option 3 ID : **264330539181**

Option 4 ID : **264330539179**

Status : **Answered**

Chosen Option : **4**

Q.17 X and Y together can do a work in 10 days. Y and Z together can do the same work in 15 days. Z and X together can do the same work in 12 days. In how many days can Z alone do the same work?

- Ans**
- ☒ 1. 80 days
 - ☒ 2. 60 days
 - ☒ 3. 40 days
 - ☒ 4. 50 days

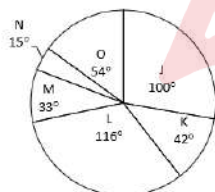
Question Type : **MCQ**
 Question ID : **264330137175**
 Option 1 ID : **264330537343**
 Option 2 ID : **264330537345**
 Option 3 ID : **264330537344**
 Option 4 ID : **264330537346**
 Status : **Answered**
 Chosen Option : **3**

Q.18 If $a : b : c = 5 : 6 : 4$, then what is the value of $(a + b + c) : (3a + b - c)$?

- Ans**
- ☒ 1. 25 : 23
 - ☒ 2. 18 : 23
 - ☒ 3. 15 : 17
 - ☒ 4. 18 : 19

Question Type : **MCQ**
 Question ID : **264330137632**
 Option 1 ID : **264330539137**
 Option 2 ID : **264330539138**
 Option 3 ID : **264330539135**
 Option 4 ID : **264330539136**
 Status : **Answered**
 Chosen Option : **3**

Q.19 The pie chart given below shows the price of 6 different articles. The total price of all these 6 articles is Rs. 5760. The price of a particular article is shown in terms of degree with respect to the total price of all these 6 articles.



P_1 = The difference between the average price of K and L and the average price of J and N.

P_2 = The total price of J, M, N and O.

What is the value of $(P_1 + P_2)$?

- Ans**
- ☒ 1. 2426
 - ☒ 2. 3576
 - ☒ 3. 5426
 - ☒ 4. 3232

Question Type : **MCQ**
 Question ID : **264330137644**
 Option 1 ID : **264330539186**
 Option 2 ID : **264330539185**
 Option 3 ID : **264330539184**
 Option 4 ID : **264330539183**
 Status : **Answered**
 Chosen Option : **2**

Q.20 A man walking at the speed of 8 km/hr covers a certain distance in 5 hours and 30 minutes. If he covers the same distance by cycle in 4 hours, then what is the speed of cycle?

- Ans** ☒ 1. 11 km/hr
☒ 2. 15 km/hr
☒ 3. 8 km/hr
☒ 4. 9 km/hr

Question Type : **MCQ**
 Question ID : **264330137625**
 Option 1 ID : **264330539109**
 Option 2 ID : **264330539110**
 Option 3 ID : **264330539108**
 Option 4 ID : **264330539107**
 Status : **Answered**
 Chosen Option : **1**

Section : Reasoning Ability and Problem Solving

Q.1 Height of seven boys M, N, O, P, Q, R and S are given as follows. Only one person is shorter than Q. S is the tallest. R is taller than P but shorter than O. P is not the shortest. N is shorter than only one person. Who is the third tallest among the boys?

- Ans** ☒ 1. O
☒ 2. R
☒ 3. N
☒ 4. P

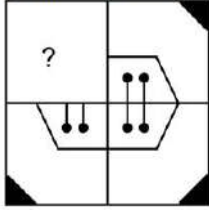
Question Type : **MCQ**
 Question ID : **264330137547**
 Option 1 ID : **264330538796**
 Option 2 ID : **264330538798**
 Option 3 ID : **264330538797**
 Option 4 ID : **264330538795**
 Status : **Answered**
 Chosen Option : **1**

Q.2 Six friends Anshu, Aman, Adarsh, Akash, Arpit and Ankit are sitting in a row facing south. Arpit is sitting to the immediate right of Adarsh. Anshu is sitting fourth to the right of Arpit. Akash is sitting second to the left of Aman. Who is sitting second to the left of Anshu?

- Ans** ☒ 1. Ankit
☒ 2. Akash
☒ 3. Aman
☒ 4. Adarsh

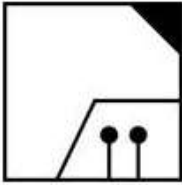
Question Type : **MCQ**
 Question ID : **264330137546**
 Option 1 ID : **264330538793**
 Option 2 ID : **264330538794**
 Option 3 ID : **264330538791**
 Option 4 ID : **264330538792**
 Status : **Answered**
 Chosen Option : **1**

Q.3 Select the option figure that will replace the question mark (?) in the figure given below to complete the pattern.
(rotation is not allowed)

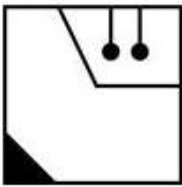


Ans

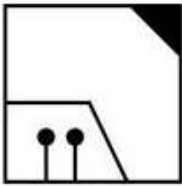
✗ 1.



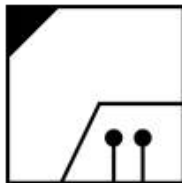
✗ 2.



✗ 3.



✓ 4.



Question Type : MCQ

Question ID : 264330137558

Option 1 ID : 264330538841

Option 2 ID : 264330538842

Option 3 ID : 264330538840

Option 4 ID : 264330538839

Status : Answered

Chosen Option : 4

Q.4 In a certain code language, 'LORD' is written as '5409', 'MODE' is written as '4685', 'LOAD' is written as '5047'.
What is 'M' written in that code language?

Ans ✗ 1. 5

✓ 2. 6

✗ 3. 4

✗ 4. 7

Question Type : MCQ

Question ID : 264330138855

Option 1 ID : 264330544029

Option 2 ID : 264330544028

Option 3 ID : 264330544027

Option 4 ID : 264330544030

Status : Answered

Chosen Option : 2

Q.5 Six people P, Q, R, S, T and U are sitting in two parallel rows such that three of them in one row facing north and the other three are sitting in the second row facing south. P is facing south. U sits opposite to R. R faces the same direction as P. S does not face south. T faces north but is not sitting opposite P. Who sits opposite to T?

- Ans**
- ☒ 1. S
 - ☒ 2. P
 - ☒ 3. R
 - ☒ 4. Q

Question Type : **MCQ**
 Question ID : **264330137545**
 Option 1 ID : **264330538790**
 Option 2 ID : **264330538787**
 Option 3 ID : **264330538788**
 Option 4 ID : **264330538789**
 Status : **Answered**
 Chosen Option : **4**

Q.6 Which of the following letter will replace the question mark (?) in the given series?
 U, R, O, L, I, F, ?

- Ans**
- ☒ 1. F
 - ☒ 2. C
 - ☒ 3. A
 - ☒ 4. D

Question Type : **MCQ**
 Question ID : **264330137537**
 Option 1 ID : **264330538757**
 Option 2 ID : **264330538755**
 Option 3 ID : **264330538758**
 Option 4 ID : **264330538756**
 Status : **Answered**
 Chosen Option : **2**

Q.7 Which two numbers should be interchanged to make the given equation correct?
 $15 - 24 + 63 \div 7 \times 2 = 9$

- Ans**
- ☒ 1. 63 and 9
 - ☒ 2. 7 and 63
 - ☒ 3. 24 and 9
 - ☒ 4. 63 and 24

Question Type : **MCQ**
 Question ID : **264330137554**
 Option 1 ID : **264330538825**
 Option 2 ID : **264330538823**
 Option 3 ID : **264330538826**
 Option 4 ID : **264330538824**
 Status : **Answered**
 Chosen Option : **3**

Q.8 Select the option that is related to the third word in the same way as the second word is related to the first word.

Infanticide : Child :: Patricide : ?

- Ans**
- ☒ 1. Mother
 - ☒ 2. Wife
 - ☒ 3. Husband
 - ☒ 4. Father

Question Type : **MCQ**

Question ID : **264330137540**

Option 1 ID : **264330538768**

Option 2 ID : **264330538769**

Option 3 ID : **264330538770**

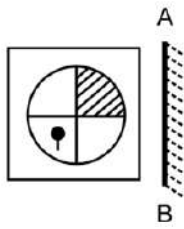
Option 4 ID : **264330538767**

Status : **Answered**

Chosen Option : **4**

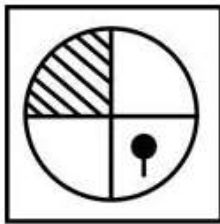


Q.9 Select the correct mirror image of the given figure when the mirror AB is placed to the right side of the figure.



Ans

✓ 1.



✗ 2.



✗ 3.



✗ 4.



Question Type : MCQ

Question ID : 264330137557

Option 1 ID : 264330538836

Option 2 ID : 264330538838

Option 3 ID : 264330538837

Option 4 ID : 264330538835

Status : Answered

Chosen Option : 1

Q.10 Which two signs should be interchanged to make the given equation correct?

$$5 \times 6 - 7 + 24 \div 12 = 35$$

- Ans
- ☐ 1. + and =
 - ☒ 2. + and -
 - ☐ 3. = and -
 - ☐ 4. \times and -

Question Type : MCQ

Question ID : 264330133336

Option 1 ID : 264330522379

Option 2 ID : 264330522381

Option 3 ID : 264330522380

Option 4 ID : 264330522382

Status : Answered

Chosen Option : 2

Q.11 Three statements are given followed by two conclusions numbered I and II. Assuming the statements to be true, even if they seem to be at variance with commonly known facts, decide which of the conclusions logically follow(s) from the statements.

Statements:

All bricks are wall.

Some roads are wall.

All stones are wall.

Conclusions:

I. Some stones are walls.

II. Some walls are bricks.

- Ans
- ☐ 1. Only conclusion II follows
 - ☒ 2. Both conclusions I and II follow
 - ☐ 3. Only conclusion I follows
 - ☐ 4. Neither conclusion I nor II follows

Question Type : MCQ

Question ID : 264330137549

Option 1 ID : 264330538804

Option 2 ID : 264330538805

Option 3 ID : 264330538803

Option 4 ID : 264330538806

Status : Answered

Chosen Option : 2

Q.12 In a certain code language, 'BOIL' is written as '152' and 'HOT' is written as '129'. How will 'HEATING' be written in that language?

- Ans
- ☐ 1. 844
 - ☐ 2. 488
 - ☒ 3. 448
 - ☐ 4. 484

Question Type : MCQ

Question ID : 264330134959

Option 1 ID : 264330528774

Option 2 ID : 264330528772

Option 3 ID : 264330528773

Option 4 ID : 264330528771

Status : Answered

Chosen Option : 3

Q.13 Select the option that is related to the third letter cluster in the same way as the second letter cluster is related to the first letter cluster.
MEJ : PFK :: SQK : ?

- Ans
- ☒ 1. SLV
 - ☒ 2. VRL
 - ☒ 3. VTL
 - ☒ 4. LSV

Question Type : MCQ
Question ID : 264330137539
Option 1 ID : 264330538763
Option 2 ID : 264330538764
Option 3 ID : 264330538766
Option 4 ID : 264330538765
Status : Answered
Chosen Option : 2

Q.14 In the following question, select the missing number of the given series.
110, 131, 153, 176, 200, ?

- Ans
- ☒ 1. 220
 - ☒ 2. 218
 - ☒ 3. 224
 - ☒ 4. 225

Question Type : MCQ
Question ID : 264330138862
Option 1 ID : 264330544055
Option 2 ID : 264330544057
Option 3 ID : 264330544058
Option 4 ID : 264330544056
Status : Answered
Chosen Option : 4

Q.15 Two statements are given followed by two conclusions numbered I and II. Assuming the statements to be true, even if they seem to be at variance with commonly known facts, decide which of the conclusions logically follow(s) from the statements.
Statements:
Some fruits are sweet.
All sweet are sour.
Conclusions:
I. Some fruits are sour.
II. Some sweet are not fruit.

- Ans
- ☒ 1. Only conclusion II follows
 - ☒ 2. Only conclusion I follows
 - ☒ 3. Neither conclusion I nor II follows
 - ☒ 4. Both conclusions I and II follow

Question Type : MCQ
Question ID : 264330137548
Option 1 ID : 264330538800
Option 2 ID : 264330538799
Option 3 ID : 264330538802
Option 4 ID : 264330538801
Status : Answered
Chosen Option : 2

Q.16 Which of the following numbers will replace the question mark (?) in the given series?

38, 17, -2, -19, -34, -47, -58, ?

- Ans
- ☒ 1. -74
 - ☒ 2. -67
 - ☒ 3. -60
 - ☒ 4. -72

Question Type : MCQ

Question ID : 264330137551

Option 1 ID : 264330538814

Option 2 ID : 264330538812

Option 3 ID : 264330538813

Option 4 ID : 264330538811

Status : Answered

Chosen Option : 2

Q.17 Study the given pattern carefully and select the number that can replace the question mark (?) in it.

First row- 38, 43, 48

Second row- 76, 81, 86

Third row- 69, 74, ?

- Ans
- ☒ 1. 84
 - ☒ 2. 70
 - ☒ 3. 75
 - ☒ 4. 79

Question Type : MCQ

Question ID : 264330137553

Option 1 ID : 264330538821

Option 2 ID : 264330538819

Option 3 ID : 264330538822

Option 4 ID : 264330538820

Status : Answered

Chosen Option : 4

Q.18 In a certain code language, 'ENERGY' is coded as 'ZGSEOE'. What is the code for 'FORMAL' in that code language?

- Ans
- ☒ 1. NFRPFL
 - ☒ 2. BMAPRF
 - ☒ 3. NAMRPF
 - ☒ 4. MANRPF

Question Type : MCQ

Question ID : 264330138567

Option 1 ID : 264330542878

Option 2 ID : 264330542877

Option 3 ID : 264330542875

Option 4 ID : 264330542876

Status : Answered

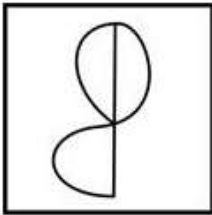
Chosen Option : 4

Q.19 Select the option figure in which the given figure is embedded as its part (rotation is NOT allowed).



Ans


✗ 1.




✗ 2.



✗ 3.



✓ 4.



Question Type : MCQ

Question ID : 264330137556

Option 1 ID : 264330538834

Option 2 ID : 264330538833

Option 3 ID : 264330538832

Option 4 ID : 264330538831

Status : Answered

Chosen Option : 4

Q.20 Select the option that is related to the sixth number in the same way as the first number is related to the second number and third number is related to fourth number.

8 : 72 :: 10 : 110 :: ? : 210

Ans ✗ 1. 16

✓ 2. 14

✗ 3. 18

✗ 4. 12

Question Type : MCQ

Question ID : 264330138864

Option 1 ID : 264330544065

Option 2 ID : 264330544064

Option 3 ID : 264330544066

Option 4 ID : 264330544063

Status : Answered

Chosen Option : 2

Section : General Awareness

Q.1 Article 23-24 of the Indian Constitution deals with which of the following fundamental rights?

- Ans
- ✓ 1. Right against Exploitation
 - ✗ 2. Right to Equality
 - ✗ 3. Right to Freedom
 - ✗ 4. Right to Constitutional Remedies

Question Type : MCQ

Question ID : 264330137731

Option 1 ID : 264330539533

Option 2 ID : 264330539532

Option 3 ID : 264330539534

Option 4 ID : 264330539531

Status : Answered

Chosen Option : 1

Q.2 Who is noted as a pristine Indian Classical Dancer to perform at Salzburg Festival in 2015?

- Ans
- ✗ 1. Tanjore Balasaraswati
 - ✓ 2. Alarmel Valli
 - ✗ 3. Kumari Kamala
 - ✗ 4. V. Satyanarayana Sarma

Question Type : MCQ

Question ID : 264330138631

Option 1 ID : 264330543134

Option 2 ID : 264330543132

Option 3 ID : 264330543133

Option 4 ID : 264330543131

Status : Answered

Chosen Option : 1

Q.3 After years of wandering Babur seized Kabul in _____.

- Ans
- ✗ 1. 1501
 - ✓ 2. 1504
 - ✗ 3. 1503
 - ✗ 4. 1502

Question Type : MCQ

Question ID : 264330138943

Option 1 ID : 264330544379

Option 2 ID : 264330544382

Option 3 ID : 264330544381

Option 4 ID : 264330544380

Status : Answered

Chosen Option : 1

Q.4 The Almatti Dam of Karnataka is built over which of the following rivers?

- Ans
- ☒ 1. Periyar
 - ☒ 2. Sutlej
 - ☒ 3. Kaveri
 - ☒ 4. Krishna

Question Type : MCQ
 Question ID : 264330137721
 Option 1 ID : 264330539494
 Option 2 ID : 264330539493
 Option 3 ID : 264330539491
 Option 4 ID : 264330539492
 Status : Answered
 Chosen Option : 4

Q.5 Who among the following won the FIFA U-17 Women's World Cup 2022?

- Ans
- ☒ 1. Japan
 - ☒ 2. Colombia
 - ☒ 3. New Zealand
 - ☒ 4. Spain

Question Type : MCQ
 Question ID : 264330137733
 Option 1 ID : 264330539542
 Option 2 ID : 264330539539
 Option 3 ID : 264330539541
 Option 4 ID : 264330539540
 Status : Answered
 Chosen Option : 4

Q.6 Khauchi Pooja of Tripura is a Hindu festival where _____ Hindu Gods are worshiped, including the Earth.

- Ans
- ☒ 1. 5
 - ☒ 2. 14
 - ☒ 3. 12
 - ☒ 4. 8

Question Type : MCQ
 Question ID : 264330137714
 Option 1 ID : 264330539466
 Option 2 ID : 264330539463
 Option 3 ID : 264330539464
 Option 4 ID : 264330539465
 Status : Answered
 Chosen Option : 2

Q.7 Which among the following dance forms does NOT belong to Chhattisgarh?

- Ans ☒ 1. Kajari
☒ 2. Panthi
☒ 3. Gendi
☒ 4. Raut Nacha

Question Type : MCQ
 Question ID : 264330137713
 Option 1 ID : 264330539460
 Option 2 ID : 264330539461
 Option 3 ID : 264330539459
 Option 4 ID : 264330539462
 Status : Answered
 Chosen Option : 3

Q.8 The members of _____ are commonly called red algae.

- Ans ☒ 1. rhodophyceae
☒ 2. phaeophyceae
☒ 3. poaceae
☒ 4. chlorophyceae

Question Type : MCQ
 Question ID : 264330137717
 Option 1 ID : 264330539477
 Option 2 ID : 264330539475
 Option 3 ID : 264330539478
 Option 4 ID : 264330539476
 Status : Answered
 Chosen Option : 1

Q.9 What happened in Bengal, India, in 1770 that resulted in the death of one-third of the population?

- Ans ☒ 1. Massacre
☒ 2. Famine
☒ 3. Slavery
☒ 4. Chemical explosion

Question Type : MCQ
 Question ID : 264330133663
 Option 1 ID : 264330523676
 Option 2 ID : 264330523675
 Option 3 ID : 264330523678
 Option 4 ID : 264330523677
 Status : Answered
 Chosen Option : 2

Q.10 Which of the following is one of the notable works of Vikram Seth?

- Ans ☒ 1. A Suitable Boy
☒ 2. Show Business
☒ 3. Ancient India
☒ 4. The Glass Palace

Question Type : MCQ
Question ID : 264330138629
Option 1 ID : 264330543126
Option 2 ID : 264330543124
Option 3 ID : 264330543123
Option 4 ID : 264330543125
Status : Answered
Chosen Option : 1

Q.11 The National Anti-Doping Bill, 2021 targets _____ sector of India.

- Ans ☒ 1. Sport
☒ 2. Agriculture
☒ 3. Finance
☒ 4. Military

Question Type : MCQ
Question ID : 264330133649
Option 1 ID : 264330523620
Option 2 ID : 264330523619
Option 3 ID : 264330523621
Option 4 ID : 264330523622
Status : Answered
Chosen Option : 1

Q.12 A Money Bill should be returned to the Lok Sabha within _____ days by Rajya Sabha, either with recommendations or without recommendations.

- Ans ☒ 1. 8
☒ 2. 21
☒ 3. 14
☒ 4. 10

Question Type : MCQ
Question ID : 264330137732
Option 1 ID : 264330539536
Option 2 ID : 264330539535
Option 3 ID : 264330539538
Option 4 ID : 264330539537
Status : Answered
Chosen Option : 3

Q.13 Who launched Pradhan Mantri Bhartiya Jan Urvarak Pariyojana-One Nation One Fertiliser in October 2022?

- Ans
- ☐ 1. Smriti Irani
 - ☐ 2. Narendra Singh Tomar
 - ☐ 3. Amit Shah
 - ☒ 4. Narendra Modi

Question Type : MCQ
Question ID : 264330137711
Option 1 ID : 264330539453
Option 2 ID : 264330539454
Option 3 ID : 264330539452
Option 4 ID : 264330539451
Status : Answered
Chosen Option : 2

Q.14 In which of the following articles, "Laws inconsistent with or in derogation of the fundamental rights" is mentioned?

- Ans
- ☒ 1. Article 13
 - ☐ 2. Article 14
 - ☐ 3. Article 12
 - ☐ 4. Article 15

Question Type : MCQ
Question ID : 264330134631
Option 1 ID : 264330527480
Option 2 ID : 264330527481
Option 3 ID : 264330527479
Option 4 ID : 264330527482
Status : Answered
Chosen Option : 1

Q.15 Money multiplier uses which of the following monetary instruments for its calculation?

- Ans
- ☐ 1. Repo rate
 - ☒ 2. Cash reserve ratio
 - ☐ 3. Reverse repo rate
 - ☐ 4. Bank rate

Question Type : MCQ
Question ID : 264330138634
Option 1 ID : 264330543143
Option 2 ID : 264330543144
Option 3 ID : 264330543145
Option 4 ID : 264330543146
Status : Not Answered
Chosen Option : --

Q.16 लड़कों में बढ़ता हुआ 'स्वरयंत्र' गले के सामने की ओर सुस्पष्ट उभरे भाग के रूप में दिखाई देता है, जिसे _____ कहते हैं।

- Ans
- ☒ 1. एड्रिनेलिन (Adrenalin)
 - ☒ 2. कंठमणि (Adam's apple)
 - ☒ 3. कॉर्न (Corn)
 - ☒ 4. ग्रसिका (Gullet)

Question Type : MCQ
Question ID : 264330138935
Option 1 ID : 264330544347
Option 2 ID : 264330544348
Option 3 ID : 264330544349
Option 4 ID : 264330544350
Status : Not Answered
Chosen Option : --

Q.17 गंगूबाई हंगल, हिंदुस्तानी शास्त्रीय संगीत की खयाल (Khayal) शैली की _____ राज्य की एक भारतीय गायिका थीं, जो अपनी गहरी और दमदार आवाज के लिए जानी जाती थीं।

- Ans
- ☒ 1. आंध्रप्रदेश
 - ☒ 2. कर्नाटक
 - ☒ 3. केरल
 - ☒ 4. तमिलनाडु

Question Type : MCQ
Question ID : 264330137729
Option 1 ID : 264330539526
Option 2 ID : 264330539524
Option 3 ID : 264330539525
Option 4 ID : 264330539523
Status : Answered
Chosen Option : 3

Q.18 Which of the following is NOT an example of "agro based industries"?

- Ans
- ☒ 1. Iron and steel industry
 - ☒ 2. Leather industry
 - ☒ 3. Vegetable oil industry
 - ☒ 4. Cotton textile industry

Question Type : MCQ
Question ID : 264330138641
Option 1 ID : 264330543173
Option 2 ID : 264330543174
Option 3 ID : 264330543171
Option 4 ID : 264330543172
Status : Answered
Chosen Option : 1

Q.19 According to census 2011, the only Indian state having negative decadal population growth rate between 2001- 11 is _____.

- Ans** ☒ 1. Nagaland
☒ 2. Goa
☒ 3. Sikkim
☒ 4. Uttarakhand

Question Type : **MCQ**
 Question ID : **264330138290**
 Option 1 ID : **264330541767**
 Option 2 ID : **264330541768**
 Option 3 ID : **264330541769**
 Option 4 ID : **264330541770**
 Status : **Answered**
 Chosen Option : 1

Q.20 Who was the founder of the Widow Remarriage Association (1861)?

- Ans** ☒ 1. Mahadev Govind Ranade
☒ 2. R.G. Bhandarkar
☒ 3. AtmaRam Pandurang
☒ 4. Raja Rammohan Roy

Question Type : **MCQ**
 Question ID : **264330137727**
 Option 1 ID : **264330539516**
 Option 2 ID : **264330539518**
 Option 3 ID : **264330539517**
 Option 4 ID : **264330539515**
 Status : **Not Answered**
 Chosen Option : --

Q.21 The strong gravitational pull exerted by the _____ on the earth's surface causes the tides.

- Ans** ☒ 1. Sun, moon and other planets
☒ 2. Sun only
☒ 3. Sun and moon only
☒ 4. Moon only

Question Type : **MCQ**
 Question ID : **264330138936**
 Option 1 ID : **264330544354**
 Option 2 ID : **264330544351**
 Option 3 ID : **264330544353**
 Option 4 ID : **264330544352**
 Status : **Answered**
 Chosen Option : 4

Q.22 The thickness of a wrestling mat should be between _____ centimetres.

- Ans
- ☒ 1. 7 and 9
 - ☒ 2. 5 and 7
 - ☒ 3. 9 and 11
 - ☒ 4. 3 and 5

Question Type : MCQ
Question ID : 264330138925
Option 1 ID : 264330544309
Option 2 ID : 264330544308
Option 3 ID : 264330544310
Option 4 ID : 264330544307
Status : Not Answered
Chosen Option : --

Q.23 Which of the following is NOT an example of Inflammable substances?

- Ans
- ☒ 1. Glass
 - ☒ 2. Alcohol
 - ☒ 3. LPG
 - ☒ 4. Petrol

Question Type : MCQ
Question ID : 264330138937
Option 1 ID : 264330544356
Option 2 ID : 264330544358
Option 3 ID : 264330544357
Option 4 ID : 264330544355
Status : Answered
Chosen Option : 1

Q.24 Which monument of Khilji dynasty in Delhi has the utilization of red sandstone?

- Ans
- ☒ 1. Moti Masjid
 - ☒ 2. Victoria memorial
 - ☒ 3. Charminar
 - ☒ 4. Alai Darwaza

Question Type : MCQ
Question ID : 264330133652
Option 1 ID : 264330523632
Option 2 ID : 264330523634
Option 3 ID : 264330523633
Option 4 ID : 264330523631
Status : Answered
Chosen Option : 1

Q.25 Who among the following succeeded the throne of the Mauryan Empire after the death of Chandragupta Maurya?

- Ans**
- ☒ 1. Dasharatha
 - ☒ 2. Bindusara
 - ☒ 3. Chandragupta - II
 - ☒ 4. Ashoka

Question Type : **MCQ**

Question ID : **264330137724**

Option 1 ID : **264330539506**

Option 2 ID : **264330539504**

Option 3 ID : **264330539505**

Option 4 ID : **264330539503**

Status : **Answered**

Chosen Option : **2**

Section : English Language and Comprehension

Q.1 Select the most appropriate antonym to substitute the bracketed word in the given sentence.

She ventured to go back to the tree of the (tryst), the mulberry with the shining white fruit.

- Ans**
- ☒ 1. Rendezvous
 - ☒ 2. Engagement
 - ☒ 3. Date
 - ☒ 4. Separation

Question Type : **MCQ**

Question ID : **264330136076**

Option 1 ID : **264330533117**

Option 2 ID : **264330533118**

Option 3 ID : **264330533115**

Option 4 ID : **264330533116**

Status : **Answered**

Chosen Option : **4**

Q.2 Select the most appropriate option to fill in the blank.

Her notoriety increased after she single- _____ shot down a Rhodesian army helicopter.

- Ans**
- ☒ 1. dose
 - ☒ 2. plainly
 - ☒ 3. stranded
 - ☒ 4. handedly

Question Type : **MCQ**

Question ID : **264330136082**

Option 1 ID : **264330533139**

Option 2 ID : **264330533141**

Option 3 ID : **264330533140**

Option 4 ID : **264330533142**

Status : **Answered**

Chosen Option : **4**

Q.3 Improve the underlined part of the sentence. Choose 'No improvement' as an answer if the sentence is grammatically correct.

Drive two blocks and turn right at the traffic lights.

- Ans**
- ☒ 1. turn right in
 - ☒ 2. No improvement
 - ☐ 3. turns right at
 - ☐ 4. turn rightly at

Question Type : **MCQ**
 Question ID : **264330134749**
 Option 1 ID : **264330527947**
 Option 2 ID : **264330527950**
 Option 3 ID : **264330527949**
 Option 4 ID : **264330527948**
 Status : **Answered**
 Chosen Option : **2**

Q.4 Select the most appropriate synonym of the given word.

Enervate

- Ans**
- ☒ 1. Devitalize
 - ☐ 2. Invigorate
 - ☐ 3. Arouse
 - ☐ 4. Boost

Question Type : **MCQ**
 Question ID : **264330136073**
 Option 1 ID : **264330533106**
 Option 2 ID : **264330533104**
 Option 3 ID : **264330533105**
 Option 4 ID : **264330533103**
 Status : **Answered**
 Chosen Option : **2**

Q.5 Choose the word that can substitute the given group of words.

A person holding conversational belief especially in matter of religion

- Ans**
- ☒ 1. Orthodox
 - ☐ 2. Prudent
 - ☐ 3. Compere
 - ☐ 4. Arsonist

Question Type : **MCQ**
 Question ID : **264330136887**
 Option 1 ID : **264330536233**
 Option 2 ID : **264330536234**
 Option 3 ID : **264330536232**
 Option 4 ID : **264330536231**
 Status : **Answered**
 Chosen Option : **1**

Q.6 Select the most appropriate meaning of the bracketed idiom in the given sentence.
That were remarks made (in the heat of the moment).

- Ans** ☒ 1. At time when you cannot think carefully
☐ 2. To exert all efforts
☐ 3. To present a counter argument
☐ 4. To be dismissed from your job

Question Type : **MCQ**
Question ID : **264330136078**
Option 1 ID : **264330533125**
Option 2 ID : **264330533124**
Option 3 ID : **264330533123**
Option 4 ID : **264330533126**
Status : **Answered**
Chosen Option : **3**

Q.7 Select the most appropriate option to fill in the blank.
Computers would replace the _____ technique of creating an image on paper, transferring it to transparent cells and again onto film.

- Ans** ☐ 1. assuage
☐ 2. audacious
☒ 3. archaic
☐ 4. austere

Question Type : **MCQ**
Question ID : **264330136063**
Option 1 ID : **264330533068**
Option 2 ID : **264330533070**
Option 3 ID : **264330533067**
Option 4 ID : **264330533069**
Status : **Answered**
Chosen Option : **3**

Q.8 In the following question, out of the given four alternatives, select the alternative which best expresses the meaning of the Idiom/Phrase.
A blessing in disguise

- Ans** ☐ 1. To have a dispute with someone
☐ 2. To go from being very poor to being very wealthy
☒ 3. A misfortune that unexpectedly turns into good fortune
☐ 4. Hear a good news after a long time

Question Type : **MCQ**
Question ID : **264330136893**
Option 1 ID : **264330536257**
Option 2 ID : **264330536256**
Option 3 ID : **264330536255**
Option 4 ID : **264330536258**
Status : **Answered**
Chosen Option : **3**

Q.9 Find the part of the given sentence that has an error in it. If there is no error, choose 'No error'.
I am thirty-two years old and my sister are fifteen.

- Ans ☒ 1. No error
☒ 2. my sister are fifteen.
☒ 3. years old and
☒ 4. I am thirty-two

Question Type : MCQ
Question ID : 264330134294
Option 1 ID : 264330526174
Option 2 ID : 264330526173
Option 3 ID : 264330526172
Option 4 ID : 264330526171
Status : Answered
Chosen Option : 2

Q.10 Select the most appropriate option to fill in the blank.
There's plenty here to trap the unwary and baffle even the _____ gambler!

- Ans ☒ 1. exenterate
☒ 2. reiterate
☒ 3. alliterate
☒ 4. inveterate

Question Type : MCQ
Question ID : 264330136081
Option 1 ID : 264330533138
Option 2 ID : 264330533135
Option 3 ID : 264330533137
Option 4 ID : 264330533136
Status : Not Answered
Chosen Option : --

Q.11 Select the most appropriate synonym to substitute the bracketed word in the given sentence.
It broke Eleanora's heart to see her daughter become that (wraith) of her former self.

- Ans ☒ 1. Spirit
☒ 2. Wail
☒ 3. Being
☒ 4. Yore

Question Type : MCQ
Question ID : 264330136100
Option 1 ID : 264330533208
Option 2 ID : 264330533210
Option 3 ID : 264330533209
Option 4 ID : 264330533207
Status : Answered
Chosen Option : 1

Q.12 Choose the word that is opposite in meaning to the given word.
Desert

- Ans ☒ 1. Migrate
☒ 2. Populate
☒ 3. Bereft
☒ 4. Forlorn

Question Type : MCQ
Question ID : 264330134312
Option 1 ID : 264330526242
Option 2 ID : 264330526241
Option 3 ID : 264330526240
Option 4 ID : 264330526239
Status : Answered
Chosen Option : 2

Q.13 Identify the segment that contains a grammatical error. If there is no error, select 'No error'.

Ram ran back to the / window to see the bars dangling / a few feet before the ground.

- Ans ☒ 1. a few feet before the ground.
☒ 2. No error
☒ 3. window to see the bars dangling
☒ 4. Ram ran back to the

Question Type : MCQ
Question ID : 264330136639
Option 1 ID : 264330535281
Option 2 ID : 264330535282
Option 3 ID : 264330535280
Option 4 ID : 264330535279
Status : Answered
Chosen Option : 1

Q.14 Select the wrongly spelt word.

- Ans ☒ 1. Unshielded
☒ 2. Activity
☒ 3. Inactivity
☒ 4. Protesion

Question Type : MCQ
Question ID : 264330136080
Option 1 ID : 264330533133
Option 2 ID : 264330533131
Option 3 ID : 264330533134
Option 4 ID : 264330533132
Status : Answered
Chosen Option : 4

Q.15 Select the most appropriate option to substitute the bracketed segment in the given sentence. If there is no need to substitute it, select 'no substitution required'.
(Because he has been in custody from last July,) Pickard will now be released in four months.

- Ans**
- ☒ 1. Because he had been under custody from last July,
 - ☒ 2. Because he has been in custody since last July,
 - ☒ 3. Because he had been in custody from last July,
 - ☒ 4. No substitution required

Question Type : MCQ
Question ID : 264330136088
Option 1 ID : 264330533165
Option 2 ID : 264330533164
Option 3 ID : 264330533163
Option 4 ID : 264330533166
Status : Answered
Chosen Option : 2

Q.16 Select the word segment that substitutes (replaces) the bracketed word segment correctly and completes the sentence meaningfully. Select the option 'no correction required' if the sentence is correct as given.

The dessert was not just extremely hot but (also too sweet as well).

- Ans**
- ☒ 1. besides too sweet as well.
 - ☒ 2. No correction required
 - ☒ 3. also being too sweet.
 - ☒ 4. also too sweet.

Question Type : MCQ
Question ID : 264330136642
Option 1 ID : 264330535293
Option 2 ID : 264330535294
Option 3 ID : 264330535292
Option 4 ID : 264330535291
Status : Answered
Chosen Option : 4

Q.17 Select the most appropriate word for the given group of words.
Quiet and peaceful

- Ans**
- ☒ 1. Introvert
 - ☒ 2. Inundate
 - ☒ 3. Tranquil
 - ☒ 4. Incessant

Question Type : MCQ
Question ID : 264330136072
Option 1 ID : 264330533100
Option 2 ID : 264330533099
Option 3 ID : 264330533102
Option 4 ID : 264330533101
Status : Answered
Chosen Option : 3

Q.18 Select the most appropriate option to fill in the blank.

Since these people used tobacco to _____ their deities, the herb itself was one of the instruments of godless, false religions.

- Ans**
- ☐ 1. expatiate
 - ☐ 2. militate
 - ☒ 3. propitiate
 - ☐ 4. trace

Question Type : **MCQ**

Question ID : **264330136090**

Option 1 ID : **264330533171**

Option 2 ID : **264330533172**

Option 3 ID : **264330533173**

Option 4 ID : **264330533174**

Status : **Answered**

Chosen Option : **3**

Q.19 Identify the segment that contains a grammatical error. If there is no error, select 'No error'

An appeasements policies / were all but a sham to misdirect / the local groups.

- Ans**
- ☐ 1. the local groups.
 - ☐ 2. were all but a sham to misdirect
 - ☒ 3. An appeasements policies
 - ☐ 4. No error

Question Type : **MCQ**

Question ID : **264330136059**

Option 1 ID : **264330533053**

Option 2 ID : **264330533052**

Option 3 ID : **264330533051**

Option 4 ID : **264330533054**

Status : **Answered**

Chosen Option : **3**

Q.20 Select the correctly spelt word.

- Ans**
- ☐ 1. Apositte
 - ☒ 2. Apposite
 - ☐ 3. Aposire
 - ☐ 4. Aposite

Question Type : **MCQ**

Question ID : **264330136079**

Option 1 ID : **264330533130**

Option 2 ID : **264330533128**

Option 3 ID : **264330533127**

Option 4 ID : **264330533129**

Status : **Answered**

Chosen Option : **2**

Comprehension:

In the following passage some of the words have been deleted. Read the passage carefully and select the correct answer for the given blank out of the four alternatives.

You may wonder if anyone would (1) _____ to be diagnosed before they are even aware they have Alzheimer's (2) _____? A recent survey shows that, indeed, they would. (3) _____ three-quarters of the respondents said they would want (4) _____ if they had Alzheimer's disease, even if they were not yet experiencing (5) _____.

SubQuestion No : 21

Q.21 Select the most appropriate option to fill in blank number 1.

- Ans ☒ 1. drop
☒ 2. surrender
☒ 3. want
☒ 4. got

Question Type : MCQ

Question ID : 264330134303

Option 1 ID : 264330526206

Option 2 ID : 264330526203

Option 3 ID : 264330526204

Option 4 ID : 264330526205

Status : Answered

Chosen Option : 3

Comprehension:

In the following passage some of the words have been deleted. Read the passage carefully and select the correct answer for the given blank out of the four alternatives.

You may wonder if anyone would (1) _____ to be diagnosed before they are even aware they have Alzheimer's (2) _____? A recent survey shows that, indeed, they would. (3) _____ three-quarters of the respondents said they would want (4) _____ if they had Alzheimer's disease, even if they were not yet experiencing (5) _____.

SubQuestion No : 22

Q.22 Select the most appropriate option to fill in blank number 2.

- Ans ☒ 1. health
☒ 2. disease
☒ 3. contamination
☒ 4. bug

Question Type : MCQ

Question ID : 264330134304

Option 1 ID : 264330526210

Option 2 ID : 264330526209

Option 3 ID : 264330526208

Option 4 ID : 264330526207

Status : Answered

Chosen Option : 2

Comprehension:

In the following passage some of the words have been deleted. Read the passage carefully and select the correct answer for the given blank out of the four alternatives.

You may wonder if anyone would (1) _____ to be diagnosed before they are even aware they have Alzheimer's (2) _____? A recent survey shows that, indeed, they would. (3) _____ three-quarters of the respondents said they would want (4) _____ if they had Alzheimer's disease, even if they were not yet experiencing (5) _____.

SubQuestion No : 23

Q.23 Select the most appropriate option to fill in blank number 3.

- Ans ☒ 1. Totally
☒ 2. Casually
☒ 3. Firmly
☒ 4. Nearly

Question Type : MCQ

Question ID : 264330134305

Option 1 ID : 264330526212

Option 2 ID : 264330526214

Option 3 ID : 264330526213

Option 4 ID : 264330526211

Status : Answered

Chosen Option : 4

Comprehension:

In the following passage some of the words have been deleted. Read the passage carefully and select the correct answer for the given blank out of the four alternatives.

You may wonder if anyone would (1) _____ to be diagnosed before they are even aware they have Alzheimer's (2) _____? A recent survey shows that, indeed, they would. (3) _____ three-quarters of the respondents said they would want (4) _____ if they had Alzheimer's disease, even if they were not yet experiencing (5) _____.

SubQuestion No : 24

Q.24 Select the most appropriate option to fill in blank number 4.

- Ans ☒ 1. knowing
☒ 2. to know
☒ 3. knows
☒ 4. known

Question Type : MCQ

Question ID : 264330134306

Option 1 ID : 264330526217

Option 2 ID : 264330526218

Option 3 ID : 264330526215

Option 4 ID : 264330526216

Status : Answered

Chosen Option : 2

Comprehension:

In the following passage some of the words have been deleted. Read the passage carefully and select the correct answer for the given blank out of the four alternatives.

You may wonder if anyone would (1) _____ to be diagnosed before they are even aware they have Alzheimer's (2) _____? A recent survey shows that, indeed, they would. (3) _____ three-quarters of the respondents said they would want (4) _____ if they had Alzheimer's disease, even if they were not yet experiencing (5) _____.

SubQuestion No : 25

Q.25 Select the most appropriate option to fill in blank number 5.

- Ans ☒ 1. indexes
☒ 2. symptoms
☒ 3. evidences
☒ 4. marks

Question Type : MCQ

Question ID : 264330134307

Option 1 ID : 264330526222

Option 2 ID : 264330526219

Option 3 ID : 264330526221

Option 4 ID : 264330526220

Status : Answered

Chosen Option : 2

