

## Multi Tasking Non Technical Staff and Havaladar CBIC and CBN Examination 2022

Roll Number	
Candidate Name	
Venue Name	iON Digital Zone iDZ Arunodaya Nagar
Exam Date	19/06/2023
Exam Time	9:00 AM - 10:30 AM
Subject	MTS Non Tech Havaladar CBIC and CBN Examination 2022

### Section : Numerical and Mathematical Ability

**Q.1** If  $(P/2) = (Q/5) = (R/6)$ , then what is the value of  $P^2 : (P + Q)^2 : (Q + R)^2$

- Ans**
- ☒ 1. 10 : 56 : 169
  - ☒ 2. 4 : 49 : 121
  - ☒ 3. 9 : 64 : 144
  - ☒ 4. 16 : 10 : 125

Question Type : **MCQ**

Question ID : **264330140247**

Option 1 ID : **264330549369**

Option 2 ID : **264330549367**

Option 3 ID : **264330549368**

Option 4 ID : **264330549370**

Status : **Answered**

Chosen Option : **2**

**Q.2** Two boats are travelling at the speed of 36 km/hr and 54 km/hr respectively towards each other. What will be the distance between the two boats one second before they collide?

- Ans**
- ☒ 1. 40 metres
  - ☒ 2. 35 metres
  - ☒ 3. 25 metres
  - ☒ 4. 15 metres

Question Type : **MCQ**

Question ID : **264330140535**

Option 1 ID : **264330550498**

Option 2 ID : **264330550497**

Option 3 ID : **264330550495**

Option 4 ID : **264330550496**

Status : **Answered**

Chosen Option : **3**

# Test Prime

**ALL EXAMS,  
ONE SUBSCRIPTION**



**70,000+**  
Mock Tests



**Personalised  
Report Card**



**Unlimited  
Re-Attempt**



**600+**  
Exam Covered



**Previous Year  
Papers**



**500%  
Refund**



**ATTEMPT FREE MOCK NOW**

Q.3 The average of the set of scores 512, 528, 556, 584 and 615 is:

- Ans ☒ 1. 586  
☒ 2. 559  
☒ 3. 530  
☒ 4. 600

Question Type : MCQ  
Question ID : 264330139039  
Option 1 ID : 264330544765  
Option 2 ID : 264330544764  
Option 3 ID : 264330544763  
Option 4 ID : 264330544766  
Status : Answered  
Chosen Option : 2

Q.4 A certain sum of money becomes triple of itself in 8 years at simple interest. In how many years it will becomes five times of itself?

- Ans ☒ 1. 16 years  
☒ 2. 7 years  
☒ 3. 10 years  
☒ 4. 12 years

Question Type : MCQ  
Question ID : 264330140163  
Option 1 ID : 264330549034  
Option 2 ID : 264330549031  
Option 3 ID : 264330549032  
Option 4 ID : 264330549033  
Status : Answered  
Chosen Option : 1

Q.5 Three partners P, Q and R share profit such that 4 times of the P's share is equal to 5 times of the Q's share and equal to 8 times of the R's share. What is the ratio of the profits of P, Q and R respectively?

- Ans ☒ 1. 12 : 8 : 7  
☒ 2. 10 : 8 : 5  
☒ 3. 14 : 7 : 9  
☒ 4. 15 : 9 : 8

Question Type : MCQ  
Question ID : 264330139617  
Option 1 ID : 264330546884  
Option 2 ID : 264330546883  
Option 3 ID : 264330546885  
Option 4 ID : 264330546886  
Status : Answered  
Chosen Option : 2

**Q.6** Shreyas can complete  $\frac{4}{5}$  part of a work in 16 days. Ruchi is 2.5 times as efficient as Shreyas. In how many days will Ruchi alone complete the same work?

- Ans**
- ☒ 1. 9 days
  - ☒ 2. 12.5 days
  - ☒ 3. 10 days
  - ☒ 4. 8 days

Question Type : **MCQ**

Question ID : **264330139589**

Option 1 ID : **264330546772**

Option 2 ID : **264330546771**

Option 3 ID : **264330546774**

Option 4 ID : **264330546773**

Status : **Answered**

Chosen Option : **4**

**Q.7** The table given below shows the marked price and selling price of 6 articles.

Articles	Marked price	Selling price
A	750	650
B	600	450
C	650	500
D	450	400
E	850	650
F	350	300

Discount Percentage =  $\frac{(\text{Marked price} - \text{Selling price})}{\text{Marked price}} \times 100$

Which of the following sequence is correct of discount percentage?

- Ans**
- ☒ 1.  $E > C > B > F > A > D$
  - ☒ 2.  $B > E > C > F > A > D$
  - ☒ 3.  $D > A > F > C > E > B$
  - ☒ 4.  $B > E > C > F > D > A$

Question Type : **MCQ**

Question ID : **264330140191**

Option 1 ID : **264330549144**

Option 2 ID : **264330549145**

Option 3 ID : **264330549146**

Option 4 ID : **264330549143**

Status : **Answered**

Chosen Option : **2**

**Q.8** The length, breadth and height of a cuboid are 4 cm, 6 cm and 10 cm respectively. Find the total surface area.

- Ans**
- ✓ 1.  $248 \text{ cm}^2$
  - ✗ 2.  $244 \text{ cm}^2$
  - ✗ 3.  $144 \text{ cm}^2$
  - ✗ 4.  $222 \text{ cm}^2$

Question Type : **MCQ**

Question ID : **264330138432**

Option 1 ID : **264330542336**

Option 2 ID : **264330542337**

Option 3 ID : **264330542335**

Option 4 ID : **264330542338**

Status : **Answered**

Chosen Option : 1

**Q.9** What will be the area of a rectangular field of length 45 cm and breadth 32 cm?

- Ans**
- ✗ 1.  $1340 \text{ cm}^2$
  - ✗ 2.  $1450 \text{ cm}^2$
  - ✓ 3.  $1440 \text{ cm}^2$
  - ✗ 4.  $1120 \text{ cm}^2$

Question Type : **MCQ**

Question ID : **264330140794**

Option 1 ID : **264330551525**

Option 2 ID : **264330551526**

Option 3 ID : **264330551524**

Option 4 ID : **264330551523**

Status : **Answered**

Chosen Option : 3

**Q.10** Cost price of an article is Rs. 2650. If the loss percentage is 16 percent, then what is the selling price of the article?

- Ans**
- ✓ 1. Rs. 2226
  - ✗ 2. Rs. 2048
  - ✗ 3. Rs. 2316
  - ✗ 4. Rs. 2448

Question Type : **MCQ**

Question ID : **264330139937**

Option 1 ID : **264330548128**

Option 2 ID : **264330548130**

Option 3 ID : **264330548129**

Option 4 ID : **264330548127**

Status : **Answered**

Chosen Option : 1

**Q.11** The average of marks obtained by S1 and S2 is 30 more than the average marks obtained by S2 and S3. If the marks obtained by S3 is 50, then what are the marks obtained by S1?

- Ans**
- ☒ 1. 80
  - ☒ 2. 105
  - ☒ 3. 95
  - ☒ 4. 110

Question Type : **MCQ**  
 Question ID : **264330140635**  
 Option 1 ID : **264330550887**  
 Option 2 ID : **264330550890**  
 Option 3 ID : **264330550888**  
 Option 4 ID : **264330550889**  
 Status : **Answered**  
 Chosen Option : **4**

**Q.12** 40 men can construct a building in 100 days. How long will it take 80 men to do this work?

- Ans**
- ☒ 1. 60 days
  - ☒ 2. 80 days
  - ☒ 3. 50 days
  - ☒ 4. 40 days

Question Type : **MCQ**  
 Question ID : **264330140836**  
 Option 1 ID : **264330551694**  
 Option 2 ID : **264330551693**  
 Option 3 ID : **264330551691**  
 Option 4 ID : **264330551692**  
 Status : **Answered**  
 Chosen Option : **3**

**Q.13** The Least Common Multiple of three different numbers is 40. Which of the following cannot be their Highest Common Factor?

- Ans**
- ☒ 1. 20
  - ☒ 2. 25
  - ☒ 3. 5
  - ☒ 4. 10

Question Type : **MCQ**  
 Question ID : **264330140254**  
 Option 1 ID : **264330549397**  
 Option 2 ID : **264330549396**  
 Option 3 ID : **264330549395**  
 Option 4 ID : **264330549398**  
 Status : **Answered**  
 Chosen Option : **2**

**Q.14** A trader buys two articles for Rs. 4000 each article. If he earns a profit of 10 percent on one and losses 30 percent on the other, then what will be his overall loss percentage?

- Ans
- ☒ 1. 5 percent
  - ☒ 2. 10 percent
  - ☒ 3. 20 percent
  - ☒ 4. 15 percent

Question Type : **MCQ**  
 Question ID : **264330139023**  
 Option 1 ID : **264330544702**  
 Option 2 ID : **264330544700**  
 Option 3 ID : **264330544699**  
 Option 4 ID : **264330544701**  
 Status : **Answered**  
 Chosen Option : **2**

**Q.15** An item is sold at two successive discounts of 20 percent and 20 percent. The selling price of article after second discount is Rs. 3616. If it is sold only at one discount of 20 percent, then what will be the selling price of the article?

- Ans
- ☒ 1. Rs. 3960
  - ☒ 2. Rs. 4520
  - ☒ 3. Rs. 4080
  - ☒ 4. Rs. 5200

Question Type : **MCQ**  
 Question ID : **264330140545**  
 Option 1 ID : **264330550538**  
 Option 2 ID : **264330550537**  
 Option 3 ID : **264330550536**  
 Option 4 ID : **264330550535**  
 Status : **Answered**  
 Chosen Option : **2**

**Q.16** A = Rs 6000 is invested at simple interest for 5 years and annual rate of interest is 15 percent.  
 B = Rs. 5000 is invested at simple interest for 2 years and annual rate of interest is 20 percent.  
 What is the ratio of interests earned in A and B respectively?

- Ans
- ☒ 1. 19 : 12
  - ☒ 2. 9 : 4
  - ☒ 3. 16 : 5
  - ☒ 4. 18 : 11

Question Type : **MCQ**  
 Question ID : **264330139619**  
 Option 1 ID : **264330546893**  
 Option 2 ID : **264330546892**  
 Option 3 ID : **264330546891**  
 Option 4 ID : **264330546894**  
 Status : **Answered**  
 Chosen Option : **2**

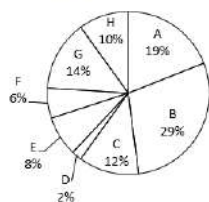


Q.17 What is the value of  $\frac{43 \times 2 - 21 \text{ of } 4}{28 - 7 \text{ of } 5 + 9}$  ?

- Ans
- ☒ 1. 3
  - ☒ 2. 2
  - ☒ 3. 4
  - ☒ 4. 1

Question Type : MCQ  
 Question ID : 264330139967  
 Option 1 ID : 264330548249  
 Option 2 ID : 264330548248  
 Option 3 ID : 264330548250  
 Option 4 ID : 264330548247  
 Status : Answered  
 Chosen Option : 4

Q.18 The pie chart given below shows the number of boys in 8 schools. The total number of boys in all these 8 schools is 10000. Number of boys in a particular school is shown as a percent of total number of boys in all these 8 schools.



What is the ratio of central angle formed by sector C, D and F together to the central angle formed by sector A, G and H together?

- Ans
- ☒ 1. 19 : 44
  - ☒ 2. 17 : 39
  - ☒ 3. 20 : 43
  - ☒ 4. 44 : 21

Question Type : MCQ  
 Question ID : 264330140172  
 Option 1 ID : 264330549067  
 Option 2 ID : 264330549068  
 Option 3 ID : 264330549070  
 Option 4 ID : 264330549069  
 Status : Answered  
 Chosen Option : 3

Q.19 A is 5 times of B. B is how much percentage less than A?

- Ans
- ☒ 1. 80 percent
  - ☒ 2. 60 percent
  - ☒ 3. 52.5 percent
  - ☒ 4. 83.33 percent

Question Type : MCQ  
 Question ID : 264330140636  
 Option 1 ID : 264330550892  
 Option 2 ID : 264330550891  
 Option 3 ID : 264330550893  
 Option 4 ID : 264330550894  
 Status : Answered  
 Chosen Option : 1



Q.20 What is the value of  $\frac{1}{7} \times \frac{1}{8} \div \frac{72}{51}$  of  $\left(\frac{1}{9} + \frac{1}{8}\right) + \left(\frac{63}{56} \times \frac{48}{72}\right)$  ?

- Ans
- ☒ 1. 21/56
  - ☒ 2. 19/56
  - ☒ 3. 45/56
  - ☒ 4. 15/56

Question Type : MCQ  
 Question ID : 264330139928  
 Option 1 ID : 264330548092  
 Option 2 ID : 264330548091  
 Option 3 ID : 264330548094  
 Option 4 ID : 264330548093  
 Status : Answered  
 Chosen Option : 3

Section : Reasoning Ability and Problem Solving

Q.1 Which of the following letter cluster will replace the question mark (?) in the given series?  
 PB, RZ, TX, VV, ?

- Ans
- ☒ 1. XU
  - ☒ 2. YU
  - ☒ 3. XT
  - ☒ 4. YT

Question Type : MCQ  
 Question ID : 264330140032  
 Option 1 ID : 264330548509  
 Option 2 ID : 264330548510  
 Option 3 ID : 264330548508  
 Option 4 ID : 264330548507  
 Status : Answered  
 Chosen Option : 3

**Q.2** Three statements are given followed by two conclusions numbered I and II. Assuming the statements to be true, even if they seem to be at variance with commonly known facts, decide which of the conclusions logically follow(s) from the statements.

Statements:

All trees are flowers.

All flowers are petals.

Some petals are leaves.

Conclusions:

I. All trees are petals.

II. Some petals are flowers.

- Ans**
- ☒ 1. Only conclusion II follows
  - ☒ 2. Only conclusion I follows
  - ☒ 3. Neither conclusion I nor II follows
  - ☒ 4. Both conclusions I and II follow

Question Type : MCQ

Question ID : 264330138777

Option 1 ID : 264330543716

Option 2 ID : 264330543715

Option 3 ID : 264330543718

Option 4 ID : 264330543717

Status : Answered

Chosen Option : 4

**Q.3** Select the option that is related to the third word in the same way as the second word is related to the first word.  
Resistance : Ohm :: Energy : ?

- Ans**
- ☒ 1. Joule
  - ☒ 2. Ampere
  - ☒ 3. Mho
  - ☒ 4. Mole

Question Type : MCQ

Question ID : 264330140473

Option 1 ID : 264330550271

Option 2 ID : 264330550273

Option 3 ID : 264330550272

Option 4 ID : 264330550274

Status : Answered

Chosen Option : 1

**Q.4** Select the option that is related to the third word in the same way as the second word is related to the first word.  
Canada : Ottawa :: Italy : ?

- Ans**
- ☒ 1. London
  - ☒ 2. Paris
  - ☒ 3. Rome
  - ☒ 4. Wellington

Question Type : MCQ

Question ID : 264330140454

Option 1 ID : 264330550197

Option 2 ID : 264330550196

Option 3 ID : 264330550195

Option 4 ID : 264330550198

Status : Answered

Chosen Option : 3

**Q.5** In a certain code language, 'HOME' is written as 'MOHE'. How will 'CALM' be written in that language?

- Ans**
- ☐ 1. LBCM
  - ☐ 2. LAMC
  - ☐ 3. MACL
  - ☒ 4. LACM

Question Type : **MCQ**  
 Question ID : **264330140415**  
 Option 1 ID : **264330550041**  
 Option 2 ID : **264330550040**  
 Option 3 ID : **264330550039**  
 Option 4 ID : **264330550042**  
 Status : **Answered**  
 Chosen Option : **4**

**Q.6** In a certain code language, 'BONUS' is written as '215142119'. How will 'FANCY' be written in that language?

- Ans**
- ☒ 1. 6114325
  - ☐ 2. 6114352
  - ☐ 3. 6113425
  - ☐ 4. 6113452

Question Type : **MCQ**  
 Question ID : **264330140416**  
 Option 1 ID : **264330550045**  
 Option 2 ID : **264330550044**  
 Option 3 ID : **264330550046**  
 Option 4 ID : **264330550043**  
 Status : **Answered**  
 Chosen Option : **1**

**Q.7** Two Statements are given followed by two conclusions numbered I and II. Assuming the statements to be true, even if they seem to be at variance with commonly known facts, decide which of the conclusions logically follow(s) from the statements.

Statements:

All notebooks are pencils.

Some pens are notebooks.

Conclusions:

I. All pens are pencils.

II. Some pencils are pens.

- Ans**
- ☐ 1. Only conclusion I follows.
  - ☐ 2. Both conclusions I and II follow.
  - ☒ 3. Only conclusion II follows.
  - ☐ 4. Neither conclusion I nor II follow.

Question Type : **MCQ**  
 Question ID : **264330140441**  
 Option 1 ID : **264330550143**  
 Option 2 ID : **264330550145**  
 Option 3 ID : **264330550144**  
 Option 4 ID : **264330550146**  
 Status : **Answered**  
 Chosen Option : **3**

**Q.8** Select the option in which the numbers shares the same relationship in set as that shared by the numbers in the given set.  
(NOTE: Operations should be performed on the whole numbers, without breaking down the numbers into its constituent digits. E.g. 13 – Operations on 13 such as adding /subtracting /multiplying etc. to 13 can be performed. Breaking down 13 into 1 and 3 and then performing mathematical operations on 1 and 3 is not allowed)  
(2, 3, 5)  
(5, 7, 11)

- Ans** ☒ 1. (12, 15, 18)  
☒ 2. (11, 13, 17)  
☒ 3. (4, 6, 7)  
☒ 4. (5, 10, 11)

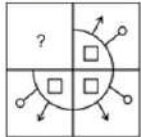
Question Type : **MCQ**  
 Question ID : **264330139985**  
 Option 1 ID : **264330548322**  
 Option 2 ID : **264330548321**  
 Option 3 ID : **264330548319**  
 Option 4 ID : **264330548320**  
 Status : **Answered**  
 Chosen Option : **2**

**Q.9** Which of the following numbers will replace the question mark (?) in the given series?  
 3, 7, 15, 31, 63, 127, 255, ?

- Ans** ☒ 1. 520  
☒ 2. 511  
☒ 3. 560  
☒ 4. 510

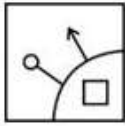
Question Type : **MCQ**  
 Question ID : **264330135360**  
 Option 1 ID : **264330530349**  
 Option 2 ID : **264330530348**  
 Option 3 ID : **264330530350**  
 Option 4 ID : **264330530347**  
 Status : **Answered**  
 Chosen Option : **2**

**Q.10** Select the option figure that will replace the question mark (?) in the figure given below to complete the pattern.  
(rotation is not allowed)

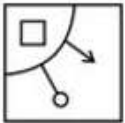


**Ans**

✓ 1.



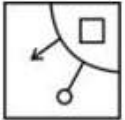
✗ 2.



✗ 3.



✗ 4.



Question Type : **MCQ**

Question ID : **264330140031**

Option 1 ID : **264330548506**

Option 2 ID : **264330548503**

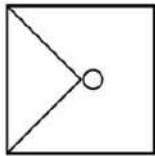
Option 3 ID : **264330548504**

Option 4 ID : **264330548505**

Status : **Answered**

Chosen Option : **1**

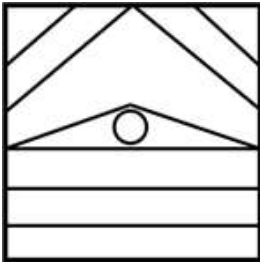
Q.11 Select the option figure in which the given figure (X) is embedded as its part (rotation is NOT allowed).



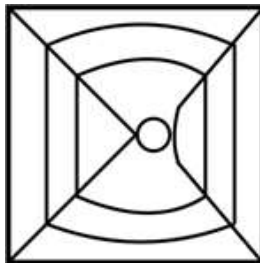
(X)

Ans

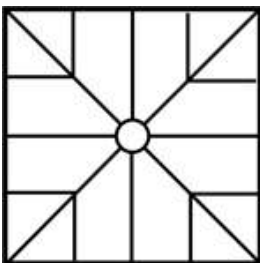
✗ 1.



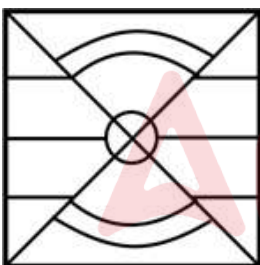
✓ 2.



✗ 3.



✗ 4.



Question Type : MCQ

Question ID : 264330140449

Option 1 ID : 264330550176

Option 2 ID : 264330550177

Option 3 ID : 264330550178

Option 4 ID : 264330550175

Status : Answered

Chosen Option : 2

**Q.12** By Interchanging the given two numbers which of the following equation will be correct?

8 and 4

- Ans** ☒ 1.  $4 + 8 \times 2 - 3 = 20$   
☒ 2.  $4 \div 2 + 8 \times 3 = 16$   
☒ 3.  $4 + 3 \times 8 - 2 = 21$   
☒ 4.  $8 - 4 + 6 = 9$

Question Type : **MCQ**

Question ID : **264330139564**

Option 1 ID : **264330546674**

Option 2 ID : **264330546673**

Option 3 ID : **264330546671**

Option 4 ID : **264330546672**

Status : **Answered**

Chosen Option : **2**

**Q.13** In a certain code language, 'BHAkti' is coded as 'GSIZFA'. What is the code for 'BIKCER' in that code language?

- Ans** ☒ 1. PDAJGA  
☒ 2. QDAJHA  
☒ 3. PDAJFA  
☒ 4. QDAJGA

Question Type : **MCQ**

Question ID : **264330140981**

Option 1 ID : **264330552272**

Option 2 ID : **264330552271**

Option 3 ID : **264330552273**

Option 4 ID : **264330552274**

Status : **Answered**

Chosen Option : **1**

**Q.14** Select the option that is related to the third number in the same way as the second number is related to the first number.

64 : 512 :: 81 : ?

- Ans** ☒ 1. 727  
☒ 2. 730  
☒ 3. 728  
☒ 4. 729

Question Type : **MCQ**

Question ID : **264330140425**

Option 1 ID : **264330550081**

Option 2 ID : **264330550082**

Option 3 ID : **264330550079**

Option 4 ID : **264330550080**

Status : **Answered**

Chosen Option : **4**



**Q.15** Seven players Virat, Rahul, Rohit, Surya, Hardik, Rishabh and Deepak are sitting around a circular table facing towards the centre (not necessarily in the same order). Rohit is second to the left of Virat. Virat is fourth to the right of Deepak. Hardik is to immediate left of Deepak. Surya is not the immediate neighbour of Rohit. Rishabh is second to the right of Hardik. Who is fourth to the right of Hardik?

- Ans**
- ☒ 1. Surya
  - ☒ 2. Deepak
  - ☒ 3. Rahul
  - ☒ 4. Virat

Question Type : **MCQ**  
 Question ID : **264330139977**  
 Option 1 ID : **264330548289**  
 Option 2 ID : **264330548290**  
 Option 3 ID : **264330548288**  
 Option 4 ID : **264330548287**  
 Status : **Answered**  
 Chosen Option : **3**

**Q.16** Which two numbers should be interchanged to make the given equation correct?

$$7 - 5 + 4 \times 2 = 25$$

- Ans**
- ☒ 1. 4 and 2
  - ☒ 2. 7 and 5
  - ☒ 3. 25 and 7
  - ☒ 4. 5 and 2

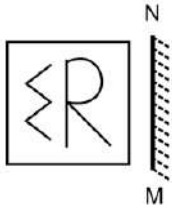
Question Type : **MCQ**  
 Question ID : **264330140148**  
 Option 1 ID : **264330548973**  
 Option 2 ID : **264330548972**  
 Option 3 ID : **264330548974**  
 Option 4 ID : **264330548971**  
 Status : **Answered**  
 Chosen Option : **4**

**Q.17** Seven friends H, J, K, L, M, N, and O are sitting around a circular table facing the centre. H is sitting to the immediate right of L. N is sitting exactly between J and K. M sits to the immediate left of O. N sits second to the left of M. Who sits to the immediate right of O?

- Ans**
- ☒ 1. J
  - ☒ 2. N
  - ☒ 3. H
  - ☒ 4. L

Question Type : **MCQ**  
 Question ID : **264330138774**  
 Option 1 ID : **264330543705**  
 Option 2 ID : **264330543706**  
 Option 3 ID : **264330543703**  
 Option 4 ID : **264330543704**  
 Status : **Answered**  
 Chosen Option : **4**

Q.18 Select the correct mirror image of the given figure when the mirror MN is placed to the right side of the figure.



Ans

✗ 1.



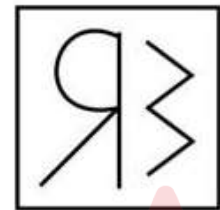
✗ 2.



✗ 3.



✓ 4.



Question Type : MCQ

Question ID : 264330138785

Option 1 ID : 264330543747

Option 2 ID : 264330543749

Option 3 ID : 264330543750

Option 4 ID : 264330543748

Status : Answered

Chosen Option : 4

Q.19 Which of the following numbers will replace the question mark (?) in the given series?

72, 78, 89, 95, 106, 112, 123, ?

- Ans
- ☒ 1. 85
  - ☒ 2. 129
  - ☒ 3. 140
  - ☒ 4. 200

Question Type : MCQ

Question ID : 264330140084

Option 1 ID : 264330548717

Option 2 ID : 264330548715

Option 3 ID : 264330548718

Option 4 ID : 264330548716

Status : Answered

Chosen Option : 2

Q.20 Amongst seven girls I, II, III, IV, V, VI and VII, each has a different age. VI is elder than only III. II is younger than only VII. IV is older than four other girls. I is younger than V. Who is the fourth eldest among the girls?

- Ans
- ☒ 1. IV
  - ☒ 2. VI
  - ☒ 3. III
  - ☒ 4. V

Question Type : MCQ

Question ID : 264330140141

Option 1 ID : 264330548944

Option 2 ID : 264330548946

Option 3 ID : 264330548943

Option 4 ID : 264330548945

Status : Answered

Chosen Option : 4

Section : General Awareness

Q.1 The terms Kumi-Kata, Shintai, Ukemi are associated with which sports?

- Ans
- ☒ 1. Fencing
  - ☒ 2. Judo
  - ☒ 3. Wrestling
  - ☒ 4. Polo

Question Type : MCQ

Question ID : 264330139727

Option 1 ID : 264330547326

Option 2 ID : 264330547324

Option 3 ID : 264330547323

Option 4 ID : 264330547325

Status : Not Answered

Chosen Option : --

**Q.2** The Muslim Women (Protection of Rights on Marriage) Act, 2019 declares the instant divorce granted by pronouncement of talaq three times as void and illegal. It provides for imprisonment for a term up to \_\_\_\_\_ and fine to the husband who practiced instant Triple Talaq.

- Ans**
- ☒ 1. 2 years
  - ☒ 2. 5 years
  - ☒ 3. 4 years
  - ☒ 4. 3 years

Question Type : **MCQ**  
 Question ID : **264330140293**  
 Option 1 ID : **264330549553**  
 Option 2 ID : **264330549552**  
 Option 3 ID : **264330549551**  
 Option 4 ID : **264330549554**  
 Status : **Marked For Review**  
 Chosen Option : 1

**Q.3** Which of the following is celebrated as birth anniversary of Gautama Buddha?

- Ans**
- ☒ 1. Vesak
  - ☒ 2. Maha Shivaratri
  - ☒ 3. Pongal
  - ☒ 4. Holika Dahan

Question Type : **MCQ**  
 Question ID : **264330140654**  
 Option 1 ID : **264330550965**  
 Option 2 ID : **264330550964**  
 Option 3 ID : **264330550966**  
 Option 4 ID : **264330550963**  
 Status : **Marked For Review**  
 Chosen Option : 1

**Q.4** 'Romancing with Life' is an autobiography of the evergreen star \_\_\_\_\_.

- Ans**
- ☒ 1. Dilip Kumar
  - ☒ 2. Shashi Kapoor
  - ☒ 3. Dev Anand
  - ☒ 4. Kishore Kumar

Question Type : **MCQ**  
 Question ID : **264330139678**  
 Option 1 ID : **264330547130**  
 Option 2 ID : **264330547127**  
 Option 3 ID : **264330547129**  
 Option 4 ID : **264330547128**  
 Status : **Answered**  
 Chosen Option : 3

Q.5 Minal wrote an essay on the largest moon of Saturn. Which among the following moons is it?

- Ans
- ☒ 1. Atlas
  - ☒ 2. Titan
  - ☒ 3. Carme
  - ☒ 4. Europa

Question Type : MCQ  
 Question ID : 264330140734  
 Option 1 ID : 264330551286  
 Option 2 ID : 264330551284  
 Option 3 ID : 264330551283  
 Option 4 ID : 264330551285  
 Status : Not Answered  
 Chosen Option : --

Q.6 FIFA World Cup is associated with \_\_\_\_\_ sport.

- Ans
- ☒ 1. Hockey
  - ☒ 2. Fencing
  - ☒ 3. Rugby
  - ☒ 4. Football

Question Type : MCQ  
 Question ID : 264330140928  
 Option 1 ID : 264330552059  
 Option 2 ID : 264330552062  
 Option 3 ID : 264330552060  
 Option 4 ID : 264330552061  
 Status : Answered  
 Chosen Option : 4

Q.7 Which of the following is NOT an example of Mass Media?

- Ans
- ☒ 1. Radio
  - ☒ 2. Door to door campaign
  - ☒ 3. Television
  - ☒ 4. Newspapers

Question Type : MCQ  
 Question ID : 264330139883  
 Option 1 ID : 264330547913  
 Option 2 ID : 264330547912  
 Option 3 ID : 264330547914  
 Option 4 ID : 264330547911  
 Status : Answered  
 Chosen Option : 2

Q.8 The last Mughal Emperor who was sent to Jail in Rangoon was \_\_\_\_\_ .

- Ans
- ☒ 1. Shah Alam II
  - ☒ 2. Akbar shah II
  - ☒ 3. Bahadur Shah Zafar
  - ☒ 4. Alamgir II

Question Type : MCQ  
 Question ID : 264330139696  
 Option 1 ID : 264330547201  
 Option 2 ID : 264330547199  
 Option 3 ID : 264330547200  
 Option 4 ID : 264330547202  
 Status : Answered  
 Chosen Option : 3

Q.9 Which of the following vitamins helps our body to use calcium for bones and teeth?

- Ans
- ☒ 1. Vitamin C
  - ☒ 2. Vitamin D
  - ☒ 3. Vitamin A
  - ☒ 4. Vitamin E

Question Type : MCQ  
 Question ID : 264330139661  
 Option 1 ID : 264330547062  
 Option 2 ID : 264330547060  
 Option 3 ID : 264330547061  
 Option 4 ID : 264330547059  
 Status : Answered  
 Chosen Option : 2

Q.10 Which among the following dance forms of India is associated with Odisha?

- Ans
- ☒ 1. Bhangra
  - ☒ 2. Ghumar
  - ☒ 3. Chhau
  - ☒ 4. Kathak

Question Type : MCQ  
 Question ID : 264330140908  
 Option 1 ID : 264330551981  
 Option 2 ID : 264330551982  
 Option 3 ID : 264330551980  
 Option 4 ID : 264330551979  
 Status : Marked For Review  
 Chosen Option : 2

Q.11 Which layer of the soil has maximum concentration of humus?

- Ans
- ☒ 1. Parent rock
  - ☒ 2. Weathered rock material
  - ☒ 3. Top soil
  - ☒ 4. Sub soil

Question Type : MCQ  
 Question ID : 264330140899  
 Option 1 ID : 264330551943  
 Option 2 ID : 264330551944  
 Option 3 ID : 264330551946  
 Option 4 ID : 264330551945  
 Status : Not Answered  
 Chosen Option : --

Q.12 Which among the following is a tributary of river Narmada?

- Ans
- ☒ 1. Koyna
  - ☒ 2. Ken
  - ☒ 3. Betwa
  - ☒ 4. Tawa

Question Type : MCQ  
 Question ID : 264330140941  
 Option 1 ID : 264330552114  
 Option 2 ID : 264330552112  
 Option 3 ID : 264330552113  
 Option 4 ID : 264330552111  
 Status : Marked For Review  
 Chosen Option : 4

Q.13 Which part of the Indian constitution talks about the Union Territories?

- Ans
- ☒ 1. Part VI
  - ☒ 2. Part X
  - ☒ 3. Part XI
  - ☒ 4. Part VIII

Question Type : MCQ  
 Question ID : 264330140746  
 Option 1 ID : 264330551331  
 Option 2 ID : 264330551332  
 Option 3 ID : 264330551333  
 Option 4 ID : 264330551334  
 Status : Answered  
 Chosen Option : 4



Q.14 Which among the following memoir is based on ex-Prime Minister Dr Manmohan Singh?

- Ans
- ☐ 1. A Prime Minister to Remember
  - ☐ 2. The Change We Choose
  - ☐ 3. The Prime Minister
  - ☒ 4. The Accidental Prime Minister

Question Type : MCQ

Question ID : 264330140923

Option 1 ID : 264330552042

Option 2 ID : 264330552039

Option 3 ID : 264330552041

Option 4 ID : 264330552040

Status : Answered

Chosen Option : 4

Q.15 Which famous ruler was known as the "Second Ashoka"?

- Ans
- ☐ 1. Chandragupta II
  - ☐ 2. Rudradaman I
  - ☐ 3. Milinda
  - ☒ 4. Kanishka

Question Type : MCQ

Question ID : 264330140664

Option 1 ID : 264330551005

Option 2 ID : 264330551006

Option 3 ID : 264330551004

Option 4 ID : 264330551003

Status : Marked For Review

Chosen Option : 4

Q.16 The Union Minister of Petroleum and Natural Gas, Hardeep Singh Puri, in October 2022 inaugurated Asia's largest Compressed Bio Gas (CBG) plant in \_\_\_\_\_.

- Ans
- ☐ 1. Delhi
  - ☐ 2. Rajasthan
  - ☒ 3. Punjab
  - ☐ 4. Chandigarh

Question Type : MCQ

Question ID : 264330140342

Option 1 ID : 264330549748

Option 2 ID : 264330549749

Option 3 ID : 264330549750

Option 4 ID : 264330549747

Status : Not Answered

Chosen Option : --

Q.17 All human beings have \_\_\_\_\_ pairs of chromosomes in the nuclei of their cells.

- Ans
- ☒ 1. 11
  - ☒ 2. 41
  - ☒ 3. 33
  - ☒ 4. 23

Question Type : MCQ  
 Question ID : 264330138985  
 Option 1 ID : 264330544547  
 Option 2 ID : 264330544550  
 Option 3 ID : 264330544549  
 Option 4 ID : 264330544548  
 Status : Answered  
 Chosen Option : 4

Q.18 Islamic style of architecture is also known as \_\_\_\_\_ style.

- Ans
- ☒ 1. Hegira
  - ☒ 2. Yashmak
  - ☒ 3. Alim
  - ☒ 4. Mehrab

Question Type : MCQ  
 Question ID : 264330140910  
 Option 1 ID : 264330551987  
 Option 2 ID : 264330551990  
 Option 3 ID : 264330551988  
 Option 4 ID : 264330551989  
 Status : Not Answered  
 Chosen Option : --

Q.19 Which among the following is a noble chemical element of science periodic table?

- Ans
- ☒ 1. Nitrogen
  - ☒ 2. Helium
  - ☒ 3. Scandium
  - ☒ 4. Cobalt

Question Type : MCQ  
 Question ID : 264330140731  
 Option 1 ID : 264330551274  
 Option 2 ID : 264330551273  
 Option 3 ID : 264330551272  
 Option 4 ID : 264330551271  
 Status : Marked For Review  
 Chosen Option : 3

Q.20 Which of the following tribe belongs to Indo-European Linguistic family?

- Ans
- ☒ 1. Garo
  - ☒ 2. Gondi
  - ☒ 3. Korwa
  - ☒ 4. Bhili

Question Type : MCQ  
 Question ID : 264330139768  
 Option 1 ID : 264330547490  
 Option 2 ID : 264330547488  
 Option 3 ID : 264330547489  
 Option 4 ID : 264330547487  
 Status : Not Answered  
 Chosen Option : --

Q.21 When was the Battle of Talikota fought?

- Ans
- ☒ 1. 1542
  - ☒ 2. 1556
  - ☒ 3. 1565
  - ☒ 4. 1576

Question Type : MCQ  
 Question ID : 264330140356  
 Option 1 ID : 264330549803  
 Option 2 ID : 264330549806  
 Option 3 ID : 264330549804  
 Option 4 ID : 264330549805  
 Status : Answered  
 Chosen Option : 3

Q.22 How many types of revenue receipts exist in the economy?

- Ans
- ☒ 1. Two
  - ☒ 2. Four
  - ☒ 3. Five
  - ☒ 4. Three

Question Type : MCQ  
 Question ID : 264330139758  
 Option 1 ID : 264330547448  
 Option 2 ID : 264330547450  
 Option 3 ID : 264330547447  
 Option 4 ID : 264330547449  
 Status : Not Answered  
 Chosen Option : --

Q.23 According to the 2011 census, the sex ratio for India's population is \_\_\_\_\_.

- Ans
- ☒ 1. 867
  - ☒ 2. 984
  - ☒ 3. 943
  - ☒ 4. 966

Question Type : MCQ  
Question ID : 264330140762  
Option 1 ID : 264330551398  
Option 2 ID : 264330551397  
Option 3 ID : 264330551395  
Option 4 ID : 264330551396  
Status : Answered  
Chosen Option : 3

Q.24 Who administers the Union Territories of India?

- Ans
- ☒ 1. President
  - ☒ 2. Prime Minister
  - ☒ 3. Chief Minister
  - ☒ 4. Member of Legislative Assembly

Question Type : MCQ  
Question ID : 264330140747  
Option 1 ID : 264330551336  
Option 2 ID : 264330551335  
Option 3 ID : 264330551338  
Option 4 ID : 264330551337  
Status : Answered  
Chosen Option : 1

Q.25 Mahatma Gandhi called off the Non – cooperation Movement in February 1922 after which incident?

- Ans
- ☒ 1. Bomb Blast in central assembly
  - ☒ 2. Jallianwala Bagh Massacre
  - ☒ 3. Kakori train robbery
  - ☒ 4. Chauri Chaura Incident

Question Type : MCQ  
Question ID : 264330139722  
Option 1 ID : 264330547304  
Option 2 ID : 264330547306  
Option 3 ID : 264330547305  
Option 4 ID : 264330547303  
Status : Marked For Review  
Chosen Option : 4

**Q.1** Identify the segment that contains a grammatical error. If there is no error, select 'No error'.

These include the nature/ documentaries, including/ The Blue Planet and Planet Earth.

- Ans**
- ☒ 1. documentaries, including
  - ☒ 2. The Blue Planet and Planet Earth.
  - ☒ 3. No error
  - ☒ 4. These include the nature

Question Type : **MCQ**  
 Question ID : **264330136537**  
 Option 1 ID : **264330534888**  
 Option 2 ID : **264330534889**  
 Option 3 ID : **264330534890**  
 Option 4 ID : **264330534887**  
 Status : **Answered**  
 Chosen Option : **2**

**Q.2** Find the part of the given sentence that has an error in it. If there is no error, choose 'No error'.

A long hoped-for revival in private investment has not take place.

- Ans**
- ☒ 1. A long hoped-for revival
  - ☒ 2. not take place.
  - ☒ 3. No error
  - ☒ 4. in private investment has

Question Type : **MCQ**  
 Question ID : **264330135231**  
 Option 1 ID : **264330529847**  
 Option 2 ID : **264330529849**  
 Option 3 ID : **264330529850**  
 Option 4 ID : **264330529848**  
 Status : **Answered**  
 Chosen Option : **2**

**Q.3** Select the most appropriate option to fill in the blank.

Still, this is a Frank Black album, with its \_\_\_\_\_ references and abstruse lyrics.

- Ans**
- ☒ 1. obscure
  - ☒ 2. intelligent
  - ☒ 3. informal
  - ☒ 4. apparent

Question Type : **MCQ**  
 Question ID : **264330135826**  
 Option 1 ID : **264330532175**  
 Option 2 ID : **264330532176**  
 Option 3 ID : **264330532178**  
 Option 4 ID : **264330532177**  
 Status : **Marked For Review**  
 Chosen Option : **1**

Q.4 Fill in the blank with the most appropriate option.

Be present \_\_\_\_\_ the moment.

- Ans
- ☒ 1. to
  - ☒ 2. upon
  - ☒ 3. on
  - ☒ 4. in

Question Type : MCQ  
 Question ID : 264330135747  
 Option 1 ID : 264330531872  
 Option 2 ID : 264330531873  
 Option 3 ID : 264330531871  
 Option 4 ID : 264330531874  
 Status : Marked For Review  
 Chosen Option : 4

Q.5 Select the most appropriate antonym of the given word.

Complicate

- Ans
- ☒ 1. Multiply
  - ☒ 2. Dominate
  - ☒ 3. Healthy
  - ☒ 4. Enlighten

Question Type : MCQ  
 Question ID : 264330136283  
 Option 1 ID : 264330533914  
 Option 2 ID : 264330533913  
 Option 3 ID : 264330533911  
 Option 4 ID : 264330533912  
 Status : Marked For Review  
 Chosen Option : 3

Q.6 Select the most appropriate meaning of the given idiom.

Hit the hay

- Ans
- ☒ 1. To go to bed
  - ☒ 2. To buy or sell something
  - ☒ 3. To take revenge
  - ☒ 4. A sarcastic response

Question Type : MCQ  
 Question ID : 264330136129  
 Option 1 ID : 264330533322  
 Option 2 ID : 264330533319  
 Option 3 ID : 264330533320  
 Option 4 ID : 264330533321  
 Status : Marked For Review  
 Chosen Option : 1

Q.7 Select the most appropriate word for the given group of words.

A group of ants

- Ans
- ☒ 1. Bushel
  - ☒ 2. Pack
  - ☒ 3. Colony
  - ☒ 4. Comb

Question Type : MCQ  
Question ID : 264330136425  
Option 1 ID : 264330534459  
Option 2 ID : 264330534462  
Option 3 ID : 264330534460  
Option 4 ID : 264330534461  
Status : Answered  
Chosen Option : 3

Q.8 Improve the underlined part of the sentence. Choose 'No improvement' as an answer if the sentence is grammatically correct.

In the summer, the bear eaten a lot of berries.

- Ans
- ☒ 1. No improvement
  - ☒ 2. eat a lot
  - ☒ 3. have ate a lot
  - ☒ 4. eats a lot

Question Type : MCQ  
Question ID : 264330135538  
Option 1 ID : 264330531058  
Option 2 ID : 264330531056  
Option 3 ID : 264330531057  
Option 4 ID : 264330531055  
Status : Answered  
Chosen Option : 4

Q.9 Choose the sentence with no spelling error.

- Ans
- ☒ 1. Price is the monetery vallue placed on a product.
  - ☒ 2. Price is the monetary value placed on a product.
  - ☒ 3. Price is the monetary value plased on a product.
  - ☒ 4. Price is the monitary value placed on a product.

Question Type : MCQ  
Question ID : 264330135175  
Option 1 ID : 264330529633  
Option 2 ID : 264330529634  
Option 3 ID : 264330529632  
Option 4 ID : 264330529631  
Status : Answered  
Chosen Option : 2



Q.10 Identify the segment that contains a grammatical error. If there is no error, select 'No error'.

There is not one/ that have not/ been duplicated.

- Ans
- ☒ 1. No error
  - ☒ 2. There is not one
  - ☒ 3. that have not
  - ☒ 4. been duplicated.

Question Type : MCQ  
 Question ID : 264330136535  
 Option 1 ID : 264330534882  
 Option 2 ID : 264330534879  
 Option 3 ID : 264330534880  
 Option 4 ID : 264330534881  
 Status : Marked For Review  
 Chosen Option : 3

Q.11 Select the appropriate synonym for the underlined word.

She couldn't really be irritated with him.

- Ans
- ☒ 1. pleased
  - ☒ 2. delighted
  - ☒ 3. annoyed
  - ☒ 4. obliged

Question Type : MCQ  
 Question ID : 264330135246  
 Option 1 ID : 264330529906  
 Option 2 ID : 264330529903  
 Option 3 ID : 264330529905  
 Option 4 ID : 264330529904  
 Status : Answered  
 Chosen Option : 3

Q.12 Select the most appropriate meaning of the bracketed idiom in the given sentence.

He bought (a baker's dozen) of biscuits.

- Ans
- ☒ 1. Thirteen
  - ☒ 2. Twelve
  - ☒ 3. Fifteen
  - ☒ 4. Ten

Question Type : MCQ  
 Question ID : 264330136764  
 Option 1 ID : 264330535759  
 Option 2 ID : 264330535760  
 Option 3 ID : 264330535762  
 Option 4 ID : 264330535761  
 Status : Answered  
 Chosen Option : 2

Q.13 Select the most appropriate option to fill in the blank.

The event, promised to be a grand show, will see a display of grit, \_\_\_\_\_ and mettle.

- Ans
- ☒ 1. tyro
  - ☒ 2. zeal
  - ☒ 3. umbrage
  - ☒ 4. zenith

Question Type : MCQ  
Question ID : 264330135688  
Option 1 ID : 264330531643  
Option 2 ID : 264330531644  
Option 3 ID : 264330531646  
Option 4 ID : 264330531645  
Status : Marked For Review  
Chosen Option : 3

Q.14 Select the appropriate antonym for the underlined word.

Our children need vital lessons in wealth management.

- Ans
- ☒ 1. clever
  - ☒ 2. superfluous
  - ☒ 3. organic
  - ☒ 4. healthy

Question Type : MCQ  
Question ID : 264330135656  
Option 1 ID : 264330531521  
Option 2 ID : 264330531522  
Option 3 ID : 264330531519  
Option 4 ID : 264330531520  
Status : Answered  
Chosen Option : 2

Q.15 Select the appropriate synonym for the underlined word.

The symbols were useless to him.

- Ans
- ☒ 1. reachable
  - ☒ 2. valuable
  - ☒ 3. worthless
  - ☒ 4. successful

Question Type : MCQ  
Question ID : 264330141178  
Option 1 ID : 264330553052  
Option 2 ID : 264330553054  
Option 3 ID : 264330553053  
Option 4 ID : 264330553051  
Status : Answered  
Chosen Option : 3

Q.16 Select the correctly spelt word.

- Ans
- ☐ 1. Plageriasm
  - ☐ 2. Plagerism
  - ☒ 3. Plagiarism
  - ☐ 4. Plagiarsm

Question Type : MCQ

Question ID : 264330136765

Option 1 ID : 264330535766

Option 2 ID : 264330535763

Option 3 ID : 264330535764

Option 4 ID : 264330535765

Status : Marked For Review

Chosen Option : 3

Q.17 Choose the word that can substitute the given group of words.

A person, who travels in spacecraft

- Ans
- ☐ 1. Ghetto
  - ☐ 2. Cadet
  - ☐ 3. Voyeur
  - ☒ 4. Astronaut

Question Type : MCQ

Question ID : 264330135549

Option 1 ID : 264330531095

Option 2 ID : 264330531097

Option 3 ID : 264330531096

Option 4 ID : 264330531098

Status : Answered

Chosen Option : 4

Q.18 Fill in the blank with the most appropriate choice.

His students from his time at Manchester University remember his lectures as extraordinarily \_\_\_\_\_.

- Ans
- ☐ 1. rancid
  - ☐ 2. ballistic
  - ☐ 3. flaccid
  - ☒ 4. lucid

Question Type : MCQ

Question ID : 264330135843

Option 1 ID : 264330532239

Option 2 ID : 264330532242

Option 3 ID : 264330532241

Option 4 ID : 264330532240

Status : Marked For Review

Chosen Option : 4

**Q.19** Select the most appropriate option to substitute the bracketed segment in the given sentence. If there is no need to substitute it, select 'no substitution required'.

(Hardly had I started mowing the lawn that) it started raining.

- Ans**
- ☒ 1. No sooner did I started mowing the lawn than
  - ☒ 2. Hardly had I started mowing the lawn when
  - ☒ 3. No substitution required
  - ☒ 4. Hardly did I start mowing the lawn than

Question Type : **MCQ**

Question ID : **264330136487**

Option 1 ID : **264330534695**

Option 2 ID : **264330534696**

Option 3 ID : **264330534698**

Option 4 ID : **264330534697**

Status : **Answered**

Chosen Option : **2**

**Q.20** Improve the underlined part of the sentence. Choose 'No improvement' as an answer if the sentence is grammatically correct.

If you want to have two cats, a male and a female will usually gotten along.

- Ans**
- ☒ 1. will usual get
  - ☒ 2. No improvement
  - ☒ 3. will usually get
  - ☒ 4. will usually got

Question Type : **MCQ**

Question ID : **264330141181**

Option 1 ID : **264330553064**

Option 2 ID : **264330553066**

Option 3 ID : **264330553063**

Option 4 ID : **264330553065**

Status : **Answered**

Chosen Option : **3**

### Comprehension:

In the following passage some words have been deleted. Fill in the blanks with the help of the alternatives given. Select the most appropriate option for each number.

Each went his way, the prince to (1) \_\_\_\_\_ the ways of the court, the brahmin to (2) \_\_\_\_\_ with Parasuram, the renowned scholar-warrior. He mastered (3) \_\_\_\_\_, married a virtuous woman, and (4) \_\_\_\_\_ a beautiful son. (5) \_\_\_\_\_ poor, he was proud of his learning.

### SubQuestion No : 21

Q.21 Select the most appropriate option to fill in blank number 1.

- Ans
- ☒ 1. absorb
  - ☒ 2. receive
  - ☒ 3. cram
  - ☒ 4. learn

Question Type : MCQ

Question ID : 264330136274

Option 1 ID : 264330533877

Option 2 ID : 264330533878

Option 3 ID : 264330533875

Option 4 ID : 264330533876

Status : Answered

Chosen Option : 4

### Comprehension:

In the following passage some words have been deleted. Fill in the blanks with the help of the alternatives given. Select the most appropriate option for each number.

Each went his way, the prince to (1) \_\_\_\_\_ the ways of the court, the brahmin to (2) \_\_\_\_\_ with Parasuram, the renowned scholar-warrior. He mastered (3) \_\_\_\_\_, married a virtuous woman, and (4) \_\_\_\_\_ a beautiful son. (5) \_\_\_\_\_ poor, he was proud of his learning.

### SubQuestion No : 22

Q.22 Select the most appropriate option to fill in blank number 2.

- Ans
- ☒ 1. study across
  - ☒ 2. study former
  - ☒ 3. study another
  - ☒ 4. study further

Question Type : MCQ

Question ID : 264330136275

Option 1 ID : 264330533881

Option 2 ID : 264330533880

Option 3 ID : 264330533882

Option 4 ID : 264330533879

Status : Answered

Chosen Option : 4

### Comprehension:

In the following passage some words have been deleted. Fill in the blanks with the help of the alternatives given. Select the most appropriate option for each number.

Each went his way, the prince to (1) \_\_\_\_\_ the ways of the court, the brahmin to (2) \_\_\_\_\_ with Parasuram, the renowned scholar-warrior. He mastered (3) \_\_\_\_\_, married a virtuous woman, and (4) \_\_\_\_\_ a beautiful son. (5) \_\_\_\_\_ poor, he was proud of his learning.

### SubQuestion No : 23

Q.23 Select the most appropriate option to fill in blank number 3.

- Ans
- ☒ 1. the supplies of war
  - ☒ 2. the art even craft of war
  - ☒ 3. the attitude of war
  - ☒ 4. the arts of war

Question Type : MCQ  
 Question ID : 264330136276  
 Option 1 ID : 264330533884  
 Option 2 ID : 264330533883  
 Option 3 ID : 264330533885  
 Option 4 ID : 264330533886  
 Status : Marked For Review  
 Chosen Option : 4

### Comprehension:

In the following passage some words have been deleted. Fill in the blanks with the help of the alternatives given. Select the most appropriate option for each number.

Each went his way, the prince to (1) \_\_\_\_\_ the ways of the court, the brahmin to (2) \_\_\_\_\_ with Parasuram, the renowned scholar-warrior. He mastered (3) \_\_\_\_\_, married a virtuous woman, and (4) \_\_\_\_\_ a beautiful son. (5) \_\_\_\_\_ poor, he was proud of his learning.

### SubQuestion No : 24

Q.24 Select the most appropriate option to fill in blank number 4.

- Ans
- ☒ 1. has
  - ☒ 2. had
  - ☒ 3. have
  - ☒ 4. given

Question Type : MCQ  
 Question ID : 264330136277  
 Option 1 ID : 264330533889  
 Option 2 ID : 264330533887  
 Option 3 ID : 264330533888  
 Option 4 ID : 264330533890  
 Status : Answered  
 Chosen Option : 2

### Comprehension:

In the following passage some words have been deleted. Fill in the blanks with the help of the alternatives given. Select the most appropriate option for each number.

Each went his way, the prince to (1) \_\_\_\_\_ the ways of the court, the brahmin to (2) \_\_\_\_\_ with Parasuram, the renowned scholar-warrior. He mastered (3) \_\_\_\_\_, married a virtuous woman, and (4) \_\_\_\_\_ a beautiful son. (5) \_\_\_\_\_ poor, he was proud of his learning.

### SubQuestion No : 25

Q.25 Select the most appropriate option to fill in blank number 5.

- Ans
- ☒ 1. So
  - ☒ 2. Even
  - ☒ 3. Though
  - ☒ 4. Because

Question Type : MCQ

Question ID : 264330136278

Option 1 ID : 264330533894

Option 2 ID : 264330533891

Option 3 ID : 264330533893

Option 4 ID : 264330533892

Status : Answered

Chosen Option : 3

