

## Multi Tasking Non Technical Staff and Havaladar CBIC and CBN Examination 2022

Roll Number	
Candidate Name	
Venue Name	iON Digital Zone iDZ 2 Moula Ali
Exam Date	20/06/2023
Exam Time	9:00 AM - 10:30 AM
Subject	MTS Non Tech Havaladar CBIC and CBN Examination 2022

### Section : Numerical and Mathematical Ability

**Q.1** The length of a cuboid is half of its breadth and the height of cuboid is thrice of its breadth. If the breadth of the cuboid is 12 cm, then what is the total surface area of cuboid?

- Ans**
- ☒ 1. 1680 cm<sup>2</sup>
  - ☒ 2. 1320 cm<sup>2</sup>
  - ☒ 3. 1440 cm<sup>2</sup>
  - ☒ 4. 1560 cm<sup>2</sup>

Question Type : MCQ

Question ID : 264330139641

Option 1 ID : 264330546981

Option 2 ID : 264330546979

Option 3 ID : 264330546982

Option 4 ID : 264330546980

Status : Answered

Chosen Option : 3

**Q.2** What is the value of  $\left[\frac{1}{5} + \left\{\frac{1}{6} \text{ of } \left(\frac{42}{35} \div \frac{6}{25}\right) - \left(\frac{2}{7} \times \frac{6}{5} \div \frac{18}{42}\right)\right\} + \frac{19}{30}\right]$ ?

- Ans**
- ☒ 1. 17/15
  - ☒ 2. 13/15
  - ☒ 3. 14/15
  - ☒ 4. 11/15

Question Type : MCQ

Question ID : 264330139908

Option 1 ID : 264330548013

Option 2 ID : 264330548014

Option 3 ID : 264330548011

Option 4 ID : 264330548012

Status : Answered

Chosen Option : 2

# Test Prime

**ALL EXAMS,  
ONE SUBSCRIPTION**



**70,000+**  
Mock Tests



**Personalised  
Report Card**



**Unlimited  
Re-Attempt**



**600+**  
Exam Covered



**Previous Year  
Papers**



**500%**  
Refund



**ATTEMPT FREE MOCK NOW**

Q.3 If  $A : B : C = 2 : 3 : 5$ , then what is the value of  $(A + B) : (B + C) : (C + A)$ ?

- Ans
- ☒ 1.  $8 : 15 : 14$
  - ☒ 2.  $5 : 8 : 7$
  - ☒ 3.  $6 : 9 : 14$
  - ☒ 4.  $9 : 10 : 12$

Question Type : MCQ

Question ID : 264330140161

Option 1 ID : 264330549026

Option 2 ID : 264330549023

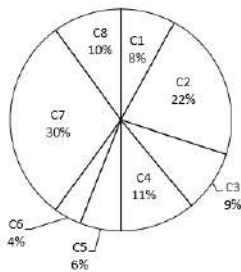
Option 3 ID : 264330549024

Option 4 ID : 264330549025

Status : Answered

Chosen Option : 2

Q.4 The pie chart given below shows the number of cars sold by 8 different companies. The total number of cars sold by all these 8 companies are 2,000. Number of cars sold by a particular company is shown as a percent of total number of cars sold by all these 8 companies.



The average number of cars sold by C1 and C2 is how much percent less than the average number of cars sold by C7 and C8?

- Ans
- ☒ 1. 66.66 percent
  - ☒ 2. 33.33 percent
  - ☒ 3. 16.66 percent
  - ☒ 4. 25 percent

Question Type : MCQ

Question ID : 264330139950

Option 1 ID : 264330548181

Option 2 ID : 264330548182

Option 3 ID : 264330548180

Option 4 ID : 264330548179

Status : Answered

Chosen Option : 4

**Q.5** By selling a water heater for Rs. 320, the shopkeeper incurs a loss of 20%. If he wants to earn a profit of 20%, at what price should he sell the water heater?

- Ans**
- ✓ 1. Rs. 480
  - ✗ 2. Rs. 105
  - ✗ 3. Rs. 400
  - ✗ 4. Rs. 100

Question Type : **MCQ**

Question ID : **264330140805**

Option 1 ID : **264330551567**

Option 2 ID : **264330551570**

Option 3 ID : **264330551568**

Option 4 ID : **264330551569**

Status : **Answered**

Chosen Option : **1**

**Q.6** Container I and Container II have milk and water in the ratio of 4 : 5 and 8 : 3 respectively. In what ratio Container I and Container II should be mixed to get a new mixture in which milk and water are in the ratio of 9 : 11?

- Ans**
- ✗ 1. 519 : 11
  - ✗ 2. 49 : 121
  - ✓ 3. 549 : 11
  - ✗ 4. 47 : 121

Question Type : **MCQ**

Question ID : **264330139597**

Option 1 ID : **264330546804**

Option 2 ID : **264330546805**

Option 3 ID : **264330546803**

Option 4 ID : **264330546806**

Status : **Answered**

Chosen Option : **3**

**Q.7** If 50 percent of a number is 80, then what will be the 250 percent of that number?

- Ans**
- ✓ 1. 400
  - ✗ 2. 360
  - ✗ 3. 440
  - ✗ 4. 480

Question Type : **MCQ**

Question ID : **264330140218**

Option 1 ID : **264330549251**

Option 2 ID : **264330549253**

Option 3 ID : **264330549254**

Option 4 ID : **264330549252**

Status : **Answered**

Chosen Option : **1**

**Q.8** 8 women can complete a work in 15 days. If 2 women are employed, then in how many days the work will be completed?

- Ans**
- ☒ 1. 44 days
  - ☒ 2. 64 days
  - ☒ 3. 80 days
  - ☒ 4. 60 days

Question Type : **MCQ**

Question ID : **264330140239**

Option 1 ID : **264330549336**

Option 2 ID : **264330549338**

Option 3 ID : **264330549337**

Option 4 ID : **264330549335**

Status : **Answered**

Chosen Option : **4**

**Q.9** Two taps J and L can fill a tank alone in 10 minutes and 12 minutes respectively. If an outlet tap K is opened and all three taps work together, then the same tank will be filled in 15 minutes. How much time will tap K alone take to empty the same tank?

- Ans**
- ☒ 1. 58/11 minutes
  - ☒ 2. 52/3 minutes
  - ☒ 3. 60/7 minutes
  - ☒ 4. 56/3 minutes

Question Type : **MCQ**

Question ID : **264330140632**

Option 1 ID : **264330550876**

Option 2 ID : **264330550875**

Option 3 ID : **264330550878**

Option 4 ID : **264330550877**

Status : **Answered**

Chosen Option : **3**

**Q.10** A group of boys has an average weight of 42 kg. One boy weighing 48 kg leaves the group and another boy weighing 38 kg joins the group. If the average now becomes 41 kg, then how many boys are there in the group?

- Ans**
- ☒ 1. 8
  - ☒ 2. 10
  - ☒ 3. 12
  - ☒ 4. 6

Question Type : **MCQ**

Question ID : **264330139632**

Option 1 ID : **264330546943**

Option 2 ID : **264330546944**

Option 3 ID : **264330546945**

Option 4 ID : **264330546946**

Status : **Answered**

Chosen Option : **2**

**Q.11** In what ratio rice of Rs. 20 per kg be mixed with rice of Rs. 34 per kg, so that the mixture is worth Rs. 28 per kg?

- Ans** ☒ 1. 3:4  
☒ 2. 4:1  
☒ 3. 1:3  
☒ 4. 2:3

Question Type : **MCQ**  
 Question ID : **264330133819**  
 Option 1 ID : **264330524301**  
 Option 2 ID : **264330524299**  
 Option 3 ID : **264330524300**  
 Option 4 ID : **264330524302**  
 Status : **Answered**  
 Chosen Option : **1**

**Q.12** A man bought two flats for Rs. 6075000 each. He sold, one flat at 10% gain and other at 15% loss. How much percent he gain or lose in the whole?

- Ans** ☒ 1. 5% loss  
☒ 2. 5% gain  
☒ 3. 2.5% loss  
☒ 4. 3% gain

Question Type : **MCQ**  
 Question ID : **264330140827**  
 Option 1 ID : **264330551657**  
 Option 2 ID : **264330551655**  
 Option 3 ID : **264330551656**  
 Option 4 ID : **264330551658**  
 Status : **Answered**  
 Chosen Option : **3**

**Q.13** Sapna bought book at a sale for Rs. 573.18, she received 18% discount on the MRP. What is the MRP of the book?

- Ans** ☒ 1. Rs. 649  
☒ 2. Rs. 699  
☒ 3. Rs. 749  
☒ 4. Rs. 799

Question Type : **MCQ**  
 Question ID : **264330140829**  
 Option 1 ID : **264330551664**  
 Option 2 ID : **264330551665**  
 Option 3 ID : **264330551666**  
 Option 4 ID : **264330551663**  
 Status : **Answered**  
 Chosen Option : **2**

**Q.14** Suraj starts his journey from point Q at 2 p.m. He drives the car at the speed of 40 km/hr for first three hours and complete the remaining journey at the speed of 30 km/hr. If Rahul starts moving towards Suraj at 6 p.m. from point Q at the speed of 80 km/hr, then at what time he will catch Suraj?

- Ans** ☒ 1. 9 : 00 pm  
☐ 2. 9 : 15 pm  
☐ 3. 9 : 36 pm  
☐ 4. 10 : 06 pm

Question Type : **MCQ**  
 Question ID : **264330140195**  
 Option 1 ID : **264330549161**  
 Option 2 ID : **264330549162**  
 Option 3 ID : **264330549160**  
 Option 4 ID : **264330549159**  
 Status : **Not Answered**  
 Chosen Option : --

**Q.15** What is the least number which when divided by 8, 10, 12 and 18 leaves a remainder 5 in each case?

- Ans** ☐ 1. 397  
☒ 2. 365  
☐ 3. 371  
☐ 4. 408

Question Type : **MCQ**  
 Question ID : **264330139603**  
 Option 1 ID : **264330546830**  
 Option 2 ID : **264330546829**  
 Option 3 ID : **264330546827**  
 Option 4 ID : **264330546828**  
 Status : **Answered**  
 Chosen Option : 2

**Q.16** What is the value of  $\frac{44-13+17-21+45-24}{12 \div 4 - 3 \times 4 - 6 \times 2}$ ?

- Ans** ☐ 1. 1  
☒ 2. 2  
☐ 3. -2  
☐ 4. -1

Question Type : **MCQ**  
 Question ID : **264330139644**  
 Option 1 ID : **264330546993**  
 Option 2 ID : **264330546992**  
 Option 3 ID : **264330546991**  
 Option 4 ID : **264330546994**  
 Status : **Answered**  
 Chosen Option : 2



**Q.17** The perimeter of the top of a rectangular table is 56 metre and its area is 192 metre<sup>2</sup>. What is the length of its diagonal?

- Ans**
- ☒ 1. 22 metre
  - ☒ 2. 20 metre
  - ☒ 3. 16 metre
  - ☒ 4. 18 metre

Question Type : **MCQ**

Question ID : **264330139945**

Option 1 ID : **264330548159**

Option 2 ID : **264330548162**

Option 3 ID : **264330548161**

Option 4 ID : **264330548160**

Status : **Answered**

Chosen Option : **2**

**Q.18** On a certain sum the compound interest (compounding annually) for fourth year is Rs. 15000 and the compound interest (compounding annually) for sixth year is Rs. 25350. What is the rate of interest per annum?

- Ans**
- ☒ 1. 35 percent
  - ☒ 2. 30 percent
  - ☒ 3. 40 percent
  - ☒ 4. 25 percent

Question Type : **MCQ**

Question ID : **264330140642**

Option 1 ID : **264330550917**

Option 2 ID : **264330550915**

Option 3 ID : **264330550918**

Option 4 ID : **264330550916**

Status : **Answered**

Chosen Option : **2**

**Q.19** A person lent certain sum of money at the annual rate of 8 percent on simple interest and the interest received in 9 years is Rs. 560 less than the sum lent. What is the sum lent?

- Ans**
- ☒ 1. Rs. 560
  - ☒ 2. Rs. 1000
  - ☒ 3. Rs. 2000
  - ☒ 4. Rs. 1120

Question Type : **MCQ**

Question ID : **264330140593**

Option 1 ID : **264330550726**

Option 2 ID : **264330550724**

Option 3 ID : **264330550725**

Option 4 ID : **264330550723**

Status : **Answered**

Chosen Option : **3**



**Q.20** The table given below shows the cost price and selling price of 5 different articles.

Article	Cost price	Selling price
A	500	600
B	700	750
C	600	800
D	400	700
E	300	800

What is the ratio of total cost price to total selling price of all articles?

- Ans**
- ☒ 1. 50 : 39
  - ☒ 2. 49 : 72
  - ☒ 3. 37 : 50
  - ☒ 4. 50 : 73

Question Type : **MCQ**

Question ID : **264330140601**

Option 1 ID : **264330550758**

Option 2 ID : **264330550755**

Option 3 ID : **264330550757**

Option 4 ID : **264330550756**

Status : **Answered**

Chosen Option : **4**

Section : Reasoning Ability and Problem Solving

**Q.1** By interchanging the given two signs which of the following equation will be not correct?

+ and ×

I.  $15 + 5 + 1 - 9 \times 4 = 70$

II.  $18 \times 17 + 3 - 6 \div 2 = 133$

- Ans**
- ☒ 1. Neither I nor II
  - ☒ 2. Only II
  - ☒ 3. Both I and II
  - ☒ 4. Only I

Question Type : **MCQ**

Question ID : **264330140992**

Option 1 ID : **264330552318**

Option 2 ID : **264330552316**

Option 3 ID : **264330552317**

Option 4 ID : **264330552315**

Status : **Answered**

Chosen Option : **2**

**Q.2** Which of the mathematical signs should be interchanged in the below equation to make it mathematically correct?

$$14 + 63 \div 7 - 21 \times 35 = 140$$

- Ans**
- ☒ 1. + and -
  - ☒ 2. + and  $\times$
  - ☒ 3. - and  $\times$
  - ☒ 4.  $\div$  and  $\times$

Question Type : MCQ

Question ID : 264330140467

Option 1 ID : 264330550249

Option 2 ID : 264330550247

Option 3 ID : 264330550250

Option 4 ID : 264330550248

Status : Answered

Chosen Option : 2

**Q.3** Three statements are given followed by two conclusions numbered I and II. Assuming the statements to be true, even if they seem to be at variance with commonly known facts, decide which of the conclusions logically follow(s) from the statements.

Statements:

Some mobiles are land.

Some land are wide.

All wide are tall.

Conclusions:

I. Some mobiles are tall.

II. All tall are wide.

- Ans**
- ☒ 1. Neither conclusion I nor II follows
  - ☒ 2. Only conclusion I follows
  - ☒ 3. Only conclusion II follows
  - ☒ 4. Both conclusions I and II follow

Question Type : MCQ

Question ID : 264330140422

Option 1 ID : 264330550070

Option 2 ID : 264330550067

Option 3 ID : 264330550068

Option 4 ID : 264330550069

Status : Answered

Chosen Option : 1

**Q.4** Study the given pattern carefully and select the number that can replace the question mark (?) in it.

First row- 60, 20, 10

Second row- 90, 30, 15

Third row- 36, 12, ?

- Ans**
- ☒ 1. 6
  - ☒ 2. 8
  - ☒ 3. 5
  - ☒ 4. 4

Question Type : MCQ

Question ID : 264330140426

Option 1 ID : 264330550085

Option 2 ID : 264330550084

Option 3 ID : 264330550083

Option 4 ID : 264330550086

Status : Answered

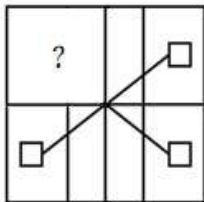
Chosen Option : 1

**Q.5** Six friends X, Y, J, M, N, and O are standing in a queue facing north. Y is immediately behind O. J is standing at the end of the queue. M stands exactly in between N and X. Y does not stand after X. Who stands fourth from the start of the queue?

- Ans**
- ☒ 1. Y
  - ☒ 2. N
  - ☒ 3. X
  - ☒ 4. M

Question Type : **MCQ**  
 Question ID : **264330140418**  
 Option 1 ID : **264330550054**  
 Option 2 ID : **264330550052**  
 Option 3 ID : **264330550053**  
 Option 4 ID : **264330550051**  
 Status : **Answered**  
 Chosen Option : **4**

**Q.6** Which answer figure will complete the pattern in the question figure?



- Ans**
- ☒ 1.
  - ☒ 2.
  - ☒ 3.
  - ☒ 4.

Question Type : **MCQ**  
 Question ID : **264330140072**  
 Option 1 ID : **264330548668**  
 Option 2 ID : **264330548670**  
 Option 3 ID : **264330548667**  
 Option 4 ID : **264330548669**  
 Status : **Answered**  
 Chosen Option : **3**

Q.7 In a certain code language, 'RAT' is written as 'SCW'. How will 'COW' be written in that language?

- Ans
- ☒ 1. DZQ
  - ☒ 2. DQZ
  - ☒ 3. DQR
  - ☒ 4. DYZ

Question Type : MCQ

Question ID : 264330137566

Option 1 ID : 264330538872

Option 2 ID : 264330538871

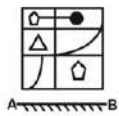
Option 3 ID : 264330538874

Option 4 ID : 264330538873

Status : Answered

Chosen Option : 2

Q.8 If a mirror is placed on the line AB, then out of the option figures which figure will be the right image of the question figure?



Ans

- ☒ 1.
- ☒ 2.
- ☒ 3.
- ☒ 4.

Question Type : MCQ

Question ID : 264330140994

Option 1 ID : 264330552326

Option 2 ID : 264330552324

Option 3 ID : 264330552325

Option 4 ID : 264330552323

Status : Answered

Chosen Option : 1

**Q.9** Two Statements are given followed by two conclusions numbered I and II. Assuming the statements to be true, even if they seem to be at variance with commonly known facts, decide which of the conclusions logically follow(s) from the statements.

Statements:

All boxes are cube.

All cubes are squares.

Conclusions:

I. Some boxes are squares.

II. Some squares are not cube.

**Ans** ☒ 1. Only conclusion I follows

☒ 2. Both conclusions I and II follow

☒ 3. Neither conclusion I nor II follows

☒ 4. Only conclusion II follows

Question Type : **MCQ**

Question ID : **264330140082**

Option 1 ID : **264330548707**

Option 2 ID : **264330548709**

Option 3 ID : **264330548710**

Option 4 ID : **264330548708**

Status : **Answered**

Chosen Option : **1**

**Q.10** Which of the following numbers will replace the question mark (?) in the given series?

59, 63, 72, 88, 113, ?

**Ans** ☒ 1. 141

☒ 2. 159

☒ 3. 139

☒ 4. 149

Question Type : **MCQ**

Question ID : **264330140105**

Option 1 ID : **264330548802**

Option 2 ID : **264330548801**

Option 3 ID : **264330548799**

Option 4 ID : **264330548800**

Status : **Answered**

Chosen Option : **4**

**Q.11** In the following question, select the missing number of the given series.

55, 38, 21, 4, -13, ?

**Ans** ☒ 1. -30

☒ 2. -20

☒ 3. -28

☒ 4. -18

Question Type : **MCQ**

Question ID : **264330140064**

Option 1 ID : **264330548638**

Option 2 ID : **264330548636**

Option 3 ID : **264330548637**

Option 4 ID : **264330548635**

Status : **Answered**

Chosen Option : **1**

**Q.12** Select the option that is related to the third number in the same way as the second number is related to the first number.

110 : 23 :: 85 : ?

- Ans**
- ☒ 1. 17
  - ☒ 2. 13
  - ☒ 3. 18
  - ☒ 4. 47

Question Type : **MCQ**

Question ID : **264330135361**

Option 1 ID : **264330530352**

Option 2 ID : **264330530351**

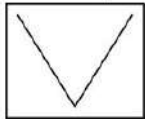
Option 3 ID : **264330530353**

Option 4 ID : **264330530354**

Status : **Answered**

Chosen Option : **1**

**Q.13** Select the option figure in which the given figure (X) is embedded as its part (rotation is NOT allowed).



X

**Ans**

- ☒ 1.
- ☒ 2.
- ☒ 3.
- ☒ 4.

Question Type : **MCQ**

Question ID : **264330140008**

Option 1 ID : **264330548414**

Option 2 ID : **264330548411**

Option 3 ID : **264330548413**

Option 4 ID : **264330548412**

Status : **Answered**

Chosen Option : **4**

**Q.14** Amongst seven sisters I, II, III, IV, V, VI and VII, each has a different height. I is shorter than only one sister. II is only taller than VII. Three sisters are shorter than IV and three are taller than her. V is not the tallest. III is shorter than VI but taller than V. Who is the third shortest among the sisters?

- Ans** ☒ 1. V  
☒ 2. I  
☒ 3. VI  
☒ 4. IV

Question Type : **MCQ**  
 Question ID : **264330140081**  
 Option 1 ID : **264330548706**  
 Option 2 ID : **264330548704**  
 Option 3 ID : **264330548703**  
 Option 4 ID : **264330548705**  
 Status : **Answered**  
 Chosen Option : **3**

**Q.15** Select the option that is related to the third word in the same way as the second word is related to the first word.  
 Thyroid : Iodine :: Night blindness : ?

- Ans** ☒ 1. Vitamin A  
☒ 2. Vitamin B  
☒ 3. Vitamin C  
☒ 4. Vitamin D

Question Type : **MCQ**  
 Question ID : **264330140474**  
 Option 1 ID : **264330550275**  
 Option 2 ID : **264330550276**  
 Option 3 ID : **264330550277**  
 Option 4 ID : **264330550278**  
 Status : **Answered**  
 Chosen Option : **1**

**Q.16** Anuj, Bala, Charanjit, Danish, Endrew, Farooq, Garvit, and Himesh are sitting around a square table facing the centre of the table. Four of them are sitting at each of the corners, while the other four are sitting at the exact centre of each of the sides.  
 Endrew who sits middle of a side, sits to the fourth left of the Garvit. Only one person sits between Garvit and Farooq. Bala is immediate neighbour of Endrew. Only three people sit between Bala and Anuj. Bala is not a neighbour of Farooq. Himesh sits to the immediate left of Charanjit. Charanjit sits to the third right of Endrew.  
 Who sits third to the right of Danish?

- Ans** ☒ 1. Himesh  
☒ 2. Garvit  
☒ 3. Bala  
☒ 4. Charanjit

Question Type : **MCQ**  
 Question ID : **264330140479**  
 Option 1 ID : **264330550297**  
 Option 2 ID : **264330550298**  
 Option 3 ID : **264330550296**  
 Option 4 ID : **264330550295**  
 Status : **Answered**  
 Chosen Option : **1**



**Q.17** Select the option that is related to the third word in the same way as the second word is related to the first word.

Bees : Buzz :: Ducks : ?

- Ans**
- ☒ 1. Bleat
  - ☒ 2. Croak
  - ☒ 3. Quack
  - ☒ 4. Chirp

Question Type : **MCQ**

Question ID : **264330140433**

Option 1 ID : **264330550112**

Option 2 ID : **264330550111**

Option 3 ID : **264330550113**

Option 4 ID : **264330550114**

Status : **Answered**

Chosen Option : **3**

**Q.18** Which of the following letter will replace the question mark (?) in the given series?

J, N, H, P, F, R, D, T, B, ?

- Ans**
- ☒ 1. U
  - ☒ 2. O
  - ☒ 3. V
  - ☒ 4. M

Question Type : **MCQ**

Question ID : **264330139991**

Option 1 ID : **264330548344**

Option 2 ID : **264330548345**

Option 3 ID : **264330548346**

Option 4 ID : **264330548343**

Status : **Answered**

Chosen Option : **3**

**Q.19** In a certain code language, 'NOTICE' is coded as 'LMRFZB'. What is the code for 'PARENT' in that code language?

- Ans**
- ☒ 1. NYPBKR
  - ☒ 2. NYPCLR
  - ☒ 3. NYPBKQ
  - ☒ 4. NYQBKQ

Question Type : **MCQ**

Question ID : **264330139571**

Option 1 ID : **264330546700**

Option 2 ID : **264330546699**

Option 3 ID : **264330546701**

Option 4 ID : **264330546702**

Status : **Answered**

Chosen Option : **3**

**Q.20** In a certain code language, 'PARK' is written as 'QCSM' and 'FREE' is written as 'GTFG'. How will 'FAME' be written in that language?

- Ans**
- ☒ 1. CGNF
  - ☒ 2. GCOF
  - ☒ 3. GCNG
  - ☒ 4. HCNG

Question Type : **MCQ**  
 Question ID : **264330140116**  
 Option 1 ID : **264330548846**  
 Option 2 ID : **264330548844**  
 Option 3 ID : **264330548845**  
 Option 4 ID : **264330548843**  
 Status : **Answered**  
 Chosen Option : **3**

#### Section : General Awareness

**Q.1** How many countries share land boundaries with India?

- Ans**
- ☒ 1. Seven
  - ☒ 2. Five
  - ☒ 3. Eight
  - ☒ 4. Six

Question Type : **MCQ**  
 Question ID : **264330138990**  
 Option 1 ID : **264330544569**  
 Option 2 ID : **264330544567**  
 Option 3 ID : **264330544570**  
 Option 4 ID : **264330544568**  
 Status : **Answered**  
 Chosen Option : **1**

**Q.2** Indian musician Jagjit Singh is credited for the revival of \_\_\_\_\_ genre of music/poetry.

- Ans**
- ☒ 1. Latin
  - ☒ 2. Jazz
  - ☒ 3. Ghazal
  - ☒ 4. Sufi

Question Type : **MCQ**  
 Question ID : **264330140924**  
 Option 1 ID : **264330552044**  
 Option 2 ID : **264330552043**  
 Option 3 ID : **264330552046**  
 Option 4 ID : **264330552045**  
 Status : **Answered**  
 Chosen Option : **3**

**Q.3** The Indian National Congress was established when 72 delegates from all over the country met at Bombay in December \_\_\_\_.

- Ans**
- ☒ 1. 1890
  - ☒ 2. 1858
  - ☒ 3. 1885
  - ☒ 4. 1872

Question Type : **MCQ**  
Question ID : **264330141061**  
Option 1 ID : **264330552592**  
Option 2 ID : **264330552594**  
Option 3 ID : **264330552591**  
Option 4 ID : **264330552593**  
Status : **Answered**  
Chosen Option : **3**

**Q.4** Which cell organelles help in intracellular digestion and are known as the "suicidal bags" of the cell?

- Ans**
- ☒ 1. Lysosome
  - ☒ 2. Golgi bodies
  - ☒ 3. Centrosome
  - ☒ 4. Chloroplasts

Question Type : **MCQ**  
Question ID : **264330140657**  
Option 1 ID : **264330550977**  
Option 2 ID : **264330550976**  
Option 3 ID : **264330550975**  
Option 4 ID : **264330550978**  
Status : **Answered**  
Chosen Option : **1**

**Q.5** The "Double Dome" feature of Indo-Islamic architecture was introduced by which dynasty of Delhi Sultanate?

- Ans**
- ☒ 1. Slave Dynasty
  - ☒ 2. Khilji Dynasty
  - ☒ 3. Tughlaq Dynasty
  - ☒ 4. Lodi Dynasty

Question Type : **MCQ**  
Question ID : **264330140680**  
Option 1 ID : **264330551070**  
Option 2 ID : **264330551068**  
Option 3 ID : **264330551067**  
Option 4 ID : **264330551069**  
Status : **Answered**  
Chosen Option : **1**

Q.6 "The Invisible Man" is a science fiction novel written by famous author \_\_\_\_\_.

Ans ☒ 1. Herbert George Wells

☐ 2. William Shakespeare

☐ 3. Jules Verne

☐ 4. Agatha Christie

Question Type : MCQ

Question ID : 264330140718

Option 1 ID : 264330551219

Option 2 ID : 264330551221

Option 3 ID : 264330551222

Option 4 ID : 264330551220

Status : Not Answered

Chosen Option : --

Q.7 Which of the following is "NOT" a biosphere reserve in India?

Ans ☐ 1. Cold Desert

☒ 2. Gir Forest

☐ 3. Sunderbans

☐ 4. Nilgiri

Question Type : MCQ

Question ID : 264330139884

Option 1 ID : 264330547917

Option 2 ID : 264330547918

Option 3 ID : 264330547915

Option 4 ID : 264330547916

Status : Answered

Chosen Option : 1

Q.8 What was the purpose behind the Pillars of Ashoka?

Ans ☐ 1. To spread bherighosha

☐ 2. To spread mass conversion

☐ 3. To spread sectarian faith

☒ 4. To spread the dharma policies

Question Type : MCQ

Question ID : 264330140380

Option 1 ID : 264330549899

Option 2 ID : 264330549902

Option 3 ID : 264330549901

Option 4 ID : 264330549900

Status : Answered

Chosen Option : 4

Q.9 Which player was widely known by the name of Flying Sikh?

- Ans ☒ 1. Milkha Singh  
☐ 2. Harbhajan Singh  
☐ 3. Arshdeep Singh  
☐ 4. Yuvraj Singh

Question Type : MCQ  
Question ID : 264330140674  
Option 1 ID : 264330551043  
Option 2 ID : 264330551046  
Option 3 ID : 264330551044  
Option 4 ID : 264330551045  
Status : Answered  
Chosen Option : 3

Q.10 Which of the following novels is written by Chetan Bhagat?

- Ans ☒ 1. The 3 Mistakes of My Life  
☐ 2. Untouchables  
☐ 3. Our Story Needs No Filter  
☐ 4. The White Tiger

Question Type : MCQ  
Question ID : 264330139703  
Option 1 ID : 264330547227  
Option 2 ID : 264330547228  
Option 3 ID : 264330547229  
Option 4 ID : 264330547230  
Status : Answered  
Chosen Option : 1

Q.11 Which among the following festivals is associated with Arunachal Pradesh?

- Ans ☒ 1. Solung  
☐ 2. Wangala  
☐ 3. Ugadi  
☐ 4. Pongal

Question Type : MCQ  
Question ID : 264330140909  
Option 1 ID : 264330551984  
Option 2 ID : 264330551983  
Option 3 ID : 264330551985  
Option 4 ID : 264330551986  
Status : Answered  
Chosen Option : 1

Q.12 What is the capital of India's neighbouring country Afghanistan?

- Ans
- ☐ 1. Karachi
  - ☐ 2. Kathmandu
  - ☐ 3. Kandahar
  - ☒ 4. Kabul

Question Type : MCQ  
 Question ID : 264330140713  
 Option 1 ID : 264330551199  
 Option 2 ID : 264330551200  
 Option 3 ID : 264330551201  
 Option 4 ID : 264330551202  
 Status : Answered  
 Chosen Option : 4

Q.13 Respect for the National Flag and National Anthem is a \_\_\_\_\_ of every Indian citizen.

- Ans
- ☐ 1. Directive Principles of State Policy
  - ☐ 2. Fundamental Right
  - ☒ 3. Fundamental Duty
  - ☐ 4. Legal Right

Question Type : MCQ  
 Question ID : 264330140387  
 Option 1 ID : 264330549927  
 Option 2 ID : 264330549930  
 Option 3 ID : 264330549929  
 Option 4 ID : 264330549928  
 Status : Answered  
 Chosen Option : 3

Q.14 Which of the following article of Indian constitution is related with "Promotion of International Peace and security"?

- Ans
- ☐ 1. Article 47
  - ☐ 2. Article 43
  - ☒ 3. Article 51
  - ☐ 4. Article 40

Question Type : MCQ  
 Question ID : 264330139710  
 Option 1 ID : 264330547256  
 Option 2 ID : 264330547257  
 Option 3 ID : 264330547258  
 Option 4 ID : 264330547255  
 Status : Answered  
 Chosen Option : 3

Q.15 In which type of farming the land is used for growing food and fodder crops and rearing livestock?

- Ans
- ☒ 1. Shifting cultivation
  - ☒ 2. Subsistence farming
  - ☒ 3. Mixed farming
  - ☒ 4. Plantation agriculture

Question Type : MCQ

Question ID : 264330139690

Option 1 ID : 264330547176

Option 2 ID : 264330547178

Option 3 ID : 264330547177

Option 4 ID : 264330547175

Status : Answered

Chosen Option : 4

Q.16 Currency notes and coins are called \_\_\_\_\_.

- Ans
- ☒ 1. near money
  - ☒ 2. commodity money
  - ☒ 3. fiduciary money
  - ☒ 4. fiat money

Question Type : MCQ

Question ID : 264330138981

Option 1 ID : 264330544532

Option 2 ID : 264330544533

Option 3 ID : 264330544534

Option 4 ID : 264330544531

Status : Answered

Chosen Option : 4

Q.17 The point on the surface, nearest to the focus of the earthquake, is called \_\_\_\_\_.

- Ans
- ☒ 1. hypocentre
  - ☒ 2. epicentre
  - ☒ 3. centrepiece
  - ☒ 4. semi centre

Question Type : MCQ

Question ID : 264330140759

Option 1 ID : 264330551383

Option 2 ID : 264330551384

Option 3 ID : 264330551386

Option 4 ID : 264330551385

Status : Answered

Chosen Option : 2



Q.18 Gangaur festival of Rajasthan is associated with which god and goddess?

- Ans
- ☒ 1. Lord Rama and Goddess Sita
  - ☒ 2. Lord Shiva and Goddess Parwati
  - ☒ 3. Lord Vishnu and Goddess Lakshmi
  - ☒ 4. Lord Surya and Goddess Prabha

Question Type : MCQ  
 Question ID : 264330140882  
 Option 1 ID : 264330551876  
 Option 2 ID : 264330551875  
 Option 3 ID : 264330551877  
 Option 4 ID : 264330551878  
 Status : Answered  
 Chosen Option : 4

Q.19 Which of the following books is authored by Indu Sundaresan?

- Ans
- ☒ 1. The Feast of Roses
  - ☒ 2. Ajaya: Rise of Kali
  - ☒ 3. The Secret of the Nagas
  - ☒ 4. The One You Cannot Have

Question Type : MCQ  
 Question ID : 264330140886  
 Option 1 ID : 264330551892  
 Option 2 ID : 264330551894  
 Option 3 ID : 264330551893  
 Option 4 ID : 264330551891  
 Status : Not Answered  
 Chosen Option : --

Q.20 Bhakti saints, Nayanars were devotees of which of the following gods?

- Ans
- ☒ 1. Murugan
  - ☒ 2. Shiva
  - ☒ 3. Vishnu
  - ☒ 4. Indra

Question Type : MCQ  
 Question ID : 264330140289  
 Option 1 ID : 264330549536  
 Option 2 ID : 264330549537  
 Option 3 ID : 264330549535  
 Option 4 ID : 264330549538  
 Status : Answered  
 Chosen Option : 2

Q.21 Hai-Hak Dance is associated with which state?

- Ans
- ☒ 1. Sikkim
  - ☒ 2. Andhra Pradesh
  - ☒ 3. Tripura
  - ☒ 4. Rajasthan

Question Type : MCQ

Question ID : 264330139866

Option 1 ID : 264330547843

Option 2 ID : 264330547845

Option 3 ID : 264330547844

Option 4 ID : 264330547846

Status : Answered

Chosen Option : 1

Q.22 The Hindustan Socialist Republican Association (HSRA) was founded in \_\_\_\_\_ .

- Ans
- ☒ 1. 1917
  - ☒ 2. 1924
  - ☒ 3. 1928
  - ☒ 4. 1922

Question Type : MCQ

Question ID : 264330140383

Option 1 ID : 264330549912

Option 2 ID : 264330549911

Option 3 ID : 264330549913

Option 4 ID : 264330549914

Status : Answered

Chosen Option : 3

Q.23 Which of the following has been awarded "Major Dhyan Chand Khel Ratna Award 2021" for Wrestling?

- Ans
- ☒ 1. Ravi Kumar
  - ☒ 2. Sunil Chhetri
  - ☒ 3. Manpreet Singh
  - ☒ 4. Neeraj Chopra

Question Type : MCQ

Question ID : 264330139651

Option 1 ID : 264330547019

Option 2 ID : 264330547021

Option 3 ID : 264330547022

Option 4 ID : 264330547020

Status : Answered

Chosen Option : 1

Q.24 "PM POSHAN" Scheme is implemented by which ministry?

- Ans
- ☐ 1. Ministry of Women & Child Development
  - ☐ 2. Ministry of Agriculture & Farmers Welfare
  - ☒ 3. Ministry of Education
  - ☐ 4. Ministry of Social Justice

Question Type : MCQ

Question ID : 264330139732

Option 1 ID : 264330547346

Option 2 ID : 264330547343

Option 3 ID : 264330547344

Option 4 ID : 264330547345

Status : Answered

Chosen Option : 1

Q.25 Which of the following is an example of an artificial ecosystem?

- Ans
- ☐ 1. Grasslands
  - ☐ 2. Desert
  - ☐ 3. Coral reefs
  - ☒ 4. Aquariums

Question Type : MCQ

Question ID : 264330140658

Option 1 ID : 264330550980

Option 2 ID : 264330550982

Option 3 ID : 264330550979

Option 4 ID : 264330550981

Status : Answered

Chosen Option : 1

Section : English Language and Comprehension

Q.1 Identify the segment that contains a grammatical error. If there is no error, select 'No error'.

I'm going to get / start on some / homework,' said the professor angrily.

- Ans
- ☐ 1. No error
  - ☐ 2. I'm going to get
  - ☐ 3. homework,' said the professor angrily.
  - ☒ 4. start on some

Question Type : MCQ

Question ID : 264330136163

Option 1 ID : 264330533454

Option 2 ID : 264330533451

Option 3 ID : 264330533453

Option 4 ID : 264330533452

Status : Answered

Chosen Option : 4

Q.2 Choose the word that means the same as the given word.

Habitant

- Ans
- ☒ 1. Transient
  - ☒ 2. Exile
  - ☒ 3. Endemic
  - ☒ 4. Denizen

Question Type : MCQ  
Question ID : 264330135654  
Option 1 ID : 264330531513  
Option 2 ID : 264330531511  
Option 3 ID : 264330531512  
Option 4 ID : 264330531514  
Status : Answered  
Chosen Option : 1

Q.3 Select the word from the options which is exactly opposite in meaning to the bracketed word given in the sentence below.

Hermione was pointing to the (nearest) window.

- Ans
- ☒ 1. adjacent
  - ☒ 2. convenient
  - ☒ 3. abutting
  - ☒ 4. remote

Question Type : MCQ  
Question ID : 264330136128  
Option 1 ID : 264330533315  
Option 2 ID : 264330533316  
Option 3 ID : 264330533318  
Option 4 ID : 264330533317  
Status : Answered  
Chosen Option : 4

Q.4 Fill in the blank with the most appropriate option.

He ruled well but \_\_\_\_\_, making closer friends with justice than with mercy.

- Ans
- ☒ 1. watch
  - ☒ 2. watching
  - ☒ 3. watchfully
  - ☒ 4. watches

Question Type : MCQ  
Question ID : 264330136142  
Option 1 ID : 264330533372  
Option 2 ID : 264330533371  
Option 3 ID : 264330533374  
Option 4 ID : 264330533373  
Status : Answered  
Chosen Option : 3

**Q.5** Identify the segment that contains a grammatical error. If there is no error, select 'No error'

He spent a great deal of time/ writing on his legal pad and aggressive/ underlining whatever he was writing.

- Ans**
- ☒ 1. He spent a great deal of time
  - ☒ 2. No error
  - ☒ 3. writing on his legal pad and aggressive
  - ☒ 4. underlining whatever he was writing.

Question Type : **MCQ**  
 Question ID : **264330135663**  
 Option 1 ID : **264330531547**  
 Option 2 ID : **264330531550**  
 Option 3 ID : **264330531548**  
 Option 4 ID : **264330531549**  
 Status : **Answered**  
 Chosen Option : **4**

**Q.6** Identify the segment that contains a grammatical error. If there is no error, select 'No error'.

Time is the greater / eraser, both of / sorrow and of joy.

- Ans**
- ☒ 1. sorrow and of joy.
  - ☒ 2. eraser, both of
  - ☒ 3. No error
  - ☒ 4. Time is the greater

Question Type : **MCQ**  
 Question ID : **264330135846**  
 Option 1 ID : **264330532253**  
 Option 2 ID : **264330532252**  
 Option 3 ID : **264330532254**  
 Option 4 ID : **264330532251**  
 Status : **Answered**  
 Chosen Option : **4**

**Q.7** Select the word segment that substitutes (replaces) the bracketed word segment correctly and completes the sentence meaningfully. Select the option 'no correction required' if the sentence is correct as given.

(The big the house), the more difficult it is to maintain it.

- Ans**
- ☒ 1. The bigger the house
  - ☒ 2. The big house
  - ☒ 3. No correction required
  - ☒ 4. The biggest the house

Question Type : **MCQ**  
 Question ID : **264330135849**  
 Option 1 ID : **264330532265**  
 Option 2 ID : **264330532264**  
 Option 3 ID : **264330532266**  
 Option 4 ID : **264330532263**  
 Status : **Answered**  
 Chosen Option : **1**

Q.8 Select the most appropriate synonym of the given word.

Support

- Ans
- ☒ 1. Release
  - ☒ 2. Refuse
  - ☒ 3. Spine
  - ☒ 4. Bolster

Question Type : MCQ  
 Question ID : 264330135731  
 Option 1 ID : 264330531809  
 Option 2 ID : 264330531807  
 Option 3 ID : 264330531810  
 Option 4 ID : 264330531808  
 Status : Answered  
 Chosen Option : 4

Q.9 Select the word segment that substitutes (replaces) the bracketed word segment correctly and completes the sentence meaningfully. Select the option 'no correction required' if the sentence is correct as given.  
 He was pleased to see them, especially as (Alice was disposed off to) be sympathetic rather than critical.

- Ans
- ☒ 1. Alice was disposed of to
  - ☒ 2. No correction required
  - ☒ 3. Alice was inclined to
  - ☒ 4. Alice was disposed to of

Question Type : MCQ  
 Question ID : 264330136166  
 Option 1 ID : 264330533464  
 Option 2 ID : 264330533466  
 Option 3 ID : 264330533463  
 Option 4 ID : 264330533465  
 Status : Answered  
 Chosen Option : 1

Q.10 Choose the incorrectly spelt word.

- Ans
- ☒ 1. Count
  - ☒ 2. Wsated
  - ☒ 3. Slim
  - ☒ 4. Interest

Question Type : MCQ  
 Question ID : 264330141183  
 Option 1 ID : 264330553073  
 Option 2 ID : 264330553072  
 Option 3 ID : 264330553074  
 Option 4 ID : 264330553071  
 Status : Answered  
 Chosen Option : 2

Q.11 Four sentences are given, out of which three have spelling errors. Choose the sentence with all correctly spelt words.

Ans ☒ 1.

It was a letter that was shot through with the writer's personality.

☒ 2. There is plenty of student accommodation in Edinburgh.

☒ 3.

He advised the government not to pursue a gas deal with that company.

☒ 4.

Their skilled colleague soon satisfied them that they were wrong.

Question Type : MCQ

Question ID : 264330136132

Option 1 ID : 264330533333

Option 2 ID : 264330533331

Option 3 ID : 264330533332

Option 4 ID : 264330533334

Status : Answered

Chosen Option : 4

Q.12 Select the most appropriate option to fill in the blank.

The wounds on my back are no longer fresh, but, somehow, they still \_\_\_\_\_.

Ans ☒ 1. revamp

☒ 2. barge

☒ 3. hurt

☒ 4. enrich

Question Type : MCQ

Question ID : 264330135255

Option 1 ID : 264330529940

Option 2 ID : 264330529942

Option 3 ID : 264330529941

Option 4 ID : 264330529939

Status : Answered

Chosen Option : 1

Q.13 Select the word segment that substitutes (replaces) the bracketed word segment correctly and completes the sentence meaningfully. Select the option 'no correction required' if the sentence is correct as given.  
She (had a reputation) brilliance.

Ans ☒ 1. No correction required

☒ 2. have a reputation for

☒ 3. has a reputation for

☒ 4. has a reputation of

Question Type : MCQ

Question ID : 264330135848

Option 1 ID : 264330532262

Option 2 ID : 264330532260

Option 3 ID : 264330532259

Option 4 ID : 264330532261

Status : Answered

Chosen Option : 4



Q.14 Select the most appropriate antonym of the given word.

Incompetence

- Ans
- ☐ 1. Interfere
  - ☐ 2. Attitude
  - ☒ 3. Efficient
  - ☐ 4. Caustic

Question Type : MCQ

Question ID : 264330135759

Option 1 ID : 264330531918

Option 2 ID : 264330531915

Option 3 ID : 264330531916

Option 4 ID : 264330531917

Status : Answered

Chosen Option : 2

Q.15 Fill in the blank with the most appropriate option.

Though poor, he \_\_\_\_\_ proud of his learning.

- Ans
- ☐ 1. were
  - ☐ 2. could became
  - ☒ 3. was
  - ☐ 4. have been

Question Type : MCQ

Question ID : 264330136141

Option 1 ID : 264330533368

Option 2 ID : 264330533370

Option 3 ID : 264330533367

Option 4 ID : 264330533369

Status : Answered

Chosen Option : 3

Q.16 Fill in the blank with the most appropriate option.

I was \_\_\_\_\_ and was suddenly woken up by the loud noise of crackers bursting.

- Ans
- ☒ 1. fast asleep
  - ☐ 2. quiet asleep
  - ☐ 3. quite asleep
  - ☐ 4. long asleep

Question Type : MCQ

Question ID : 264330135713

Option 1 ID : 264330531742

Option 2 ID : 264330531739

Option 3 ID : 264330531740

Option 4 ID : 264330531741

Status : Answered

Chosen Option : 3

Q.17 Select the most appropriate word for the given group of words.

Having a sharply strong taste or smell

- Ans
- ☒ 1. Alchemy
  - ☒ 2. Remorse
  - ☒ 3. Pungent
  - ☒ 4. Satire

Question Type : MCQ  
 Question ID : 264330136757  
 Option 1 ID : 264330535731  
 Option 2 ID : 264330535733  
 Option 3 ID : 264330535734  
 Option 4 ID : 264330535732  
 Status : Answered  
 Chosen Option : 3

Q.18 Select the most appropriate meaning of the given idiom.

To eat crow

- Ans
- ☒ 1. To take great care
  - ☒ 2. To become non-vegetarian
  - ☒ 3. To take money back
  - ☒ 4. To admit that one is wrong

Question Type : MCQ  
 Question ID : 264330136155  
 Option 1 ID : 264330533420  
 Option 2 ID : 264330533419  
 Option 3 ID : 264330533422  
 Option 4 ID : 264330533421  
 Status : Answered  
 Chosen Option : 4

Q.19 Select the most appropriate word for the given group of words.

A building where animals are butchered

- Ans
- ☒ 1. Apologue
  - ☒ 2. Apostate
  - ☒ 3. Abattoir
  - ☒ 4. Arbitrator

Question Type : MCQ  
 Question ID : 264330135678  
 Option 1 ID : 264330531604  
 Option 2 ID : 264330531605  
 Option 3 ID : 264330531606  
 Option 4 ID : 264330531603  
 Status : Answered  
 Chosen Option : 3

**Q.20** The statement below has been given with bracketed text. Select the option with correct idiom for the bracketed text.  
She started repaying the money she borrowed from me, but the amount she returned me is (insignificant compared) to what she still owes.

- Ans**
- ☒ 1. eat out of your hand
  - ☒ 2. jaw dropping
  - ☒ 3. an eye for an eye
  - ☒ 4. a drop in a bucket

Question Type : **MCQ**  
Question ID : **264330136130**  
Option 1 ID : **264330533323**  
Option 2 ID : **264330533325**  
Option 3 ID : **264330533324**  
Option 4 ID : **264330533326**  
Status : **Answered**  
Chosen Option : **4**

### Comprehension:

In the following passage some words have been deleted. Fill in the blanks with the help of the alternatives given. Select the most appropriate option for each number.

Do you live in a house? You might be (1) \_\_\_\_\_ to learn that there are many, many kinds of (2) \_\_\_\_\_. Most people in the United States are used to live in houses made of wood or bricks. But many people around the world live in houses made of grass, dirt, or cloth.

In the Great Rift Valley of Eritrea, the nomadic people who are in the Atrtribe build their houses of straw. Their houses are shaped like (3) \_\_\_\_\_ – half spheres. The homes are small and cool. The people can move their houses when they want to move. Since the people are (4) \_\_\_\_\_, they move often. They (5) \_\_\_\_\_ their animals to new places in order to find food.

### SubQuestion No : 21

**Q.21** Select the most appropriate option to fill in the blank No. 1.

- Ans**
- ☒ 1. soaked
  - ☒ 2. calculable
  - ☒ 3. certain
  - ☒ 4. surprised

Question Type : **MCQ**  
Question ID : **264330135828**  
Option 1 ID : **264330532182**  
Option 2 ID : **264330532179**  
Option 3 ID : **264330532180**  
Option 4 ID : **264330532181**  
Status : **Answered**  
Chosen Option : **3**

### Comprehension:

In the following passage some words have been deleted. Fill in the blanks with the help of the alternatives given. Select the most appropriate option for each number.

Do you live in a house? You might be (1) \_\_\_\_\_ to learn that there are many, many kinds of (2) \_\_\_\_\_. Most people in the United States are used to live in houses made of wood or bricks. But many people around the world live in houses made of grass, dirt, or cloth.

In the Great Rift Valley of Eritrea, the nomadic people who are in the Atrtribe build their houses of straw. Their houses are shaped like (3) \_\_\_\_\_ – half spheres. The homes are small and cool. The people can move their houses when they want to move. Since the people are (4) \_\_\_\_\_, they move often. They (5) \_\_\_\_\_ their animals to new places in order to find food.

### SubQuestion No : 22

Q.22 Select the most appropriate option to fill in the blank No. 2.

- Ans ☒ 1. houses  
☒ 2. backhouses  
☒ 3. bead houses  
☒ 4. birdhouses

Question Type : MCQ

Question ID : 264330135829

Option 1 ID : 264330532184

Option 2 ID : 264330532183

Option 3 ID : 264330532185

Option 4 ID : 264330532186

Status : Answered

Chosen Option : 1

### Comprehension:

In the following passage some words have been deleted. Fill in the blanks with the help of the alternatives given. Select the most appropriate option for each number.

Do you live in a house? You might be (1) \_\_\_\_\_ to learn that there are many, many kinds of (2) \_\_\_\_\_. Most people in the United States are used to live in houses made of wood or bricks. But many people around the world live in houses made of grass, dirt, or cloth.

In the Great Rift Valley of Eritrea, the nomadic people who are in the Atrtribe build their houses of straw. Their houses are shaped like (3) \_\_\_\_\_ – half spheres. The homes are small and cool. The people can move their houses when they want to move. Since the people are (4) \_\_\_\_\_, they move often. They (5) \_\_\_\_\_ their animals to new places in order to find food.

### SubQuestion No : 23

Q.23 Select the most appropriate option to fill in the blank No. 3.

- Ans ☒ 1. domes  
☒ 2. pantheon  
☒ 3. vault  
☒ 4. stars

Question Type : MCQ

Question ID : 264330135830

Option 1 ID : 264330532188

Option 2 ID : 264330532189

Option 3 ID : 264330532187

Option 4 ID : 264330532190

Status : Answered

Chosen Option : 1

### Comprehension:

In the following passage some words have been deleted. Fill in the blanks with the help of the alternatives given. Select the most appropriate option for each number.

Do you live in a house? You might be (1) \_\_\_\_\_ to learn that there are many, many kinds of (2) \_\_\_\_\_. Most people in the United States are used to live in houses made of wood or bricks. But many people around the world live in houses made of grass, dirt, or cloth.

In the Great Rift Valley of Eritrea, the nomadic people who are in the Atrtribe build their houses of straw. Their houses are shaped like (3) \_\_\_\_\_ – half spheres. The homes are small and cool. The people can move their houses when they want to move. Since the people are (4) \_\_\_\_\_, they move often. They (5) \_\_\_\_\_ their animals to new places in order to find food.

### SubQuestion No : 24

Q.24 Select the most appropriate option to fill in the blank No. 4.

- Ans
- ☒ 1. lost
  - ☒ 2. ill
  - ☒ 3. nomads
  - ☒ 4. creative

Question Type : MCQ

Question ID : 264330135831

Option 1 ID : 264330532191

Option 2 ID : 264330532192

Option 3 ID : 264330532193

Option 4 ID : 264330532194

Status : Answered

Chosen Option : 3

### Comprehension:

In the following passage some words have been deleted. Fill in the blanks with the help of the alternatives given. Select the most appropriate option for each number.

Do you live in a house? You might be (1) \_\_\_\_\_ to learn that there are many, many kinds of (2) \_\_\_\_\_. Most people in the United States are used to live in houses made of wood or bricks. But many people around the world live in houses made of grass, dirt, or cloth.

In the Great Rift Valley of Eritrea, the nomadic people who are in the Atrtribe build their houses of straw. Their houses are shaped like (3) \_\_\_\_\_ – half spheres. The homes are small and cool. The people can move their houses when they want to move. Since the people are (4) \_\_\_\_\_, they move often. They (5) \_\_\_\_\_ their animals to new places in order to find food.

### SubQuestion No : 25

Q.25 Select the most appropriate option to fill in the blank No. 5.

- Ans
- ☒ 1. fetch
  - ☒ 2. take
  - ☒ 3. share
  - ☒ 4. offer

Question Type : MCQ

Question ID : 264330135832

Option 1 ID : 264330532196

Option 2 ID : 264330532195

Option 3 ID : 264330532197

Option 4 ID : 264330532198

Status : Answered

Chosen Option : 2