

Multi Tasking Non Technical Staff and Havaladar CBIC and CBN Examination 2022

Roll Number	
Candidate Name	
Venue Name	Institute of Instrumentation and Metrology
Exam Date	20/06/2023
Exam Time	12:00 PM - 2:00 PM
Subject	MTS Non Tech Havaladar CBIC and CBN Examination 2022

Section : Numerical and Mathematical Ability

Q.1 A person bought some pens at the rate of 14 for a rupee and sold them at the rate of 10 for a rupee. What is the profit percentage?

- Ans**
- ☒ 1. 30 percent
 - ☒ 2. 50 percent
 - ☒ 3. 45 percent
 - ☒ 4. 40 percent

Question Type : **MCQ**

Question ID : **264330140637**

Option 1 ID : **264330550896**

Option 2 ID : **264330550895**

Option 3 ID : **264330550898**

Option 4 ID : **264330550897**

Status : **Answered**

Chosen Option : **4**

Q.2 Rahul and Raman started a business by investing Rs.16000 and Rs.12000 respectively. After 4 months, Rahul left the business and Mohan joined the business by investing Rs.20000. At the end of the year, there was a profit of Rs.46000. What will be the share of Mohan in the profit?

- Ans**
- ☒ 1. Rs.28700
 - ☒ 2. Rs.20000
 - ☒ 3. Rs 36800
 - ☒ 4. Rs.23400

Question Type : **MCQ**

Question ID : **264330139920**

Option 1 ID : **264330548060**

Option 2 ID : **264330548061**

Option 3 ID : **264330548062**

Option 4 ID : **264330548059**

Status : **Answered**

Chosen Option : **2**

Test Prime

**ALL EXAMS,
ONE SUBSCRIPTION**



70,000+
Mock Tests



**Personalised
Report Card**



**Unlimited
Re-Attempt**



600+
Exam Covered



**Previous Year
Papers**



**500%
Refund**



ATTEMPT FREE MOCK NOW

Q.3 What is the value of $\frac{49}{8} \times \frac{2}{3} \div \frac{98}{16} \times \frac{12}{4}$?

- Ans
- ☒ 1. 7
 - ☒ 2. 2
 - ☒ 3. 1
 - ☒ 4. 9

Question Type : MCQ

Question ID : 264330140255

Option 1 ID : 264330549402

Option 2 ID : 264330549400

Option 3 ID : 264330549399

Option 4 ID : 264330549401

Status : Answered

Chosen Option : 2

Q.4 Simple Interest received by a person in 10 years on a principal of Rs. 8500 is 180 percent of the principal. What is the annual rate of interest?

- Ans
- ☒ 1. 20 percent
 - ☒ 2. 22.5 percent
 - ☒ 3. 25 percent
 - ☒ 4. 18 percent

Question Type : MCQ

Question ID : 264330139026

Option 1 ID : 264330544712

Option 2 ID : 264330544713

Option 3 ID : 264330544714

Option 4 ID : 264330544711

Status : Answered

Chosen Option : 4

Q.5 The value of $[84 - (-8) \times \{16 - (11 - 3)\} + \{5 + (-8) \times (-4)\}]$ lies between:

- Ans
- ☒ 1. 186 and 189
 - ☒ 2. 186 and 187
 - ☒ 3. 183 and 186
 - ☒ 4. -187 and -184

Question Type : MCQ

Question ID : 264330140822

Option 1 ID : 264330551638

Option 2 ID : 264330551637

Option 3 ID : 264330551636

Option 4 ID : 264330551635

Status : Answered

Chosen Option : 1

Q.6 The ratio of P, Q and R is 2 : 5 : 7 respectively. If their sum is 840, then what is the difference between P and R?

- Ans** ☒ 1. 300
☐ 2. 380
☐ 3. 200
☐ 4. 260

Question Type : **MCQ**

Question ID : **264330139959**

Option 1 ID : **264330548217**

Option 2 ID : **264330548218**

Option 3 ID : **264330548215**

Option 4 ID : **264330548216**

Status : **Answered**

Chosen Option : **1**

Q.7 A sum of Rs.3500 is lent out at simple interest in two parts. One part at the annual rate of 7 percent and another part at the annual rate of 5 percent. If the total annual interest is Rs.210, then what is the sum lent out at the rate of 7 percent?

- Ans** ☒ 1. Rs.1750
☐ 2. Rs.2000
☐ 3. Rs.1500
☐ 4. Rs.2250

Question Type : **MCQ**

Question ID : **264330139922**

Option 1 ID : **264330548068**

Option 2 ID : **264330548067**

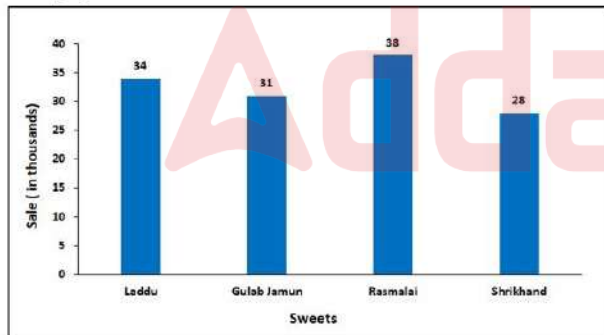
Option 3 ID : **264330548070**

Option 4 ID : **264330548069**

Status : **Answered**

Chosen Option : **1**

Q.8 Given graph shows the sales of the different sweets in this festive season. Which sweet had the maximum sale?



- Ans** ☐ 1. Shrikhand
☐ 2. Gulab Jamun
☒ 3. Rasmalai
☐ 4. Laddu

Question Type : **MCQ**

Question ID : **264330140816**

Option 1 ID : **264330551614**

Option 2 ID : **264330551612**

Option 3 ID : **264330551613**

Option 4 ID : **264330551611**

Status : **Answered**

Chosen Option : **3**

Q.9 If Mohan travels with 60 percent speed of his usual speed, then he will reach 10 minutes late. What is the usual time taken by him?

- Ans**
- ☒ 1. 12.5 minutes
 - ☒ 2. 15 minutes
 - ☒ 3. 10 minutes
 - ☒ 4. 20 minutes

Question Type : **MCQ**

Question ID : **264330139590**

Option 1 ID : **264330546777**

Option 2 ID : **264330546775**

Option 3 ID : **264330546778**

Option 4 ID : **264330546776**

Status : **Answered**

Chosen Option : **2**

Q.10 A is two times as efficient as B. A can complete a work in 20 days less than B. If both of them work together, then in how many days will the same work be completed?

- Ans**
- ☒ 1. (40/3) days
 - ☒ 2. (27/2) days
 - ☒ 3. 20 days
 - ☒ 4. 15 days

Question Type : **MCQ**

Question ID : **264330139609**

Option 1 ID : **264330546852**

Option 2 ID : **264330546854**

Option 3 ID : **264330546851**

Option 4 ID : **264330546853**

Status : **Answered**

Chosen Option : **1**

Q.11 An alloy contains copper, zinc and nickel in the ratio of 3:2:5 respectively. What quantity of nickel (in kg) must be added to 100 kg of this alloy to have the new ratio of copper, zinc and nickel 3:2:6 respectively?

- Ans**
- ☒ 1. 20 kg
 - ☒ 2. 10 kg
 - ☒ 3. 8 kg
 - ☒ 4. 15 kg

Question Type : **MCQ**

Question ID : **264330138372**

Option 1 ID : **264330542096**

Option 2 ID : **264330542097**

Option 3 ID : **264330542098**

Option 4 ID : **264330542095**

Status : **Answered**

Chosen Option : **3**

Q.12 A trader allowed a discount of 20 percent on a trolley bag having list price of Rs. 4296 and earns a profit of 20 percent.
What is the cost price of the trolley bag?

- Ans**
- ☒ 1. Rs. 2572
 - ☒ 2. Rs. 2500
 - ☒ 3. Rs. 3026
 - ☒ 4. Rs. 2864

Question Type : **MCQ**
 Question ID : **264330140643**
 Option 1 ID : **264330550919**
 Option 2 ID : **264330550921**
 Option 3 ID : **264330550920**
 Option 4 ID : **264330550922**
 Status : **Answered**
 Chosen Option : **4**

Q.13 Find the surface area of a spherical ball that has a radius of 1.1 cm.

- Ans**
- ☒ 1. 16 cm^2
 - ☒ 2. 12.1 cm^2
 - ☒ 3. 11.2 cm^2
 - ☒ 4. 15.2 cm^2

Question Type : **MCQ**
 Question ID : **264330138388**
 Option 1 ID : **264330542162**
 Option 2 ID : **264330542160**
 Option 3 ID : **264330542159**
 Option 4 ID : **264330542161**
 Status : **Answered**
 Chosen Option : **4**

Q.14 The average of 15 results is 52. If the average of first 8 results is 56 and that of the last 8 results is 55, then what will be the value of 8th result?

- Ans**
- ☒ 1. 92
 - ☒ 2. 96
 - ☒ 3. 116
 - ☒ 4. 108

Question Type : **MCQ**
 Question ID : **264330139020**
 Option 1 ID : **264330544688**
 Option 2 ID : **264330544689**
 Option 3 ID : **264330544690**
 Option 4 ID : **264330544687**
 Status : **Answered**
 Chosen Option : **4**

Q.15 Profit obtained on selling an article for Rs. 600 is equal to the loss incurred on selling the same article for Rs. 400. If selling price is Rs. 750, then what is the profit percentage?

- Ans
- ☒ 1. 80 percent
 - ☒ 2. 50 percent
 - ☒ 3. 70 percent
 - ☒ 4. 60 percent

Question Type : **MCQ**

Question ID : **264330140540**

Option 1 ID : **264330550518**

Option 2 ID : **264330550515**

Option 3 ID : **264330550517**

Option 4 ID : **264330550516**

Status : **Answered**

Chosen Option : **2**

Q.16 A alone can do a work in 4 days, which B alone can do in 6 days. In how many days they together can do it

- Ans
- ☒ 1. 7/12
 - ☒ 2. 12/7
 - ☒ 3. 12/5
 - ☒ 4. 5/12

Question Type : **MCQ**

Question ID : **264330140813**

Option 1 ID : **264330551602**

Option 2 ID : **264330551599**

Option 3 ID : **264330551601**

Option 4 ID : **264330551600**

Status : **Answered**

Chosen Option : **3**

Q.17 The table given below shows the marked price and selling price of 6 articles.

Articles	Marked price	Selling price
A1	650	550
A2	500	350
A3	550	400
A4	350	300
A5	750	550
A6	250	200

Discount = Marked price – Selling price

J1 = The value of average of discount of article A1, A2, A3 and A4.

J2 = The difference between marked price and selling price of all articles.

What is the value of (J2 – J1)?

- Ans
- ☒ 1. 592.5
 - ☒ 2. 576.5
 - ☒ 3. 587.5
 - ☒ 4. 552.5

Question Type : MCQ

Question ID : 264330140171

Option 1 ID : 264330549065

Option 2 ID : 264330549064

Option 3 ID : 264330549063

Option 4 ID : 264330549066

Status : Answered

Chosen Option : 3

Q.18 What is the smallest perfect square which is divisible by both 8 and 12?

- Ans
- ☒ 1. 100
 - ☒ 2. 144
 - ☒ 3. 121
 - ☒ 4. 196

Question Type : MCQ

Question ID : 264330140626

Option 1 ID : 264330550853

Option 2 ID : 264330550852

Option 3 ID : 264330550854

Option 4 ID : 264330550851

Status : Answered

Chosen Option : 2

Q.19 What is the value of 32 percent of 75 percent of 7800?

- Ans
- ☒ 1. 1952
 - ☒ 2. 2042
 - ☒ 3. 1872
 - ☒ 4. 1850

Question Type : MCQ
 Question ID : 264330139956
 Option 1 ID : 264330548206
 Option 2 ID : 264330548204
 Option 3 ID : 264330548205
 Option 4 ID : 264330548203
 Status : Answered
 Chosen Option : 3

Q.20 If the area of non-spherical portion of a solid hemisphere is 1560 m^2 , then the total surface area of the hemisphere is:

- Ans
- ☒ 1. 6240 m^2
 - ☒ 2. 4680 m^2
 - ☒ 3. 5140 m^2
 - ☒ 4. 3120 m^2

Question Type : MCQ
 Question ID : 264330138744
 Option 1 ID : 264330543585
 Option 2 ID : 264330543583
 Option 3 ID : 264330543586
 Option 4 ID : 264330543584
 Status : Answered
 Chosen Option : 2

Section : Reasoning Ability and Problem Solving

Q.1 Rohan, Rajiv, Ritu, Rishav, and Ritika are sitting in a circle facing away from the centre. Rohan and Rajiv are not sitting together. Rishav and Ritika are sitting immediately next to each other, and Rajiv is sitting to the immediate left of Rishav. Who is sitting to the immediate left of Ritu?

- Ans
- ☒ 1. Rohan
 - ☒ 2. Rishav
 - ☒ 3. Rajiv
 - ☒ 4. Ritika

Question Type : MCQ
 Question ID : 264330138795
 Option 1 ID : 264330543787
 Option 2 ID : 264330543789
 Option 3 ID : 264330543788
 Option 4 ID : 264330543790
 Status : Answered
 Chosen Option : 2

Q.2 After interchanging which two signs, the value of the given equation will be '11'?

$$32 + 3 - 12 \div 18 \times 9$$

- Ans
- ☒ 1. \div and $-$
 - ☒ 2. \div and \times
 - ☒ 3. $+$ and $-$
 - ☒ 4. \times and $-$

Question Type : MCQ
Question ID : 264330140068
Option 1 ID : 264330548651
Option 2 ID : 264330548652
Option 3 ID : 264330548653
Option 4 ID : 264330548654
Status : Answered
Chosen Option : 2

Q.3 Select the option that is related to the third number in the same way as the second number is related to the first number.
11 : 1342 :: 7 : ?

- Ans
- ☒ 1. 350
 - ☒ 2. 340
 - ☒ 3. 250
 - ☒ 4. 360

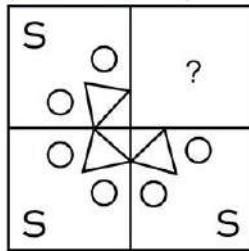
Question Type : MCQ
Question ID : 264330140046
Option 1 ID : 264330548564
Option 2 ID : 264330548563
Option 3 ID : 264330548565
Option 4 ID : 264330548566
Status : Answered
Chosen Option : 1

Q.4 Select the option that is related to the third letter cluster in the same way as the second letter cluster is related to the first letter cluster.
STUDY : TUVEZ :: HUMBLE : ?

- Ans
- ☒ 1. INVCME
 - ☒ 2. IVNFCM
 - ☒ 3. IVNCMF
 - ☒ 4. IVNCFM

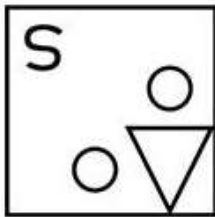
Question Type : MCQ
Question ID : 264330139992
Option 1 ID : 264330548348
Option 2 ID : 264330548349
Option 3 ID : 264330548350
Option 4 ID : 264330548347
Status : Answered
Chosen Option : 3

Q.5 Select the option figure that will replace the question mark (?) in the figure given below to complete the pattern.
(rotation is not allowed)

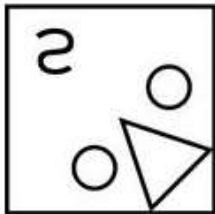


Ans

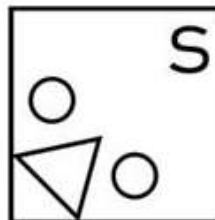
✗ 1.



✗ 2.



✓ 3.



✗ 4.



Question Type : MCQ

Question ID : 264330140152

Option 1 ID : 264330548989

Option 2 ID : 264330548987

Option 3 ID : 264330548990

Option 4 ID : 264330548988

Status : Answered

Chosen Option : 3

Q.6 In a certain code language, 'LION' is written as 'MKPP' and 'DEER' is written as 'EGFT'. How will 'GOAT' be written in that language?

- Ans**
- ☒ 1. HPBV
 - ☒ 2. HQBV
 - ☒ 3. HQBU
 - ☒ 4. HQCV

Question Type : **MCQ**
 Question ID : **264330140455**
 Option 1 ID : **264330550201**
 Option 2 ID : **264330550200**
 Option 3 ID : **264330550199**
 Option 4 ID : **264330550202**
 Status : **Answered**
 Chosen Option : **2**

Q.7 Which of the following letter will replace the question mark (?) in the given series?
 N, P, R, T, V, X, ?

- Ans**
- ☒ 1. M
 - ☒ 2. R
 - ☒ 3. Z
 - ☒ 4. S

Question Type : **MCQ**
 Question ID : **264330138766**
 Option 1 ID : **264330543671**
 Option 2 ID : **264330543673**
 Option 3 ID : **264330543672**
 Option 4 ID : **264330543674**
 Status : **Answered**
 Chosen Option : **3**

Q.8 In a certain code language, 'GLAND' is coded as '62437', 'GRIND' is coded as '34869', 'MAIN' is coded as '5692'. What is the code for 'A' in that code language?

- Ans**
- ☒ 1. 5
 - ☒ 2. 2
 - ☒ 3. 9
 - ☒ 4. 6

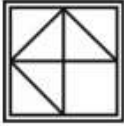
Question Type : **MCQ**
 Question ID : **264330139572**
 Option 1 ID : **264330546703**
 Option 2 ID : **264330546706**
 Option 3 ID : **264330546705**
 Option 4 ID : **264330546704**
 Status : **Answered**
 Chosen Option : **2**

Q.9 Select the option figure in which the given figure is embedded. (rotation is NOT allowed)

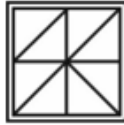


Ans

✗ 1.



✓ 2.



✗ 3.



✗ 4.



Question Type : MCQ

Question ID : 264330140973

Option 1 ID : 264330552242

Option 2 ID : 264330552239

Option 3 ID : 264330552240

Option 4 ID : 264330552241

Status : Answered

Chosen Option : 2

Q.10 Three statements are given followed by two conclusions numbered I and II. Assuming the statements to be true, even if they seem to be at variance with commonly known facts, decide which of the conclusions logically follow (s) from the statements.

Statements:

Some houses are flats.

Some flats are spacious.

All spacious are expensive.

Conclusions:

I. Some flats are expensive.

II. Some houses are spacious.

Ans

✗ 1.

Only conclusion II follows

✓ 2.

Only conclusion I follows

✗ 3.

Neither conclusion I nor II follows

✗ 4.

Both conclusions I and II follow

Question Type : MCQ

Question ID : 264330140402

Option 1 ID : 264330549988

Option 2 ID : 264330549987

Option 3 ID : 264330549990

Option 4 ID : 264330549989

Status : Answered

Chosen Option : 4

Q.11 Select the option that is related to the fifth term in the same way as the second term is related to the first term and fourth term is related to third term.

ABC : EWJ :: JHK : NCR :: PMT : ?

- Ans** ☒ 1. **THA**
☒ 2. **TIB**
☒ 3. **TGA**
☒ 4. **TJC**

Question Type : **MCQ**

Question ID : **264330139570**

Option 1 ID : **264330546696**

Option 2 ID : **264330546697**

Option 3 ID : **264330546695**

Option 4 ID : **264330546698**

Status : **Answered**

Chosen Option : **1**

Q.12 Amongst seven girls Aanya, Bira, Cleo, Diana, Elle, Fathima and Georgia, each has a different age. Fathima is elder than only Cleo. Bira is younger than only Georgia. Diana is older than four other girls. Aanya is younger than Elle. Who is the fourth eldest among the girls?

- Ans** ☒ 1. **Elle**
☒ 2. **Bira**
☒ 3. **Diana**
☒ 4. **Fathima**

Question Type : **MCQ**

Question ID : **264330140420**

Option 1 ID : **264330550061**

Option 2 ID : **264330550059**

Option 3 ID : **264330550060**

Option 4 ID : **264330550062**

Status : **Answered**

Chosen Option : **1**

Q.13 Which two signs should be interchanged to make the given equation correct?

$$8 = 5 - 31 + 12 \div 2 \times 15$$

- Ans** ☒ 1. **+ and ÷**
☒ 2. **× and =**
☒ 3. **÷ and -**
☒ 4. **- and +**

Question Type : **MCQ**

Question ID : **264330140089**

Option 1 ID : **264330548738**

Option 2 ID : **264330548737**

Option 3 ID : **264330548735**

Option 4 ID : **264330548736**

Status : **Answered**

Chosen Option : **2**

Q.14 Select the option in which the numbers shares the same relationship in set as that shared by the numbers in the given set.
(NOTE: Operations should be performed on the whole numbers, without breaking down the numbers into its constituent digits. E.g. 13 – Operations on 13 such as adding /subtracting /multiplying etc. to 13 can be performed. Breaking down 13 into 1 and 3 and then performing mathematical operations on 1 and 3 is not allowed)

(500, 450, 400)

(600, 550, 500)

- Ans**
- ☒ 1. (300, 350, 250)
- ☒ 2. (400, 350, 300)
- ☒ 3. (350, 300, 200)
- ☒ 4. (800, 750, 650)

Question Type : **MCQ**
Question ID : **264330140067**
Option 1 ID : **264330548647**
Option 2 ID : **264330548648**
Option 3 ID : **264330548649**
Option 4 ID : **264330548650**
Status : **Answered**
Chosen Option : **2**

Q.15 Which of the following numbers will replace the question mark (?) in the given series?
-67, -64, -58, -49, -37, -22, ?

- Ans**
- ☒ 1. -2
- ☒ 2. 2
- ☒ 3. -4
- ☒ 4. 4

Question Type : **MCQ**
Question ID : **264330140003**
Option 1 ID : **264330548391**
Option 2 ID : **264330548393**
Option 3 ID : **264330548392**
Option 4 ID : **264330548394**
Status : **Answered**
Chosen Option : **3**

Q.16 Two Statements are given followed by two conclusions numbered I and II. Assuming the statements to be true, even if they seem to be at variance with commonly known facts, decide which of the conclusions logically follow(s) from the statements.

Statements:

No apple is tasty.

Some tasty are bitter.

Conclusions:

I. Some apples are bitter.

II. No tasty is an apple.

Ans

- ✓ 1. Only conclusion II follows.
- ✗ 2. Both conclusions I and II follow.
- ✗ 3. Only conclusion I follows.
- ✗ 4. Neither conclusion I nor II follow.

Question Type : **MCQ**

Question ID : **264330140042**

Option 1 ID : **264330548548**

Option 2 ID : **264330548549**

Option 3 ID : **264330548547**

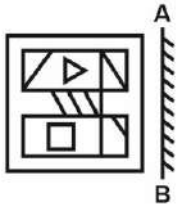
Option 4 ID : **264330548550**

Status : **Answered**

Chosen Option : **1**

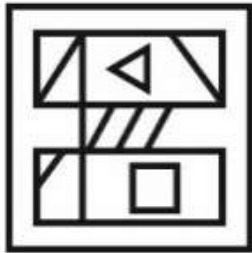


Q.17 If a mirror is placed on the line AB, then out of the option figures which figure will be the right image of the question figure?



Ans

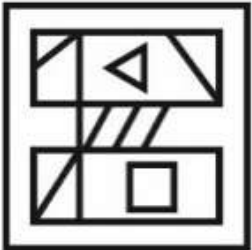
✓ 1.



✗ 2.



✗ 3.



✗ 4.



Question Type : MCQ

Question ID : 264330139566

Option 1 ID : 264330546682

Option 2 ID : 264330546680

Option 3 ID : 264330546679

Option 4 ID : 264330546681

Status : Answered

Chosen Option : 1

Q.18 In the following question, select the missing number of the given series.

4, 6, 8, 10, ?, 14

- Ans
- ☒ 1. 11
 - ☒ 2. 12
 - ☒ 3. 14
 - ☒ 4. 15

Question Type : MCQ

Question ID : 264330139579

Option 1 ID : 264330546734

Option 2 ID : 264330546731

Option 3 ID : 264330546732

Option 4 ID : 264330546733

Status : Answered

Chosen Option : 2

Q.19 In a certain code language, 'PASTA' is written as 'AP19AT'. How will 'VOCAL' be written in that language?

- Ans
- ☒ 1. OVL3A
 - ☒ 2. O3VLA
 - ☒ 3. OV3LA
 - ☒ 4. OU8AL

Question Type : MCQ

Question ID : 264330137837

Option 1 ID : 264330539956

Option 2 ID : 264330539958

Option 3 ID : 264330539955

Option 4 ID : 264330539957

Status : Answered

Chosen Option : 3

Q.20 Three sparrows A, B, and C are sitting on an electrical wire in a straight line facing south. Three crows X, Y, and Z are sitting on another parallel electric wire facing north. A is sitting to the immediate left of B, and A is facing Z. If B sits between A and C, and C is facing Y, then who is to the immediate right of Y?

- Ans
- ☒ 1. Z
 - ☒ 2. X
 - ☒ 3. A
 - ☒ 4. B

Question Type : MCQ

Question ID : 264330140018

Option 1 ID : 264330548451

Option 2 ID : 264330548452

Option 3 ID : 264330548454

Option 4 ID : 264330548453

Status : Answered

Chosen Option : 2

Q.1 The terms = Dribbling, passing, shooting are associated with which sport?

- Ans
- ☐ 1. Shooting
 - ☐ 2. Badminton
 - ☐ 3. Cricket
 - ☒ 4. Basketball

Question Type : MCQ

Question ID : 264330140884

Option 1 ID : 264330551883

Option 2 ID : 264330551886

Option 3 ID : 264330551885

Option 4 ID : 264330551884

Status : Answered

Chosen Option : 4

Q.2 India's total length of coastline of the mainland including Andaman and Nicobar and Lakshadweep is _____.

- Ans
- ☐ 1. 7416.6 km
 - ☐ 2. 7616 km
 - ☒ 3. 7516.6 km
 - ☐ 4. 7716 km

Question Type : MCQ

Question ID : 264330139666

Option 1 ID : 264330547079

Option 2 ID : 264330547081

Option 3 ID : 264330547080

Option 4 ID : 264330547082

Status : Answered

Chosen Option : 1

Q.3 The grading system used by the Mughals to fix rank, salary and military responsibilities is called _____.

- Ans
- ☐ 1. Iqta system
 - ☐ 2. Ryotwari system
 - ☒ 3. Mansabdari system
 - ☐ 4. Mahalwari system

Question Type : MCQ

Question ID : 264330139770

Option 1 ID : 264330547496

Option 2 ID : 264330547497

Option 3 ID : 264330547495

Option 4 ID : 264330547498

Status : Answered

Chosen Option : 3

Q.4 Mallika Sarabhai was awarded with Padma Bhushan (2010) - for contribution to Performing Arts. She was highly recognized for which dance forms?

- Ans**
- ☒ 1. Manipuri and Odissi
 - ☒ 2. Kuchipudi and Bharatanatyam
 - ☒ 3. Kathakali and Odissi
 - ☒ 4. Kathak and Bharatanatyam

Question Type : **MCQ**
 Question ID : **264330139680**
 Option 1 ID : **264330547136**
 Option 2 ID : **264330547135**
 Option 3 ID : **264330547138**
 Option 4 ID : **264330547137**
 Status : **Answered**
 Chosen Option : **4**

Q.5 Which of the following dance is particular to the women of the Kamad tribe?

- Ans**
- ☒ 1. Bhutia dance
 - ☒ 2. Mask dance
 - ☒ 3. Garai dance
 - ☒ 4. Terataal dance

Question Type : **MCQ**
 Question ID : **264330140267**
 Option 1 ID : **264330549447**
 Option 2 ID : **264330549449**
 Option 3 ID : **264330549450**
 Option 4 ID : **264330549448**
 Status : **Not Answered**
 Chosen Option : **--**

Q.6 What is the currency of Bangladesh, a neighbouring country of India?

- Ans**
- ☒ 1. Yuan
 - ☒ 2. Ngultrum
 - ☒ 3. Kyat
 - ☒ 4. Taka

Question Type : **MCQ**
 Question ID : **264330140329**
 Option 1 ID : **264330549697**
 Option 2 ID : **264330549695**
 Option 3 ID : **264330549698**
 Option 4 ID : **264330549696**
 Status : **Answered**
 Chosen Option : **4**

Q.7 The concept of "Amendment of the Constitution" in the Indian Constitution was borrowed from the constitution of which of the following countries?

- Ans**
- ✓ 1. South Africa
 - ✗ 2. Germany
 - ✗ 3. Canada
 - ✗ 4. Australia

Question Type : **MCQ**
 Question ID : **264330140362**
 Option 1 ID : **264330549829**
 Option 2 ID : **264330549827**
 Option 3 ID : **264330549830**
 Option 4 ID : **264330549828**
 Status : **Answered**
 Chosen Option : **1**

Q.8 The Gram Sabha is a meeting of all adults who live in the area covered by a _____.

- Ans**
- ✗ 1. district
 - ✗ 2. city
 - ✗ 3. state
 - ✓ 4. panchayat

Question Type : **MCQ**
 Question ID : **264330139659**
 Option 1 ID : **264330547052**
 Option 2 ID : **264330547051**
 Option 3 ID : **264330547054**
 Option 4 ID : **264330547053**
 Status : **Answered**
 Chosen Option : **4**

Q.9 As of 2022, who is the India's last living Sadhir dancer honoured with Padma Shri Award in 2022?

- Ans**
- ✗ 1. Baisali Mohanty
 - ✓ 2. R Muthukannammal
 - ✗ 3. Rukmini Devi Arundale
 - ✗ 4. Manjamma Jogati

Question Type : **MCQ**
 Question ID : **264330140745**
 Option 1 ID : **264330551328**
 Option 2 ID : **264330551329**
 Option 3 ID : **264330551330**
 Option 4 ID : **264330551327**
 Status : **Answered**
 Chosen Option : **2**

Q.10 Which freedom fighter of British India is widely regarded as the "father of the two-nation theory"?

- Ans ☒ 1. Syed Ahmed Khan
☒ 2. Muhammad Ali Jinnah
☒ 3. Bal Gangadhar Tilak
☒ 4. Jawaharlal Nehru

Question Type : MCQ
Question ID : 264330140922
Option 1 ID : 264330552038
Option 2 ID : 264330552035
Option 3 ID : 264330552037
Option 4 ID : 264330552036
Status : Answered
Chosen Option : 2

Q.11 Who presents the annual budget before the Lok Sabha?

- Ans ☒ 1. Union Finance Minister
☒ 2. Defence Minister
☒ 3. Comptroller and Auditor General of India
☒ 4. Home Affairs Minister

Question Type : MCQ
Question ID : 264330140391
Option 1 ID : 264330549944
Option 2 ID : 264330549945
Option 3 ID : 264330549943
Option 4 ID : 264330549946
Status : Answered
Chosen Option : 1

Q.12 Under which amendment act, article 51A (k) of the Indian constitution was inserted in the constitution?

- Ans ☒ 1. Eighty – sixth amendment Act
☒ 2. Eighty – second amendment Act
☒ 3. Eighty – fourth amendment Act
☒ 4. Eighty – first amendment Act

Question Type : MCQ
Question ID : 264330138983
Option 1 ID : 264330544542
Option 2 ID : 264330544540
Option 3 ID : 264330544541
Option 4 ID : 264330544539
Status : Not Answered
Chosen Option : --

Q.13 In February 2022, Indian Government launched which operation to bring back Indians stranded in Ukraine?

- Ans
- ☐ 1. Operation Flood
 - ☐ 2. Operation Kiev
 - ☒ 3. Operation Ganga
 - ☐ 4. Operation Moscow

Question Type : MCQ

Question ID : 264330140276

Option 1 ID : 264330549483

Option 2 ID : 264330549485

Option 3 ID : 264330549484

Option 4 ID : 264330549486

Status : Answered

Chosen Option : 3

Q.14 Which act was passed by the British Parliament to control the territories of the East India Company majorly in Bengal in the year 1773?

- Ans
- ☐ 1. Charter Act
 - ☒ 2. Regulating Act
 - ☐ 3. Indian Councils Act
 - ☐ 4. Government Of India Act

Question Type : MCQ

Question ID : 264330140332

Option 1 ID : 264330549707

Option 2 ID : 264330549710

Option 3 ID : 264330549708

Option 4 ID : 264330549709

Status : Answered

Chosen Option : 2

Q.15 Indian musician Ustad Alla Rakha Qureshi is associated with _____ musical instrument.

- Ans
- ☐ 1. Flute
 - ☒ 2. Tabla
 - ☐ 3. Sarod
 - ☐ 4. Santoor

Question Type : MCQ

Question ID : 264330140769

Option 1 ID : 264330551426

Option 2 ID : 264330551423

Option 3 ID : 264330551425

Option 4 ID : 264330551424

Status : Answered

Chosen Option : 2

Q.16 After the victory over Sakas, who among the following adopted the title of 'Vikramaditya'?

- Ans
- ☒ 1. Chandragupta I
 - ☒ 2. Chandragupta II
 - ☐ 3. Skandagupta
 - ☐ 4. Kumaragupta I

Question Type : MCQ
 Question ID : 264330140944
 Option 1 ID : 264330552125
 Option 2 ID : 264330552126
 Option 3 ID : 264330552123
 Option 4 ID : 264330552124
 Status : Answered
 Chosen Option : 2

Q.17 "Goitre" is a disease of which of the following glands?

- Ans
- ☒ 1. Thyroid gland
 - ☐ 2. Pancreas
 - ☐ 3. Adrenal gland
 - ☐ 4. Pituitary gland

Question Type : MCQ
 Question ID : 264330139737
 Option 1 ID : 264330547363
 Option 2 ID : 264330547366
 Option 3 ID : 264330547365
 Option 4 ID : 264330547364
 Status : Answered
 Chosen Option : 1

Q.18 The materials, through which things can be seen, are called _____.

- Ans
- ☒ 1. transparent materials
 - ☐ 2. conductive materials
 - ☐ 3. opaque materials
 - ☐ 4. translucent materials

Question Type : MCQ
 Question ID : 264330139664
 Option 1 ID : 264330547071
 Option 2 ID : 264330547074
 Option 3 ID : 264330547073
 Option 4 ID : 264330547072
 Status : Answered
 Chosen Option : 1

Q.19 According to census 2011, what is the population (nearest value) of tribals in India?

- Ans
- ☒ 1. 16.45 crore
 - ☒ 2. 14.45 crore
 - ☒ 3. 10.42 crore
 - ☒ 4. 12.45 crore

Question Type : MCQ
Question ID : 264330139886
Option 1 ID : 264330547926
Option 2 ID : 264330547925
Option 3 ID : 264330547923
Option 4 ID : 264330547924
Status : Not Answered
Chosen Option : --

Q.20 Which of the following is an agro-based industry?

- Ans
- ☒ 1. Aluminium
 - ☒ 2. Coal
 - ☒ 3. Iron and Steel
 - ☒ 4. Sugar

Question Type : MCQ
Question ID : 264330140685
Option 1 ID : 264330551088
Option 2 ID : 264330551090
Option 3 ID : 264330551087
Option 4 ID : 264330551089
Status : Answered
Chosen Option : 4

Q.21 The upper portion of the mantle is called _____.

- Ans
- ☒ 1. asthenosphere
 - ☒ 2. barosphere
 - ☒ 3. mesosphere
 - ☒ 4. lithosphere

Question Type : MCQ
Question ID : 264330140325
Option 1 ID : 264330549680
Option 2 ID : 264330549681
Option 3 ID : 264330549682
Option 4 ID : 264330549679
Status : Answered
Chosen Option : 2

Q.22 Olympic Games 1952 were held in which of the following places?

- Ans ☒ 1. London
☒ 2. Helsinki
☒ 3. New York
☒ 4. Berlin

Question Type : MCQ

Question ID : 264330139676

Option 1 ID : 264330547120

Option 2 ID : 264330547122

Option 3 ID : 264330547119

Option 4 ID : 264330547121

Status : Answered

Chosen Option : 2

Q.23 Snails is an example of which of the phylum of animal kingdom?

- Ans ☒ 1. Protochordate
☒ 2. Mollusca
☒ 3. Annelida
☒ 4. Arthropoda

Question Type : MCQ

Question ID : 264330140937

Option 1 ID : 264330552095

Option 2 ID : 264330552098

Option 3 ID : 264330552096

Option 4 ID : 264330552097

Status : Answered

Chosen Option : 4

Q.24 The famous Pandav Leni Caves is located in which of the following states?

- Ans ☒ 1. Odisha
☒ 2. Maharashtra
☒ 3. Kerala
☒ 4. Bihar

Question Type : MCQ

Question ID : 264330140346

Option 1 ID : 264330549765

Option 2 ID : 264330549764

Option 3 ID : 264330549766

Option 4 ID : 264330549763

Status : Answered

Chosen Option : 2

Q.25 Henry Louis Vivian Derozio was a teacher of which college in 1820s?

- Ans
- ☒ 1. Banaras Engineering college, Varanasi
 - ☒ 2. Indian Institute of science, Bangalore
 - ☒ 3. Hindu college, Calcutta
 - ☒ 4. Sanskrit college, Varanasi

Question Type : MCQ
 Question ID : 264330140904
 Option 1 ID : 264330551963
 Option 2 ID : 264330551965
 Option 3 ID : 264330551964
 Option 4 ID : 264330551966
 Status : Answered
 Chosen Option : 3

Section : English Language and Comprehension

Q.1 Fill in the blank with the most appropriate option.

Harry stepped in, his head almost _____ the sloping ceiling, and blinked.

- Ans
- ☒ 1. embracing
 - ☒ 2. touching
 - ☒ 3. grasping
 - ☒ 4. cuddling

Question Type : MCQ
 Question ID : 264330136567
 Option 1 ID : 264330535003
 Option 2 ID : 264330535006
 Option 3 ID : 264330535004
 Option 4 ID : 264330535005
 Status : Answered
 Chosen Option : 2

Q.2 Four sentences are given, out of which three have spelling errors. Choose the sentence with all correctly spelt words.

- Ans
- ☒ 1. I was a bit depressed by our apparant lack of progress.
 - ☒ 2. Urban dwellers often accept noise as part of city life.
 - ☒ 3. She is going to divorce him on the grounds of adultery.
 - ☒ 4.

Its sanctions are based on compairisons between the two companies.

Question Type : MCQ
 Question ID : 264330136584
 Option 1 ID : 264330535068
 Option 2 ID : 264330535070
 Option 3 ID : 264330535069
 Option 4 ID : 264330535067
 Status : Answered
 Chosen Option : 2

Q.3 Four words are given, out of which three words are spelt correctly. Choose the incorrectly spelt word.

- Ans**
- ☒ 1. STILETTOS
 - ☒ 2. BEWILDERS
 - ☒ 3. UNFORESEEN
 - ☒ 4. VISCIOUS

Question Type : **MCQ**
 Question ID : **264330136287**
 Option 1 ID : **264330533929**
 Option 2 ID : **264330533930**
 Option 3 ID : **264330533927**
 Option 4 ID : **264330533928**
 Status : **Answered**
 Chosen Option : **1**

Q.4 Select the most appropriate word for the given group of words.

A historical account or biography written from personal knowledge

- Ans**
- ☒ 1. Chronicle
 - ☒ 2. Thesis
 - ☒ 3. Memoir
 - ☒ 4. Blog

Question Type : **MCQ**
 Question ID : **264330135860**
 Option 1 ID : **264330532305**
 Option 2 ID : **264330532306**
 Option 3 ID : **264330532304**
 Option 4 ID : **264330532303**
 Status : **Answered**
 Chosen Option : **3**

Q.5 Select the most appropriate option to substitute the bracketed segment in the given sentence. If there is no need to substitute it, select 'no substitution required'.

Though they allow celebrities and famous people to take pictures (inside the museum, but they does not allow the general public) to do the same.

- Ans**
- ☒ 1. inside the museum, they do not allow the general public
 - ☒ 2. No substitution required
 - ☒ 3. inside the museum, but do not allowing the general public
 - ☒ 4. inside the museum, they does not allow general public

Question Type : **MCQ**
 Question ID : **264330136191**
 Option 1 ID : **264330533561**
 Option 2 ID : **264330533562**
 Option 3 ID : **264330533560**
 Option 4 ID : **264330533559**
 Status : **Answered**
 Chosen Option : **3**

Q.6 Select the most appropriate option to substitute the bracketed segment in the given sentence. If there is no need to substitute it, select 'no substitution required'.
I assisted him to undo the (task after I finished my work).

- Ans**
- ☒ 1. task after I will finish my work
 - ☒ 2. No substitution required
 - ☒ 3. task after I will have finished my work
 - ☒ 4. task after I had finished my work

Question Type : **MCQ**
Question ID : **264330135823**
Option 1 ID : **264330532163**
Option 2 ID : **264330532166**
Option 3 ID : **264330532164**
Option 4 ID : **264330532165**
Status : **Answered**
Chosen Option : **4**

Q.7 Select the word from the options which is exactly opposite in meaning to the bracketed word given in the sentence below.

The pandemic has seen soaring home prices and record housing (insecurity).

- Ans**
- ☒ 1. Hesitancy
 - ☒ 2. Pretence
 - ☒ 3. Self-doubt
 - ☒ 4. Firmness

Question Type : **MCQ**
Question ID : **264330136429**
Option 1 ID : **264330534477**
Option 2 ID : **264330534478**
Option 3 ID : **264330534476**
Option 4 ID : **264330534475**
Status : **Answered**
Chosen Option : **4**

Q.8 Identify the segment that contains a grammatical error. If there is no error, select 'No error'.

Eight years ago, she founded / Humans of Bombay, inspired of / the single idea – we all want to be heard.

- Ans**
- ☒ 1. the single idea – we all want to be heard.
 - ☒ 2. Eight years ago, she founded
 - ☒ 3. No error
 - ☒ 4. Humans of Bombay, inspired of

Question Type : **MCQ**
Question ID : **264330136410**
Option 1 ID : **264330534405**
Option 2 ID : **264330534403**
Option 3 ID : **264330534406**
Option 4 ID : **264330534404**
Status : **Answered**
Chosen Option : **3**

Q.9 Select the most appropriate word for the given group of words.

The branch of physics concerned with the properties of sound

- Ans ☒ 1. Acoustics
☒ 2. Anchor
☒ 3. Anarchist
☒ 4. Apiary

Question Type : MCQ
 Question ID : 264330135677
 Option 1 ID : 264330531601
 Option 2 ID : 264330531599
 Option 3 ID : 264330531600
 Option 4 ID : 264330531602
 Status : Answered
 Chosen Option : 1

Q.10 Select the most appropriate antonym of the given word.

Satisfactory

- Ans ☒ 1. Revive
☒ 2. Morose
☒ 3. Inadequate
☒ 4. Diminish

Question Type : MCQ
 Question ID : 264330135837
 Option 1 ID : 264330532218
 Option 2 ID : 264330532216
 Option 3 ID : 264330532215
 Option 4 ID : 264330532217
 Status : Answered
 Chosen Option : 3

Q.11 Select the most appropriate synonym of the given word.

Enthuse

- Ans ☒ 1. Unbothered
☒ 2. Carefree
☒ 3. Fondle
☒ 4. Lazy

Question Type : MCQ
 Question ID : 264330136577
 Option 1 ID : 264330535040
 Option 2 ID : 264330535039
 Option 3 ID : 264330535042
 Option 4 ID : 264330535041
 Status : Answered
 Chosen Option : 3

Q.12 The statement below has been given with bracketed text. Select the option with correct idiom for the bracketed text.
You all look great in your costumes! (Good luck!)

- Ans
- ☐ 1. Come again
 - ☐ 2. Don't swear it
 - ☒ 3. Break a leg
 - ☐ 4. Spit it out

Question Type : MCQ
Question ID : 264330136156
Option 1 ID : 264330533426
Option 2 ID : 264330533424
Option 3 ID : 264330533425
Option 4 ID : 264330533423
Status : Answered
Chosen Option : 3

Q.13 Select the most appropriate meaning of the given idiom.

A bad egg

- Ans
- ☒ 1. A bad person
 - ☐ 2. A very small insignificant amount
 - ☐ 3. To be frustrated
 - ☐ 4. To calm down

Question Type : MCQ
Question ID : 264330136181
Option 1 ID : 264330533519
Option 2 ID : 264330533520
Option 3 ID : 264330533521
Option 4 ID : 264330533522
Status : Answered
Chosen Option : 1

Q.14 Select the most appropriate option to fill in the blank.

Bushfire in Australia has _____ the conditions of many animals in the forest.

- Ans
- ☐ 1. fortified
 - ☒ 2. worsened
 - ☐ 3. maintained
 - ☐ 4. surpassed

Question Type : MCQ
Question ID : 264330135662
Option 1 ID : 264330531544
Option 2 ID : 264330531546
Option 3 ID : 264330531543
Option 4 ID : 264330531545
Status : Answered
Chosen Option : 2

Q.15 Select the word from the options which is similar in meaning to the bracketed part given in the sentence below.
I was (feeling afraid) that something bad would happen.

- Ans**
- ☒ 1. Sacred
 - ☒ 2. Divine
 - ☒ 3. Scared
 - ☒ 4. Bold

Question Type : **MCQ**
Question ID : **264330135862**
Option 1 ID : **264330532312**
Option 2 ID : **264330532314**
Option 3 ID : **264330532311**
Option 4 ID : **264330532313**
Status : **Answered**
Chosen Option : **3**

Q.16 Find the part of the given sentence that has an error in it. If there is no error, choose 'No error'.
Raising temperatures in the springtime signal plants and animals to come alive.

- Ans**
- ☒ 1. Raising temperatures in the
 - ☒ 2. springtime signal plants and
 - ☒ 3. animals to come alive.
 - ☒ 4. No error

Question Type : **MCQ**
Question ID : **264330135232**
Option 1 ID : **264330529851**
Option 2 ID : **264330529852**
Option 3 ID : **264330529853**
Option 4 ID : **264330529854**
Status : **Answered**
Chosen Option : **1**

Q.17 Select the most appropriate option to fill in the blank.

There was a general hesitation and _____ to ignore the problem.

- Ans**
- ☒ 1. Disposition
 - ☒ 2. Deride
 - ☒ 3. Demur
 - ☒ 4. Denigrate

Question Type : **MCQ**
Question ID : **264330136542**
Option 1 ID : **264330534908**
Option 2 ID : **264330534910**
Option 3 ID : **264330534907**
Option 4 ID : **264330534909**
Status : **Answered**
Chosen Option : **1**

Q.18 Select the most appropriate option to fill in the blank.

Look in a mirror and take your _____ with each step.

- Ans
- ☐ 1. plague
 - ☒ 2. time
 - ☐ 3. ages
 - ☐ 4. hostage

Question Type : MCQ
Question ID : 264330135533
Option 1 ID : 264330531038
Option 2 ID : 264330531037
Option 3 ID : 264330531036
Option 4 ID : 264330531035
Status : Answered
Chosen Option : 2

Q.19 Identify the segment that contains a grammatical error. If there is no error, select 'No error'.

Have you ever gone into/ a high-street shop wearing/ a pair of cycling shorts?

- Ans
- ☐ 1. a pair of cycling shorts?
 - ☐ 2. a high-street shop wearing
 - ☒ 3. No error
 - ☐ 4. Have you ever gone into

Question Type : MCQ
Question ID : 264330136483
Option 1 ID : 264330534681
Option 2 ID : 264330534680
Option 3 ID : 264330534682
Option 4 ID : 264330534679
Status : Answered
Chosen Option : 4

Q.20 Improve the underlined part of the sentence. Choose 'No improvement' as an answer if the sentence is grammatically correct.

She was born with full sight and hearing.

- Ans
- ☐ 1. full sighting
 - ☐ 2. fully sight
 - ☐ 3. full sighted
 - ☒ 4. No improvement

Question Type : MCQ
Question ID : 264330135642
Option 1 ID : 264330531469
Option 2 ID : 264330531467
Option 3 ID : 264330531468
Option 4 ID : 264330531470
Status : Not Answered
Chosen Option : --

Comprehension:

In the following passage some words have been deleted. Fill in the blanks with the help of the alternatives given. Select the most appropriate option for each number.

Metal allergies can begin to act up (1) _____ minutes of putting earrings in your ears. Some people can go a few hours before having to (2) _____ the earrings out, but some can barely stand the (3) _____ enough to bother putting earrings in at all. This can be discouraging for those of us (4) _____ love to wear earrings, but fortunately hypoallergenic jewellery for (5) _____ ears exists!

SubQuestion No : 21

Q.21 Select the most appropriate option to fill in the blank No. 1.

- Ans
- ☒ 1. of
 - ☒ 2. within
 - ☒ 3. about
 - ☒ 4. with

Question Type : MCQ

Question ID : 264330136144

Option 1 ID : 264330533375

Option 2 ID : 264330533377

Option 3 ID : 264330533378

Option 4 ID : 264330533376

Status : Answered

Chosen Option : 2

Comprehension:

In the following passage some words have been deleted. Fill in the blanks with the help of the alternatives given. Select the most appropriate option for each number.

Metal allergies can begin to act up (1) _____ minutes of putting earrings in your ears. Some people can go a few hours before having to (2) _____ the earrings out, but some can barely stand the (3) _____ enough to bother putting earrings in at all. This can be discouraging for those of us (4) _____ love to wear earrings, but fortunately hypoallergenic jewellery for (5) _____ ears exists!

SubQuestion No : 22

Q.22 Select the most appropriate option to fill in the blank No. 2.

- Ans
- ☒ 1. expel
 - ☒ 2. make
 - ☒ 3. take
 - ☒ 4. hand

Question Type : MCQ

Question ID : 264330136145

Option 1 ID : 264330533382

Option 2 ID : 264330533380

Option 3 ID : 264330533379

Option 4 ID : 264330533381

Status : Answered

Chosen Option : 3

Comprehension:

In the following passage some words have been deleted. Fill in the blanks with the help of the alternatives given. Select the most appropriate option for each number.

Metal allergies can begin to act up (1) _____ minutes of putting earrings in your ears. Some people can go a few hours before having to (2) _____ the earrings out, but some can barely stand the (3) _____ enough to bother putting earrings in at all. This can be discouraging for those of us (4) _____ love to wear earrings, but fortunately hypoallergenic jewellery for (5) _____ ears exists!

SubQuestion No : 23

Q.23 Select the most appropriate option to fill in the blank No. 3.

- Ans
- ☒ 1. bomb
 - ☒ 2. discomfort
 - ☒ 3. knife
 - ☒ 4. burn

Question Type : MCQ

Question ID : 264330136146

Option 1 ID : 264330533384

Option 2 ID : 264330533386

Option 3 ID : 264330533385

Option 4 ID : 264330533383

Status : Answered

Chosen Option : 2

Comprehension:

In the following passage some words have been deleted. Fill in the blanks with the help of the alternatives given. Select the most appropriate option for each number.

Metal allergies can begin to act up (1) _____ minutes of putting earrings in your ears. Some people can go a few hours before having to (2) _____ the earrings out, but some can barely stand the (3) _____ enough to bother putting earrings in at all. This can be discouraging for those of us (4) _____ love to wear earrings, but fortunately hypoallergenic jewellery for (5) _____ ears exists!

SubQuestion No : 24

Q.24 Select the most appropriate option to fill in the blank No. 4.

- Ans
- ☒ 1. whom
 - ☒ 2. which
 - ☒ 3. who
 - ☒ 4. that

Question Type : MCQ

Question ID : 264330136147

Option 1 ID : 264330533390

Option 2 ID : 264330533387

Option 3 ID : 264330533388

Option 4 ID : 264330533389

Status : Answered

Chosen Option : 3

Comprehension:

In the following passage some words have been deleted. Fill in the blanks with the help of the alternatives given. Select the most appropriate option for each number.

Metal allergies can begin to act up (1) _____ minutes of putting earrings in your ears. Some people can go a few hours before having to (2) _____ the earrings out, but some can barely stand the (3) _____ enough to bother putting earrings in at all. This can be discouraging for those of us (4) _____ love to wear earrings, but fortunately hypoallergenic jewellery for (5) _____ ears exists!

SubQuestion No : 25

Q.25 Select the most appropriate option to fill in the blank No. 5.

- Ans
- ☒ 1. rustic
 - ☒ 2. sensitive
 - ☒ 3. soft
 - ☒ 4. modern

Question Type : MCQ

Question ID : 264330136148

Option 1 ID : 264330533392

Option 2 ID : 264330533393

Option 3 ID : 264330533394

Option 4 ID : 264330533391

Status : Answered

Chosen Option : 2

