

20/12/2020

Recruitment of SI in CAPFs ASI in CISF and SI in Delhi Police
Examination 2020 Paper I

Roll No.	
Candidate Name	
Venue Name	
Exam Date	24/11/2020
Exam Time	10:00 AM - 12:00 PM
Subject	SI CPO Examination 2020

Section : General Intelligence and Reasoning

Q.1 Eight friends A, B, C, D, E, F, G and H are sitting in a straight line, all facing the North. F is sitting between D and G. B is sitting between H and A. E is third to the left of G, who is sitting at one of the corners. H is third to the left of C. Who is sitting between A and E?

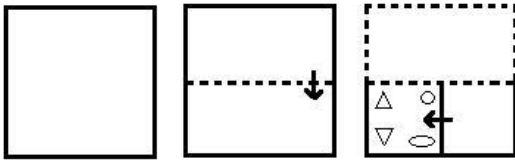
- Ans
- ☒ 1. H
 - ☒ 2. G
 - ☒ 3. B
 - ☒ 4. C

Question ID : 8161616311

Status : Not Attempted and
Marked For Review

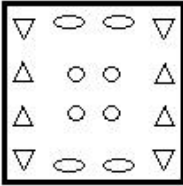
Chosen Option : --

Q.2 A paper is folded and cut as shown below. How will it appear when unfolded?

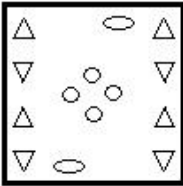


Ans

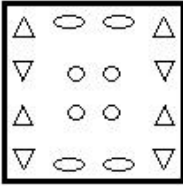
✗ 1.



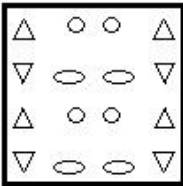
✗ 2.



✓ 3.



✗ 4.



Question ID : 8161616339

Status : Answered

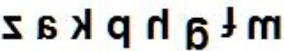
Chosen Option : 3

Q.3 Select the correct mirror image of the given combination when the mirror is placed at 'PQ' as shown below.



Ans

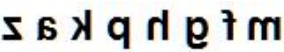
✗ 1.



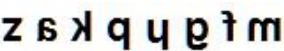
✗ 2.



✓ 3.



✗ 4.



Question ID : 8161616343

Status : Answered

Chosen Option : 3

20/12/2020

https://ssc.digialm.com/per/g27/pub/2207/touchstone/AssessmentQPHTMLMode1//2207O20153/2207O20153S3D20449/1606805...

Q.4 'A # B' means 'A is the husband of B'.

'A @ B' means 'A is the sister of B'.

'A & B' means 'A is the mother of B'.

'A % B' means 'A is the son of B'.

If S # Z @ R % K # J & T # N, then which of the following statements is NOT correct?

- Ans
- ☒ 1. K is the father-in-law of N.
 - ☒ 2. R and T are brothers.
 - ☒ 3. Z is the sister of T.
 - ☒ 4. J is the mother of S.

Question ID : 8161616313

Status : Not Attempted and
Marked For Review

Chosen Option : --

Q.5 Select the correct mirror image of the given combination when the mirror is placed at 'PQ' as shown below.

S F Q 8 P G
P
Q

- Ans
- ☒ 1. 2 F Q 8 P G
 - ☒ 2. 2 F Q 8 P G
 - ☒ 3. 2 F Q 8 P G
 - ☒ 4. 2 F Q 8 P G

Question ID : 8161616342

Status : Answered

Chosen Option : 4

Q.6 If the minute hand of a clock points towards the South at 12:00 a.m., then in which direction will the minute hand point at 3:00 a.m. in the same clock?

- Ans
- ☒ 1. South
 - ☒ 2. West
 - ☒ 3. North
 - ☒ 4. East

Question ID : 8161616331

Status : Answered

Chosen Option : 1

Q.7 If 'A' denotes 'addition', 'B' denotes 'multiplication', 'C' denotes 'subtraction', and 'D' denotes 'division', then what will be the value of the following expression?

50 D (2 B 5) A 3 B (15 A 12) C 2 B (18 C 15) = ?

- Ans
- ☒ 1. 54
 - ☒ 2. 127
 - ☒ 3. 80
 - ☒ 4. 89

Question ID : 8161616325

Status : Answered

Chosen Option : 3

20/12/2020

https://ssc.digialm.com/per/g27/pub/2207/touchstone/AssessmentQPHTMLMode1//2207O20153/2207O20153S3D20449/1606805...

Q.8 When a number is added to its next number and another number that is four times its next number, the sum of these three numbers is 95. Find the number.

- Ans**
- ☒ 1. 16
 - ☒ 2. 14
 - ☒ 3. 17
 - ☒ 4. 15

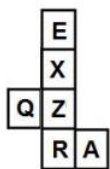
Question ID : 8161616320
Status : Answered
Chosen Option : 4

Q.9 Three of the following four letter-clusters are alike in a certain way and one is different. Pick the odd one out.

- Ans**
- ☒ 1. KNRW
 - ☒ 2. ZCGL
 - ☒ 3. HKOT
 - ☒ 4. ORVB

Question ID : 8161616301
Status : Answered
Chosen Option : 4

Q.10 A cube is made by folding the given sheet. In the cube so formed, which of the following pairs of letters will be on opposite sides?



- Ans**
- ☒ 1. R and X
 - ☒ 2. A and Z
 - ☒ 3. A and E
 - ☒ 4. Q and X

Question ID : 8161616340
Status : Answered
Chosen Option : 1

Q.11 Select the correct option that indicates the arrangement of the following words in a logical and meaningful order.

1. Kilogram
2. Gram
3. Quintal
4. Decigram
5. Milligram

- Ans**
- ☒ 1. 4, 5, 2, 3, 1
 - ☒ 2. 4, 5, 2, 1, 3
 - ☒ 3. 5, 4, 2, 1, 3
 - ☒ 4. 5, 2, 4, 1, 3

Question ID : 8161616300
Status : Answered
Chosen Option : 3

20/12/2020

https://ssc.digialm.com/per/g27/pub/2207/touchstone/AssessmentQPHTMLMode1//2207O20153/2207O20153S3D20449/1606805...

Q.12 Two statements are given, followed by three conclusions numbered I, II and III. Assuming the statements to be true, even if they seem to be at variance with commonly known facts, decide which of the conclusions logically follow(s) from the statements.

Statements:

No tree is a plum.

All pomegranates are trees.

Conclusions:

I. No pomegranate is a plum.

II. No plum is a tree.

III. Some trees are pomegranates.

- Ans** ☒ 1. All of the conclusions follow
☒ 2. Only conclusions II and III follow
☒ 3. Only conclusions I and II follow
☒ 4. Only conclusions I and III follow

Question ID : 8161616315

Status : Answered

Chosen Option : 4

Q.13 Which number will replace the question mark (?) in the following series?

24, 25, 33, 60, ? , 249

- Ans** ☒ 1. 121
☒ 2. 147
☒ 3. 124
☒ 4. 133

Question ID : 8161616317

Status : Answered

Chosen Option : 3

Q.14 What was the day of the week on 14th March 2010?

- Ans** ☒ 1. Sunday
☒ 2. Tuesday
☒ 3. Saturday
☒ 4. Monday

Question ID : 8161616322

Status : Answered

Chosen Option : 4

Q.15 Which number will replace the question mark (?) in the following series?

160, 183, 213, 252, 303, ? , 446

- Ans** ☒ 1. 367
☒ 2. 361
☒ 3. 379
☒ 4. 333

Question ID : 8161616319

Status : Answered

Chosen Option : 1

20/12/2020

<https://ssc.digialm.com/per/g27/pub/2207/touchstone/AssessmentQPHTMLMode1//2207O20153/2207O20153S3D20449/1606805...>

Q.16 In a group of 73 friends, 14 friends go to Gym and Karate classes both, whereas 7 friends neither go to Gym class nor to Karate class. If a total of 36 friends go to Gym class, then how many friends go to only Karate class?

- Ans**
- ☒ 1. 30
 - ☐ 2. 32
 - ☐ 3. 44
 - ☐ 4. 23

Question ID : 8161616321
Status : Answered
Chosen Option : 1

Q.17 In a code language, 'OBESITY' is written as 'EBOHYTI'. How will 'FIXTURE' be written in that language?

- Ans**
- ☒ 1. XIFGERU
 - ☐ 2. XIFMERU
 - ☐ 3. XIFGEUS
 - ☐ 4. IFYGERU

Question ID : 8161616307
Status : Answered
Chosen Option : 1

Q.18 Which number will replace the question mark (?) in the following series?
65, 62, 56, 47, 35, ?

- Ans**
- ☐ 1. 21
 - ☒ 2. 20
 - ☐ 3. 11
 - ☐ 4. 25

Question ID : 8161616316
Status : Answered
Chosen Option : 2

Q.19 Select the correct combination of mathematical signs that can sequentially replace the * signs from left to right to balance the following equation.
 $15 * 5 * 24 * 140 * 7 * 71$

- Ans**
- ☐ 1. $\div, +, -, \times, =$
 - ☐ 2. $\times, -, \div, +, =$
 - ☒ 3. $\times, -, +, \div, =$
 - ☐ 4. $\times, \div, +, -, =$

Question ID : 8161616326
Status : Answered
Chosen Option : 3

Q.20 Which two numbers should be interchanged to make the given equation correct?

$$36 \times 12 + 48 \div 6 - 18 = 202$$

- Ans
- ☒ 1. 6 and 18
 - ☒ 2. 6 and 12
 - ☒ 3. 36 and 18
 - ☒ 4. 36 and 48

Question ID : 8161616324
Status : Answered
Chosen Option : 2

Q.21 Two statements are given, followed by two conclusions numbered I and II. Assuming the statements to be true, even if they seem to be at variance with commonly known facts, decide which of the conclusions logically follow(s) from the statements.

Statements:

All farmers are doctors.

All doctors are magicians.

Conclusions:

I. All farmers are magicians.

II. No farmer is a magician.

- Ans
- ☒ 1. Only conclusion II follows
 - ☒ 2. Both the conclusions follow
 - ☒ 3. Only conclusion I follows
 - ☒ 4. Either conclusion I or II follows

Question ID : 8161616314
Status : Answered
Chosen Option : 3

Q.22 Study the given pattern carefully and select the number that can replace the question mark (?) in it.

14	26	182
24	16	192
?	22	187

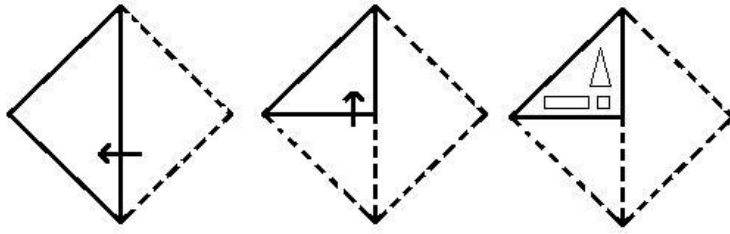
- Ans
- ☒ 1. 21
 - ☒ 2. 30
 - ☒ 3. 23
 - ☒ 4. 17

Question ID : 8161616328
Status : Answered
Chosen Option : 4

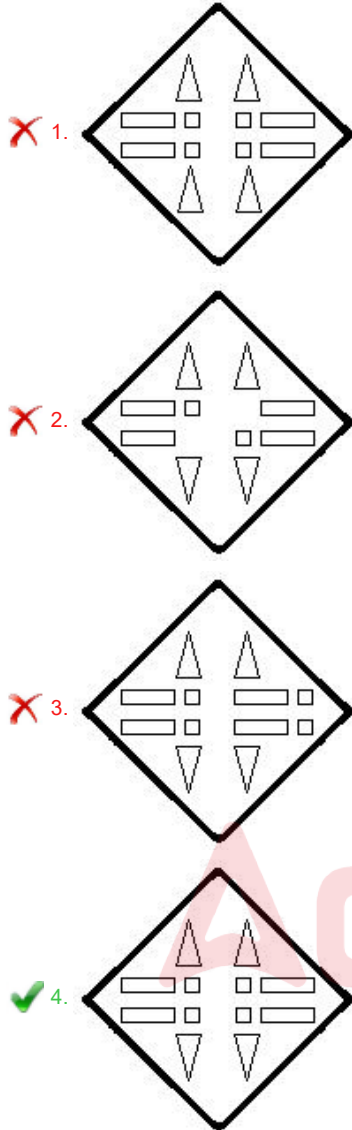
20/12/2020

<https://ssc.digialm.com/per/g27/pub/2207/touchstone/AssessmentQPHTMLMode1//2207O20153/2207O20153S3D20449/1606805...>

Q.23 A paper is folded and cut as shown below. How will it appear when unfolded?



Ans



Question ID : 8161616338

Status : Answered

Chosen Option : 4

Q.24 In a code language, if 'I like chocolates' is written as '958', 'we bought chocolates' is written as '153', and 'we like them' is written as '816', then how would 'I bought them' be written in this language?

- Ans
- ✓ 1. 936
 - ✗ 2. 859
 - ✗ 3. 951
 - ✗ 4. 251

Question ID : 8161616306

Status : Answered

Chosen Option : 1

20/12/2020

https://ssc.digialm.com/per/g27/pub/2207/touchstone/AssessmentQPHTMLMode1//2207O20153/2207O20153S3D20449/1606805...

Q.25 Study the given pattern carefully and select the number that can replace the question mark (?) in it.

17	18	19
21	22	?
396	437	520

- Ans**
- ☒ 1. 30
 - ☒ 2. 27
 - ☒ 3. 25
 - ☒ 4. 28

Question ID : **8161616330**
Status : **Answered**
Chosen Option : **3**

Q.26 Select the option that is related to the third letter-cluster in the same way as the second letter-cluster is related to the first letter-cluster.

VOWEL : ZPAFP :: FRICK : ?

- Ans**
- ☒ 1. OGMVH
 - ☒ 2. JVMGO
 - ☒ 3. JVGOK
 - ☒ 4. JVJGO

Question ID : **8161616304**
Status : **Answered**
Chosen Option : **4**

Q.27 Select the letter-cluster that can replace the question mark (?) in the given letter-cluster series.

KOY, JPX, IQW, HRV, ?

- Ans**
- ☒ 1. ETU
 - ☒ 2. GSU
 - ☒ 3. GSV
 - ☒ 4. GRU

Question ID : **8161616297**
Status : **Answered**
Chosen Option : **2**

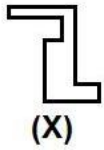
Q.28 Study the given pattern carefully and select the number that can replace the question mark (?) in it.

125	8	64
27	55	72
135	?	288

- Ans**
- ☒ 1. 192
 - ☒ 2. 144
 - ☒ 3. 110
 - ☒ 4. 208

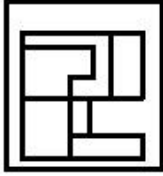
Question ID : **8161616329**
Status : **Answered**
Chosen Option : **3**

Q.29 Select the option in which the given figure (X) is embedded (rotation is NOT allowed).




Ans

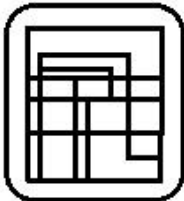
✗ 1.



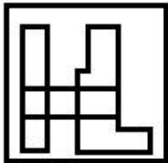
✗ 2.



✓ 3.



✗ 4.



Question ID : 8161616336
Status : Answered
Chosen Option : 3

Q.30 Select the number-pair in which the two numbers are related in the same way as are the two numbers of the following number-pair.

14 : 588

Ans

✗ 1. 20 : 980

✓ 2. 18 : 972

✗ 3. 12 : 666

✗ 4. 11 : 344

Question ID : 8161616323
Status : Answered
Chosen Option : 2

Q.31 Select the letter-cluster that can replace the question mark (?) in the given letter-cluster series.

THC, DIU, VJE, FKW, XLG, ?

Ans

✗ 1. GMX

✗ 2. HNZ

✓ 3. HMY

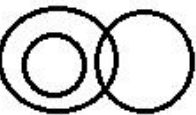
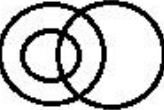
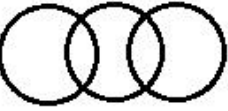

✗ 4. FKX

Question ID : 8161616298
Status : Answered
Chosen Option : 3

Q.32 Select the Venn diagram that best illustrates the relationship between the following classes.

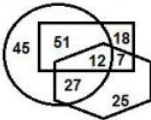
Infants, Fathers, Males

Ans

- ✓ 1. 
- ✗ 2. 
- ✗ 3. 
- ✗ 4. 

Question ID : 8161616344
Status : Answered
Chosen Option : 1

Q.33 In the following Venn diagram, the 'Circle' stands for 'Lawyers', the 'Hexagon' stands for 'Females' and the 'Rectangle' stands for 'Food-lovers'. The given numbers represent the number of persons in that particular category. How many females are both food-lovers and lawyers?



Ans

- ✗ 1. 19
- ✓ 2. 12
- ✗ 3. 27
- ✗ 4. 7

Question ID : 8161616345
Status : Answered
Chosen Option : 2

20/12/2020

<https://ssc.digialm.com/per/g27/pub/2207/touchstone/AssessmentQPHTMLMode1//2207O20153/2207O20153S3D20449/1606805...>

Q.34 Select the option figure which is embedded in the figure (X) given below (rotation is NOT allowed).



(X)

Ans

✓ 1.



✗ 2.



✗ 3.



✗ 4.



Question ID : 8161616337

Status : Answered

Chosen Option : 1

Q.35 In a code language, if 'fast and furious' is written as 'co mo jo', 'do it fast' is written as 'cha mo ga', and 'she did it' is written as 'ga la nop', then what will be the code for the word 'do' in this language?

Ans

✗ 1. ga

✗ 2. mo

✓ 3. cha

✗ 4. nop

Question ID : 8161616305

Status : Answered

Chosen Option : 3

20/12/2020

<https://ssc.digialm.com/per/g27/pub/2207/touchstone/AssessmentQPHTMLMode1//2207O20153/2207O20153S3D20449/1606805...>

Q.36 Select the figure that will replace the question mark (?) in the following figure series.



Ans

- 1.
- 2.
- 3.
- 4.

Question ID : 8161616333
Status : Answered
Chosen Option : 3

Q.37 Select the option that represents the correct order of the given words as they would appear in an English dictionary.

1. Pristine
2. Precious
3. Pressure
4. Presume
5. Precaution

- Ans
1. 5, 2, 3, 4, 1
2. 1, 2, 3, 4, 5
3. 5, 2, 4, 3, 1
4. 5, 3, 2, 4, 1

Question ID : 8161616299
Status : Answered
Chosen Option : 1

20/12/2020

<https://ssc.digialm.com/per/g27/pub/2207/touchstone/AssessmentQPHTMLMode1//2207O20153/2207O20153S3D20449/1606805...>

Q.38 Preeti is the only sister of Virat. Manoj is the son of Dileep, who is the husband of Maaya. Virat is the son of Devansh. Devansh is Manoj's father-in-law. How is Maaya related to Preeti?

- Ans**
- ☒ 1. Mother-in-law
 - ☐ 2. Daughter-in-law
 - ☐ 3. Sister-in-law
 - ☐ 4. Mother

Question ID : **8161616312**
Status : **Answered**
Chosen Option : **1**

Q.39 Bismita walks 200 m towards the East and then turns right and walks 210 m to reach a hospital. What is the shortest distance between the starting point and the hospital?

- Ans**
- ☐ 1. 310 m
 - ☒ 2. 290 m
 - ☐ 3. 220 m
 - ☐ 4. 260 m

Question ID : **8161616332**
Status : **Answered**
Chosen Option : **2**

Q.40 In a code language, 'PLUM' is written as 'KQOMFVNN'. How will 'BIG' be written in that language?

- Ans**
- ☐ 1. YCRKTM
 - ☐ 2. CYRJGT
 - ☐ 3. XCSJTH
 - ☒ 4. YCRJTH

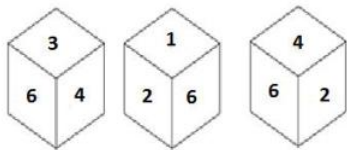
Question ID : **8161616308**
Status : **Answered**
Chosen Option : **4**

Q.41 Which number will replace the question mark (?) in the following series?
3, 12, 52, 159, 640, ?

- Ans**
- ☐ 1. 1910
 - ☐ 2. 1731
 - ☐ 3. 1863
 - ☒ 4. 1923

Question ID : **8161616318**
Status : **Answered**
Chosen Option : **4**

Q.42 Three different positions of the same dice are shown, the six faces of which are numbered from 1 to 6. Select the number that will be on the face opposite to the face showing '1'.



- Ans**
- ☒ 1. 3
 - ☒ 2. 2
 - ☒ 3. 5
 - ☒ 4. 4

Question ID : 8161616341
Status : Answered
Chosen Option : 4

Q.43 Study the given pattern carefully and select the number that can replace the question mark (?) in it.

17	41	?
15	24	29
49	106	85

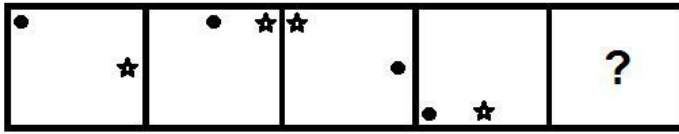
- Ans**
- ☒ 1. 37
 - ☒ 2. 28
 - ☒ 3. 32
 - ☒ 4. 24

Question ID : 8161616327
Status : Not Attempted and Marked For Review
Chosen Option : --

20/12/2020

https://ssc.digialm.com/per/g27/pub/2207/touchstone/AssessmentQPHTMLMode1//2207O20153/2207O20153S3D20449/1606805...

Q.44 Select the figure that will replace the question mark (?) in the following figure series.



Ans

- 1.
- 2.
- 3.
- 4.

Question ID : 8161616334
Status : Answered
Chosen Option : 2

Q.45 Select the letter-cluster that can replace the question mark (?) in the given letter-cluster series.

UKS, ZPX, EUC, JZH, ?

Ans

1. ODN
2. OEM
3. PEM
4. ODM

Question ID : 8161616296
Status : Answered
Chosen Option : 2

Q.46 Select the option that is related to the third letter-cluster in the same way as the second letter-cluster is related to the first letter-cluster.

BEST : WVHE :: CROP : ?

Ans

1. SRVG
2. SRUF
3. RTUF
4. PRUM

Question ID : 8161616303
Status : Answered
Chosen Option : 2

20/12/2020

<https://ssc.digialm.com/per/g27/pub/2207/touchstone/AssessmentQPHTMLMode1//2207O20153/2207O20153S3D20449/1606805...>

Q.47 In a code language, 'BLOCK' is written as '31316412'. How will 'SUPREME' be written in that language?

- Ans
- ☒ 1. 192116185605
 - ☒ 2. 202217196146
 - ☒ 3. 202317206146
 - ☒ 4. 192217196156

Question ID : 8161616309

Status : Answered

Chosen Option : 2

Q.48 Three of the following four letter-clusters are alike in a certain way and one is different. Pick the odd one out.

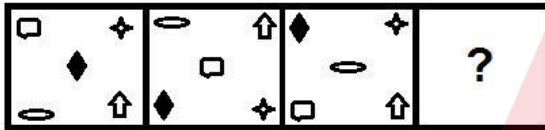
- Ans
- ☒ 1. BYFC
 - ☒ 2. MNRT
 - ☒ 3. GTKX
 - ☒ 4. SHWL

Question ID : 8161616302

Status : Answered

Chosen Option : 2

Q.49 Select the figure that will replace the question mark (?) in the following figure series.



Ans

- ☒ 1.
- ☒ 2.
- ☒ 3.
- ☒ 4.

Question ID : 8161616335

Status : Answered

Chosen Option : 4

Q.50 Six friends P, Q, R, S, T and U are sitting around a circular table, facing the centre of the table. P is second to right of S. Q is sitting to the immediate left of T. P is sitting between R and U. S is sitting to the immediate left of R. Who is sitting between P and S?

- Ans**
- ☒ 1. Q
 - ☒ 2. R
 - ☒ 3. T
 - ☒ 4. U

Question ID : 8161616310
Status : Not Attempted and Marked For Review
Chosen Option : --

Section : General Knowledge and General Awareness

Q.1 The princely state of Hyderabad was brought under the Indian Union in the year _____.

- Ans**
- ☒ 1. 1952
 - ☒ 2. 1963
 - ☒ 3. 1950
 - ☒ 4. 1948

Question ID : 8161616391
Status : Answered
Chosen Option : 4

Q.2 In which of the following places is the Govardhan Math located?

- Ans**
- ☒ 1. Badrinath
 - ☒ 2. Dwarka
 - ☒ 3. Sringeri
 - ☒ 4. Puri

Question ID : 8161616346
Status : Answered
Chosen Option : 2

Q.3 Viticulture refers to the:

- Ans**
- ☒ 1. breeding of fish
 - ☒ 2. cultivation of grapes
 - ☒ 3. commercial rearing of silkworm
 - ☒ 4. growing of vegetables

Question ID : 8161616371
Status : Answered
Chosen Option : 2

Q.4 Who among the following did NOT belong to the Rajput kingdom of Marwar?

- Ans

☒

1. Rana Kumbha

☐

2. Rao Chanda

☐

3. Maldeva

☐

4. Rao Jodha

Question ID : 8161616375

Status : Answered

Chosen Option : 3

Q.5 Which of the following Viceroys appointed the Hunter Commission in 1882?

- Ans

☐

1. Lord Minto

☐

2. Lord Mayo

☐

3. Lord Lytton

☒

4. Lord Ripon

Question ID : 8161616376

Status : Answered

Chosen Option : 2

Q.6 Part IV of the Indian Constitution contains the provisions on:

- Ans

☐

1. Fundamental Rights

☐

2. Citizenship

☐

3. Elections

☒

4. Directive Principles of State Policy

Question ID : 8161616386

Status : Answered

Chosen Option : 4

Q.7 Vailankanni (Velankanni) is a pilgrim centre located in the _____ district of Tamil Nadu.

- Ans

☒

1. Nagapattinam

☐

2. Salem

☐

3. Theni

☐

4. Madurai

Question ID : 8161616347

Status : Answered

Chosen Option : 1

Q.8 Who among the following is the only Indian shuttler to have won a Summer Olympics silver medal?

- Ans

☐

1. Pulela Gopichand

☐

2. Prakash Padukone

☒

3. PV Sindhu

☐

4. Saina Nehwal

Question ID : 8161616392

Status : Answered

Chosen Option : 1

Q.9 The headquarters of the World Trade Organization is located at:

- Ans

☒

1. Paris

☒

2. Geneva

☒

3. Dubai

☒

4. Bonn

Question ID : 8161616351

Status : Answered

Chosen Option : 2

Q.10 Who was the coach of the Indian men’s football team at the Intercontinental Cup, 2019?

- Ans

☒

1. Stephen Constantine

☒

2. Igor Stimac

☒

3. Baichung Bhutia

☒

4. Prasanta Banerjee

Question ID : 8161616394

Status : Answered

Chosen Option : 4

Q.11 Who was the 24th Governor of the Reserve Bank of India?

- Ans

☒

1. C Rangarajan

☒

2. YV Reddy

☒

3. Urjit Patel

☒

4. Bimal Jalan

Question ID : 8161616381

Status : Answered

Chosen Option : 3

Q.12 The approximate period between two consecutive new moons is _____ days.

- Ans

☒

1. 14.5

☒

2. 15.5

☒

3. 29.5

☒

4. 28.5

Question ID : 8161616361

Status : Answered

Chosen Option : 1

Q.13 Which among the following are called the amphibians of the plant kingdom?

- Ans

☒

1. Gymnosperms

☒

2. Pteridophytes

☒

3. Bryophytes

☒

4. Liverworts

Question ID : 8161616364

Status : Answered

Chosen Option : 2

Q.14 Which among the following organisations releases Index of Economic Freedom?

Ans

☒ 1. World Bank

☒ 2. Fraser Institute

☒ 3. International Monetary Fund

☒ 4. Heritage Foundation

Question ID : 8161616354

Status : Answered

Chosen Option : 2

Q.15 With reference to the United Nations' Sustainable Development Goals, which of the following is SDG 10?

Ans

☒ 1. Decent work and economic growth

☒ 2. Climate action

☒ 3. Zero hunger

☒ 4. Reduced inequalities

Question ID : 8161616353

Status : Answered

Chosen Option : 3

Q.16 Which of the following Articles of the Constitution of India prohibits employment of children in factories etc.?

Ans

☒ 1. 31

☒ 2. 17

☒ 3. 21

☒ 4. 24

Question ID : 8161616387

Status : Answered

Chosen Option : 4

Q.17 Rajiv Gandhi Khel Ratna Award is accorded annually by the:

Ans

☒ 1. Rajiv Gandhi Memorial Trust

☒ 2. Ministry of Youth Affairs and Sports, Govt. of India

☒ 3. Indian National Congress

☒ 4. Ministry of Human Resource Development, Govt. of India

Question ID : 8161616382

Status : Answered

Chosen Option : 2

Q.18 Vibration of which among the following produces only odd harmonics?

Ans

☒ 1. A vibrating rod fixed at two ends

☒ 2. A vibrating string fixed at two ends

☒ 3. An air column in a closed organ pipe

☒ 4. An air column in an open organ pipe

Question ID : 8161616366

Status : Answered

Chosen Option : 3

https://ssc.digialm.com/per/g27/pub/2207/touchstone/AssessmentQPHTMLMode1//2207O20153/2207O20153S3D20449/1606805323104912...

21/58

Q.19 The Rig Veda is divided into _____ books or mandalas.

- Ans ☒ 1. 34
☒ 2. 10
☒ 3. 12
☒ 4. 8

Question ID : 8161616377
 Status : Answered
 Chosen Option : 3

Q.20 What is the number of hydrogen atoms in a molecule of calcium bicarbonate?

- Ans ☒ 1. 0
☒ 2. 1
☒ 3. 2
☒ 4. 4

Question ID : 8161616359
 Status : Answered
 Chosen Option : 3

Q.21 The Summer Olympic Games 2000 were held at:

- Ans ☒ 1. Paris
☒ 2. Athens
☒ 3. Seoul
☒ 4. Sydney

Question ID : 8161616395
 Status : Answered
 Chosen Option : 1

Q.22 In the context of Sri Lankan Civil War, what does the first 'T' in LTTE stand for?

- Ans ☒ 1. Tigers
☒ 2. Tamil
☒ 3. Tarantulas
☒ 4. Triumph

Question ID : 8161616390
 Status : Answered
 Chosen Option : 4

Q.23 The Goods and Services Tax (GST) – which has replaced the Central and State indirect taxes such as VAT, excise duty and service tax in India – was implemented on:

- Ans ☒ 1. 1 July 2017
☒ 2. 15 August 2017
☒ 3. 15 September 2017
☒ 4. 2 October 2017

Question ID : 8161616352
 Status : Answered
 Chosen Option : 1

Q.24 Which of the following persons was the recipient of the inaugural Infosys Prize for Social Sciences – History, 2009?

Ans

✖

1. Hari Vasudevan

✖

2. Krishna Kumar

✔

3. Upinder Singh

✖

4. Amlan Datta

Question ID : 8161616384

Status : Not Answered

Chosen Option : --

Q.25 Which among the following is NOT true about a solution and the solute concerned?

Ans

✖

1. The particles of the solute do not scatter a beam of light.

✖

2. A solution is a homogeneous mixture.

✔

3. The particles of the solute settle down at the bottom when the solution is kept undisturbed.

✖

4. The particles of the solute cannot be seen with unaided eyes.

Question ID : 8161616358

Status : Answered

Chosen Option : 1

Q.26 The Silent Valley Movement was started in 1973 in the state of:

Ans

✖

1. Andhra Pradesh

✔

2. Kerala

✖

3. Odisha

✖

4. Himachal Pradesh

Question ID : 8161616367

Status : Answered

Chosen Option : 2

Q.27 With which sport would you associate the name Sathish Sivalingam?

Ans

✔

1. Weightlifting

✖

2. Boxing

✖

3. Hockey

✖

4. Wrestling

Question ID : 8161616393

Status : Answered

Chosen Option : 1

Q.28 Who among the following is the founder of the social activist organisation called ‘Global March Against Child Labour’?

Ans

✖

1. Anna Hazare

✖

2. Kiran Bedi

✔

3. Kailash Satyarthi

✖

4. Baba Amte

Question ID : 8161616380

Status : Answered

Chosen Option : 3

https://ssc.digialm.com/per/g27/pub/2207/touchstone/AssessmentQPHTMLMode1//2207O20153/2207O20153S3D20449/1606805323104912...

23/58

20/12/2020

<https://ssc.digialm.com/per/g27/pub/2207/touchstone/AssessmentQPHTMLMode1//2207O20153/2207O20153S3D20449/1606805...>

Q.29 Leukaemia is a cancer of the:

- Ans
- ☒ 1. lungs
 - ☒ 2. uterus
 - ☒ 3. skin
 - ☒ 4. blood

Question ID : 8161616363
Status : Answered
Chosen Option : 4

Q.30 In respect of classification of algae, the members of Phaeophyceae are commonly called:

- Ans
- ☒ 1. green algae
 - ☒ 2. white algae
 - ☒ 3. brown algae
 - ☒ 4. red algae

Question ID : 8161616362
Status : Answered
Chosen Option : 1

Q.31 The tomb of Itimad-ud-Daulah, inlaid with Pietra dura decoration, is located at:

- Ans
- ☒ 1. Aurangabad
 - ☒ 2. Agra
 - ☒ 3. Ajmer
 - ☒ 4. Alwar

Question ID : 8161616348
Status : Answered
Chosen Option : 1

Q.32 Which of the following terms is associated with the anatomy of the human heart?

- Ans
- ☒ 1. Cerebrum
 - ☒ 2. Aorta
 - ☒ 3. Medulla
 - ☒ 4. Cerebellum

Question ID : 8161616365
Status : Answered
Chosen Option : 2

Q.33 1 horse power is equal to approximately _____ watts.

- Ans
- ☒ 1. 500
 - ☒ 2. 250
 - ☒ 3. 750
 - ☒ 4. 1000

Question ID : 8161616357
Status : Answered
Chosen Option : 3

<p>Q.34 The 'Kathasaritsagara' is written by:</p> <p>Ans <input checked="" type="checkbox"/> 1. Somadeva</p> <p><input checked="" type="checkbox"/> 2. Kalidasa</p> <p><input checked="" type="checkbox"/> 3. Jayadeva</p> <p><input checked="" type="checkbox"/> 4. Bhasa</p>	<p>Question ID : 8161616378</p> <p>Status : Answered</p> <p>Chosen Option : 2</p>
<p>Q.35 According to the Groundnut Crop Survey Report 2018, which of the following states is the largest producer of groundnuts?</p> <p>Ans <input checked="" type="checkbox"/> 1. West Bengal</p> <p><input checked="" type="checkbox"/> 2. Haryana</p> <p><input checked="" type="checkbox"/> 3. Gujarat</p> <p><input checked="" type="checkbox"/> 4. Bihar</p>	<p>Question ID : 8161616369</p> <p>Status : Answered</p> <p>Chosen Option : 3</p>
<p>Q.36 How many natural satellites does the planet Venus have?</p> <p>Ans <input checked="" type="checkbox"/> 1. 1</p> <p><input checked="" type="checkbox"/> 2. 2</p> <p><input checked="" type="checkbox"/> 3. 3</p> <p><input checked="" type="checkbox"/> 4. 0</p>	<p>Question ID : 8161616368</p> <p>Status : Answered</p> <p>Chosen Option : 1</p>
<p>Q.37 In which year did the first SAARC summit take place?</p> <p>Ans <input checked="" type="checkbox"/> 1. 1985</p> <p><input checked="" type="checkbox"/> 2. 1992</p> <p><input checked="" type="checkbox"/> 3. 1972</p> <p><input checked="" type="checkbox"/> 4. 1990</p>	<p>Question ID : 8161616388</p> <p>Status : Answered</p> <p>Chosen Option : 2</p>
<p>Q.38 Which part of the brain is instrumental in making it possible for a person to perform activity such as picking up a pencil from the floor?</p> <p>Ans <input checked="" type="checkbox"/> 1. Cranium</p> <p><input checked="" type="checkbox"/> 2. Hypothalamus</p> <p><input checked="" type="checkbox"/> 3. Cerebrum</p> <p><input checked="" type="checkbox"/> 4. Cerebellum</p>	<p>Question ID : 8161616360</p> <p>Status : Not Answered</p> <p>Chosen Option : --</p>

Q.39 Standing in an open ground on a cloudless day, at what time will your shadow be the shortest?

- Ans
- ☒ 1. 09:00
 - ☒ 2. 07:00
 - ☒ 3. 15:00
 - ☒ 4. 12:00

Question ID : 8161616372
Status : Answered
Chosen Option : 4

Q.40 The 90 degree East Meridian does NOT pass through:

- Ans
- ☒ 1. Sikkim
 - ☒ 2. Meghalaya
 - ☒ 3. Bangladesh
 - ☒ 4. Bhutan

Question ID : 8161616373
Status : Answered
Chosen Option : 4

Q.41 What is the meaning of the Greek origin word, 'Elektron'?

- Ans
- ☒ 1. Ebonite
 - ☒ 2. Charge
 - ☒ 3. Amber
 - ☒ 4. Negative

Question ID : 8161616356
Status : Answered
Chosen Option : 2

Q.42 Kamban wrote the Ramayana in which of the following languages?

- Ans
- ☒ 1. Malayalam
 - ☒ 2. Telugu
 - ☒ 3. Tamil
 - ☒ 4. Kannada

Question ID : 8161616350
Status : Not Answered
Chosen Option : --

Q.43 The National Anthem of India, 'Jana Gana Mana' was first sung at the _____ Session of the Indian National Congress.

- Ans
- ☒ 1. Calcutta
 - ☒ 2. Lahore
 - ☒ 3. Belgaum
 - ☒ 4. Tripuri

Question ID : 8161616379
Status : Answered
Chosen Option : 1

Q.44 Which of the following persons won the Sultan Padamsee Playwriting Award for his first play 'Larins Sahib'?

- Ans
- ☒ 1. Amitav Ghosh
 - ☐ 2. Gurcharan Das
 - ☒ 3. Ramchandra Guha
 - ☒ 4. Shashi Tharoor

Question ID : 8161616385
Status : Answered
Chosen Option : 3

Q.45 'Bathukamma' and 'Bonalu' are state festivals of:

- Ans
- ☒ 1. Kerala
 - ☐ 2. Telangana
 - ☒ 3. Tamil Nadu
 - ☒ 4. Karnataka

Question ID : 8161616349
Status : Answered
Chosen Option : 1

Q.46 Which section of the RBI Act empowers the Central Government to supersede the RBI board and issue directions considered to be 'necessary in public interest' to the RBI, after consulting the Governor of the bank?

- Ans
- ☒ 1. Section 1
 - ☒ 2. Section 5
 - ☐ 3. Section 7
 - ☒ 4. Section 3

Question ID : 8161616355
Status : Not Answered
Chosen Option : --

Q.47 Who is the author of the book 'We Are Displaced'?

- Ans
- ☒ 1. Amrita Pritam
 - ☐ 2. Malala Yousafzai
 - ☒ 3. Amrit Singh
 - ☒ 4. Arnab Goswami

Question ID : 8161616383
Status : Answered
Chosen Option : 2

Q.48 Kalinjar Fort, which was strategically important during medieval times, is located in:

- Ans
- ☐ 1. Uttar Pradesh
 - ☒ 2. Punjab
 - ☒ 3. Rajasthan
 - ☒ 4. Sind

Question ID : 8161616374
Status : Answered
Chosen Option : 4

20/12/2020

<https://ssc.digialm.com/per/g27/pub/2207/touchstone/AssessmentQPHTMLMode1//2207O20153/2207O20153S3D20449/1606805...>

Q.49 Bangladesh was a part of Pakistan from _____ to _____.

- Ans
- ☒ 1. 1947; 1962
 - ☒ 2. 1947; 1989
 - ☒ 3. 1947; 1958
 - ☒ 4. 1947; 1971

Question ID : 8161616389
Status : Answered
Chosen Option : 4

Q.50 The Tata Iron and Steel Company (TISCO) is located at which of the following places?

- Ans
- ☒ 1. Rourkela
 - ☒ 2. Bhilai
 - ☒ 3. Durgapur
 - ☒ 4. Jamshedpur

Question ID : 8161616370
Status : Answered
Chosen Option : 2

Section : Quantitative Aptitude

Q.1 A and B can do a piece of work in 36 days. B and C can do the same work in 60 days. A and C can do the same work in 45 days. In how many days can B alone complete the same work?

- Ans
- ☒ 1. 45
 - ☒ 2. 60
 - ☒ 3. 90
 - ☒ 4. 120

Question ID : 8161616418
Status : Answered
Chosen Option : 3

Q.2 A sum of ₹8,200 was divided among A, B and C in such a way that A had ₹500 more than B and C had ₹300 more than A. How much was C's share (in ₹)?

- Ans
- ☒ 1. 3,100
 - ☒ 2. 2,000
 - ☒ 3. 2,300
 - ☒ 4. 2,800

Question ID : 8161616412
Status : Answered
Chosen Option : 1

20/12/2020

<https://ssc.digialm.com/per/g27/pub/2207/touchstone/AssessmentQPHTMLMode1//2207O20153/2207O20153S3D20449/1606805...>

Q.3 If the average price of three chairs is ₹14,014 and their prices are in the ratio of 3 : 4 : 7, then the highest price (in ₹) of chair is:

- Ans**
- ☒ 1. 3,003
 - ☒ 2. 1,001
 - ☒ 3. 7,007
 - ☒ 4. 5,005

Question ID : 8161616403
Status : Answered
Chosen Option : 3

Q.4 ABCD is a cyclic quadrilateral such that AB is a diameter of the circle circumscribing it and $\angle ADC = 118^\circ$. What is the measure of $\angle BAC$?

- Ans**
- ☒ 1. 28°
 - ☒ 2. 45°
 - ☒ 3. 32°
 - ☒ 4. 30°

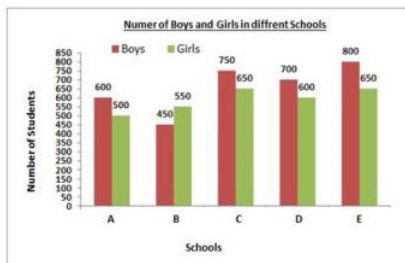
Question ID : 8161616429
Status : Answered
Chosen Option : 1

Q.5 The two parallel sides of a trapezium are 17 cm and 15 cm, respectively. If the height of the trapezium is 6 cm, then its area (in m^2) is:

- Ans**
- ☒ 1. 9.6
 - ☒ 2. 960
 - ☒ 3. 0.96
 - ☒ 4. 0.0096

Question ID : 8161616422
Status : Answered
Chosen Option : 4

Q.6 The given bar graph represents the number of boys and girls in five different schools. Read the graph and answer the question that follows.



What is the average number of students (girls and boys) in schools A, B, C, D and E?

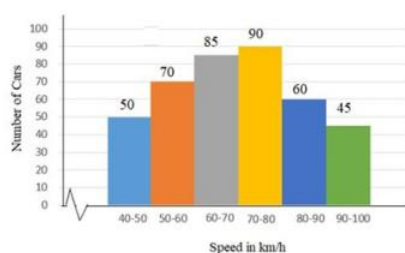
- Ans**
- ☒ 1. 1250
 - ☒ 2. 625
 - ☒ 3. 660
 - ☒ 4. 596

Question ID : 8161616438
Status : Answered
Chosen Option : 1

20/12/2020

<https://ssc.digialm.com/per/g27/pub/2207/touchstone/AssessmentQPHTMLMode1//2207O20153/2207O20153S3D20449/1606805...>

Q.7 The given histogram shows the frequency distribution of the speed of cars passing through a particular spot on a highway. Read the graph and answer the following question.



What is the ratio of the number of cars with speed less than 60 km/h to the number of cars with speed more than 70 km/h?

- Ans**
- ☒ 1. 8 : 13
 - ☐ 2. 5 : 8
 - ☐ 3. 13 : 8
 - ☐ 4. 8 : 5

Question ID : 8161616444
Status : Answered
Chosen Option : 1

Q.8 The length of the shadow of a vertical pole on the ground is 36 m. If the angle of elevation of the sun at that time is θ , such that $\sec\theta = \frac{13}{12}$, then what is the height (in cm) of the pole?

- Ans**
- ☐ 1. 12
 - ☒ 2. 15
 - ☐ 3. 18
 - ☐ 4. 9

Question ID : 8161616436
Status : Answered
Chosen Option : 2

Q.9 A bus covers a 60 kilometre distance in 1 hour 30 minutes, whereas the same distance is covered by a car in 45 minutes. What is the ratio of the speed of the car to the speed of the bus?

- Ans**
- ☐ 1. 5 : 3
 - ☐ 2. 3 : 5
 - ☐ 3. 1 : 2
 - ☒ 4. 2 : 1

Question ID : 8161616420
Status : Answered
Chosen Option : 4

Q.10 A man bought an article and sold it at a gain of 10%. If he had bought the article at 20% less and sold it for ₹1,000 more, he would have made a profit of 40%. The earlier selling price of the article (in ₹) is:

- Ans**
- ☒ 1. 55,000
 - ☐ 2. 60,000
 - ☐ 3. 50,000
 - ☐ 4. 40,000

Question ID : 8161616411
Status : Answered
Chosen Option : 2

20/12/2020

<https://ssc.digialm.com/per/g27/pub/2207/touchstone/AssessmentQPHTMLMode1//2207O20153/2207O20153S3D20449/1606805...>

Q.11 PA and PB are two tangents from a point P outside the circle with centre O at the points A and B on it. If $\angle APB = 130^\circ$, then $\angle OAB$ is equal to:

- Ans
- ☒ 1. 45°
 - ☒ 2. 50°
 - ☒ 3. 35°
 - ☒ 4. 65°

Question ID : 8161616430

Status : Answered

Chosen Option : 4

Q.12 A person covers a distance of 300 km and then returns to the starting point. The time taken by him for the outward journey is 5 hours more than the time taken for the return journey. If he returned at a speed of 10 km/h more than the speed of going, what was the speed (in km/h) for the outward journey?

- Ans
- ☒ 1. 15
 - ☒ 2. 20
 - ☒ 3. 30
 - ☒ 4. 25

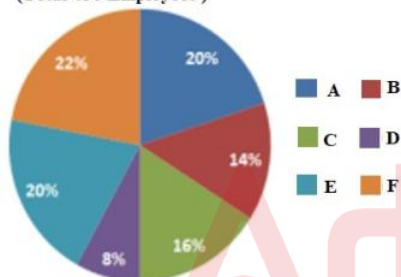
Question ID : 8161616419

Status : Answered

Chosen Option : 2

Q.13 The given pie chart shows the percentage distribution of 450 employees in an organisation. Read the pie chart and answer the question that follows.

**Percentage of Employees in different Departments
(Total 450 Employees)**



What is the central angle of the sector representing the number of employees in department E?

- Ans
- ☒ 1. 36°
 - ☒ 2. 108°
 - ☒ 3. 72°
 - ☒ 4. 90°

Question ID : 8161616441

Status : Answered

Chosen Option : 3

20/12/2020

<https://ssc.digialm.com/per/g27/pub/2207/touchstone/AssessmentQPHTMLMode1//2207O20153/2207O20153S3D20449/1606805...>

Q.14 A solid metallic cube of side 9 cm and a solid metallic cuboid having dimensions 5 cm, 13 cm, 31 cm are melted to form a single cube. How much (in ₹) is the cost to polish the new cube at a rate of ₹10 per cm²?

- Ans
- ☒ 1. 8,650
 - ☒ 2. 27,440
 - ☒ 3. 13,620
 - ☒ 4. 11,760

Question ID : 8161616423
Status : Answered
Chosen Option : 3

Q.15 If house tax is paid before the due date, one gets a reduction of 12% on the amount of the bill. By paying the tax before the due date, a person got a reduction of ₹2,100. The amount (in ₹) of house tax paid was:

- Ans
- ☒ 1. 21,000
 - ☒ 2. 15,400
 - ☒ 3. 25,000
 - ☒ 4. 17,500

Question ID : 8161616410
Status : Answered
Chosen Option : 4

Q.16 The value of $\frac{0.325 \times 0.325 + 0.175 \times 0.175 + 25 \times 0.00455}{5 \times 0.0065 \times 3.25 - 7 \times 0.175 \times 0.025} + \frac{0.5}{1.5}$ is:

- Ans
- ☒ 1. 3
 - ☒ 2. 0
 - ☒ 3. $\frac{7}{3}$
 - ☒ 4. $\frac{11}{3}$

Question ID : 8161616402
Status : Answered
Chosen Option : 3

Q.17 A rectangular lawn whose length is twice of its breadth is extended by having four semi-circular portions on its sides. What is the total area (in m²) of the lawn if the smaller side of the rectangle is 12 m? (Take $\pi = 3.14$)

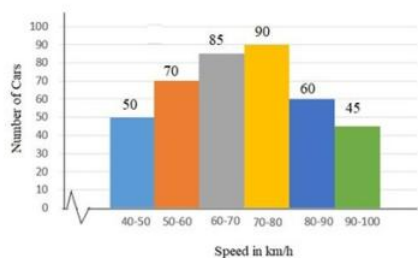
- Ans
- ☒ 1. 853.2
 - ☒ 2. 308.64
 - ☒ 3. 444
 - ☒ 4. 548.32

Question ID : 8161616424
Status : Answered
Chosen Option : 1

20/12/2020

<https://ssc.digialm.com/per/g27/pub/2207/touchstone/AssessmentQPHTMLMode1//2207O20153/2207O20153S3D20449/1606805...>

Q.18 The given histogram shows the frequency distribution of the speed of cars passing through a particular spot on a highway. Read the graph and answer the following question.



The number of cars with speed (km/h) in the interval (60 – 70) km/h is what percentage less than the number of cars with speed (km/h) in the interval (70 – 80) km/h? (correct to one decimal place)

- Ans
- ☒ 1. 5.9%
 - ☒ 2. 5.6%
 - ☒ 3. 7.5%
 - ☒ 4. 8.6%

Question ID : 8161616445

Status : Answered

Chosen Option : 2

Q.19 If $x^2 - 3x + 1 = 0$, then the value of $\left(x^4 + \frac{1}{x^2}\right) \div (x^2 + 1)$ is:

- Ans
- ☒ 1. 5
 - ☒ 2. 6
 - ☒ 3. 9
 - ☒ 4. 7

Question ID : 8161616426

Status : Answered

Chosen Option : 2

Q.20 If the difference between the compound interest and simple interest at 17% on a sum of money for 2 years (compounded annually) is ₹433.50, then the compound interest (in ₹) is:

- Ans
- ☒ 1. 2,735.50
 - ☒ 2. 2,500
 - ☒ 3. 5,100
 - ☒ 4. 5,533.50

Question ID : 8161616413

Status : Answered

Chosen Option : 4

20/12/2020

<https://ssc.digialm.com/per/g27/pub/2207/touchstone/AssessmentQPHTMLMode1//2207O20153/2207O20153S3D20449/1606805...>

Q.21 Pipes A, B and C can fill an empty tank in $\frac{30}{7}$ hours, if all the three pipes are opened simultaneously. A and B are filling pipes and C is an emptying pipe. Pipe A can fill the tank in 15 hours and pipe C can empty it in 12 hours. In how long (in hours) can pipe B alone fill the empty tank?

- Ans**
- ☒ 1. 3
 - ☒ 2. 5
 - ☒ 3. 6
 - ☒ 4. 4

Question ID : 8161616415
Status : Answered
Chosen Option : 4

Q.22 Let $\Delta ABC \sim \Delta RPQ$ and $\frac{\text{ar}(\Delta ABC)}{\text{ar}(\Delta PQR)} = \frac{4}{9}$. If AB = 3 cm, BC = 4 cm and AC = 5 cm, then RP (in cm) is equal to:

- Ans**
- ☒ 1. 6
 - ☒ 2. 5
 - ☒ 3. 4.5
 - ☒ 4. 12

Question ID : 8161616431
Status : Answered
Chosen Option : 3

Q.23 The students of a class donated a sum of ₹2,809 to the Fund. Each student donated as many rupees as the number of students in the class. The number of students in the class is:

- Ans**
- ☒ 1. 49
 - ☒ 2. 53
 - ☒ 3. 51
 - ☒ 4. 47

Question ID : 8161616399
Status : Answered
Chosen Option : 2

Q.24 The value of $2\frac{1}{3} \div 2\frac{1}{2}$ of $1\frac{3}{5} + \left(\frac{3}{8} + \frac{1}{7} \times 1\frac{3}{4}\right)$ is:

- Ans**
- ☒ 1. $\frac{25}{24}$
 - ☒ 2. $\frac{29}{24}$
 - ☒ 3. $\frac{35}{24}$
 - ☒ 4. $\frac{5}{24}$

Question ID : 8161616400
Status : Answered
Chosen Option : 2

20/12/2020

<https://ssc.digialm.com/per/g27/pub/2207/touchstone/AssessmentQPHTMLMode1//2207O20153/2207O20153S3D20449/1606805...>

Q.25 If $x^2 + 8y^2 + 12y - 4xy + 9 = 0$, then the value of $(7x + 8y)$ is:

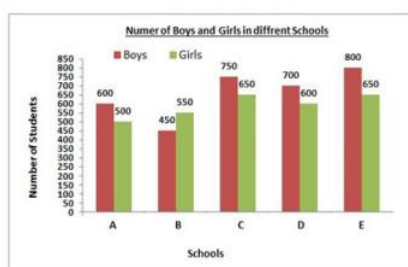
- Ans ☒ 1. -33
☒ 2. 9
☒ 3. 33
☒ 4. -9

Question ID : 8161616427

Status : Marked For Review

Chosen Option : 3

Q.26 The given bar graph represents the number of boys and girls in five different schools. Read the graph and answer the question that follows.



In which school is the percentage of boys more than 55%?

- Ans ☒ 1. E
☒ 2. B
☒ 3. C
☒ 4. A

Question ID : 8161616439

Status : Answered

Chosen Option : 1

Q.27 In $\triangle ABC$, AB and AC are produced to points D and E, respectively. If the bisectors of $\angle CBD$ and $\angle BCE$ meet at the point O, and $\angle BOC = 57^\circ$, then $\angle A$ is equal to:

- Ans ☒ 1. 93°
☒ 2. 66°
☒ 3. 114°
☒ 4. 57°

Question ID : 8161616432

Status : Answered

Chosen Option : 2

Q.28 If $\sin 3x = \cos (3x - 45^\circ)$, $0^\circ < 3x < 90^\circ$, then x is equal to:

- Ans ☒ 1. 45°
☒ 2. 22.5°
☒ 3. 35°
☒ 4. 27.5°

Question ID : 8161616433

Status : Answered

Chosen Option : 2

20/12/2020

<https://ssc.digialm.com/per/g27/pub/2207/touchstone/AssessmentQPHTMLMode1//2207O20153/2207O20153S3D20449/1606805...>

Q.29 The value of $\left(5 \div 2 \text{ of } \frac{1}{2}\right) + \left(5 \frac{1}{4} \div \frac{3}{7} \text{ of } \frac{1}{2}\right) \div \left(5 \frac{1}{9} - 7 \frac{7}{8} \div 9 \frac{9}{20}\right) \times \frac{11}{21}$ is:

- Ans
- ☒ 1. $\frac{35}{24}$
 - ☒ 2. 8
 - ☒ 3. $\frac{15}{28}$
 - ☒ 4. -2

Question ID : 8161616401
Status : Answered
Chosen Option : 3

Q.30 When operated separately, pipe A takes 5 hours less than pipe B to fill a cistern, and when operated together, the cistern gets filled in 6 hours. In how much time (in hours) will pipe A fill the cistern, if operated separately?

- Ans
- ☒ 1. 15
 - ☒ 2. 18
 - ☒ 3. 10
 - ☒ 4. 9

Question ID : 8161616416
Status : Answered
Chosen Option : 3

Q.31 A person's salary has increased from ₹7,000 to ₹12,000. What is the percentage increase in his salary?

- Ans
- ☒ 1. $61\frac{1}{7}\%$
 - ☒ 2. $69\frac{1}{7}\%$
 - ☒ 3. $76\frac{4}{7}\%$
 - ☒ 4. $71\frac{3}{7}\%$

Question ID : 8161616405
Status : Answered
Chosen Option : 4

Q.32 If six-digit number $5x2y6z$ is divisible by 7, 11 and 13, then the value of $(x - y + 3z)$ is:

- Ans
- ☒ 1. 7
 - ☒ 2. 4
 - ☒ 3. 0
 - ☒ 4. 9

Question ID : 8161616397
Status : Answered
Chosen Option : 1

20/12/2020

<https://ssc.digialm.com/per/g27/pub/2207/touchstone/AssessmentQPHTMLMode1//2207O20153/2207O20153S3D20449/1606805...>

Q.33 Asha and Suman's mud forts have heights 9 cm and 16 cm. If the fort tops are at 25 cm apart from each other, then the distance (in cm) between two forts is:

- Ans ☒ 1. 24
☒ 2. 16
☒ 3. 25
☒ 4. 7

Question ID : 8161616435
 Status : Answered
 Chosen Option : 1

Q.34 If the annual rate of simple interest increases from 11% to $17\frac{1}{2}\%$, then a person's yearly income increases by ₹1,071.20. The simple interest (in ₹) on the same sum at 10% for 5 years is:

- Ans ☒ 1. 16,480
☒ 2. 9,120
☒ 3. 8,240
☒ 4. 7,250

Question ID : 8161616414
 Status : Answered
 Chosen Option : 3

Q.35 The value of $\frac{\sin^2 30^\circ + \cos^2 60^\circ + \sec 45^\circ \cdot \sin 45^\circ}{\sec 60^\circ + \operatorname{cosec} 30^\circ}$ is:

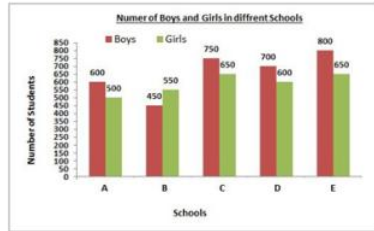
- Ans ☒ 1. $\frac{1}{4}$
☒ 2. $-\frac{3}{8}$
☒ 3. $\frac{3}{8}$
☒ 4. $-\frac{1}{4}$

Question ID : 8161616434
 Status : Answered
 Chosen Option : 3

20/12/2020

https://ssc.digialm.com/per/g27/pub/2207/touchstone/AssessmentQPHTMLMode1//2207O20153/2207O20153S3D20449/1606805...

Q.36 The given bar graph represents the number of boys and girls in five different schools. Read the graph and answer the question that follows.



What is the ratio of the girls from schools A, B and C taken together to the boys from all schools taken together?

- Ans
- ☒ 1. 33 : 17
 - ☒ 2. 17 : 33
 - ☒ 3. 66 : 59
 - ☒ 4. 59 : 66

Question ID : 8161616437
Status : Answered
Chosen Option : 1

Q.37 A single discount equivalent to three successive discounts of 6%, 15% and 14% is:

- Ans
- ☒ 1. 17.5%
 - ☒ 2. 31.286%
 - ☒ 3. 68.714%
 - ☒ 4. 34.357%

Question ID : 8161616404
Status : Answered
Chosen Option : 2

Q.38 A solid lead sphere of radius 11 cm is melted and recast into small solid spheres of radius 2 cm each. How many maximum number (in integer) of such spheres can be made?

- Ans
- ☒ 1. 125
 - ☒ 2. 166
 - ☒ 3. 30
 - ☒ 4. 100

Question ID : 8161616421
Status : Answered
Chosen Option : 1

Q.39 The monthly salary of a person was ₹75,000. He used to spend on Family Expenses (E), Taxes (T), Charity (C) and rest were his savings. E was 60% of the income, T was 20% of E, and C was 15% of T. When his salary got raised by 40%, he maintained the percentage level of E, but T became 30% of E and C became 20% of T. The ratio of the savings of his earlier salary to that of his present salary is:

- Ans
- ☒ 1. 655 : 644
 - ☒ 2. 325 : 337
 - ☒ 3. 644 : 655
 - ☒ 4. 337 : 325

Question ID : 8161616409
Status : Not Answered
Chosen Option : --

20/12/2020

<https://ssc.digialm.com/per/g27/pub/2207/touchstone/AssessmentQPHTMLMode1//2207O20153/2207O20153S3D20449/1606805...>

Q.40 The area of a field in the shape of a hexagon is $1944\sqrt{3} \text{ m}^2$. What will be the cost (in ₹) of fencing it at the rate of ₹11.50 per metre?

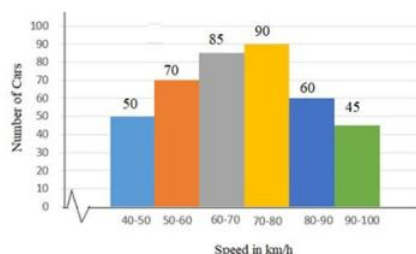
- Ans**
- ☒ 1. 2,785
 - ☒ 2. 2,484
 - ☒ 3. 3,200
 - ☒ 4. 2,256

Question ID : 8161616425

Status : Answered

Chosen Option : 2

Q.41 The given histogram shows the frequency distribution of the speed of cars passing through a particular spot on a highway. Read the graph and answer the following question.



What percentage of cars were running with the speed of 90 km/h and above?

- Ans**
- ☒ 1. 15.75%
 - ☒ 2. 11.25%
 - ☒ 3. 10%
 - ☒ 4. 21.25%

Question ID : 8161616443

Status : Answered

Chosen Option : 2

Q.42 A and B started a business investing amounts of ₹92,500 and ₹1,12,500, respectively. If B's share in the profit earned by them is ₹9,000, what is the profit (in ₹) earned by A?

- Ans**
- ☒ 1. 9,000
 - ☒ 2. 10,000
 - ☒ 3. 7,400
 - ☒ 4. 11,240

Question ID : 8161616407

Status : Answered

Chosen Option : 3

Q.43 A and B can do a piece of work in 25 days. B alone can do $66\frac{2}{3}\%$ of the same work in 30 days. In how many days can A alone do $\frac{4}{15}$ part of the same work?

- Ans**
- ☒ 1. 18
 - ☒ 2. 15
 - ☒ 3. 12
 - ☒ 4. 20

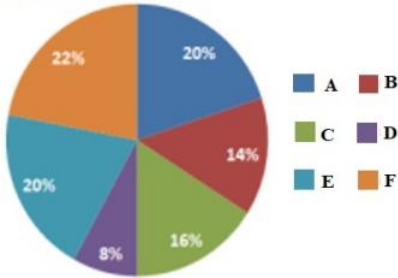
Question ID : 8161616417

Status : Answered

Chosen Option : 4

Q.44 The given pie chart shows the percentage distribution of 450 employees in an organisation. Read the pie chart and answer the question that follows.

Percentage of Employees in different Departments
(Total 450 Employees)



If 75% of the employees in department D are males, how many female employees are there in that department?

- Ans**
- ☒ 1. 9
 - ☐ 2. 18
 - ☐ 3. 27
 - ☐ 4. 36

Question ID : 8161616442
Status : Not Answered
Chosen Option : --

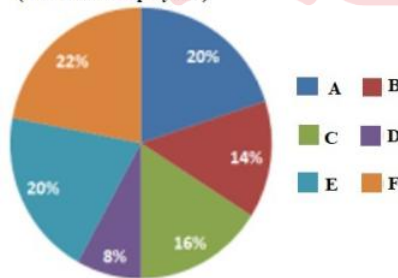
Q.45 The remainder when $72 \times 73 \times 78 \times 76$ is divided by 35 is:

- Ans**
- ☐ 1. 12
 - ☐ 2. 15
 - ☐ 3. 22
 - ☒ 4. 8

Question ID : 8161616396
Status : Answered
Chosen Option : 4

Q.46 The given pie chart shows the percentage distribution of 450 employees in an organisation. Read the pie chart and answer the question that follows.

Percentage of Employees in different Departments
(Total 450 Employees)



What is the number of employees working in department F?

- Ans**
- ☐ 1. 36
 - ☐ 2. 72
 - ☒ 3. 99
 - ☐ 4. 63

Question ID : 8161616440
Status : Not Answered
Chosen Option : --

20/12/2020

https://ssc.digialm.com/per/g27/pub/2207/touchstone/AssessmentQPHTMLMode1//2207O20153/2207O20153S3D20449/1606805...

Q.47 The least number which is exactly divisible by 4, 5, 8, 10 and 12 is:

- Ans
- ☒ 1. 150
 - ☒ 2. 120
 - ☒ 3. 180
 - ☒ 4. 240

Question ID : 8161616398

Status : Answered

Chosen Option : 2

Q.48 A man spends 75% of his income. If his income increases by 28% and his expenditure increases by 20%, then what is the increase or decrease percentage in his savings?

- Ans
- ☒ 1. 52% decrease
 - ☒ 2. 52% increase
 - ☒ 3. 13% decrease
 - ☒ 4. 13% increase

Question ID : 8161616408

Status : Not Answered

Chosen Option : --

Q.49 The average weight of a group of 3 people A, B and C is 70 kg. When D joins this group, the average becomes 60 kg. A man E, whose weight is 5 kg more than that of D, replaces A and the average weight of B, C, D, and E now becomes 59 kg. What is the average weight (in kg) of A, D and E? (correct to the nearest integer)

- Ans
- ☒ 1. 40
 - ☒ 2. 35
 - ☒ 3. 30
 - ☒ 4. 39

Question ID : 8161616406

Status : Not Answered

Chosen Option : --

Q.50 If $x + y + z = 17$, $xyz = 171$ and $xy + yz + zx = 111$, then the value of $\sqrt[3]{(x^3 + y^3 + z^3 + xyz)}$ is:

- Ans
- ☒ 1. -64
 - ☒ 2. 4
 - ☒ 3. 0
 - ☒ 4. -4

Question ID : 8161616428

Status : Not Answered

Chosen Option : --

Section : English Comprehension

Q.1 Select the correctly spelt word.

- Ans ☒ 1. wengence
☒ 2. vengance
☒ 3. wengence
☒ 4. vengeance

Question ID : 8161616489
 Status : Answered
 Chosen Option : 4

Q.2 Identify the segment in the sentence which contains a grammatical error.

She has been working tirelessly since hours.

- Ans ☒ 1. since hours
☒ 2. tirelessly
☒ 3. She has
☒ 4. been working

Question ID : 8161616446
 Status : Answered
 Chosen Option : 1

Q.3 Identify the segment in the sentence which contains a grammatical error.

I was sorry to be hearing of his misfortune.

- Ans ☒ 1. I was
☒ 2. sorry to
☒ 3. be hearing
☒ 4. of his misfortune

Question ID : 8161616449
 Status : Answered
 Chosen Option : 3

Q.4 Select the most appropriate meaning of the given idiom.

Pocket an insult

- Ans ☒ 1. express true feelings
☒ 2. bear an insult quietly
☒ 3. plan a revenge
☒ 4. resent an affront

Question ID : 8161616479
 Status : Answered
 Chosen Option : 4

Q.5 Select the correctly spelt word.


- Ans ☒ 1. mommentary
☒ 2. momentary
☒ 3. momentery
☒ 4. momentory


Question ID : 8161616488
 Status : Answered
 Chosen Option : 2


Q.6 Select the most appropriate option to substitute the underlined segment in the given sentence. If there is no need to substitute it, select ‘No substitution required’


The forecast predicts that there will be little rain in the month of July.

- Ans

 1. should be many rain

 2. No substitution required

 3. must be a little rain

 4. would be few rain

Question ID : 8161616453

Status : Answered

Chosen Option : 2

Q.7 Select the most appropriate ANTONYM of the given word.

MUSTER

- Ans

 1. mobilize

 2. disperse

 3. convene

 4. assemble

Question ID : 8161616475

Status : Answered

Chosen Option : 2

Q.8 Select the most appropriate synonym of the given word.

SUMPTUOUS

- Ans

 1. stingy

 2. opulent

 3. meager

 4. bereft

Question ID : 8161616471

Status : Answered

Chosen Option : 2

Q.9 Fill in the blank with the most appropriate word.

_____ of our success depends on our own efforts.

- Ans

 1. Few

 2. Many

 3. Much

 4. Less

Question ID : 8161616457


Status : Answered


Chosen Option : 3


Q.10 Select the most appropriate option to substitute the underlined segment in the given sentence. If there is no need to substitute it, select ‘No substitution required’.


Every year the family goes for a pilgrim to the temple at Tirupathi.

- Ans

 1. No substitution required

 2. from the pilgrimage

 3. on a pilgrimage

 4. at the pilgrim

Question ID : 8161616451


Status : Answered


Chosen Option : 3


Q.11 Identify the segment in the sentence which contains a grammatical error.


I had to hold on to the wall to steady itself or I could have fallen.

- Ans

 1. to the wall

 2. to steady itself

 3. could have fallen

 4. I had to hold on

Question ID : 8161616447

Status : Answered

Chosen Option : 2

Q.12 Select the most appropriate ANTONYM of the given word.

REVIVE

- Ans

 1. renew

 2. arouse

 3. ruin

 4. console

Question ID : 8161616472

Status : Answered


Chosen Option : 3


Q.13 Select the most appropriate meaning of the given idiom.

Make one’s mark

- Ans

 1. sign a deal

 2. leave a clue

 3. claim a right

 4. attain recognition

Question ID : 8161616478

Status : Answered

Chosen Option : 4

Q.14 Fill in the blank with the most appropriate word.

Second-hand furniture _____ here at reasonable prices.

- Ans

☒

1. is sold

☐

2. were selling

☐

3. has sold

☐

4. are sold

Question ID : 8161616456

Status : Answered

Chosen Option : 4

Q.15 Identify the segment in the sentence which contains a grammatical error.

You cannot lead a healthy life although you stop smoking.

- Ans

☐

1. stop smoking

☐

2. a healthy life

☐

3. You cannot lead

☒

4. although you

Question ID : 8161616448

Status : Answered

Chosen Option : 4

Comprehension:

In the following passage some words have been deleted. Fill in the blanks with the help of the alternatives given. Select the most appropriate option for each number.

Necessity, they say, is the mother of invention. Dr Burjor P Banaji, pioneer of Lasik surgery in India has (1)_____ over a dozen surgical instruments. When (2)_____ senior eye surgeon at Max Eye Care started Lasik, there were (3)_____ surgeons doing it worldwide and no (4)_____ instruments were available either. "As I want things (5)_____, I designed a whole slew of instruments that made my surgery more efficient," says Banaji.

SubQuestion No : 16

Q.16 Select the most appropriate option to fill in blank no. 1.

- Ans

☐

1. discovered

☒

2. invented

☐

3. recovered

☐

4. founded

Question ID : 8161616462

Status : Answered

Chosen Option : 2

Comprehension:

In the following passage some words have been deleted. Fill in the blanks with the help of the alternatives given. Select the most appropriate option for each number.

Necessity, they say, is the mother of invention. Dr Burjor P Banaji, pioneer of Lasik surgery in India has (1)_____ over a dozen surgical instruments. When (2)_____ senior eye surgeon at Max Eye Care started Lasik, there were (3)_____ surgeons doing it worldwide and no (4)_____ instruments were available either. "As I want things (5)_____, I designed a whole slew of instruments that made my surgery more efficient," says Banaji.

SubQuestion No : 17

Q.17 Select the most appropriate option to fill in blank no. 2.

- Ans
- ☒ 1. they

☒ 2. these

☒ 3. those

☒ 4. the

Question ID : 8161616463

Status : Answered

Chosen Option : 4

Comprehension:

In the following passage some words have been deleted. Fill in the blanks with the help of the alternatives given. Select the most appropriate option for each number.

Necessity, they say, is the mother of invention. Dr Burjor P Banaji, pioneer of Lasik surgery in India has (1)_____ over a dozen surgical instruments. When (2)_____ senior eye surgeon at Max Eye Care started Lasik, there were (3)_____ surgeons doing it worldwide and no (4)_____ instruments were available either. "As I want things (5)_____, I designed a whole slew of instruments that made my surgery more efficient," says Banaji.

SubQuestion No : 18

Q.18 Select the most appropriate option to fill in blank no. 3.

- Ans
- ☒ 1. any

☒ 2. little

☒ 3. few

☒ 4. more

Question ID : 8161616464

Status : Answered

Chosen Option : 3

Comprehension:

In the following passage some words have been deleted. Fill in the blanks with the help of the alternatives given. Select the most appropriate option for each number.

Necessity, they say, is the mother of invention. Dr Burjor P Banaji, pioneer of Lasik surgery in India has (1)_____ over a dozen surgical instruments. When (2)_____ senior eye surgeon at Max Eye Care started Lasik, there were (3)_____ surgeons doing it worldwide and no (4)_____ instruments were available either. "As I want things (5)_____, I designed a whole slew of instruments that made my surgery more efficient," says Banaji.

SubQuestion No : 19

Q.19 Select the most appropriate option to fill in blank no. 4.

- Ans
- ☒ 1. limited

☒ 2. correct

☒ 3. exact

☒ 4. specific

Question ID : 8161616465

Status : Answered

Chosen Option : 4

Comprehension:

In the following passage some words have been deleted. Fill in the blanks with the help of the alternatives given. Select the most appropriate option for each number.

Necessity, they say, is the mother of invention. Dr Burjor P Banaji, pioneer of Lasik surgery in India has (1)_____ over a dozen surgical instruments. When (2)_____ senior eye surgeon at Max Eye Care started Lasik, there were (3)_____ surgeons doing it worldwide and no (4)_____ instruments were available either. "As I want things (5)_____, I designed a whole slew of instruments that made my surgery more efficient," says Banaji.

SubQuestion No : 20

Q.20 Select the most appropriate option to fill in blank no. 5.

- Ans

 1. popular

 2. punitive

 3. perfect

 4. prolific

Question ID : 8161616466

Status : Answered

Chosen Option : 4

Q.21 Select the most appropriate ANTONYM of the given word.

DEPREDAATION

- Ans

 1. plunder

 2. devastation

 3. pillage

 4. construction

Question ID : 8161616476


Status : Answered


Chosen Option : 4


Q.22 Fill in the blank with the most appropriate word.


_____ you deserve credit for the success of the show.

- Ans

 1. No less

 2. Such that

 3. None but

 4. Only if

Question ID : 8161616459

Status : Answered


Chosen Option : 3

Q.23 Select the correctly spelt word.

- Ans

 1. camotion

 2. commotion

 3. cammosion

 4. comosion

Question ID : 8161616487

Status : Answered

Chosen Option : 2

Q.24 Select the most appropriate meaning of the given idiom.

Strike when the iron is hot

Ans

✗ 1. sort out differences promptly

✗ 2. torture someone with a hot iron

✗ 3. wait patiently for the results

✓ 4. grab a favourable opportunity promptly

Question ID : 8161616481

Status : Answered

Chosen Option : 4

Q.25 Select the most appropriate synonym of the given word.

WRENCH

Ans

✗ 1. deter

✓ 2. wrest

✗ 3. reject

✗ 4. supply

Question ID : 8161616469

Status : Answered

Chosen Option : 4

Q.26 Select the misspelt word.

Ans

✗ 1. bereave

✗ 2. beguile

✗ 3. bemoan

✓ 4. beseige

Question ID : 8161616491

Status : Answered

Chosen Option : 4

Q.27 Select the most appropriate one-word substitution for the given group of words.

Harsh or discordant sound

Ans

✗ 1. monotony

✓ 2. cacophony

✗ 3. harmony

✗ 4. symphony

Question ID : 8161616486

Status : Answered

Chosen Option : 2

20/12/2020

https://ssc.digialm.com/per/g27/pub/2207/touchstone/AssessmentQPHTMLMode1//2207O20153/2207O20153S3D20449/1606805...

Q.28 Fill in the blank with the most appropriate word.

Eggs are sold _____ the dozen.

- Ans
- ☒ 1. at
 - ☒ 2. by
 - ☒ 3. in
 - ☒ 4. to

Question ID : 8161616458
Status : Answered
Chosen Option : 3

Q.29 Select the most appropriate one-word substitution for the given group of words.

Arrangement of events according to the dates of occurrence

- Ans
- ☒ 1. analogy
 - ☒ 2. trilogy
 - ☒ 3. chronology
 - ☒ 4. theology

Question ID : 8161616484
Status : Answered
Chosen Option : 3

Q.30 Select the most appropriate one-word substitution for the given group of words.

A person who is trained for travelling into space

- Ans
- ☒ 1. astronaut
 - ☒ 2. pilot
 - ☒ 3. physicist
 - ☒ 4. scientist

Question ID : 8161616483
Status : Answered
Chosen Option : 1

Q.31 Fill in the blank with the most appropriate word.

_____ of living life on his own terms, he made few compromises.

- Ans
- ☒ 1. Desirous
 - ☒ 2. Desire
 - ☒ 3. Desired
 - ☒ 4. Desiring

Question ID : 8161616460
Status : Answered
Chosen Option : 2

Q.32 Select the most appropriate ANTONYM of the given word.

DISTRACT

Ans

☒ 1. divert

☒ 2. beguile

☒ 3. perplex

☒ 4. clarify

Question ID : 8161616473

Status : Answered

Chosen Option : 4

Q.33 Select the most appropriate synonym of the given word.

GAUDY

Ans

☒ 1. plain

☒ 2. proper

☒ 3. flashy

☒ 4. simple

Question ID : 8161616467

Status : Answered

Chosen Option : 3

Q.34 Select the most appropriate option to substitute the underlined segment in the given sentence. If there is no need to substitute it, select 'No substitution required'

Have either of you been to the planetarium before?

Ans

☒ 1. Have everyone

☒ 2. No substitution required

☒ 3. Has both

☒ 4. Has either

Question ID : 8161616455

Status : Answered

Chosen Option : 4

Q.35 Select the most appropriate one-word substitution for the given group of words.

The dates when days and nights are of equal length

Ans

☒ 1. solstice

☒ 2. eclipse

☒ 3. equinox

☒ 4. stellar

Question ID : 8161616485

Status : Answered

Chosen Option : 3

https://ssc.digialm.com/per/g27/pub/2207/touchstone/AssessmentQPHTMLMode1//2207O20153/2207O20153S3D20449/1606805323104912...

50/58

Q.36 Select the most appropriate ANTONYM of the given word.

MENACE

Ans

✗ 1. balance

✗ 2. threat

✓ 3. comfort

✗ 4. peril

Question ID : 8161616474

Status : Answered

Chosen Option : 2

Q.37 Select the most appropriate synonym of the given word.

FASTEN

Ans

✗ 1. allow

✗ 2. hurry

✓ 3. affix

✗ 4. halt

Question ID : 8161616468

Status : Answered

Chosen Option : 3

Q.38 Identify the segment in the sentence which contains a grammatical error.

One of the proposals received by us seem very interesting.

Ans

✗ 1. the proposals

✗ 2. received by us

✗ 3. One of

✓ 4. seem very interesting

Question ID : 8161616450

Status : Answered

Chosen Option : 4

Q.39 Select the most appropriate meaning of the given idiom.

Rise to the occasion

Ans

✗ 1. challenge an opponent who is strong

✓ 2. show you can deal with a situation successfully

✗ 3. take a big risk in order to succeed

✗ 4. assess a critical situation carefully

Question ID : 8161616480

Status : Answered

Chosen Option : 4

https://ssc.digialm.com/per/g27/pub/2207/touchstone/AssessmentQPHTMLMode1//2207O20153/2207O20153S3D20449/1606805323104912...

51/58

Q.40 Select the most appropriate option to substitute the underlined segment in the given sentence. If there is no need to substitute it, select 'No substitution required'.

A large swarm of dogs was blocking the way.

- Ans
- ☒ 1. school of
 - ☒ 2. pack of
 - ☒ 3. herd of
 - ☒ 4. No substitution required

Question ID : 8161616454
Status : Answered
Chosen Option : 4

Q.41 Select the misspelt word.

- Ans
- ☒ 1. pursue
 - ☒ 2. tyranny
 - ☒ 3. vicious
 - ☒ 4. resistance

Question ID : 8161616490
Status : Answered
Chosen Option : 2

Q.42 Select the most appropriate synonym of the given word.

DESPISE

- Ans
- ☒ 1. approve
 - ☒ 2. abhor
 - ☒ 3. admire
 - ☒ 4. adore

Question ID : 8161616470
Status : Answered
Chosen Option : 2

Q.43 Select the most appropriate meaning of the given idiom.

Kith and kin

- Ans
- ☒ 1. colleagues
 - ☒ 2. neighbours
 - ☒ 3. family relations
 - ☒ 4. distant enemies

Question ID : 8161616477
Status : Answered
Chosen Option : 3

Q.44 Select the most appropriate option to substitute the underlined segment in the given sentence. If there is no need to substitute it, select 'No substitution required'.

The mare hurt its hooves when running to the forest.

- Ans
- ☒ 1. with running across
 - ☒ 2. while running through
 - ☒ 3. No substitution required
 - ☒ 4. when running into

Question ID : 8161616452
Status : Answered
Chosen Option : 2

Q.45 Select the most appropriate one-word substitution for the given group of words.

A large bedroom for a number of people in an institution

- Ans
- ☒ 1. auditorium
 - ☒ 2. apartment
 - ☒ 3. dormitory
 - ☒ 4. chamber

Question ID : 8161616482
Status : Answered
Chosen Option : 2



Comprehension:

Read the passage and answer the questions that follow.

Greek religious traditions encompassed a large pantheon of gods, complex mythologies, rituals and cult practices. Greece was a polytheistic society, and looked to its gods and mythology to explain natural mysteries as well as current events. Religious festivals and ceremonies were held throughout the year, and animal sacrifice and votive offerings were popular ways to appease and worship the gods. Religious life, rituals and practices were one of the unifying aspects of Greece across regions and poleis (cities, or city-states, such as Athens and Sparta).

Greek gods were immortal beings who possessed human-like qualities and were represented as completely human in visual art. They were moral and immoral, petty and just, and often vain. The gods were invoked to intervene and assist in all matters large, small, private and public.

City-states claimed individual gods and goddesses as their patrons. Temples and sanctuaries to the gods were built in every city. Many cities became cult sites due to their connection with a god or goddess and specific myths. For instance, the city of Delphi was known for its oracle and sanctuary of Apollo, because Apollo was believed to have killed a dragon that inhabited Delphi.

The history of the Greek pantheon begins with the primordial deities Gaia (Mother Earth) and Uranus (Father Sky), who were the parents of the first of twelve giants known as Titans. Among these Titans were six males and six females. The males were named Oceanus, Hyperion, Coeus, Crius, Iapetus, and Kronos. The females were named Themis, Mnemosyne, Tethys, Theia, Phoebe, and Rhea.

Kronos eventually overthrew Uranus and ruled during a mythological Golden Age. Over time, he and Rhea had twelve children who would become the Olympian gods. However, Kronos heard a prophecy that his son would overthrow him, as he did to Uranus. In an effort to avert fate, he ordered Rhea to allow him to devour each of the children upon their birth.

Best known among the pantheon are the twelve Olympian gods and goddesses who resided on Mt. Olympus in northern Greece. Zeus, the youngest son of Rhea and Kronos, was hidden from his father, instead of being swallowed. Once he became a man, he challenged his father's rule, forcing Kronos to regurgitate the rest of his swallowed children. These children were Zeus's siblings, and together they overthrew Kronos, making Zeus the father of gods and men.

SubQuestion No : 46

Q.46 Animal sacrifices were made to Gods to:

- Ans
- ☒ 1. understand nature's mysteries
 - ☒ 2. pacify and worship them
 - ☒ 3. know about future events
 - ☒ 4. enrage and challenge them

Question ID : 8161616493
Status : Answered
Chosen Option : 2

Comprehension:

Read the passage and answer the questions that follow.

Greek religious traditions encompassed a large pantheon of gods, complex mythologies, rituals and cult practices. Greece was a polytheistic society, and looked to its gods and mythology to explain natural mysteries as well as current events. Religious festivals and ceremonies were held throughout the year, and animal sacrifice and votive offerings were popular ways to appease and worship the gods. Religious life, rituals and practices were one of the unifying aspects of Greece across regions and poleis (cities, or city-states, such as Athens and Sparta).

Greek gods were immortal beings who possessed human-like qualities and were represented as completely human in visual art. They were moral and immoral, petty and just, and often vain. The gods were invoked to intervene and assist in all matters large, small, private and public.

City-states claimed individual gods and goddesses as their patrons. Temples and sanctuaries to the gods were built in every city. Many cities became cult sites due to their connection with a god or goddess and specific myths. For instance, the city of Delphi was known for its oracle and sanctuary of Apollo, because Apollo was believed to have killed a dragon that inhabited Delphi.

The history of the Greek pantheon begins with the primordial deities Gaia (Mother Earth) and Uranus (Father Sky), who were the parents of the first of twelve giants known as Titans. Among these Titans were six males and six females. The males were named Oceanus, Hyperion, Coeus, Crius, Iapetus, and Kronos. The females were named Themis, Mnemosyne, Tethys, Theia, Phoebe, and Rhea.

Kronos eventually overthrew Uranus and ruled during a mythological Golden Age. Over time, he and Rhea had twelve children who would become the Olympian gods. However, Kronos heard a prophecy that his son would overthrow him, as he did to Uranus. In an effort to avert fate, he ordered Rhea to allow him to devour each of the children upon their birth.

Best known among the pantheon are the twelve Olympian gods and goddesses who resided on Mt. Olympus in northern Greece. Zeus, the youngest son of Rhea and Kronos, was hidden from his father, instead of being swallowed. Once he became a man, he challenged his father's rule, forcing Kronos to regurgitate the rest of his swallowed children. These children were Zeus's siblings, and together they overthrew Kronos, making Zeus the father of gods and men.

SubQuestion No : 47

Q.47 Kronos devoured his children at birth because:

- Ans
- ☒ 1. his son was predicted to overthrow him
 - ☐ 2. he did not have faith in his wife
 - ☐ 3. he was a titan who hated children
 - ☐ 4. it was a cult practice to please the gods

Question ID : 8161616496

Status : Answered

Chosen Option : 1

Comprehension:

Read the passage and answer the questions that follow.

Greek religious traditions encompassed a large pantheon of gods, complex mythologies, rituals and cult practices. Greece was a polytheistic society, and looked to its gods and mythology to explain natural mysteries as well as current events. Religious festivals and ceremonies were held throughout the year, and animal sacrifice and votive offerings were popular ways to appease and worship the gods. Religious life, rituals and practices were one of the unifying aspects of Greece across regions and poleis (cities, or city-states, such as Athens and Sparta).

Greek gods were immortal beings who possessed human-like qualities and were represented as completely human in visual art. They were moral and immoral, petty and just, and often vain. The gods were invoked to intervene and assist in all matters large, small, private and public.

City-states claimed individual gods and goddesses as their patrons. Temples and sanctuaries to the gods were built in every city. Many cities became cult sites due to their connection with a god or goddess and specific myths. For instance, the city of Delphi was known for its oracle and sanctuary of Apollo, because Apollo was believed to have killed a dragon that inhabited Delphi.

The history of the Greek pantheon begins with the primordial deities Gaia (Mother Earth) and Uranus (Father Sky), who were the parents of the first of twelve giants known as Titans. Among these Titans were six males and six females. The males were named Oceanus, Hyperion, Coeus, Crius, Iapetus, and Kronos. The females were named Themis, Mnemosyne, Tethys, Theia, Phoebe, and Rhea.

Kronos eventually overthrew Uranus and ruled during a mythological Golden Age. Over time, he and Rhea had twelve children who would become the Olympian gods. However, Kronos heard a prophecy that his son would overthrow him, as he did to Uranus. In an effort to avert fate, he ordered Rhea to allow him to devour each of the children upon their birth.

Best known among the pantheon are the twelve Olympian gods and goddesses who resided on Mt. Olympus in northern Greece. Zeus, the youngest son of Rhea and Kronos, was hidden from his father, instead of being swallowed. Once he became a man, he challenged his father's rule, forcing Kronos to regurgitate the rest of his swallowed children. These children were Zeus's siblings, and together they overthrew Kronos, making Zeus the father of gods and men.

SubQuestion No : 48

Q.48 The twelve Olympian Gods and Goddesses were the children of:

- Ans
- ☒ 1. Gaia and Uranus
 - ☐ 2. Kronos and Rhea
 - ☒ 3. Hyperion and Theia
 - ☒ 4. Zeus and Phoebe

Question ID : 8161616494
Status : Answered
Chosen Option : 1

Comprehension:

Read the passage and answer the questions that follow.

Greek religious traditions encompassed a large pantheon of gods, complex mythologies, rituals and cult practices. Greece was a polytheistic society, and looked to its gods and mythology to explain natural mysteries as well as current events. Religious festivals and ceremonies were held throughout the year, and animal sacrifice and votive offerings were popular ways to appease and worship the gods. Religious life, rituals and practices were one of the unifying aspects of Greece across regions and poleis (cities, or city-states, such as Athens and Sparta).

Greek gods were immortal beings who possessed human-like qualities and were represented as completely human in visual art. They were moral and immoral, petty and just, and often vain. The gods were invoked to intervene and assist in all matters large, small, private and public.

City-states claimed individual gods and goddesses as their patrons. Temples and sanctuaries to the gods were built in every city. Many cities became cult sites due to their connection with a god or goddess and specific myths. For instance, the city of Delphi was known for its oracle and sanctuary of Apollo, because Apollo was believed to have killed a dragon that inhabited Delphi.

The history of the Greek pantheon begins with the primordial deities Gaia (Mother Earth) and Uranus (Father Sky), who were the parents of the first of twelve giants known as Titans. Among these Titans were six males and six females. The males were named Oceanus, Hyperion, Coeus, Crius, Iapetus, and Kronos. The females were named Themis, Mnemosyne, Tethys, Theia, Phoebe, and Rhea.

Kronos eventually overthrew Uranus and ruled during a mythological Golden Age. Over time, he and Rhea had twelve children who would become the Olympian gods. However, Kronos heard a prophecy that his son would overthrow him, as he did to Uranus. In an effort to avert fate, he ordered Rhea to allow him to devour each of the children upon their birth.

Best known among the pantheon are the twelve Olympian gods and goddesses who resided on Mt. Olympus in northern Greece. Zeus, the youngest son of Rhea and Kronos, was hidden from his father, instead of being swallowed. Once he became a man, he challenged his father's rule, forcing Kronos to regurgitate the rest of his swallowed children. These children were Zeus's siblings, and together they overthrew Kronos, making Zeus the father of gods and men.

SubQuestion No : 49

Q.49 How did Zeus bring back his siblings?

- Ans
- ☒ 1. by challenging and slaying Crius
 - ☒ 2. by reviving them with an elixir
 - ☒ 3. by making Kronos vomit the swallowed children
 - ☒ 4. by worshipping the sanctuary of Apollo

Question ID : 8161616497

Status : Answered

Chosen Option : 1

20/12/2020

https://ssc.digialm.com//per/g27/pub/2207/touchstone/AssessmentQPHTMLMode1//2207O20153/2207O20153S3D20449/1606805...

Comprehension:

Read the passage and answer the questions that follow.

Greek religious traditions encompassed a large pantheon of gods, complex mythologies, rituals and cult practices. Greece was a polytheistic society, and looked to its gods and mythology to explain natural mysteries as well as current events. Religious festivals and ceremonies were held throughout the year, and animal sacrifice and votive offerings were popular ways to appease and worship the gods. Religious life, rituals and practices were one of the unifying aspects of Greece across regions and poleis (cities, or city-states, such as Athens and Sparta).

Greek gods were immortal beings who possessed human-like qualities and were represented as completely human in visual art. They were moral and immoral, petty and just, and often vain. The gods were invoked to intervene and assist in all matters large, small, private and public.

City-states claimed individual gods and goddesses as their patrons. Temples and sanctuaries to the gods were built in every city. Many cities became cult sites due to their connection with a god or goddess and specific myths. For instance, the city of Delphi was known for its oracle and sanctuary of Apollo, because Apollo was believed to have killed a dragon that inhabited Delphi.

The history of the Greek pantheon begins with the primordial deities Gaia (Mother Earth) and Uranus (Father Sky), who were the parents of the first of twelve giants known as Titans. Among these Titans were six males and six females. The males were named Oceanus, Hyperion, Coeus, Crius, Iapetus, and Kronos. The females were named Themis, Mnemosyne, Tethys, Theia, Phoebe, and Rhea.

Kronos eventually overthrew Uranus and ruled during a mythological Golden Age. Over time, he and Rhea had twelve children who would become the Olympian gods. However, Kronos heard a prophecy that his son would overthrow him, as he did to Uranus. In an effort to avert fate, he ordered Rhea to allow him to devour each of the children upon their birth.

Best known among the pantheon are the twelve Olympian gods and goddesses who resided on Mt. Olympus in northern Greece. Zeus, the youngest son of Rhea and Kronos, was hidden from his father, instead of being swallowed. Once he became a man, he challenged his father's rule, forcing Kronos to regurgitate the rest of his swallowed children. These children were Zeus's siblings, and together they overthrew Kronos, making Zeus the father of gods and men.

SubQuestion No : 50

Q.50 Which of the following statements about Greek Gods is NOT true?

- Ans ☒ 1. Greek Gods were mortals.
- ☐ 2. They possessed human qualities.
- ☐ 3. Some of them were immoral, petty and vain.
- ☐ 4. They were invoked to aid in all matters.

Question ID : 8161616495

Status : Answered

Chosen Option : 1