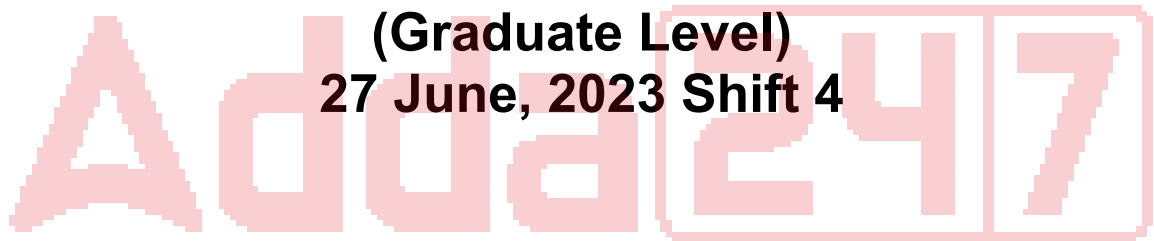


SSC Selection Post

**Previous Year Paper
(Graduate Level)
27 June, 2023 Shift 4**



Test Prime

**ALL EXAMS,
ONE SUBSCRIPTION**



70,000+
Mock Tests



**Personalised
Report Card**



**Unlimited
Re-Attempt**



600+
Exam Covered



**Previous Year
Papers**



**500%
Refund**



ATTEMPT FREE MOCK NOW

Phase-XI/2023/Selection Posts and Selection Posts/Ladakh/2023

Roll Number	
Candidate Name	
Venue Name	
Exam Date	27/06/2023
Exam Time	5:15 PM - 6:15 PM
Subject	Selection Post Graduate Level

Section : General Intelligence

Q.1 उस विकल्प का चयन कीजिए, जिसका तीसरे शब्द से ठीक वही संबंध है, जो संबंध दूसरे शब्द का पहले शब्द से है।
(शब्दों को अर्थपूर्ण हिंदी शब्दों के रूप में माना जाना चाहिए और शब्द में अक्षरों/ व्यंजनों/स्वरों की संख्या के आधार पर वे एक दूसरे से संबंधित नहीं किए जाने चाहिए)
नौसिखिया (Amateur) : आरंभकर्ता (विगिनर) :: खतरनाक :

- Ans
- ☒ 1. टिकाऊ
 - ☒ 2. जोखिमप्रद
 - ☒ 3. सहिष्णु
 - ☒ 4. विलक्षण

Question ID : 26433068412
Status : Answered
Chosen Option : 2

Q.2 गणितीय चिह्नों के उस सही संयोजन का चयन कीजिए जिसे * चिह्नों के स्थान पर क्रमिक रूप से रखने पर समीकरण संतुलित हो जाएगा।

$$8 * 2 * 1 * 12 * 18 * 33$$

- Ans
- ☒ 1. ÷, -, +, +, =
 - ☒ 2. +, -, ×, +, =
 - ☒ 3. ÷, -, -, +, =
 - ☒ 4. ×, -, +, +, =

Question ID : 26433097206
Status : Answered
Chosen Option : 1

Q.3 उस विकल्प का चयन करें, जो उन अक्षरों को दर्शाता है, जिन्हें निम्न रिक्त स्थानों में बाएँ से दाएँ रखने पर अक्षर-श्रृंखला पूर्ण हो जाएगी।
N _ M _ N _ MANNA _ A _

- Ans
- ☒ 1. ANNMMA
 - ☒ 2. AANAMN
 - ☒ 3. ANNANM
 - ☒ 4. ANAMAA

Question ID : 26433080454
Status : Answered
Chosen Option : 2

Q.4 उस विकल्प का चयन करें जो तीसरे शब्द से उसी प्रकार संबंधित है जैसे दूसरा शब्द पहले शब्द से संबंधित है। (शब्दों को अर्थपूर्ण हिंदी शब्दों के रूप में माना जाना चाहिए और शब्द आपस में अक्षरों की संख्या/व्यंजन/स्वरों की संख्या के आधार पर एक दूसरे से संबंधित नहीं होने चाहिए)

अधित्यक्त करना (Waive) : थोपना (Impose) :: नकली (Spurious) : ?

- Ans
- ☒ 1. त्यागना (Abjure)
 - ☒ 2. छिटपुट (Sporadic)
 - ☒ 3. जाली (Counterfeit)
 - ☒ 4. वास्तविक (Original)

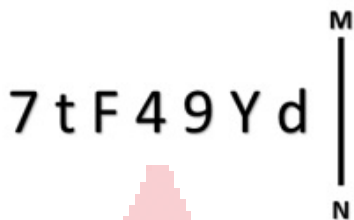
Question ID : 264330143383
Status : Answered
Chosen Option : 3

Q.5 एक कूट भाषा में, 'MISSION' को 'N64O' के रूप में लिखा जाता है और 'TEASE' को 'U56F' के रूप में लिखा जाता है। इसी कूट भाषा में 'NASTY' को कैसे लिखा जाएगा?

- Ans
- ☒ 1. Z14O
 - ☒ 2. O14Z
 - ☒ 3. Z41O
 - ☒ 4. O41Z

Question ID : 264330120822
Status : Answered
Chosen Option : 4

Q.6 दर्पण को नीचे दिखाए अनुसार MN पर रखे जाने पर, दिए गए संयोजन के सही दर्पण प्रतिबिंब का चयन कीजिए।



- Ans
- ☒ 1. b Y e 4 7 t 7
 - ☒ 2. b Y e 4 7 t 7
 - ☒ 3. 7 t F 4 9 Y d
 - ☒ 4. d Y 6 7 F t 7

Question ID : 264330143447
Status : Answered
Chosen Option : 1

Q.7 उस विकल्प का चयन कीजिए जो दिए गए शब्दों के उस सही क्रम को दर्शाता है जैसे कि वे अंग्रेजी शब्दकोश में दिखाई देते हैं?

1. Enthusiasm
2. Enrollment
3. Enterprise
4. Ensure
5. Entangled
6. Entail

Ans ☒ 1. 4, 2, 6, 5, 3, 1

☒ 2. 2, 4, 6, 5, 3, 1

☒ 3. 2, 4, 6, 5, 1, 3

☒ 4. 2, 4, 5, 6, 3, 1

Question ID : 264330117382

Status : Answered

Chosen Option : 2

Q.8 उस विकल्प का चयन कीजिए जो दिए गए शब्दों के उस सही क्रम को दर्शाता है जैसे कि वे अंग्रेजी शब्दकोश में दिखाई देते हैं?

1. Emergency
2. Electrician
3. Embassy
4. Elegance
5. Embargo
6. Element

Ans ☒ 1. 4, 2, 6, 5, 3, 1

☒ 2. 2, 4, 6, 5, 1, 3

☒ 3. 2, 4, 5, 6, 3, 1

☒ 4. 2, 4, 6, 5, 3, 1

Question ID : 264330117381

Status : Answered

Chosen Option : 4

Q.9 एक निश्चित कूट भाषा में STATION को URCKMP लिखा जाता है और BRING को DPKLI लिखा जाता है। उसी भाषा में TOYS को किस प्रकार लिखा जाएगा?

Ans ☒ 1. BPNU

☒ 2. VMAQ

☒ 3. UNBP

☒ 4. QMAV

Question ID : 264330120697

Status : Answered

Chosen Option : 2

Q.10 उस सही विकल्प का चयन कीजिए, जो निम्नलिखित शब्दों की व्यवस्था को तार्किक और अर्थपूर्ण क्रम में दर्शाता है।

1. उंगली
2. कोहनी
3. कलाई
4. नाखून
5. हथेली

Ans ☒ 1. 4, 1, 3, 5, 2

☒ 2. 4, 5, 1, 3, 2

☒ 3. 4, 1, 5, 3, 2

☒ 4. 4, 1, 5, 2, 3

Question ID : 264330129558

Status : Answered

Chosen Option : 3

Q.11 उस विकल्प का चयन करें जो पांचवें पद से उसी प्रकार संबंधित है जिस प्रकार दूसरा पद पहले पद से संबंधित है और चौथा पद तीसरे पद से संबंधित है।
YEN10 : CWN50 :: USD8 : GIX32 :: GDP12 : ?

- Ans
- ☒ 1. UWL72
 - ☒ 2. UXJ72
 - ☒ 3. UXL72
 - ☒ 4. TXL72

Question ID : 26433067398
Status : Answered
Chosen Option : 3

Q.12 एक निश्चित कूट भाषा में, 'CAST' को '311920', और 'FEED' को '6554' के रूप में लिखा जाता है। इसी कूट भाषा में 'GLAD' को किस प्रकार से लिखा जाएगा?

- Ans
- ☒ 1. 71214
 - ☒ 2. 71514
 - ☒ 3. 71218
 - ☒ 4. 71314

Question ID : 26433069563
Status : Answered
Chosen Option : 1

Q.13 इस प्रश्न में, तीन कथन और उसके बाद दो निष्कर्ष I और II दिए गए हैं। कथनों को सत्य मानते हुए, भले ही वे सामान्यतः ज्ञात तथ्यों से भिन्न प्रतीत होते हों, निर्णय लें कि कौन-सा/से निष्कर्ष तार्किक रूप से कथनों का अनुसरण करता/करते है/हैं।

कथन:

- I. कुछ गेट, रास्ते हैं।
- II. सभी रास्ते, मार्ग हैं।
- III. कोई भी मार्ग, द्वार नहीं है।

निष्कर्ष:

- I. कोई भी द्वार, रास्ता नहीं है।
- II. कुछ गेट, मार्ग हैं।

- Ans
- ☒ 1. केवल निष्कर्ष II अनुसरण करता है
 - ☒ 2. न तो निष्कर्ष I और न ही II अनुसरण करता है
 - ☒ 3. केवल निष्कर्ष I अनुसरण करता है
 - ☒ 4. निष्कर्ष I और II दोनों अनुसरण करते हैं

Question ID : 264330104070
Status : Answered
Chosen Option : 4

Q.14 'Q+R' का अर्थ है कि 'Q, R का पिता है'
'Q-R' का अर्थ है कि 'Q, R की पत्नी है'
'Q×R' का अर्थ है कि 'Q, R का भाई है'
'Q÷R' का अर्थ है कि 'Q, R की पुत्री है'
यदि 'S÷ Q+ M × P - K' है, तो Q का K से क्या रिश्ता है?

- Ans
- ☒ 1. दामाद
 - ☒ 2. ससुर
 - ☒ 3. पुत्र
 - ☒ 4. पिता

Question ID : 264330143371
Status : Answered
Chosen Option : 2

Q.15 निम्नलिखित में से कौन-सी संख्या दी गई श्रेणी में प्रश्न चिह्न (?) को प्रतिस्थापित करेगी?
23, 25, 28, 33, ?, 51, 64

- Ans
- ☒ 1. 41
 - ☒ 2. 38
 - ☒ 3. 39
 - ☒ 4. 40

Question ID : 26433056429
Status : Answered
Chosen Option : 4

Q.16 एक निश्चित कोड भाषा में, 'MANAGE' को 'LYMYFC' लिखा जाता है और 'CREATE' को 'BQCYSC' लिखा जाता है। उसी भाषा में 'BUILD' को कैसे लिखा जाएगा?

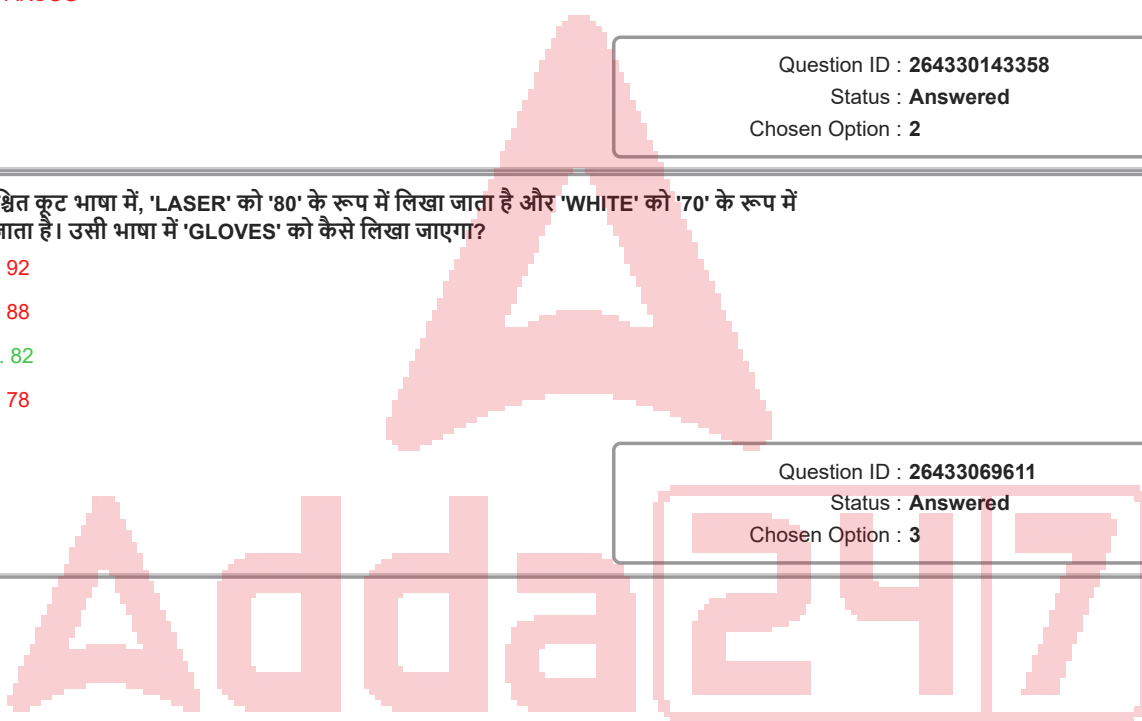
- Ans
- ☒ 1. CKGSA
 - ☒ 2. ASGKC
 - ☒ 3. GAKSC
 - ☒ 4. AKSCG

Question ID : 264330143358
Status : Answered
Chosen Option : 2

Q.17 एक निश्चित कूट भाषा में, 'LASER' को '80' के रूप में लिखा जाता है और 'WHITE' को '70' के रूप में लिखा जाता है। उसी भाषा में 'GLOVES' को कैसे लिखा जाएगा?

- Ans
- ☒ 1. 92
 - ☒ 2. 88
 - ☒ 3. 82
 - ☒ 4. 78

Question ID : 26433069611
Status : Answered
Chosen Option : 3



Q.18 उस आकृति का चयन करें जो निम्नलिखित आकृति श्रृंखला में प्रश्न चिह्न (?) को प्रतिस्थापित करेगी।



Ans

- ✗ 1.
- ✓ 2.
- ✗ 3.
- ✗ 4.

Question ID : 26433057009

Status : Answered

Chosen Option : 2

Q.19 एक निश्चित कूट भाषा में, 'DEFECT' को '2747118' लिखा जाता है, 'DEVICE' को '27201117' लिखा जाता है, उसी कूट भाषा में 'DOMAIN' को कैसे लिखा जाएगा?

- ✗ 1. 217111912
- ✓ 2. 2171131112
- ✗ 3. 217113119
- ✗ 4. 417111912

Question ID : 264330143379

Status : Answered

Chosen Option : 2

Q.20 इस प्रश्न में तीन कथन और उसके बाद दो निष्कर्ष I और II दिए गए हैं। कथनों को सत्य मानते हुए, भले ही वे सर्वज्ञात तथ्यों से भिन्न प्रतीत होते हों, यह निर्णय करें कि कौन सा/से निष्कर्ष कथनों का तार्किक रूप से अनुसरण करता/करते है/हैं।

कथन:

कुछ नाशपाती आम हैं।

सभी आम अंगूर हैं।

सभी नाशपाती फल हैं।

निष्कर्ष:

I. कुछ नाशपाती अंगूर हैं।

II. कुछ आम फल हैं।

Ans ☒ 1. केवल निष्कर्ष I अनुसरण करता है।

☒ 2. निष्कर्ष I और II दोनों अनुसरण करते हैं।

☒ 3. केवल निष्कर्ष II अनुसरण करता है।

☒ 4. न तो निष्कर्ष I और न ही II अनुसरण करता है।

Question ID : 264330143348

Status : Answered

Chosen Option : 2

Q.21 उस विकल्प का चयन कीजिए, जिसका तीसरे अक्षर-समूह से ठीक वही संबंध है, जो संबंध दूसरे अक्षर-समूह का पहले अक्षर-समूह से है।
NOTICE : ONUHDD :: DULCET : ?

Ans ☒ 1. CVKDDU

☒ 2. QSYPR

☒ 3. ETMBFS

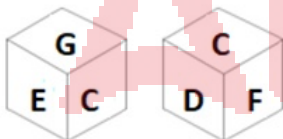
☒ 4. WFOYUH

Question ID : 26433068805

Status : Answered

Chosen Option : 3

Q.22 एक ही पासे की दो अलग-अलग स्थितियों को दर्शाया गया है, जिसके फलकों पर B, C, D, E, F और G अक्षर लिखे हुए हैं।



E वाले फलक के विपरीत फलक पर कौन सा अक्षर है?

Ans ☒ 1. B

☒ 2. D

☒ 3. F

☒ 4. G

Question ID : 264330143438

Status : Answered

Chosen Option : 3

Q.23 दी गई श्रेणी में प्रश्नवाचक चिह्न (?) के स्थान पर विकल्पों में से कौन सी संख्या आएगी?

0.04, 0.12, 0.42, 1.68, 2.08, 10.4, ?

- Ans
- ☒ 1. 11.8
 - ☒ 2. 12.9
 - ☒ 3. 10.9
 - ☒ 4. 12.3

Question ID : 264330143335

Status : Not Answered

Chosen Option : --


Q.24 तस्वीर में दिख रहे एक व्यक्ति की ओर इंगित करते हुए प्रीति ने कहा, "वह मेरे पति के ससुर, गोपाल की इकलौती पुत्री का पुत्र है।" तस्वीर में दिख रहा व्यक्ति प्रीति से किस प्रकार संबंधित है?

- Ans
- ☒ 1. पिता
 - ☒ 2. पुत्र
 - ☒ 3. चाचा
 - ☒ 4. भाई

Question ID : 26433068449

Status : Answered

Chosen Option : 2



Q.25 उस विकल्प आकृति का चयन करें, जो दी गई आकृति में उसके भाग के रूप में अंतर्निहित है (घुमाव की अनुमति नहीं है)।

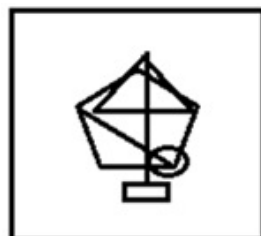


Ans

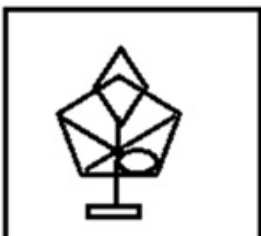
✗ 1.



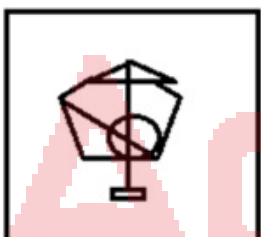
✓ 2.



✗ 3.



✗ 4.



Question ID : 26433078908

Status : Answered

Chosen Option : 2

Section : General Awareness

Q.1 कुटुम्ब न्यायालय (संशोधन) विधेयक, 2022 के संबंध में निम्नलिखित में से कौन से कथन सत्य हैं?

1. कुटुम्ब न्यायालय (संशोधन) विधेयक 18 जुलाई 2022 को लोकसभा में पेश किया गया था।
2. यह विधेयक, कुटुम्ब न्यायालय अधिनियम, 1984 में संशोधन करता है।
3. यह अधिनियम राज्य सरकारों को कुटुम्ब न्यायालय स्थापित करने की अनुमति देता है।
4. यह अधिनियम पंजाब और तमिलनाडु में लागू नहीं है।

Ans

✗ 1. 1, 2 और 4

✗ 2. 1, 3 और 4

✓ 3. 1, 2 और 3

✗ 4. 2, 3 और 4

Question ID : 264330130835

Status : Not Answered

Chosen Option : --

Q.2 हिंदुस्तानी शास्त्रीय गायक भीमसेन जोशी निम्नलिखित में से किस घराने से संबंधित थे?

- Ans
- ☐ 1. आगरा घराना
 - ☐ 2. रामपुर सहस्रवां घराना
 - ☐ 3. खालियर घराना
 - ☒ 4. किराना घराना

Question ID : 264330143402
Status : Not Answered
Chosen Option : --

Q.3 मार्च 2021 के अनुसार, निम्नलिखित में से किस राज्य में निर्यात-प्रसंस्करण क्षेत्र नहीं है?

- Ans
- ☐ 1. गुजरात
 - ☐ 2. तमिलनाडु
 - ☐ 3. पश्चिम बंगाल
 - ☒ 4. बिहार

Question ID : 26433089220
Status : Answered
Chosen Option : 4

Q.4 1973 में मद्रास संगीत अकादमी द्वारा तंजौर बालासरस्वती को किस नृत्य में योगदान के लिए संगीता कलानिधि की उपाधि से सम्मानित किया गया था?

- Ans
- ☐ 1. कथक
 - ☐ 2. कथकली
 - ☒ 3. भरतनाट्यम
 - ☐ 4. मोहिनीअट्टम

Question ID : 264330110267
Status : Answered
Chosen Option : 3

Q.5 2021 में, भारत के सलामी बल्लेबाज रोहित शर्मा _____ के खिलाफ मैच के दौरान T20 अंतरराष्ट्रीय क्रिकेट में 3000 रन पूरे करने वाले तीसरे बल्लेबाज बने।

- Ans
- ☐ 1. ऑस्ट्रेलिया
 - ☐ 2. पाकिस्तान
 - ☒ 3. नामिबिया
 - ☐ 4. न्यूजीलैंड

Question ID : 26433072905
Status : Not Answered
Chosen Option : --

Q.6 कोशिका झिल्ली के विषय में सही कथन की पहचान कीजिए।

- Ans
- ☐ 1. कोशिका झिल्ली केवल वसा और तंतु से बनी होती है।
 - ☐ 2. कोशिका झिल्ली केवल लिपिड से बनी होती है।
 - ☒ 3. कोशिका झिल्ली कार्बोहाइड्रेट, लिपिड और प्रोटीन से बनी होती है।
 - ☐ 4. कोशिका झिल्ली रफेज से बनी होती है।

Question ID : 26433064757
Status : Answered
Chosen Option : 3

Q.7 जबकि इतिहासकार विजयनगर साम्राज्य शब्द का प्रयोग करते हैं, समकालीनों ने इसे समराज्यमु के रूप में वर्णित किया है।

- Ans
- ☒ 1. केरल
 - ☒ 2. आंध्र
 - ☒ 3. कर्नाटक
 - ☒ 4. तमिल

Question ID : 26433085245
Status : Answered
Chosen Option : 4

Q.8 निम्नलिखित में से किस राज्य ने 1 से 3 नवंबर 2022 तक तीन दिवसीय सिविल एयर नेविगेशन सेवा संगठन (CANSO) सम्मेलन की मेजबानी की थी?

- Ans
- ☒ 1. त्रिपुरा
 - ☒ 2. महाराष्ट्र
 - ☒ 3. मध्य प्रदेश
 - ☒ 4. गोवा

Question ID : 264330132602
Status : Not Answered
Chosen Option : --

Q.9 मध्य प्रदेश राज्य में ग्यारहवीं शताब्दी की भोजशाला की संरचना का निर्माण किस राजवंश के संरक्षण में किया गया है?

- Ans
- ☒ 1. चंदेल
 - ☒ 2. परमार
 - ☒ 3. नंद
 - ☒ 4. गुर्जर-प्रतिहार

Question ID : 264330132429
Status : Not Answered
Chosen Option : --

Q.10 निम्नलिखित में से कौन-सा धार्मिक त्योहार तेलंगाना में पीरला पांडुगा के नाम से जाना जाता है?

- Ans
- ☒ 1. नवरोज़
 - ☒ 2. मुहर्रम
 - ☒ 3. क्रिसमस
 - ☒ 4. ईद-उल-फितर

Question ID : 26433064676
Status : Answered
Chosen Option : 1

Q.11 राष्ट्रपति श्रीमती द्रौपदी मुर्मू ने सितंबर 2022 में किस वर्ष तक भारत से टीबी को खत्म करने के लिए 'प्रधानमंत्री टीबी मुक्त भारत अभियान' का शुभारंभ किया?

- Ans
- ☒ 1. 2026 तक
 - ☒ 2. 2027 तक
 - ☒ 3. 2025 तक
 - ☒ 4. 2024 तक

Question ID : 264330130834
Status : Not Answered
Chosen Option : --

Q.12 पैथेरा टाइग्रिस (Panthera Tigris) प्रजाति के लिए विश्व में एकमात्र मैग्रोव आवास कौन-सा है?

- Ans
- ☒ 1. मोलाई वन
 - ☒ 2. सुंदरवन
 - ☒ 3. सारंडा वन
 - ☒ 4. अबूझमाड़ वन

Question ID : 26433092206
Status : Answered
Chosen Option : 2

Q.13 निम्नलिखित में से कौन सा विकल्प सतलुज नदी के उद्गम से संबंधित है?

- Ans
- ☒ 1. राक्षस ताल
 - ☒ 2. मिलाम
 - ☒ 3. गौमुख
 - ☒ 4. पंचनद

Question ID : 264330109866
Status : Answered
Chosen Option : 1

Q.14 निम्नलिखित में से किस खेल प्रतियोगिता में सैयद मुश्ताक अली ट्रॉफी दी जाती है?

- Ans
- ☒ 1. हॉकी
 - ☒ 2. फुटबॉल
 - ☒ 3. बैडमिंटन
 - ☒ 4. क्रिकेट

Question ID : 264330109666
Status : Answered
Chosen Option : 2

Q.15 मद्रास का वेद समाज _____ से प्रेरित था।

- Ans
- ☒ 1. देवबंद आंदोलन
 - ☒ 2. ब्रह्म समाज
 - ☒ 3. वहाबी आंदोलन
 - ☒ 4. आर्य समाज

Question ID : 26433085310
Status : Answered
Chosen Option : 2

Q.16 निम्नलिखित में से किसे भारत में आधुनिक नृत्य का जनक माना गया?

- Ans
- ☒ 1. पंकज चरण दास
 - ☒ 2. राजा रेड्डी
 - ☒ 3. कुंचु कुरुप
 - ☒ 4. उदय शंकर

Question ID : 26433074078
Status : Answered
Chosen Option : 4

Q.17 निम्नलिखित में से कौन ब्रह्म समाज से संबंधित नहीं है?

- Ans
- ☒ 1. राजा राम मोहन राय
 - ☒ 2. आत्माराम पांडुरंग
 - ☒ 3. केशव चंद्र सेन
 - ☒ 4. देबेन्द्रनाथ टैगोर

Question ID : 264330130613
Status : Answered
Chosen Option : 4

Q.18 भारतीय संविधान का कौन सा अनुच्छेद लोक सेवा आयोग के सदस्य को हटाने और निलंबन से संबंधित है?

- Ans
- ☒ 1. अनुच्छेद 320
 - ☒ 2. अनुच्छेद 324
 - ☒ 3. अनुच्छेद 315
 - ☒ 4. अनुच्छेद 317

Question ID : 264330111534
Status : Not Answered
Chosen Option : --

Q.19 स्तरीकृत रेत और बजरी की एक लंबी, विसर्पी कटक को _____ के रूप में जाना जाता है।

- Ans
- ☒ 1. एस्केर
 - ☒ 2. वोर्ल
 - ☒ 3. लोप
 - ☒ 4. आर्क

Question ID : 26433064188
Status : Not Answered
Chosen Option : --

Q.20 वर्ष 2011 की जनगणना के अनुसार किस केंद्र शासित प्रदेश की पुरुष साक्षरता दर सर्वाधिक है?

- Ans
- ☒ 1. लक्षद्वीप
 - ☒ 2. दिल्ली
 - ☒ 3. अण्डमान और निकोबार
 - ☒ 4. पुदुचेरी

Question ID : 264330109507
Status : Answered
Chosen Option : 1

Q.21 'फास्टिंग, फीस्टिंग' शीर्षक पुस्तक की लेखिका निम्नलिखित में से कौन हैं?

- Ans
- ☒ 1. शशि देशपांडे
 - ☒ 2. झुम्पा लाहिड़ी
 - ☒ 3. अनीता देसाई
 - ☒ 4. अरुंधति रॉय

Question ID : 26433054845
Status : Not Answered
Chosen Option : --

Q.22 स्व-रोजगार सुसाध्य बनाने के लिए, _____ तक का संपार्श्विक मुक्त ऋण प्रदान करने के लिए 2015 में भारत सरकार द्वारा प्रधान मंत्री मुद्रा योजना (PMMY) लागू की गई थी।

- Ans
- ☒ 1. ₹20 लाख
 - ☒ 2. ₹15 लाख
 - ☒ 3. ₹5 लाख
 - ☒ 4. ₹10 लाख

Question ID : 264330113301
Status : Not Answered
Chosen Option : --

Q.23 मई 1982 में हुए आम चुनावों में निम्नलिखित में से किस राज्य में पहली बार EVMs का प्रयोग किया गया?

- Ans
- ☒ 1. तमिलनाडु
 - ☒ 2. महाराष्ट्र
 - ☒ 3. आंध्र प्रदेश
 - ☒ 4. केरल

Question ID : 264330113423
Status : Answered
Chosen Option : 1

Q.24 गुप्त साम्राज्य के प्रसिद्ध स्रोत प्रयाग प्रशस्ति को _____ के रूप में भी जाना जाता है।

- Ans
- ☒ 1. लखनऊ स्तंभ शिलालेख
 - ☒ 2. इलाहाबाद स्तंभ शिलालेख
 - ☒ 3. अहमदाबाद स्तंभ शिलालेख
 - ☒ 4. बिठूर स्तंभ शिलालेख

Question ID : 264330111368
Status : Answered
Chosen Option : 2

Q.25 मेंडेलीव आवर्त सारणी की 150 वीं वर्षगांठ मनाने के लिए यूनेस्को द्वारा किस वर्ष को इंटरनेशनल इयर ऑफ़ दि पीरियॉडिक टेबल (IYPT) के रूप में नामित किया गया था?

- Ans
- ☒ 1. 2020
 - ☒ 2. 2019
 - ☒ 3. 2017
 - ☒ 4. 2018

Question ID : 264330143316
Status : Not Answered
Chosen Option : --

Section : Quantitative Aptitude

Q.1 राम ने दो बैग, प्रत्येक ₹1,260 की दर से बेचे। एक पर उसे 20% का लाभ हुआ और दूसरे पर उसे 20% की हानि हुई। पूरे लेन-देन में उसका लाभ या हानि प्रतिशत ज्ञात करें।

- Ans
- ☒ 1. 4% हानि
 - ☒ 2. 5% हानि
 - ☒ 3. 4% लाभ
 - ☒ 4. 5% लाभ

Question ID : 264330130082
Status : Answered
Chosen Option : 1

Q.2 यदि एक घन का आयतन 12167 cm^3 , दिया गया है, तो घन का पृष्ठीय क्षेत्रफल क्या होगा?

- Ans
- ☒ 1. 4574 cm^2
 - ☒ 2. 3174 cm^2
 - ☒ 3. 3475 cm^2
 - ☒ 4. 5413 cm^2

Question ID : 26433076090
Status : Answered
Chosen Option : 2

Q.3 यदि $(x^2 + \frac{1}{x^2}) = 18$ और $x > 1$ है, तो $(x^3 - \frac{1}{x^3})$ का मान क्या होगा?

- Ans
- ☒ 1. 64
 - ☒ 2. 80
 - ☒ 3. 52
 - ☒ 4. 76

Question ID : 264330101337
Status : Answered
Chosen Option : 4

Q.4 दूध का क्रय मूल्य ₹60 से बढ़ाकर ₹62 कर दिया गया है। दूधवाले ने पहले दूध को 10% लाभ पर बेचा। यदि वह उसी दर पर दूध बेचता है तो अब उसका लाभ % क्या है?

- Ans
- ☒ 1. 5.46%
 - ☒ 2. 6.45%
 - ☒ 3. 6.54 %
 - ☒ 4. 5.64%

Question ID : 264330102066
Status : Not Answered
Chosen Option : --

Q.5 सोनम ने ₹27,000 में एक मोबाइल फोन खरीदा और उसे 19% की हानि पर बेच दिया। उस पैसे से उसने एक टैबलेट खरीदा और उसे 20% के लाभ पर बेच दिया। उसके कुल लाभ या हानि की गणना करें।

- Ans
- ☒ 1. ₹756 की हानि
 - ☒ 2. ₹856 की हानि
 - ☒ 3. ₹870 का लाभ
 - ☒ 4. ₹756 का लाभ

Question ID : 264330126515
Status : Answered
Chosen Option : 1

Q.6 यदि $\sin \theta + \cos \theta = \frac{\sqrt{11}}{3}$ है, तो $\tan \theta + \cot \theta$ निम्न में से किसके बराबर है?

- Ans
- ☒ 1. 5
 - ☒ 2. 11
 - ☒ 3. 9
 - ☒ 4. 7

Question ID : 264330126225
Status : Answered
Chosen Option : 3

Q.7 एक कक्षा में 30 विद्यार्थियों का औसत भार 60 kg है। यदि कक्षा के शिक्षक का भार भी शामिल कर लिया जाए, तो औसत में 0.5 kg की वृद्धि हो जाती है। शिक्षक का भार (kg) में ज्ञात कीजिए।

- Ans
- ☐ 1. 76.5
 - ☐ 2. 74.5
 - ☐ 3. 72.5
 - ☒ 4. 75.5

Question ID : 264330129389
Status : Answered
Chosen Option : 4

Q.8 प्रस्तुत तालिका का अध्ययन करके निम्नलिखित प्रश्न का उत्तर दीजिए।

राज्य	कोविड-19 के मामले हजार में			
	सितंबर 2021	अक्टूबर 2021	नवंबर 2021	दिसंबर 2021
महाराष्ट्र	50	65	55	50
यूपी	40	48	40	30
बिहार	50	55	48	30
तमिलनाडु	40	45	40	25
केरल	20	25	22	15

इन पांच राज्यों में एक साथ मिलाकर दिसंबर 2021 में कोविड 19 मामलों की कुल संख्या, सितंबर 2021 में कोविड 19 मामलों की कुल संख्या का कितना प्रतिशत है?

- Ans
- ☐ 1. 68 प्रतिशत
 - ☐ 2. 60 प्रतिशत
 - ☐ 3. 70 प्रतिशत
 - ☒ 4. 75 प्रतिशत

Question ID : 26433080201
Status : Answered
Chosen Option : 4

Q.9 R और S क्रमशः $\triangle XYZ$ की भुजाओं XY और XZ के मध्य बिंदु हैं। साथ ही, $XR = 15$ cm, $XY = 25$ cm, $XS = 12$ cm और $XZ = 20$ cm है। RS _____ के बराबर है।

- Ans
- ☐ 1. $\frac{3}{4}YZ$
 - ☐ 2. $\frac{5}{3}YZ$
 - ☐ 3. $\frac{2}{5}YZ$
 - ☒ 4. $\frac{3}{5}YZ$

Question ID : 264330130310
Status : Answered
Chosen Option : 4

Q.10 $\triangle ABC$ में, D और E क्रमशः भुजा AB और AC के मध्य बिंदु हैं। E रेखाखंड DF पर एक ऐसा बिंदु है कि DE: EF = 1 : 2 है। यदि DE = 4 cm है, तो BC इनमें से किसके बराबर है?

Ans ☒ 1. 24 cm

☐ 2. 20 cm

☐ 3. 26 cm

☐ 4. 22 cm

Question ID : 26433083000

Status : Answered

Chosen Option : 1

Q.11 निम्न तालिका पिछले 5 वर्ष में क्रिकेटर्स द्वारा बनाए गए शतक की संख्या दर्शाती है।

क्रिकेटर \ वर्ष	2021	2020	2019	2018	2017
A	1	0	2	1	1
B	1	2	0	0	1
C	0	0	1	1	0
D	0	1	1	0	1
E	1	0	1	0	1

सभी वर्षों में बनाए गए शतकों की कुल संख्या _____ है।

Ans ☐ 1. 16

☒ 2. 17

☐ 3. 14

☐ 4. 15

Question ID : 26433079965

Status : Answered

Chosen Option : 2

Q.12 वर्तमान में ऋतिका की आयु विपुल की आयु की 3 गुना है। 7 वर्ष बाद ऋतिका की आयु विपुल की आयु की दोगुनी होगी। ऋतिका की वर्तमान आयु (वर्षों में) ज्ञात करें।

Ans ☐ 1. 42

☒ 2. 21

☐ 3. 35

☐ 4. 53

Question ID : 264330126544

Status : Answered

Chosen Option : 2

Q.13 $\frac{32}{\sec^2 \theta} - \frac{20}{1+\tan^2 \theta} + 12 \sin^2 \theta$ का मान ज्ञात कीजिए।

Ans ☒ 1. 12

☐ 2. 32

☐ 3. 24

☐ 4. 20

Question ID : 26433083072

Status : Answered

Chosen Option : 1

Q.14 ₹80 प्रति kg की लागत वाले 20 kg चावल को ₹100 प्रति kg की लागत वाले y kg चावल के साथ मिलाया जाता है। यदि इस मिश्रित चावल का मूल्य ₹84 प्रति kg है, तो y का मान क्या है?

- Ans ☒ 1. 5
☒ 2. 6
☒ 3. 4
☒ 4. 3

Question ID : 264330103239
 Status : Answered
 Chosen Option : 1

Q.15 $11^7 + 9$ को 10 से भाग देने पर शेषफल ज्ञात करें।

- Ans ☒ 1. 3
☒ 2. 0
☒ 3. 1
☒ 4. 2

Question ID : 264330126498
 Status : Answered
 Chosen Option : 2

Q.16 एक व्यापारी ने एक मेज पर ₹ 37,062 का मूल्य अंकित किया और उसे 33% की छूट देकर बेच दिया। यदि उसका लाभ 42% था, तो मेज का क्रय मूल्य (₹ में) क्या था?

- Ans ☒ 1. 16,487
☒ 2. 13,487
☒ 3. 17,487
☒ 4. 15,487

Question ID : 264330103482
 Status : Answered
 Chosen Option : 3

Q.17 46.5 सप्ताह में, राम ने विज्ञान अनुसंधान के लिए Rs.2,170 जुटाए। वह 30 सप्ताह में कितना धन जुटा लेगा?

- Ans ☒ 1. Rs.1,700
☒ 2. Rs.1,600
☒ 3. Rs.1,400
☒ 4. Rs.1,500

Question ID : 26433061264
 Status : Answered
 Chosen Option : 3

Q.18 अनीता और आनंद एक काम क्रमशः 12 दिन और 18 दिन में पूरा कर सकते हैं। उन्होंने उस काम को ₹48,000 में पूरा करने का वादा किया। अरुण की मदद से उन्होंने 6 दिन में काम पूरा किया। अनीता और आनंद के हिस्से का योग (₹ में) ज्ञात करें।

- Ans ☒ 1. 8000
☒ 2. 16000
☒ 3. 24000
☒ 4. 40000

Question ID : 26433079962
 Status : Answered
 Chosen Option : 4

Q.19 ₹16,875 की राशि साधारण ब्याज पर उधार दी गई थी, और 1 वर्ष 8 महीने के अंत में, कुल राशि ₹18,000 थी। वार्षिक ब्याज दर ज्ञात कीजिए।

- Ans
- ☒ 1. 5%
 - ☒ 2. 3.7%
 - ☒ 3. 6.66%
 - ☒ 4. 4%

Question ID : 26433076190
Status : Answered
Chosen Option : 4

Q.20 यदि $\frac{2x}{x+2} + \frac{1}{2x+4} - \frac{12-x}{2x^2+4x} = a + \frac{b}{x}$, जहां a और b पूर्णांक हैं, तो ab का मान = ____।

- Ans
- ☒ 1. 3
 - ☒ 2. 6
 - ☒ 3. -6
 - ☒ 4. -3

Question ID : 26433061340
Status : Not Answered
Chosen Option : --

Q.21 ₹1 लाख के मूलधन पर 2 वर्ष के लिए 12 प्रतिशत वार्षिक की दर से साधारण ब्याज (₹ में) कितना होगा?

- Ans
- ☒ 1. ₹12,000
 - ☒ 2. ₹25,000
 - ☒ 3. ₹24,000
 - ☒ 4. ₹30,000

Question ID : 26433076011
Status : Answered
Chosen Option : 3

Q.22 एक परिवार अपनी कुल आय में से 15% की बचत करता है और शेष राशि तीन प्रकार के व्यय - स्वास्थ्य, शिक्षा और भोजन पर 1 : 2 : 2 के अनुपात में व्यय करता है। आय, शिक्षा पर किए गए व्यय के तीन गुने से 300 रुपये कम है। बचत और स्वास्थ्य पर किए गए व्यय में कितना अंतर है?

- Ans
- ☒ 1. Rs.2,250
 - ☒ 2. Rs.300
 - ☒ 3. Rs.500
 - ☒ 4. Rs.350

Question ID : 26433058208
Status : Not Answered
Chosen Option : --

Q.23 एक पिज्जा बनाने के लिए चीज़ और सॉस का अनुपात 1 कप : $\frac{1}{2}$ कप है। यदि रमा एक निश्चित संख्या में पिज्जा बनाने के लिए 15 कप सॉस का उपयोग करती है, तो उन पिज्जा के लिए कितने कप चीज़ का उपयोग किया जाएगा?

- Ans
- ☐ 1. 40 कप
 - ☐ 2. 20 कप
 - ☐ 3. 10 कप
 - ☒ 4. 30 कप

Question ID : 26433061209
Status : Answered
Chosen Option : 4

Q.24 K का वह न्यूनतम मान ज्ञात करें जिसके लिए $7864K3$, 7 से विभाज्य है।

- Ans
- ☐ 1. 5
 - ☐ 2. 1
 - ☒ 3. 4
 - ☐ 4. 2

Question ID : 264330130058
Status : Answered
Chosen Option : 3

Q.25 एक परीक्षा में, एक छात्र प्रत्येक सही उत्तर के लिए 4 अंक प्राप्त करता है और प्रत्येक गलत उत्तर के लिए 1 अंक की हानि उठाता है। एक छात्र ने सभी 200 प्रश्नों के उत्तर दिए और 500 अंक प्राप्त किए। उसने कितने प्रश्नों के सही उत्तर दिए थे?

- Ans
- ☐ 1. 160
 - ☒ 2. 140
 - ☐ 3. 180
 - ☐ 4. 130

Question ID : 264330123004
Status : Answered
Chosen Option : 2

Section : English Language

Q.1 Select the most appropriate ANTONYM of the given word.

Prudent

- Ans
- ☐ 1. Wise
 - ☐ 2. Atrocious
 - ☐ 3. Crafty
 - ☒ 4. Stupid

Question ID : 26433073991
Status : Answered
Chosen Option : 4

Q.2 Select the INCORRECTLY spelt word.

- Ans ☒ 1. Punctual
☒ 2. Publicly
☒ 3. Protien
☒ 4. Pursuit

Question ID : 26433088414
Status : Answered
Chosen Option : 1

Q.3 Select the most appropriate ANTONYM of the given word.

Hasten

- Ans ☒ 1. Triumph
☒ 2. Dawdle
☒ 3. Spooky
☒ 4. Present

Question ID : 26433073992
Status : Answered
Chosen Option : 2

Q.4 Select the most appropriate option to fill in the blank.

_____ UK government continually reiterates its commitment to halting the brain drain.

- Ans ☒ 1. An
☒ 2. A
☒ 3. The
☒ 4. Any

Question ID : 26433066081
Status : Answered
Chosen Option : 2

Q.5 Select the option that expresses the given sentence in reported speech.
The teacher said, "She had started the fight".

- Ans ☒ 1. The teacher ordered that she had started the fight.
☒ 2. The teacher said that she had started the fight.
☒ 3. The teacher said that she has started the fight.
☒ 4. The teacher complained that she has started the fight.

Question ID : 264330120518
Status : Answered
Chosen Option : 2

Q.6 The following sentence has been split into four segments. Identify the segment that contains a grammatical error.

I caught / a white cat / rustling / beneath my room.

- Ans**
- ☒ 1. rustling
 - ☒ 2. a white cat
 - ☒ 3. beneath my room.
 - ☒ 4. I caught

Question ID : 26433096145
Status : Answered
Chosen Option : 3

Q.7 Select the most appropriate option that can substitute the underlined segment in the given sentence.

The rebels laid up their arms.

- Ans**
- ☒ 1. laid by
 - ☒ 2. laid on
 - ☒ 3. laid down
 - ☒ 4. laid out

Question ID : 26433059679
Status : Answered
Chosen Option : 3

Q.8 Select the most appropriate option that can substitute the underlined segment in the given sentence. If there is no need to substitute it, select 'No substitution'.

He was advised for walking alone in the neighbourhood.

- Ans**
- ☒ 1. advised against
 - ☒ 2. advised about
 - ☒ 3. advised on
 - ☒ 4. No substitution

Question ID : 26433073167
Status : Answered
Chosen Option : 2

Q.9 Select the most appropriate option to substitute the underlined segment in the given sentence.

She has gained a lot of fame but still she is very realistic and sensible.

- Ans**
- ☒ 1. down to it
 - ☒ 2. down to earth
 - ☒ 3. down to drown
 - ☒ 4. down to bottom

Question ID : 26433089836
Status : Answered
Chosen Option : 2

Q.10 Select the most appropriate synonym for the highlighted word.
The hapless incident was a result of sheer negligence by the authorities.

- Ans ☒ 1. triumphant
☒ 2. ill- fated
☒ 3. grateful
☒ 4. joyful

Question ID : 264330120722
Status : Answered
Chosen Option : 2

Q.11 Select the most appropriate meaning of the given idiom.

On cloud nine

- Ans ☒ 1. To be extremely cautious
☒ 2. To be extremely sad
☒ 3. To be extremely happy
☒ 4. To be extremely shaky

Question ID : 26433089390
Status : Answered
Chosen Option : 3

Q.12 Select the option that can be used as a one-word substitute for the underlined group of words in the given sentence.

The war resulted in ruthless killing of many people.

- Ans ☒ 1. sacrilege
☒ 2. carnage
☒ 3. fratricide
☒ 4. murder

Question ID : 26433073857
Status : Answered
Chosen Option : 1

Q.13 Select the option that expresses the given sentence in reported speech.

"We will have a thorough search before opening the room," the inspector told his subordinates.

- Ans ☒ 1. The inspector told his subordinates that they would have a thorough search before opening the room.
☒ 2. The inspector told his subordinates that they will had a thorough search before opening the room.
☒ 3. The inspector told his subordinates that they can have a thorough search before opening the room.
☒ 4. The inspector told his subordinates that they would be having a thorough search before opening the room.

Question ID : 26433091960
Status : Answered
Chosen Option : 1

Q.14 Select the option that expresses the given sentence in passive voice.
The storm destroyed the entire village.

- Ans ☒ 1. The village was being destroyed entirely by the storm.
- ☒ 2. The village was entirely destroyed by the storm.
- ☒ 3. The storm was destroying the entire village.
- ☒ 4. The entire village was destroyed by the storm.

Question ID : 264330133340
Status : Answered
Chosen Option : 4

Q.15 Select the most appropriate option to fill in the blank.

Conditions such as stress, depression and anxiety can all affect mental health and _____ a person's routine.

- Ans ☒ 1. fragment
- ☒ 2. crush
- ☒ 3. dishevel
- ☒ 4. disrupt

Question ID : 26433060953
Status : Answered
Chosen Option : 4

Comprehension:

In the following passage, some words have been deleted. Read the passage carefully and select the most appropriate option to fill in each blank.

The Publications Division (PD), one of the leading publishing houses in the country and the largest in the public sector, functions (1)_____ the Ministry of Information and Broadcasting. It attempts to promote National Integration by (2)_____ information and creating awareness about the various activities, regions, people and the (3)_____ cultures and beliefs of the Nation. The Division publishes and sells books at affordable prices through its outlets in important cities and also (4)_____ agents. It also participates in exhibitions and books fairs to promote the sale of books and journals. Till date, 7,600 titles (5)_____ published, of which 1,500 are live today. Besides books, the Publication Division has also brought out 21 journals about various issues of national and social significance.

SubQuestion No : 16

Q.16 Select the most appropriate option to fill in blank no. 1.

- Ans ☒ 1. of
- ☒ 2. on
- ☒ 3. under
- ☒ 4. in

Question ID : 264330132883
Status : Answered
Chosen Option : 3

Comprehension:

In the following passage, some words have been deleted. Read the passage carefully and select the most appropriate option to fill in each blank.
The Publications Division (PD), one of the leading publishing houses in the country and the largest in the public sector, functions (1)_____ the Ministry of Information and Broadcasting. It attempts to promote National Integration by (2)_____ information and creating awareness about the various activities, regions, people and the (3)_____ cultures and beliefs of the Nation. The Division publishes and sells books at affordable prices through its outlets in important cities and also (4)_____ agents. It also participates in exhibitions and books fairs to promote the sale of books and journals. Till date, 7,600 titles (5)_____ published, of which 1,500 are live today. Besides books, the Publication Division has also brought out 21 journals about various issues of national and social significance.

SubQuestion No : 17

Q.17 Select the most appropriate option to fill in blank no. 2.

- Ans** ☒ 1. assembling
☒ 2. disseminating
☒ 3. concealing
☒ 4. pouring

Question ID : 264330132884
Status : Answered
Chosen Option : 1

Comprehension:

In the following passage, some words have been deleted. Read the passage carefully and select the most appropriate option to fill in each blank.
The Publications Division (PD), one of the leading publishing houses in the country and the largest in the public sector, functions (1)_____ the Ministry of Information and Broadcasting. It attempts to promote National Integration by (2)_____ information and creating awareness about the various activities, regions, people and the (3)_____ cultures and beliefs of the Nation. The Division publishes and sells books at affordable prices through its outlets in important cities and also (4)_____ agents. It also participates in exhibitions and books fairs to promote the sale of books and journals. Till date, 7,600 titles (5)_____ published, of which 1,500 are live today. Besides books, the Publication Division has also brought out 21 journals about various issues of national and social significance.

SubQuestion No : 18

Q.18 Select the most appropriate option to fill in blank no. 3.

- Ans** ☒ 1. absolute
☒ 2. myriad
☒ 3. clear
☒ 4. same

Question ID : 264330132885
Status : Answered
Chosen Option : 1

Comprehension:

In the following passage, some words have been deleted. Read the passage carefully and select the most appropriate option to fill in each blank.
The Publications Division (PD), one of the leading publishing houses in the country and the largest in the public sector, functions (1)_____ the Ministry of Information and Broadcasting. It attempts to promote National Integration by (2)_____ information and creating awareness about the various activities, regions, people and the (3)_____ cultures and beliefs of the Nation. The Division publishes and sells books at affordable prices through its outlets in important cities and also (4)_____ agents. It also participates in exhibitions and books fairs to promote the sale of books and journals. Till date, 7,600 titles (5)_____ published, of which 1,500 are live today. Besides books, the Publication Division has also brought out 21 journals about various issues of national and social significance.

SubQuestion No : 19

Q.19 Select the most appropriate option to fill in blank no. 4.

- Ans ☒ 1. through
☐ 2. in
☐ 3. as
☐ 4. about

Question ID : 264330132886
Status : Answered
Chosen Option : 1

Comprehension:

In the following passage, some words have been deleted. Read the passage carefully and select the most appropriate option to fill in each blank.
The Publications Division (PD), one of the leading publishing houses in the country and the largest in the public sector, functions (1)_____ the Ministry of Information and Broadcasting. It attempts to promote National Integration by (2)_____ information and creating awareness about the various activities, regions, people and the (3)_____ cultures and beliefs of the Nation. The Division publishes and sells books at affordable prices through its outlets in important cities and also (4)_____ agents. It also participates in exhibitions and books fairs to promote the sale of books and journals. Till date, 7,600 titles (5)_____ published, of which 1,500 are live today. Besides books, the Publication Division has also brought out 21 journals about various issues of national and social significance.

SubQuestion No : 20

Q.20 Select the most appropriate option to fill in blank no. 5.

- Ans ☐ 1. have being
☒ 2. have been
☐ 3. had being
☐ 4. have be

Question ID : 264330132887
Status : Answered
Chosen Option : 2

Comprehension:

Read the given passage and answer the question that follows.

When the dance had finished, Odysseus stood, his voice raised for all to hear. "We are truly honoured by your performance; not everyone can say that they have seen the dancers of Scyros. As tokens of our admiration we have brought gifts for you and your king." A murmur of excitement. Luxuries did not come often to Scyros; no one here had the money to buy them.

"You are too kind." Lycomedes' face was flushed with genuine pleasure; he had not expected this generosity. The servants brought trunks forth at Odysseus' signal and began unloading them on the long tables. I saw the glitter of silver, the shine of glass and gems. All of us, men and women both, leaned towards them, eager to see.

'Please, take what you like,' Odysseus said. The girls moved swiftly to the tables, and I watched them fingering the bright trinkets: perfumes in delicate glass bottles stoppered with a bit of wax; mirrors with carved ivory for handles; bracelets of twisted gold; ribbons, dyed deep in purples and reds. Among these were a few things I assumed were meant for Lycomedes and his counsellors: leather-bound shields, carved spear hafts, and silvered swords with supple kidskin sheathes. Lycomedes' eyes had caught on one of these, like a fish snagged by a line. Odysseus stood near, presiding benevolently.

Achilles kept to the back, drifting slowly along the table. He paused to dab some perfume on his slender wrists, stroke the smooth handle of a mirror. He lingered a moment over a pair of earrings, blue stones set in silver wire.

A movement at the far end of the hall caught my eye. Diomedes had crossed the chamber and was speaking with one of his servants, who nodded and left through the large double doors. Whatever it was could not be important; Diomedes seemed half-asleep, his eyes heavy-lidded and bored.

I looked back to Achilles. He was holding the earrings up to his ears now, turning them this way and that, pursing his lips, playing at girlishness. It amused him, and the corner of his mouth curved up. His eyes flicked around the hall, catching for a moment on my face. I could not help myself. I smiled.

SubQuestion No : 21

Q.21 Which word in the passage is OPPOSITE in meaning to 'advanced'?

- Ans
- ☐ 1. Flushed
 - ☐ 2. Snagged
 - ☒ 3. Lingered
 - ☐ 4. Crossed

Question ID : 264330132869

Status : Answered

Chosen Option : 1

Comprehension:

Read the given passage and answer the question that follows.

When the dance had finished, Odysseus stood, his voice raised for all to hear. "We are truly honoured by your performance; not everyone can say that they have seen the dancers of Scyros. As tokens of our admiration we have brought gifts for you and your king." A murmur of excitement. Luxuries did not come often to Scyros; no one here had the money to buy them.

"You are too kind." Lycomedes' face was flushed with genuine pleasure; he had not expected this generosity. The servants brought trunks forth at Odysseus' signal and began unloading them on the long tables. I saw the glitter of silver, the shine of glass and gems. All of us, men and women both, leaned towards them, eager to see.

'Please, take what you like,' Odysseus said. The girls moved swiftly to the tables, and I watched them fingering the bright trinkets: perfumes in delicate glass bottles stoppered with a bit of wax; mirrors with carved ivory for handles; bracelets of twisted gold; ribbons, dyed deep in purples and reds. Among these were a few things I assumed were meant for Lycomedes and his counsellors: leather-bound shields, carved spear hafts, and silvered swords with supple kidskin sheathes. Lycomedes' eyes had caught on one of these, like a fish snagged by a line. Odysseus stood near, presiding benevolently.

Achilles kept to the back, drifting slowly along the table. He paused to dab some perfume on his slender wrists, stroke the smooth handle of a mirror. He lingered a moment over a pair of earrings, blue stones set in silver wire.

A movement at the far end of the hall caught my eye. Diomedes had crossed the chamber and was speaking with one of his servants, who nodded and left through the large double doors. Whatever it was could not be important; Diomedes seemed half-asleep, his eyes heavy-lidded and bored.

I looked back to Achilles. He was holding the earrings up to his ears now, turning them this way and that, pursing his lips, playing at girlishness. It amused him, and the corner of his mouth curved up. His eyes flicked around the hall, catching for a moment on my face. I could not help myself. I smiled.

SubQuestion No : 22

Q.22 "He was holding the earrings up to his ears now, turning them this way and that, pursing his lips, playing at girlishness."

What do you infer as the most probable reason for Achilles' behaviour?

- Ans**
- ☒ 1. Achilles was playing the part of an ideal host.
 - ☒ 2. Achilles was in charge of selecting the best accessories for war.
 - ☒ 3. Achilles was in a woman's disguise and was playing his part.
 - ☒ 4. Achilles was selecting an ideal gift for Lycomedes.

Question ID : 264330132870

Status : Answered

Chosen Option : 3

Comprehension:

Read the given passage and answer the question that follows.

When the dance had finished, Odysseus stood, his voice raised for all to hear. "We are truly honoured by your performance; not everyone can say that they have seen the dancers of Scyros. As tokens of our admiration we have brought gifts for you and your king."

A murmur of excitement. Luxuries did not come often to Scyros; no one here had the money to buy them.

"You are too kind." Lycomedes' face was flushed with genuine pleasure; he had not expected this generosity. The servants brought trunks forth at Odysseus' signal and began unloading them on the long tables. I saw the glitter of silver, the shine of glass and gems. All of us, men and women both, leaned towards them, eager to see.

'Please, take what you like,' Odysseus said. The girls moved swiftly to the tables, and I watched them fingering the bright trinkets: perfumes in delicate glass bottles stoppered with a bit of wax; mirrors with carved ivory for handles; bracelets of twisted gold; ribbons, dyed deep in purples and reds. Among these were a few things I assumed were meant for Lycomedes and his counsellors: leather-bound shields, carved spear hafts, and silvered swords with supple kidskin sheathes. Lycomedes' eyes had caught on one of these, like a fish snagged by a line. Odysseus stood near, presiding benevolently.

Achilles kept to the back, drifting slowly along the table. He paused to dab some perfume on his slender wrists, stroke the smooth handle of a mirror. He lingered a moment over a pair of earrings, blue stones set in silver wire.

A movement at the far end of the hall caught my eye. Diomedes had crossed the chamber and was speaking with one of his servants, who nodded and left through the large double doors. Whatever it was could not be important; Diomedes seemed half-asleep, his eyes heavy-lidded and bored.

I looked back to Achilles. He was holding the earrings up to his ears now, turning them this way and that, pursing his lips, playing at girlishness. It amused him, and the corner of his mouth curved up. His eyes flicked around the hall, catching for a moment on my face. I could not help myself. I smiled.

SubQuestion No : 23

Q.23 "Lycomedes' eyes had caught on one of these, like a fish snagged by a line." What can be inferred from this statement?

- Ans** ☒ 1. Being a warrior, he was attracted to the sword and all the more since he could not afford one like that on his own.
- ☐ 2. He was very cunning and wanted to take the shields and swords in order to fight Odysseus later on.
- ☐ 3. He was attracted to the unique looking sword which looked like a fishing line with a hook.
- ☐ 4. He was a greedy man and wanted to take the best gifts for himself without sharing anything with others.

Question ID : 264330132871

Status : Answered

Chosen Option : 3

Comprehension:

Read the given passage and answer the question that follows.

When the dance had finished, Odysseus stood, his voice raised for all to hear. "We are truly honoured by your performance; not everyone can say that they have seen the dancers of Scyros. As tokens of our admiration we have brought gifts for you and your king." A murmur of excitement. Luxuries did not come often to Scyros; no one here had the money to buy them.

"You are too kind." Lycomedes' face was flushed with genuine pleasure; he had not expected this generosity. The servants brought trunks forth at Odysseus' signal and began unloading them on the long tables. I saw the glitter of silver, the shine of glass and gems. All of us, men and women both, leaned towards them, eager to see.

'Please, take what you like,' Odysseus said. The girls moved swiftly to the tables, and I watched them fingering the bright trinkets: perfumes in delicate glass bottles stoppered with a bit of wax; mirrors with carved ivory for handles; bracelets of twisted gold; ribbons, dyed deep in purples and reds. Among these were a few things I assumed were meant for Lycomedes and his counsellors: leather-bound shields, carved spear hafts, and silvered swords with supple kidskin sheathes. Lycomedes' eyes had caught on one of these, like a fish snagged by a line. Odysseus stood near, presiding benevolently.

Achilles kept to the back, drifting slowly along the table. He paused to dab some perfume on his slender wrists, stroke the smooth handle of a mirror. He lingered a moment over a pair of earrings, blue stones set in silver wire.

A movement at the far end of the hall caught my eye. Diomedes had crossed the chamber and was speaking with one of his servants, who nodded and left through the large double doors. Whatever it was could not be important; Diomedes seemed half-asleep, his eyes heavy-lidded and bored.

I looked back to Achilles. He was holding the earrings up to his ears now, turning them this way and that, pursing his lips, playing at girlishness. It amused him, and the corner of his mouth curved up. His eyes flicked around the hall, catching for a moment on my face. I could not help myself. I smiled.

SubQuestion No : 24

Q.24 What is the passage based upon?

- Ans ☒ 1. A palace scene where the king is distributing gifts to the performers who are very poor and cannot afford to buy such gifts on their own.
- ☒ 2. A palace scene where a dance performance is taking place and thereafter, gifts are distributed to the performers and their selecting the trinkets are described.
- ☒ 3. A palace scene where gifts are being distributed after a dance performance and detailed descriptions of the gifts and the way that people are choosing them are presented.
- ☒ 4. A palace scene where the king and his counsellors are deciding to give gifts to the poor people who had just completed their dance performance in front of everyone.

Question ID : 264330132868

Status : Answered

Chosen Option : 4

Comprehension:

Read the given passage and answer the question that follows.

When the dance had finished, Odysseus stood, his voice raised for all to hear. "We are truly honoured by your performance; not everyone can say that they have seen the dancers of Scyros. As tokens of our admiration we have brought gifts for you and your king."

A murmur of excitement. Luxuries did not come often to Scyros; no one here had the money to buy them.

"You are too kind." Lycomedes' face was flushed with genuine pleasure; he had not expected this generosity. The servants brought trunks forth at Odysseus' signal and began unloading them on the long tables. I saw the glitter of silver, the shine of glass and gems. All of us, men and women both, leaned towards them, eager to see.

'Please, take what you like,' Odysseus said. The girls moved swiftly to the tables, and I watched them fingering the bright trinkets: perfumes in delicate glass bottles stoppered with a bit of wax; mirrors with carved ivory for handles; bracelets of twisted gold; ribbons, dyed deep in purples and reds. Among these were a few things I assumed were meant for Lycomedes and his counsellors: leather-bound shields, carved spear hafts, and silvered swords with supple kidskin sheathes. Lycomedes' eyes had caught on one of these, like a fish snagged by a line. Odysseus stood near, presiding benevolently.

Achilles kept to the back, drifting slowly along the table. He paused to dab some perfume on his slender wrists, stroke the smooth handle of a mirror. He lingered a moment over a pair of earrings, blue stones set in silver wire.

A movement at the far end of the hall caught my eye. Diomedes had crossed the chamber and was speaking with one of his servants, who nodded and left through the large double doors. Whatever it was could not be important; Diomedes seemed half-asleep, his eyes heavy-lidded and bored.

I looked back to Achilles. He was holding the earrings up to his ears now, turning them this way and that, pursing his lips, playing at girlishness. It amused him, and the corner of his mouth curved up. His eyes flicked around the hall, catching for a moment on my face. I could not help myself. I smiled.

SubQuestion No : 25

Q.25 Why was Odysseus distributing the gifts?

- Ans**
- ☒ 1. Because he knew Achilles' fascination for jewellery and wanted to gift him earrings and other ornaments.
 - ☒ 2. Because he wanted to take Lycomedes to war and had come to gift him swords and shields.
 - ☒ 3. Because he was pleased after witnessing the performance of the dancers of Scyros.
 - ☒ 4. Because he was very generous and wanted to help the people of Scyros who could not afford such gifts.

Question ID : 264330132867

Status : Answered

Chosen Option : 4