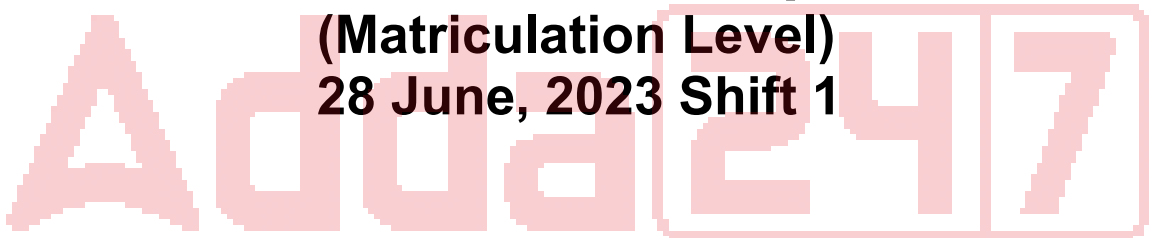


SSC Selection Post

**Previous Year Paper
(Matriculation Level)
28 June, 2023 Shift 1**



Test Prime

**ALL EXAMS,
ONE SUBSCRIPTION**



70,000+
Mock Tests



**Personalised
Report Card**



**Unlimited
Re-Attempt**



600+
Exam Covered



**Previous Year
Papers**



500%
Refund



ATTEMPT FREE MOCK NOW

Phase-XI/2023/Selection Posts and Selection Posts/Ladakh/2023

Roll Number	
Candidate Name	
Venue Name	
Exam Date	28/06/2023
Exam Time	9:00 AM - 10:00 AM
Subject	Selection Post Matriculation Level

Section : General Intelligence

Q.1 Select the option that is related to the third term in the same way as the second term is related to the first term and the sixth term is related to the fifth term.
FEDERAL : LAREDEF :: ECONOMY : ? :: GENERAL : LARENEG

- Ans ☒ 1. MONEYCO
☒ 2. YMONOCE
☒ 3. OMYNECO
☒ 4. COMONEY

Question ID : 264330142836
Status : Answered
Chosen Option : 2

Q.2 Select the option that is related to the third word in the same way as the second word is related to the first word. (The words must be considered as meaningful English words and must NOT be related to each other based on the number of letters/number of consonants/vowels in the word)

Pupils : Class :: Flowers : ?

- Ans ☒ 1. Brood
☒ 2. Bouquet
☒ 3. Rose
☒ 4. Band

Question ID : 264330142861
Status : Answered
Chosen Option : 2

Q.3 Select the correct mirror image of the given combination when the mirror is placed at 'PQ' as shown below.

mS5aT7raKr |
P
Q

- Ans ☒ 1. rKra7T5sm
☒ 2. m229T6z2m
☒ 3. mS5aT7raKr
☒ 4. m229T6z2m

Question ID : 264330143278
Status : Answered
Chosen Option : 2

Q.4 Select the option that is related to the third word in the same way as the second word is related to the first word. (The words must be considered as meaningful English words and must NOT be related to each other based on the number of letters/number of consonants/vowels in the word)

Escape : Abscond :: Idea : ?

- Ans**
- ☒ 1. Squander
 - ☒ 2. Empty
 - ☒ 3. Notion
 - ☒ 4. Artificial

Question ID : 264330142859
Status : Answered
Chosen Option : 3

Q.5 Three Statements are given followed by Three conclusions numbered I, II and III. Assuming the statements to be true, even if they seem to be at variance with commonly known facts, decide which of the conclusions logically follow(s) from the statements.

Statements:
All keys are windows.
No window is a door.
Some doors are locks.

Conclusions:
I. Some locks are keys.
II. No lock is a window.
III. No door is a key.

- Ans**
- ☒ 1. Both conclusions I and II follow.
 - ☒ 2. Only conclusion II follows.
 - ☒ 3. Only conclusion I follows.
 - ☒ 4. Only conclusion III follows.

Question ID : 264330142877
Status : Answered
Chosen Option : 4

Q.6 Three statements are followed by three conclusions numbered I, II and III. You have to consider these statements to be true, even if they seem to be at variance with commonly known facts. Decide which of the given conclusions logically follow(s) from the given statements.

Statements:
All bottles are plastics.
Some plastics are fibres.
Some fibres are glasses.

Conclusions:
(I) Some fibres are plastics.
(II) All plastics are bottles.
(III) Some glasses are fibres.

- Ans**
- ☒ 1. None of the conclusions follows
 - ☒ 2. Only conclusions I and III follow
 - ☒ 3. Only conclusion II follows
 - ☒ 4. Only conclusion I follows

Question ID : 264330142973
Status : Answered
Chosen Option : 2

Q.7 Which of the following numbers will replace the question mark (?) in the given series?
73, 57, 43, 31, ?, 13

- Ans
- ☒ 1. 27
 - ☒ 2. 25
 - ☒ 3. 29
 - ☒ 4. 21

Question ID : 26433056436
Status : Answered
Chosen Option : 4

Q.8 Select the option that indicates the correct arrangement of the given words in a logical and meaningful order.

1. Wheat
2. Dough
3. Bake
4. Grind
5. Bread

- Ans
- ☒ 1. 4, 2, 1, 3, 5
 - ☒ 2. 1, 4, 2, 3, 5
 - ☒ 3. 3, 1, 5, 2, 4
 - ☒ 4. 1, 4, 3, 5, 2

Question ID : 264330125998
Status : Answered
Chosen Option : 4

Q.9 Select the option that is related to the fourth term in the same way as the first term is related to the second term and the fifth term is related to the sixth term
9 : 126 :: ? : 238 :: 21 : 294

- Ans
- ☒ 1. 18
 - ☒ 2. 28
 - ☒ 3. 17
 - ☒ 4. 22

Question ID : 26433040812
Status : Answered
Chosen Option : 3

Q.10 'A # B' means 'A is the daughter B'
'A @ B' means 'A is the only son of B'.
'A & B' means 'A is the mother of B'.
'A % B' means 'A is the father-in-law of B'.
If P # Q @ R % S & T @ Q, then how is P related to T?

- Ans
- ☒ 1. Sister
 - ☒ 2. Mother's sister
 - ☒ 3. Brother
 - ☒ 4. Father's brother

Question ID : 26433091636
Status : Answered
Chosen Option : 3

Q.11 Select the option that is related to the fifth term in the same way as the second term is related to the first term and the fourth term is related to the third term.
FLIGHT : GHIFLT :: PERIOD : IORPED :: GARLIC : ?

- Ans ☒ 1. LIRGCA
☒ 2. LIRGAC
☒ 3. RILACG
☒ 4. RILAGC

Question ID : 264330142835
Status : Answered
Chosen Option : 2

Q.12 Select the option that indicates the correct arrangement of the given words in a logical and meaningful order.

1. Country
2. Continent
3. City
4. Street
5. State

- Ans ☒ 1. 1, 2, 5, 3, 4
☒ 2. 1, 2, 3, 5, 4
☒ 3. 2, 1, 5, 3, 4
☒ 4. 3, 2, 1, 5, 4

Question ID : 264330125993
Status : Answered
Chosen Option : 1

Q.13 Which letter-cluster will replace the question mark (?) and complete the given series?
UTSR, XWVU, ?, DCBA, GFED

- Ans ☒ 1. BZYW
☒ 2. BZYX
☒ 3. AZWY
☒ 4. AZYX

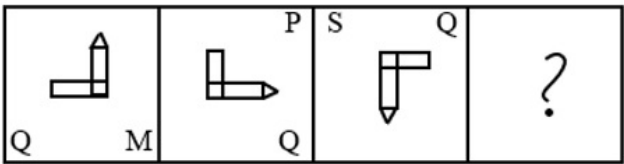
Question ID : 264330142915
Status : Answered
Chosen Option : 4

Q.14 Which letter cluster will replace the question mark (?) to complete the given series?
TUBE, SXEH, ?, QDKN, PGNQ

- Ans ☒ 1. RAHK
☒ 2. RADG
☒ 3. RAKH
☒ 4. RAGD

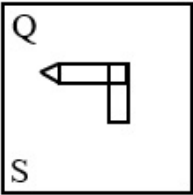
Question ID : 26433056232
Status : Answered
Chosen Option : 1

Q.15 Select the figure from among the given options that can replace the question mark (?) in the following series.

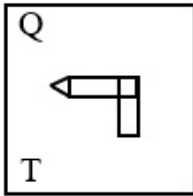


Ans

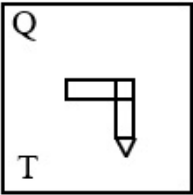
✗ 1.



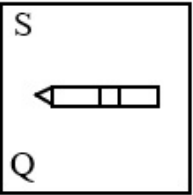
✓ 2.



✗ 3.



✗ 4.



Question ID : 264330143263
Status : Answered
Chosen Option : 1

Q.16 A – B means 'A is the wife of B';
A + B means 'A is the sister of B' and
A * B means 'A is the father of B'.
If Q – T * Y + M – K, then how is Q related to K?

Ans ✓ 1. Mother-in-law

✗ 2. Mother

✗ 3. Sister

✗ 4. Grandmother

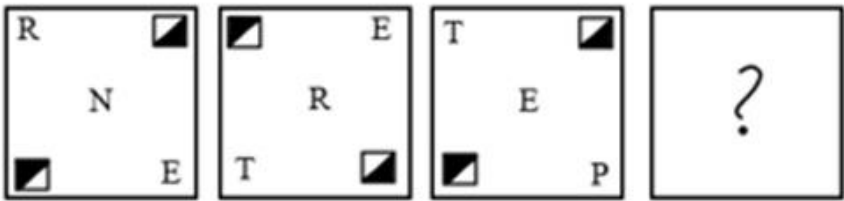
Question ID : 26433092469
Status : Answered
Chosen Option : 1

Q.17 Select the correct combination of mathematical signs to sequentially replace the * signs and to balance the given equation.
 $83*16*4*57*3$

- Ans
- 1. =,+,+,-
 - 2. -,x,=,÷
 - 3. -,+,=,-
 - 4. -,+,=,+

Question ID : 264330142882
Status : Answered
Chosen Option : 2

Q.18 Select the figure that will replace the question mark (?) in the following figure series.



- Ans
- 1.
 - 2.
 - 3.
 - 4.

Question ID : 264330143087
Status : Answered
Chosen Option : 1

Q.19 Three statements are given, followed by three conclusions numbered I, II and III.
Assuming the statements to be true, even if they seem to be at variance with commonly known facts, decide which of the conclusions logically follow(s) from the statements.

Statements:
Some diamonds are stones.
Some stones are hard.
All hard are rocks.

Conclusions:
I. Some stones are diamonds.
II. All stones are hard.
III. Some hard are rocks.

- Ans** ☒ 1. All the conclusions follow
☒ 2. Only conclusions I and II follow
☒ 3. Only conclusions II and III follow
☒ 4. Only conclusions I and III follow

Question ID : 26433092644
Status : Answered
Chosen Option : 4

Q.20 Select the option that represents the correct order of the given words as they would appear in an English dictionary.

1. Cope
2. Cosmetic
3. Courage
4. Cough
5. Course
6. Courier

- Ans** ☒ 1. 1, 2, 4, 3, 6, 5
☒ 2. 1, 2, 4, 3, 5, 6
☒ 3. 1, 2, 4, 6, 3, 5
☒ 4. 2, 1, 4, 3, 6, 5

Question ID : 264330142926
Status : Answered
Chosen Option : 1

Q.21 Select the combination of letters that when sequentially placed in the blanks of the given series, will complete the series.
PB_EP_UF_BU_PBUH

- Ans** ☒ 1. UBPG
☒ 2. RUPE
☒ 3. URGH
☒ 4. EPRU

Question ID : 26433057811
Status : Answered
Chosen Option : 1

Q.22 In a code language, 'chores are hobbies' is written as 'tpl esr nil', 'hobbies keep me busy' is written as 'cha esr lon ane', 'busy with chores' is written as 'sia ane nil'. What is the code for the word 'with' in this language?

- Ans** ☒ 1. sia
☒ 2. ane
☒ 3. cha
☒ 4. tpl

Question ID : 26433056771
 Status : Answered
 Chosen Option : 1

Q.23 Read the given statements and conclusions carefully. Assuming that the information given in the statements is true, even if it appears to be at variance with commonly known facts, decide which of the given conclusions logically follow(s) from the statements.

Statements:
 All pigeons are ants.
 Some ants are birds.
 All birds are cats.

Conclusions:
 I. Some cats are pigeons.
 II. Some birds are pigeons.
 III. Some cats are ants.

- Ans** ☒ 1. Only conclusion III follows
☒ 2. Only conclusion II follows
☒ 3. All conclusions follow
☒ 4. Only conclusion I follows

Question ID : 26433068546
 Status : Answered
 Chosen Option : 1

Q.24 Select the option that is related to the fourth term in the same way as the first term is related to the second term and the fifth term is related to the sixth term
 22 : 676 :: ? : 361 :: 2 : 36

- Ans** ☒ 1. 18
☒ 2. 15
☒ 3. 17
☒ 4. 13

Question ID : 26433040803
 Status : Answered
 Chosen Option : 2

Q.25 'A # B' means 'A is the brother of B'.
 'A @ B' means 'A is the daughter of B'.
 'A & B' means 'A is the husband of B'.
 'A % B' means 'A is the wife of B'.
 If S % D # F @ G & H @ J, then how is F related to H?

- Ans** ☒ 1. Daughter
☒ 2. Son's wife
☒ 3. Daughter's daughter
☒ 4. Mother

Question ID : 264330142902
 Status : Answered
 Chosen Option : 4

Q.1 In September 2021, the 'SAATH' initiative was launched in _____, for women associated with Self Help Groups (SHGs).

- Ans**
- ☒ 1. Tamil Nadu
 - ☒ 2. Jammu and Kashmir
 - ☒ 3. Kerala
 - ☒ 4. Andaman and Nicobar Islands

Question ID : **26433082809**
Status : **Not Answered**
Chosen Option : --

Q.2 Rajya Sabha has to return the money bill to Lok Sabha with or without the recommendation within _____ .

- Ans**
- ☒ 1. 10 days
 - ☒ 2. 30 days
 - ☒ 3. 14 days
 - ☒ 4. 21 days

Question ID : **264330112758**
Status : **Answered**
Chosen Option : 3

Q.3 In January 2022, TS Tirumurti was in news due to:

- Ans**
- ☒ 1. being nominated as the president of FIH
 - ☒ 2. assuming chair of the Counter-Terrorism Committee of the United Nations
 - ☒ 3. becoming FIFA player of the year
 - ☒ 4. becoming the first Indian to reach the north pole

Question ID : **26433082814**
Status : **Answered**
Chosen Option : 2

Q.4 The 2021, U-19 Asia Cup Cricket was hosted by which of the following countries?

- Ans**
- ☒ 1. Qatar
 - ☒ 2. Bangladesh
 - ☒ 3. Pakistan
 - ☒ 4. UAE

Question ID : **26433054675**
Status : **Answered**
Chosen Option : 2

Q.5 Identify the odd option in relation to the oceanic layers.

- Ans**
- ☒ 1. The Oceanic Deep
 - ☒ 2. The Oceanic Slope
 - ☒ 3. The Continental Shelf
 - ☒ 4. The Continental Slope

Question ID : **264330142699**
Status : **Answered**
Chosen Option : 3

Q.6 According to standard census definition, who among the following can be categorised as a main worker in India?

- Ans** ☒ 1. A person who works for at least 160 days
☒ 2. A person who works for at least 183 days
☒ 3. A person who works for at least 200 days
☒ 4. A person who works for at least 100 days

Question ID : **264330109871**
 Status : **Not Answered**
 Chosen Option : --

Q.7 Who is the 50th Chief Justice of India?

- Ans** ☒ 1. UU Lalit
☒ 2. DY Chandrachud
☒ 3. NV Ramana
☒ 4. Sharad Arvind Bobde

Question ID : **264330113426**
 Status : **Answered**
 Chosen Option : 2

Q.8 India lifted a record-extending _____ ICC U19 World Cup title after defeating England in the final at the Sir Vivian Richards Stadium in North Sound, Antigua in February 2022.

- Ans** ☒ 1. fifth
☒ 2. third
☒ 3. sixth
☒ 4. eighth

Question ID : **26433054451**
 Status : **Not Answered**
 Chosen Option : --

Q.9 Triple point can be defined as:

- Ans** ☒ 1. the condition of temperature under which the gaseous and liquid phases of a substance can exist in equilibrium
☒ 2. the temperature at which solid is converted into liquid
☒ 3. the condition of pressure under which the solid and liquid phases of a substance can exist in equilibrium
☒ 4. the condition of temperature and pressure under which the gaseous, liquid and solid phases of a substance can exist in equilibrium

Question ID : **26433054913**
 Status : **Not Answered**
 Chosen Option : --

Q.10 In which year, the Koya rebellion took place in the eastern Godavari tract?

- Ans** ☒ 1. 1882-1883
☒ 2. 1887-1888
☒ 3. 1879-1880
☒ 4. 1874-1875

Question ID : **264330142807**
 Status : **Answered**
 Chosen Option : 1

Q.11 For how many days did the Government of India launch the 'Garib Kalyan Rojgar Abhiyan' (GKRA), in June 2020?

- Ans**
- ☒ 1. 100 days
 - ☒ 2. 150 days
 - ☒ 3. 125 days
 - ☒ 4. 200 days

Question ID : 264330113299
Status : Not Answered
Chosen Option : --

Q.12 Devdas Smriti Panthi Dance Award is related to which state?

- Ans**
- ☒ 1. Rajasthan
 - ☒ 2. Bihar
 - ☒ 3. Jharkhand
 - ☒ 4. Chhattisgarh

Question ID : 26433074137
Status : Answered
Chosen Option : 4

Q.13 Fazilka Heritage Festival is an annual art, cultural and food festival celebrated in which of the following states?

- Ans**
- ☒ 1. Punjab
 - ☒ 2. Maharashtra
 - ☒ 3. Haryana
 - ☒ 4. Uttar Pradesh

Question ID : 264330141232
Status : Not Answered
Chosen Option : --

Q.14 Identify an algae that undergoes anisogamous fusion of gametes.

- Ans**
- ☒ 1. Spirogyra
 - ☒ 2. Eudorina
 - ☒ 3. Volvox
 - ☒ 4. Ulothrix

Question ID : 26433064745
Status : Answered
Chosen Option : 1

Q.15 The correct sequence in descending order of the following states in terms of the proved coal reserves (as of the Ministry of Coal, Government of India, 2018) is _____.

- Ans**
- ☒ 1. Jharkhand, Odisha, Chhattisgarh, West Bengal
 - ☒ 2. Odisha, Chhattisgarh, Madhya Pradesh, Jharkhand
 - ☒ 3. Jharkhand, Chhattisgarh, Odisha, Madhya Pradesh
 - ☒ 4. Chhattisgarh, Odisha, Jharkhand, Madhya Pradesh

Question ID : 26433097094
Status : Not Answered
Chosen Option : --

Q.16 Zakir Hussain is renowned for playing the ____.

- Ans
- ☒ 1. santoor
 - ☒ 2. sitar
 - ☒ 3. shehnai
 - ☒ 4. tabla

Question ID : 264330141391
Status : Answered
Chosen Option : 4

Q.17 In North Indian temple architecture, which element denotes the superstructure or tower above the sanctum and the pillared mandapas?

- Ans
- ☒ 1. Kalasha
 - ☒ 2. Amalaka
 - ☒ 3. Shikhara
 - ☒ 4. Antarala

Question ID : 26433090747
Status : Answered
Chosen Option : 3

Q.18 Lai Haraoba is the earliest form of dance that forms the basis of all stylist dances of ____.

- Ans
- ☒ 1. Manipur
 - ☒ 2. Madhya Pradesh
 - ☒ 3. Punjab
 - ☒ 4. Uttar Pradesh

Question ID : 264330141226
Status : Answered
Chosen Option : 1

Q.19 Which of the following autobiographies was written by the Indian female poet Kamala Das, who was nominated for Nobel Prize for literature in 1984?

- Ans
- ☒ 1. My Story
 - ☒ 2. A Life Less Ordinary
 - ☒ 3. A Life Apart
 - ☒ 4. Smritichitre: The Memoire of a Spirited Wife

Question ID : 264330141403
Status : Not Answered
Chosen Option : --

Q.20 'Vikramarjuna -Vijaya' composed by Pampa was written in which of the following languages?

- Ans
- ☒ 1. Sanskrit
 - ☒ 2. Tamil
 - ☒ 3. Telugu
 - ☒ 4. Kannada

Question ID : 26433081937
Status : Not Answered
Chosen Option : --

Q.21 Which of the following National Waterways is located in Tamil Nadu?

- Ans
- ☒ 1. National Waterway-97
 - ☒ 2. National Waterway-93
 - ☒ 3. National Waterway-98
 - ☒ 4. National Waterway-99

Question ID : 26433067188
Status : Not Answered
Chosen Option : --

Q.22 Pushyamitra, who was the commander of Brihadratha, the last Mauryan emperor, killed the king and established a new dynasty. Which of the following was his dynasty?

- Ans
- ☒ 1. Shunga
 - ☒ 2. Satavahana
 - ☒ 3. Chedi
 - ☒ 4. Kanva

Question ID : 264330142802
Status : Answered
Chosen Option : 1

Q.23 Who among the following founded the 'Forward Bloc'?

- Ans
- ☒ 1. Motilal Nehru
 - ☒ 2. Dadabhai Naoroji
 - ☒ 3. Subhas Chandra Bose
 - ☒ 4. Surendranath Banerjee

Question ID : 26433055015
Status : Answered
Chosen Option : 3

Q.24 Who became the first Indian to win a silver medal in an individual section of the Para Archery World championship in February 2022?

- Ans
- ☒ 1. Pooja Jatyan
 - ☒ 2. Rakesh Kumar
 - ☒ 3. Jyothi Surekha Vennam
 - ☒ 4. Harvinder Singh

Question ID : 26433081842
Status : Not Answered
Chosen Option : --

Q.25 Identify the type of cell that is long and branched.

- Ans
- ☒ 1. Nerve cell
 - ☒ 2. Columnar epithelial cell
 - ☒ 3. White blood cell
 - ☒ 4. Red blood cell

Question ID : 264330142696
Status : Answered
Chosen Option : 1

Q.1 The largest number of four digits that is divisible by 12,15 and 18 is _____.

- Ans
- ☒ 1. 9450
 - ☒ 2. 9900
 - ☒ 3. 9000
 - ☒ 4. 9750

Question ID : 264330142680
Status : Answered
Chosen Option : 2

Q.2 Find the time taken by a 150 m long train, running at a speed of 63 km/h, to cross another train of length 100 m, running at a speed of 45 km/h in the same direction.

- Ans
- ☒ 1. 40 seconds
 - ☒ 2. 45 seconds
 - ☒ 3. 50 seconds
 - ☒ 4. 60 seconds

Question ID : 264330142540
Status : Answered
Chosen Option : 3

Q.3 A can complete a piece of work in 12 days while B can the same work in 18 days. If they both work together, then how many days will be required to finish the work?

- Ans
- ☒ 1. 6.5
 - ☒ 2. 6
 - ☒ 3. 7
 - ☒ 4. 7.2

Question ID : 26433063961
Status : Answered
Chosen Option : 4

Q.4 A vehicle travels 200 metres in 5 sec and then another 250 metres in 5 sec. What is its average speed (in meters/sec)?

- Ans
- ☒ 1. 45
 - ☒ 2. 50
 - ☒ 3. 55
 - ☒ 4. 40

Question ID : 26433075935
Status : Answered
Chosen Option : 1

Q.5 In a company, the total customer calls on Monday, Wednesday and Friday are 15,500 and the total calls on Tuesday and Thursday are 12,500. The average calls on Saturday and Sunday are 7,000. What are the average calls per day in a week?

- Ans
- ☒ 1. 6500
 - ☒ 2. 7500
 - ☒ 3. 7000
 - ☒ 4. 6000

Question ID : 264330126095
Status : Answered
Chosen Option : 4

Q.6 In a street there are 20 dogs and cats.If the ratio between dogs and cats is 3:2, then the number of cats is _____.

- Ans
- ☒ 1. 16
 - ☒ 2. 10
 - ☒ 3. 8
 - ☒ 4. 22

Question ID : 264330142681
Status : Answered
Chosen Option : 3

Q.7 X,Y and Z can do a piece of work in 4 days, 5 days and 7 days, respectively. They get ₹415 for completing the work. If X,Y and Z have worked together to complete the work, what is X's share?

- Ans
- ☒ 1. ₹275
 - ☒ 2. ₹175
 - ☒ 3. ₹200
 - ☒ 4. ₹225

Question ID : 264330142541
Status : Answered
Chosen Option : 2

Q.8 The average of 48, 39 and y is 40. Find the value of y.

- Ans
- ☒ 1. 33
 - ☒ 2. 32
 - ☒ 3. 35
 - ☒ 4. 31

Question ID : 264330103236
Status : Answered
Chosen Option : 1

Q.9 The annual incomes of Anand and Bharath are in the ratio 3 : 5 and their annual expenses are in the ratio 1 : 3. If each of them saves ₹10,000 at the end of the year, then the annual income of Bharath is:

- Ans
- ☒ 1. ₹25,000
 - ☒ 2. ₹12,000
 - ☒ 3. ₹15,000
 - ☒ 4. ₹30,000

Question ID : 264330142258
Status : Answered
Chosen Option : 1

Q.10 Mukesh sells almonds at the cost price but uses a false weight and thus gains a 23% profit. How many grams of almonds is he giving for 3.075 kg?

- Ans
- ☒ 1. 2500
 - ☒ 2. 2700
 - ☒ 3. 2400
 - ☒ 4. 2600

Question ID : 26433091990
Status : Answered
Chosen Option : 1

Q.11 A dishonest shopkeeper professes to sell grains at cost price, but he uses a weight of 935 g for 1 kg weight. Find his gain percentage.

- Ans
- ☒ 1. 5.96%
 - ☒ 2. 6.59%
 - ☒ 3. 6.95%
 - ☒ 4. 6.5%

Question ID : 26433090323
Status : Answered
Chosen Option : 4

Q.12 In an election between two candidates, one candidate got 60% of the valid votes. If the total number of votes polled were 8850, and 10% of the votes were invalid, then find the number of valid votes that the other candidate got.

- Ans
- ☒ 1. 3816
 - ☒ 2. 3186
 - ☒ 3. 3681
 - ☒ 4. 3618

Question ID : 26433081555
Status : Answered
Chosen Option : 2

Q.13 A person completes 80 km of a journey at 10 km/h and the remaining 70 km in 7 hours. His average speed for the whole journey is:

- Ans
- ☒ 1. 10.5 km/h
 - ☒ 2. 9 km/h
 - ☒ 3. 10 km/h
 - ☒ 4. 9.5 km/h

Question ID : 264330142261
Status : Answered
Chosen Option : 3

Q.14 By working 12 hours a day, 90 people can complete a work in 16 days. How much work will be left after 24 days if 70 people work for 8 hours per day?

- Ans
- ☒ 1. $\frac{3}{8}$
 - ☒ 2. $\frac{2}{9}$
 - ☒ 3. $\frac{7}{9}$
 - ☒ 4. $\frac{5}{8}$

Question ID : 26433073115
Status : Answered
Chosen Option : 2

Q.15 To buy a car, Sahil borrowed some amount at 10% simple interest rate. He has paid some loan amount but ₹1,81,500 is due which he has to pay in 3 years. What will be the annual installment (in ₹)?

- Ans
- ☒ 1. 65,000
 - ☒ 2. 47,000
 - ☒ 3. 55,000
 - ☒ 4. 54,500

Question ID : 264330103335
Status : Answered
Chosen Option : 3

Q.16 A book is sold at a discount of 32% and an additional discount of 25% is allowed on cash payment. If Ramesh purchased the book by paying Rs.2,550 in cash, find the marked price of the book.

- Ans
- ☒ 1. Rs.5,000
 - ☒ 2. Rs.5,050
 - ☒ 3. Rs.4,950
 - ☒ 4. Rs.5,560

Question ID : 26433064981
Status : Answered
Chosen Option : 1

Q.17 In 5 years, the simple interest on an amount of ₹X is $\frac{2}{5}$ th of the principal. The rate of interest per annum is:

- Ans
- ☒ 1. 8%
 - ☒ 2. 10%
 - ☒ 3. 5%
 - ☒ 4. 12%

Question ID : 264330142675
Status : Answered
Chosen Option : 1

Q.18 In an examination, the ratio of practical to theory marks is 3:7. If 80% of the marks are scored in the practical and 60% of marks are scored in the theory, what is the ratio of marks scored in the theory and the practical?

- Ans
- ☒ 1. 6 : 7
 - ☒ 2. 5 : 7
 - ☒ 3. 7 : 4
 - ☒ 4. 3 : 7

Question ID : 26433085453
Status : Answered
Chosen Option : 3

Q.19 What annual instalment will discharge a debt of Rs.35,455 due in three years at 12% simple interest per annum (Installments will be paid at the end of the years)(Round off to nearest Rupee)?

- Ans** ☒ 1. Rs.10,552
☒ 2. Rs.14,652
☒ 3. Rs.11,804
☒ 4. Rs.12,548

Question ID : 26433075411
 Status : Not Answered
 Chosen Option : --

Q.20 The perimeter of an isosceles right-angled triangle having an area of 200 cm^2 is:

- Ans** ☒ 1. 68.3 cm
☒ 2. 78.2 cm
☒ 3. 70.6 cm
☒ 4. 58.6 cm

Question ID : 26433082729
 Status : Answered
 Chosen Option : 1

Q.21 The height of Ankit was 160 cm last year. In a year, his height increased by 8%. What is his height now?

- Ans** ☒ 1. 173 cm
☒ 2. 172.2 cm
☒ 3. 172.8 cm
☒ 4. 173.2 cm

Question ID : 26433063299
 Status : Answered
 Chosen Option : 3

Q.22 A solid sphere has a surface area of 616 cm^2 . This sphere is now cut into two hemispheres. What is the total surface area of one of the hemispheres?

- Ans** ☒ 1. 440 cm^2
☒ 2. 462 cm^2
☒ 3. 452 cm^2
☒ 4. 390 cm^2

Question ID : 264330142762
 Status : Not Answered
 Chosen Option : --

Q.23 If a shopkeeper sold one-third of his goods at a loss of 20%, then at what gain % should the remainder be sold to gain 25% on the whole transaction?

- Ans** ☒ 1. 32.5 Percent
☒ 2. 47.5 Percent
☒ 3. 20 Percent
☒ 4. 5 Percent

Question ID : 26433081564
 Status : Answered
 Chosen Option : 2

Q.24 In an election between two candidates, 84 votes were declared as invalid. The winning candidate secures 62% of the valid votes and wins by 96 votes. The number of votes polled is:

- Ans
- ☒ 1. 424
 - ☒ 2. 543
 - ☒ 3. 641
 - ☒ 4. 484

Question ID : 26433080009
Status : Answered
Chosen Option : 4

Q.25 After giving two successive discounts of 30% and 40% on the marked price, an article is sold for Rs.420. Find the marked price of the article.

- Ans
- ☒ 1. ₹900
 - ☒ 2. ₹800
 - ☒ 3. ₹1,000
 - ☒ 4. ₹1,100

Question ID : 264330132900
Status : Answered
Chosen Option : 3

Section : English Language

Q.1 Select the idiom that gives the most appropriate meaning of the underlined phrase in the following sentence.

Chanda always annoys everyone by praising herself all the time.

- Ans
- ☒ 1. Crying over the spilt milk
 - ☒ 2. Catching one's eyes
 - ☒ 3. Blowing her own trumpet
 - ☒ 4. Facing the music

Question ID : 26433086440
Status : Answered
Chosen Option : 1

Q.2 Select the most appropriate ANTONYM of the given word.

Despair

- Ans
- ☒ 1. Distant
 - ☒ 2. Sorrow
 - ☒ 3. Optimism
 - ☒ 4. Distinct

Question ID : 264330135890
Status : Answered
Chosen Option : 3

Q.3 Select the option that expresses the given sentence in indirect speech.
He said, "I will see you now".

- Ans ☒ 1. He said he will see you now.
☒ 2. He said he will see me now.
☒ 3. He said he would see me then.
☒ 4. He said I will see you now.

Question ID : 264330133305
Status : Answered
Chosen Option : 3

Q.4 Select the most appropriate option to fill in the blank.
Tropical forests have _____ greenery.

- Ans ☒ 1. exciting
☒ 2. lush
☒ 3. thorny
☒ 4. withered

Question ID : 26433060378
Status : Not Answered
Chosen Option : --

Q.5 From among the words given in bold, select the INCORRECTLY spelt word in the following sentence.
Women's vulnerability due to the denial of ownership of productive resources has been focused on in the analysis of how progressive laws shaped gender relations.

- Ans ☒ 1. analysis
☒ 2. vulnerability
☒ 3. progressive
☒ 4. focused

Question ID : 264330143252
Status : Answered
Chosen Option : 2

Q.6 Select the most appropriate ANTONYM to replace the italicised word.

"Can I *borrow* your cell?" She asked.

- Ans ☒ 1. bite
☒ 2. rent
☒ 3. hire
☒ 4. lend

Question ID : 26433059651
Status : Answered
Chosen Option : 2

Q.7 Select the most appropriate meaning of the given idiom.

Get out of hand

- Ans ☒ 1. Keep control of hand
- ☒ 2. Go out of control
- ☒ 3. Hands should be crossed
- ☒ 4. Fall from hand

Question ID : 26433060411
Status : Answered
Chosen Option : 2

Q.8 Select the option that expresses the given sentence in active voice.
The sweater is knitted by Suman.

- Ans ☒ 1. Suman knits the sweater.
- ☒ 2. Suman be knitted the sweater.
- ☒ 3. Suman have knitting the sweater.
- ☒ 4. Suman been knit the sweater.

Question ID : 264330132872
Status : Answered
Chosen Option : 1

Q.9 Choose the option that rectifies the grammatical and spelling errors in the given sentence.

The secret to tightrope walking is to graps the rope between the twos and distribute one's weight evenly on the soles of one's feet.

- Ans ☒ 1. to grasp the rope between the toes
- ☒ 2. evenly on the soul of one's feet
- ☒ 3. and distribute ones weight
- ☒ 4. The secrte of tightrope walk is

Question ID : 26433088850
Status : Answered
Chosen Option : 1

Q.10 Select the most appropriate option to fill in the blank.

Time management is essential for a _____ life and career.

- Ans ☒ 1. failed
- ☒ 2. successful
- ☒ 3. scrupulous
- ☒ 4. mere

Question ID : 26433060790
Status : Answered
Chosen Option : 2

Q.11 Select the most appropriate option to fill in the blank.

All desire wealth and some will _____ it.

- Ans ☒ 1. remove
☒ 2. acquire
☒ 3. aspire
☒ 4. collude

Question ID : 26433059687
Status : Answered
Chosen Option : 2

Q.12 Select the most appropriate meaning of the given idiom.

Throw caution to the wind

- Ans ☒ 1. To be indecisive or unsure about a decision
☒ 2. To take a big risk or be reckless
☒ 3. To be overly cautious or hesitant
☒ 4. To be too strict or rigid in following rules

Question ID : 264330133361
Status : Answered
Chosen Option : 1

Q.13 Select the option that can be used as a one-word substitute for the given group of words.

Jokes and funny remarks amongst friends.

- Ans ☒ 1. Banter
☒ 2. Discussion
☒ 3. Meet
☒ 4. Saunter

Question ID : 26433060094
Status : Not Answered
Chosen Option : --

Q.14 Select the most appropriate meaning of the given idiom.

Through the grapevine

- Ans ☒ 1. Through difficulties
☒ 2. Via gossip
☒ 3. Extremely ill
☒ 4. Succeeded brilliantly

Question ID : 264330134217
Status : Answered
Chosen Option : 4

Q.15 Choose the option that rectifies the incorrectly spelt underlined word.

The Swiss entrepreneure has pulled the plug on any further investment in the firm.

- Ans ☒ 1. antepreneure
☒ 2. entreperneur
☒ 3. entreprenur
☒ 4. entrepreneur

Question ID : 26433088847
 Status : Answered
 Chosen Option : 4

Comprehension:

In the following passage, some words have been deleted. Read the passage carefully and select the most appropriate option to fill in each blank.

Children are the future of any country and a country that does not take care of this (1)_____ resource suffers later. A successful nation is that which makes its youth strong enough to lift this (2)_____ responsibility on their shoulders. (3)_____, this is not the case in our country. Education, which is a necessity, is still a (4)_____ here. Poor people (5)_____ to send their children to school.

SubQuestion No : 16

Q.16 Select the most appropriate option to fill in blank number 1.

- Ans ☒ 1. valued
☒ 2. extravagant
☒ 3. valuable
☒ 4. worthless

Question ID : 26433073412
 Status : Answered
 Chosen Option : 3

Comprehension:

In the following passage, some words have been deleted. Read the passage carefully and select the most appropriate option to fill in each blank.

Children are the future of any country and a country that does not take care of this (1)_____ resource suffers later. A successful nation is that which makes its youth strong enough to lift this (2)_____ responsibility on their shoulders. (3)_____, this is not the case in our country. Education, which is a necessity, is still a (4)_____ here. Poor people (5)_____ to send their children to school.

SubQuestion No : 17

Q.17 Select the most appropriate option to fill in blank number 2.

- Ans ☒ 1. impotent
☒ 2. mighty
☒ 3. bulky
☒ 4. frail

Question ID : 26433073413
 Status : Answered
 Chosen Option : 1

Comprehension:

In the following passage, some words have been deleted. Read the passage carefully and select the most appropriate option to fill in each blank.

Children are the future of any country and a country that does not take care of this (1)_____ resource suffers later. A successful nation is that which makes its youth strong enough to lift this (2)_____ responsibility on their shoulders. (3)_____, this is not the case in our country. Education, which is a necessity, is still a (4)_____ here. Poor people (5)_____ to send their children to school.

SubQuestion No : 18

Q.18 Select the most appropriate option to fill in blank number 3.

- Ans ☒ 1. Certainly
☒ 2. Necessarily
☒ 3. Unfortunately
☒ 4. Partially

Question ID : 26433073414
 Status : Answered
 Chosen Option : 3

Comprehension:

In the following passage, some words have been deleted. Read the passage carefully and select the most appropriate option to fill in each blank.

Children are the future of any country and a country that does not take care of this (1)_____ resource suffers later. A successful nation is that which makes its youth strong enough to lift this (2)_____ responsibility on their shoulders. (3)_____, this is not the case in our country. Education, which is a necessity, is still a (4)_____ here. Poor people (5)_____ to send their children to school.

SubQuestion No : 19

Q.19 Select the most appropriate option to fill in blank number 4.

- Ans ☒ 1. theory
☒ 2. delight
☒ 3. luxury
☒ 4. study

Question ID : 26433073415
 Status : Answered
 Chosen Option : 3

Comprehension:

In the following passage, some words have been deleted. Read the passage carefully and select the most appropriate option to fill in each blank.

Children are the future of any country and a country that does not take care of this (1)_____ resource suffers later. A successful nation is that which makes its youth strong enough to lift this (2)_____ responsibility on their shoulders. (3)_____, this is not the case in our country. Education, which is a necessity, is still a (4)_____ here. Poor people (5)_____ to send their children to school.

SubQuestion No : 20

Q.20 Select the most appropriate option to fill in blank number 5.

- Ans ☒ 1. explicate
☒ 2. agitate
☒ 3. fluctuate
☒ 4. hesitate

Question ID : 26433073416
 Status : Answered
 Chosen Option : 2

Comprehension:

Read the given passage and answer the questions that follows.

Sparrows are little birds that can be found all throughout the world. Sparrows come in a wide variety of varieties. The length of a sparrow ranges from four to six inches. Their wonderful melody is well-liked and appreciated by a large number of people. On the ground, grass, low trees and bushes are all good sites for sparrows to make their homes. They nest in the cracks and crevices of buildings in urban areas. Nests are rarely constructed at great heights. Nests are constructed from twigs, grasses and other plant fibres. Their nests are usually modest, but well-built.

Four to six eggs are laid by female sparrows at a time. Reddish brown blotches appear on the eggs' white shells. Between eleven and fourteen days, they'll hatch. The young are taken care of by both, male and female parents. After hatching, the young are fed insects. Using their big feet, sparrows scrape seeds. Seeds are the primary food source for adult sparrows. Birds like sparrows can be found nearly anywhere there are people. These lovely birds are beloved by a large number of people all around the world.

SubQuestion No : 21

Q.21 Identify the central theme of the passage.

Ans ☒ 1. Description of lifestyle of sparrows

☐ 2. Description of sparrows' nest

☐ 3. Different shortcomings of sparrows

☐ 4. Availability of sparrows

Question ID : 264330102441

Status : Answered

Chosen Option : 1

Comprehension:

Read the given passage and answer the questions that follows.

Sparrows are little birds that can be found all throughout the world. Sparrows come in a wide variety of varieties. The length of a sparrow ranges from four to six inches. Their wonderful melody is well-liked and appreciated by a large number of people. On the ground, grass, low trees and bushes are all good sites for sparrows to make their homes. They nest in the cracks and crevices of buildings in urban areas. Nests are rarely constructed at great heights. Nests are constructed from twigs, grasses and other plant fibres. Their nests are usually modest, but well-built.

Four to six eggs are laid by female sparrows at a time. Reddish brown blotches appear on the eggs' white shells. Between eleven and fourteen days, they'll hatch. The young are taken care of by both, male and female parents. After hatching, the young are fed insects. Using their big feet, sparrows scrape seeds. Seeds are the primary food source for adult sparrows. Birds like sparrows can be found nearly anywhere there are people. These lovely birds are beloved by a large number of people all around the world.

SubQuestion No : 22

Q.22 How many eggs are laid by female sparrows at a time?

Ans ☒ 1. Four to six

☐ 2. Two to four

☐ 3. Six to eight

☐ 4. Eight to ten

Question ID : 264330102442

Status : Answered

Chosen Option : 1

Comprehension:

Read the given passage and answer the questions that follows.

Sparrows are little birds that can be found all throughout the world. Sparrows come in a wide variety of varieties. The length of a sparrow ranges from four to six inches. Their wonderful melody is well-liked and appreciated by a large number of people. On the ground, grass, low trees and bushes are all good sites for sparrows to make their homes. They nest in the cracks and crevices of buildings in urban areas. Nests are rarely constructed at great heights. Nests are constructed from twigs, grasses and other plant fibres. Their nests are usually modest, but well-built.

Four to six eggs are laid by female sparrows at a time. Reddish brown blotches appear on the eggs' white shells. Between eleven and fourteen days, they'll hatch. The young are taken care of by both, male and female parents. After hatching, the young are fed insects. Using their big feet, sparrows scrape seeds. Seeds are the primary food source for adult sparrows. Birds like sparrows can be found nearly anywhere there are people. These lovely birds are beloved by a large number of people all around the world.

SubQuestion No : 23

Q.23 Select the most appropriate **ANTONYM** of the given word.

Melody

- Ans
- ☒ 1. Musicality
 - ☒ 2. Symphony
 - ☒ 3. Disharmony
 - ☒ 4. Ballad

Question ID : 264330102444

Status : Answered

Chosen Option : 3

Comprehension:

Read the given passage and answer the questions that follows.

Sparrows are little birds that can be found all throughout the world. Sparrows come in a wide variety of varieties. The length of a sparrow ranges from four to six inches. Their wonderful melody is well-liked and appreciated by a large number of people. On the ground, grass, low trees and bushes are all good sites for sparrows to make their homes. They nest in the cracks and crevices of buildings in urban areas. Nests are rarely constructed at great heights. Nests are constructed from twigs, grasses and other plant fibres. Their nests are usually modest, but well-built.

Four to six eggs are laid by female sparrows at a time. Reddish brown blotches appear on the eggs' white shells. Between eleven and fourteen days, they'll hatch. The young are taken care of by both, male and female parents. After hatching, the young are fed insects. Using their big feet, sparrows scrape seeds. Seeds are the primary food source for adult sparrows. Birds like sparrows can be found nearly anywhere there are people. These lovely birds are beloved by a large number of people all around the world.

SubQuestion No : 24

Q.24 Identify a suitable title for the passage.

- Ans
- ☒ 1. Song of Sparrows
 - ☒ 2. How Sparrows Build Nests
 - ☒ 3. What Do The Sparrows Eat?
 - ☒ 4. The Lives Of Sparrows

Question ID : 264330102440

Status : Answered

Chosen Option : 4

Comprehension:

Read the given passage and answer the questions that follows.

Sparrows are little birds that can be found all throughout the world. Sparrows come in a wide variety of varieties. The length of a sparrow ranges from four to six inches. Their wonderful melody is well-liked and appreciated by a large number of people. On the ground, grass, low trees and bushes are all good sites for sparrows to make their homes. They nest in the cracks and crevices of buildings in urban areas. Nests are rarely constructed at great heights. Nests are constructed from twigs, grasses and other plant fibres. Their nests are usually modest, but well-built.

Four to six eggs are laid by female sparrows at a time. Reddish brown blotches appear on the eggs' white shells. Between eleven and fourteen days, they'll hatch. The young are taken care of by both, male and female parents. After hatching, the young are fed insects. Using their big feet, sparrows scrape seeds. Seeds are the primary food source for adult sparrows. Birds like sparrows can be found nearly anywhere there are people. These lovely birds are beloved by a large number of people all around the world.

SubQuestion No : 25

Q.25 Identify the tone of the passage.

- Ans ☒ 1. Analytical
- ☒ 2. Descriptive
- ☒ 3. Satiric
- ☒ 4. Humorous

Question ID : 264330102443

Status : Answered

Chosen Option : 1

