

## All India Mock Test of SBI Clerk Pharmacist on 22nd May 2021

**Q1.** Banks in India are regulated under \_\_\_\_.

- (a) Companies Act, 1956
- (b) Banking Regulation Act, 1949
- (c) Reserve Bank of India Act, 1934
- (d) Special powers conferred on the RBI
- (e) None of these

**Q2.** What is the capital and currency of Algeria?

- (a) Phnom Penh, Riel
- (b) Pyongyang, Won
- (c) Algiers, Dinar
- (d) Moscow, Ruble
- (e) None of these

**Q3.** Who has been honoured with Tansen Samman- 2020 for Hindustani classical music?

- (a) Pt. Ulhaas Kashalkar
- (b) Pt. Satish Vyas
- (c) Pt. Vidyadhar Mehta
- (d) Pt. Dalchan Sharma
- (e) Pt. Vikas Kashalkar

**Q4.** Which one of the following is one of the tea producing sites from Japan which has been recognized by the Food and Agricultural Organisation (FAO) as the Globally Important Agricultural Heritage Systems (GIAHS)?

- (a) Fuzhou Jasmine tea site
- (b) Traditional Hadong Tea Agrosystem
- (c) Traditional Tree Grass system
- (d) Pu'er Traditional Tea Agrosystem
- (e) Harney & Sons Fine Teas

**Q5.** Nomination' for a deposit account in the banking terminology means \_\_\_\_ .

- (a) Mandate given by the close relative/s of the depositor to settle the death claim in case of death of the depositor.
- (b) Mandate decided by the bank to settle the death claim of its depositor.
- (c) Mandate of the depositor in favour of one or more persons to claim the amount on death of the depositor.
- (d) Court order in smiting the banks to settle the death claim of its depositor.
- (e) None of these



**BILINGUAL**

**SBI CLERK  
BATCH  
PHARMACY**

Starts May 4, 2021

**Q6.** Jallikattu, an bullfighting is popular in which of the following states?

- (a) Karnataka
- (b) Telangana
- (c) Tamil Nadu
- (d) Andhra Pradesh
- (e) None of these

**Q7.** We frequently read about 'MFI' in banking. What is the full form of this term, which is used in financial sector?

- (a) Micro Finance Institutions
- (b) Micro Functional Issues
- (c) Mutual Funds in India
- (d) Monetary Forum of India
- (e) Monetary and Financial Institutes

**Q8.** Indira Joseph Venniyoor who passed away was related to which profession?

- (a) News Broadcaster
- (b) Actor
- (c) Scientist
- (d) Economist
- (e) Model

**Q9.** Which state government launched a mobile application 'DigiNest', to give people digital access to the state government's directory, which can be synced with the smart phone with the click of a button?

- (a) Karnataka
- (b) Odisha
- (c) Andhra Pradesh
- (d) Punjab
- (e) Chhattisgarh

**Q10.** What is the tagline for Punjab National Bank?

- (a) Good People to Bank with
- (b) Where India banks
- (c) The Name You Can Bank Upon
- (d) Honours Your Trust
- (e) None of the above

**Q11.** Which of the following exchange/s comes under the Indian Secondary Market?

- (a) Regional stock exchanges
- (b) BSE and NSE
- (c) Over the Counter Exchange of India
- (d) The Inter-Connected Stock Exchange of India
- (e) All of the above

**Q12.** Who is appointed as the new chairman of Steel Authority of India Limited (SAIL)?

- (a) Soma Mondal
- (b) Surbhi Bhattacharya
- (c) Rekha Banerjee
- (d) Anil Kumar Chaudhary
- (e) Vaishika Mittal

**Q13.** Where is Asia's largest tulip garden 'Indira Gandhi Memorial Tulip Garden' located?

- (a) New Delhi
- (b) Srinagar
- (c) Ranikhet
- (d) Jaipur
- (e) Pithoragarh

**Q14.** In January 2021, National Payments Corporation of India (NPCI) announced transactions through which medium to be completely free?

- (a) NEFT
- (b) RTGS
- (c) UPI
- (d) IMPS
- (e) All of the above

**Q15.** Where was the five days 'National Folk-Dance Festival' organized in December 2020?

- (a) Jammu
- (b) Kanpur
- (c) Patiala
- (d) Hisar
- (e) Shimla

**Q16.** In the parlances of financial investment, what does the term "Bear" mean?

- (a) Any lender who is applying for a loan or buying a bond
- (b) An investor who feels that the price of particular security is going to fall
- (c) An investor who expects the price of particular shares to rise
- (d) An investor who is neutral towards his investments made
- (e) An investor who is able to take high risk to gain high return

**Q17.** What is the tagline of Syndicate Bank?

- (a) Relationships beyond Banking
- (b) Your faithful and Friendly Financial Partner
- (c) India's International Bank
- (d) A tradition of trust
- (e) None of the above

**Q18.** Which Indian two-wheeler company has become the first globally to cross a market capitalization of INR one trillion?

- (a) Honda
- (b) TVS Motor
- (c) Bajaj Auto
- (d) Hero MotoCorp
- (e) Yamaha

**Q19.** Which bank in January 2021 announced the launch of video KYC account opening (VAO) facility for its savings bank accounts?

- (a) IDBI Bank
- (b) RBL Bank
- (c) ICICI Bank
- (d) Karnataka Bank
- (e) Canara Bank

**Q20.** Which among the following does not has a legal status?

- (a) Cheque
- (b) Demand Draft
- (c) Bills of exchange
- (d) Promissory Note
- (e) Hundi

**Q21.** National Securities Depository Limited (NSDL) deals with:

- (a) Bearer Bonds
- (b) Electronic shares
- (c) Debentures
- (d) GDRs
- (e) Gilt edge securities

**Q22.** Pablo Cesar of which country will head the 51st International Film Festival of India's International Jury?

- (a) Netherlands
- (b) Argentina
- (c) Sri Lanka
- (d) Maldives
- (e) Austria

**Q23.** When is World Braille Day annually celebrated?

- (a) January 8
- (b) January 2
- (c) January 7
- (d) January 4
- (e) January 3



**Q24.** Which insurance company has tied up with Jammu & Kashmir Government to give the benefits of the Ayushman Bharat-Pradhan Mantri Jan Arogya Yojana (AB-PMJAY) SEHAT for all the residents of the Union territory?

- (a) Bajaj Allianz General Insurance
- (b) IFFCO Tokio General Insurance
- (c) ICICI Lombard General Insurance
- (d) Star Health and Allied Insurance
- (e) HDFC ERGO General Insurance

**Q25.** Which country's company and university has announced to launch the world's first wood-based space satellite to combat the problem of space junk?

- (a) Russia
- (b) France
- (c) China
- (d) Japan
- (e) USA

**Directions (26-35):** Read the following passage carefully and answer the questions given below it. Certain words are given in bold to help you locate them while answering some of the questions.

Some people shy away from travelling alone, a few **embrace** it. So, what is it that makes it an attractive option? What are the advantages of going it alone? Well first things first, travelling solo can be very liberating. The itinerary you set and all the decisions you make are yours and yours alone. You don't need to worry about any other person or group. In other words, there's no need to compromise, there are no arguments, and no need to second-guess what other people want or need. Actually, you can be completely selfish. Travelling alone is also a great confidence builder. Yes, at times it can feel a bit lonely, but that is just one of many problems you will have to solve yourself, along with making your own arrangements, and setting your own goals.

Have you noticed that when you're on your own, people are more willing to start a conversation with you? You're more likely to take the initiative as well, and before you know it, up pops an invitation for a meal, a side trip, a stay at someone's home. For some odd reason people keep a slight distance from couples and groups, probably because they seem so self-contained and exclusive. Whereas the lone traveller looks ready to connect with their fellow human beings, and more likely to engage in pleasant conversation and simple exchanges about their travels. Putting it simply, lone travellers look interesting.

Here are two more exciting reasons why you should consider travelling solo: You will find you learn language faster when you don't have someone else talking to you in your own language all the time. It's funny, but we interact, are forced to interact much more frequently when we travel alone in a country that doesn't speak our native tongue. If that doesn't **convince** you, there is the chance for adventure and even romance. When you're on your own you're free to meet someone who might turn out to be very important in your life. The most important factor to consider in your decision to make a trip alone is your own sense of independence. If you find that you have little tolerance for the **idiosyncracies** of others, or you don't get how group dynamics work, you might be happier travelling alone. Of course, there may be things holding you back: Fear of the unknown, or maybe you have a spouse, relative, or friend who may be upset by your decision to take off by yourself, you will have to convince them of the value of travelling alone and **allay** any fears they might have, but with the technology at our fingertips, you can include them in the adventure.

**Q26.** According to the passage, what kind of people likes to travel alone?

- (a) who is not well versed in communicating with others.
- (b) who cannot adjust with the behavior and thoughts of other people.
- (c) who is introvert.
- (d) who doesn't like to share their things with others.
- (e) All of the above

**Q27.** What is/ are the demerit (s) of traveling alone?

- (a) We need to solve the problems with ourselves.
- (b) We need to be dependent on unknown people for various things
- (c) Sometimes we can feel lonely.
- (d) Both (b) and (c) are correct
- (e) All of the above.

**Q28.** What are the things that restrict us to travel alone?

- (I) Relatives or spouse not allowing to travel alone.
  - (II) The fear of unknown people might restrict us.
  - (III) not finding a reason to travel alone
- (a) Only (I)
  - (b) Only (II)
  - (c) Both (I) and (II)
  - (d) Both (II) and (III)
  - (e) All are correct

**Q29.** What is / are the exhilarating reasons of travelling alone?

- (a) You need not to be dependent on others for any sort of work.
- (b) You will get to learn the others language.
- (c) By travelling alone we are free to know a person that might become a special part of our life.
- (d) You are free to do anything at any time while travelling alone.
- (e) Both (c) and (d)

**Q30.** What are the advantages of travelling alone?

- (I) Make our connections strong with other people along the journey
  - (II) We can selfishly make our own decisions.
  - (III) Great confidence builder
- (a) Only (I)
  - (b) Only (II)
  - (c) Both (I) and (II)
  - (d) Both (II) and (III)
  - (e) All are correct

**Q31.** Choose the most appropriate title of the passage.

- (a) Merits and demerits of travelling alone
- (b) Travelling alone
- (c) Is Travelling alone right?
- (d) Travelling alone brings Independence
- (e) Technology at our finger tips

**Directions (32-33):** Choose the word which is most nearly the **same** in meaning to the word given in **bold** as used in the passage.

**Q32.** Allay

- (a) dispel
- (b) edict
- (c) emulate
- (d) mollify
- (e) exhort

**Q33.** Idiosyncracies

- (a) exigent
- (b) collate
- (c) refute
- (d) evince
- (e) peculiarity

**Directions (34-35):** Choose the word which is **opposite** in meaning to the word given in **bold** as used in the passage.

**Q34.** Embrace

- (a) disparate
- (b) atrophy
- (c) repudiate
- (d) bane
- (e) persuade

**Q35.** Convince

- (a) capitulate
- (b) dissuade
- (c) bereft
- (d) beguile
- (e) callous



**Bilingual**



**Special Offer**

**SBI CLERK 2021**  
**PHARMACIST**

**20 TOTAL TESTS**

**Directions (36-45):** In the following passage there are words highlighted in bold, each of which has been numbered. These numbers are printed below the passage and against each, four words are suggested, one of which fits the blank appropriately. Find out the appropriate word in each case. If the word highlighted in bold does not require any replacement, choose **(e)** as your answer.

Chennai's date with a strong northeast monsoon ought to be a **reasons (36)** for all-round relief since the water fortunes of more than eight million residents of the metropolitan region **tempt (37)** on this weather system. Yet, the torrential rains in the meteorological sub-division, exceeding the normal by 93% in the **subject (38)** of four days from November 1, left tens of thousands of citizens in a state of **hatred (39)**. Flood waters **panic (40)** them in the rapidly growing suburban housing clusters, with many having to **eschew (41)** to safer places fearing a repeat of the deluge of 2015. While there have been efforts to **alleviate (42)** immediate misery through the distribution of **service (43)** material in some places, the larger issue of how the city **deals (44)** with flood and drought cycles remains unaddressed. Chennai is a lower elevation coastal city with global aspirations, and very **positive (45)** population density.

- Q36.** (a) rationalization  
(b) cause  
(c) result  
(d) move  
(e) No improvement required

- Q37.** (a) predicate  
(b) establish  
(c) derive  
(d) depend  
(e) No improvement required

- Q38.** (a) schedule  
(b) period  
(c) procedure  
(d) phase  
(e) No improvement required

- Q39.** (a) aversion  
(b) loathe  
(c) despair  
(d) insolence  
(e) No improvement required

- Q40.** (a) split  
(b) tricked  
(c) marooned  
(d) grounded  
(e) No improvement required





**Q41.** (a) start  
(b) flee  
(c) shun  
(d) hide  
(e) No improvement required

**Q42.** (a) propitiate  
(b) upgrade  
(c) sustain  
(d) promote  
(e) No improvement required

**Q43.** (a) restore  
(b) cooperation  
(c) promotion  
(d) relief  
(e) No improvement required

**Q44.** (a) proffers  
(b) concords  
(c) regulates  
(d) turmoils  
(e) No improvement required

**Q45.** (a) poised  
(b) high  
(c) valiant  
(d) complacent  
(e) No improvement required



**Directions (46-50):** Read each sentence to find out whether there is any grammatical or idiomatic error in it. The error, if any, will be in one part of the sentence. The number of that part is the answer. If there is 'No error', the answer is (e). (Ignore errors of punctuation, if any.)

**Q46.** He told me (a) / that he wrote a letter (b) / to his superior (c) / for a certain reason. (d) / No Error (e)

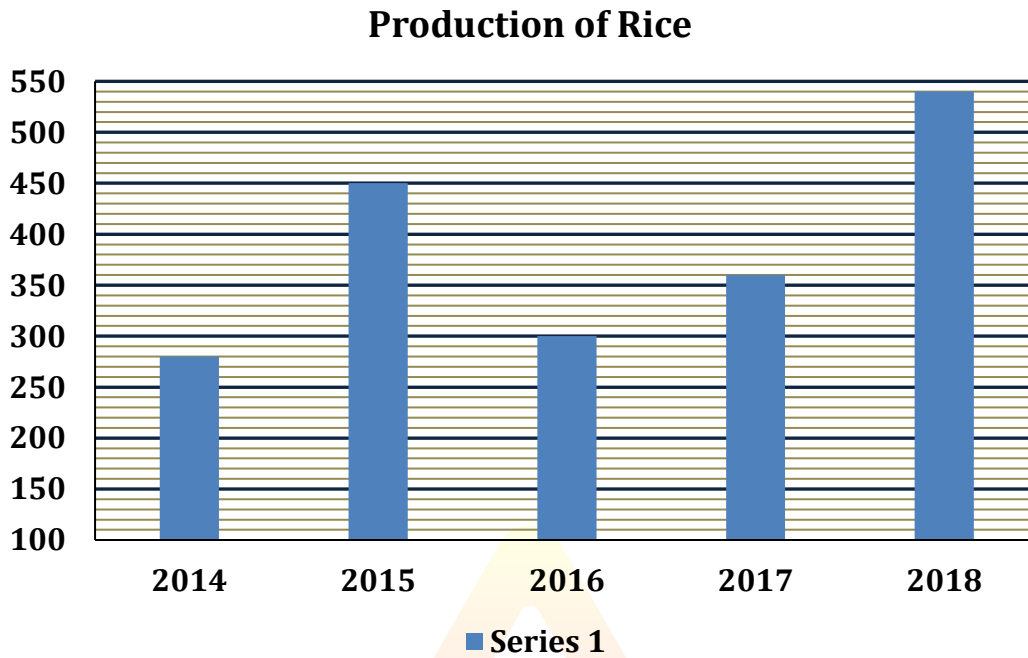
**Q47.** He reminded me (a) / that he has (b) / often told me not to (c) / play with fire.(d) / No Error (e)

**Q48.** I would have asked (a) / you for dinner (b) / if I had known (c) / that you are staying here tonight. (d) / No Error (e)

**Q49.** He educated not only (a) / his nephew but also (b) / set him up (c) / in business. (d) / No Error (e)

**Q50.** As soon as the peon rings (a) / the first bell (b) / then all the students assemble (c) / on the playground for prayer. (d) / No Error (e)

**Directions (51-56):** The bar graph given below show the production of Rice (in ton) in a village in five different years. Study the graph carefully and answer the following questions.



**Q51.** Rice produced in 2016 is what percent of that in 2018? (up to two decimals)

- (a) 46.66%
- (b) 75%
- (c) 180%
- (d) 55.55%
- (e) 33.33%

**Q52.** Find the average production of Rice in given period.

- (a) 276 ton
- (b) 324 ton
- (c) 386 ton
- (d) 364 ton
- (e) 426 ton

**Q53.** What is percentage rise or fall in production of Rice in 2018 from 2015?

- (a) 15%
- (b) 20%
- (c) 35%
- (d) 25%
- (e) 30%

**Q54.** What is the ratio of Rice produced in 2014 and 2016 together to that in 2017 and 2018 together?

- (a) 29 : 45
- (b) 30 : 41
- (c) 28 : 43
- (d) 29 : 47
- (e) 45 : 29

**Q55.** Rice produced in 2016 is what percentage more or less than that in 2017?

- (a) 25%
- (b) 16.67%
- (c) 33.33%
- (d) 12.5%
- (e) 20%

**Q56.** Production of rice in 2014 and 2017 together is how much more or less than that in 2015, 2016 and 2018 together?

- (a) 450 ton
- (b) 350 ton
- (c) 650 ton
- (d) 750 ton
- (e) 550 ton

**Q57.** By selling an article at  $\frac{3}{4}$  th of the marked price, there is a gain of 25%. The ratio of the marked price and the cost price is


- (a) 5 : 3
- (b) 3 : 5
- (c) 3 : 4
- (d) 4 : 3
- (e) 4:7

**Q58.** A and B earn in the ratio 2 : 1. They spend in the ratio 5 : 3 and save in the ratio 4 : 1. If the total monthly savings of both A and B are Rs. 5,000, the monthly income of B is

- (a) Rs. 7,000
- (b) Rs. 14,000
- (c) Rs. 5,000
- (d) Rs. 10,000
- (e) 12,000

**Q59.** A train travelling at 36 kmph crosses a platform in 20 seconds and a man standing on the platform in 10 seconds. What is the length of the platform in meters?

- (a) 240 meters
- (b) 100 meters
- (c) 200 meters
- (d) 300 meters
- (e) 350 meters



**Q60.** Amit can do a work in 12 days and Sagar in 15 days. If they work on it together for 4 days, then the fraction of the work that is left is:

- (a)  $\frac{3}{20}$
- (b)  $\frac{3}{5}$
- (c)  $\frac{2}{5}$
- (d)  $\frac{2}{20}$
- (e)  $\frac{1}{20}$

**Directions (61-65):** - Simplify the following equations and find the value of (?) question mark?

**Q61.**  $\sqrt{576} + 45\% \text{ of } 120 = ? + 8.5\% \text{ of } 200$

- (a) 67
- (b) 71
- (c) 74
- (d) 61
- (e) 64

**Q62.**  $11\frac{3}{4} + 7\frac{6}{5} - 4\frac{7}{8} = ? + 14\frac{7}{10}$

- (a)  $\frac{3}{8}$
- (b)  $\frac{9}{10}$
- (c)  $\frac{3}{5}$
- (d)  $\frac{5}{8}$
- (e)  $\frac{4}{7}$



**Q63.**  $\sqrt{40\% \text{ of } (? + 10)} = \frac{200}{3}\% \text{ of } 6$

- (a) 20
- (b) 35
- (c) 30
- (d) 40
- (e) 25

**Q64.**  $25\% \text{ of } \sqrt{115600} \div 1.7 = ?^2 + 1$

- (a) 9
- (b) 7
- (c) 5
- (d) 13
- (e) 11

**Q65.**  $44\frac{4}{9}\%$  of  $(15)^2 - 9^2 = ?$

- (a) 11
- (b) 17
- (c) 19
- (d) 13
- (e) 21

**Directions (66-70):** Find the wrong number in the given series.

**Q66.** 3, 5, 14, 48, 200, 1020, 6072

- (a) 1020
- (b) 200
- (c) 6072
- (d) 5
- (e) 48

**Q67.** 48, 84, 156, 300, 590, 1164, 2316

- (a) 300
- (b) 590
- (c) 48
- (d) 156
- (e) 2316

**Q68.** -18, -8, 12, 36, 70, 112, 162

- (a) -18
- (b) 36
- (c) 70
- (d) 162
- (e) 12

**Q69.** 2, 6, 12, 24, 30, 42, 56.

- (a) 6
- (b) 12
- (c) 24
- (d) 30
- (e) 56

**Q70.** 100, 92, 65, 0, -124, -340, -683

- (a) 0
- (b) 100
- (c) -340
- (d) -683
- (e) 92



**BILINGUAL**

A promotional image for the SBI Clerk Batch Pharmacy. It features a group of five people (three men and two women) standing together against a yellow background. They are wearing dark clothing, some with the Adda247 logo. The image is framed by a blue border.

**SBI CLERK  
BATCH  
PHARMACY**

Starts May 4, 2021

**Q71.** A boat can cover 30 km downstream and 24 km upstream in 15 hr, also 45 km downstream and 12 km upstream in  $\frac{21}{2}$  hr, Find speed of boat in downstream?

- (a) 10 km/hr
- (b) 5 km/hr
- (c) 6 km/hr
- (d) 9 km/hr
- (e) 4 km/hr

**Q72.** The salary of Raju and Ram is 20% and 30% less than the salary of Saroj respectively. By what percent is the salary of Raju more than the salary of Ram?

- (a) 33.33%
- (b) 50%
- (c) 15.18%
- (d) 14.28%
- (e) 14%

**Q73.** A, B and C started a business by investing Rs 45000, Rs 55000 and Rs 65000 respectively. A is working partner and gets 12% of the profit as working allowance and remaining profit is distributed in the proportion of their investment. If money received by C (in end of a year) is Rs 23400. Find total profit?

- (a) Rs 62500
- (b) Rs 57500
- (c) Rs 60000
- (d) Rs 67500
- (e) None of these



**Q74.** Sanjay invests an amount at rate of 10% SI for two years and earns an interest of Rs 4800, if he invests the same amount of money at same rate at CI for same time, then how much interest he will earn?

- (a) Rs 5400
- (b) Rs 4050
- (c) Rs 4500
- (d) Rs 5040
- (e) Rs 4545

**Q75.** The length of a rectangle is 1.5 times of its breadth. If breadth is decreased by 10 cm and length is increased by 10 cm, the area decreases by  $300 \text{ cm}^2$ . What is its initial length?

- (a) 60 cm
- (b) 80 cm
- (c) 70 cm
- (d) 50 cm
- (e) 40 cm

**Directions (76-80):** Study the following information carefully and answer the questions given below:

Eight persons A, B, C, D, E, F, G and H are sitting in a row. Four of them are facing towards north while four of them are facing towards south. No two person sits adjacent to each other according to the English alphabet i.e. (B does not sits adjacent to A and C).

C sits third to the left of A. Only two person sits between C and F. A does not sits at the end of the row. E sits 4th to the right of B. H sits third to the right of D and faces south. G and H faces same direction. Immediate neighbour of H faces same direction. F faces north direction.

**Q76.** Who among the following pair are facing same direction?

- (a) All of them are facing same direction
- (b) A, D
- (c) A, B
- (d) D, H
- (e) A, F

**Q77.** Who among the following person sits immediate right of A?

- (a) G
- (b) A
- (c) D
- (d) No one
- (e) B

**Q78.** What is the position of H with respect to F?

- (a) Fourth to the right
- (b) Immediate left
- (c) Second to the right
- (d) Fourth to the left
- (e) Second to the left

**Q79.** How many persons are sitting between G and D?

- (a) Four
- (b) Two
- (c) No one
- (d) Three
- (e) Six

**Q80.** Who among the following person are immediate neighbors of B?

- (a) F, G
- (b) A, F
- (c) F, H
- (d) D, C
- (e) None of these



**Directions (81-85):** Study the following alphanumeric series carefully and answer the questions given below:

**A 2 M % N V # H 3 5 J \* 3 B H @ 2 7 P 1 \$ W & \* 3 Y 4**

**Q81.** How many such numbers are there which is preceded by alphabets and followed by symbols?

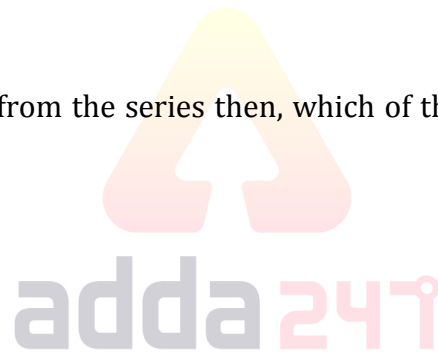
- (a) None
- (b) One
- (c) Two
- (d) Three
- (e) More than three

**Q82.** Which of the following element is 15<sup>th</sup> from right end of the series?

- (a) J
- (b) \*
- (c) 3
- (d) B
- (e) None of these

**Q83.** If all numbers are eliminated from the series then, which of the following element is 11<sup>th</sup> from left end of the series?

- (a) B
- (b) H
- (c) @
- (d) \*
- (e) None of these



**Q84.** How many such symbols are there which is preceded by numbers and followed by vowels?

- (a) None
- (b) One
- (c) Two
- (d) Three
- (e) More than three

**Q85.** How many elements are between the 4<sup>th</sup> number from the right end and 3<sup>rd</sup> symbol from the left end of the series?

- (a) Four
- (b) Five
- (c) Two
- (d) Three
- (e) More than five



**Directions (86-90):** Study the following information carefully and answer the questions given below:

Seven persons i.e. M, N, O, P, Q, R and S who all live in a seven storey building such that ground floor is numbered 1 and above it is numbered 2 and so on till the top most floor which is numbered 7. Not more than three person lives above O. Only two person lives between M and Q. Only two person lives between R and O. N lives immediately above R. More than two person lives between N and M. S live above P, but does not live on odd numbered floor.

**Q86.** How many persons live above M?

- (a) None
- (b) One
- (c) Three
- (d) More than four
- (e) Two

**Q87.** S live on which among the following floor?

- (a) 4th Floor
- (b) 6th Floor
- (c) 3rd Floor
- (d) 1st Floor
- (e) None of these

**Q88.** How many persons lives between O and P?


- (a) Two
- (b) Four
- (c) Three
- (d) None
- (e) None of these

**Q89.** Who among the following person lives on the 5th Floor?

- (a) S
- (b) M
- (c) N
- (d) Q
- (e) None of these

**Q90.** Four of the given five belongs to a group find the one that does not belong to that group?

- (a) M
- (b) O
- (c) N
- (d) P
- (e) Q



**Q91.** There are five family members A, C, E, F and P. A is the father of C. F is the son of C. C is the daughter in law of E. P is husband of C. How is E related to C?

- (a) Mother in law
- (b) Father in law
- (c) Sister
- (d) Mother
- (e) Can't be determined

**Directions (92-93):** Study the following information carefully and answer the questions given below:

Ashish starts his journey from point P. He walks 15m in North direction and reaches at point Q. Now, turning to the right, he walks 8m to reach point R then he takes left turn and walk 3m to reach point S. From point S, he walks 4m in west direction and reaches at point T and then from Point T, he walks 15m in south and reaches his final destination.

**Q92.** Find the shortest distance between point P and final position of Ashish?

- (a) 4m
- (b) 3m
- (c) 5m
- (d) 3.5m
- (e) None of these

**Q93.** If point A is the midpoint between point T and final position of Ashish then what is the shortest distance between point Q and point A?

- (a) 4m
- (b) 5m
- (c)  $\sqrt{29.25}$ m
- (d)  $\sqrt{20.25}$ m
- (e) None of these

**Directions (94-95):** Study the following information carefully and answer the questions given below:

There are seven family members P, Q, R, S, U, V and W. There are two married couples. Q is the brother in law of V and son of R. W is the sister in law of P. R is grandfather of S. U is brother of S. R has two child and only one son. W is mother of S, who is niece of P. P is the wife of V.

**Q94.** How is P related to S?

- (a) Uncle
- (b) Aunt
- (c) Daughter
- (d) Daughter in law
- (e) Can't be determined

**Q95.** If M is the son of P then how is M related to S?

- (a) Cousin
- (b) Brother
- (c) Sister
- (d) Brother in law
- (e) None of these

**Direction (96-100):** In these questions, relationship between different elements is show in the statements. The statements are followed by conclusions. Study the conclusions based on the given statements and select the appropriate answer:

- (a) If only conclusion I follows.
- (b) If only conclusion II follows.
- (c) If either conclusion I or II follows.
- (d) If neither conclusion I nor II follows.
- (e) If both conclusions I and II follow.

**Q96. Statements:**  $F = D \geq C > R > V \leq A \geq B, I < V > L$

**Conclusions:** I.  $F > C$                       II.  $D > I$

**Q97. Statements:**  $A = D = E \leq F \geq L = S \leq I, G > M = F$

**Conclusions:** I.  $M > A$                       II.  $G > S$

**Q98. Statements:**  $H < I > F = G \leq E > Q < R = A < P > T$

**Conclusions:** I.  $I \geq P$                       II.  $P > I$

**Q99. Statements:**  $A > O = I > D = F \geq W = N < X > Y = P$

**Conclusions:** I.  $D > N$                       II.  $D = N$

**Q100. Statements:**  $W > U < F = C \geq J \leq N = X, C > A, N \leq Y$

**Conclusions:** I.  $Y > A$                       II.  $C > W$



**Bilingual**

**Special Offer**

**SBI CLERK 2021  
PHARMACIST**

**20 TOTAL TESTS**



adda247 publications

BOOKS

A grid of 56 book covers from Adda247 Publications, organized in 7 rows and 8 columns. The books cover various competitive exam topics:

- Row 1:** 20+ SBI PO Prelims 2020 Mock Test Papers (2100+ Questions); 10 IBPS PO Mains Book (1500+ Questions); 10+ RBI Grade B Phase-I Mock Book (2100+ Questions); 20+ IBPS CLERK CWE-IX Mock Papers (2050+ Questions); IBPS PO | CWE-IX 25 IBPS PO Prelims (2450+ Questions); 50+ BANK PO | CLERK 2016-19 Previous Years' (Memory Based) Book (5500+ Questions); "THE CRACKER" BANK MAINS EXAMS (2000+ Questions).
- Row 2:** A COMPLETE BOOK OF DATA INTERPRETATION & ANALYSIS (2000+ Questions); 20 LIC ASSISTANT PRELIMS MOCK PAPERS (1950 Questions); A COMPLETE BOOK OF PUZZLE & SEATING ARRANGEMENT (2500+ Questions); Ace QUANT (2000+ Questions); ऐस क्वांट (2000+ Questions); Ace REASONING (2000+ Questions); ऐस रीजनिंग (2000+ Questions).
- Row 3:** Ace BANKING & STATIC AWARENESS (2000+ Questions); Ace IT OFFICER Professional Knowledge (2000+ Questions); Ace ENGLISH (2000+ Questions); BANK EXAMS INTERVIEWS (2000+ Questions); A COMPLETE BOOK OF LOGICAL REASONING (550+ Questions); Radhey Ki Reasoning SEATING & PUZZLE MASTERS (1000+ Questions); "THE CRACKER" PRACTICE BOOK FOR GEOMETRY (800+ Questions).
- Row 4:** 850+ "THE CRACKER" PRACTICE BOOK FOR MENSURATION (2000+ Questions); "THE CRACKER" PRACTICE BOOK FOR ALGEBRA & NUMBER SYSTEM (1300+ Questions); "THE CRACKER" GENERAL SCIENCE Multiple Choice Questions Book (1000+ Questions); 100 SSC CGL (10,000+ Questions); A COMPREHENSIVE GUIDE FOR RRB NTPC STAGE-1 & 2 (5000+ Questions); Ace SSC ARITHMETIC (2000+ Questions); ऐस एसएससी अंक गणित (2000+ Questions).
- Row 5:** Ace SSC ENGLISH LANGUAGE & COMPREHENSION BOOK (2000+ Questions); Ace SSC ADVANCED MATHS (2000+ Questions); ऐस एसएससी एडवांस्ड मैथ (2000+ Questions); ऐस एसएससी सामान्य ज्ञान (2000+ Questions); Ace SSC GENERAL AWARENESS (2000+ Questions); Ace SSC GENERAL INTELLIGENCE & REASONING (2000+ Questions); ऐस एसएससी सामान्य बुद्धि (2000+ Questions).

Visit: [publications.adda247.com](http://publications.adda247.com) & [store.adda247.com](http://store.adda247.com)  
For any information, mail us at [publications@adda247.com](mailto:publications@adda247.com)