

IBPS RRB Clerk Prelims Previous Year Paper - 2022 (Solutions)

Solutions (1-5):

S1. Ans.(a)

S2. Ans.(c)

S3. Ans.(d)

S4. Ans.(a)

S5. Ans.(e)

Solutions (6-10):

S6. Ans.(c)

S7. Ans.(a)

S8. Ans.(c)

S9. Ans.(b)

S10. Ans.(b)

Solutions (11-15):

Month	Date	Persons
September	11	B
	22	Q
October	11	R
	22	D
November	11	F
	22	T

S11. Ans.(d)

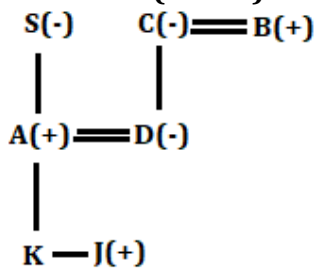
S12. Ans.(b)

S13. Ans.(a)

S14. Ans.(d)

S15. Ans.(d)

Solutions (16-18):



S16. Ans.(c)

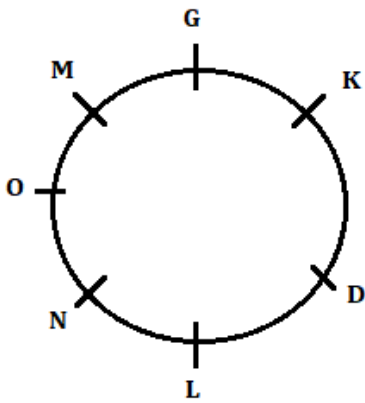
S17. Ans.(d)

S18. Ans.(e)

S19. Ans.(d)



Solutions (20-24):



S20. Ans.(a)

S21. Ans.(a)

S22. Ans.(a)

S23. Ans.(c)

S24. Ans.(b)

S25. Ans.(b)

Solutions (26-30):

S26. Ans.(e)

S27. Ans.(b)

S28. Ans.(a)

S29. Ans.(d)

S30. Ans.(c)

Solutions (31-34):

Floor	Persons
7	A
6	F
5	C
4	E
3	G
2	B
1	D

S31. Ans.(b)

S32. Ans.(e)

S33. Ans.(c)

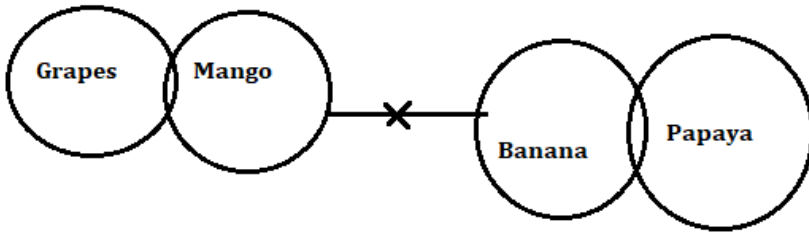
S34. Ans.(d)

S35. Ans.(b)

Solutions (36-39):

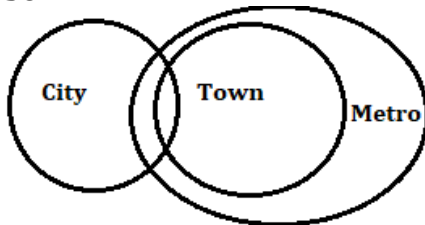
S36. Ans.(c)

Sol.



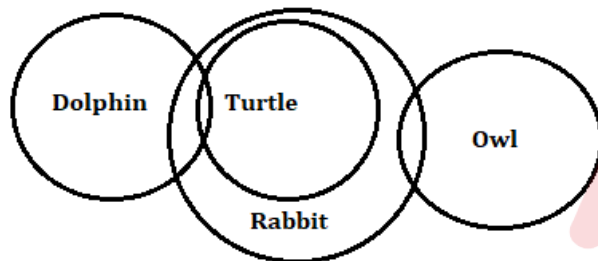
S37. Ans.(a)

Sol.



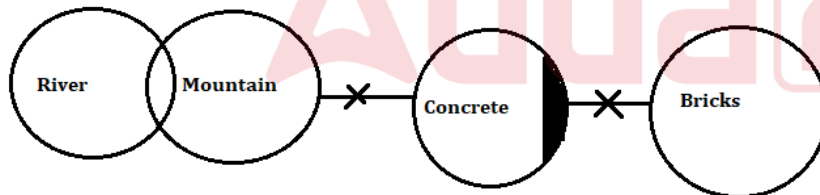
S38. Ans.(c)

Sol.



S39. Ans.(e)

Sol.



S40. Ans.(b)

S41. Ans.(d)

Sol. $y^2 - x^2 = 72$ ----- (i)

$y - x = 4$ ----- (ii)

we know $a^2 - b^2 = (a + b)(a - b)$

So, $4(y + x) = 72$

$y + x = 18$ ----- (iii)

from (ii) & (iii) we get -

$y = 11$ & $x = 7$

so, $(x \times y) = 11 \times 7 = 77$

BILINGUAL

ADDA
gold
TEST PACK

for All Govt. Exams
(Bank, SSC, State, Teaching,
Defence & UPSC)

20000+ MOCK TESTS

S42. Ans.(e)**Sol.** Let length and breadth of the rectangle is $7x$ and $3x$ respectively.

ATQ -

$$2(7x + 3x) = 40$$

$$10x = 20$$

$$x = 2 \text{ cm}$$

$$\text{Required area} = 14 \times 6 = 84 \text{ cm}^2$$

S43. Ans.(a)

Sol. Required difference = $\frac{1460 \times 8 \times 10}{100} - \frac{1460 \times 5 \times 10}{100} = 1168 - 730 = \text{Rs.}438$

S44. Ans.(d)**Sol.** Let cost price of each article be Rs. $100x$

$$\text{So, } 100x \times \frac{30}{100} - 100x \times \frac{18}{100} = 210$$

$$12x = 210$$

$$x = 17.5 \text{ Rs.}$$

So, cost price of each article = 1750 Rs.

S45. Ans.(e)**Sol.** Let each type of articles purchased by man be 'n'

ATQ -

$$52 \times n + 78 \times n + 108 \times n = 1190$$

$$n = 5$$

S46. Ans.(b)**Sol.** Let present age of A and B be $5x$ and $4x$ respectively.

ATQ -

$$(5x + 4) - (4x + 6) = 3$$

$$x = 5$$

Present age of B = 20 years

S47. Ans.(d)**Sol.** Let the quantity of milk and water in the mixture be $5x$ and $3x$ respectively.

ATQ-

$$(120 \times \frac{3x}{8x}) : (120 \times \frac{5x}{8x} + 20) = 9 : 19$$

S48. Ans.(b)

Sol. $x = \frac{160}{5} = 32 \text{ km/hr}$

$$y = 160 \times \frac{3}{10} = 48 \text{ km/hr}$$

Required value of $(x : y) = 32 : 48 = 2 : 3$

S49. Ans.(d)**Sol.** Let speed of boat in still water be x kmph

And distance be 'D' km

ATQ

$$\frac{D}{x-3} = 5$$

$$D = 5(x - 3) \text{ --- (i)}$$

And,

$$\frac{D}{x+3} = 2$$

$$D = 2(x + 3) \text{ --- (ii)}$$

From (i) and (ii)

$$5(x - 3) = 2(x + 3)$$

$$5x - 15 = 2x + 6$$

$$3x = 21 \Rightarrow x = 7 \text{ km/hr}$$

$$\text{So, required distance} = 5 \times (7 - 3) = 20 \text{ km}$$

S50. Ans.(b)**Sol.** Ratio of efficiency of A to B = 7 : 5

So ratio of time required to complete the work = 5 : 7

Now ATQ,

$$(7 - 5) \rightarrow 6 \text{ days}$$

$$2 \rightarrow 6$$

$$5 \rightarrow \frac{6}{2} \times 5 = 15 \text{ days}$$

So, 'A' can complete the work alone in 15 days

S51. Ans.(b)**Sol.** Pattern of series -

$$2 + 2 = 4$$

$$4 + 3 = 7$$

$$7 + 5 = 12$$

$$12 + 7 = 19$$

$$?= 19 + 11 = 30$$

S52. Ans.(c)**Sol.** Pattern of series -

$$67 + 31 = 98$$

$$98 + 31 = 129$$

$$129 + 31 = 160$$

$$?= 160 + 31 = 191$$

$$191 + 31 = 222$$

S53. Ans.(c)**Sol.** Pattern of series -


$$10 + 2^3 = 18$$

$$18 + 3^3 = 45$$

$$45 + 4^3 = 109$$

$$? = 109 + 5^3 = 234$$

$$234 + 6^3 = 450$$



S54. Ans.(a)

Sol. Pattern of series –

$$12 + 2^2 = 16$$

$$16 + 3^2 = 25$$

$$25 + 4^2 = 41$$

$$?= 41 + 5^2 = 66$$

$$66 + 6^2 = 102$$

S55. Ans.(b)

Sol. Pattern of series –

$$15 + 5 = 20$$

$$20 + 5 = 25$$

$$25 + 5 = 30$$

$$?= 30 + 5 = 35$$

$$35 + 5 = 40$$

S56. Ans.(a)

Sol. Total number of sunflowers used in January & March together = $68 + 96 = 164$

Total number of roses used in January & February together = $72 + 88 = 160$

$$\text{Required percentage} = \frac{164-160}{160} \times 100 = 2.5\%$$

S57. Ans.(e)

Sol. Required average = $\frac{96+80+118}{3} = 98$

S58. Ans.(c)

Sol. Required ratio = $72 : 84 = 6 : 7$

S59. Ans.(c)

Sol. Required difference = $(118 - 68) = 50$

S60. Ans.(a)

Sol. Required sum = $(68+112+96) = 276$

S61. Ans.(b)

Sol. Required difference = $50 \times \frac{3}{5} - 40 \times \frac{5}{8} = 30 - 25 = 5 \text{ kg}$

S62. Ans.(d)

Sol. Required ratio = $60 : 90 = 2 : 3$

S63. Ans.(a)

Sol. Total dry Apricot sold by shop = $80 \times \frac{150}{100} \times \frac{60}{160} = 45 \text{ kg}$

S64. Ans.(b)

Sol. Required percentage = $\frac{(60+40)-80}{80} \times 100 = 25\%$



S65. Ans.(d)

Sol. Required difference = $(50 + 90) - (80 + 40) = 20 \text{ kg}$

S66. Ans.(d)

Sol. $\frac{510}{?} = 18 + 16$

$? = \frac{510}{34} = 15$

S67. Ans.(d)

Sol. $3 \times ?^2 = 25 + 49 + 289$

$?^2 = \frac{363}{3}$

$?^2 = 121$

$? = 11$

S68. Ans.(d)

Sol. $?^2 = \frac{40}{100} \times 420 + \frac{44}{100} \times 200$

$?^2 = 168 + 88$

$?^2 = 256$

$? = 16$

S69. Ans.(c)

Sol. $? = \frac{7}{3} \times \frac{30}{7} \times \frac{10}{3} \times 81$

$? = 2700$

S70. Ans.(e)

Sol. $(?)^2 = 16 \times 7 + 256 - 7$

$(?)^2 = 361$

$? = 19$

S71. Ans.(c)

Sol. $\sqrt{256} \times \sqrt{169} + 3600 \div 12 = 800 - ?$

$16 \times 13 + 300 = 800 - ?$

$208 + 300 = 800 - ?$

$? = 800 - 508$

$? = 292$

S72. Ans.(a)

Sol. $? = 37.5 \times 14 + 800 - (26)^2 + 136$

$? = 525 + 800 - 676 + 136$

$? = 1325 - 540$

$? = 785$

S73. Ans.(c)

Sol. $3.5 \times 18 - 38 = (?)^2$

$63 - 38 = (?)^2$

$25 = (?)^2$

$? = 5$

S74. Ans.(b)

Sol. $? = \frac{2975}{1190}$

$? = 2.5$

S75. Ans.(b)

Sol. $\frac{25 \div 4 \times 6 \times 2}{3} = ?$

$? = 25$

S76. Ans.(a)

Sol. $(390 + 310 - 225) \times 5 = ?$

$(700 - 225) \times 5 = ?$

$475 \times 5 = ?$

$? = 2375$

S77. Ans.(e)

Sol. $9 \times 25 + 1225 + 150 = (?)^2$

$225 + 1225 + 150 = (?)^2$

$? = \sqrt{1600}$

$? = 40$

S78. Ans.(a)

Sol. $\frac{27}{4} + \frac{21}{5} - \frac{63}{8} = ? + \frac{17}{10}$

$? = \frac{27}{4} - \frac{63}{8} + \frac{21}{5} - \frac{17}{10}$

$? = 1\frac{3}{8}$

S79. Ans.(c)

Sol. $\sqrt{\frac{4}{5}} \text{ of } (? + 60) = 10$

$\frac{4}{5} \text{ of } (? + 60) = 100$

$? + 60 = 125$

$? = 65$

S80. Ans.(b)

Sol. $750 - 2200 + 2700 = ?$

$? = 1250$



BOOKS



The image displays a grid of 48 book covers from Adda247 Publications. The books are organized into four rows and twelve columns. Each cover features the Adda247 logo, the title in both Hindi and English, and key details such as the number of questions, editions, and target exams. The covers are color-coded and feature various illustrations related to the book's content, such as calculators, charts, and people studying.

Visit: adda247.com
 For any information, mail us at support.publication@adda247.com