

## Education Consultant India Ltd.

Notations :

1.Options shown in green color and with ✓ icon are correct.

2.Options shown in red color and with ✖ icon are incorrect.

Question Paper Name:	GRADE II DASS 23rd July 2019 Shift 1
Subject Name:	GRADE II DASS
Creation Date:	2019-07-23 12:36:56
Duration:	120
Total Marks:	200
Display Marks:	Yes
Share Answer Key With Delivery Engine:	No
Actual Answer Key:	Yes
Calculator:	None
Magnifying Glass Required?:	No
Ruler Required?:	No
Eraser Required?:	No
Scratch Pad Required?:	No
Rough Sketch/Notepad Required?:	No
Protractor Required?:	No
Show Watermark on Console?:	Yes
Highlighter:	No
Auto Save on Console?:	No

## Mental Ability1

Group Number :	1
Group Id :	586180312
Group Maximum Duration :	0
Group Minimum Duration :	0
Show Attended Group? :	No
Edit Attended Group? :	No
Break time:	0
Group Marks:	20
Is this Group for Examiner?:	No
Revisit allowed for group Instructions? :	Yes
Maximum Instruction Time:	0
Minimum Instruction Time:	0

## Mental Ability1

Section Id :	586180316
Section Number :	1

Section type :	Online
Mandatory or Optional:	Mandatory
Number of Questions:	20
Number of Questions to be attempted:	20
Section Marks:	20

Sub-Section Number:	1
Sub-Section Id:	586180439
Question Shuffling Allowed :	Yes

Question Number : 1 Question Id : 5861806503 Question Type : MCQ Option Shuffling : Yes

Correct Marks : 1 Wrong Marks : 0.25

Select the letter cluster which is related to third letter cluster in the same way as the second letter cluster is related to first letter cluster.

ROGUE : ULJRB :: CASUAL : ?

Options :

1. ✓ FXVRXO

2. ✗ FYVRYO

3. ✗ EXVRXO

4. ✗ FXVQXO

Question Number : 1 Question Id : 5861806503 Question Type : MCQ Option Shuffling : Yes

Correct Marks : 1 Wrong Marks : 0.25

वह अक्षर - समूह चुनें जो तीसरे अक्षर - समूह से उसी तरह से संबंधित है, जिस तरह से दूसरा अक्षर-समूह पहले अक्षर - समूह से संबंधित है।

ROGUE : ULJRB :: CASUAL : ?

Options :

1. ✓ FXVRXO

2. ✖ FYVRYO

3. ✖ EXVRXO

4. ✖ FXVQXO

Question Number : 2 Question Id : 5861806504 Question Type : MCQ Option Shuffling : Yes

Correct Marks : 1 Wrong Marks : 0.25

Select the number which is related to third number in the same way as the second number is related to first number.

2211 : 10 :: 1423 : ?

Options :

1. ✖ 27

2. ✖ 28

3. ✖ 29

4. ✔ 30

Question Number : 2 Question Id : 5861806504 Question Type : MCQ Option Shuffling : Yes

Correct Marks : 1 Wrong Marks : 0.25

वह संख्या चुनें जो तीसरी संख्या से उसी तरह से संबंधित है, जिस तरह से दूसरी संख्या पहली संख्या से संबंधित है।

2211 : 10 :: 1423 : ?

Options :

1. ✖ 27

2. ✖ 28

3. ✖ 29

4. ✔ 30

Question Number : 3 Question Id : 5861806505 Question Type : MCQ Option Shuffling : Yes

Correct Marks : 1 Wrong Marks : 0.25

Three of the given four number pairs are similar in a certain manner while one is different. Choose the odd one out.

Options :

1. ✖ 442 : 84

2. ✔ 226 : 47

3. ✖ 152 : 52

4. ✖ 234 : 83

Question Number : 3 Question Id : 5861806505 Question Type : MCQ Option Shuffling : Yes

Correct Marks : 1 Wrong Marks : 0.25

चार प्रदत्त संख्या युग्मों में से तीन एक तरीके से समान हैं, जबकि उनमें से एक अलग है। निम्न विकल्पों में से विषम चुनें।

Options :

1. ✖ 442 : 84

2. ✔ 226 : 47



3. ✖ 152 : 52

4. ✖ 234 : 83

Question Number : 4 Question Id : 5861806506 Question Type : MCQ Option Shuffling : Yes  
Correct Marks : 1 Wrong Marks : 0.25

Select a figure from the options figures that would complete the figure matrix.



Options :

1. ✖


2. ✔

3. ✖

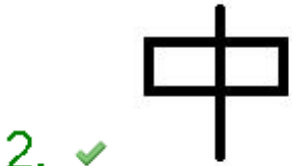
4. ✖

Question Number : 4 Question Id : 5861806506 Question Type : MCQ Option Shuffling : Yes  
Correct Marks : 1 Wrong Marks : 0.25

निम्न वैकल्पिक आकृतियों में से वह आकृति चुनें जो इस आकृति आव्यूह को पूरा करती है।



Options :



Question Number : 5 Question Id : 5861806507 Question Type : MCQ Option Shuffling : Yes

Correct Marks : 1 Wrong Marks : 0.25

Three of the given four letter cluster pairs are similar in a certain manner while one is different. Choose the odd one out.

Options :



3. ✖ EXOD : GRAH

4. ✖ PILA : DOLS

Question Number : 5 Question Id : 5861806507 Question Type : MCQ Option Shuffling : Yes

Correct Marks : 1 Wrong Marks : 0.25

चार प्रदत्त अक्षर - समूह युग्मों में से तीन एक तरीके से समान हैं, जबकि उनमें से एक अलग है। निम्न विकल्पों में से विषम चुनें।

Options :

1. ✖ FIXT : WALI

2. ✔ LOGI : ORJM

3. ✖ EXOD : GRAH

4. ✖ PILA : DOLS

Question Number : 6 Question Id : 5861806508 Question Type : MCQ Option Shuffling : Yes

Correct Marks : 1 Wrong Marks : 0.25

Select the figure amongst the option figures which has the same characteristics as the two Problem figures have.



Problem Figures

Options :

1. ✖



2. ✖



3. ✔



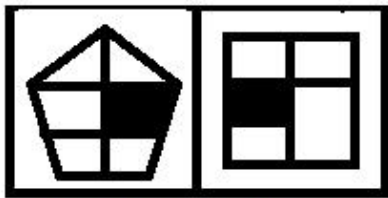
4. ✖



Question Number : 6 Question Id : 5861806508 Question Type : MCQ Option Shuffling : Yes


Correct Marks : 1 Wrong Marks : 0.25

निम्न वैकल्पिक आकृतियों में से वह आकृति चुनें जिसके अभिलक्षण दो समस्या आकृतियों के समान हैं।



Problem Figures

Options :



1. ✘



2. ✘



3. ✔



4. ✘

Question Number : 7 Question Id : 5861806509 Question Type : MCQ Option Shuffling : Yes

Correct Marks : 1 Wrong Marks : 0.25

Three of the given four word pairs are similar in a certain manner while one is different. Choose the odd one out.

Options :

1. ✘ Haematology : Blood

2. ✘ Cytology : Cells

3. ✘ Craniology : Skull

#### 4. ✓ Pedology : Soil

Question Number : 7 Question Id : 5861806509 Question Type : MCQ Option Shuffling : Yes

Correct Marks : 1 Wrong Marks : 0.25

चार प्रदत्त शब्द युग्मों में से तीन एक तरीके से समान हैं, जबकि उनमें से एक अलग है। निम्न विकल्पों में से विषम चुनें।

Options :

1. ✗ हिमेटोलॉजी : ब्लड

2. ✗ साइटॉलॉजी : सेल्स

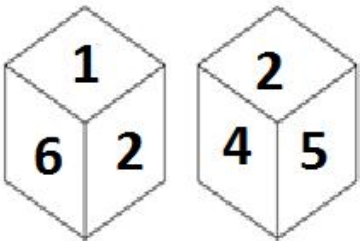
3. ✗ क्रेनियोलॉजी : स्कल

4. ✓ पेडोलॉजी : साँड़ल

Question Number : 8 Question Id : 5861806510 Question Type : MCQ Option Shuffling : Yes

Correct Marks : 1 Wrong Marks : 0.25

Two different positions of the same dice are shown below. Which symbol is on the face opposite the face showing '1'?



Options :

1. ✗ 1

2. ✗ 2

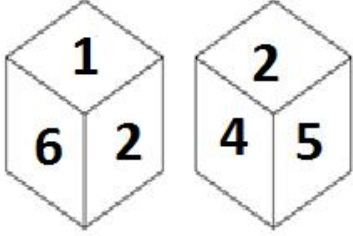
3. ✓ 4

4. ✖ 5

Question Number : 8 Question Id : 5861806510 Question Type : MCQ Option Shuffling : Yes

Correct Marks : 1 Wrong Marks : 0.25

नीचे एक ही पासे की दो अलग-अलग स्थितियाँ दी गई हैं। '1' दिखा रहे फलक के विरुद्ध वाले फलक पर कौन सी संख्या है?



Options :

1. ✖ 1

2. ✖ 2

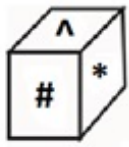
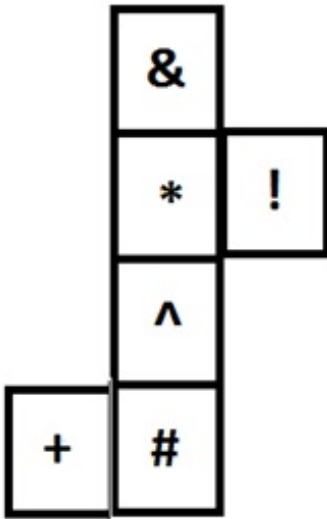
3. ✔ 4

4. ✖ 5

Question Number : 9 Question Id : 5861806511 Question Type : MCQ Option Shuffling : Yes

Correct Marks : 1 Wrong Marks : 0.25

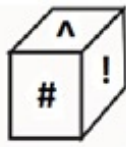
Which of the following patterns of the dices can be formed when the sheet given below is folded?



1



2



3



4

Options :

1. ✘ Only 1 and 3

2. ✘ Only 2 and 4

3. ✔ Only 2, and 3

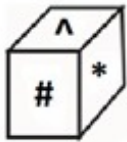
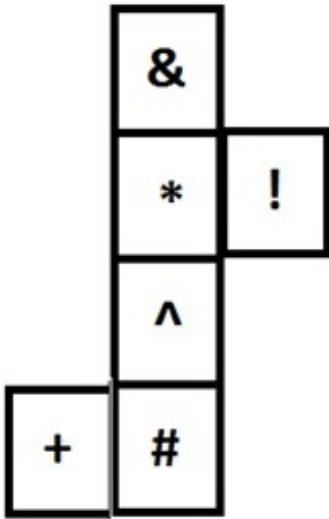
4. ✘ All 1, 2, 3 and 4

Question Number : 9 Question Id : 5861806511 Question Type : MCQ Option Shuffling : Yes

Correct Marks : 1 Wrong Marks : 0.25



जब प्रदत्त शीट को फ़ोल्ड किया जाता है, तब पासे के पैटर्नों में से कौन सा पैटर्न बन सकता है?



1



2



3



4

Options :

1. ✘ केवल 1 और 3

2. ✘ केवल 2 और 4

3. ✔ केवल 2 और 3

4. ✘ सभी 1, 2, 3 और 4

Question Number : 10 Question Id : 5861806512 Question Type : MCQ Option Shuffling : Yes

Correct Marks : 1 Wrong Marks : 0.25

Arbuda starts walking from her home and walks 78 m towards West. From there, she turns right and walks 22 m. Then she turns right and walks 32 m. Then she turns right and walks 41 m. She again turns right and walks 34 m. She finally turns left and walks 41 m. What is the shortest distance between Arbuda's current position and her home?

Options :

1. ✖ 80 m

2. ✔ 100 m

3. ✖ 120 m

4. ✖ 140 m

Question Number : 10 Question Id : 5861806512 Question Type : MCQ Option Shuffling : Yes

Correct Marks : 1 Wrong Marks : 0.25

अर्बुदा अपने घर से यात्रा शुरू करती है और 78 m पश्चिम की ओर चलती है। वहाँ से वह दाईं ओर मुड़ती है और 22 m चलती है। फिर वह दाईं ओर मुड़ती है और 32 m चलती है। फिर वह दाईं ओर मुड़ती है और 41 m चलती है। वह फिर से दाईं ओर मुड़ती है और 34 m चलती है। अंत में वह बाईं ओर मुड़ती है और 41 m चलती है। अर्बुदा की मौजूदा स्थिति और उसके घर के बीच की अल्पतम दूरी ज्ञात करें।

Options :

1. ✖ 80 m

2. ✔ 100 m

3. ✖ 120 m

4. ✖ 140 m

Question Number : 11 Question Id : 5861806513 Question Type : MCQ Option Shuffling : Yes

Correct Marks : 1 Wrong Marks : 0.25

Which number will replace the question mark in the given matrix?

54	7	4	99
62	8	7	119
55	11	6	?

Options :

1. ✖ 168

2. ✖ 164

3. ✔ 170

4. ✖ 172

Question Number : 11 Question Id : 5861806513 Question Type : MCQ Option Shuffling : Yes

Correct Marks : 1 Wrong Marks : 0.25

प्रदत्त आव्यूह में प्रश्न चिह्न के स्थान पर कौन सी संख्या आएगी?

54	7	4	99
62	8	7	119
55	11	6	?

Options :

1. ✖ 168

2. ✖ 164

3. ✓ 170

4. ✗ 172

Question Number : 12 Question Id : 5861806514 Question Type : MCQ Option Shuffling : Yes

Correct Marks : 1 Wrong Marks : 0.25

Eight friends K, L, M, N, O, P, Q and R are sitting around a circular table at equal distance from each other. K is exactly opposite to O. L is sitting between M and P. P is facing N who is to immediate right of K. M and Q are facing each other. Which of the following statement is NOT correct?

Options :

1. ✗ L is facing R.

2. ✗ K is sitting between M and N.

3. ✗ O is sitting between P and Q.

4. ✓ L is third to the left of K.

Question Number : 12 Question Id : 5861806514 Question Type : MCQ Option Shuffling : Yes

Correct Marks : 1 Wrong Marks : 0.25

आठ दोस्त K, L, M, N, O, P, Q और R एक गोल मेज़ के इर्द - गिर्द एक दूसरे से समान दूरी पर बैठे हैं। K, O के बिल्कुल सामने बैठा है। L, M और P के बीच में बैठा है। P, N के सामने बैठा है, N, K के बिल्कुल दाईं ओर है। M और Q एक दूसरे के सामने बैठे हैं।

निम्न में से कौन सा कथन सही नहीं है?

Options :

1. ✗ L, R के सामने बैठा है।

2. ✗ K, M और N के बीच बैठा है।

3. ✖ O, P और Q के बीच बैठा है।

4. ✔ L, K के बाईं ओर तीसरे स्थान पर है।

Question Number : 13 Question Id : 5861806515 Question Type : MCQ Option Shuffling : Yes

Correct Marks : 1 Wrong Marks : 0.25

Eight persons P, Q, R, S, T, U, V and W are sitting around a circular table at equal distance from each other facing the centre. If P is facing North - east then which direction is S facing?

Note: For this question, discrepancy is found in question/answer. So, this question is ignored for all candidates.

Options :

1. South - east

2. South

3. North - west

4. North

Question Number : 13 Question Id : 5861806515 Question Type : MCQ Option Shuffling : Yes

Correct Marks : 1 Wrong Marks : 0.25

आठ व्यक्ति P, Q, R, S, T, U, V और W एक गोल मेज़ के इर्द - गिर्द केंद्र की तरफ देखते हुए एक दूसरे से समान दूरी पर बैठे हैं। यदि P उत्तर - पूर्व दिशा में है, तो S किस दिशा में है?

Note: For this question, discrepancy is found in question/answer. So, this question is ignored for all candidates.

Options :

1. दक्षिण - पूर्व

2. दक्षिण

3. उत्तर - पश्चिम

4. उत्तर

Question Number : 14 Question Id : 5861806516 Question Type : MCQ Option Shuffling : Yes

Correct Marks : 1 Wrong Marks : 0.25

Five teachers Arti, Lubna, Pratiksha, Rajesh and Vimal teach one of five subjects i.e. Physics, Chemistry, Botany, Zoology and Mathematics. Rajesh does not teach Chemistry and Zoology. Vimal does not teach Physics and Zoology. Pratiksha does not teach Zoology and Physics. Lubna teaches Botany. Which subject is taught by Arti?

Options :

1. ✓ Zoology

2. ✗ Mathematics

3. ✗ Physics

4. ✗ Chemistry

Question Number : 14 Question Id : 5861806516 Question Type : MCQ Option Shuffling : Yes

Correct Marks : 1 Wrong Marks : 0.25

पाँच शिक्षक आरती, लुबना, प्रतीक्षा, राजेश और विमल पाँच विषयों में से एक विषय पढ़ाते हैं, भौतिकी विज्ञान, रसायन विज्ञान, वनस्पति विज्ञान, जीवविज्ञान और गणित। राजेश रसायन विज्ञान और जीवविज्ञान नहीं पढ़ाता है। विमल भौतिकी विज्ञान और जीवविज्ञान नहीं पढ़ाता है। प्रतीक्षा जीवविज्ञान और भौतिकी विज्ञान नहीं पढ़ाता है। लुबना वनस्पति विज्ञान पढ़ाती है। आरती निम्न में से कौन सा विषय पढ़ाती है?

Options :

1. ✓ जीवविज्ञान

2. ✗ गणित

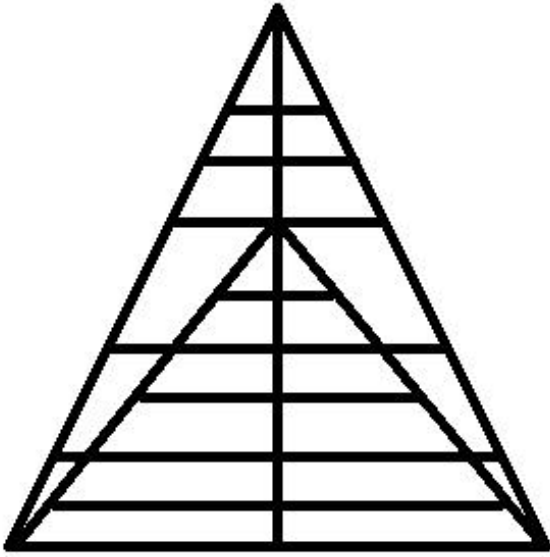


3. ✖ भौतिकी विज्ञान

4. ✖ रसायन विज्ञान

Question Number : 15 Question Id : 5861806517 Question Type : MCQ Option Shuffling : Yes  
Correct Marks : 1 Wrong Marks : 0.25

How many triangles are there in the figure given below?



Options :

1. ✖ 42

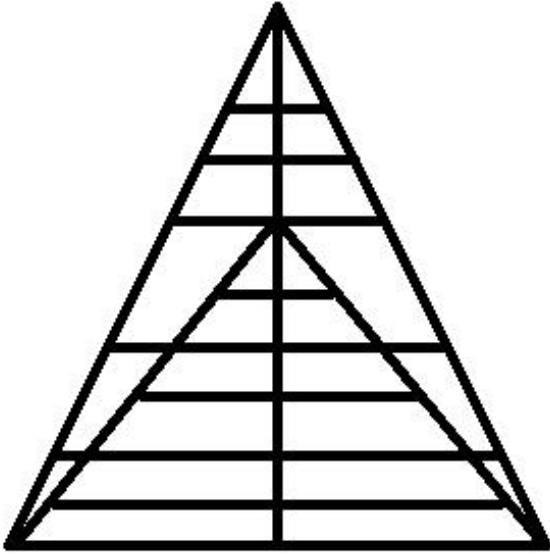
2. ✖ 44

3. ✔ 45

4. ✖ 46

Question Number : 15 Question Id : 5861806517 Question Type : MCQ Option Shuffling : Yes  
Correct Marks : 1 Wrong Marks : 0.25

नीचे दी गई आकृति में कितने त्रिभुज हैं?



Options :

1. ✘ 42

2. ✘ 44

3. ✔ 45

4. ✘ 46

Question Number : 16 Question Id : 5861806518 Question Type : MCQ Option Shuffling : Yes  
Correct Marks : 1 Wrong Marks : 0.25



Four statements are given, followed by three conclusions. The symbols used in them have meanings as follows:

$P @ Q$  means P is neither smaller than nor greater than Q.

$P \# Q$  means P is neither greater than nor equal to Q.

$P \& Q$  means P is neither smaller than nor equal to Q.

$P \% Q$  means P is not greater than Q.

$P \$ Q$  means P is not smaller than Q.

Now read the following statements and decide which of the conclusions is / are true.

**Statements:**

$D @ E$

$D \# A$

$A \# B$

$C \& D$

**Conclusions:**

I.  $D \$ B$

II.  $B \% D$

III.  $C \& E$

**Options :**

1. ✘ Only conclusion I is true.

2. ✘ Only conclusion II is true.

3. ✔ Only conclusion III is true.

4. ✘ Only I and III are true.

Question Number : 16 Question Id : 5861806518 Question Type : MCQ Option Shuffling : Yes

Correct Marks : 1 Wrong Marks : 0.25

चार कथन दिए गए हैं और उनके बाद तीन निष्कर्ष भी दिए गए हैं। निम्न प्रयुक्त प्रतीकों का अर्थ निम्नानुसार है:

$P @ Q$  का अर्थ है कि  $P$  न तो  $Q$  से छोटा है और न बड़ा है।

$P \# Q$  का अर्थ है कि  $P$  न तो  $Q$  से बड़ा है और न बराबर है।

$P \& Q$  का अर्थ है कि  $P$  न तो  $Q$  से छोटा है और न बराबर है।

$P \% Q$  का अर्थ है कि  $P$ ,  $Q$  से बड़ा नहीं है।

$P \$ Q$  का अर्थ है कि  $P$ ,  $Q$  से छोटा नहीं है।

अब निम्न कथनों को पढ़ें और तय करें कि निम्न में से कौन सा/से निष्कर्ष सही है/हैं।

कथन:

$D @ E$

$D \# A$

$A \# B$

$C \& D$

निष्कर्ष:

I.  $D \$ B$

II.  $B \% D$

III.  $C \& E$

Options :

1. ✘ केवल निष्कर्ष I सही है।

2. ✘ केवल निष्कर्ष II सही है।

3. ✔ केवल निष्कर्ष III सही है।

4. ✘ केवल निष्कर्ष I और III सही है।

Question Number : 17 Question Id : 5861806519 Question Type : MCQ Option Shuffling : Yes

Correct Marks : 1 Wrong Marks : 0.25

Three statements are given, followed by four conclusions numbered I to IV. Assuming the statements to be true even if they seem to be at variance with commonly known facts, decide which of the conclusions logically follow (s) from the given statements.

**Statements:**

All cycles are vehicles.

Some vehicles are dustbins.

All packets are vehicles.

**Conclusions:**

I. Some dustbins are cycles.

II. Some cycles are packets.

III. Some vehicles are cycles.

IV. No cycle is packet.

**Options :**

1. ✘ Only conclusion II and III follow.

2. ✘ Either conclusion II or IV follows.

3. ✘ Conclusion III and either I or IV follows.

4. ✔ Conclusion III and either II or IV follows.

Question Number : 17 Question Id : 5861806519 Question Type : MCQ Option Shuffling : Yes

Correct Marks : 1 Wrong Marks : 0.25

तीन कथन दिए हैं और उसके बाद I से IV अंकित चार निष्कर्ष भी दिए गए हैं। मान लें कि कथन सही हैं, भले ही वास्तविक तथ्यों से परे हैं, तय करें कि कौन सा निष्कर्ष तार्किक रूप से प्रदत्त कथन का अनुसरण करता है।

**कथन:**

सभी साइकिल वाहन हैं।

कुछ वाहन कूड़ादान हैं।

सभी पैकेट वाहन हैं।

**निष्कर्ष:**

- I. कुछ कूड़ादान साइकिल हैं।
- II. कुछ साइकिल पैकेट हैं।
- III. कुछ वाहन साइकिल हैं।
- IV. कोई साइकिल पैकेट नहीं हैं।

**Options :**

1. ✘ केवल निष्कर्ष II और III अनुसरण करते हैं।
2. ✘ या तो निष्कर्ष II या फिर निष्कर्ष IV अनुसरण करता है।
3. ✘ निष्कर्ष III और या तो निष्कर्ष I या IV अनुसरण करता है।
4. ✔ निष्कर्ष III और या तो निष्कर्ष II या IV अनुसरण करता है।

Question Number : 18 Question Id : 5861806520 Question Type : MCQ Option Shuffling : Yes  
Correct Marks : 1 Wrong Marks : 0.25

A team of six persons is to be selected from among five doctors, A, B, C, D and E, and five engineers, P, Q, R, S and T, such that there are at most two engineers in the team and it meets the following criteria:

- i. A and D must be together.
- ii. B and R cannot be together.
- iii. P and S cannot be together.
- iv. Q and R must be together.
- v. B and P must be together.

Which of the following teams can be formed?

1. BACDQR
2. PBSCDA
3. APEDBT
4. PDABEC

Options :

1. ✖ 1 and 3

2. ✔ 3 and 4

3. ✖ Only 3

4. ✖ Only 4

Question Number : 18 Question Id : 5861806520 Question Type : MCQ Option Shuffling : Yes  
Correct Marks : 1 Wrong Marks : 0.25

पाँच डॉक्टरों A, B, C, D और E और पाँच इंजीनियरों P, Q, R, S और T में से कुछ इस प्रकार से छह की टीम चुनी जानी है कि टीम में अधिक से अधिक दो इंजीनियर हों और निम्न मानदंड पूरे करती हो:

- i. A और D एक साथ होने चाहिए।
- ii. B और R एक साथ नहीं आ सकते।
- iii. P और S एक साथ नहीं आ सकते।
- iv. Q और R एक साथ होने चाहिए।
- v. B और P एक साथ होने चाहिए।

निम्न में से कौन सा विकल्प एक टीम बन सकती है?

1. BACDQR
2. PBSCDA
3. APEDBT
4. PDABEC

Options :

1. ✘ 1 और 3

2. ✔ 3 और 4

3. ✘ केवल 3

4. ✘ केवल 4

Question Number : 19 Question Id : 5861806521 Question Type : MCQ Option Shuffling : Yes

Correct Marks : 1 Wrong Marks : 0.25



The criteria for selecting a candidate for the post of 'Lecturer - Economics' are as follow.

The candidate:

1. must have completed Ph.D. in Economics.
2. must have secured at least 75% marks in M.A. Economics
3. must not be less than 28 years and not more than 45 years of age as on 1 January 2019.

However, if a candidate fulfils all the above criteria EXCEPT:

- a. no. 1, but has passed UGC-NET in Economics, his/her case is to be referred to the Principal.
- b. no. 3, but has obtained more than 90% marks in M.A. Economics, his/her case is to be referred to the Director.

Based on the criteria given and without assuming any additional information, you have to take a decision for the following candidate.

Dr. Yuvraj has passed UGC-NET in Economics and is pursuing Ph.D. in Economics. He was born on 22 March 1986. He has obtained 90% marks in M.A. Economics.

Options :

1. ✘ He is to be selected.
2. ✘ He is not to be selected.
3. ✔ His case is to be referred to the Principal.
4. ✘ His case is to be referred to the Director.

Question Number : 19 Question Id : 5861806521 Question Type : MCQ Option Shuffling : Yes

Correct Marks : 1 Wrong Marks : 0.25

'लेक्चरर - अर्थशास्त्र' के पद के लिए उम्मीदवार चुनने के लिए मानदंड निम्नानुसार हैं:

उम्मीदवार:

1. ने अर्थशास्त्र में पीएच.डी पूरी की होनी चाहिए।
2. अर्थशास्त्र में एम.ए. होना चाहिए और कम से कम 75% अंक होने चाहिए।
3. 1 जनवरी 2019 तक उसकी उम्र 28 वर्ष से अधिक और 45 वर्ष से कम होनी चाहिए।

हालाँकि, यदि उम्मीदवार उक्त सभी मानदंड पूरे करता है, सिवाए:

- a. नं. 1, लेकिन उसने अर्थशास्त्र में यू.जी.सी.-नेट पास किया है, तो उसका मामला प्रिंसिपल को भेजा जाएगा।
- b. नं. 3, लेकिन उसने एम.ए. अर्थशास्त्र में 90% से अधिक अंक प्राप्त किए हैं, तो उसका मामला निदेशक को भेजा जाएगा।

प्रदत्त मानदंडों के आधार पर और किसी भी अतिरिक्त जानकारी पर गौर किए बिना, आपको निम्न उम्मीदवार के लिए फैसला लेना है।

डॉ. युवराज ने अर्थशास्त्र में यू.जी.सी.-नेट पास किया है और अर्थशास्त्र में पीएच.डी कर रहा है। उसका जन्म 22 मार्च 1986 को हुआ था। उसके एम.ए. अर्थशास्त्र में 90% अंक हैं।

Options :

1. ✘ उसे चुन लिया जाएगा।
2. ✘ उसे नहीं चुना जाएगा।
3. ✔ उसका मामला प्रिंसिपल को भेज दिया जाएगा।
4. ✘ उसका मामला निदेशक को भेज दिया जाएगा।

Question Number : 20 Question Id : 5861806522 Question Type : MCQ Option Shuffling : Yes

Correct Marks : 1 Wrong Marks : 0.25



The criteria for selecting a candidate for the post of 'Doctors' are as follow.

The candidate:

1. must have completed M.D. (Medicine) with more than 75% marks.
2. must have secured at least 85% marks in MBBS.
3. must not be less than 32 years and not more than 45 years of age as on 1 January 2019.

However, if a candidate fulfils all the above criteria EXCEPT:

- a. no. 2, but has got more than 90% marks in M.D. Medicine, his / her case is to be referred to the Head (HR).
- b. no. 3, but has obtained more than 90% marks in both MBBS and MD (Medicine), his / her case is to be referred to the Administrative Head.

Based on the criteria given and without assuming any additional information, you have to a take a decision for the following candidate.

Dr. Arpit has obtained 91% marks in both MBBS and M.D. (Medicine). He was born on 14 January 1979.

Options :

1. ✓ He is to be selected.
2. ✗ He is not to be selected.
3. ✗ His case is to be referred to the Head (HR).
4. ✗ His case is to be referred to the Administrative Head.

Question Number : 20 Question Id : 5861806522 Question Type : MCQ Option Shuffling : Yes  
Correct Marks : 1 Wrong Marks : 0.25

'डॉक्टर' के पद के लिए उम्मीदवार चुनने के लिए मानदंड निम्नानुसार हैं।

उम्मीदवार:

1. एम.डी. (मेडिसिन) होना चाहिए और 75% से अधिक अंक होने चाहिए।
2. एम.बी.बी.एस. में कम से कम 85% अंक होने चाहिए।
3. 1 जनवरी 2019 तक उसकी उम्र 32 वर्ष से अधिक और 45 वर्ष से कम होनी चाहिए।

हालाँकि, यदि उम्मीदवार उक्त सभी मानदंड पूरे करता है, सिवाए:

- a. नं. 2, लेकिन उसने एम.डी. (मेडिसिन) में 90% से अधिक अंक हासिल किए हैं, तो उसका मामला प्रमुख (एच.आर.) को भेजा जाएगा।
- b. नं. 3, लेकिन उसने एम.बी.बी.एस. और एम.डी. (मेडिसिन) दोनों में 90% अंक हासिल किए हैं, उसका मामला प्रशासनिक प्रमुख को भेजा जाएगा।

प्रदत्त मानदंडों के आधार पर और किसी भी अतिरिक्त जानकारी पर गौर किए बिना, आपको निम्न उम्मीदवार के लिए फैसला लेना है।

डॉ. अर्पित ने एम.बी.बी.एस. और एम.डी. (मेडिसिन) दोनों में 91% अंक हासिल किए हैं। उसका जन्म 14 जनवरी 1979 को हुआ है।

Options :

1. ✓ उसे चुन लिया जाएगा।
2. ✗ उसे नहीं चुना जाएगा।
3. ✗ उसका मामला प्रमुख (एच.आर.) को भेज दिया जाएगा।
4. ✗ उसका मामला प्रशासनिक प्रमुख को भेज दिया जाएगा।

## Mental Ability2

Group Number :	2
Group Id :	586180313
Group Maximum Duration :	0
Group Minimum Duration :	0
Show Attended Group? :	No
Edit Attended Group? :	No
Break time:	0
Group Marks:	20
Is this Group for Examiner?:	No

Revisit allowed for group Instructions? :	Yes
Maximum Instruction Time:	0
Minimum Instruction Time:	0

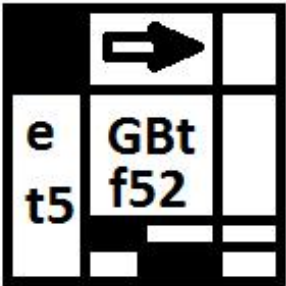
## Mental Ability2

Section Id :	586180317
Section Number :	1
Section type :	Online
Mandatory or Optional:	Mandatory
Number of Questions:	20
Number of Questions to be attempted:	20
Section Marks:	20

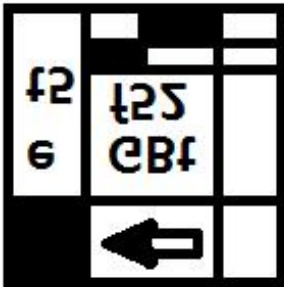
Sub-Section Number:	1
Sub-Section Id:	586180440
Question Shuffling Allowed :	Yes

Question Number : 21 Question Id : 5861806523 Question Type : MCQ Option Shuffling : Yes  
 Correct Marks : 1 Wrong Marks : 0.25

Which of the option figures represents the correct water image of the figure given below?

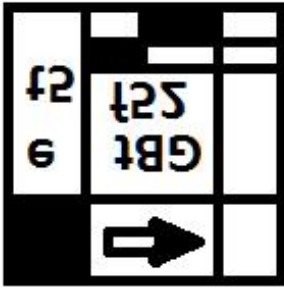


Options :

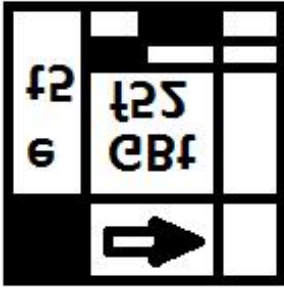


1. ✘

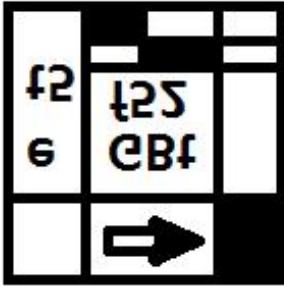
2. ✖



3. ✔



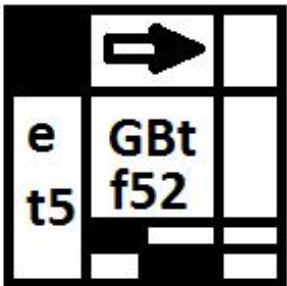
4. ✖



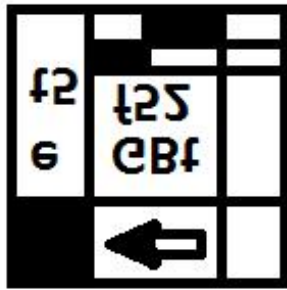
Question Number : 21 Question Id : 5861806523 Question Type : MCQ Option Shuffling : Yes

Correct Marks : 1 Wrong Marks : 0.25

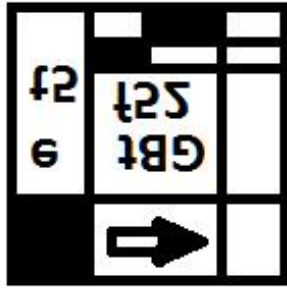
निम्न आकृतियों में से कौन सी आकृति प्रदत्त आकृति की जल प्रतिबिंब दर्शाती है?



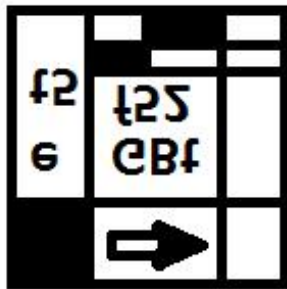
Options :



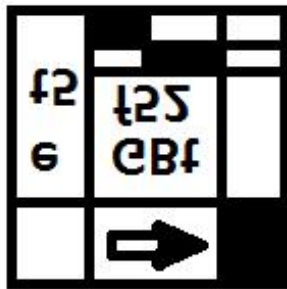
1. ✘



2. ✘



3. ✔



4. ✘

Question Number : 22 Question Id : 5861806524 Question Type : MCQ Option Shuffling : Yes

Correct Marks : 1 Wrong Marks : 0.25

Select the correct mirror image of the given cluster when a vertical mirror is placed on the right of the word.

**tGuREdfhN98KScd**

Options :



1. ✘ tGnREdfhN98KScd

2. ✘ bɔ2K80NfhEЯuGt

3. ✘ bɔ2K86NfhEЯuGt

4. ✔ bɔ2K80NfhEЯuGt

Question Number : 22 Question Id : 5861806524 Question Type : MCQ Option Shuffling : Yes

Correct Marks : 1 Wrong Marks : 0.25

प्रदत्त समूह की सही दर्पण छवि चुनें, यदि शब्द के दाहिने ओर एक ऊर्ध्वाधर दर्पण रखा जाता है।

tGuREdfhN98KScd

Options :

1. ✘ tGnREdfhN98KScd

2. ✘ bɔ2K80NfhEЯuGt

3. ✘ bɔ2K86NfhEЯuGt

4. ✔ bɔ2K80NfhEЯuGt

Question Number : 23 Question Id : 5861806525 Question Type : MCQ Option Shuffling : Yes

Correct Marks : 1 Wrong Marks : 0.25

Eight symbol - number clusters are given below three of which are same. Find the three clusters that are exactly same.

(A) # 4 % 4 3 @ 8 ^ 7 \* % \$ 3 4 % 4

(B) # 4 % 4 3 @ 7 ^ 8 \* % \$ 3 4 % 4

(C) # 4 % 4 3 @ 7 ^ 7 \* % \$ 3 4 % 4

(D) # 4 % 4 3 @ 7 ^ 7 \* % \$ 3 4 % 4

(E) # 4 % 4 3 @ 7 ^ 7 \* % # 3 4 % 4

(F) # 4 % 4 3 @ 7 ^ 7 \* % \$ 3 5 % 4

(G) # 4 % 5 3 @ 7 ^ 7 \* % \$ 3 4 % 4

(H) # 4 % 4 3 @ 7 ^ 7 \* % \$ 3 4 % 4

Options :

1. ✘ A, C and E

2. ✘ B, C and E

3. ✔ C, D and H

4. ✘ C, F and H

Question Number : 23 Question Id : 5861806525 Question Type : MCQ Option Shuffling : Yes

Correct Marks : 1 Wrong Marks : 0.25

नीचे आठ प्रतीक - संख्या के समूह दिए गए हैं, इनमें से तीन एक समान हैं। बिल्कुल समान तीन समूह जात करें।

- (A) # 4 % 4 3 @ 8 ^ 7 \* % \$ 3 4 % 4  
 (B) # 4 % 4 3 @ 7 ^ 8 \* % \$ 3 4 % 4  
 (C) # 4 % 4 3 @ 7 ^ 7 \* % \$ 3 4 % 4  
 (D) # 4 % 4 3 @ 7 ^ 7 \* % \$ 3 4 % 4  
 (E) # 4 % 4 3 @ 7 ^ 7 \* % # 3 4 % 4  
 (F) # 4 % 4 3 @ 7 ^ 7 \* % \$ 3 5 % 4  
 (G) # 4 % 5 3 @ 7 ^ 7 \* % \$ 3 4 % 4  
 (H) # 4 % 4 3 @ 7 ^ 7 \* % \$ 3 4 % 4

Options :

1. ✘ A, C और E

2. ✘ B, C और E

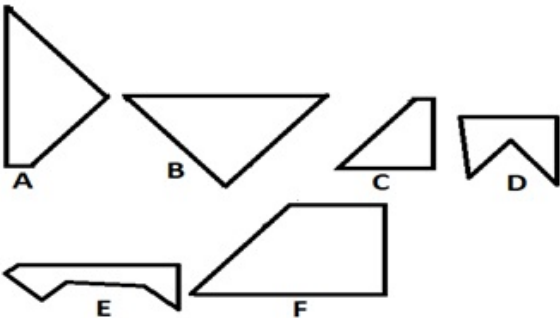
3. ✔ C, D और H

4. ✘ C, F और H

Question Number : 24 Question Id : 5861806526 Question Type : MCQ Option Shuffling : Yes

Correct Marks : 1 Wrong Marks : 0.25

Which of the given figures, when fitted into each other would form a square? Select an appropriate combination from the given options.



Options :



1. ✖ BCEF

2. ✖ BCDF

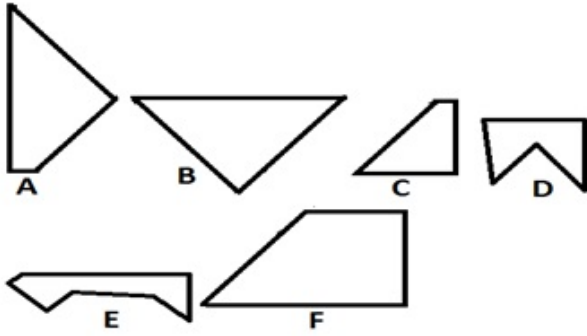
3. ✔ ABCF

4. ✖ ABDF

Question Number : 24 Question Id : 5861806526 Question Type : MCQ Option Shuffling : Yes

Correct Marks : 1 Wrong Marks : 0.25

निम्न में से किस आकृति को जब एक दूसरे में फिट किया जाता है, तो एक वर्ग बनेगा? प्रदत्त विकल्पों में से समुचित संयोजन चुनें।



Options :

1. ✖ BCEF

2. ✖ BCDF

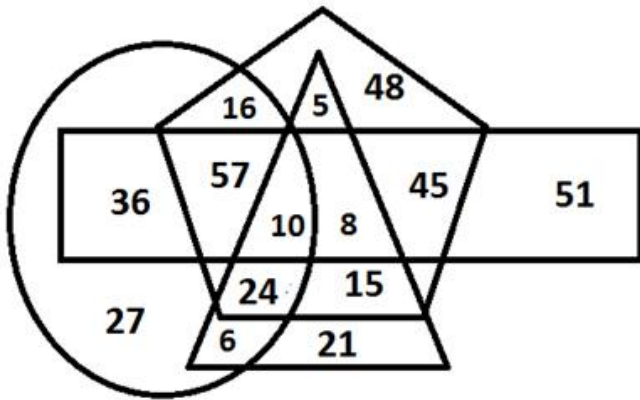
3. ✔ ABCF

4. ✖ ABDF

Question Number : 25 Question Id : 5861806527 Question Type : MCQ Option Shuffling : Yes

Correct Marks : 1 Wrong Marks : 0.25

In the diagram given below, the pentagon stands for 'doctors', the triangle stands for 'Salaried persons', the rectangle stands for 'women', and the oval stands for 'morning walkers'. The numbers in different segments represent the number of persons.



Which of following statement is NOT correct?

Options :

1. ✖

The number of doctors who are morning walkers and salaries persons but are not women is 24.

2. ✖ The number of women doctors who are salaried persons but are not morning walkers is 8.

3. ✖

The number of doctors who are salaried persons but are neither women nor morning walkers is 20.

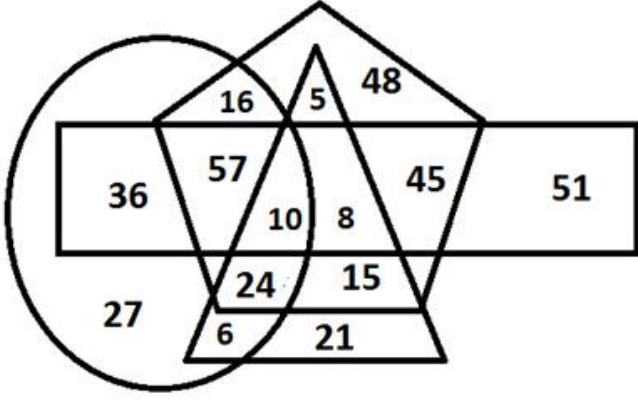
4. ✔

The number of salaried persons who are morning walkers but are neither doctors nor women is 24.

Question Number : 25 Question Id : 5861806527 Question Type : MCQ Option Shuffling : Yes

Correct Marks : 1 Wrong Marks : 0.25

नीचे प्रदत्त आरेख में, पंचकोण 'डॉक्टरों' को दर्शाता है, त्रिभुज 'वेतन भोगी' को दर्शाता है, आयत 'महिला' को दर्शाता है और अंडाकार 'सुबह की सैर करनेवालों' को दर्शाता है। अलग - अलग खंडों की दी गई संख्याएँ व्यक्तियों की संख्या को दर्शाती हैं।



निम्न में से कौन सा कथन सही नहीं है?

Options :

1. ✖

ऐसे डॉक्टरों की संख्या 24 है जो सुबह की सैर करते हैं और वेतन भोगी हैं लेकिन महिला नहीं हैं।

2. ✖

ऐसी महिला डॉक्टरों की संख्या 8 है जो वेतन भोगी हैं लेकिन सुबह की सैर नहीं करती हैं।

3. ✖

ऐसे वेतन भोगी डॉक्टरों की संख्या 20 है जो न तो महिला हैं और न ही सुबह की सैर करते हैं।

4. ✔

ऐसे वेतन भोगी व्यक्तियों की संख्या 24 है जो सुबह की सैर करते हैं लेकिन वो न तो डॉक्टर हैं और न ही महिला हैं।

Question Number : 26 Question Id : 5861806528 Question Type : MCQ Option Shuffling : Yes

Correct Marks : 1 Wrong Marks : 0.25

Select the option figure which contains figure X embedded in it as its part.

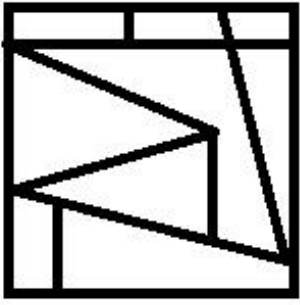
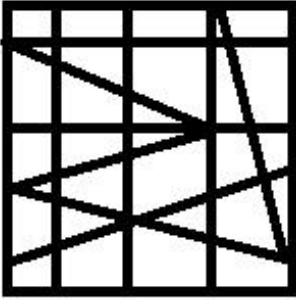


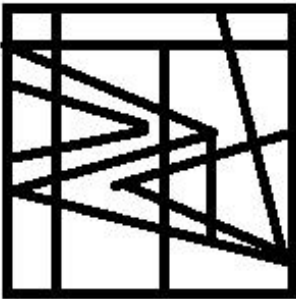
Figure-X

Options :

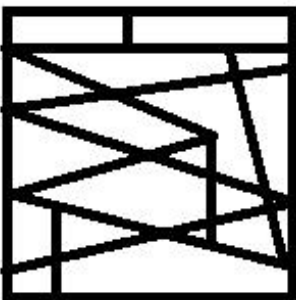
1. ✓



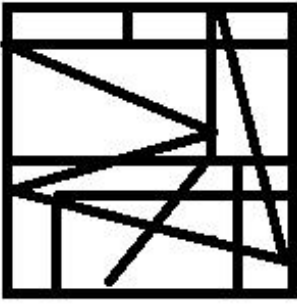
2. ✖



3. ✖



4. ✖



Question Number : 26 Question Id : 5861806528 Question Type : MCQ Option Shuffling : Yes

Correct Marks : 1 Wrong Marks : 0.25

निम्न में से वह आकृति चुनें जिसमें आकृति X इसका एक भाग है।

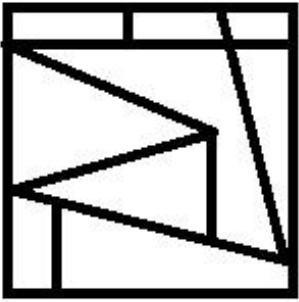
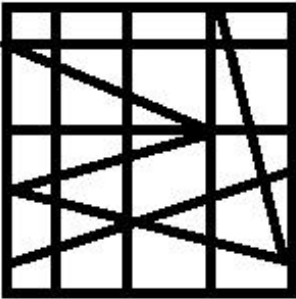


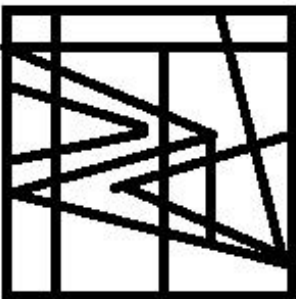
Figure-X

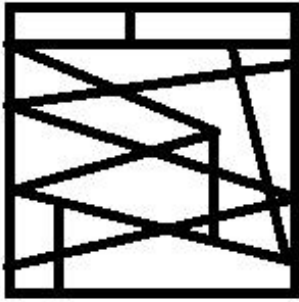
Options :

1. ✔

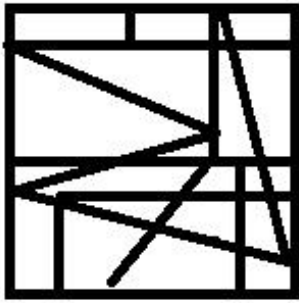


2. ✖





3. ✘

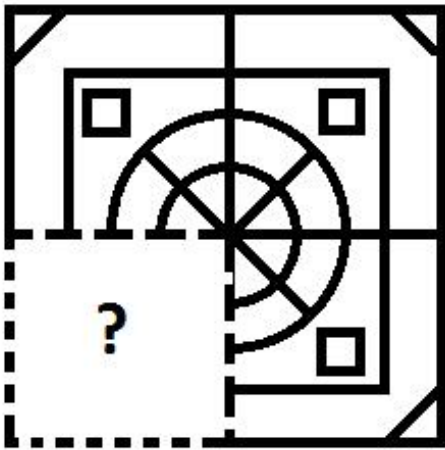


4. ✘

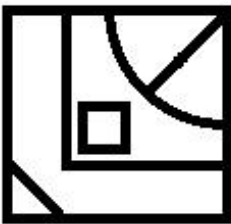
Question Number : 27 Question Id : 5861806529 Question Type : MCQ Option Shuffling : Yes

Correct Marks : 1 Wrong Marks : 0.25

Which of the following option figure will complete the pattern in the figure given below?

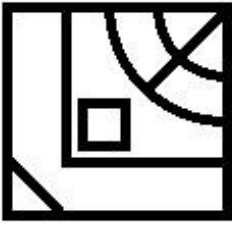


Options :



1. ✘

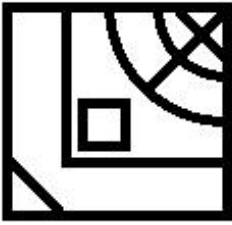
2. ✓



3. ✗

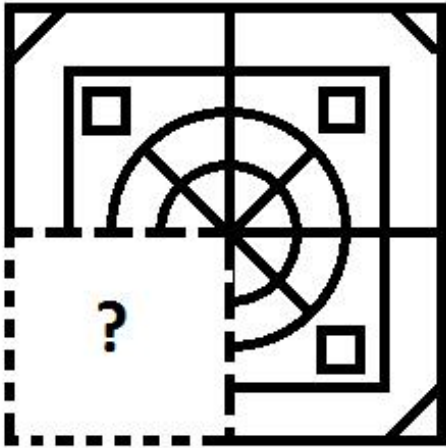


4. ✗



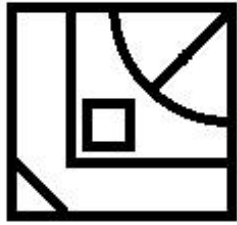
Question Number : 27 Question Id : 5861806529 Question Type : MCQ Option Shuffling : Yes Correct Marks : 1 Wrong Marks : 0.25

निम्न में से कौन सी आकृति नीचे प्रदत्त आकृति पैटर्न को पूरा करेगी?



Options :





1. ✘



2. ✔



3. ✘



4. ✘

Question Number : 28 Question Id : 5861806530 Question Type : MCQ Option Shuffling : Yes

Correct Marks : 1 Wrong Marks : 0.25

Mala is daughter of Lata. Vijay is father of Sumit. Divya is daughter of Rashmi. Arti is Sumit's mother. Urja's mother is married to Sumit. Divya is Vijay's only son's wife. How is Rashmi related to Urja?

Options :

1. ✘ Mother

2. ✔ Maternal grandmother

3. ✖ Paternal grandmother

4. ✖ Granddaughter

Question Number : 28 Question Id : 5861806530 Question Type : MCQ Option Shuffling : Yes

Correct Marks : 1 Wrong Marks : 0.25

माला, लता की बेटी है। विजय, सुमित का पिता है। दिव्या, रश्मि की बेटी है। आरती, सुमित की माँ है। उर्जा की माँ सुमित की पत्नी है। दिव्या, विजय के इकलौते बेटे की पत्नी है। रश्मि का उर्जा के साथ क्या रिश्ता है?

Options :

1. ✖ माँ

2. ✔ नानी

3. ✖ दादी

4. ✖ पोती

Question Number : 29 Question Id : 5861806531 Question Type : MCQ Option Shuffling : Yes

Correct Marks : 1 Wrong Marks : 0.25

A + B means 'A is daughter of B'

A - B means 'A is sister of B'

A × B means 'A is mother of B'

A ÷ B means 'A is son of B'

A @ B means 'A is father of B'

If  $K @ O @ P - U \div L \times M @ Q - N + R$ , then which of the following statement is NOT correct?

Note: For this question, discrepancy is found in question/answer. So, this question is ignored for all candidates.

Options :

1. L is wife of K.

2. P, U and M are brothers.
3. Q and N are R's daughters.
4. O is paternal grandfather of Q.

Question Number : 29 Question Id : 5861806531 Question Type : MCQ Option Shuffling : Yes  
Correct Marks : 1 Wrong Marks : 0.25

- A + B का अर्थ है 'A, B की बेटी है'  
A - B का अर्थ है 'A, B की बहन है'  
A × B का अर्थ है 'A, B की माँ है'  
A ÷ B का अर्थ है 'A, B का बेटा है'  
A @ B का अर्थ है 'A, B का पिता है'

यदि  $K @ O @ P - U \div L \times M @ Q - N + R$  है, तो निम्न में से कौन सा कथन सही नहीं है?

Note: For this question, discrepancy is found in question/answer. So, this question is ignored for all candidates.

Options :

1. L, K की पत्नी है।
2. P, U और M भाई हैं।
3. Q और N, R की बेटियाँ हैं।
4. O, Q का दादा है।

Question Number : 30 Question Id : 5861806532 Question Type : MCQ Option Shuffling : Yes  
Correct Marks : 1 Wrong Marks : 0.25

A question is given, followed by four statements labelled I to IV, each containing some information. Decide which of the statements is / are sufficient / necessary to answer the question.

**Question:**

How is Ragini related to Kartik?

**Statements:**

- I. Arpita is mother of Kartik.
- II. Aryan is brother of Beena.
- III. Beena is daughter of Ragini.
- IV. Kartik is father of Aryan.

**Options :**

- 1. ✖ Statement I and II together are sufficient.
- 2. ✖ Statement II and III together are sufficient.
- 3. ✖ Statement I, II and IV together are sufficient.
- 4. ✔ Statement II, III and IV together are sufficient.

Question Number : 30 Question Id : 5861806532 Question Type : MCQ Option Shuffling : Yes

Correct Marks : 1 Wrong Marks : 0.25

एक प्रश्न के बाद I से लेकर IV अंकित चार कथन दिए गए हैं, प्रत्येक में कुछ न कुछ जानकारी दी गई है। तय करें कि प्रश्न का उत्तर देने के लिए इनमें से कौन सा/से कथन पर्याप्त/ज़रूरी है/हैं।

**प्रश्न:**

रागिनी का कार्तिक के साथ क्या रिश्ता है?

**कथन:**

- I. अर्पिता, कार्तिक की माँ है।
- II. आर्यन, बीना का भाई है।
- III. बीना, रागिनी की बेटी है।
- IV. कार्तिक, आर्यन का पिता है।

**Options :**

1. ✘ कथन I और II एकसाथ पर्याप्त हैं।
2. ✘ कथन II और III एकसाथ पर्याप्त हैं।
3. ✘ कथन I, II और IV एकसाथ पर्याप्त हैं।
4. ✔ कथन II, III और IV एकसाथ पर्याप्त हैं।

Question Number : 31 Question Id : 5861806533 Question Type : MCQ Option Shuffling : Yes  
Correct Marks : 1 Wrong Marks : 0.25

If 'TABLOID' is coded as 82 in a code language,

how would 'PEACOCK' be coded in the same code language?

Options :

1. ✘ 91
2. ✘ 92
3. ✔ 93
4. ✘ 94

Question Number : 31 Question Id : 5861806533 Question Type : MCQ Option Shuffling : Yes  
Correct Marks : 1 Wrong Marks : 0.25

यदि किसी कोड भाषा में 'TABLOID' को 82 कोड किया गया है, तो उसी कोड भाषा में 'PEACOCK' को क्या कोड किया जाएगा?

Options :

1. ✘ 91

2. ✖ 92

3. ✔ 93

4. ✖ 94

Question Number : 32 Question Id : 5861806534 Question Type : MCQ Option Shuffling : Yes

Correct Marks : 1 Wrong Marks : 0.25

Which of the following pairs of numbers and signs, when their positions are interchanged, will correctly solve the given mathematical equation?

$$228 \div 12 \times 14 + 38 - 57 = 129$$

Options :

1. ✖ 14 and 38,  $\times$  and  $\div$

2. ✖ 57 and 38,  $+$  and  $\div$

3. ✔ 12 and 38,  $+$  and  $-$

4. ✖ 12 and 38,  $\times$  and  $\div$

Question Number : 32 Question Id : 5861806534 Question Type : MCQ Option Shuffling : Yes

Correct Marks : 1 Wrong Marks : 0.25

संख्याओं और चिह्नों के इन युग्मों में से कौन सा युग्म उनकी स्थिति आपस में बदलने पर एक प्रदत्त गणितीय समीकरण को सही से हल करेगा?

$$228 \div 12 \times 14 + 38 - 57 = 129$$

Options :

1. ✖ 14 और 38,  $\times$  और  $\div$



2. ✖ 57 और 38, + और ÷

3. ✔ 12 और 38, + और -

4. ✖ 12 और 38, × और ÷

Question Number : 33 Question Id : 5861806535 Question Type : MCQ Option Shuffling : Yes

Correct Marks : 1 Wrong Marks : 0.25

A total of 360 students take part in one or more of three events literature, music and dance. Only 15% participate in all three events. The number of students who participate in any two and only two events is 20% of the total students. The number of students who participate in dance alone is 28. What is the total number of students who participate in literature alone or music alone?

Options :

1. ✖ 202

2. ✖ 203

3. ✖ 204

4. ✔ 206

Question Number : 33 Question Id : 5861806535 Question Type : MCQ Option Shuffling : Yes

Correct Marks : 1 Wrong Marks : 0.25

कुल 360 छात्र साहित्य, संगीत और नृत्य के तीन कार्यक्रमों में से एक या उससे अधिक में भाग लेते हैं। उनमें से केवल 15% सभी तीन कार्यक्रमों में भाग लेते हैं। किन्हीं दो या केवल दो कार्यक्रमों में भाग लेने वाले छात्रों की संख्या कुल संख्या का 20% है। केवल नृत्य में भाग लेने वाले छात्रों की संख्या 28 है। केवल साहित्य या केवल संगीत के कार्यक्रम में भाग लेने वाले छात्रों की संख्या ज्ञात करें।

Options :

1. ✖ 202



2. ✖ 203

3. ✖ 204

4. ✔ 206

Question Number : 34 Question Id : 5861806536 Question Type : MCQ Option Shuffling : Yes

Correct Marks : 1 Wrong Marks : 0.25

Among five objects A, B, C, D and E; A is five times heavier than D; B is three and a half times heavier than C; D is two times heavier than E. C is thrice as heavy as A. Which of the following the statements is NOT correct?

Options :

1. ✖ A is 10 times heavier than E.

2. ✔ B is 5 times heavier than A.

3. ✖ B is heavier than D.

4. ✖ C is 15 times heavier than D.

Question Number : 34 Question Id : 5861806536 Question Type : MCQ Option Shuffling : Yes

Correct Marks : 1 Wrong Marks : 0.25

पाँच वस्तुओं A, B, C, D और E में से: A, D से पाँच गुना भारी है; B, C से साढ़े तीन गुना भारी है; D, E से दो गुना भारी है। C, A से तीन गुना भारी है। निम्न में से कौन सा कथन सही नहीं है?

Options :

1. ✖ A, E से 10 गुना भारी है।

2. ✔ B, A से 5 गुना भारी है।

3. ✖ B, D से भारी है।

4. ✖ C, D से 15 गुना भारी है।

Question Number : 35 Question Id : 5861806537 Question Type : MCQ Option Shuffling : Yes

Correct Marks : 1 Wrong Marks : 0.25

Select the option that is related to the third word in the same way as the second word is related to the first word.

Cat : Mew :: Goat : \_\_\_\_\_

Options :

1. ✔ Bleat

2. ✖ Cackle

3. ✖ Chirp

4. ✖ Squeak

Question Number : 35 Question Id : 5861806537 Question Type : MCQ Option Shuffling : Yes

Correct Marks : 1 Wrong Marks : 0.25

वह विकल्प चुने जो तीसरे शब्द से उसी प्रकार से संबंधित है जिस प्रकार से दूसरा शब्द पहले शब्द से संबंधित है।

बिल्ली : मियाउ :: बकरी : \_\_\_\_\_

Options :

1. ✔ ब्लीट (में में)

2. ✖ कैकल (घें-में)

3. ✖ चर्ष (कूजन)

4. ✖ स्क्वीक (चूँ चूँ)

Question Number : 36 Question Id : 5861806538 Question Type : MCQ Option Shuffling : Yes

Correct Marks : 1 Wrong Marks : 0.25

Three of the given four words are similar in a certain manner while one is different. Choose the odd one out:

Options :

1. ✖ Creativity

2. ✖ Innovation

3. ✔ Conservatism

4. ✖ Novelty

Question Number : 36 Question Id : 5861806538 Question Type : MCQ Option Shuffling : Yes

Correct Marks : 1 Wrong Marks : 0.25

प्रदत्त चार शब्दों में से तीन एक तरीके से समान हैं, जबकि एक अलग है। निम्न विकल्पों में से विषम चुनें।

Options :

1. ✖ रचनात्मकता

2. ✖ नवाचार

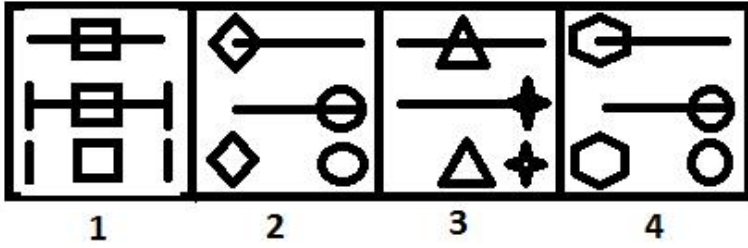
3. ✔ रूढ़िवाद

4. ✖ नवीनता

Question Number : 37 Question Id : 5861806539 Question Type : MCQ Option Shuffling : Yes

Correct Marks : 1 Wrong Marks : 0.25

Three of the given four figures are similar in a certain manner while one is different. Choose the odd one out:



Options :

1. ✓ 1

2. ✖ 2

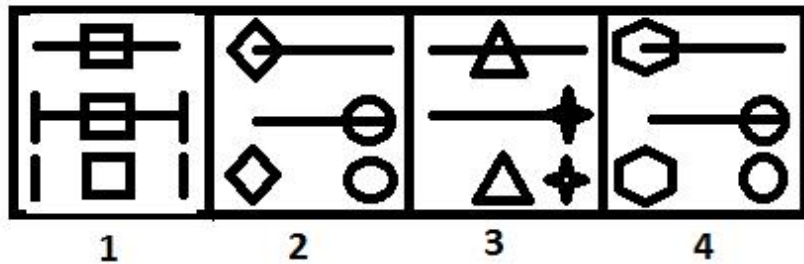
3. ✖ 3

4. ✖ 4

Question Number : 37 Question Id : 5861806539 Question Type : MCQ Option Shuffling : Yes

Correct Marks : 1 Wrong Marks : 0.25

प्रदत्त चार आकृतियों में से तीन एक तरीके से समान हैं, जबकि एक अलग है। इनमें से विषम चुनें।



Options :

1. ✓ 1

2. ✗ 2

3. ✗ 3

4. ✗ 4

Question Number : 38 Question Id : 5861806540 Question Type : MCQ Option Shuffling : Yes

Correct Marks : 1 Wrong Marks : 0.25

वह विकल्प चुनें जो श्रृंखला में प्रश्न चिन्ह (?) को सही प्रतिस्थापित करेगा।

13, 14, 14, 16, ?, 35

Options :

1. ✗ 18

2. ✗ 26

3. ✗ 28

4. ✓ 32

Question Number : 38 Question Id : 5861806540 Question Type : MCQ Option Shuffling : Yes

Correct Marks : 1 Wrong Marks : 0.25

Which number will replace the question mark (?) in the following series?

13, 14, 14, 16, ?, 35

Options :

1. ✖ 18

2. ✖ 26

3. ✖ 28

4. ✔ 32

Question Number : 39 Question Id : 5861806541 Question Type : MCQ Option Shuffling : Yes

Correct Marks : 1 Wrong Marks : 0.25

Which number will replace the question mark (?) in the following series?

19, 23, 34, 64, ?

Options :

1. ✔ 131

2. ✖ 129

3. ✖ 130

4. ✖ 128

Question Number : 39 Question Id : 5861806541 Question Type : MCQ Option Shuffling : Yes

Correct Marks : 1 Wrong Marks : 0.25

वह विकल्प चुनें जो श्रृंखला में प्रश्न चिन्ह (?) को सही प्रतिस्थापित करेगा।

19, 23, 34, 64, ?

Options :

1. ✔ 131

2. ✖ 129

3. ✖ 130

4. ✖ 128

Question Number : 40 Question Id : 5861806542 Question Type : MCQ Option Shuffling : Yes  
Correct Marks : 1 Wrong Marks : 0.25

Which number will replace the question mark (?) in the following series?

27, 55, 99, 165, 260, ?

Options :

1. ✖ 390

2. ✖ 391

3. ✔ 392

4. ✖ 393

Question Number : 40 Question Id : 5861806542 Question Type : MCQ Option Shuffling : Yes  
Correct Marks : 1 Wrong Marks : 0.25

वह विकल्प चुनें जो श्रृंखला में प्रश्न चिन्ह (?) को सही प्रतिस्थापित करेगा।

27, 55, 99, 165, 260, ?

Options :

1. ✖ 390



2. ✘ 391

3. ✔ 392

4. ✘ 393

## General Awareness1

<b>Group Number :</b>	3
<b>Group Id :</b>	586180314
<b>Group Maximum Duration :</b>	0
<b>Group Minimum Duration :</b>	0
<b>Show Attended Group? :</b>	No
<b>Edit Attended Group? :</b>	No
<b>Break time:</b>	0
<b>Group Marks:</b>	20
<b>Is this Group for Examiner?:</b>	No
<b>Revisit allowed for group Instructions? :</b>	Yes
<b>Maximum Instruction Time:</b>	0
<b>Minimum Instruction Time:</b>	0

## General Awareness1

<b>Section Id :</b>	586180318
<b>Section Number :</b>	1
<b>Section type :</b>	Online
<b>Mandatory or Optional:</b>	Mandatory
<b>Number of Questions:</b>	20
<b>Number of Questions to be attempted:</b>	20
<b>Section Marks:</b>	20

<b>Sub-Section Number:</b>	1
<b>Sub-Section Id:</b>	586180441
<b>Question Shuffling Allowed :</b>	Yes

Question Number : 41 Question Id : 5861806543 Question Type : MCQ Option Shuffling : Yes  
Correct Marks : 1 Wrong Marks : 0.25

Where did the Environment Ministers of the G7 nations meet in May 2019 to discuss climate crisis?

Options :

1. ✓ France
2. ✗ India
3. ✗ Japan
4. ✗ Germany

Question Number : 41 Question Id : 5861806543 Question Type : MCQ Option Shuffling : Yes  
Correct Marks : 1 Wrong Marks : 0.25

जलवायु संकट पर चर्चा करने के लिए मई 2019 में जी 7 देशों के पर्यावरण मंत्रियों की बैठक कहां संपन्न हुई?

Options :

1. ✓ फ्रांस
2. ✗ भारत
3. ✗ जापान
4. ✗ जर्मनी

Question Number : 42 Question Id : 5861806544 Question Type : MCQ Option Shuffling : Yes  
Correct Marks : 1 Wrong Marks : 0.25

The Gadgil commission is associated to:

Options :

1. ✓ Western Ghats
2. ✗ Eastern Ghats
3. ✗ Andaman and Nicobar
4. ✗ Lakshadweep

Question Number : 42 Question Id : 5861806544 Question Type : MCQ Option Shuffling : Yes  
Correct Marks : 1 Wrong Marks : 0.25

गाडगिल आयोग, \_\_\_\_\_ से संबंधित है।

Options :

1. ✓ पश्चिमी घाट
2. ✘ पूर्वी घाट
3. ✘ अंडमान और निकोबार
4. ✘ लक्षद्वीप

Question Number : 43 Question Id : 5861806545 Question Type : MCQ Option Shuffling : Yes  
Correct Marks : 1 Wrong Marks : 0.25

The headquarters of Central Pollution Control Board is situated at:

Options :

1. ✘ Chennai
2. ✘ Mumbai
3. ✓ New Delhi
4. ✘ Kolkata

Question Number : 43 Question Id : 5861806545 Question Type : MCQ Option Shuffling : Yes  
Correct Marks : 1 Wrong Marks : 0.25

केंद्रीय प्रदूषण नियंत्रण बोर्ड का मुख्यालय \_\_\_\_\_ में स्थित है।

Options :

1. ✘ चेन्नई
2. ✘ मुंबई
3. ✓ नई दिल्ली
4. ✘ कोलकाता

Question Number : 44 Question Id : 5861806546 Question Type : MCQ Option Shuffling : Yes  
Correct Marks : 1 Wrong Marks : 0.25

In the context of National Green Tribunal (NGT), which of the following is NOT one of its benches?

Options :

1. ✘ Bhopal

2. ✖ Chennai

3. ✔ Bhubaneswar

4. ✖ Pune

Question Number : 44 Question Id : 5861806546 Question Type : MCQ Option Shuffling : Yes  
Correct Marks : 1 Wrong Marks : 0.25

राष्ट्रीय हरित अधिकरण {National Green Tribunal (NGT)} के संदर्भ में निम्न में से कौन इसकी एक पीठ नहीं है?

Options :

1. ✖ भोपाल

2. ✖ चेन्नई

3. ✔ भुवनेश्वर

4. ✖ पुणे

Question Number : 45 Question Id : 5861806547 Question Type : MCQ Option Shuffling : Yes  
Correct Marks : 1 Wrong Marks : 0.25

Who have been appointed as the brand ambassadors of Myntra in 2019?

Options :

1. ✖ Riteish Deshmukh and Genelia D'Souza

2. ✔ Virat Kohli and Anushka Sharma

3. ✖ Abhishek Bachhan and Aishwarya Ray

4. ✖ Akshay Kumar and Twinkle Khanna

Question Number : 45 Question Id : 5861806547 Question Type : MCQ Option Shuffling : Yes  
Correct Marks : 1 Wrong Marks : 0.25

2019 में मिंत्रा (Myntra) का ब्रांड एम्बेसेडर किसे नियुक्त किया गया?

Options :

1. ✖ रितेश देशमुख और जनेलिया डिसूजा

2. ✔ विराट कोहली और अनुष्का शर्मा

3. \* अभिषेक बच्चन और ऐश्वर्या राय

4. \* अक्षय कुमार और ट्विंकल खन्ना

Question Number : 46 Question Id : 5861806548 Question Type : MCQ Option Shuffling : Yes

Correct Marks : 1 Wrong Marks : 0.25

INS Ranjit, a Rajput class destroyer was decommissioned at\_\_\_\_\_.

Options :

1. \* Kolkata

2. ✓ Visakhapatnam

3. \* Kochi

4. \* Mumbai

Question Number : 46 Question Id : 5861806548 Question Type : MCQ Option Shuffling : Yes

Correct Marks : 1 Wrong Marks : 0.25

राजपूत वर्ग के एक विध्वंसक 'आईएनएस रंजीत' को \_\_\_\_\_ में सेवा से मुक्त किया गया।

Options :

1. \* कोलकाता

2. ✓ विशाखापट्टनम

3. \* कोच्चि

4. \* मुंबई

Question Number : 47 Question Id : 5861806549 Question Type : MCQ Option Shuffling : Yes

Correct Marks : 1 Wrong Marks : 0.25

The journalist who was conferred with V K Krishna Menon Award 2019 in the UK for his contribution as a pioneer of decolonized journalism?

Options :

1. ✓ G D Robert Govender

2. \* Rajdeep Sardesai

3. \* Ravish Kumar

4. \* Barkha Dutt

Question Number : 47 Question Id : 5861806549 Question Type : MCQ Option Shuffling : Yes

Correct Marks : 1 Wrong Marks : 0.25

किस पत्रकार ने उपनिवेशवाद विरोधी पत्रकारिता के अग्रणी के रूप में अपने योगदान हेतु इंग्लैंड में वी के कृष्ण मेनन पुरस्कार 2019 प्राप्त किया?

Options :

1. ✓ जी डी रॉबर्ट गोवेंदर

2. \* राजदीप सरदेसाई

3. \* रवीश कुमार

4. \* बरखा दत्त

Question Number : 48 Question Id : 5861806550 Question Type : MCQ Option Shuffling : Yes

Correct Marks : 1 Wrong Marks : 0.25

As per the study of the Indian Meteorological Department, which of the following Cyclones was the longest lasting cyclone in April 2019 over Bay of Bengal in a century?

Options :

1. \* Cyclone Hudhud

2. ✓ Cyclone Fani

3. \* Cyclone Phailin

4. \* Cyclone Gaja

Question Number : 48 Question Id : 5861806550 Question Type : MCQ Option Shuffling : Yes

Correct Marks : 1 Wrong Marks : 0.25

भारतीय मौसम विज्ञान विभाग के अध्ययन के अनुसार अप्रैल, 2019 में निम्न में से कौन सा चक्रवात, एक शताब्दी में बंगाल की खाड़ी में सबसे अधिक समय तक बना रहने वाला चक्रवात था?

Options :

1. ✖ चक्रवात हुदहुद
2. ✔ चक्रवात फानी
3. ✖ चक्रवात फ़ैलिन
4. ✖ चक्रवात गाजा

Question Number : 49 Question Id : 5861806551 Question Type : MCQ Option Shuffling : Yes  
Correct Marks : 1 Wrong Marks : 0.25

The Harappan site Lothal is situated at\_\_\_\_\_.

Options :

1. ✖ Punjab
2. ✖ Rajasthan
3. ✔ Gujarat
4. ✖ Harayana

Question Number : 49 Question Id : 5861806551 Question Type : MCQ Option Shuffling : Yes  
Correct Marks : 1 Wrong Marks : 0.25

हड़प्पा स्थल लोथल \_\_\_\_\_ में स्थित है।

Options :

1. ✖ पंजाब
2. ✖ राजस्थान
3. ✔ गुजरात
4. ✖ हरियाणा

Question Number : 50 Question Id : 5861806552 Question Type : MCQ Option Shuffling : Yes  
Correct Marks : 1 Wrong Marks : 0.25

In the context of Medieval Indian History, the term used for Land Revenue was:

Options :

1. ✔ Kharaj
2. ✖ Zakat



3. \* Iqta

4. \* Jizya

Question Number : 50 Question Id : 5861806552 Question Type : MCQ Option Shuffling : Yes

Correct Marks : 1 Wrong Marks : 0.25

मध्यकालीन भारतीय इतिहास के संदर्भ में, भू - राजस्व के लिए \_\_\_\_\_ शब्द उपयोग किया जाता था।

Options :

1. ✓ खराज

2. \* जकात

3. \* इक्ता

4. \* जिजया

Question Number : 51 Question Id : 5861806553 Question Type : MCQ Option Shuffling : Yes

Correct Marks : 1 Wrong Marks : 0.25

The study of Inscriptions is known as:

Options :

1. \* Archaeology

2. ✓ Epigraphy

3. \* Numismatics

4. \* Ethnography

Question Number : 51 Question Id : 5861806553 Question Type : MCQ Option Shuffling : Yes

Correct Marks : 1 Wrong Marks : 0.25

शिलालेखों का अध्ययन \_\_\_\_\_ कहलाता है।

Options :

1. \* आर्कियोलॉजी

2. ✓ एपिग्राफी

3. \* न्यूमिस्मैटिक्स

4. \* एथनोग्राफी

Question Number : 52 Question Id : 5861806554 Question Type : MCQ Option Shuffling : Yes

Correct Marks : 1 Wrong Marks : 0.25

The famous ruler Harsha Vardhan was belonged to which of the following dynasties?

Options :

1. ✓ Pushyabhuti
2. ✗ Maukhari
3. ✗ Pratihara
4. ✗ Shunga

Question Number : 52 Question Id : 5861806554 Question Type : MCQ Option Shuffling : Yes

Correct Marks : 1 Wrong Marks : 0.25

प्रसिद्ध शासक हर्षवर्धन निम्न में से किस वंश से संबंधित था?

Options :

1. ✓ पुष्यभूति
2. ✗ मौखरि
3. ✗ प्रतिहार
4. ✗ शुंग

Question Number : 53 Question Id : 5861806555 Question Type : MCQ Option Shuffling : Yes

Correct Marks : 1 Wrong Marks : 0.25

The concept of political sovereignty was advocated by:

Options :

1. ✗ Plato
2. ✗ John Locke
3. ✓ Rousseau
4. ✗ Austin

Question Number : 53 Question Id : 5861806555 Question Type : MCQ Option Shuffling : Yes

Correct Marks : 1 Wrong Marks : 0.25

राजनीतिक संप्रभुता की अवधारणा, \_\_\_\_\_ द्वारा समर्थित की गई।

Options :

1. ✖ प्लेटो
2. ✖ जॉन लॉक
3. ✔ रूसो
4. ✖ ऑस्टिन

Question Number : 54 Question Id : 5861806556 Question Type : MCQ Option Shuffling : Yes  
Correct Marks : 1 Wrong Marks : 0.25

Which articles authorize the parliament to protect persons in the service of the Union or a state in respect of any action taken by them during martial law?

Options :

1. ✔ Articles 33 - 34
2. ✖ Articles 23 - 24
3. ✖ Articles 10 - 11
4. ✖ Articles 9 - 10

Question Number : 54 Question Id : 5861806556 Question Type : MCQ Option Shuffling : Yes  
Correct Marks : 1 Wrong Marks : 0.25

कौन सा अनुच्छेद संघ या राज्य की सेवा में व्यक्तियों को सैनिक शासन के दौरान उनके द्वारा की गई किन्हीं कार्यवाहियों के संदर्भ में संरक्षित करने के लिए संसद को प्राधिकृत करता है।

Options :

1. ✔ अनुच्छेद 33 - 34
2. ✖ अनुच्छेद 23 - 24
3. ✖ अनुच्छेद 10 - 11
4. ✖ अनुच्छेद 9 - 10

Question Number : 55 Question Id : 5861806557 Question Type : MCQ Option Shuffling : Yes  
Correct Marks : 1 Wrong Marks : 0.25

Which Amendment of the Indian Constitution is known as the Anti -Defection Amendment?

Options :

1. ✓ 52nd Amendment
2. ✗ 91st Amendment
3. ✗ 82nd Amendment
4. ✗ 74th Amendment

Question Number : 55 Question Id : 5861806557 Question Type : MCQ Option Shuffling : Yes

Correct Marks : 1 Wrong Marks : 0.25

भारतीय संविधान के किस संशोधन को दल-बदल विरोधी संशोधन माना जाता है?

Options :

1. ✓ 52वाँ संशोधन
2. ✗ 91वाँ संशोधन
3. ✗ 82वाँ संशोधन
4. ✗ 74वाँ संशोधन

Question Number : 56 Question Id : 5861806558 Question Type : MCQ Option Shuffling : Yes

Correct Marks : 1 Wrong Marks : 0.25

Which Schedule of Indian Constitution specifies the powers, authority and responsibilities of Panchayats?

Options :

1. ✗ Twelfth
2. ✓ Eleventh
3. ✗ Ninth
4. ✗ Tenth

Question Number : 56 Question Id : 5861806558 Question Type : MCQ Option Shuffling : Yes

Correct Marks : 1 Wrong Marks : 0.25

भारतीय संविधान की कौन सी अनुसूची, पंचायतों की शक्तियां, प्राधिकार और दायित्व निर्दिष्ट करती है?

Options :

1. ✖ बारहवीं
2. ✔ ग्यारहवीं
3. ✖ नौवीं
4. ✖ दसवीं

Question Number : 57 Question Id : 5861806559 Question Type : MCQ Option Shuffling : Yes  
Correct Marks : 1 Wrong Marks : 0.25

Which amendment of the Indian constitution inserted the term 'Socialist' to its constitution?

Options :

1. ✔ 42nd Amendment
2. ✖ 27th Amendment
3. ✖ 36th Amendment
4. ✖ 41st Amendment

Question Number : 57 Question Id : 5861806559 Question Type : MCQ Option Shuffling : Yes  
Correct Marks : 1 Wrong Marks : 0.25

भारतीय संविधान के किस संशोधन द्वारा इसकी प्रस्तावना में 'समाजवादी' शब्द जोड़ा गया?

Options :

1. ✔ 42वाँ संशोधन
2. ✖ 27वाँ संशोधन
3. ✖ 36वाँ संशोधन
4. ✖ 41वाँ संशोधन

Question Number : 58 Question Id : 5861806560 Question Type : MCQ Option Shuffling : Yes  
Correct Marks : 1 Wrong Marks : 0.25

Which of the following is NOT matched correctly?

Options :

1. ✖ Freedom to manage religious affairs - Article 26
2. ✖ Prohibition of Discrimination- Article 15
3. ✖ Protection of life and personal liberty - Article 21
4. ✔ Equality of opportunity in matters of public employment - Article 29

Question Number : 58 Question Id : 5861806560 Question Type : MCQ Option Shuffling : Yes

Correct Marks : 1 Wrong Marks : 0.25

निम्न में से किसका मिलान सही नहीं है?

Options :

1. ✖ धार्मिक मामले प्रबंधित करने की स्वतंत्रता - अनुच्छेद 26
2. ✖ भेदभाव का निषेध - अनुच्छेद 15
3. ✖ जीवन एवं निजी स्वतंत्रता का संरक्षण - अनुच्छेद 21
4. ✔ सार्वजनिक रोजगार के मामलों में अवसरों की समानता - अनुच्छेद 29

Question Number : 59 Question Id : 5861806561 Question Type : MCQ Option Shuffling : Yes

Correct Marks : 1 Wrong Marks : 0.25

The Men's title in the Asian individual Squash Championship held in Malaysia in May 2019 was bagged by\_\_\_\_\_.

Options :

1. ✖ Tarek Momen
2. ✖ Harinder Pal Sandhu
3. ✔ Saurav Ghoshal
4. ✖ Ramit Tandon

Question Number : 59 Question Id : 5861806561 Question Type : MCQ Option Shuffling : Yes

Correct Marks : 1 Wrong Marks : 0.25

मई 2019 में मलेशिया में आयोजित एशियाई व्यक्तिगत स्क्वैश चैम्पियनशिप में पुरुषों का खिताब \_\_\_\_\_ ने प्राप्त किया।

Options :

1. \* तारेक मोमे
2. \* हरिंदर पाल संधू
3. ✓ सौरव घोषाल
4. \* रमित टंडन

Question Number : 60 Question Id : 5861806562 Question Type : MCQ Option Shuffling : Yes

Correct Marks : 1 Wrong Marks : 0.25

Roger Federer has returned to \_\_\_\_\_ in the ATP Men's rankings released in May 2019.

Options :

1. ✓ 3rd
2. \* 2nd
3. \* 6th
4. \* 8th

Question Number : 60 Question Id : 5861806562 Question Type : MCQ Option Shuffling : Yes

Correct Marks : 1 Wrong Marks : 0.25

रोजर फेडरर ने मई 2019 में जारी एटीपी पुरुषों की रैंकिंग में \_\_\_\_\_ पर वापसी की।

Options :

1. ✓ तीसरे स्थान
2. \* दूसरे स्थान
3. \* छठे स्थान
4. \* आठवें स्थान



## General Awareness2

Group Number :	4
Group Id :	586180315
Group Maximum Duration :	0
Group Minimum Duration :	0
Show Attended Group? :	No
Edit Attended Group? :	No
Break time:	0
Group Marks:	20
Is this Group for Examiner?:	No
Revisit allowed for group Instructions? :	Yes
Maximum Instruction Time:	0
Minimum Instruction Time:	0

## General Awareness2

Section Id :	586180319
Section Number :	1
Section type :	Online
Mandatory or Optional:	Mandatory
Number of Questions:	20
Number of Questions to be attempted:	20
Section Marks:	20

Sub-Section Number:	1
Sub-Section Id:	586180442
Question Shuffling Allowed :	Yes

Question Number : 61 Question Id : 5861806563 Question Type : MCQ Option Shuffling : Yes  
Correct Marks : 1 Wrong Marks : 0.25

The first woman Rajiv Gandhi Khel Ratna Awardee is\_\_\_\_\_.

Options :

1. ✘ P.T Usha
2. ✔ Karnam Malleswari
3. ✘ Punam Yadav
4. ✘ Mary Kom

Question Number : 61 Question Id : 5861806563 Question Type : MCQ Option Shuffling : Yes  
Correct Marks : 1 Wrong Marks : 0.25

राजीव गांधी खेल रत्न से सम्मानित प्रथम महिला \_\_\_\_\_ है।

Options :

1. ✖ पी टी उषा
2. ✔ कर्णम मल्लेश्वरी
3. ✖ पूनम यादव
4. ✖ मैरी कॉम

Question Number : 62 Question Id : 5861806564 Question Type : MCQ Option Shuffling : Yes  
Correct Marks : 1 Wrong Marks : 0.25

'Paithani' is the traditional weave of:

Options :

1. ✖ Bihar
2. ✖ West Bengal
3. ✖ Karnataka
4. ✔ Maharashtra

Question Number : 62 Question Id : 5861806564 Question Type : MCQ Option Shuffling : Yes  
Correct Marks : 1 Wrong Marks : 0.25

'पैठनी' \_\_\_\_\_ की पारंपरिक बुनकरी कला है।

Options :

1. ✖ बिहार
2. ✖ पश्चिम बंगाल
3. ✖ कर्नाटक
4. ✔ महाराष्ट्र

Question Number : 63 Question Id : 5861806565 Question Type : MCQ Option Shuffling : Yes  
Correct Marks : 1 Wrong Marks : 0.25

'Gotipua' Dance is associated to which of the following states of India?

Options :

1. ✔ Odisha
2. ✖ Assam

3. \* Goa

4. \* Jharkhand

Question Number : 63 Question Id : 5861806565 Question Type : MCQ Option Shuffling : Yes

Correct Marks : 1 Wrong Marks : 0.25

'गोटीपुआ' नृत्य निम्न में से किस भारतीय राज्य से संबंधित है?

Options :

1. ✓ ओडिशा

2. \* असम

3. \* गोवा

4. \* झारखंड

Question Number : 64 Question Id : 5861806566 Question Type : MCQ Option Shuffling : Yes

Correct Marks : 1 Wrong Marks : 0.25

Which State has received the GI Tag for the Navara Rice Variety?

Options :

1. ✓ Kerala

2. \* Chhatishgarh

3. \* Telangana

4. \* Uttarakhand

Question Number : 64 Question Id : 5861806566 Question Type : MCQ Option Shuffling : Yes

Correct Marks : 1 Wrong Marks : 0.25

किस राज्य ने नवरा चावल किस्म के लिए जीआई (GI) टैग प्राप्त किया?

Options :

1. ✓ केरल

2. \* छत्तीसगढ़

3. \* तेलंगाना

## 4. \* उत्तराखंड

Question Number : 65 Question Id : 5861806567 Question Type : MCQ Option Shuffling : Yes  
Correct Marks : 1 Wrong Marks : 0.25

Sanjay Gandhi National Park is located in\_\_\_\_\_.

Options :

1. ✓ Maharashtra
2. \* Odisha
3. \* Tamil Nadu
4. \* West Bengal

Question Number : 65 Question Id : 5861806567 Question Type : MCQ Option Shuffling : Yes  
Correct Marks : 1 Wrong Marks : 0.25

संजय गांधी राष्ट्रीय उद्यान \_\_\_\_\_ में स्थित है।

Options :

1. ✓ महाराष्ट्र
2. \* ओडिशा
3. \* तमिलनाडु
4. \* पश्चिम बंगाल

Question Number : 66 Question Id : 5861806568 Question Type : MCQ Option Shuffling : Yes  
Correct Marks : 1 Wrong Marks : 0.25

The natural habitat of Ostrich is found in:

Options :

1. ✓ Africa
2. \* Asia
3. \* America
4. \* Europe

Question Number : 66 Question Id : 5861806568 Question Type : MCQ Option Shuffling : Yes  
Correct Marks : 1 Wrong Marks : 0.25

शुतुरमुर्ग का प्राकृतिक वासस्थल \_\_\_\_\_ में पाया जाता है।

Options :

1. ✓ अफ्रीका
2. ✘ एशिया
3. ✘ अमेरिका
4. ✘ यूरोप

Question Number : 67 Question Id : 5861806569 Question Type : MCQ Option Shuffling : Yes  
Correct Marks : 1 Wrong Marks : 0.25

Who put forth the continental drift theory in 1912?

Options :

1. ✘ Abraham ortelius
2. ✘ Antonia Pellegrini
3. ✓ Alfred Wegener
4. ✘ Arthur Holmes

Question Number : 67 Question Id : 5861806569 Question Type : MCQ Option Shuffling : Yes  
Correct Marks : 1 Wrong Marks : 0.25

1912 में महाद्वीपीय विस्थापन सिद्धांत किसने प्रतिपादित किया?

Options :

1. ✘ अब्राहम ओरटेलियस
2. ✘ एंटोनिया पेलेग्रीनी
3. ✓ अल्फ्रेड वेगेनर
4. ✘ आर्थर होम्स

Question Number : 68 Question Id : 5861806570 Question Type : MCQ Option Shuffling : Yes  
Correct Marks : 1 Wrong Marks : 0.25

The Fifth Five Year Plan period is:

Options :

1. ✘ 1980 - 85
2. ✓ 1974 - 79

3. \* 1992 - 97

4. \* 1956 - 61

Question Number : 68 Question Id : 5861806570 Question Type : MCQ Option Shuffling : Yes

Correct Marks : 1 Wrong Marks : 0.25

पांचवीं पंचवर्षीय योजना की अवधि \_\_\_\_\_ है।

Options :

1. \* 1980 - 85

2. ✓ 1974 - 79

3. \* 1992 - 97

4. \* 1956 - 61

Question Number : 69 Question Id : 5861806571 Question Type : MCQ Option Shuffling : Yes

Correct Marks : 1 Wrong Marks : 0.25

Post Independence, which Economic Model was adopted by India?

Options :

1. \* Closed Economy

2. \* Capitalist Economy

3. \* Socialist Economy

4. ✓ Mixed Economy

Question Number : 69 Question Id : 5861806571 Question Type : MCQ Option Shuffling : Yes

Correct Marks : 1 Wrong Marks : 0.25

स्वतंत्रता पश्चात भारत द्वारा किस आर्थिक मॉडल को अपनाया गया?

Options :

1. \* बंद अर्थव्यवस्था

2. \* पूंजीवादी अर्थव्यवस्था

3. \* समाजवादी अर्थव्यवस्था

4. ✓ मिश्रित अर्थव्यवस्था

Question Number : 70 Question Id : 5861806572 Question Type : MCQ Option Shuffling : Yes  
Correct Marks : 1 Wrong Marks : 0.25

The Objective of Sansad Adarsh Gram Yojana is:

Options :

1. \* Adoption of Rural Children by Industrialists
2. \* Adoption of Rural Heritage
3. ✓ Adoption of villages by Parliamentarians
4. \* Adoption of Village adolescent girl child

Question Number : 70 Question Id : 5861806572 Question Type : MCQ Option Shuffling : Yes  
Correct Marks : 1 Wrong Marks : 0.25

सांसद आदर्श ग्राम योजना का उद्देश्य \_\_\_\_\_ है।

Options :

1. \* उद्योगपतियों द्वारा ग्रामीण बच्चों को गोद लिया जाना।
2. \* ग्रामीण विरासत को गोद लेना।
3. ✓ संसद सदस्यों द्वारा गांवों को गोद लिया जाना।
4. \* गांवों की किशोरी बालिकाओं को गोद लिया जाना।

Question Number : 71 Question Id : 5861806573 Question Type : MCQ Option Shuffling : Yes  
Correct Marks : 1 Wrong Marks : 0.25

From which plant is Litmus extracted?

Options :

1. ✓ Lichen
2. \* Petunia
3. \* Geranium
4. \* Cirsium Vulgar

Question Number : 71 Question Id : 5861806573 Question Type : MCQ Option Shuffling : Yes  
Correct Marks : 1 Wrong Marks : 0.25

किस पौधे से लिटमस निकाला जाता है?

Options :



1. ✓ लाइकेन (Lichen)
2. ✗ पेटुनिया (Petunia)
3. ✗ जेरानियम (Geranium)
4. ✗ सिरसियम वल्गर (Cirsium Vulgar)

Question Number : 72 Question Id : 5861806574 Question Type : MCQ Option Shuffling : Yes  
Correct Marks : 1 Wrong Marks : 0.25

A spherical mirror whose reflecting surface is curved inwards is called a \_\_\_\_\_.

Options :

1. ✗ Plane Mirror
2. ✗ Convex Mirror
3. ✓ Concave Mirror
4. ✗ Opaque Mirror

Question Number : 72 Question Id : 5861806574 Question Type : MCQ Option Shuffling : Yes  
Correct Marks : 1 Wrong Marks : 0.25

एक गोलीय दर्पण जिसका परावर्तक पृष्ठ अंदर की ओर वक्रित होता है \_\_\_\_\_ कहलाता है।

Options :

1. ✗ समतल दर्पण
2. ✗ उत्तल दर्पण
3. ✓ अवतल दर्पण
4. ✗ अपारदर्शी दर्पण

Question Number : 73 Question Id : 5861806575 Question Type : MCQ Option Shuffling : Yes  
Correct Marks : 1 Wrong Marks : 0.25

What is the SI Unit of Luminous Intensity?

Options :

1. ✓ Candela

2. \* kelvin

3. \* Mole

4. \* Ampere

Question Number : 73 Question Id : 5861806575 Question Type : MCQ Option Shuffling : Yes  
Correct Marks : 1 Wrong Marks : 0.25

ज्योति तीव्रता का एसआई (SI) मात्रक क्या है?

Options :

1. ✓ कैंडेला

2. \* केल्विन

3. \* मोल

4. \* एम्पियर

Question Number : 74 Question Id : 5861806576 Question Type : MCQ Option Shuffling : Yes  
Correct Marks : 1 Wrong Marks : 0.25

कुहासा \_\_\_\_\_ होता है।

Options :

1. \* विलयन

2. \* तत्व

3. \* यौगिक

4. ✓ कोलाइड

Question Number : 74 Question Id : 5861806576 Question Type : MCQ Option Shuffling : Yes  
Correct Marks : 1 Wrong Marks : 0.25

Fog is a:

Options :

1. \* Solution

2. \* Element

3. \* Compound

4. ✓ Colloid

Question Number : 75 Question Id : 5861806577 Question Type : MCQ Option Shuffling : Yes

Correct Marks : 1 Wrong Marks : 0.25

Which is India's first multi - wavelength observatory?

Options :

1. ✖ Herschel
2. ✖ Lemur
3. ✖ Planck
4. ✔ Astrosat

Question Number : 75 Question Id : 5861806577 Question Type : MCQ Option Shuffling : Yes

Correct Marks : 1 Wrong Marks : 0.25

भारत की प्रथम बहु - तरंगदैर्घ्य वेधशाला कौन सी है?

Options :

1. ✖ हरशॉल
2. ✖ लेमूर
3. ✖ प्लैंक
4. ✔ एस्ट्रोसैट

Question Number : 76 Question Id : 5861806578 Question Type : MCQ Option Shuffling : Yes

Correct Marks : 1 Wrong Marks : 0.25

Kalpakkam Mini Reactor is operated for:

Options :

1. ✔ Neutron Radiography
2. ✖ Cryogen Distribution
3. ✖ Radiotheraphy
4. ✖ Developing Radioisotopes

Question Number : 76 Question Id : 5861806578 Question Type : MCQ Option Shuffling : Yes

Correct Marks : 1 Wrong Marks : 0.25

कलपक्कम मिनी रिएक्टर \_\_\_\_\_ हेतु संचालित होती है।

Options :

1. ✓ न्यूट्रॉन रेडियोग्राफी
2. ✖ क्रायोजेन डिस्ट्रीब्यूशन
3. ✖ रेडियोथेरेपी
4. ✖ रेडियोआइसोटोप विकसित करने

Question Number : 77 Question Id : 5861806579 Question Type : MCQ Option Shuffling : Yes  
Correct Marks : 1 Wrong Marks : 0.25

Which is India's first interplanetary Spacecraft Mission?

Options :

1. ✖ Saturn Orbiter Mission
2. ✓ Mars Orbiter Mission
3. ✖ Jupiter Orbiter Mission
4. ✖ Venus Orbiter Mission

Question Number : 77 Question Id : 5861806579 Question Type : MCQ Option Shuffling : Yes  
Correct Marks : 1 Wrong Marks : 0.25

भारत का प्रथम अंतर्ग्रहीय अंतरिक्षयान मिशन कौन सा है?

Options :

1. ✖ शनि ऑर्बिटर मिशन
2. ✓ मंगल ऑर्बिटर मिशन
3. ✖ बृहस्पति ऑर्बिटर मिशन
4. ✖ शुक्र ऑर्बिटर मिशन

Question Number : 78 Question Id : 5861806580 Question Type : MCQ Option Shuffling : Yes  
Correct Marks : 1 Wrong Marks : 0.25

In which city the National Institute of Nutrition is located?

Options :

1. ✖ Chandigarh
2. ✖ Pune
3. ✓ Hyderabad

## 4. \* Bengaluru

Question Number : 78 Question Id : 5861806580 Question Type : MCQ Option Shuffling : Yes  
Correct Marks : 1 Wrong Marks : 0.25

राष्ट्रीय पोषण संस्थान किस शहर में स्थित है?

Options :

1. \* चंडीगढ़
2. \* पुणे
3. ✓ हैदराबाद
4. \* बेंगलुरु

Question Number : 79 Question Id : 5861806581 Question Type : MCQ Option Shuffling : Yes  
Correct Marks : 1 Wrong Marks : 0.25

The headquarters of International Court of Justice is located at \_\_\_\_\_.

Options :

1. ✓ Hague
2. \* Prague
3. \* Paris
4. \* Brussels

Question Number : 79 Question Id : 5861806581 Question Type : MCQ Option Shuffling : Yes  
Correct Marks : 1 Wrong Marks : 0.25

अंतर्राष्ट्रीय न्यायालय का मुख्यालय \_\_\_\_\_ में स्थित है।

Options :

1. ✓ हेग
2. \* प्राग
3. \* पेरिस
4. \* ब्रसेल्स

Question Number : 80 Question Id : 5861806582 Question Type : MCQ Option Shuffling : Yes  
Correct Marks : 1 Wrong Marks : 0.25

Which one of the following is NOT a part of SAARC?

Options :

1. ✖ India
2. ✖ Afghanistan
3. ✖ Nepal
4. ✔ Myanmar

Question Number : 80 Question Id : 5861806582 Question Type : MCQ Option Shuffling : Yes  
Correct Marks : 1 Wrong Marks : 0.25

निम्न में से कौन, सार्क (SAARC) का भाग नहीं है?

Options :

1. ✖ भारत
2. ✖ अफगानिस्तान
3. ✖ नेपाल
4. ✔ म्यांमार

## Arithmetic Ability1

Group Number :	5
Group Id :	586180316
Group Maximum Duration :	0
Group Minimum Duration :	0
Show Attended Group? :	No
Edit Attended Group? :	No
Break time:	0
Group Marks:	20
Is this Group for Examiner? :	No
Revisit allowed for group Instructions? :	Yes
Maximum Instruction Time:	0
Minimum Instruction Time:	0

## Arithmetic Ability1

Section Id :	586180320
Section Number :	1
Section type :	Online
Mandatory or Optional:	Mandatory

Number of Questions: 20  
Number of Questions to be attempted: 20  
Section Marks: 20

Sub-Section Number: 1  
Sub-Section Id: 586180443  
Question Shuffling Allowed : Yes

Question Number : 81 Question Id : 5861806583 Question Type : MCQ Option Shuffling : Yes  
Correct Marks : 1 Wrong Marks : 0.25

Solve the following:

$$\frac{(536+268)^2 - (536-268)^2}{536 \times 268} = ?$$

Options :

1. ✓ 4

2. ✗ 3

3. ✗ 2

4. ✗ 8

Question Number : 81 Question Id : 5861806583 Question Type : MCQ Option Shuffling : Yes  
Correct Marks : 1 Wrong Marks : 0.25

निम्नलिखित को हल करें:

$$\frac{(536+268)^2 - (536-268)^2}{536 \times 268} = ?$$

Options :

1. ✓ 4

2. ✗ 3



3. ✖ 2

4. ✖ 8

Question Number : 82 Question Id : 5861806584 Question Type : MCQ Option Shuffling : Yes

Correct Marks : 1 Wrong Marks : 0.25

Free notebooks were distributed equally among children of a class. The number of notebooks each child got was one - sixth of the number of children. Had the number of children been half, each child would have got 18 notebooks. How many notebooks were distributed in all?

Options :

1. ✖ 468

2. ✔ 486

3. ✖ 648

4. ✖ 684

Question Number : 82 Question Id : 5861806584 Question Type : MCQ Option Shuffling : Yes

Correct Marks : 1 Wrong Marks : 0.25

एक कक्षा के बच्चों में मुफ्त पुस्तकें वितरित की गईं। प्रत्येक बच्चे को मिलने वाली पुस्तकों की संख्या बच्चों की संख्या का छठा हिस्सा थी। यदि बच्चों की संख्या मौजूदा संख्या से आधी होती, तो हर बच्चे को 18 पुस्तकें मिलती। गणना कीजिए कि कुल कितनी पुस्तकें वितरित की गई थीं?

Options :

1. ✖ 468

2. ✔ 486

3. ✖ 648

4. ✖ 684

Question Number : 83 Question Id : 5861806585 Question Type : MCQ Option Shuffling : Yes

Correct Marks : 1 Wrong Marks : 0.25

A contractor pays Rs. 65 to a worker for each day and the worker forfeits Rs. 15 for each day if he is idle. At the end of 70 days, the worker gets Rs. 2150. For how many days was the worker idle?

Options :

1. ✖ 25 days

2. ✖ 28 days

3. ✖ 35 days

4. ✔ 30 days

Question Number : 83 Question Id : 5861806585 Question Type : MCQ Option Shuffling : Yes

Correct Marks : 1 Wrong Marks : 0.25

एक ठेकेदार अपने कामगारों को प्रतिदिन के हिसाब से रुपये 65 का भुगतान करता है, और यदि कामगार के पास किसी दिन कोई काम नहीं है तो उस दिन उसके रुपये 15 कट जाते हैं। एक कामगार को 70 दिनों के बाद रुपये 2150 का भुगतान मिला। गणना कीजिए कि वह कामगार कितने दिनों बेकार (बिना काम के) रहा था?

Options :

1. ✖ 25 दिन

2. ✖ 28 दिन

3. ✖ 35 दिन

4. ✔ 30 दिन

Question Number : 84 Question Id : 5861806586 Question Type : MCQ Option Shuffling : Yes

Correct Marks : 1 Wrong Marks : 0.25

A sum of Rs. 2680 was divided among Arindham, Badal and Kaveri in such a manner that Arindham gets  $\frac{3}{5}$  of what Badal gets and Badal gets  $\frac{4}{7}$  of what Kaveri gets. What is Badal's share?

Options :

1. ✖ Rs. 750

2. ✖ Rs. 700

3. ✔ Rs. 800

4. ✖ Rs. 900

Question Number : 84 Question Id : 5861806586 Question Type : MCQ Option Shuffling : Yes

Correct Marks : 1 Wrong Marks : 0.25

अरिन्धम, बादल और कावेरी के बीच रुपये 2680 की राशि को इस तरह से विभाजित किया गया कि अरिन्धम को बादल को मिलने वाली राशि का  $\frac{3}{5}$ , वहीं बादल को कावेरी को मिलने वाली राशि का  $\frac{4}{7}$  मिलता है। बादल का हिस्सा ज्ञात करें?

Options :

1. ✖ रुपये 750

2. ✖ रुपये 700

3. ✓ रुपये 800

4. ✗ रुपये 900

Question Number : 85 Question Id : 5861806587 Question Type : MCQ Option Shuffling : Yes  
Correct Marks : 1 Wrong Marks : 0.25

Solve the following:

$$\frac{15.6 \times 15.6 - 7.8 \times 7.8}{23.4 \times 7.8} = ?$$

Options :

1. ✓ 1

2. ✗ 31.2

3. ✗ 23.4

4. ✗ 7.8

Question Number : 85 Question Id : 5861806587 Question Type : MCQ Option Shuffling : Yes  
Correct Marks : 1 Wrong Marks : 0.25

निम्नलिखित को हल करें:

$$\frac{15.6 \times 15.6 - 7.8 \times 7.8}{23.4 \times 7.8} = ?$$

Options :

1. ✓ 1

2. ✗ 31.2

3. ✖ 23.4

4. ✖ 7.8

Question Number : 86 Question Id : 5861806588 Question Type : MCQ Option Shuffling : Yes  
Correct Marks : 1 Wrong Marks : 0.25

Simplify the following:

$$\frac{16.45 + \frac{3}{8} \text{ of } 32 - 4 + 2.55}{7 \times 6.5 - \frac{5}{7} \text{ of } (32.2 - 3.5) + 14.8 \div 7.4} = ?$$

Options :

1. ✔ 1

2. ✖ 2

3. ✖ 0

4. ✖ 5

Question Number : 86 Question Id : 5861806588 Question Type : MCQ Option Shuffling : Yes  
Correct Marks : 1 Wrong Marks : 0.25

निम्नलिखित समीकरण का सरलीकरण कीजिए:

$$\frac{16.45 + \frac{3}{8} \text{ of } 32 - 4 + 2.55}{7 \times 6.5 - \frac{5}{7} \text{ of } (32.2 - 3.5) + 14.8 \div 7.4} = ?$$

Options :

1. ✔ 1

2. ✖ 2

3. ✖ 0

4. ✖ 5

Question Number : 87 Question Id : 5861806589 Question Type : MCQ Option Shuffling : Yes

Correct Marks : 1 Wrong Marks : 0.25

If the sum of two positive numbers is 11.5 and their product is 27.54, find the smallest number.

Options :

1. ✖ 4.3

2. ✔ 3.4

3. ✖ 5.4

4. ✖ 4.5

Question Number : 87 Question Id : 5861806589 Question Type : MCQ Option Shuffling : Yes

Correct Marks : 1 Wrong Marks : 0.25

यदि दो धनात्मक संख्याओं का योग 11.5 है और उनका गुणनफल 27.54 है, तो दोनों में से छोटी संख्या ज्ञात कीजिए।

Options :

1. ✖ 4.3

2. ✔ 3.4

3. ✖ 5.4

4. ✖ 4.5

Question Number : 88 Question Id : 5861806590 Question Type : MCQ Option Shuffling : Yes

Correct Marks : 1 Wrong Marks : 0.25

A woman sells to the first customer half her stock and half an apple, to the second half of her remaining stock and half an apple, and so also to the third customer. She finds that she has now 8 apples left. How many apples did she have at first?

Options :

1. ✖ 61

2. ✖ 76

3. ✖ 72

4. ✔ 71

Question Number : 88 Question Id : 5861806590 Question Type : MCQ Option Shuffling : Yes

Correct Marks : 1 Wrong Marks : 0.25

एक महिला पहले ग्राहक को अपने पास मौजूद सेबों का आधा स्टॉक और आधा सेब बेचती है, दूसरे ग्राहक को उसके बचे हुए स्टॉक का आधा और आधा सेब बेचती है और ऐसा ही तीसरे ग्राहक के साथ भी करती है। अंत में उसके पास 8 सेब बाकी बचते हैं। उसके पास शुरुआत में कितने सेब थे?

Options :

1. ✖ 61

2. ✖ 76

3. ✖ 72



4. ✓ 71

Question Number : 89 Question Id : 5861806591 Question Type : MCQ Option Shuffling : Yes  
Correct Marks : 1 Wrong Marks : 0.25

Simplify the following:

$$\frac{5\frac{3}{5} - \frac{2}{7} \times 15\frac{3}{4} + 2\frac{4}{7} \div \frac{9}{7}}{\frac{3}{4} \text{ of } 7\frac{8}{9} - \frac{15}{2} \div 2\frac{1}{4}} = ?$$

Options :

1. ✓  $\frac{6}{5}$

2. ✗  $\frac{5}{6}$

3. ✗  $\frac{7}{5}$

4. ✗  $\frac{5}{7}$

Question Number : 89 Question Id : 5861806591 Question Type : MCQ Option Shuffling : Yes  
Correct Marks : 1 Wrong Marks : 0.25

निम्नलिखित समीकरण का सरलीकरण कीजिए:

$$\frac{5\frac{3}{5} - \frac{2}{7} \times 15\frac{3}{4} + 2\frac{4}{7} \div \frac{9}{7}}{\frac{3}{4} \text{ of } 7\frac{8}{9} - \frac{15}{2} \div 2\frac{1}{4}} = ?$$

Options :

1. ✓  $\frac{6}{5}$

2. ✖  $\frac{5}{6}$

3. ✖  $\frac{7}{5}$

4. ✖  $\frac{5}{7}$

Question Number : 90 Question Id : 5861806592 Question Type : MCQ Option Shuffling : Yes

Correct Marks : 1 Wrong Marks : 0.25

I read  $\frac{3}{7}$  of a book on one day and  $\frac{5}{8}$  of the remainder on another day. If there are now 60 unread pages, how many pages did the book contain?

Options :

1. ✖ 180

2. ✖ 240

3. ✓ 280

4. ✖ 260

Question Number : 90 Question Id : 5861806592 Question Type : MCQ Option Shuffling : Yes

Correct Marks : 1 Wrong Marks : 0.25

मैंने किसी दिन किसी किताब का  $\frac{3}{7}$  भाग पढ़ लिया, किसी और दिन मैंने बचे हुए भाग का  $\frac{5}{8}$  भाग पढ़ लिया। यदि किताब के 60 पृष्ठ अभी भी पढ़े जाने बाकी हैं, तो किताब कितने पृष्ठों की है?

Options :

1. ✖ 180

2. ✖ 240

3. ✔ 280

4. ✖ 260

Question Number : 91 Question Id : 5861806593 Question Type : MCQ Option Shuffling : Yes

Correct Marks : 1 Wrong Marks : 0.25

Find the smallest number which when diminished by 9 is divisible by 12, 18, 28, 36.

Options :

1. ✖ 252

2. ✔ 261

3. ✖ 245

4. ✖ 361

Question Number : 91 Question Id : 5861806593 Question Type : MCQ Option Shuffling : Yes

Correct Marks : 1 Wrong Marks : 0.25

वह सबसे छोटी संख्या ज्ञात करें जिसमें से 9 घटाने पर वह 12, 18, 28, 36 से विभाजित होती है।

Options :

1. ✖ 252

2. ✔ 261

3. ✖ 245

4. ✖ 361

Question Number : 92 Question Id : 5861806594 Question Type : MCQ Option Shuffling : Yes

Correct Marks : 1 Wrong Marks : 0.25

The sum of two numbers is 672 and their HCF is 28. How many pairs of such numbers can be formed?

Options :

1. ✔ 4

2. ✖ 3

3. ✖ 2

4. ✖ 5

Question Number : 92 Question Id : 5861806594 Question Type : MCQ Option Shuffling : Yes

Correct Marks : 1 Wrong Marks : 0.25

दो संख्याओं का योग 672 है और उनका महत्तम समापवर्तक 28 है। ऐसी संख्याओं के कितने जोड़े बनाए जा सकते हैं?

Options :

1. ✔ 4

2. ✖ 3

3. ✖ 2

4. ✖ 5

Question Number : 93 Question Id : 5861806595 Question Type : MCQ Option Shuffling : Yes

Correct Marks : 1 Wrong Marks : 0.25

Find the sum of the greatest four - digit number and smallest five - digit number that have 28 as their HCF.

Options :

1. ✖ 20200

2. ✖ 20040

3. ✔ 20020

4. ✖ 20024

Question Number : 93 Question Id : 5861806595 Question Type : MCQ Option Shuffling : Yes

Correct Marks : 1 Wrong Marks : 0.25

सबसे बड़ी चार - अंकीय संख्या और सबसे छोटी पांच - अंकीय संख्या का योग ज्ञात कीजिए, जिसका महत्तम समापवर्तक 28 है।

Options :

1. ✖ 20200

2. ✖ 20040

3. ✔ 20020

4. ✖ 20024

Question Number : 94 Question Id : 5861806596 Question Type : MCQ Option Shuffling : Yes

Correct Marks : 1 Wrong Marks : 0.25

Rs. 9400 is distributed among Arjun, Bunty and Charu in the inverse ratio of 3 : 4 : 5. Find the sum of the shares of Bunty and Charu.

Options :

1. ✓ Rs. 5,400

2. ✗ Rs. 4,500

3. ✗ Rs. 7,000

4. ✗ Rs. 6,400

Question Number : 94 Question Id : 5861806596 Question Type : MCQ Option Shuffling : Yes

Correct Marks : 1 Wrong Marks : 0.25

अर्जुन, बंटी और चारु के बीच 3 : 4 : 5 के व्युत्क्रमानुपात में रुपये 9,400 वितरित किए गए। बंटी और चारु को मिले हिस्से का योग ज्ञात कीजिए।

Options :

1. ✓ रुपये 5,400

2. ✗ रुपये 4,500

3. ✗ रुपये 7,000

4. ✗ रुपये 6,400

Question Number : 95 Question Id : 5861806597 Question Type : MCQ Option Shuffling : Yes

Correct Marks : 1 Wrong Marks : 0.25

Rs. 12,400 is divided between Arjuna, Babul and Chaman in such a way that Arjuna gets 40% of what Chaman gets and

Babul gets  $\frac{2}{3}$  times of what Chaman gets. After dividing, Arjuna, Babul and Chaman donate 10%, 20% and 30% respectively of their dividends to charity. Find the total amount of money donated by them to charity.

Options :

1. ✖ Rs. 2,800

2. ✔ Rs. 2,840

3. ✖ Rs. 2,850

4. ✖ Rs. 2,780

Question Number : 95 Question Id : 5861806597 Question Type : MCQ Option Shuffling : Yes

Correct Marks : 1 Wrong Marks : 0.25

रुपये 12,400 की राशि को अर्जुन, बाबुल और चमन के बीच इस तरह विभाजित किया जाता है कि अर्जुन को चमन को मिली राशि का 40% हिस्सा मिलता है और बाबुल को चमन को मिलने वाली राशि का  $\frac{2}{3}$  हिस्सा मिलता है। बंटवारे के बाद अर्जुन, बाबुल और चमन अपने लाभांश का क्रमशः 10%, 20% और 30% हिस्सा दान कर देते हैं। उनके द्वारा दान में दी गई कुल राशि की गणना कीजिए।

Options :

1. ✖ रुपये 2,800

2. ✔ रुपये 2,840

3. ✖ रुपये 2,850

4. ✖ रुपये 2,780

Question Number : 96 Question Id : 5861806598 Question Type : MCQ Option Shuffling : Yes

Correct Marks : 1 Wrong Marks : 0.25

60% of a number is 28 less than a century. How much must be added to the number to make it double century.

Options :

1. ✖ 120

2. ✖ 60

3. ✔ 80

4. ✖ 40

Question Number : 96 Question Id : 5861806598 Question Type : MCQ Option Shuffling : Yes

Correct Marks : 1 Wrong Marks : 0.25

किसी संख्या का 60% एक शतक से 28 कम है। इसे दोहरे शतक में बदलने के लिए निम्न में से कौन सी संख्या जोड़ी जानी चाहिए।

Options :

1. ✖ 120

2. ✖ 60

3. ✔ 80

4. ✖ 40

Question Number : 97 Question Id : 5861806599 Question Type : MCQ Option Shuffling : Yes

Correct Marks : 1 Wrong Marks : 0.25

Sukhdev's salary is Rs. 9,80,000. If there is no tax up to Rs. 2,50,000, 5% tax up to Rs. 5,00,000 and 20% tax up to Rs. 10,00,000, then find the total tax paid by Sukhdev.

Options :

1. ✔ Rs. 1,08,500



2. ✖ Rs. 1,80,500

3. ✖ Rs. 2,08,500

4. ✖ Rs. 2,80,500

Question Number : 97 Question Id : 5861806599 Question Type : MCQ Option Shuffling : Yes

Correct Marks : 1 Wrong Marks : 0.25

सुखदेव का वेतन रुपये 9,80,000 है। यदि रुपये 2,50,000 तक कोई कर लागू ना हो तथा रुपये 5,00,000 तक 5% कर लिया जाए और रुपये 10,00,000 तक 20% कर लिया जाए तो सुखदेव ने कुल कितने कर का भुगतान किया?

Options :

1. ✔ रुपये 1,08,500

2. ✖ रुपये 1,80,500

3. ✖ रुपये 2,08,500

4. ✖ रुपये 2,80,500

Question Number : 98 Question Id : 5861806600 Question Type : MCQ Option Shuffling : Yes

Correct Marks : 1 Wrong Marks : 0.25

The price of sugar increases by 25%. By how much percentage must a family reduce their consumption of sugar so that their expenditure remains the same.

Options :

1. ✖ 25%

2. ✖ 15%

3. ✖ 10%

4. ✔ 20%

Question Number : 98 Question Id : 5861806600 Question Type : MCQ Option Shuffling : Yes

Correct Marks : 1 Wrong Marks : 0.25

चीनी की कीमत में 25% की बढ़ोत्तरी हो जाती है। किसी परिवार को अपने खर्च को पहले जैसा ही बनाए रखने के लिए चीनी की खपत को कितना कम करना चाहिए?

Options :

1. ✖ 25%

2. ✖ 15%

3. ✖ 10%

4. ✔ 20%

Question Number : 99 Question Id : 5861806601 Question Type : MCQ Option Shuffling : Yes

Correct Marks : 1 Wrong Marks : 0.25

There are 120 employees in a firm. The mean weight of male employees is 61 kg and the mean weight of female employees is 58 kg. If the mean weight of all the employees is 59 kg, find the ratio of men to women.

Options :

1. ✔ 1 : 2

2. ✖ 2 : 1

3. ✖ 2 : 3

4. ✖ 3 : 2

Question Number : 99 Question Id : 5861806601 Question Type : MCQ Option Shuffling : Yes

Correct Marks : 1 Wrong Marks : 0.25

एक फर्म में कुल 120 कर्मचारी हैं। पुरुष कर्मचारियों का औसत वजन 61 kg और महिला कर्मचारियों का औसत वजन 58 kg है। यदि सभी कर्मचारियों का औसत वजन 59 kg है, तो पुरुषों और महिलाओं के वजन का अनुपात ज्ञात करें।

Options :

1. ✔ 1 : 2

2. ✖ 2 : 1

3. ✖ 2 : 3

4. ✖ 3 : 2

Question Number : 100 Question Id : 5861806602 Question Type : MCQ Option Shuffling : Yes

Correct Marks : 1 Wrong Marks : 0.25

There were 50 members in a project. Due to the arrival of 10 more members, the expense of snacks was increased by Rs. 210 per day while the average expenditure is decreased by Rs. 9 per day. What was the total expenditure per day before the arrival of new members?

Options :

1. ✖ Rs. 3,570

2. ✔ Rs. 3,750

3. ✖ Rs. 3,850

4. ✖ Rs. 3,700

Question Number : 100 Question Id : 5861806602 Question Type : MCQ Option Shuffling : Yes

Correct Marks : 1 Wrong Marks : 0.25

एक प्रोजेक्ट में कुल 50 सदस्य थे। अब इसमें 10 और नए सदस्यों के जुड़ जाने के कारण नाशते का खर्चा प्रतिदिन रुपये 210 के हिसाब से बढ़ गया वहीं औसत खर्चा रुपये 9 प्रतिदिन के हिसाब से कम हो गया। नए सदस्यों के आने से पहले प्रति दिन कुल खर्च कितना होता था?

Options :

1. ✘ रुपये 3,570

2. ✔ रुपये 3,750

3. ✘ रुपये 3,850

4. ✘ रुपये 3,700

## Arithmetic Ability2

Group Number :	6
Group Id :	586180317
Group Maximum Duration :	0
Group Minimum Duration :	0
Show Attended Group? :	No
Edit Attended Group? :	No
Break time:	0
Group Marks:	20
Is this Group for Examiner?:	No
Revisit allowed for group Instructions? :	Yes
Maximum Instruction Time:	0
Minimum Instruction Time:	0

## Arithmetic Ability2

Section Id :	586180321
Section Number :	1
Section type :	Online
Mandatory or Optional:	Mandatory
Number of Questions:	20

Number of Questions to be attempted: 20  
Section Marks: 20

Sub-Section Number: 1  
Sub-Section Id: 586180444  
Question Shuffling Allowed : Yes

Question Number : 101 Question Id : 5861806603 Question Type : MCQ Option Shuffling : Yes

Correct Marks : 1 Wrong Marks : 0.25

While selling 25 oranges at Rs. 340, a fruit seller loses an amount that is equal to the cost price of 8 oranges. What is the cost price of an orange?

Options :

1. ✓ Rs. 20

2. ✗ Rs. 25

3. ✗ Rs. 28

4. ✗ Rs. 30

Question Number : 101 Question Id : 5861806603 Question Type : MCQ Option Shuffling : Yes

Correct Marks : 1 Wrong Marks : 0.25

एक विक्रेता रुपये 340 में 25 संतरे बेचता है, इस सौदे में वह 8 संतरों की कीमत के बराबर की हानि उठाता है। एक संतरे की कीमत ज्ञात करें?

Options :

1. ✓ रुपये 20

2. ✗ रुपये 25

3. ✗ रुपये 28

4. ✖ रुपये 30

Question Number : 102 Question Id : 5861806604 Question Type : MCQ Option Shuffling : Yes

Correct Marks : 1 Wrong Marks : 0.25

1200 pens were bought at Rs. 50 a dozen. 500 pens were sold at 3 for Rs. 18 and the remaining at 5 for Rs. 40. Find the profit percentage.

Options :

1. ✖ 70%

2. ✔ 72%

3. ✖ 62%

4. ✖ 60%

Question Number : 102 Question Id : 5861806604 Question Type : MCQ Option Shuffling : Yes

Correct Marks : 1 Wrong Marks : 0.25

रुपये 50 प्रति दर्जन के हिसाब से 1200 पेन खरीदे गए। इनमें से रुपये 18 के 3 पेन के हिसाब से 500 पेन बेच दिए गए, बाकी बचे पेनों को रुपये 40 के 5 पेन के हिसाब से बेचा गया। लाभ प्रतिशत ज्ञात कीजिए।

Options :

1. ✖ 70%

2. ✔ 72%

3. ✖ 62%

4. ✖ 60%



Question Number : 103 Question Id : 5861806605 Question Type : MCQ Option Shuffling : Yes

Correct Marks : 1 Wrong Marks : 0.25

A merchant mixes 15 kg of rice (being sold at Rs. 60 per kg) with 85 kg of rice (being sold at Rs. 50 per kg) and sells the mixture at Rs. 59 per kg. Find his profit percentage (correct up to one decimal place).

Options :

1. ✖ 15.4%

2. ✔ 14.6%

3. ✖ 12.5%

4. ✖ 10.5%

Question Number : 103 Question Id : 5861806605 Question Type : MCQ Option Shuffling : Yes

Correct Marks : 1 Wrong Marks : 0.25

एक व्यापारी 15 kg चावल (जो रुपये 60 प्रति kg के भाव से बेचे जाने हैं) और 85 kg चावल (जो रुपये 50 प्रति kg के भाव से बेचे जाने हैं) को आपस में मिला देता है और इस मिश्रण को रुपये 59 प्रति kg के हिसाब से बेच देता है। व्यापारी का लाभ प्रतिशत ज्ञात करें (दशमलव के एक स्थान तक सही)।

Options :

1. ✖ 15.4%

2. ✔ 14.6%

3. ✖ 12.5%

4. ✖ 10.5%

Question Number : 104 Question Id : 5861806606 Question Type : MCQ Option Shuffling : Yes

Correct Marks : 1 Wrong Marks : 0.25

The marked price of an article is Rs. 800 and it is sold to Ashok at two successive discount of 10% and 20%. He spends Rs. 24 on transportation of the article. Find the selling price of the article if Ashok sold the article at 20% profit.

Options :

1. ✓ Rs. 720

2. ✗ Rs. 740

3. ✗ Rs. 700

4. ✗ Rs. 760

Question Number : 104 Question Id : 5861806606 Question Type : MCQ Option Shuffling : Yes

Correct Marks : 1 Wrong Marks : 0.25

किसी वस्तु का अंकित मूल्य रुपये 800 है और इसे अशोक को 10% और 20% की दो क्रमिक छूटों पर बेचा जाता है। वह वस्तु के परिवहन पर रुपये 24 खर्च करता है। यदि अशोक, वस्तु को 20% लाभ पर बेचता है तो वस्तु का विक्रय मूल्य ज्ञात करें।

Options :

1. ✓ रुपये 720

2. ✗ रुपये 740

3. ✗ रुपये 700

4. ✗ रुपये 760

Question Number : 105 Question Id : 5861806607 Question Type : MCQ Option Shuffling : Yes

Correct Marks : 1 Wrong Marks : 0.25

A shopkeeper sold a radio for Rs. 336 after giving a 4% discount on the marked price. Had he not given the discount, he would have earned a profit of 12%. Find the cost price of the radio.

Options :



1. ✖ Rs. 321.50

2. ✖ Rs. 300.50

3. ✔ Rs. 312.50

4. ✖ Rs. 318

Question Number : 105 Question Id : 5861806607 Question Type : MCQ Option Shuffling : Yes

Correct Marks : 1 Wrong Marks : 0.25

एक दुकानदार ने एक रेडियो अंकित मूल्य पर 4% की छूट देने के बाद रुपये 336 में बेचा। यदि उसने छूट नहीं दी होती, तो उसे 12% का लाभ हुआ होता। रेडियो का लागत मूल्य ज्ञात कीजिए।

Options :

1. ✖ रुपये 321.50

2. ✖ रुपये 300.50

3. ✔ रुपये 312.50

4. ✖ रुपये 318

Question Number : 106 Question Id : 5861806608 Question Type : MCQ Option Shuffling : Yes

Correct Marks : 1 Wrong Marks : 0.25

A sum of Rs. 12,500 gives a simple interest of Rs. 3125 in 2 years and 6 months. Find the rate of interest per annum.

Options :

1. ✔ 10%

2. ✖ 9%

3. ✖ 11%

4. ✖ 8%

Question Number : 106 Question Id : 5861806608 Question Type : MCQ Option Shuffling : Yes

Correct Marks : 1 Wrong Marks : 0.25

रुपये 12,500 की राशि 2 साल और 6 महीनों में रुपये 3125 का साधारण ब्याज प्रदान करती है। प्रतिवर्ष ब्याज दर ज्ञात कीजिए।

Options :

1. ✔ 10%

2. ✖ 9%

3. ✖ 11%

4. ✖ 8%

Question Number : 107 Question Id : 5861806609 Question Type : MCQ Option Shuffling : Yes

Correct Marks : 1 Wrong Marks : 0.25

A sum of Rs. 8,000 was invested on simple interest for as many years as the rate of interest. If the interest available is Rs. 11,520 at the end of the stipulated time, find the rate of interest.

Options :

1. ✖ 10%

2. ✔ 12%

3. ✖ 9%

4. ✖ 14%

Question Number : 107 Question Id : 5861806609 Question Type : MCQ Option Shuffling : Yes

Correct Marks : 1 Wrong Marks : 0.25

रुपये 8,000 की राशि का साधारण ब्याज पर ब्याज की दर के बराबर वर्षों के लिए निवेश किया गया। यदि निर्धारित अवधि के अंत में रुपये 11,520 का ब्याज प्राप्त होता है, तो ब्याज की दर ज्ञात कीजिए।

Options :

1. ✖ 10%

2. ✔ 12%

3. ✖ 9%

4. ✖ 14%

Question Number : 108 Question Id : 5861806610 Question Type : MCQ Option Shuffling : Yes

Correct Marks : 1 Wrong Marks : 0.25

Srivatsan borrowed Rs. 8,000 from a bank at 15% p.a. at simple interest. After five years, he paid Rs. 7,000. As he was not able to pay his debt fully, the bank took a cow from him and sold the cow for Rs. 19,000. The bank returned the excess money obtained by selling this cow to Srivatsan after adjusting the remaining due money. How much did the bank return?

Options :

1. ✔ Rs. 12,000

2. ✖ Rs. 10,000

3. ✖ Rs. 7,000

4. ✖ Rs. 13,000

Question Number : 108 Question Id : 5861806610 Question Type : MCQ Option Shuffling : Yes

Correct Marks : 1 Wrong Marks : 0.25

श्रीवत्सन ने बैंक से 15% प्रति वर्ष की दर से साधारण ब्याज पर ₹ 8,000 की राशि उधार ली। 5 साल के बाद उसने ₹ 7,000 चुका दिए। क्योंकि वह अपना कर्ज नहीं चुका पा रहा था, इस कारण से बैंक ने उसकी एक गाय जब्त कर ली और इसे ₹ 19,000 में बेच दिया। बैंक ने गाय बेचने से मिली राशि को शेष देय धन के साथ समायोजित करके बची हुई राशि श्रीवत्सन को वापस कर दी। गणना करें कि बैंक ने उसे कितनी राशि लौटाई?

Options :

1. ✔ रुपये 12,000

2. ✖ रुपये 10,000

3. ✖ रुपये 7,000

4. ✖ रुपये 13,000

Question Number : 109 Question Id : 5861806611 Question Type : MCQ Option Shuffling : Yes

Correct Marks : 1 Wrong Marks : 0.25

Rs. 16,820 is divided between Abhishek and Rajkumar in such a manner that Abhishek's share after four years at 5% rate of interest invested at compound interest will be equal to Rajkumar's share at the end of two years at 5% rate of interest compounded annually. Find Abhishek's share.

Options :

1. ✖ Rs. 10,000

2. ✖ Rs. 9,000

3. ✘ Rs. 9,500

4. ✔ Rs. 8,000

Question Number : 109 Question Id : 5861806611 Question Type : MCQ Option Shuffling : Yes

Correct Marks : 1 Wrong Marks : 0.25

रुपये 16,820 को अभिषेक और राजकुमार के बीच इस तरह से विभाजित किया गया है कि अभिषेक के हिस्से को चक्रवृद्धि ब्याज पर 5% की दर से चार साल के लिए निवेशित करने पर प्राप्त राशि राजकुमार के हिस्से को चक्रवृद्धि ब्याज पर 5% की वार्षिक दर पर 2 साल के लिए निवेशित करने पर प्राप्त राशि के बराबर होगी। अभिषेक के हिस्से की गणना करें।

Options :

1. ✘ रुपये 10,000

2. ✘ रुपये 9,000

3. ✘ रुपये 9,500

4. ✔ रुपये 8,000

Question Number : 110 Question Id : 5861806612 Question Type : MCQ Option Shuffling : Yes

Correct Marks : 1 Wrong Marks : 0.25

A sum of money will become Rs. 6,655 in three years and Rs. 6,050 in two years at a fixed rate of interest invested at compound interest. Find the amount invested.

Options :

1. ✘ Rs. 6,000

2. ✘ Rs. 4,500

3. ✓ Rs. 5,000

4. ✗ Rs. 5,500

Question Number : 110 Question Id : 5861806612 Question Type : MCQ Option Shuffling : Yes

Correct Marks : 1 Wrong Marks : 0.25

एक राशि एक निश्चित चक्रवृद्धि ब्याज दर पर तीन सालों में रुपये 6,655 और दो सालों में रुपये 6,050 हो जाती है। निवेश की गई राशि ज्ञात कीजिए।

Options :

1. ✗ रुपये 6,000

2. ✗ रुपये 4,500

3. ✓ रुपये 5,000

4. ✗ रुपये 5,500

Question Number : 111 Question Id : 5861806613 Question Type : MCQ Option Shuffling : Yes

Correct Marks : 1 Wrong Marks : 0.25

A shopkeeper has spherical ladoos of radius 10 cm. With the same amount of material, how many ladoos of radius 2.5 cm can be made?

Options :

1. ✓ 64

2. ✗ 65

3. ✗ 60



4. ✖ 68

Question Number : 111 Question Id : 5861806613 Question Type : MCQ Option Shuffling : Yes

Correct Marks : 1 Wrong Marks : 0.25

एक दुकानदार के पास 10 cm त्रिज्या के गोलाकार लड्डू हैं। सामग्री की मात्रा में कोई बदलाव किए बिना, 2.5 cm त्रिज्या के कितने लड्डू बनाए जा सकते हैं?

Options :

1. ✔ 64

2. ✖ 65

3. ✖ 60

4. ✖ 68

Question Number : 112 Question Id : 5861806614 Question Type : MCQ Option Shuffling : Yes

Correct Marks : 1 Wrong Marks : 0.25

If the side of an equilateral triangle is increased by 5 cm, then its area is increased by  $10\sqrt{3}$  cm<sup>2</sup>. Find its side.

Options :

1. ✖ 1.6 cm

2. ✔ 1.5 cm

3. ✖ 2 cm

4. ✖ 2.5 cm

Question Number : 112 Question Id : 5861806614 Question Type : MCQ Option Shuffling : Yes

Correct Marks : 1 Wrong Marks : 0.25

यदि एक समबाहु त्रिभुज की भुजा को 5 cm तक बढ़ाया जाता है, तो इसके क्षेत्रफल में  $10\sqrt{3}$  cm<sup>2</sup> की वृद्धि होती है। भुजा ज्ञात करें।

Options :

1. ✘ 1.6 cm

2. ✔ 1.5 cm

3. ✘ 2 cm

4. ✘ 2.5 cm

Question Number : 113 Question Id : 5861806615 Question Type : MCQ Option Shuffling : Yes

Correct Marks : 1 Wrong Marks : 0.25

The length, breadth and height of a cuboid are in the ratio 3 : 2 : 5 and the difference between the cost of painting it at the rate of Rs. 10 per m<sup>2</sup> and Rs. 12 per m<sup>2</sup> is Rs. 3,100. Find the height of the cuboid.

Options :

1. ✔ 25 m

2. ✘ 30 m

3. ✘ 32 m

4. ✘ 36 m

Question Number : 113 Question Id : 5861806615 Question Type : MCQ Option Shuffling : Yes

Correct Marks : 1 Wrong Marks : 0.25

एक घनाभ की लंबाई, चौड़ाई और ऊंचाई का अनुपात 3 : 2 : 5 है और इसे रुपये 10 प्रति m<sup>2</sup> की दर से पेंट करने तथा रुपये 12 प्रति m<sup>2</sup> की दर से पेंट करने के लिए आवश्यक राशि का अंतर रुपये 3,100 है। घनाभ की ऊंचाई ज्ञात कीजिए।



Options :

1. ✓ 25 m

2. ✗ 30 m

3. ✗ 32 m

4. ✗ 36 m

Question Number : 114 Question Id : 5861806616 Question Type : MCQ Option Shuffling : Yes

Correct Marks : 1 Wrong Marks : 0.25

Anita and Bitu can do a job in 15 days. Bitu and Clara can do the same job in 20 days. If Anita is twice as good a workman as Clara, then in how many days can Bitu alone complete the same work?

Options :

1. ✗ 25 days

2. ✓ 30 days

3. ✗ 32 days

4. ✗ 28 days

Question Number : 114 Question Id : 5861806616 Question Type : MCQ Option Shuffling : Yes

Correct Marks : 1 Wrong Marks : 0.25

अनीता और बिट्टू एक काम को 15 दिनों में कर सकते हैं। बिट्टू और क्लारा उसी काम को 20 दिनों में पूरा कर सकते हैं। यदि अनीता क्लारा से दोगुनी अच्छी कामगार है, तो बिट्टू उसी काम को अकेले कितने दिनों में पूरा कर सकता है?

Options :

1. ✘ 25 दिन

2. ✔ 30 दिन

3. ✘ 32 दिन

4. ✘ 28 दिन

Question Number : 115 Question Id : 5861806617 Question Type : MCQ Option Shuffling : Yes

Correct Marks : 1 Wrong Marks : 0.25

Five men and eight women can complete a job in 10 days. Three men and six women can complete the same job in 15 days. How long will 20 women take to complete the job?

Options :

1. ✘ 10 days

2. ✘ 8 days

3. ✘ 7 days

4. ✔ 9 days

Question Number : 115 Question Id : 5861806617 Question Type : MCQ Option Shuffling : Yes

Correct Marks : 1 Wrong Marks : 0.25

पांच पुरुष और आठ महिलाएं मिलकर एक काम को 10 दिनों में पूरा कर सकते हैं। तीन पुरुष और छह महिलाएं उसी काम को 15 दिनों में पूरा कर सकते हैं। 20 महिलाओं को यह काम पूरा करने में कितना समय लगेगा?

Options :

1. ✘ 10 दिन

2. ✖ 8 दिन

3. ✖ 7 दिन

4. ✔ 9 दिन

Question Number : 116 Question Id : 5861806618 Question Type : MCQ Option Shuffling : Yes

Correct Marks : 1 Wrong Marks : 0.25

The ratio of speeds of a scooter, car and a horse is 2 : 3 : 5. The average speed of all the three is 80 km/h. What is the average speed of the car and scooter?

Options :

1. ✔ 60 km/h

2. ✖ 70 km/h

3. ✖ 65 km/h

4. ✖ 64 km/h

Question Number : 116 Question Id : 5861806618 Question Type : MCQ Option Shuffling : Yes

Correct Marks : 1 Wrong Marks : 0.25

स्कूटर, कार और एक घोड़े की गति का अनुपात 2: 3: 5 है। तीनों की औसत गति 80 km/h है। कार और स्कूटर की औसत गति ज्ञात करें?

Options :

1. ✔ 60 km/h

2. ✖ 70 km/h

3. ✖ 65 km/h

4. ✖ 64 km/h

Question Number : 117 Question Id : 5861806619 Question Type : MCQ Option Shuffling : Yes

Correct Marks : 1 Wrong Marks : 0.25

A boat takes three hours to travel downstream from A to B. It takes the same boat five hours to travel upstream from B to A. The speed of the stream is 2 km/h. Find the distance between points A and B.

Options :

1. ✔ 30 km

2. ✖ 32 km

3. ✖ 35 km

4. ✖ 25 km

Question Number : 117 Question Id : 5861806619 Question Type : MCQ Option Shuffling : Yes

Correct Marks : 1 Wrong Marks : 0.25

A से B तक की यात्रा पूरी करने में एक नाव को धारा की दिशा में तीन घंटे लगते हैं। B से A तक की यात्रा के लिए उसी नाव को धारा की विपरीत दिशा में पांच घंटे लगते हैं। धारा की गति 2 km/h है। बिंदु A और B के बीच की दूरी ज्ञात कीजिए।

Options :

1. ✔ 30 km

2. ✖ 32 km

3. ✖ 35 km

4. ✖ 25 km

Question Number : 118 Question Id : 5861806620 Question Type : MCQ Option Shuffling : Yes

Correct Marks : 1 Wrong Marks : 0.25

In a flight of 1080 km, an aircraft was slowed down due to bad weather. Its average speed for the trip was reduced by 360 km/h and the time of flight increased by 30 minutes. The original duration of the flight was:

Options :

1. ✔ 1 hour

2. ✖ 2 hours

3. ✖ 3 hours

4. ✖  $2\frac{1}{2}$  hours

Question Number : 118 Question Id : 5861806620 Question Type : MCQ Option Shuffling : Yes

Correct Marks : 1 Wrong Marks : 0.25

1080 km की एक उड़ान में, खराब मौसम के कारण एक विमान धीमा हो गया। यात्रा के लिए इसकी औसत गति 360 km/h से कम हो गई और उड़ान का समय 30 मिनट बढ़ गया। उड़ान की मूल अवधि कितनी थी:

Options :

1. ✔ 1 घंटा

2. ✖ 2 घंटे

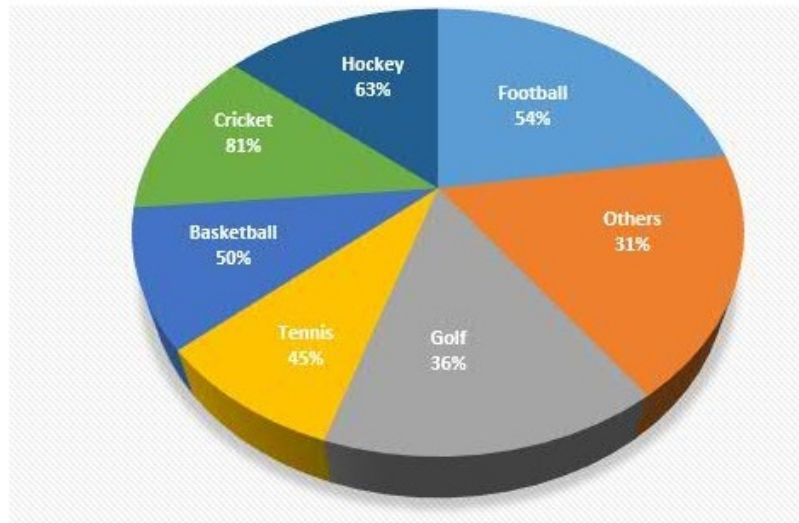
3. ✖ 3 घंटे

4. ✖  $2\frac{1}{2}$  घंटे

Question Number : 119 Question Id : 5861806621 Question Type : MCQ Option Shuffling : Yes

Correct Marks : 1 Wrong Marks : 0.25

The pie chart given here shows the expenditure of a country on various sports during a particular year. Study the graph carefully and answer the questions given below it.



How much percent more is spent on football than on tennis?

Note: For this question, discrepancy is found in question/answer. So, this question is ignored for all candidates.

Options :

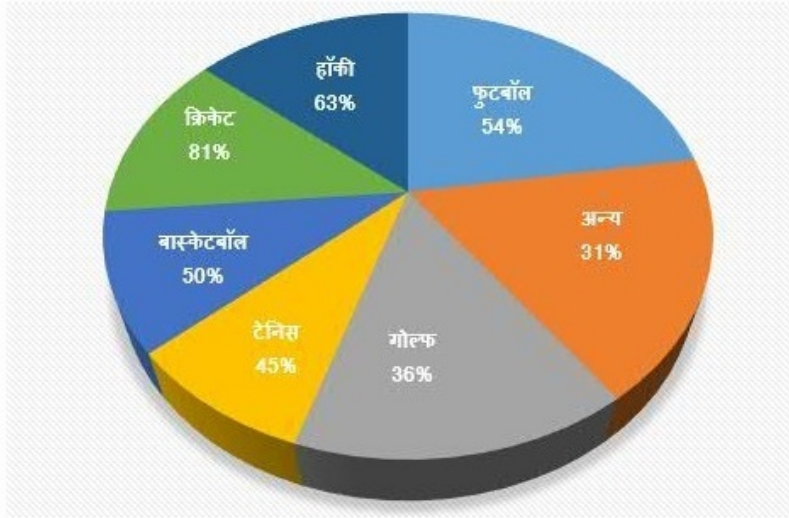
1. 35%
2. 40%
3. 25%
4. 20%

Question Number : 119 Question Id : 5861806621 Question Type : MCQ Option Shuffling : Yes

Correct Marks : 1 Wrong Marks : 0.25



दिया गया पाई चार्ट एक विशेष वर्ष के दौरान विभिन्न खेलों पर एक देश के खर्च को दर्शाता है। ग्राफ का ध्यानपूर्वक अध्ययन करें और नीचे दिए गए प्रश्नों के उत्तर दें।



टेनिस की तुलना में फुटबॉल पर कितना प्रतिशत अधिक खर्च होता है?

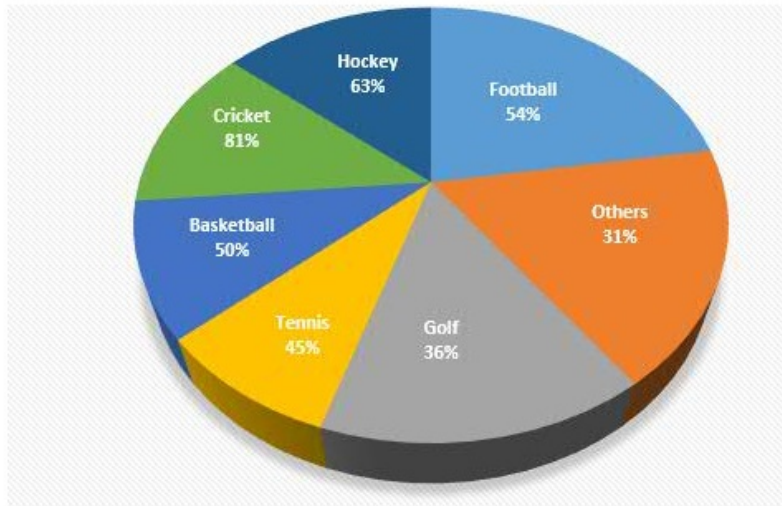
Note: For this question, discrepancy is found in question/answer. So, this question is ignored for all candidates.

Options :

1. 35%
2. 40%
3. 25%
4. 20%

Question Number : 120 Question Id : 5861806622 Question Type : MCQ Option Shuffling : Yes  
Correct Marks : 1 Wrong Marks : 0.25

The pie chart given here shows the expenditure of a country on various sports during a particular year. Study the graph carefully and answer the questions given below it.



If the total amount spent on sports during the year is Rs. 10,80,000, the amount spent on cricket exceeds the amount spent on basketball by:

Note: For this question, discrepancy is found in question/answer. So, this question is ignored for all candidates.

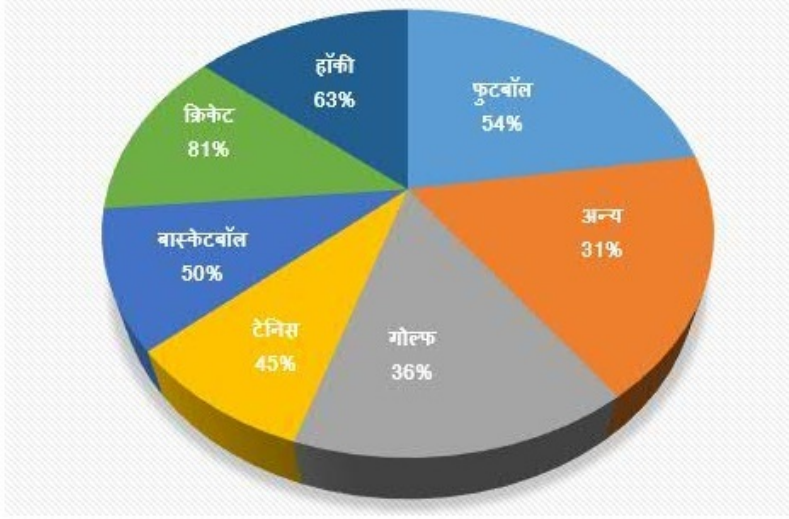
Options :

1. Rs. 93,000
2. Rs. 90,000
3. Rs. 85,000
4. Rs. 83,000

Question Number : 120 Question Id : 5861806622 Question Type : MCQ Option Shuffling : Yes  
Correct Marks : 1 Wrong Marks : 0.25



दिया गया पाई चार्ट एक विशेष वर्ष के दौरान विभिन्न खेलों पर एक देश के खर्च को दर्शाता है। ग्राफ का ध्यानपूर्वक अध्ययन करें और नीचे दिए गए प्रश्नों के उत्तर दें।



यदि किसी वर्ष में खेलों में हुआ कुल खर्च रुपये 10,80,000 था, तो क्रिकेट पर खर्च की गई राशि, बास्केटबॉल द्वारा खर्च की गई राशि से कितनी अधिक होगी?

Note: For this question, discrepancy is found in question/answer. So, this question is ignored for all candidates.

Options :

1. रुपये 93,000
2. रुपये 90,000
3. रुपये 85,000
4. रुपये 83,000

## General English1

Group Number :	7
Group Id :	586180318
Group Maximum Duration :	0
Group Minimum Duration :	0
Show Attended Group? :	No
Edit Attended Group? :	No

Break time:	0
Group Marks:	20
Is this Group for Examiner?:	No
Revisit allowed for group Instructions? :	Yes
Maximum Instruction Time:	0
Minimum Instruction Time:	0

## General English1

Section Id :	586180322
Section Number :	1
Section type :	Online
Mandatory or Optional:	Mandatory
Number of Questions:	20
Number of Questions to be attempted:	20
Section Marks:	20

Sub-Section Number:	1
Sub-Section Id:	586180445
Question Shuffling Allowed :	Yes

Question Number : 121 Question Id : 5861806623 Question Type : MCQ Option Shuffling : Yes  
Correct Marks : 1 Wrong Marks : 0.25

Fill in the blank with the most appropriate word.

All new information is \_\_\_\_\_ in the short - term memory, not in the long - term memory by the brain.

Options :

1. ✖ maintained
2. ✔ stored
3. ✖ heaped
4. ✖ shaped

Question Number : 121 Question Id : 5861806623 Question Type : MCQ Option Shuffling : Yes  
Correct Marks : 1 Wrong Marks : 0.25

Fill in the blank with the most appropriate word.

All new information is \_\_\_\_\_ in the short - term memory, not in the long - term memory by the brain.

Options :

1. ✘ maintained
2. ✔ stored
3. ✘ heaped
4. ✘ shaped

Question Number : 122 Question Id : 5861806624 Question Type : MCQ Option Shuffling : Yes  
Correct Marks : 1 Wrong Marks : 0.25

Fill in the blank with the most appropriate word.

The drug peddler started selling drugs \_\_\_\_\_ but when he was found out and caught, he was jailed.

Options :

1. ✘ mysteriously
2. ✘ simultaneously
3. ✔ surreptitiously
4. ✘ unknowingly

Question Number : 122 Question Id : 5861806624 Question Type : MCQ Option Shuffling : Yes  
Correct Marks : 1 Wrong Marks : 0.25

Fill in the blank with the most appropriate word.

The drug peddler started selling drugs \_\_\_\_\_ but when he was found out and caught, he was jailed.

Options :

1. ✖ mysteriously
2. ✖ simultaneously
3. ✔ surreptitiously
4. ✖ unknowingly

Question Number : 123 Question Id : 5861806625 Question Type : MCQ Option Shuffling : Yes  
Correct Marks : 1 Wrong Marks : 0.25

Fill in the blank with the most appropriate idiom / phrase.

The elections in India have \_\_\_\_\_ many new controversies among different political parties.

Options :

1. ✖ kicked out
2. ✔ kicked off
3. ✖ kicked back
4. ✖ kicked at

Question Number : 123 Question Id : 5861806625 Question Type : MCQ Option Shuffling : Yes  
Correct Marks : 1 Wrong Marks : 0.25

Fill in the blank with the most appropriate idiom / phrase.

The elections in India have \_\_\_\_\_ many new controversies among different political parties.

Options :

1. ✖ kicked out
2. ✔ kicked off
3. ✖ kicked back
4. ✖ kicked at

Question Number : 124 Question Id : 5861806626 Question Type : MCQ Option Shuffling : Yes

Correct Marks : 1 Wrong Marks : 0.25

Fill in the blank with the most appropriate idiom / phrase.

When the builder started \_\_\_\_\_ we all protested as the quality of construction started going down.

Options :

1. ✖ giving everyone the cold shoulder
2. ✖ hitting the nail on the head
3. ✔ cutting corners
4. ✖ doing something at the drop of a hat

Question Number : 124 Question Id : 5861806626 Question Type : MCQ Option Shuffling : Yes

Correct Marks : 1 Wrong Marks : 0.25

Fill in the blank with the most appropriate idiom / phrase.

When the builder started \_\_\_\_\_ we all protested as the quality of construction started going down.

Options :

1. ✖ giving everyone the cold shoulder
2. ✖ hitting the nail on the head
3. ✔ cutting corners
4. ✖ doing something at the drop of a hat

Question Number : 125 Question Id : 5861806627 Question Type : MCQ Option Shuffling : Yes

Correct Marks : 1 Wrong Marks : 0.25

Fill in the blank with the most appropriate idiom / phrase.

Could you please \_\_\_\_\_ the arrangements that need to be made for the exhibition?

Options :

1. ✖ elaborate to
2. ✖ elaborate in
3. ✖ elaborate with
4. ✔ elaborate on

Question Number : 125 Question Id : 5861806627 Question Type : MCQ Option Shuffling : Yes

Correct Marks : 1 Wrong Marks : 0.25

Fill in the blank with the most appropriate idiom / phrase.

Could you please \_\_\_\_\_ the arrangements that need to be made for the exhibition?

Options :

1. ✖ elaborate to
2. ✖ elaborate in
3. ✖ elaborate with
4. ✔ elaborate on

Question Number : 126 Question Id : 5861806628 Question Type : MCQ Option Shuffling : Yes

Correct Marks : 1 Wrong Marks : 0.25

Fill in the blank with the most appropriate option.

Increasingly worsening farsightedness \_\_\_\_\_ my uncle to switch between multiple pairs of glasses for various uses.

Options :

1. ✔ forced
2. ✖ had been forced
3. ✖ was forced
4. ✖ is forced

Question Number : 126 Question Id : 5861806628 Question Type : MCQ Option Shuffling : Yes  
Correct Marks : 1 Wrong Marks : 0.25

Fill in the blank with the most appropriate option.

Increasingly worsening farsightedness \_\_\_\_\_ my uncle to switch between multiple pairs of glasses for various uses.

Options :

1. ✓ forced
2. ✗ had been forced
3. ✗ was forced
4. ✗ is forced

Question Number : 127 Question Id : 5861806629 Question Type : MCQ Option Shuffling : Yes  
Correct Marks : 1 Wrong Marks : 0.25

Fill in the blank with the most appropriate option.

It \_\_\_\_\_ hard. Please don't go out to play.

Options :

1. ✓ is raining
2. ✗ rains
3. ✗ have been raining
4. ✗ will have rained

Question Number : 127 Question Id : 5861806629 Question Type : MCQ Option Shuffling : Yes  
Correct Marks : 1 Wrong Marks : 0.25

Fill in the blank with the most appropriate option.

It \_\_\_\_\_ hard. Please don't go out to play.

Options :

1. ✓ is raining

2. ✖ rains

3. ✖ have been raining

4. ✖ will have rained

Question Number : 128 Question Id : 5861806630 Question Type : MCQ Option Shuffling : Yes  
Correct Marks : 1 Wrong Marks : 0.25

Fill in the blank with the most appropriate option.

After \_\_\_\_\_ for my friend for 45 minutes, I realised that she was not coming.

Options :

1. ✖ waited

2. ✖ have waited

3. ✔ having waited

4. ✖ have been waiting

Question Number : 128 Question Id : 5861806630 Question Type : MCQ Option Shuffling : Yes  
Correct Marks : 1 Wrong Marks : 0.25

Fill in the blank with the most appropriate option.

After \_\_\_\_\_ for my friend for 45 minutes, I realised that she was not coming.

Options :

1. ✖ waited

2. ✖ have waited

3. ✔ having waited

4. ✖ have been waiting

Question Number : 129 Question Id : 5861806631 Question Type : MCQ Option Shuffling : Yes  
Correct Marks : 1 Wrong Marks : 0.25



Fill in the blank with the most appropriate word.

You've been watching videos on YouTube \_\_\_\_\_ four hours.  
You better stop now.

Options :

1. ✓ for
2. ✗ within
3. ✗ since
4. ✗ before

Question Number : 129 Question Id : 5861806631 Question Type : MCQ Option Shuffling : Yes  
Correct Marks : 1 Wrong Marks : 0.25

Fill in the blank with the most appropriate word.

You've been watching videos on YouTube \_\_\_\_\_ four  
hours. You better stop now.

Options :

1. ✓ for
2. ✗ within
3. ✗ since
4. ✗ before

Question Number : 130 Question Id : 5861806632 Question Type : MCQ Option Shuffling : Yes  
Correct Marks : 1 Wrong Marks : 0.25

Fill in the blank with the most appropriate option.

The doctor asked me many questions about my illness, \_\_\_\_\_ I  
answered truthfully.

Options :

1. ✗ many of them

2. ✓ most of which

3. ✗ most of those

4. ✗ many of that

Question Number : 130 Question Id : 5861806632 Question Type : MCQ Option Shuffling : Yes  
Correct Marks : 1 Wrong Marks : 0.25

Fill in the blank with the most appropriate option.

The doctor asked me many questions about my illness,  
\_\_\_\_\_ I answered truthfully.

Options :

1. ✗ many of them

2. ✓ most of which

3. ✗ most of those

4. ✗ many of that

Question Number : 131 Question Id : 5861806633 Question Type : MCQ Option Shuffling : Yes  
Correct Marks : 1 Wrong Marks : 0.25

Select the option that expresses the given sentence in reported speech.

The keynote speaker, who was very late, said, “I know I’m late and we have lost 15 minutes. I do assure you of a very motivating session.”

Options :

1. ✗ The keynote speaker, who was very late, said that he knows he was late and we have lost 15 minutes but he assured us that we would have a very motivating session.

2. ✖ The keynote speaker, who had been very late, said that he knew he would have been late and we had lost 15 minutes but he assured us that we would have a very motivating session.

3. ✖ The keynote speaker, who have been very late, said that he knew he would have been late and we has lost 15 minutes but he assured us that we would have a very motivating session.

4. ✔ The keynote speaker, who was very late, said that he knew he was late and we had lost 15 minutes but he assured us that we would have a very motivating session.

Question Number : 131 Question Id : 5861806633 Question Type : MCQ Option Shuffling : Yes

Correct Marks : 1 Wrong Marks : 0.25

Select the option that expresses the given sentence in reported speech.

The keynote speaker, who was very late, said, "I know I'm late and we have lost 15 minutes. I do assure you of a very motivating session."

Options :

1. ✖ The keynote speaker, who was very late, said that he knows he was late and we have lost 15 minutes but he assured us that we would have a very motivating session.

2. ✖ The keynote speaker, who had been very late, said that he knew he would have been late and we had lost 15 minutes but he assured us that we would have a very motivating session.

3. ✖ The keynote speaker, who have been very late, said that he knew he would have been late and we has lost 15 minutes but he assured us that we would have a very motivating session.

4. ✔ The keynote speaker, who was very late, said that he knew he was late and we had lost 15 minutes but he assured us that we would have a very motivating session.

Question Number : 132 Question Id : 5861806634 Question Type : MCQ Option Shuffling : Yes  
Correct Marks : 1 Wrong Marks : 0.25

Select the option that expresses the given sentence in reported speech.

Mr. Gupta said to Tanvi, “It will be dark by the time you reach the airport. Don’t you think I should come to pick you up?”

Options :

1. ✖ Mr. Gupta told Tanvi that it would be dark by the time she would have reached the airport. He enquired that she did not think he should pick her up.

2. ✔ Mr. Gupta informed Tanvi that it would be dark by the time she reached the airport. He asked if she did not think he should pick her up.

3. ✖ Mr. Gupta told Tanvi that it would be dark by the time she reaches the airport. He suggested shouldn't he pick her up?

4. ✖ Mr. Gupta said to Tanvi that it was will be dark by the time she reached the airport. He asked if she did not think he should pick her up.

Question Number : 132 Question Id : 5861806634 Question Type : MCQ Option Shuffling : Yes  
Correct Marks : 1 Wrong Marks : 0.25

Select the option that expresses the given sentence in reported speech.

Mr. Gupta said to Tanvi, "It will be dark by the time you reach the airport. Don't you think I should come to pick you up?"

Options :

1. ✖ Mr. Gupta told Tanvi that it would be dark by the time she would have reached the airport. He enquired that she did not think he should pick her up.

2. ✔ Mr. Gupta informed Tanvi that it would be dark by the time she reached the airport. He asked if she did not think he should pick her up.

3. ✖ Mr. Gupta told Tanvi that it would be dark by the time she reaches the airport. He suggested shouldn't he pick her up?

4. ✖ Mr. Gupta said to Tanvi that it was will be dark by the time she reached the airport. He asked if she did not think he should pick her up.

Question Number : 133 Question Id : 5861806635 Question Type : MCQ Option Shuffling : Yes

Correct Marks : 1 Wrong Marks : 0.25

Fill in the blank with the most appropriate option.

Hina and Ananya don't go for Maths classes, \_\_\_\_\_?

Options :

1. ✖ aren't they

2. ✔ do they

3. ✖ have they

4. ✖ don't they

Question Number : 133 Question Id : 5861806635 Question Type : MCQ Option Shuffling : Yes

Correct Marks : 1 Wrong Marks : 0.25

Fill in the blank with the most appropriate option.

Hina and Ananya don't go for Maths classes, \_\_\_\_\_?

Options :

1. ✖ aren't they

2. ✔ do they

3. ✖ have they

4. ✖ don't they

Question Number : 134 Question Id : 5861806636 Question Type : MCQ Option Shuffling : Yes

Correct Marks : 1 Wrong Marks : 0.25

Select the option that expresses the given sentence in passive voice.

I am writing a book describing my adventures. I am also inserting pictures of places I went to in the book.

Options :

1. \* A book has been written by me in which I am describing my adventures. Pictures of places I went to are also being inserted in the book.
2. \* A book is written by me in which I am describing my adventures. I have also inserted pictures of places I went to in the book.
3. ✓ A book is being written by me in which I am describing my adventures. Pictures of places I went to are also being inserted in the book.
4. \* A book is being written by me in which I am describing my adventures as well as pictures of places I went to are also being inserted in the book.

Question Number : 134 Question Id : 5861806636 Question Type : MCQ Option Shuffling : Yes  
Correct Marks : 1 Wrong Marks : 0.25

Select the option that expresses the given sentence in passive voice.

I am writing a book describing my adventures. I am also inserting pictures of places I went to in the book.

Options :

1. ✖ A book has been written by me in which I am describing my adventures. Pictures of places I went to are also being inserted in the book.
2. ✖ A book is written by me in which I am describing my adventures. I have also inserted pictures of places I went to in the book.
3. ✔ A book is being written by me in which I am describing my adventures. Pictures of places I went to are also being inserted in the book.
4. ✖ A book is being written by me in which I am describing my adventures as well as pictures of places I went to are also being inserted in the book.

Question Number : 135 Question Id : 5861806637 Question Type : MCQ Option Shuffling : Yes  
Correct Marks : 1 Wrong Marks : 0.25

Select the option that expresses the given sentence in passive voice.

We had planned to visit Greece in the summer vacation but have dropped the plan due to cancellation of many flights.

Options :

1. ✔ A visit to Greece had been planned by us but the plan has been dropped due to cancellation of many flights.
2. ✖ We planned a visit to Greece but the plan was dropped due to cancellation of many flights.
3. ✖ A visit to Greece was been planned by us but the plan is being dropped due to cancellation of many flights.



4. ✖ A visit to Greece has been planned by us but the plan has been dropped due to cancellation of many flights.

Question Number : 135 Question Id : 5861806637 Question Type : MCQ Option Shuffling : Yes  
Correct Marks : 1 Wrong Marks : 0.25

Select the option that expresses the given sentence in passive voice.

We had planned to visit Greece in the summer vacation but have dropped the plan due to cancellation of many flights.

Options :

1. ✔ A visit to Greece had been planned by us but the plan has been dropped due to cancellation of many flights.
2. ✖ We planned a visit to Greece but the plan was dropped due to cancellation of many flights.
3. ✖ A visit to Greece was been planned by us but the plan is being dropped due to cancellation of many flights.
4. ✖ A visit to Greece has been planned by us but the plan has been dropped due to cancellation of many flights.

Question Number : 136 Question Id : 5861806638 Question Type : MCQ Option Shuffling : Yes  
Correct Marks : 1 Wrong Marks : 0.25

In the sentence given below, four words / phrases have been underlined. Select the words / phrase that contains an error.

The Election Commission has that announcement that re - polling will take place in booths that reported 'booth capturing'.

Options :

1. ✓ has that announcement

2. ✗ that re - polling

3. ✗ will take place

4. ✗ that reported

Question Number : 136 Question Id : 5861806638 Question Type : MCQ Option Shuffling : Yes  
Correct Marks : 1 Wrong Marks : 0.25

In the sentence given below, four words / phrases have been underlined. Select the words / phrase that contains an error.

The Election Commission has that announcement that re - polling will take place in booths that reported 'booth capturing'.

Options :

1. ✓ has that announcement

2. ✗ that re - polling

3. ✗ will take place

4. ✗ that reported

Question Number : 137 Question Id : 5861806639 Question Type : MCQ Option Shuffling : Yes  
Correct Marks : 1 Wrong Marks : 0.25

In the sentence given below, four words / phrases have been underlined. Select the words / phrase that contains an error.

Rekha had skills that most girls of her age did not possess but she does well in exams to everyone's surprise.

Options :

1. ✗ had skills

2. ✖ that most girls

3. ✖ did not possess

4. ✔ but she does well

Question Number : 137 Question Id : 5861806639 Question Type : MCQ Option Shuffling : Yes  
Correct Marks : 1 Wrong Marks : 0.25

In the sentence given below, four words / phrases have been underlined. Select the words / phrase that contains an error.

Rekha had skills that most girls of her age did not possess but she does well in exams to everyone's surprise.

Options :

1. ✖ had skills

2. ✖ that most girls

3. ✖ did not possess

4. ✔ but she does well

Question Number : 138 Question Id : 5861806640 Question Type : MCQ Option Shuffling : Yes  
Correct Marks : 1 Wrong Marks : 0.25

In the sentence given below, four words / phrases have been underlined. Select the words / phrase that contains an error.

Many countries like China, Singapore and Japan amongst others are routinely ranks in the number one spots in both, maths and science in standardised tests.

Options :

1. ✖ amongst others

2. ✔ routinely ranks

3. ✖ in the number one spots

4. ✖ in standardized tests

Question Number : 138 Question Id : 5861806640 Question Type : MCQ Option Shuffling : Yes

Correct Marks : 1 Wrong Marks : 0.25

In the sentence given below, four words / phrases have been underlined. Select the words / phrase that contains an error.

Many countries like China, Singapore and Japan amongst others are routinely ranks in the number one spots in both, maths and science in standardised tests.

Options :

1. ✖ amongst others

2. ✔ routinely ranks

3. ✖ in the number one spots

4. ✖ in standardized tests

Question Number : 139 Question Id : 5861806641 Question Type : MCQ Option Shuffling : Yes

Correct Marks : 1 Wrong Marks : 0.25

In the sentence given below, four words / phrases have been underlined. Select the words / phrase that contains an error.

Halfway up the mountain, we were find out that we were looking down at the scariest fall ever.

Options :

1. ✖ up the mountain

2. ✔ we were find out

3. ✖ we were looking down

#### 4. ✖ at the scariest fall

Question Number : 139 Question Id : 5861806641 Question Type : MCQ Option Shuffling : Yes  
Correct Marks : 1 Wrong Marks : 0.25

In the sentence given below, four words / phrases have been underlined. Select the words / phrase that contains an error.

Halfway up the mountain, we were find out that we were looking down at the scariest fall ever.

Options :

1. ✖ up the mountain
2. ✔ we were find out
3. ✖ we were looking down
4. ✖ at the scariest fall

Question Number : 140 Question Id : 5861806642 Question Type : MCQ Option Shuffling : Yes  
Correct Marks : 1 Wrong Marks : 0.25

In the sentence given below, four words / phrases have been underlined. Select the words / phrase that contains an error.

When you were memorise, try to understand what you are learning and set your priorities so that you learn only the most necessary information.

Options :

1. ✔ you were memorize
2. ✖ try to understand
3. ✖ set your priorities
4. ✖ the most necessary information

Question Number : 140 Question Id : 5861806642 Question Type : MCQ Option Shuffling : Yes

Correct Marks : 1 Wrong Marks : 0.25

In the sentence given below, four words / phrases have been underlined. Select the words / phrase that contains an error.

When you were memorise, try to understand what you are learning and set your priorities so that you learn only the most necessary information.

Options :

1. ✓ you were memorize
2. ✗ try to understand
3. ✗ set your priorities
4. ✗ the most necessary information

## General English2

Group Number :	8
Group Id :	586180319
Group Maximum Duration :	0
Group Minimum Duration :	0
Show Attended Group? :	No
Edit Attended Group? :	No
Break time:	0
Group Marks:	20
Is this Group for Examiner?:	No
Revisit allowed for group Instructions? :	Yes
Maximum Instruction Time:	0
Minimum Instruction Time:	0

## General English2

Section Id :	586180323
Section Number :	1
Section type :	Online

<b>Mandatory or Optional:</b>	Mandatory
<b>Number of Questions:</b>	12
<b>Number of Questions to be attempted:</b>	12
<b>Section Marks:</b>	20

<b>Sub-Section Number:</b>	1
<b>Sub-Section Id:</b>	586180446
<b>Question Shuffling Allowed :</b>	Yes

Question Number : 141 Question Id : 5861806643 Question Type : MCQ Option Shuffling : Yes  
Correct Marks : 1 Wrong Marks : 0.25

Identify the most appropriate synonym of the underlined word.

A thermostat is a device that automatically regulates temperature.

Options :

1. ✖ inspects
2. ✖ freezes
3. ✔ controls
4. ✖ examines

Question Number : 141 Question Id : 5861806643 Question Type : MCQ Option Shuffling : Yes  
Correct Marks : 1 Wrong Marks : 0.25

Identify the most appropriate synonym of the underlined word.

A thermostat is a device that automatically regulates temperature.

Options :

1. ✖ inspects
2. ✖ freezes
3. ✔ controls

## 4. ✖ examines

Question Number : 142 Question Id : 5861806644 Question Type : MCQ Option Shuffling : Yes  
Correct Marks : 1 Wrong Marks : 0.25

Identify the most appropriate synonym of the underlined word.

To ensure your privacy, you must make sure no one can wrest control of your gadgets from you.

Options :

1. ✖ dismantle
2. ✔ seize
3. ✖ release
4. ✖ jerk

Question Number : 142 Question Id : 5861806644 Question Type : MCQ Option Shuffling : Yes  
Correct Marks : 1 Wrong Marks : 0.25

Identify the most appropriate synonym of the underlined word.

To ensure your privacy, you must make sure no one can wrest control of your gadgets from you.

Options :

1. ✖ dismantle
2. ✔ seize
3. ✖ release
4. ✖ jerk

Question Number : 143 Question Id : 5861806645 Question Type : MCQ Option Shuffling : Yes  
Correct Marks : 1 Wrong Marks : 0.25



Identify the most appropriate synonym of the underlined word.

It is very difficult to get a skeptic to think positively about the country.

Options :

1. ✓ cynic
2. ✗ wayward
3. ✗ hypocrite
4. ✗ professional

Question Number : 143 Question Id : 5861806645 Question Type : MCQ Option Shuffling : Yes  
Correct Marks : 1 Wrong Marks : 0.25

Identify the most appropriate synonym of the underlined word.

It is very difficult to get a skeptic to think positively about the country.

Options :

1. ✓ cynic
2. ✗ wayward
3. ✗ hypocrite
4. ✗ professional

Question Number : 144 Question Id : 5861806646 Question Type : MCQ Option Shuffling : Yes  
Correct Marks : 1 Wrong Marks : 0.25

Identify the most appropriate synonym of the underlined word.

Cyclone Fani has caused a lot of damage and devastation in Odisha. The calamity has affected millions of villagers.

Options :

1. ✖ disease
2. ✖ outcome
3. ✔ adversity
4. ✖ event

Question Number : 144 Question Id : 5861806646 Question Type : MCQ Option Shuffling : Yes  
Correct Marks : 1 Wrong Marks : 0.25

Identify the most appropriate synonym of the underlined word.

Cyclone Fani has caused a lot of damage and devastation in Odisha. The calamity has affected millions of villagers.

Options :

1. ✖ disease
2. ✖ outcome
3. ✔ adversity
4. ✖ event

Question Number : 145 Question Id : 5861806647 Question Type : MCQ Option Shuffling : Yes  
Correct Marks : 1 Wrong Marks : 0.25

Identify the most appropriate synonym of the underlined word.

We could ascertain that the story by the eccentric gentleman was fabricated

Options :

1. ✖ delightful
2. ✔ strange
3. ✖ worthless
4. ✖ mysterious

Question Number : 145 Question Id : 5861806647 Question Type : MCQ Option Shuffling : Yes  
Correct Marks : 1 Wrong Marks : 0.25

Identify the most appropriate synonym of the underlined word.

We could ascertain that the story by the eccentric gentleman was fabricated

Options :

1. ✖ delightful
2. ✔ strange
3. ✖ worthless
4. ✖ mysterious

Question Number : 146 Question Id : 5861806648 Question Type : MCQ Option Shuffling : Yes  
Correct Marks : 1 Wrong Marks : 0.25

Identify the most appropriate ANTONYM of the underlined word.

The appearance of the Yeti has been baffling all researchers.

Options :

1. ✖ sight
2. ✖ vision
3. ✔ disappearance
4. ✖ coming

Question Number : 146 Question Id : 5861806648 Question Type : MCQ Option Shuffling : Yes  
Correct Marks : 1 Wrong Marks : 0.25

Identify the most appropriate ANTONYM of the underlined word.

The appearance of the Yeti has been baffling all researchers.

Options :

1. ✖ sight
2. ✖ vision
3. ✔ disappearance
4. ✖ coming

Question Number : 147 Question Id : 5861806649 Question Type : MCQ Option Shuffling : Yes  
Correct Marks : 1 Wrong Marks : 0.25

Identify the most appropriate ANTONYM of the underlined word.

Being a submissive person, Rita always listens to others' advice.

Options :

1. ✖ humble
2. ✔ domineering
3. ✖ dishonest
4. ✖ compassionate

Question Number : 147 Question Id : 5861806649 Question Type : MCQ Option Shuffling : Yes

Correct Marks : 1 Wrong Marks : 0.25

Identify the most appropriate ANTONYM of the underlined word.

Being a submissive person, Rita always listens to others' advice.

Options :

1. ✘ humble
2. ✔ domineering
3. ✘ dishonest
4. ✘ compassionate

Question Number : 148 Question Id : 5861806650 Question Type : MCQ Option Shuffling : Yes

Correct Marks : 1 Wrong Marks : 0.25

Identify the most appropriate ANTONYM of the underlined word.

The concert looked as if it would have varied performances, but it turned out to be quite boring.

Options :

1. ✘ dreary
2. ✔ monotonous
3. ✘ ambiguous
4. ✘ vague

Question Number : 148 Question Id : 5861806650 Question Type : MCQ Option Shuffling : Yes

Correct Marks : 1 Wrong Marks : 0.25

Identify the most appropriate ANTONYM of the underlined word.

The concert looked as if it would have varied performances, but it turned out to be quite boring.

Options :

1. ✖ dreary
2. ✔ monotonous
3. ✖ ambiguous
4. ✖ vague

Question Number : 149 Question Id : 5861806651 Question Type : MCQ Option Shuffling : Yes

Correct Marks : 1 Wrong Marks : 0.25

Identify the most appropriate ANTONYM of the underlined word.

While I am outgoing, my sister is quite reclusive.

Options :

1. ✖ pleasing
2. ✖ friendly
3. ✔ withdrawn
4. ✖ adventurous

Question Number : 149 Question Id : 5861806651 Question Type : MCQ Option Shuffling : Yes

Correct Marks : 1 Wrong Marks : 0.25

Identify the most appropriate ANTONYM of the underlined word.

While I am outgoing, my sister is quite reclusive.

Options :

1. ✖ pleasing
2. ✖ friendly
3. ✔ withdrawn
4. ✖ adventurous

Question Number : 150 Question Id : 5861806652 Question Type : MCQ Option Shuffling : Yes  
Correct Marks : 1 Wrong Marks : 0.25

Identify the most appropriate ANTONYM of the underlined word.

Sheela was quite suspicious when she found a stranger lurking around her backyard.

Options :

1. ✖ friendly
2. ✔ trusting
3. ✖ terrified
4. ✖ adjusting

Question Number : 150 Question Id : 5861806652 Question Type : MCQ Option Shuffling : Yes  
Correct Marks : 1 Wrong Marks : 0.25

Identify the most appropriate ANTONYM of the underlined word.

Sheela was quite suspicious when she found a stranger lurking around her backyard.

Options :

1. ✘ friendly
2. ✔ trusting
3. ✘ terrified
4. ✘ adjusting

Sub-Section Number:	2
Sub-Section Id:	586180447
Question Shuffling Allowed :	Yes

Question Id : 5861806653 Question Type : COMPREHENSION Sub Question Shuffling Allowed : Yes Group Comprehension Questions : No

Question Numbers : (151 to 155)

Question Label : Comprehension



Read the following passage and answer the questions that follow.

How well countries adapt to the Fourth Industrial Revolution (4IR) will determine whether they 'thrive' or 'stagnate' and could further divide workforces and increase social tensions, according to the latest version of the World Economic Forum's Global Competitiveness Report.

Almost 40 years after its first annual assessment of the global economy, the Forum's 2018 report uses new methodology to understand the full impact of the 4IR, and finds factors including human capital, agility, resilience, openness and innovation becoming increasingly important.

The new index measures 140 economies against 98 indicators, organized into 12 'pillars' or drivers of productivity, to determine how close the economy is to the ideal state or 'frontier' of competitiveness. The US topped the rankings, being 'closest to the competitiveness frontier', with Singapore, Germany, Switzerland and Japan completing the top five. At the other end of the scale, Haiti, Yemen and Chad were found to be the least competitive economies.

Competitiveness is not only associated with higher incomes, but also better socio-economic outcomes, including life satisfaction. The US scored 85.6 out of 100 on the index, coming in the top three for seven of the 12 pillars. Its entrepreneurial culture saw it score highly in the business dynamism pillar. It also scored highly for its labour market and financial system.

But, there were several areas which showed it still has more to do. It notably drops behind other advanced economies in the health pillar, with a life expectancy of 67.7 years, putting it in 46th place. And it was far from the frontier for checks and balances (40th place), judicial independence (15th) and corruption (16th).

The top 11 countries all score above 80 points for competitiveness. Second-placed Singapore (83.5) is defined by its high score for openness and it leads the way for infrastructure, with a near-perfect score of 95.7 for its world-beating transport system.

Germany, in third place, is the highest placed European economy for competitiveness, with particular strength in innovation capability (first place, with 88), business dynamism (82, second behind the US) and health (94). One of the key findings from the report is that all economies could do better in certain areas. For example, while Singapore might be the most 'future-ready' economy, Finland outdoes it for having a digitally skilled workforce.

And while low and middle-income economies can leverage technology to jumpstart growth, the report emphasises the importance of 'old' developmental pillars, such as governance, infrastructure and skills. Worryingly, of the 140 economies surveyed, 117 still lagged behind for quality of institutions, which impacted their overall competitiveness.

There was also widespread weakness at mastering the innovation process, with 103 countries scoring lower than 50 when it comes to following through from idea generation to commercial product.

Sub questions

Question Number : 151 Question Id : 5861806654 Question Type : MCQ Option Shuffling : Yes

Correct Marks : 1 Wrong Marks : 0.25

What does the World Economic Forum do?

Options :

1. ✓ It measures countries' economic progress and determines how they are faring competitively
2. ✗ It reports on the labour market and financial system of all countries.
3. ✗ It guides countries in their economic matters and enables them to achieve fast growth
4. ✗ It guides countries to divide their workforces and increase social gaps

Question Number : 152 Question Id : 5861806655 Question Type : MCQ Option Shuffling : Yes

Correct Marks : 1 Wrong Marks : 0.25

Which parameters or indicators are important for the WEF report?

- A. Old infrastructure
- B. Innovation
- C. Resistance to change
- D. Commercial growth
- E. Human resource
- F. Digital awareness
- G. Increasing incomes

Options :

1. ✗ ABCE
2. ✗ ADEF
3. ✓ BDEG
4. ✗ BEFG

Question Number : 153 Question Id : 5861806656 Question Type : MCQ Option Shuffling : Yes

Correct Marks : 1 Wrong Marks : 0.25

Select the most appropriate synonym of the given word.

EMINENT

Options :

1. ✓ distinguished
2. ✗ distorted
3. ✗ dissimilar
4. ✗ disreputed

Question Number : 154 Question Id : 5861806657 Question Type : MCQ Option Shuffling : Yes

Correct Marks : 1 Wrong Marks : 0.25

On which of the following indicators does Germany score the highest in the WEF report?

Options :

1. ✓ Innovation
2. ✗ Progressive business culture
3. ✗ Infrastructure
4. ✗ Skilled workers

Question Number : 155 Question Id : 5861806658 Question Type : MCQ Option Shuffling : Yes

Correct Marks : 1 Wrong Marks : 0.25

What important learning does the report give?

Options :

1. ✓ Majority of the countries are not generating new ideas and are doing quite badly compared to others.
2. ✗ Commercial products of all countries are poor in quality.
3. ✗ A large number of countries are ready for the future and are progressing digitally.

4. \* Having a skilled workforce is not a problem for most countries.

Question Id : 5861806653 Question Type : COMPREHENSION Sub Question Shuffling Allowed : Yes Group Comprehension Questions : No

Question Numbers : (151 to 155)

Question Label : Comprehension

Read the following passage and answer the questions that follow.

How well countries adapt to the Fourth Industrial Revolution (4IR) will determine whether they 'thrive' or 'stagnate' and could further divide workforces and increase social tensions, according to the latest version of the World Economic Forum's Global Competitiveness Report.

Almost 40 years after its first annual assessment of the global economy, the Forum's 2018 report uses new methodology to understand the full impact of the 4IR, and finds factors including human capital, agility, resilience, openness and innovation becoming increasingly important.

The new index measures 140 economies against 98 indicators, organized into 12 'pillars' or drivers of productivity, to determine how close the economy is to the ideal state or 'frontier' of competitiveness.

The US topped the rankings, being 'closest to the competitiveness frontier', with Singapore, Germany, Switzerland and Japan completing the top five. At the other end of the scale, Haiti, Yemen and Chad were found to be the least competitive economies.

Competitiveness is not only associated with higher incomes, but also better socio - economic outcomes, including life satisfaction. The US scored 85.6 out of 100 to top the index, coming in the top three for seven of the 12 pillars. Its entrepreneurial culture saw it score highly in the business dynamism pillar. It also scored highly for its labour market and financial system.

But, there were several areas which showed it still has more to do. It notably drops behind other advanced economies in the health pillar, with a life expectancy of 67.7 years, putting it in 46th place. And it was far from the frontier for checks and balances (40th place), judicial independence (15th) and corruption (16th).

The top 11 countries all score above 80 points for competitiveness. Second - placed Singapore (83.5) is defined by its high score for openness and it leads the way for infrastructure, with a near - perfect score of 95.7 for its world - beating transport system.

Germany, in third place, is the highest placed European economy for competitiveness, with particular strength in innovation capability (first place, with 88), business dynamism (82, second behind the US) and health (94). One of the key findings from the report is that all economies could do better in certain areas. For example, while Singapore might be the most 'future - ready' economy, Finland outdoes it for having a digitally skilled workforce. And while low and middle - income economies can leverage technology to jumpstart growth, the report emphasises the importance of 'old' developmental pillars, such as governance, infrastructure and skills. Worryingly, of the 140 economies surveyed, 117 still lagged behind for quality of institutions, which impacted their overall competitiveness.

There was also widespread weakness at mastering the innovation process, with 103 countries scoring lower than 50 when it comes to following through from idea generation to commercial product.

Sub questions

Question Number : 151 Question Id : 5861806654 Question Type : MCQ Option Shuffling : Yes

Correct Marks : 1 Wrong Marks : 0.25

What does the World Economic Forum do?

Options :

1. ✓ It measures countries' economic progress and determines how they are faring competitively
2. ✗ It reports on the labour market and financial system of all countries.
3. ✗ It guides countries in their economic matters and enables them to achieve fast growth
4. ✗ It guides countries to divide their workforces and increase social gaps

Question Number : 152 Question Id : 5861806655 Question Type : MCQ Option Shuffling : Yes

Correct Marks : 1 Wrong Marks : 0.25

Which parameters or indicators are important for the WEF report?

- A. Old infrastructure
- B. Innovation
- C. Resistance to change
- D. Commercial growth
- E. Human resource
- F. Digital awareness
- G. Increasing incomes

Options :

1. ✖ ABCE

2. ✖ ADEF

3. ✔ BDEG

4. ✖ BEFG

Question Number : 153 Question Id : 5861806656 Question Type : MCQ Option Shuffling : Yes  
Correct Marks : 1 Wrong Marks : 0.25

Select the most appropriate synonym of the given word.

EMINENT

Options :

1. ✔ distinguished

2. ✖ distorted

3. ✖ dissimilar

4. ✖ disreputed

Question Number : 154 Question Id : 5861806657 Question Type : MCQ Option Shuffling : Yes  
Correct Marks : 1 Wrong Marks : 0.25

On which of the following indicators does Germany score the highest in the WEF report?

Options :

1. ✔ Innovation

2. ✖ Progressive business culture

3. ✖ Infrastructure

4. ✖ Skilled workers

Question Number : 155 Question Id : 5861806658 Question Type : MCQ Option Shuffling : Yes  
Correct Marks : 1 Wrong Marks : 0.25

What important learning does the report give?

Options :

1. ✓ Majority of the countries are not generating new ideas and are doing quite badly compared to others.
2. ✖ Commercial products of all countries are poor in quality.
3. ✖ A large number of countries are ready for the future and are progressing digitally.
4. ✖ Having a skilled workforce is not a problem for most countries.

Sub-Section Number:	3
Sub-Section Id:	586180448
Question Shuffling Allowed :	Yes

Question Id : 5861806659 Question Type : COMPREHENSION Sub Question Shuffling Allowed : Yes Group Comprehension Questions : No

Question Numbers : (156 to 160)

Question Label : Comprehension



Read the passage and answer the following questions.

Annie Besant was a British social reformer, campaigner for women's rights and a supporter of Indian nationalism. Annie Woods was born in London on 1 October 1847. She had an unhappy childhood, undoubtedly partly due to her father's death when she was five. Annie's mother persuaded her friend Ellen Marryat, sister of the writer Frederick Marryat, to take responsibility for her daughter and Ellen ensured that Annie received a good education.

In 1867, Annie married Frank Besant, a clergyman, and they had two children. But Annie's increasingly anti - religious views led to a legal separation in 1873. Besant became a member of the National Secular Society, which preached 'free thought', and also of the Fabian Society, the noted socialist organisation.

In the 1870s, Annie Besant and Charles Bradlaugh edited the weekly National Reformer, which advocated advanced ideas for the time on topics such as trade unions, national education, women's right to vote, and birth control. For their pamphlet on birth control the two were brought to trial for obscenity, but were subsequently acquitted.

Besant supported a number of workers' demonstrations for better working conditions. In 1888, she helped organise a strike of the female workers at the Bryant and May match factory in East London. The women complained of starvation wages and the terrible effects on their health of phosphorus fumes in the factory. The strike eventually led to their bosses significantly improving their working situation.

Social and political reform seems not to have satisfied Besant's hunger for some all - embracing truth to replace the religion of her youth. She became interested in Theosophy, a religious movement founded in 1875 and based on Hindu ideas of karma and reincarnation. As a member and later leader of the Theosophical Society, Besant helped to spread Theosophical beliefs around the world, notably in India.

Besant first visited India in 1893 and later settled there, becoming involved in the Indian nationalist movement. In 1916 she established the Indian Home Rule League, of which she became president. She was also a leading member of the Indian National Congress.

In the late 1920s, Besant travelled to the United States with her protégé and adopted son Jiddu Krishnamurti, who she claimed was the new Messiah and incarnation of Buddha. Krishnamurti rejected these claims in 1929. Besant died in India on 20 September 1933.

## Sub questions

Question Number : 156 Question Id : 5861806660 Question Type : MCQ Option Shuffling : Yes

Correct Marks : 1 Wrong Marks : 0.25

Ellen gave Annie great support because she:

Options :

1. ✖ took care of Annie when she was born.
2. ✔ helped in her studies after her father's death.
3. ✖ cared for Annie's mother when she was unwell.
4. ✖ helped Annie in her freedom struggle.

Question Number : 157 Question Id : 5861806661 Question Type : MCQ Option Shuffling : Yes

Correct Marks : 1 Wrong Marks : 0.25

Raising issues such as women's right to vote and birth control are referred to as 'advanced ideas' by the writer because:

Options :

1. ✖ these were frequently discussed by all national reform movements.
2. ✖ these were important national issues for reforms and needed attention.
3. ✔ these radical issues relating to women were so far not being given priority.
4. ✖ Annie and her associates were making a lot of progress in these matters.

Question Number : 158 Question Id : 5861806662 Question Type : MCQ Option Shuffling : Yes

Correct Marks : 1 Wrong Marks : 0.25

For which activity was Annie dragged to the court?

Options :

1. ✖ Supporting many workers' demonstrations.
2. ✔ Raising her voice regarding birth control.
3. ✖ Organizing a strike of women workers.
4. ✖ Joining the Home Room League.

Question Number : 159 Question Id : 5861806663 Question Type : MCQ Option Shuffling : Yes

Correct Marks : 1 Wrong Marks : 0.25

Choose the option that is NOT true.

As a result of the Bryant and May match factory case the working women's \_\_\_\_\_.

Options :

1. ✖ work conditions improved.
2. ✔ health got worse.
3. ✖ bosses changed their attitude.
4. ✖ problems gained attention.

Question Number : 160 Question Id : 5861806664 Question Type : MCQ Option Shuffling : Yes

Correct Marks : 1 Wrong Marks : 0.25

What difference of opinion did Annie have with Jiddu Krishnamurti?

Options :

1. ✖ He stated that he was God in a new form.
2. ✔ He denied that he was a messenger of God and Buddha reborn.
3. ✖ He refused to accept he was her adopted son.
4. ✖ He rejected the idea of travelling to the US with her.

Question Id : 5861806659 Question Type : COMPREHENSION Sub Question Shuffling Allowed : Yes Group Comprehension Questions : No

Question Numbers : (156 to 160)

Question Label : Comprehension

Read the passage and answer the following questions.

Annie Besant was a British social reformer, campaigner for women's rights and a supporter of Indian nationalism. Annie Woods was born in London on 1 October 1847. She had an unhappy childhood, undoubtedly partly due to her father's death when she was five. Annie's mother persuaded her friend Ellen Marryat, sister of the writer Frederick Marryat, to take responsibility for her daughter and Ellen ensured that Annie received a good education.

In 1867, Annie married Frank Besant, a clergyman, and they had two children. But Annie's increasingly anti-religious views led to a legal separation in 1873. Besant became a member of the National Secular Society, which preached 'free thought', and also of the Fabian Society, the noted socialist organisation.

In the 1870s, Annie Besant and Charles Bradlaugh edited the weekly National Reformer, which advocated advanced ideas for the time on topics such as trade unions, national education, women's right to vote, and birth control. For their pamphlet on birth control the two were brought to trial for obscenity, but were subsequently acquitted.

Besant supported a number of workers' demonstrations for better working conditions. In 1888, she helped organise a strike of the female workers at the Bryant and May match factory in East London. The women complained of starvation wages and the terrible effects on their health of phosphorus fumes in the factory. The strike eventually led to their bosses significantly improving their working situation.

Social and political reform seems not to have satisfied Besant's hunger for some all-embracing truth to replace the religion of her youth. She became interested in Theosophy, a religious movement founded in 1875 and based on Hindu ideas of karma and reincarnation. As a member and later leader of the Theosophical Society, Besant helped to spread Theosophical beliefs around the world, notably in India.

Besant first visited India in 1893 and later settled there, becoming involved in the Indian nationalist movement. In 1916 she established the Indian Home Rule League, of which she became president. She was also a leading member of the Indian National Congress.

In the late 1920s, Besant travelled to the United States with her protégé and adopted son Jiddu Krishnamurti, who she claimed was the new Messiah and incarnation of Buddha. Krishnamurti rejected these claims in 1929. Besant died in India on 20 September 1933.

Sub questions

Question Number : 156 Question Id : 5861806660 Question Type : MCQ Option Shuffling : Yes  
Correct Marks : 1 Wrong Marks : 0.25

Ellen gave Annie great support because she:

Options :

1. ✘ took care of Annie when she was born
2. ✔ helped in her studies after her father's death
3. ✘ cared for Annie's mother when she was unwell
4. ✘ helped Annie in her freedom struggle

Question Number : 157 Question Id : 5861806661 Question Type : MCQ Option Shuffling : Yes  
Correct Marks : 1 Wrong Marks : 0.25

Raising issues such as women's right to vote and birth control are referred to as 'advanced ideas' by the writer because:

Options :

1. ✘ these were frequently discussed by all national reform movements.
2. ✘ these were important national issues for reforms and needed attention.
3. ✔ these radical issues relating to women were so far not being given priority.
4. ✘ Annie and her associates were making a lot of progress in these matters.

Question Number : 158 Question Id : 5861806662 Question Type : MCQ Option Shuffling : Yes  
Correct Marks : 1 Wrong Marks : 0.25

For which activity was Annie dragged to the court?

Options :

1. ✖ Supporting many workers' demonstrations
2. ✔ Raising her voice regarding birth control
3. ✖ Organizing a strike of women workers
4. ✖ Joining the Home Room League

Question Number : 159 Question Id : 5861806663 Question Type : MCQ Option Shuffling : Yes  
Correct Marks : 1 Wrong Marks : 0.25

Choose the option that is NOT true.

As a result of the Bryant and May match factory case the working women's \_\_\_\_\_.

Options :

1. ✖ work conditions improved
2. ✔ health got worse
3. ✖ bosses changed their attitude
4. ✖ problems gained attention

Question Number : 160 Question Id : 5861806664 Question Type : MCQ Option Shuffling : Yes  
Correct Marks : 1 Wrong Marks : 0.25

What difference of opinion did Annie have with Jiddu Krishnamurti?

Options :

1. ✖ He stated that he was God in a new form.
2. ✔ He denied that he was a messenger of God and Buddha reborn.
3. ✖ He refused to accept he was her adopted son.
4. ✖ He rejected the idea of travelling to the US with her.

## General Hindi1

Group Number :	9
Group Id :	586180320
Group Maximum Duration :	0
Group Minimum Duration :	0
Show Attended Group? :	No
Edit Attended Group? :	No
Break time:	0
Group Marks:	20
Is this Group for Examiner?:	No
Revisit allowed for group Instructions? :	Yes
Maximum Instruction Time:	0
Minimum Instruction Time:	0

## General Hindi1

Section Id :	586180324
Section Number :	1
Section type :	Online
Mandatory or Optional:	Mandatory
Number of Questions:	20
Number of Questions to be attempted:	20
Section Marks:	20

Sub-Section Number:	1
Sub-Section Id:	586180449
Question Shuffling Allowed :	Yes

Question Number : 161 Question Id : 5861806665 Question Type : MCQ Option Shuffling : Yes  
Correct Marks : 1 Wrong Marks : 0.25

‘डोंगा’ कैसा शब्द है?

Options :

1. \* तद्भव
2. \* तत्सम
3. ✓ देशज
4. \* विदेशी

Question Number : 161 Question Id : 5861806665 Question Type : MCQ Option Shuffling : Yes  
Correct Marks : 1 Wrong Marks : 0.25

‘डोंगा’ कैसा शब्द है?

Options :

1. ✖ तद्भव
2. ✖ तत्सम
3. ✔ देशज
4. ✖ विदेशी

Question Number : 162 Question Id : 5861806666 Question Type : MCQ Option Shuffling : Yes  
Correct Marks : 1 Wrong Marks : 0.25

निम्न में से कौन सा शब्द तद्भव है?

Options :

1. ✖ गोपाल
2. ✖ गोधूम
3. ✖ गोत्र
4. ✔ गाय

Question Number : 162 Question Id : 5861806666 Question Type : MCQ Option Shuffling : Yes  
Correct Marks : 1 Wrong Marks : 0.25

निम्न में से कौन सा शब्द तद्भव है?

Options :

1. ✖ गोपाल
2. ✖ गोधूम
3. ✖ गोत्र
4. ✔ गाय

Question Number : 163 Question Id : 5861806667 Question Type : MCQ Option Shuffling : Yes  
Correct Marks : 1 Wrong Marks : 0.25

निम्न में से कौन सा शब्द तत्सम है?

Options :

1. ✖ देवर
2. ✔ दमन
3. ✖ दूब



## 4. \* दूल्हा

Question Number : 163 Question Id : 5861806667 Question Type : MCQ Option Shuffling : Yes  
Correct Marks : 1 Wrong Marks : 0.25

निम्न में से कौन सा शब्द तत्सम है?

Options :

1. \* देवर
2. ✓ दमन
3. \* दूब
4. \* दूल्हा

Question Number : 164 Question Id : 5861806668 Question Type : MCQ Option Shuffling : Yes  
Correct Marks : 1 Wrong Marks : 0.25

निम्न में से शुद्ध वर्तनी वाला शब्द है:

Options :

1. ✓ प्रादेशिक
2. \* प्रदेशिक
3. \* प्रादेसिक
4. \* प्रादेशीक

Question Number : 164 Question Id : 5861806668 Question Type : MCQ Option Shuffling : Yes  
Correct Marks : 1 Wrong Marks : 0.25

निम्न में से शुद्ध वर्तनी वाला शब्द है:

Options :

1. ✓ प्रादेशिक
2. \* प्रदेशिक
3. \* प्रादेसिक
4. \* प्रादेशीक

Question Number : 165 Question Id : 5861806669 Question Type : MCQ Option Shuffling : Yes  
Correct Marks : 1 Wrong Marks : 0.25

‘अगम – आगम’ शब्द युग्म का सही अर्थ है:

Options :

1. \* सरल – लक्ष्य
2. \* दुर्लभ – कठिन
3. \* शास्त्र – दुर्लभ
4. ✓ दुर्लभ – शास्त्र

Question Number : 165 Question Id : 5861806669 Question Type : MCQ Option Shuffling : Yes  
Correct Marks : 1 Wrong Marks : 0.25

‘अगम - आगम’ शब्द युग्म का सही अर्थ है:

Options :

1. \* सरल - लक्ष्य
2. \* दुर्लभ - कठिन
3. \* शास्त्र - दुर्लभ
4. ✓ दुर्लभ - शास्त्र

Question Number : 166 Question Id : 5861806670 Question Type : MCQ Option Shuffling : Yes  
Correct Marks : 1 Wrong Marks : 0.25

‘चतुराई’ किस प्रकार की संज्ञा है?

Options :

1. ✓ भाववाचक
2. \* पदार्थवाचक
3. \* व्यक्तिवाचक
4. \* जातिवाचक

Question Number : 166 Question Id : 5861806670 Question Type : MCQ Option Shuffling : Yes  
Correct Marks : 1 Wrong Marks : 0.25

‘चतुराई’ किस प्रकार की संज्ञा है?

Options :

1. ✓ भाववाचक
2. \* पदार्थवाचक
3. \* व्यक्तिवाचक

## 4. \* जातिवाचक

Question Number : 167 Question Id : 5861806671 Question Type : MCQ Option Shuffling : Yes  
Correct Marks : 1 Wrong Marks : 0.25

‘सो’ सर्वनाम का गुणवाचक विशेषण है:

Options :

1. \* ऐसा
2. \* वैसा
3. ✓ तैसा
4. \* जैसा

Question Number : 167 Question Id : 5861806671 Question Type : MCQ Option Shuffling : Yes  
Correct Marks : 1 Wrong Marks : 0.25

‘सो’ सर्वनाम का गुणवाचक विशेषण है:

Options :

1. \* ऐसा
2. \* वैसा
3. ✓ तैसा
4. \* जैसा

Question Number : 168 Question Id : 5861806672 Question Type : MCQ Option Shuffling : Yes  
Correct Marks : 1 Wrong Marks : 0.25

‘स्थानीय’ किस प्रकार का विशेषण है?

Options :

1. \* सार्वनामिक
2. ✓ गुणवाचक
3. \* परिमाण बोधक
4. \* संख्यावाचक

Question Number : 168 Question Id : 5861806672 Question Type : MCQ Option Shuffling : Yes  
Correct Marks : 1 Wrong Marks : 0.25

‘स्थानीय’ किस प्रकार का विशेषण है?

Options :

1. ✖ सार्वनामिक
2. ✔ गुणवाचक
3. ✖ परिमाण बोधक
4. ✖ संख्यावाचक

Question Number : 169 Question Id : 5861806673 Question Type : MCQ Option Shuffling : Yes  
Correct Marks : 1 Wrong Marks : 0.25

निम्न में अकर्मक धातु है:

Options :

1. ✖ घोलना
2. ✖ छेदना
3. ✔ मुड़ना
4. ✖ जोड़ना

Question Number : 169 Question Id : 5861806673 Question Type : MCQ Option Shuffling : Yes  
Correct Marks : 1 Wrong Marks : 0.25

निम्न में अकर्मक धातु है:

Options :

1. ✖ घोलना
2. ✖ छेदना
3. ✔ मुड़ना
4. ✖ जोड़ना

Question Number : 170 Question Id : 5861806674 Question Type : MCQ Option Shuffling : Yes  
Correct Marks : 1 Wrong Marks : 0.25

'तुम हँसकर बात करते हो।' वाक्य में क्रिया विशेषण है:

Options :

1. ✖ तुम
2. ✔ हँसकर
3. ✖ बात

## 4. \* करते हो

Question Number : 170 Question Id : 5861806674 Question Type : MCQ Option Shuffling : Yes  
Correct Marks : 1 Wrong Marks : 0.25

‘तुम हँसकर बात करते हो।’ वाक्य में क्रिया विशेषण है:

Options :

1. \* तुम
2. ✓ हँसकर
3. \* बात
4. \* करते हो

Question Number : 171 Question Id : 5861806675 Question Type : MCQ Option Shuffling : Yes  
Correct Marks : 1 Wrong Marks : 0.25

‘यद्यपि’ का संधि विच्छेद होगा:

Options :

1. \* यदी + अपि
2. \* यदी + पि
3. \* यदि + आपि
4. ✓ यदि + अपि

Question Number : 171 Question Id : 5861806675 Question Type : MCQ Option Shuffling : Yes  
Correct Marks : 1 Wrong Marks : 0.25

‘यद्यपि’ का संधि विच्छेद होगा:

Options :

1. \* यदी + अपि
2. \* यदी + पि
3. \* यदि + आपि
4. ✓ यदि + अपि

Question Number : 172 Question Id : 5861806676 Question Type : MCQ Option Shuffling : Yes  
Correct Marks : 1 Wrong Marks : 0.25

‘दीर्घबाहु’ में कौन सा समास है?

Options :

1. ✓ बहुव्रीहि
2. \* द्वंद्व
3. \* द्विगु
4. \* अव्ययीभाव

Question Number : 172 Question Id : 5861806676 Question Type : MCQ Option Shuffling : Yes  
Correct Marks : 1 Wrong Marks : 0.25

‘दीर्घबाहु’ में कौन सा समास है?

Options :

1. ✓ बहुव्रीहि
2. \* द्वंद्व
3. \* द्विगु
4. \* अव्ययीभाव

Question Number : 173 Question Id : 5861806677 Question Type : MCQ Option Shuffling : Yes  
Correct Marks : 1 Wrong Marks : 0.25

‘संगम’ में किस उपसर्ग का प्रयोग हुआ है?

Options :

1. \* स
2. ✓ सम्
3. \* सम
4. \* गम

Question Number : 173 Question Id : 5861806677 Question Type : MCQ Option Shuffling : Yes  
Correct Marks : 1 Wrong Marks : 0.25

‘संगम’ में किस उपसर्ग का प्रयोग हुआ है?

Options :

1. \* स
2. ✓ सम्
3. \* सम

## 4. \* गम

Question Number : 174 Question Id : 5861806678 Question Type : MCQ Option Shuffling : Yes  
Correct Marks : 1 Wrong Marks : 0.25

‘अरुणिमा’ में किस प्रत्यय का प्रयोग हुआ है?

Options :

1. \* अ
2. \* म
3. \* मा
4. ✓ इमा

Question Number : 174 Question Id : 5861806678 Question Type : MCQ Option Shuffling : Yes  
Correct Marks : 1 Wrong Marks : 0.25

‘अरुणिमा’ में किस प्रत्यय का प्रयोग हुआ है?

Options :

1. \* अ
2. \* म
3. \* मा
4. ✓ इमा

Question Number : 175 Question Id : 5861806679 Question Type : MCQ Option Shuffling : Yes  
Correct Marks : 1 Wrong Marks : 0.25

निम्न में कौन सा शब्द स्त्रीलिंग है?

Options :

1. \* चन्द्रमा
2. \* चप्पल
3. ✓ चिकित्सा
4. \* चम्मच

Question Number : 175 Question Id : 5861806679 Question Type : MCQ Option Shuffling : Yes  
Correct Marks : 1 Wrong Marks : 0.25

निम्न में कौन सा शब्द स्त्रीलिंग है?

Options :

1. \* चन्द्रमा
2. \* चप्पल
3. ✓ चिकित्सा
4. \* चम्मच

Question Number : 176 Question Id : 5861806680 Question Type : MCQ Option Shuffling : Yes  
Correct Marks : 1 Wrong Marks : 0.25

‘लोकसभा के अध्यक्ष’ किस पदबन्ध का उदाहरण है?

Options :

1. ✓ संज्ञा पदबन्ध
2. \* सर्वनाम पदबन्ध
3. \* विशेषण पदबन्ध
4. \* क्रिया पदबन्ध

Question Number : 176 Question Id : 5861806680 Question Type : MCQ Option Shuffling : Yes  
Correct Marks : 1 Wrong Marks : 0.25

‘लोकसभा के अध्यक्ष’ किस पदबन्ध का उदाहरण है?

Options :

1. ✓ संज्ञा पदबन्ध
2. \* सर्वनाम पदबन्ध
3. \* विशेषण पदबन्ध
4. \* क्रिया पदबन्ध

Question Number : 177 Question Id : 5861806681 Question Type : MCQ Option Shuffling : Yes  
Correct Marks : 1 Wrong Marks : 0.25

‘वह घर, जितना अच्छा था, यह भी उतना अच्छा है।’ वाक्य में ‘जितना अच्छा था’ किस प्रकार का उपवाक्य है?

Options :

1. \* संज्ञा उपवाक्य
2. \* क्रिया उपवाक्य
3. \* क्रिया विशेषण उपवाक्य



#### 4. ✓ विशेषण उपवाक्य

Question Number : 177 Question Id : 5861806681 Question Type : MCQ Option Shuffling : Yes  
Correct Marks : 1 Wrong Marks : 0.25

‘वह घर, जितना अच्छा था, यह भी उतना अच्छा है।’ वाक्य में  
‘जितना अच्छा था’ किस प्रकार का उपवाक्य है?

Options :

1. \* संज्ञा उपवाक्य
2. \* क्रिया उपवाक्य
3. \* क्रिया विशेषण उपवाक्य
4. ✓ विशेषण उपवाक्य

Question Number : 178 Question Id : 5861806682 Question Type : MCQ Option Shuffling : Yes  
Correct Marks : 1 Wrong Marks : 0.25

‘जो लेखक लोकप्रिय होता है, उसका सम्मान सभी करते हैं।’ किस प्रकार का वाक्य है?

Options :

1. \* सरल वाक्य
2. ✓ मिश्र वाक्य
3. \* संयुक्त वाक्य
4. \* उपवाक्य

Question Number : 178 Question Id : 5861806682 Question Type : MCQ Option Shuffling : Yes  
Correct Marks : 1 Wrong Marks : 0.25

‘जो लेखक लोकप्रिय होता है, उसका सम्मान सभी करते हैं।’ किस  
प्रकार का वाक्य है?

Options :

1. \* सरल वाक्य
2. ✓ मिश्र वाक्य
3. \* संयुक्त वाक्य
4. \* उपवाक्य

Question Number : 179 Question Id : 5861806683 Question Type : MCQ Option Shuffling : Yes  
Correct Marks : 1 Wrong Marks : 0.25

पदक्रम की दृष्टि से कौन सा वाक्य शुद्ध है?

Options :

1. \* कृष्ण जा रहा है क्या?
2. \* जा रहा है क्या कृष्ण?
3. ✓ क्या कृष्ण जा रहा है?
4. \* क्या जा रहा है कृष्ण?

Question Number : 179 Question Id : 5861806683 Question Type : MCQ Option Shuffling : Yes  
Correct Marks : 1 Wrong Marks : 0.25

पदक्रम की दृष्टि से कौन सा वाक्य शुद्ध है?

Options :

1. \* कृष्ण जा रहा है क्या?
2. \* जा रहा है क्या कृष्ण?
3. ✓ क्या कृष्ण जा रहा है?
4. \* क्या जा रहा है कृष्ण?

Question Number : 180 Question Id : 5861806684 Question Type : MCQ Option Shuffling : Yes  
Correct Marks : 1 Wrong Marks : 0.25

अन्वय की दृष्टि से कौन सा वाक्य शुद्ध है?

Options :

1. ✓ गोपाल ने एक गाय और एक भैंस खरीदी।
2. \* गोपाल ने एक गाय और एक भैंस खरीदा।
3. \* गोपाल ने एक गाय और एक भैंस खरीदे।
4. \* गोपाल ने एक गाय और एक भैंस खरीदो।

Question Number : 180 Question Id : 5861806684 Question Type : MCQ Option Shuffling : Yes  
Correct Marks : 1 Wrong Marks : 0.25

अन्वय की दृष्टि से कौन सा वाक्य शुद्ध है?

Options :

1. ✓ गोपाल ने एक गाय और एक भैंस खरीदी।

2. \* गोपाल ने एक गाय और एक भैंस खरीदा।
3. \* गोपाल ने एक गाय और एक भैंस खरीदे।
4. \* गोपाल ने एक गाय और एक भैंस खरीदो।

## General Hindi2

Group Number :	10
Group Id :	586180321
Group Maximum Duration :	0
Group Minimum Duration :	120
Show Attended Group? :	No
Edit Attended Group? :	No
Break time:	0
Group Marks:	20
Is this Group for Examiner?:	No
Revisit allowed for group Instructions? :	Yes
Maximum Instruction Time:	0
Minimum Instruction Time:	0

## General Hindi2

Section Id :	586180325
Section Number :	1
Section type :	Online
Mandatory or Optional:	Mandatory
Number of Questions:	12
Number of Questions to be attempted:	12
Section Marks:	20

Sub-Section Number:	1
Sub-Section Id:	586180450
Question Shuffling Allowed :	Yes

Question Number : 181 Question Id : 5861806685 Question Type : MCQ Option Shuffling : Yes  
Correct Marks : 1 Wrong Marks : 0.25

‘आकाश’ का पर्यायवाची है?

Options :

1. ✓ व्योम
2. \* अचल
3. \* प्रसून

## 4. \* वारिद

Question Number : 181 Question Id : 5861806685 Question Type : MCQ Option Shuffling : Yes  
Correct Marks : 1 Wrong Marks : 0.25

‘आकाश’ का पर्यायवाची है?

Options :

1. ✓ व्योम
2. \* अचल
3. \* प्रसून
4. \* वारिद

Question Number : 182 Question Id : 5861806686 Question Type : MCQ Option Shuffling : Yes  
Correct Marks : 1 Wrong Marks : 0.25

‘बाण’ का पर्यायवाची नहीं है:

Options :

1. \* शर
2. \* शिलीमुख
3. \* इषु
4. ✓ मयूख

Question Number : 182 Question Id : 5861806686 Question Type : MCQ Option Shuffling : Yes  
Correct Marks : 1 Wrong Marks : 0.25

‘बाण’ का पर्यायवाची नहीं है:

Options :

1. \* शर
2. \* शिलीमुख
3. \* इषु
4. ✓ मयूख

Question Number : 183 Question Id : 5861806687 Question Type : MCQ Option Shuffling : Yes  
Correct Marks : 1 Wrong Marks : 0.25

‘विभावरी’ किसका पर्यायवाची है?

Options :

1. \* नदी
2. \* नौका
3. ✓ रात्रि
4. \* किरण

Question Number : 183 Question Id : 5861806687 Question Type : MCQ Option Shuffling : Yes  
Correct Marks : 1 Wrong Marks : 0.25

‘विभावरी’ किसका पर्यायवाची है?

Options :

1. \* नदी
2. \* नौका
3. ✓ रात्रि
4. \* किरण

Question Number : 184 Question Id : 5861806688 Question Type : MCQ Option Shuffling : Yes  
Correct Marks : 1 Wrong Marks : 0.25

‘हेम’ किसका पर्यायवाची है?

Options :

1. \* बादल
2. ✓ स्वर्ण
3. \* पर्वत
4. \* सूर्य

Question Number : 184 Question Id : 5861806688 Question Type : MCQ Option Shuffling : Yes  
Correct Marks : 1 Wrong Marks : 0.25

‘हेम’ किसका पर्यायवाची है?

Options :

1. \* बादल
2. ✓ स्वर्ण
3. \* पर्वत

## 4. \* सूर्य

Question Number : 185 Question Id : 5861806689 Question Type : MCQ Option Shuffling : Yes  
Correct Marks : 1 Wrong Marks : 0.25

‘जलज’ किसका पर्यायवाची नहीं है?

Options :

1. ✓ स्वर्ण
2. \* कमल
3. \* मोती
4. \* शंख

Question Number : 185 Question Id : 5861806689 Question Type : MCQ Option Shuffling : Yes  
Correct Marks : 1 Wrong Marks : 0.25

‘जलज’ किसका पर्यायवाची नहीं है?

Options :

1. ✓ स्वर्ण
2. \* कमल
3. \* मोती
4. \* शंख

Question Number : 186 Question Id : 5861806690 Question Type : MCQ Option Shuffling : Yes  
Correct Marks : 1 Wrong Marks : 0.25

‘आगमन’ का विलोम शब्द है:

Options :

1. \* प्रदेश
2. \* प्रकीर्णन
3. \* प्रदान
4. ✓ प्रस्थान

Question Number : 186 Question Id : 5861806690 Question Type : MCQ Option Shuffling : Yes  
Correct Marks : 1 Wrong Marks : 0.25

‘आगमन’ का विलोम शब्द है:

Options :

1. ✖ प्रदेय
2. ✖ प्रकीर्णन
3. ✖ प्रदान
4. ✔ प्रस्थान

Question Number : 187 Question Id : 5861806691 Question Type : MCQ Option Shuffling : Yes  
Correct Marks : 1 Wrong Marks : 0.25

‘अद्यतन’ का विलोम होगा:

Options :

1. ✖ नवीन
2. ✔ पुरातन
3. ✖ समकालीन
4. ✖ नूतन

Question Number : 187 Question Id : 5861806691 Question Type : MCQ Option Shuffling : Yes  
Correct Marks : 1 Wrong Marks : 0.25

‘अद्यतन’ का विलोम होगा:

Options :

1. ✖ नवीन
2. ✔ पुरातन
3. ✖ समकालीन
4. ✖ नूतन

Question Number : 188 Question Id : 5861806692 Question Type : MCQ Option Shuffling : Yes  
Correct Marks : 1 Wrong Marks : 0.25

‘अभिसरण’ किसका विलोम है?

Options :

1. ✖ अनुकरण
2. ✖ प्रसारण
3. ✔ अपसरण

## 4. \* अपहरण

Question Number : 188 Question Id : 5861806692 Question Type : MCQ Option Shuffling : Yes  
Correct Marks : 1 Wrong Marks : 0.25

‘अभिसरण’ किसका विलोम है?

Options :

1. \* अनुकरण
2. \* प्रसारण
3. ✓ अपसरण
4. \* अपहरण

Question Number : 189 Question Id : 5861806693 Question Type : MCQ Option Shuffling : Yes  
Correct Marks : 1 Wrong Marks : 0.25

‘संसार गूढ़ रहस्यों से भरा है।’ पंक्ति के रेखांकित शब्द का विलोम होगा:

Options :

1. \* कठिन
2. \* दुरूह
3. \* जटिल
4. ✓ बोधगम्य

Question Number : 189 Question Id : 5861806693 Question Type : MCQ Option Shuffling : Yes  
Correct Marks : 1 Wrong Marks : 0.25

‘संसार गूढ़ रहस्यों से भरा है।’ पंक्ति के रेखांकित शब्द का विलोम होगा:

Options :

1. \* कठिन
2. \* दुरूह
3. \* जटिल
4. ✓ बोधगम्य

Question Number : 190 Question Id : 5861806694 Question Type : MCQ Option Shuffling : Yes  
Correct Marks : 1 Wrong Marks : 0.25

‘विरह’ का विलोम है:



Options :

1. \* वियोग
2. \* विछोह
3. ✓ मिलन
4. \* विप्रलम्भ

Question Number : 190 Question Id : 5861806694 Question Type : MCQ Option Shuffling : Yes  
Correct Marks : 1 Wrong Marks : 0.25

‘विरह’ का विलोम है:

Options :

1. \* वियोग
2. \* विछोह
3. ✓ मिलन
4. \* विप्रलम्भ

Sub-Section Number:	2
Sub-Section Id:	586180451
Question Shuffling Allowed :	Yes

Question Id : 5861806695 Question Type : COMPREHENSION Sub Question Shuffling Allowed : Yes Group Comprehension Questions : No

Question Numbers : (191 to 195)

Question Label : Comprehension

नीचे दिये गए गद्यांश को पढ़कर पूछे गये प्रश्नों के उत्तर दीजिए।

मीरा को साधु और असाधु समाज का ज्ञान था। वे सामंतवादी मनोवृत्ति से ग्रस्त वैरागी, संप्रदायी एवं मठाधीश साधुओं को साधु नहीं स्वीकारती, बल्कि उन को कूड़ा कहती हैं। साधु उनके लिए दया, करुणा और प्रेम से भरा हुआ मनुष्य हो सकता है। भगवावस्त्रधारी, तिलकधारी एवं फकीर साधु नहीं, साधु वह है जिसकी मानवता पूंजी है, समाजकल्याण जिसका कर्तव्य और स्वतंत्रता जिसका धर्म। मीरा ने मध्यकाल में ही पर्दाप्रथा का विरोध किया। पर्दाप्रथा मनुष्य होने के अधिकारों का हनन है। रेगिस्तानी क्षेत्रों में मुंह ढकना, सिर बांधना एवं घूँघट पर्यावरण से बचने के लिए स्त्री पुरुष दोनों समान रूप से किया करते थे। रेतीली हवाएं जीवन के लिए हानिकारक थीं, किंतु धीरे-धीरे उसे पवित्रता एवं धार्मिक संस्कार से जोड़कर स्त्री के लिए अनिवार्य बना दिया। लज्जा स्त्री के विशेष गुणों में गिना जाने लगा। अंगों का दिखना एवं सीधे देखना, बोलना, चलना, बैठना, बाहर निकलना, समाज में आना सब के आगे पर्दा और लज्जा को खड़ा कर दिया।

Sub questions

Question Number : 191 Question Id : 5861806696 Question Type : MCQ Option Shuffling : Yes  
Correct Marks : 1 Wrong Marks : 0.25

गद्यांश में किसका उल्लेख है?

Options :

1. \* महादेवी
2. ✓ मीरा
3. \* सुभद्रा चौहान
4. \* लक्ष्मी बाई

Question Number : 192 Question Id : 5861806697 Question Type : MCQ Option Shuffling : Yes  
Correct Marks : 1 Wrong Marks : 0.25

‘वैरागी’ का अर्थ होता है:

Options :

1. ✓ विरक्त
2. \* अनुरक्त
3. \* संतप्त
4. \* भोगी

Question Number : 193 Question Id : 5861806698 Question Type : MCQ Option Shuffling : Yes

Correct Marks : 1 Wrong Marks : 0.25

‘हनन’ का अर्थ होता है:

Options :

1. \* बढ़ावा देना
2. ✓ खात्मा करना
3. \* कम करना
4. \* नियंत्रण करना

Question Number : 194 Question Id : 5861806699 Question Type : MCQ Option Shuffling : Yes

Correct Marks : 1 Wrong Marks : 0.25

गद्यांश में किस प्रथा को मानवाधिकार का हनन कहा गया है?

Options :

1. \* सतीप्रथा
2. \* बाल विवाह
3. \* अस्पृश्यता
4. ✓ पर्दाप्रथा

Question Number : 195 Question Id : 5861806700 Question Type : MCQ Option Shuffling : Yes

Correct Marks : 1 Wrong Marks : 0.25

‘मठाधीश’ का अर्थ है:

Options :

1. ✓ महंत
2. \* सामंत
3. \* पुजारी
4. \* ईश्वर

Question Id : 5861806695 Question Type : COMPREHENSION Sub Question Shuffling Allowed : Yes Group Comprehension Questions : No

Question Numbers : (191 to 195)

Question Label : Comprehension

नीचे दिये गए गद्यांश को पढ़कर पूछे गये प्रश्नों के उत्तर दीजिए।

मीरा को साधु और असाधु समाज का ज्ञान था। वे सामंतवादी मनोवृत्ति से ग्रस्त वैरागी, संप्रदायी एवं मठाधीश साधुओं को साधु नहीं स्वीकारती, बल्कि उन को कूड़ा कहती हैं। साधु उनके लिए दया, करुणा और प्रेम से भरा हुआ मनुष्य हो सकता है। भगवावस्त्रधारी, तिलकधारी एवं फकीर साधु नहीं, साधु वह है जिसकी मानवता पूंजी है, समाजकल्याण जिसका कर्तव्य और स्वतंत्रता जिसका धर्म। मीरा ने मध्यकाल में ही पर्दाप्रथा का विरोध किया। पर्दाप्रथा मनुष्य होने के अधिकारों का हनन है। रेगिस्तानी क्षेत्रों में मुंह ढकना, सिर बांधना एवं घूँघट पर्यावरण से बचने के लिए स्त्री पुरुष दोनों समान रूप से किया करते थे। रेतीली हवाएं जीवन के लिए हानिकारक थीं, किंतु धीरे - धीरे उसे पवित्रता एवं धार्मिक संस्कार से जोड़कर स्त्री के लिए अनिवार्य बना दिया। लज्जा स्त्री के विशेष गुणों में गिना जाने लगा। अंगों का दिखना एवं सीधे देखना, बोलना, चलना, बैठना, बाहर निकलना, समाज में आना सब के आगे पर्दा और लज्जा को खड़ा कर दिया।

Sub questions

Question Number : 191 Question Id : 5861806696 Question Type : MCQ Option Shuffling : Yes

Correct Marks : 1 Wrong Marks : 0.25

गद्यांश में किसका उल्लेख है?

Options :

1. ✖ महादेवी
2. ✔ मीरा
3. ✖ सुभद्रा चौहान
4. ✖ लक्ष्मी बाई

Question Number : 192 Question Id : 5861806697 Question Type : MCQ Option Shuffling : Yes

Correct Marks : 1 Wrong Marks : 0.25

‘वैरागी’ का अर्थ होता है:

Options :

1. ✓ विरक्त
2. ✗ अनुरक्त
3. ✗ संतप्त
4. ✗ भोगी

Question Number : 193 Question Id : 5861806698 Question Type : MCQ Option Shuffling : Yes

Correct Marks : 1 Wrong Marks : 0.25

‘हनन’ का अर्थ होता है:

Options :

1. ✗ बढ़ावा देना।
2. ✓ खात्मा करना।
3. ✗ कम करना।
4. ✗ नियंत्रण करना।

Question Number : 194 Question Id : 5861806699 Question Type : MCQ Option Shuffling : Yes

Correct Marks : 1 Wrong Marks : 0.25

गद्यांश में किस प्रथा को मानवाधिकार का हनन कहा गया है?

Options :

1. ✗ सतीप्रथा
2. ✗ बाल विवाह
3. ✗ अस्पृश्यता
4. ✓ पर्दाप्रथा

Question Number : 195 Question Id : 5861806700 Question Type : MCQ Option Shuffling : Yes

Correct Marks : 1 Wrong Marks : 0.25

‘मठाधीश’ का अर्थ है:

Options :

1. ✓ महंत
2. ✖ सामंत
3. ✖ पुजारी
4. ✖ ईश्वर

**Sub-Section Number:** 3  
**Sub-Section Id:** 586180452  
**Question Shuffling Allowed :** Yes

**Question Id :** 5861806701 **Question Type :** COMPREHENSION **Sub Question Shuffling Allowed :** Yes **Group Comprehension Questions :** No

**Question Numbers :** (196 to 200)

**Question Label :** Comprehension

नीचे दिये गए गद्यांश को पढ़कर पूछे गये प्रश्नों के उत्तर दीजिए।

द्विवेदी युग में हिन्दी के काव्यग्रंथों पर श्रेष्ठ की टीकाएँ लिखी गयीं। इन टीकाओं में अर्थ, सौम्यता व भाषा का नया स्वरूप हमें दिखलायी पड़ता है। यह विशुद्ध आलोचना तो नहीं थी किंतु काव्यग्रंथों को समझने में यह अत्यंत सहायक हुई है। लाला भगवानदीन ने केशव कौमुदी, प्रियाप्रकाश, जगन्नाथदास रत्नाकर ने बिहारी सतसई की टीका 'बिहारी रत्नाकर' वियोगी हरि ने विनय पत्रिका की टीका लिखकर यह सिद्ध किया कि टीका लिखने का कार्य अन्वेषण व शोध से कम महत्वपूर्ण नहीं है। द्विवेदी युग की प्रमुख विशेषता हिन्दी आलोचना की सुधारवादी धारा रही। स्वयं महावीर प्रसाद द्विवेदी इस धारा के सर्वाधिक महत्वपूर्ण हस्ताक्षर थे। द्विवेदी जी के अतिरिक्त श्यामसुन्दर दास, लाला भगवानदीन इस युग के बड़े आलोचक थे। द्विवेदी जी 1903 ई० में 'सरस्वती' पत्रिका के संपादक बने। इस पत्रिका ने और आचार्य द्विवेदी ने हिन्दी जगत का बड़ा उद्धार किया। रामविलास शर्मा ने कहा 'महावीर प्रसाद द्विवेदी की भूमिका एक महान 'शिक्षक' की भूमिका है केवल साहित्यकार की नहीं'। वस्तुतः द्विवेदी जी हिन्दी भाषा के सुयोग्य गुरु ही थे जिन्होंने हिन्दी भाषा का रूप स्थिर किया। सरस्वती पत्रिका में छपने वाले निबंधों में द्विवेदी जी रीतिकालीन प्रवृत्ति को छोड़कर नयी दृष्टि का प्रस्ताव करते हैं, जिसका प्रभाव तत्कालीन बड़े कवियों मैथिलीशरण गुप्त, अयोध्या सिंह उपाध्याय, 'हरिऔध' आदि कवियों पर पड़ा। द्विवेदी जी अमर्यादित श्रृंगारिकता को साहित्य व समाज दोनों के लिए हानिकारक समझते थे।

Sub questions

Question Number : 196 Question Id : 5861806702 Question Type : MCQ Option Shuffling : Yes

Correct Marks : 1 Wrong Marks : 0.25

गद्यांश में वर्णित विषय का केंद्र है:

Options :

1. \* रीतिकाल
2. \* भारतेन्दु युग
3. ✓ द्विवेदी युग
4. \* छायावाद

Question Number : 197 Question Id : 5861806703 Question Type : MCQ Option Shuffling : Yes

Correct Marks : 1 Wrong Marks : 0.25

'सौम्यता' का आशय है:

Options :

1. \* अभद्रता
2. \* कुरूपता
3. ✓ रमणीयता
4. \* अलंकारिकता

Question Number : 198 Question Id : 5861806704 Question Type : MCQ Option Shuffling : Yes  
Correct Marks : 1 Wrong Marks : 0.25

‘अन्वेषण’ का अर्थ है:

Options :

1. \* अनुकरण
2. ✓ खोज
3. \* पिष्टपेषण
4. \* उन्नयन

Question Number : 199 Question Id : 5861806705 Question Type : MCQ Option Shuffling : Yes  
Correct Marks : 1 Wrong Marks : 0.25

द्विवेदी युगीन हिन्दी आलोचना की प्रमुख विशेषता कौन सी है?

Options :

1. \* परंपरावादी धारा
2. \* प्रगतिवादी धारा
3. \* क्रांतिकारी धारा
4. ✓ सुधारवादी धारा

Question Number : 200 Question Id : 5861806706 Question Type : MCQ Option Shuffling : Yes  
Correct Marks : 1 Wrong Marks : 0.25

द्विवेदी जी किस प्रवृत्ति को छोड़ने की बात करते हैं?

Options :

1. ✓ रीतिकालीन प्रवृत्ति
2. \* नवीन प्रवृत्ति
3. \* सुधारवादी प्रवृत्ति
4. \* शोधपरक प्रवृत्ति



Question Id : 5861806701 Question Type : COMPREHENSION Sub Question Shuffling Allowed : Yes Group Comprehension Questions : No

Question Numbers : (196 to 200)

Question Label : Comprehension

नीचे दिये गए गद्यांश को पढ़कर पूछे गये प्रश्नों के उत्तर दीजिए।

द्विवेदी युग में हिन्दी के काव्यग्रंथों पर श्रेष्ठ की टीकाएँ लिखी गयीं। इन टीकाओं में अर्थ, सौम्यता व भाषा का नया स्वरूप हमें दिखलायी पड़ता है। यह विशुद्ध आलोचना तो नहीं थी किंतु काव्यग्रंथों को समझने में यह अत्यंत सहायक हुई है। लाला भगवानदीन ने केशव कौमुदी, प्रियाप्रकाश, जगन्नाथदास रत्नाकर ने बिहारी सतसई की टीका 'बिहारी रत्नाकर' वियोगी हरि ने विनय पत्रिका की टीका लिखकर यह सिद्ध किया कि टीका लिखने का कार्य अन्वेषण व शोध से कम महत्वपूर्ण नहीं है। द्विवेदी युग की प्रमुख विशेषता हिन्दी आलोचना की सुधारवादी धारा रही। स्वयं महावीर प्रसाद द्विवेदी इस धारा के सर्वाधिक महत्वपूर्ण हस्ताक्षर थे। द्विवेदी जी के अतिरिक्त श्यामसुन्दर दास, लाला भगवानदीन इस युग के बड़े आलोचक थे। द्विवेदी जी 1903 ई० में 'सरस्वती' पत्रिका के संपादक बने। इस पत्रिका ने और आचार्य द्विवेदी ने हिन्दी जगत का बड़ा उद्धार किया। रामविलास शर्मा ने कहा 'महावीर प्रसाद द्विवेदी की भूमिका एक महान 'शिक्षक' की भूमिका है केवल साहित्यकार की नहीं'। वस्तुतः द्विवेदी जी हिन्दी भाषा के सुयोग्य गुरु ही थे जिन्होंने हिन्दी भाषा का रूप स्थिर किया। सरस्वती पत्रिका में छपने वाले निबंधों में द्विवेदी जी रीतिकालीन प्रवृत्ति को छोड़कर नयी दृष्टि का प्रस्ताव करते हैं, जिसका प्रभाव तत्कालीन बड़े कवियों मैथिलीशरण गुप्त, अयोध्या सिंह उपाध्याय, 'हरिऔध' आदि कवियों पर पड़ा। द्विवेदी जी अमर्यादित श्रृंगारिकता को साहित्य व समाज दोनों के लिए हानिकारक समझते थे।

Sub questions

गद्यांश में वर्णित विषय का केंद्र है:

Options :

1. \* रीतिकाल
2. \* भारतेन्दु युग
3. ✓ दिववेदी युग
4. \* छायावाद

Question Number : 197 Question Id : 5861806703 Question Type : MCQ Option Shuffling : Yes  
Correct Marks : 1 Wrong Marks : 0.25

‘सौम्यता’ का आशय है:

Options :

1. \* अभद्रता
2. \* कुरूपता
3. ✓ रमणीयता
4. \* अलंकारिकता

Question Number : 198 Question Id : 5861806704 Question Type : MCQ Option Shuffling : Yes  
Correct Marks : 1 Wrong Marks : 0.25

‘अन्वेषण’ का अर्थ है:

Options :

1. \* अनुकरण
2. ✓ खोज
3. \* पिष्टपेषण
4. \* उन्नयन

Question Number : 199 Question Id : 5861806705 Question Type : MCQ Option Shuffling : Yes  
Correct Marks : 1 Wrong Marks : 0.25

दिववेदी युगीन हिन्दी आलोचना की प्रमुख विशेषता कौन सी है?

Options :

1. ✖ परंपरावादी धारा
2. ✖ प्रगतिवादी धारा
3. ✖ क्रांतिकारी धारा
4. ✔ सुधारवादी धारा

Question Number : 200 Question Id : 5861806706 Question Type : MCQ Option Shuffling : Yes  
Correct Marks : 1 Wrong Marks : 0.25

द्विवेदी जी किस प्रवृत्ति को छोड़ने की बात करते हैं?

Options :

1. ✔ रीतिकालीन प्रवृत्ति
2. ✖ नवीन प्रवृत्ति
3. ✖ सुधारवादी प्रवृत्ति
4. ✖ शोधपरक प्रवृत्ति