

## Education Consultant India Ltd.

Notations :

1.Options shown in green color and with ✓ icon are correct.

2.Options shown in red color and with ✖ icon are incorrect.

<b>Question Paper Name:</b>	Grade IV DASS 24th September 2019 Shift 3
<b>Subject Name:</b>	Grade IV DASS
<b>Creation Date:</b>	2019-09-24 19:28:41
<b>Duration:</b>	120
<b>Total Marks:</b>	200
<b>Display Marks:</b>	Yes
<b>Share Answer Key With Delivery Engine:</b>	No
<b>Actual Answer Key:</b>	Yes
<b>Calculator:</b>	None
<b>Magnifying Glass Required?:</b>	No
<b>Ruler Required?:</b>	No
<b>Eraser Required?:</b>	No
<b>Scratch Pad Required?:</b>	No
<b>Rough Sketch/Notepad Required?:</b>	No
<b>Protractor Required?:</b>	No
<b>Show Watermark on Console?:</b>	Yes
<b>Highlighter:</b>	No
<b>Auto Save on Console?:</b>	No

## Mental Ability1

<b>Group Number :</b>	1
<b>Group Id :</b>	5459272151
<b>Group Maximum Duration :</b>	0
<b>Group Minimum Duration :</b>	0
<b>Show Attended Group? :</b>	No
<b>Edit Attended Group? :</b>	No
<b>Break time:</b>	0
<b>Group Marks:</b>	20
<b>Is this Group for Examiner?:</b>	No
<b>Revisit allowed for group Instructions? :</b>	Yes
<b>Maximum Instruction Time:</b>	0
<b>Minimum Instruction Time:</b>	0

## Mental Ability1

<b>Section Id :</b>	5459272151
<b>Section Number :</b>	1

Section type :	Online
Mandatory or Optional:	Mandatory
Number of Questions:	20
Number of Questions to be attempted:	20
Section Marks:	20

Sub-Section Number:	1
Sub-Section Id:	5459272581
Question Shuffling Allowed :	Yes

Question Number : 1 Question Id : 54592743431 Question Type : MCQ Option Shuffling : Yes  
Correct Marks : 1 Wrong Marks : 0.25

A series is given with one term missing. Select the correct alternative from the given ones that will complete the series.

FR, IU, LX , ? , RD

Options :

1. ✖ NA
2. ✖ OB
3. ✖ NB
4. ✔ OA

Question Number : 1 Question Id : 54592743431 Question Type : MCQ Option Shuffling : Yes  
Correct Marks : 1 Wrong Marks : 0.25

एक अनुक्रम दिया गया है, जिसमें से एक पद लुप्त है। दिए गए विकल्पों में से वह सही विकल्प चुनिए, जो अनुक्रम को पूरा करे।

FR, IU, LX , ? , RD

Options :

1. ✖ NA
2. ✖ OB
3. ✖ NB
4. ✔ OA

Question Number : 2 Question Id : 54592743432 Question Type : MCQ Option Shuffling : Yes

Correct Marks : 1 Wrong Marks : 0.25

A series is given with one term missing. Select the correct alternative from the given ones that will complete the series.

GOB, OGJ, WYR, ? , MIH

Options :

1. ✖ FQZ

2. ✔ EQZ

3. ✖ FRA

4. ✖ FRB

Question Number : 2 Question Id : 54592743432 Question Type : MCQ Option Shuffling : Yes

Correct Marks : 1 Wrong Marks : 0.25

एक अनुक्रम दिया गया है, जिसमें से एक पद लुप्त है। दिए गए विकल्पों में से वह सही विकल्प चुनिए, जो अनुक्रम को पूरा करे।

GOB, OGJ, WYR, ? , MIH

Options :

1. ✖ FQZ

2. ✔ EQZ

3. ✖ FRA

4. ✖ FRB

Question Number : 3 Question Id : 54592743433 Question Type : MCQ Option Shuffling : Yes

Correct Marks : 1 Wrong Marks : 0.25

A series is given with one term missing. Select the correct alternative from the given ones that will complete the series.

AP15, FV16, KB9, PH8 , ?

Options :

1. ✖ VM9
2. ✖ VN8
3. ✔ UN7
4. ✖ UM8

Question Number : 3 Question Id : 54592743433 Question Type : MCQ Option Shuffling : Yes  
Correct Marks : 1 Wrong Marks : 0.25

एक अनुक्रम दिया गया है, जिसमें से एक पद लुप्त है। दिए गए विकल्पों में से वह सही विकल्प चुनिए, जो अनुक्रम को पूरा करे।

AP15, FV16, KB9, PH8 , ?

Options :

1. ✖ VM9
2. ✖ VN8
3. ✔ UN7
4. ✖ UM8

Question Number : 4 Question Id : 54592743434 Question Type : MCQ Option Shuffling : Yes  
Correct Marks : 1 Wrong Marks : 0.25

In the following question, select the odd word from the given alternatives.

Options :

1. ✖ Hexagon
2. ✔ Figure
3. ✖ Square
4. ✖ Triangle

Question Number : 4 Question Id : 54592743434 Question Type : MCQ Option Shuffling : Yes  
Correct Marks : 1 Wrong Marks : 0.25

निम्नलिखित प्रश्न में दिए गए विकल्पों में से विषम शब्द को चुनिए।

Options :

1. ✖ षट्भुज
2. ✔ आकृति
3. ✖ वर्ग
4. ✖ त्रिभुज

Question Number : 5 Question Id : 54592743435 Question Type : MCQ Option Shuffling : Yes  
Correct Marks : 1 Wrong Marks : 0.25

In the following question, select the odd word from the given alternatives.

Options :

1. ✖ Wheat
2. ✖ Rice
3. ✔ Curd
4. ✖ Mustard

Question Number : 5 Question Id : 54592743435 Question Type : MCQ Option Shuffling : Yes  
Correct Marks : 1 Wrong Marks : 0.25

निम्नलिखित प्रश्न में दिए गए विकल्पों में से विषम शब्द को चुनिए।

Options :

1. ✖ गेहूँ
2. ✖ चावल
3. ✔ दही
4. ✖ सरसों

Question Number : 6 Question Id : 54592743436 Question Type : MCQ Option Shuffling : Yes  
Correct Marks : 1 Wrong Marks : 0.25

In the following question, select the odd letter/letters from the given alternatives.

Options :

1. ✓ VSQL
2. ✗ PMKG
3. ✗ YVTP
4. ✗ MJHD

Question Number : 6 Question Id : 54592743436 Question Type : MCQ Option Shuffling : Yes  
Correct Marks : 1 Wrong Marks : 0.25

निम्नलिखित प्रश्न में दिए गए विकल्पों में से विषम अक्षर/अक्षरों को चुनिए।

Options :

1. ✓ VSQL
2. ✗ PMKG
3. ✗ YVTP
4. ✗ MJHD

Question Number : 7 Question Id : 54592743437 Question Type : MCQ Option Shuffling : Yes  
Correct Marks : 1 Wrong Marks : 0.25

In the following question, select the related words from the given alternatives.

Sun : Star :: Mercury : ?

Options :

1. ✓ Planet
2. ✗ Satellite
3. ✗ Rotation
4. ✗ Small

Question Number : 7 Question Id : 54592743437 Question Type : MCQ Option Shuffling : Yes  
Correct Marks : 1 Wrong Marks : 0.25

निम्नलिखित प्रश्न में दिए गए विकल्पों में से संबंधित शब्दों को चुनिए।

सूर्य : तारा :: बुध : ?

Options :

1. ✓ ग्रह
2. ✗ उपग्रह
3. ✗ घुमना
4. ✗ छोटा

Question Number : 8 Question Id : 54592743438 Question Type : MCQ Option Shuffling : Yes

Correct Marks : 1 Wrong Marks : 0.25

In the following question, select the related word pair from the given alternatives.

Wall : Mason :: ?

Options :

1. ✗ Producer : Film
2. ✗ Poem : Chef
3. ✓ Shoes : Cobbler
4. ✗ Editor : Newspaper

Question Number : 8 Question Id : 54592743438 Question Type : MCQ Option Shuffling : Yes

Correct Marks : 1 Wrong Marks : 0.25

निम्नलिखित प्रश्न में दिए गए विकल्पों में से संबंधित शब्द युग्म को चुनिए।

दीवार : मिस्त्री :: ?

Options :

1. ✗ निर्माता : फिल्म

2. \* कविता : बावरची

3. ✓ जूते : मोची

4. \* संपादक : अखबार

Question Number : 9 Question Id : 54592743439 Question Type : MCQ Option Shuffling : Yes  
Correct Marks : 1 Wrong Marks : 0.25

In the following question, select the related word pair from the given alternatives.

Scalpel : Surgeon :: ?

Options :

1. \* Saw : Gardener

2. \* Needle : Author

3. ✓ Sword : Warrior

4. \* Plough : Tailor

Question Number : 9 Question Id : 54592743439 Question Type : MCQ Option Shuffling : Yes  
Correct Marks : 1 Wrong Marks : 0.25

निम्नलिखित प्रश्न में दिए गए विकल्पों में से संबंधित शब्द युग्म को चुनिए।

क्षुरिका : सर्जन :: ?

Options :

1. \* आरा : माली

2. \* सुई : लेखक

3. ✓ तलवार : योद्धा

4. \* हल : दर्जी

Question Number : 10 Question Id : 54592743440 Question Type : MCQ Option Shuffling : Yes  
Correct Marks : 1 Wrong Marks : 0.25



In a certain code language, 'GARAGE' is written as '6', 'BOUND' is written as '5'. What is the code for 'STRAPED' in that code language?

Options :

1. ✖ 4
2. ✖ 5
3. ✔ 7
4. ✖ 6

Question Number : 10 Question Id : 54592743440 Question Type : MCQ Option Shuffling : Yes

Correct Marks : 1 Wrong Marks : 0.25

एक विशिष्ट कोड भाषा में, 'GARAGE' को '6' लिखा जाता है, 'BOUND' को '5' लिखा जाता है। इस कोड भाषा में 'STRAPED' का कोड क्या है?

Options :

1. ✖ 4
2. ✖ 5
3. ✔ 7
4. ✖ 6

Question Number : 11 Question Id : 54592743441 Question Type : MCQ Option Shuffling : Yes

Correct Marks : 1 Wrong Marks : 0.25

In a certain code language, 'VALUES' is written as 'EWOQVO'. What is the code for 'CAREER' in that code language?

Options :

1. ✖ YWIVAI
2. ✔ XWIAVN
3. ✖ XWIVAN
4. ✖ YZIVAI

Question Number : 11 Question Id : 54592743441 Question Type : MCQ Option Shuffling : Yes  
Correct Marks : 1 Wrong Marks : 0.25

एक विशिष्ट कोड भाषा में, 'VALUES' को 'EWOQVO' लिखा जाता है। इस कोड भाषा में 'CAREER' का कोड क्या है?

Options :

1. ✘ YWIVAI
2. ✔ XWIAVN
3. ✘ XWIVAN
4. ✘ YZIVAI

Question Number : 12 Question Id : 54592743442 Question Type : MCQ Option Shuffling : Yes  
Correct Marks : 1 Wrong Marks : 0.25

In a certain code language, 'TYRE' is called as 'WOOD', 'WOOD' is called as 'WHITE', 'WHITE' is called as 'CAR', 'CAR' is called as 'TRIANGLE', 'TRIANGLE' is called as 'YELLOW'. What do we drive?

Options :

1. ✘ WHITE
2. ✘ CAR
3. ✔ TRIANGLE
4. ✘ YELLOW

Question Number : 12 Question Id : 54592743442 Question Type : MCQ Option Shuffling : Yes  
Correct Marks : 1 Wrong Marks : 0.25

एक विशिष्ट कोड भाषा में, 'टायर' को 'लकड़ी' कहा जाता है, 'लकड़ी' को 'सफेद' कहा जाता है, 'सफेद' को 'कार' कहा जाता है, 'कार' को 'त्रिभुज' कहा जाता है, 'त्रिभुज' को 'पीला' कहा जाता है। हम क्या चलाते हैं?

Options :

1. ✘ सफेद

2. ✖ कार

3. ✔ त्रिभुज

4. ✖ पीला

Question Number : 13 Question Id : 54592743443 Question Type : MCQ Option Shuffling : Yes

Correct Marks : 1 Wrong Marks : 0.25

A, B, C, D, E and F are sitting in a line facing towards south. A and F sits together. D sits next to F and to his right. B sits at the left end. C sits with B and E. Which two persons are sitting in middle?

Note: For this question, discrepancy is found in question/answer. So, this question is ignored for all candidates.

Options :

1. E and F

2. E and D

3. D and F

4. C and D

Question Number : 13 Question Id : 54592743443 Question Type : MCQ Option Shuffling : Yes

Correct Marks : 1 Wrong Marks : 0.25

A, B, C, D, E और F दक्षिण की ओर एक रेखा में बैठे हैं। A और F एक साथ बैठते हैं। D, F के बगल में और अपने दाईं ओर बैठता है। B, बाएं छोर पर बैठता है। C, B और E. के साथ बैठता है। कौन से दो व्यक्ति बीच में बैठे हैं?

Note: For this question, discrepancy is found in question/answer. So, this question is ignored for all candidates.

Options :

1. E तथा F

2. E तथा D

3. D तथा F

## 4. C तथा D

Question Number : 14 Question Id : 54592743444 Question Type : MCQ Option Shuffling : Yes

Correct Marks : 1 Wrong Marks : 0.25

J1, J2, J3, J4 and J5 are sitting around a circular table facing towards the centre. J1 is sitting at second place to the left of J3. J5 is sitting to the immediate right of J2. Who is sitting at second place to the left of J2?

Options :

1. ✓ J4

2. ✗ J3

3. ✗ J1

4. ✗ J5

Question Number : 14 Question Id : 54592743444 Question Type : MCQ Option Shuffling : Yes

Correct Marks : 1 Wrong Marks : 0.25

J1, J2, J3, J4 तथा J5 एक गोलाकार मेज के चारों ओर केन्द्र की ओर मुख करके बैठे हैं। J1, J3 के बायीं ओर दूसरे स्थान पर बैठा है। J5, J2 के तुरंत दाईं ओर बैठा है। J2 के बायीं ओर दूसरे स्थान पर कौन बैठा है?

Options :

1. ✓ J4

2. ✗ J3

3. ✗ J1

4. ✗ J5

Question Number : 15 Question Id : 54592743445 Question Type : MCQ Option Shuffling : Yes

Correct Marks : 1 Wrong Marks : 0.25

Seven persons Q1, Q2, Q3, Q4, Q5, Q6 and Q7 are sitting around a circular table facing towards the centre. Q7 is at third place to the left of Q6. Q3 is at second place to the left of Q2. Q3 is third to the right of Q4. Q7 is neighbour of Q2. Q5 is at third place to the right of Q1. Who is sitting at third place to the right of Q2?

Options :

1. ✖ Q4

2. ✔ Q1

3. ✖ Q6

4. ✖ Q3

Question Number : 15 Question Id : 54592743445 Question Type : MCQ Option Shuffling : Yes

Correct Marks : 1 Wrong Marks : 0.25

सात व्यक्ति Q1, Q2, Q3, Q4, Q5, Q6 तथा Q7 एक वृत्ताकार मेज के चारों ओर केन्द्र की ओर मुख करके बैठे हैं। Q7, Q6 के बायीं ओर तीसरे स्थान पर है। Q3, Q2 के बायीं ओर दूसरे स्थान पर है। Q3, Q4 के दायीं ओर तीसरे स्थान पर है। Q7, Q2 का पड़ोसी है। Q5, Q1 के दायीं ओर तीसरे स्थान पर है। Q2 के दायीं ओर तीसरे स्थान पर कौन बैठा है?

Options :

1. ✖ Q4

2. ✔ Q1

3. ✖ Q6

4. ✖ Q3

Question Number : 16 Question Id : 54592743446 Question Type : MCQ Option Shuffling : Yes

Correct Marks : 1 Wrong Marks : 0.25

Eight friends F1, F2, F3, F4, F5, F6, F7 and F8 are sitting around a circle facing centre. F1 and F7 are sitting opposite to each other. F3 and F5 are sitting opposite to each other. F5 is sitting to immediate left of F7. F2 and F4 sit together. F2 sits with F3. Which of the following is a correct order of people sitting in clockwise direction?

Note: For this question, discrepancy is found in question/answer. So, this question is ignored for all candidates.

Options :

1. F7, F8, F4, F2, F3, F1, F6, F5
2. F7, F4, F2, F3, F1, F6, F8, F5
3. F7, F4, F2, F3, F1, F5, F6, F8
4. F7, F2, F3, F4, F1, F5, F6, F8

Question Number : 16 Question Id : 54592743446 Question Type : MCQ Option Shuffling : Yes

Correct Marks : 1 Wrong Marks : 0.25

आठ दोस्त F1, F2, F3, F4, F5, F6, F7 तथा F8 एक गोलाकार वृत्त के चारों ओर केंद्र की ओर मुख करके बैठे हैं। F1 तथा F7 एक दूसरे के विपरीत बैठे हैं। F3 तथा F5 एक दूसरे के विपरीत बैठे हैं। F5, F7 के ठीक बाएं बैठा है। निम्नलिखित में से कौन सा दक्षिणावर्त दिशा में लोगों के बैठने का सही क्रम है?

Note: For this question, discrepancy is found in question/answer. So, this question is ignored for all candidates.

Options :

1. F7, F8, F4, F2, F3, F1, F6, F5
2. F7, F4, F2, F3, F1, F6, F8, F5
3. F7, F4, F2, F3, F1, F5, F6, F8
4. F7, F2, F3, F4, F1, F5, F6, F8

Question Number : 17 Question Id : 54592743447 Question Type : MCQ Option Shuffling : Yes

Correct Marks : 1 Wrong Marks : 0.25

S1, S2, S3, S4, S5 and S6 are sitting on a circular table facing the centre. S1 sits with S3 and S4. S4 sits with S5 and S6. S4 is sitting to left of S1. Which of the following is correct about them?

Note: For this question, discrepancy is found in question/answer. So, this question is ignored for all candidates.

Options :

1. S5 is opposite to S2
2. S4 is second to right of S6
3. S4 is second to left of S3
4. S1 is opposite to S2

Question Number : 17 Question Id : 54592743447 Question Type : MCQ Option Shuffling : Yes

Correct Marks : 1 Wrong Marks : 0.25

S1, S2, S3, S4, S5 तथा S6 एक गोलाकार मेज के चारों ओर केंद्र की ओर मुख करके बैठे हैं। S1, S3 तथा S4 के साथ बैठा है। S4, S5 तथा S6 के साथ बैठा है। S4, S1 के बाएं बैठा है। निम्नलिखित में से कौन सा उनके बारे में सही है?

Note: For this question, discrepancy is found in question/answer. So, this question is ignored for all candidates.

Options :

1. S5, S2 के विपरीत है
2. S4, S6 के दाएं दूसरा है
3. S4, S3 के बाएं दूसरा है
4. S1, S2 के विपरीत है

Question Number : 18 Question Id : 54592743448 Question Type : MCQ Option Shuffling : Yes

Correct Marks : 1 Wrong Marks : 0.25

In the following question below are given some statements followed by some conclusions based on those statements. Taking the given statements to be true even if they seem to be at variance from commonly known facts. Read all the conclusions and then decide which of the given conclusion logically follows the given statements.

Statements:

- I. All pen are blue.
- II. Some pen are red.

Conclusions:

- I. All red are blue.
- II. Some red are blue.
- III. Some blue are red.

Options :

- 1. ✖ Both conclusion I and II follows
- 2. ✔ Both conclusion II and III follows
- 3. ✖ Both conclusion I and III follows
- 4. ✖ All conclusion follows

Question Number : 18 Question Id : 54592743448 Question Type : MCQ Option Shuffling : Yes  
Correct Marks : 1 Wrong Marks : 0.25



नीचे दिए गए प्रश्न में कुछ कथन और उनके बाद उन कथनों पर आधारित कुछ निष्कर्ष दिए गए हैं। दिए गए कथनों को सही माने, चाहे उनमें सामान्य ज्ञात तथ्यों से भिन्नता हो। सभी निष्कर्ष पढ़ें और फिर निर्धारित करें कि दिए गए कौन से निष्कर्ष, दिए गए कथनों के आधार पर युक्तिसंगत हैं।

कथन:

- I. सभी पेन, नीले हैं।
- II. कुछ पेन लाल हैं।

निष्कर्ष:

- I. सभी लाल, नीले हैं।
- II. कुछ लाल, नीले हैं।
- III. कुछ नीले, लाल हैं।

Options :

1. \* दोनों निष्कर्ष I तथा II अनुसरण करते हैं।
2. ✓ दोनों निष्कर्ष II तथा III अनुसरण करते हैं।
3. \* दोनों निष्कर्ष I तथा III अनुसरण करते हैं।
4. \* सभी निष्कर्ष अनुसरण करते हैं।

Question Number : 19 Question Id : 54592743449 Question Type : MCQ Option Shuffling : Yes  
Correct Marks : 1 Wrong Marks : 0.25

In the following question below are given some statements followed by some conclusions based on those statements. Taking the given statements to be true even if they seem to be at variance from commonly known facts. Read all the conclusions and then decide which of the given conclusion logically follows the given statements.

Statements:

- I. Some Z are A.
- II. No A is K.

Conclusions:

- I. Some Z are not K.
- II. All Z are not K.
- III. Some Z are K.

Options :

- 1. ✖ Both conclusion I and III follows
- 2. ✖ Both conclusion II and III follows
- 3. ✔ Only conclusion I follows
- 4. ✖ Neither conclusion follows

Question Number : 19 Question Id : 54592743449 Question Type : MCQ Option Shuffling : Yes  
Correct Marks : 1 Wrong Marks : 0.25

नीचे दिए गए प्रश्न में कुछ कथन और उनके बाद उन कथनों पर आधारित कुछ निष्कर्ष दिए गए हैं। दिए गए कथनों के सही माने, चाहे उनमें सामान्य ज्ञात तथ्यों से भिन्नता हो। सभी निष्कर्ष पढ़ें और फिर निर्धारित करें कि दिए गए कौन से निष्कर्ष, दिए गए कथनों के आधार पर युक्तिसंगत हैं।

कथन:

- I. कुछ Z, A हैं।
- II. कोई A, K नहीं है।

निष्कर्ष:

- I. कुछ Z, K नहीं हैं।
- II. सभी Z, K नहीं हैं।
- III. कुछ Z, K हैं।

Options :

1. \* दोनों निष्कर्ष I तथा III अनुसरण करते हैं।
2. \* दोनों निष्कर्ष II तथा III अनुसरण करते हैं।
3. ✓ केवल निष्कर्ष I अनुसरण करता है।
4. \* कोई भी निष्कर्ष अनुसरण नहीं करता है।

Question Number : 20 Question Id : 54592743450 Question Type : MCQ Option Shuffling : Yes

Correct Marks : 1 Wrong Marks : 0.25

In the following question, select the missing number from the given series.

33, 66, 198, 792, 198, ?

Note: For this question, discrepancy is found in question/answer. So, this question is ignored for all candidates.

Options :

1. 1188
2. 100
3. 2500
4. 1000

Question Number : 20 Question Id : 54592743450 Question Type : MCQ Option Shuffling : Yes

Correct Marks : 1 Wrong Marks : 0.25

निम्नलिखित प्रश्न में दी गई श्रृंखला में से लुप्त अंक ज्ञात कीजिए।

33, 66, 198, 792, 198, ?

Note: For this question, discrepancy is found in question/answer. So, this question is ignored for all candidates.

Options :

1. 1188
2. 100
3. 2500
4. 1000

## Mental Ability2

Group Number :	2
Group Id :	5459272152
Group Maximum Duration :	0
Group Minimum Duration :	0
Show Attended Group? :	No
Edit Attended Group? :	No
Break time:	0
Group Marks:	20
Is this Group for Examiner?:	No
Revisit allowed for group Instructions? :	Yes
Maximum Instruction Time:	0
Minimum Instruction Time:	0

# Mental Ability2

Section Id :	5459272152
Section Number :	1
Section type :	Online
Mandatory or Optional:	Mandatory
Number of Questions:	20
Number of Questions to be attempted:	20
Section Marks:	20

Sub-Section Number:	1
Sub-Section Id:	5459272582
Question Shuffling Allowed :	Yes

Question Number : 21 Question Id : 54592743451 Question Type : MCQ Option Shuffling : Yes  
Correct Marks : 1 Wrong Marks : 0.25

In the following question, select the missing number from the given series.

21, 65, 197, 593, 1781, ?

Options :

1. ✖ 3210
2. ✖ 2450
3. ✖ 4354
4. ✔ 5345

Question Number : 21 Question Id : 54592743451 Question Type : MCQ Option Shuffling : Yes  
Correct Marks : 1 Wrong Marks : 0.25

निम्नलिखित प्रश्न में दी गई श्रृंखला में से लुप्त अंक ज्ञात कीजिए।

21, 65, 197, 593, 1781, ?

Options :

1. ✖ 3210
2. ✖ 2450
3. ✖ 4354

4. ✓ 5345

Question Number : 22 Question Id : 54592743452 Question Type : MCQ Option Shuffling : Yes  
Correct Marks : 1 Wrong Marks : 0.25

In the following question, select the missing number from the given series.

20, 41, 84, 171, 346, ?

Options :

1. ✗ 157

2. ✗ 492

3. ✗ 500

4. ✓ 697

Question Number : 22 Question Id : 54592743452 Question Type : MCQ Option Shuffling : Yes  
Correct Marks : 1 Wrong Marks : 0.25

निम्नलिखित प्रश्न में दी गई श्रृंखला में से लुप्त अंक ज्ञात कीजिए।

20, 41, 84, 171, 346, ?

Options :

1. ✗ 157

2. ✗ 492

3. ✗ 500

4. ✓ 697

Question Number : 23 Question Id : 54592743453 Question Type : MCQ Option Shuffling : Yes  
Correct Marks : 1 Wrong Marks : 0.25

A series is given with one term wrong. Select that wrong term from the given alternatives.

36, 43, 49, 54, 58, 61, 64

Options :

1. ✖ 58

2. ✖ 54

3. ✖ 61

4. ✔ 64

Question Number : 23 Question Id : 54592743453 Question Type : MCQ Option Shuffling : Yes

Correct Marks : 1 Wrong Marks : 0.25

एक अनुक्रम दिया गया है, जिसमें से एक पद गलत है। दिए गए विकल्पों में से उस गलत पद को चुनिए।

36, 43, 49, 54, 58, 61, 64

Options :

1. ✖ 58

2. ✖ 54

3. ✖ 61

4. ✔ 64

Question Number : 24 Question Id : 54592743454 Question Type : MCQ Option Shuffling : Yes

Correct Marks : 1 Wrong Marks : 0.25

In the following question, select the number which can be placed at the sign of question mark (?) from the given alternatives.

4	5	6	50
3	9	4	63
4	8	2	?

Options :

1. ✖ 41

2. ✖ 43

3. ✖ 47

4. ✔ 48

Question Number : 24 Question Id : 54592743454 Question Type : MCQ Option Shuffling : Yes

Correct Marks : 1 Wrong Marks : 0.25

निम्नलिखित प्रश्न में दिए गए विकल्पों में से प्रश्न चिन्ह (?) के स्थान पर आने वाली संख्या को चुनिए।

4	5	6	50
3	9	4	63
4	8	2	?

Options :

1. ✖ 41

2. ✖ 43

3. ✖ 47

4. ✔ 48

Question Number : 25 Question Id : 54592743455 Question Type : MCQ Option Shuffling : Yes

Correct Marks : 1 Wrong Marks : 0.25

In the following question, select the number which can be placed at the sign of question mark (?) from the given alternatives.

17	45	23
15	67	48
24	28	35
164	212	?

Options :

1. ✔ 169

2. ✖ 179

3. ✖ 214



#### 4. ✖ 314

Question Number : 25 Question Id : 54592743455 Question Type : MCQ Option Shuffling : Yes  
Correct Marks : 1 Wrong Marks : 0.25

निम्नलिखित प्रश्न में दिए गए विकल्पों में से प्रश्न चिन्ह (?) के स्थान पर आने वाली संख्या को चुनिए।

17	45	23
15	67	48
24	28	35
164	212	?

Options :

1. ✓ 169

2. ✖ 179

3. ✖ 214

4. ✖ 314

Question Number : 26 Question Id : 54592743456 Question Type : MCQ Option Shuffling : Yes  
Correct Marks : 1 Wrong Marks : 0.25

In the following question, select the number which can be placed at the sign of question mark (?) from the given alternatives.

4	7	2
5	9	5

8	3	5
9	5	8

6	7	5
7	?	8

Options :

1. ✖ 2

2. ✖ 7

3. ✓ 9

4. ✖ 11

Question Number : 26 Question Id : 54592743456 Question Type : MCQ Option Shuffling : Yes

Correct Marks : 1 Wrong Marks : 0.25

निम्नलिखित प्रश्न में दिए गए विकल्पों में से प्रश्न चिन्ह (?) के स्थान पर आने वाली संख्या को चुनिए।

4	7	2
5	9	5

8	3	5
9	5	8

6	7	5
7	?	8

Options :

1. ✖ 2

2. ✖ 7

3. ✔ 9

4. ✖ 11

Question Number : 27 Question Id : 54592743457 Question Type : MCQ Option Shuffling : Yes

Correct Marks : 1 Wrong Marks : 0.25

By interchanging the given two signs which of the following equation will be correct?

÷ and ×

Options :

1. ✖  $36 + 19 \div 57 \times 9 = 39$

2. ✖  $43 - 11 \div 24 \times 12 = 17$

3. ✖  $16 \times 5 + 11 \div 11 = 81$

4. ✔  $13 - 43 \times 11 \div 22 = -73$

Question Number : 27 Question Id : 54592743457 Question Type : MCQ Option Shuffling : Yes

Correct Marks : 1 Wrong Marks : 0.25

दिए गए दो चिह्नों को आपस में परस्पर बदलने पर निम्नलिखित में से कौन सा समीकरण सही होगा?

÷ तथा ×

Options :

1. ✖  $36 + 19 \div 57 \times 9 = 39$
2. ✖  $43 - 11 \div 24 \times 12 = 17$
3. ✖  $16 \times 5 + 11 \div 11 = 81$
4. ✔  $13 - 43 \times 11 \div 22 = -73$

Question Number : 28 Question Id : 54592743458 Question Type : MCQ Option Shuffling : Yes  
Correct Marks : 1 Wrong Marks : 0.25

If 'A' means '+', 'B' means '-', 'C' means '×' and 'D' means '÷', then which of the following equation is correct?

Options :

1. ✖  $8A32D8C2 > 20$
2. ✖  $63D9C2B6 > 10$
3. ✔  $7A21D7C2 > 10$
4. ✖  $25D5C2B8 > 10$

Question Number : 28 Question Id : 54592743458 Question Type : MCQ Option Shuffling : Yes  
Correct Marks : 1 Wrong Marks : 0.25

यदि 'A' का अर्थ '+', 'B' का अर्थ '-', 'C' का अर्थ '×' तथा 'D' का अर्थ '÷' हो, तो निम्नलिखित में से कौन सा समीकरण सही है?

Options :

1. ✖  $8A32D8C2 > 20$
2. ✖  $63D9C2B6 > 10$
3. ✔  $7A21D7C2 > 10$
4. ✖  $25D5C2B8 > 10$

Question Number : 29 Question Id : 54592743459 Question Type : MCQ Option Shuffling : Yes  
Correct Marks : 1 Wrong Marks : 0.25

If  $635 = 84$  and  $597 = 126$ , then  $484 = ?$

Options :

1. ✓ 96

2. ✗ 102

3. ✗ 90

4. ✗ 88

Question Number : 29 Question Id : 54592743459 Question Type : MCQ Option Shuffling : Yes  
Correct Marks : 1 Wrong Marks : 0.25

यदि  $635 = 84$  तथा  $597 = 126$  हो, तो  $484 = ?$

Options :

1. ✓ 96

2. ✗ 102

3. ✗ 90

4. ✗ 88

Question Number : 30 Question Id : 54592743460 Question Type : MCQ Option Shuffling : Yes  
Correct Marks : 1 Wrong Marks : 0.25

Identify the diagram that best represents the relationship among the given classes.

Green, Blue, Colours

Options :



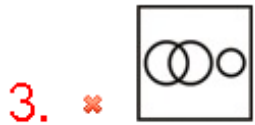


Question Number : 30 Question Id : 54592743460 Question Type : MCQ Option Shuffling : Yes  
Correct Marks : 1 Wrong Marks : 0.25

वह आरेख चुनिए जो नीचे दिए गए वर्गों के बीच के संबंध का सही निरूपण करता है।

हरा, नीला, रंग

Options :



Question Number : 31 Question Id : 54592743461 Question Type : MCQ Option Shuffling : Yes  
Correct Marks : 1 Wrong Marks : 0.25

Identify the diagram that best represents the relationship among the given classes.

Iron, Carbon, Element

Options :



Question Number : 31 Question Id : 54592743461 Question Type : MCQ Option Shuffling : Yes  
Correct Marks : 1 Wrong Marks : 0.25

वह आरेख चुनिए जो नीचे दिए गए वर्गों के बीच के संबंध का सही निरूपण करता है।

लोहा, कार्बन, तत्व

Options :





Question Number : 32 Question Id : 54592743462 Question Type : MCQ Option Shuffling : Yes  
Correct Marks : 1 Wrong Marks : 0.25

Q is South East of P. R is East of Q. S is South of R. T is East of S. In which direction is P from T?

Options :

1. ✖ North
2. ✖ West
3. ✔ North West
4. ✖ South West

Question Number : 32 Question Id : 54592743462 Question Type : MCQ Option Shuffling : Yes  
Correct Marks : 1 Wrong Marks : 0.25

Q, P के दक्षिण पूर्व में है। R, Q के पूर्व में है। S, R के दक्षिण में है।  
T, S के पूर्व में है। P, T से किस दिशा में है?

Options :

1. ✖ उत्तर
2. ✖ पश्चिम
3. ✔ उत्तर पश्चिम
4. ✖ दक्षिण पश्चिम

Question Number : 33 Question Id : 54592743463 Question Type : MCQ Option Shuffling : Yes  
Correct Marks : 1 Wrong Marks : 0.25

Raman walks 100 metre toward North. He turns right and walks 360 metre. He again turns right and walks 240 metre. In which direction is he now from the starting point?

Options :

1. \* South West
2. ✓ South East
3. \* North West
4. \* North East

Question Number : 33 Question Id : 54592743463 Question Type : MCQ Option Shuffling : Yes

Correct Marks : 1 Wrong Marks : 0.25

रमन उत्तर की ओर 100 मीटर चलता है। वह दाएं मुड़ता है तथा 360 मीटर चलता है। वह पुनः दाएं मुड़ता है तथा 240 मीटर चलता है। वह आरंभिक बिंदु से अब किस दिशा में है?

Options :

1. \* दक्षिण पश्चिम
2. ✓ दक्षिण पूर्व
3. \* उत्तर पश्चिम
4. \* उत्तर पूर्व

Question Number : 34 Question Id : 54592743464 Question Type : MCQ Option Shuffling : Yes

Correct Marks : 1 Wrong Marks : 0.25

In the following question, select the figure which can be placed at the sign of question mark (?) from the given alternatives.



Options :





Question Number : 34 Question Id : 54592743464 Question Type : MCQ Option Shuffling : Yes  
Correct Marks : 1 Wrong Marks : 0.25

निम्नलिखित प्रश्न में दिए गए विकल्पों में से प्रश्न चिन्ह (?) के स्थान पर आने वाली आकृति को चुनिए।



Options :



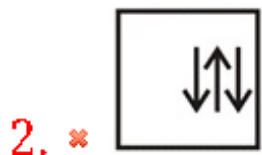


Question Number : 35 Question Id : 54592743465 Question Type : MCQ Option Shuffling : Yes  
Correct Marks : 1 Wrong Marks : 0.25

In the following question, select the wrong figure from the given series.



Options :



Question Number : 35 Question Id : 54592743465 Question Type : MCQ Option Shuffling : Yes  
Correct Marks : 1 Wrong Marks : 0.25

निम्नलिखित प्रश्न में, दी गयी श्रृंखला में से गलत आकृति को चुनिए।



Options :



Question Number : 36 Question Id : 54592743466 Question Type : MCQ Option Shuffling : Yes  
Correct Marks : 1 Wrong Marks : 0.25

In the following question, select the odd figure from the given alternatives.

Options :





Question Number : 36 Question Id : 54592743466 Question Type : MCQ Option Shuffling : Yes  
Correct Marks : 1 Wrong Marks : 0.25

निम्नलिखित प्रश्न में, दिए गए विकल्पों में से विषम आकृति को चुनिए।

Options :



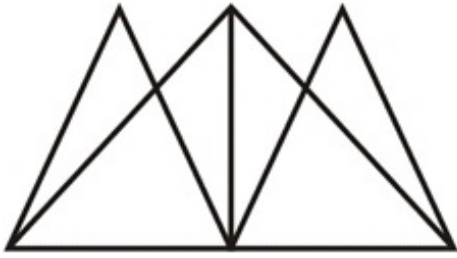


4. ✓

Question Number : 37 Question Id : 54592743467 Question Type : MCQ Option Shuffling : Yes

Correct Marks : 1 Wrong Marks : 0.25

How many Triangles are there in the given figure?



Options :

1. ✗ 10

2. ✓ 11

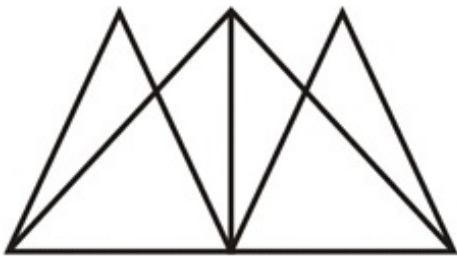
3. ✗ 12

4. ✗ 9

Question Number : 37 Question Id : 54592743467 Question Type : MCQ Option Shuffling : Yes

Correct Marks : 1 Wrong Marks : 0.25

दी गई आकृति में कितने त्रिभुज हैं?



Options :

1. ✗ 10

2. ✓ 11

3. ✗ 12

4. \* 9

Question Number : 38 Question Id : 54592743468 Question Type : MCQ Option Shuffling : Yes  
Correct Marks : 1 Wrong Marks : 0.25

Three positions of a dice are given below. What will come opposite to face containng '@'?



Options :

1. \* #

2. ✓ ^

3. \* %

4. \* &

Question Number : 38 Question Id : 54592743468 Question Type : MCQ Option Shuffling : Yes  
Correct Marks : 1 Wrong Marks : 0.25

नीचे एक पासे की तीन अवस्थाएँ दी गयी हैं। '@' युक्त फलक के विपरीत क्या आयेगा?



Options :

1. \* #

2. ✓ ^

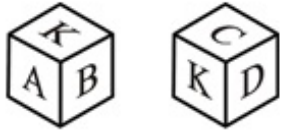
3. \* %

4. \* &

Question Number : 39 Question Id : 54592743469 Question Type : MCQ Option Shuffling : Yes

Correct Marks : 1 Wrong Marks : 0.25

Two positions of a dice are given below. What will come opposite to face containng 'A'?



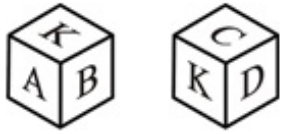
Options :

1. ✖ C
2. ✖ B
3. ✔ D
4. ✖ K

Question Number : 39 Question Id : 54592743469 Question Type : MCQ Option Shuffling : Yes

Correct Marks : 1 Wrong Marks : 0.25

नीचे एक पासे की दो अवस्थाएँ दी गयी हैं। 'A' युक्त फलक के विपरीत क्या आयेगा?



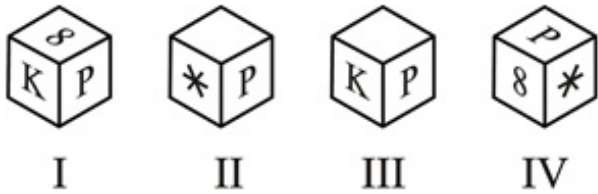
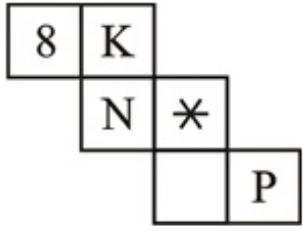
Options :

1. ✖ C
2. ✖ B
3. ✔ D
4. ✖ K

Question Number : 40 Question Id : 54592743470 Question Type : MCQ Option Shuffling : Yes

Correct Marks : 1 Wrong Marks : 0.25

Which of the following cube cannot be formed?

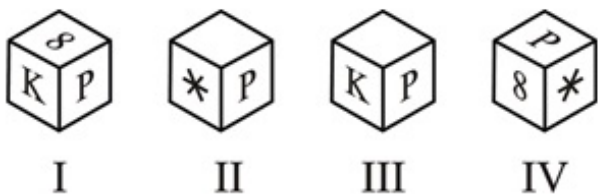
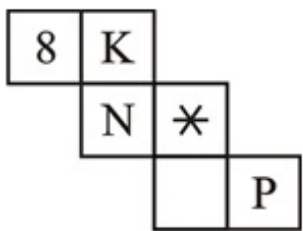


Options :

1. ✖ I and III
2. ✔ III and IV
3. ✖ I and IV
4. ✖ II and III

Question Number : 40 Question Id : 54592743470 Question Type : MCQ Option Shuffling : Yes Correct Marks : 1 Wrong Marks : 0.25

निम्नलिखित में से कौन सा घन नहीं बन सकता है?



Options :

1. ✖ I तथा III
2. ✔ III तथा IV



3. ✖ I तथा IV

4. ✖ II तथा III

## General Awareness1

Group Number :	3
Group Id :	5459272153
Group Maximum Duration :	0
Group Minimum Duration :	0
Show Attended Group? :	No
Edit Attended Group? :	No
Break time:	0
Group Marks:	20
Is this Group for Examiner? :	No
Revisit allowed for group Instructions? :	Yes
Maximum Instruction Time:	0
Minimum Instruction Time:	0

## General Awareness1

Section Id :	5459272153
Section Number :	1
Section type :	Online
Mandatory or Optional:	Mandatory
Number of Questions:	20
Number of Questions to be attempted:	20
Section Marks:	20

Sub-Section Number:	1
Sub-Section Id:	5459272583
Question Shuffling Allowed :	Yes

Question Number : 41 Question Id : 54592743471 Question Type : MCQ Option Shuffling : Yes  
Correct Marks : 1 Wrong Marks : 0.25

Parsi new year is known by which of the following names?

Options :

1. ✔ Navroz

2. ✖ Zoroast

3. ✖ Shab-e- Yalda

4. ✖ Majda

Question Number : 41 Question Id : 54592743471 Question Type : MCQ Option Shuffling : Yes

Correct Marks : 1 Wrong Marks : 0.25

पारसी नव वर्ष निम्नलिखित में से किस नाम से जाना जाता है?

Options :

1. ✓ नवरोज़
2. ✘ जोरोअस्त
3. ✘ शब-ए-यलदा
4. ✘ मजदा

Question Number : 42 Question Id : 54592743472 Question Type : MCQ Option Shuffling : Yes

Correct Marks : 1 Wrong Marks : 0.25

In which of the following dances does artist need to balance earthen and brass pots on their heads?

Options :

1. ✘ Tippani
2. ✘ Garba
3. ✓ Bhavai
4. ✘ Koli

Question Number : 42 Question Id : 54592743472 Question Type : MCQ Option Shuffling : Yes

Correct Marks : 1 Wrong Marks : 0.25

निम्नलिखित में से किस नृत्य में, कलाकारों को अपने सिर पर मिट्टी या पीतल के बर्तनों को संतुलित करना होता है?

Options :

1. ✘ टिप्पनी
2. ✘ गरबा
3. ✓ भवाई
4. ✘ कोली

Question Number : 43 Question Id : 54592743473 Question Type : MCQ Option Shuffling : Yes

Correct Marks : 1 Wrong Marks : 0.25

Bade Ghulam Ali Khan was famous for which of the following art forms?

Options :

1. ✖ Dancing
2. ✔ Singing
3. ✖ Painting
4. ✖ Writing

Question Number : 43 Question Id : 54592743473 Question Type : MCQ Option Shuffling : Yes

Correct Marks : 1 Wrong Marks : 0.25

बड़े गुलाम अली खान निम्नलिखित में से किस कला के लिए प्रसिद्ध थे?

Options :

1. ✖ नृत्य
2. ✔ गायन
3. ✖ चित्रकारी
4. ✖ लेखन

Question Number : 44 Question Id : 54592743474 Question Type : MCQ Option Shuffling : Yes

Correct Marks : 1 Wrong Marks : 0.25

'Nautanki' tradition is associated with which state?

Options :

1. ✔ Uttar Pradesh
2. ✖ Gujarat
3. ✖ Assam
4. ✖ Madhya Pradesh

Question Number : 44 Question Id : 54592743474 Question Type : MCQ Option Shuffling : Yes

Correct Marks : 1 Wrong Marks : 0.25

'नौटंकी' परंपरा किस राज्य से संबंधित है?

Options :

1. ✓ उत्तर प्रदेश

2. ✘ गुजरात

3. ✘ असम

4. ✘ मध्य प्रदेश

Question Number : 45 Question Id : 54592743475 Question Type : MCQ Option Shuffling : Yes  
Correct Marks : 1 Wrong Marks : 0.25

What contributed largest share to the government revenue as per Budget 2019 – 20?

Options :

1. ✘ Customs

2. ✓ Corporate Tax

3. ✘ Goods and Service Tax

4. ✘ Income Tax

Question Number : 45 Question Id : 54592743475 Question Type : MCQ Option Shuffling : Yes  
Correct Marks : 1 Wrong Marks : 0.25

बजट 2019 - 20 के अनुसार सरकारी राजस्व में सबसे बड़ा योगदान किसका है?

Options :

1. ✘ सीमा-शुल्क

2. ✓ कॉर्पोरेट कर

3. ✘ वस्तु और सेवा कर

4. ✘ आयकर

Question Number : 46 Question Id : 54592743476 Question Type : MCQ Option Shuffling : Yes  
Correct Marks : 1 Wrong Marks : 0.25

Which of the following receipts does not form part of Consolidated Fund of India?

Options :

1. \* Revenues received by the government
2. \* Loans raised by the Government
3. ✓ Provident Funds
4. \* Receipts from recovery of loans granted

Question Number : 46 Question Id : 54592743476 Question Type : MCQ Option Shuffling : Yes  
Correct Marks : 1 Wrong Marks : 0.25

निम्नलिखित में से कौन सी प्राप्ति भारत के समेकित कोष का हिस्सा नहीं है?

Options :

1. \* सरकार द्वारा प्राप्त राजस्व
2. \* सरकार द्वारा लिया गया ऋण
3. ✓ भविष्य निधि
4. \* ऋण की वसूली से प्राप्तियां

Question Number : 47 Question Id : 54592743477 Question Type : MCQ Option Shuffling : Yes  
Correct Marks : 1 Wrong Marks : 0.25

Contingency Fund of India is placed at the disposal of \_\_\_\_\_ to meet urgent unforeseen expenditure by Government of India.

Options :

1. ✓ President
2. \* Prime Minister
3. \* Parliament
4. \* Comptroller and Auditor General of India

Question Number : 47 Question Id : 54592743477 Question Type : MCQ Option Shuffling : Yes  
Correct Marks : 1 Wrong Marks : 0.25

भारत सरकार द्वारा तत्काल अप्रत्याशित व्यय को पूरा करने के लिए भारत की आकस्मिकता निधि को \_\_\_\_\_ के निपटान में रखा जाता है।

Options :

1. ✓ राष्ट्रपति
2. ✘ प्रधानमंत्री
3. ✘ संसद
4. ✘ भारत के नियंत्रक और महालेखापरीक्षक

Question Number : 48 Question Id : 54592743478 Question Type : MCQ Option Shuffling : Yes  
Correct Marks : 1 Wrong Marks : 0.25

Embryo gets nutrition from the mother's blood with the help of \_\_\_\_\_.

Options :

1. ✘ Vagina
2. ✘ Uterus
3. ✓ Placenta
4. ✘ Fallopian Tube

Question Number : 48 Question Id : 54592743478 Question Type : MCQ Option Shuffling : Yes  
Correct Marks : 1 Wrong Marks : 0.25

भ्रूण को \_\_\_\_\_ की सहायता से माँ के रुधिर से पोषण मिलता है।

Options :

1. ✘ योनि
2. ✘ गर्भाशय
3. ✓ प्लैसेंटा
4. ✘ अंडवाहिका/ फेलोपियन ट्यूब

Question Number : 49 Question Id : 54592743479 Question Type : MCQ Option Shuffling : Yes  
Correct Marks : 1 Wrong Marks : 0.25

Which of the following metal is stored in kerosene?

Options :

1. ✘ Copper
2. ✘ Zinc

3. ✓ Sodium

4. ✗ Cadmium

Question Number : 49 Question Id : 54592743479 Question Type : MCQ Option Shuffling : Yes

Correct Marks : 1 Wrong Marks : 0.25

निम्नलिखित में से कौन सा धातु मिट्टी के तेल में रखा जाता है?

Options :

1. ✗ कॉपर

2. ✗ जिंक

3. ✓ सोडियम

4. ✗ कैडमियम

Question Number : 50 Question Id : 54592743480 Question Type : MCQ Option Shuffling : Yes

Correct Marks : 1 Wrong Marks : 0.25

Which of the following natural source – acid pair is incorrect?

Options :

1. ✓ Tomato – Acetic acid

2. ✗ Lemon – Citric acid

3. ✗ Curd – Lactic acid

4. ✗ Ant Sting – Methanoic acid

Question Number : 50 Question Id : 54592743480 Question Type : MCQ Option Shuffling : Yes

Correct Marks : 1 Wrong Marks : 0.25

निम्नलिखित में से कौन सी प्राकृतिक स्रोत - अम्ल जोड़ी गलत है?

Options :

1. ✓ टमाटर - एसिटिक अम्ल

2. ✗ नींबू - सिट्रिक अम्ल

3. ✗ दही - लैक्टिक अम्ल

4. ✗ चीटी का डंक - मेथेनॉइक अम्ल

Question Number : 51 Question Id : 54592743481 Question Type : MCQ Option Shuffling : Yes

Correct Marks : 1 Wrong Marks : 0.25

Focal length of a concave mirror with radius of curvature 50 cm is \_\_\_\_\_.

Options :

1. ✖ 100 cm
2. ✖ 45 cm
3. ✔ 25 cm
4. ✖ 150 cm

Question Number : 51 Question Id : 54592743481 Question Type : MCQ Option Shuffling : Yes

Correct Marks : 1 Wrong Marks : 0.25

50 से.मी. वक्रता त्रिज्या वाले एक अवतल दर्पण की फोकल दूरी \_\_\_\_\_ होगी।

Options :

1. ✖ 100 से.मी.
2. ✖ 45 से.मी.
3. ✔ 25 से.मी.
4. ✖ 150 से.मी.

Question Number : 52 Question Id : 54592743482 Question Type : MCQ Option Shuffling : Yes

Correct Marks : 1 Wrong Marks : 0.25

If 10 A of current is supplied for 60 sec and the voltage across the circuit is 10V, then how much heat is produced by a conductor?

Options :

1. ✔ 6000 J
2. ✖ 60 J
3. ✖ 600 J
4. ✖ 0.6 J

Question Number : 52 Question Id : 54592743482 Question Type : MCQ Option Shuffling : Yes



Correct Marks : 1 Wrong Marks : 0.25

यदि 60 सेकण्ड के लिए 10 A की धारा की आपूर्ति की जाती है तथा परिपथ में वोल्टेज 10 V है, तो एक चालक कितनी ऊष्मा का उत्पादन करता है?

Options :

1. ✓ 6000 J
2. ✗ 60 J
3. ✗ 600 J
4. ✗ 0.6 J

Question Number : 53 Question Id : 54592743483 Question Type : MCQ Option Shuffling : Yes

Correct Marks : 1 Wrong Marks : 0.25

In context of the Chlor – Alkali process for formation of sodium hydroxide, which of the following statements is INCORRECT?

Options :

1. ✗ Chlorine gas is released at anode
2. ✗ Hydrogen gas is released at cathode
3. ✗ Sodium hydroxide is formed near the cathode
4. ✓ Sodium hydroxide is formed at anode

Question Number : 53 Question Id : 54592743483 Question Type : MCQ Option Shuffling : Yes

Correct Marks : 1 Wrong Marks : 0.25

सोडियम हाइड्रॉक्साइड बनाने के लिए क्लोर - क्षार प्रक्रिया में, निम्नलिखित में से कौन सा कथन गलत है?

Options :

1. ✗ एनोड पर क्लोरीन गैस उत्सर्जित होती है।
2. ✗ कैथोड पर हाइड्रोजन गैस उत्सर्जित होती है।
3. ✗ कैथोड के पास सोडियम हाइड्रॉक्साइड का निर्माण होता है।

4. ✓ ऐनोड पर सोडियम हाइड्रॉक्साइड का निर्माण होता है।

Question Number : 54 Question Id : 54592743484 Question Type : MCQ Option Shuffling : Yes  
Correct Marks : 1 Wrong Marks : 0.25

The nature of image formed by concave lens is \_\_\_\_\_.

Options :

1. ✘ virtual and inverted
2. ✓ virtual and erect
3. ✘ real and inverted
4. ✘ real and erect

Question Number : 54 Question Id : 54592743484 Question Type : MCQ Option Shuffling : Yes  
Correct Marks : 1 Wrong Marks : 0.25

अवतल लेंस द्वारा बनाया गया प्रतिबिंब प्रकृति में \_\_\_\_\_ होता है।

Options :

1. ✘ आभासी तथा उलटा
2. ✓ आभासी तथा सीधा
3. ✘ वास्तविक तथा उलटा
4. ✘ वास्तविक तथा सीधा

Question Number : 55 Question Id : 54592743485 Question Type : MCQ Option Shuffling : Yes  
Correct Marks : 1 Wrong Marks : 0.25

Atmosphere of Venus is made up of thick white and yellowish clouds of which acid?

Options :

1. ✘ Hydrochloric acid
2. ✓ Sulphuric acid
3. ✘ Nitric acid
4. ✘ Carbonic acid

Question Number : 55 Question Id : 54592743485 Question Type : MCQ Option Shuffling : Yes  
Correct Marks : 1 Wrong Marks : 0.25

शुक्र का वायुमंडल किस अम्ल के घने श्वेत और पीले बादलों से बना है?

Options :

1. \* हाइड्रोक्लोरिक अम्ल
2. ✓ सल्फ्यूरिक अम्ल
3. \* नाइट्रिक अम्ल
4. \* कार्बनिक अम्ल

Question Number : 56 Question Id : 54592743486 Question Type : MCQ Option Shuffling : Yes

Correct Marks : 1 Wrong Marks : 0.25

Which is the largest ocean in the world?

Options :

1. \* Indian ocean
2. ✓ Pacific ocean
3. \* Atlantic ocean
4. \* Arctic ocean

Question Number : 56 Question Id : 54592743486 Question Type : MCQ Option Shuffling : Yes

Correct Marks : 1 Wrong Marks : 0.25

विश्व का सबसे बड़ा महासागर कौन सा है?

Options :

1. \* हिंद महासागर
2. ✓ प्रशांत महासागर
3. \* अटलांटिक महासागर
4. \* आर्कटिक महासागर

Question Number : 57 Question Id : 54592743487 Question Type : MCQ Option Shuffling : Yes

Correct Marks : 1 Wrong Marks : 0.25

\_\_\_\_\_ is defined in the Census of India as the number of females per 1000 males in the population.

Options :

1. \* Male Female Disparity
2. \* Population Ratio
3. \* Gender Count
4. ✓ Sex Ratio

Question Number : 57 Question Id : 54592743487 Question Type : MCQ Option Shuffling : Yes  
Correct Marks : 1 Wrong Marks : 0.25

\_\_\_\_\_ को भारत की जनगणना में प्रति 1000 पुरुषों पर महिलाओं की संख्या के रूप में परिभाषित किया गया है।

Options :

1. \* पुरुष - स्त्री विषमता
2. \* जनसंख्या अनुपात
3. \* लिंग गणना
4. ✓ लिंग अनुपात

Question Number : 58 Question Id : 54592743488 Question Type : MCQ Option Shuffling : Yes  
Correct Marks : 1 Wrong Marks : 0.25

Polavaram Irrigation Project is associated with which state?

Options :

1. \* Gujarat
2. \* Kerala
3. \* Maharashtra
4. ✓ Andhra Pradesh

Question Number : 58 Question Id : 54592743488 Question Type : MCQ Option Shuffling : Yes  
Correct Marks : 1 Wrong Marks : 0.25

पोलावरम सिंचाई परियोजना किस राज्य से संबंधित है?

Options :

1. \* गुजरात
2. \* केरल

3. ✖ महाराष्ट्र

4. ✔ आंध्र प्रदेश

Question Number : 59 Question Id : 54592743489 Question Type : MCQ Option Shuffling : Yes

Correct Marks : 1 Wrong Marks : 0.25

\_\_\_\_\_ are oscillatory movements that result in the rise and fall of water surface.

Options :

1. ✔ Waves

2. ✖ Abyssal Plains

3. ✖ Ocean Currents

4. ✖ Continental Shelf

Question Number : 59 Question Id : 54592743489 Question Type : MCQ Option Shuffling : Yes

Correct Marks : 1 Wrong Marks : 0.25

\_\_\_\_\_ दोलक गतिविधियां हैं जो जल सतह के उत्थान और पतन में परिणत होती हैं।

Options :

1. ✔ तरंग

2. ✖ वितलीय मैदान

3. ✖ महासागरीय धाराएँ

4. ✖ महाद्वीपीय शेल्फ

Question Number : 60 Question Id : 54592743490 Question Type : MCQ Option Shuffling : Yes

Correct Marks : 1 Wrong Marks : 0.25

Which of the following is/are island(s) of Lakshadweep?

I - Kavaratti

II - Minicoy

III - Agatti

IV - Kadmat

Options :

1. \* I and II
2. \* I , III and IV
3. \* II, III and IV
4. ✓ I , II , III and IV

Question Number : 60 Question Id : 54592743490 Question Type : MCQ Option Shuffling : Yes  
Correct Marks : 1 Wrong Marks : 0.25

निम्नलिखित में से कौन सा/से द्वीप लक्षद्वीप का/के द्वीप है/हैं?

- I - कावरत्ती
- II - मिनिकॉय
- III - अगत्ती
- IV - कदमत

Options :

1. \* I तथा II
2. \* I, III, तथा IV
3. \* II, III, तथा IV
4. ✓ I, II, III तथा IV

## General Awareness2

Group Number :	4
Group Id :	5459272154
Group Maximum Duration :	0
Group Minimum Duration :	0
Show Attended Group? :	No
Edit Attended Group? :	No
Break time:	0
Group Marks:	20
Is this Group for Examiner?:	No
Revisit allowed for group Instructions? :	Yes
Maximum Instruction Time:	0
Minimum Instruction Time:	0

## General Awareness2

Section Id :	5459272154
Section Number :	1
Section type :	Online
Mandatory or Optional:	Mandatory
Number of Questions:	20
Number of Questions to be attempted:	20
Section Marks:	20

Sub-Section Number:	1
Sub-Section Id:	5459272584
Question Shuffling Allowed :	Yes

Question Number : 61 Question Id : 54592743491 Question Type : MCQ Option Shuffling : Yes  
Correct Marks : 1 Wrong Marks : 0.25

‘Sunderbans’ delta is formed by which rivers?

Options :

1. ✓ Ganga, Brahmaputra and Meghna
2. ✗ Krishna , Kaveri and Godavari
3. ✗ Ganga, Brahmaputra and Yamuna
4. ✗ Krishna, Mahanadi and Kaveri

Question Number : 61 Question Id : 54592743491 Question Type : MCQ Option Shuffling : Yes  
Correct Marks : 1 Wrong Marks : 0.25

‘सुंदरबन’ डेल्टा किन नदियों द्वारा बनाया जाता है?

Options :

1. ✓ गंगा, ब्रह्मपुत्र और मेघना
2. ✗ कृष्णा, कावेरी और गोदावरी
3. ✗ गंगा, ब्रह्मपुत्र और यमुना
4. ✗ कृष्णा, महानदी और कावेरी

Question Number : 62 Question Id : 54592743492 Question Type : MCQ Option Shuffling : Yes  
Correct Marks : 1 Wrong Marks : 0.25

Who was the successor of Babur?

Options :

1. ✓ Humayun
2. \* Sher Shah Suri
3. \* Jahangir
4. \* Akbar

Question Number : 62 Question Id : 54592743492 Question Type : MCQ Option Shuffling : Yes  
Correct Marks : 1 Wrong Marks : 0.25

बाबर का उत्तराधिकारी कौन था?

Options :

1. ✓ हुमायूँ
2. \* शेरशाह सूरी
3. \* जहाँगीर
4. \* अकबर

Question Number : 63 Question Id : 54592743493 Question Type : MCQ Option Shuffling : Yes  
Correct Marks : 1 Wrong Marks : 0.25

Which of the following two architects designed New Delhi and its important buildings?

Note: For this question, discrepancy is found in question/answer. So, this question is ignored for all candidates.

Options :

1. Sir William Emerson and Benjamin Baker
2. George Aitchison and Herbert Baker
3. William Burn and George Washington Browne
4. Edward Lutyens and Benjamin Baker

Question Number : 63 Question Id : 54592743493 Question Type : MCQ Option Shuffling : Yes  
Correct Marks : 1 Wrong Marks : 0.25

निम्नलिखित में से किन दो वास्तुकारों ने नई दिल्ली और उसकी महत्वपूर्ण इमारतों की रूपरेखा बनाई थी?



Note: For this question, discrepancy is found in question/answer. So, this question is ignored for all candidates.

Options :

1. सर विलियम एमर्सन तथा बेंजामिन बेकर
2. जॉर्ज आइचिसन तथा हर्बर्ट बेकर
3. विलियम बर्न तथा जॉर्ज वाशिंगटन ब्राउन
4. एडवर्ड लुटियंस तथा बेंजामिन बेकर

Question Number : 64 Question Id : 54592743494 Question Type : MCQ Option Shuffling : Yes  
Correct Marks : 1 Wrong Marks : 0.25

Who founded Vijayanagar Empire?

Options :

1. \* Bukka Raya and Viranarasimha Raya
2. \* Krishnadeva Raya and Rama Raya
3. \* Viranarasimha Raya and Krishnadeva Raya
4. ✓ Harihara I and Bukka Raya I

Question Number : 64 Question Id : 54592743494 Question Type : MCQ Option Shuffling : Yes  
Correct Marks : 1 Wrong Marks : 0.25

विजयनगर साम्राज्य की स्थापना किसने की थी?

Options :

1. \* बुक्क राय और वीरनरसिंह राय
2. \* कृष्णदेव राय और राम राय
3. \* वीरनरसिंह राय और कृष्णदेव राय
4. ✓ हरिहर । और बुक्क राय ।

Question Number : 65 Question Id : 54592743495 Question Type : MCQ Option Shuffling : Yes  
Correct Marks : 1 Wrong Marks : 0.25

Treaty of Salbai was signed after which war?

Options :

1. \* Third Battle of Panipat

2. \* Second Anglo-Maratha war

3. ✓ First Anglo-Maratha war

4. \* First Anglo-Mysore war

Question Number : 65 Question Id : 54592743495 Question Type : MCQ Option Shuffling : Yes

Correct Marks : 1 Wrong Marks : 0.25

सालबाई की संधि पर हस्ताक्षर किस युद्ध के बाद किये गए थे?

Options :

1. \* पानीपत की तीसरी लड़ाई

2. \* दूसरा एंग्लो-मराठा युद्ध

3. ✓ प्रथम एंग्लो-मराठा युद्ध

4. \* प्रथम एंग्लो-मैसूर युद्ध

Question Number : 66 Question Id : 54592743496 Question Type : MCQ Option Shuffling : Yes

Correct Marks : 1 Wrong Marks : 0.25

Who was the Governor-General of India from 1848 to 1856?

Options :

1. \* Warren Hastings

2. ✓ Lord Dalhousie

3. \* Lord Ripon

4. \* Charles Cornwallis

Question Number : 66 Question Id : 54592743496 Question Type : MCQ Option Shuffling : Yes

Correct Marks : 1 Wrong Marks : 0.25

1848 से 1856 तक भारत का गवर्नर जनरल कौन था?

Options :

1. \* वारेन हेस्टिंग्स

2. ✓ लॉर्ड डलहौजी

3. \* लॉर्ड रिपन

4. \* चार्ल्स कॉर्नवॉलिस

Question Number : 67 Question Id : 54592743497 Question Type : MCQ Option Shuffling : Yes

Correct Marks : 1 Wrong Marks : 0.25

Harisena was the court poet of which of the following rulers?

Options :

1. ✓ Samudragupta
2. ✗ Chandragupta
3. ✗ Kumaragupta I
4. ✗ Chandragupta II

Question Number : 67 Question Id : 54592743497 Question Type : MCQ Option Shuffling : Yes

Correct Marks : 1 Wrong Marks : 0.25

हरिसेन निम्नलिखित में से किस शासक के दरबारी कवि थे?

Options :

1. ✓ समुद्रगुप्त
2. ✗ चंद्रगुप्त
3. ✗ कुमारगुप्त I
4. ✗ चंद्रगुप्त II

Question Number : 68 Question Id : 54592743498 Question Type : MCQ Option Shuffling : Yes

Correct Marks : 1 Wrong Marks : 0.25

NITI Aayog partnered with which of the following to promote women entrepreneurs?

Options :

1. ✗ Facebook
2. ✗ Twitter
3. ✓ WhatsApp
4. ✗ Snapchat

Question Number : 68 Question Id : 54592743498 Question Type : MCQ Option Shuffling : Yes

Correct Marks : 1 Wrong Marks : 0.25

महिला उद्यमियों को बढ़ावा देने के लिए नीति आयोग ने किससे साझेदारी की है?

Options :

1. \* फेसबुक
2. \* ट्विटर
3. ✓ वाट्सऐप
4. \* स्नैपचैट

Question Number : 69 Question Id : 54592743499 Question Type : MCQ Option Shuffling : Yes

Correct Marks : 1 Wrong Marks : 0.25

World's first women's cricket magazine is called \_\_\_\_\_.

Options :

1. \* Cric queen
2. ✓ Criczone
3. \* Cricketers
4. \* Crickcrick

Question Number : 69 Question Id : 54592743499 Question Type : MCQ Option Shuffling : Yes

Correct Marks : 1 Wrong Marks : 0.25

विश्व की पहली महिला क्रिकेट पत्रिका का नाम \_\_\_\_\_ है।

Options :

1. \* क्रिक क्वीन
2. ✓ क्रिक जोन
3. \* क्रिकेटर्स
4. \* क्रिक क्रिक

Question Number : 70 Question Id : 54592743500 Question Type : MCQ Option Shuffling : Yes

Correct Marks : 1 Wrong Marks : 0.25

Who won the Red Ink Award for 'Journalist of the year'2019 for excellence in Indian Journalism?

Options :

1. ✖ Barkha Dutt
2. ✔ Rachna Khaira
3. ✖ Arnab Goswami
4. ✖ Ravish Kumar

Question Number : 70 Question Id : 54592743500 Question Type : MCQ Option Shuffling : Yes  
Correct Marks : 1 Wrong Marks : 0.25

भारतीय पत्रकारिता में उत्कृष्टता के लिए प्रतिष्ठित रेड इंक अवार्ड में 'जर्नलिस्ट ऑफ़ द ईयर' 2019 किसने जीता?

Options :

1. ✖ बरखा दत्त
2. ✔ रचना खैरा
3. ✖ अर्नब गोस्वामी
4. ✖ रवीश कुमार

Question Number : 71 Question Id : 54592743501 Question Type : MCQ Option Shuffling : Yes  
Correct Marks : 1 Wrong Marks : 0.25

Which historian and writer has been elected as international member of American Philosophical Society (APS)?

Options :

1. ✖ Meenakshi Jain
2. ✖ Dwijendra Narayan Jha
3. ✔ Romila Thapar
4. ✖ Nayanjot Lahiri

Question Number : 71 Question Id : 54592743501 Question Type : MCQ Option Shuffling : Yes  
Correct Marks : 1 Wrong Marks : 0.25

किस इतिहासकार एवं लेखक को अमेरिकी दार्शनिक समाज (ए.पी.एस) का सदस्य चुना गया है?

Options :

1. \* मीनाक्षी जैन
2. \* दिवजेंद्र नारायण झा
3. ✓ रोमिला थापर
4. \* नयनजोत लाहिड़ी

Question Number : 72 Question Id : 54592743502 Question Type : MCQ Option Shuffling : Yes  
Correct Marks : 1 Wrong Marks : 0.25

Indian Actress Sheela, won JC Daniel Award for her contribution towards which of the following?

Options :

1. ✓ Malayalam cinema
2. \* Tamil cinema
3. \* Telugu cinema
4. \* Kannada cinema

Question Number : 72 Question Id : 54592743502 Question Type : MCQ Option Shuffling : Yes  
Correct Marks : 1 Wrong Marks : 0.25

भारतीय अभिनेत्री शीला, को जे.सी डेनियल अवार्ड इनमे से किसके प्रति योगदान के लिए दिया गया है?

Options :

1. ✓ मलयालम सिनेमा
2. \* तमिल सिनेमा
3. \* तेलुगु सिनेमा
4. \* कन्नड़ सिनेमा

Question Number : 73 Question Id : 54592743503 Question Type : MCQ Option Shuffling : Yes  
Correct Marks : 1 Wrong Marks : 0.25

NALCO an Odisha based Navratna Company has been selected for President's award for which of the following scheme?

Options :

1. \* Biju Krushak Kalyan Yojana

2. \* KALIA Scheme

3. ✓ Aliali Jhia Scheme

4. \* Mamata Scheme

Question Number : 73 Question Id : 54592743503 Question Type : MCQ Option Shuffling : Yes

Correct Marks : 1 Wrong Marks : 0.25

ओडिशा में स्थित नवरत्न कंपनी नाल्को को निम्नलिखित में से किस योजना के लिए राष्ट्रपति पुरस्कार के लिए चुना गया है?

Options :

1. \* बीजू कृषक कल्याण योजना

2. \* कालिया योजना

3. ✓ अलियाली झिया योजना

4. \* ममता योजना

Question Number : 74 Question Id : 54592743504 Question Type : MCQ Option Shuffling : Yes

Correct Marks : 1 Wrong Marks : 0.25

Which of the following pairs is correct?

Options :

1. ✓ Dr. B.R. Ambedkar – Chairman of the Drafting Committee

2. \* Rajendra Prasad – Vice - Chairman of the Constituent Assembly

3. \* Jawahar Lal Nehru – Founder of Swatantra Party

4. \* Shyama Prasad Mukherjee – Defence Minister in Union Cabinet

Question Number : 74 Question Id : 54592743504 Question Type : MCQ Option Shuffling : Yes

Correct Marks : 1 Wrong Marks : 0.25

निम्नलिखित में से कौन सा जोड़ा सही है?

Options :

1. ✓ डॉ. बी. आर. अंबेडकर - मसौदा समिति के अध्यक्ष

2. \* राजेंद्र प्रसाद - उपाध्यक्ष - संविधान सभा के अध्यक्ष

3. \* जवाहर लाल नेहरू - स्वतंत्र पार्टी के संस्थापक

4. \* श्यामा प्रसाद मुखर्जी - केंद्रीय मंत्रिमंडल में रक्षा मंत्री

Question Number : 75 Question Id : 54592743505 Question Type : MCQ Option Shuffling : Yes

Correct Marks : 1 Wrong Marks : 0.25

Which of the following subject is in the concurrent list of Indian Constitution?

Note: For this question, discrepancy is found in question/answer. So, this question is ignored for all candidates.

Options :

1. Education

2. Marriage

3. Forests

4. Weights and Measures

Question Number : 75 Question Id : 54592743505 Question Type : MCQ Option Shuffling : Yes

Correct Marks : 1 Wrong Marks : 0.25

निम्नलिखित में से कौन सा विषय भारतीय संविधान की समवर्ती सूची में है?

Note: For this question, discrepancy is found in question/answer. So, this question is ignored for all candidates.

Options :

1. शिक्षा

2. विवाह

3. वन

4. भार और मापन

Question Number : 76 Question Id : 54592743506 Question Type : MCQ Option Shuffling : Yes

Correct Marks : 1 Wrong Marks : 0.25



Disqualification of Members of Parliament (MPs) and Members of Legislative Assembly (MLAs) on grounds of defection comes under \_\_\_\_\_.

Options :

1. \* Ninth Schedule
2. \* Fourth Schedule
3. ✓ Tenth Schedule
4. \* Second Schedule

Question Number : 76 Question Id : 54592743506 Question Type : MCQ Option Shuffling : Yes

Correct Marks : 1 Wrong Marks : 0.25

दलबदल के आधार पर सांसदों और विधायकों की निरर्हता \_\_\_\_\_ के अंतर्गत आती है।

Options :

1. \* नौवीं अनुसूची
2. \* चौथी अनुसूची
3. ✓ दसवीं अनुसूची
4. \* दूसरी अनुसूची

Question Number : 77 Question Id : 54592743507 Question Type : MCQ Option Shuffling : Yes

Correct Marks : 1 Wrong Marks : 0.25

Right to Protection of Life and Personal Liberty comes under which Article of the Indian Constitution?

Options :

1. ✓ 21
2. \* 20
3. \* 32
4. \* 30

Question Number : 77 Question Id : 54592743507 Question Type : MCQ Option Shuffling : Yes

Correct Marks : 1 Wrong Marks : 0.25

प्राण और दैहिक स्वतंत्रता का संरक्षण भारतीय संविधान के किस अनुच्छेद के अंतर्गत आता है?

Options :

1. ✓ 21

2. ✗ 20

3. ✗ 32

4. ✗ 30

Question Number : 78 Question Id : 54592743508 Question Type : MCQ Option Shuffling : Yes

Correct Marks : 1 Wrong Marks : 0.25

Who won gold medal in the 200m category at Kutno Athletics Meet 2019?

Options :

1. ✓ Hima Das

2. ✗ V.K. Vismaya

3. ✗ P. Saritaben

4. ✗ Sonia Baishya

Question Number : 78 Question Id : 54592743508 Question Type : MCQ Option Shuffling : Yes

Correct Marks : 1 Wrong Marks : 0.25

2019 की कुटनो एथलेटिक्स मीट में इनमे से किसने 200 मीटर वर्ग में स्वर्ण पदक जीता?

Options :

1. ✓ हिमा दास

2. ✗ वी. के. विस्मया

3. ✗ पी. सरिताबेन

4. ✗ सोनिया बैश्या

Question Number : 79 Question Id : 54592743509 Question Type : MCQ Option Shuffling : Yes

Correct Marks : 1 Wrong Marks : 0.25

Who won Wimbledon 2019 in men's singles category?

Options :

1. ✖ Roger Federer
2. ✔ Novak Djokovic
3. ✖ Rafael Nadal
4. ✖ Andy Murray

Question Number : 79 Question Id : 54592743509 Question Type : MCQ Option Shuffling : Yes

Correct Marks : 1 Wrong Marks : 0.25

2019 के विम्बलडन टूर्नामेंट का पुरुष एकल किसने जीता?

Options :

1. ✖ रोजर फ़ेडरर
2. ✔ नोवाक जोकोविच
3. ✖ राफेल नडाल
4. ✖ एंडी मरे

Question Number : 80 Question Id : 54592743510 Question Type : MCQ Option Shuffling : Yes

Correct Marks : 1 Wrong Marks : 0.25

India's FIFA ranking on 25th July 2019 was \_\_\_\_\_.

Options :

1. ✖ 102
2. ✔ 103
3. ✖ 101
4. ✖ 105

Question Number : 80 Question Id : 54592743510 Question Type : MCQ Option Shuffling : Yes

Correct Marks : 1 Wrong Marks : 0.25

25 जुलाई 2019 को भारत की फीफा रैंकिंग \_\_\_\_\_ थी।

Options :

1. ✖ 102
2. ✔ 103

3. ✖ 101

4. ✖ 105

## Arithmetic Ability1

Group Number :	5
Group Id :	5459272155
Group Maximum Duration :	0
Group Minimum Duration :	0
Show Attended Group? :	No
Edit Attended Group? :	No
Break time:	0
Group Marks:	20
Is this Group for Examiner?:	No
Revisit allowed for group Instructions? :	Yes
Maximum Instruction Time:	0
Minimum Instruction Time:	0

## Arithmetic Ability1

Section Id :	5459272155
Section Number :	1
Section type :	Online
Mandatory or Optional:	Mandatory
Number of Questions:	20
Number of Questions to be attempted:	20
Section Marks:	20

Sub-Section Number:	1
Sub-Section Id:	5459272585
Question Shuffling Allowed :	Yes

Question Number : 81 Question Id : 54592743511 Question Type : MCQ Option Shuffling : Yes  
Correct Marks : 1 Wrong Marks : 0.25

What is the value of  $225 \div 15 \times 8 + [524 \div 4 + 9 - 6 \times 3]$ ?

Options :

1. ✖ 240

2. ✓ 242

3. ✖ 244

4. ✖ 236

Question Number : 81 Question Id : 54592743511 Question Type : MCQ Option Shuffling : Yes

Correct Marks : 1 Wrong Marks : 0.25

$225 \div 15 \times 8 + [524 \div 4 + 9 - 6 \times 3]$  का मान क्या है?

Options :

1. ✖ 240

2. ✔ 242

3. ✖ 244

4. ✖ 236

Question Number : 82 Question Id : 54592743512 Question Type : MCQ Option Shuffling : Yes

Correct Marks : 1 Wrong Marks : 0.25

What is the value of:  $\sqrt[4]{256} + \sqrt[4]{2^8}$

Options :

1. ✔ 8

2. ✖ 16

3. ✖ 10

4. ✖ 12

Question Number : 82 Question Id : 54592743512 Question Type : MCQ Option Shuffling : Yes

Correct Marks : 1 Wrong Marks : 0.25

$\sqrt[4]{256} + \sqrt[4]{2^8}$  का मान क्या है?

Options :

1. ✔ 8

2. ✖ 16

3. ✖ 10

4. ✖ 12

Question Number : 83 Question Id : 54592743513 Question Type : MCQ Option Shuffling : Yes

Correct Marks : 1 Wrong Marks : 0.25

What is the value of:  $\left(\frac{1}{8} + \frac{1}{4} + \frac{1}{12}\right)^2 - \left(\frac{1}{8 \times 2} + \frac{1}{2 \times 12} + \frac{1}{12 \times 4}\right)$

Options :

1. ✖ 1/144
2. ✔ 49/576
3. ✖ 1/24
4. ✖ 48/629

Question Number : 83 Question Id : 54592743513 Question Type : MCQ Option Shuffling : Yes  
Correct Marks : 1 Wrong Marks : 0.25

$\left(\frac{1}{8} + \frac{1}{4} + \frac{1}{12}\right)^2 - \left(\frac{1}{8 \times 2} + \frac{1}{2 \times 12} + \frac{1}{12 \times 4}\right)$  का मान क्या है?

Options :

1. ✖ 1/144
2. ✔ 49/576
3. ✖ 1/24
4. ✖ 48/629

Question Number : 84 Question Id : 54592743514 Question Type : MCQ Option Shuffling : Yes  
Correct Marks : 1 Wrong Marks : 0.25

What is the value of:  $\left(\frac{(138 + 122)^2 - (138 - 122)^2}{234}\right)$

Options :

1. ✖ 260
2. ✔ 287.79
3. ✖ 256.77
4. ✖ 249

Question Number : 84 Question Id : 54592743514 Question Type : MCQ Option Shuffling : Yes  
Correct Marks : 1 Wrong Marks : 0.25

$\left(\frac{(138+122)^2 - (138-122)^2}{234}\right)$  का मान क्या है?

Options :

1. ✘ 260
2. ✔ 287.79
3. ✘ 256.77
4. ✘ 249

Question Number : 85 Question Id : 54592743515 Question Type : MCQ Option Shuffling : Yes  
Correct Marks : 1 Wrong Marks : 0.25

Which of the following is the smallest?

Options :

1. ✘  $\sqrt{17} + \sqrt{18}$
2. ✘  $\sqrt{22} + \sqrt{13}$
3. ✔  $\sqrt{11} + \sqrt{24}$
4. ✘  $\sqrt{16} + \sqrt{19}$

Question Number : 85 Question Id : 54592743515 Question Type : MCQ Option Shuffling : Yes  
Correct Marks : 1 Wrong Marks : 0.25

निम्नलिखित में से कौन सा सबसे छोटा है?

Options :

1. ✘  $\sqrt{17} + \sqrt{18}$
2. ✘  $\sqrt{22} + \sqrt{13}$
3. ✔  $\sqrt{11} + \sqrt{24}$
4. ✘  $\sqrt{16} + \sqrt{19}$

Question Number : 86 Question Id : 54592743516 Question Type : MCQ Option Shuffling : Yes  
Correct Marks : 1 Wrong Marks : 0.25

If  $x = 2 + \sqrt{6}$ , then what is the value of:  $\left(x^2 + \frac{1}{x^2}\right)$

Options :

1. ✖  $197 + 80\sqrt{6}$

2. ✖  $(24 + 3\sqrt{2})/4$

3. ✔  $(6\sqrt{6} + 25)/2$

4. ✖  $(9\sqrt{6} + 4\sqrt{8})/6$

Question Number : 86 Question Id : 54592743516 Question Type : MCQ Option Shuffling : Yes  
Correct Marks : 1 Wrong Marks : 0.25

यदि  $x = 2 + \sqrt{6}$  है, तो  $\left(x^2 + \frac{1}{x^2}\right)$  का मान क्या है?

Options :

1. ✖  $197 + 80\sqrt{6}$

2. ✖  $(24 + 3\sqrt{2})/4$

3. ✔  $(6\sqrt{6} + 25)/2$

4. ✖  $(9\sqrt{6} + 4\sqrt{8})/6$

Question Number : 87 Question Id : 54592743517 Question Type : MCQ Option Shuffling : Yes  
Correct Marks : 1 Wrong Marks : 0.25

Which of the following will be the descending order of the given values?

Options :

1. ✖  $\sqrt[3]{15}, \sqrt{10}, \sqrt[4]{20}$

2. ✖  $\sqrt[3]{20}, \sqrt{15}, \sqrt[4]{25}$

3. ✔  $\sqrt{15}, \sqrt[3]{20}, \sqrt[4]{25}$

4. ✖  $\sqrt{10}, \sqrt[4]{20}, \sqrt[3]{15}$



Question Number : 87 Question Id : 54592743517 Question Type : MCQ Option Shuffling : Yes  
Correct Marks : 1 Wrong Marks : 0.25

निम्नलिखित में से कौन सा दिये गए मानों का अवरोही क्रम होगा?

Options :

1. ✘  $\sqrt[3]{15}, \sqrt{10}, \sqrt[4]{20}$

2. ✘  $\sqrt[3]{20}, \sqrt{15}, \sqrt[4]{25}$

3. ✔  $\sqrt{15}, \sqrt[3]{20}, \sqrt[4]{25}$

4. ✘  $\sqrt{10}, \sqrt[4]{20}, \sqrt[3]{15}$

Question Number : 88 Question Id : 54592743518 Question Type : MCQ Option Shuffling : Yes  
Correct Marks : 1 Wrong Marks : 0.25

Which is that least number which after becoming double of itself will be exactly divisible by 12, 18 and 21?

Options :

1. ✘ 63

2. ✘ 252

3. ✔ 126

4. ✘ 196

Question Number : 88 Question Id : 54592743518 Question Type : MCQ Option Shuffling : Yes  
Correct Marks : 1 Wrong Marks : 0.25

वह न्यूनतम संख्या कौन सी है, जो स्वयं की दोगुना हो जाने के पश्चात् 12, 18 तथा 21 से पूर्णतः विभाजित हो जाएगी?

Options :

1. ✘ 63

2. ✖ 252

3. ✔ 126

4. ✖ 196

Question Number : 89 Question Id : 54592743519 Question Type : MCQ Option Shuffling : Yes  
Correct Marks : 1 Wrong Marks : 0.25

If  $8^{x+2} \div 16^{x+1} - \frac{1}{x+3\sqrt[3]{16}} = \frac{3}{2}$ , then what is the value of x?

Options :

1. ✖ 2

2. ✖ 1/2

3. ✔ 1

4. ✖ 0

Question Number : 89 Question Id : 54592743519 Question Type : MCQ Option Shuffling : Yes  
Correct Marks : 1 Wrong Marks : 0.25

यदि  $8^{x+2} \div 16^{x+1} - \frac{1}{x+3\sqrt[3]{16}} = \frac{3}{2}$  है, तो x का मान क्या है?

Options :

1. ✖ 2

2. ✖ 1/2

3. ✔ 1

4. ✖ 0

Question Number : 90 Question Id : 54592743520 Question Type : MCQ Option Shuffling : Yes  
Correct Marks : 1 Wrong Marks : 0.25

Which of the following is the largest?

Options :

1. ✖  $3^{1/3}$

2. ✘  $15^{1/5}$

3. ✔  $5^{1/2}$

4. ✘  $20^{1/6}$

Question Number : 90 Question Id : 54592743520 Question Type : MCQ Option Shuffling : Yes  
Correct Marks : 1 Wrong Marks : 0.25

निम्नलिखित में से कौन सा सबसे बड़ा है?

Options :

1. ✘  $3^{1/3}$

2. ✘  $15^{1/5}$

3. ✔  $5^{1/2}$

4. ✘  $20^{1/6}$

Question Number : 91 Question Id : 54592743521 Question Type : MCQ Option Shuffling : Yes  
Correct Marks : 1 Wrong Marks : 0.25

40 kg of sugar costing Rs 14 per kg is mixed with 20 kg of sugar costing Rs 22 per kg. What is the cost of the mixture?

Options :

1. ✘ Rs 27.7 per kg

2. ✘ Rs 13.33 per kg

3. ✔ Rs 16.66 per kg

#### 4. \* Rs 18 per kg

Question Number : 91 Question Id : 54592743521 Question Type : MCQ Option Shuffling : Yes  
Correct Marks : 1 Wrong Marks : 0.25

14 रुपये प्रति कि.ग्रा. मूल्य वाली 40 कि.ग्रा. चीनी को 22 रुपये प्रति कि.ग्रा. मूल्य वाली 20 कि.ग्रा. चीनी के साथ मिलाया गया है। मिश्रण का मूल्य क्या है?

Options :

1. \* 27.7 रुपये प्रति कि.ग्रा.
2. \* 13.33 रुपये कि.ग्रा.
3. ✓ 16.66 रुपये प्रति कि.ग्रा.
4. \* 18 रुपये प्रति कि.ग्रा.

Question Number : 92 Question Id : 54592743522 Question Type : MCQ Option Shuffling : Yes  
Correct Marks : 1 Wrong Marks : 0.25

20 लड़कों के एक समूह की औसत आयु 19 वर्ष है। 16 वर्ष आयु वाला एक लड़का समूह छोड़कर चला जाता है। एक नया लड़का समूह में शामिल हो जाता है तथा समूह की औसत आयु 1 वर्ष से बढ़ जाती है। नये लड़के की आयु क्या है?

Options :

1. ✓ 36
2. \* 32
3. \* 26
4. \* 35

Question Number : 92 Question Id : 54592743522 Question Type : MCQ Option Shuffling : Yes  
Correct Marks : 1 Wrong Marks : 0.25

Average age of a group of 20 boys is 19 years. A boy having age 16 years leaves the group. A new boy joins the group and the average age of the group increases by 1 year. What is the age of the new boy?

Options :

1. ✓ 36
2. ✗ 32
3. ✗ 26
4. ✗ 35

Question Number : 93 Question Id : 54592743523 Question Type : MCQ Option Shuffling : Yes  
Correct Marks : 1 Wrong Marks : 0.25

The average weight of a class of 20 students is 36 kg. If 2 new students of weight 22 kg and 28 kg are added to the class, then what will be the new average weight of 22 students?

Options :

1. ✓ 35
2. ✗ 36
3. ✗ 37
4. ✗ 35.5

Question Number : 93 Question Id : 54592743523 Question Type : MCQ Option Shuffling : Yes  
Correct Marks : 1 Wrong Marks : 0.25

एक कक्षा के 20 विद्यार्थियों का औसत भार 36 कि.ग्रा. है। यदि 22 कि.ग्रा और 28 कि.ग्रा. भार वाले 2 नए विद्यार्थियों को कक्षा में जोड़ दिया जाए, तो 22 विद्यार्थियों का नया औसत भार क्या होगा?

Options :

1. ✓ 35
2. ✗ 36
3. ✗ 37

4. ✖ 35.5

Question Number : 94 Question Id : 54592743524 Question Type : MCQ Option Shuffling : Yes  
Correct Marks : 1 Wrong Marks : 0.25

In a village, 45% people of the total population are literate and remaining are illiterate. If the number of illiterate people is 330, then what is the total population of village?

Options :

1. ✖ 300

2. ✖ 500

3. ✔ 600

4. ✖ 400

Question Number : 94 Question Id : 54592743524 Question Type : MCQ Option Shuffling : Yes  
Correct Marks : 1 Wrong Marks : 0.25

एक गाँव में, कुल जनसंख्या के 45% लोग शिक्षित हैं तथा शेष अशिक्षित हैं। यदि अशिक्षित लोगों की संख्या 330 है, तो गाँव की कुल जनसंख्या क्या है?

Options :

1. ✖ 300

2. ✖ 500

3. ✔ 600

4. ✖ 400

Question Number : 95 Question Id : 54592743525 Question Type : MCQ Option Shuffling : Yes  
Correct Marks : 1 Wrong Marks : 0.25

A's income is 150% of B's income and A's expenditure is 160% of B's expenditure. If A's income is 300% of B's expenditure, then what is the respective ratio of A's savings and B's savings?

Options :

1. ✓ 7 : 5

2. ✗ 7 : 3

3. ✗ 3 : 7

4. ✗ 5 : 12

Question Number : 95 Question Id : 54592743525 Question Type : MCQ Option Shuffling : Yes  
Correct Marks : 1 Wrong Marks : 0.25

A की आय B की आय की 150% है तथा A का व्यय B के व्यय का 160% है। यदि A की आय B के व्यय की 300% है, तो A की बचत तथा B की बचत का क्रमशः अनुपात क्या है?

Options :

1. ✓ 7 : 5

2. ✗ 7 : 3

3. ✗ 3 : 7

4. ✗ 5 : 12

Question Number : 96 Question Id : 54592743526 Question Type : MCQ Option Shuffling : Yes  
Correct Marks : 1 Wrong Marks : 0.25

The population of a town is 10,000. The male population increases by 25% and female population increases by 20%. If the total population becomes 12,300, then what were the initial number of females in the town?

Options :

1. ✓ 4000

2. ✗ 4500

3. ✗ 3000

4. ✗ 3500

Question Number : 96 Question Id : 54592743526 Question Type : MCQ Option Shuffling : Yes  
Correct Marks : 1 Wrong Marks : 0.25

एक शहर की जनसंख्या 10,000 है। पुरुषों की जनसंख्या 25% से बढ़ जाती है तथा महिलाओं की जनसंख्या 20% से बढ़ जाती है। यदि कुल जनसंख्या 12,300 हो जाती है, तो शहर में महिलाओं की प्रारंभिक संख्या क्या थी?

Options :

1. ✓ 4000
2. ✗ 4500
3. ✗ 3000
4. ✗ 3500

Question Number : 97 Question Id : 54592743527 Question Type : MCQ Option Shuffling : Yes  
Correct Marks : 1 Wrong Marks : 0.25

The ratio of cost price and selling price of a fan is 6 : 7 respectively. What is the profit percentage?

Options :

1. ✗ 14.28 percent
2. ✗ 12.5 percent
3. ✓ 16.66 percent
4. ✗ 15 percent

Question Number : 97 Question Id : 54592743527 Question Type : MCQ Option Shuffling : Yes  
Correct Marks : 1 Wrong Marks : 0.25

एक पंखे के क्रय मूल्य तथा विक्रय मूल्य का अनुपात क्रमशः 6 : 7 है। लाभ प्रतिशत क्या है?

Options :

1. ✗ 14.28 प्रतिशत
2. ✗ 12.5 प्रतिशत
3. ✓ 16.66 प्रतिशत



## 4. \* 15 प्रतिशत

Question Number : 98 Question Id : 54592743528 Question Type : MCQ Option Shuffling : Yes  
Correct Marks : 1 Wrong Marks : 0.25

A sold a watch to B at 50% profit. B sold the same watch to C at 20% loss and C again sold the same watch to A at 10% loss. In the beginning A purchased the watch for Rs 250. How much money will C pay to B to purchase the watch?

Options :

1. \* Rs. 375
2. ✓ Rs. 300
3. \* Rs. 280
4. \* Rs. 325

Question Number : 98 Question Id : 54592743528 Question Type : MCQ Option Shuffling : Yes  
Correct Marks : 1 Wrong Marks : 0.25

A ने B को 50% के लाभ पर एक घड़ी बेची। B ने उसी घड़ी को C को 20% की हानि पर बेचा तथा C ने उसी घड़ी को A को 10% की हानि पर बेचा। शुरुआत में A ने घड़ी को 250 रुपये में खरीद था। घड़ी खरीदने के लिए C, B को कितने रुपये देगा?

Options :

1. \* 375 रुपये
2. ✓ 300 रुपये
3. \* 280 रुपये
4. \* 325 रुपये

Question Number : 99 Question Id : 54592743529 Question Type : MCQ Option Shuffling : Yes  
Correct Marks : 1 Wrong Marks : 0.25

The selling price of a chair is Rs 735. The selling price of a table is 16.66% more than its cost price. If the selling price of table is 5% more than the selling price of the chair, then what is the cost price of table?

Options :

1. \* Rs. 670
2. \* Rs. 640
3. ✓ Rs. 661.5
4. \* Rs. 691.5

Question Number : 99 Question Id : 54592743529 Question Type : MCQ Option Shuffling : Yes

Correct Marks : 1 Wrong Marks : 0.25

एक कुर्सी का विक्रय मूल्य 735 रुपये है। एक मेज का विक्रय मूल्य उसके क्रय मूल्य से 16.66% अधिक है। यदि मेज का विक्रय मूल्य कुर्सी के विक्रय मूल्य से 5% अधिक है, तो मेज का क्रय मूल्य क्या है?

Options :

1. \* 670 रुपये
2. \* 640 रुपये
3. ✓ 661.5 रुपये
4. \* 691.5 रुपये

Question Number : 100 Question Id : 54592743530 Question Type : MCQ Option Shuffling : Yes

Correct Marks : 1 Wrong Marks : 0.25

If  $a : b = 3 : 4$ , then what is the value of  $2a : 3b$ ?

Options :

1. \* 2 : 3
2. \* 3 : 4
3. ✓ 1 : 2
4. \* 3 : 1

Question Number : 100 Question Id : 54592743530 Question Type : MCQ Option Shuffling : Yes  
Correct Marks : 1 Wrong Marks : 0.25

यदि  $a : b = 3 : 4$  है, तो  $2a : 3b$  का मान क्या है?

Options :

1. ✖ 2 : 3

2. ✖ 3 : 4

3. ✔ 1 : 2

4. ✖ 3 : 1

## Arithmetic Ability2

Group Number :	6
Group Id :	5459272156
Group Maximum Duration :	0
Group Minimum Duration :	0
Show Attended Group? :	No
Edit Attended Group? :	No
Break time:	0
Group Marks:	20
Is this Group for Examiner?:	No
Revisit allowed for group Instructions? :	Yes
Maximum Instruction Time:	0
Minimum Instruction Time:	0

## Arithmetic Ability2

Section Id :	5459272156
Section Number :	1
Section type :	Online
Mandatory or Optional:	Mandatory
Number of Questions:	20
Number of Questions to be attempted:	20
Section Marks:	20

Sub-Section Number:	1
Sub-Section Id:	5459272586
Question Shuffling Allowed :	Yes

Question Number : 101 Question Id : 54592743531 Question Type : MCQ Option Shuffling : Yes  
Correct Marks : 1 Wrong Marks : 0.25

A child has 25 paise coins and 50 paise coins. The ratio of number of 25 paise and 50 paise coins is 3 : 1. If he has an amount of Rs 6.25, then how many 50 paise coins does he have?

Options :

1. ✖ 15 coins
2. ✖ 6 coins
3. ✔ 5 coins
4. ✖ 10 coins

Question Number : 101 Question Id : 54592743531 Question Type : MCQ Option Shuffling : Yes

Correct Marks : 1 Wrong Marks : 0.25

एक बच्चे के पास 25 पैसे के सिक्के तथा 50 पैसे के सिक्के हैं। 25 पैसे तथा 50 पैसे के सिक्कों की संख्या का अनुपात 3 : 1 है। यदि उसके पास 6.25 रुपये हैं, तो उसके पास 50 पैसे के कितने सिक्के हैं?

Options :

1. ✖ 15 सिक्के
2. ✖ 6 सिक्के
3. ✔ 5 सिक्के
4. ✖ 10 सिक्के

Question Number : 102 Question Id : 54592743532 Question Type : MCQ Option Shuffling : Yes

Correct Marks : 1 Wrong Marks : 0.25

The ratio of the incomes of A and B is 7 : 10 and the ratio of their expenditures is 9 : 16. If they save Rs 2500 and Rs 2000 respectively, then what is their total income?

Options :

1. ✔ Rs. 17000
2. ✖ Rs. 15000
3. ✖ Rs. 18700

#### 4. \* Rs. 19550

Question Number : 102 Question Id : 54592743532 Question Type : MCQ Option Shuffling : Yes  
Correct Marks : 1 Wrong Marks : 0.25

A तथा B की आय का अनुपात 7 : 10 है तथा उनके व्यय का अनुपात 9 : 16 है। यदि वह क्रमशः 2500 रुपये तथा 2000 रुपये क्रमशः बचत करते हैं, तो उनकी कुल आय क्या है?

Options :

1. ✓ 17000 रुपये
2. \* 15000 रुपये
3. \* 18700 रुपये
4. \* 19550 रुपये

Question Number : 103 Question Id : 54592743533 Question Type : MCQ Option Shuffling : Yes  
Correct Marks : 1 Wrong Marks : 0.25

In how many years, simple interest becomes  $\frac{2}{5}$  of the principal at the rate of 10% per annum?

Options :

1. \* 3 years
2. \* 3.5 years
3. ✓ 4 years
4. \* 5 years

Question Number : 103 Question Id : 54592743533 Question Type : MCQ Option Shuffling : Yes  
Correct Marks : 1 Wrong Marks : 0.25

10% प्रति वर्ष की दर से, साधारण ब्याज कितने वर्षों में मूलधन का  $\frac{2}{5}$  हो जाएगा?

Options :

1. \* 3 वर्ष
2. \* 3.5 वर्ष

3. ✓ 4 वर्ष

4. ✖ 5 वर्ष

Question Number : 104 Question Id : 54592743534 Question Type : MCQ Option Shuffling : Yes

Correct Marks : 1 Wrong Marks : 0.25

Rs 7000 is kept at 8% rate of interest for 2 years. Which of the following is statement is/are correct.

I. Simple interest is Rs 1140

II. Compound Interest is Rs 1164.8

Options :

1. ✖ Only I

2. ✓ Only II

3. ✖ Both I and II

4. ✖ Neither I nor II

Question Number : 104 Question Id : 54592743534 Question Type : MCQ Option Shuffling : Yes

Correct Marks : 1 Wrong Marks : 0.25

7000 रुपये को 2 वर्ष के लिए 8% की दर से ब्याज पर रखा जाता है। निम्नलिखित में से कौन सा/से कथन सही है?

I. 1140 रुपये साधारण ब्याज है।

II. 1164.8 रुपये चक्रवृद्धि ब्याज है।

Options :

1. ✖ केवल I

2. ✓ केवल II

3. ✖ दोनों I तथा II

4. ✖ ना ही I ना ही II

Question Number : 105 Question Id : 54592743535 Question Type : MCQ Option Shuffling : Yes

Correct Marks : 1 Wrong Marks : 0.25

Rs 4964 is divided into two parts and each part is kept at the rate of interest of 12.5 % per annum compound interest (compounded annually). If the amount of the first part after 6 years is equal to the amount of the second part after 9 years, then what is the sum of the first part which is kept for 6 years?

Options :

1. \* Rs. 2248
2. \* Rs. 2048
3. ✓ Rs. 2916
4. \* Rs. 2716

Question Number : 105 Question Id : 54592743535 Question Type : MCQ Option Shuffling : Yes

Correct Marks : 1 Wrong Marks : 0.25

4964 रुपये को दो भागों में बाँटा जाता है तथा प्रत्येक भाग को 12.5% प्रतिवर्ष चक्रवृद्धि ब्याज (वार्षिक संयोजन पर) की ब्याज दर पर रखा जाता है। यदि 6 वर्ष बाद पहले भाग की राशि 9 वर्ष के बाद दूसरे भाग की राशि के समान है, तो पहले भाग की राशि क्या है जो 6 वर्षों तक रखी जाती है।

Options :

1. \* 2248 रुपये
2. \* 2048 रुपये
3. ✓ 2916 रुपये
4. \* 2716 रुपये

Question Number : 106 Question Id : 54592743536 Question Type : MCQ Option Shuffling : Yes

Correct Marks : 1 Wrong Marks : 0.25

A car covers a distance of 1296 km in 30 hours. What is its speed?

Options :

1. ✖ 20 m/s
2. ✖ 18 m/s
3. ✔ 12 m/s
4. ✖ 15 m/s

Question Number : 106 Question Id : 54592743536 Question Type : MCQ Option Shuffling : Yes

Correct Marks : 1 Wrong Marks : 0.25

एक गाड़ी 1296 कि.मी. की दूरी 30 घंटो में तय करता है। उसकी गति क्या है?

Options :

1. ✖ 20 मी./से.
2. ✖ 18 मी./से.
3. ✔ 12 मी./से.
4. ✖ 15 मी./से.

Question Number : 107 Question Id : 54592743537 Question Type : MCQ Option Shuffling : Yes

Correct Marks : 1 Wrong Marks : 0.25

A man covers half of a certain distance at 15 km/hr. He covers 40% of remaining distance at 12 km/hr and covers rest of the distance at 6 km/hr. What is his average speed for the entire journey?

Options :

1. ✖ 11 km/hr
2. ✔ 10 km/hr
3. ✖ 15 km/hr
4. ✖ 8 km/hr

Question Number : 107 Question Id : 54592743537 Question Type : MCQ Option Shuffling : Yes

Correct Marks : 1 Wrong Marks : 0.25



एक व्यक्ति निश्चित दूरी के आधे हिस्से को 15 कि.मी./घंटा की गति से तय करता है। वह शेष दूरी का 40%, 12 कि.मी./घंटा की गति में तय करता है तथा बची हुई दूरी को 6 कि.मी./घंटा से तय करता है। पूरी यात्रा की औसत गति क्या है?

Options :

1. ✖ 11 कि.मी./घंटा
2. ✔ 10 कि.मी./घंटा
3. ✖ 15 कि.मी./घंटा
4. ✖ 8 कि.मी./घंटा

Question Number : 108 Question Id : 54592743538 Question Type : MCQ Option Shuffling : Yes  
Correct Marks : 1 Wrong Marks : 0.25

Two trains of equal length cross a pole in 12 seconds and 18 seconds. If they travel in opposite direction, then how much time will they take to cross each other?

Options :

1. ✖ 15 seconds
2. ✖  $36/5$  seconds
3. ✔  $72/5$  seconds
4. ✖ 36 seconds

Question Number : 108 Question Id : 54592743538 Question Type : MCQ Option Shuffling : Yes  
Correct Marks : 1 Wrong Marks : 0.25

समान लम्बाई की दो रेलगाड़ियाँ एक खम्बे को 12 सेकण्ड तथा 18 सेकण्ड में पार करती हैं। यदि वे एक-दूसरे की विपरीत दिशा में यात्रा करती हैं, तो उन्हें एक-दूसरे को पार करने में कितना समय लगेगा?

Options :

1. ✖ 15 सेकण्ड
2. ✖  $36/5$  सेकण्ड

3. ✓ 72/5 सेकण्ड

4. ✖ 36 सेकण्ड

Question Number : 109 Question Id : 54592743539 Question Type : MCQ Option Shuffling : Yes

Correct Marks : 1 Wrong Marks : 0.25

P can do a piece of work in 56 days. What percent of the total work can be done by P in 42 days?

Options :

1. ✖ 42 percent

2. ✖ 60 percent

3. ✓ 75 percent

4. ✖ 72 percent

Question Number : 109 Question Id : 54592743539 Question Type : MCQ Option Shuffling : Yes

Correct Marks : 1 Wrong Marks : 0.25

P एक कार्य को 56 दिनों में पूरा कर सकता है। 42 दिनों में P कुल कार्य का कितना प्रतिशत कर सकता है?

Options :

1. ✖ 42 प्रतिशत

2. ✖ 60 प्रतिशत

3. ✓ 75 प्रतिशत

4. ✖ 72 प्रतिशत

Question Number : 110 Question Id : 54592743540 Question Type : MCQ Option Shuffling : Yes

Correct Marks : 1 Wrong Marks : 0.25

5 men, working 14 hours a day, can build a wall in 14 days. If x men, working 10 hours a day for 14 days, are paid Rs. 560 to build the same wall, then how much money does each man gets?

Options :

1. ✖ Rs. 70

2. ✖ Rs. 100

3. ✔ Rs. 80

4. ✖ Rs. 120

Question Number : 110 Question Id : 54592743540 Question Type : MCQ Option Shuffling : Yes  
Correct Marks : 1 Wrong Marks : 0.25

5 पुरुष 14 घंटे प्रतिदिन काम करके एक दीवार को 14 दिन में तैयार कर सकते हैं। यदि  $x$  पुरुषों को 14 दिनों के लिए प्रतिदिन 10 घंटे कार्य करके वही दीवार बनाने के लिए 560 रुपये का भुगतान किया जाता है, तो प्रत्येक व्यक्ति को कितने रुपये मिलते हैं?

Options :

1. ✖ 70 रुपये

2. ✖ 100 रुपये

3. ✔ 80 रुपये

4. ✖ 120 रुपये

Question Number : 111 Question Id : 54592743541 Question Type : MCQ Option Shuffling : Yes  
Correct Marks : 1 Wrong Marks : 0.25

After working for 6 days, Reena finds that only 30% of the work is completed. She employs Priya who is 80% more efficient than Reena. How many more days they together take to complete the remaining work?

Options :

1. ✖ 6 days

2. ✖ 8 days

3. ✔ 5 days

4. ✖ 10 days

Question Number : 111 Question Id : 54592743541 Question Type : MCQ Option Shuffling : Yes  
Correct Marks : 1 Wrong Marks : 0.25

6 दिन कार्य करने के पश्चात रीना ने यह पाया की केवल 30% कार्य ही पूरा हुआ है। वह प्रिया को काम में लेती है जिसकी कार्यकुशलता रीना से 80% अधिक है। बचे हुए कार्य को मिलकर पूरा करने में वह और कितने दिन लेंगी?

Options :

1. ✖ 6 दिन
2. ✖ 8 दिन
3. ✔ 5 दिन
4. ✖ 10 दिन

Question Number : 112 Question Id : 54592743542 Question Type : MCQ Option Shuffling : Yes

Correct Marks : 1 Wrong Marks : 0.25

If the side of an equilateral triangle is 12 cm, then what is its area?

Options :

1. ✖  $24\sqrt{3} \text{ cm}^2$
2. ✔  $36\sqrt{3} \text{ cm}^2$
3. ✖  $48\sqrt{3} \text{ cm}^2$
4. ✖  $72\sqrt{3} \text{ cm}^2$

Question Number : 112 Question Id : 54592743542 Question Type : MCQ Option Shuffling : Yes

Correct Marks : 1 Wrong Marks : 0.25

यदि एक समबाहु त्रिभुज की 12 से.मी. है, तो उसका क्षेत्रफल क्या है?

Options :

1. ✘  $24\sqrt{3}$  से.मी.<sup>2</sup>

2. ✔  $36\sqrt{3}$  से.मी.<sup>2</sup>

3. ✘  $48\sqrt{3}$  से.मी.<sup>2</sup>

4. ✘  $72\sqrt{3}$  से.मी.<sup>2</sup>

Question Number : 113 Question Id : 54592743543 Question Type : MCQ Option Shuffling : Yes  
Correct Marks : 1 Wrong Marks : 0.25

The length of the side of a cube is 14 cm. What is the volume of the cube?

Options :

1. ✔  $2744 \text{ cm}^3$

2. ✘  $1834 \text{ cm}^3$

3. ✘  $1744 \text{ cm}^3$

4. ✘  $2174 \text{ cm}^3$

Question Number : 113 Question Id : 54592743543 Question Type : MCQ Option Shuffling : Yes  
Correct Marks : 1 Wrong Marks : 0.25

एक घन की भुजा की लंबाई 14 से.मी. है। घन का आयतन क्या है?

Options :

1. ✓ 2744 से.मी.<sup>3</sup>

2. ✗ 1834 से.मी.<sup>3</sup>

3. ✗ 1744 से.मी.<sup>3</sup>

4. ✗ 2174 से.मी.<sup>3</sup>

Question Number : 114 Question Id : 54592743544 Question Type : MCQ Option Shuffling : Yes

Correct Marks : 1 Wrong Marks : 0.25

The two adjacent sides of a parallelogram are 6 cm and 4 cm respectively. If the one of the diagonals is 8 cm long, then what is the area of the parallelogram?

Options :

1. ✗  $9\sqrt{15} \text{ cm}^2$

2. ✓  $6\sqrt{15} \text{ cm}^2$

3. ✗  $18\sqrt{15} \text{ cm}^2$

4. ✗  $18 \text{ cm}^2$

Question Number : 114 Question Id : 54592743544 Question Type : MCQ Option Shuffling : Yes

Correct Marks : 1 Wrong Marks : 0.25

एक समांतर चतुर्भुज की दो समीपवर्ती भुजाएँ क्रमशः 6 से.मी. तथा 4 से.मी. हैं। यदि विकर्णों में से एक 8 से.मी. लंबा है, तो समांतर चतुर्भुज का क्षेत्रफल क्या है?

Options :

1. ✘  $9\sqrt{15}$  से.मी.<sup>2</sup>

2. ✔  $6\sqrt{15}$  से.मी.<sup>2</sup>

3. ✘  $18\sqrt{15}$  से.मी.<sup>2</sup>

4. ✘ 18 से.मी.<sup>2</sup>

Question Number : 115 Question Id : 54592743545 Question Type : MCQ Option Shuffling : Yes

Correct Marks : 1 Wrong Marks : 0.25

The table given below shows the import and exports of a country in 3 years.

Year	Import	Export
Y1	4000	12000
Y2	6000	13000
Y3	8000	9000

What is the difference between total exports and total imports of the given 3 years?

Options :

1. ✔ 16000

2. ✘ 14000

3. \* 1000

4. \* 12000

Question Number : 115 Question Id : 54592743545 Question Type : MCQ Option Shuffling : Yes

Correct Marks : 1 Wrong Marks : 0.25

नीचे दी गयी तालिका 3 वर्षों में हुए एक देश के आयात तथा निर्यात को दर्शाती है।

वर्ष	आयात	निर्यात
Y1	4000	12000
Y2	6000	13000
Y3	8000	9000

दिए गये 3 वर्षों के कुल निर्यात तथा कुल आयात के बीच का अंतर क्या है?

Options :

1. ✓ 16000

2. \* 14000

3. \* 1000

4. \* 12000

Question Number : 116 Question Id : 54592743546 Question Type : MCQ Option Shuffling : Yes

Correct Marks : 1 Wrong Marks : 0.25



The table given below shows the number of faculties of different subjects in a college.

Subject	Number of faculties
Maths	110
Science	123
Commerce	132
Hindi	196

The number of faculties of commerce is how much percentage more than the number of faculties of Maths?

Options :

- ✖ 5 percent
- ✖ 10 percent
- ✖ 15 percent
- ✔ 20 percent

Question Number : 116 Question Id : 54592743546 Question Type : MCQ Option Shuffling : Yes  
Correct Marks : 1 Wrong Marks : 0.25

नीचे दी गयी तालिका एक कॉलेज में विभिन्न विषयों के फैकल्टियों की संख्या को दर्शाती है।

विषय	फैकल्टियों की संख्या
गणित	110
विज्ञान	123
वाणिज्य	132
हिंदी	196

वाणिज्य के फैकल्टियों की संख्या गणित के फैकल्टियों की संख्या से कितनी प्रतिशत अधिक है?

Options :

1. ✖ 5 प्रतिशत
2. ✖ 10 प्रतिशत
3. ✖ 15 प्रतिशत
4. ✔ 20 प्रतिशत

Question Number : 117 Question Id : 54592743547 Question Type : MCQ Option Shuffling : Yes

Correct Marks : 1 Wrong Marks : 0.25

The table given below shows the number of red colour flower sold by the shopkeeper on different days of a week.

Days	Number of flower
D1	40
D2	46
D3	48
D4	50
D5	36

What is the average number of red colour flower sold by the shopkeeper per day?

Options :

1. ✓ 44

2. ✗ 46

3. ✗ 48

4. ✗ 50

Question Number : 117 Question Id : 54592743547 Question Type : MCQ Option Shuffling : Yes

Correct Marks : 1 Wrong Marks : 0.25

नीचे दी गयी तालिका एक सप्ताह के विभिन्न दिनों पर दुकानदार द्वारा बेचे गये लाल रंग के फूलों की संख्या को दर्शाती है।

दिन	फूलों की संख्या
D1	40
D2	46
D3	48
D4	50
D5	36

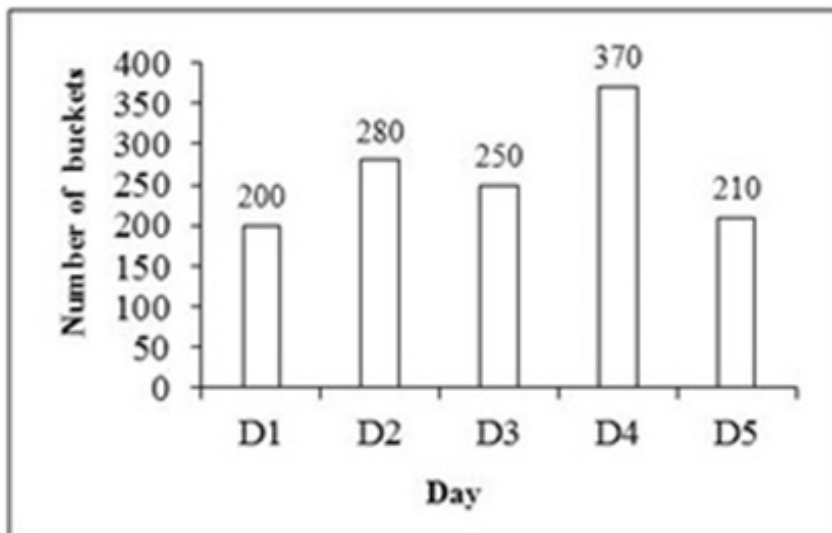
प्रति दिन दुकानदार द्वारा बेचे गये लाल रंग के फूलों की औसत संख्या क्या है?

Options :

1. ✓ 44
2. ✗ 46
3. ✗ 48
4. ✗ 50

Question Number : 118 Question Id : 54592743548 Question Type : MCQ Option Shuffling : Yes  
Correct Marks : 1 Wrong Marks : 0.25

The bar graph given below shows the number of buckets sold by a shopkeeper on the different days of a week.



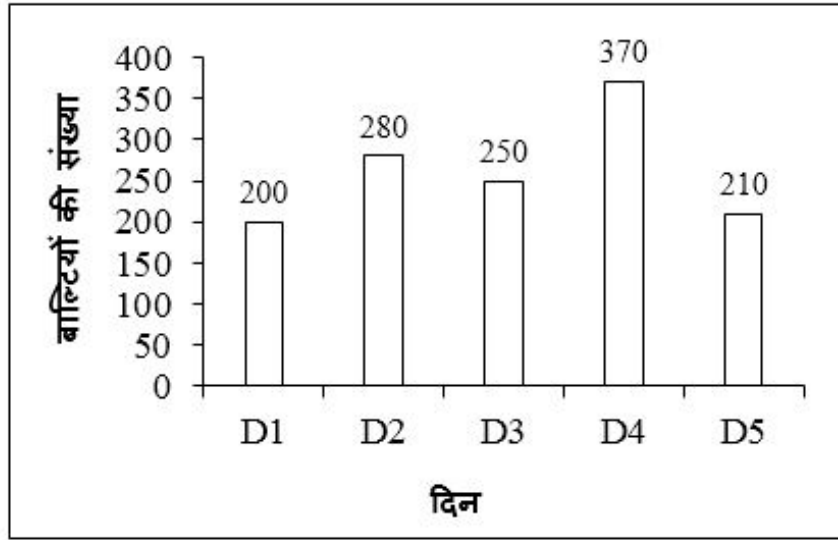
What are the total number of buckets sold by the shopkeeper on days D1, D3 and D5?

Options :

1. ✗ 600
2. ✗ 620
3. ✗ 640
4. ✓ 660

Question Number : 118 Question Id : 54592743548 Question Type : MCQ Option Shuffling : Yes  
Correct Marks : 1 Wrong Marks : 0.25

नीचे दिया गया दण्ड चित्र एक सप्ताह के विभिन्न दिनों में एक दुकानदार द्वारा बेची गई बाल्टियों की संख्या को दर्शाता है।



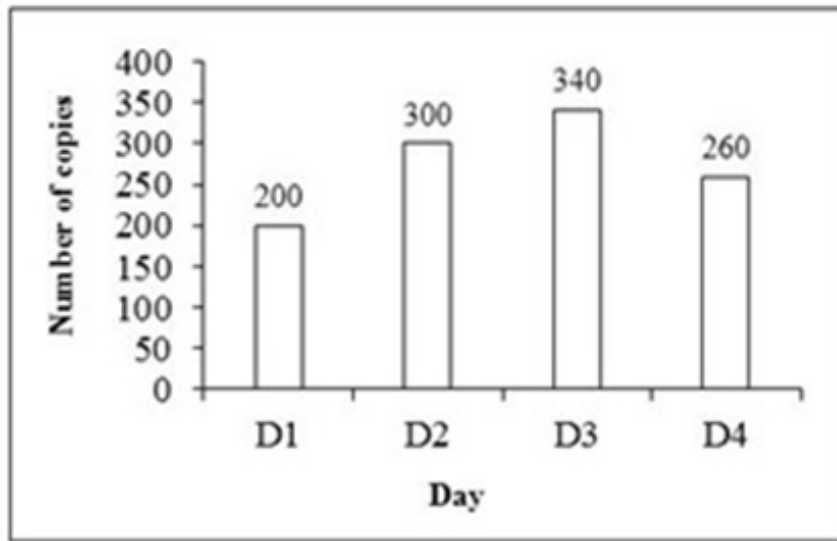
D1, D3 तथा D5 दिनों में दुकानदार द्वारा बेची गई बाल्टियों की कुल संख्या क्या है?

Options :

1. ✘ 600
2. ✘ 620
3. ✘ 640
4. ✔ 660

Question Number : 119 Question Id : 54592743549 Question Type : MCQ Option Shuffling : Yes  
Correct Marks : 1 Wrong Marks : 0.25

The bar graph given below shows the number of copies sold by a person on different days of a week.



What are the average number of copies sold by the person per day?

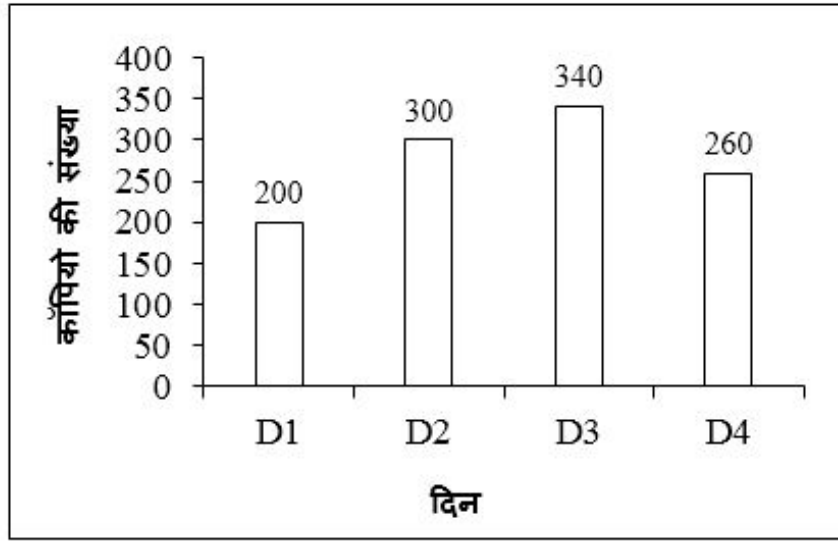
Options :

1. ✘ 250
2. ✔ 275
3. ✘ 300
4. ✘ 325

Question Number : 119 Question Id : 54592743549 Question Type : MCQ Option Shuffling : Yes

Correct Marks : 1 Wrong Marks : 0.25

नीचे दिया गया दण्ड चित्र एक सप्ताह के विभिन्न दिनों में एक व्यक्ति द्वारा बेची गई कॉपियों की संख्या को दर्शाता है।



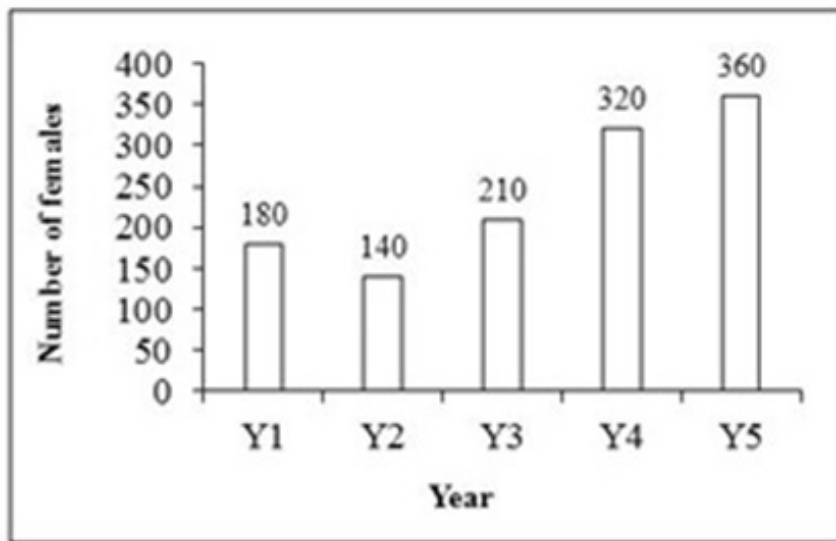
व्यक्ति द्वारा प्रति दिन बेची गई कॉपियों की औसत संख्या क्या है?

Options :

1. ✘ 250
2. ✔ 275
3. ✘ 300
4. ✘ 325

Question Number : 120 Question Id : 54592743550 Question Type : MCQ Option Shuffling : Yes  
Correct Marks : 1 Wrong Marks : 0.25

The bar graph given below shows the number of females working in a company in five consecutive years.



Number of females working in year Y5 are how much percentage more than the number of females working in year Y3?

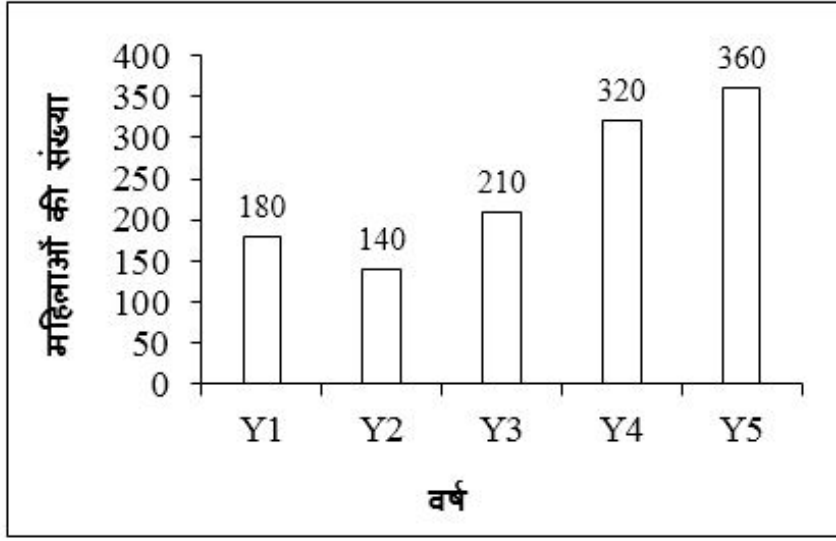
Options :

1. ✘ 69.42 percent
2. ✔ 71.42 percent
3. ✘ 73.42 percent
4. ✘ 75.42 percent

Question Number : 120 Question Id : 54592743550 Question Type : MCQ Option Shuffling : Yes  
Correct Marks : 1 Wrong Marks : 0.25



नीचे दिया गया दण्ड चित्र पाँच क्रमागत वर्षों में एक कंपनी में कार्य कर रही महिलाओं की संख्या को दर्शाता है।



वर्ष Y5 में कार्य कर रही महिलाओं की संख्या वर्ष Y3 में कार्य कर रही महिलाओं की संख्या से कितनी प्रतिशत अधिक है?

Options :

1. ✘ 69.42 प्रतिशत
2. ✔ 71.42 प्रतिशत
3. ✘ 73.42 प्रतिशत
4. ✘ 75.42 प्रतिशत

## General English1

Group Number :	7
Group Id :	5459272157
Group Maximum Duration :	0
Group Minimum Duration :	0
Show Attended Group? :	No
Edit Attended Group? :	No
Break time:	0
Group Marks:	20
Is this Group for Examiner? :	No
Revisit allowed for group Instructions? :	Yes

Maximum Instruction Time: 0  
Minimum Instruction Time: 0

## General English1

Section Id : 5459272157  
Section Number : 1  
Section type : Online  
Mandatory or Optional: Mandatory  
Number of Questions: 20  
Number of Questions to be attempted: 20  
Section Marks: 20

Sub-Section Number: 1  
Sub-Section Id: 5459272587  
Question Shuffling Allowed : Yes

Question Number : 121 Question Id : 54592743551 Question Type : MCQ Option Shuffling : Yes  
Correct Marks : 1 Wrong Marks : 0.25

A sentence has been given with a blank to be filled with an appropriate word. Choose the correct alternative.

He will arrive \_\_\_\_\_ 14th of February.

Options :

1. ✖ in

2. ✖ at

3. ✔ on

4. ✖ of

Question Number : 121 Question Id : 54592743551 Question Type : MCQ Option Shuffling : Yes  
Correct Marks : 1 Wrong Marks : 0.25

A sentence has been given with a blank to be filled with an appropriate word. Choose the correct alternative.

He will arrive \_\_\_\_\_ 14th of February.

Options :

1. ✖ in

2. ✖ at

3. ✔ on

4. ✖ of

Question Number : 122 Question Id : 54592743552 Question Type : MCQ Option Shuffling : Yes

Correct Marks : 1 Wrong Marks : 0.25

A sentence has been given with a blank to be filled with an appropriate word. Choose the correct alternative.

The orator was very \_\_\_\_\_.

Options :

1. ✖ tongue-tied

2. ✖ inarticulate

3. ✔ eloquent

4. ✖ mum chance

Question Number : 122 Question Id : 54592743552 Question Type : MCQ Option Shuffling : Yes

Correct Marks : 1 Wrong Marks : 0.25

A sentence has been given with a blank to be filled with an appropriate word. Choose the correct alternative.

The orator was very \_\_\_\_\_.

Options :

1. ✖ tongue-tied

2. ✖ inarticulate

3. ✔ eloquent

4. ✖ mum chance

Question Number : 123 Question Id : 54592743553 Question Type : MCQ Option Shuffling : Yes

Correct Marks : 1 Wrong Marks : 0.25

A sentence has been given with a blank to be filled with an appropriate word. Choose the correct alternative.

They go hiking \_\_\_\_\_ summer.

Options :

1. ✖ on

2. ✖ at

3. ✔ in

4. ✖ of

Question Number : 123 Question Id : 54592743553 Question Type : MCQ Option Shuffling : Yes

Correct Marks : 1 Wrong Marks : 0.25

A sentence has been given with a blank to be filled with an appropriate word. Choose the correct alternative.

They go hiking \_\_\_\_\_ summer.

Options :

1. ✖ on

2. ✖ at

3. ✔ in

4. ✖ of

Question Number : 124 Question Id : 54592743554 Question Type : MCQ Option Shuffling : Yes

Correct Marks : 1 Wrong Marks : 0.25

A sentence has been given with a blank to be filled with an appropriate word. Choose the correct alternative.

I have \_\_\_\_\_ interest in history.

Options :

1. ✖ a few
2. ✔ little
3. ✖ not much
4. ✖ lessen

Question Number : 124 Question Id : 54592743554 Question Type : MCQ Option Shuffling : Yes

Correct Marks : 1 Wrong Marks : 0.25

A sentence has been given with a blank to be filled with an appropriate word. Choose the correct alternative.

I have \_\_\_\_\_ interest in history.

Options :

1. ✖ a few
2. ✔ little
3. ✖ not much
4. ✖ lessen

Question Number : 125 Question Id : 54592743555 Question Type : MCQ Option Shuffling : Yes

Correct Marks : 1 Wrong Marks : 0.25

A sentence has been given with a blank to be filled with an appropriate word. Choose the correct alternative.

She will return \_\_\_\_\_ the end of the week.

Options :

1. ✖ in
2. ✖ on
3. ✔ at
4. ✖ until

Question Number : 125 Question Id : 54592743555 Question Type : MCQ Option Shuffling : Yes  
Correct Marks : 1 Wrong Marks : 0.25

A sentence has been given with a blank to be filled with an appropriate word. Choose the correct alternative.

She will return \_\_\_\_\_ the end of the week.

Options :

1. ✘ in
2. ✘ on
3. ✔ at
4. ✘ until

Question Number : 126 Question Id : 54592743556 Question Type : MCQ Option Shuffling : Yes  
Correct Marks : 1 Wrong Marks : 0.25

A sentence has been given with a blank to be filled with an appropriate word. Choose the correct alternative.

\_\_\_\_\_ I will take your advice.

Options :

1. ✔ Henceforth
2. ✘ Hereforth
3. ✘ Hereupon
4. ✘ From now

Question Number : 126 Question Id : 54592743556 Question Type : MCQ Option Shuffling : Yes  
Correct Marks : 1 Wrong Marks : 0.25

A sentence has been given with a blank to be filled with an appropriate word. Choose the correct alternative.

\_\_\_\_\_ I will take your advice.

Options :

1. ✓ Henceforth
2. ✗ Hereforth
3. ✗ Hereupon
4. ✗ From now

Question Number : 127 Question Id : 54592743557 Question Type : MCQ Option Shuffling : Yes

Correct Marks : 1 Wrong Marks : 0.25

Find the part of the given sentence that has an error in it. If there is no error, choose 'No error'.

The poor (1) / little girl (2) / was sitting in the room (3) /. No error (4)

Options :

1. ✗ 1
2. ✗ 2
3. ✗ 3
4. ✓ 4

Question Number : 127 Question Id : 54592743557 Question Type : MCQ Option Shuffling : Yes

Correct Marks : 1 Wrong Marks : 0.25

Find the part of the given sentence that has an error in it. If there is no error, choose 'No error'.

The poor (1) / little girl (2) / was sitting in the room (3) /.  
No error (4)

Options :

1. ✖ 1

2. ✖ 2

3. ✖ 3

4. ✔ 4

Question Number : 128 Question Id : 54592743558 Question Type : MCQ Option Shuffling : Yes

Correct Marks : 1 Wrong Marks : 0.25

Find the part of the given sentence that has an error in it. If there is no error, choose 'No error'.

I'm not (1) / use to (2) / a cold climate (3) /. No error (4)

Options :

1. ✖ 1

2. ✔ 2

3. ✖ 3

4. ✖ 4

Question Number : 128 Question Id : 54592743558 Question Type : MCQ Option Shuffling : Yes

Correct Marks : 1 Wrong Marks : 0.25



Find the part of the given sentence that has an error in it. If there is no error, choose 'No error'.

I'm not (1) / use to (2) / a cold climate (3) /. No error (4)

Options :

1. ✖ 1

2. ✔ 2

3. ✖ 3

4. ✖ 4

Question Number : 129 Question Id : 54592743559 Question Type : MCQ Option Shuffling : Yes

Correct Marks : 1 Wrong Marks : 0.25

Find the part of the given sentence that has an error in it. If there is no error, choose 'No error'.

All depends on (1) / Ashok's winning (2) / a scholarship (3) /.  
No error (4)

Options :

1. ✖ 1

2. ✖ 2

3. ✖ 3

4. ✔ 4

Question Number : 129 Question Id : 54592743559 Question Type : MCQ Option Shuffling : Yes

Correct Marks : 1 Wrong Marks : 0.25

Find the part of the given sentence that has an error in it.  
If there is no error, choose 'No error'.

All depends on (1) / Ashok's winning (2) / a scholarship (3)  
/. No error (4)

Options :

1. ✖ 1

2. ✖ 2

3. ✖ 3

4. ✔ 4

Question Number : 130 Question Id : 54592743560 Question Type : MCQ Option Shuffling : Yes

Correct Marks : 1 Wrong Marks : 0.25

In the following question, out of the given four alternatives, select the alternative which best expresses the meaning of the Idiom/Phrase.

To see eye to eye

Options :

1. ✖ Not to bear any fruit

2. ✖ Something

3. ✔ To agree completely

4. ✖ Meet somebody

Question Number : 130 Question Id : 54592743560 Question Type : MCQ Option Shuffling : Yes

Correct Marks : 1 Wrong Marks : 0.25

In the following question, out of the given four alternatives, select the alternative which best expresses the meaning of the Idiom/Phrase.

To see eye to eye

Options :

1. ✖ Not to bear any fruit
2. ✖ Something
3. ✔ To agree completely
4. ✖ Meet somebody

Question Number : 131 Question Id : 54592743561 Question Type : MCQ Option Shuffling : Yes

Correct Marks : 1 Wrong Marks : 0.25

Choose the word that can substitute the given sentence.

One who is a centre of attraction

Options :

1. ✖ Demagogue
2. ✖ Bohemian
3. ✖ Debonair
4. ✔ Cynosure

Question Number : 131 Question Id : 54592743561 Question Type : MCQ Option Shuffling : Yes

Correct Marks : 1 Wrong Marks : 0.25

Choose the word that can substitute the given sentence.

One who is a centre of attraction

Options :

1. ✖ Demagogue

2. ✖ Bohemian

3. ✖ Debonair

4. ✔ Cynosure

Question Number : 132 Question Id : 54592743562 Question Type : MCQ Option Shuffling : Yes  
Correct Marks : 1 Wrong Marks : 0.25

Choose the word that can substitute the given sentence.

A person who draws or produces maps

Options :

1. ✖ Psephologist

2. ✖ Lexicographer

3. ✔ Cartographer

4. ✖ Calligrapher

Question Number : 132 Question Id : 54592743562 Question Type : MCQ Option Shuffling : Yes  
Correct Marks : 1 Wrong Marks : 0.25

Choose the word that can substitute the given sentence.

A person who draws or produces maps

Options :

1. ✖ Psephologist

2. ✖ Lexicographer

3. ✔ Cartographer

4. ✖ Calligrapher

Question Number : 133 Question Id : 54592743563 Question Type : MCQ Option Shuffling : Yes  
Correct Marks : 1 Wrong Marks : 0.25

Choose the word that can substitute the given sentence.

A small group of people having control of a country or organization

Options :

1. ✖ Neocracy
2. ✖ Kakistocracy
3. ✖ Monarchy
4. ✔ Oligarchy

Question Number : 133 Question Id : 54592743563 Question Type : MCQ Option Shuffling : Yes

Correct Marks : 1 Wrong Marks : 0.25

Choose the word that can substitute the given sentence.

A small group of people having control of a country or organization

Options :

1. ✖ Neocracy
2. ✖ Kakistocracy
3. ✖ Monarchy
4. ✔ Oligarchy

Question Number : 134 Question Id : 54592743564 Question Type : MCQ Option Shuffling : Yes

Correct Marks : 1 Wrong Marks : 0.25

Rearrange the parts of the sentence in correct order.

The GST is meant

P: tax across the country on

Q: products and services

R: to be a unified indirect

Options :

1. ✖ PQR

2. ✖ RQP

3. ✖ QRP

4. ✔ RPQ

Question Number : 134 Question Id : 54592743564 Question Type : MCQ Option Shuffling : Yes

Correct Marks : 1 Wrong Marks : 0.25

Rearrange the parts of the sentence in correct order.

The GST is meant

P: tax across the country on

Q: products and services

R: to be a unified indirect

Options :

1. ✖ PQR

2. ✖ RQP

3. ✖ QRP

4. ✔ RPQ

Question Number : 135 Question Id : 54592743565 Question Type : MCQ Option Shuffling : Yes

Correct Marks : 1 Wrong Marks : 0.25

In the given question, four words are given out of which one word is correctly spelt. Choose the correctly spelt word.

Options :

1. ✓ Happily
2. ✗ Hapily
3. ✗ Happelly
4. ✗ Hapelly

Question Number : 135 Question Id : 54592743565 Question Type : MCQ Option Shuffling : Yes  
Correct Marks : 1 Wrong Marks : 0.25

In the given question, four words are given out of which one word is correctly spelt. Choose the correctly spelt word.

Options :

1. ✓ Happily
2. ✗ Hapily
3. ✗ Happelly
4. ✗ Hapelly

Question Number : 136 Question Id : 54592743566 Question Type : MCQ Option Shuffling : Yes  
Correct Marks : 1 Wrong Marks : 0.25

Choose an odd one out:

Options :

1. ✗ abeyance
2. ✗ unresolved
3. ✗ incomplete
4. ✓ continuing

Question Number : 136 Question Id : 54592743566 Question Type : MCQ Option Shuffling : Yes  
Correct Marks : 1 Wrong Marks : 0.25

Choose an odd one out:

Options :

1. ✖ abeyance
2. ✖ unresolved
3. ✖ incomplete
4. ✔ continuing

Question Number : 137 Question Id : 54592743567 Question Type : MCQ Option Shuffling : Yes  
Correct Marks : 1 Wrong Marks : 0.25

Which of the following is a synonym – antonym pair?

Options :

1. ✖ delight – amuse
2. ✖ destroy – retain
3. ✔ deprive – give
4. ✖ deliberate – consult

Question Number : 137 Question Id : 54592743567 Question Type : MCQ Option Shuffling : Yes  
Correct Marks : 1 Wrong Marks : 0.25

Which of the following is a synonym - antonym pair?

Options :

1. ✖ delight - amuse
2. ✖ destroy - retain
3. ✔ deprive - give
4. ✖ deliberate - consult

Question Number : 138 Question Id : 54592743568 Question Type : MCQ Option Shuffling : Yes  
Correct Marks : 1 Wrong Marks : 0.25

Choose the word that is opposite in meaning to the given word.

PARASITE

Options :



1. ✖ flatterer
2. ✖ sycophant
3. ✖ ban
4. ✔ loyal

Question Number : 138 Question Id : 54592743568 Question Type : MCQ Option Shuffling : Yes  
Correct Marks : 1 Wrong Marks : 0.25

Choose the word that is opposite in meaning to the given word.

PARASITE

Options :

1. ✖ flatterer
2. ✖ sycophant
3. ✖ ban
4. ✔ loyal

Question Number : 139 Question Id : 54592743569 Question Type : MCQ Option Shuffling : Yes  
Correct Marks : 1 Wrong Marks : 0.25

Improve the bracketed part of the sentence.

I have read (a little) of the book.

Options :

1. ✔ a few pages
2. ✖ little pages
3. ✖ little too many pages
4. ✖ No Improvement

Question Number : 139 Question Id : 54592743569 Question Type : MCQ Option Shuffling : Yes  
Correct Marks : 1 Wrong Marks : 0.25

Improve the bracketed part of the sentence.

I have read (a little) of the book.

Options :

1. ✓ a few pages
2. ✗ little pages
3. ✗ little too many pages
4. ✗ No Improvement

Question Number : 140 Question Id : 54592743570 Question Type : MCQ Option Shuffling : Yes  
Correct Marks : 1 Wrong Marks : 0.25

Improve the bracketed part of the sentence.

If water (is frozen), it expands.

Options :

1. ✗ will freeze
2. ✗ will be frozen
3. ✗ freezed
4. ✓ No Improvement

Question Number : 140 Question Id : 54592743570 Question Type : MCQ Option Shuffling : Yes  
Correct Marks : 1 Wrong Marks : 0.25

Improve the bracketed part of the sentence.

If water (is frozen), it expands.

Options :

1. ✗ will freeze
2. ✗ will be frozen

3. ✖ freezed

4. ✔ No Improvement

## General English2

Group Number :	8
Group Id :	5459272158
Group Maximum Duration :	0
Group Minimum Duration :	0
Show Attended Group? :	No
Edit Attended Group? :	No
Break time:	0
Group Marks:	20
Is this Group for Examiner?:	No
Revisit allowed for group Instructions? :	Yes
Maximum Instruction Time:	0
Minimum Instruction Time:	0

## General English2

Section Id :	5459272158
Section Number :	1
Section type :	Online
Mandatory or Optional:	Mandatory
Number of Questions:	16
Number of Questions to be attempted:	16
Section Marks:	20

Sub-Section Number:	1
Sub-Section Id:	5459272588
Question Shuffling Allowed :	Yes

Question Number : 141 Question Id : 54592743571 Question Type : MCQ Option Shuffling : Yes  
Correct Marks : 1 Wrong Marks : 0.25

Improve the bracketed part of the sentence.

Laxman (used to) visit this temple everyday.

Options :

1. ✖ had used to

2. ✖ will have

3. ✖ had been to

4. ✔ No Improvement

Question Number : 141 Question Id : 54592743571 Question Type : MCQ Option Shuffling : Yes  
Correct Marks : 1 Wrong Marks : 0.25

Improve the bracketed part of the sentence.

Laxman (used to) visit this temple everyday.

Options :

1. ✖ had used to

2. ✖ will have

3. ✖ had been to

4. ✔ No Improvement

Question Number : 142 Question Id : 54592743572 Question Type : MCQ Option Shuffling : Yes  
Correct Marks : 1 Wrong Marks : 0.25

A sentence has been given with a blank to be filled with an appropriate word. Choose the correct alternative.

Sohan \_\_\_\_\_ love this place.

Options :

1. ✔ use to

2. ✖ is in

3. ✖ have

4. ✖ had

Question Number : 142 Question Id : 54592743572 Question Type : MCQ Option Shuffling : Yes  
Correct Marks : 1 Wrong Marks : 0.25

A sentence has been given with a blank to be filled with an appropriate word. Choose the correct alternative.

Sohan \_\_\_\_\_ love this place.

Options :

1. ✓ use to
2. ✗ is in
3. ✗ have
4. ✗ had

Question Number : 143 Question Id : 54592743573 Question Type : MCQ Option Shuffling : Yes  
Correct Marks : 1 Wrong Marks : 0.25

Choose a sentence that contains an error.

- (1) She knows how to drive.
- (2) An old man is selling fruits.
- (3) Sanya cannot spoke English very well.
- (4) My brother passed the examination.

Options :

1. ✗ 1
2. ✗ 2
3. ✓ 3
4. ✗ 4

Question Number : 143 Question Id : 54592743573 Question Type : MCQ Option Shuffling : Yes  
Correct Marks : 1 Wrong Marks : 0.25

Choose a sentence that contains an error.

- (1) She knows how to drive.
- (2) An old man is selling fruits.
- (3) Sanya cannot spoke English very well.
- (4) My brother passed the examination.

Options :

1. ✖ 1
2. ✖ 2
3. ✔ 3
4. ✖ 4

Question Number : 144 Question Id : 54592743574 Question Type : MCQ Option Shuffling : Yes  
Correct Marks : 1 Wrong Marks : 0.25

Choose an idiom which means

excess baggage

Options :

1. ✖ All out
2. ✖ Acid test
3. ✔ Any person or thing that is unwanted
4. ✖ Birds of the same feather

Question Number : 144 Question Id : 54592743574 Question Type : MCQ Option Shuffling : Yes  
Correct Marks : 1 Wrong Marks : 0.25

Choose an idiom which means

excess baggage

Options :

1. ✖ All out
2. ✖ Acid test
3. ✔ Any person or thing that is unwanted
4. ✖ Birds of the same feather

Question Number : 145 Question Id : 54592743575 Question Type : MCQ Option Shuffling : Yes  
Correct Marks : 1 Wrong Marks : 0.25

Rearrange the parts of the sentence in correct order.

Alas, we are  
P: the pressing  
Q: issues nowadays  
R: not discussing any of

Options :

1. ✖ RQP
2. ✔ RPQ
3. ✖ QRP
4. ✖ PRQ

Question Number : 145 Question Id : 54592743575 Question Type : MCQ Option Shuffling : Yes  
Correct Marks : 1 Wrong Marks : 0.25

Rearrange the parts of the sentence in correct order.

Alas, we are  
P: the pressing  
Q: issues nowadays  
R: not discussing any of

Options :

1. ✖ RQP

2. ✓ RPQ

3. ✗ QRP

4. ✗ PRQ

Question Number : 146 Question Id : 54592743576 Question Type : MCQ Option Shuffling : Yes  
Correct Marks : 1 Wrong Marks : 0.25

In the given question, four words are given out of which one word is correctly spelt. Choose the correctly spelt word.

Options :

1. ✗ Fuorth

2. ✓ Fourth

3. ✗ Furth

4. ✗ Foureth

Question Number : 146 Question Id : 54592743576 Question Type : MCQ Option Shuffling : Yes  
Correct Marks : 1 Wrong Marks : 0.25

In the given question, four words are given out of which one word is correctly spelt. Choose the correctly spelt word.

Options :

1. ✗ Fuorth

2. ✓ Fourth

3. ✗ Furth

4. ✗ Foureth

Question Number : 147 Question Id : 54592743577 Question Type : MCQ Option Shuffling : Yes  
Correct Marks : 1 Wrong Marks : 0.25

Which of the following is a synonym – antonym pair?

Options :

1. ✓ misfortune – prosperity

2. ✗ alien – foreigner



3. ✖ harmony – accord

4. ✖ adhere – comply

Question Number : 147 Question Id : 54592743577 Question Type : MCQ Option Shuffling : Yes

Correct Marks : 1 Wrong Marks : 0.25

Which of the following is a synonym - antonym pair?

Options :

1. ✔ misfortune - prosperity

2. ✖ alien - foreigner

3. ✖ harmony - accord

4. ✖ adhere - comply

Question Number : 148 Question Id : 54592743578 Question Type : MCQ Option Shuffling : Yes

Correct Marks : 1 Wrong Marks : 0.25

Improve the bracketed part of the sentence.

The boy showed great (kind) to his friend.

Options :

1. ✖ kind hearted

2. ✖ kind heart

3. ✔ kindness

4. ✖ No Improvement

Question Number : 148 Question Id : 54592743578 Question Type : MCQ Option Shuffling : Yes

Correct Marks : 1 Wrong Marks : 0.25

Improve the bracketed part of the sentence.

The boy showed great (kind) to his friend.

Options :

1. ✖ kind hearted

2. ✖ kind heart

3. ✔ kindness

4. ✖ No Improvement

Question Number : 149 Question Id : 54592743579 Question Type : MCQ Option Shuffling : Yes  
Correct Marks : 1 Wrong Marks : 0.25

A sentence has been given with a blank to be filled with an appropriate word. Choose the correct alternative.

\_\_\_\_\_ sun is the center of our solar system.

Options :

1. ✔ The

2. ✖ A

3. ✖ An

4. ✖ One

Question Number : 149 Question Id : 54592743579 Question Type : MCQ Option Shuffling : Yes  
Correct Marks : 1 Wrong Marks : 0.25

A sentence has been given with a blank to be filled with an appropriate word. Choose the correct alternative.

\_\_\_\_\_ sun is the center of our solar system.

Options :

1. ✔ The

2. ✖ A

3. ✖ An

4. ✖ One

Question Number : 150 Question Id : 54592743580 Question Type : MCQ Option Shuffling : Yes  
Correct Marks : 1 Wrong Marks : 0.25

Find the part of the given sentence that has an error in it. If there is no error, choose 'No error'.

The girls (1) / was playing with (2) / their new dolls (3) /. No error (4)

Options :

1. ✖ 1

2. ✔ 2

3. ✖ 3

4. ✖ 4

Question Number : 150 Question Id : 54592743580 Question Type : MCQ Option Shuffling : Yes

Correct Marks : 1 Wrong Marks : 0.25

Find the part of the given sentence that has an error in it. If there is no error, choose 'No error'.

The girls (1) / was playing with (2) / their new dolls (3) /. No error (4)

Options :

1. ✖ 1

2. ✔ 2

3. ✖ 3

4. ✖ 4

Question Number : 151 Question Id : 54592743581 Question Type : MCQ Option Shuffling : Yes

Correct Marks : 1 Wrong Marks : 0.25

Choose an idiom which means

Until the end despite difficulties

Options :

1. ✖ A bird in hand
2. ✖ A black spot
3. ✖ Cats and dogs
4. ✔ To the bitter end

Question Number : 151 Question Id : 54592743581 Question Type : MCQ Option Shuffling : Yes  
Correct Marks : 1 Wrong Marks : 0.25

Choose an idiom which means

Until the end despite difficulties

Options :

1. ✖ A bird in hand
2. ✖ A black spot
3. ✖ Cats and dogs
4. ✔ To the bitter end

Question Number : 152 Question Id : 54592743582 Question Type : MCQ Option Shuffling : Yes  
Correct Marks : 1 Wrong Marks : 0.25

Rearrange the parts of the sentence in correct order.

The first-wave feminism of  
P:overturning legal inequalities  
Q: the nineteenth and early  
R: twentieth century focused on

Options :

1. ✖ RQP
2. ✖ PRQ
3. ✖ QPR
4. ✔ QRP

Question Number : 152 Question Id : 54592743582 Question Type : MCQ Option Shuffling : Yes

Correct Marks : 1 Wrong Marks : 0.25

Rearrange the parts of the sentence in correct order.

The first-wave feminism of

P:overturning legal inequalities

Q: the nineteenth and early

R: twentieth century focused on

Options :

1. ✘ RQP

2. ✘ PRQ

3. ✘ QPR

4. ✔ QRP

Question Number : 153 Question Id : 54592743583 Question Type : MCQ Option Shuffling : Yes

Correct Marks : 1 Wrong Marks : 0.25

In the given question, four words are given out of which one word is correctly spelt. Choose the correctly spelt word.

Options :

1. ✘ Slopeng

2. ✘ Sloppinng

3. ✔ Sloping

4. ✘ Slopeing

Question Number : 153 Question Id : 54592743583 Question Type : MCQ Option Shuffling : Yes

Correct Marks : 1 Wrong Marks : 0.25

In the given question, four words are given out of which one word is correctly spelt. Choose the correctly spelt word.

Options :

1. ✖ Slopeng
2. ✖ Sloppinng
3. ✔ Sloping
4. ✖ Slopeing

Question Number : 154 Question Id : 54592743584 Question Type : MCQ Option Shuffling : Yes  
Correct Marks : 1 Wrong Marks : 0.25

Choose the word that is opposite in meaning to the given word.

ABRIDGE

Options :

1. ✖ compress
2. ✖ condense
3. ✖ concrete
4. ✔ enlarge

Question Number : 154 Question Id : 54592743584 Question Type : MCQ Option Shuffling : Yes  
Correct Marks : 1 Wrong Marks : 0.25

Choose the word that is opposite in meaning to the given word.

ABRIDGE

Options :

1. ✖ compress
2. ✖ condense
3. ✖ concrete
4. ✔ enlarge

Question Number : 155 Question Id : 54592743585 Question Type : MCQ Option Shuffling : Yes  
Correct Marks : 1 Wrong Marks : 0.25

Improve the bracketed part of the sentence.

She (thrown) it out of the window.

Options :

1. ✓ threw
2. ✗ throwed
3. ✗ throw
4. ✗ No Improvement

Question Number : 155 Question Id : 54592743585 Question Type : MCQ Option Shuffling : Yes  
Correct Marks : 1 Wrong Marks : 0.25

Improve the bracketed part of the sentence.

She (thrown) it out of the window.

Options :

1. ✓ threw
2. ✗ throwed
3. ✗ throw
4. ✗ No Improvement

Sub-Section Number:	2
Sub-Section Id:	5459272589
Question Shuffling Allowed :	Yes

Question Id : 54592743586 Question Type : COMPREHENSION Sub Question Shuffling Allowed : Yes Group Comprehension Questions : No

Question Numbers : (156 to 160)

Question Label : Comprehension

Read the following information carefully and answer the given questions.

Adeline Virginia Woolf was an English writer, considered one of the most important modernist 20th-century authors and also a pioneer in the use of stream of consciousness as a narrative device. Woolf was born into an affluent household in South Kensington, London, the seventh child in a blended family of eight. Her mother, Julia Prinsep Jackson, celebrated as a Pre-Raphaelite artist's model, had three children from her first marriage, while Woolf's father, Leslie Stephen, a notable man of letters, had one daughter. The Stephens produced another four children, including the modernist painter Vanessa Bell. While the boys in the family received college educations, the girls were home-schooled in English classics and Victorian literature. An important influence in Virginia Woolf's early life was the summer home the family used in St Ives, Cornwall, where she first saw the Godrevy Lighthouse, which was to become central in her novel *To the Lighthouse* (1927).

Woolf's childhood came to an abrupt end in 1895 with the death of her mother and her first mental breakdown, followed two years later by the death of her stepsister and a mother figure to her, Stella Duckworth. From 1897 to 1901, she attended the Ladies' Department of King's College London, where she studied classics and history and came into contact with early reformers of women's higher education and the women's rights movement. Other important influences were her Cambridge-educated brothers and unfettered access to her father's vast library.

Encouraged by her father, Woolf began writing professionally in 1900. Her father's death in 1905 caused another mental breakdown for Woolf. Following his death, the Stephen family moved from Kensington to the more bohemian Bloomsbury, where they adopted a free-spirited lifestyle. It was in Bloomsbury where, in conjunction with the brothers' intellectual friends, they formed the artistic and literary Bloomsbury Group.



Sub questions

Question Number : 156 Question Id : 54592743587 Question Type : MCQ Option Shuffling : Yes

Correct Marks : 1 Wrong Marks : 0.25

Which of the following is not true about Virginia Woolf?

Options :

1. ✘ Woolf was born into an affluent household
2. ✔ Woolf's childhood came to an abrupt end in 1894
3. ✘ She was an English writer
4. ✘ Woolf was a member of Bloomsbury Group

Question Number : 157 Question Id : 54592743588 Question Type : MCQ Option Shuffling : Yes

Correct Marks : 1 Wrong Marks : 0.25

What was the reason for her first mental breakdown?

Options :

1. ✘ She was considered one of the most important modernist
2. ✘ Her father's death
3. ✔ Her mother's death
4. ✘ Death of Stella Duckworth

Question Number : 158 Question Id : 54592743589 Question Type : MCQ Option Shuffling : Yes

Correct Marks : 1 Wrong Marks : 0.25

Who encouraged Woolf to start writing professionally?

Options :

1. ✘ Her friends
2. ✘ Her mother
3. ✔ Her father
4. ✘ Her stepsister

Question Number : 159 Question Id : 54592743590 Question Type : MCQ Option Shuffling : Yes

Correct Marks : 1 Wrong Marks : 0.25

What is the synonym of the word 'conjunction'?

Options :

1. ✘ Antagonism

2. ✖ Detachment

3. ✖ Division

4. ✔ Concurrency

Question Number : 160 Question Id : 54592743591 Question Type : MCQ Option Shuffling : Yes  
Correct Marks : 1 Wrong Marks : 0.25

What is the antonym of the word 'intellectual'?

Options :

1. ✖ Unfettered

2. ✖ Rational

3. ✖ Thoughtful

4. ✔ Ignorant

Question Id : 54592743586 Question Type : COMPREHENSION Sub Question Shuffling Allowed : Yes Group Comprehension  
Questions : No

Question Numbers : (156 to 160)

Question Label : Comprehension