

## Education Consultant India Ltd.

Notations :

1.Options shown in green color and with ✓ icon are correct.

2.Options shown in red color and with ✖ icon are incorrect.

<b>Question Paper Name:</b>	Grade IV DASS Junior Assistant 06th September 2019 Shift 3
<b>Subject Name:</b>	GRADE IV DASS JUNIOR ASSISTANT
<b>Creation Date:</b>	2019-09-07 10:49:38
<b>Duration:</b>	120
<b>Total Marks:</b>	200
<b>Display Marks:</b>	Yes
<b>Share Answer Key With Delivery Engine:</b>	No
<b>Actual Answer Key:</b>	Yes
<b>Calculator:</b>	None
<b>Magnifying Glass Required?:</b>	No
<b>Ruler Required?:</b>	No
<b>Eraser Required?:</b>	No
<b>Scratch Pad Required?:</b>	No
<b>Rough Sketch/Notepad Required?:</b>	No
<b>Protractor Required?:</b>	No
<b>Show Watermark on Console?:</b>	Yes
<b>Highlighter:</b>	No
<b>Auto Save on Console?:</b>	No

## Mental Ability1

<b>Group Number :</b>	1
<b>Group Id :</b>	5459271501
<b>Group Maximum Duration :</b>	0
<b>Group Minimum Duration :</b>	0
<b>Show Attended Group? :</b>	No
<b>Edit Attended Group? :</b>	No
<b>Break time:</b>	0
<b>Group Marks:</b>	20
<b>Is this Group for Examiner?:</b>	No
<b>Revisit allowed for group Instructions? :</b>	Yes
<b>Maximum Instruction Time:</b>	0
<b>Minimum Instruction Time:</b>	0

## Mental Ability1

<b>Section Id :</b>	5459271501
<b>Section Number :</b>	1

Section type :	Online
Mandatory or Optional:	Mandatory
Number of Questions:	20
Number of Questions to be attempted:	20
Section Marks:	20

Sub-Section Number:	1
Sub-Section Id:	5459271801
Question Shuffling Allowed :	Yes

Question Number : 1 Question Id : 54592730301 Question Type : MCQ Option Shuffling : Yes  
Correct Marks : 1 Wrong Marks : 0.25

From the given responses, find the missing letter in the series:

GJ, KH,IL,MJ,?

Options :

1. ✘ KL

2. ✘ LM

3. ✘ MN

4. ✔ KN

Question Number : 1 Question Id : 54592730301 Question Type : MCQ Option Shuffling : Yes  
Correct Marks : 1 Wrong Marks : 0.25

दिए गए विकल्पों में से श्रेणी में लुप्त अक्षर को ज्ञात करे:

GJ, KH,IL,MJ,?

Options :

1. ✘ KL

2. ✘ LM

3. ✘ MN

4. ✔ KN

Question Number : 2 Question Id : 54592730302 Question Type : MCQ Option Shuffling : Yes  
Correct Marks : 1 Wrong Marks : 0.25

Find out the next term:

GH10, MN15, RS20, \_\_\_\_\_

Options :

1. ✖ G1F
2. ✖ YZ1
3. ✔ WX25
4. ✖ EF7

Question Number : 2 Question Id : 54592730302 Question Type : MCQ Option Shuffling : Yes

Correct Marks : 1 Wrong Marks : 0.25

अगला पद ज्ञात करें:

GH10, MN15, RS20, \_\_\_\_\_

Options :

1. ✖ G1F
2. ✖ YZ1
3. ✔ WX25
4. ✖ EF7

Question Number : 3 Question Id : 54592730303 Question Type : MCQ Option Shuffling : Yes

Correct Marks : 1 Wrong Marks : 0.25

Find the wrong term in the series:

LJH, IGE, FCB, CAY

Options :

1. ✖ IGE
2. ✖ CAY
3. ✖ LJH

## 4. ✓ FCB

Question Number : 3 Question Id : 54592730303 Question Type : MCQ Option Shuffling : Yes  
Correct Marks : 1 Wrong Marks : 0.25

श्रृंखला में गलत पद खोजें:

LJH, IGE, FCB, CAY

Options :

1. ✗ IGE

2. ✗ CAY

3. ✗ LJH

4. ✓ FCB

Question Number : 4 Question Id : 54592730304 Question Type : MCQ Option Shuffling : Yes  
Correct Marks : 1 Wrong Marks : 0.25

Find the odd one out from the given alternatives.

Options :

1. ✗ Iron

2. ✗ Silver

3. ✗ Zinc

4. ✓ Brass

Question Number : 4 Question Id : 54592730304 Question Type : MCQ Option Shuffling : Yes  
Correct Marks : 1 Wrong Marks : 0.25

दिए गए विकल्पों में से विषम ज्ञात करें।

Options :

1. ✗ लोहा

2. ✗ चांदी

3. ✗ जस्ता

4. ✓ पीतल

Question Number : 5 Question Id : 54592730305 Question Type : MCQ Option Shuffling : Yes

Correct Marks : 1 Wrong Marks : 0.25

Choose the odd one from the given alternatives.

Options :

1. ✖ IHF

2. ✖ FEC

3. ✔ VUT

4. ✖ RQO

Question Number : 5 Question Id : 54592730305 Question Type : MCQ Option Shuffling : Yes

Correct Marks : 1 Wrong Marks : 0.25

दिए गए विकल्पों से भिन्न को चुनें।

Options :

1. ✖ IHF

2. ✖ FEC

3. ✔ VUT

4. ✖ RQO

Question Number : 6 Question Id : 54592730306 Question Type : MCQ Option Shuffling : Yes

Correct Marks : 1 Wrong Marks : 0.25

Choose the odd one from the given alternatives.

Options :

1. ✖ CD : XW

2. ✔ LM : PQ

3. ✖ EF : VU

4. ✖ HI : SR

Question Number : 6 Question Id : 54592730306 Question Type : MCQ Option Shuffling : Yes

Correct Marks : 1 Wrong Marks : 0.25

दिए गए विकल्पों में से विषम को चुनिए।

Options :

1. ✖ CD : XW

2. ✔ LM : PQ

3. ✖ EF : VU

4. ✖ HI : SR

Question Number : 7 Question Id : 54592730307 Question Type : MCQ Option Shuffling : Yes

Correct Marks : 1 Wrong Marks : 0.25

In the following question, select the related letter / word / number from the given alternatives.

Brain : human :: \_\_\_\_\_ : computer

Options :

1. ✖ RAM

2. ✔ CPU

3. ✖ Keyboard

4. ✖ Hard disk

Question Number : 7 Question Id : 54592730307 Question Type : MCQ Option Shuffling : Yes

Correct Marks : 1 Wrong Marks : 0.25

निम्नलिखित प्रश्न में दिए गए विकल्पों में से सम्बन्धित अक्षर /शब्द / संख्या को चुनिए।

मस्तिष्क : मानव :: \_\_\_\_\_ : कंप्यूटर

Options :

1. ✖ RAM

2. ✔ CPU

3. ✖ कीबोर्ड

4. ✖ हार्ड डिस्क

Question Number : 8 Question Id : 54592730308 Question Type : MCQ Option Shuffling : Yes  
Correct Marks : 1 Wrong Marks : 0.25

In the following question, select the related letter / word / number from the given alternatives.

TIME : CLOCK :: \_\_\_\_\_ : \_\_\_\_\_

Options :

1. \* Hair spring : wrist watch
2. ✓ Date : calendar
3. \* Sincerity : disloyal
4. \* Paper : pen

Question Number : 8 Question Id : 54592730308 Question Type : MCQ Option Shuffling : Yes  
Correct Marks : 1 Wrong Marks : 0.25

निम्नलिखित प्रश्न में दिए गए विकल्पों में से सम्बन्धित अक्षर/शब्द/संख्या को चुनिए।

समय : घड़ी :: \_\_\_\_\_ : \_\_\_\_\_

Options :

1. \* बाल कमानि: कलाई घड़ी
2. ✓ दिनांक: कैलेंडर
3. \* ईमानदारी: विश्वासघाती
4. \* पेपर: कलम

Question Number : 9 Question Id : 54592730309 Question Type : MCQ Option Shuffling : Yes  
Correct Marks : 1 Wrong Marks : 0.25

In the following question, select the related letter/word/number from the given alternatives.

GROW : COMV :: SHOW : \_\_\_\_\_

Options :

1. ✖ ROMV
2. ✔ OEMV
3. ✖ OMEV
4. ✖ PFVM

Question Number : 9 Question Id : 54592730309 Question Type : MCQ Option Shuffling : Yes  
Correct Marks : 1 Wrong Marks : 0.25

निम्नलिखित प्रश्न में दिए गए विकल्पों में से सम्बन्धित अक्षर/शब्द/संख्या को चुनिए।

GROW : COMV :: SHOW : \_\_\_\_\_

Options :

1. ✖ ROMV
2. ✔ OEMV
3. ✖ OMEV
4. ✖ PFVM

Question Number : 10 Question Id : 54592730310 Question Type : MCQ Option Shuffling : Yes  
Correct Marks : 1 Wrong Marks : 0.25

If HEAD is coded as 1438 and BRING is coded as 76952, what do the figures 6438952 stands for?

Options :

1. ✔ READING
2. ✖ DIEING
3. ✖ HIGHER
4. ✖ HEATING

Question Number : 10 Question Id : 54592730310 Question Type : MCQ Option Shuffling : Yes  
Correct Marks : 1 Wrong Marks : 0.25



यदि HEAD को 1438 कूटित किया जाता है और BRING को 76952 कूटित किया जाता है, तो 6438952 के कूटित क्या हैं?

Options :

1. ✓ READING
2. ✗ DIEING
3. ✗ HIGHER
4. ✗ HEATING

Question Number : 11 Question Id : 54592730311 Question Type : MCQ Option Shuffling : Yes

Correct Marks : 1 Wrong Marks : 0.25

If 'ball' is 'tennis', 'tennis' is 'chess', 'chess' is 'hockey', 'hockey' is 'ludo' and 'ludo' is 'basketball', what is cricket played with?

Options :

1. ✓ Tennis
2. ✗ Ludo
3. ✗ Hockey
4. ✗ Ball

Question Number : 11 Question Id : 54592730311 Question Type : MCQ Option Shuffling : Yes

Correct Marks : 1 Wrong Marks : 0.25

यदि 'बॉल', को 'टेनिस' कहा जाता है, 'टेनिस', को 'शतरंज' कहा जाता है, 'शतरंज', को 'हॉकी' कहा जाता है, 'हॉकी', को 'लूडो' कहा जाता है और 'लूडो' को 'बास्केटबॉल' कहा जाता है, क्रिकेट किसके साथ खेला जाता है?

Options :

1. ✓ टेनिस
2. ✗ लूडो
3. ✗ हॉकी

## 4. \* बॉल

Question Number : 12 Question Id : 54592730312 Question Type : MCQ Option Shuffling : Yes  
Correct Marks : 1 Wrong Marks : 0.25

In the following question, a group of letters is given which are numbered 1, 2, 3, 4, 5 and 6. Below are given four alternatives containing combinations of these numbers. Select that combination of numbers so that letters arranged accordingly, form a meaningful word.

L R P E A Y

1 2 3 4 5 6

Options :

1. ✓ 315642

2. \* 425613

3. \* 315624

4. \* 314625

Question Number : 12 Question Id : 54592730312 Question Type : MCQ Option Shuffling : Yes  
Correct Marks : 1 Wrong Marks : 0.25

निम्नलिखित प्रश्न में, अक्षरों का एक समूह दिया गया है, संख्या 1, 2, 3, 4, 5 और 6 नीचे दिए गए हैं, इन संख्याओं के संयोजन वाले चार विकल्प दिए गए हैं। संख्याओं के उस संयोजन का चयन करें ताकि अक्षरों के अनुसार व्यवस्थित हो, एक सार्थक शब्द बनाएं।

L R P E A Y

1 2 3 4 5 6

Options :

1. ✓ 315642

2. ✖ 425613

3. ✖ 315624

4. ✖ 314625

Question Number : 13 Question Id : 54592730313 Question Type : MCQ Option Shuffling : Yes  
Correct Marks : 1 Wrong Marks : 0.25

In a psychology test of 6 students- P, Q, R, A, B, and C, the teacher found following information regarding the intelligence level of students.

P is more intelligent than A.

R is less intelligent than C.

P is more intelligent than Y.

Q is as much intelligent as B.

If B and C are not the most intelligent student, than who will be the most intelligent student?

Options :

1. ✔ P

2. ✖ Q

3. ✖ R

4. ✖ A

Question Number : 13 Question Id : 54592730313 Question Type : MCQ Option Shuffling : Yes  
Correct Marks : 1 Wrong Marks : 0.25

6 छात्र- P, Q, R, A, B और C के मनोविज्ञान परीक्षण में, शिक्षक ने छात्रों के बुद्धिमत्ता स्तर के बारे में जानकारी प्राप्त की।

P, A से अधिक बुद्धिमान है।

R, C से कम बुद्धिमान है।

P, Y से अधिक बुद्धिमान है।

Q, B जितना बुद्धिमान है।

अगर B और C सबसे अधिक बुद्धिमान छात्र नहीं हैं, तो सबसे बुद्धिमान छात्र कौन होगा?

Options :

1. ✓ P

2. ✗ Q

3. ✗ R

4. ✗ A

Question Number : 14 Question Id : 54592730314 Question Type : MCQ Option Shuffling : Yes

Correct Marks : 1 Wrong Marks : 0.25

Five students Karan, Charan, Lavan, Pavan, and Sravan, are top five rankers of a class. No two students got same rank. The number of students who got better rank than Pavan is same as those who got a worse rank than Lavan. Only one student got a worse rank than Karan. Who among the following is the first ranker?

Options :

1. ✗ Pavan

2. ✓ Lavan

3. \* Sravan

4. \* Karan

Question Number : 14 Question Id : 54592730314 Question Type : MCQ Option Shuffling : Yes

Correct Marks : 1 Wrong Marks : 0.25

पांच छात्र करण, चरण, लवन, पवन, और श्रवण, एक कक्षा के शीर्ष पांच रैंकर हैं। किसी भी दो छात्रों को समान रैंक नहीं मिली। पावन की तुलना में बेहतर रैंक पाने वाले छात्रों की संख्या लवन से भी बदतर रैंक पाने वालों के बराबर है। केवल एक छात्र को करण से भी बदतर रैंक मिली। निम्नलिखित में से कौन है पहला रैंकर?

Options :

1. \* पवन

2. ✓ लवन

3. \* श्रवण

4. \* करण

Question Number : 15 Question Id : 54592730315 Question Type : MCQ Option Shuffling : Yes

Correct Marks : 1 Wrong Marks : 0.25

There are five books kept one over the other. Two books are of English language, two books are of Management, and one book is of Statistic. One book of Management is in the top shelf and other one is in the last shelf. Book of Statistic is kept just above English language book. One book of English is kept just above Management book. English books are kept adjacent to each other.

Which book is kept in second shelf?

Options :

1. \* English language

2. \* Management

### 3. ✓ Statistic

### 4. ✖ Either English language or Statistic

Question Number : 15 Question Id : 54592730315 Question Type : MCQ Option Shuffling : Yes

Correct Marks : 1 Wrong Marks : 0.25

पांच पुस्तकें एक के ऊपर एक रखी हैं। दो पुस्तकें अंग्रेजी भाषा की हैं, दो पुस्तकें मैनेजमेंट की हैं और एक पुस्तक सांख्यिकी की है। प्रबंधन की एक पुस्तक पहले शेल्फ में है और दूसरी अंतिम शेल्फ में है। सांख्यिकी की पुस्तक अंग्रेजी भाषा की पुस्तक के ठीक ऊपर रखी है। अंग्रेजी भाषा की एक पुस्तक प्रबंधन पुस्तक के ठीक ऊपर रखी गई है। अंग्रेजी भाषा की दोनों पुस्तकें निकटवर्ती रखी गयी हैं।

दूसरी शेल्फ में किस पुस्तक को रखा गया है?

Options :

1. ✖ अंग्रेजी भाषा

2. ✖ प्रबंधन

3. ✓ सांख्यिकी

4. ✖ या तो अंग्रेजी भाषा या सांख्यिकी

Question Number : 16 Question Id : 54592730316 Question Type : MCQ Option Shuffling : Yes

Correct Marks : 1 Wrong Marks : 0.25

A, B, C, D and E play Hockey. 3 players from Hockey were selected to form Team 1.

- I. A is always selected.
- II. Exactly one among B and C is always selected
- III. D will not participate if B is selected.
- IV. E will not play with C

Which among the given option is a possibility of team to be selected?

Options :

- 1. \* ADE
- 2. \* BEC
- 3. ✓ ABE
- 4. \* ADB

Question Number : 16 Question Id : 54592730316 Question Type : MCQ Option Shuffling : Yes

Correct Marks : 1 Wrong Marks : 0.25

A, B, C, D और E हॉकी खेलते हैं। हॉकी के 3 खिलाड़ियों को टीम 1 के लिए चुना गया था।

- I. A हमेशा चयनित होता है।
- II. B और C में से एक को हमेशा चुना जाता है।
- III. D, B चयनित होने पर भाग नहीं लेगा।
- IV. E, C के साथ नहीं खेलेगा।

दिए गए विकल्प में से किस टीम के चुने जाने की संभावना है?

Options :

1. ✖ ADE

2. ✖ BEC

3. ✔ ABE

4. ✖ ADB

Question Number : 17 Question Id : 54592730317 Question Type : MCQ Option Shuffling : Yes

Correct Marks : 1 Wrong Marks : 0.25

Ani is the daughter of Mani. Mani's mother is Amaya. Emi is Amaya's mother. Emi's husband is Herry. Krishna is the mother in law of Herry. How is Ani related to Herry?

Options :

1. ✖ Daughter

2. ✔ Great Grand Daughter

3. ✖ Grand Niece

4. ✖ Great Grandson's Daughter

Question Number : 17 Question Id : 54592730317 Question Type : MCQ Option Shuffling : Yes

Correct Marks : 1 Wrong Marks : 0.25

अनी, मनी की पुत्री है। मनी की माँ अमाया है। एमी, अमाया की माँ है। एमी का पति हैरी है। कृष्णा, हैरी की सास है। एनी, हैरी से किस प्रकार संबंधित हैं?

Options :

1. ✖ पुत्री

2. ✔ परपोती

3. ✖ भाई की पोती

4. ✖ परपोते की पुत्री

Question Number : 18 Question Id : 54592730318 Question Type : MCQ Option Shuffling : Yes

Correct Marks : 1 Wrong Marks : 0.25



In the question below, there are three statements followed by two conclusions. You have to take the given statements to be true even if they seem to be at variance with commonly known facts and then decide which of the given conclusion logically follow(s) from the given statements.

Statements:

- I. All fans are bulbs.
- II. Some bulbs are walls.
- III. All walls are roofs.

Conclusions:

- I. Some walls are bulbs.
- II. Some roofs are fans.

Options :

- 1. ✓ Only conclusion I follows
- 2. ✖ Only conclusion II follows
- 3. ✖ Either conclusion I or II follows
- 4. ✖ Neither conclusion I nor II follows

Question Number : 18 Question Id : 54592730318 Question Type : MCQ Option Shuffling : Yes  
Correct Marks : 1 Wrong Marks : 0.25

नीचे दिए गए प्रश्न में तीन कथन और उसके बाद दो निष्कर्ष दिए गए हैं। आपको दिए गए तीनों कथनों को सत्य मानना है भले ही वे सर्वज्ञात तथ्यों से भिन्न प्रतीत होते हों। सभी निष्कर्षों को पढ़िए फिर तय कीजिए कि दिए गए निष्कर्षों में से कौन सा तर्कसंगत रूप से अनुसरण करता है, चाहे सर्वज्ञात तथ्य कुछ भी हों।

कथन:

- I. सभी पंखे, बल्ब हैं।
- II. कुछ बल्ब, दीवारें हैं।
- III. सभी दीवारें, छत हैं।

निष्कर्ष:

- I. कुछ दीवारें, बल्ब हैं।
- II. कुछ छत, पंखे हैं।

Options :

1. ✓ केवल निष्कर्ष I अनुसरण करता है।
2. ✗ केवल निष्कर्ष II अनुसरण करता है।
3. ✗ या निष्कर्ष I या II अनुसरण करता है।
4. ✗ न निष्कर्ष I न II अनुसरण करता है।

Question Number : 19 Question Id : 54592730319 Question Type : MCQ Option Shuffling : Yes  
Correct Marks : 1 Wrong Marks : 0.25

In the question below is a statement followed by two conclusions numbered I and II. You have to assume everything in the statement to be true, then consider the two conclusions together and decide which of them logically follows beyond a reasonable doubt from the information given in the statement.

Statement:

I. All employees who do not work properly bring a bad name for themselves and also are a liability to an organization.

Conclusions:

I. Such employees should be fired from the organisation.

II. Strict action is required in such cases.

Options :

1. ✖ Only conclusion I follows

2. ✔ Only conclusion II follows

3. ✖ Neither conclusion I nor conclusion II follows

4. ✖ Both conclusion I and conclusion II follow

Question Number : 19 Question Id : 54592730319 Question Type : MCQ Option Shuffling : Yes

Correct Marks : 1 Wrong Marks : 0.25

निम्न प्रश्न में एक कथन और उसके बाद I और II से अंकित दो निष्कर्ष दिए गये हैं। आपको दिए गये कथनों की सारी जानकारी को सत्य मानना है और दिए गये निष्कर्षों पर एकसाथ विचार करके निर्णय लेना है कि दी गई जानकारी के आधार पर उनमें से कौनसा तार्किक रूप से अनुसरण करता है।

कथन:

I. एक संगठन में जो कर्मचारी ठीक से काम नहीं करते हैं, वे खुद का नाम खराब करते हैं और संगठन के लिए किसी ऋण की तरह होते हैं।

निष्कर्ष:

- I. ऐसे कर्मचारियों को संगठन से निकाल दिया जाना चाहिए।
- II. ऐसे मामलों में सख्त कार्रवाई की आवश्यकता होती है।

Options :

1. \* केवल निष्कर्ष I अनुसरण करता है।
2. ✓ केवल निष्कर्ष II अनुसरण करता है।
3. \* न तो निष्कर्ष I न ही निष्कर्ष II अनुसरण करता है।
4. \* निष्कर्ष I और II दोनों अनुसरण करते हैं।

Question Number : 20 Question Id : 54592730320 Question Type : MCQ Option Shuffling : Yes  
Correct Marks : 1 Wrong Marks : 0.25

Complete the following series:

10, 20, 60, 300, ?

Options :

1. ✓ 2100
2. \* 2120

3. ✖ 3500

4. ✖ 1200

Question Number : 20 Question Id : 54592730320 Question Type : MCQ Option Shuffling : Yes

Correct Marks : 1 Wrong Marks : 0.25

निम्नलिखित श्रृंखला को पूरा करें।

10, 20, 60, 300, ?

Options :

1. ✔ 2100

2. ✖ 2120

3. ✖ 3500

4. ✖ 1200

## Mental Ability2

Group Number :	2
Group Id :	5459271502
Group Maximum Duration :	0
Group Minimum Duration :	0
Show Attended Group? :	No
Edit Attended Group? :	No
Break time:	0
Group Marks:	20
Is this Group for Examiner?:	No
Revisit allowed for group Instructions? :	Yes
Maximum Instruction Time:	0
Minimum Instruction Time:	0

## Mental Ability2

Section Id :	5459271502
Section Number :	1
Section type :	Online
Mandatory or Optional:	Mandatory
Number of Questions:	20
Number of Questions to be attempted:	20
Section Marks:	20

Sub-Section Number: 1  
Sub-Section Id: 5459271802  
Question Shuffling Allowed : Yes

Question Number : 21 Question Id : 54592730321 Question Type : MCQ Option Shuffling : Yes  
Correct Marks : 1 Wrong Marks : 0.25

Find the wrong term in the given series:

31, 63, 127, 250, 511

Options :

1. ✓ 250

2. ✗ 127

3. ✗ 63

4. ✗ 31

Question Number : 21 Question Id : 54592730321 Question Type : MCQ Option Shuffling : Yes  
Correct Marks : 1 Wrong Marks : 0.25

दी गई श्रृंखला में गलत पद ज्ञात करें:

31, 63, 127, 250, 511

Options :

1. ✓ 250

2. ✗ 127

3. ✗ 63

4. ✗ 31

Question Number : 22 Question Id : 54592730322 Question Type : MCQ Option Shuffling : Yes  
Correct Marks : 1 Wrong Marks : 0.25

Choose the odd one from the given options:

Note: For this question, discrepancy is found in question/answer. So, this question is ignored for all candidates.

Options :

1. 861
2. 1089
3. 284
4. 576

Question Number : 22 Question Id : 54592730322 Question Type : MCQ Option Shuffling : Yes  
Correct Marks : 1 Wrong Marks : 0.25

दिए गए विकल्पों में से भिन्न संख्या को चुनें।

Note: For this question, discrepancy is found in question/answer. So, this question is ignored for all candidates.

Options :

1. 861
2. 1089
3. 284
4. 576

Question Number : 23 Question Id : 54592730323 Question Type : MCQ Option Shuffling : Yes  
Correct Marks : 1 Wrong Marks : 0.25

Choose the odd number pair from the given options:

Note: For this question, discrepancy is found in question/answer. So, this question is ignored for all candidates.

Options :

1. 624 : 534
2. 342 : 252
3. 442 : 362
4. 241 : 151

Question Number : 23 Question Id : 54592730323 Question Type : MCQ Option Shuffling : Yes  
Correct Marks : 1 Wrong Marks : 0.25

दिए गए विकल्पों में से भिन्न संख्या को चुनें।

Note: For this question, discrepancy is found in question/answer. So, this question is ignored for all candidates.

Options :

1. 624 : 534

2. 342 : 252

3. 442 : 362

4. 241 : 151

Question Number : 24 Question Id : 54592730324 Question Type : MCQ Option Shuffling : Yes

Correct Marks : 1 Wrong Marks : 0.25

Choose the odd number pair from the given options:

Options :

1. ✖ 16 : 47 : 49

2. ✖ 4 : 23 : 9

3. ✖ 25 : 56 : 36

4. ✔ 10 : 38 : 66

Question Number : 24 Question Id : 54592730324 Question Type : MCQ Option Shuffling : Yes

Correct Marks : 1 Wrong Marks : 0.25

दिए गए विकल्पों में से भिन्न संख्या को चुनें।

Options :

1. ✖ 16 : 47 : 49

2. ✖ 4 : 23 : 9

3. ✖ 25 : 56 : 36

4. ✔ 10 : 38 : 66

Question Number : 25 Question Id : 54592730325 Question Type : MCQ Option Shuffling : Yes

Correct Marks : 1 Wrong Marks : 0.25

In the following question, select the related letter / word / number from the given alternatives.

420, 425, 440

Options :



1. ✖ 455

2. ✔ 465

3. ✖ 470

4. ✖ 475

Question Number : 25 Question Id : 54592730325 Question Type : MCQ Option Shuffling : Yes  
Correct Marks : 1 Wrong Marks : 0.25

निम्नलिखित प्रश्न में दिए गए विकल्पों में से सम्बन्धित अक्षर / शब्द / संख्या को चुनिए।

420, 425, 440

Options :

1. ✖ 455

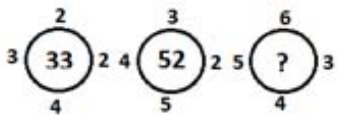
2. ✔ 465

3. ✖ 470

4. ✖ 475

Question Number : 26 Question Id : 54592730326 Question Type : MCQ Option Shuffling : Yes  
Correct Marks : 1 Wrong Marks : 0.25

Insert the missing number:



Options :

1. ✖ 94

2. ✖ 86

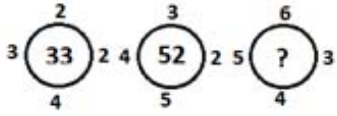
3. ✖ 82

4. ✔ 80

Question Number : 26 Question Id : 54592730326 Question Type : MCQ Option Shuffling : Yes

Correct Marks : 1 Wrong Marks : 0.25

लुप्त संख्या ज्ञात करें:



Options :

1. ✖ 94
2. ✖ 86
3. ✖ 82
4. ✔ 80

Question Number : 27 Question Id : 54592730327 Question Type : MCQ Option Shuffling : Yes

Correct Marks : 1 Wrong Marks : 0.25

Given interchanges: signs  $\div$  and  $\times$ , and numbers 7 and 21;  
then the value of  $7 \times 21 \div 2$  is:

Options :

1. ✔ 6
2. ✖ 8
3. ✖ 12
4. ✖ 16

Question Number : 27 Question Id : 54592730327 Question Type : MCQ Option Shuffling : Yes

Correct Marks : 1 Wrong Marks : 0.25

दिए गए बदलाव: संकेत  $\div$  और  $\times$ , और संख्या 7 और 21; फिर  $7 \times 21 \div 2$  का मान है।

Options :

1. ✔ 6
2. ✖ 8
3. ✖ 12

## 4. \* 16

Question Number : 28 Question Id : 54592730328 Question Type : MCQ Option Shuffling : Yes  
Correct Marks : 1 Wrong Marks : 0.25

In the question given below, there is a statement followed by two conclusions. You have to take the given statement to be true even if they seem to be at variance with commonly known facts and then decide which of the given conclusion logically follow(s) from the given statements.

Statements:

$$P = U < M < K \leq I > N$$

Conclusions:

I.  $N \geq K$

II.  $I > P$

Options :

1. \* If only conclusion I is true
2. \* If neither conclusion I nor II is true
3. ✓ If only conclusion II is true
4. \* If either conclusion I or II is true

Question Number : 28 Question Id : 54592730328 Question Type : MCQ Option Shuffling : Yes  
Correct Marks : 1 Wrong Marks : 0.25

नीचे दिए गए प्रश्न में, एक कथन के बाद दो निष्कर्ष हैं। आपको दिए गए कथन को सत्य मानना है, भले ही वे आम तौर पर ज्ञात तथ्यों के साथ विचरण करते हों और फिर तय करें कि दिए गए कथन में से कौन सा निष्कर्ष तार्किक रूप से अनुसरण करता है।

कथन:

$$P = U < M < K \leq I > N$$

निष्कर्ष:

I.  $N \geq K$

II.  $I > P$

Options :

1. \* यदि केवल निष्कर्ष I सत्य है।

2. ✖ यदि न तो निष्कर्ष । और न ही ॥ सत्य है।

3. ✔ यदि केवल निष्कर्ष ॥ सत्य है।

4. ✖ यदि या तो निष्कर्ष । या ॥ सत्य है।

Question Number : 29 Question Id : 54592730329 Question Type : MCQ Option Shuffling : Yes  
Correct Marks : 1 Wrong Marks : 0.25

Choose the odd one from the given options:

Options :

1. ✖ 76

2. ✔ 64

3. ✖ 38

4. ✖ 96

Question Number : 29 Question Id : 54592730329 Question Type : MCQ Option Shuffling : Yes  
Correct Marks : 1 Wrong Marks : 0.25

दिए गए विकल्पों में से भिन्न संख्या को चुनें।

Options :

1. ✖ 76

2. ✔ 64

3. ✖ 38

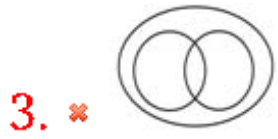
4. ✖ 96

Question Number : 30 Question Id : 54592730330 Question Type : MCQ Option Shuffling : Yes  
Correct Marks : 1 Wrong Marks : 0.25

Which of the following diagrams best represents a relationship among Tank, Lake and Sea?

Options :

1. ✔ 

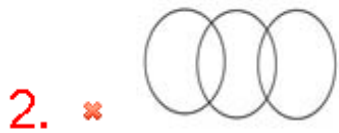


Question Number : 30 Question Id : 54592730330 Question Type : MCQ Option Shuffling : Yes

Correct Marks : 1 Wrong Marks : 0.25

निम्नलिखित में से कौन सा चित्र टैंक, झील और समुद्र के बीच संबंध का प्रतिनिधित्व करता है?

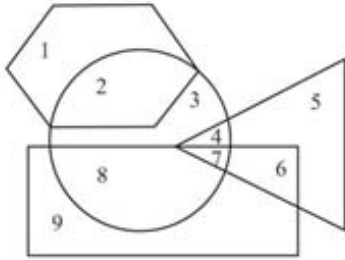
Options :



Question Number : 31 Question Id : 54592730331 Question Type : MCQ Option Shuffling : Yes

Correct Marks : 1 Wrong Marks : 0.25

In the given figure, the rectangle represents Arts, and Hexagon represents Commerce and triangle represents Science circle represents other group. Which number represents the group of person of Science and arts but not commerce or any other group?



Options :

1. ✖ 7

2. ✖ 4

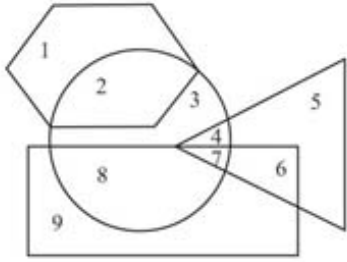
3. ✔ 6

4. ✖ 8

Question Number : 31 Question Id : 54592730331 Question Type : MCQ Option Shuffling : Yes

Correct Marks : 1 Wrong Marks : 0.25

दी गयी आकृति में, आयत कला का प्रतिनिधित्व करता है, और षट्कोण वाणिज्य का प्रतिनिधित्व करता है और त्रिकोण विज्ञान का प्रतिनिधित्व करता है और वृत्त अन्य समूह का प्रतिनिधित्व करता है। कौन सी संख्या विज्ञान और कला के व्यक्ति के समूह का प्रतिनिधित्व करती है लेकिन वाणिज्य या किसी अन्य समूह का नहीं?



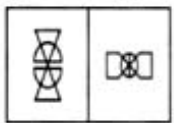
Options :

- 1. ✖ 7
- 2. ✖ 4
- 3. ✔ 6
- 4. ✖ 8

Question Number : 32 Question Id : 54592730332 Question Type : MCQ Option Shuffling : Yes  
 Correct Marks : 1 Wrong Marks : 0.25

Two figures forming the problem figure and four other answer figures are given. Select a answer figure which possess the same characteristic as Question figure.

Question figures



Options :

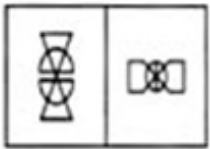
- 1. ✔



Question Number : 32 Question Id : 54592730332 Question Type : MCQ Option Shuffling : Yes  
Correct Marks : 1 Wrong Marks : 0.25

दो चित्र प्रश्न-आकृति में और चार उत्तर-आकृति में दिए गए हैं। उस उत्तर आकृति का चयन करें जिसमें समान विशेषता हो प्रश्न-आकृति जैसी।

प्रश्न-आकृति



Options :



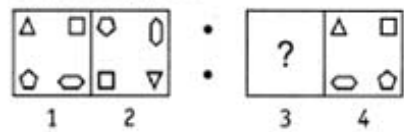




Question Number : 33 Question Id : 54592730333 Question Type : MCQ Option Shuffling : Yes  
 Correct Marks : 1 Wrong Marks : 0.25

The second figure in the first unit of the problem figures bears a certain relationship to the first figure. You have to select that figure from the set of answer figures which would come in the place of question mark (?)

**Problem Figures**



Options :

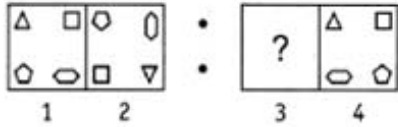


Question Number : 33 Question Id : 54592730333 Question Type : MCQ Option Shuffling : Yes

Correct Marks : 1 Wrong Marks : 0.25

प्रश्न आकृति के पहले सेट की दूसरी आकृति, पहली आकृति से एक निश्चित सम्बन्ध रखती है। आपको उत्तर आकृति के सेट से उस आकृति का चयन करना होगा जो प्रश्न चिह्न (?) के स्थान पर आएगा।

प्रश्न आकृति



Options :

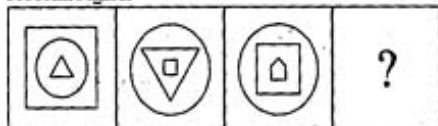


Question Number : 34 Question Id : 54592730334 Question Type : MCQ Option Shuffling : Yes

Correct Marks : 1 Wrong Marks : 0.25

Choose an appropriate figure from the four numbered figures for the place of the questions mark (?).

Problem Figures



Options :



Question Number : 34 Question Id : 54592730334 Question Type : MCQ Option Shuffling : Yes  
Correct Marks : 1 Wrong Marks : 0.25

प्रश्न चिह्न (?) के स्थान पर उत्तर आकृति के रूप में एक उचित आकृति चुनें।

प्रश्न आकृति



Options :

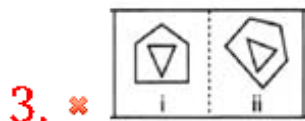
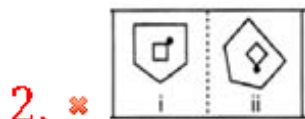
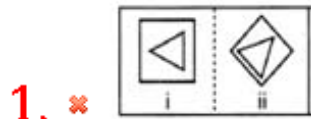




Question Number : 35 Question Id : 54592730335 Question Type : MCQ Option Shuffling : Yes  
Correct Marks : 1 Wrong Marks : 0.25

In the following questions, element (ii) is related to element (i) in a particular way in four pairs of figures. Find out the pair of figures in which the element (ii) is not related to element (i).

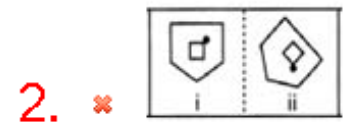
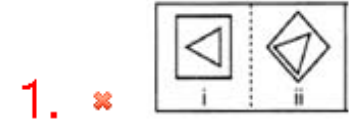
Options :



Question Number : 35 Question Id : 54592730335 Question Type : MCQ Option Shuffling : Yes  
Correct Marks : 1 Wrong Marks : 0.25

निम्नलिखित प्रश्नों में, आकृति के चारो भाग में तत्व (ii) तत्व (i) से एक निश्चित प्रकार से संबंधित है। उन आकृति जोड़ो का पता लगाएं जिनमे तत्व (ii), तत्व (i) से संबंधित नहीं है।

Options :



Question Number : 36 Question Id : 54592730336 Question Type : MCQ Option Shuffling : Yes  
 Correct Marks : 1 Wrong Marks : 0.25

Choose the correct water image from the given alternatives.

C A T

Options :



3. ✘ J V D

4. ✔ C V L

Question Number : 36 Question Id : 54592730336 Question Type : MCQ Option Shuffling : Yes  
Correct Marks : 1 Wrong Marks : 0.25

दिए गए विकल्पों में से आकृति की सही पानी की छवि आकृति ज्ञात कीजिए।

C A T

Options :

1. ✘ C A L

2. ✘ C V T

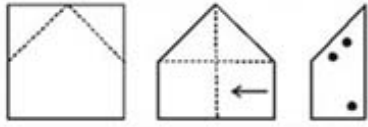
3. ✘ J V D

4. ✔ C V L

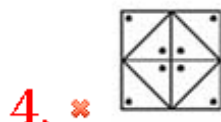
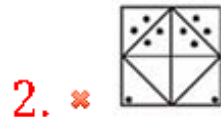
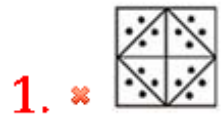
Question Number : 37 Question Id : 54592730337 Question Type : MCQ Option Shuffling : Yes  
Correct Marks : 1 Wrong Marks : 0.25

In the following question a piece of paper is folded in the manner shown in the question figure(s). Select the figure out of the answer choices showing the unfolded pattern after the punches (cut).

Question Figures



Options :

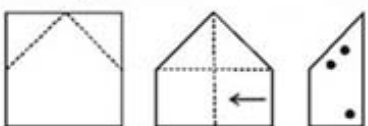


Question Number : 37 Question Id : 54592730337 Question Type : MCQ Option Shuffling : Yes

Correct Marks : 1 Wrong Marks : 0.25

निम्नलिखित प्रश्न में एक कागज के टुकड़े को प्रश्न आकृति में दर्शाए गए तरीके से मोड़ा गया है। कट के बाद प्राप्त पैटर्न को दर्शाने वाले उत्तर विकल्पों में से आकृति का चयन करें।

प्रश्न आकृति:



Options :



Question Number : 38 Question Id : 54592730338 Question Type : MCQ Option Shuffling : Yes

Correct Marks : 1 Wrong Marks : 0.25

Find out which of the figure (a), (b), (c), (d) can be formed from the pieces given in fig. (X).

Question

Figure



Options :







Question Number : 38 Question Id : 54592730338 Question Type : MCQ Option Shuffling : Yes  
Correct Marks : 1 Wrong Marks : 0.25

(a), (b), (c), (d) में से कौन सी आकृति, आकृति (X) से बनायीं जा सकती हैं?

प्रश्न आकृति



Options :



Question Number : 39 Question Id : 54592730339 Question Type : MCQ Option Shuffling : Yes  
Correct Marks : 1 Wrong Marks : 0.25

In the following question an unfolded dice is given. From the given alternatives which of the following will be opposite of A?



Options :

1. ✓ I
2. ✗ E
3. ✗ O
4. ✗ U

Question Number : 39 Question Id : 54592730339 Question Type : MCQ Option Shuffling : Yes

Correct Marks : 1 Wrong Marks : 0.25

निम्नलिखित प्रश्न में एक खुला पासा दिया गया है। दिए गए विकल्पों में से कौन सा A के विपरीत होगा?




Options :

1. ✓ I
2. ✗ E
3. ✗ O
4. ✗ U

Question Number : 40 Question Id : 54592730340 Question Type : MCQ Option Shuffling : Yes

Correct Marks : 1 Wrong Marks : 0.25

Count the number of cubes in the given figure:




Options :

1. ✖ 8
2. ✖ 9
3. ✖ 12
4. ✔ 15

Question Number : 40 Question Id : 54592730340 Question Type : MCQ Option Shuffling : Yes  
Correct Marks : 1 Wrong Marks : 0.25

दिए गए आंकड़े में घनो की संख्या ज्ञात कीजिए।



Options :

1. ✖ 8
2. ✖ 9
3. ✖ 12
4. ✔ 15

## General Awareness1

Group Number :	3
Group Id :	5459271503
Group Maximum Duration :	0
Group Minimum Duration :	0
Show Attended Group? :	No

Edit Attended Group? :	No
Break time:	0
Group Marks:	20
Is this Group for Examiner?:	No
Revisit allowed for group Instructions? :	Yes
Maximum Instruction Time:	0
Minimum Instruction Time:	0

## General Awareness1

Section Id :	5459271503
Section Number :	1
Section type :	Online
Mandatory or Optional:	Mandatory
Number of Questions:	20
Number of Questions to be attempted:	20
Section Marks:	20

Sub-Section Number:	1
Sub-Section Id:	5459271803
Question Shuffling Allowed :	Yes

Question Number : 41 Question Id : 54592730341 Question Type : MCQ Option Shuffling : Yes  
Correct Marks : 1 Wrong Marks : 0.25

Bhand Pather is a traditional \_\_\_\_\_ in the region of Kashmir.

Options :

1. \* Music
2. \* Sports
3. \* Painting
4. ✓ Dance-drama

Question Number : 41 Question Id : 54592730341 Question Type : MCQ Option Shuffling : Yes  
Correct Marks : 1 Wrong Marks : 0.25

भांड पाथेर कश्मीर के क्षेत्र का एक पारंपरिक \_\_\_\_\_ है।

Options :

1. \* संगीत
2. \* खेल
3. \* चित्रकला

## 4. ✓ नृत्य-नाटक

Question Number : 42 Question Id : 54592730342 Question Type : MCQ Option Shuffling : Yes  
Correct Marks : 1 Wrong Marks : 0.25

Burrakatha is a highly dramatic form of ballad of \_\_\_\_\_.

Options :

1. ✘ Madhya Pradesh
2. ✘ Uttar Pradesh
3. ✓ Andhra Pradesh
4. ✘ Tamil Nadu

Question Number : 42 Question Id : 54592730342 Question Type : MCQ Option Shuffling : Yes  
Correct Marks : 1 Wrong Marks : 0.25

बुराकथा \_\_\_\_\_ की उच्च कोटि की नाटक शैली है।

Options :

1. ✘ मध्य प्रदेश
2. ✘ उत्तर प्रदेश
3. ✓ आंध्र प्रदेश
4. ✘ तमिलनाडु

Question Number : 43 Question Id : 54592730343 Question Type : MCQ Option Shuffling : Yes  
Correct Marks : 1 Wrong Marks : 0.25

The Phyang Tsedup is a festival in the Phyang Monastery of \_\_\_\_\_.

Options :

1. ✘ Gangtok
2. ✓ Ladakh
3. ✘ Aizwal
4. ✘ Mawsynram

Question Number : 43 Question Id : 54592730343 Question Type : MCQ Option Shuffling : Yes  
Correct Marks : 1 Wrong Marks : 0.25

\_\_\_\_\_ के फयांग मठ में द फयांग त्सेडअप एक त्योहार है।

Options :

1. ✖ गंगटोक
2. ✔ लद्दाख
3. ✖ आइजवाल
4. ✖ मावसिनराम

Question Number : 44 Question Id : 54592730344 Question Type : MCQ Option Shuffling : Yes  
Correct Marks : 1 Wrong Marks : 0.25

Where is the Golconda Fort situated?

Options :

1. ✖ Bengaluru
2. ✖ Nainital
3. ✔ Hyderabad
4. ✖ Nashik

Question Number : 44 Question Id : 54592730344 Question Type : MCQ Option Shuffling : Yes  
Correct Marks : 1 Wrong Marks : 0.25

गोलकोंडा किला कहाँ स्थित है?

Options :

1. ✖ बेंगलुरु
2. ✖ नैनीताल
3. ✔ हैदराबाद
4. ✖ नासिक

Question Number : 45 Question Id : 54592730345 Question Type : MCQ Option Shuffling : Yes  
Correct Marks : 1 Wrong Marks : 0.25

In which of the following Union Budgets was the PM-KISAN or Pradhan Mantri Kisan Samman Nidhi launched?

Note: For this question, discrepancy is found in question/answer. So, this question is ignored for all candidates.

Options :

1. Union Budget 2017
2. Union Budget 2018
3. Interim Budget 2019
4. Union Budget 2019

Question Number : 45 Question Id : 54592730345 Question Type : MCQ Option Shuffling : Yes

Correct Marks : 1 Wrong Marks : 0.25

निम्नलिखित में से किस केंद्रीय बजट में पीएम-किसान या प्रधान मंत्री किसान सम्मान निधि का प्रमोचन किया गया था?

Note: For this question, discrepancy is found in question/answer. So, this question is ignored for all candidates.

Options :

1. केंद्रीय बजट 2017
2. केंद्रीय बजट 2018
3. अंतरिम बजट 2019
4. केंद्रीय बजट 2019

Question Number : 46 Question Id : 54592730346 Question Type : MCQ Option Shuffling : Yes

Correct Marks : 1 Wrong Marks : 0.25

What is the thinking behind adapting the “sky blue” coloured theme in the Economic Survey 2018-19?

Options :

1. ✓ New ideas for policymaking
2. ✖ Managing the financial adversities
3. ✖ Warding off the global risks
4. ✖ Preparing to meet the needs of the young demography

Question Number : 46 Question Id : 54592730346 Question Type : MCQ Option Shuffling : Yes

Correct Marks : 1 Wrong Marks : 0.25

आर्थिक समीक्षा 2018-19 में 'नीले गगन' रंग विषय को अपनाने के पीछे क्या सोच है?

Options :

1. ✓ नीति निर्धारण के लिए नए विचार
2. \* वित्तीय आपदाओं का प्रबंधन
3. \* वैश्विक जोखिमों को कम करना
4. \* युवा जनसांख्यिकी की जरूरतों को पूरा करने के लिए तैयार होना

Question Number : 47 Question Id : 54592730347 Question Type : MCQ Option Shuffling : Yes

Correct Marks : 1 Wrong Marks : 0.25

Which of the following is an economic condition in which there is a simultaneous inflation with high unemployment and stagnant demand?

Options :

1. \* Hyperinflation
2. \* Recession
3. ✓ Stagflation
4. \* Deflation

Question Number : 47 Question Id : 54592730347 Question Type : MCQ Option Shuffling : Yes

Correct Marks : 1 Wrong Marks : 0.25

निम्न में से कौन सी एक आर्थिक स्थिति है, जिसमें उच्च बेरोजगारी और स्थिर मांग के साथ समक्षणिक मुद्रास्फीति है?

Options :

1. \* अति स्फीति
2. \* मंदी
3. ✓ मुद्रास्फीतिजनित मंदी
4. \* अपस्फीति

Question Number : 48 Question Id : 54592730348 Question Type : MCQ Option Shuffling : Yes



Correct Marks : 1 Wrong Marks : 0.25

$v = u + at$ , given is the equation of motion. Which of the following pairs given are not correctly matched in reference to the above equation.

Options :

1. \*  $a = \text{acceleration}$
2. \*  $t = \text{time}$
3. ✓  $v = \text{distance travelled}$
4. \*  $u = \text{initial velocity}$

Question Number : 48 Question Id : 54592730348 Question Type : MCQ Option Shuffling : Yes

Correct Marks : 1 Wrong Marks : 0.25

$v = u + at$ , दिया गया गति का समीकरण है। निम्नलिखित में से कौन सी जोड़ी उपरोक्त समीकरण के संदर्भ में सही मेल नहीं है।

Options :

1. \*  $a = \text{त्वरण}$
2. \*  $t = \text{समय}$
3. ✓  $v = \text{तय की गयी दूरी}$
4. \*  $u = \text{प्रारंभिक वेग}$

Question Number : 49 Question Id : 54592730349 Question Type : MCQ Option Shuffling : Yes

Correct Marks : 1 Wrong Marks : 0.25

Turmeric stain on shirt turns to red when it is washed with soap. This is because:

Options :

1. \* Soap solution is acidic
2. ✓ Soap solution is basic
3. \* Soap solution is neutral
4. \* Turmeric is acidic

Question Number : 49 Question Id : 54592730349 Question Type : MCQ Option Shuffling : Yes

Correct Marks : 1 Wrong Marks : 0.25

शर्ट पर हल्दी का दाग साबुन से धोने पर लाल हो जाता है। क्योंकि:

Options :

1. ✖ साबुन का घोल अम्लीय होता है।
2. ✔ साबुन का घोल क्षारीय होता है।
3. ✖ साबुन का घोल उदासीन होता है।
4. ✖ हल्दी अम्लीय है।

Question Number : 50 Question Id : 54592730350 Question Type : MCQ Option Shuffling : Yes

Correct Marks : 1 Wrong Marks : 0.25

Which of the following are tested to show the presence of carbohydrates in food?

Options :

1. ✖ Protein
2. ✖ Vitamins
3. ✔ Starch
4. ✖ Fats

Question Number : 50 Question Id : 54592730350 Question Type : MCQ Option Shuffling : Yes

Correct Marks : 1 Wrong Marks : 0.25

भोजन में कार्बोहाइड्रेट की उपस्थिति दिखाने के लिए निम्नलिखित में से किसका परीक्षण किया जाता है?

Options :

1. ✖ प्रोटीन
2. ✖ विटामिन
3. ✔ मंड (स्टार्च)
4. ✖ वसा

Question Number : 51 Question Id : 54592730351 Question Type : MCQ Option Shuffling : Yes

Correct Marks : 1 Wrong Marks : 0.25

Which of the following is not indicated by elevated Total Dissolved Salts (TDS)?

Options :

1. ✓ It is a serious health hazard
2. ✗ Causes water to be corrosive
3. ✗ elevated levels of ions
4. ✗ Salty or brackish taste

Question Number : 51 Question Id : 54592730351 Question Type : MCQ Option Shuffling : Yes

Correct Marks : 1 Wrong Marks : 0.25

निम्न में से कौन से पूर्णतः घुले हुए ठोस पदार्थ (टीडीएस) के बढ़ने पर दर्शाया नहीं जाता है?

Options :

1. ✓ यह एक गंभीर स्वास्थ्य खतरा है।
2. ✗ पानी संक्षारक होने का कारण बनता है।
3. ✗ आयनों का स्तर बढ़ता है।
4. ✗ नमकीन या खारा स्वाद।

Question Number : 52 Question Id : 54592730352 Question Type : MCQ Option Shuffling : Yes

Correct Marks : 1 Wrong Marks : 0.25

Which of the following abiotic factor affects seeds as they grow into young plants?

Options :

1. ✗ Air and water only
2. ✗ Water and light only
3. ✗ Air, water and heat only
4. ✓ Air, water, heat and light

Question Number : 52 Question Id : 54592730352 Question Type : MCQ Option Shuffling : Yes

Correct Marks : 1 Wrong Marks : 0.25

निम्नलिखित में से कौन सा अजैविक कारक बीज को युवा से पौधों में विकास के दौरान प्रभावित करता है?

Options :

1. \* केवल हवा और पानी
2. \* केवल पानी और प्रकाश
3. \* केवल हवा, पानी और गर्मी
4. ✓ हवा, पानी, गर्मी और प्रकाश

Question Number : 53 Question Id : 54592730353 Question Type : MCQ Option Shuffling : Yes

Correct Marks : 1 Wrong Marks : 0.25

Gustatory receptors will detect (i)\_\_\_\_ while olfactory receptors will detect (ii)\_\_\_\_\_.

Options :

1. ✓ (i) Taste, (ii) smell
2. \* (i) Taste, (ii) touch
3. \* (i) smell, (ii) taste
4. \* (i) touch, (ii) smell

Question Number : 53 Question Id : 54592730353 Question Type : MCQ Option Shuffling : Yes

Correct Marks : 1 Wrong Marks : 0.25

रस संवेदी ग्राही (i)\_\_\_\_\_ का पता लगाते हैं जबकि घ्राणग्राही (ii)\_\_\_\_\_ का पता लगाते हैं।

Options :

1. ✓ (i) स्वाद, (ii) गंध
2. \* (i) स्वाद, (ii) स्पर्श
3. \* (i) गंध, (ii) स्वाद
4. \* (i) स्पर्श, (ii) गंध

Question Number : 54 Question Id : 54592730354 Question Type : MCQ Option Shuffling : Yes

Correct Marks : 1 Wrong Marks : 0.25

If a person is infected with some deadly microbes to which quick immune response is required, we need to directly inject the preformed antibodies. This type of immunisation is known as:

Options :

1. ✖ Active immunisation
2. ✔ Passive immunisation
3. ✖ Allergic immunisation
4. ✖ No such type of immunisation exist

Question Number : 54 Question Id : 54592730354 Question Type : MCQ Option Shuffling : Yes

Correct Marks : 1 Wrong Marks : 0.25

अगर व्यक्ति किन्हीं ऐसे घातक रोगाणुओं से संक्रमित होता है जिसके लिए फौरन प्रतिरक्षियों की आवश्यकता है, तो प्रभावकारी निष्पादित प्रतिरक्षियों को सीधे ही दिए जाने की ज़रूरत है। इस प्रकार का प्रतिरक्षीकरण को क्या कहते हैं?

Options :

1. ✖ सक्रीय प्रतिरक्षीकरण
2. ✔ निष्क्रिय प्रतिरक्षीकरण
3. ✖ एलर्जिक प्रतिरक्षीकरण
4. ✖ ऐसा कोई प्रतिरक्षीकरण नहीं होता

Question Number : 55 Question Id : 54592730355 Question Type : MCQ Option Shuffling : Yes

Correct Marks : 1 Wrong Marks : 0.25

Biopsy and histopathological studies of the tissue and blood and bone marrow tests, are the diagnostic tests for:

Options :

1. ✖ Cholera
2. ✖ AIDS

3. ✓ Cancer

4. ✘ Malaria

Question Number : 55 Question Id : 54592730355 Question Type : MCQ Option Shuffling : Yes

Correct Marks : 1 Wrong Marks : 0.25

ऊतकों की जीवूतिपरीक्षा (बायोप्सी) और ऊतक विकृति (हिस्टोपैथोलॉजिकल) अध्ययनों तथा बढ़ती कोशिका गणना के लिए रुद्धि तथा अस्थिमज्जा परीक्षण, \_\_\_\_\_ के अभिज्ञान के परीक्षण हैं।

Options :

1. ✘ हैज़ा

2. ✘ एड्स

3. ✓ कैंसर

4. ✘ मलेरिया

Question Number : 56 Question Id : 54592730356 Question Type : MCQ Option Shuffling : Yes

Correct Marks : 1 Wrong Marks : 0.25

Which of the following rivers is known as Tsang Po in Tibet and Jamuna in Bangladesh?

Options :

1. ✘ Ganga

2. ✘ Yamuna

3. ✘ Indus

4. ✓ Brahmaputra

Question Number : 56 Question Id : 54592730356 Question Type : MCQ Option Shuffling : Yes

Correct Marks : 1 Wrong Marks : 0.25

निम्नलिखित में से कौन सी नदी तिब्बत में त्सांग पो और बांग्लादेश में जमुना के नाम से जानी जाती है?

Options :

1. ✘ गंगा

2. ✖ यमुना
3. ✖ सिंधु
4. ✔ ब्रह्मपुत्र

Question Number : 57 Question Id : 54592730357 Question Type : MCQ Option Shuffling : Yes  
Correct Marks : 1 Wrong Marks : 0.25

Which of the following options has the correct sequence of mountain ranges from North to South in India?

Options :

1. ✔ Karakoram, Ladakh, Zaskar, Shiwalik
2. ✖ Ladakh, Karakoram, Shiwalik, Zaskar
3. ✖ Zaskar, Karakoram, Ladakh, Shiwalik
4. ✖ Karakoram, Zaskar, Ladakh, Shiwalik

Question Number : 57 Question Id : 54592730357 Question Type : MCQ Option Shuffling : Yes  
Correct Marks : 1 Wrong Marks : 0.25

निम्नलिखित में से कौन सा विकल्प भारत में उत्तर से दक्षिण तक पर्वत श्रृंखलाओं का सही अनुक्रम है?

Options :

1. ✔ काराकोरम, लद्दाख, ज़स्कर, शिवालिक
2. ✖ लद्दाख, काराकोरम, शिवालिक, ज़स्कर
3. ✖ ज़स्कर, काराकोरम, लद्दाख, शिवालिक
4. ✖ काराकोरम, ज़स्कर, लद्दाख, शिवालिक

Question Number : 58 Question Id : 54592730358 Question Type : MCQ Option Shuffling : Yes  
Correct Marks : 1 Wrong Marks : 0.25

Which of the following oceanic currents doesn't flow in the Pacific Ocean?

Options :

1. ✔ Gulf Stream

2. \* Alaska Current
3. \* Kuroshio Current
4. \* North Equatorial Current

Question Number : 58 Question Id : 54592730358 Question Type : MCQ Option Shuffling : Yes  
Correct Marks : 1 Wrong Marks : 0.25

निम्नलिखित में से कौन सी महासागरीय जलधारा प्रशांत महासागर में प्रवाहित नहीं होती है?

Options :

1. ✓ गल्फ स्ट्रीम
2. \* अलास्का जलधारा
3. \* कुरोशियो जलधारा
4. \* उत्तर भूमध्यरेखीय जलधारा

Question Number : 59 Question Id : 54592730359 Question Type : MCQ Option Shuffling : Yes  
Correct Marks : 1 Wrong Marks : 0.25

The Ganga-Satluj plains in the north-west and black soil region of the Deccan is important for production of which crop?

Options :

1. ✓ Wheat
2. \* Bajra
3. \* Rice
4. \* Ragi

Question Number : 59 Question Id : 54592730359 Question Type : MCQ Option Shuffling : Yes  
Correct Marks : 1 Wrong Marks : 0.25

उत्तर-पश्चिम में गंगा-सतलुज का मैदान और दक्कन का काली मिट्टी वाला प्रदेश निम्न में से कौनसी फसल के लिए महत्त्वपूर्ण है?

Options :

1. ✓ गेहूं



2. \* बाजरा

3. \* चावल

4. \* रागी

Question Number : 60 Question Id : 54592730360 Question Type : MCQ Option Shuffling : Yes  
Correct Marks : 1 Wrong Marks : 0.25

The annual population growth rate of India according to Census 2011 is:

Options :

1. \* 2 percent

2. ✓ 1.64 percent

3. \* 4 percent

4. \* 2.54 percent

Question Number : 60 Question Id : 54592730360 Question Type : MCQ Option Shuffling : Yes  
Correct Marks : 1 Wrong Marks : 0.25

जनगणना 2011 के अनुसार भारत की वार्षिक जनसंख्या वृद्धि दर है।

Options :

1. \* 2 प्रतिशत

2. ✓ 1.64 प्रतिशत

3. \* 4 प्रतिशत

4. \* 2.54 प्रतिशत

## General Awareness2

Group Number :	4
Group Id :	5459271504
Group Maximum Duration :	0
Group Minimum Duration :	0
Show Attended Group? :	No
Edit Attended Group? :	No
Break time:	0
Group Marks:	20
Is this Group for Examiner?:	No

Revisit allowed for group Instructions? :	Yes
Maximum Instruction Time:	0
Minimum Instruction Time:	0

## General Awareness2

Section Id :	5459271504
Section Number :	1
Section type :	Online
Mandatory or Optional:	Mandatory
Number of Questions:	20
Number of Questions to be attempted:	20
Section Marks:	20

Sub-Section Number:	1
Sub-Section Id:	5459271804
Question Shuffling Allowed :	Yes

Question Number : 61 Question Id : 54592730361 Question Type : MCQ Option Shuffling : Yes  
Correct Marks : 1 Wrong Marks : 0.25

India's latitudinal and longitudinal extent extends from \_\_\_\_\_ respectively.

Options :

1. ✓  $8^{\circ}4'N$  and  $37^{\circ}6'N$  and  $68^{\circ}7'E$  and  $97^{\circ}25'E$
2. ✗  $12^{\circ}4'N$  and  $40^{\circ}6'N$  and  $48^{\circ}7'E$  and  $77^{\circ}25'E$
3. ✗  $28^{\circ}4'N$  and  $57^{\circ}6'N$  and  $8^{\circ}7'E$  and  $29^{\circ}25'E$
4. ✗  $18^{\circ}4'N$  and  $47^{\circ}6'N$  and  $18^{\circ}7'E$  and  $37^{\circ}25'E$

Question Number : 61 Question Id : 54592730361 Question Type : MCQ Option Shuffling : Yes  
Correct Marks : 1 Wrong Marks : 0.25

भारत की अक्षांशीय और अनुदैर्घ्य सीमा क्रमशः \_\_\_\_\_ में फैली हुई है।

Options :

1. ✓  $8^{\circ} 4'$  उ. और  $37^{\circ} 6'$  उ. और  $68^{\circ} 7'$  पू. और  $97^{\circ} 25'$  पू.
2. ✗  $12^{\circ} 4'$  उ. और  $40^{\circ} 6'$  उ. और  $48^{\circ} 7'$  पू. और  $77^{\circ} 25'$  पू.
3. ✗  $28^{\circ} 4'$  उ. और  $57^{\circ} 6'$  उ. और  $8^{\circ} 7'$  पू. और  $29^{\circ} 25'$  पू.
4. ✗  $18^{\circ} 4'$  उ. और  $47^{\circ} 6'$  उ. और  $18^{\circ} 7'$  पू. और  $37^{\circ} 25'$  पू.

Question Number : 62 Question Id : 54592730362 Question Type : MCQ Option Shuffling : Yes

Correct Marks : 1 Wrong Marks : 0.25

What is the name of the book where the rules made by the Buddhist Sanghas were laid down?

Options :

1. \* Panchatantra
2. \* Mahabhinishkramana
3. ✓ Vinaya Pitaka
4. \* Stotra

Question Number : 62 Question Id : 54592730362 Question Type : MCQ Option Shuffling : Yes

Correct Marks : 1 Wrong Marks : 0.25

उस पुस्तक का क्या नाम है जिसमें बौद्ध संघ द्वारा बनाए गए नियमों को रखा गया था?

Options :

1. \* पंचतंत्र
2. \* महाभिनिष्करमण
3. ✓ विनय पिटक
4. \* स्तोत्र

Question Number : 63 Question Id : 54592730363 Question Type : MCQ Option Shuffling : Yes

Correct Marks : 1 Wrong Marks : 0.25

Which of the following options have the correct sequence of the Mughal emperors chronologically?

Options :

1. \* Akbar, Shah Jahan, Humayun, Jehangir
2. \* Shah Jahan, Akbar, Jehangir, Humayun
3. ✓ Humayun, Akbar, Jehangir, Shah Jahan
4. \* Jehangir, Akbar, Humayun, Shah Jahan

Question Number : 63 Question Id : 54592730363 Question Type : MCQ Option Shuffling : Yes

Correct Marks : 1 Wrong Marks : 0.25

निम्नलिखित में से किस विकल्प में मुगल सम्राटों का कालानुक्रमिक क्रम सही है?

Options :

1. \* अकबर, शाहजहाँ, हुमायूँ, जहाँगीर
2. \* शाहजहाँ, अकबर, जहाँगीर, हुमायूँ
3. ✓ हुमायूँ, अकबर, जहाँगीर, शाहजहाँ
4. \* जहाँगीर, अकबर, हुमायूँ, शाहजहाँ

Question Number : 64 Question Id : 54592730364 Question Type : MCQ Option Shuffling : Yes

Correct Marks : 1 Wrong Marks : 0.25

Who out of the following belongs to the Sayyid Dynasty of the Delhi Sultanate?

Options :

1. \* Ghiyasuddin Balban
2. \* Shamshuddin Iltutmish
3. \* Raziyya Sultana
4. ✓ Khizr Khan

Question Number : 64 Question Id : 54592730364 Question Type : MCQ Option Shuffling : Yes

Correct Marks : 1 Wrong Marks : 0.25

निम्नलिखित में से कौन दिल्ली सल्तनत के सैय्यद राजवंश से संबंधित है?

Options :

1. \* घियासुद्दीन बलबन
2. \* शमशुद्दीन इल्तुतमिश
3. \* रज़िया सुल्ताना
4. ✓ खिज़्र खान

Question Number : 65 Question Id : 54592730365 Question Type : MCQ Option Shuffling : Yes

Correct Marks : 1 Wrong Marks : 0.25

Lord Hastings became the first Governor General in India in \_\_\_\_\_.

Options :

1. ✖ 1772

2. ✔ 1773

3. ✖ 1775

4. ✖ 1778

Question Number : 65 Question Id : 54592730365 Question Type : MCQ Option Shuffling : Yes

Correct Marks : 1 Wrong Marks : 0.25

लॉर्ड हेस्टिंग्स \_\_\_\_\_ में भारत के पहले गवर्नर जनरल बने थे।

Options :

1. ✖ 1772

2. ✔ 1773

3. ✖ 1775

4. ✖ 1778

Question Number : 66 Question Id : 54592730366 Question Type : MCQ Option Shuffling : Yes

Correct Marks : 1 Wrong Marks : 0.25

Who had issued a notice stating that ryots would not be compelled to accept indigo contracts in the year 1859 to quell the anger of the indigo planters?

Options :

1. ✔ Ashley Eden

2. ✖ Alexander Mackenzie

3. ✖ Augustus Rivers Thomson

4. ✖ Richard Temple

Question Number : 66 Question Id : 54592730366 Question Type : MCQ Option Shuffling : Yes

Correct Marks : 1 Wrong Marks : 0.25

किसने एक सूचना जारी की थी, जिसमें कहा गया था कि वर्ष 1859 में नील बागान मालिकों के गुस्से को शांत करने के लिए रैयतों को नील अनुबंध स्वीकार करने के लिए मजबूर नहीं किया जाएगा?

Options :

1. ✓ एशले ईडन
2. \* अलेक्जेंडर मैकेंजी
3. \* ऑगस्टस रिवर्स थॉमसन
4. \* रिचर्ड टेम्पल

Question Number : 67 Question Id : 54592730367 Question Type : MCQ Option Shuffling : Yes

Correct Marks : 1 Wrong Marks : 0.25

Who out of the following was a businessman and publicist settled in London, and also a member of the British Parliament for some time?

Options :

1. \* Pherozeshah Mehta
2. ✓ Dadabhai Naoroji
3. \* Romesh Chandra Dutt
4. \* Surendranath Banerji

Question Number : 67 Question Id : 54592730367 Question Type : MCQ Option Shuffling : Yes

Correct Marks : 1 Wrong Marks : 0.25

निम्नलिखित में से कौन लंदन में बसने वाले व्यापारी और प्रचारक थे, और कुछ समय के लिए ब्रिटिश संसद के सदस्य भी थे?

Options :

1. \* फ़िरोजशाह मेहता
2. ✓ दादाभाई नैरोजी
3. \* रोमेश चंद्र दत्त

#### 4. \* सुरेंद्रनाथ बनर्जी

Question Number : 68 Question Id : 54592730368 Question Type : MCQ Option Shuffling : Yes  
Correct Marks : 1 Wrong Marks : 0.25

Which of the following cabinet ministers and his portfolio is correctly matched?

Options :

1. \* Amit Shah – Ministry of Defence
2. ✓ Nitin Jairam Gadkari – Ministry of Micro, Small and Medium Enterprise
3. \* Ram Vilas Paswan – Ministry of Rural Development
4. \* Ravi Shankar Prasad – Ministry of Food Processing Industries

Question Number : 68 Question Id : 54592730368 Question Type : MCQ Option Shuffling : Yes  
Correct Marks : 1 Wrong Marks : 0.25

निम्नलिखित में से किस कैबिनेट मंत्री और उनके संविभाग का सही मिलान है?

Options :

1. \* अमित शाह - रक्षा मंत्रालय
2. ✓ नितिन जयराम गडकरी - सूक्ष्म, लघु और मध्यम उद्यम मंत्रालय
3. \* राम विलास पासवान - ग्रामीण विकास मंत्रालय
4. \* रविशंकर प्रसाद - खाद्य प्रसंस्करण उद्योग मंत्रालय

Question Number : 69 Question Id : 54592730369 Question Type : MCQ Option Shuffling : Yes  
Correct Marks : 1 Wrong Marks : 0.25

Who out of the following is the present President of France?

Options :

1. \* Francois Hollande
2. \* Justin Trudeau
3. \* Angela Merkel

## 4. ✓ Emmanuel Macron

Question Number : 69 Question Id : 54592730369 Question Type : MCQ Option Shuffling : Yes  
Correct Marks : 1 Wrong Marks : 0.25

निम्नलिखित में से कौन, फ्रांस के वर्तमान राष्ट्रपति है?

Options :

1. ✗ फ्रेंकोइस हॉलैंड
2. ✗ जस्टिन ट्रूडो
3. ✗ एंजेला मर्केल
4. ✓ इमैनुएल मैक्रॉन

Question Number : 70 Question Id : 54592730370 Question Type : MCQ Option Shuffling : Yes  
Correct Marks : 1 Wrong Marks : 0.25

Which of the following films won the Best Film Award at the Oscars 2019?

Options :

1. ✓ Green Book
2. ✗ BlacKkKlansman
3. ✗ Bohemian Rhapsody
4. ✗ Roma

Question Number : 70 Question Id : 54592730370 Question Type : MCQ Option Shuffling : Yes  
Correct Marks : 1 Wrong Marks : 0.25

ऑस्कर 2019 में निम्नलिखित में से किस फिल्म ने सर्वश्रेष्ठ फिल्म का पुरस्कार जीता?

Options :

1. ✓ ग्रीन बुक
2. ✗ ब्लाक्कक्लांसमैन
3. ✗ बोहेमियन रैप्सोडी
4. ✗ रोमा



Question Number : 71 Question Id : 54592730371 Question Type : MCQ Option Shuffling : Yes

Correct Marks : 1 Wrong Marks : 0.25

Which of the following is a book written by Nirad C. Chaudhari?

Options :

1. ✓ The Autobiography of an Unknown Indian
2. ✘ Discovery of India
3. ✘ A Train to Pakistan
4. ✘ A Suitable Boy

Question Number : 71 Question Id : 54592730371 Question Type : MCQ Option Shuffling : Yes

Correct Marks : 1 Wrong Marks : 0.25

निम्नलिखित में से कौन सी पुस्तक नीरद सी. चौधरी द्वारा लिखी गई है?

Options :

1. ✓ द ऑटोबायोग्राफी आफ एन अन्नोन इंडियन
2. ✘ भारत की खोज
3. ✘ अ ट्रेन टू पाकिस्तान
4. ✘ अ सूटेबल बॉय

Question Number : 72 Question Id : 54592730372 Question Type : MCQ Option Shuffling : Yes

Correct Marks : 1 Wrong Marks : 0.25

Who is the Head of the World Health Organisation (WHO) and where is its headquarters located?

Options :

1. ✘ Tedros Adhanom, The Hague
2. ✘ Pascal Lamy, Geneva
3. ✓ Tedros Adhanon, Geneva
4. ✘ Pascal Lamy, The Hague

Question Number : 72 Question Id : 54592730372 Question Type : MCQ Option Shuffling : Yes

Correct Marks : 1 Wrong Marks : 0.25

विश्व स्वास्थ्य संगठन (डब्लूएचओ) का प्रमुख कौन है और इसका मुख्यालय कहाँ स्थित है?

Options :

1. \* टेड्रोस एडहानॉम, द हेग
2. \* पास्कल लैमी, जिनेवा
3. ✓ टेड्रोस एडहानन, जिनेवा
4. \* पास्कल लैमी, द हेग

Question Number : 73 Question Id : 54592730373 Question Type : MCQ Option Shuffling : Yes

Correct Marks : 1 Wrong Marks : 0.25

Who out of the following is considered as the “father of modern chemistry”?

Options :

1. \* Dmitri Mendeleev
2. \* John Newlands
3. \* Henry Moseley
4. ✓ Antoine-Laurent de Lavoisier

Question Number : 73 Question Id : 54592730373 Question Type : MCQ Option Shuffling : Yes

Correct Marks : 1 Wrong Marks : 0.25

निम्नलिखित में से किसे "आधुनिक रसायन विज्ञान का जनक" माना जाता है?

Options :

1. \* दिमित्री मेंडेलीव
2. \* जॉन न्यूलैंड्स
3. \* हेनरी मोसले
4. ✓ एंटोनी-लॉरेंट डी लावोइसियर

Question Number : 74 Question Id : 54592730374 Question Type : MCQ Option Shuffling : Yes

Correct Marks : 1 Wrong Marks : 0.25

Which of the following aspects of the Indian Constitution was described by Dr. B. R. Ambedkar as a 'novel feature'?

Options :

1. ✖ Fundamental Rights
2. ✖ Preamble
3. ✖ Fundamental Duties
4. ✔ Directive Principles of State Policies

Question Number : 74 Question Id : 54592730374 Question Type : MCQ Option Shuffling : Yes

Correct Marks : 1 Wrong Marks : 0.25

भारतीय संविधान के निम्नलिखित पहलुओं में से किसे डॉ. बी. आर. अम्बेडकर ने 'नवीन रूप' में संवारा था?

Options :

1. ✖ मौलिक अधिकार
2. ✖ प्रस्तावना
3. ✖ मौलिक कर्तव्य
4. ✔ राज्य नीतियों के निर्देशक सिद्धांत

Question Number : 75 Question Id : 54592730375 Question Type : MCQ Option Shuffling : Yes

Correct Marks : 1 Wrong Marks : 0.25

Who out of the following are considered as the pioneers of the Public Interest Litigation or PIL?

Options :

1. ✔ Justice V.R. Krishna Iyer and Justice P.N. Bhagwati
2. ✖ Justice P.N. Bhagwati and Justice Hans Raj Khanna
3. ✖ Justice V.R. Krishna Iyer and Justice Soli Sorabjee
4. ✖ Justice Soli Sorabjee and Justice Nanabhoy Palkhivala

Question Number : 75 Question Id : 54592730375 Question Type : MCQ Option Shuffling : Yes

Correct Marks : 1 Wrong Marks : 0.25

निम्नलिखित में से किसे जनहित याचिका (पीआईएल) का प्रणेता माना जाता है?

Options :

1. ✓ न्यायमूर्ति वी. आर. कृष्णा अय्यर और न्यायमूर्ति पी.एन. भगवती
2. ✘ न्यायमूर्ति पी.एन. भगवती और न्यायमूर्ति हंस राज खन्ना
3. ✘ न्यायमूर्ति वी. आर. कृष्णा अय्यर और न्यायमूर्ति सोली सोराबजी
4. ✘ जस्टिस सोली सोराबजी और जस्टिस नानाभाई पालखीवाला

Question Number : 76 Question Id : 54592730376 Question Type : MCQ Option Shuffling : Yes

Correct Marks : 1 Wrong Marks : 0.25

Which of the following Constitutional Amendment Acts is related to the transfer of the Berubari Union No. 12 from India to Pakistan?

Options :

1. ✘ 2nd Constitutional Amendment Act
2. ✘ 4th Constitutional Amendment Act
3. ✘ 7th Constitutional Amendment Act
4. ✓ 9th Constitutional Amendment Act

Question Number : 76 Question Id : 54592730376 Question Type : MCQ Option Shuffling : Yes

Correct Marks : 1 Wrong Marks : 0.25

निम्नलिखित में से कौन सा संवैधानिक संशोधन अधिनियम भारत से पाकिस्तान में बेरुबरी यूनियन नंबर 12 के हस्तांतरण से संबंधित है?

Options :

1. ✘ दूसरा संवैधानिक संशोधन अधिनियम
2. ✘ चौथा संवैधानिक संशोधन अधिनियम
3. ✘ सातवां संवैधानिक संशोधन अधिनियम
4. ✓ नौवां संवैधानिक संशोधन अधिनियम

Question Number : 77 Question Id : 54592730377 Question Type : MCQ Option Shuffling : Yes

Correct Marks : 1 Wrong Marks : 0.25

On which date did Jawaharlal Nehru move the historic 'Objectives Resolution' in the Assembly?

Options :

1. ✓ December 13, 1946
2. ✘ December 24, 1946
3. ✘ January 22, 1946
4. ✘ January 26, 1946

Question Number : 77 Question Id : 54592730377 Question Type : MCQ Option Shuffling : Yes

Correct Marks : 1 Wrong Marks : 0.25

जवाहरलाल नेहरू ने किस तारीख को विधानसभा में ऐतिहासिक 'उद्देश्य संकल्प' को आगे बढ़ाया?

Options :

1. ✓ 13 दिसंबर, 1946
2. ✘ 24 दिसंबर, 1946
3. ✘ 22 जनवरी, 1946
4. ✘ 26 जनवरी, 1946

Question Number : 78 Question Id : 54592730378 Question Type : MCQ Option Shuffling : Yes

Correct Marks : 1 Wrong Marks : 0.25

(i)\_\_\_\_\_ became the first player to score (ii)\_\_\_\_\_ centuries in a single World Cup edition recently.

Options :

1. ✘ (i) Virat Kohli (ii) 3
2. ✓ (i) Rohit Sharma (ii) 5
3. ✘ (i) Kane Williamson (ii) 5
4. ✘ (i) Johnny Bairstow (ii) 4

Question Number : 78 Question Id : 54592730378 Question Type : MCQ Option Shuffling : Yes

Correct Marks : 1 Wrong Marks : 0.25

(i) \_\_\_\_\_ ने हाल ही में एकल विश्व कप संस्करण में (ii) \_\_\_\_\_ शतक बनाने वाले पहले खिलाड़ी बने।

Options :

1. ✖ (i) विराट कोहली (ii) 3
2. ✔ (i) रोहित शर्मा (ii) 5
3. ✖ (i) केन विलियमसन (ii) 5
4. ✖ (i) जॉनी बेयरस्टोव (ii) 4

Question Number : 79 Question Id : 54592730379 Question Type : MCQ Option Shuffling : Yes  
Correct Marks : 1 Wrong Marks : 0.25

In which of the following stadiums was the final match of the ODI World Cup 2019 held?

Options :

1. ✖ Edgbaston
2. ✔ Lord's
3. ✖ Emirates Old Trafford
4. ✖ Headingley

Question Number : 79 Question Id : 54592730379 Question Type : MCQ Option Shuffling : Yes  
Correct Marks : 1 Wrong Marks : 0.25

निम्नलिखित में से किस स्टेडियम में एक दिवसीय अंतर्राष्ट्रीय (ओडीआई) विश्व कप 2019 का अंतिम मैच आयोजित किया गया था?

Options :

1. ✖ एजबेस्टन
2. ✔ लॉर्ड्स
3. ✖ अमीरात ओल्ड ट्रैफोर्ड
4. ✖ हेडिंग्ले

Question Number : 80 Question Id : 54592730380 Question Type : MCQ Option Shuffling : Yes  
Correct Marks : 1 Wrong Marks : 0.25

Which of the following sportsperson and his respective sport is incorrectly matched?

Options :

1. \* Andy Murray - Tennis
2. \* Peter Handscomb - Cricket
3. \* Manuel Neuer - Football
4. ✓ Sebastian Vettel – Hockey

Question Number : 80 Question Id : 54592730380 Question Type : MCQ Option Shuffling : Yes

Correct Marks : 1 Wrong Marks : 0.25

निम्नलिखित में से किस खिलाड़ी और उसके संबंधित खेल का गलत मिलान किया गया है?

Options :

1. \* एंडी मरे - टेनिस
2. \* पीटर हैंड्सकॉम्ब - क्रिकेट
3. \* मैनुअल नेउर - फुटबॉल
4. ✓ सेबस्टियन वेटेल - हॉकी

## Arithmetic Ability1

Group Number :	5
Group Id :	5459271505
Group Maximum Duration :	0
Group Minimum Duration :	0
Show Attended Group? :	No
Edit Attended Group? :	No
Break time:	0
Group Marks:	20
Is this Group for Examiner?:	No
Revisit allowed for group Instructions? :	Yes
Maximum Instruction Time:	0
Minimum Instruction Time:	0

## Arithmetic Ability1

Section Id :	5459271505
Section Number :	1
Section type :	Online
Mandatory or Optional:	Mandatory
Number of Questions:	20
Number of Questions to be attempted:	20
Section Marks:	20

Sub-Section Number:	1
Sub-Section Id:	5459271805
Question Shuffling Allowed :	Yes

Question Number : 81 Question Id : 54592730381 Question Type : MCQ Option Shuffling : Yes

Correct Marks : 1 Wrong Marks : 0.25

What approximate value will come in place of the question mark?

$$(13.96)^2 - (15.03)^2 + (18.09)^2 - 32.65 = ?$$

Options :

1. ✖ 223

2. ✔ 264

3. ✖ 334

4. ✖ 354

Question Number : 81 Question Id : 54592730381 Question Type : MCQ Option Shuffling : Yes

Correct Marks : 1 Wrong Marks : 0.25

प्रश्नवाचक चिन्ह (?) के स्थान पर लगभग कौन सा मान आएगा?

$$(13.96)^2 - (15.03)^2 + (18.09)^2 - 32.65 = ?$$

Options :

1. ✖ 223

2. ✔ 264

3. ✖ 334

4. ✖ 354



Question Number : 82 Question Id : 54592730382 Question Type : MCQ Option Shuffling : Yes

Correct Marks : 1 Wrong Marks : 0.25

What should come in place of the '?' in the following question?

$$\sqrt{\sqrt{1600} + \sqrt{576}} = (?)^2$$

Options :

1. ✖ 81

2. ✖ 3

3. ✖ 6561

4. ✔  $2\sqrt{2}$

Question Number : 82 Question Id : 54592730382 Question Type : MCQ Option Shuffling : Yes

Correct Marks : 1 Wrong Marks : 0.25

निम्नलिखित प्रश्न में '?' के स्थान पर क्या आना चाहिए?

$$\sqrt{\sqrt{1600} + \sqrt{576}} = (?)^2$$

Options :

1. ✖ 81

2. ✖ 3

3. ✖ 6561

4. ✔  $2\sqrt{2}$

Question Number : 83 Question Id : 54592730383 Question Type : MCQ Option Shuffling : Yes

Correct Marks : 1 Wrong Marks : 0.25

What approximate value should come in place of the questions mark (?) in the following questions?

$$\frac{5}{8} \text{ of } 4011.33 + \frac{7}{10} \text{ of } 3411.22 = ?$$

Options :

1. ✖ 4810

2. ✖ 4980

3. ✔ 4890

4. ✖ 4930

Question Number : 83 Question Id : 54592730383 Question Type : MCQ Option Shuffling : Yes  
Correct Marks : 1 Wrong Marks : 0.25

निम्न प्रश्नों में (?) चिन्ह के स्थान पर कौन सा मान आना चाहिए ?

$$4011.33 \text{ का } \frac{5}{8} + 3411.22 \text{ का } \frac{7}{10} = ?$$

Options :

1. ✖ 4810

2. ✖ 4980

3. ✔ 4890

4. ✖ 4930

Question Number : 84 Question Id : 54592730384 Question Type : MCQ Option Shuffling : Yes  
Correct Marks : 1 Wrong Marks : 0.25

What should come in place of the question mark (?) in the following questions?

$$\frac{6}{2} \times \frac{10}{2} \div \frac{6}{2} \times 6^2 = ?$$

Options :

1. ✔ 180

2. ✖ 170

3. ✖ 190

4. ✖ 175

Question Number : 84 Question Id : 54592730384 Question Type : MCQ Option Shuffling : Yes  
Correct Marks : 1 Wrong Marks : 0.25

निम्नलिखित प्रश्न में प्रश्नवाचक चिन्ह (?) के स्थान पर क्या आयेगा?

$$\frac{6}{2} \times \frac{10}{2} \div \frac{6}{2} \times 6^2 = ?$$

Options :

1. ✓ 180

2. ✗ 170

3. ✗ 190

4. ✗ 175

Question Number : 85 Question Id : 54592730385 Question Type : MCQ Option Shuffling : Yes

Correct Marks : 1 Wrong Marks : 0.25

What should come in place of the question mark (?) in the following questions?

$$\frac{24^2 - 13^2 + 7^2}{19} = ?$$

Options :

1. ✗ 18

2. ✓ 24

3. ✗ 22

4. ✗ 21

Question Number : 85 Question Id : 54592730385 Question Type : MCQ Option Shuffling : Yes

Correct Marks : 1 Wrong Marks : 0.25

निम्नलिखित प्रश्न में प्रश्नवाचक चिन्ह (?) के स्थान पर क्या आयेगा?

$$\frac{24^2 - 13^2 + 7^2}{19} = ?$$

Options :

1. ✗ 18

2. ✓ 24

3. ✗ 22

4. ✗ 21

Question Number : 86 Question Id : 54592730386 Question Type : MCQ Option Shuffling : Yes  
Correct Marks : 1 Wrong Marks : 0.25

What should come in place of the question mark (?) in the following questions?

$$[12 \times 5 - \{200 - (501 + 247 - 386)\}] \div 2 = ?$$

Options :

1. ✓ 111

2. ✗ 62

3. ✗ 61

4. ✗ 82

Question Number : 86 Question Id : 54592730386 Question Type : MCQ Option Shuffling : Yes  
Correct Marks : 1 Wrong Marks : 0.25

निम्नलिखित प्रश्न में प्रश्नवाचक चिन्ह (?) के स्थान पर क्या आयेगा?

$$[12 \times 5 - \{200 - (501 + 247 - 386)\}] \div 2 = ?$$

Options :

1. ✓ 111

2. ✗ 62

3. ✗ 61

4. ✗ 82

Question Number : 87 Question Id : 54592730387 Question Type : MCQ Option Shuffling : Yes  
Correct Marks : 1 Wrong Marks : 0.25

A shepherd has 945 brown sheep and 2475 red sheep. He wants to graze them in minimum number of groups in such a way that each group has same colour of animals and also contains equal no. of animals in each group. Find such minimum no. of groups.

Options :

1. ✖ 70

2. ✖ 56

3. ✔ 76

4. ✖ 84

Question Number : 87 Question Id : 54592730387 Question Type : MCQ Option Shuffling : Yes

Correct Marks : 1 Wrong Marks : 0.25

एक चरवाहा के पास 945 भूरी भेड़ और 2475 लाल भेड़ हैं। वह इनको चराने के लिए कम से कम संख्या में झुण्ड बनाना चाहता है और चाहता है कि प्रत्येक झुण्ड में एक ही रंग के जानवर हो और प्रत्येक झुण्ड में जानवरों की संख्या समान हो तो कितने न्यूनतम झुण्ड होंगे?

Options :

1. ✖ 70

2. ✖ 56

3. ✔ 76

4. ✖ 84

Question Number : 88 Question Id : 54592730388 Question Type : MCQ Option Shuffling : Yes

Correct Marks : 1 Wrong Marks : 0.25

$x^5 + 2x^4 - 3x^3 + x^2 + 2x + 8$  divisible by  $x + 2$  what will be remainder ?

Options :

1. ✔ 32

2. ✖ 64

3. ✖ 16

4. ✖ 128

Question Number : 88 Question Id : 54592730388 Question Type : MCQ Option Shuffling : Yes  
Correct Marks : 1 Wrong Marks : 0.25

$x^5 + 2x^4 - 3x^3 + x^2 + 2x + 8$  को  $x + 2$  से भाग देने पर शेषफल क्या होगा?

Options :

1. ✔ 32

2. ✖ 64

3. ✖ 16

4. ✖ 128

Question Number : 89 Question Id : 54592730389 Question Type : MCQ Option Shuffling : Yes  
Correct Marks : 1 Wrong Marks : 0.25

What least value must be assigned to \* so that the number 4567\*234 is divisible by 9?

Options :

1. ✔ 5

2. ✖ 2

3. ✖ 3

4. ✖ 4

Question Number : 89 Question Id : 54592730389 Question Type : MCQ Option Shuffling : Yes  
Correct Marks : 1 Wrong Marks : 0.25

\* के स्थान पर कम से कम किस मान को प्रतिस्थापित किया जाना चाहिए ताकि संख्या  $4567 * 234$ , 9 से विभाजित हो जाये?

Options :

1. ✔ 5

2. ✖ 2

3. ✖ 3

4. ✖ 4

Question Number : 90 Question Id : 54592730390 Question Type : MCQ Option Shuffling : Yes  
Correct Marks : 1 Wrong Marks : 0.25

How many numbers between 1 to 1000 which are multiples of 6 but not of 18?

Options :

- 1. ✖ 110
- 2. ✔ 111
- 3. ✖ 100
- 4. ✖ 112

Question Number : 90 Question Id : 54592730390 Question Type : MCQ Option Shuffling : Yes  
Correct Marks : 1 Wrong Marks : 0.25

1 से 1000 के बीच कितनी संख्याएँ हैं, जो 6 की गुणज हैं लेकिन 18 की नहीं?

Options :

- 1. ✖ 110
- 2. ✔ 111
- 3. ✖ 100
- 4. ✖ 112

Question Number : 91 Question Id : 54592730391 Question Type : MCQ Option Shuffling : Yes  
Correct Marks : 1 Wrong Marks : 0.25

The average age of seven men, ten women and two boys is 35 years. The average age of all the seven men is 39 years. The average age of all the ten women is 36 years. Find the average age of two boys (in years).

Options :

- 1. ✖ 14
- 2. ✔ 16
- 3. ✖ 17
- 4. ✖ 15

Question Number : 91 Question Id : 54592730391 Question Type : MCQ Option Shuffling : Yes

Correct Marks : 1 Wrong Marks : 0.25

सात पुरुषों, दस महिलाओं और दो लड़कों की औसत आयु 35 वर्ष है। सभी सात पुरुषों की औसत आयु 39 वर्ष है। सभी दस महिलाओं की औसत आयु 36 वर्ष है। दो लड़कों की औसत आयु ज्ञात करें (वर्षों में)।

Options :

1. ✖ 14

2. ✔ 16

3. ✖ 17

4. ✖ 15

Question Number : 92 Question Id : 54592730392 Question Type : MCQ Option Shuffling : Yes

Correct Marks : 1 Wrong Marks : 0.25

The average of six numbers is 75. The average of first five numbers is 64. The average of last five numbers is 80. Find the difference between first and last number.

Options :

1. ✖ 50

2. ✖ 65

3. ✖ 94

4. ✔ 80

Question Number : 92 Question Id : 54592730392 Question Type : MCQ Option Shuffling : Yes

Correct Marks : 1 Wrong Marks : 0.25

छह संख्याओं का औसत 75 है। पहली पाँच संख्याओं का औसत 64 है। अंतिम पाँच संख्याओं का औसत 80 है। पहली और अंतिम संख्या के बीच का अंतर ज्ञात कीजिए।

Options :

1. ✖ 50



2. ✖ 65

3. ✖ 94

4. ✔ 80

Question Number : 93 Question Id : 54592730393 Question Type : MCQ Option Shuffling : Yes  
Correct Marks : 1 Wrong Marks : 0.25

The marked price of a product is 40% above its cost price. Two successive discounts of 10% and 5% are given on marked price. If the difference between two discounts is Rs. 154, then find the difference between cost price and marked price (in Rupees).

Options :

1. ✖ 750

2. ✔ 800

3. ✖ 1000

4. ✖ 720

Question Number : 93 Question Id : 54592730393 Question Type : MCQ Option Shuffling : Yes  
Correct Marks : 1 Wrong Marks : 0.25

किसी वस्तु का अंकित मूल्य उसके लागत मूल्य से 40% अधिक है। अंकित मूल्य पर 10% और 5% के दो क्रमिक छूट दिए गए हैं। यदि दो छूटों के बीच का अंतर रुपये 154 है, तो लागत मूल्य और अंकित मूल्य (रुपए में) के बीच का अंतर ज्ञात करें।

Options :

1. ✖ 750

2. ✔ 800

3. ✖ 1000

4. ✖ 720

Question Number : 94 Question Id : 54592730394 Question Type : MCQ Option Shuffling : Yes  
Correct Marks : 1 Wrong Marks : 0.25

The number of boys and girls in a class is in the ratio 5 : 3. 20% of the boys denied to go for a picnic while 30 girls are ready to go for the picnic. If total 94 students are ready to go for the picnic, then what is the total number of girls in the class?

Options :

1. ✓ 48
2. ✗ 33
3. ✗ 39
4. ✗ 51

Question Number : 94 Question Id : 54592730394 Question Type : MCQ Option Shuffling : Yes  
Correct Marks : 1 Wrong Marks : 0.25

एक कक्षा में लड़कों और लड़कियों की संख्या 5 : 3 के अनुपात में है। 20% लड़कों ने पिकनिक के लिए जाने से इनकार कर दिया, जबकि 30 लड़कियां पिकनिक जाने के लिए तैयार हैं। यदि कुल 94 छात्र पिकनिक जाने के लिए तैयार हैं, तो कक्षा में लड़कियों की कुल संख्या क्या है?

Options :

1. ✓ 48
2. ✗ 33
3. ✗ 39
4. ✗ 51

Question Number : 95 Question Id : 54592730395 Question Type : MCQ Option Shuffling : Yes  
Correct Marks : 1 Wrong Marks : 0.25

There are three numbers a, b and c. 25% of a is equal to the 12% of b. 20% of b is equal to the 10% of c. By what percent c is more than a?

Options :

1. ✖ 250 percent
2. ✖ 24 percent
3. ✔ 316.67 percent
4. ✖ 125.33 percent

Question Number : 95 Question Id : 54592730395 Question Type : MCQ Option Shuffling : Yes

Correct Marks : 1 Wrong Marks : 0.25

तीन संख्याएं a, b और c हैं। a का 25 %, b के 12% के बराबर है। b का 20%, c के 10% के बराबर है। c, a से कितने प्रतिशत अधिक है?

Options :

1. ✖ 250 प्रतिशत
2. ✖ 24 प्रतिशत
3. ✔ 316.67 प्रतिशत
4. ✖ 125.33 प्रतिशत

Question Number : 96 Question Id : 54592730396 Question Type : MCQ Option Shuffling : Yes

Correct Marks : 1 Wrong Marks : 0.25

Aditi spends 48% of her income for food, 25% of the remaining on traveling, one third of the remaining on entertainment which is equal to Rs. 2600. If she saves the rest, find her saving (in rupees).

Options :

1. ✔ 5200
2. ✖ 4800
3. ✖ 6500

#### 4. \* 5450

Question Number : 96 Question Id : 54592730396 Question Type : MCQ Option Shuffling : Yes

Correct Marks : 1 Wrong Marks : 0.25

अदिति भोजन के लिए अपनी आय का 48%, यात्रा पर शेष का 25%, मनोरंजन पर शेष का एक तिहाई खर्च करती है जो रुपये 2600 के बराबर है। अगर वह बाकी बचाती है, तो उसकी बचत (रुपए में) ज्ञात करें।

Options :

1. ✓ 5200

2. \* 4800

3. \* 6500

4. \* 5450

Question Number : 97 Question Id : 54592730397 Question Type : MCQ Option Shuffling : Yes

Correct Marks : 1 Wrong Marks : 0.25

A milkman bought 60 litres of milk at Rs. 30 per litre. For every four litres of milk he added one litre of water and sold the entire mixture at Rs. 32 per litre. Find his profit percentage.

Options :

1. \* 25 percent

2. \* 20 percent

3. ✓ 33.33 percent

4. \* 16.66 percent

Question Number : 97 Question Id : 54592730397 Question Type : MCQ Option Shuffling : Yes

Correct Marks : 1 Wrong Marks : 0.25

एक दूधवाले ने 60 लीटर दूध रुपये 30 प्रति लीटर में खरीदा। प्रत्येक चार लीटर दूध में उसने एक लीटर पानी मिलाया और पूरे मिश्रण को रुपये 32 प्रति लीटर में बेचा। उसका लाभ प्रतिशत ज्ञात कीजिए।

Options :

1. \* 25 प्रतिशत
2. \* 20 प्रतिशत
3. ✓ 33.33 प्रतिशत
4. \* 16.66 प्रतिशत

Question Number : 98 Question Id : 54592730398 Question Type : MCQ Option Shuffling : Yes

Correct Marks : 1 Wrong Marks : 0.25

The selling price of a product A and a product B are in the ratio 5 : 1. Product A was sold at Rs. 800 and 60% profit earned on it. Product B was sold at 25% profit. Find the total cost of product A and product B (in rupees).

Options :

1. ✓ 628
2. \* 712
3. \* 548
4. \* 580

Question Number : 98 Question Id : 54592730398 Question Type : MCQ Option Shuffling : Yes

Correct Marks : 1 Wrong Marks : 0.25

एक उत्पाद A और उत्पाद B की बिक्री मूल्य 5 : 1 में हैं। उत्पाद A को रुपये 800 में बेचा गया था और इस पर अर्जित लाभ 60% था। उत्पाद B, 25% लाभ पर बेचा गया था। उत्पाद A और उत्पाद B की कुल लागत (रुपये में) ज्ञात करें।

Options :

1. ✓ 628

2. ✖ 712

3. ✖ 548

4. ✖ 580

Question Number : 99 Question Id : 54592730399 Question Type : MCQ Option Shuffling : Yes  
Correct Marks : 1 Wrong Marks : 0.25

Shrikant sold a microwave by offering a discount of 10% and earned 35% profit. The marked price of microwave is Rs. 18000. Find the profit earned by him (in Rupees).

Options :

1. ✖ 3600

2. ✖ 3950

3. ✖ 4070

4. ✔ 4200

Question Number : 99 Question Id : 54592730399 Question Type : MCQ Option Shuffling : Yes  
Correct Marks : 1 Wrong Marks : 0.25

श्रीकांत ने 10% की छूट देकर माइक्रोवेव बेचा और 35% लाभ अर्जित किया। माइक्रोवेव की चिह्नित कीमत 18000 रुपये है। उसके द्वारा अर्जित किए गए लाभ को (रुपये में) ज्ञात करें।

Options :

1. ✖ 3600

2. ✖ 3950

3. ✖ 4070

4. ✔ 4200

Question Number : 100 Question Id : 54592730400 Question Type : MCQ Option Shuffling : Yes  
Correct Marks : 1 Wrong Marks : 0.25

The ratio of number of males to females in a colony is 3 : 2.  
The ratio of employed to unemployed persons among males is 5 : 4. Find the ratio of employed males to the total number of persons in the colony.

Options :

1. ✖ 1 : 2

2. ✔ 1 : 3

3. ✖ 2 : 5

4. ✖ 3 : 5

Question Number : 100 Question Id : 54592730400 Question Type : MCQ Option Shuffling : Yes

Correct Marks : 1 Wrong Marks : 0.25

एक कॉलोनी में पुरुषों की संख्या और महिलाओं की संख्या का अनुपात 3 : 2 है। पुरुषों के बीच कार्यरत और बेरोजगार व्यक्तियों का अनुपात 5 : 4 है। कॉलोनी में कार्यरत पुरुषों की संख्या और व्यक्तियों की कुल संख्या के बीच अनुपात ज्ञात करें।

Options :

1. ✖ 1 : 2

2. ✔ 1 : 3

3. ✖ 2 : 5

4. ✖ 3 : 5

## Arithmetic Ability2

Group Number :	6
Group Id :	5459271506
Group Maximum Duration :	0
Group Minimum Duration :	0
Show Attended Group? :	No
Edit Attended Group? :	No
Break time:	0
Group Marks:	20
Is this Group for Examiner?:	No

Revisit allowed for group Instructions? :	Yes
Maximum Instruction Time:	0
Minimum Instruction Time:	0

## Arithmetic Ability2

Section Id :	5459271506
Section Number :	1
Section type :	Online
Mandatory or Optional:	Mandatory
Number of Questions:	20
Number of Questions to be attempted:	20
Section Marks:	20

Sub-Section Number:	1
Sub-Section Id:	5459271806
Question Shuffling Allowed :	Yes

Question Number : 101 Question Id : 54592730401 Question Type : MCQ Option Shuffling : Yes  
Correct Marks : 1 Wrong Marks : 0.25

Two persons earns in the ratio 4 : 7. If both earns Rs. 3000 more, the ratio of earning will be 2 : 3. Find the sum of their earning (in rupees).

Options :

1. ✖ 13200
2. ✔ 16500
3. ✖ 19800
4. ✖ 15400

Question Number : 101 Question Id : 54592730401 Question Type : MCQ Option Shuffling : Yes  
Correct Marks : 1 Wrong Marks : 0.25

दो व्यक्ति 4 : 7 के अनुपात में कमाते हैं। यदि दोनों ने रुपये 3000 अधिक कमाए, तो कमाई का अनुपात 2 : 3 होगा। उनकी कमाई का योग (रुपये में) ज्ञात करें।

Options :

1. ✖ 13200



2. ✓ 16500

3. ✗ 19800

4. ✗ 15400

Question Number : 102 Question Id : 54592730402 Question Type : MCQ Option Shuffling : Yes  
Correct Marks : 1 Wrong Marks : 0.25

Four numbers  $(k - 3)$ ,  $(k - 1)$ ,  $(k + 1)$  and  $(k + 5)$  are in proportion. Find the value of  $(k^2 + k)$ .

Options :

1. ✓ 56

2. ✗ 72

3. ✗ 30

4. ✗ 110

Question Number : 102 Question Id : 54592730402 Question Type : MCQ Option Shuffling : Yes  
Correct Marks : 1 Wrong Marks : 0.25

चार संख्याएँ  $(k - 3)$ ,  $(k - 1)$ ,  $(k + 1)$  और  $(k + 5)$  समानुपात में हैं।  $(k^2 + k)$  का मान ज्ञात कीजिए।

Options :

1. ✓ 56

2. ✗ 72

3. ✗ 30

4. ✗ 110

Question Number : 103 Question Id : 54592730403 Question Type : MCQ Option Shuffling : Yes  
Correct Marks : 1 Wrong Marks : 0.25

At the rate of 9% per annum at simple interest a person obtained Rs. 864 as interest in four years. How much more interest could he get if the rate of interest was 13% per annum (in rupees)?

Options :

1. ✗ 248

2. ✗ 656

3. ✓ 384

4. ✗ 548

Question Number : 103 Question Id : 54592730403 Question Type : MCQ Option Shuffling : Yes

Correct Marks : 1 Wrong Marks : 0.25

साधारण ब्याज पर 9% प्रति वर्ष की दर से एक व्यक्ति ने चार वर्षों में ब्याज के रूप में रुपये 864 प्राप्त किए। यदि ब्याज की दर 13% प्रति वर्ष होती, तो उसे कितना और अधिक ब्याज (रुपये में) मिलता ?

Options :

1. ✗ 248

2. ✗ 656

3. ✓ 384

4. ✗ 548

Question Number : 104 Question Id : 54592730404 Question Type : MCQ Option Shuffling : Yes

Correct Marks : 1 Wrong Marks : 0.25

Rs. 7000 amounted to Rs. 8780.8 in 2 years at a certain rate of compound interest. In what time will Rs. 9000 amounted to Rs. 12240 at the same rate of simple interest (in years)?

Options :

1. ✗ 2

2. ✓ 3

3. ✗ 1.5

4. ✗ 2.5

Question Number : 104 Question Id : 54592730404 Question Type : MCQ Option Shuffling : Yes

Correct Marks : 1 Wrong Marks : 0.25

चक्रवृद्धि ब्याज की एक निश्चित दर पर 2 वर्षों में 7000 रुपये की राशि 8780.8 रुपये हो जाती है। साधारण ब्याज की समान दर से कितने समय में (वर्षों में) 9000 रुपये की राशि 12240 रुपये हो जाएगी?

Options :

1. ✖ 2
2. ✔ 3
3. ✖ 1.5
4. ✖ 2.5

Question Number : 105 Question Id : 54592730405 Question Type : MCQ Option Shuffling : Yes

Correct Marks : 1 Wrong Marks : 0.25

Sameer borrowed Rs.14000 at 15% per annum and Rs. 18000 at 11% per annum at simple interest. The total interest paid by him at the end of the two years will be (in rupees).

Options :

1. ✔ 8160
2. ✖ 7240
3. ✖ 7600
4. ✖ 7920

Question Number : 105 Question Id : 54592730405 Question Type : MCQ Option Shuffling : Yes

Correct Marks : 1 Wrong Marks : 0.25

समीर ने साधारण ब्याज पर 15% प्रति वर्ष की दर से 14000 रुपये और 11% प्रति वर्ष की दर से 18000 रुपये का उधार लिया। दो वर्षों के अंत में उसके द्वारा भुगतान किया गया कुल ब्याज (रुपये में) होगा।

Options :

1. ✔ 8160
2. ✖ 7240

3. ✖ 7600

4. ✖ 7920

Question Number : 106 Question Id : 54592730406 Question Type : MCQ Option Shuffling : Yes  
Correct Marks : 1 Wrong Marks : 0.25

The length of a train and that of a platform are equal. If with a speed of 108 km/hr the train crosses the platform in one minute. Then the length of the train (in metres) is:

Options :

1. ✖ 450

2. ✖ 2700

3. ✔ 900

4. ✖ 1800

Question Number : 106 Question Id : 54592730406 Question Type : MCQ Option Shuffling : Yes  
Correct Marks : 1 Wrong Marks : 0.25

एक रेलगाड़ी तथा प्लेटफॉर्म की लम्बाइयाँ समान हैं। रेलगाड़ी 108 किमी/घंटा की गति से चलते हुये प्लेटफॉर्म को एक मिनट में पार कर लेती है। बताये रेलगाड़ी की कुल लम्बाइ (मीटर में) कितनी है।

Options :

1. ✖ 450

2. ✖ 2700

3. ✔ 900

4. ✖ 1800

Question Number : 107 Question Id : 54592730407 Question Type : MCQ Option Shuffling : Yes  
Correct Marks : 1 Wrong Marks : 0.25

By walking at  $\frac{3}{4}$  of his usual speed Bholu reaches his office 20 minutes later than his usual time. The usual time taken by him to reach his office is:

Options :

1. ✖ 75 min

2. ✓ 60 min

3. ✗ 40 min

4. ✗ 30 min

Question Number : 107 Question Id : 54592730407 Question Type : MCQ Option Shuffling : Yes

Correct Marks : 1 Wrong Marks : 0.25

सामान्य गति के  $\frac{3}{4}$  भाग से यात्रा करने पर भोलू नियत समय से 20 मिनट लेट हो जाता है। ऑफिस पहुँचने का उसका नियत समय क्या है?

Options :

1. ✗ 75 मिनट

2. ✓ 60 मिनट

3. ✗ 40 मिनट

4. ✗ 30 मिनट

Question Number : 108 Question Id : 54592730408 Question Type : MCQ Option Shuffling : Yes

Correct Marks : 1 Wrong Marks : 0.25

A Express train covers a distance of 3584 km in 2 days 8 hours. If it covers 1440 km on the first day and 1608 km on the second day, by how much does the average speed of the train or the remaining part of the journey differ from that for the entire journey?

Options :

1. ✓ 3 km/hrs

2. ✗ 4 km/hrs

3. ✗ 10 km/hrs

4. ✗ 2 km/hrs

Question Number : 108 Question Id : 54592730408 Question Type : MCQ Option Shuffling : Yes

Correct Marks : 1 Wrong Marks : 0.25

एक एक्सप्रेस रेलगाड़ी 3584 किमी. की दूरी को 2 दिन 8 घंटे में तय करती है। यदि यह पहले दिन 1440 किमी. तथा दूसरे दिन 1608 किमी. की दूरी तय करती है। बताये रेलगाड़ी की मूल औसत गति तथा तीसरे दिन की शेष यात्रा की औसत गति में कितना अंतर होगा?

Options :

1. ✓ 3 किमी/ घंटा
2. ✗ 4 किमी/ घंटा
3. ✗ 10 किमी/ घंटा
4. ✗ 2 किमी/ घंटा

Question Number : 109 Question Id : 54592730409 Question Type : MCQ Option Shuffling : Yes

Correct Marks : 1 Wrong Marks : 0.25

40 men can finish a piece of work in 40 days. They started the work together, but after every 10 days, 5 men leave the work, the whole work will finish in?

Options :

1. ✗ 54 days
2. ✗ 56 days
3. ✗  $42\frac{2}{3}$  days
4. ✓  $56\frac{2}{3}$  days

Question Number : 109 Question Id : 54592730409 Question Type : MCQ Option Shuffling : Yes

Correct Marks : 1 Wrong Marks : 0.25

40 व्यक्ति एक कार्य को 40 दिन में समाप्त कर सकते हैं। उन्होंने कार्य एक साथ मिलकर शुरू किया था, परंतु प्रत्येक 10 दिन बाद 5 व्यक्ति कार्य छोड़कर जाते हैं, तो कार्य को समाप्त होने में कितना समय लगेगा?

Options :

1. ✖ 54 दिन
2. ✖ 56 दिन
3. ✖  $42\frac{2}{3}$  दिन
4. ✔  $56\frac{2}{3}$  दिन

Question Number : 110 Question Id : 54592730410 Question Type : MCQ Option Shuffling : Yes  
Correct Marks : 1 Wrong Marks : 0.25

A is 20% more efficient than B. They both together complete the work in 20 days. In how many days B will alone complete the work?

Options :

1. ✔ 44 days
2. ✖ 48 days
3. ✖ 24 days
4. ✖ 12 days

Question Number : 110 Question Id : 54592730410 Question Type : MCQ Option Shuffling : Yes  
Correct Marks : 1 Wrong Marks : 0.25

A, B की तुलना में 20% अधिक कार्यकुशल है। दोनों मिलकर 20 दिनों में काम पूरा करते हैं। B कितने दिनों में अकेले काम पूरा करेगा?

Options :

1. ✔ 44 दिन

2. ✖ 48 दिन

3. ✖ 24 दिन

4. ✖ 12 दिन

Question Number : 111 Question Id : 54592730411 Question Type : MCQ Option Shuffling : Yes

Correct Marks : 1 Wrong Marks : 0.25

A can complete a work in 10 days. B can complete the same work in 15 days. If B starts the work and A joins him after 5 days, then in how many days will the work be completed?

Options :

1. ✖ 6

2. ✖ 8

3. ✖ 7

4. ✔ 9

Question Number : 111 Question Id : 54592730411 Question Type : MCQ Option Shuffling : Yes

Correct Marks : 1 Wrong Marks : 0.25

A किसी कार्य को 10 दिनों में पूरा कर सकता है। B उसी कार्य को 15 दिनों में पूरा कर सकता है। यदि B काम शुरू करता है और A, 5 दिनों के बाद उससे जुड़ता है, तो कार्य कितने दिनों में पूरा होगा?

Options :

1. ✖ 6

2. ✖ 8

3. ✖ 7

4. ✔ 9

Question Number : 112 Question Id : 54592730412 Question Type : MCQ Option Shuffling : Yes

Correct Marks : 1 Wrong Marks : 0.25

If the diagonal and the area of a rectangle are 29 m and 420 square meter respectively, what is the length of the rectangle?



Options :

1. ✖ 25 meter
2. ✖ 18 meter
3. ✖ 22 meter
4. ✔ 21 meter

Question Number : 112 Question Id : 54592730412 Question Type : MCQ Option Shuffling : Yes

Correct Marks : 1 Wrong Marks : 0.25

एक आयत का विकर्ण और क्षेत्रफल क्रमशः 29 मीटर और 420 वर्ग मीटर है, तो आयत की लंबाई कितनी है?

Options :

1. ✖ 25 मीटर
2. ✖ 18 मीटर
3. ✖ 22 मीटर
4. ✔ 21 मीटर

Question Number : 113 Question Id : 54592730413 Question Type : MCQ Option Shuffling : Yes

Correct Marks : 1 Wrong Marks : 0.25

The ratio of volumes of two cubes is 343 : 729. What is the ratio of their total surface areas?

Options :

1. ✖ 7 : 81
2. ✖ 36 : 49
3. ✖ 64 : 125
4. ✔ 49 : 81

Question Number : 113 Question Id : 54592730413 Question Type : MCQ Option Shuffling : Yes

Correct Marks : 1 Wrong Marks : 0.25

दो घनों के आयतन का अनुपात 343 : 729 है। उनके कुल सतह क्षेत्रफलों का अनुपात है:

Options :

1. ✖ 7 : 81
2. ✖ 36 : 49
3. ✖ 64 : 125
4. ✔ 49 : 81

Question Number : 114 Question Id : 54592730414 Question Type : MCQ Option Shuffling : Yes  
Correct Marks : 1 Wrong Marks : 0.25

Four equal sized maximum circular pages are cut off from a square paper sheet of area 3136 square cm. The circumference of each plate is:

Options :

1. ✔ 88 cm
2. ✖ 84 cm
3. ✖ 86 cm
4. ✖ 89 cm

Question Number : 114 Question Id : 54592730414 Question Type : MCQ Option Shuffling : Yes  
Correct Marks : 1 Wrong Marks : 0.25

चार बराबर आकार की अधिकतम गोलाकार पेजो को 3136 वर्ग सेमी के वर्गाकार पेपर शीट से काटकर निकाला जाता है। प्रत्येक प्लेट की परिधि है:

Options :

1. ✔ 88 सेमी
2. ✖ 84 सेमी
3. ✖ 86 सेमी
4. ✖ 89 सेमी

Question Number : 115 Question Id : 54592730415 Question Type : MCQ Option Shuffling : Yes  
Correct Marks : 1 Wrong Marks : 0.25

Refer the below data table and answer the following question.

	Weight (kg)	Height (m)
Archita	67	1.63
Arpana	67	1.51
Arpita	57	1.56
Arundhati	73	1.59

Who has the least weight?

Options :

1. ✖ Archita
2. ✖ Arpana
3. ✔ Arpita
4. ✖ Arundhati

Question Number : 115 Question Id : 54592730415 Question Type : MCQ Option Shuffling : Yes

Correct Marks : 1 Wrong Marks : 0.25

नीचे दिये गए डेटा तालिका के आधार पर निम्नलिखित प्रश्न का उत्तर दें।

	वजन (किलोग्राम)	ऊँचाई (मीटर)
अर्चिता	67	1.63
अर्पणा	67	1.51
अर्पिता	57	1.56
अरुन्धती	73	1.59

सबसे कम वजन किसका हैं?

Options :

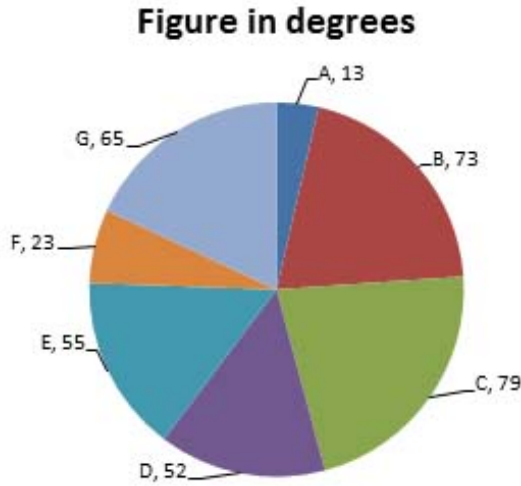
1. ✖ अर्चिता
2. ✖ अर्पणा
3. ✔ अर्पिता

## 4. \* अरुन्धती

Question Number : 116 Question Id : 54592730416 Question Type : MCQ Option Shuffling : Yes

Correct Marks : 1 Wrong Marks : 0.25

The following pie-chart gives the break-up (in degrees) of land with various continents. Answer the questions on the basis of the pie-chart given.



If the total area is 180 million sq. miles, what will be the area under E and G?

Options :

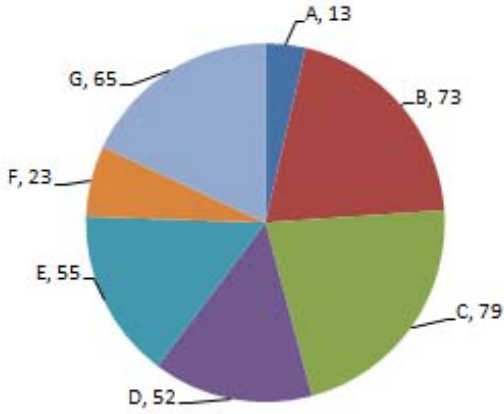
1. \* 56 million sq.miles
2. \* 50 million sq. miles
3. ✓ 60 million sq.miles
4. \* 46 million sq.miles

Question Number : 116 Question Id : 54592730416 Question Type : MCQ Option Shuffling : Yes

Correct Marks : 1 Wrong Marks : 0.25

निम्नलिखित पाई-चार्ट विभिन्न महाद्वीपों के साथ भूमि के वितरण (डिग्री में) दर्शाता है। दिए गए पाई-चार्ट के आधार पर प्रश्नों के उत्तर दें।

आंकड़े डिग्री में



यदि कुल क्षेत्रफल 180 मिलियन वर्ग मील है तो E तथा G के अंतर्गत आने वाला क्षेत्रफल कितना होगा?

Options :

1. ✘ 56 मिलियन वर्ग मील
2. ✘ 50 मिलियन वर्ग मील
3. ✔ 60 मिलियन वर्ग मील
4. ✘ 46 मिलियन वर्ग मील

Question Number : 117 Question Id : 54592730417 Question Type : MCQ Option Shuffling : Yes

Correct Marks : 1 Wrong Marks : 0.25

Study the following table carefully to answer these questions:

Populations (in thousands) of Six States over the years						
Years	STATE					
	A	B	C	D	E	F
1992	125	210	85	150	98	138
1995	135	225	89	170	110	152
1998	142	240	93	180	130	160
2001	148	250	99	215	140	175
2004	155	270	105	230	145	190
2007	160	290	110	240	160	198

Which state had the highest percent rise in population from 2001 to 2004?

Options :

1. ✖ C

2. ✖ B

3. ✖ D

4. ✔ F

Question Number : 117 Question Id : 54592730417 Question Type : MCQ Option Shuffling : Yes

Correct Marks : 1 Wrong Marks : 0.25

निम्नलिखित प्रश्नों का उत्तर देने के लिए सावधानीपूर्वक निम्नलिखित तालिका का अध्ययन करें।

दिए गए वर्षों में 6 राज्यों की जनसंख्या (हजार में)						
वर्ष	राज्य					
	A	B	C	D	E	F
1992	125	210	85	150	98	138
1995	135	225	89	170	110	152
1998	142	240	93	180	130	160
2001	148	250	99	215	140	175
2004	155	270	105	230	145	190
2007	160	290	110	240	160	198

2001 से 2004 तक जनसंख्या में किस राज्य की सर्वोच्च वृद्धि हुई?

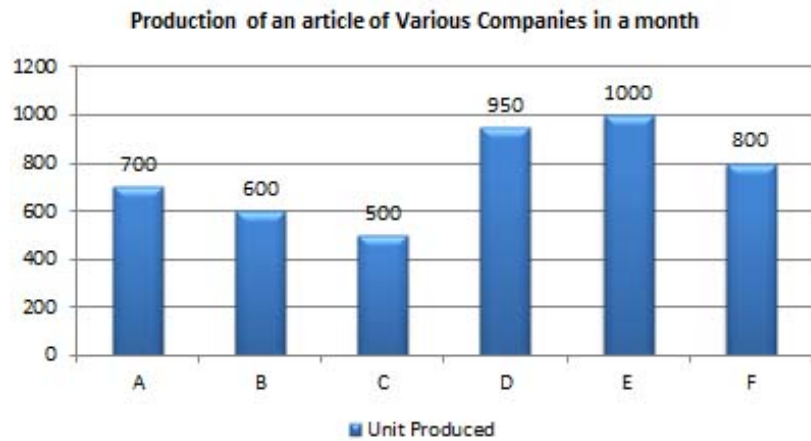
Options :

1. ✘ C
2. ✘ B
3. ✘ D
4. ✔ F

Question Number : 118 Question Id : 54592730418 Question Type : MCQ Option Shuffling : Yes

Correct Marks : 1 Wrong Marks : 0.25

Study the following graph carefully to answer these questions:



What is the approximate average number of article produced by all the Companies together?

Options :

1. ✘ 725

2. ✔ 758

3. ✘ 720

4. ✘ 900

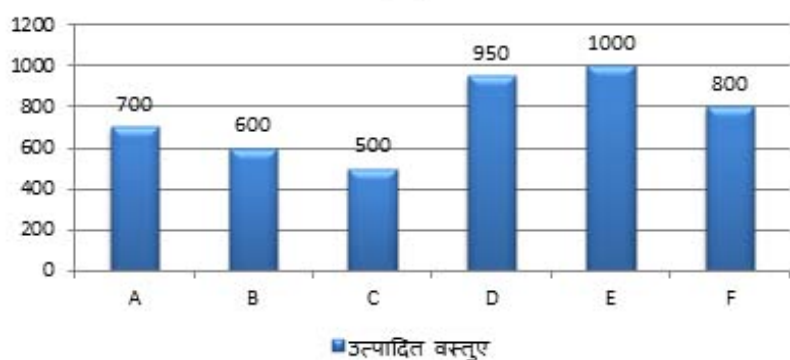
Question Number : 118 Question Id : 54592730418 Question Type : MCQ Option Shuffling : Yes

Correct Marks : 1 Wrong Marks : 0.25



निम्नलिखित प्रश्नों का उत्तर देने के लिए सावधानीपूर्वक निम्नलिखित ग्राफ का अध्ययन करें।

किसी महीने में विभिन्न कंपनियों में किसी वस्तु का उत्पादन



सभी कंपनियों के द्वारा कुल उत्पादन का लग-भग औसत क्या है?

Options :

1. ✘ 725

2. ✔ 758

3. ✘ 720

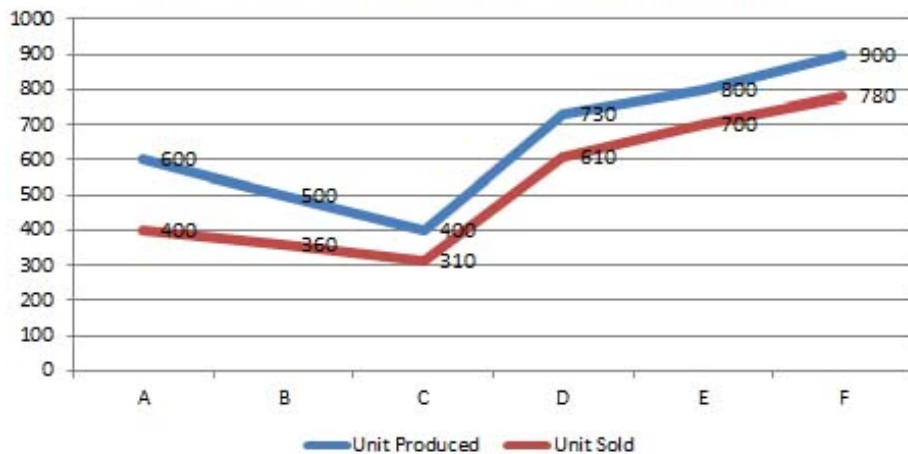
4. ✘ 900

Question Number : 119 Question Id : 54592730419 Question Type : MCQ Option Shuffling : Yes

Correct Marks : 1 Wrong Marks : 0.25

Study the following graph carefully to answer these questions:

Production and sale of Mobile of Various Companies in a month



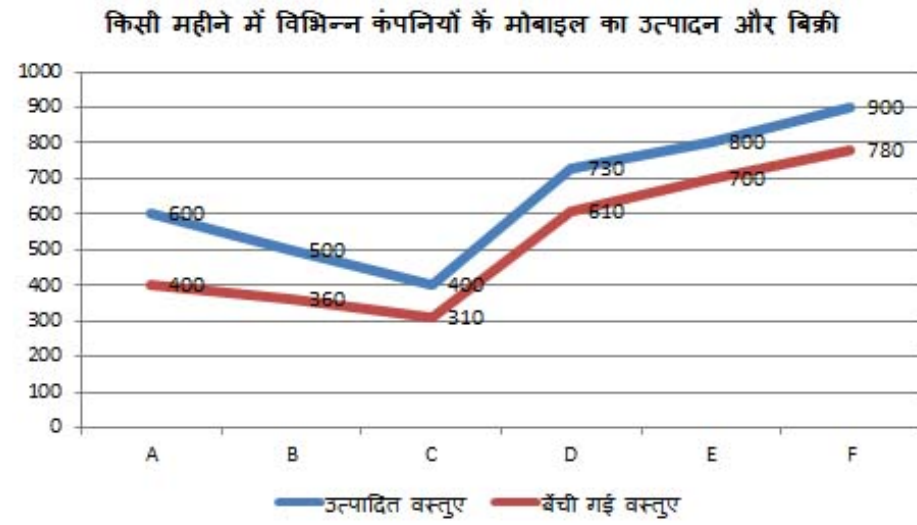
The total mobiles sold by Companies D, E and F together are approximately what percent of the total mobiles produced by D, E and F together?

Options :

1. ✘ 28 percent
2. ✘ 72 percent
3. ✘ 75 percent
4. ✔ 86 percent

Question Number : 119 Question Id : 54592730419 Question Type : MCQ Option Shuffling : Yes  
Correct Marks : 1 Wrong Marks : 0.25

निम्नलिखित प्रश्नों का उत्तर देने के लिए सावधानीपूर्वक निम्नलिखित ग्राफ का अध्ययन करें:



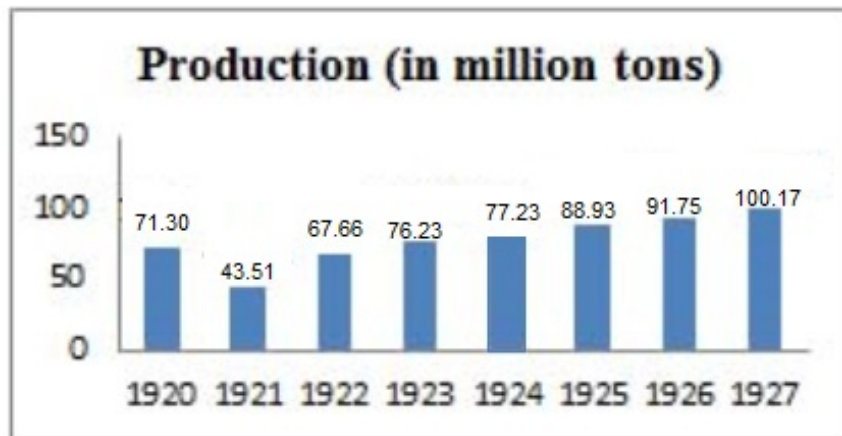
कंपनी D, E और F द्वारा बेची गई कुल मोबाइल , D, E और F द्वारा उत्पादित कुल मोबाइल का लगभग कितना प्रतिशत हैं?

Options :

1. ✖ 28 प्रतिशत
2. ✖ 72 प्रतिशत
3. ✖ 75 प्रतिशत
4. ✔ 86 प्रतिशत

Question Number : 120 Question Id : 54592730420 Question Type : MCQ Option Shuffling : Yes  
Correct Marks : 1 Wrong Marks : 0.25

The following table shows the world production of steel in 1920-1927. Study the table and answer the question.



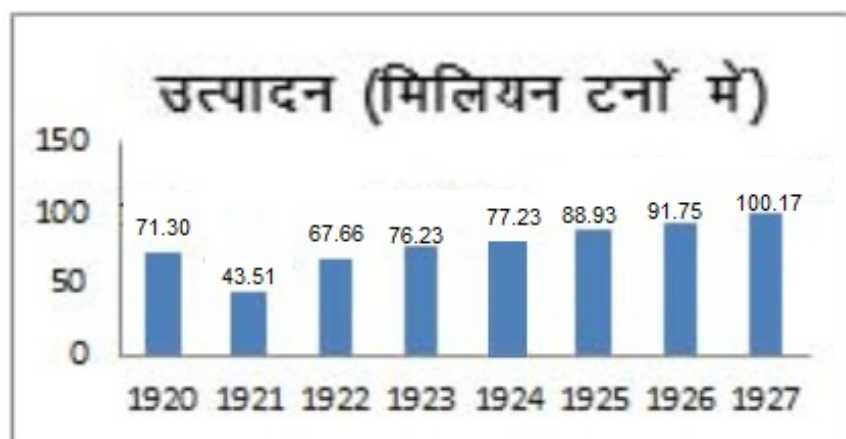
The difference of the production of steel in the year 1923 and 1924 is  $x\%$  of year 1927. Then the value of  $x$  approximately?

Options :

1. \* 0.1
2. \* 0.01
3. \* 0.001
4. ✓ 1

Question Number : 120 Question Id : 54592730420 Question Type : MCQ Option Shuffling : Yes  
Correct Marks : 1 Wrong Marks : 0.25

निम्नलिखित तालिका में 1920-1927 तक विश्व में इस्पात का उत्पादन दर्शाया गया है। तालिका का अध्ययन करें और प्रश्नों का उत्तर दें।



वर्ष 1923 और 1924 में इस्पात के उत्पादन का अंतर वर्ष 1927 का  $x\%$  है।  $x$  का मान लगभग कितना है?

Options :

1. \* 0.1

2. \* 0.01

3. \* 0.001

4. ✓ 1

## General English1

Group Number :	7
Group Id :	5459271507
Group Maximum Duration :	0
Group Minimum Duration :	0
Show Attended Group? :	No
Edit Attended Group? :	No
Break time:	0
Group Marks:	20
Is this Group for Examiner? :	No
Revisit allowed for group Instructions? :	Yes
Maximum Instruction Time:	0

## General English1

Section Id :	5459271507
Section Number :	1
Section type :	Online
Mandatory or Optional:	Mandatory
Number of Questions:	20
Number of Questions to be attempted:	20
Section Marks:	20

Sub-Section Number:	1
Sub-Section Id:	5459271807
Question Shuffling Allowed :	Yes

Question Number : 121 Question Id : 54592730421 Question Type : MCQ Option Shuffling : Yes  
Correct Marks : 1 Wrong Marks : 0.25

Identify the segment in the sentence which contains the grammatical error from the given options.

President John F. Kennedy deliver a stirring speech to Congress praising the importance of sending an astronaut to the moon.

Options :

1. ✖ President John F. Kennedy
2. ✔ deliver a stirring speech
3. ✖ praising the importance of sending
4. ✖ an astronaut to the moon.

Question Number : 121 Question Id : 54592730421 Question Type : MCQ Option Shuffling : Yes  
Correct Marks : 1 Wrong Marks : 0.25

Identify the segment in the sentence which contains the grammatical error from the given options.

President John F. Kennedy deliver a stirring speech to Congress praising the importance of sending an astronaut to the moon.

Options :

1. ✖ President John F. Kennedy
2. ✔ deliver a stirring speech
3. ✖ praising the importance of sending
4. ✖ an astronaut to the moon.

Question Number : 122 Question Id : 54592730422 Question Type : MCQ Option Shuffling : Yes  
Correct Marks : 1 Wrong Marks : 0.25

Identify the segment in the sentence which contains the grammatical error from the given options.

Visitors to the Kennedy Space Center can learned about the progress and failures of space exploration.

Options :

1. ✖ Visitors to the Kennedy Space Center
2. ✔ can learned about the
3. ✖ progress and failures
4. ✖ of space exploration.

Question Number : 122 Question Id : 54592730422 Question Type : MCQ Option Shuffling : Yes  
Correct Marks : 1 Wrong Marks : 0.25

Identify the segment in the sentence which contains the grammatical error from the given options.

Visitors to the Kennedy Space Center can learned about the progress and failures of space exploration.

Options :

1. ✖ Visitors to the Kennedy Space Center
2. ✔ can learned about the
3. ✖ progress and failures
4. ✖ of space exploration.

Question Number : 123 Question Id : 54592730423 Question Type : MCQ Option Shuffling : Yes

Correct Marks : 1 Wrong Marks : 0.25

Identify the segment in the sentence which contains the grammatical error from the given options.

A lunar eclipse occurs when the sun, Earth, and the moon align so that Earth's shadow falls above the lunar disk.

Options :

1. ✖ A lunar eclipse occurs
2. ✖ when the sun, Earth, and the moon
3. ✖ align so that Earth's shadow
4. ✔ falls above the lunar disk.

Question Number : 123 Question Id : 54592730423 Question Type : MCQ Option Shuffling : Yes

Correct Marks : 1 Wrong Marks : 0.25



Identify the segment in the sentence which contains the grammatical error from the given options.

A lunar eclipse occurs when the sun, Earth, and the moon align so that Earth's shadow falls above the lunar disk.

Options :

1. ✖ A lunar eclipse occurs
2. ✖ when the sun, Earth, and the moon
3. ✖ align so that Earth's shadow
4. ✔ falls above the lunar disk.

Question Number : 124 Question Id : 54592730424 Question Type : MCQ Option Shuffling : Yes

Correct Marks : 1 Wrong Marks : 0.25

Identify the segment in the sentence which contains the grammatical error from the given options.

One digger in illegal bore wells freely admitted to me that he had paid a bribe to get a permit for a deep well-after he had already dug it.

Options :

1. ✔ One digger in illegal bore wells
2. ✖ freely admitted to me that
3. ✖ he had paid a bribe to get a permit
4. ✖ for a deep well

Question Number : 124 Question Id : 54592730424 Question Type : MCQ Option Shuffling : Yes

Correct Marks : 1 Wrong Marks : 0.25

Identify the segment in the sentence which contains the grammatical error from the given options.

One digger in illegal bore wells freely admitted to me that he had paid a bribe to get a permit for a deep well-after he had already dug it.

Options :

1. ✓ One digger in illegal bore wells
2. ✗ freely admitted to me that
3. ✗ he had paid a bribe to get a permit
4. ✗ for a deep well

Question Number : 125 Question Id : 54592730425 Question Type : MCQ Option Shuffling : Yes  
Correct Marks : 1 Wrong Marks : 0.25

Identify the segment in the sentence which contains the grammatical error from the given options.

If you're not actually studying the affect of emotions on others, we're missing an important social aspect.

Options :

1. ✗ If you're not actually studying
2. ✓ the affect of emotions on others
3. ✗ we're missing an
4. ✗ important social aspect.

Question Number : 125 Question Id : 54592730425 Question Type : MCQ Option Shuffling : Yes  
Correct Marks : 1 Wrong Marks : 0.25

Identify the segment in the sentence which contains the grammatical error from the given options.

If you're not actually studying the affect of emotions on others, we're missing an important social aspect.

Options :

1. ✖ If you're not actually studying
2. ✔ the affect of emotions on others
3. ✖ we're missing an
4. ✖ important social aspect.

Question Number : 126 Question Id : 54592730426 Question Type : MCQ Option Shuffling : Yes

Correct Marks : 1 Wrong Marks : 0.25

Select the most appropriate option to substitute the underlined segment in the given sentence. If there is no need to substitute it, select option No substitution required.

In October 1997, tourists near San Francisco, witnessed two killer whales attacked a great white shark and consumed its liver.

Note: For this question, discrepancy is found in question/answer. So, this question is ignored for all candidates.

Options :

1. attack a great white shark and consume
2. attacked a great white shark and consume
3. attack a great white shark and consumed
4. No substitution required

Question Number : 126 Question Id : 54592730426 Question Type : MCQ Option Shuffling : Yes

Correct Marks : 1 Wrong Marks : 0.25

Select the most appropriate option to substitute the underlined segment in the given sentence. If there is no need to substitute it, select option No substitution required.

In October 1997, tourists near San Francisco, witnessed two killer whales attacked a great white shark and consumed its liver.

Note: For this question, discrepancy is found in question/answer. So, this question is ignored for all candidates.

Options :

1. attack a great white shark and consume
2. attacked a great white shark and consume
3. attack a great white shark and consumed
4. No substitution required

Question Number : 127 Question Id : 54592730427 Question Type : MCQ Option Shuffling : Yes

Correct Marks : 1 Wrong Marks : 0.25

Select the most appropriate option to substitute the underlined segment in the given sentence. If there is no need to substitute it, select option No substitution required.

Its like that orcas targeted shark livers because they're high-fat and delicious.

Options :

1. ✖ Its like that orcas target
2. ✔ It's likely that orcas target
3. ✖ It's likely that orcas targeted
4. ✖ No substitution required

Question Number : 127 Question Id : 54592730427 Question Type : MCQ Option Shuffling : Yes  
Correct Marks : 1 Wrong Marks : 0.25

Select the most appropriate option to substitute the underlined segment in the given sentence. If there is no need to substitute it, select option No substitution required.

Its like that orcas targeted shark livers because they're high-fat and delicious.

Options :

1. ✖ Its like that orcas target
2. ✔ It's likely that orcas target
3. ✖ It's likely that orcas targeted
4. ✖ No substitution required

Question Number : 128 Question Id : 54592730428 Question Type : MCQ Option Shuffling : Yes  
Correct Marks : 1 Wrong Marks : 0.25

Select the most appropriate option to substitute the underlined segment in the given sentence. If there is no need to substitute it, select option No substitution required.

We all experience the constant drama of the new and the constant sorrow of the losing of what we had left behind.

Options :

1. ✖ the loss for what we've leave behind
2. ✖ the losing of what we had leaved behind
3. ✔ the loss of what we've left behind
4. ✖ No substitution required

Question Number : 128 Question Id : 54592730428 Question Type : MCQ Option Shuffling : Yes  
Correct Marks : 1 Wrong Marks : 0.25

Select the most appropriate option to substitute the underlined segment in the given sentence. If there is no need to substitute it, select option No substitution required.

We all experience the constant drama of the new and the constant sorrow of the losing of what we had left behind.

Options :

1. ✖ the loss for what we've leave behind
2. ✖ the losing of what we had leaved behind
3. ✔ the loss of what we've left behind
4. ✖ No substitution required

Question Number : 129 Question Id : 54592730429 Question Type : MCQ Option Shuffling : Yes  
Correct Marks : 1 Wrong Marks : 0.25

Select the most appropriate option to substitute the underlined segment in the given sentence. If there is no need to substitute it, select option No substitution required.

The orca population off South Africa is less well studied than the one off California, in part because humans rarely encounter them.

Options :

1. ✖ are lesser well studied then the one
2. ✖ is less well study than the one
3. ✖ are less well studied than
4. ✔ No substitution required

Question Number : 129 Question Id : 54592730429 Question Type : MCQ Option Shuffling : Yes  
Correct Marks : 1 Wrong Marks : 0.25

Select the most appropriate option to substitute the underlined segment in the given sentence. If there is no need to substitute it, select option No substitution required.

The orca population off South Africa is less well studied than the one off California, in part because humans rarely encounter them.

Options :

1. ✖ are lesser well studied then the one
2. ✖ is less well study than the one
3. ✖ are less well studied than
4. ✔ No substitution required

Question Number : 130 Question Id : 54592730430 Question Type : MCQ Option Shuffling : Yes  
Correct Marks : 1 Wrong Marks : 0.25

Select the most appropriate option to substitute the underlined segment in the given sentence. If there is no need to substitute it, select option No substitution required.

To coping with the heats, many cities are planting trees and carving out open spaces.

Options :

1. ✔ To cope with the heat
2. ✖ Coped with the heat
3. ✖ Cope with the heat
4. ✖ No substitution required

Question Number : 130 Question Id : 54592730430 Question Type : MCQ Option Shuffling : Yes  
Correct Marks : 1 Wrong Marks : 0.25

Select the most appropriate option to substitute the underlined segment in the given sentence. If there is no need to substitute it, select option No substitution required.

To coping with the heats, many cities are planting trees and carving out open spaces.

Options :

1. ✓ To cope with the heat
2. ✗ Coped with the heat
3. ✗ Cope with the heat
4. ✗ No substitution required

Question Number : 131 Question Id : 54592730431 Question Type : MCQ Option Shuffling : Yes  
Correct Marks : 1 Wrong Marks : 0.25

Select the most appropriate word to fill in the blank.

The Indian law prohibits the employment \_\_\_\_\_ children in factories but the law is violated several times.

Options :

1. ✓ of
2. ✗ by
3. ✗ at
4. ✗ from

Question Number : 131 Question Id : 54592730431 Question Type : MCQ Option Shuffling : Yes  
Correct Marks : 1 Wrong Marks : 0.25



Select the most appropriate word to fill in the blank.

The Indian law prohibits the employment \_\_\_\_\_ children in factories but the law is violated several times.

Options :

1. ✓ of
2. ✗ by
3. ✗ at
4. ✗ from

Question Number : 132 Question Id : 54592730432 Question Type : MCQ Option Shuffling : Yes  
Correct Marks : 1 Wrong Marks : 0.25

Select the most appropriate word to fill in the blank.

The Indian Space Programme from its very inception \_\_\_\_\_ geared towards national development.

Options :

1. ✗ have been
2. ✓ has been
3. ✗ have
4. ✗ has

Question Number : 132 Question Id : 54592730432 Question Type : MCQ Option Shuffling : Yes  
Correct Marks : 1 Wrong Marks : 0.25

Select the most appropriate word to fill in the blank.

The Indian Space Programme from its very inception \_\_\_\_\_ geared towards national development.

Options :

1. ✖ have been

2. ✔ has been

3. ✖ have

4. ✖ has

Question Number : 133 Question Id : 54592730433 Question Type : MCQ Option Shuffling : Yes

Correct Marks : 1 Wrong Marks : 0.25

Select the most appropriate word to fill in the blank.

The practical gardener knows that both seed and the soil are necessary \_\_\_\_\_ the proper growth of a plant.

Options :

1. ✖ in

2. ✖ by

3. ✔ for

4. ✖ of

Question Number : 133 Question Id : 54592730433 Question Type : MCQ Option Shuffling : Yes

Correct Marks : 1 Wrong Marks : 0.25

Select the most appropriate word to fill in the blank.

The practical gardener knows that both seed and the soil are necessary \_\_\_\_\_ the proper growth of a plant.

Options :

1. ✖ in

2. ✖ by

3. ✔ for

4. ✖ of

Question Number : 134 Question Id : 54592730434 Question Type : MCQ Option Shuffling : Yes

Correct Marks : 1 Wrong Marks : 0.25

Select the most appropriate word to fill in the blank.

The nineteenth century saw the advent of the telegraph, the telephone, and the camera \_\_\_\_\_ the development of the automobile.

Options :

1. ✖ together as
2. ✖ but also
3. ✖ in spite of
4. ✔ along with

Question Number : 134 Question Id : 54592730434 Question Type : MCQ Option Shuffling : Yes

Correct Marks : 1 Wrong Marks : 0.25

Select the most appropriate word to fill in the blank.

The nineteenth century saw the advent of the telegraph, the telephone, and the camera \_\_\_\_\_ the development of the automobile.

Options :

1. ✖ together as
2. ✖ but also
3. ✖ in spite of
4. ✔ along with

Question Number : 135 Question Id : 54592730435 Question Type : MCQ Option Shuffling : Yes

Correct Marks : 1 Wrong Marks : 0.25

Select the most appropriate word to fill in the blank.

The major positive point of the communication revolution is that it has brought people together and \_\_\_\_\_ the feeling of a global village.

Options :

1. ✖ foster
2. ✔ fostered
3. ✖ fostering
4. ✖ has foster

Question Number : 135 Question Id : 54592730435 Question Type : MCQ Option Shuffling : Yes  
Correct Marks : 1 Wrong Marks : 0.25

Select the most appropriate word to fill in the blank.

The major positive point of the communication revolution is that it has brought people together and \_\_\_\_\_ the feeling of a global village.

Options :

1. ✖ foster
2. ✔ fostered
3. ✖ fostering
4. ✖ has foster

Question Number : 136 Question Id : 54592730436 Question Type : MCQ Option Shuffling : Yes  
Correct Marks : 1 Wrong Marks : 0.25

Select the most appropriate word to fill in the blank.

It is only \_\_\_\_\_ initiative that one can take appropriate action to implement ideas, programmes and projects.

Options :

1. ✘ in
2. ✔ through
3. ✘ beside
4. ✘ by

Question Number : 136 Question Id : 54592730436 Question Type : MCQ Option Shuffling : Yes  
Correct Marks : 1 Wrong Marks : 0.25

Select the most appropriate word to fill in the blank.

It is only \_\_\_\_\_ initiative that one can take appropriate action to implement ideas, programmes and projects.

Options :

1. ✘ in
2. ✔ through
3. ✘ beside
4. ✘ by

Question Number : 137 Question Id : 54592730437 Question Type : MCQ Option Shuffling : Yes  
Correct Marks : 1 Wrong Marks : 0.25

Select the most appropriate word to fill in the blank.

\_\_\_\_\_ the world moves away from capital intensive industrial base to knowledge intensive information base, the role of the service sector will increase substantially.

Options :

1. ✖ For
2. ✖ By
3. ✔ As
4. ✖ With

Question Number : 137 Question Id : 54592730437 Question Type : MCQ Option Shuffling : Yes  
Correct Marks : 1 Wrong Marks : 0.25

Select the most appropriate word to fill in the blank.

\_\_\_\_\_ the world moves away from capital intensive industrial base to knowledge intensive information base, the role of the service sector will increase substantially.

Options :

1. ✖ For
2. ✖ By
3. ✔ As
4. ✖ With

Question Number : 138 Question Id : 54592730438 Question Type : MCQ Option Shuffling : Yes  
Correct Marks : 1 Wrong Marks : 0.25

Select the most appropriate word to fill in the blank.

\_\_\_\_\_ being one of the ten most industrialized nations in the world, Indian industry has lagged behind other countries in effective and proper use of inputs.

Options :

1. ✖ Because
2. ✖ But
3. ✖ In spite

## 4. ✓ Despite

Question Number : 138 Question Id : 54592730438 Question Type : MCQ Option Shuffling : Yes

Correct Marks : 1 Wrong Marks : 0.25

Select the most appropriate word to fill in the blank.

\_\_\_\_\_ being one of the ten most industrialized nations in the world, Indian industry has lagged behind other countries in effective and proper use of inputs.

Options :

1. ✗ Because

2. ✗ But

3. ✗ In spite

4. ✓ Despite

Question Number : 139 Question Id : 54592730439 Question Type : MCQ Option Shuffling : Yes

Correct Marks : 1 Wrong Marks : 0.25

Rearrange the following sentences in their correct order to form a meaningful paragraph.

A: For exotic beauty, few flowers rival the ghost orchid.

B: It's long been thought that only one insect, the giant sphinx moth, had a long enough proboscis to pollinate these orchids—but new images and research prove that wrong.

C: As they feed, moths rub against a pollen source and pick up grains they'll transfer to other orchids they visit.

D: These rare orchids have long nectar tubes into which moths stick their tongue like proboscises to reach a sugary reward.

Options :

1. ✓ ADCB

2. ✗ ACBD

3. ✗ ABDC

4. ✗ ACDB

Question Number : 139 Question Id : 54592730439 Question Type : MCQ Option Shuffling : Yes

Correct Marks : 1 Wrong Marks : 0.25



Rearrange the following sentences in their correct order to form a meaningful paragraph.

A: For exotic beauty, few flowers rival the ghost orchid.

B: It's long been thought that only one insect, the giant sphinx moth, had a long enough proboscis to pollinate these orchids—but new images and research prove that wrong.

C: As they feed, moths rub against a pollen source and pick up grains they'll transfer to other orchids they visit.

D: These rare orchids have long nectar tubes into which moths stick their tongue like proboscises to reach a sugary reward.

Options :

1. ✓ ADCB

2. ✗ ACBD

3. ✗ ABDC

4. ✗ ACDB

Question Number : 140 Question Id : 54592730440 Question Type : MCQ Option Shuffling : Yes

Correct Marks : 1 Wrong Marks : 0.25

A sentence has four parts, rearrange the given parts so as to form a meaningful sentence.

A: oversees groundwater extraction has just six employees,

B: enforce the law in this sprawling city.

C: In Bangalore, the governmental department that

D: and thus no earthly way to monitor and

Options :

1. ✖ CDAB

2. ✔ CADB

3. ✖ CBDA

4. ✖ CDBA

Question Number : 140 Question Id : 54592730440 Question Type : MCQ Option Shuffling : Yes

Correct Marks : 1 Wrong Marks : 0.25

A sentence has four parts, rearrange the given parts so as to form a meaningful sentence.

A: oversees groundwater extraction has just six employees,

B: enforce the law in this sprawling city.

C: In Bangalore, the governmental department that

D: and thus no earthly way to monitor and

Options :

1. ✘ CDAB

2. ✔ CADB

3. ✘ CBDA

4. ✘ CDBA

## General English2

Group Number :	8
Group Id :	5459271508
Group Maximum Duration :	0
Group Minimum Duration :	0
Show Attended Group? :	No
Edit Attended Group? :	No
Break time:	0
Group Marks:	20
Is this Group for Examiner?:	No
Revisit allowed for group Instructions? :	Yes
Maximum Instruction Time:	0
Minimum Instruction Time:	0

## General English2

Section Id :	5459271508
Section Number :	1
Section type :	Online
Mandatory or Optional:	Mandatory
Number of Questions:	16
Number of Questions to be attempted:	16
Section Marks:	20

Sub-Section Number:	1
Sub-Section Id:	5459271808
Question Shuffling Allowed :	Yes

Question Number : 141 Question Id : 54592730441 Question Type : MCQ Option Shuffling : Yes  
Correct Marks : 1 Wrong Marks : 0.25

A sentence has four parts, rearrange the given parts so as to form a meaningful sentence.

A: is full of sounds: birds chirping, wind rustling through trees,

B: the ears of both predator and prey are attuned to one another's presence.

C: and insects humming about their business.

D: Even on the quietest days, the world.

Options :

1. ✖ DABC

2. ✖ DBCA

3. ✔ DACB

4. ✖ DCBA

Question Number : 141 Question Id : 54592730441 Question Type : MCQ Option Shuffling : Yes

Correct Marks : 1 Wrong Marks : 0.25

A sentence has four parts, rearrange the given parts so as to form a meaningful sentence.

A: is full of sounds: birds chirping, wind rustling through trees,

B: the ears of both predator and prey are attuned to one another's presence.

C: and insects humming about their business.

D: Even on the quietest days, the world.

Options :

1. ✘ DABC

2. ✘ DBCA

3. ✔ DACB

4. ✘ DCBA

Question Number : 142 Question Id : 54592730442 Question Type : MCQ Option Shuffling : Yes  
Correct Marks : 1 Wrong Marks : 0.25

Select the synonym of the given word.

Erroneous

Options :

1. ✔ Mistaken

2. ✘ Uncommon

3. ✘ Accurate

## 4. ✖ Misfortune

Question Number : 142 Question Id : 54592730442 Question Type : MCQ Option Shuffling : Yes  
Correct Marks : 1 Wrong Marks : 0.25

Select the synonym of the given word.

Erroneous

Options :

1. ✔ Mistaken
2. ✖ Uncommon
3. ✖ Accurate
4. ✖ Misfortune

Question Number : 143 Question Id : 54592730443 Question Type : MCQ Option Shuffling : Yes  
Correct Marks : 1 Wrong Marks : 0.25

Select the antonym of the given word.

Extravagant

Options :

1. ✖ Reckless
2. ✔ Reasonable
3. ✖ Credible
4. ✖ Endearing

Question Number : 143 Question Id : 54592730443 Question Type : MCQ Option Shuffling : Yes  
Correct Marks : 1 Wrong Marks : 0.25

Select the antonym of the given word.

Extravagant

Options :

1. ✖ Reckless
2. ✔ Reasonable
3. ✖ Credible
4. ✖ Endearing

Question Number : 144 Question Id : 54592730444 Question Type : MCQ Option Shuffling : Yes  
Correct Marks : 1 Wrong Marks : 0.25

Select the synonym of the given word.

Hideous

Options :

1. ✖ Improper
2. ✖ Articulate
3. ✔ Unpleasant
4. ✖ Sorrowful

Question Number : 144 Question Id : 54592730444 Question Type : MCQ Option Shuffling : Yes  
Correct Marks : 1 Wrong Marks : 0.25

Select the synonym of the given word.

Hideous

Options :

1. ✖ Improper
2. ✖ Articulate
3. ✔ Unpleasant
4. ✖ Sorrowful

Question Number : 145 Question Id : 54592730445 Question Type : MCQ Option Shuffling : Yes  
Correct Marks : 1 Wrong Marks : 0.25

Select the antonym of the given word.

Sophisticated

Options :

1. ✓ Unrefined
2. ✗ Cynical
3. ✗ Cultivated
4. ✗ Lukewarm

Question Number : 145 Question Id : 54592730445 Question Type : MCQ Option Shuffling : Yes  
Correct Marks : 1 Wrong Marks : 0.25

Select the antonym of the given word.

Sophisticated

Options :

1. ✓ Unrefined
2. ✗ Cynical
3. ✗ Cultivated
4. ✗ Lukewarm

Question Number : 146 Question Id : 54592730446 Question Type : MCQ Option Shuffling : Yes  
Correct Marks : 1 Wrong Marks : 0.25

Select the synonym of the given word.

Venerable

Options :

1. ✗ Conventional
2. ✓ Celebrated
3. ✗ Primitive



## 4. ✖ Dependable

Question Number : 146 Question Id : 54592730446 Question Type : MCQ Option Shuffling : Yes  
Correct Marks : 1 Wrong Marks : 0.25

Select the synonym of the given word.

Venerable

Options :

1. ✖ Conventional
2. ✔ Celebrated
3. ✖ Primitive
4. ✖ Dependable

Question Number : 147 Question Id : 54592730447 Question Type : MCQ Option Shuffling : Yes  
Correct Marks : 1 Wrong Marks : 0.25

Select the wrongly spelt word.

Options :

1. ✔ Zealous
2. ✖ Imagination
3. ✖ Beginning
4. ✖ Increment

Question Number : 147 Question Id : 54592730447 Question Type : MCQ Option Shuffling : Yes  
Correct Marks : 1 Wrong Marks : 0.25

Select the wrongly spelt word.

Options :

1. ✔ Zealous
2. ✖ Imagination
3. ✖ Beginning

## 4. ✖ Increment

Question Number : 148 Question Id : 54592730448 Question Type : MCQ Option Shuffling : Yes  
Correct Marks : 1 Wrong Marks : 0.25

Select the wrongly spelt word.

Options :

1. ✖ Admonish
2. ✔ Dileberate
3. ✖ Pathology
4. ✖ Callous

Question Number : 148 Question Id : 54592730448 Question Type : MCQ Option Shuffling : Yes  
Correct Marks : 1 Wrong Marks : 0.25

Select the wrongly spelt word.

Options :

1. ✖ Admonish
2. ✔ Dileberate
3. ✖ Pathology
4. ✖ Callous

Question Number : 149 Question Id : 54592730449 Question Type : MCQ Option Shuffling : Yes  
Correct Marks : 1 Wrong Marks : 0.25

Select the wrongly spelt word.

Options :

1. ✖ Salutation
2. ✖ Chronicle
3. ✔ Jubilliant
4. ✖ Demean

Question Number : 149 Question Id : 54592730449 Question Type : MCQ Option Shuffling : Yes  
Correct Marks : 1 Wrong Marks : 0.25

Select the wrongly spelt word.

Options :

1. ✖ Salutation
2. ✖ Chronicle
3. ✔ Jubilliant
4. ✖ Demean

Question Number : 150 Question Id : 54592730450 Question Type : MCQ Option Shuffling : Yes  
Correct Marks : 1 Wrong Marks : 0.25

Select the meaning of the given idiom.

Miss the boat

Options :

1. ✔ To lose the opportunity
2. ✖ Fail to board the train
3. ✖ To lose something valuable
4. ✖ To arrive late

Question Number : 150 Question Id : 54592730450 Question Type : MCQ Option Shuffling : Yes  
Correct Marks : 1 Wrong Marks : 0.25

Select the meaning of the given idiom.

Miss the boat

Options :

1. ✔ To lose the opportunity
2. ✖ Fail to board the train
3. ✖ To lose something valuable
4. ✖ To arrive late

Question Number : 151 Question Id : 54592730451 Question Type : MCQ Option Shuffling : Yes  
Correct Marks : 1 Wrong Marks : 0.25

Select the meaning of the given idiom.

Pull yourself together

Options :

1. ✓ To calm oneself down
2. ✗ To loosen the hold
3. ✗ To recollect past memories
4. ✗ To refuse to agree

Question Number : 151 Question Id : 54592730451 Question Type : MCQ Option Shuffling : Yes

Correct Marks : 1 Wrong Marks : 0.25

Select the meaning of the given idiom.

Pull yourself together

Options :

1. ✓ To calm oneself down
2. ✗ To loosen the hold
3. ✗ To recollect past memories
4. ✗ To refuse to agree

Question Number : 152 Question Id : 54592730452 Question Type : MCQ Option Shuffling : Yes

Correct Marks : 1 Wrong Marks : 0.25

Select the meaning of the given idiom.

Back to square one

Options :

1. ✗ To restart a failing business
2. ✗ To return favor
3. ✓ Back to the very first stage

## 4. ✖ To design something new

Question Number : 152 Question Id : 54592730452 Question Type : MCQ Option Shuffling : Yes  
Correct Marks : 1 Wrong Marks : 0.25

Select the meaning of the given idiom.

Back to square one

Options :

1. ✖ To restart a failing business
2. ✖ To return favor
3. ✔ Back to the very first stage
4. ✖ To design something new

Question Number : 153 Question Id : 54592730453 Question Type : MCQ Option Shuffling : Yes  
Correct Marks : 1 Wrong Marks : 0.25

Select the word which means the same as the group of words given.

The practice or art of choosing, cooking, and eating good food.

Options :

1. ✔ Gastronomy
2. ✖ Horticulture
3. ✖ Hydrophobia
4. ✖ Idolatry

Question Number : 153 Question Id : 54592730453 Question Type : MCQ Option Shuffling : Yes  
Correct Marks : 1 Wrong Marks : 0.25

Select the word which means the same as the group of words given.

The practice or art of choosing, cooking, and eating good food.

Options :

1. ✓ **Gastronomy**
2. ✗ **Horticulture**
3. ✗ **Hydrophobia**
4. ✗ **Idolatry**

Question Number : 154 Question Id : 54592730454 Question Type : MCQ Option Shuffling : Yes

Correct Marks : 1 Wrong Marks : 0.25

Select the word which means the same as the group of words given.

Relating to or affecting cattle.

Options :

1. ✗ **Canine**
2. ✓ **Bovine**
3. ✗ **Feline**
4. ✗ **Leonine**

Question Number : 154 Question Id : 54592730454 Question Type : MCQ Option Shuffling : Yes

Correct Marks : 1 Wrong Marks : 0.25

Select the word which means the same as the group of words given.

Relating to or affecting cattle.

Options :

1. ✘ Canine
2. ✔ Bovine
3. ✘ Feline
4. ✘ Leonine

Question Number : 155 Question Id : 54592730455 Question Type : MCQ Option Shuffling : Yes

Correct Marks : 1 Wrong Marks : 0.25

Select the word which means the same as the group of words given.

A passage between rows of seats in a building such as a church or theatre, an aircraft, or train.

Options :

1. ✘ Acronym
2. ✘ Alimony
3. ✔ Aisle
4. ✘ Antidote

Question Number : 155 Question Id : 54592730455 Question Type : MCQ Option Shuffling : Yes

Correct Marks : 1 Wrong Marks : 0.25

Select the word which means the same as the group of words given.

A passage between rows of seats in a building such as a church or theatre, an aircraft, or train.

Options :

1. ✖ Acronym
2. ✖ Alimony
3. ✔ Aisle
4. ✖ Antidote

<b>Sub-Section Number:</b>	2
<b>Sub-Section Id:</b>	5459271809
<b>Question Shuffling Allowed :</b>	Yes

Question Id : 54592730456 Question Type : COMPREHENSION Sub Question Shuffling Allowed : Yes Group Comprehension Questions : No

Question Numbers : (156 to 160)

Question Label : Comprehension



Answer the questions based on the following passage:

Almost every one grows up in the world which is flooded with the mass media e.g. television, advertising, films, videos, billboards, magazines, movies, music, newspaper, and internet. Of all marketing weapons, advertising is renowned for its long lasting impact on viewer's mind, as its exposure is much broader. Advertising is a subset of promotion mix which is one of the 4P's in the marketing mix i.e. product, price, place and promotion. As a promotional strategy, advertising serves as a major tool in creating product awareness in the mind of a potential consumer to take eventual purchase decision. Advertising, sales promotion and public relations are mass-communication tools available to marketers. Advertising through all mediums influence audiences, but television is one of the strongest medium of advertising and due to its mass reach; it can influence not only the individual's attitude, behaviour, life style, exposure and in the long run, even the culture of the country.

The major aim of advertising is to impact on buying behaviour; however, this impact about brand is changed or strengthened frequently in people's memories. Memories about the brand consist of those associations that are related to brand name in consumer mind. These brand cognition influence consideration, evaluation, and finally purchases. The principal aim of consumer behaviour analysis is to explain why consumers act in particular ways under certain circumstances. It tries to determine the factors that influence consumer behaviour, especially the economic, social and psychological aspects. When young people choose advertising information and characters as their role models, they may not only identify with them but also intend to copy them in terms of how they dress and what they are going to buy.

In today's dynamic world, it is almost impossible for advertisers to deliver advertising message and information to buyers without use of advertising. Certainly, this may be because of the globalization and accessibility of hundreds of channels for the viewers of this modern era. Now a days, due to globalized economy, this made available a bulk of marketing stimuli to the modern consumers. More often consumerism describes the way of equating personal happiness, with purchasing material possessions and consumption in excess of one's need.

## Sub questions

Question Number : 156 Question Id : 54592730457 Question Type : MCQ Option Shuffling : Yes

Correct Marks : 1 Wrong Marks : 0.25

As a subset of marketing mix, advertising is associated with one of the following:

Options :

1. ✖ Product
2. ✖ Price
3. ✖ Place
4. ✔ Promotion

Question Number : 157 Question Id : 54592730458 Question Type : MCQ Option Shuffling : Yes

Correct Marks : 1 Wrong Marks : 0.25

The mass communication tools available to the marketers doesn't include:

Options :

1. ✖ Advertising
2. ✔ Television
3. ✖ Sales Promotion
4. ✖ Public Relations

Question Number : 158 Question Id : 54592730459 Question Type : MCQ Option Shuffling : Yes

Correct Marks : 1 Wrong Marks : 0.25

Which of the following points has not been discussed in the passage?

Options :

1. ✖ Marketing Mix
2. ✖ Impact of advertising on buying behavior
3. ✔ Competitive factors in the market
4. ✖ Factors influencing consumer behavior

Question Number : 159 Question Id : 54592730460 Question Type : MCQ Option Shuffling : Yes

Correct Marks : 1 Wrong Marks : 0.25

Consumerism is defined in the passage as:

Options :

1. ✖ Consumerism is a negative outcome of a globalized economy.
2. ✖ Consumerism is an influence on consumer's attitude and behavior.
3. ✖ It is one of the factors in marketing mix.
4. ✔ Equating personal happiness with material possessions.

Question Number : 160 Question Id : 54592730461 Question Type : MCQ Option Shuffling : Yes

Correct Marks : 1 Wrong Marks : 0.25

From among the given options, choose the one which is most nearly the same as the word 'Cognition' as used in the 2nd paragraph, 3rd line:

Options :

1. ✔ Perception
2. ✖ Interference
3. ✖ Distinction
4. ✖ Influence

Question Id : 54592730456 Question Type : COMPREHENSION Sub Question Shuffling Allowed : Yes Group Comprehension Questions : No

Question Numbers : (156 to 160)

Question Label : Comprehension