

Quant Mega Quiz for SSC CGL Tier-II (Solutions)

S1. Ans.(a)

Sol. $M = 0.1 + (0.1)^2 + (0.01)^2$ and $N = 0.3 + (0.03)^2 + (0.003)^2$

$M = 0.1 + 0.01 + 0.0001 = 0.1101$

$N = 0.3 + 0.0009 + 0.000009 = 0.300909$

$M + N = 0.411009$

S2. Ans.(d)

Sol. I. $72 = 2 \times 3 \times 3 \times 2 \times 2 = 2^3 \times 3^2$

Total factor = $(3 + 1) \times (2 + 1) = 12$

II. $\Rightarrow 1 + 3 + 5 + \dots + 39$

this series is in AP

SUM $\Rightarrow \frac{20}{2} [2 \times 1 + 19 \times 2]$

SUM $\Rightarrow 20 \times 20 \Rightarrow 400$

III. Largest two digit no. = 99

And largest two digit prime no. = 97

S3. Ans.(d)

Sol.

$A = 1 - 10 + 3 - 12 + 5 - 14 + 7 + \dots 60^{\text{th}}$ terms

Break above series in two diff. series

$A_1 = 1 + 3 + 5 + 7 + 9 + \dots 30^{\text{th}}$ term and $A_2 = -10 - 12 - 14 - 16 \dots 30^{\text{th}}$ term

Sum $(A_1) = \frac{30}{2} [2 \times 1 + (30 - 1) \times 2]$

Sum $(A_1) = 15 \times [60]$

Sum $(A_1) = 900$

and

Sum $(A_2) = -10 - 12 - 14 - 16 \dots 30^{\text{th}}$ term

$A_2 = - [10 + 12 + 14 + 16 + \dots 30^{\text{th}}$ term]

Sum $(A_2) = -\frac{30}{2} [2 \times 10 + 29 \times 2]$


Sum $(A_2) = -15 \times [78] = -1170$

Hence

$A = A_1 + A_2$

Sum $A = 900 - 1170 \Rightarrow -270$



20 Mock Live Discussion
 LIVE BATCH

ULTIMATE
 Complete Package
SSC CGL Tier-II
QUANT & ENGLISH
 Hindi & English With E book

S4. Ans.(b)

Sol. Given

$$A = \frac{0.216 + 0.008}{0.36 + 0.04 - 0.12} \Rightarrow \frac{(0.6)^3 + (0.2)^3}{(0.6)^2 + (0.2)^2 - 0.6 \times 0.2}$$

as we know $\Rightarrow \frac{a^3 + b^3}{a^2 + b^2 - ab} \Rightarrow \frac{(a + b)(a^2 + b^2 - ab)}{(a^2 + b^2 - ab)}$

Hence, $A \Rightarrow (a + b) \Rightarrow 0.6 + 0.2 \Rightarrow 0.8$

Similarly,

$$B = \frac{(0.9)^3 - (0.3)^3}{(0.9)^2 + (0.3)^2 + 0.9 \times 0.3} \Rightarrow \frac{a^3 - b^3}{a^2 + b^2 + ab}$$

$$\Rightarrow \frac{(a - b)(a^2 + b^2 + ab)}{(a^2 + b^2 + ab)} \left[\begin{array}{l} a^3 - b^3 = (a - b)(a^2 + b^2 + ab) \\ \& \\ a^3 + b^3 = (a + b)(a^2 + b^2 - ab) \end{array} \right]$$

$B \Rightarrow 0.9 - 0.3 = 0.6$

So, $(A^2 + B^2)^2 \Rightarrow [(0.8)^2 + (0.6)^2]^2 = 1$

S5. Ans.(a)

Sol. Let number (N) = 341x + 5 (because N is divided by 341 and leaves 5 remainder)

To find Natural nos. between 1000 to 2000 Which are divided by 341 and leaves 5 remainder, for this below condition has to be satisfy i.e

$$1000 < 341x + 5 < 2000$$

Put the values of x which satisfied above eqn.

only value(x = 3, 4 & 5) are satisfying

So answer = 3 values

S6. Ans.(a)

Sol. To find the sum of natural No. which is divisible by 13 between 100 and 400 ,we should calculate

Sum of no. between 1- 400, divisible by 13 is

$$S_1 \Rightarrow \frac{30}{2} [2 \times 13 + (30 - 1) \times 13] \text{ [sum} = \frac{n}{2} [2 \times a + (n - 1)d] \text{ (as there are } \frac{400}{13} = 30 \text{ numbers)}$$

$$S_1 = 15[26 + 29 \times 13] \dots \dots \dots (1)$$

Sum of no. between 1-100, divisible by 13 is

$$S_2 \Rightarrow \frac{7}{2} [2 \times 13 + 6 \times 13]$$

$$S_2 \Rightarrow 7 \times 13 \times 4 \dots \dots \dots (2)$$

\therefore sum of No. between 100-400 are = $S_1 - S_2 = 5681$

S7. Ans.(a)

Sol.

$$(i) \sqrt{64} + \sqrt{0.0064} + \sqrt{0.81} + \sqrt{0.0081} = 9.07$$

Taking square root of LHS

$$8 + 0.08 + 0.9 + 0.09 = 9.07$$

$$9.07 = 9.07 \checkmark \text{ (LHS=RHS)}$$

$$(ii) \sqrt{(0.010201)} + \sqrt{98.01} + \sqrt{0.25} = 11.51$$

\Rightarrow taking square root of LHS

$$\Rightarrow 0.101 + 9.9 + 0.5$$

$$\Rightarrow 10.501 \neq 11.51 \times \text{(LHS} \neq \text{RHS)}$$

So only (i) correct

S8. Ans.(d)**Sol.** No number except 10080 is divisible by 7.

Further, 80 is divisible by 4.

 $1 + 0 + 0 + 8 + 0 = 9$ is divisible by 3 and 10080 is also divisible by 5.**S9. Ans.(b)****Sol. (i)** $(0.7)^2 + (0.07)^2 + (11.1)^2 > 123.8$ LHS $\Rightarrow 0.49 + 0.0049 + 123.21$ LHS $\Rightarrow 123.70 \neq 123.8$ \times (not correct)**(ii)** $(1.12)^2 + (10.3)^2 + (1.05)^2 > 108.3$ $\Rightarrow [(1+0.12)^2] + [(10+0.3)^2] + [(1+0.05)^2]$ $\Rightarrow [1+0.0144 + 0.24] + [100 + 0.09 + 6] + [1 + 0.0025 + 0.1]$ $\Rightarrow 108.4469 > 108.3$ \checkmark (correct)

So, only (ii) Answer

So, all are true**S10. Ans.(a)****Sol. I.** $\sqrt{12} > \sqrt[3]{16} > \sqrt[4]{24}$ $(12)^{\frac{12}{2}} > (16)^{\frac{12}{3}} > (24)^{\frac{12}{4}}$ $(12)^6 > (16)^4 > (24)^3$ $144 \times 144 \times 144 > 32 \times 32 \times 64 > 24 \times 24 \times 24$ **II.** $\sqrt[3]{25} > \sqrt[4]{32} > \sqrt[6]{48}$ $(25)^{\frac{12}{3}} > (32)^{\frac{12}{4}} > (48)^{\frac{12}{6}}$ $(25)^4 > (32)^3 > (48)^2$ $25 \times 25 \times 25 \times 25 > 32 \times 32 \times 32 > 48 \times 48$ $625 \times 625 > 256 \times 128 > 48 \times 48$ **III.** $\sqrt[4]{9} > \sqrt[3]{15} > \sqrt[6]{24}$ $(9)^{\frac{12}{4}} > (15)^{\frac{12}{3}} > (24)^{\frac{12}{6}}$ $(9)^3 > (15)^4 > (24)^2$ $9 \times 9 \times 9 \neq 15 \times 15 \times 15 \times 15 > 24 \times 24$ Only I and II**S11. Ans.(d)****Sol.****I.** $\left(\frac{0.03}{0.2}\right) + \left(\frac{0.003}{0.02}\right) + \left(\frac{0.0003}{0.002}\right) + \left(\frac{0.00003}{0.0002}\right) = 0.6$ $\frac{3}{2} \times 10^{-1} + \frac{3}{2} \times 10^{-1} + \frac{3}{2} \times 10^{-1} + \frac{3}{2} \times 10^{-1} = 0.6$ $10^{-1} \left[\frac{3}{2} \times 4\right] = 0.6$ $\frac{6}{10} = 0.6$ $0.6 = 0.6$

LHS = RHS

II. $(0.01) + (0.01)^2 + (0.001)^2 = 0.010101$

0.01

0.0001

0.000001

 $\frac{0.010101}{0.010101}$

0.010101

So, Both I & II are correct

SSC CGL TIER-II**PRIME****85+ Total Tests**

- \checkmark 15 Tier II Quant Previous Years' Papers
- \checkmark 14 Tier II English Previous Years' Papers
- \checkmark 20 Advance Maths for TIER-II
- \checkmark 20 SSC CGL Tier II Quantitative Aptitude
- \checkmark 20 SSC CGL Tier II English Language

BILINGUAL

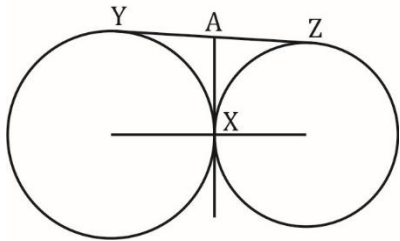
S12. Ans.(a)**Sol.**

$$\frac{1}{(0.1)^2} + \frac{1}{(0.01)^2} + \frac{1}{(0.5)^2} + \frac{1}{(0.05)^2}$$

$$\Rightarrow 100 + 10000 + \frac{100}{25} + \frac{10000}{25}$$

$$\Rightarrow 100 + 10000 + 4 + 400$$

$$\Rightarrow 10504$$

S13. Ans.(d)**Sol.**

According to diagram

YA & AX are tangent to bigger circle

So YA=AX=16

similarly for smaller circle

AZ & AX are tangent

Hence AZ=AX=16

THEREFORE

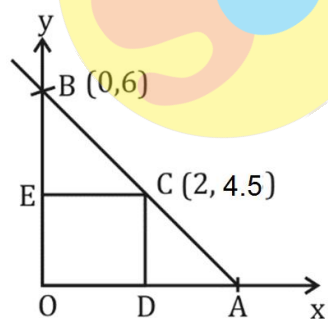
YZ = AY+AZ

YZ = 16+16

YZ = 32

S14. Ans.(b)**Sol.** LCM of 8, 11, 6 and 7 = 1848

Required number of mangoes = 1848 + 5 = 1853

S15. Ans.(c)**Sol.**

$$\frac{x}{8} + \frac{y}{6} = 1$$

OA = 8, OD = 2 unit

Again, OB = 6 unit, OE = 4.5 unit

∴ Required area of ΔBEC and ΔDCA together = area of ΔOAB - area of rectangle ODCE

$$= \left(\frac{1}{2} \times 8 \times 6\right) - (2 \times 4.5) = 24 - 9 = 15 \text{ unit}^2$$

S16. Ans.(c)

Sol. After 1st discount selling price is

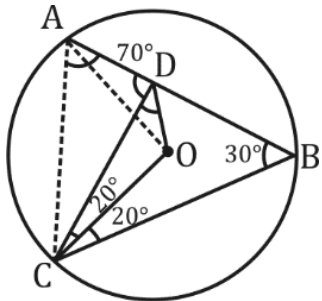
$$800 \times \frac{80}{100} = 640$$

$$\text{IInd discount} = 640 - 560 = 80$$

$$\text{Required discount percent (x)} = \frac{80}{640} \times 100 = 12\frac{1}{2}\%$$

S17. Ans.(b)

Sol.



Join AO & AC

So,

$$\angle AOC = 2 \angle ABC = 60$$

$$\Rightarrow \angle ACO = \angle CAO = 60^\circ \text{ (Since, } AO = OC) \Rightarrow CA=AO=CO$$

$$\therefore \angle ACD = 40^\circ$$

$$\& \angle CAB = 180^\circ - 80^\circ - 30^\circ = 70^\circ$$

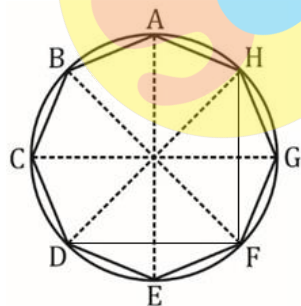
$$\& \angle CDA = 180^\circ - 70^\circ - 40^\circ = 70^\circ$$

$$\therefore CA = CD = CO$$

$$\Rightarrow \angle CDO = \frac{(180-20)}{2} = 80$$

S18. Ans.(b)

Sol.



DH = diameter


As

FD = FH = same distance between two sides

& $\angle DFH = 90^\circ$ (angle in a semi-circle)

$$\text{So, } \angle HDF = \angle FHD = \frac{90}{2} = 45^\circ$$

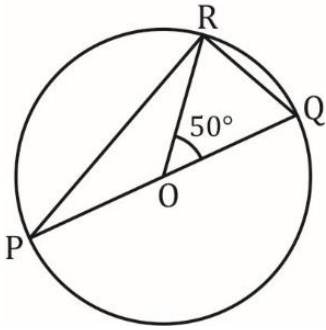
TEST SERIES
 Bilingual
 Special Offer



**SSC CGL TIER-II
 PRIME**
85+ TOTAL TESTS
 Validity : 1 Month

S19. Ans.(b)

Sol.



$$\angle ROQ = 50$$

$$\angle ROP = \angle(180 - 50) = \angle 130$$

AS

RO=OP(RADIUS OF CIRCLE)

THEREFORE

$$\angle RPO = \angle ORP = \frac{180 - 130}{2} = 25^\circ$$

S20. Ans.(d)

Sol.

$$\text{I. } \left(1 + \frac{1}{2}\right) \left(1 + \frac{1}{3}\right) \left(1 + \frac{1}{4}\right) \dots \left(1 + \frac{1}{998}\right) > 497$$

$$\Rightarrow \frac{3}{2} \times \frac{4}{3} \times \frac{5}{4} \times \dots \dots \dots \frac{999}{998} > 497$$

$$\Rightarrow \frac{999}{2} > 497$$

$$\text{II. } 14\frac{3}{4} + 5\frac{1}{4} - 2\frac{1}{2} > 11\frac{1}{8} + 12\frac{3}{8} - 7\frac{1}{4}$$

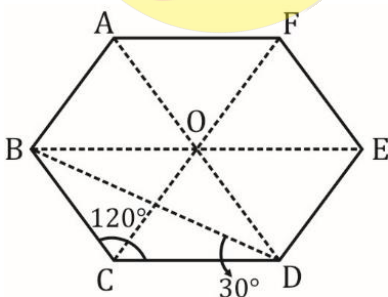
$$14 + 5 - 2 + \left[\frac{3}{4} + \frac{1}{4} - \frac{1}{2}\right] > 11 + 12 - 7 + \left[\frac{1}{8} + \frac{3}{8} - \frac{1}{4}\right]$$

$$17 + \frac{1}{2} > 16 + \frac{1}{4}$$

So, Both I and II

S21. Ans.(b)

Sol. ABCDEF is a regular hexagon



Each interior angle of regular hexagon is $\frac{(6-2) \times 180}{6} = 120 = \angle BCD$

In regular hexagon, there are six equilateral triangle as shown by the dotted line.

So, $\triangle COD$ is also equilateral triangle

$$\angle BCD = 120$$

$$BC = CD \text{ So, } \angle CBD = \angle CDB = \frac{(180 - 120)}{2} = 30$$

$$\angle BDC = 30, \angle ODC = 60,$$

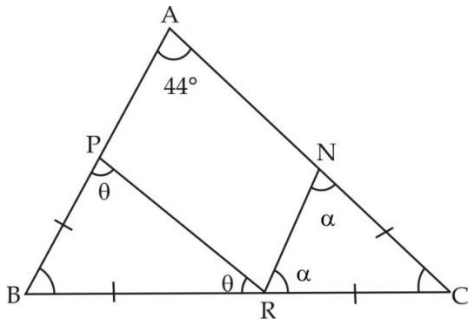
So,

$$\text{Angle ADB} = (60 - 30)$$

$$\angle ADB = 30^\circ$$

S22. Ans.(c)

Sol.



$$\because BP = BR$$

$$\Rightarrow \angle BPR = \angle BRP = \theta$$

$$\because CN = CR$$

$$\Rightarrow \angle CRN = \angle CNR = \alpha$$

$$\therefore \angle PBR = 180 - 2\theta$$

$$\& \angle NCR = 180 - 2\alpha$$

Now, in $\triangle ABC$

$$\angle BAC + \angle ABC + \angle ACB = 180^\circ$$

$$\Rightarrow 44^\circ + (180 - 2\theta) + (180 - 2\alpha) = 180^\circ$$

$$\Rightarrow 2(\theta + \alpha) = 44^\circ + 180^\circ$$

$$\Rightarrow \theta + \alpha = 112^\circ$$

$$\therefore \angle PRN = 180^\circ - (\theta + \alpha)$$

$$= 180 - 112$$

$$\angle PRN = 68^\circ$$

S23. Ans.(d)

Sol. ATQ

$$\angle A : \angle B : \angle C = 3 : 2 : 1$$

$$\therefore \angle A = 3x, \angle B = 2x, \angle C = x$$

In $\triangle ABC$

$$\Rightarrow \angle A + \angle B + \angle C = 180^\circ$$

$$\Rightarrow 3x + 2x + x = 180^\circ$$

$$\Rightarrow x = 30^\circ$$

$$\therefore \angle C = 30^\circ$$

$$\angle ECD = 180 - \angle C - \angle ACE$$

$$= 180^\circ - 30^\circ - 90^\circ = 60^\circ$$

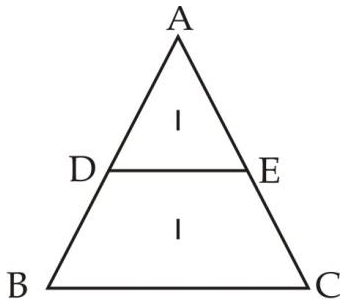
6 Months Subscription

SSC
SUPREME

All SSC Video Courses

S24. Ans.(b)

Sol.



$$\text{Ar } \triangle ADE = 1$$

$$\text{Ar } \triangle ABC = 2$$

$$\Rightarrow \frac{\text{ar } \triangle ABC}{\text{ar } \triangle ADE} = \frac{\text{Side of } \triangle ABC (AB)^2}{\text{Side of } \triangle ADE (AD)^2}$$

$$\Rightarrow \frac{\sqrt{2}}{1} = \frac{AB}{AD}$$

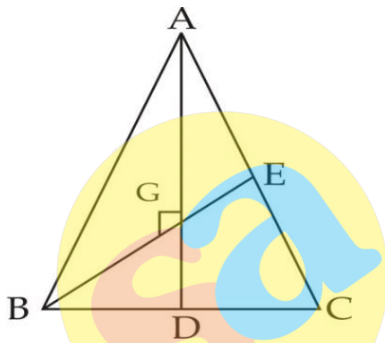
$$\therefore DB = AB - AD$$

$$= \sqrt{2} - 1$$

$$\therefore DB : AB = (\sqrt{2} - 1) : \sqrt{2}$$

S25. Ans.(b)

Sol.



ATQ,

→ Medians AD & BE intersect at G on 90°

→ $\angle AGB = 90^\circ \Rightarrow \triangle AGB$ is a right angled Δ .

⇒ In a Δ centroid divides median in the ratio $2 : 1$,

$$BG = \frac{2}{3} \times BE = \frac{2}{3} \times 12 = 8$$

$$\& AG = \frac{2}{3} \times AD = \frac{2}{3} \times 9 = 6$$

∴ In $\triangle AGB$

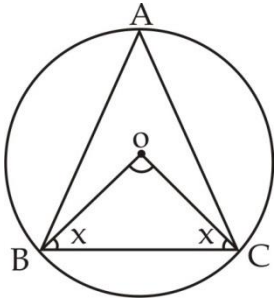
$$AB^2 = AG^2 + BG^2$$

$$= 6^2 + 8^2 = 36 + 64 = 100$$

$$\Rightarrow AB = 10 \text{ cm}$$

S26. Ans.(c)

Sol.



Let $\angle OBC = \angle OCB = x$

{ $\because OB = OC =$ circum radius}

Now,

Angle made by same chord at the centre is double than that of any other part on the circumference at same sector.

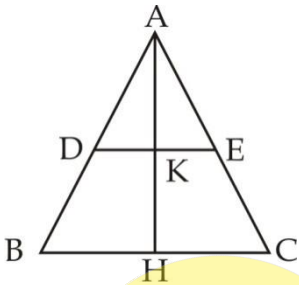
$$\therefore \angle BOC = 180^\circ - 2x$$

$$\therefore \angle BAC = \frac{180-2x}{2} = 90^\circ - x$$

$$\Rightarrow \angle OBC + \angle BAC = x + 90 - x = 90^\circ$$

S27. Ans.(b)

Sol.



\because Point D & E are mid points of sides AB and AC

$\therefore DE$ will be parallel to BC

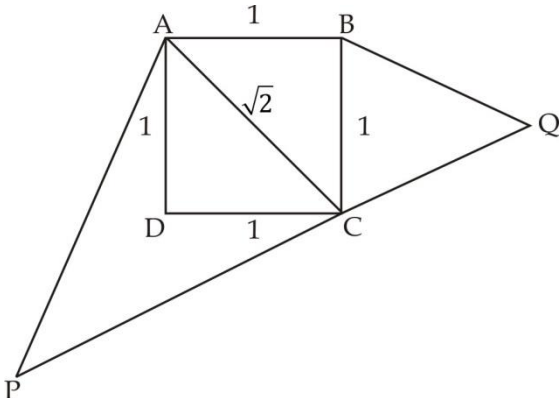
(By Thales theorem)

$\Rightarrow DE$ will cut AH into equal parts

$$\therefore AK : KH = 1 : 1$$

S28. Ans.(c)

Sol.



ATQ,

$\Delta QBC \sim \Delta PAC$

\Rightarrow let each side of square = 1

\Rightarrow diagonal of square = $\sqrt{2}$

$\therefore \Delta QBC \sim \Delta PAC$

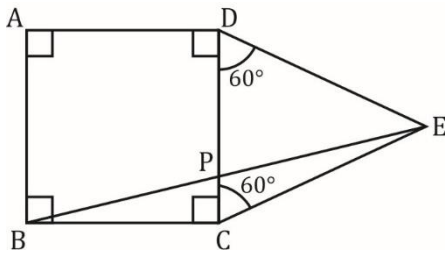
$$\Rightarrow \frac{\text{Area of } \Delta QBC}{\text{Area of } \Delta PAC} = \frac{(BC)^2}{(AC)^2}$$

$$= \frac{(QC)^2}{(PC)^2} = \frac{(QB)^2}{(PA)^2}$$

$$= \frac{1^2}{(\sqrt{2})^2} = \frac{1}{2}$$

S29. Ans.(a)

Sol.



All angle of square = $90^\circ = \angle DCB$

$\angle DCE = 60$ [DCE is an equilateral triangle]

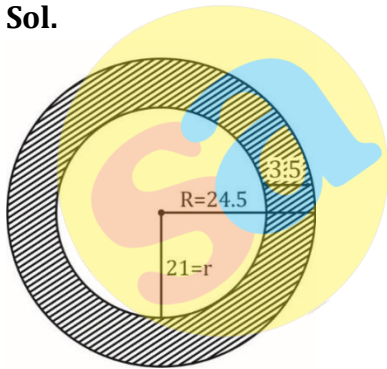
Here $CB = CE$,

So, $\angle CBE = \angle BEC = \frac{180 - (90 + 60)}{2}$ (BECAUSE $\angle BCE = \angle BCD + \angle DCE = 90 + 60$)

$\angle CBE = \angle BEC = 15^\circ$

S30. Ans.(a)

Sol.



Radius of bigger circle (R) = 24.5

Radius of smaller circle (r) = 21

Area of path = Area of bigger circle - Area of smaller circle

$$= \pi R^2 - \pi r^2$$

$$= \frac{22}{7} [(24.5)^2 - (21)^2]$$

$$= \frac{22}{7} \times 45.5 \times 3.5$$

$$= 500.5 \text{ cm}^2$$

6 Months Subscription

SSC
SUPREME

All SSC Video Courses