

## Multi Tasking Non Technical Staff and Havaladar CBIC and CBN Examination 2023

Roll Number	
Candidate Name	
Venue Name	iON Digital Zone iDZ 1 GT Karnal Road
Exam Date	08/09/2023
Exam Time	4:00 PM - 6:00 PM
Subject	MTS Non Tech Havaladar CBIC and CBN Examination 2023

### Section : Numerical and Mathematical Ability

**Q.1** Tea leaves worth ₹108 per kg and ₹120 per kg are mixed with a third variety in the ratio 2 : 3 : 5. If the mixture is worth ₹125 per kg, the price (in ₹, rounded off to the nearest integer) of the third variety of tea leaves per kg will be:

- Ans**
- 1. 130
  - 2. 128
  - 3. 135
  - 4. 133

Question ID : 264330156469

Option 1 ID : 264330613265

Option 2 ID : 264330613264

Option 3 ID : 264330613263

Option 4 ID : 264330613266

Status : Answered

Chosen Option : 3

**Q.2** Rima covers a certain distance by car driving at a speed of 59 km/h and she returns to the starting point riding on a bike with a speed of 43 km/h. Find the average speed (in km/h) for the whole journey. (Rounded off to 2 decimal places)

- Ans**
- 1. 52.25
  - 2. 49.75
  - 3. 42.00
  - 4. 45.37

Question ID : 264330155730

Option 1 ID : 264330610323

Option 2 ID : 264330610324

Option 3 ID : 264330610326

Option 4 ID : 264330610325

Status : Answered

Chosen Option : 2

**Q.3** If 7 men working 8 hours a day for 5 days can complete a work, then how many men are required to complete the same work if they work 10 hours a day for 7 days?

- Ans**
- 1. 6
  - 2. 4
  - 3. 3
  - 4. 5

Question ID : **264330156535**  
Option 1 ID : **264330613529**  
Option 2 ID : **264330613528**  
Option 3 ID : **264330613530**  
Option 4 ID : **264330613527**  
Status : **Answered**  
Chosen Option : **2**

**Q.4** The LCM of  $\frac{1}{6}, \frac{5}{27}, \frac{4}{15}, \frac{8}{3}$  is:

- Ans**
- 1.  $\frac{40}{3}$
  - 2.  $\frac{3}{28}$
  - 3.  $\frac{5}{28}$
  - 4.  $\frac{40}{5}$

Question ID : **264330156205**  
Option 1 ID : **264330612221**  
Option 2 ID : **264330612220**  
Option 3 ID : **264330612219**  
Option 4 ID : **264330612222**  
Status : **Answered**  
Chosen Option : **1**

**Q.5** The mean proportional between 0.8 and 7.2 is:

- Ans**
- 1. 2.4
  - 2. 3.4
  - 3. 4.2
  - 4. 1.2

Question ID : **264330153769**  
Option 1 ID : **264330602541**  
Option 2 ID : **264330602540**  
Option 3 ID : **264330602539**  
Option 4 ID : **264330602542**  
Status : **Answered**  
Chosen Option : **1**

Q.6 The value of  $\frac{3 \div 3 \times 2 - 6 \div 3 + 7}{5 \div 5 \times 6 \div 6 + 3 + 3}$  is equal to:

- Ans
- ✓ 1. 1
  - ✗ 2.  $\frac{3}{2}$
  - ✗ 3.  $1\frac{3}{2}$
  - ✗ 4. 2

Question ID : 264330156502

Option 1 ID : 264330613397

Option 2 ID : 264330613395

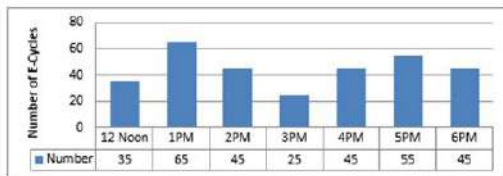
Option 3 ID : 264330613396

Option 4 ID : 264330613398

Status : Answered

Chosen Option : 1

Q.7 The bar diagram represents the number of E- Cycles parking at a metro station from 12:00 P.M. to 6:00 P.M.  
How many times the number of E- Cycles parked is more than average?



- Ans
- ✗ 1. 4
  - ✗ 2. 5
  - ✓ 3. 2
  - ✗ 4. 3

Question ID : 264330154064

Option 1 ID : 264330603721

Option 2 ID : 264330603722

Option 3 ID : 264330603719

Option 4 ID : 264330603720

Status : Answered

Chosen Option : 3

Q.8 A can do a piece of work in 10 days and B can do it in 15 days. They work together for 2 days and then A leaves.  
How long will B take to finish the remaining work?

- Ans
- ✓ 1. 10 days
  - ✗ 2. 22 days
  - ✗ 3. 12 days
  - ✗ 4. 5 days

Question ID : 264330153885

Option 1 ID : 264330603004

Option 2 ID : 264330603003

Option 3 ID : 264330603006

Option 4 ID : 264330603005

Status : Answered

Chosen Option : 1

**Q.9** A cylinder has a total surface area of  $64\pi$  square units, where the height of the cylinder is equal to its radius. If the height is doubled and the radius is halved, then the total surface area of the new cylinder is \_\_\_\_\_ square units.

- Ans**
- 1.  $54\pi$
  - 2.  $40\pi$
  - 3.  $64\pi$
  - 4.  $48\pi$

Question ID : 264330153825

Option 1 ID : 264330602763

Option 2 ID : 264330602764

Option 3 ID : 264330602766

Option 4 ID : 264330602765

Status : Answered

Chosen Option : 2

**Q.10** A boy covers a certain distance between his house and school on a cycle. Having an average speed of 10 km/h, he is late by 10 min. However, with an average speed of 15 km/h, he reaches the school in 5 min. earlier. Find the distance (in km) between his house and school.

- Ans**
- 1. 8.5
  - 2. 8
  - 3. 7
  - 4. 7.5

Question ID : 264330156272

Option 1 ID : 264330612490

Option 2 ID : 264330612489

Option 3 ID : 264330612487

Option 4 ID : 264330612488

Status : Answered

Chosen Option : 4

**Q.11** A motorboat can row 12 km/h in still water. If the speed of the current is 2 km/h, it takes 1.5 hours more in covering some distance upstream than it does downstream for covering the same distance. The one-side distance is:

- Ans**
- 1. 52.5 km
  - 2. 50 km
  - 3. 51.5 km
  - 4. 53 km

Question ID : 264330156286

Option 1 ID : 264330612545

Option 2 ID : 264330612543

Option 3 ID : 264330612544

Option 4 ID : 264330612546

Status : Answered

Chosen Option : 1

**Q.12** A and B entered a partnership for 5 years. At the start of the business, they invested ₹36,000 and ₹58,000, respectively. At the end of 5 years, their total profit was ₹94,000. What will be the share of B (in ₹) out of this profit?

- Ans**
- 1. 52,000
  - 2. 46,000
  - 3. 58,000
  - 4. 60,000

Question ID : 264330155742  
Option 1 ID : 264330610372  
Option 2 ID : 264330610371  
Option 3 ID : 264330610373  
Option 4 ID : 264330610374  
Status : Answered  
Chosen Option : 3

**Q.13** If the ratio of the principal and the simple interest for 5 years is 10 : 7, then the rate of interest per annum is:

- Ans**
- 1. 18%
  - 2. 16%
  - 3. 12%
  - 4. 14%

Question ID : 264330156523  
Option 1 ID : 264330613481  
Option 2 ID : 264330613482  
Option 3 ID : 264330613479  
Option 4 ID : 264330613480  
Status : Answered  
Chosen Option : 4

**Q.14** The table below shows the earning of different schools (in ₹ crores) in different years. Study the table carefully and answer the question that follows.

School/years	2018	2019	2020	2021	2022
P	50	45	49	56	57
Q	46	48	50	55	62
R	70	65	63	68	63
S	38	47	56	60	69
T	48	37	52	69	77

Find the ratio between the total earnings of schools P and R taken together in year 2020 to the total earnings of schools Q, S and T taken together in the year 2022?

- Ans**
- 1. 7 : 13
  - 2. 7 : 19
  - 3. 12 : 7
  - 4. 12 : 13

Question ID : 264330156573  
Option 1 ID : 264330613681  
Option 2 ID : 264330613682  
Option 3 ID : 264330613679  
Option 4 ID : 264330613680  
Status : Answered  
Chosen Option : 1

**Q.15** A student's marks were incorrectly entered as 44 instead of 86. Due to this, the average of the class got decreased by  $\frac{3}{2}$ . What is the number of students in the class?

- Ans
- 1. 24
  - 2. 28
  - 3. 36
  - 4. 30

Question ID : 264330153757  
Option 1 ID : 264330602491  
Option 2 ID : 264330602494  
Option 3 ID : 264330602492  
Option 4 ID : 264330602493  
Status : Answered  
Chosen Option : 2

**Q.16** The percentage profit earned by selling an article for ₹955 is equal to the percentage loss incurred by selling the same article for ₹845. At what price should the article be sold to make a 6% profit?

- Ans
- 1. ₹955
  - 2. ₹954
  - 3. ₹925
  - 4. ₹1,014

Question ID : 264330159021  
Option 1 ID : 264330623443  
Option 2 ID : 264330623446  
Option 3 ID : 264330623445  
Option 4 ID : 264330623444  
Status : Answered  
Chosen Option : 2

**Q.17** Find the area of a triangle whose base is 7 cm and corresponding height is 82 cm.

- Ans
- 1.  $191 \text{ cm}^2$
  - 2.  $574 \text{ cm}^2$
  - 3.  $143 \text{ cm}^2$
  - 4.  $287 \text{ cm}^2$

Question ID : 264330153892  
Option 1 ID : 264330603033  
Option 2 ID : 264330603031  
Option 3 ID : 264330603034  
Option 4 ID : 264330603032  
Status : Answered  
Chosen Option : 4

**Q.18** The price of a commodity increased from ₹200 to ₹250. What is the percentage increase in price?

- Ans**
- 1. 27%
  - 2. 20%
  - 3. 25%
  - 4. 22%

Question ID : 264330156260

Option 1 ID : 264330612442

Option 2 ID : 264330612439

Option 3 ID : 264330612441

Option 4 ID : 264330612440

Status : Answered

Chosen Option : 3

**Q.19** What will be the compound interest on ₹30,000 at 10% per annum for  $1\frac{1}{2}$  years, when interest is compounded half-yearly?

- Ans**
- 1. ₹4,728.75
  - 2. ₹4,800.75
  - 3. ₹5,728.75
  - 4. ₹4,928.75

Question ID : 264330154132

Option 1 ID : 264330603993

Option 2 ID : 264330603991

Option 3 ID : 264330603992

Option 4 ID : 264330603994

Status : Answered

Chosen Option : 1

**Q.20** Ravi sells a laptop bag to Reeta for ₹1,920 and he sells another similar laptop bag to Vinay for ₹1,280. The percentage profit earned in selling the laptop bag to Reeta is equal to the percentage loss in selling the laptop bag to Vinay. At what price (in ₹) should Ravi sell the laptop bag to make a profit of 25%?

- Ans**
- 1. 1,650
  - 2. 1,600
  - 3. 1,800
  - 4. 2,000

Question ID : 264330155706

Option 1 ID : 264330610228

Option 2 ID : 264330610227

Option 3 ID : 264330610229

Option 4 ID : 264330610230

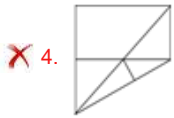
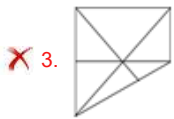
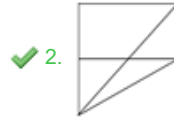
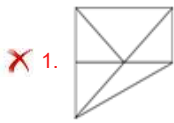
Status : Answered

Chosen Option : 4

Q.1 Identify the figure that completes the pattern (rotation is NOT allowed).



Ans



Question ID : 264330154513

Option 1 ID : 264330605515

Option 2 ID : 264330605517

Option 3 ID : 264330605516

Option 4 ID : 264330605518

Status : Answered

Chosen Option : 2

Q.2 What should come in place of ? in the given series based on the English alphabetical order?

HPS, JRU, LTW, NVY, ?

Ans

✓ 1. PXA

✗ 2. MXB

✗ 3. NYB

✗ 4. NZA

Question ID : 264330155765

Option 1 ID : 264330610463

Option 2 ID : 264330610466

Option 3 ID : 264330610464

Option 4 ID : 264330610465

Status : Answered

Chosen Option : 1



**Q.3** What will come in place of '?' in the following equation, if '+' and '×' are interchanged and '-' and '+' are interchanged?

$$16 - 4 + 13 \times 5 + 2 = ?$$

- Ans**
- 1. 36
  - 2. 24
  - 3. 48
  - 4. 55

Question ID : 264330154667  
Option 1 ID : 264330606134  
Option 2 ID : 264330606133  
Option 3 ID : 264330606132  
Option 4 ID : 264330606131  
Status : Answered  
Chosen Option : 4

**Q.4** In a certain code language, 'PORTAL' is coded as 'RQIVCN' and 'QUIET' is coded as 'SWKGV'. What is the code for 'SIMPLE' in the given code language?

- Ans**
- 1. VKNRMJ
  - 2. UKORNG
  - 3. TJNSMH
  - 4. TNOSMI

Question ID : 264330155813  
Option 1 ID : 264330610658  
Option 2 ID : 264330610655  
Option 3 ID : 264330610656  
Option 4 ID : 264330610657  
Status : Answered  
Chosen Option : 2

**Q.5** 17 is related to 52 following a certain logic. Following the same logic, 42 is related to 127. To which of the following is 29 related to, following the same logic?

- Ans**
- 1. 84
  - 2. 88
  - 3. 86
  - 4. 82

Question ID : 264330151591  
Option 1 ID : 264330593992  
Option 2 ID : 264330593994  
Option 3 ID : 264330593993  
Option 4 ID : 264330593991  
Status : Answered  
Chosen Option : 2

Q.6 What should come in place of '?' in the given series?

9 26 77 230 689 ?

- Ans
- 1. 2035
  - 2. 2112
  - 3. 2094
  - 4. 2066

Question ID : 264330151478

Option 1 ID : 264330593539

Option 2 ID : 264330593542

Option 3 ID : 264330593541

Option 4 ID : 264330593540

Status : Answered

Chosen Option : 4

Q.7 Which figure should replace the question mark (?) if the following figure series were to be continued?

R	I	K	2	R	D	7	↑	K	T	7	△	
2	△	D	△	I	T	T	2	△	2	↑	I	?
↑	7	T	K	↑	7	D	R	I	K	D	R	

Ans

1.

R	I	K
D	T	7
△	2	↑

2.

R	D	K
I	△	2
↑	7	T

3.

R	I	K
D	△	7
↑	2	T

4.

R	D	K
I	T	2
△	7	↑

Question ID : 264330154737

Option 1 ID : 264330606411

Option 2 ID : 264330606412

Option 3 ID : 264330606413

Option 4 ID : 264330606414

Status : Answered

Chosen Option : 2

**Q.8** Read the given statements and conclusions carefully. You have to take the given statements to be true even if they seem to be at variance from commonly known facts. You have to decide which conclusion/s logically follow/s from the given statements.

Statements: All stamps are keys. All keys are black. All black are grey.

Conclusion I: All keys are stamps.

Conclusion II: Some keys are black.

- Ans**
- 1. Both conclusions (I) and (II) are follow.
  - 2. Only conclusion (II) is follow.
  - 3. Only conclusion (I) is follow.
  - 4. Neither conclusion (I) nor (II) is follow.

Question ID : 264330155893  
Option 1 ID : 264330610978  
Option 2 ID : 264330610976  
Option 3 ID : 264330610975  
Option 4 ID : 264330610977  
Status : Answered  
Chosen Option : 4

**Q.9** What will come in the place of '?' in the following equation, if '+' and '-' are interchanged and '×' and '÷' are interchanged?

$$17 \div 9 - 39 \div 225 \times 15 = ?$$

- Ans**
- 1. 167
  - 2. 177
  - 3. 157
  - 4. 187

Question ID : 264330155669  
Option 1 ID : 264330610082  
Option 2 ID : 264330610081  
Option 3 ID : 264330610079  
Option 4 ID : 264330610080  
Status : Answered  
Chosen Option : 2

**Q.10** What should come in place of '?' in the given series?

1 14 79 404 2029 ?

- Ans**
- 1. 10154
  - 2. 9848
  - 3. 9812
  - 4. 10132

Question ID : 264330151468  
Option 1 ID : 264330593502  
Option 2 ID : 264330593500  
Option 3 ID : 264330593499  
Option 4 ID : 264330593501  
Status : Answered  
Chosen Option : 1

**Q.11** In a certain code language, 'do it now' is coded as 'qh tr ce' and 'now or never' is coded as 'lx uk tr'. How is 'now' coded in the given language?

- Ans**
- 1. ce
  - 2. qh
  - 3. tr
  - 4. lx

Question ID : 264330151686  
Option 1 ID : 264330594371  
Option 2 ID : 264330594374  
Option 3 ID : 264330594372  
Option 4 ID : 264330594373  
Status : Answered  
Chosen Option : 3

**Q.12** The position of how many letters will remain unchanged if each of the letter in the word 'ABSOLUTE' is arranged in alphabetical order?

- Ans**
- 1. Five
  - 2. Two
  - 3. Three
  - 4. Four

Question ID : 264330154323  
Option 1 ID : 264330604758  
Option 2 ID : 264330604755  
Option 3 ID : 264330604757  
Option 4 ID : 264330604756  
Status : Answered  
Chosen Option : 3

**Q.13** Seven people, B, N, M, O, P, Y and S are sitting in a straight line, facing south. Only two people sit between P and S. N is the immediate neighbour of S and M. Only one person sits to the right of P. N sits second to the left of O. Y is an immediate neighbour of P.

Total how many people sit between P and M?

- Ans**
- 1. Two
  - 2. Four
  - 3. Three
  - 4. One

Question ID : 264330161697  
Option 1 ID : 264330634116  
Option 2 ID : 264330634118  
Option 3 ID : 264330634117  
Option 4 ID : 264330634115  
Status : Answered  
Chosen Option : 2

**Q.14** Read the given statements and conclusions carefully. You have to take the given statements to be true even if they seem to be at variance from commonly known facts. You have to decide which conclusion/s logically follow/s from the given statements.

Statements: All threads are soft. Some soft are fruit. All fruit is yellow.

Conclusion I: Some thread is fruit.

Conclusion II: Some fruit is yellow.

- Ans**
- 1. Neither conclusion (I) nor (II) is follow.
  - 2. Both conclusions (I) and (II) are follow.
  - 3. Only conclusion (II) is follow.
  - 4. Only conclusion (I) is follow.

Question ID : 264330155921  
Option 1 ID : 264330611089  
Option 2 ID : 264330611090  
Option 3 ID : 264330611088  
Option 4 ID : 264330611087  
Status : Answered  
Chosen Option : 1

**Q.15** What should come in place of ? in the given series?

21 24 29 36 47 ?

- Ans**
- 1. 64
  - 2. 60
  - 3. 56
  - 4. 66

Question ID : 264330151715  
Option 1 ID : 264330594487  
Option 2 ID : 264330594490  
Option 3 ID : 264330594488  
Option 4 ID : 264330594489  
Status : Answered  
Chosen Option : 2

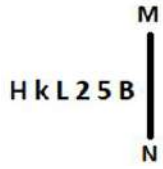
**Q.16** Find out the correct alternative that when filled in the blanks in the same sequence will make the series logically complete.

WA\_XV\_FX\_EFXTGF\_SI\_X

- Ans**
- 1. MNVKD
  - 2. FCUXF
  - 3. FVYNS
  - 4. HKVHU

Question ID : 264330154722  
Option 1 ID : 264330606353  
Option 2 ID : 264330606351  
Option 3 ID : 264330606354  
Option 4 ID : 264330606352  
Status : Answered  
Chosen Option : 2

Q.17 Select the correct mirror image of the given figure when the mirror is placed at MN as shown below.



- Ans
- 1.
  - 2.
  - 3.
  - 4.

Question ID : 264330151501

Option 1 ID : 264330593633

Option 2 ID : 264330593631

Option 3 ID : 264330593632

Option 4 ID : 264330593634

Status : Answered

Chosen Option : 2

Q.18 Select the set in which the numbers are related in the same way as are the numbers of the following sets.  
(NOTE: Operations should be performed on the whole numbers, without breaking down the numbers into its constituent digits. E.g. 13 – Operations on 13 such as adding / subtracting / multiplying etc. to 13 can be performed. Breaking down 13 into 1 and 3 and then performing mathematical operations on 1 and 3 is not allowed)  
(5, 11, 80)  
(6, 12, 90)

- Ans
- 1. 4, 19, 148
  - 2. 9, 11, 67
  - 3. 7, 17, 120
  - 4. 2, 16, 123

Question ID : 264330151615

Option 1 ID : 264330594089

Option 2 ID : 264330594090

Option 3 ID : 264330594087

Option 4 ID : 264330594088

Status : Answered

Chosen Option : 3

Q.19 Select the word-pair that best represents a similar relationship to the one expressed in the pair of words given below.

(The words must be considered as meaningful English words and must not be related to each other based on the number of letters/number of consonants/vowels in the word)

Scissors : Cloth

- Ans
- 1. Pen : Ink
  - 2. Razor : Beard
  - 3. Nail : Hammer
  - 4. Furnace : Smoke

Question ID : 264330154631

Option 1 ID : 264330605987

Option 2 ID : 264330605990

Option 3 ID : 264330605989

Option 4 ID : 264330605988

Status : Answered

Chosen Option : 2

**Q.20** Select the combination of letters that when sequentially placed in the blanks of the given series will make it logically complete.

HLO\_ J\_OC LL\_E \_LOG P\_OI

- Ans**
- 1. AONEL
  - 2. ALONL
  - 3. BGHPN
  - 4. BLOEN

Question ID : **264330156321**  
Option 1 ID : **264330612684**  
Option 2 ID : **264330612683**  
Option 3 ID : **264330612685**  
Option 4 ID : **264330612686**  
Status : **Answered**  
Chosen Option : **2**

Section : **General Awareness**

**Q.1** What is the maximum time gap between two sessions of the State Legislature?

- Ans**
- 1. Three months
  - 2. Two months
  - 3. Six months
  - 4. One year

Question ID : **264330159927**  
Option 1 ID : **264330627056**  
Option 2 ID : **264330627055**  
Option 3 ID : **264330627057**  
Option 4 ID : **264330627058**  
Status : **Answered**  
Chosen Option : **3**

**Q.2** In 1951, the first Asian Games was held in which city?

- Ans**
- 1. Jaipur
  - 2. Pune
  - 3. Mumbai
  - 4. New Delhi

Question ID : **264330158228**  
Option 1 ID : **264330620274**  
Option 2 ID : **264330620272**  
Option 3 ID : **264330620273**  
Option 4 ID : **264330620271**  
Status : **Answered**  
Chosen Option : **4**

**Q.3 What is a government budget?**

- Ans**
- 1. A report on the economic growth of a country.
  - 2. A plan for managing personal finances.
  - 3. A financial statement of a government's expected revenue and expenditure for a specific period.
  - 4. A document outlining foreign policy goals.

Question ID : 264330157270  
Option 1 ID : 264330616445  
Option 2 ID : 264330616443  
Option 3 ID : 264330616444  
Option 4 ID : 264330616446  
Status : Answered  
Chosen Option : 3

**Q.4 Who is the author of the novel 'A Suitable Boy'?**

- Ans**
- 1. Kiran Desai
  - 2. Vikram Seth
  - 3. Chetan Bhagat
  - 4. Anita Desai

Question ID : 264330160967  
Option 1 ID : 264330631201  
Option 2 ID : 264330631200  
Option 3 ID : 264330631199  
Option 4 ID : 264330631202  
Status : Answered  
Chosen Option : 2

**Q.5 Which of the following oceans extends into the Mediterranean Sea?**

- Ans**
- 1. Indian Ocean
  - 2. Pacific Ocean
  - 3. Atlantic Ocean
  - 4. Arctic Ocean

Question ID : 264330157834  
Option 1 ID : 264330618695  
Option 2 ID : 264330618698  
Option 3 ID : 264330618696  
Option 4 ID : 264330618697  
Status : Answered  
Chosen Option : 3

**Q.6 What is the meaning of the term 'Collateral' in banking?**

- Ans**
- 1. An investment portfolio
  - 2. A type of credit card
  - 3. A form of digital payment
  - 4. An asset pledged as security for a loan

Question ID : 264330157306  
Option 1 ID : 264330616589  
Option 2 ID : 264330616587  
Option 3 ID : 264330616588  
Option 4 ID : 264330616590  
Status : Answered  
Chosen Option : 4



Q.7 The word 'kathak' is derived from which of the following words?

- Ans  1. Story  
 2. Narrator  
 3. Dance steps  
 4. Bells

Question ID : 264330160787  
Option 1 ID : 264330630479  
Option 2 ID : 264330630480  
Option 3 ID : 264330630481  
Option 4 ID : 264330630482  
Status : Answered  
Chosen Option : 1

Q.8 Which of the following autobiographies was written by Dr. APJ Abdul Kalam, the former president of India?

- Ans  1. One Life is Not Enough  
 2. Waiting for a Visa  
 3. Atmakatha  
 4. Wings of Fire

Question ID : 264330161755  
Option 1 ID : 264330634350  
Option 2 ID : 264330634349  
Option 3 ID : 264330634348  
Option 4 ID : 264330634347  
Status : Answered  
Chosen Option : 4

Q.9 Which Indian musician got the prestigious Academy Award?

- Ans  1. AR Rahman  
 2. Anu Malik  
 3. Naushad  
 4. Bappi Lahiri

Question ID : 264330162233  
Option 1 ID : 264330636262  
Option 2 ID : 264330636260  
Option 3 ID : 264330636261  
Option 4 ID : 264330636259  
Status : Answered  
Chosen Option : 1

Q.10 In relation to the state of Tamil Nadu, the Constitution (Scheduled Tribes) Order (Second Amendment) Act, 2022 will include the \_\_\_\_\_ and Kurivikkaran communities in the list of Scheduled Tribes in Tamil Nadu.

- Ans  1. Narikoravan  
 2. Irular  
 3. Kadar  
 4. Kammara

Question ID : 264330161414  
Option 1 ID : 264330632983  
Option 2 ID : 264330632984  
Option 3 ID : 264330632985  
Option 4 ID : 264330632986  
Status : Answered  
Chosen Option : 1

Q.11 Which antibiotic is considered the first miracle drug, used to treat throat infections, meningitis, syphilis and other bacterial infections?

- Ans
- 1. Aciclovir
  - 2. Nifuratel
  - 3. Penicillin
  - 4. Metronidazole

Question ID : 264330161078  
Option 1 ID : 264330631644  
Option 2 ID : 264330631646  
Option 3 ID : 264330631643  
Option 4 ID : 264330631645  
Status : Not Answered  
Chosen Option : --

Q.12 Which of the following is the Fundamental Law of any country which sets out the framework and the principal functions of various organs of the government?

- Ans
- 1. Customs
  - 2. International Law
  - 3. Constitution
  - 4. Ordinance

Question ID : 264330161395  
Option 1 ID : 264330632908  
Option 2 ID : 264330632910  
Option 3 ID : 264330632907  
Option 4 ID : 264330632909  
Status : Answered  
Chosen Option : 3

Q.13 Who was the singer of the famous song 'Mere Desh Ki Dharti Sona Ugle' from the film 'Upkar' (1967)?

- Ans
- 1. KJ Yesudas
  - 2. Suresh Wadkar
  - 3. Manna Dey
  - 4. Mahendra Kapoor

Question ID : 264330155513  
Option 1 ID : 264330609457  
Option 2 ID : 264330609458  
Option 3 ID : 264330609456  
Option 4 ID : 264330609455  
Status : Answered  
Chosen Option : 2

**Q.14** Rani Machaiah was awarded with 'Padam Shri' in the year \_\_\_\_\_ for her contribution to folk dance.

- Ans**
- 1. 2015
  - 2. 2018
  - 3. 2012
  - 4. 2023

Question ID : 264330155526  
Option 1 ID : 264330609509  
Option 2 ID : 264330609508  
Option 3 ID : 264330609510  
Option 4 ID : 264330609507  
Status : Not Answered  
Chosen Option : --

**Q.15** Jyothi Yarraji created a new national record in 2023 in which of the following sports?

- Ans**
- 1. Indoor hurdling
  - 2. High jump
  - 3. Shot put
  - 4. Long jump

Question ID : 264330158373  
Option 1 ID : 264330620854  
Option 2 ID : 264330620853  
Option 3 ID : 264330620852  
Option 4 ID : 264330620851  
Status : Answered  
Chosen Option : 4

**Q.16** Which physicist's experiment during a lecture in 1820 showed the connection between electricity and magnetism?

- Ans**
- 1. John Cockcroft
  - 2. William Gilbert
  - 3. Heinrich Hertz
  - 4. Hans Christian Oersted

Question ID : 264330161045  
Option 1 ID : 264330631512  
Option 2 ID : 264330631511  
Option 3 ID : 264330631514  
Option 4 ID : 264330631513  
Status : Answered  
Chosen Option : 4

Q.17 In the performance of \_\_\_\_\_ dance, on one side raasa dances are performed by women, whereas on the opposite side instrumentalist play the pung choloms (drums) and the karataala (cymbals).

- Ans
- 1. Kathakali
  - 2. Yakshagana
  - 3. Odissi
  - 4. Manipuri

Question ID : 264330161342  
Option 1 ID : 264330632696  
Option 2 ID : 264330632697  
Option 3 ID : 264330632695  
Option 4 ID : 264330632698  
Status : Answered  
Chosen Option : 4

Q.18 Who among the following was the founder of the Khudai Khidmatgars, a powerful non-violent movement among the Pathans of North-West Frontier Province?

- Ans
- 1. Khan Abdul Ghaffar Khan
  - 2. Abdul Qayyum Khan Kashmiri
  - 3. Mohammad Ali Jinnah
  - 4. Khan Abdul Jabbar Khan

Question ID : 264330161749  
Option 1 ID : 264330634323  
Option 2 ID : 264330634326  
Option 3 ID : 264330634325  
Option 4 ID : 264330634324  
Status : Answered  
Chosen Option : 1

Q.19 In which year was the Vernacular Press Act passed?

- Ans
- 1. 1757 CE
  - 2. 1878 CE
  - 3. 1888 CE
  - 4. 1600 CE

Question ID : 264330162318  
Option 1 ID : 264330636600  
Option 2 ID : 264330636602  
Option 3 ID : 264330636601  
Option 4 ID : 264330636599  
Status : Answered  
Chosen Option : 2

Q.20 Which state of India is associated with the famous thunderstorms 'Kaal Baisakhi'?

- Ans
- 1. West Bengal
  - 2. Karnataka
  - 3. Gujarat
  - 4. Haryana

Question ID : 264330161519  
Option 1 ID : 264330633403  
Option 2 ID : 264330633405  
Option 3 ID : 264330633406  
Option 4 ID : 264330633404  
Status : Answered  
Chosen Option : 1

Q.21 According to Ministry of Commerce and Industry (2018-19), which state of India is the largest producer of Rubber?

- Ans
- 1. Maharashtra
  - 2. Gujarat
  - 3. Kerala
  - 4. Uttar Pradesh

Question ID : 264330161487  
Option 1 ID : 264330633276  
Option 2 ID : 264330633278  
Option 3 ID : 264330633275  
Option 4 ID : 264330633277  
Status : Answered  
Chosen Option : 3

Q.22 In which year was the first Khelo India Winter Games held?

- Ans
- 1. 2022
  - 2. 2019
  - 3. 2021
  - 4. 2020

Question ID : 264330158238  
Option 1 ID : 264330620314  
Option 2 ID : 264330620311  
Option 3 ID : 264330620313  
Option 4 ID : 264330620312  
Status : Answered  
Chosen Option : 3

Q.23 'Losoong' festival, celebrated by the tribal community in \_\_\_\_\_, is usually the time when the farmers rejoice and celebrate their harvest.

- Ans
- 1. Sikkim
  - 2. Jharkhand
  - 3. Odisha
  - 4. West Bengal

Question ID : 264330160818  
Option 1 ID : 264330630603  
Option 2 ID : 264330630606  
Option 3 ID : 264330630605  
Option 4 ID : 264330630604  
Status : Answered  
Chosen Option : 1

Q.24 According to the Human Development Index 2021, which group of neighbouring countries has ranked behind India?

- Ans
- 1. Maldives and Bhutan
  - 2. Pakistan and Afghanistan
  - 3. Bangladesh and China
  - 4. Sri Lanka and Bhutan

Question ID : 264330160173  
Option 1 ID : 264330628033  
Option 2 ID : 264330628032  
Option 3 ID : 264330628031  
Option 4 ID : 264330628034  
Status : Answered  
Chosen Option : 2

**Q.25** Which of the following statements is true about the Great Bath of the Indus Valley Civilisation?

- Ans**
- 1. It was used for grain storage.
  - 2. It was used for farming.
  - 3. It was used as the water tank of the city.
  - 4. It was probably used for religious purpose.

Question ID : 264330160763  
Option 1 ID : 264330630385  
Option 2 ID : 264330630384  
Option 3 ID : 264330630386  
Option 4 ID : 264330630383  
Status : Answered  
Chosen Option : 3

Section : English Language and Comprehension

**Q.1** Select the most appropriate option that can substitute the underlined segment in the given sentence.

France is a largest country.

- Ans**
- 1. smaller
  - 2. larger
  - 3. smallest
  - 4. large

Question ID : 264330155422  
Option 1 ID : 264330609097  
Option 2 ID : 264330609096  
Option 3 ID : 264330609098  
Option 4 ID : 264330609095  
Status : Answered  
Chosen Option : 4

**Q.2** The following sentence has been split into four segments. Identify the segment that contains an error.

Mr Sharma would have left / the station / by this time / tomorrow.

- Ans**
- 1. tomorrow
  - 2. by this time
  - 3. the station
  - 4. Mr Sharma would have left

Question ID : 264330143051  
Option 1 ID : 264330560482  
Option 2 ID : 264330560481  
Option 3 ID : 264330560480  
Option 4 ID : 264330560479  
Status : Answered  
Chosen Option : 4

**Q.3** Select the most appropriate meaning of the underlined idiom in the following sentence.

“Do not turn a blind eye to all the mischief your child is up to”, the teacher told the young parent.

- Ans
- 1. Close the door
  - 2. Take pride in
  - 3. Give rewards
  - 4. Pretend not to notice

Question ID : 264330153051  
Option 1 ID : 264330599772  
Option 2 ID : 264330599771  
Option 3 ID : 264330599774  
Option 4 ID : 264330599773  
Status : Answered  
Chosen Option : 4

**Q.4** Select the most appropriate option to fill in the blank.  
The mother \_\_\_\_\_ the chips because they were soggy.

- Ans
- 1. saved
  - 2. wasted
  - 3. discarded
  - 4. recovered

Question ID : 264330152579  
Option 1 ID : 264330597922  
Option 2 ID : 264330597920  
Option 3 ID : 264330597921  
Option 4 ID : 264330597919  
Status : Answered  
Chosen Option : 3

**Q.5** Identify the most appropriate meaning of the given word.  
Hope

- Ans
- 1. Caution
  - 2. Realism
  - 3. Cynicism
  - 4. Wish

Question ID : 264330152572  
Option 1 ID : 264330597891  
Option 2 ID : 264330597893  
Option 3 ID : 264330597892  
Option 4 ID : 264330597894  
Status : Answered  
Chosen Option : 4

**Q.6** Select the most appropriate meaning of the given idiom.  
Have egg on your face

- Ans  1. Defeat someone thoroughly
2. To be made to look foolish or embarrassed
3. Making a choice between two unpleasant choices
4. Reveal a secret

Question ID : 264330155282  
Option 1 ID : 264330608571  
Option 2 ID : 264330608573  
Option 3 ID : 264330608574  
Option 4 ID : 264330608572  
Status : Answered  
Chosen Option : 2

**Q.7** The following sentence contains some errors. Select the option that correctly rectifies the error.  
The tiger was tranquilized in the morning and kept in a cage to avoid disturbannces by human beings.

- Ans  1. The tiger was tranquilized in the morning and kept in a cage to avoiid disturbaences by human beings.
2. The tiger was tranquilized in the morning and kept in a cage to avoid disturbances by human beings.
3. The tiger was traanquilized in the morning and kept in a cage to avoid disturbances by human beings.
4. The tiger was tranquiliized in the morning and kept in a cage to avoid disturbances by human beings.

Question ID : 264330152692  
Option 1 ID : 264330598373  
Option 2 ID : 264330598374  
Option 3 ID : 264330598372  
Option 4 ID : 264330598371  
Status : Answered  
Chosen Option : 2

**Q.8** Select the most appropriate synonym of the bracketed word in the following sentence to fill in the blank.  
She's reading a \_\_\_\_\_ (secrecy) novel and can't wait to find out who the killer is.

- Ans  1. crisis
2. complication
3. difficulty
4. mystery

Question ID : 264330152660  
Option 1 ID : 264330598246  
Option 2 ID : 264330598245  
Option 3 ID : 264330598243  
Option 4 ID : 264330598244  
Status : Answered  
Chosen Option : 4



**Q.9** The following sentence has been divided into parts. One of them may contain an error. Select the part that contains the error from the given options. If you don't find any error, mark 'No error' as your answer.

The viable of life / depends on a pair / of conflicting realities.

- Ans
- 1. depends on a pair
  - 2. No error
  - 3. The viable of life
  - 4. of conflicting realities

Question ID : 264330153607  
Option 1 ID : 264330601911  
Option 2 ID : 264330601914  
Option 3 ID : 264330601913  
Option 4 ID : 264330601912  
Status : Answered  
Chosen Option : 1

**Q.10** Parts of the following sentence have been given as options. Select the option that contains an error.  
I shall be playing for four hours.

- Ans
- 1. four hours
  - 2. I
  - 3. shall be playing
  - 4. for

Question ID : 264330152818  
Option 1 ID : 264330598866  
Option 2 ID : 264330598863  
Option 3 ID : 264330598864  
Option 4 ID : 264330598865  
Status : Answered  
Chosen Option : 3

**Q.11** Select the most appropriate meaning of the underlined segment in the given sentence.  
Our team is all on the same page when it comes to our goals for the upcoming project.

- Ans
- 1. Be confused
  - 2. Be in agreement
  - 3. Be unsure
  - 4. Be in conflict

Question ID : 264330152927  
Option 1 ID : 264330599289  
Option 2 ID : 264330599287  
Option 3 ID : 264330599290  
Option 4 ID : 264330599288  
Status : Answered  
Chosen Option : 2

**Q.12** Select the most appropriate meaning of the given idiom.  
**Bite the dust**

- Ans**  1. To suffer a defeat  
 2. To fall from a height  
 3. To remain calm  
 4. To fall asleep

Question ID : 264330155285  
Option 1 ID : 264330608584  
Option 2 ID : 264330608583  
Option 3 ID : 264330608586  
Option 4 ID : 264330608585  
Status : Answered  
Chosen Option : 1

**Q.13** Select the option that can be used as a one-word substitute for the given group of words.

**A person who avoids sensory pleasures and physical comforts**

- Ans**  1. Frugal  
 2. Epicurean  
 3. Bohemian  
 4. Ascetic

Question ID : 264330151869  
Option 1 ID : 264330595097  
Option 2 ID : 264330595098  
Option 3 ID : 264330595096  
Option 4 ID : 264330595095  
Status : Answered  
Chosen Option : 4

**Q.14** Select the INCORRECTLY spelt word.

- Ans**  1. Chivalrous  
 2. Expose  
 3. Confess  
 4. Convict

Question ID : 264330152944  
Option 1 ID : 264330599355  
Option 2 ID : 264330599356  
Option 3 ID : 264330599357  
Option 4 ID : 264330599358  
Status : Answered  
Chosen Option : 3

**Q.15** Select the option that can be used as a one-word substitute for the given group of words.

A person living in solitude like a saint for religious practices.

- Ans  1. Hermit  
 2. Cretin  
 3. Heir  
 4. Heretic

Question ID : 264330151812  
Option 1 ID : 264330594875  
Option 2 ID : 264330594878  
Option 3 ID : 264330594877  
Option 4 ID : 264330594876  
Status : Answered  
Chosen Option : 1

**Q.16** Select the most appropriate ANTONYM of the given word.  
Clumsy

- Ans  1. Jealous  
 2. Fierce  
 3. Graceful  
 4. Nervous

Question ID : 264330151916  
Option 1 ID : 264330595279  
Option 2 ID : 264330595282  
Option 3 ID : 264330595280  
Option 4 ID : 264330595281  
Status : Answered  
Chosen Option : 3

**Q.17** Select the most appropriate option that can substitute the underlined segment in the given sentence.

No sooner had the sun risen over the horizon when the birds began to chirp and the squirrels started to scamper around the park.

- Ans  1. when the birds begin  
 2. than birds begin  
 3. when birds began  
 4. than the birds began

Question ID : 264330151857  
Option 1 ID : 264330595050  
Option 2 ID : 264330595047  
Option 3 ID : 264330595048  
Option 4 ID : 264330595049  
Status : Answered  
Chosen Option : 4

Q.18 Select the most appropriate option to fill in the blank.

During the meeting, he went on a long and angry \_\_\_\_\_ about how the project was being mismanaged.

- Ans
- 1. shout
  - 2. whisper
  - 3. rant
  - 4. mutter

Question ID : 264330151860  
Option 1 ID : 264330595062  
Option 2 ID : 264330595060  
Option 3 ID : 264330595059  
Option 4 ID : 264330595061  
Status : Answered  
Chosen Option : 3

Q.19 The following sentence has been split into four segments. Identify the segment that contains a grammatical error.

I had / a bad habit of / waking up / lately.

- Ans
- 1. lately
  - 2. waking up
  - 3. a bad habit of
  - 4. I had

Question ID : 264330153185  
Option 1 ID : 264330600302  
Option 2 ID : 264330600301  
Option 3 ID : 264330600300  
Option 4 ID : 264330600299  
Status : Answered  
Chosen Option : 1

Q.20 Select the most appropriate option to fill in the blank.

Chaitnya was \_\_\_\_\_ from the school due to his inappropriate behaviour.

- Ans
- 1. expelled
  - 2. xpelled
  - 3. expeled
  - 4. xpeled

Question ID : 264330153305  
Option 1 ID : 264330600777  
Option 2 ID : 264330600778  
Option 3 ID : 264330600775  
Option 4 ID : 264330600776  
Status : Answered  
Chosen Option : 1

**Comprehension:**

In the following passage, some words have been deleted. Read the passage carefully and select the most appropriate option to fill in each blank.

Once there was a king named Midas who was granted a (1)\_\_\_\_\_ by Dionysus, the god of wine. For his wish, Midas asked that whatever he (2)\_\_\_\_\_ would turn to gold. Despite Dionysus' efforts to prevent it, Midas pleaded that this was a fantastic wish, and so, it was bestowed. Excited about his newly-earned (3)\_\_\_\_\_, Midas started touching all kinds of things, turning each item into pure gold. But soon, Midas became (4)\_\_\_\_\_. As he picked up a piece of food, he found he couldn't eat it. It had turned to gold in his hand. Hungry, Midas groaned, "I'll starve! Perhaps this was not such an excellent wish after all!" Seeing his dismay, Midas' (5)\_\_\_\_\_ daughter threw her arms around him to comfort him, and she, too, turned to gold. "The golden touch is no blessing," Midas cried.

**SubQuestion No : 21**

**Q.21** Select the most appropriate option to fill in blank number 1.

- Ans  1. slavery  
 2. wish  
 3. employment  
 4. job

Question ID : 264330153525

Option 1 ID : 264330601610

Option 2 ID : 264330601609

Option 3 ID : 264330601608

Option 4 ID : 264330601607

Status : Answered

Chosen Option : 2

**Comprehension:**

In the following passage, some words have been deleted. Read the passage carefully and select the most appropriate option to fill in each blank.

Once there was a king named Midas who was granted a (1)\_\_\_\_\_ by Dionysus, the god of wine. For his wish, Midas asked that whatever he (2)\_\_\_\_\_ would turn to gold. Despite Dionysus' efforts to prevent it, Midas pleaded that this was a fantastic wish, and so, it was bestowed. Excited about his newly-earned (3)\_\_\_\_\_, Midas started touching all kinds of things, turning each item into pure gold. But soon, Midas became (4)\_\_\_\_\_. As he picked up a piece of food, he found he couldn't eat it. It had turned to gold in his hand. Hungry, Midas groaned, "I'll starve! Perhaps this was not such an excellent wish after all!" Seeing his dismay, Midas' (5)\_\_\_\_\_ daughter threw her arms around him to comfort him, and she, too, turned to gold. "The golden touch is no blessing," Midas cried.

**SubQuestion No : 22**

**Q.22** Select the most appropriate option to fill in blank number 2.

- Ans  1. next felt  
 2. touched  
 3. kept  
 4. left

Question ID : 264330153526

Option 1 ID : 264330601614

Option 2 ID : 264330601612

Option 3 ID : 264330601611

Option 4 ID : 264330601613

Status : Answered

Chosen Option : 2

**Comprehension:**

In the following passage, some words have been deleted. Read the passage carefully and select the most appropriate option to fill in each blank.

Once there was a king named Midas who was granted a (1)\_\_\_\_\_ by Dionysus, the god of wine. For his wish, Midas asked that whatever he (2)\_\_\_\_\_ would turn to gold. Despite Dionysus' efforts to prevent it, Midas pleaded that this was a fantastic wish, and so, it was bestowed. Excited about his newly-earned (3)\_\_\_\_\_, Midas started touching all kinds of things, turning each item into pure gold. But soon, Midas became (4)\_\_\_\_\_. As he picked up a piece of food, he found he couldn't eat it. It had turned to gold in his hand. Hungry, Midas groaned, "I'll starve! Perhaps this was not such an excellent wish after all!" Seeing his dismay, Midas' (5)\_\_\_\_\_ daughter threw her arms around him to comfort him, and she, too, turned to gold. "The golden touch is no blessing," Midas cried.

**SubQuestion No : 23**

**Q.23** Select the most appropriate option to fill in blank number 3.

- Ans  1. legacies  
 2. powers  
 3. awards  
 4. visuals

Question ID : 264330153527

Option 1 ID : 264330601618

Option 2 ID : 264330601615

Option 3 ID : 264330601617

Option 4 ID : 264330601616

Status : Answered

Chosen Option : 2

**Comprehension:**

In the following passage, some words have been deleted. Read the passage carefully and select the most appropriate option to fill in each blank.

Once there was a king named Midas who was granted a (1)\_\_\_\_\_ by Dionysus, the god of wine. For his wish, Midas asked that whatever he (2)\_\_\_\_\_ would turn to gold. Despite Dionysus' efforts to prevent it, Midas pleaded that this was a fantastic wish, and so, it was bestowed. Excited about his newly-earned (3)\_\_\_\_\_, Midas started touching all kinds of things, turning each item into pure gold. But soon, Midas became (4)\_\_\_\_\_. As he picked up a piece of food, he found he couldn't eat it. It had turned to gold in his hand. Hungry, Midas groaned, "I'll starve! Perhaps this was not such an excellent wish after all!" Seeing his dismay, Midas' (5)\_\_\_\_\_ daughter threw her arms around him to comfort him, and she, too, turned to gold. "The golden touch is no blessing," Midas cried.

**SubQuestion No : 24**

**Q.24** Select the most appropriate option to fill in blank number 4.

- Ans  1. mad  
 2. hungry  
 3. tired  
 4. angry

Question ID : 264330153528

Option 1 ID : 264330601620

Option 2 ID : 264330601622

Option 3 ID : 264330601621

Option 4 ID : 264330601619

Status : Answered

Chosen Option : 3

**Comprehension:**

In the following passage, some words have been deleted. Read the passage carefully and select the most appropriate option to fill in each blank.

Once there was a king named Midas who was granted a (1)\_\_\_\_\_ by Dionysus, the god of wine. For his wish, Midas asked that whatever he (2)\_\_\_\_\_ would turn to gold. Despite Dionysus' efforts to prevent it, Midas pleaded that this was a fantastic wish, and so, it was bestowed. Excited about his newly-earned (3)\_\_\_\_\_, Midas started touching all kinds of things, turning each item into pure gold. But soon, Midas became (4)\_\_\_\_\_. As he picked up a piece of food, he found he couldn't eat it. It had turned to gold in his hand. Hungry, Midas groaned, "I'll starve! Perhaps this was not such an excellent wish after all!" Seeing his dismay, Midas' (5)\_\_\_\_\_ daughter threw her arms around him to comfort him, and she, too, turned to gold. "The golden touch is no blessing," Midas cried.

**SubQuestion No : 25**

**Q.25** Select the most appropriate option to fill in blank number 5.

- Ans  1. estranged  
 2. guarded  
 3. beloved  
 4. hated

Question ID : 264330153529

Option 1 ID : 264330601624

Option 2 ID : 264330601626

Option 3 ID : 264330601623

Option 4 ID : 264330601625

Status : Answered

Chosen Option : 3

