

IB ACIO Grade-II (Executive) Jan 17, 2024 Shift 2 Question Paper with Answers

INTELLIGENCE BUREAU

(Ministry of Home Affairs)

Government of India

Participant ID	
Application no	
Participant Name	
Test Center Name	
Test Date	17/01/2024
Test Time	11:30 AM - 12:30 PM
Subject	IB ACIO II Exe

Section : Current Affairs

Q.1 Consider the statement about United in Science report 2023 (Sustainable Development Edition):-

1. To get on track to meet the Paris Agreement goals of limiting warming to well below 2 °C and preferably 1.5 °C
2. Fossil fuel CO₂ emissions increased 1% globally in 2022 compared to 2021
3. Preliminary estimates from January-June 2023 show a further 0.8% rise of fossil fuel CO₂ emissions.

Which of the statement given above is/are correct?

- Ans
- 1. Statement 1 and 2
 - 2. Statement 1 and 3
 - 3. Statement 2 and 4
 - 4. Statement 3 and 4

Question ID : 630680552556
 Option 1 ID : 6306802160319
 Option 2 ID : 6306802160318
 Option 3 ID : 6306802160321
 Option 4 ID : 6306802160320
 Status : Answered
 Chosen Option : 1

Q.2 Who are the eligible beneficiaries of Abua Awas Yojna ?

- A) Homeless or unattended individuals.
- B) Particularly Vulnerable Tribal Group (PVTG) members will receive priority.
- C) Current or retired government or semi-government employees.

- Ans
- 1. A, B
 - 2. A, C
 - 3. A, B, C
 - 4. B,C

Question ID : 630680552533
 Option 1 ID : 6306802160227
 Option 2 ID : 6306802160229
 Option 3 ID : 6306802160226
 Option 4 ID : 6306802160228
 Status : Answered
 Chosen Option : 3

Test Prime

**ALL EXAMS,
ONE SUBSCRIPTION**



70,000+
Mock Tests



Personalised
Report Card



Unlimited
Re-Attempt



600+
Exam Covered



Previous Year
Papers



500%
Refund



ATTEMPT FREE MOCK NOW

Q.3 Consider the following statement about Indian Army:

1. Indian Army has inaugurated a Vertical Wind Tunnel (VWT) in October 2023
2. This tunnel is Indian Army's first Vertical Wind Tunnel (VWT)
3. This tunnel was inaugurated at the Special Forces Training School (SFTS) in Maharashtra

Which of the statement given above is/are correct?

- Ans
- 1. Statement 2
 - 2. Statement 1 and 2
 - 3. Statement 3 and 4
 - 4. All are correct

Question ID : 630680552551
 Option 1 ID : 6306802160298
 Option 2 ID : 6306802160299
 Option 3 ID : 6306802160301
 Option 4 ID : 6306802160300
 Status : Answered
 Chosen Option : 4

Q.4 Kodava Hockey Festival is held in _____.

- Ans
- 1. Karnataka
 - 2. Tamil Nadu
 - 3. Andhra Pradesh
 - 4. Telangana

Question ID : 630680552535
 Option 1 ID : 6306802160236
 Option 2 ID : 6306802160234
 Option 3 ID : 6306802160235
 Option 4 ID : 6306802160237
 Status : Answered
 Chosen Option : 1

Q.5 As of November 2023, the number of Ayushman Bharat Health and Wellness Centers in India is _____ approximately.

- Ans
- 1. 1 lakh
 - 2. 2 lakh
 - 3. 1.6 lakh
 - 4. 1.2 lakh

Question ID : 630680552531
 Option 1 ID : 6306802160218
 Option 2 ID : 6306802160221
 Option 3 ID : 6306802160220
 Option 4 ID : 6306802160219
 Status : Answered
 Chosen Option : 2

Q.6 _____ is a Kalamkari artist from Gujarat won the Padma Shree in 2023.

- Ans
- 1. Shri Kapil Dev Prasad
 - 2. Shri Ramesh Parmar
 - 3. Shri Bhanubhai Chitara
 - 4. Shri Dilshad Hussain

Question ID : 630680552536
 Option 1 ID : 6306802160240
 Option 2 ID : 6306802160241
 Option 3 ID : 6306802160239
 Option 4 ID : 6306802160238
 Status : Answered
 Chosen Option : 4

Q.7 Consider the following statement about Jan Jatiya Gaurav Divas 2023:

1. Pan-India celebrations marked the Jan Jatiya Gaurav Divas on 11th November 2023
2. This event is to pay tributes to Bhagwan Birsa Munda on his birth anniversary
3. Prime Minister launched PM JANMAN (PM- Janjati Adivasi Nyaya Maha Abhiyan) during this program.
4. PM also flagged off 'Viksit Bharat Sankalp Yatra' during this program

Which of the statement given above is/are correct?

- Ans
- 1. All are correct
 - 2. Statement 2,3 and 4
 - 3. Statement 1, 2 and 3
 - 4. Statement 1, 3, 4

Question ID : 630680552554
 Option 1 ID : 6306802160312
 Option 2 ID : 6306802160310
 Option 3 ID : 6306802160311
 Option 4 ID : 6306802160313
 Status : Answered
 Chosen Option : 2

Q.8 Consider the following statement about Center of Excellence (CoE) named ATMAN:

1. Full form of the ATMAN is Advanced Technologies for Monitoring Air-quality indicators
2. The Indian Institute of Technology, Delhi has established this in November 2023
3. It focuses on building indigenous low-cost sensor manufacturing and AI/ML capabilities to enhance air quality
4. It aims to translate sustainable technologies and business models into practical products and services with cutting edge technology

Which of the statement given above is/are correct?

- Ans
- 1. Statement 2,3 and 4
 - 2. Statement 1, 2 and 3
 - 3. Statement 1, 3, 4
 - 4. All are correct

Question ID : 630680552548
 Option 1 ID : 6306802160286
 Option 2 ID : 6306802160287
 Option 3 ID : 6306802160289
 Option 4 ID : 6306802160288
 Status : Answered
 Chosen Option : 3

Q.9 Which of the following won the 'NATIONAL TECHNOLOGY AWARD- TRANSLATIONAL RESEARCH' in National Technology Week 2023?

- Ans 1. Ritu Trivedi
 2. Jaysingh Krushnarao Chavhan
 3. Govindaraju Thimmaiah
 4. Nimisha Brahmhatt

Question ID : 630680552530
 Option 1 ID : 6306802160216
 Option 2 ID : 6306802160215
 Option 3 ID : 6306802160214
 Option 4 ID : 6306802160217
 Status : Not Answered
 Chosen Option : --

Q.10 Consider the following statement about ICC Men's Cricket World Cup 2023:

1. Virat Kohli has been named as the player of the tournament.
2. Mohammed Shami was the Highest Wicket Taker in the tournament
3. South Africa hosted this tournament

Which of the statement given above is/are correct?

- Ans 1. Statement 1 and 2
 2. Only statement 2
 3. Only statement 3
 4. All are correct

Question ID : 630680552547
 Option 1 ID : 6306802160283
 Option 2 ID : 6306802160282
 Option 3 ID : 6306802160285
 Option 4 ID : 6306802160284
 Status : Answered
 Chosen Option : 2

Q.11 Consider the following statement about Global Hunger Index report 2023:

1. India ranks 111th out of the 125 countries
2. According to the report India has the highest child wasting rate in the world
3. The score of India in the Global Hunger Index-2023 is 34.6%
4. Rate of undernourishment in India is 24.7%

Which of the statement given above is/are correct?

- Ans 1. Statement 2,3 and 4
 2. Statement 1 and 2
 3. All are correct
 4. Statement 1, 2 and 4

Question ID : 630680552552
 Option 1 ID : 6306802160302
 Option 2 ID : 6306802160303
 Option 3 ID : 6306802160304
 Option 4 ID : 6306802160305
 Status : Answered
 Chosen Option : 4

Q.12 Consider the following statement about "National Family Health Survey2023-24":

1. It is sixth survey of NFHS series
2. It was provided by the ICMR and the National AIDS Research Institute (NARI), Pune
3. Assistance for some of the Clinical, Anthropometric, and Biochemical (CAB) tests was provided by the ICMR and the National AIDS Research Institute (NARI), Pune

Which of the statement given above is/are correct?

- Ans
- 1. Statement 2 and 3
 - 2. Statement 1 and 2
 - 3. statement 2
 - 4. All are correct

Question ID : 630680552553

Option 1 ID : 6306802160309

Option 2 ID : 6306802160307

Option 3 ID : 6306802160306

Option 4 ID : 6306802160308

Status : Not Answered

Chosen Option : --

Q.13 Consider the following statement about Climate Change Performance Index (CCPI, 2023): -

1. India improves 2 ranks in CCPI 2023
2. This report was published by German Watch, New Climate Institute and Climate Action Network International based in Germany.
3. The first, second, third and fourth ranks were not awarded to any country
4. India was best among the G20 countries.

Which of the statement given above is/are correct?

- Ans
- 1. Statement 1, 3, 4
 - 2. Statement 2,3 and 4
 - 3. Statement 1, 2 and 4
 - 4. All are correct

Question ID : 630680552555

Option 1 ID : 6306802160317

Option 2 ID : 6306802160314

Option 3 ID : 6306802160315

Option 4 ID : 6306802160316

Status : Answered

Chosen Option : 3

Q.14 Consider the following statement about "Surat" warship:

1. On 6th October, Prime Minister Narendra Modi unveiled the crest of the Indian Navy's warship 'Surat.'
2. It was the part of the project 15B
3. Surat' holds the distinction of being the second warship named after a city in Gujarat.
4. India purchased this warship from Japan

Which of the statement given above is/are correct?

- Ans
- 1. Statement 2
 - 2. All are correct
 - 3. Only Statement 3 and 4
 - 4. Statement 1 and 2

Question ID : 630680552550
 Option 1 ID : 6306802160294
 Option 2 ID : 6306802160296
 Option 3 ID : 6306802160297
 Option 4 ID : 6306802160295
 Status : Answered
 Chosen Option : 4

Q.15 Who among the following is appointed as 25th Director General of Indian Coast Guard?

- Ans
- 1. Virender Singh Pathania
 - 2. Krishnaswamy Natarajan
 - 3. Rajendra Singh
 - 4. Rakesh Pal

Question ID : 630680552532
 Option 1 ID : 6306802160223
 Option 2 ID : 6306802160224
 Option 3 ID : 6306802160225
 Option 4 ID : 6306802160222
 Status : Answered
 Chosen Option : 2

Q.16 The Securities and Exchange Board of India (SEBI) announced a crucial reduction in the time period for listing shares in public issues from _____. (where T is the issue closing date)

- Ans
- 1. "T + 8" to "T + 4"
 - 2. "T + 6" to "T + 3"
 - 3. "T + 4" to "T + 2"
 - 4. "T + 2" to "T"

Question ID : 630680552527
 Option 1 ID : 6306802160202
 Option 2 ID : 6306802160203
 Option 3 ID : 6306802160204
 Option 4 ID : 6306802160205
 Status : Not Answered
 Chosen Option : --

Q.17 Match the list 1 and list 2 and select the correct answer using the code given below.

List 1 (Launcher)	List 2 (satellite)
A. PSLV-C57	1. EOS-06
B. PSLV-C56	2. TeLEOS-2
C. PSLV-C55	3. DS-SAR
D. PSLV-C54	4. Aditya-L1

- Ans
- 1. A-2 B-3 C-4 D-1
 - 2. A-4 B-2 C-1 D-3
 - 3. A-4 B-3 C-2 D-1
 - 4. A-2 B-3 C-1 D-4

Question ID : 630680552549
 Option 1 ID : 6306802160290
 Option 2 ID : 6306802160292
 Option 3 ID : 6306802160293
 Option 4 ID : 6306802160291
 Status : Not Answered
 Chosen Option : --

Q.18 As per November 2023, _____ is the third largest country in the world in ethanol production.

- Ans
- 1. Brazil
 - 2. Thailand
 - 3. India
 - 4. USA

Question ID : 630680552528
 Option 1 ID : 6306802160208
 Option 2 ID : 6306802160209
 Option 3 ID : 6306802160206
 Option 4 ID : 6306802160207
 Status : Answered
 Chosen Option : 3

Q.19 Who became the first Indian man to win a gold medal in 3000m steeplechase at the Asian Games?

- Ans
- 1. Naveen Kumar
 - 2. Madan Singh
 - 3. Avinash Sable
 - 4. Gopal Saini

Question ID : 630680552529
 Option 1 ID : 6306802160210
 Option 2 ID : 6306802160212
 Option 3 ID : 6306802160213
 Option 4 ID : 6306802160211
 Status : Not Answered
 Chosen Option : --

Q.20 Which of the following is the cleanest city in India in 2023?

- Ans 1. Indore
 2. Surat
 3. Ahmedabad
 4. Mysuru

Question ID : 630680552534
 Option 1 ID : 6306802160231
 Option 2 ID : 6306802160230
 Option 3 ID : 6306802160233
 Option 4 ID : 6306802160232
 Status : Answered
 Chosen Option : 1

Section : General Studies

Q.1 Consider the following statements:

1. Akbar abolished Jizya, the tax on non-Muslims, in 1564.
2. The Mansabdari system, a grading of civil and military officials, was introduced by Shah Jahan.
3. Aurangzeb was the last of the prominent Mughal emperors and his reign marked the beginning of the decline of the Mughal Empire.

Which of the statements above is/are correct?

- Ans 1. 1 and 2 only
 2. 1, 2, and 3
 3. 1 and 3 only
 4. 2 and 3 only

Question ID : 630680552840
 Option 1 ID : 6306802161455
 Option 2 ID : 6306802161457
 Option 3 ID : 6306802161454
 Option 4 ID : 6306802161456
 Status : Answered
 Chosen Option : 2

Q.2 Consider the following statements:

1. The 73rd Constitutional Amendment Act provided a constitutional status to urban local bodies.
2. The Panchayats (Extension to Scheduled Areas) Act extends the provisions of Panchayats to the tribal areas of twelve states.
3. The National Panchayati Raj Day is celebrated on April 24th every year in India.

Which of the statements above is/are correct?

- Ans 1. 3 only
 2. 3 and 4 only
 3. 2 only
 4. 1 only

Question ID : 630680552848
 Option 1 ID : 6306802161488
 Option 2 ID : 6306802161489
 Option 3 ID : 6306802161487
 Option 4 ID : 6306802161486
 Status : Answered
 Chosen Option : 4

Q.3 Which of the following are Desert Rivers which flow for some distance and are lost in the desert?

- Ans**
- 1. Rukni
 - 2. Katakhal
 - 3. Rupen
 - 4. Dhaleswari

Question ID : **630680552823**
 Option 1 ID : **6306802161386**
 Option 2 ID : **6306802161389**
 Option 3 ID : **6306802161387**
 Option 4 ID : **6306802161388**
 Status : **Answered**
 Chosen Option : **4**

Q.4 Consider the following statements:

- 1.The Pradhan Mantri Awas Yojana- Gramin (PMAY-G) had been devised in line with Government's commitment to provide 'Housing for All' by 2021 in the rural areas.
 - 2.The Deendayal Antyodaya Yojana-National Rural Livelihoods Mission (DAY-NRLM) seeks to alleviate rural poverty through the promotion of diversified and gainful self-employment.
 - 3.The Sansad Adarsh Gram Yojana (SAGY) encourages Members of Parliament to develop model villages.
 - 4.The e-Panchayat project is an initiative for the digitization of all the Panchayats in the country, enhancing transparency and accountability.
- Which of the statements above is/are correct?

- Ans**
- 1. 1, 3, and 4 only
 - 2. 1, 2, and 3 only
 - 3. 2, 3, and 4 only
 - 4. 1, 2, 3 and 4

Question ID : **630680552846**
 Option 1 ID : **6306802161480**
 Option 2 ID : **6306802161478**
 Option 3 ID : **6306802161479**
 Option 4 ID : **6306802161481**
 Status : **Not Answered**
 Chosen Option : **--**

Q.5 Which of the following dynasty is also known as the slave dynasty?

- Ans**
- 1. Khilji Dynasty
 - 2. Lodi Dynasty
 - 3. Mamluk Dynasty
 - 4. Tughluq Dynasty

Question ID : **630680552819**
 Option 1 ID : **6306802161372**
 Option 2 ID : **6306802161371**
 Option 3 ID : **6306802161373**
 Option 4 ID : **6306802161370**
 Status : **Answered**
 Chosen Option : **3**

Q.6 Consider the following statements:

- 1.The Council of Ministers is collectively responsible to the Lok Sabha.
 - 2.The total number of Ministers, including the Prime Minister, in the Council of Ministers shall not exceed twenty per cent. of the total number of members of the House of the People.
 - 3.The President can proclaim a national emergency only after receiving a written recommendation from the Cabinet.
 - 4.The Council of Ministers must have members from both houses of Parliament.
- Which of the statements above is/are correct?

- Ans
- 1. 1, 2, 3 and 4
 - 2. 2 and 4 only
 - 3. 1, 2 and 3 only
 - 4. 1 and 3 only

Question ID : 630680552847
 Option 1 ID : 6306802161485
 Option 2 ID : 6306802161483
 Option 3 ID : 6306802161484
 Option 4 ID : 6306802161482
 Status : Not Answered
 Chosen Option : --

Q.7 The Harappan site of Indus Valley Civilization was excavated by_____.

- Ans
- 1. Rai Bahadur Daya Ram Sahni
 - 2. N.G Majumdar
 - 3. Sir John Marshal
 - 4. R. D. Banerjee

Question ID : 630680552822
 Option 1 ID : 6306802161383
 Option 2 ID : 6306802161385
 Option 3 ID : 6306802161382
 Option 4 ID : 6306802161384
 Status : Answered
 Chosen Option : 4

Q.8 Which of the following state has the lowest sex ratio as per 2011 census?

- Ans
- 1. Kerala
 - 2. Mizoram
 - 3. Chhattisgarh
 - 4. Odisha

Question ID : 630680552824
 Option 1 ID : 6306802161391
 Option 2 ID : 6306802161392
 Option 3 ID : 6306802161393
 Option 4 ID : 6306802161390
 Status : Answered
 Chosen Option : 4

Q.9 Which of the following statements is correct?

- A) Statutory bodies are established by an act of a parliament.
- B) Constitutional bodies derive their powers from the constitution.

- Ans
- 1. Only A is true
 - 2. Both A and B is true
 - 3. Only B is true
 - 4. Neither A nor B is true

Question ID : 630680552828
Option 1 ID : 6306802161406
Option 2 ID : 6306802161408
Option 3 ID : 6306802161407
Option 4 ID : 6306802161409
Status : Not Answered
Chosen Option : --

Q.10 Who assassinated King Brihadratha of the Mauryan Empire?

- Ans
- 1. Vāsishka
 - 2. Kujula Kadphises
 - 3. Pushyamitra Sunga
 - 4. Kanishka

Question ID : 630680552820
Option 1 ID : 6306802161377
Option 2 ID : 6306802161374
Option 3 ID : 6306802161375
Option 4 ID : 6306802161376
Status : Answered
Chosen Option : 3

Q.11 In the Indian Constitution, from which country Appointment of state governors by the Centre is borrowed from?

- Ans
- 1. France
 - 2. Japan
 - 3. Canada
 - 4. United Kingdom

Question ID : 630680552827
Option 1 ID : 6306802161402
Option 2 ID : 6306802161405
Option 3 ID : 6306802161404
Option 4 ID : 6306802161403
Status : Answered
Chosen Option : 1

Q.12 Transportation and Storage falls under which sector of economic activity?

- Ans
- 1. Secondary sector
 - 2. Primary sector
 - 3. Service sector
 - 4. Tertiary Sector

Question ID : 630680552825
 Option 1 ID : 6306802161395
 Option 2 ID : 6306802161394
 Option 3 ID : 6306802161397
 Option 4 ID : 6306802161396
 Status : Answered
 Chosen Option : 4

Q.13 Match the following ports with their respective states and select the correct answer using the codes/options given below the lists.

List-I (Port)	List-II (State)
A. Kandla	(i) Odisha
B. Haldia	(ii) West Bengal
C. Cochin	(iii) Kerala
D. Paradip	(iv) Gujarat

- Ans
- 1. A-ii B-iii C-i D-iv
 - 2. A-iii B-i C-iv D-ii
 - 3. A-i B-iv C-ii D-iii
 - 4. A-iv B-ii C-iii D-i

Question ID : 630680552844
 Option 1 ID : 6306802161472
 Option 2 ID : 6306802161471
 Option 3 ID : 6306802161473
 Option 4 ID : 6306802161470
 Status : Answered
 Chosen Option : 4

Q.14 Consider the following statements:

- 1) Bal Gangadhar Tilak was considered the Father of Indian Unrest by the British colonial authorities.
- 2) Dadabhai Naoroji is known as the Grand Old Man of India and was the first to calculate the national income of India.
- 3) Subhas Chandra Bose went on to lead the Indian National Army (INA) after resigning from the presidency of the Indian National Congress.
- 4) Bhagat Singh was one of the youngest freedom fighters of India and a member of the Hindustan Socialist Republican Association.

Which of the above statements are correct?

- Ans
- 1. 2, 3, and 4
 - 2. 1,2, 3, and 4
 - 3. 1, 3, and 4
 - 4. 1, 2, and 3

Question ID : 630680552839
 Option 1 ID : 6306802161452
 Option 2 ID : 6306802161453
 Option 3 ID : 6306802161451
 Option 4 ID : 6306802161450
 Status : Answered
 Chosen Option : 2

Q.15 Consider the following statements:

- 1.The Hadith literature is a record of the sayings and deeds of the Prophet Muhammad.
 - 2.Sufism is a mystical Islamic belief system that seeks direct personal experience with God.
 - 3.The Five Pillars of Islam constitute the basic acts considered mandatory for Muslims.
 - 4.The Chishti Order is one of the four major Sufi orders (tariqas) of Islam that originated in Chishti, a small town near Rawalpindi, Pakistan.
- Which of the statements above is/are correct?

- Ans
- 1. 1, 3, and 4 only
 - 2. 2, 3, and 4 only
 - 3. 1, 2, and 3 only
 - 4. 1, 2, 3, and 4

Question ID : 630680552842
 Option 1 ID : 6306802161463
 Option 2 ID : 6306802161464
 Option 3 ID : 6306802161462
 Option 4 ID : 6306802161465
 Status : Not Answered
 Chosen Option : --

Q.16 Which of the following were the negative effects of the green revolution:

- A) Increased economic disparity among regions.
- B) Deficiency of micronutrients.
- C) Depletion of groundwater level.
- D) Physical and chemical degradation of soil.

- Ans
- 1. A, C, D only
 - 2. B, C, D only
 - 3. A, B, C only
 - 4. A, B, C, D

Question ID : 630680552826
 Option 1 ID : 6306802161400
 Option 2 ID : 6306802161399
 Option 3 ID : 6306802161398
 Option 4 ID : 6306802161401
 Status : Not Answered
 Chosen Option : --

Q.17 Consider the following statements:

1. The Constitution of India designates Hindi in Devanagari script as the official language of the Government of India.
 2. English was also an associate official language for a period of 10 years only from the date of commencement of the Constitution.
 3. Marathi and Tamil are among the languages that are also used for official purposes in the Union.
- Which of the statements above is/are correct?

- Ans
- 1. 2 and 3 only
 - 2. 1 and 2 only
 - 3. 1 only
 - 4. 1 and 3 only

Question ID : 630680552841
 Option 1 ID : 6306802161459
 Option 2 ID : 6306802161458
 Option 3 ID : 6306802161460
 Option 4 ID : 6306802161461
 Status : Answered
 Chosen Option : 2

Q.18 Consider the following statements:

- 1.The South Asian Free Trade Area (SAFTA) agreement was signed to promote trade and economic cooperation among SAARC countries.
 - 2.The bilateral trade between India and Pakistan has increased to USD 1.35 billion during April-December 2022 as against USD 516.36 million in the whole 2021-22.
 - 3.Bangladesh is India's largest trade partner in South Asia.
- Which of the statements above is/are correct?

- Ans**
- 1. 1 and 3 only
 - 2. 2 and 3 only
 - 3. 1 and 2 only
 - 4. 1, 2 and 3

Question ID : **630680552845**
 Option 1 ID : **6306802161476**
 Option 2 ID : **6306802161475**
 Option 3 ID : **6306802161474**
 Option 4 ID : **6306802161477**
 Status : **Not Answered**
 Chosen Option : --

Q.19 Which state has the maximum percentage of Jain population as per 2011 census?

- Ans**
- 1. Delhi
 - 2. Rajasthan
 - 3. Maharashtra
 - 4. Gujarat

Question ID : **630680552821**
 Option 1 ID : **6306802161379**
 Option 2 ID : **6306802161381**
 Option 3 ID : **6306802161380**
 Option 4 ID : **6306802161378**
 Status : **Answered**
 Chosen Option : **2**

Q.20 Consider the following statements:

- 1.The Eastern Ghats and Western Ghats meet at the Nilgiri Hills.
 - 2.The Thar Desert is the most densely populated desert in the world.
 - 3.The Patkai or Purvanchal ranges are part of the Eastern Himalayas.
 - 4.The Satpura range is formed by a series of scarp plateaus on the south, generally at an elevation varying between 300-400 m above the mean sea level.
- Which of the statements above is/are correct?

- Ans**
- 1. 2, 3 and 4 only
 - 2. 1, 2 and 4 only
 - 3. 1, 2 and 3 only
 - 4. 1, 3 and 4 only

Question ID : **630680552843**
 Option 1 ID : **6306802161468**
 Option 2 ID : **6306802161466**
 Option 3 ID : **6306802161469**
 Option 4 ID : **6306802161467**
 Status : **Not Answered**
 Chosen Option : --

Q.1 A mixture contains alcohol and water in the ratio 4: 7. If it contains 9 litres more water than alcohol, then find the quantity of water in the mixture.

- Ans**
- 1. 24 litres
 - 2. 21 litres
 - 3. 20 litres
 - 4. 18 litres

Question ID : **630680552785**
 Option 1 ID : **6306802161234**
 Option 2 ID : **6306802161235**
 Option 3 ID : **6306802161237**
 Option 4 ID : **6306802161236**
 Status : **Not Answered**
 Chosen Option : --

Q.2 $p\%$ of Bobby's income is equal to $q\%$ of Ron's income. If Bobby's income was Rs y less than what it is and Ron's income was Rs z more than what it is, the ratio of the incomes of Bobby and Ron would have been $m : n$. The actual combined income of the duo is Rs x .

Which one of the following is correct in respect of the Question and the Statements given below?

Statement 1: The values of p, q, y, z, m, n and x are respectively 40, 56, 3200, 2000, 6, 5 and 67200.

Statement 2: The values of p, q, y, z, m, n and x are respectively 20, 32, 1200, 5500, 4, 3 and 83200.

- Ans**
- 1. Neither of the two statements is feasible.
 - 2. Only Statement 2 is feasible.
 - 3. Only Statement 1 is feasible.
 - 4. Both Statements are feasible.

Question ID : **630680552801**
 Option 1 ID : **6306802161301**
 Option 2 ID : **6306802161299**
 Option 3 ID : **6306802161298**
 Option 4 ID : **6306802161300**
 Status : **Not Answered**
 Chosen Option : --

Q.3 A shopkeeper buys three varieties of pulses at Rs 132, Rs 160 and Rs 192 per kg respectively and mixes them in the ratio 9:2:1. The marked price per kg of the blended pulses is fixed at Rs 238, the shopkeeper gives a discount equal to $\frac{1}{n}$ of the marked price and still earns a profit of 40%. What is the value of n ?

- Ans**
- 1. 5
 - 2. 6
 - 3. 4
 - 4. 7

Question ID : **630680552802**
 Option 1 ID : **6306802161304**
 Option 2 ID : **6306802161303**
 Option 3 ID : **6306802161305**
 Option 4 ID : **6306802161302**
 Status : **Not Answered**
 Chosen Option : --

Q.4 Find the least number that should be added to 567201, so that the sum is exactly divisible by 9.

- Ans
- 1. 4
 - 2. 5
 - 3. 6
 - 4. 8

Question ID : 630680552781
Option 1 ID : 6306802161220
Option 2 ID : 6306802161219
Option 3 ID : 6306802161218
Option 4 ID : 6306802161221
Status : Answered
Chosen Option : 3

Q.5 In how many years will a sum of money be 12 times itself at 44% per annum simple interest?

- Ans
- 1. 35 years
 - 2. 25 years
 - 3. 30 years
 - 4. 20 years

Question ID : 630680552779
Option 1 ID : 6306802161210
Option 2 ID : 6306802161211
Option 3 ID : 6306802161212
Option 4 ID : 6306802161213
Status : Not Answered
Chosen Option : --

Q.6 By selling an article for ₹5600, one gains ₹ 1600. What is the gain percent?

- Ans
- 1. 45%
 - 2. 40%
 - 3. 35%
 - 4. 30%

Question ID : 630680552784
Option 1 ID : 6306802161231
Option 2 ID : 6306802161233
Option 3 ID : 6306802161232
Option 4 ID : 6306802161230
Status : Answered
Chosen Option : 2

Q.7 Ravi and Rajiv decided to run a 960 m long race on a track as long as the length of the race.

Which of the statement(s) below is (are) sufficient to conclude that Rajiv caught up with Ravi with $\frac{3}{8}$ of the track length still to be covered?

Statement 1: Ravi is allowed to start 5 seconds before Rajiv started running.

Statement 2: Ravi ran at 8 m per second.

Statement 3: Rajiv ran at a speed of 10 m/s?

- Ans**
- 1. Statements 2 and 3 taken together are sufficient.
 - 2. All the three statements taken together is sufficient.
 - 3. Statements 1 and 3 taken together are sufficient.
 - 4. Even all the three statements taken together is not sufficient.

Question ID : 630680552806
 Option 1 ID : 6306802161321
 Option 2 ID : 6306802161318
 Option 3 ID : 6306802161320
 Option 4 ID : 6306802161319
 Status : Not Answered
 Chosen Option : --

Q.8 On a particular day each of Danny, Edwin and Fahim sold three types of pens from their respective shops. Danny and Edwin sold an identical number of pens of Type A while Fahim sold twice as many pens of Type A as each of Danny and Edwin sold. The ratio of the numbers of pens of Type B sold by Danny, Edwin and Fahim was 3 : 5 : 2 respectively, while each of the trio sold an identical number of pens of Type C. The three sellers sold each of the types of pens at different prices per unit.

Assertion (A): It is possible that Danny sold each pen of Type A at a profit of Rs 2, each pen of Type B at a loss of Re 1, and each pen of Type C at a loss of Rs 12 and made an overall profit of Rs 125; Edwin sold each pen of Type A at a profit of Rs 2, each pen of Type B at a loss of Rs 6, and each pen of Type C at a profit of Rs 6 and made an overall profit of Rs 110; and Fahim sold each pen of Type A at a profit of Re 1, each pen of Type B at a profit of Re 1, and each pen of Type C at a loss of Rs 3 and made an overall profit of Rs 210.]

Reason (R): Framing and solving the three possible linear equations we will find that we get a unique solution.

- Ans**
- 1. Assertion (A) is true and Reason (R) is false.
 - 2. Both Assertion (A) and Reason (R) are true but Reason (R) is not a correct explanation of Assertion (A).
 - 3. Assertion (A) is false and Reason (R) is true.
 - 4. Both Assertion (A) and Reason (R) are true and Reason (R) is a correct explanation of Assertion (A).

Question ID : 630680552807
 Option 1 ID : 6306802161324
 Option 2 ID : 6306802161323
 Option 3 ID : 6306802161325
 Option 4 ID : 6306802161322
 Status : Not Answered
 Chosen Option : --

Q.9 The difference between the value of the number increased by 32% and the value of the number decreased by 28% is 180. Find the number.

- Ans**
- 1. 300
 - 2. 320
 - 3. 260
 - 4. 280

Question ID : **630680552783**
 Option 1 ID : **6306802161226**
 Option 2 ID : **6306802161227**
 Option 3 ID : **6306802161228**
 Option 4 ID : **6306802161229**
 Status : **Not Answered**
 Chosen Option : --

Q.10 The expense of a boarding house is partly fixed and partly varies with the number of boarders. What is the profit per head per month when there are 80 boarders?

Which one of the following is correct in respect of the Question and the Statements given below?

Statement 1: Each boarder pays S 780 a month.

Statement 2: The profit is \$108 per head per month when there are 50 boarders.

Statement 3: The profit is \$128 per head per month when there are 60 boarders.

- Ans**
- 1. Statement 2 and Statement 3 together are sufficient.
 - 2. Statement 1 and any one of the other two statements taken together are sufficient.
 - 3. All the three statements together are sufficient,
 - 4. Even all the three statements taken together is still not sufficient.

Question ID : **630680552804**
 Option 1 ID : **6306802161311**
 Option 2 ID : **6306802161310**
 Option 3 ID : **6306802161312**
 Option 4 ID : **6306802161313**
 Status : **Answered**
 Chosen Option : **2**

Q.11 The square of the natural numbers are grouped as $1^2, (2^2, 3^2), (4^2, 5^2, 6^2), \dots, (\dots, 210^2)$

Which one of the following is correct in respect of the Question and the Statements?

Statement 1: The sum of the terms in the last group is 804660.

Statement 2: There are 20 groups in all.

Statement 3: The sum of all the terms till the last but one group is 2304415.

Ans 1.

Statements 1 and 2 are both correct, but Statement 3 is incorrect.

2. All three statements are correct.

3. Only Statement 2 is correct.

4.

Statements 2 and 3 are both correct, but Statement 1 is incorrect.

Question ID : 630680552799
 Option 1 ID : 6306802161293
 Option 2 ID : 6306802161290
 Option 3 ID : 6306802161291
 Option 4 ID : 6306802161292
 Status : Answered
 Chosen Option : 2

Q.12 The ratio of the number of students in the morning shift and the afternoon shift of a school was 13 : 9. After 'n' students moved from the morning shift to the afternoon shift, the said ratio became 19 : 14. Now 153 new students sought admission in the school, and these students joined the morning and the afternoon shifts in the ratio 6 : 11 respectively. If the ratio of the number of students in the morning shift and the afternoon shift of the school after the new admissions became 24 : 19, find the value of 'n'.

Ans 1. 36

2. 30

3. 24

4. 27

Question ID : 630680552803
 Option 1 ID : 6306802161309
 Option 2 ID : 6306802161308
 Option 3 ID : 6306802161306
 Option 4 ID : 6306802161307
 Status : Marked For Review
 Chosen Option : 3

Q.13 Harsh was four times as old as Dev six years ago. How old is Dev today if Harsh will be 40 years old 10 years later?

Ans 1. 13 years

2. 12 years

3. 14 years

4. 11 years

Question ID : 630680552787
 Option 1 ID : 6306802161244
 Option 2 ID : 6306802161245
 Option 3 ID : 6306802161242
 Option 4 ID : 6306802161243
 Status : Not Answered
 Chosen Option : --

Q.14 In an election, Candidate M received 67% of the votes, and Candidate N received 33% of the votes. If the total votes were 10,000, find the difference in the number of votes received by each candidate.

- Ans**
- 1. 3500
 - 2. 3000
 - 3. 4200
 - 4. 3400

Question ID : 630680552782
 Option 1 ID : 6306802161223
 Option 2 ID : 6306802161224
 Option 3 ID : 6306802161225
 Option 4 ID : 6306802161222
 Status : Not Answered
 Chosen Option : --

Q.15 A train, 364 meters long, passes a pole in 26 seconds. Find the speed of the train in meters per second.

- Ans**
- 1. 14 m/sec
 - 2. 11 m/sec
 - 3. 13 m/sec
 - 4. 15 m/sec

Question ID : 630680552786
 Option 1 ID : 6306802161241
 Option 2 ID : 6306802161240
 Option 3 ID : 6306802161239
 Option 4 ID : 6306802161238
 Status : Answered
 Chosen Option : 1

Q.16 If the interest is compounded yearly, find the compound interest on the sum ₹ 30,000 at the rate of 4% per annum for 3 years.

- Ans**
- 1. ₹3525.88
 - 2. ₹4525.55
 - 3. ₹3745.92
 - 4. ₹3856.25

Question ID : 630680552780
 Option 1 ID : 6306802161215
 Option 2 ID : 6306802161217
 Option 3 ID : 6306802161214
 Option 4 ID : 6306802161216
 Status : Answered
 Chosen Option : 3

Q.17 A salt and water mixture, of which 7.5% is salt, costs ₹22.50 per litre. Another salt and water mixture, of which 17.5% is salt, costs ₹z per litre. If the cost of twelve litres of a salt and water mixture, of which 22.5% is salt, is ₹450, find the value of z.

- Ans**
- ✓ 1. 32.50
 - ✗ 2. 31.50
 - ✗ 3. 30.60
 - ✗ 4. 34.50

Question ID : 630680552798
 Option 1 ID : 6306802161289
 Option 2 ID : 6306802161286
 Option 3 ID : 6306802161287
 Option 4 ID : 6306802161288
 Status : Not Answered
 Chosen Option : --

Q.18 If $x = 7 + 7^{\frac{2}{3}} + 7^{\frac{1}{3}}$, then which of the options below is correct?

- Ans**
- ✗ 1. $x^3 + 21x^2 - 126x - 252 = 0$
 - ✗ 2. $x^3 + 21x^2 - 126x + 252 = 0$
 - ✓ 3. $x^3 - 21x^2 + 126x - 252 = 0$
 - ✗ 4. $x^3 - 21x^2 - 126x + 252 = 0$

Question ID : 630680552800
 Option 1 ID : 6306802161295
 Option 2 ID : 6306802161296
 Option 3 ID : 6306802161297
 Option 4 ID : 6306802161294
 Status : Not Answered
 Chosen Option : --

Q.19 The average of five numbers is 87.8. The average of the first two numbers is 81.5 and the average of the last two numbers is 93.5. What is the third number?

- Ans**
- ✗ 1. 88
 - ✗ 2. 90
 - ✓ 3. 89
 - ✗ 4. 93

Question ID : 630680552778
 Option 1 ID : 6306802161208
 Option 2 ID : 6306802161209
 Option 3 ID : 6306802161207
 Option 4 ID : 6306802161206
 Status : Not Answered
 Chosen Option : --

Q.20 A cistern can be filled by one of two pipes in 52 minutes and by the other pipe in 60 minutes. Both pipes are opened together for a certain time but being particularly clogged only $\frac{13}{20}$ of the full quantity of water flows through the first pipe and only $\frac{3}{4}$ of the full quantity of water flows through the second pipe. The obstructions, however, were suddenly removed in both the pipes after some time and the cistern got filled in $15\frac{3}{5}$ minutes from that moment. For how many minutes did the pipes remain clogged?

- Ans**
- 1. $17\frac{4}{5}$
 - 2. $17\frac{1}{5}$
 - 3. $17\frac{3}{5}$
 - 4. $17\frac{2}{5}$

Question ID : 630680552805
 Option 1 ID : 6306802161317
 Option 2 ID : 6306802161314
 Option 3 ID : 6306802161316
 Option 4 ID : 6306802161315
 Status : Not Answered
 Chosen Option : --

Section : Reasoning and Logical Aptitude

Q.1 In a class of 140 students, 80 students like math, 88 like science, 30 like both subjects. Find the number of students who like Either Math or Science.

- Ans**
- 1. 135
 - 2. 138
 - 3. 120
 - 4. 130

Question ID : 630680552740
 Option 1 ID : 6306802161056
 Option 2 ID : 6306802161054
 Option 3 ID : 6306802161057
 Option 4 ID : 6306802161055
 Status : Answered
 Chosen Option : 2

Q.2 'A @ B' means 'A is the wife of B'
 'A = B' means 'A is the brother of B'
 'A # B' means 'A is the son of B'
 'A & B' means 'A is the father of B'
 'A + B' means 'A is the mother of B'

Based on the above information, find out which of the given statements can be the reason/s behind the assertion made below if it is given that 'P = F & G @ M # L'.
 Assertion: T is paternal grandfather of R?
 Reason A : L @ T
 Reason B : G + R

- Ans 1. Both A and B are reasons behind the assertion
 2. Neither A nor B is the reason behind the assertion
 3. Only A is the reason behind the assertion
 4. Only B is the reason behind the assertion

Question ID : 630680552760
 Option 1 ID : 6306802161134
 Option 2 ID : 6306802161137
 Option 3 ID : 6306802161135
 Option 4 ID : 6306802161136
 Status : Not Answered
 Chosen Option : --

Q.3 A question is followed by two statements numbered (I) and (II). You have to decide whether the data provided in the statement/s is/are sufficient/necessary to answer the question. Read both the statements and decide the appropriate answer.

Question: Six students A, B, C, D, E, F, and G are sitting in a straight line facing north direction. D is sitting third to the right of B. E is sitting third to the left of C. Who is sitting to the immediate left of B?
 (I) D and E are sitting at the extreme ends.
 (II) A is sitting third to the left of F.

- Ans 1. Data in Statement I alone is sufficient to answer the question while data in statement II is not
 2. Data in statements I and II together are necessary to answer the question.
 3. Data in Statement II alone is sufficient to answer the question while data in statement I is not
 4. Data in statements I and II together are NOT sufficient to answer the question

Question ID : 630680552762
 Option 1 ID : 6306802161142
 Option 2 ID : 6306802161144
 Option 3 ID : 6306802161143
 Option 4 ID : 6306802161145
 Status : Answered
 Chosen Option : 2

Q.4 Seven students named P, Q, R, S, T, U and V are sitting around a circle facing the centre. Each one of them has secured one of different Ranks from 1 to 7 in the class. U is fourth to the left of the Rank-2 student. T is second to the right of Rank-7 student. Q is sitting to the immediate right of V who secured Rank-2. S is sitting third to the left of R. P is third to the left of V. Q secured Rank-6. S secures Rank-3. Only one student is sitting between R and U. Only one student is sitting between Rank-1 and Rank-2 students. U does not secure Rank-5.

Which of the following is/are true based on the given arrangement?

I. The student securing Rank-7 is sitting second to the left of the student who secure Rank-5.

II. T is sitting immediately right of the person who secures Rank-2.

III. U secures Rank-4 and is sitting to the immediate left of P.

- Ans
- 1. All I, II and III are true
 - 2. Only I and II is true
 - 3. Only II and III are true
 - 4. Only I and III are true

Question ID : 630680552757

Option 1 ID : 6306802161125

Option 2 ID : 6306802161122

Option 3 ID : 6306802161124

Option 4 ID : 6306802161123

Status : Not Answered

Chosen Option : --

Q.5 Six players named K, L, M, N, O and P have different heights. They play one of six different games i.e. Chess, Polo, Tennis, Hockey, Cricket and Football. Polo player has more height than Hockey player. M plays cricket. K does not play Football. N has more height than O. Hockey player has more height than Tennis player. Football player has less height than Cricket player. K's height is more than only three other players. Polo player has lesser height than exactly three other players. P's height is more than K. O's height is more than L who plays Tennis.

Which of the following is true based on the given information?

I. P's height is more than M. M's height is less than N.

II. Chess player's height is more than Football player but less than Polo player.

- Ans
- 1. Both I and II
 - 2. Neither I nor II
 - 3. Only II
 - 4. Only I

Question ID : 630680552758

Option 1 ID : 6306802161128

Option 2 ID : 6306802161129

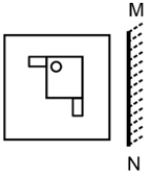
Option 3 ID : 6306802161127

Option 4 ID : 6306802161126

Status : Not Answered

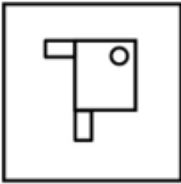
Chosen Option : --

Q.6 Select the correct mirror image of the given figure when the mirror MN is placed to the right side of the figure.

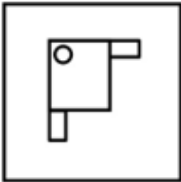


Ans

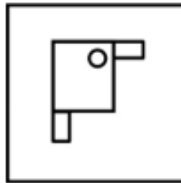
1.



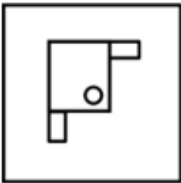
2.



3.



4.



Question ID : 630680552744
 Option 1 ID : 6306802161070
 Option 2 ID : 6306802161071
 Option 3 ID : 6306802161072
 Option 4 ID : 6306802161073
 Status : Answered
 Chosen Option : 1

Q.7 Select the wrong term in the following number series:

9, 10, 19, 44, 93, 175

Ans 1. 10

2. 175

3. 93

4. 44

Question ID : 630680552745
 Option 1 ID : 6306802161077
 Option 2 ID : 6306802161076
 Option 3 ID : 6306802161074
 Option 4 ID : 6306802161075
 Status : Not Answered
 Chosen Option : --

Q.8 Select the wrong term in the given alpha-numeric series.

L11, O22, R44, U44, X55

- Ans 1. U44
 2. O22
 3. R44
 4. X55

Question ID : 630680552742
 Option 1 ID : 6306802161065
 Option 2 ID : 6306802161063
 Option 3 ID : 6306802161064
 Option 4 ID : 6306802161062
 Status : Answered
 Chosen Option : 2

Q.9 Four letter-cluster pairs have been given, out of which three are alike in some manner and one is different. Select the odd letter-cluster pair.

- Ans 1. CG : DH
 2. UE : VF
 3. OS : PQ
 4. LT : MU

Question ID : 630680552741
 Option 1 ID : 6306802161058
 Option 2 ID : 6306802161059
 Option 3 ID : 6306802161060
 Option 4 ID : 6306802161061
 Status : Answered
 Chosen Option : 3

Q.10 Read the following information carefully and answer the question that follows

Banking reforms in India encompass a range of measures such as liberalization, deregulation and technological advancements. The adoption of technology-driven initiatives like core banking solutions, electronic fund transfers and digital payment systems promoted financial inclusion and improved operational efficiency. Which of the following will WEAKEN the argument that that Banking system in India has become an efficient system?

- Ans 1. The Prevention of Money Laundering Act (PMLA) aims to prevent money laundering by imposing obligations on the banks and financial institutions to maintain records, report transactions and verify customer identities.
 2. Steps have been taken to the issue of nonperforming assets to expedite the resolution of stressed assets and improve recovery mechanisms.
 3. Efforts have been taken to provide access of the banking services to some identified areas by not including unbanked sections of the society.
 4. Financial technology and digital innovation have been adopted for the development of payment systems and other banking services.

Question ID : 630680552763
 Option 1 ID : 6306802161146
 Option 2 ID : 6306802161147
 Option 3 ID : 6306802161149
 Option 4 ID : 6306802161148
 Status : Answered
 Chosen Option : 2

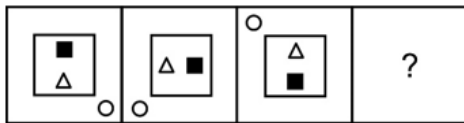
Q.11 In the following question, a group of letters is given which are numbered 1, 2, 3, 4, and 5. Select that combination of numbers so that letters arranged accordingly form a meaningful word.

E U J G D
1 2 3 4 5

- Ans**
- 1. 3,5,2,1,4
 - 2. 4,2,3,1,5
 - 3. 3,2,5,1,4
 - 4. 3,2,5,4,1

Question ID : **630680552738**
 Option 1 ID : **6306802161047**
 Option 2 ID : **6306802161048**
 Option 3 ID : **6306802161049**
 Option 4 ID : **6306802161046**
 Status : **Answered**
 Chosen Option : **4**

Q.12 Select the figure that will replace the question mark (?) in the following figure series.



Ans

- 1.
- 2.
- 3.
- 4.

Question ID : **630680552743**
 Option 1 ID : **6306802161068**
 Option 2 ID : **6306802161067**
 Option 3 ID : **6306802161069**
 Option 4 ID : **6306802161066**
 Status : **Answered**
 Chosen Option : **2**

Q.13 Which two signs should be interchanged to make the given equation correct?

$$24 \div 2 = 20 - 4 \times 6 + 8$$

- Ans
- 1. \times and $+$
 - 2. $=$ and $+$
 - 3. $-$ and $+$
 - 4. $+$ and \times

Question ID : 630680552746
 Option 1 ID : 6306802161081
 Option 2 ID : 6306802161080
 Option 3 ID : 6306802161079
 Option 4 ID : 6306802161078
 Status : Answered
 Chosen Option : 4

Q.14 FORTUNE is related to GILUVMF in a certain way based on certain logic. In the same way, PLINTHS is related to MROKHSG. Which of the following are correct matches following the same logic?

i. MUSICAL	(W) GIVKMRZ
ii. FURIOUS	(X) HFLRIGV
iii. PERTAIN	(Y) ILGHWVN
iv. STORMED	(Z) RHFNOZX

- Ans
- 1. i-Z, iii-Y only
 - 2. i-Z, iii-W, iv-Y only
 - 3. ii-W, iv-Y only
 - 4. i-Z, ii-X, iv-Y only

Question ID : 630680552761
 Option 1 ID : 6306802161138
 Option 2 ID : 6306802161141
 Option 3 ID : 6306802161139
 Option 4 ID : 6306802161140
 Status : Not Answered
 Chosen Option : --

Q.15 In a certain code language, 'SALT' is written as '25', and 'GAIT' is written as '73'. Which of the following are correct matches as per the given code language?

WORD	CODE
(i) TOMB	(W) 28
(ii) BEAT	(X) 96
(iii) ZOOM	(Y) 05

- Ans
- 1. iii-X only
 - 2. i-Y , ii-W, iii-X only
 - 3. i-Y , iii-X only
 - 4. i-Y, iii-W only

Question ID : 630680552759
 Option 1 ID : 6306802161131
 Option 2 ID : 6306802161133
 Option 3 ID : 6306802161130
 Option 4 ID : 6306802161132
 Status : Answered
 Chosen Option : 4

Q.16 In a row of boys, if Akhil who is 13th from the left, and Firoz who is 6th from the right end interchange their positions, Akhil becomes 23rd from the left. How many boys are there in the row?

- Ans 1. 28
 2. 18
 3. 21
 4. 27

Question ID : 630680552737
 Option 1 ID : 6306802161045
 Option 2 ID : 6306802161043
 Option 3 ID : 6306802161044
 Option 4 ID : 6306802161042
 Status : Answered
 Chosen Option : 3

Q.17 Three Statements are given followed by two conclusions numbered I and II. Assuming the statements to be true, decide which of the conclusions logically follow(s) from the statements.

Statement I: All queens are kings.
 Statement II: All kings are princesses.
 Statement III: All princesses are beautiful.

Conclusion I: Some kings are beautiful.
 Conclusion II: All queens are princesses.

- Ans 1. Both conclusions I and II follow
 2. Neither conclusion I nor II follows
 3. Only conclusion I follows
 4. Only conclusion II follows

Question ID : 630680552739
 Option 1 ID : 6306802161052
 Option 2 ID : 6306802161053
 Option 3 ID : 6306802161050
 Option 4 ID : 6306802161051
 Status : Answered
 Chosen Option : 1

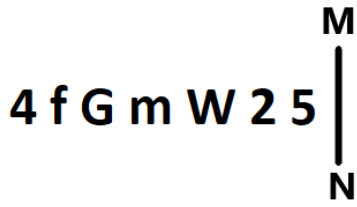
Q.18 Select the set in which the numbers are related in the same way as are the numbers of the following sets.

(NOTE : Operations should be performed on the whole numbers, without breaking down the numbers into its constituent digits. E.g. 13 – Operations on 13 such as adding /subtracting /multiplying etc. to 13 can be performed. Breaking down 13 into 1 and 3 and then performing mathematical operations on 1 and 3 is not allowed)
 (17, 9, 132)
 (24, 8, 136)

- Ans 1. (16, 7, 118)
 2. (28, 12, 144)
 3. (26, 6, 114)
 4. (18, 10, 160)


Question ID : 630680552766
 Option 1 ID : 6306802161161
 Option 2 ID : 6306802161158
 Option 3 ID : 6306802161160
 Option 4 ID : 6306802161159
 Status : Answered
 Chosen Option : 4

Q.19 Select the correct mirror image of the given figure when the mirror is placed at MN as shown below.



- Ans
- 1. 2 5 W m G f 4
 - 2. 2 5 W w G f 4
 - 3. 5 2 W m G f 4
 - 4. 2 5 W m G f 4

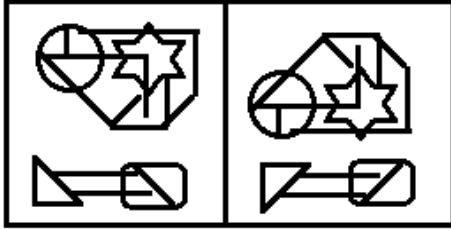
Question ID : 630680552765
 Option 1 ID : 6306802161157
 Option 2 ID : 6306802161156
 Option 3 ID : 6306802161154
 Option 4 ID : 6306802161155
 Status : Answered
 Chosen Option : 4



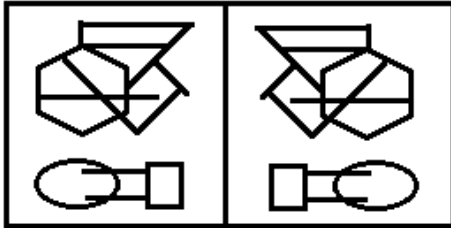
Q.20 Three of the following four figure pairs are alike in a certain way and thus form a group. Which is the one that does not belong to that group?

Ans

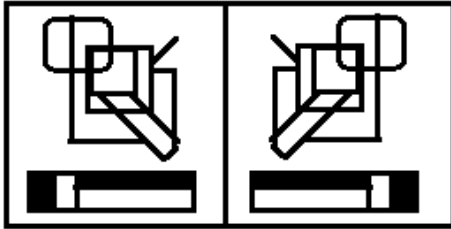
✓ 1.



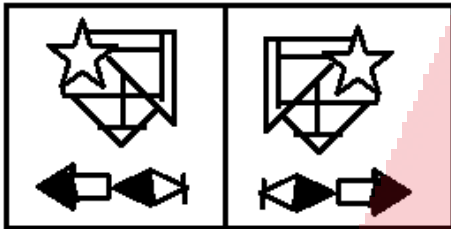
✗ 2.



✗ 3.



✗ 4.



Question ID : 630680552764

Option 1 ID : 6306802161150

Option 2 ID : 6306802161152

Option 3 ID : 6306802161151

Option 4 ID : 6306802161153

Status : Not Answered

Chosen Option : --

Q.1 Select the correct conclusion based on the meaning of the underlined idiom:

The whole agitation against the new regulations was a storm in a tea cup.
 i. The agitation was so profound that it spread to all parts of the country.
 ii. The disagreement over the crucial policy garnered universal support.
 iii. The protest died down quickly as it was an unnecessary fuss over a trivial matter.
 iv. The agitation was joined by thousands of people despite the adverse weather conditions.

- Ans
- 1. Both i and iv are correct
 - 2. Only iii is correct
 - 3. Both ii and iv are correct
 - 4. Only ii is correct

Question ID : 630680552600
 Option 1 ID : 6306802160494
 Option 2 ID : 6306802160496
 Option 3 ID : 6306802160495
 Option 4 ID : 6306802160497
 Status : Answered
 Chosen Option : 2

Q.2 The sentence below has been divided into three parts. Select the part of the sentence that has an error. If the sentence has no error, select the option 'No Error'.

I wrote to Giordano this morning,/ and when we return to Paris/ all will have been being arranged.

- Ans
- 1. and when we return to Paris
 - 2. I wrote to Giordano this morning,
 - 3. No error
 - 4. all will have been being arranged.

Question ID : 630680552580
 Option 1 ID : 6306802160415
 Option 2 ID : 6306802160414
 Option 3 ID : 6306802160417
 Option 4 ID : 6306802160416
 Status : Answered
 Chosen Option : 4

Q.3 Match the following groups of words with the correct one-word substitutions.

one-word substitution	phrase
A. turncoat	1. one who is unable to pay debts
B. insolvent	2. To increase the importance, position or wealth
C. abnegate	3. one who switches to an opposing party
D. aggrandize	4. to refuse or deny oneself

- Ans
- 1. A-4, B-3, C-2, D-1
 - 2. A-3, B-1, C-4, D-2
 - 3. A-1, B-4, C-3, D-2
 - 4. A-2, B-3, C-1, D-4

Question ID : 630680552595
 Option 1 ID : 6306802160474
 Option 2 ID : 6306802160477
 Option 3 ID : 6306802160476
 Option 4 ID : 6306802160475
 Status : Answered
 Chosen Option : 2

Q.4 In the following passage there are blanks, each of which has been numbered. Select the correct option to fill in the blanks.

The seemingly ___1___ hummingbird is one of the toughest beasts in the animal kingdom. Some 330 species ___2___ in diverse and often brutal environments. Mysteriously, the birds are found only in North and South America. 'They're living ___3___ the edge of what's possible for vertebrates, and they're mastering it,' says Karl Schuchmann, a German ___4___, who studied a captive hummer that lived 17 years. 'Imagine the ___5___ of an organism of only five or six grams to live that long,' he says.

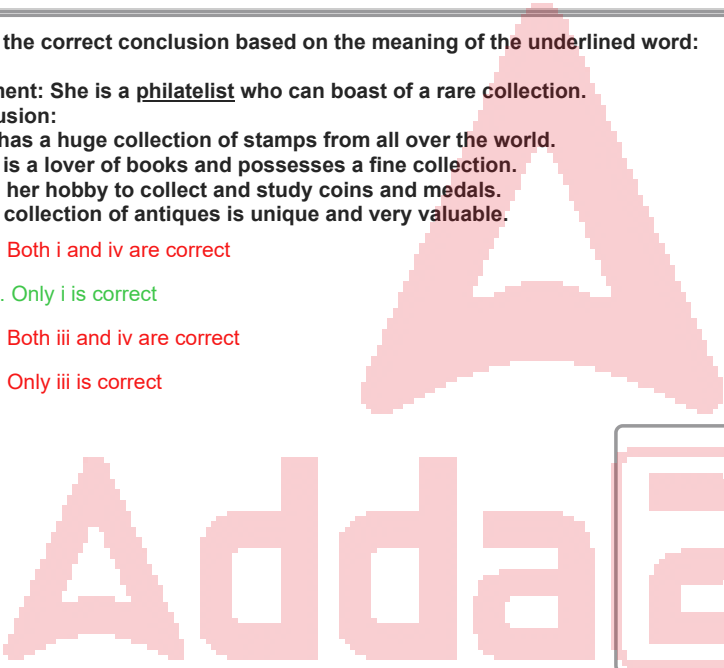
- Ans
- 1. 1-vulnerable, 2- endure, 3- on, 4- ophthalmologist,5- durability
 - 2. 1-robust, 2- sustain, 3- by, 4- antiquarian,5- stamina
 - 3. 1-fragile, 2- thrive, 3- at, 4- ornithologist,5- endurance
 - 4. 1-delicate, 2- survive, 3- in, 4- geologist,5- persistence

Question ID : 630680552599
 Option 1 ID : 6306802160491
 Option 2 ID : 6306802160493
 Option 3 ID : 6306802160492
 Option 4 ID : 6306802160490
 Status : Answered
 Chosen Option : 3

Q.5 Select the correct conclusion based on the meaning of the underlined word:

Statement: She is a philatelist who can boast of a rare collection.
 Conclusion:
 i. She has a huge collection of stamps from all over the world.
 ii. She is a lover of books and possesses a fine collection.
 iii. It is her hobby to collect and study coins and medals.
 iv. Her collection of antiques is unique and very valuable.

- Ans
- 1. Both i and iv are correct
 - 2. Only i is correct
 - 3. Both iii and iv are correct
 - 4. Only iii is correct



Question ID : 630680552598
 Option 1 ID : 6306802160487
 Option 2 ID : 6306802160486
 Option 3 ID : 6306802160489
 Option 4 ID : 6306802160488
 Status : Not Answered
 Chosen Option : --

Q.6 Match the following groups of words with the correct one-word substitutions.

phrase	one-word substitution
A. a short, pithy statement expressing a general truth or rule of conduct.	1. gibberish
B. outrageous and disgraceful	2. ensemble
C. unintelligible speech	3. maxim
D. a group of dancers, actors or performers	4. egregious

- Ans
- 1. A-3, B-4, C-1, D-2
 - 2. A-1, B-4, C-2, D-3
 - 3. A-4, B-1, C-3, D-2
 - 4. A-2, B-3, C-1, D-4

Question ID : 630680552596
 Option 1 ID : 6306802160480
 Option 2 ID : 6306802160479
 Option 3 ID : 6306802160481
 Option 4 ID : 6306802160478
 Status : Answered
 Chosen Option : 1

Q.7 Select the word that is closest in meaning (SYNONYM) to the word given below

Exemplary

- Ans**
- 1. Deplorable
 - 2. Substandard
 - 3. Unworthy
 - 4. Impeccable

Question ID : 630680552576
 Option 1 ID : 6306802160400
 Option 2 ID : 6306802160398
 Option 3 ID : 6306802160399
 Option 4 ID : 6306802160401
 Status : Not Answered
 Chosen Option : --

Q.8 Select the correct conclusion based on the meaning of the underlined word:

Statement: These days he is working on a monograph which is very important for him.

- i. He is writing a memoir of his father who was a successful poet.
- ii. His work on a specialized subject is an important resource for scholars.
- iii. He is rehearsing his lines for the play to be performed at the annual function.
- iv. He is creating an architectural masterpiece out of a single piece of stone.

- Ans**
- 1. Only i is correct
 - 2. Only iii is correct
 - 3. Only ii is correct
 - 4. Only iv is correct

Question ID : 630680552597
 Option 1 ID : 6306802160485
 Option 2 ID : 6306802160482
 Option 3 ID : 6306802160483
 Option 4 ID : 6306802160484
 Status : Not Answered
 Chosen Option : --

Q.9 Select the word that is opposite in meaning (ANTONYM) to the word given below.

Sardonic

- Ans**
- 1. Gracious
 - 2. Lengthy
 - 3. Podgy
 - 4. Eternal

Question ID : 630680552575
 Option 1 ID : 6306802160394
 Option 2 ID : 6306802160397
 Option 3 ID : 6306802160395
 Option 4 ID : 6306802160396
 Status : Not Answered
 Chosen Option : --

Q.10 Select the most appropriate meaning of the given idiom

It's a small world

- Ans 1. Make all possible efforts
2. You frequently see the same people in different places
3. An aggressive and bold confrontation
4. A competition where the outcome is difficult to judge or predict

Question ID : 630680552573
 Option 1 ID : 6306802160386
 Option 2 ID : 6306802160387
 Option 3 ID : 6306802160389
 Option 4 ID : 6306802160388
 Status : Answered
 Chosen Option : 2

Q.11 Some parts of a sentence have been jumbled up, and labelled P, Q, R and S. Select the option that gives the correct sequence in which these parts can be rearranged to form a meaningful and grammatically correct sentence. Opening and Closing sentence indicate the start of the paragraph and end of the sentence paragraph.

Opening Sentence: The immediate context of the Dunkirk evacuation was Germany's invasion of the Low Countries and northern France in May 1940.

P. The Dutch defenders fell back westward, and by noon on May 12 German tanks were on the outskirts of Rotterdam.

Q. The Dutch Queen Wilhelmina and her government left the country for England on May 13, and the next day the Dutch army surrendered to the Germans.

R. On May 10 the German blitzkrieg attack on the Netherlands began with the capture by parachutists of key bridges deep within the country, with the aim of opening the way for mobile ground forces.

S. The invasion of Belgium also began on May 10, when German airborne troops landed on the fortress of Eben Emael, immediately opposite Maastricht, and on bridges over the Albert Canal.

Closing Sentence: On May 11 the Belgian front was broken, and German tanks ran on westward while Belgian, French, and British divisions fell back to a line between Antwerp and Namur.

- Ans 1. QPRS
2. PSRQ
3. RPQS
4. RPSQ

Question ID : 630680552572
 Option 1 ID : 6306802160383
 Option 2 ID : 6306802160384
 Option 3 ID : 6306802160385
 Option 4 ID : 6306802160382
 Status : Answered
 Chosen Option : 4

Q.12 Four sentences are given below. Find the odd sentence out.

- A. Subsequent generations of kings hid their tombs in the Valley of the Kings in an attempt to elude the robbers.
- B. The most imposing tombs are the famous pyramids, shaped like the sacred mound where the gods first appeared in the creation story.
- C. The ongoing deciphering of hieroglyphic writings and research on the life of the peasants is answering several questions on Egyptian culture.
- D. The gigantic pyramids were conspicuous targets for tomb robbers, whose plundering jeopardizes the hope for eternal life.

- Ans
- 1. Sentence D
 - 2. Sentence B
 - 3. Sentence C
 - 4. Sentence A

Question ID : 630680552593
 Option 1 ID : 6306802160469
 Option 2 ID : 6306802160467
 Option 3 ID : 6306802160468
 Option 4 ID : 6306802160466
 Status : Answered
 Chosen Option : 3

Q.13 The sentence below has been divided into three parts. Select the part of the sentence that has an error. If the sentence has no error, select the option 'No Error'.

Start to relax a hour/ before bedtime with a/ hot bath or your favourite music.

- Ans
- 1. Start to relax a hour
 - 2. before bedtime with a
 - 3. hot bath or your favourite music.
 - 4. No error

Question ID : 630680552578
 Option 1 ID : 6306802160406
 Option 2 ID : 6306802160407
 Option 3 ID : 6306802160408
 Option 4 ID : 6306802160409
 Status : Answered
 Chosen Option : 1

Q.14 The sentence below has been divided into three parts. Select the part of the sentence that has an error. If the sentence has no error, select the option 'No Error'.

If he had been entered a fatstock/ competition, I am sure his story would/ have been one of unrivalled success.

- Ans
- 1. If he had been entered a fatstock
 - 2. have been one of unrivalled success.
 - 3. competition, I am sure his story would
 - 4. No error

Question ID : 630680552581
 Option 1 ID : 6306802160418
 Option 2 ID : 6306802160420
 Option 3 ID : 6306802160419
 Option 4 ID : 6306802160421
 Status : Answered
 Chosen Option : 1

Q.15 Arrange the given sentences (A-F) in the correct order to form a coherent paragraph.

- A. Nature writing encompasses a wide variety of works.
- B. Nature writing often draws heavily on scientific information and facts about the natural world.
- C. At the same time, it is frequently written in the first person and incorporates personal observations and philosophical reflections upon nature.
- D. Nature writing is nonfiction or fiction prose or poetry about the natural environment.
- E. These include natural history essays, poetry, essays of solitude or escape, as well as travel and adventure writing.
- F. These works range from those that place primary emphasis on natural history facts to those in which philosophical interpretation predominates.

- Ans
- 1. BFECAD
 - 2. ACFDBE
 - 3. DAFEBBC
 - 4. DBFAEC

Question ID : 630680552594
 Option 1 ID : 6306802160472
 Option 2 ID : 6306802160470
 Option 3 ID : 6306802160471
 Option 4 ID : 6306802160473
 Status : Not Answered
 Chosen Option : --

Q.16 Which of the following statements correctly uses the idiom 'red rag to a bull' by substituting the underlined words?

- A. The poor subordinates are made scapegoats for the misdeeds of their superiors.
- B. For me, a person playing a double game is someone who specially provokes me.
- C. Since your boss is well disposed towards you, you must act promptly and ask for a promotion.
- D. The huge loss to our factory due to the floods was a totally unexpected disaster.

- Ans
- 1. Statement D
 - 2. Statement A
 - 3. Statement C
 - 4. Statement B

Question ID : 630680552601
 Option 1 ID : 6306802160500
 Option 2 ID : 6306802160501
 Option 3 ID : 6306802160498
 Option 4 ID : 6306802160499
 Status : Answered
 Chosen Option : 4

Q.17 Select the most appropriate meaning of the given proverb from the options

Knowledge is power

- Ans
- 1. Said when a son is similar to his father; also, "Like mother, like daughter"
 - 2. No one is truly capable of living alone. We need human connection to be healthy
 - 3. When you're in a difficult situation, laughing can make it easier to get through that situation
 - 4. The more you know, the more powerful you can be in different areas of your life

Question ID : 630680552574
 Option 1 ID : 6306802160392
 Option 2 ID : 6306802160393
 Option 3 ID : 6306802160391
 Option 4 ID : 6306802160390
 Status : Answered
 Chosen Option : 4

Q.18 There is a sentence that is missing in the paragraph below. Look at the paragraph and decide in which blank (1, 2, 3, or 4) the following sentence would best fit.

Sentence: As a result, they held a trial and sentenced Socrates to death. Socrates had many disciples and the greatest of these was Plato. Plato wrote several books which have come down to us. ____1____ It is through these books that we know a great deal of his teacher, Socrates. The Athenian government-just after the time of Pericles- did not like the methods of Socrates. ____2____ They told him that if he promised to give up his discussions with common people and changed his ways, they would pardon him and let him off. ____3____ But Socrates refused to do so and preferred to drink the cup of poison which brought about his death, to giving up what he considered to be his duty. ____4____

- Ans** 1. Blank 2
 2. Blank 1
 3. Blank 3
 4. Blank 4

Question ID : 630680552592
 Option 1 ID : 6306802160463
 Option 2 ID : 6306802160462
 Option 3 ID : 6306802160464
 Option 4 ID : 6306802160465
 Status : Not Answered
 Chosen Option : --

Q.19 The sentence below has been divided into three parts. Select the part of the sentence that has an error. If the sentence has no error, select the option 'No Error'.

Chasing the white stag through the/ forests, never catching it, of/ course, for it is a creature of legend.

- Ans** 1. No error
 2. Chasing the white stag through the
 3. course, for it is a creature of legend.
 4. forests, never catching it, of

Question ID : 630680552579
 Option 1 ID : 6306802160413
 Option 2 ID : 6306802160410
 Option 3 ID : 6306802160412
 Option 4 ID : 6306802160411
 Status : Not Answered
 Chosen Option : --

Q.20 Select the word that is closest in meaning (SYNONYM) to the word given below

Inertia

- Ans** 1. Ardour
 2. Zeal
 3. Idleness
 4. Stamina

Question ID : 630680552577
 Option 1 ID : 6306802160404
 Option 2 ID : 6306802160403
 Option 3 ID : 6306802160402
 Option 4 ID : 6306802160405
 Status : Answered
 Chosen Option : 3