

IB ACIO Grade-II (Executive) Jan 17, 2024 Shift 4 Question Paper with Answers

INTELLIGENCE BUREAU

(Ministry of Home Affairs)

Government of India

Participant ID	
Application no	
Participant Name	
Test Center Name	
Test Date	17/01/2024
Test Time	5:30 PM - 6:30 PM
Subject	IB ACIO II Exe

Section : **Current Affairs**

Q.1 Who among the following did Vaishali Rameshbabu defeat to become grandmaster in chess?

- Ans**
- 1. Elisabeth Pähtz
 - 2. Zhu Jiner
 - 3. Olga Girya
 - 4. FM Tamer Tarik Selbes

Question ID : **630680554813**
 Option 1 ID : **6306802168830**
 Option 2 ID : **6306802168828**
 Option 3 ID : **6306802168831**
 Option 4 ID : **6306802168829**
 Status : **Not Answered**

Chosen Option : --

Q.2 Match the list 1 and list 2 and select the correct answer using the code given below.

List1(Sportsperson)	List 2 (Game)
A. Amit Panghal	1. Archery
B. Deepika Kumari	2. Boxing
C. Anupama Upadhyaya	3. Fencing
D. Bhavani Dev	4. Badminton

- Ans**
- 1. A-3 B-2 C-4 D-1
 - 2. A-2 B-1 C-4 D-3
 - 3. A-2 B-3 C-1 D-4
 - 4. A-2 B-3 C-4 D-1

Question ID : **630680554831**
 Option 1 ID : **6306802168900**
 Option 2 ID : **6306802168902**
 Option 3 ID : **6306802168901**
 Option 4 ID : **6306802168903**

Status : **Answered**

Chosen Option : **2**

Test Prime

ALL EXAMS,
ONE SUBSCRIPTION



70,000+
Mock Tests



Personalised
Report Card



Unlimited
Re-Attempt



600+
Exam Covered



Previous Year
Papers



500%
Refund



ATTEMPT FREE MOCK NOW

Q.3 Bharat New Car Assessment Programme (NCAP) is applicable for passenger vehicles with not more than _____ in addition to the driver's seat.

- Ans**
- 1. 8 seats
 - 2. 6 seats
 - 3. 4 seats
 - 4. 10 seats

Question ID : **630680554811**
 Option 1 ID : **6306802168822**
 Option 2 ID : **6306802168821**
 Option 3 ID : **6306802168820**
 Option 4 ID : **6306802168823**
 Status : **Answered**
 Chosen Option : **2**

Q.4 In November 2023, Union health ministry has decided that Ayushman Bharat Health and Wellness Centres to be renamed as _____.

- Ans**
- 1. Ayushman Arogya Kendra
 - 2. Pradhan Mantri Jan Arogya Yojana
 - 3. Ayushman Arogya Mandir
 - 4. National Health Protection Scheme

Question ID : **630680554815**
 Option 1 ID : **6306802168839**
 Option 2 ID : **6306802168836**
 Option 3 ID : **6306802168837**
 Option 4 ID : **6306802168838**
 Status : **Answered**
 Chosen Option : **2**

Q.5 Consider the following statement about the general election to assembly constituencies of Rajasthan on 25th December 2023:

1. The election was on 199 seats
 2. Bharatiya Janata Party was elected on 112 seats
 3. Indian National Congress was elected on 69 seats
 4. Bahujan Samaj Party was elected on 1 seat
- Which of the statement given above is/are correct?

- Ans**
- 1. Statement 1 and 3
 - 2. Statement 1 and 2
 - 3. All are correct
 - 4. Statement 2 and 3

Question ID : **630680554838**
 Option 1 ID : **6306802168928**
 Option 2 ID : **6306802168929**
 Option 3 ID : **6306802168931**
 Option 4 ID : **6306802168930**
 Status : **Answered**
 Chosen Option : **3**

Q.6 Consider the following statement about "New Education for New India" campaign:


1. President of India launched this program in March 2023
 2. This campaign was launched at Sambalpur, Odisha
 3. This campaign is envisaged to inculcate values and uplift the consciousness of the students for better society
- Which of the statement given above is/are correct?

- Ans
- 1. Only statement 1
 - 2. Only statement 3
 - 3. All are correct
 - 4. Statement 2 and 3

Question ID : 630680554837
 Option 1 ID : 6306802168924
 Option 2 ID : 6306802168927
 Option 3 ID : 6306802168926
 Option 4 ID : 6306802168925
 Status : Answered
 Chosen Option : 3

Q.7 Gyan Sahayak Scheme is introduced by the state of _____.

- Ans
- 1. Jharkhand
 - 2. West Bengal
 - 3. Gujarat
 - 4. Delhi



Question ID : 630680554817
 Option 1 ID : 6306802168846
 Option 2 ID : 6306802168844
 Option 3 ID : 6306802168847
 Option 4 ID : 6306802168845
 Status : Not Answered
 Chosen Option : --

Q.8 Which of the following states in the southern region of India reported the highest number of extreme weather days from January to September 2023?

- Ans
- 1. Karnataka
 - 2. Tamil Nadu
 - 3. Telangana
 - 4. Kerala



Question ID : 630680554818
 Option 1 ID : 6306802168849
 Option 2 ID : 6306802168850
 Option 3 ID : 6306802168848
 Option 4 ID : 6306802168851
 Status : Not Attempted and Marked For Review
 Chosen Option : --

Q.9 Who among the following won the Padma Shree in 2023 and is an eminent miniature painter specializing in contemporary art?

- Ans** 1. Ms. Jodhaiyabai Baiga
 2. Shri Premjit Baria
 3. Shri Bhanubhai Chitara
 4. Shri Hem Chandra Goswami

Question ID : **630680554820**
 Option 1 ID : **6306802168856**
 Option 2 ID : **6306802168857**
 Option 3 ID : **6306802168858**
 Option 4 ID : **6306802168859**
 Status : **Not Attempted and Marked For Review**
 Chosen Option : --

Q.10 Consider the following statement about Android Earthquake Alerts System launched in India in September 2023:

1. It has been introduced for the Android by Google in India.
 2. Facebook is also partner of the Google in this system.
 3. This system is rolling in India in collaboration with the National Disaster Management Authority (NDMA) and the National Seismology Center (NSC).
 4. This innovative system transforms Android phones into miniature earthquake detectors by utilizing the device's accelerometer as a seismograph
- Which of the statement given above is/are correct?

- Ans** 1. All are correct
 2. Statement 1, 3, 4
 3. Statement 2,3 and 4
 4. Statement 1, 2 and 3

Question ID : **630680554832**
 Option 1 ID : **6306802168906**
 Option 2 ID : **6306802168907**
 Option 3 ID : **6306802168904**
 Option 4 ID : **6306802168905**
 Status : **Answered**
 Chosen Option : 1

Q.11 Consider the following statement about MAHASAGAR:

1. It is initiative of the Indian Army
 2. The maiden edition of the high level virtual interaction MAHASAGAR was hosted 29 November 2023
 3. Full form of MAHASAGAR is Maritime Heads for Active Security And Growth for All in the Region.
 4. It's interaction theme was 'Collective Maritime Approach towards Countering Common Challenges'.
- Which of the statement given above is/are correct?

- Ans** 1. Statement 1, 2 and 3
 2. All are correct
 3. Statement 2,3 and 4
 4. Statement 1, 3, 4

Question ID : **630680554834**
 Option 1 ID : **6306802168913**
 Option 2 ID : **6306802168914**
 Option 3 ID : **6306802168912**
 Option 4 ID : **6306802168915**
 Status : **Answered**
 Chosen Option : 3

Q.12 Consider the following statement about 2023 Gender Social Norms Index:

1. This Index is developed by the UNDP
2. This index covered 60 percent of the global population
3. This index reveals that close to 9 out of 10 men and women hold fundamental biases against women.
4. According to the report nearly half the world's people believe that men make better political leaders than women do

Which of the statement given above is/are correct?

- Ans**
- 1. Statement 1, 2 and 3
 - 2. Statement 2,3 and 4
 - 3. All are correct
 - 4. Statement 1, 3 and 4

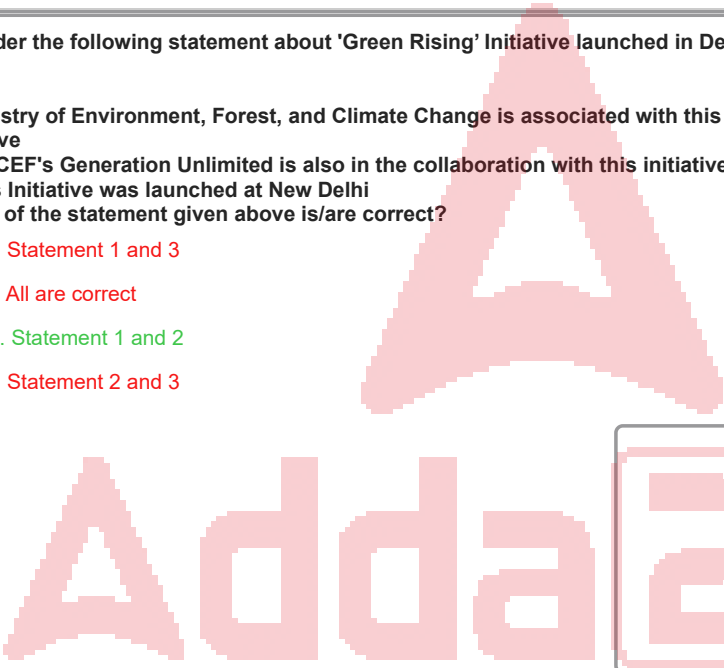
Question ID : 630680554836
 Option 1 ID : 6306802168921
 Option 2 ID : 6306802168920
 Option 3 ID : 6306802168922
 Option 4 ID : 6306802168923
 Status : **Not Attempted and Marked For Review**
 Chosen Option : --

Q.13 Consider the following statement about 'Green Rising' Initiative launched in December 2023:

1. Ministry of Environment, Forest, and Climate Change is associated with this initiative
2. UNICEF's Generation Unlimited is also in the collaboration with this initiative
3. This Initiative was launched at New Delhi

Which of the statement given above is/are correct?

- Ans**
- 1. Statement 1 and 3
 - 2. All are correct
 - 3. Statement 1 and 2
 - 4. Statement 2 and 3



Question ID : 630680554839
 Option 1 ID : 6306802168932
 Option 2 ID : 6306802168935
 Option 3 ID : 6306802168933
 Option 4 ID : 6306802168934
 Status : **Answered**
 Chosen Option : 3

Q.14 4th edition of ASEAN India Grassroots Innovation Forum (AIGIF) 2023 was held in _____.

- Ans**
- 1. Japan
 - 2. Malaysia
 - 3. India
 - 4. Singapore

Question ID : 630680554812
 Option 1 ID : 6306802168826
 Option 2 ID : 6306802168827
 Option 3 ID : 6306802168825
 Option 4 ID : 6306802168824
 Status : **Answered**
 Chosen Option : 3

Q.15 Consider the following statement about Deep Ocean Mission:

1. This Mission is related to the Ministry of Earth Sciences
 2. Aim of the project is to develop technologies and capabilities for deep sea exploration.
 3. Samudrayaan mission is aimed at sending three personnel to 6000-metre depth in a vehicle called 'MATSYA 6000'
- Which of the statement given above is/are correct?

- Ans
- 1. Only statement 1
 - 2. All are correct
 - 3. Statement 2 and 3
 - 4. Only statement 3

Question ID : 630680554833
 Option 1 ID : 6306802168908
 Option 2 ID : 6306802168910
 Option 3 ID : 6306802168909
 Option 4 ID : 6306802168911
 Status : Answered
 Chosen Option : 2

Q.16 As per Financial Assistance for Promotion of Guru-Shishya Parampara scheme of the Ministry of Culture,

- Ans
- 1. 1 Guru and maximum 20 Shishyas in the field of music & dance.
 - 2. 1 Guru and maximum 15 Shishyas in the field of music & dance.
 - 3. 1 Guru and maximum 8 Shishyas in the field of music & dance.
 - 4. 1 Guru and maximum 10 Shishyas in the field of music & dance.

Question ID : 630680554819
 Option 1 ID : 6306802168855
 Option 2 ID : 6306802168854
 Option 3 ID : 6306802168852
 Option 4 ID : 6306802168853
 Status : Not Attempted and Marked For Review

Chosen Option : --

Q.17 Which of the following won the 'NATIONAL TECHNOLOGY AWARD (MAIN)' in National Technology Week 2023?

- Ans
- 1. Sascan Meditech Private Limited
 - 2. Ideaforge Technology Limited
 - 3. WellRx Technologies Private Limited
 - 4. MyLab Discovery Solutions Private Limited

Question ID : 630680554814
 Option 1 ID : 6306802168832
 Option 2 ID : 6306802168833
 Option 3 ID : 6306802168835
 Option 4 ID : 6306802168834
 Status : Not Attempted and Marked For Review

Chosen Option : --

Q.18 Who among the following is the current Deputy National Security advisor appointed in Jan 2023?

- Ans** 1. Pankaj Kumar Singh
 2. Ajit Doval
 3. Rajiv Gauba
 4. Nehchal Sandhu

Question ID : 630680554816
 Option 1 ID : 6306802168843
 Option 2 ID : 6306802168840
 Option 3 ID : 6306802168842
 Option 4 ID : 6306802168841
 Status : **Not Attempted and Marked For Review**
 Chosen Option : --

Q.19 Consider the following statement about NATPOLREX-IX:

1. The 9th National Level Pollution Response Exercise was conducted by the Indian Coast Guard in August 2023
 2. It was conducted in Maharashtra state
 3. The NATPOLREX-IX accomplished its objective of testing the level of preparedness and coordination between various resource agencies
- Which of the statement given above is/are correct?

- Ans** 1. Only statement 3
 2. Statement 2 and 3
 3. Only statement 1
 4. All are correct

Question ID : 630680554835
 Option 1 ID : 6306802168919
 Option 2 ID : 6306802168917
 Option 3 ID : 6306802168916
 Option 4 ID : 6306802168918
 Status : **Answered**
 Chosen Option : 4

Q.20 Consider the following statement about Shivaji Maharaj statue launched in December 2023:

1. Prime Minister, Shri Narendra Modi unveiled the statue of Chhatrapati Shivaji Maharaj
 2. statue of Chhatrapati Shivaji Maharaj at Rajkot Fort
 3. statue of Chhatrapati Shivaji Maharaj is in Goa state
 4. Shivaji Maharaj was the Maratha King
- Which of the statement given above is/are correct?

- Ans** 1. Statement 1, 2 and 4
 2. All are correct
 3. Statement 1, 2 and 3
 4. Statement 2,3 and 4

Question ID : 630680554840
 Option 1 ID : 6306802168939
 Option 2 ID : 6306802168938
 Option 3 ID : 6306802168937
 Option 4 ID : 6306802168936
 Status : **Answered**
 Chosen Option : 1

Q.1 Consider the following statements:

1. The Government of India Act of 1858 was a response to the Indian Rebellion of 1857 and the East India Company lost all its administrative powers following the Government of India Act of 1858, and its Indian possessions and armed forces were taken over by the Crown.
 2. Indian Council Act (Morley-Minto Act) of 1907 introduced separate electorates for Muslims in India.
 3. The Montagu-Chelmsford Reforms of 1919 initiated the Diarchy system in the provincial governments.
 4. The Government of India Act of 1935 provided for the establishment of an All-India Federation and introduced provincial autonomy.
- Which of the above statements are correct?

- Ans
- 1. 1, 2, and 3
 - 2. 2, 3, and 4
 - 3. 1, 2, 3, and 4
 - 4. 1, 3, and 4

Question ID : 630680554913
 Option 1 ID : 6306802169228
 Option 2 ID : 6306802169230
 Option 3 ID : 6306802169231
 Option 4 ID : 6306802169229
 Status : Answered
 Chosen Option : 4

Q.2 Which of the following statements is correct?

- A) The Preamble of the Indian Constitution was based on the Objectives Resolution.
- B) The Preamble of the Indian Constitution was adopted by the Constituent Assembly on January 22, 1947.

- Ans
- 1. Only A is true
 - 2. Neither A nor B is true
 - 3. Both A and B is true
 - 4. Only B is true

Question ID : 630680554901
 Option 1 ID : 6306802169180
 Option 2 ID : 6306802169183
 Option 3 ID : 6306802169182
 Option 4 ID : 6306802169181
 Status : Answered
 Chosen Option : 3

Q.3 Which state has the highest male literacy rate as per 2011 census?

- Ans
- 1. Lakshadweep
 - 2. Kerala
 - 3. Goa
 - 4. Mizoram

Question ID : 630680554898
 Option 1 ID : 6306802169169
 Option 2 ID : 6306802169168
 Option 3 ID : 6306802169170
 Option 4 ID : 6306802169171
 Status : Answered
 Chosen Option : 1

Q.4 Consider the following statements:

- 1.The Eighth Schedule of the Indian Constitution lists 22 languages recognized as scheduled languages of India.
 - 2.Sanskrit is the liturgical language of Hinduism, Buddhism, and Jainism, and is one of the 22 languages listed in the Eighth Schedule.
 - 3.Konkani, spoken in the Western coastal regions of India, was added to the Eighth Schedule in the 71st amendment of the Constitution.
- Which of the statements above is/are correct?

- Ans
- 1. 1 and 2 only
 - 2. 1 only
 - 3. 1, 2, and 3
 - 4. 2 and 3 only

Question ID : 630680554915
 Option 1 ID : 6306802169237
 Option 2 ID : 6306802169236
 Option 3 ID : 6306802169239
 Option 4 ID : 6306802169238
 Status : Answered
 Chosen Option : 3

Q.5 Consider the following statements:

- 1.The Tripitaka is the traditional term for Buddhist monasteries.
 - 2.The Jatakas are a voluminous body of literature concerning the previous births of Gautama Buddha.
 - 3.The Second Buddhist council was convened at Kundalvana, Kashmir and resulted in the first schism in the Sangha.
 - 4.The Mauryan emperor Ashoka embraced Buddhism after the Battle of Kalinga and helped in its spread.
- Which of the statements above is/are correct?

- Ans
- 1. 2 and 4 only
 - 2. 1 and 3 only
 - 3. 3 and 4 only
 - 4. 1 and 4 only

Question ID : 630680554916
 Option 1 ID : 6306802169241
 Option 2 ID : 6306802169242
 Option 3 ID : 6306802169243
 Option 4 ID : 6306802169240
 Status : Answered
 Chosen Option : 4

Q.6 Which of the following were the positive effects of the green revolution?

- A) Self-sufficiency
- B) Industrialization
- C) Employment
- D) Increase in crop production

- Ans
- 1. A, B, C only
 - 2. A, C, D only
 - 3. B, C, D only
 - 4. A, B, C, D

Question ID : 630680554900
 Option 1 ID : 6306802169176
 Option 2 ID : 6306802169178
 Option 3 ID : 6306802169177
 Option 4 ID : 6306802169179
 Status : Answered
 Chosen Option : 2

Q.7 Consider the following statements regarding the Constitution of India:

1. Article 21A was added by the 86th Amendment Act, 2002 and provides for the right to education for children aged 6 to 14 years.
 2. Article 32 provides the right to constitutional remedies which empower the citizens to move a court of law in case of any denial of fundamental rights.
 3. Article 242 to Article 242-O relates to Panchayats, providing a framework for their creation and functioning in India.
 4. Twelfth schedule is popularly known as the Anti-Defection Law, it was added by the 52nd Amendment Act, 1985, and sets the provisions for disqualification of elected members on the grounds of defection.
- Which of the statements above is/are correct?

- Ans
- 1. 2 and 4 only
 - 2. 1 and 2 only
 - 3. 1 and 4 only
 - 4. 3 and 4 only

Question ID : 630680554921
 Option 1 ID : 6306802169261
 Option 2 ID : 6306802169262
 Option 3 ID : 6306802169260
 Option 4 ID : 6306802169263
 Status : Answered
 Chosen Option : 2

Q.8 Harappa of Harappan civilization was situated on the banks of river _____.

- Ans
- 1. Ravi
 - 2. Indus
 - 3. Chenab
 - 4. Ganga

Question ID : 630680554896
 Option 1 ID : 6306802169160
 Option 2 ID : 6306802169162
 Option 3 ID : 6306802169161
 Option 4 ID : 6306802169163
 Status : Answered
 Chosen Option : 1

Q.9 Consider the following statements:

1. The Kudankulam Nuclear Power Plant in Tamil Nadu is the largest nuclear power station in India by installed capacity.
 2. Solar Energy Corporation of India is responsible for the development of solar energy in India, including the implementation of the National Solar Mission.
 3. India aimed to achieve 275 GW of renewable energy capacity by 2022 as part of its commitments to the Paris Agreement.
- Which of the statements above is/are correct?

- Ans
- 1. 1, 2 and 3
 - 2. 2 and 3 only
 - 3. 1 and 2 only
 - 4. 1 and 3 only

Question ID : 630680554918
 Option 1 ID : 6306802169251
 Option 2 ID : 6306802169249
 Option 3 ID : 6306802169250
 Option 4 ID : 6306802169248
 Status : Answered
 Chosen Option : 1

Q.10 Match the following committees with their contributions to local governance and select the correct answer using the codes/options given below the lists:

List-I (Committee)	List-II (Contribution)
A. Ashok Mehta Committee	(i) Recommended that Panchayati Raj institutions should be constitutionally recognized, protected, and preserved.
B. G.V.K. Rao Committee	(ii) Suggested that local government should be given constitutional status.
C. L.M. Singhvi Committee	(iii) Proposed a two-tier Panchayati Raj system.
D. Sarkaria Commission	(iv) Reviewed the working of the Constitution in relation to the working of the Panchayats and Municipalities

- Ans**
- 1. A-i B-ii C-iv D-iii
 - 2. A-iv B-iii C-ii D-i
 - 3. A-ii B-i C-iii D-iv
 - 4. A-iii B-iv C-i D-ii

Question ID : 630680554922

Option 1 ID : 6306802169267

Option 2 ID : 6306802169266

Option 3 ID : 6306802169265

Option 4 ID : 6306802169264

Status : **Not Attempted and Marked For Review**

Chosen Option : --

Q.11 Consider the following statements:

- 1.The Multi-dimensional Poverty Index (MPI) was developed in 2008 by the Oxford Poverty and Human Development Initiative (OPHI) and the United Nations Development Programme and is used alongside the HDI.
- 2.According to the MPI, in India the largest number of people living in multidimensional poverty are found in Bihar.
- 3.The Gender Inequality Index (GII) is a part of the HDI report, which reflects gender-based inequalities in three dimensions – reproductive health, empowerment, and the labor market.

Which of the statements above is/are correct?

- Ans**
- 1. 1 and 3 only
 - 2. 2 and 3 only
 - 3. 1, 2 and 3
 - 4. 1 and 2 only

Question ID : 630680554919

Option 1 ID : 6306802169252

Option 2 ID : 6306802169253

Option 3 ID : 6306802169255

Option 4 ID : 6306802169254

Status : **Answered**

Chosen Option : 3

Q.12 Which of the following rivers are west flowing rivers?

- A) Tapi
- B) Narmada
- C) Krishna
- D) Godavari

- Ans 1. A,B
 2. B, C, D
 3. A, B, C
 4. A, C

Question ID : 630680554897
 Option 1 ID : 6306802169167
 Option 2 ID : 6306802169166
 Option 3 ID : 6306802169164
 Option 4 ID : 6306802169165
 Status : Answered
 Chosen Option : 1

Q.13 Consider the following statements:

- 1.Humayun's Tomb was built by Jahangir as a tribute to his grandfather.
- 2.The Din-i-Ilahi, an eclectic religion, was propagated by Akbar.
- 3.Jahangir is well known for installing what is known as the "chain of justice" at the Agra Fort.

Which of the statements above is/are correct?

- Ans 1. 2 and 3 only
 2. 2 only
 3. 3 only
 4. 1 only

Question ID : 630680554914
 Option 1 ID : 6306802169235
 Option 2 ID : 6306802169233
 Option 3 ID : 6306802169234
 Option 4 ID : 6306802169232
 Status : Answered
 Chosen Option : 1

Q.14 Which of the following statements is correct?

- A) Executive Bodies are constitutional and non-statutory.
- B) Statutory Bodies are non-constititutional bodies.

- Ans 1. Neither A nor B is true
 2. Both A and B is true
 3. Only A is true
 4. Only B is true

Question ID : 630680554902
 Option 1 ID : 6306802169187
 Option 2 ID : 6306802169186
 Option 3 ID : 6306802169184
 Option 4 ID : 6306802169185
 Status : Answered
 Chosen Option : 2

Q.15 Consider the following statements:

1. Under Nepal-India Treaty of Trade (2009) duty-free access into the Indian market for all Nepali-manufactured goods is provided on a non-reciprocal basis.
 2. There has been a free trade and commerce between the territories of India and Bhutan since the signing of the Treaty between the Government of India (GoI) and the Royal Government of Bhutan (RGoB) in 1949.
 3. Indian government has started trade in the rupee with neighbouring countries, including Nepal and Bhutan.
 4. India is part of the BIMSTEC (Bay of Bengal Initiative for Multi-Sectoral Technical and Economic Cooperation) which aims to bridge South and West Asia.
- Which of the statements above is/are correct?

- Ans**
- 1. 2, 3 and 4 only
 - 2. 1, 2 and 4 only
 - 3. 1, 2 and 3 only
 - 4. 1, 2, 3 and 4

Question ID : 630680554920
 Option 1 ID : 6306802169257
 Option 2 ID : 6306802169258
 Option 3 ID : 6306802169256
 Option 4 ID : 6306802169259
 Status : **Not Attempted and Marked For Review**
 Chosen Option : --

Q.16 Who was the Founder of Khilji Dynasty?

- Ans**
- 1. Ala-ud-din-Khilji
 - 2. Nasir-ud-din Khusrav Shah
 - 3. Jalal-ud-din Firoz Khilji
 - 4. Qutb-ud-din Mubarak Shah

Question ID : 630680554893
 Option 1 ID : 6306802169148
 Option 2 ID : 6306802169151
 Option 3 ID : 6306802169149
 Option 4 ID : 6306802169150
 Status : **Answered**
 Chosen Option : 3

Q.17 The Arthashastra, consists of _____.

- Ans**
- 1. 15 books
 - 2. 9 books
 - 3. 11 books
 - 4. 13 books

Question ID : 630680554894
 Option 1 ID : 6306802169155
 Option 2 ID : 6306802169152
 Option 3 ID : 6306802169153
 Option 4 ID : 6306802169154
 Status : **Not Answered**
 Chosen Option : --

Q.18 Consider the following statements:

1. India is a net exporter of iron and zinc ores.
 2. The Khetri Copper Belt in Rajasthan is a significant copper-producing region in India.
 3. The majority of India's petroleum production comes from the offshore fields in the Bay of Bengal.
 4. The Zawar mines in Rajasthan are famous for their zinc and lead reserves.
- Which of the statements above is/are correct?

- Ans
- 1. 2 and 4 only
 - 2. 2, 3 and 4 only
 - 3. 1 and 4 only
 - 4. 1, 2 and 4 only

Question ID : 630680554917

Option 1 ID : 6306802169245

Option 2 ID : 6306802169247

Option 3 ID : 6306802169244

Option 4 ID : 6306802169246

Status : **Not Attempted and Marked For Review**

Chosen Option : --

Q.19 Hinayana and Mahayana are the branches of which of the following religion?

- Ans
- 1. Buddhism
 - 2. Sikhism
 - 3. Jainism
 - 4. Hinduism

Question ID : 630680554895

Option 1 ID : 6306802169157

Option 2 ID : 6306802169158

Option 3 ID : 6306802169159

Option 4 ID : 6306802169156

Status : **Answered**

Chosen Option : 1

Q.20 Which of the following statements related to macroeconomics is correct?

- A) Stock is static in nature
- B) Flow is dynamic in nature.

- Ans
- 1. Neither A nor B is true
 - 2. Both A and B is true
 - 3. Only B is true
 - 4. Only A is true

Question ID : 630680554899

Option 1 ID : 6306802169175

Option 2 ID : 6306802169174

Option 3 ID : 6306802169173

Option 4 ID : 6306802169172

Status : **Not Answered**

Chosen Option : --

Q.1 A shopkeeper buys three varieties of pulses at Rs 132, Rs 160 and Rs y per kg respectively and mixes them in the ratio 9 : 2 : 1. The marked price per kg of the blended pulses is fixed at Rs 238, the shopkeeper gives a discount equal to $\frac{1}{6}$ of the marked price and still earns a profit of 40%. What is the value of y ?

- Ans**
- 1. 192
 - 2. 196
 - 3. 200
 - 4. 184

Question ID : 630680555000
 Option 1 ID : 6306802169579
 Option 2 ID : 6306802169578
 Option 3 ID : 6306802169576
 Option 4 ID : 6306802169577
 Status : Answered
 Chosen Option : 1

Q.2 A certain sum of money amounts to $\frac{13}{5}$ of itself in 10 years on simple interest. What is the rate of interest per annum?

- Ans**
- 1. 17%
 - 2. 16%
 - 3. 18%
 - 4. 15%

Question ID : 630680554977
 Option 1 ID : 6306802169487
 Option 2 ID : 6306802169486
 Option 3 ID : 6306802169485
 Option 4 ID : 6306802169484
 Status : Answered
 Chosen Option : 2

Q.3 Find the difference between CI and SI on ₹ 28,000, at 20% per annum, compounded half-yearly for 1 year.

- Ans**
- 1. ₹300
 - 2. ₹270
 - 3. ₹280
 - 4. ₹250

Question ID : 630680554978
 Option 1 ID : 6306802169491
 Option 2 ID : 6306802169490
 Option 3 ID : 6306802169489
 Option 4 ID : 6306802169488
 Status : Not Answered
 Chosen Option : --

Q.4 From a cask filled with 867 litres of wine, y litres are first drawn and replaced with water. After the first replacement the ratio of wine and water in the cask, when expressed in the lowest form, is given as $a : b$. From this mixture y litres are drawn and replaced with water. The ratio of wine to water in the cask after the second replacement, when expressed in the lowest form, is given as $169 : 120$. Find the value of $(y + a + b)$.

- Ans**
- 1. 220
 - 2. 222
 - 3. 221
 - 4. 224

Question ID : 630680554996
 Option 1 ID : 6306802169563
 Option 2 ID : 6306802169561
 Option 3 ID : 6306802169562
 Option 4 ID : 6306802169560
 Status : Not Answered
 Chosen Option : --

Q.5 Daya is 5 times as old as his son. Six years hence the sum of their ages will be 72 years. What is the present age of Daya's son?

- Ans**
- 1. 13 years
 - 2. 10 years
 - 3. 8 years
 - 4. 5 years

Question ID : 630680554985
 Option 1 ID : 6306802169519
 Option 2 ID : 6306802169516
 Option 3 ID : 6306802169518
 Option 4 ID : 6306802169517
 Status : Answered
 Chosen Option : 2

Q.6 The Product of two whole numbers is 1083 and their HCF is 19. Find the LCM.

- Ans**
- 1. 19
 - 2. 1083
 - 3. 38
 - 4. 57

Question ID : 630680554979
 Option 1 ID : 6306802169492
 Option 2 ID : 6306802169494
 Option 3 ID : 6306802169493
 Option 4 ID : 6306802169495
 Status : Answered
 Chosen Option : 4

Q.7 An item costing ₹ 1640 is being sold at a 15% loss. If the price is further reduced by 40%, then find the selling price.

- Ans**
- 1. ₹665.8
 - 2. ₹756.2
 - 3. ₹1073.2
 - 4. ₹836.4

Question ID : 630680554982
 Option 1 ID : 6306802169506
 Option 2 ID : 6306802169504
 Option 3 ID : 6306802169507
 Option 4 ID : 6306802169505
 Status : Answered
 Chosen Option : 1

Q.8 In an election, Candidate A received 27% of the votes, and Candidate B received 73% of the votes. If the difference in their votes was 1380, find the total number of votes.

- Ans**
- 1. 2500
 - 2. 2900
 - 3. 3700
 - 4. 3000

Question ID : 630680554980
 Option 1 ID : 6306802169498
 Option 2 ID : 6306802169496
 Option 3 ID : 6306802169497
 Option 4 ID : 6306802169499
 Status : Answered
 Chosen Option : 4

Q.9 A train 348 m long is running at a speed of 36 km/hr. It crosses a bridge in 50 seconds. What is the length of the bridge?

- Ans**
- 1. 176 m
 - 2. 152 m
 - 3. 146 m
 - 4. 103 m

Question ID : 630680554984
 Option 1 ID : 6306802169514
 Option 2 ID : 6306802169512
 Option 3 ID : 6306802169513
 Option 4 ID : 6306802169515
 Status : Answered
 Chosen Option : 2

Q.10 Akash and Dinesh started a business investing ₹ 17,500 and ₹ 35,000 respectively. At the end of the year, the total profit was ₹ 9900. Find the share of Dinesh.

- Ans**
- 1. ₹5500
 - 2. ₹6600
 - 3. ₹5600
 - 4. ₹6000

Question ID : 630680554983
 Option 1 ID : 6306802169508
 Option 2 ID : 6306802169511
 Option 3 ID : 6306802169510
 Option 4 ID : 6306802169509
 Status : Answered
 Chosen Option : 2

Q.11 A, B and C enter a partnership with initial investments in the ratio $\frac{11}{5} : \frac{7}{2} : \frac{15}{8}$. After 4 months A raises her share of investment by p%. If the total profit after 12 months since the beginning of the partnership is Rs. 138584, and A gets Rs. 50864 as her share of profit, what is the value of p?

- Ans**
- 1. 75
 - 2. 62.5
 - 3. 60
 - 4. 67.5

Question ID : 630680555001
 Option 1 ID : 6306802169581
 Option 2 ID : 6306802169583
 Option 3 ID : 6306802169582
 Option 4 ID : 6306802169580
 Status : Not Answered
 Chosen Option : --

Q.12 The average of 11 numbers is 44.5. If the average of the first six numbers is 42.5 and that of the last six numbers is 45, then find the middle number.

- Ans**
- 1. 29.5
 - 2. 33.5
 - 3. 35.5
 - 4. 38.5

Question ID : 630680554976
 Option 1 ID : 6306802169482
 Option 2 ID : 6306802169480
 Option 3 ID : 6306802169483
 Option 4 ID : 6306802169481
 Status : Answered
 Chosen Option : 3

Q.13 On a particular day each of Danish, Ethan and Farhan sold three types of pens from their respective shops. Danish and Ethan sold an identical number of pens of Type A while Farhan sold $\frac{3}{2}$ times as many pens of Type A as Danish and Ethan together sold. The ratio of the numbers of pens of Type B sold by Danish, Ethan and Farhan was 4 : 3 : 1 respectively, and Danish and Farhan sold an identical number of pens of Type C each, while Ethan sold $\frac{5}{2}$ as many pens of Type C as each of Ethan and Farhan sold. The three sellers sold each of the types of pens at different prices per unit.

Assertion (A): It is possible that Danish sold each pen of Type A at a loss of Re 1, each pen of Type B at a profit of Rs 5, and each pen of Type C at a loss of Rs 3 and made an overall profit of Rs 114; Ethan sold each pen of Type A at a profit of Rs 4, each pen of Type B at a loss of Rs 3, and each pen of Type C at a profit of Rs 5 and made an overall profit of Rs 267; and Farhan sold each pen of Type A at a profit of Rs 8, each pen of Type B at a profit of Rs 5, and each pen of Type C at a loss of Rs 7 and made an overall profit of Rs 60.

Reason (R): Framing and solving the three possible linear equations we will find that we get a unique solution.

Ans 1.

Both Assertion (A) and Reason (R) are true and Reason (R) is a correct explanation of Assertion (A).

2.

Both Assertion (A) and Reason (R) are true but Reason (R) is not a correct explanation of Assertion (A).

3. Assertion (A) is false and Reason (R) is true.

4. Assertion (A) is true and Reason (R) is false.

Question ID : 63068055005

Option 1 ID : 6306802169596

Option 2 ID : 6306802169597

Option 3 ID : 6306802169599

Option 4 ID : 6306802169598

Status : Not Answered

Chosen Option : --

Q.14 Find the positive square root of $207 - 54\sqrt{6 + 4\sqrt{2}}$

Ans 1. $9 - 3\sqrt{3}$

2. $9 - 2\sqrt{3}$

3. $9 - 2\sqrt{2}$

4. $9 - 3\sqrt{2}$

Question ID : 630680554998

Option 1 ID : 6306802169571

Option 2 ID : 6306802169570

Option 3 ID : 6306802169568

Option 4 ID : 6306802169569

Status : Not Answered

Chosen Option : --

Q.15 If the radius of a circle is decreased by 15%. By what percent area of the circle decrease?

Ans 1. 25.25%

2. 27.75%

3. 35.5%

4. 20.5%

Question ID : 630680554981

Option 1 ID : 6306802169500

Option 2 ID : 6306802169502

Option 3 ID : 6306802169501

Option 4 ID : 6306802169503

Status : Answered

Chosen Option : 2

Q.16 On the sale of a certain item a shopkeeper offered two successive discounts such that in percentage terms the second discount was only $\frac{1}{n}$ th of the first. If the overall discount was $p\%$ of the marked price of the item, then the selling price of the item after applying only the first discount was Rs y and the marked price of the item was Rs x .

Which one of the following is correct in respect of the Question and the Statements given below?

Statement 1: The values of n , p , y and x are respectively given as 3, 15.52, 8900 and 10000.

Statement 2: The values of n , p , y and x are respectively given as 4, 21.69, 12730 and 15500.

- Ans**
- 1. Only Statement 1 is feasible.
 - 2. Only Statement 2 is feasible.
 - 3. Neither of the two statements is feasible.
 - 4. Both Statements are feasible.

Question ID : 630680554999
 Option 1 ID : 6306802169572
 Option 2 ID : 6306802169573
 Option 3 ID : 6306802169575
 Option 4 ID : 6306802169574
 Status : Not Answered
 Chosen Option : --

Q.17 (x, y) is a pair of positive integers such that $\text{LCM}(x, y) - \text{HCF}(x, y) = 143$ and $x > y$.

Which one of the following is correct in respect of the Question and the Statements given below?

Statement 1: There are three possible values of $\text{HCF}(x, y)$.

Statement 2: The minimum value of $(x - y)$ is 7.

Statement 3: There are 6 pairs of (x, y) that satisfy the given conditions.

- Ans**
- 1. Statement 1 is incorrect but Statements 2 and 3 are correct.
 - 2. Only Statements 1 and 2 are correct.
 - 3. Statements 1 and 3 are correct but Statement 2 is incorrect.
 - 4. All three statements are correct.

Question ID : 630680554997
 Option 1 ID : 6306802169567
 Option 2 ID : 6306802169565
 Option 3 ID : 6306802169566
 Option 4 ID : 6306802169564
 Status : Not Answered
 Chosen Option : --

Q.18 P and Q can do a job in 90 days, Q and R can do it in 112.5 days, while P and R can do it in 150 days. X is five times as efficient as P, Y is two-thirds as efficient as Q, and Z is 2.5 times as efficient as R. Determine the number of days required to complete the same job if X, Y and Z work together.

- Ans
- 1. $31\frac{1}{29}$
 - 2. $31\frac{2}{29}$
 - 3. $30\frac{28}{29}$
 - 4. $31\frac{3}{29}$

Question ID : 630680555003
 Option 1 ID : 6306802169591
 Option 2 ID : 6306802169588
 Option 3 ID : 6306802169589
 Option 4 ID : 6306802169590
 Status : Not Answered
 Chosen Option : --

Q.19 Ravi and Rajiv decided to run a 960 m long race on a track as long as the length of the race.

Which of the statement(s) below is (are) sufficient to conclude that Rajiv ran at a speed of 10 m/s?

Statement 1: Rajiv gave Ravi an 80 m head start

Statement 2: Ravi ran at 8 m per second.

Statement 3: Rajiv caught up with Ravi with $\frac{3}{8}$ of the track length still to be covered.

- Ans
- 1. All the three statements taken together is sufficient.
 - 2. Statements 2 and 3 taken together are sufficient.
 - 3. Statements 1 and 3 taken together are sufficient.
 - 4. Even all the three statements taken together is not sufficient.

Question ID : 630680555004
 Option 1 ID : 6306802169594
 Option 2 ID : 6306802169593
 Option 3 ID : 6306802169592
 Option 4 ID : 6306802169595
 Status : Not Answered
 Chosen Option : --

Q.20 If w_1 is the weight with cargo of a ship of length l_1 , and w_2 and w_3 are the corresponding weights of ships having lengths l_2 and l_3 respectively, then

$$\left\{\frac{w_1}{l_1^2}\right\}(l_2 - l_3) + \left\{\frac{w_2}{l_2^2}\right\}(l_3 - l_1) + \left\{\frac{w_3}{l_3^2}\right\}(l_1 - l_2) = 0.$$

Which one of the following is correct in respect of the Question and the Statements given below?

Statement 1: The weight of an empty ship varies as the square of the length of the ship.

Statement 2: The weight of the ship's cargo varies as the cube of the length of the ship.

Statement 3: The weight of the ship with cargo varies as the sixth power of the length of the ship.

Ans 1. Statement 1 and Statement 3 taken together are sufficient.

2.

All the three statements together need to be true for sufficiency,

3.

Statement 1 and Statement 2 taken together are sufficient.

4. Statement 2 and Statement 3 taken together are sufficient.

Question ID : 630680555002

Option 1 ID : 6306802169584

Option 2 ID : 6306802169586

Option 3 ID : 6306802169587

Option 4 ID : 6306802169585

Status : Not Answered

Chosen Option : --

Section : Reasoning and Logical Aptitude

Q.1 MISTER-8 is related to UHWVLP--88 in a certain way based on certain logic. In the same way, FIXING-16 is related to JQLALI-272. Which of the following are correct matches following the same logic?

i. CEMENT-10	(W) KWQLOT-360
ii. PLINTH-18	(X) QHGUDJ-210
iii. GARDEN-20	(Y) WHFXDI-696
iv. FAUCET-24	(Z) WQHPHG-150

Ans 1. iii-Z only

2. ii-W, iv-Y only

3. iv-Y only

4. ii-X, iii-Y only

Question ID : 630680554959

Option 1 ID : 6306802169413

Option 2 ID : 6306802169414

Option 3 ID : 6306802169412

Option 4 ID : 6306802169415

Status : Not Answered

Chosen Option : --

Q.2 Select the set in which the numbers are related in the same way as are the numbers of the following sets.

(NOTE : Operations should be performed on the whole numbers, without breaking down the numbers into its constituent digits. E.g. 13 – Operations on 13 such as adding /subtracting /multiplying etc. to 13 can be performed. Breaking down 13 into 1 and 3 and then performing mathematical operations on 1 and 3 is not allowed)
(25, 75, 200)
(36, 24, 240)

- Ans
- 1. (35, 45, 185)
 - 2. (16, 18, 98)
 - 3. (64, 55, 457)
 - 4. (49, 50, 393)

Question ID : 630680554964
 Option 1 ID : 6306802169435
 Option 2 ID : 6306802169434
 Option 3 ID : 6306802169433
 Option 4 ID : 6306802169432
 Status : Not Answered
 Chosen Option : --

Q.3 A question is followed by two statements numbered (I) and (II). You have to decide whether the data provided in the statements are sufficient/necessary to answer the question. Read both the statements and decide the appropriate answer.

Question: How is Prateek related to Chitra?

(I) Pointing to the photograph of Prateek, Yami said, 'he is the son of my mother Chitra's husband Sawan's father's wife Rashmi'.

(II) Pointing to the photograph of Chitra, Vritti said, 'she is my paternal grandfather's son's wife'. Prateek is Rashmi's son.

- Ans
- 1. Data in statements I and II together are necessary to answer the question.
 - 2. Data in statements I and II together are NOT sufficient to answer the question
 - 3. Data in Statement II alone is sufficient to answer the question while data in statement I is not
 - 4. Data in Statement I alone is sufficient to answer the question while data in statement II is not

Question ID : 630680554960
 Option 1 ID : 6306802169418
 Option 2 ID : 6306802169419
 Option 3 ID : 6306802169417
 Option 4 ID : 6306802169416
 Status : Answered
 Chosen Option : 4

Q.4 Read the following information carefully and answer the question that follows.

Statement – Domestic investment is very less in Country-A despite having good savings rate. The saved resources need to be mobilized such that the locked resources are freed up for right investments. Some people here are investing in less productive assets like consumer durables and gold. As per the recommendations of experts, if the Country-A needs to grow, there should be more investments in other productive more beneficial sectors such as agriculture, manufacturing or services. You must assume everything in the statement to be true and on the basis of the information given in the statement, decide which of the course of actions logically follow for pursuing.

- A. People residing in Country-A should be asked to keep their savings to themselves and should not rely on any of the investment options in this difficult time.
- B. People in Country-A should be made aware about various investment options so that they can invest in ways which are more productive and provide more returns.
- C. People should be discouraged to put their investments in sectors such as agriculture, manufacturing or services sector as per the experts' recommendations.
- D. Any sort of foreign direct investment should not be allowed in the times where domestic investments are fairly low.

- Ans
- 1. Only A, C and D
 - 2. Only D
 - 3. Only B and C
 - 4. Only B

Question ID : 630680554961
 Option 1 ID : 6306802169423
 Option 2 ID : 6306802169421
 Option 3 ID : 6306802169422
 Option 4 ID : 6306802169420
 Status : Not Answered
 Chosen Option : --

Q.5 Select the wrong term in the following number series:

6, 12, 48, 382, 6144

- Ans
- 1. 12
 - 2. 48
 - 3. 382
 - 4. 6144

Question ID : 630680554943
 Option 1 ID : 6306802169349
 Option 2 ID : 6306802169350
 Option 3 ID : 6306802169348
 Option 4 ID : 6306802169351
 Status : Answered
 Chosen Option : 3

Q.6 Three Statements are given followed by two conclusions numbered I and II. Assuming the statements to be true, even if they seem to be at variance with commonly known facts, decide which of the conclusions logically follow(s) from the statements.

Statement I: All brinjal are potatoes.
Statement II: Some potatoes are not tomatoes.
Statement III: Some tomatoes are carrots.

Conclusion I: Some tomatoes are not carrots.
Conclusion II: Some potatoes are tomatoes.

- Ans
- 1. Only conclusion I follows
 - 2. Both conclusions I and II follow
 - 3. Neither conclusion I nor II follows
 - 4. Only conclusion II follows

Question ID : 630680554937
Option 1 ID : 6306802169324
Option 2 ID : 6306802169326
Option 3 ID : 6306802169327
Option 4 ID : 6306802169325
Status : Answered
Chosen Option : 2

Q.7 Select the wrong term in the given alpha-numeric series.

H25U, I30T, J35S, K40R, L45P

- Ans
- 1. L45P
 - 2. I30T
 - 3. H25U
 - 4. K40R

Question ID : 630680554940
Option 1 ID : 6306802169337
Option 2 ID : 6306802169336
Option 3 ID : 6306802169338
Option 4 ID : 6306802169339
Status : Answered
Chosen Option : 1

Q.8 Four letter clusters have been given, out of which three are alike in some manner and one is different. Select the odd letter cluster.

- Ans
- 1. PT
 - 2. AD
 - 3. HK
 - 4. JM


Question ID : 630680554939
Option 1 ID : 6306802169332
Option 2 ID : 6306802169334
Option 3 ID : 6306802169335
Option 4 ID : 6306802169333
Status : Answered
Chosen Option : 1

Q.9 In a college, 66 students enjoy rock music, 62 enjoy pop music, 58 enjoy jazz music, 16 enjoy both rock and pop music, 27 enjoy both pop and jazz music, and 13 enjoy both jazz and rock music. No one enjoys all three music. Find how many enjoy at least one type of music.

- Ans**
- 1. 110
 - 2. 120
 - 3. 130
 - 4. 140

Question ID : **630680554938**
 Option 1 ID : **6306802169329**
 Option 2 ID : **6306802169331**
 Option 3 ID : **6306802169330**
 Option 4 ID : **6306802169328**
 Status : **Not Answered**
 Chosen Option : --

Q.10 Select the figure that will replace the question mark (?) in the following figure series.



Ans

- 1.
- 2.
- 3.
- 4.

Question ID : **630680554941**
 Option 1 ID : **6306802169341**
 Option 2 ID : **6306802169342**
 Option 3 ID : **6306802169340**
 Option 4 ID : **6306802169343**
 Status : **Answered**
 Chosen Option : **3**

Q.11 'A = B' means 'A is the mother of B'
 'A @ B' means 'A is the brother of B'
 'A % B' means 'A is the husband of B'
 'A & B' means 'A is the father of B'

Based on the above information, find out which of the given statements can be the reason/s behind the assertion made below if it is given that 'V @ D % R = C @ N.

Assertion: W's mother is wife of D's brother?

Reason A : V % L
 Reason B : W @ T

- Ans
- 1. Both A and B are reasons behind the assertion
 - 2. Neither A nor B is the reason behind the assertion
 - 3. Only A is the reason behind the assertion
 - 4. Only B is the reason behind the assertion

Question ID : 630680554958
 Option 1 ID : 6306802169408
 Option 2 ID : 6306802169411
 Option 3 ID : 6306802169409
 Option 4 ID : 6306802169410
 Status : Answered
 Chosen Option : 3

Q.12 Three of the following four figure pairs are alike in a certain way and thus form a group. Which is the one that does not belong to that group?

Ans

✗ 1.

✗ 2.

✗ 3.

✓ 4.

Question ID : 630680554962
 Option 1 ID : 6306802169424
 Option 2 ID : 6306802169426
 Option 3 ID : 6306802169425
 Option 4 ID : 6306802169427
 Status : Answered
 Chosen Option : 4

Q.13 If A denotes 'addition', B denotes 'multiplication', C denotes 'subtraction', and D denotes 'division', then what will be the value of the following equation?

$$37 A 2 B 70 C 189 D 7 = ?$$

- Ans
- 1. 130
 - 2. 110
 - 3. 150
 - 4. 140

Question ID : 630680554944
 Option 1 ID : 6306802169352
 Option 2 ID : 6306802169353
 Option 3 ID : 6306802169354
 Option 4 ID : 6306802169355
 Status : Answered
 Chosen Option : 3

Q.14 Six persons named P, Q, R, S, U and V are sitting in a straight line, all facing north direction. Each one of them belongs to one of six different cities i.e. Chennai, Delhi, Kolkata, Mumbai, Shimla and Surat. The person from Kolkata is third to the left of the person from Surat. U is to the immediate right of the person from Surat. R is second to the left of P. P is from Chennai. S is from Mumbai. S is third to the right of R. P is NOT the immediate neighbour of U. R is NOT from Shimla. Q is third to the right of V.

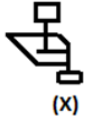
Which of the following is/are true based on the given arrangement?

- I. The person from Chennai is second to the right of the person from Shimla.
- II. Q is sitting second to right of P.
- III. The person from Delhi is third to the left of the person from Mumbai.

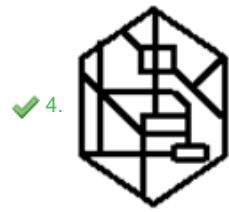
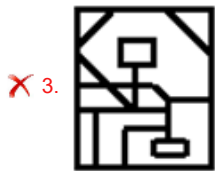
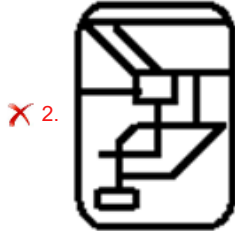
- Ans
- 1. All I, II and III are true
 - 2. Only I and III is true
 - 3. Only I and II are true
 - 4. Only II and III are true

Question ID : 630680554955
 Option 1 ID : 6306802169399
 Option 2 ID : 6306802169396
 Option 3 ID : 6306802169397
 Option 4 ID : 6306802169398
 Status : Not Answered
 Chosen Option : --

Q.15 Select the option figure in which the given figure (X) is embedded as its part (rotation is NOT allowed).



Ans



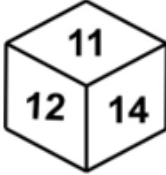
Question ID : 630680554963
Option 1 ID : 6306802169431
Option 2 ID : 6306802169428
Option 3 ID : 6306802169429
Option 4 ID : 6306802169430
Status : Answered
Chosen Option : 4

Q.16 Select the die which cannot be formed on folding the given sheet.

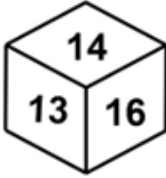


Ans

✗ 1.




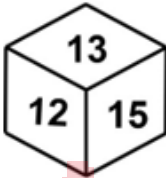
✗ 2.



✓ 3.



✗ 4.



Question ID : 630680554942
 Option 1 ID : 6306802169344
 Option 2 ID : 6306802169346
 Option 3 ID : 6306802169347
 Option 4 ID : 6306802169345
 Status : Answered
 Chosen Option : 3

Q.17 In a certain code language, 'FIXTURE' is written as '42737', and 'TORMENT' is written as '281442'. Which of the following are correct matches as per the given code language?

WORD	CODE
(i) PROGRAM	(W) 322049
(ii) JANITOR	(X) 422429
(iii) FULCRUM	(Y) 251843

- Ans**
- 1. i-Y , ii-W, iii-X only
 - 2. i-W, iii-X only
 - 3. i-W, ii-Y, iii-X only
 - 4. iii-X only

Question ID : 630680554957
 Option 1 ID : 6306802169407
 Option 2 ID : 6306802169405
 Option 3 ID : 6306802169406
 Option 4 ID : 6306802169404
 Status : Not Answered
 Chosen Option : --

Q.18 Arrange the words in a meaningful logical order and select the appropriate sequence :

1. Toddlerhood
2. Adulthood
3. Infancy
4. Childhood
5. Old age

- Ans**
- 1. 34125
 - 2. 34152
 - 3. 31452
 - 4. 31425

Question ID : 630680554936
 Option 1 ID : 6306802169321
 Option 2 ID : 6306802169322
 Option 3 ID : 6306802169323
 Option 4 ID : 6306802169320
 Status : Answered
 Chosen Option : 4

Q.19 In a family, there are six members named K, L, M, N, O and P. N's age is three times the age of L. The age of O is equal to the total age of L and M. P's age is equal to the total age of K and N. K's age is half the age of M. P is one year elder than O. The sum of the ages of K and M is 45 years. The sum of ages of N and L is 32 years.

Which of the following is true based on the given information?

- I. The age of P is 41 years.
- II. O is 21 years elder than K.

- Ans**
- 1. Only I
 - 2. Both I and II
 - 3. Neither I nor II
 - 4. Only II

Question ID : 630680554956
 Option 1 ID : 6306802169400
 Option 2 ID : 6306802169402
 Option 3 ID : 6306802169403
 Option 4 ID : 6306802169401
 Status : Not Answered
 Chosen Option : --

Q.20 In a line, Jaya ranks 84 from the bottom while there are 85 girls in the class. What is Jaya's rank from the top?

- Ans 1. 2
 2. 5
 3. 4
 4. 3

Question ID : 630680554935
 Option 1 ID : 6306802169317
 Option 2 ID : 6306802169318
 Option 3 ID : 6306802169316
 Option 4 ID : 6306802169319
 Status : Answered
 Chosen Option : 1

Section : English

Q.1 The sentence below has been divided into three parts. Select the part of the sentence that has an error. If the sentence has no error, select the option 'No Error'.

But perhaps Governor Clinton's most/ remarkable achievement will have been/ brought to an end the Reagan-Bush years.

- Ans 1. But perhaps Governor Clinton's most
 2. No error
 3. remarkable achievement will have been
 4. brought to an end the Reagan-Bush years.

Question ID : 630680554860
 Option 1 ID : 6306802169016
 Option 2 ID : 6306802169019
 Option 3 ID : 6306802169017
 Option 4 ID : 6306802169018
 Status : Answered
 Chosen Option : 3

Q.2 In the following passage there are blanks, each of which has been numbered. Select the correct option to fill in the blanks.

The volcano had been inactive for centuries. There was little warning of the coming 1, although one account by archaeologists 2 that a hard rain and a strong wind had disturbed the 3 calm during the preceding night. Early the next morning, the volcano poured a huge river of 4 rock down upon Herculaneum, completely burying the city and filling the harbor with 5 lava.

- Ans 1. 1-outburst, 2-detected, 3-supernatural, 4-fused, 5- concrete
 2. 1-explosion, 2-revealed, 3-heavenly, 4-liquid, 5-conjoined
 3. 1-outbreak, 2-identified, 3-eternal, 4-smelted, 5- coherent
 4. 1- eruption, 2- unearthed, 3- celestial, 4- molten, 5- coagulated

Question ID : 630680554879
 Option 1 ID : 6306802169093
 Option 2 ID : 6306802169092
 Option 3 ID : 6306802169095
 Option 4 ID : 6306802169094
 Status : Answered
 Chosen Option : 3

Q.3 Select the correct conclusion based on the meaning of the underlined idiom:

The boy exulted in the success of his petty thefts but the Argus-eyed mother knew it all.

- i. The boy was clever enough to take a little money at a time so that his mother never noticed it.
- ii. The mother looked at her boy with such love and compassion that he regretted his actions.
- iii. The mother was extremely vigilant and caught the boy red handed one day.
- iv. The doting mother failed to see the faults of her boy and he became bolder in his acts.

- Ans
- 1. both ii and iv are correct
 - 2. both i and ii are correct
 - 3. only iv is correct
 - 4. only iii is correct

Question ID : 630680554880

Option 1 ID : 6306802169096

Option 2 ID : 6306802169098

Option 3 ID : 6306802169099

Option 4 ID : 6306802169097

Status : Answered

Chosen Option : 4

Q.4 Select the word that is closest in meaning (SYNONYM) to the word given below

Infinitesimal

- Ans
- 1. Gallant
 - 2. Insignificant
 - 3. Bold
 - 4. Unabashed

Question ID : 630680554856

Option 1 ID : 6306802169000

Option 2 ID : 6306802169001

Option 3 ID : 6306802169002

Option 4 ID : 6306802169003

Status : Not Attempted and Marked For Review

Chosen Option : --

Q.5 Arrange the given sentences (1-6) in the correct order to form a coherent paragraph.

1. Porsena, the King of the Etruscans, had raised a great army and was marching toward Rome.
2. Then, one morning the army of Porsena was seen coming over the hills from the north.
3. The Romans did not have very many soldiers at that time, and they knew that they were not strong enough to meet the Etruscans in open battle.
4. There was once, a war between the Roman people and the Etruscans who lived in the towns on the other side of the Tiber River.
5. So they kept themselves inside their walls and set guards to watch the roads.
6. The city of Rome had never been in such great danger before.

- Ans
- 1. 461352
 - 2. 315462
 - 3. 612543
 - 4. 135624

Question ID : 630680554874
 Option 1 ID : 6306802169073
 Option 2 ID : 6306802169072
 Option 3 ID : 6306802169074
 Option 4 ID : 6306802169075
 Status : Answered
 Chosen Option : 1

Q.6 Select the correct conclusion based on the meaning of the underlined word:

- Statement: He has been a somnambulist since childhood.
- i. He entertains people by speaking without moving his lips as if the voice is coming from somewhere else.
 - ii. He walks around in his sleep, unaware of himself and his surroundings.
 - iii. He is an expert in soil management and field crop production.
 - iv. He is a reformer who works to achieve social or political change.

- Ans
- 1. i is correct
 - 2. ii is correct
 - 3. iii is correct
 - 4. iv is correct

Question ID : 630680554877
 Option 1 ID : 6306802169087
 Option 2 ID : 6306802169086
 Option 3 ID : 6306802169084
 Option 4 ID : 6306802169085
 Status : Answered
 Chosen Option : 2

Q.7 Select the word that is closest in meaning (SYNONYM) to the word given below

Entropy

- Ans
- 1. Decay
 - 2. Efficiency
 - 3. Futility
 - 4. Ineptness

Question ID : 630680554857
 Option 1 ID : 6306802169005
 Option 2 ID : 6306802169006
 Option 3 ID : 6306802169007
 Option 4 ID : 6306802169004
 Status : Answered
 Chosen Option : 2

Q.8 Some parts of a sentence have been jumbled up, and labelled P, Q, R and S. Select the option that gives the correct sequence in which these parts can be rearranged to form a meaningful and grammatically correct paragraph. Opening and Closing sentence indicate the start of the paragraph and end of the sentence paragraph.

Opening Sentence: The bustling city of Tokyo is not only the capital of Japan but also a global metropolis known for its innovation and technology.

P. Tokyo's journey into modernity is closely tied to its rise as an economic powerhouse, marked by the post-World War II era when the city rapidly transformed.

Q. Skyscrapers dot the skyline, reflecting the city's economic prosperity and architectural prowess.

R. In the aftermath of World War II, Tokyo emerged as a symbol of resilience, rebuilding itself into a vibrant hub of commerce and culture.

S. Despite the city's technological advances, traditional elements such as Shinto shrines and cherry blossoms remain integral to Tokyo's identity.

Closing Sentence: Today, Tokyo stands as a captivating blend of tradition and modernity, drawing visitors from around the world.

Ans ✓ 1. PRQS

✗ 2. RQPS

✗ 3. RPSQ

✗ 4. SPQR

Question ID : 630680554852

Option 1 ID : 6306802168985

Option 2 ID : 6306802168986

Option 3 ID : 6306802168984

Option 4 ID : 6306802168987

Status : Not Attempted and Marked For Review

Chosen Option : --

Q.9 The sentence below has been divided into three parts. Select the part of the sentence that has an error. If the sentence has no error, select the option 'No Error'.

The museum was built in 1972, although/ the chief's home and store (the museum's main attractions)/ remained closed because for their fragility.

Ans ✗ 1. the chief's home and store (the museum's main attractions)

✗ 2. No error

✓ 3. remained closed because for their fragility.

✗ 4. The museum was built in 1972, although

Question ID : 630680554859

Option 1 ID : 6306802169013

Option 2 ID : 6306802169015

Option 3 ID : 6306802169014

Option 4 ID : 6306802169012

Status : Answered

Chosen Option : 1

Q.10 Select the word that is opposite in meaning (ANTONYM) to the word given below.

Recalcitrant

- Ans** 1. Amenable
 2. Supress
 3. Halt
 4. Impede

Question ID : 630680554855
 Option 1 ID : 6306802168996
 Option 2 ID : 6306802168998
 Option 3 ID : 6306802168997
 Option 4 ID : 6306802168999
 Status : Not Answered
 Chosen Option : --

Q.11 The sentence below has been divided into three parts. Select the part of the sentence that has an error. If the sentence has no error, select the option 'No Error'.

As both a novelist and/ an university lecturer,/ she has two strings to her bow.

- Ans** 1. she has two strings to her bow.
 2. No error
 3. an university lecturer,
 4. As both a novelist and

Question ID : 630680554858
 Option 1 ID : 6306802169010
 Option 2 ID : 6306802169011
 Option 3 ID : 6306802169009
 Option 4 ID : 6306802169008
 Status : Answered
 Chosen Option : 1

Q.12 Select the most appropriate meaning of the given proverb from the options

The grass is always greener on the other side

- Ans** 1. People always want what they don't have
 2. Nothing is free. Even the things that are free have a hidden cost
 3. Your home is the most comfortable place in the world
 4. If you're trying to convince someone of something, words and ideas are stronger than using physical force (common in politics)

Question ID : 630680554854
 Option 1 ID : 6306802168992
 Option 2 ID : 6306802168995
 Option 3 ID : 6306802168994
 Option 4 ID : 6306802168993
 Status : Not Attempted and Marked For Review
 Chosen Option : --

Q.13 Match the following groups of words with the correct one-word substitutions.

phrase	one-word substitution
1. study of languages	a. psephology
2. study of handwriting	b. philology
3. study of election trends	c. theology
4. study of religion	d. graphology

- Ans
- 1. 1-c, 2-a, 3-b, 4-d
 - 2. 1-d, 2-b, 3-c, 4-a
 - 3. 1-b, 2-d, 3-a, 4-c
 - 4. 1-a, 2-c, 3-d, 4-b

Question ID : 630680554876

Option 1 ID : 6306802169082

Option 2 ID : 6306802169081

Option 3 ID : 6306802169080

Option 4 ID : 6306802169083

Status : **Not Attempted and Marked For Review**

Chosen Option : --

Q.14 Match the following groups of words with the correct one-word substitutions.

phrase	one-word substitution
1. murder of a whole community or race	a. fratricide
2. murder of one's brother or sister	b. celibacy
3. the state of remaining unmarried	c. supremacy
4. the state of being the most powerful	d. genocide

- Ans
- 1. 1-c, 2-b, 3-d, 4-a
 - 2. 1-b, 2-c, 3-a, 4-d
 - 3. 1-a, 2-d, 3-c, 4-b
 - 4. 1-d, 2-a, 3-b, 4-c

Question ID : 630680554875

Option 1 ID : 6306802169079

Option 2 ID : 6306802169078

Option 3 ID : 6306802169076

Option 4 ID : 6306802169077

Status : **Answered**

Chosen Option : 4

Q.15 Select the correct conclusion based on the meaning of the underlined word:

Statement: Her last novel was published posthumously.

- i. She portrayed the protagonist of her novel as a pessimistic character struggling with depression.
- ii. She could not enjoy the appreciation that her novel received as it was published after her death.
- iii. She was awarded the highest honour and felicitated for her great piece of writing.
- iv. Her novel became a best seller and she became famous overnight.

- Ans
- 1. only i is correct
 - 2. both iii and iv are correct
 - 3. only ii is correct
 - 4. both i and iv are correct

Question ID : 630680554878
 Option 1 ID : 6306802169088
 Option 2 ID : 6306802169090
 Option 3 ID : 6306802169091
 Option 4 ID : 6306802169089
 Status : Answered
 Chosen Option : 3

Q.16 Select the most appropriate meaning of the given idiom

In the heat of the moment

- Ans
- 1. Under firm control, well managed
 - 2. Overwhelmed by what is happening in the moment
 - 3. To have something secured
 - 4. Approximately, almost, somewhat, to a certain degree

Question ID : 630680554853
 Option 1 ID : 6306802168991
 Option 2 ID : 6306802168989
 Option 3 ID : 6306802168990
 Option 4 ID : 6306802168988
 Status : Answered
 Chosen Option : 2

Q.17 Which of the following statements correctly uses the idiom 'at the eleventh hour' by substituting the underlined words?

- A. While organizing the event, we realized that we were running short of time.
- B. The runner in the third place overtook the ones ahead of him at the last moment and won the race.
- C. She believes in planning meticulously well in advance so that there is no exigency later.
- D. He disturbed me late at night to inform me of his appointment as the Commissioner.

- Ans
- 1. Only D is correct
 - 2. Both A and C are correct
 - 3. Only B is correct
 - 4. Both B and C are correct

Question ID : 630680554881
 Option 1 ID : 6306802169103
 Option 2 ID : 6306802169100
 Option 3 ID : 6306802169101
 Option 4 ID : 6306802169102
 Status : Answered
 Chosen Option : 3

Q.18 Four sentences are given below. Find the odd sentence out.

- A. An unsettled society is antagonistic to creative liberty.
- B. Creativity requires freedom to flow and express itself but it is often curtailed by politico-religious authorities.
- C. Peaceful times always see proliferation in artistic and scientific works.
- D. The creative individual is being controlled through fear and restriction by policing forces.

- Ans
- 1. sentence D
 - 2. sentence C
 - 3. sentence B
 - 4. sentence A

Question ID : 630680554873
 Option 1 ID : 6306802169071
 Option 2 ID : 6306802169070
 Option 3 ID : 6306802169069
 Option 4 ID : 6306802169068
 Status : Answered
 Chosen Option : 2

Q.19 The sentence below has been divided into three parts. Select the part of the sentence that has an error. If the sentence has no error, select the option 'No Error'.

For a fortnight, toddlers at St Andrew's had been/ busy committed rhymes to memory/ in preparation for their big performance.

- Ans
- 1. busy committed rhymes to memory
 - 2. For a fortnight, toddlers at St Andrew's had been
 - 3. in preparation for their big performance.
 - 4. No error

Question ID : 630680554861
 Option 1 ID : 6306802169021
 Option 2 ID : 6306802169020
 Option 3 ID : 6306802169022
 Option 4 ID : 6306802169023
 Status : Not Answered
 Chosen Option : --

Q.20 There is a sentence that is missing in the paragraph below. Look at the paragraph and decide in which blank (1, 2, 3, or 4) the following sentence would best fit.

Sentence: Internet addiction is a modern affliction spreading wide as our society becomes increasingly dependent on it.
 The US and China have started rehabilitation centres for compulsive users of the internet and even India must consider proactive measures with regard to this problem.
 ___1___. It is no longer a mere medium of communication but is evolving into a virtual reality. ___2___. Neuropsychiatric opinion holds that internet addiction is like substance abuse. ___3___ It thrives on instant gratification and can cause behavioral alterations. ___4___

- Ans
- 1. Blank 3
 - 2. Blank 1
 - 3. Blank 4
 - 4. Blank 2

Question ID : 630680554872
 Option 1 ID : 6306802169066
 Option 2 ID : 6306802169064
 Option 3 ID : 6306802169067
 Option 4 ID : 6306802169065
 Status : Answered
 Chosen Option : 1