

# IB ACIO Grade-II (Executive) Jan 18, 2024 Shift 4 Question Paper with Answers

## INTELLIGENCE BUREAU

(Ministry of Home Affairs)

Government of India

|                  |                   |
|------------------|-------------------|
| Participant ID   |                   |
| Application no   |                   |
| Participant Name |                   |
| Test Center Name |                   |
| Test Date        | 18/01/2024        |
| Test Time        | 5:30 PM - 6:30 PM |
| Subject          | IB ACIO II Exe    |

### Section : Current Affairs

**Q.1** Which of the following statement is/are Incorrect about Himalaya Project recently resolved to declare Yaya Tso.

1. The panchayat of Chumathang village, along with GoI-UNDP-GEF SECURE Himalaya Project recently resolved to declare Yaya Tso as Ladakh's 3<sup>rd</sup> Biodiversity Heritage Site.
2. The resolution was signed on 17th December 2023 after multiple rounds of consultations between the village stakeholders and SECURE Himalaya Project to declare the high-altitude lake and its catchment as a Biodiversity Heritage Site.
3. The proposed Yaya Tso BHS will have an approximate area of 160 sq. km. which will also include the lake's watershed.

**Ans**  1. 3 and 2 only

2. 1,2 and 3

3. 2 only

4. 1 only

Question ID : 630680558081

Option 1 ID : 6306802181297

Option 2 ID : 6306802181298

Option 3 ID : 6306802181296

Option 4 ID : 6306802181295

Status : Answered

Chosen Option : 2

**Q.2** Which of the following statement is correct about International Craft Summit 2023?

I. Odisha Chief Minister Naveen Patnaik in January 2023 inaugurated an 'International Craft Summit' in Jaipur.

II. International delegates from 15 countries have arrived in Jaipur to engage with local artisans and other stakeholders, informed the government.

**Ans**  1. Both I and II

2. Only II

3. Neither I nor II

4. Only I

Question ID : 630680556693

Option 1 ID : 6306802175764

Option 2 ID : 6306802175763

Option 3 ID : 6306802175765

Option 4 ID : 6306802175762

Status : Answered

Chosen Option : 2

# Test Prime

ALL EXAMS,  
ONE SUBSCRIPTION



**70,000+**  
Mock Tests



Personalised  
Report Card



Unlimited  
Re-Attempt



**600+**  
Exam Covered



Previous Year  
Papers



**500%**  
Refund



**ATTEMPT FREE MOCK NOW**

**Q.3** Which of the following statement is correct about Intersolar Europe 2023 exhibition?

I. It was held in Munich, Germany from 14th to 16th June, 2023.

II. Indian Renewable Energy Development Agency (IREDA) participated in the three-day "Intersolar Europe 2023" exhibition.

- Ans**
- 1. Only I
  - 2. Neither I nor II
  - 3. Only II
  - 4. Both I and II

Question ID : 630680556607  
 Option 1 ID : 6306802175418  
 Option 2 ID : 6306802175421  
 Option 3 ID : 6306802175419  
 Option 4 ID : 6306802175420  
 Status : Not Answered  
 Chosen Option : --

**Q.4** Which of the following is / are the CORRECT statement(s) regarding awards approved on the eve of independence day 2023 to Armed Forces and Central Armed Police Forces personnel?

1. President Smt Droupadi Murmu approved 76 Gallantry awards.
2. These include nine posthumous to Armed Forces & CAPF personnel.

- Ans**
- 1. Both 1 and 2
  - 2. 1 only
  - 3. Neither 1 nor 2
  - 4. 2 only

Question ID : 630680558046  
 Option 1 ID : 6306802181156  
 Option 2 ID : 6306802181155  
 Option 3 ID : 6306802181158  
 Option 4 ID : 6306802181157  
 Status : Answered  
 Chosen Option : 4

**Q.5** What is the theme of the World Economic Forum (WEF) Annual Meeting 2023?

- Ans**
- 1. Correlation in a Fragmented World
  - 2. Cooperation in a Fragmented World
  - 3. Competition in a Fragmented World
  - 4. Conflict in a Fragmented World

Question ID : 630680556596  
 Option 1 ID : 6306802175377  
 Option 2 ID : 6306802175374  
 Option 3 ID : 6306802175375  
 Option 4 ID : 6306802175376  
 Status : Answered  
 Chosen Option : 2

**Q.6** Which of the following statement is/are CORRECT about Uttarakhand Public Services (Horizontal Reservation for Women) Bill, 2022?

1. On October 12, 2022, the Uttarakhand state cabinet authorised chief minister Pushkar Singh Dhami for bringing an ordinance on the issue of women's reservation in the state government jobs.
2. Uttarakhand Public Services (Horizontal Reservation for Women) Bill, 2022, was passed by state assembly in November 2022.
3. The Bill seeks to provide 35 per cent reservation to women in government jobs in order to ensure social justice, equality of opportunity, improvement in living standards and gender equality in public planning.

**Ans**  1. 3 only

2. 1 and 2 only

3. 1 and 3 only

4. 2 only

Question ID : 630680558068

Option 1 ID : 6306802181244

Option 2 ID : 6306802181246

Option 3 ID : 6306802181243

Option 4 ID : 6306802181245

Status : Answered

Chosen Option : 2

**Q.7** Name the award received by the following scientists in January 2023.

1. Shri Khadar Valli Dudekula
2. Shri Modadugu Vijay Gupta
3. Shri Ganesh Nagappa Krishnarajanagara
4. Shri Arvind Kumar

**Ans**  1. Padma Shri

2. Bhatnagar Prizes

3. Padma Vibhushan

4. Padma Bhushan

Question ID : 630680558042

Option 1 ID : 6306802181140

Option 2 ID : 6306802181142

Option 3 ID : 6306802181141

Option 4 ID : 6306802181139

Status : Answered

Chosen Option : 2

Q.8 Which of the following statement is correct about Khelo India Para Games, 2023?

I. The 1st edition of Khelo India Para Games 2023 is being organized from 10th -17th December 2023.

II. Khelo India Para Games 2023 will held across 3 venues in the city of Delhi across 7 sports Disciplines (Para Archery, Par Athletics, Para Badminton, Para Table Tennis, Para Powerlifting, CP Football, Para Shooting).

Ans  1. Both I and II

2. Neither I nor II

3. Only II

4. Only I

Question ID : 630680556624

Option 1 ID : 6306802175488

Option 2 ID : 6306802175489

Option 3 ID : 6306802175487

Option 4 ID : 6306802175486

Status : Answered

Chosen Option : 1

Q.9 भारतीय न्याय संहिता विधेयक, 2023, निम्नलिखित में से किस अधिनियम का स्थान लेगा?

Ans  1. सिविल प्रक्रिया संहिता, 1908

2. आपराधिक प्रक्रिया संहिता, (1898), 1973

3. भारतीय दंड संहिता, 1860

4. भारतीय साक्ष्य अधिनियम, 1872

Question ID : 630680556645

Option 1 ID : 6306802175573

Option 2 ID : 6306802175571

Option 3 ID : 6306802175570

Option 4 ID : 6306802175572

Status : Answered

Chosen Option : 3

Q.10 Which of the following statement is/are INCORRECT about the announcement made by Central Government in November 2023 regarding modification to Senior Citizen's Savings Scheme?

1. The amended Senior Citizen's Savings (Fourth Amendment) Scheme, 2023, now allows depositors to extend their accounts multiple times upon maturity to benefit from its attractive interest rates for a shorter period.

2. The ministry has also amended the rules to not to allow premature closure of PPF account and changed the rules governing premature withdrawal under the National Savings Time Deposit scheme.

Ans  1. 2 only

2. Neither 1 nor 2

3. 1 and 2

4. 1 only

Question ID : 630680558061

Option 1 ID : 6306802181216

Option 2 ID : 6306802181218

Option 3 ID : 6306802181217

Option 4 ID : 6306802181215

Status : Answered

Chosen Option : 3

**Q.11** Prime Minister Shri Narendra Modi has released India's 6G Vision "Bharat 6G Vision" document on March 23, 2023 which envisages India to be a front-line contributor in design, development and deployment of 6G technology \_\_\_\_\_.

- Ans**
- 1. by 2025
  - 2. by 2028
  - 3. by 2035
  - 4. by 2030

Question ID : **630680556631**  
 Option 1 ID : **6306802175514**  
 Option 2 ID : **6306802175516**  
 Option 3 ID : **6306802175517**  
 Option 4 ID : **6306802175515**  
 Status : **Not Answered**  
 Chosen Option : --

**Q.12** Find the CORRECT statement/s about VAJRA PRAHAR 2023?

1. Exercise VAJRA PRAHAR is a joint exercise conducted between Indian Navy and US Navy Special Forces.
2. The 14<sup>th</sup> Edition commenced at the Joint Training Node, Umroi on 21<sup>st</sup> November, 2023.
3. The US contingent is represented by personnel from the 1<sup>st</sup> Special Forces Group (SFG) of US Special Forces.
4. It aims at sharing best practices and experiences in areas such as joint mission planning and operational tactics.

- Ans**
- 1. 1,2,3 and 4
  - 2. 1,2 and 3 only
  - 3. 1,4 and 3 only
  - 4. 2,3 and 4 only

Question ID : **630680558054**  
 Option 1 ID : **6306802181190**  
 Option 2 ID : **6306802181187**  
 Option 3 ID : **6306802181189**  
 Option 4 ID : **6306802181188**  
 Status : **Answered**  
 Chosen Option : **3**

**Q.13** Which of the following statement(s) is/ are correct about IIT Guwahati and ISRO Researchers Discovery of X-Ray Polarization in Extragalactic Black Hole Source in November 2023?

1. Large Magellanic Cloud X-3 (LMC X3) is a binary star system consisting of a black hole and a 'normal' star that is much hotter, bigger, and more massive than the Sun.
2. It is located in a satellite galaxy of our Milky Way, nearly 200,000 light-years away from Earth. Since its discovery in 1971, it has been observed by various satellites.

- Ans**
- 1. Both 1 & 2
  - 2. 2 only
  - 3. Neither 1 nor 2
  - 4. 1 only

Question ID : **630680558040**  
 Option 1 ID : **6306802181134**  
 Option 2 ID : **6306802181132**  
 Option 3 ID : **6306802181133**  
 Option 4 ID : **6306802181131**  
 Status : **Answered**  
 Chosen Option : **4**

**Q.14** Which of the following statement is/are CORRECT about India's updated Nationally Determined Contribution (NDC)?

1. In August 2023, Cabinet approved India's Updated Nationally Determined Contribution to be communicated to the United Nations Framework Convention on Climate Change.
2. This update to India's existing NDC translates the 'Panchamrit' announced at COP 26 into enhanced climate targets.
3. The update is a step towards achieving India's long term goal of reaching net-zero by 2070.
4. As per the updated NDC, India now stands committed to reduce Emissions Intensity of its GDP by 45 percent by 2030

**Ans**  1. 1 and 2 only

2. 1,2,3 and 4

3. 3,2,and 4 only

4. 3 and 4 only

Question ID : 630680558083

Option 1 ID : 6306802181303

Option 2 ID : 6306802181306

Option 3 ID : 6306802181305

Option 4 ID : 6306802181304

Status : Answered

Chosen Option : 2

**Q.15** Which of the following is/are TRUE regarding Karthikeyan Murali?

1. In a remarkable chess feat in October 2023, the 24-year-old Indian chess grandmaster, Karthikeyan Murali, delivered a stunning blow to the world's number one player, Magnus Carlsen.
2. Karthikeyan's victory in the classical chess format at the ongoing Qatar Masters marked only the third instance where an Indian player emerged triumphant against Carlsen.
3. Karthikeyan's win occurred in the seventh round of the tournament, where he skillfully wielded the black pieces.

**Ans**  1. 1 & 2 only

2. 1,2 & 3

3. 2 & 3 only

4. 1 & 3

Question ID : 630680558032

Option 1 ID : 6306802181099

Option 2 ID : 6306802181101

Option 3 ID : 6306802181100

Option 4 ID : 6306802181102

Status : Answered

Chosen Option : 1



**Q.16** Which of the following statement is correct about Constitution (105th Amendment) Act 2021?

**I.** President Droupadi Murmu has given her assent to the Constitution (105th Amendment) Act 2021.

**II.** This Act restores the power of State Governments to identify and specify Socially and Economically Backward Classes (SEBCs).

- Ans**
- 1. Both I and II
  - 2. Neither I nor II
  - 3. Only II
  - 4. Only I

Question ID : 630680556661  
 Option 1 ID : 6306802175636  
 Option 2 ID : 6306802175637  
 Option 3 ID : 6306802175635  
 Option 4 ID : 6306802175634  
 Status : Answered  
 Chosen Option : 1

**Q.17** Which of the following statement is correct about cyclone Michaung 2023?

**I.** The name of the cyclone 'Michaung' was proposed by Myanmar, which signifies resilience and fortitude.

**II.** This is the sixth cyclone to develop in the Indian Ocean in 2023 and the fourth to form in the Bay of Bengal.

- Ans**
- 1. Only II
  - 2. Both I and II
  - 3. Only I
  - 4. Neither I nor II

Question ID : 630680556667  
 Option 1 ID : 6306802175659  
 Option 2 ID : 6306802175660  
 Option 3 ID : 6306802175658  
 Option 4 ID : 6306802175661  
 Status : Answered  
 Chosen Option : 2

**Q.18** The Union Cabinet chaired by the Prime Minister Shri Narendra Modi has approved the eCourts Project Phase III as a Central Sector Scheme spanning four years with financial outlay of Rs.7210 crore. As part of the National eGovernance Plan, the e-Courts Project is under implementation since 2007 for ICT enablement of the Indian Judiciary the Phase II of which has concluded in \_\_\_\_\_.

- Ans**
- 1. 2023
  - 2. 2022
  - 3. 2020
  - 4. 2021

Question ID : 630680556638  
 Option 1 ID : 6306802175542  
 Option 2 ID : 6306802175543  
 Option 3 ID : 6306802175545  
 Option 4 ID : 6306802175544  
 Status : Answered  
 Chosen Option : 1



**Q.19** The Gazette notification to bring which of the following temple of Odisha to the protected monument list of Archaeological Survey of India (ASI) came on May 5 2023?

- Ans**
- 1. Brahmeswara Temple
  - 2. Kapileshwar temple
  - 3. Jagannath Temple
  - 4. Mukteswara Temple

Question ID : **630680556680**  
 Option 1 ID : **6306802175712**  
 Option 2 ID : **6306802175710**  
 Option 3 ID : **6306802175711**  
 Option 4 ID : **6306802175713**  
 Status : **Not Answered**  
 Chosen Option : --

**Q.20** Which of the following statement is/are CORRECT about Abua Bir Dishom Abhiyan?

1. On November 6,2023, the Jharkhand government launched Abua Bir Dishom Abhiyan.
2. "Abua Bir Dishom Abhiyan" provides land title certificates to individuals and communities under the Forest Rights Act.
3. The titles cover areas such as grazing, fishing, access to water bodies, resource access, recognition of customary rights, among others.
4. The drive has been launched after nine years.

- Ans**
- 1. 3 and 4 only
  - 2. 1 and 2 only
  - 3. 2 and 3 only
  - 4. 1,2,3 and 4

Question ID : **630680558076**  
 Option 1 ID : **6306802181276**  
 Option 2 ID : **6306802181275**  
 Option 3 ID : **6306802181278**  
 Option 4 ID : **6306802181277**  
 Status : **Not Answered**  
 Chosen Option : --

Section : **General Studies**

**Q.1** The National Forestry Action Plan identified which of the following interrelated basic issues confronting forestry development in India?

1. Protect existing forests resources
2. Improve forest productivity
3. Expand forest area by tree plantation on non-forest lands only
4. Strengthen the policy and institutional framework

- Ans**
- 1. 1, 2, 3 only
  - 2. 1, 2, 4 only
  - 3. 2, 3, 4 only
  - 4. 1, 3, 4 only

Question ID : **630680557417**  
 Option 1 ID : **6306802178723**  
 Option 2 ID : **6306802178726**  
 Option 3 ID : **6306802178724**  
 Option 4 ID : **6306802178725**  
 Status : **Answered**  
 Chosen Option : **2**

**Q.2** Section 3 of the Official Language Act 1963 provides important provisions relating to official language for Union and for use of Parliament.

Consider the following statements as per Section 3(3) of the Official Language Act of 1963 about the use of both Hindi and the English languages:

1. Both Hindi and English languages shall be used for resolutions, general orders, rules, notifications, administrative or other reports or press communiques issued or made by the Central Government or by a Ministry.
2. Administrative and other reports and official papers laid before a House or the Houses of Parliament shall be in both Hindi and English languages.
3. Contracts and agreements executed, and licenses, permits, notices and forms of tender issued, by or on behalf of the Central Government or any Ministry shall be in both Hindi and English languages.

Which of the given statements are correct?

- Ans**
- 1. 1 and 3 only
  - 2. 1, 2 and 3
  - 3. 2 and 3 only
  - 4. 1 and 2 only

Question ID : **630680557405**  
 Option 1 ID : **6306802178677**  
 Option 2 ID : **6306802178678**  
 Option 3 ID : **6306802178676**  
 Option 4 ID : **6306802178675**  
 Status : **Not Answered**  
 Chosen Option : --

**Q.3** Which of the following statement is correct about Dhamek stupa?

- I. Dhamek Stupa is the most noticeable structure in Samath, near Varanasi.
- II. The Stupa is 28 meters in diameter at the base and 43.6 meters in height, built partly of stone and partly of brick.

- Ans**
- 1. Only I
  - 2. Only II
  - 3. Both I and II
  - 4. Neither I nor II

Question ID : **630680557484**  
 Option 1 ID : **6306802178995**  
 Option 2 ID : **6306802178996**  
 Option 3 ID : **6306802178997**  
 Option 4 ID : **6306802178998**  
 Status : **Answered**  
 Chosen Option : 1

**Q.4** Consider the following statements about the reign of Humayun.

1. When Humayun came into power in 1530, the newly conquered territories and administration were not consolidated.
2. He also confronted the hostility of the Afghans, mainly Sher Khan in Bihar, on the one hand and Bahadur Shah, the ruler of Gujarat, on the other.
3. The Chaghatai nobles were in favourably inclined towards him and the Indian nobles, who had joined Babur's service, supported the Mughals at Humayun's accession.

Which of the given statements is/are correct?

- Ans**
- 1. Only 1
  - 2. 2 and 3 only
  - 3. 1 and 2 only
  - 4. 1 and 3 only

Question ID : **630680557395**  
 Option 1 ID : **6306802178638**  
 Option 2 ID : **6306802178636**  
 Option 3 ID : **6306802178635**  
 Option 4 ID : **6306802178637**  
 Status : **Answered**  
 Chosen Option : **3**

**Q.5** Which of the following statements is/are correct with respect to 'Indian States' Energy Transition' 2023, prepared by the Institute for Energy Economics and Financial Analysis (IEEFA) along with EMBER and published in February 2023?

Statement 1: Tamil Nadu and Gujarat are the Indian states making the most progress in overall preparedness and commitment in the transition to clean electricity.

Statement 2: The report analyses 16 Indian states, which together account for 90% of the country's annual power requirement.

Statement 3: The report has measured the performance of 16 states in terms of four dimensions, i.e., decarbonisation, performance of the power system, readiness of the power ecosystem, and policies and political commitments.

- Ans**
- 1. 1, 2 and 3
  - 2. Only 1 and 2
  - 3. Only 2 and 3
  - 4. Only 1

Question ID : **630680557424**  
 Option 1 ID : **6306802178754**  
 Option 2 ID : **6306802178751**  
 Option 3 ID : **6306802178752**  
 Option 4 ID : **6306802178753**  
 Status : **Answered**  
 Chosen Option : **1**

**Q.6** Which of the following countries does not share land boundary with India?

- Ans**
- 1. Bangladesh
  - 2. Bhutan
  - 3. Myanmar
  - 4. Tajikistan

Question ID : **630680557508**  
 Option 1 ID : **6306802179091**  
 Option 2 ID : **6306802179094**  
 Option 3 ID : **6306802179092**  
 Option 4 ID : **6306802179093**  
 Status : **Answered**  
 Chosen Option : **4**

Q.7 निम्नलिखित में से कौन भारत की संसद का अंग नहीं है?

- Ans
- 1. राष्ट्रपति
  - 2. विधान परिषद
  - 3. राज्यसभा
  - 4. लोकसभा

Question ID : 630680557549  
Option 1 ID : 6306802179255  
Option 2 ID : 6306802179258  
Option 3 ID : 6306802179257  
Option 4 ID : 6306802179256  
Status : Answered  
Chosen Option : 2

Q.8 Who among the following is seventh Siikh guru?

- Ans
- 1. Guru Hargobind
  - 2. Guru Har Kishan
  - 3. Guru Har Rai
  - 4. Guru Teg Bahadur

Question ID : 630680557482  
Option 1 ID : 6306802178987  
Option 2 ID : 6306802178989  
Option 3 ID : 6306802178988  
Option 4 ID : 6306802178990  
Status : Answered  
Chosen Option : 4

Q.9 At the time of independence, the variety of industries was very narrow and largely confined to which of the following?

I. Cotton textile

II. Jute

- Ans
- 1. Neither I nor II
  - 2. Only II
  - 3. Only I
  - 4. Both I and II

Question ID : 630680557528  
Option 1 ID : 6306802179174  
Option 2 ID : 6306802179172  
Option 3 ID : 6306802179171  
Option 4 ID : 6306802179173  
Status : Answered  
Chosen Option : 4

**Q.10** In which of the following part of Indian constitution fundamental duties are inserted?

I. Part IVA

II. Part IV

- Ans**
- 1. Both I and II
  - 2. Only I
  - 3. Neither I nor II
  - 4. Only II

Question ID : 630680557534  
 Option 1 ID : 6306802179197  
 Option 2 ID : 6306802179195  
 Option 3 ID : 6306802179198  
 Option 4 ID : 6306802179196  
 Status : **Answered**  
 Chosen Option : 2

**Q.11** Which of the following statements about the Comptroller and Auditor-General of India are correct?

1. The Office of the Comptroller and Auditor General had its beginning in 1919.
2. The organisation that C&AG heads is known as Indian Audit and Accounts Department (IA and AD).
3. The office of the C&AG with its Headquarters at New Delhi is a vast organisation being the single audit authority for the Central, State and Union Territory Governments and local bodies.
4. C&AG was elected for the first time to the Board of Auditors of the UN with effect from July 1991.

- Ans**
- 1. Only 3 and 4
  - 2. Only 1 and 4
  - 3. Only 2 and 3
  - 4. Only 1 and 2

Question ID : 630680557442  
 Option 1 ID : 6306802178825  
 Option 2 ID : 6306802178826  
 Option 3 ID : 6306802178824  
 Option 4 ID : 6306802178823  
 Status : **Not Answered**  
 Chosen Option : --

**Q.12** Which of the following is a risk associated with implementation of green revolution in India?

I. It would Possibly increase the disparities between small and big farmers.

II. HYV crops were also more prone to attack by pests and the farmers who adopted this technology could lose everything in a pest attack.

- Ans**
- 1. Neither I nor II
  - 2. Only II
  - 3. Only I
  - 4. Both I and II

Question ID : 630680557532  
 Option 1 ID : 6306802179190  
 Option 2 ID : 6306802179188  
 Option 3 ID : 6306802179187  
 Option 4 ID : 6306802179189  
 Status : **Answered**  
 Chosen Option : 3

**Q.13** Who was the revenue minister of Akbar?

- Ans**
- 1. Maansingh
  - 2. Birbal
  - 3. Mulla Do-Piyaza
  - 4. Todar Mal

Question ID : 630680557463  
 Option 1 ID : 6306802178912  
 Option 2 ID : 6306802178913  
 Option 3 ID : 6306802178914  
 Option 4 ID : 6306802178911  
 Status : Answered  
 Chosen Option : 4

**Q.14** पर्यावरण प्रभाव मूल्यांकन में कई चरण शामिल होते हैं और प्रत्येक चरण परियोजना के समग्र प्रदर्शन को निर्धारित करने में समान रूप से महत्वपूर्ण होता है। निम्नलिखित चरणों को सही कालानुक्रमिक क्रम में व्यवस्थित कीजिए।

1. परिदृश्यन (Scoping)
2. प्रभाव-विश्लेषण (Impact-analysis)
3. संवीक्षा (Screening)
4. प्रशमन (Mitigation)

- Ans**
- 1. 1, 2, 3, 4
  - 2. 3, 1, 2, 4
  - 3. 3, 2, 4, 1
  - 4. 4, 3, 2, 1

Question ID : 630680557433  
 Option 1 ID : 6306802178788  
 Option 2 ID : 6306802178787  
 Option 3 ID : 6306802178789  
 Option 4 ID : 6306802178790  
 Status : Answered  
 Chosen Option : 1

**Q.15** Which of the following statement is correct about Great Himalaya?

- I. The folds of Great Himalayas are symmetrical in nature.
- II. The core of this part of Himalayas is composed of granite.

- Ans**
- 1. Only II
  - 2. Only I
  - 3. Neither I nor II
  - 4. Both I and II

Question ID : 630680557499  
 Option 1 ID : 6306802179056  
 Option 2 ID : 6306802179055  
 Option 3 ID : 6306802179058  
 Option 4 ID : 6306802179057  
 Status : Answered  
 Chosen Option : 2

Q.16 Match List I with List II.

| LIST I                         | LIST II                     |
|--------------------------------|-----------------------------|
| 1. The two Itihikasas or Epics | A. Manuals of worship       |
| 2. The Agamas                  | B. The codes of law         |
| 3. The Dharma Shastras         | C. Philosophical schools    |
| 4. The Darshans                | D. Ramayana and Mahabharata |

- Ans
- 1. 1-D, 2-A, 3-C, 4-B
  - 2. 1-D, 2-A, 3-B, 4-C
  - 3. 1-D, 2-C, 3-A, 4-B
  - 4. 1-B, 2-A, 3-D, 4-C

Question ID : 630680557409  
 Option 1 ID : 6306802178694  
 Option 2 ID : 6306802178691  
 Option 3 ID : 6306802178692  
 Option 4 ID : 6306802178693  
 Status : Answered  
 Chosen Option : 2

Q.17 Consider the Following statements about Pandita Rama Bai.

1. She was amongst the important women social reformers in Maharashtra.
2. In 1890, she started Sharda Sadan, a home for widows.
3. Her book titled Amar Jiban is the first known autobiography written by an Indian woman.
4. She started the Vidhava Vivaha Uttejaka Mandal (Society for Encouragement of Widow Marriage) in 1865.

Which of the given statements are correct?

- Ans
- 1. 3 and 4 only
  - 2. 1 and 2 only
  - 3. 2, 3 and 4 only
  - 4. 2 and 3 only

Question ID : 630680557390  
 Option 1 ID : 6306802178617  
 Option 2 ID : 6306802178615  
 Option 3 ID : 6306802178618  
 Option 4 ID : 6306802178616  
 Status : Answered  
 Chosen Option : 3



**Q.18** In the context of open economy, forex stands for which of the following?

- Ans**
- 1. Foreign expenditure ratio
  - 2. Formal exchange rate
  - 3. Formal expenditure ratio
  - 4. Foreign exchange rate

Question ID : **630680557521**  
 Option 1 ID : **6306802179145**  
 Option 2 ID : **6306802179144**  
 Option 3 ID : **6306802179146**  
 Option 4 ID : **6306802179143**  
 Status : **Answered**  
 Chosen Option : **4**

**Q.19** The Iron Age in North India is archaeologically represented by assemblages that mainly contain which of the following particular pottery types?

- I. Painted Grey Ware (PGW)
- II. Northern Black Polished Ware (NBPW)

- Ans**
- 1. Both I and II
  - 2. Only II
  - 3. Neither I nor II
  - 4. Only I

Question ID : **630680557465**  
 Option 1 ID : **6306802178921**  
 Option 2 ID : **6306802178920**  
 Option 3 ID : **6306802178922**  
 Option 4 ID : **6306802178919**  
 Status : **Not Answered**  
 Chosen Option : **--**

**Q.20** Consider the following functions of a Local Government in India.

1. Ensuring safe and continuous water supply
2. Providing electricity
3. Establishment of and maintenance of libraries and reading rooms.

Which of the above is/are its discretionary functions?

- Ans**
- 1. Only 1
  - 2. Only 1 and 2
  - 3. Only 3
  - 4. Only 2 and 3

Question ID : **630680557443**  
 Option 1 ID : **6306802178827**  
 Option 2 ID : **6306802178828**  
 Option 3 ID : **6306802178829**  
 Option 4 ID : **6306802178830**  
 Status : **Not Answered**  
 Chosen Option : **--**

Q.1 Select the option that is true regarding the following labelled Assertion (A) and Reason (R).

| Assertion (A)   | Reason (R)   |
|---|--|
| The system of equations:<br>$9x + 6y = 11$ and<br>$7x + ky = 9$ has<br>no solution, if $k = \frac{14}{3}$ . | System of equations<br>$ax + by = c$<br>$dx + ey = f$<br>has no solution, if<br>$\frac{a}{d} = \frac{b}{e} \neq \frac{c}{f}$ |

- Ans
- ✓ 1. Both A and R are true and R is a correct explanation of A.
  - ✗ 2.
  - Both A and R are true but R is not a correct explanation of A.
  - ✗ 3. A is false and R is true.
  - ✗ 4. A is true and R is false.

Question ID : 630680560600  
 Option 1 ID : 6306802191392  
 Option 2 ID : 6306802191393  
 Option 3 ID : 6306802191395  
 Option 4 ID : 6306802191394  
 Status : Not Answered  
 Chosen Option : --

Q.2 If A1 is 19 times more than A2, then A2 is what percentage less than A1?

- Ans
- ✗ 1. 100 percent
  - ✓ 2. 95 percent
  - ✗ 3. 105 percent
  - ✗ 4. 85 percent

Question ID : 630680557679  
 Option 1 ID : 6306802179778  
 Option 2 ID : 6306802179776  
 Option 3 ID : 6306802179777  
 Option 4 ID : 6306802179775  
 Status : Answered  
 Chosen Option : 2

Q.3 The average age of a group of 13 men is 55 years. 2 men leave the group and the average age of group increases by 1 year. What is the average age of 2 men who left the group?

- Ans
- ✗ 1. 50.5 years
  - ✗ 2. 48.5 years
  - ✗ 3. 50 years
  - ✓ 4. 49.5 years

Question ID : 630680557647  
 Option 1 ID : 6306802179650  
 Option 2 ID : 6306802179648  
 Option 3 ID : 6306802179649  
 Option 4 ID : 6306802179647  
 Status : Answered  
 Chosen Option : 4

**Q.4** A question is given, followed by three statements labelled I, II and III. Identify which of the statements is/are sufficient to answer the question.

Question:

What is the total expense when the hostel has 189 occupants?

Statements: Total expenses of the hostel consist of two parts: one varies directly with the number of occupants and the other is fixed.

- I. When it had 150 occupants, its total expense was ₹79,500.
- II. When it had 240 occupants, its total expense was ₹1,15,500.
- III. When it had 200 occupants, its total expense was ₹99,000.

**Ans**  1. I and II only

2. I only

3. I, II and III

4. I and II or I and III

Question ID : 630680557614

Option 1 ID : 6306802179516

Option 2 ID : 6306802179515

Option 3 ID : 6306802179518

Option 4 ID : 6306802179517

Status : Not Answered

Chosen Option : --

**Q.5** If  $x + y + z = 10$  and  $x^2 + y^2 + z^2 = 80$ , then what is the value of  $4xy + 4yz + 4zx$ ?

**Ans**  1. 30

2. 20

3. 40

4. 10

Question ID : 630680557730

Option 1 ID : 6306802179981

Option 2 ID : 6306802179980

Option 3 ID : 6306802179982

Option 4 ID : 6306802179979

Status : Answered

Chosen Option : 3

**Q.6** In a class, the ratio of the number of boys to that of girls is 3 : 5. The number of students who passed to that of who failed is 7 : 3. Among boys, the number of those who passed to those who failed is in the ratio 2 : 1. Among girls, what is the ratio of the number of girls who passed to those who failed?

**Ans**  1. 15 : 8

2. 9 : 4

3. 18 : 7

4. 12 : 5

Question ID : 630680557608

Option 1 ID : 6306802179492

Option 2 ID : 6306802179494

Option 3 ID : 6306802179493

Option 4 ID : 6306802179491

Status : Not Answered

Chosen Option : --

**Q.7** Which of the following statements is/are correct?

- (a) A number is divisible by 125, if the last three digits of the number form a number that is divisible by  $5^3$ .
- (b) If a number is divisible by two numbers, then it is divisible by the product of the two numbers.
- (c) A number is divisible by 36, if the number is divisible by 4, 6 and 12.

- Ans**
- 1. (a) and (b)
  - 2. (a) only
  - 3. (b) and (c)
  - 4. (b) only

Question ID : **630680557581**  
 Option 1 ID : **6306802179384**  
 Option 2 ID : **6306802179383**  
 Option 3 ID : **6306802179386**  
 Option 4 ID : **6306802179385**  
 Status : **Answered**  
 Chosen Option : **3**

**Q.8** The cost of a motorbike is 75% less than the cost of a car. The cost of a car decreases by 25% and that of a motorbike increases by 40%.

Statement I: The new cost of a motorbike is  $53\frac{1}{3}\%$  less than the new cost of a car.  
 Statement II: The total new cost of one car and two motorbikes is  $3\frac{1}{3}\%$  more than their total initial cost.  
 Which of the above statements is/are correct?

- Ans**
- 1. Neither I nor II
  - 2. II only
  - 3. I only
  - 4. Both I and II

Question ID : **630680557592**  
 Option 1 ID : **6306802179430**  
 Option 2 ID : **6306802179428**  
 Option 3 ID : **6306802179427**  
 Option 4 ID : **6306802179429**  
 Status : **Answered**  
 Chosen Option : **3**

**Q.9** Pipes A and B can fill a tank in 6 hours and 15 hours, respectively. Pipe C is a drain pipe. When all the three pipes are opened together for 6 hours, then 65% of the tank is filled. Initially, pipes A and C are opened together for 8 hours and then C is closed and B is opened. Pipes A and B together will fill the remaining part of tank in \_\_\_\_ hours.

- Ans**
- 1.  $3\frac{1}{3}$
  - 2.  $2\frac{6}{7}$
  - 3.  $3\frac{2}{3}$
  - 4.  $2\frac{3}{7}$

Question ID : **630680557616**  
 Option 1 ID : **6306802179525**  
 Option 2 ID : **6306802179524**  
 Option 3 ID : **6306802179526**  
 Option 4 ID : **6306802179523**  
 Status : **Not Answered**  
 Chosen Option : **--**

**Q.10** When 860, 1712 and 3203 are divided by a two-digit number  $x$ , then the remainder in each case is  $y$ . If  $(2x + y)$  is written as  $p \times q \times r^2$ , where  $p, q$  and  $r$  are prime numbers, then what is the value of  $(p + q + r)$ ?

- Ans**
- 1. 10
  - 2. 12
  - 3. 16
  - 4. 15

Question ID : **630680557575**  
 Option 1 ID : **6306802179359**  
 Option 2 ID : **6306802179360**  
 Option 3 ID : **6306802179362**  
 Option 4 ID : **6306802179361**  
 Status : **Not Answered**  
 Chosen Option : --

**Q.11** What is the value of  $\frac{72 - (25 \div 5) \times 2}{6 \times 5 + 1}$ ?

- Ans**
- 1. 1
  - 2. 2
  - 3. 3
  - 4. 4

Question ID : **630680557668**  
 Option 1 ID : **6306802179731**  
 Option 2 ID : **6306802179732**  
 Option 3 ID : **6306802179733**  
 Option 4 ID : **6306802179734**  
 Status : **Answered**  
 Chosen Option : **2**

**Q.12** The ratio of alcohol and water in solutions A and B is 3 : 5 and 5 : 7, respectively. Two litres of A is mixed with 5 litres of B and 3 litres of alcohol is also added to it to get a new solution C. In 1.5 litres of solution C, how much alcohol (in ml) should be mixed so that the ratio of alcohol and water in the final solution becomes 2 : 1?

- Ans**
- 1. 385
  - 2. 405
  - 3. 375
  - 4. 395

Question ID : **630680557572**  
 Option 1 ID : **6306802179348**  
 Option 2 ID : **6306802179350**  
 Option 3 ID : **6306802179347**  
 Option 4 ID : **6306802179349**  
 Status : **Not Answered**  
 Chosen Option : --

**Q.13** Bala has thrice as much amount as that of Lalit and Lalit has 10 percent more amount than Vimal. If the average amount of all three of them is ₹1350, then how much amount is with Bala?

- Ans
- 1. ₹2455
  - 2. ₹2465
  - 3. ₹2475
  - 4. ₹2355

Question ID : 630680557688  
 Option 1 ID : 6306802179813  
 Option 2 ID : 6306802179814  
 Option 3 ID : 6306802179811  
 Option 4 ID : 6306802179812  
 Status : Answered  
 Chosen Option : 3

**Q.14** Anil sells two pens at the rate of ₹1500 per pen. He earns a profit of 25 percent on one pen and loses 25 percent on the other pen. What will be the total profit or loss in whole transaction?

- Ans
- 1. ₹250 profit
  - 2. ₹280 profit
  - 3. ₹200 loss
  - 4. ₹150 loss

Question ID : 630680557701  
 Option 1 ID : 6306802179865  
 Option 2 ID : 6306802179863  
 Option 3 ID : 6306802179866  
 Option 4 ID : 6306802179864  
 Status : Answered  
 Chosen Option : 4

**Q.15** A person borrows some money for 2 years at a certain rate of simple interest. If the ratio of principal and total interest is 5 : 4, then what is the annual rate of interest?

- Ans
- 1. 50 percent
  - 2. 40 percent
  - 3. 48 percent
  - 4. 35 percent

Question ID : 630680557654  
 Option 1 ID : 6306802179678  
 Option 2 ID : 6306802179676  
 Option 3 ID : 6306802179677  
 Option 4 ID : 6306802179675  
 Status : Answered  
 Chosen Option : 2

**Q.16** The sum of two numbers is 176 and their difference is 16. What is the ratio of the two numbers?

- Ans**
- 1. 6 : 5
  - 2. 3 : 2
  - 3. 6 : 1
  - 4. 5 : 2

Question ID : 630680557711  
 Option 1 ID : 6306802179906  
 Option 2 ID : 6306802179903  
 Option 3 ID : 6306802179904  
 Option 4 ID : 6306802179905  
 Status : Answered  
 Chosen Option : 1

**Q.17** A sum of ₹2600 is lent out at simple interest in two parts. One part at the annual rate of 18 percent and another part at the annual rate of 25 percent. If the total annual interest is ₹520, then what is the sum lent out at the rate of 25 percent per annum?

- Ans**
- 1. ₹657.66
  - 2. ₹742.85
  - 3. ₹798.89
  - 4. ₹642.68

Question ID : 630680557658  
 Option 1 ID : 6306802179694  
 Option 2 ID : 6306802179692  
 Option 3 ID : 6306802179693  
 Option 4 ID : 6306802179691  
 Status : Not Answered  
 Chosen Option : --

**Q.18** Two trains C and D starts moving from stations R and S respectively towards each other. Trains take 4 hours 16 minutes and 3 hours 45 minutes to reach S and R respectively after they meet each other. If the speed of train C is 60 km/hr, then what is the speed of the train D?

- Ans**
- 1. 64 km/hr
  - 2. 72 km/hr
  - 3. 48 km/hr
  - 4. 56 km/hr

Question ID : 630680557725  
 Option 1 ID : 6306802179959  
 Option 2 ID : 6306802179962  
 Option 3 ID : 6306802179960  
 Option 4 ID : 6306802179961  
 Status : Not Answered  
 Chosen Option : --



**Q.19** A and B run a  $5\frac{1}{2}$  km race on a 500 m long circular track starting from the same point, simultaneously, in the same direction. The speed of A is 50% faster than B.

Which of the following statements is/are correct?

Statement I: A and B meet for the first time after starting the race when A covers 1200 m.

Statement II: A meets B three times during the race.

- Ans**
- 1. Neither I nor II
  - 2. I and II
  - 3. I only
  - 4. II only

Question ID : 630680557622

Option 1 ID : 6306802179550

Option 2 ID : 6306802179549

Option 3 ID : 6306802179547

Option 4 ID : 6306802179548

Status : Not Answered

Chosen Option : --

**Q.20** Naman sells an item at ₹  $x$ , after giving two successive discounts each of 10% on its marked price. If he does not give any discount on the marked price, he earns a profit of 25%. The cost price of the item is ₹800. What is the value of  $x$ ?

- Ans**
- 1. 840
  - 2. 810
  - 3. 820
  - 4. 830

Question ID : 630680557600

Option 1 ID : 6306802179459

Option 2 ID : 6306802179462

Option 3 ID : 6306802179461

Option 4 ID : 6306802179460

Status : Answered

Chosen Option : 3

Section : Reasoning and Logical Aptitude



**Q.1** In the following question below are given some statements followed by some conclusions based on those statements. Taking the given statements to be true even if they seem to be at variance from commonly known facts. Read all the conclusions and then decide which of the given conclusion logically follows the given statements.

Statements:

I. No G are M.

II. Some A are M.

Conclusion:

I. Some M are A.

II. Some M are G.

- Ans**
- 1. Both conclusions I and II follows.
  - 2. Only conclusion I follows.
  - 3. Only conclusion II follows.
  - 4. Neither conclusion follows.

Question ID : 630680557303  
 Option 1 ID : 6306802178269  
 Option 2 ID : 6306802178267  
 Option 3 ID : 6306802178268  
 Option 4 ID : 6306802178270  
 Status : Answered  
 Chosen Option : 2

**Q.2** In the following question, select the missing number from the given series.

12, 24, 72, 288, 1440, ?

- Ans**
- 1. 8550
  - 2. 8000
  - 3. 8640
  - 4. 8650

Question ID : 630680557365  
 Option 1 ID : 6306802178518  
 Option 2 ID : 6306802178516  
 Option 3 ID : 6306802178517  
 Option 4 ID : 6306802178515  
 Status : Answered  
 Chosen Option : 3

**Q.3** If  $29A17B20 = 32$  and  $33A14B10 = 29$ , then  $11A8B3 = ?$

- Ans**
- 1. 8
  - 2. 9
  - 3. 11
  - 4. 6

Question ID : 630680557376  
 Option 1 ID : 6306802178559  
 Option 2 ID : 6306802178561  
 Option 3 ID : 6306802178562  
 Option 4 ID : 6306802178560  
 Status : Answered  
 Chosen Option : 4

**Q.4** Read the following information carefully and answer the question that follows. You must assume everything in the statement to be true and on the basis of the information given in the statement, decide which of the course of action not logically follow for pursuing.  
Statement :- Safe drinking water is a fundamental human right, yet over 2 billion people lack access to it. This disparity leads to preventable diseases and hinders development.

- Ans**
- 1. We should conserve water at home by fixing leaks, taking shorter showers, and using water-efficient appliances.
  - 2. We should invest in and upgrade water treatment facilities to effectively remove contaminants and ensure safe drinking water.
  - 3. We must stop rainwater harvesting systems to capture and utilize rainwater for non-potable purposes.
  - 4. Implement policies to protect watersheds and ecosystems that contribute to the sustainability of water sources.

Question ID : **630680556948**  
 Option 1 ID : **6306802176703**  
 Option 2 ID : **6306802176706**  
 Option 3 ID : **6306802176705**  
 Option 4 ID : **6306802176704**  
 Status : **Answered**  
 Chosen Option : **4**

**Q.5** From the given option figures, select the one in which the question figure is hidden/embedded.



- Ans**
- 1.
  - 2.
  - 3.
  - 4.

Question ID : **630680557359**  
 Option 1 ID : **6306802178491**  
 Option 2 ID : **6306802178493**  
 Option 3 ID : **6306802178494**  
 Option 4 ID : **6306802178492**  
 Status : **Answered**  
 Chosen Option : **3**

**Q.6** In this question, a question is followed by two statements numbered (I) and (II). You have to decide whether the data provided in the statements are sufficient to answer the question. Read both the statements and decide the appropriate answer.  
 Q. There are five cartons numbered from 1 to 5, kept in a warehouse. The weight of each carton is different from the other. Which of the cartons is the heaviest?  
 I. Carton no. 1. is heavier than carton no. 5 but lighter than carton no. 3. Carton no. 4 is heavier than carton no. 3 but lighter than carton no. 2.  
 II. Carton no. 5. is heavier than carton no. 1 but lighter than carton no. 3. Carton no. 4 is heavier than carton no. 3.

- Ans**
- 1. Data in Statement II alone is sufficient to answer the question while data in statement I is not.
  - 2. Data in statements I and II together are NOT sufficient to answer the question.
  - 3. Data in statements I and II together are necessary to answer the question.
  - 4. Data in Statement I alone is sufficient to answer the question while data in statement II is not.

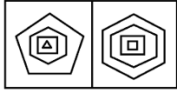
Question ID : **630680556938**  
 Option 1 ID : **6306802176664**  
 Option 2 ID : **6306802176666**  
 Option 3 ID : **6306802176665**  
 Option 4 ID : **6306802176663**  
 Status : **Answered**  
 Chosen Option : **4**

**Q.7** Six friends Mayank, Varisha, Raju, Laxmi, Shivani and Meena who scored different marks in exam out of 100 but not necessarily in same order. Laxmi who scored 76 marks is younger than Mayank but older than Meena and Shivani. Varisha is younger than Raju who scored 98 marks. Difference of Raju and Varisha's marks is 11. Maynk's marks is just reverse digit of Varisha's marks. Mayank is younger than Varisha. Shivani is not the youngest among all. Meena scored 55 marks while Shivani scored 12 marks more than Meena and 9 Marks less than Laxmi.  
 Which of the following statement is true based on the above information?  
 I. Varisha is youngest in all.  
 II. Laxmi scored 76 marks.

- Ans**
- 1. Neither I nor II
  - 2. Only I
  - 3. Both I and II
  - 4. Only II


Question ID : **630680556921**  
 Option 1 ID : **6306802176598**  
 Option 2 ID : **6306802176595**  
 Option 3 ID : **6306802176597**  
 Option 4 ID : **6306802176596**  
 Status : **Answered**  
 Chosen Option : **4**

**Q.8** In this figure, first figure is related to second figure following a certain pattern. Choose from among the alternatives, the figure pair, in which the two figures are related following the same pattern.




Ans


✗ 1.



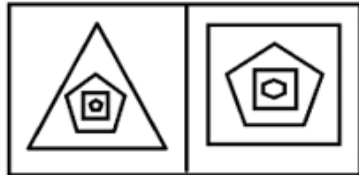
✗ 2.



✗ 3.



✓ 4.



Question ID : 630680556958  
 Option 1 ID : 6306802176743  
 Option 2 ID : 6306802176746  
 Option 3 ID : 6306802176744  
 Option 4 ID : 6306802176745

Status : Not Answered  
 Chosen Option : --

**Q.9** There are six persons Baman, Fauzan, Deepak, Arvind, Enam and Charan each of them speaking different languages English, French, Chinese, German, Urdu and Hindi are but not necessarily in same order are sitting equidistance around a circular table. Each of them is either facing the center or facing outside opposite to the center

- There are exactly three persons facing towards center. each of them sitting together
- Baman is sitting between person who knows English and Deepak. All of them are facing towards center.
- Charan who knows German sitting opposite to person who knows Hindi.
- Enam is sitting third to the right of person who knows Urdu.
- Fauzan is sitting opposite to Arvind who knows English.
- Baman knows Hindi.
- Charan is sitting to the immediate left of Enam who knows French.

Which of the following statement is / are true based on the given arrangement?

- I. Deepak knows Urdu facing towards center.
- II. Enam who knows French is sitting opposite to Deepak.
- III. Arvind is sitting between person who knows French and Hindi.

- Ans**
- 1. Only III is true.
  - 2. Only II is true.
  - 3. All I, II and III are true.
  - 4. Only I is true.

Question ID : **630680556913**  
 Option 1 ID : **6306802176565**  
 Option 2 ID : **6306802176564**  
 Option 3 ID : **6306802176566**  
 Option 4 ID : **6306802176563**  
 Status : **Not Answered**  
 Chosen Option : --

**Q.10** In a certain code language, "SUCCESS" Is written as 'UQGAESU', and "FAILURE" is written as 'GPWJKYH'. Which of the following are correct matches as per the given code language?

| WORD         | CODE        |
|--------------|-------------|
| I. REJECTS   | (W) UPGRVCN |
| II. LETTERS  | (X) URQGEMF |
| III. DOCIOTS | (Y) URECLCT |

- Ans**
- 1. I-X only
  - 2. I-X , II-W only
  - 3. I-Y, II-W, III-X only
  - 4. III-Y , I-W only

Question ID : **630680556926**  
 Option 1 ID : **6306802176617**  
 Option 2 ID : **6306802176615**  
 Option 3 ID : **6306802176616**  
 Option 4 ID : **6306802176618**  
 Status : **Answered**  
 Chosen Option : **3**

**Q.11** After arranging the given words according to dictionary order, which word will come at 'Fifth' position?

1. Source
2. Sound
3. Soup
4. Sour
5. Soul

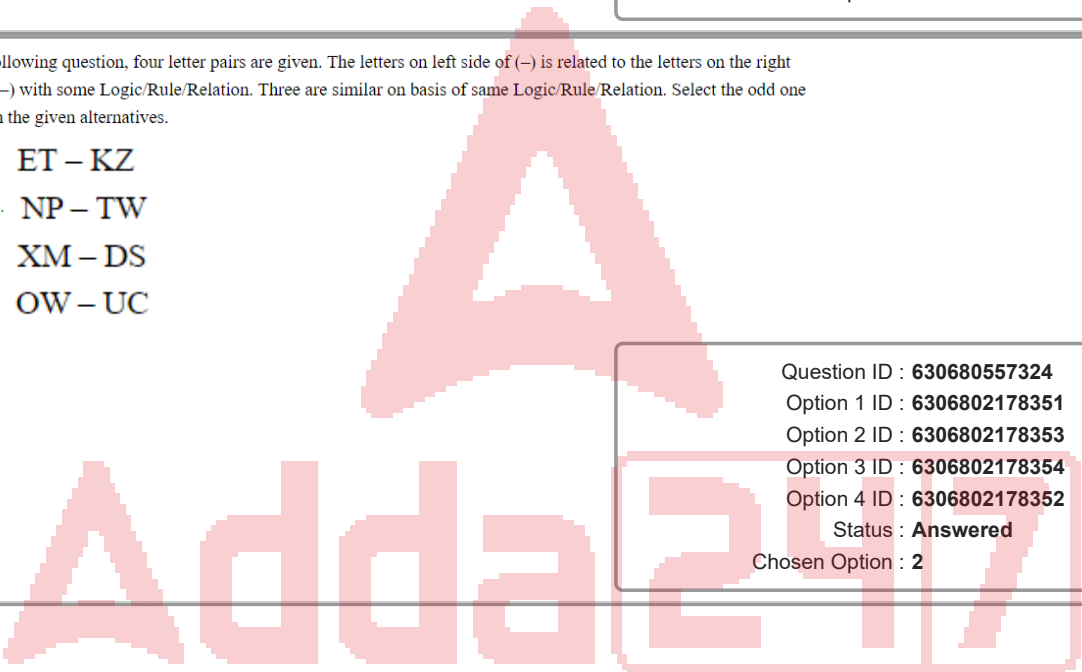
- Ans**
- 1. Source
  - 2. Soup
  - 3. Sound
  - 4. Soul

Question ID : **630680557297**  
 Option 1 ID : **6306802178243**  
 Option 2 ID : **6306802178245**  
 Option 3 ID : **6306802178244**  
 Option 4 ID : **6306802178246**  
 Status : **Answered**  
 Chosen Option : **1**

**Q.12** In the following question, four letter pairs are given. The letters on left side of (-) is related to the letters on the right side of (-) with some Logic/Rule/Relation. Three are similar on basis of same Logic/Rule/Relation. Select the odd one out from the given alternatives.

- Ans**
- 1. ET – KZ
  - 2. NP – TW
  - 3. XM – DS
  - 4. OW – UC

Question ID : **630680557324**  
 Option 1 ID : **6306802178351**  
 Option 2 ID : **6306802178353**  
 Option 3 ID : **6306802178354**  
 Option 4 ID : **6306802178352**  
 Status : **Answered**  
 Chosen Option : **2**





**Q.13** In the following question below are given some statements followed by some conclusions based on those statements. Taking the given statements to be true even if they seem to be at variance from commonly known facts. Read all the conclusions and then decide which of the given conclusion logically follows the given statements.

Statements:

- I. All Math are Science.
- II. Some Science are Hindi.

Conclusion:

- I. No Hindi are Math.
- II. All Hindi are Science.

- Ans**
- 1. Both conclusions I and II follows.
  - 2. Only conclusion I follows.
  - 3. Neither conclusion follows.
  - 4. Only conclusion II follows.

Question ID : 630680557321  
 Option 1 ID : 6306802178341  
 Option 2 ID : 6306802178339  
 Option 3 ID : 6306802178342  
 Option 4 ID : 6306802178340  
 Status : Answered  
 Chosen Option : 3

**Q.14** MPQO is related to PMTL in a certain way based on the English alphabetical order. In the same way, DGHF is related to GDKC. Which of the following are correct matches following the same logic?

|       |      |     |      |
|-------|------|-----|------|
| (i)   | DRGB | (W) | NKRJ |
| (ii)  | KNOM | (X) | GOJY |
| (iii) | RGJL | (Y) | PIDM |
| (iv)  | MLAP | (Z) | UDMI |

- Ans**
- 1. iii-Y , i-W only
  - 2. i-Y, ii-X, iii-W only
  - 3. i-Y only
  - 4. ii-W only

Question ID : 630680556932  
 Option 1 ID : 6306802176642  
 Option 2 ID : 6306802176640  
 Option 3 ID : 6306802176639  
 Option 4 ID : 6306802176641  
 Status : Answered  
 Chosen Option : 4

**Q.15** \*P × Q means that P is the daughter of Q,

P – Q means that P is the sister of Q,

P + Q means that P is the father of Q

Based on the above information, find out which of the given statements can be the reason/s behind the assertion made below if it is given that “M – N + O × L”.

Assertion: L is daughter in law of J?

Reason A: J × M

Reason B: J + M

- Ans**
- 1. Only A is the reason behind the assertion
  - 2. Both A and B are reasons behind the assertion
  - 3. Only B is the reason behind the assertion
  - 4. Neither A nor B is the reason behind the assertion

Question ID : **630680556930**  
 Option 1 ID : **6306802176632**  
 Option 2 ID : **6306802176631**  
 Option 3 ID : **6306802176633**  
 Option 4 ID : **6306802176634**  
 Status : **Not Answered**  
 Chosen Option : --

**Q.16** In the following question, select the figure which can be placed at the sign of question mark (?) from the given alternatives.

|     |     |       |   |
|-----|-----|-------|---|
| A B | X A | Y X   | ? |
| X   | Y B | S A   |   |
| Y   | P   | S P B |   |

- Ans**
- 1. 

|   |   |   |
|---|---|---|
| T | B | X |
| S |   |   |
| P | Y | A |
  - 2. 

|   |   |   |
|---|---|---|
| T | Y | X |
| S |   |   |
| P | B | A |
  - 3. 

|   |   |   |
|---|---|---|
| T | X | Y |
| S |   |   |
| P | B | A |
  - 4. 

|   |   |   |
|---|---|---|
| T | Y | X |
| B |   |   |
| P | S | A |

Question ID : **630680557349**  
 Option 1 ID : **6306802178452**  
 Option 2 ID : **6306802178451**  
 Option 3 ID : **6306802178454**  
 Option 4 ID : **6306802178453**  
 Status : **Answered**  
 Chosen Option : **2**

**Q.17** Six lectures A1, A2, A3, A4, A5 and A6 are to be organized in a span of seven days from Sunday to Saturday. Only one lecture on each day in accordance with the following:

- I. There should be a gap of two days between A5 and A4.
- II. A2 should be organised on Tuesday and should not be organized just before A4.
- III. A1 should not be organized on Thursday.
- IV. One day there will be no lecture (Friday is not that day), just before that day A4 will be organised.
- V. A3 should be organised immediately after A6.

On which day there is no lecture?

- Ans**
- 1. Thursday
  - 2. Saturday
  - 3. Monday
  - 4. Tuesday

Question ID : 630680557287  
 Option 1 ID : 6306802178205  
 Option 2 ID : 6306802178206  
 Option 3 ID : 6306802178203  
 Option 4 ID : 6306802178204  
 Status : Not Answered  
 Chosen Option : --

**Q.18** In the following number-pairs, the second number is obtained by applying certain mathematical operations to the first number. Which numbers should replace X and Y so that the pattern followed by the two numbers on the left side of :: is same as that on the right side of :: ?

(NOTE : Operations should be performed on the whole numbers, without breaking down the numbers into its constituent digits. E.g. 13 – Operations on 13 such as adding / subtracting /multiplying etc. to 13 can be performed. Breaking down 13 into 1 and 3 and then performing mathematical operations on 1 and 3 is not allowed)

X : 56 :: 11 : Y

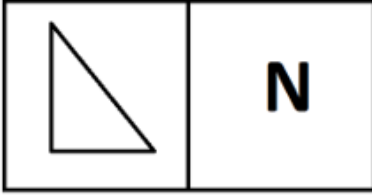
- Ans**
- 1. X=7, Y=132
  - 2. X=7, Y=144
  - 3. X=8, Y=132
  - 4. X=8, Y=144

Question ID : 630680556965  
 Option 1 ID : 6306802176773  
 Option 2 ID : 6306802176771  
 Option 3 ID : 6306802176772  
 Option 4 ID : 6306802176774  
 Status : Answered  
 Chosen Option : 1

**Q.19** Three of the following four figure pairs are alike in a certain way and thus form a group. Which is the one that does not belong to that group?

Ans

✗ 1.



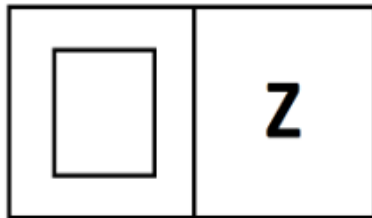
✗ 2.



✗ 3.



✓ 4.



Question ID : 630680556963  
 Option 1 ID : 6306802176765  
 Option 2 ID : 6306802176763  
 Option 3 ID : 6306802176764  
 Option 4 ID : 6306802176766  
 Status : Answered  
 Chosen Option : 4

**Q.20** A series is given with one term missing. Select the correct alternative from the given ones that will complete the series.

RT, WE, BP, GA, ?

Ans

- ✓ 1. LL
- ✗ 2. LM
- ✗ 3. LT
- ✗ 4. LR

Question ID : 630680557341  
 Option 1 ID : 6306802178420  
 Option 2 ID : 6306802178419  
 Option 3 ID : 6306802178422  
 Option 4 ID : 6306802178421  
 Status : Answered  
 Chosen Option : 1

**Q.1** The five sentences labelled (1, 2, 3, 4, 5) given in this question. The first sentence is fixed and others when properly sequenced, form a coherent paragraph. Each sentence is labelled with a number. Decide on the proper order for the sentences and choose the correct option.

1. The city-state of Singapore and Switzerland's Zurich were named as the most expensive cities in the world.
2. The popular US destination, where prices have increased by 1.9% according to the study, slipped to third, tying with Switzerland's Geneva.
3. The rise of the latter, which jumped from sixth place on last year's list, was attributed to the strength of the Swiss Franc along with the high prices of groceries, household goods and recreation.
4. New York tied with Singapore for first place last year.
5. Singapore's costly transport and clothing were also noted.

- Ans**
- 1. 13542
  - 2. 14523
  - 3. 15243
  - 4. 12435

Question ID : 630680556806  
 Option 1 ID : 6306802176108  
 Option 2 ID : 6306802176107  
 Option 3 ID : 6306802176109  
 Option 4 ID : 6306802176110  
 Status : Answered  
 Chosen Option : 3

**Q.2** Select the option in which the word 'effeminate' is used correctly.

- Ans**
- 1. Having nothing to do for hours, he has become lethargic, effeminate and grouchy.
  - 2. Effeminate, though they are, the two brothers are graceful and lithe in their gait and movements.
  - 3. He is choosy about his party dress and spends a long time in front of the mirror – he is effeminate, in a way.
  - 4. Her attitude towards her colleagues is rather effeminate – condescending and bossy.

Question ID : 630680556733  
 Option 1 ID : 6306802175912  
 Option 2 ID : 6306802175913  
 Option 3 ID : 6306802175914  
 Option 4 ID : 6306802175911  
 Status : Answered  
 Chosen Option : 1

**Q.3** Four sentences are given as options. Choose the option that contains the odd sentence.

- Ans**
- 1. Imagine the power of something that can move an entire subcontinent.
  - 2. An earthquake strikes without warning and when it does its power is immense.
  - 3. When an earthquake strikes, the world trembles.
  - 4. The power of a cyclonic storm is such that vast areas of land get inundated and cut off from the rest of the world.

Question ID : 630680556711  
 Option 1 ID : 6306802175825  
 Option 2 ID : 6306802175823  
 Option 3 ID : 6306802175826  
 Option 4 ID : 6306802175824  
 Status : Answered  
 Chosen Option : 4

Q.4 Match the following words with their SYNONYMS.

|   | List I    |   | List II |
|---|-----------|---|---------|
| 1 | Trap      | A | Ambush  |
| 2 | Audacity  | B | Dreamy  |
| 3 | Nostalgic | C | Nerve   |

- Ans
- ✓ 1. 1-A, 2-C, 3-B
  - ✗ 2. 1-A, 2-B, 3-C
  - ✗ 3. 1-B, 2-C, 3-A
  - ✗ 4. 1-C, 2-A, 3-B

Question ID : 630680556859  
 Option 1 ID : 6306802176320  
 Option 2 ID : 6306802176319  
 Option 3 ID : 6306802176322  
 Option 4 ID : 6306802176321  
 Status : Answered  
 Chosen Option : 1

Q.5 Select the correct conclusion based on the correct meaning of the word underlined in the following sentence.

Statement: Some people have no compunction in changing their jobs ever so often.

Conclusion:

- (i) It is a noble feeling to have, after all, as your conscience is clear.
- (ii) At the end of their productive life, they might find themselves neither here nor there: a rolling stone gathers no moss.
- (iii) You have no one to care for or worry about: you are the master of yourself.

- Ans
- ✗ 1. Only conclusion (ii) and (iii)
  - ✗ 2. Only conclusion (i) and (iii)
  - ✗ 3. Only conclusion (i)
  - ✓ 4. Only conclusion (ii)

Question ID : 630680556747  
 Option 1 ID : 6306802175969  
 Option 2 ID : 6306802175970  
 Option 3 ID : 6306802175967  
 Option 4 ID : 6306802175968  
 Status : Answered  
 Chosen Option : 2

Q.6 Identify the grammatically correct form of the given sentence.

Sentence: She is not the only girl who plays a football in the community park.

I. She is not the only girl who plays football in the community park.

II. She is not a only girl who plays football in the community park.

- Ans
- 1. Only II is correct
  - 2. Only I is correct
  - 3. Both I and II are correct
  - 4. Neither I nor II is correct

Question ID : 630680556863  
Option 1 ID : 6306802176336  
Option 2 ID : 6306802176335  
Option 3 ID : 6306802176337  
Option 4 ID : 6306802176338  
Status : Answered  
Chosen Option : 2

Q.7 Identify the grammatically correct form of the given sentence.

Sentence: My eyes popped wide open as I seen that the Greek salad was priced at six hundred rupees.

I. My eyes popped wide open as I seen that the Greek salad is priced at six hundred rupees.

II. My eyes popped wide open as I saw that the Greek salad was priced at six hundred rupees.

- Ans
- 1. Neither I nor II is correct
  - 2. Both I and II are correct
  - 3. Only II is correct
  - 4. Only I is correct

Question ID : 630680556893  
Option 1 ID : 6306802176458  
Option 2 ID : 6306802176457  
Option 3 ID : 6306802176456  
Option 4 ID : 6306802176455  
Status : Answered  
Chosen Option : 3

Q.8 Match the following words with their SYNONYMS.

|   | List I      |   | List II     |
|---|-------------|---|-------------|
| 1 | Amity       | A | Futile      |
| 2 | Belligerent | B | Contentious |
| 3 | Vain        | C | Goodwill    |

- Ans
- ✓ 1. 1-C, 2-B, 3-A
  - ✗ 2. 1-A, 2-C, 3-B
  - ✗ 3. 1-A, 2-B, 3-C
  - ✗ 4. 1-B, 2-C, 3-A

Question ID : 630680556862  
 Option 1 ID : 6306802176333  
 Option 2 ID : 6306802176332  
 Option 3 ID : 6306802176331  
 Option 4 ID : 6306802176334  
 Status : Answered  
 Chosen Option : 1

Q.9 Select the correct conclusion based on the meaning of the underlined word.

Statement: Pari believes I have the perfect life here; she should know that the grass is always greener on the other side.

Conclusion:

- I. People are never satisfied with their own situation.
- II. The things a person does not have always seem more appealing than the things he or she does have.

- Ans
- ✗ 1. Only conclusion I is correct
  - ✓ 2. Both conclusion I and II are correct
  - ✗ 3. Only conclusion II is correct
  - ✗ 4. Neither conclusion I nor II is correct

Question ID : 630680556829  
 Option 1 ID : 6306802176199  
 Option 2 ID : 6306802176201  
 Option 3 ID : 6306802176200  
 Option 4 ID : 6306802176202  
 Status : Answered  
 Chosen Option : 2



Q.10 Identify the grammatically correct form of the given sentence.

Sentence: He enjoys sweet dishes, but though he doesn't like to eat chocolate.

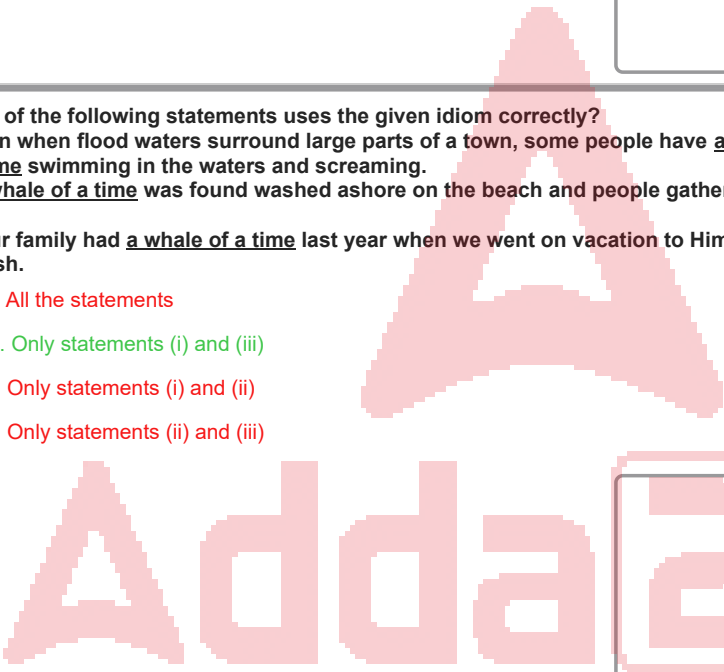
- I. He enjoys sweet dishes, but he doesn't like to eat chocolate.
- II. He enjoys sweet dishes, yet though he doesn't like to eat chocolate.
- III. Though he enjoys sweet dishes, since he doesn't like to eat chocolate.

- Ans
- 1. Only I is correct
  - 2. Only I and II are correct
  - 3. Only III is correct
  - 4. Only II is correct

Question ID : 630680556878  
 Option 1 ID : 6306802176395  
 Option 2 ID : 6306802176398  
 Option 3 ID : 6306802176397  
 Option 4 ID : 6306802176396  
 Status : Answered  
 Chosen Option : 1

Q.11 Which of the following statements uses the given idiom correctly?  
 (i) Even when flood waters surround large parts of a town, some people have a whale of a time swimming in the waters and screaming.  
 (ii) A whale of a time was found washed ashore on the beach and people gathered to see it.  
 (iii) Our family had a whale of a time last year when we went on vacation to Himachal Pradesh.

- Ans
- 1. All the statements
  - 2. Only statements (i) and (iii)
  - 3. Only statements (i) and (ii)
  - 4. Only statements (ii) and (iii)



Question ID : 630680556758  
 Option 1 ID : 6306802176014  
 Option 2 ID : 6306802176012  
 Option 3 ID : 6306802176011  
 Option 4 ID : 6306802176013  
 Status : Answered  
 Chosen Option : 2

Q.12 Select the correct conclusion based on the meaning of the underlined word.

Statement: Book the tickets now, as the early bird gets the worm.

Conclusion:

- I. Those who reply without thinking gets into trouble.
- II. Those who are eager and early are the ones who most succeed.

- Ans
- 1. Only conclusion I is correct
  - 2. Both conclusion I and II are correct
  - 3. Only conclusion II is correct
  - 4. Neither conclusion I nor II is correct

Question ID : 630680556826  
 Option 1 ID : 6306802176187  
 Option 2 ID : 6306802176189  
 Option 3 ID : 6306802176188  
 Option 4 ID : 6306802176190  
 Status : Answered  
 Chosen Option : 1

Q.13 Select the conclusion(s) that follow(s) based on the correct meaning of the underlined segment in the following sentence.

Sentence:

Many justify their actions saying that the end justifies the means.

Conclusion:

- (i) The means and ends are like two parallel lines; they never meet.
- (ii) Those who have the means end up successful in life.
- (iii) In a war, the more powerful side does not hesitate to use unconventional weapons to achieve victory.

- Ans
- 1. Only Conclusion (iii)
  - 2. Only conclusion (i)
  - 3. Only conclusion (ii)
  - 4. Only conclusion (i) and (iii)

Question ID : 630680556763  
 Option 1 ID : 6306802176033  
 Option 2 ID : 6306802176031  
 Option 3 ID : 6306802176032  
 Option 4 ID : 6306802176034  
 Status : Answered  
 Chosen Option : 3

Q.14 Four sentences are given as options. Choose the option that contains the odd sentence.

- Ans
- 1. Others may cause frustrations among the main stakeholders, namely students and teachers.
  - 2. In every nation, 'Excellent Teacher' awards are given every year.
  - 3. Some of these changes may produce desired positive results.
  - 4. Educational changes occur frequently in any national context.

Question ID : 630680556716  
 Option 1 ID : 6306802175845  
 Option 2 ID : 6306802175844  
 Option 3 ID : 6306802175846  
 Option 4 ID : 6306802175843  
 Status : Answered  
 Chosen Option : 1

Q.15 Select the option in which the word 'cynosure' is used correctly.

- Ans  1. My sister and I were the cynosure of all eyes when we entered the office; we had just been awarded special positions in the organisation.
2. The potholes and debris collected on the arterial road was the cynosure of the commuters.
3. The manager's promise of a pay rise was met with cynosure by all of us.
4. The weather was very cold and I had a cynosure in my nose.

Question ID : 630680556729  
 Option 1 ID : 6306802175895  
 Option 2 ID : 6306802175898  
 Option 3 ID : 6306802175897  
 Option 4 ID : 6306802175896  
 Status : Answered  
 Chosen Option : 1

Q.16 Select the option in which the word 'truant' is used correctly.

- Ans  1. The problem of truants is also the result of education being disengaged from real life.
2. There was a large family at the theme park and the children were playing truant in the water and enjoying themselves.
3. About twenty truant employees were recently rewarded with a letter of appreciation and a cash prize.
4. The law will eventually catch up with the truants who have been involved in a series of robberies in the neighbourhood.

Question ID : 630680556737  
 Option 1 ID : 6306802175927  
 Option 2 ID : 6306802175928  
 Option 3 ID : 6306802175930  
 Option 4 ID : 6306802175929  
 Status : Answered  
 Chosen Option : 4

Q.17 A sentence is missing in the paragraph given below. Decide in which blank (i.e., 1, 2, 3 or 4) the following sentence would fit best.

Sentence:

Nay, education would even help them in the performance of the narrowest sphere of womanly duty.

Paragraph:

It is the height of selfishness for men, who fully appreciate in their own case the great advantages of a good education, to deny these advantages to women. (1)\_\_\_\_. There is no valid argument by which the exclusion of the female sex from the privilege of education can be defended. (2)\_\_\_\_. It is argued that women have their domestic duties to perform and that if they were educated, they would bury themselves in their books and have little time for attending to the management of their households. (3)\_\_\_\_. But women are no more liable to this temptation than men and most women would be able to do their household work all the better for being able to refresh their minds in the intervals of leisure with a little reading. (4)\_\_\_\_. For, education involves knowledge of the means by which health may be preserved and enables a mother to consult such modern books as will tell her how to rear up her children into healthy men and women and skillfully nurse them when disease attacks her household.

- Ans  1. Blank 3
2. Blank 4
3. Blank 1
4. Blank 2

Question ID : 630680556705  
 Option 1 ID : 6306802175801  
 Option 2 ID : 6306802175802  
 Option 3 ID : 6306802175799  
 Option 4 ID : 6306802175800  
 Status : Answered  
 Chosen Option : 2

Q.18 Match the following words with their antonyms.

|   | List I      |   | List II      |
|---|-------------|---|--------------|
| 1 | Dubious     | A | Latent       |
| 2 | Gigantic    | B | Indisputable |
| 3 | Industrious | C | Microscopic  |

- Ans
- 1. 1-A, 2-B, 3-C
  - 2. 1-B, 2-C, 3-A
  - 3. 1-C, 2-A, 3-B
  - 4. 1-C, 2-B, 3-A

Question ID : 630680556840  
 Option 1 ID : 6306802176243  
 Option 2 ID : 6306802176245  
 Option 3 ID : 6306802176246  
 Option 4 ID : 6306802176244  
 Status : Answered  
 Chosen Option : 2

Q.19 The passage given below has numbered blanks. Select the most appropriate option to fill in blank number 3.

To avoid the various foolish opinions which mankind holds, no superhuman genius is required. A few simple rules will keep you, not from all error, but from silly error. If the matter is one that can be (1)\_\_\_ by observation, make the observation yourself. Aristotle could have avoided the mistake of (2)\_\_\_ that women have fewer teeth than men, by the simple device of asking Mrs Aristotle to keep her mouth open while he (3)\_\_. He did not do so because he thought he knew. Thinking that you know when in fact you don't is a fatal mistake, to which we are all (4)\_\_. I believe myself that hedgehogs eat black beetles, because I have been told that they do; but if I were writing a book on the habits of hedgehogs, I should not (5)\_\_\_ myself until I had seen one enjoying this unappetizing diet. Aristotle, however, was less cautious. Ancient and medieval authors knew all about unicorns and salamanders; not one of them thought it necessary to avoid dogmatic statements about them because he had never seen one of them.

- Ans
- 1. counted
  - 2. opened
  - 3. watched
  - 4. closed

Question ID : 630680556750  
 Option 1 ID : 6306802175980  
 Option 2 ID : 6306802175981  
 Option 3 ID : 6306802175982  
 Option 4 ID : 6306802175979  
 Status : Answered  
 Chosen Option : 1

Q.20 Identify the grammatically correct form of the given sentence.

Sentence: I tries to wake up early at the morning and perform my daily exercise.

I. I tried to wake up early at the morning and perform my daily exercise.

II. I tries to wake up early in the morning and performed my daily exercise.

III. I try to get up early every morning and do my daily exercise.

Ans  1. Only II and III are correct

2. Only III is correct

3. Only I is correct

4. All I, II and III are correct

Question ID : 630680556900

Option 1 ID : 6306802176485

Option 2 ID : 6306802176484

Option 3 ID : 6306802176483

Option 4 ID : 6306802176486

Status : Answered

Chosen Option : 2

