

## ACIO Grade II Executive 19th Feb 2021

Participant ID	
Participant Name	
Test Center Name	
Test Date	19/02/2021
Test Time :	9:00 AM - 10:00 AM
Subject	ACIO Grade II (Executive)

Section : General awareness Current Affairs

**Q.1 Consider the statement in regard 'KAPILA' Campaign.**

**1. This is a campaign for Intellectual Property Literacy and Awareness campaign which was organised on the 89th birth anniversary of former President Late Dr. APJ Abdul Kalam.**

**2. This is a campaign for collection, demonstration and documentation of raw drugs from Southern Plateau region.**

Select the correct answer by using the code mentioned below.

- Ans
- 1. Neither 1 nor 2
  - 2. Only 2
  - 3. Only 1
  - 4. 1 and 2 both

Question ID : **6009293574**  
 Status : **Not Answered**  
 Chosen Option : --

**Q.2 Who has been elected as the non-executive chairman of India bulls Housing Finance in August 2020?**

- Ans
- 1. B.P. Kanungo
  - 2. K.K. Venugopal
  - 3. S.S. Mundra
  - 4. M.K. Jain

Question ID : **6009293563**  
 Status : **Answered**  
 Chosen Option : 1

**Q.3 How many Chinese apps had been banned by the government of India in June 2020 due to their activities which were prejudicial to sovereignty and integrity of India?**

- Ans
- 1. 59
  - 2. 51
  - 3. 53
  - 4. 58

Question ID : **6009293557**  
 Status : **Answered**  
 Chosen Option : 2

# Test Prime

ALL EXAMS,  
ONE SUBSCRIPTION



**70,000+**  
Mock Tests



Personalised  
Report Card



Unlimited  
Re-Attempt



**600+**  
Exam Covered



Previous Year  
Papers



**500%**  
Refund



**ATTEMPT FREE MOCK NOW**

**Q.4** Consider the following statement in the context of Deendayal Antyodaya Yojana - National Rural Livelihoods Mission.

1. It is a centrally sponsored programme that aims at eliminating rural poverty through promotion of multiple livelihoods for the rural poor households across the country.
2. The Union Cabinet has approved a special package worth Rs. 820 crore for Union Territories of Jammu and Kashmir and Ladakh for a period of five years till 2023-24.

Select the correct answer from the options given below.

- Ans
- 1. Only 2
  - 2. 1 and 2 both
  - 3. Neither 1 nor 2
  - 4. Only 1

Question ID : 6009293567  
 Status : Answered  
 Chosen Option : 2

**Q.5** SVANidhi Yojana is a scheme which has been launched by Hon'ble Prime minister to.

1. To grant collateral-free loans of up to Rs 10,000 to street vendors across the country.
2. To provide grant to fulfill the nutritional demands of women and children in the country.
3. This scheme was launched on June 1, 2020.

Select the correct answer by using the code mentioned below.

- Ans
- 1. None of the above
  - 2. Only 1 and 3
  - 3. Only 2 and 3
  - 4. Only 1 and 2

Question ID : 6009293569  
 Status : Answered  
 Chosen Option : 2

**Q.6** Which app has been launched by Kiren Rijiju in June 2020 to keep Indian athletes updated about banned substances?

- Ans
- 1. NADA INDIA
  - 2. NADA BHARAT
  - 3. NADA INDIAN
  - 4. INDIAN NADA

Question ID : 6009293556  
 Status : Answered  
 Chosen Option : 1

**Q.7** Which institution collaborated with the Bureau of Indian Standards for cooperation in the areas of standardization and conformity assessment in August 2020?

- Ans
- 1. IIT Bombay
  - 2. IIT Roorkee
  - 3. IIT Madras
  - 4. IIT Kanpur

Question ID : 6009293560  
 Status : Not Answered  
 Chosen Option : --

**Q.8** Consider the statement in context of CMS-01.

1. It is a communication satellite which is launched by PSLV-C50 from the Satish Dhawan Space Centre (SDSC) SHAR, Sriharikota.
2. It is a project which aims to monitor, track and protect space assets of India.

Select the correct answer by using the code mentioned below.

- Ans**
- 1. Only 1
  - 2. 1 and 2 both
  - 3. Only 2
  - 4. Neither 1 nor 2

Question ID : **6009293572**  
 Status : **Answered**  
 Chosen Option : **2**

**Q.9** Bharat Parv is a five-day annual event that celebrates the spirit of India is being organised virtually from January 26, 2021 till January 31, 2021. Which of the following statements is/are NOT correct regarding the event?

1. It was started in the year 2016.
2. This year the event was inaugurated by the Lok Sabha Speaker Om Birla.
3. The Central theme of this year's Bharat Parv is 'Mera Desh Badal Raha Hai, Aage Badh Raha Hai'
4. The event is organized by the Ministry of defence every year

Select the correct answer using the code given below.

- (A) 1 only
- (B) 2 only
- (C) 3 and 4
- (D) 2 and 3 only

- Ans**
- 1. A
  - 2. C
  - 3. B
  - 4. D

Question ID : **6009293570**  
 Status : **Not Answered**  
 Chosen Option : **--**

**Q.10** In June 2019, The Indian Air Force has signed a deal with the Israeli government to buy as many as 100 SPICE bombs worth:

- Ans**
- 1. Rs. 100 crore
  - 2. Rs. 400 crore
  - 3. Rs. 300 crore
  - 4. Rs. 200 crore

Question ID : **6009293562**  
 Status : **Answered**  
 Chosen Option : **4**

**Q.11** Which of the following Union ministry won the SKOCH Gold Award 2020?

- Ans**
- 1. Ministry of Women and Child Development
  - 2. Ministry of Health and Family Welfare
  - 3. Ministry of Textiles
  - 4. Ministry of Tribal Affairs

Question ID : **6009293555**  
 Status : **Answered**  
 Chosen Option : **4**

**Q.12 Consider the statement in regard of Aditya Mehta.**

1. Aditya Mehta defeated multiple-time world champion Pankaj Advani 6-2 to win the National Snooker Championship.
2. Aditya Mehta represented the Petroleum Sports Promotion Board (PSPB).

Select the correct answer by using the code mentioned below.

- Ans**
- 1. Neither 1 nor 2
  - 2. Only 2
  - 3. Only 1
  - 4. 1 and 2 both

Question ID : **6009293573**  
 Status : **Not Answered**  
 Chosen Option : --

**Q.13 Consider the following statement in the context of Padma Award 2021.**

1. Padma awards are given in three categories, namely, Padma Vibhushan, Padma Bhushan and Padma Shri.
2. Shri Shinzo Abe from Japan is awarded with Padma Bhushan for his contribution in the field of Public Affairs.
3. 7 were awarded the Padma Vibhushan, 10 named for the Padma Bhushan and 102 named for Padma Shri.

Select the correct answer by using the code mentioned below.

- Ans**
- 1. Only 1 and 2
  - 2. Only 1 and 3
  - 3. Only 2 and 3
  - 4. None of the above

Question ID : **6009293565**  
 Status : **Answered**  
 Chosen Option : 2

**Q.14 Consider the statement in regard of Wavel Ramkalawan.**

1. He has won Seychelles' presidential election.
2. He has won the Ramanujan Prize for Mathematicians for the year 2020.

Select the correct answer by using the code mentioned below.

- Ans**
- 1. Only 1
  - 2. Neither 1 nor 2
  - 3. Only 2
  - 4. 1 and 2 both

Question ID : **6009293566**  
 Status : **Not Answered**  
 Chosen Option : --

**Q.15** What is Sarna Code? Consider the following statement in this regard.

1. The Jharkhand Assembly has unanimously passed a resolution seeking the inclusion of Sarna as a separate religion in Census, 2021.
2. The opposition parties gave a proposal demanding a discussion on the resolution, which was rejected by assembly speaker.

Select the correct answer by using the code mentioned below.

- Ans
- 1. 1 and 2 both
  - 2. Neither 1 nor 2
  - 3. Only 1
  - 4. Only 2

Question ID : **6009293571**  
Status : **Not Answered**  
Chosen Option : --

**Q.16** On 21st January 2021, Gujarat Chief Minister Vijay Rupani announced the "Horticulture Development Mission" in the state with an aim:

1. to double the income of the farmers involved in horticulture and medicinal farming
2. to provide waste land of the state government on 45 year lease for forming of horticulture and medicinal crops
3. to cover 7 districts of the state as the part of first phase

Select the correct answer using the code given below.

- (A) 1 only
- (B) 2 only
- (C) 3 only
- (D) Both 1 and 2

- Ans
- 1. D
  - 2. B
  - 3. C
  - 4. A

Question ID : **6009293568**  
Status : **Answered**  
Chosen Option : 4

**Q.17** Which country has become the first African country to submit the results of Reducing Emissions from Deforestation and Forest Degradation (REDD+) to UNFCCC?

- Ans
- 1. Burundi
  - 2. Algeria
  - 3. Cameroon
  - 4. Uganda

Question ID : **6009293558**  
Status : **Not Answered**  
Chosen Option : --

**Q.18** Who has been reappointed as solicitor general of India in July 2020?

- Ans
- 1. N Venkataraman
  - 2. R.S. Suri
  - 3. Tushar Mehta
  - 4. Balbir Singh

Question ID : **6009293559**  
Status : **Answered**  
Chosen Option : 1

**Q.19** Prime Minister Narendra Modi was honored with which award in 2019 by Bill and Melinda Gates Foundation for his leadership and commitment to improve access to sanitation in India?

- Ans**
- 1. Seoul Peace Prize
  - 2. Champions of the Earth Award
  - 3. Philip Kotler Presidential Award
  - 4. Global Goalkeeper Award

Question ID : **6009293564**  
 Status : **Answered**  
 Chosen Option : **4**

**Q.20** The Rockefeller Foundation announced 10 finalists for the Food System Vision 2050 Prize in August 2020. Among them how many finalists were selected from India?

- Ans**
- 1. 4
  - 2. 2
  - 3. 1
  - 4. 3

Question ID : **6009293561**  
 Status : **Not Answered**  
 Chosen Option : **--**

Section : **General studies**

**Q.1** Match List-I with List-II and select the correct answer using the codes given below the Lists.

List-I (Mahajanapadas)	List-II (Capitals of Mahajanapadas)
A. Malla	1. Taxila
B. Anga	2. Kausambi
C. Gandhara	3. Champa
D. Vatsa	4. Kusinara

- Ans**
- 1. A-2, B-3, C-4, D-1
  - 2. A-4, B-3, C-1, D-2
  - 3. A-3, B-1, C-2, D-4
  - 4. A-1, B-2, C-4, D-3

Question ID : **6009293591**  
 Status : **Not Answered**  
 Chosen Option : **--**

**Q.2** Consider the following statements regarding Save Water Day.

1. On 12 July 2019, the West Bengal government observed Save Water Day across the state to spread the message of water conservation.
2. This was the first-ever Save Water Day observed across West Bengal to spread the message of water conservation.
3. West Bengal has a water conservation programme called 'Jal Dharo Jal Bharo' to prevent floods and provide water during the period of scarcity.
4. The Government of India has set a target to provide 35 lakh households in West Bengal with tap water supply by March 2021.

Which of the statements given above is/are correct?

- Ans**
- 1. Only 1 and 3
  - 2. Only 1 and 2
  - 3. Only 1, 2 and 3
  - 4. Only 2, 3 and 4

Question ID : 6009293593  
 Status : Not Answered  
 Chosen Option : --

**Q.3** Consider the following statements in reference to the Phylogenetic classification system.

1. It shows an evolutionary relationship between various organisms on the basis of descent from a common ancestor.
2. In this system, the cladistics method is used in generating phylogenetic trees.
3. It was proposed by Swedish Botanist Carolus Linnaeus.

Which of the statements given above is/are correct?

- Ans**
- 1. 3 only
  - 2. 1 and 2 only
  - 3. 1 only
  - 4. 2 only

Question ID : 6009293588  
 Status : Not Answered  
 Chosen Option : --

**Q.4** Which of the following pair is correct?

- I. 1905 – Partition of Bengal
- II. 1908 – Split in Congress
- III. 1919 – Rowlatt Satyagrah

- Ans**
- 1. I and II
  - 2. II and III
  - 3. I and III
  - 4. I, II and III

Question ID : 6009293575  
 Status : Answered  
 Chosen Option : 3



**Q.5 As per the Union Budget 2020-21, what will be the implementation period of the National Technical Textiles Mission?**

- Ans
- 1. 2021-22 to 2023-24
  - 2. 2020-21 to 2024-25
  - 3. 2020-21 to 2023-24
  - 4. 2021-22 to 2024-25

Question ID : **6009293582**  
Status : **Not Answered**  
Chosen Option : --

**Q.6 With which of the following musical instruments is Ustad Ali Akbar Khan related to?**

- Ans
- 1. Sarod
  - 2. Sitar
  - 3. Tabla
  - 4. Violin

Question ID : **6009293580**  
Status : **Not Answered**  
Chosen Option : --

**Q.7 Consider the following statements in reference to Punjab Preservation of Subsoil Water Act, 2009.**

1. As per the Act, no farmer shall sow nursery of paddy before 10<sup>th</sup> day of May of the agricultural year or such other date as may be notified by the State Government by notification in the Official Gazette for any local area.
2. Any farmer who contravenes the provisions of this Act shall be liable to a penalty of rupees ten thousand for every month, or part thereof, per hectare of the land till the period such contravention continues.
3. As per the Act, 'State government' means 'Government of India'.

Which of the statements given above is/are correct?

- Ans
- 1. Only 1 and 3
  - 2. Only 1 and 2
  - 3. Only 3
  - 4. Only 2 and 3

Question ID : **6009293594**  
Status : **Not Answered**  
Chosen Option : --

**Q.8 Chenab, the largest tributary of the Indus river, is also known as \_\_\_\_\_.**

- Ans
- 1. Bhagirathi
  - 2. Kosi
  - 3. Chandrabhaga
  - 4. Giri

Question ID : **6009293576**  
Status : **Answered**  
Chosen Option : **3**

**Q.9** Consider the following statements regarding Khardung La Pass.

1. It is the highest motorable pass in India.
2. It is the gateway to the Nubra and Shyok Valleys.
3. It is situated to the North of Mount Godwin-Austen.

Which of the statements given above is/are correct?

- Ans**
- 1. Only 2 and 3
  - 2. Only 1
  - 3. Only 2
  - 4. Only 1 and 2

Question ID : **6009293590**  
Status : **Answered**  
Chosen Option : **4**

**Q.10** Consider the following statements with reference to the Mamallapuram dance festival.

1. It is the celebration of folk dances that are prevailing in various regions of the country.
2. This festival is organised for about ten days in the town of Mahabalipuram.
3. Tales from Mahabharat, Radha Krishna, Valli Muruga, Shiva Shakti and numerous ancient lore are brought alive through delicate dance forms.
4. Breath-taking dances are performed in ornamented stage with the historic stone sculptures range 'the Arjuna Penance' as the backdrop.

Which of the statements given above is/are correct?

- Ans**
- 1. Only 1 and 3
  - 2. Only 2, 3 and 4
  - 3. Only 1, 3 and 4
  - 4. Only 1 and 2

Question ID : **6009293592**  
Status : **Not Answered**  
Chosen Option : **--**

**Q.11** With which of the following sports is Nikhat Zareen related to?

- Ans**
- 1. Hockey
  - 2. Badminton
  - 3. Boxing
  - 4. Wrestling

Question ID : **6009293579**  
Status : **Not Answered**  
Chosen Option : **--**

**Q.12** Phawngpui or the Blue Mountain is the highest peak in the state of \_\_\_\_\_.

- Ans**
- 1. Uttarakhand
  - 2. Kerala
  - 3. Mizoram
  - 4. Sikkim

Question ID : **6009293585**  
Status : **Answered**  
Chosen Option : **4**

**Q.13** Which among the following soil is commonly used for bricks?

- Ans  1. Alluvial  
 2. Laterite  
 3. Black  
 4. Peaty

Question ID : 6009293583  
 Status : Answered  
 Chosen Option : 1

**Q.14** निम्नलिखित विटामिनों में से किसकी कमी के कारण पेलाग्रा होता है?

- Ans  1. B1  
 2. B3  
 3. D  
 4. A

Question ID : 6009293584  
 Status : Answered  
 Chosen Option : 2

**Q.15** Consider the following statements regarding the Babbar Akali movement during the years 1921-1925.

- The movement included Guru Sikhs, who were against the imperialist policies of the British Government.
- Majority of the Babbar Akalis were returned immigrants from Canada.

Which of the statements given above is/are correct?

- Ans  1. Neither 1 nor 2  
 2. Both 1 and 2  
 3. Only 2  
 4. Only 1

Question ID : 6009293586  
 Status : Not Answered  
 Chosen Option : --

**Q.16** Match List-I with List-II and select the correct answer using the codes given below the Lists.

List-I (States)	List-II (Sports festivals celebrated in these states)
A. Punjab	1. Indian Derby
B. Gujarat	2. Kila Raipur Sports Festival
C. Kerala	3. International Kite Festival
D. Maharashtra	4. Champakulam Boat Race

- Ans  1. A-1, B-2, C-4, D-3  
 2. A-4, B-1, C-2, D-3  
 3. A-3, B-1, C-2, D-4  
 4. A-2, B-3, C-4, D-1

Question ID : 6009293589  
 Status : Answered  
 Chosen Option : 4

**Q.17** In which of the following ways can 1 Volt be expressed?

- Ans  1. 1 Joule per Coulomb  
 2. 1 Coulomb per Joule  
 3. 1 Joule-Coulomb  
 4. 1 Joule-Coulomb per second

Question ID : **6009293581**  
 Status : **Not Answered**  
 Chosen Option : --

**Q.18** Which among the following books is not written by Arundhati Roy?

- Ans  1. The Algebra of Infinite Justice  
 2. The Ministry of Utmost Happiness  
 3. Once Upon a Time  
 4. The God of Small Things

Question ID : **6009293577**  
 Status : **Answered**  
 Chosen Option : **3**

**Q.19** Amongst the following, which state celebrates Gangaur festival?

- Ans  1. Karnataka  
 2. Rajasthan  
 3. Goa  
 4. Arunachal Pradesh

Question ID : **6009293578**  
 Status : **Answered**  
 Chosen Option : **2**

**Q.20** Consider the following statements with reference to indirect taxes in Budget 2020.

1. Custom duty was raised on footwear from 25% to 35% and on furniture goods from 20% to 25%.
2. Basic customs duty on imports of newsprint and light-weighted coated paper was reduced from 10% to 5%.

Which of the statements given above is/are correct?

- Ans  1. Neither 1 nor 2  
 2. Only 2  
 3. Only 1  
 4. Both 1 and 2

Question ID : **6009293587**  
 Status : **Not Answered**  
 Chosen Option : --

Section : Numerical aptitude

Q.1 What is the average of 132, 146, 218, 232, 321 and 223?

- Ans
- 1. 214
  - 2. 212
  - 3. 208
  - 4. 218

Question ID : 6009293608  
Status : Answered  
Chosen Option : 2

Q.2 Speed of a car is 45 km/hr. How much distance can it travel in 50 seconds?

- Ans
- 1. 650 metre
  - 2. 575 metre
  - 3. 550 metre
  - 4. 625 metre

Question ID : 6009293611  
Status : Answered  
Chosen Option : 4

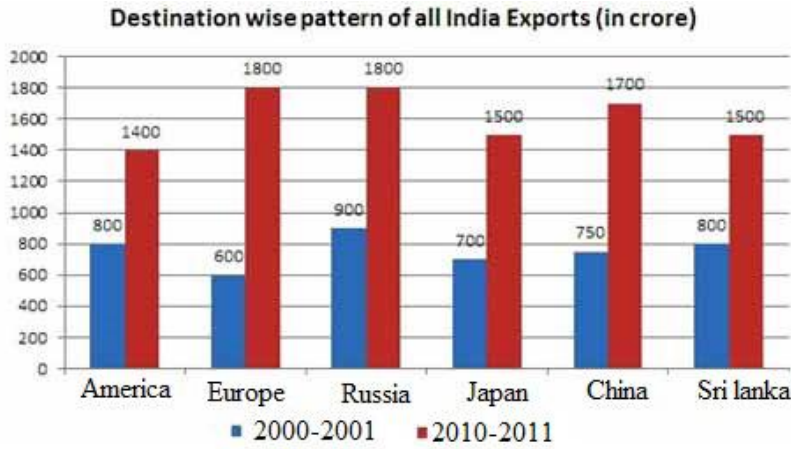
Q.3 Alloy A contains iron and copper in ration 4 : 5. Alloy B contains iron and copper in ratio 3 : 4. If 45 kg of alloy A and 63 kg of alloy B are mixed, then what is the final ratio of copper and iron?

- Ans
- 1. 61 : 47
  - 2. 64 : 47
  - 3. 59 : 45
  - 4. 57 : 41

Question ID : 6009293612  
Status : Answered  
Chosen Option : 1

Adda247

Q.4 Study the following graph to answer the question.



India's exports to which of the following regions increased most in terms of percentage between 2000-01 and 2010 - 2011?

- Ans
- 1. Japan
  - 2. Russia
  - 3. China
  - 4. Europe

Question ID : 6009293606  
 Status : Answered  
 Chosen Option : 2

Q.5 Ratio of milk and water in two mixtures A and B is 3 : 2 and 4 : 3 respectively. If A and B are mixed in the ratio of 1 : 2, then what is the ratio of milk and water in final mixture?

- Ans
- 1. 61 : 44
  - 2. 51 : 46
  - 3. 63 : 46
  - 4. 57 : 41

Question ID : 6009293610  
 Status : Answered  
 Chosen Option : 1

Q.6 एक किताबों की दुकान में जीव विज्ञान, रसायन विज्ञान और भौतिकी की पुस्तकों की औसत संख्या 360 है। जीव विज्ञान की पुस्तकें रसायन विज्ञान और भौतिकी की पुस्तकों की औसत संख्या से 180 अधिक हैं। भौतिकी की पुस्तकों की संख्या जीव विज्ञान और रसायन विज्ञान की पुस्तकों की औसत संख्या से 180 कम है। दुकान में रसायन विज्ञान की पुस्तकों की संख्या कितनी है?

- Ans
- 1. 540
  - 2. 480
  - 3. 420
  - 4. 360

Question ID : 6009293604  
 Status : Not Answered  
 Chosen Option : --

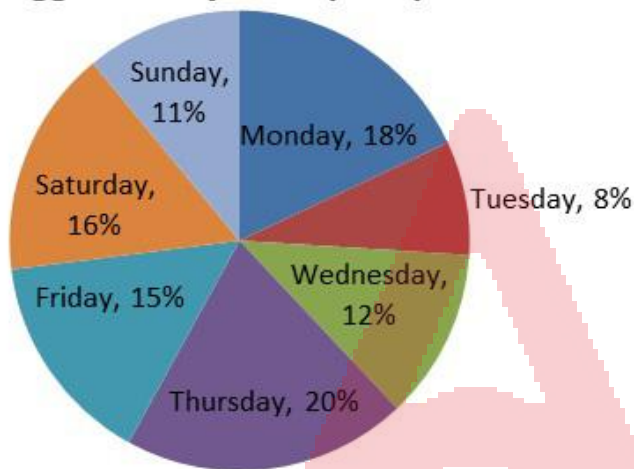
Q.7 If the volume of a room is  $1680 \text{ m}^3$  and the area of the floor is  $112 \text{ m}^2$ . Find the height of the room.

- Ans
- 1. 1.8 m
  - 2. 2.20 m
  - 3. 15 m
  - 4. 10 m

Question ID : 6009293614  
Status : Answered  
Chosen Option : 3

Q.8 The pie-chart given below represents the percentage distribution of the number of eggs sold by a shopkeeper on different days of a week.

Percentage distribution of the number of eggs sold by a shopkeeper



Find the ratio of the number of eggs sold by the shopkeeper on Wednesday to that of the same on Thursday.

- Ans
- 1. 4:7
  - 2. 4:9
  - 3. 3:5
  - 4. 2:5

Question ID : 6009293605  
Status : Answered  
Chosen Option : 3

Q.9 विभिन्न वर्षों में एक दुकान में विभिन्न वस्तुओं की बिक्री तालिका में दी गई है।  
किस वर्ष में फ्रिजों और धुलाई मचिनो की बिक्री की कुल संख्या, टीवी की बिक्री की कुल संख्या से 100 अधिक हो गई?

वर्ष	टीवी	धुलाई मशीन	फ्रिज	एसी
1996	320	200	220	1500
1997	350	220	190	1700
1998	315	250	200	1800
1999	400	280	150	2000

- Ans
- 1. 1997
  - 2. 1996
  - 3. 1999
  - 4. 1998

Question ID : 6009293600  
Status : Answered  
Chosen Option : 2

Q.10 एक साइकिल का अंकित मूल्य 1500 रुपए हैं, जो लागत मूल्य से 25 प्रतिशत अधिक है। यदि इसे 10 प्रतिशत की छूट पर बेचा जाता है, तो लाभ प्रतिशत ज्ञात करें?

- Ans
- 1. 12.5 प्रतिशत
  - 2. 20 प्रतिशत
  - 3. 15 प्रतिशत
  - 4. 30 प्रतिशत

Question ID : 6009293597  
Status : Answered  
Chosen Option : 1

Q.11 The ratio of price of a mango and an apple is 3 : 2. If the total price of an apple and a mango is Rs. 100, then find the price of a mango.

- Ans
- 1. Rs. 40
  - 2. Rs.60
  - 3. Rs. 80
  - 4. Rs. 30

Question ID : 6009293599  
Status : Answered  
Chosen Option : 2

Q.12 अंशु को एक कार्य पूरा करने में बबलू से दोगुना समय लगता है और चंदू से तीन गुना समय लगता है। साथ में काम खत्म करने में 3 दिन लगते हैं। अंशु ने कार्य को पूरा करने के लिए कितना समय लिया है?

- Ans
- 1. 24 दिन
  - 2. 12 दिन
  - 3. 3 दिन
  - 4. 18 दिन

Question ID : 6009293596  
Status : Answered  
Chosen Option : 4



Q.13 336, 528 तथा 240 का लघुत्तम समापवर्त्य क्या है?

- Ans
- 1. 16620
  - 2. 17240
  - 3. 19200
  - 4. 18480

Question ID : 6009293607  
Status : Answered  
Chosen Option : 4

Q.14 Find the volume of cone which has base radius as 7 cm and height as 12 cm. (The value of  $\pi$  is  $\frac{22}{7}$ )

- Ans
- 1.  $576 \text{ cm}^3$
  - 2.  $616 \text{ cm}^3$
  - 3.  $512 \text{ cm}^3$
  - 4.  $289 \text{ cm}^3$

Question ID : 6009293601  
Status : Answered  
Chosen Option : 2

Q.15 A sum of money becomes 6 times at simple interest in 15 years. What is the rate of interest?

- Ans
- 1. 33.33 percent
  - 2. 16.75 percent
  - 3. 30.5 percent
  - 4. 8.5 percent

Question ID : 6009293598  
Status : Answered  
Chosen Option : 1

Q.16 A number is increased by 10 percent. Then it is decreased by 20 percent. If the final value of number is 528, then what is the initial value of number?

- Ans
- 1. 500
  - 2. 650
  - 3. 550
  - 4. 600

Question ID : 6009293609  
Status : Answered  
Chosen Option : 4

**Q.17** किसी पुल निर्माण स्थल पर मजदूरों की दो टीमें I और II हैं। प्रत्येक टीम में W मजदूर हैं। किसी विशेष दिन, एक मजदूर को टीम I से टीम II में स्थानांतरित किया जाता है। अब, यदि टीम I द्वारा (W + 1) h (घंटे) और टीम II द्वारा (W + 2) h (घंटे) में किए गए कार्य की मात्रा का अनुपात क्रमशः 10 : 12 है, तो W का मान कितने के बराबर है?

- Ans**
- 1. 24
  - 2. 16
  - 3. 18
  - 4. 20

Question ID : 6009293602  
Status : Not Answered  
Chosen Option : --

**Q.18** कोई दूधवाला, दूध से भरे बड़े ड्रम को क्रमशः 6, 9, 15 और 18 लीटर क्षमता वाले चार मापी-जारों में से एक जार से खाली करना चाहता है। वह पाता है कि ड्रम को खाली करने के लिए वह चाहे जिस जार का उपयोग करे, 4 लीटर दूध उस ड्रम में हमेशा बचा ही रहता है। यदि ड्रम की क्षमता 7 की गुणज है, तो इसकी न्यूनतम संभावित क्षमता कितनी है?

- Ans**
- 1. 187 लीटर
  - 2. 364 लीटर
  - 3. 94 लीटर
  - 4. 191 लीटर

Question ID : 6009293603  
Status : Answered  
Chosen Option : 2

**Q.19** Speed of train is 55 km/hr. The length of train is 800 metre. In how much time can it cross a 1400 metre long platform?

- Ans**
- 1. 132 seconds
  - 2. 96 seconds
  - 3. 124 seconds
  - 4. 144 seconds

Question ID : 6009293613  
Status : Answered  
Chosen Option : 4

**Q.20** Find the compound interest earned on Rs. 60,000 for 2 years at the rate of 5 percent per annum.

- Ans**
- 1. Rs. 6000
  - 2. Rs. 6150
  - 3. Rs. 60,000
  - 4. Rs. 66,150

Question ID : 6009293595  
Status : Answered  
Chosen Option : 2

Q.1 एक लड़का बिंदु A से चलना शुरू करता है और पूर्व की ओर 11 किमी चलता है और बिंदु B पर रुकता है। अब, वह अपने दाईं ओर 45 डिग्री मुड़ता है और बिंदु C पर पहुंचने के लिए 2 किमी चलता है। अब, वह 135 डिग्री बाएँ मुड़ता है और 1 किमी चलता है और एक बिंदु D पर पहुँचता है। बिंदु B, बिंदु D के सापेक्ष किस दिशा में है?

- Ans
- 1. दक्षिण-पूर्व
  - 2. उत्तर-पूर्व
  - 3. दक्षिण-पश्चिम
  - 4. उत्तर-पश्चिम

Question ID : 6009293615

Status : Answered

Chosen Option : 2

Q.2 Three statements are followed by four conclusions numbered I, II, III and IV. You have to consider these statements to be true, even if they seem at variance from commonly known facts. Decide which of the given conclusions logically follow(s) from the given statements.

Statements:

1. No plant is a flower.
2. No flower is a leaf.
3. Some plants are leaves.

Conclusions:

- I. No leaf is a plant.
- II. No leaf is a flower.
- III. Some flowers are plants.
- IV. All leaves are plants.

- Ans
- 1. Only conclusion II follows.
  - 2. Only conclusions I and II follow.
  - 3. Only conclusion IV follows.
  - 4. Only conclusions I and IV follow.

Question ID : 6009293633

Status : Answered

Chosen Option : 1

Q.3 विनोद, अभि, रेचल, सैमी और पिंकी एक बेंच पर बैठे हैं। अभि रेचल के दाहिने ओर बैठा है, जो बेंच के छोर के चरम बिंदु पर नहीं बैठा है। सैमी, अभि और विनोद के बीच में बैठा है। पिंकी बाएँ छोर के चरम बिंदु पर बैठी है। पिंकी के दाहिने ओर कौन बैठा है?

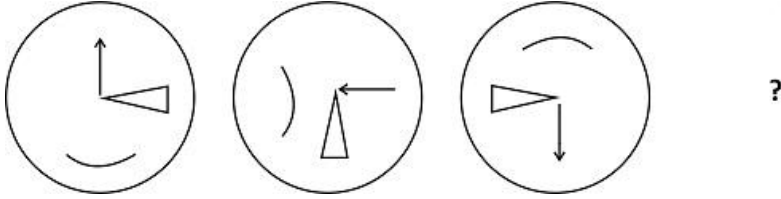
- Ans
- 1. रेचल
  - 2. अभि
  - 3. विनोद
  - 4. सैमी

Question ID : 6009293628

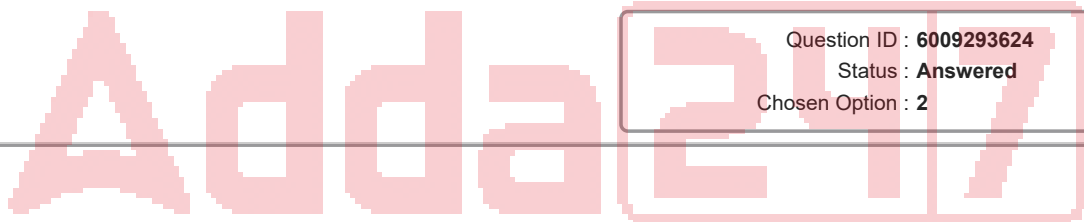
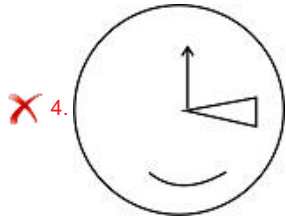
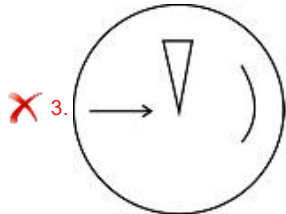
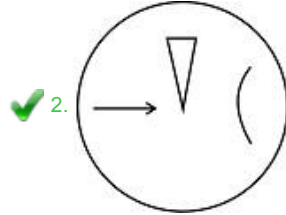
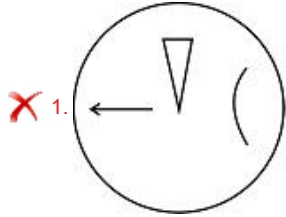
Status : Answered

Chosen Option : 1

Q.4 From the given figures, find which figure comes in the place of question marks which are in series?



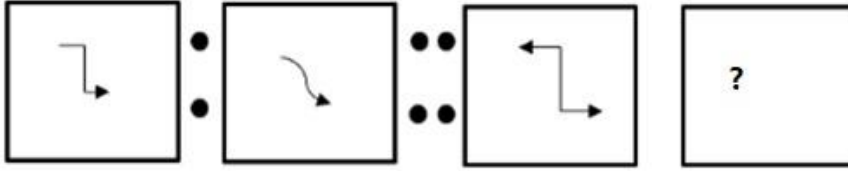
Ans



Question ID : 6009293624  
 Status : Answered  
 Chosen Option : 2

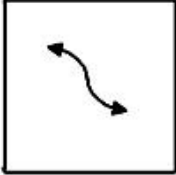
Q.5 Which answer figure will replace the question mark given in the question figure?

Questions figure:

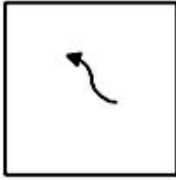


Ans

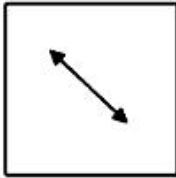
✓ 1.



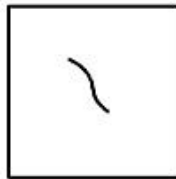
✗ 2.



✗ 3.



✗ 4.



Question ID : 6009293625

Status : Answered

Chosen Option : 1

Q.6 छह व्यक्ति A, B, C, D, E और F एक पंक्ति में बैठे हैं, जरूरी नहीं कि इसी क्रम में हो। यदि A, B, C और D में से कोई भी अंतिम छोर पर नहीं बैठा है तथा D, E से दो स्थानों की दूरी पर बैठा है। E के निकट कौन बैठता है, दिया गया है कि A और B एक साथ बैठते हैं।

Ans ✓ 1. C

✗ 2. B

✗ 3. A

✗ 4. F

Question ID : 6009293629

Status : Answered

Chosen Option : 1

Q.7 Select from the following four options, the one that CANNOT be concluded from the given statements.

Statement 1 : All coats are skirts.

Statement 2 : No skirt is a shirt.

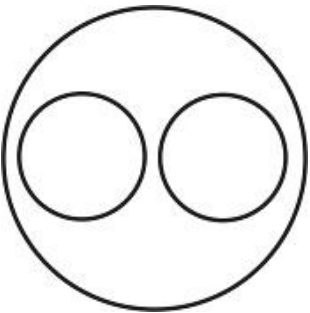
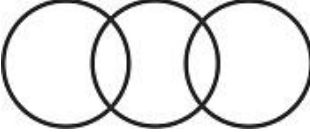
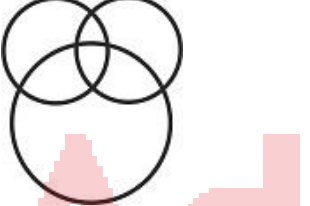
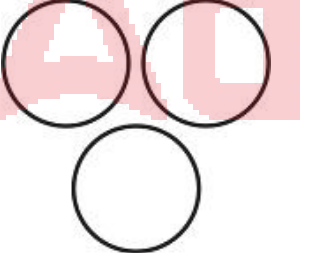
Statement 3 : Some shirts are belts.


- Ans
- 1. Some coats are shirts.
  - 2. No coat is a shirt.
  - 3. Some belts are not coats.
  - 4. Some belts are shirts.

Question ID : 6009293627  
 Status : Answered  
 Chosen Option : 1

Q.8 Which of the following Venn diagrams best represents the relationship between stars, planets and universe?

Ans

- 1. 
- 2. 
- 3. 
- 4. 



Question ID : 6009293623  
 Status : Answered  
 Chosen Option : 1

**Q.9** Three statements are followed by four conclusions numbered I, II, III and IV. You have to consider these statements to be true, even if they seem at variance from commonly known facts. Decide which of the given conclusions logically follow(s) from the given statements.

**Statements:**

1. No horse is a truck.
2. All carriages are scooters.
3. All scooters are trucks.

**Conclusions:**

- I. No truck is a scooter.
- II. All carriages are trucks.
- III. Some trucks are scooters.
- IV. No carriage is a horse.

- Ans**
- 1. All conclusions follow.
  - 2. Only either conclusions I or IV follow and III follow.
  - 3. Only conclusions II, III and IV follow.
  - 4. Only either conclusions I or IV follow.

Question ID : **6009293621**  
 Status : **Answered**  
 Chosen Option : **3**

**Q.10** If 'A ÷ B' means 'B is the brother of A', 'A × B' means 'B is the daughter of A', 'A @ B' means 'B is the wife of A', 'A # B' means 'B is the mother of A', 'A + B' means 'B is the son of A', then which of the following statement(s) is/are not correct?

- I. 'P ÷ Q + R + F @ J' shows P as the aunt of R.
- II. 'G # F ÷ L + T × R' shows G as the brother of R.

- Ans**
- 1. Only I
  - 2. Neither I nor II
  - 3. Only II
  - 4. Both I and II

Question ID : **6009293631**  
 Status : **Answered**  
 Chosen Option : **2**

**Q.11** Find the missing term in the following number series :

1, 7, 8, \_\_\_\_\_, 23, 38, 61

- Ans**
- 1. 16
  - 2. 15
  - 3. 12
  - 4. 10

Question ID : **6009293618**  
 Status : **Answered**  
 Chosen Option : **2**

Q.12 विजय टोनी से पहले, लेकिन विनय के बाद कार्यालय पहुँचा। मेघा विजय से पहले कार्यालय पहुंची लेकिन राधा के कार्यालय पहुँचने के बाद पहुँची। मेघा के कार्यालय पहुँचने के तुरंत बाद विनय कार्यालय पहुँचा। अंत में कार्यालय कौन पहुँचा?

- Ans
- 1. मेघा
  - 2. विजय
  - 3. विनय
  - 4. टोनी

Question ID : 6009293622  
Status : Answered  
Chosen Option : 4

Q.13 दिए गए विकल्पों में से, तीन एक निश्चित तरीके से समान हैं। हालाँकि, एक विकल्प अन्य तीन की तरह नहीं है। उस विकल्प का चयन करें जो अन्य से अलग है।

- Ans
- 1. घोड़ा : अस्तबल
  - 2. शेर : गुफा
  - 3. मवेशी : गुफा
  - 4. कुत्ता : कुत्ताघर

Question ID : 6009293619  
Status : Answered  
Chosen Option : 3

Q.14 Arrange the given words in the sequence in which they occur in the dictionary.

1. DAKOTA
2. DAMAGE
3. DARKLE
4. DONKEY
5. DANCER

- Ans
- 1. 1,2,5,3,4
  - 2. 2,1,5,3,4
  - 3. 2,1,3,5,4
  - 4. 1,3,2,5,4

Question ID : 6009293620  
Status : Answered  
Chosen Option : 1

Q.15 Which two signs should be interchanged to make the below equation mathematically correct?

$$5 + 6 - 2 \times 8 \div 4 = 30$$

- Ans
- 1.  $\times$  and  $-$
  - 2.  $+$  and  $+$
  - 3.  $+$  and  $-$
  - 4.  $\times$  and  $+$

Question ID : 6009293630  
Status : Answered  
Chosen Option : 4



Q.16 A % B का अर्थ है कि B की पत्नी A है, A # B का अर्थ है कि B का भाई A है, और A \* B का अर्थ है कि B का बेटा A है।

इनमें से कौन सा व्यंजक यह दर्शाता है कि R का बेटा P है?

- Ans
- 1. S # R \* P % U
  - 2. S # R \* U % P
  - 3. U % P # R \* S
  - 4. U % P # S \* R

Question ID : 6009293634

Status : Answered

Chosen Option : 1


Q.17 एक लड़के की ओर इशारा करते हुए समीर ने कहा, वह मेरे ससुर के बड़े बेटे का बेटा है। समीर उस लड़के से कैसे संबंधित है?

- Ans
- 1. भाई
  - 2. चचेरा भाई/ममेरा भाई/फुफेरा भाई/मौसेरा भाई
  - 3. दादा/नाना
  - 4. चाचा/मामा/ताऊ/फूफा/मौसा/काका

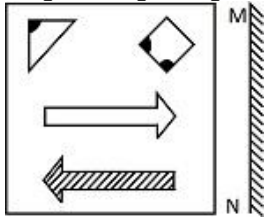
Question ID : 6009293616

Status : Answered

Chosen Option : 2



Q.18 If a mirror is placed on the line MN, then which of the answer figures is the mirror image of the given figure?



Ans

- 1.
- 2.
- 3.
- 4.

Question ID : 6009293617  
 Status : Answered  
 Chosen Option : 3

Q.19 If 'A' means '+', 'B' means 'x', 'C' means '÷' and 'D' means '-', then which of the following equation(s) is/are correct?

- I. 16 C 18 B 36 A 11 D 4 = 39
- II. 49 B 76 C 19 A 13 D 47 = 162

- 1. Only I
- 2. Only II
- 3. Neither I nor II
- 4. Both I and II

Question ID : 6009293626  
 Status : Answered  
 Chosen Option : 1

**Q.20** A series is given with one term wrong. Select that wrong term from the given alternatives.

PNM, RQQ, TTU, VWZ, XZC

- Ans
- 1. TTU
  - 2. RQQ
  - 3. VWZ
  - 4. XZC

Question ID : 6009293632  
Status : Answered  
Chosen Option : 3

Section : English

**Q.1** The sentence below has been divided into three parts. Select the part of the sentence that has an error. If the sentence has no error, select the option 'No Error'.

- Ans
- 1. and the surroundings irreparably.
  - 2. The radiation leak from the nuclear accident
  - 3. at Chernobyl effected the environment
  - 4. No error

Question ID : 6009293635  
Status : Answered  
Chosen Option : 1

**Q.2** Select the most appropriate option to substitute the underlined segment in the given sentence. In case no substitution is needed, select 'No substitution required'.

It is ironical that the students had to be punished because of a report submitted by a teacher who himself was not above suspicion.

- Ans
- 1. ironicism
  - 2. irony
  - 3. No substitution required
  - 4. ironically

Question ID : 6009293638  
Status : Not Answered  
Chosen Option : --

**Q.3** Identify the segment in the sentence which contains a grammatical error.

Always on the lookout for opportunities, Arun never shirked away from new assignments.

- Ans
- 1. Arun never shirked away
  - 2. for opportunities,
  - 3. from new assignments.
  - 4. Always on the lookout

Question ID : 6009293637  
Status : Not Answered  
Chosen Option : --

Q.4 Select the most appropriate meaning of the underlined idiom in the given sentence.

Have you seen Claire lately? She's become as thin as a stick in the last six months!

- Ans
- 1. To be suspicious
  - 2. Be extremely weak
  - 3. Extremely skinny
  - 4. Full of enthusiasm

Question ID : 6009293648  
Status : Answered  
Chosen Option : 2

Q.5 Select the most appropriate meaning of the given idiom.

Start from scratch

- Ans
- 1. To decide quickly without a thought
  - 2. To take advantage of something
  - 3. To be unsuccessful
  - 4. To begin from the very beginning

Question ID : 6009293649  
Status : Answered  
Chosen Option : 4

Q.6 Select the most appropriate option to fill in the blank.

The owner of the house was \_\_\_\_\_ at the watchman for letting in a stranger.

- Ans
- 1. indulgent
  - 2. impatient
  - 3. indifferent
  - 4. indignant

Question ID : 6009293641  
Status : Answered  
Chosen Option : 1

Q.7 Select the most appropriate meaning of the given idiom.

"Get up on the wrong side of the bed"

- Ans
- 1. Someone who is having a horrible day
  - 2. To move beyond something that is bothering you
  - 3. Working hours from about 12:00 am to 8.00 pm
  - 4. Not having a good night's sleep

Question ID : 6009293650  
Status : Not Answered  
Chosen Option : --

**Q.8** Given below are four parts of a sentence which are jumbled. Pick the option that gives their correct order to make a grammatically correct, meaningful sentence.

- A. my attention was drawn towards a huge crowd that was forcing its way
- B. and I decided to stop in order to cover the story for my newspaper
- C. in the direction of a popular cinema hall
- D. as I reached the Metro station

- Ans**
- 1. DACB
  - 2. DCAB
  - 3. CADB
  - 4. ABCD

Question ID : **6009293644**  
 Status : **Answered**  
 Chosen Option : **1**

**Q.9** Out of all the alternatives given, select the word which closely fits the given idiom/phrase.

**The best of both worlds**

- Ans**
- 1. To enjoy two different opportunities at the same time.
  - 2. Producing similar results.
  - 3. An event that happens infrequently.
  - 4. Understand something complicated.

Question ID : **6009293647**  
 Status : **Answered**  
 Chosen Option : **4**

**Q.10** Select the most appropriate meaning of the given idiom.

**"The last straw"**

- Ans**
- 1. Make all possible efforts
  - 2. The final event in a series of unacceptable actions
  - 3. Unable to understand
  - 4. To politely ask for someone's full attention

Question ID : **6009293652**  
 Status : **Answered**  
 Chosen Option : **1**

**Q.11** Four words are given, out of which only one word is spelt correctly. Choose the word with the correct spelling.

- Ans**
- 1. Fortuitous
  - 2. Fortoitus
  - 3. Fortuitius
  - 4. Fortuious

Question ID : **6009293651**  
 Status : **Not Answered**  
 Chosen Option : **--**

Q.12 Fill in the blank with the most appropriate option.

She decided to \_\_\_\_\_ her right to the ancestral property as she wanted to avoid conflict.

- Ans
- 1. sign with
  - 2. sign for
  - 3. sign away
  - 4. sign in

Question ID : 6009293640  
Status : Not Answered  
Chosen Option : --

Q.13 Fill in the blank with the appropriate word.

It is a general rule of formal E-mails that they eliminate any kind of \_\_\_\_\_.

- Ans
- 1. paternalism
  - 2. colloquialism
  - 3. evangelism
  - 4. diabolism

Question ID : 6009293639  
Status : Answered  
Chosen Option : 2

Q.14 Select the word that is opposite in meaning (ANTONYM) to the word given below.

Desolate

- Ans
- 1. Empty
  - 2. Distressed
  - 3. Untenanted
  - 4. Populous

Question ID : 6009293653  
Status : Answered  
Chosen Option : 4

Q.15 Select the most appropriate option to substitute the underlined segment in the given sentence. In case no substitution is needed, select 'No substitution required'.

There always have been a sizeable influx of immigrants from Mexico into America.

- Ans
- 1. No substitution required
  - 2. were always been
  - 3. has always been
  - 4. is always being

Question ID : 6009293642  
Status : Answered  
Chosen Option : 4

**Q.16 Identify the segment in the sentence which contains a grammatical error.**

Starting with cleaning the kitchen, Reema created a task list of all the odd jobs that were to do around the house.

- Ans
- 1. Starting with cleaning the kitchen,
  - 2. to do around the house.
  - 3. of all the odd jobs that were
  - 4. Reema created a task list

Question ID : 6009293636  
Status : Answered  
Chosen Option : 2

**Q.17 Given below are four parts of a sentence which are jumbled. Pick the option that gives their correct order to make a grammatically correct, meaningful sentence.**

- A. cultivating positive mental states
- B. I think that
- C. like kindness and compassion definitely leads to
- D. better psychological health and happiness

- Ans
- 1. BDCA
  - 2. ACBD
  - 3. BCAD
  - 4. BACD

Question ID : 6009293645  
Status : Answered  
Chosen Option : 4

**Q.18 The given sentences have been jumbled up. Arrange these sentences in a meaningful order.**

- P. there had already been abundant rainfall in Delhi
- Q. it was a tragic end of summer
- R. a strong wind began to blow and the rain came causing havoc all around
- S. one day, a cyclonic storm hit the region

- Ans
- 1. RPSQ
  - 2. QPSR
  - 3. SRPQ
  - 4. PSRQ

Question ID : 6009293646  
Status : Answered  
Chosen Option : 3

**Q.19 Select the most appropriate 'one word' for the expressions given below.**

The quality or action of being extremely generous.

- Ans
- 1. Nascence
  - 2. Convalescence
  - 3. Munificence
  - 4. Reticence

Question ID : 6009293654  
Status : Answered  
Chosen Option : 2

Q.20 Fill in the blank with the most appropriate option.

Speaking \_\_\_\_\_ is sometimes considered a virtue especially when the speaker has an important point to make.

- Ans
- 1. out of date
  - 2. out of turn
  - 3. out of control
  - 4. out of hand

Question ID : 6009293643

Status : Answered

Chosen Option : 2

